

Marin: CHEM 114 - Introductory Chemistry

This text is disseminated via the Open Education Resource (OER) LibreTexts Project (<https://LibreTexts.org>) and like the hundreds of other texts available within this powerful platform, it is freely available for reading, printing and "consuming." Most, but not all, pages in the library have licenses that may allow individuals to make changes, save, and print this book. Carefully consult the applicable license(s) before pursuing such effects.

Instructors can adopt existing LibreTexts texts or Remix them to quickly build course-specific resources to meet the needs of their students. Unlike traditional textbooks, LibreTexts' web based origins allow powerful integration of advanced features and new technologies to support learning.



The LibreTexts mission is to unite students, faculty and scholars in a cooperative effort to develop an easy-to-use online platform for the construction, customization, and dissemination of OER content to reduce the burdens of unreasonable textbook costs to our students and society. The LibreTexts project is a multi-institutional collaborative venture to develop the next generation of open-access texts to improve postsecondary education at all levels of higher learning by developing an Open Access Resource environment. The project currently consists of 14 independently operating and interconnected libraries that are constantly being optimized by students, faculty, and outside experts to supplant conventional paper-based books. These free textbook alternatives are organized within a central environment that is both vertically (from advance to basic level) and horizontally (across different fields) integrated.

The LibreTexts libraries are Powered by [NICE CXOne](#) and are supported by the Department of Education Open Textbook Pilot Project, the UC Davis Office of the Provost, the UC Davis Library, the California State University Affordable Learning Solutions Program, and Merlot. This material is based upon work supported by the National Science Foundation under Grant No. 1246120, 1525057, and 1413739.

Any opinions, findings, and conclusions or recommendations expressed in this material are those of the author(s) and do not necessarily reflect the views of the National Science Foundation nor the US Department of Education.

Have questions or comments? For information about adoptions or adaptations contact info@LibreTexts.org. More information on our activities can be found via Facebook (<https://facebook.com/Libretexts>), Twitter (<https://twitter.com/libretexts>), or our blog (<http://Blog.Libretexts.org>).

This text was compiled on 03/11/2025

TABLE OF CONTENTS

Licensing

1: The Chemical World

- 1.1: The Scope of Chemistry
- 1.2: Chemicals Compose Ordinary Things
- 1.3: Hypothesis, Theories, and Laws
- 1.4: The Scientific Method- How Chemists Think
- 1.5: A Beginning Chemist- How to Succeed

2: Measurement and Problem Solving

- 2.1: Taking Measurements
- 2.2: Scientific Notation- Writing Large and Small Numbers
- 2.3: Significant Figures- Writing Numbers to Reflect Precision
- 2.4: Significant Figures in Calculations
- 2.5: The Basic Units of Measurement
- 2.6: Problem Solving and Unit Conversions
- 2.7: Solving Multistep Conversion Problems
- 2.8: Units Raised to a Power
- 2.9: Density
- 2.10: Numerical Problem-Solving Strategies and the Solution Map
- 2.11: Taking Measurements
- 2.E: Measurement and Problem Solving (Exercises)

3: Matter and Energy

- 3.1: In Your Room
- 3.2: What is Matter?
- 3.3: Classifying Matter According to Its State- Solid, Liquid, and Gas
- 3.4: Classifying Matter According to Its Composition
- 3.5: Differences in Matter- Physical and Chemical Properties
- 3.6: Changes in Matter- Physical and Chemical Changes
- 3.7: Conservation of Mass- There is No New Matter
- 3.8: Energy
- 3.9: Energy and Chemical and Physical Change
- 3.10: Temperature- Random Motion of Molecules and Atoms
- 3.11: Temperature Changes- Heat Capacity
- 3.12: Energy and Heat Capacity Calculations
- 3.E: Exercises

4: Atoms and Elements

- 4.1: Experiencing Atoms at Tiburon
- 4.2: Indivisible- The Atomic Theory
- 4.3: The Nuclear Atom
- 4.4: The Properties of Protons, Neutrons, and Electrons
- 4.5: Elements- Defined by Their Numbers of Protons
- 4.6: Looking for Patterns- The Periodic Law and the Periodic Table
- 4.7: Ions- Losing and Gaining Electrons

- 4.8: Isotopes- When the Number of Neutrons Varies
- 4.9: Atomic Mass- The Average Mass of an Element's Atoms

5: Molecules and Compounds

- 5.1: Sugar and Salt
- 5.2: Compounds Display Constant Composition
- 5.3: Chemical Formulas- How to Represent Compounds
- 5.4: A Molecular View of Elements and Compounds
- 5.5: Writing Formulas for Ionic Compounds
- 5.6: Nomenclature- Naming Compounds
- 5.7: Naming Ionic Compounds
- 5.8: Naming Molecular Compounds
- 5.9: Naming Acids
- 5.10: Nomenclature Summary
- 5.11: Formula Mass- The Mass of a Molecule or Formula Unit

6: Chemical Composition

- 6.1: How Much Sodium?
- 6.2: Counting Nails by the Pound
- 6.3: Counting Atoms by the Gram
- 6.4: Counting Molecules by the Gram
- 6.5: Chemical Formulas as Conversion Factors
- 6.6: Mass Percent Composition of Compounds
- 6.7: Mass Percent Composition from a Chemical Formula
- 6.8: Calculating Empirical Formulas for Compounds
- 6.9: Calculating Molecular Formulas for Compounds

7: Chemical Reactions

- 7.1: Grade School Volcanoes, Automobiles, and Laundry Detergents
- 7.2: Evidence of a Chemical Reaction
- 7.3: The Chemical Equation
- 7.4: How to Write Balanced Chemical Equations
- 7.5: Aqueous Solutions and Solubility- Compounds Dissolved in Water
- 7.6: Precipitation Reactions- Reactions in Aqueous Solution That Form a Solid
- 7.7: Writing Chemical Equations for Reactions in Solution- Molecular, Complete Ionic, and Net Ionic Equations
- 7.8: Acid–Base and Gas Evolution Reactions
- 7.9: Oxidation–Reduction Reactions
- 7.10: Classifying Chemical Reactions
- 7.11: The Activity Series

8: Quantities in Chemical Reactions

- 8.1: Climate Change- Too Much Carbon Dioxide
- 8.2: Stoichiometry
- 8.3: Making Molecules- Mole-to-Mole Conversions
- 8.4: Making Molecules- Mass-to-Mass Conversions
- 8.5: Limiting Reactant, Theoretical Yield, and Percent Yield
- 8.6: Limiting Reactant, Theoretical Yield, and Percent Yield from Initial Masses of Reactants
- 8.7: Enthalpy- A Measure of the Heat Evolved or Absorbed in a Reaction

9: Electrons in Atoms and the Periodic Table

- 9.1: Blimps, Balloons, and Models of the Atom
- 9.2: Light- Electromagnetic Radiation
- 9.3: The Electromagnetic Spectrum
- 9.4: The Bohr Model- Atoms with Orbits
- 9.5: The Quantum-Mechanical Model- Atoms with Orbitals
- 9.6: Quantum-Mechanical Orbitals and Electron Configurations
- 9.7: Electron Configurations and the Periodic Table
- 9.8: The Explanatory Power of the Quantum-Mechanical Model
- 9.9: Periodic Trends- Atomic Size, Ionization Energy, and Metallic Character

10: Chemical Bonding

- 10.1: Bonding Models and AIDS Drugs
- 10.2: Representing Valence Electrons with Dots
- 10.3: Lewis Structures of Ionic Compounds- Electrons Transferred
- 10.4: Covalent Lewis Structures- Electrons Shared
- 10.5: Writing Lewis Structures for Covalent Compounds
- 10.6: Resonance- Equivalent Lewis Structures for the Same Molecule
- 10.7: Predicting the Shapes of Molecules
- 10.8: Electronegativity and Polarity - Why Oil and Water Don't Mix

11: Gases

- 11.1: Extra-Long Straws
- 11.2: Kinetic Molecular Theory- A Model for Gases
- 11.3: Pressure- The Result of Constant Molecular Collisions
- 11.4: Boyle's Law- Pressure and Volume
- 11.5: Charles's Law- Volume and Temperature
- 11.6: Gay-Lussac's Law- Temperature and Pressure
- 11.7: The Combined Gas Law- Pressure, Volume, and Temperature
- 11.8: Avogadro's Law- Volume and Moles
- 11.9: The Ideal Gas Law- Pressure, Volume, Temperature, and Moles
- 11.10: Mixtures of Gases- Why Deep-Sea Divers Breathe a Mixture of Helium and Oxygen
- 11.11: Gases in Chemical Reactions

12: Liquids, Solids, and Intermolecular Forces

- 12.1: Interactions between Molecules
- 12.2: Properties of Liquids and Solids
- 12.3: Intermolecular Forces in Action- Surface Tension and Viscosity
- 12.4: Evaporation and Condensation
- 12.5: Melting, Freezing, and Sublimation
- 12.6: Types of Intermolecular Forces- Dispersion, Dipole–Dipole, Hydrogen Bonding, and Ion-Dipole
- 12.7: Types of Crystalline Solids- Molecular, Ionic, and Atomic
- 12.8: Water- A Remarkable Molecule

13: Solutions

- 13.1: Prelude - Tragedy in Cameroon
- 13.2: Solutions- Homogeneous Mixtures
- 13.3: Solutions of Solids Dissolved in Water- How to Make Rock Candy
- 13.4: Solutions of Gases in Water- How Soda Pop Gets Its Fizz
- 13.5: Solution Concentration- Mass Percent

- [13.6: Solution Concentration- Molarity](#)
- [13.7: Solution Dilution](#)
- [13.8: Solution Stoichiometry](#)
- [13.9: Freezing Point Depression and Boiling Point Elevation- Making Water Freeze Colder and Boil Hotter](#)
- [13.10: Osmosis- Why Drinking Salt Water Causes Dehydration](#)

14: Acids and Bases

- [14.1: Sour Patch Kids and International Spy Movies](#)
- [14.2: Acids- Properties and Examples](#)
- [14.3: Bases- Properties and Examples](#)
- [14.4: Molecular Definitions of Acids and Bases](#)
- [14.5: Reactions of Acids and Bases](#)
- [14.6: Acid–Base Titration- A Way to Quantify the Amount of Acid or Base in a Solution](#)
- [14.7: Strong and Weak Acids and Bases](#)
- [14.8: Water- Acid and Base in One](#)
- [14.9: The pH and pOH Scales- Ways to Express Acidity and Basicity](#)
- [14.10: Buffers- Solutions That Resist pH Change](#)

[Index](#)

[Index](#)

[Glossary](#)

[Detailed Licensing](#)

Licensing

A detailed breakdown of this resource's licensing can be found in [Back Matter/Detailed Licensing](#).

CHAPTER OVERVIEW

1: The Chemical World

- 1.1: The Scope of Chemistry
- 1.2: Chemicals Compose Ordinary Things
- 1.3: Hypothesis, Theories, and Laws
- 1.4: The Scientific Method- How Chemists Think
- 1.5: A Beginning Chemist- How to Succeed

1: The Chemical World is shared under a [CC BY-NC-SA 4.0](#) license and was authored, remixed, and/or curated by LibreTexts.

1.1: The Scope of Chemistry

Template:HideTOC

Learning Objectives

- To recognize the breadth, depth, and scope of chemistry.
- Define chemistry in relation to other sciences.
- Identify the main disciplines of chemistry.

Chemistry is the study of matter—what it consists of, what its properties are, and how it changes. Matter is anything that has mass and takes up space—that is, anything that is physically real. Some things are easily identified as matter—the screen on which you are reading this book, for example. Others are not so obvious. Because we move so easily through air, we sometimes forget that it, too, is matter. Because of this, chemistry is a science that has its fingers in just about everything. Being able to describe the ingredients in a cake and how they change when the cake is baked, for example, is chemistry!

Chemistry is one branch of science. Science is the process by which we learn about the natural universe by observing, testing, and then generating models that explain our observations. Because the physical universe is so vast, there are many different branches of science (Figure 1.1.1). Thus, chemistry is the study of matter, biology is the study of living things, and geology is the study of rocks and the earth. Mathematics is the language of science, and we will use it to communicate some of the ideas of chemistry.

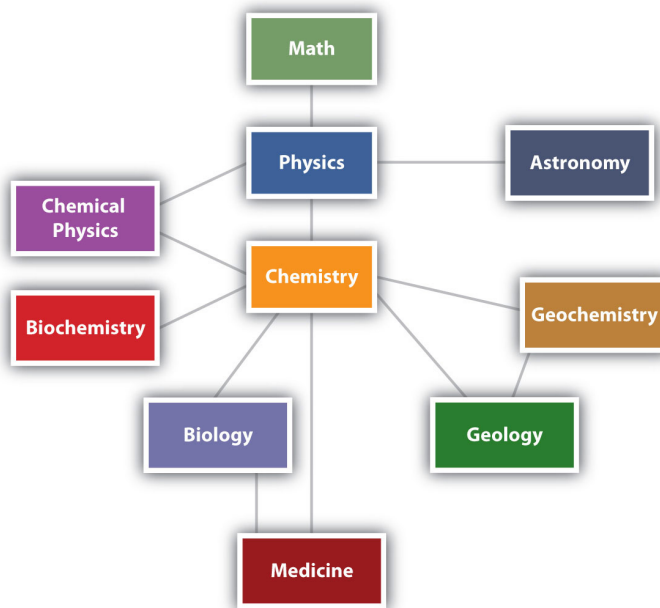


Figure 1.1.1: The Relationships between Some of the Major Branches of Science. Chemistry lies more or less in the middle, which emphasizes its importance to many branches of science.

Although we divide science into different fields, there is much overlap among them. For example, some biologists and chemists work in both fields so much that their work is called biochemistry. Similarly, geology and chemistry overlap in the field called geochemistry. Figure 1.1.1 shows how many of the individual fields of science are related. At some level, all of these fields depend on matter because they all involve "stuff"; because of this, chemistry has been called the "central science", linking them all together.

There are many other fields of science, in addition to the ones (biology, medicine, etc.) listed here.

✓ Example 1.1.1: Science Fields

Which fields of study are branches of science? Explain.

- a. sculpture
- b. astronomy

Solution

- a. Sculpture is not considered a science because it is not a study of some aspect of the natural universe.
- b. Astronomy is the study of stars and planets, which are part of the natural universe. Astronomy is therefore a field of science.

? Exercise 1.1.1

Which fields of study are branches of science?

- a. physiology (the study of the function of an animal's or a plant's body)
- b. geophysics
- c. agriculture
- d. politics

Answer a:

yes

Answer b:

yes

Answer c:

yes

Answer d:

no

Areas of Chemistry

The study of modern chemistry has many branches, but can generally be broken down into five main disciplines, or areas of study:

- **Physical chemistry:** Physical chemistry is the study of macroscopic properties, atomic properties, and phenomena in chemical systems. A physical chemist may study such things as the rates of chemical reactions, the energy transfers that occur in reactions, or the physical structure of materials at the molecular level.
- **Organic chemistry:** Organic chemistry is the study of chemicals containing carbon. Carbon is one of the most abundant elements on Earth and is capable of forming a tremendously vast number of chemicals (over twenty million so far). Most of the chemicals found in all living organisms are based on carbon.
- **Inorganic chemistry:** Inorganic chemistry is the study of chemicals that, in general, are not primarily based on carbon. Inorganic chemicals are commonly found in rocks and minerals. One current important area of inorganic chemistry deals with the design and properties of materials involved in energy and information technology.
- **Analytical chemistry:** Analytical chemistry is the study of the composition of matter. It focuses on separating, identifying, and quantifying chemicals in samples of matter. An analytical chemist may use complex instruments to analyze an unknown material in order to determine its various components.
- **Biochemistry:** Biochemistry is the study of chemical processes that occur in living things. Research may cover anything from basic cellular processes up to understanding disease states so that better treatments can be developed.



Figure 1.1.2: (left) Measurement of trace metals using atomic spectroscopy. (right) Measurement of hormone concentrations.

In practice, chemical research is often not limited to just one of the five major disciplines. A particular chemist may use biochemistry to isolate a particular chemical found in the human body such as hemoglobin, the oxygen carrying component of red blood cells. He or she may then proceed to analyze the hemoglobin using methods that would pertain to the areas of physical or analytical chemistry. Many chemists specialize in areas that are combinations of the main disciplines, such as bioinorganic chemistry or physical organic chemistry.

History of Chemistry

The **history** of chemistry is an interesting and challenging one. Very early chemists were often motivated mainly by the achievement of a specific goal or product. Making perfume or soaps did not need a lot of **theory**, just a good recipe and careful attention to detail. There was no standard way of naming materials (and no periodic table that we could all agree on). It is often difficult to figure out exactly what a particular person was using. However, the science developed over the centuries by trial and error.

Major progress was made toward putting chemistry on a solid foundation when Robert Boyle (1637-1691) began his **research** in chemistry (Figure 1.1.3). He developed the basic ideas about the behavior of gases. He could then describe gases mathematically. Boyle also helped form the idea that small particles could combine to form molecules. Many years later, John Dalton used these ideas to develop the atomic theory.



Figure 1.1.3: Robert Boyle.

The field of chemistry began to develop rapidly in the 1700's. Joseph Priestley (1733-1804) isolated and characterized several gases: oxygen, carbon monoxide, and nitrous oxide. It was later discovered that nitrous oxide ("laughing gas") worked as an anesthetic. This gas was used for that purpose for the first time in 1844 during a tooth extraction. Other gases discovered during that time were chlorine, by C.W. Scheele (1742-1786) and nitrogen, by Antoine Lavoisier (1743-1794). Lavoisier has been considered by many scholars to be the "father of chemistry". Among other accomplishments, he discovered the role of oxygen in combustion and definitively formulated the law of conservation of matter.

Chemists continued to discover new compounds in the 1800's. The science also began to develop a more theoretical foundation. John Dalton (1766-1844) put forth his atomic theory in 1807. This idea allowed scientists to think about chemistry in a much more systematic way. Amadeo Avogadro (1776-1856) laid the groundwork for a more quantitative approach to chemistry by calculating the number of particles in a given amount of a gas. A lot of effort was put forth in studying chemical reactions. These efforts led to new materials being produced. Following the invention of the battery by Alessandro Volta (1745-1827), the field of electrochemistry (both theoretical and applications) developed through major contributions by Humphry Davy (1778-1829) and Michael Faraday (1791-1867). Other areas of the discipline also progressed rapidly.

It would take a large book to cover developments in chemistry during the twentieth century and up to today. One major area of expansion was in the area of the chemistry of living processes. Research in photosynthesis in plants, the discovery and characterization of enzymes as biochemical catalysts, elucidation of the structures of biomolecules such as insulin and DNA—these efforts gave rise to an explosion of information in the field of biochemistry.

The practical aspects of chemistry were not ignored. The work of Volta, Davy, and Faraday eventually led to the development of batteries that provided a source of electricity to power a number of devices (Figure 1.1.4).

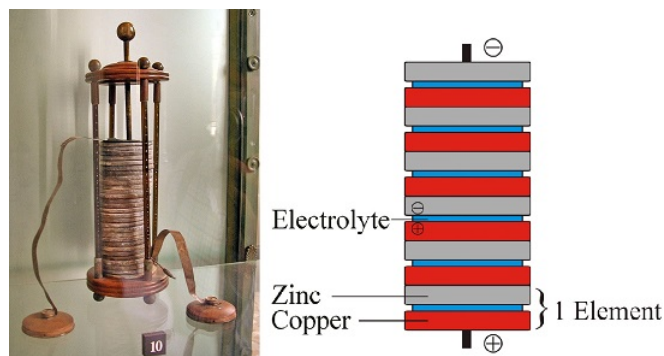


Figure 1.1.4: Battery developed by Volta. (CC BY-SA 3.0; (left) GuidoB and (right) Kkkdc).

Charles Goodyear (1800-1860) discovered the process of vulcanization, allowing a stable rubber product to be produced for the tires of all the vehicles we have today. Louis Pasteur (1822-1895) pioneered the use of heat sterilization to eliminate unwanted microorganisms in wine and milk. Alfred Nobel (1833-1896) invented dynamite (Figure 1.1.5). After his death, the fortune he made from this product was used to fund the Nobel Prizes in science and the humanities. J.W. Hyatt (1837-1920) developed the first plastic. Leo Baekeland (1863-1944) developed the first synthetic resin, widely used for inexpensive and sturdy dinnerware.



Figure 1.1.5: Dynamite explosion in Panama, Central America (1908).

Today, chemistry continues to be essential to the development of new materials and technologies, from semiconductors for electronics to powerful new medicines, and beyond.

Summary

- Chemistry is the study of matter and the changes it undergoes and considers both *macroscopic* and *microscopic* information.
- Matter is anything that has mass and occupies space.
- The five main disciplines of chemistry are physical chemistry, organic chemistry, inorganic chemistry, analytical chemistry and biochemistry.
- Many civilizations contributed to the growth of chemistry. A lot of early chemical research focused on practical uses. Basic chemistry theories were developed during the nineteenth century. New materials and batteries are a few of the products of modern chemistry.

1.1: The Scope of Chemistry is shared under a CC BY-NC-SA 4.0 license and was authored, remixed, and/or curated by LibreTexts.

- 1.7: The Scope of Chemistry by Henry Agnew, Marisa Alviar-Agnew is licensed CK-12. Original source: <https://www.ck12.org/c/chemistry/>.

1.2: Chemicals Compose Ordinary Things

Template:HideTOC

Chemistry is the branch of science dealing with the structure, composition, properties, and the reactive characteristics of matter. Matter is anything that has mass and occupies space. Thus, chemistry is the study of literally everything around us—the liquids that we drink, the gases we breathe, the composition of everything from the plastic case on your phone to the earth beneath your feet. Moreover, chemistry is the study of the transformation of matter. Crude oil is transformed into more useful petroleum products, such as gasoline and kerosene, by the process of refining. Some of these products are further transformed into plastics. Crude metal ores are transformed into metals, that can then be fashioned into everything from foil to automobiles. Potential drugs are identified from natural sources, isolated and then prepared in the laboratory. Their structures are systematically modified to produce the pharmaceuticals that have led to vast advances in modern medicine. Chemistry is at the center of all of these processes; chemists are the people that study the nature of matter and learn to design, predict, and control these chemical transformations. Within the branches of chemistry you will find several apparent subdivisions. Inorganic chemistry, historically, focused on minerals and metals found in the earth, while organic chemistry dealt with carbon-containing compounds that were first identified in living things. Biochemistry is an outgrowth of the application of organic chemistry to biology and relates to the chemical basis for living things. In the later chapters of this text we will explore organic and biochemistry in a bit more detail and you will notice examples of organic compounds scattered throughout the text. Today, the lines between the various fields have blurred significantly and a contemporary chemist is expected to have a broad background in all of these areas.

In this chapter, we will discuss some of the properties of matter and how chemists measure those properties. We will introduce some of the vocabulary that is used throughout chemistry and the other physical sciences.

Let's begin with matter. **Matter** is defined as any substance that has mass. It is important to distinguish here between weight and mass. Weight is the result of the pull of gravity on an object. On the Moon, an object will weigh less than the same object on Earth because the pull of gravity is less on the Moon. The mass of an object, however, is an inherent property of that object and does not change, regardless of location, gravitational pull, or anything else. It is a property that is solely dependent on the quantity of matter within the object.

Contemporary theories suggests that matter is composed of **atoms**. Atoms themselves are constructed from neutrons, protons and electrons, along with an ever-increasing array of other subatomic particles. We will focus on the neutron, a particle having no charge; the proton, which carries a positive charge; and the electron, which has a negative charge. Atoms are incredibly small. To give you an idea of the size of an atom, a single copper penny contains approximately 28,000,000,000,000,000,000 atoms (that's 28 sextillion). Because atoms and subatomic particles are so small, their mass is not readily measured using pounds, ounces, grams or any other scale that we would use on larger objects. Instead, the mass of atoms and subatomic particles is measured using atomic mass units (abbreviated amu). The atomic mass unit is based on a scale that relates the mass of different types of atoms to each other (using the most common form of the element carbon as a standard). The amu scale gives us a convenient means to describe the masses of individual atoms and to do quantitative measurements concerning atoms and their reactions. Within an atom, the neutron and proton both have a mass of one amu; the electron has a much smaller mass (about 0.0005 amu).



Figure 1.2.1: Atoms are incredible small. To give you an idea of the size of an atom, a single copper penny contains approximately 28,000,000,000,000,000,000 atoms (that's 28 sextillion).

Atomic theory places the neutron and the proton in the center of the atom in the nucleus. In an atom, the nucleus is very small, very dense, carries a positive charge (from the protons) and contains virtually all of the mass of the atom. Electrons are placed in a diffuse cloud surrounding the nucleus. The electron cloud carries a net negative charge (from the charge on the electrons) and in a neutral atom there are always as many electrons in this cloud as there are protons in the nucleus (the positive charges in the nucleus are balanced by the negative charges of the electrons, making the atom neutral).

An atom is characterized by the number of neutrons, protons and electrons that it possesses. Today, we recognize at least 116 different types of atoms, each type having a different number of protons in its nucleus. These different types of atoms are called elements. The neutral element hydrogen (the lightest element) will always have one proton in its nucleus and one electron in the cloud surrounding the nucleus. The element helium will always have two protons in its nucleus. It is the number of protons in the nucleus of an atom that defines the identity of an element. Elements can, however, have differing numbers of neutrons in their nucleus. For example, stable helium nuclei exist that contain one, or two neutrons (but they all have two protons). These different types of helium atoms have different masses (3 or 4 amu) and they are called isotopes. For any given isotope, the sum of the numbers of protons and neutrons in the nucleus is called the mass number. All elements exist as a collection of isotopes, and the mass of an element that we use in chemistry, the atomic mass, is the average of the masses of these isotopes. For helium, there is approximately one isotope of Helium-3 for every one million isotopes of Helium-4, hence the average atomic mass is very close to 4 (4.002602).

As different elements were discovered and named, abbreviations of their names were developed to allow for a convenient chemical shorthand. The abbreviation for an element is called its chemical symbol. A chemical symbol consists of one or two letters, and the relationship between the symbol and the name of the element is generally apparent. Thus helium has the chemical symbol He, nitrogen is N, and lithium is Li. Sometimes the symbol is less apparent but is decipherable; magnesium is Mg, strontium is Sr, and manganese is Mn. Symbols for elements that have been known since ancient times, however, are often based on Latin or Greek names and appear somewhat obscure from their modern English names. For example, copper is Cu (from cuprum), silver is Ag (from argentum), gold is Au (from aurum), and iron is Fe (from ferrum). Throughout your study of chemistry, you will routinely use chemical symbols and it is important that you begin the process of learning the names and chemical symbols for the common elements. By the time you complete General Chemistry, you will find that you are adept at naming and identifying virtually all of the 116 known elements. Table 1.2.1 contains a starter list of common elements that you should begin learning now!

Table 1.2.1: Names and Chemical Symbols for Common Elements

Element	Chemical Symbol	Element	Chemical Symbol
Hydrogen	H	Phosphorus	P
Helium	He	Sulfur	S
Lithium	Li	Chlorine	Cl
Beryllium	Be	Argon	Ar
Boron	B	Potassium	K
Carbon	C	Calcium	Ca
Nitrogen	N	Iron	Fe
Oxygen	O	Copper	Cu
Fluorine	F	Zinc	Zn
Neon	Ne	Bromine	Br
Sodium	Na	Silver	Ag
Magnesium	Mg	Iodine	I
Aluminum	Al	Gold	Au
Silicon	Si	Lead	Pb

The chemical symbol for an element is often combined with information regarding the number of protons and neutrons in a particular isotope of that atom to give the atomic symbol. To write an atomic symbol, begin with the chemical symbol, then write the atomic number for the element (the number of protons in the nucleus) as a subscript, preceding the chemical symbol. Directly above this, as a superscript, write the mass number for the isotope, that is, the total number of protons and neutrons in the nucleus. Thus, for helium, the atomic number is 2 and there are two neutrons in the nucleus for the most common isotope, making the atomic symbol ${}^4_2\text{He}$. In the definition of the atomic mass unit, the “most common isotope of carbon”, ${}^{12}_6\text{C}$, is defined as having a

mass of exactly 12 amu and the atomic masses of the remaining elements are based on their masses relative to this isotope. Chlorine (chemical symbol Cl) consists of two major isotopes, one with 18 neutrons (the most common, comprising 75.77% of natural chlorine atoms) and one with 20 neutrons (the remaining 24.23%). The atomic number of chlorine is 17 (it has 17 protons in its nucleus), therefore the chemical symbols for the two isotopes are $^{35}_{17}\text{Cl}$ and $^{37}_{17}\text{Cl}$.

When data is available regarding the natural abundance of various isotopes of an element, it is simple to calculate the average atomic mass. In the example above, $^{35}_{17}\text{Cl}$ was the most common isotope with an abundance of 75.77% and $^{37}_{17}\text{Cl}$ had an abundance of the remaining 24.23%. To calculate the average mass, first convert the percentages into fractions; that is, simply divide them by 100. Now, chlorine-35 represents a fraction of natural chlorine of 0.7577 and has a mass of 35 (the mass number). Multiplying these, we get $(0.7577 \times 35) = 26.51$. To this, we need to add the fraction representing chlorine-37, or $(0.2423 \times 37) = 8.965$; adding, $(26.51 + 8.965) = 35.48$, which is the weighted average atomic mass for chlorine. Whenever we do mass calculations involving elements or compounds (combinations of elements), we always need to use average atomic masses.

Contributions & Attributions

- [Paul R. Young](#), Professor of Chemistry, University of Illinois at Chicago, Wiki: AskTheNerd; PRY@askthenerd.com - pyoung@uic.edu; ChemistryOnline.com

1.2: Chemicals Compose Ordinary Things is shared under a [CC BY-NC-SA 4.0](#) license and was authored, remixed, and/or curated by LibreTexts.

- **1.2: Chemicals Compose Ordinary Things** by Henry Agnew, Marisa Alviar-Agnew is licensed [CK-12](#). Original source: <https://www.ck12.org/c/chemistry/>.

1.3: Hypothesis, Theories, and Laws

Template:HideTOC

Learning Objectives

- Describe the difference between hypothesis and theory as scientific terms.
- Describe the difference between a theory and scientific law.

Although many have taken science classes throughout the course of their studies, people often have incorrect or misleading ideas about some of the most important and basic principles in science. Most students have heard of hypotheses, theories, and laws, but what do these terms really mean? Prior to reading this section, consider what you have learned about these terms before. What do these terms mean to you? What do you read that contradicts or supports what you thought?

What is a Fact?

A fact is a basic statement established by experiment or observation. All facts are true under the specific conditions of the observation.

What is a Hypothesis?

One of the most common terms used in science classes is a "hypothesis". The word can have many different definitions, depending on the context in which it is being used:

- An educated guess: a scientific hypothesis provides a suggested solution based on evidence.
- Prediction: if you have ever carried out a science experiment, you probably made this type of hypothesis when you predicted the outcome of your experiment.
- Tentative or proposed explanation: hypotheses can be suggestions about why something is observed. In order for it to be scientific, however, a scientist must be able to test the explanation to see if it works and if it is able to correctly predict what will happen in a situation. For example, "if my hypothesis is correct, we should see ___ result when we perform ___ test."

A hypothesis is very tentative; it can be easily changed.

What is a Theory?

The *United States National Academy of Sciences* describes what a theory is as follows:

"Some scientific explanations are so well established that no new evidence is likely to alter them. The explanation becomes a scientific theory. In everyday language a theory means a hunch or speculation. Not so in science. In science, the word **theory** refers to a comprehensive explanation of an important feature of nature supported by facts gathered over time. Theories also allow scientists to make predictions about as yet unobserved phenomena."

"A scientific theory is a well-substantiated explanation of some aspect of the natural world, based on a body of facts that have been repeatedly confirmed through observation and experimentation. Such fact-supported theories are not "guesses" but reliable accounts of the real world. The theory of biological evolution is more than "just a theory." It is as factual an explanation of the universe as the atomic theory of matter (stating that everything is made of atoms) or the germ theory of disease (which states that many diseases are caused by germs). Our understanding of gravity is still a work in progress. But the phenomenon of gravity, like evolution, is an accepted fact.

Note some key features of theories that are important to understand from this description:

- Theories are explanations of natural phenomena. They aren't predictions (although we may use theories to make predictions). They are explanations as to why we observe something.
- Theories aren't likely to change. They have a large amount of support and are able to satisfactorily explain numerous observations. Theories can, indeed, be facts. Theories can change, but it is a long and difficult process. In order for a theory to change, there must be many observations or pieces of evidence that the theory cannot explain.
- Theories are not guesses. The phrase "just a theory" has no room in science. To be a scientific theory carries a lot of weight; it is not just one person's idea about something

| *Theories aren't likely to change.*

What is a Law?

Scientific laws are similar to scientific theories in that they are principles that can be used to predict the behavior of the natural world. Both scientific laws and scientific theories are typically well-supported by observations and/or experimental evidence. Usually scientific laws refer to rules for how nature will behave under certain conditions, frequently written as an equation. Scientific theories are more overarching explanations of how nature works and why it exhibits certain characteristics. As a comparison, theories explain why we observe what we do and laws describe what happens.

For example, around the year 1800, Jacques Charles and other scientists were working with gases to, among other reasons, improve the design of the hot air balloon. These scientists found, after many, many tests, that certain patterns existed in the observations on gas behavior. If the temperature of the gas is increased, the volume of the gas increased. This is known as a natural law. A law is a relationship that exists between variables in a group of data. Laws describe the patterns we see in large amounts of data, but do not describe why the patterns exist.

What is a Belief?

A **belief** is a statement that is not scientifically provable. Beliefs may or may not be incorrect; they just are outside the realm of science to explore.

Laws vs. Theories

A common misconception is that scientific theories are rudimentary ideas that will eventually graduate into scientific laws when enough data and evidence has accumulated. A theory does not change into a scientific law with the accumulation of new or better evidence. Remember, **theories are explanations** and **laws are patterns** we see in large amounts of data, frequently written as an equation. A theory will always remain a theory; a law will always remain a law.



Video 1.3.1: What's the difference between a scientific law and theory?

Summary

- A hypothesis is a tentative explanation that can be tested by further investigation.
- A theory is a well-supported explanation of observations.
- A scientific law is a statement that summarizes the relationship between variables.
- An experiment is a controlled method of testing a hypothesis.

Contributions & Attributions

-
- Marisa Alviar-Agnew (Sacramento City College)
- Henry Agnew (UC Davis)

1.3: Hypothesis, Theories, and Laws is shared under a [CC BY-NC-SA 4.0](https://creativecommons.org/licenses/by-nc-sa/4.0/) license and was authored, remixed, and/or curated by LibreTexts.

- **1.6: Hypothesis, Theories, and Laws** by Henry Agnew, Marisa Alviar-Agnew is licensed [CK-12](#). Original source: <https://www.ck12.org/c/chemistry/>.

1.4: The Scientific Method- How Chemists Think

Template:HideTOC

Learning Objectives

- Identify the components of the scientific method.

Scientists search for answers to questions and solutions to problems by using a procedure called the scientific method. This procedure consists of making observations, formulating hypotheses, and designing experiments; which leads to additional observations, hypotheses, and experiments in repeated cycles (Figure 1.4.1).

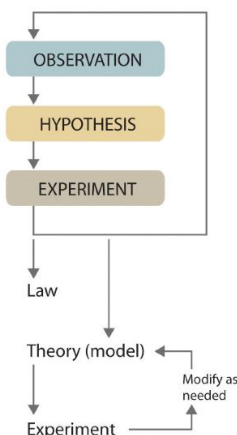


Figure 1.4.1: The Steps in the Scientific Method.

Step 1: Make observations

Observations can be qualitative or quantitative. **Qualitative observations** describe properties or occurrences in ways that do not rely on numbers. Examples of qualitative observations include the following: "the outside air temperature is cooler during the winter season," "table salt is a crystalline solid," "sulfur crystals are yellow," and "dissolving a penny in dilute nitric acid forms a blue solution and a brown gas." **Quantitative observations** are measurements, which by definition consist of both a number and a unit. Examples of quantitative observations include the following: "the melting point of crystalline sulfur is 115.21° Celsius," and "35.9 grams of table salt—the chemical name of which is sodium chloride—dissolve in 100 grams of water at 20° Celsius." For the question of the dinosaurs' extinction, the initial observation was quantitative: iridium concentrations in sediments dating to 66 million years ago were 20–160 times higher than normal.

Step 2: Formulate a hypothesis

After deciding to learn more about an observation or a set of observations, scientists generally begin an investigation by forming a hypothesis, a tentative explanation for the observation(s). The hypothesis may not be correct, but it puts the scientist's understanding of the system being studied into a form that can be tested. For example, the observation that we experience alternating periods of light and darkness corresponding to observed movements of the sun, moon, clouds, and shadows is consistent with either one of two hypotheses:

- Earth rotates on its axis every 24 hours, alternately exposing one side to the sun.
- The sun revolves around Earth every 24 hours.

Suitable experiments can be designed to choose between these two alternatives. For the disappearance of the dinosaurs, the hypothesis was that the impact of a large extraterrestrial object caused their extinction. Unfortunately (or perhaps fortunately), this hypothesis does not lend itself to direct testing by any obvious experiment, but scientists can collect additional data that either support or refute it.

Step 3: Design and perform experiments

After a hypothesis has been formed, scientists conduct experiments to test its validity. Experiments are systematic observations or measurements, preferably made under controlled conditions—that is—under conditions in which a single variable changes.

Step 4: Accept or modify the hypothesis

A properly designed and executed experiment enables a scientist to determine whether or not the original hypothesis is valid. If the hypothesis is valid, the scientist can proceed to step 5. In other cases, experiments often demonstrate that the hypothesis is incorrect or that it must be modified and requires further experimentation.

Step 5: Development into a law and/or theory

More experimental data are then collected and analyzed, at which point a scientist may begin to think that the results are sufficiently reproducible (i.e., dependable) to merit being summarized in a law, a verbal or mathematical description of a phenomenon that allows for general predictions. A law simply states what happens; it does not address the question of why.

One example of a law, the [law of definite proportions](#), which was discovered by the French scientist Joseph Proust (1754–1826), states that a chemical substance always contains the same proportions of elements by mass. Thus, sodium chloride (table salt) always contains the same proportion by mass of sodium to chlorine, in this case 39.34% sodium and 60.66% chlorine by mass, and sucrose (table sugar) is always 42.11% carbon, 6.48% hydrogen, and 51.41% oxygen by mass.

Whereas a law states only what happens, a theory attempts to explain why nature behaves as it does. Laws are unlikely to change greatly over time unless a major experimental error is discovered. In contrast, a theory, by definition, is incomplete and imperfect, evolving with time to explain new facts as they are discovered.

Because scientists can enter the cycle shown in Figure 1.4.1 at any point, the actual application of the scientific method to different topics can take many different forms. For example, a scientist may start with a hypothesis formed by reading about work done by others in the field, rather than by making direct observations.

✓ Example 1.4.1

Classify each statement as a law, a theory, an experiment, a hypothesis, an observation.

- Ice always floats on liquid water.
- Birds evolved from dinosaurs.
- Hot air is less dense than cold air, probably because the components of hot air are moving more rapidly.
- When 10 g of ice were added to 100 mL of water at 25°C, the temperature of the water decreased to 15.5°C after the ice melted.
- The ingredients of Ivory soap were analyzed to see whether it really is 99.44% pure, as advertised.

Solution

- This is a general statement of a relationship between the properties of liquid and solid water, so it is a law.
- This is a possible explanation for the origin of birds, so it is a hypothesis.
- This is a statement that tries to explain the relationship between the temperature and the density of air based on fundamental principles, so it is a theory.
- The temperature is measured before and after a change is made in a system, so these are observations.
- This is an analysis designed to test a hypothesis (in this case, the manufacturer's claim of purity), so it is an experiment.

? Exercise 1.4.1

Classify each statement as a law, a theory, an experiment, a hypothesis, a qualitative observation, or a quantitative observation.

- Measured amounts of acid were added to a Rolaids tablet to see whether it really “consumes 47 times its weight in excess stomach acid.”
- Heat always flows from hot objects to cooler ones, not in the opposite direction.
- The universe was formed by a massive explosion that propelled matter into a vacuum.
- Michael Jordan is the greatest pure shooter to ever play professional basketball.
- Limestone is relatively insoluble in water, but dissolves readily in dilute acid with the evolution of a gas.

Answer a

experiment

Answer b

law

Answer c

theory

Answer d

hypothesis

Answer e

observation

Summary

The scientific method is a method of investigation involving experimentation and observation to acquire new knowledge, solve problems, and answer questions. The key steps in the scientific method include the following:

- Step 1: Make observations.
- Step 2: Formulate a hypothesis.
- Step 3: Test the hypothesis through experimentation.
- Step 4: Accept or modify the hypothesis.
- Step 5: Develop into a law and/or a theory.

Contributions & Attributions

-
- Wikipedia

1.4: The Scientific Method- How Chemists Think is shared under a [CC BY-NC-SA 4.0](#) license and was authored, remixed, and/or curated by LibreTexts.

- **1.3: The Scientific Method - How Chemists Think** by Henry Agnew, Marisa Alviar-Agnew is licensed [CK-12](#). Original source: <https://www.ck12.org/c/chemistry/>.

1.5: A Beginning Chemist- How to Succeed

Template:HideTOC

Examples of the practical applications of chemistry are everywhere (Figure 1.5.1). Engineers need to understand the chemical properties of the substances needed to design biologically compatible implants for joint replacements; or to design roads, bridges, buildings, and nuclear reactors that do not collapse because of weakened structural materials such as steel and cement. Archeology and paleontology rely on chemical techniques to date bones and artifacts and identify their origins. Although law is not normally considered a field related to chemistry, forensic scientists use chemical methods to analyze blood, fibers, and other evidence as they investigate crimes. In particular, DNA matching—comparing biological samples of genetic material to see whether they could have come from the same person—has been used to solve many high-profile criminal cases as well as clear innocent people who have been wrongly accused or convicted. Forensics is a rapidly growing area of applied chemistry. In addition, the proliferation of chemical and biochemical innovations in industry is producing rapid growth in the area of patent law. Ultimately, the dispersal of information in all the fields in which chemistry plays a part requires experts who are able to explain complex chemical issues to the public through television, print journalism, the Internet, and popular books.

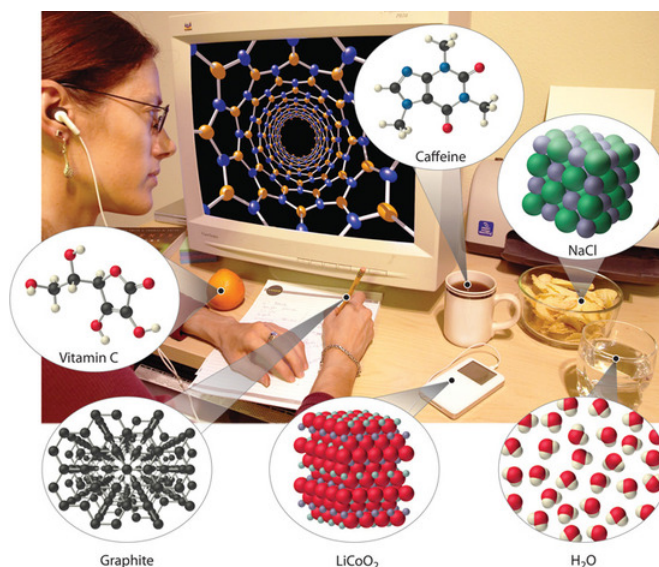


Figure 1.5.1: Chemistry in Everyday Life. Although most people do not recognize it, chemistry and chemical compounds are crucial ingredients in almost everything we eat, wear, and use.

Chemical compounds in everyday life: Vitamin C, graphite, lithium cobalt oxide, caffeine, sodium chloride, water

Hopefully at this point you are fully convinced of how important and useful the study of chemistry can be. You may, however, still be wondering exactly *what* it is that a chemist does. Chemistry is the study of matter and the changes that matter undergoes. In general, chemists are interested in both characteristics that you can test and observe, like a chemical's smell or color, and characteristics that are far too small to see, like what the oxygen you breathe in or the carbon dioxide you breath out looks like under a microscope 1,000 times more powerful than any existing in the world today.

Wait a minute... how can a chemist *know* what oxygen and carbon dioxide look like under a microscope that doesn't even exist? What happened to the scientific method? What happened to relying on *observations* and *careful measurements*? In fact, because chemists *can't* see the underlying structure of different materials, they have to rely on the scientific method even more! Chemists are a lot like detectives. Suppose a detective is trying to solve a murder case—what do they do? Obviously, the detective starts by visiting the site of the crime and looking for evidence. If the murderer has left enough clues behind, the detective can piece together a theory explaining what happened.

Even though the detective wasn't at the crime scene when the crime was committed and didn't actually see the murderer kill the victim, with the right evidence, the detective can be pretty sure of how the crime took place. It is the same with chemistry. When chemists go into the laboratory, they collect evidence by making measurements. Once chemists have collected enough clues from the properties that they can observe, they use that evidence to piece together a theory explaining the properties that they cannot observe—the properties that are too small to see.

What kinds of properties do chemists actually measure in the laboratory? Well, you can probably guess a few. Imagine that you go to dinner at a friend's house and are served something that you don't recognize, what types of observations might you make to determine exactly *what* you've been given? You might smell the food. You might note the color of the food. You might try to decide whether the food is a liquid or a solid because if it's a liquid, it's probably soup or a drink. The temperature of the food could be useful if you wanted to know whether or not you had been served ice cream! You could also pick up a small amount of food with your fork and try to figure out how much it weighs—a light dessert might be something like an angel cake, while a heavy dessert is probably a pound cake. The quantity of food you have been given might be a clue too. Finally, you might want to know something about the food's texture—is it hard and granular like sugar cubes, or soft and easy to spread, like butter?

Believe it or not, the observations you are likely to make when trying to identify an unknown food are very similar to the observations that a chemist makes when trying to learn about a new material. Chemists rely on smell, color, state (whether it is a solid or liquid or gas), temperature, volume, mass (which is related to weight—as will be discussed in a later section), and texture. There is, however, one property possibly used to learn about a food, but that should *definitely* not be used to learn about a chemical—taste!

In the sections on the Atomic Theory, you will see exactly how measurements of certain properties helped early scientists to develop theories about the chemical structure of matter on a scale much smaller than they could ever hope to see. You will also learn how these theories, in turn, allow us to make predictions about new materials that humankind has not yet created.

The video below gives you some important tips on how to study chemistry in this class. With practice, you too can learn to think like a chemist, and you may even enjoy it!



Video 1.5.1: How To Study Chemistry.

Contributions & Attributions

1.5: A Beginning Chemist- How to Succeed is shared under a [CC BY-NC-SA 4.0](#) license and was authored, remixed, and/or curated by LibreTexts.

- [1.5: A Beginning Chemist - How to Succeed](#) by Henry Agnew, Marisa Alviar-Agnew is licensed [CK-12](#). Original source: <https://www.ck12.org/c/chemistry/>.

CHAPTER OVERVIEW

2: Measurement and Problem Solving

Chemistry, like all sciences, is quantitative. It deals with *quantities*, things that have amounts and units. Dealing with quantities is very important in chemistry, as is relating quantities to each other. In this chapter, we will discuss how we deal with numbers and units, including how they are combined and manipulated.

Topic hierarchy

- [2.1: Taking Measurements](#)
- [2.2: Scientific Notation- Writing Large and Small Numbers](#)
- [2.3: Significant Figures- Writing Numbers to Reflect Precision](#)
- [2.4: Significant Figures in Calculations](#)
- [2.5: The Basic Units of Measurement](#)
- [2.6: Problem Solving and Unit Conversions](#)
- [2.7: Solving Multistep Conversion Problems](#)
- [2.8: Units Raised to a Power](#)
- [2.9: Density](#)
- [2.10: Numerical Problem-Solving Strategies and the Solution Map](#)
- [2.11: Taking Measurements](#)
- [2.E: Measurement and Problem Solving \(Exercises\)](#)

2: Measurement and Problem Solving is shared under a [CC BY-NC-SA 4.0](#) license and was authored, remixed, and/or curated by LibreTexts.

2.1: Taking Measurements

Template:HideTOC

Learning Objectives

- Express quantities properly, using a number and a unit.

A coffee maker's instructions tell you to fill the coffee pot with 4 cups of water and to use 3 scoops of coffee. When you follow these instructions, you are measuring. When you visit a doctor's office, a nurse checks your temperature, height, weight, and perhaps blood pressure (Figure 2.1.1); the nurse is also measuring.



Figure 2.1.1: Measuring Blood Pressure. A nurse or a doctor measuring a patient's blood pressure is taking a measurement. (GFDL; Pia von Lützu).

Chemists measure the properties of matter and express these measurements as quantities. A quantity is an amount of something and consists of a number and a unit. The number tells us how many (or how much), and the unit tells us what the scale of measurement is. For example, when a distance is reported as "5 kilometers," we know that the quantity has been expressed in units of kilometers and that the number of kilometers is 5. If you ask a friend how far they walk from home to school, and the friend answers "12" without specifying a unit, you do not know whether your friend walks 12 kilometers, 12 miles, 12 furlongs, or 12 yards. *Both a number and a unit must be included to express a quantity properly.*

To understand chemistry, we need a clear understanding of the units chemists work with and the rules they follow for expressing numbers. The next two sections examine the rules for expressing numbers.

✓ Example 2.1.1

Identify the number and the unit in each quantity.

- one dozen eggs
- 2.54 centimeters
- a box of pencils
- 88 meters per second

Solution

- The number is one, and the unit is a dozen eggs.
- The number is 2.54, and the unit is centimeter.
- The number 1 is implied because the quantity is only *a* box. The unit is box of pencils.
- The number is 88, and the unit is meters per second. Note that in this case the unit is actually a combination of two units: meters and seconds.

Key Take Away

- Identify a quantity properly with a number and a unit.

2.1: Taking Measurements is shared under a [CC BY-NC-SA 4.0](#) license and was authored, remixed, and/or curated by LibreTexts.

- **2.1: Taking Measurements** by Henry Agnew, Marisa Alviar-Agnew is licensed [CC BY-NC-SA 3.0](#).

2.2: Scientific Notation- Writing Large and Small Numbers

Template:HideTOC

Learning Objectives

- Express a large number or a small number in scientific notation.
- Carry out arithmetical operations and express the final answer in scientific notation

Chemists often work with numbers that are exceedingly large or small. For example, entering the mass in grams of a hydrogen atom into a calculator would require a display with at least 24 decimal places. A system called **scientific notation** avoids much of the tedium and awkwardness of manipulating numbers with large or small magnitudes. In scientific notation, these numbers are expressed in the form

$$N \times 10^n$$

where N is greater than or equal to 1 and less than 10 ($1 \leq N < 10$), and n is a positive or negative integer ($10^0 = 1$). The number 10 is called the base because it is this number that is raised to the power n . Although a base number may have values other than 10, the base number in scientific notation is always 10.

A simple way to convert numbers to scientific notation is to move the decimal point as many places to the left or right as needed to give a number from 1 to 10 (N). The magnitude of n is then determined as follows:

- If the decimal point is moved to the left n places, n is positive.
- If the decimal point is moved to the right n places, n is negative.

Another way to remember this is to recognize that as the number N decreases in magnitude, the exponent increases and vice versa. The application of this rule is illustrated in Example 2.2.1.

✓ Example 2.2.1: Expressing Numbers in Scientific Notation

Convert each number to scientific notation.

- 637.8
- 0.0479
- 7.86
- 12,378
- 0.00032
- 61.06700
- 2002.080
- 0.01020

Solution

Solutions to Example 2.2.1

	Explanation	Answer
a	To convert 637.8 to a number from 1 to 10, we move the decimal point two places to the left: 637.8 Because the decimal point was moved two places to the left, $n = 2$.	6.378×10^2
b	To convert 0.0479 to a number from 1 to 10, we move the decimal point two places to the right: 0.0479 Because the decimal point was moved two places to the right, $n = -2$.	4.79×10^{-2}
c	This is usually expressed simply as 7.86. (Recall that $10^0 = 1$.)	7.86×10^0
d	Because the decimal point was moved four places to the left, $n = 4$.	1.2378×10^4

	Explanation	Answer
e	Because the decimal point was moved four places to the right, $n = -4$.	3.2×10^{-4}
f	Because the decimal point was moved one place to the left, $n = 1$.	6.106700×10^1
g	Because the decimal point was moved three places to the left, $n = 3$.	2.002080×10^3
h	Because the decimal point was moved two places to the right, $n = -2$.	1.020×10^{-2}

Addition and Subtraction

Before numbers expressed in scientific notation can be added or subtracted, they must be converted to a form in which all the exponents have the same value. The appropriate operation is then carried out on the values of N . Example 2.2.2 illustrates how to do this.

✓ Example 2.2.2: Expressing Sums and Differences in Scientific Notation

Carry out the appropriate operation and then express the answer in scientific notation.

- $(1.36 \times 10^2) + (4.73 \times 10^3)$
- $(6.923 \times 10^{-3}) - (8.756 \times 10^{-4})$

Solution

Solutions to Example 2.2.2.

	Explanation	Answer
a	Both exponents must have the same value, so these numbers are converted to either $(1.36 \times 10^2) + (47.3 \times 10^2) =$ $(1.36 + 47.3) \times 10^2 = 48.66 \times 10^2$ or $(0.136 \times 10^3) + (4.73 \times 10^3) =$ $(0.136 + 4.73) \times 10^3 = 4.87 \times 10^3$. Choosing either alternative gives the same answer, reported to two decimal places. In converting 48.66×10^2 to scientific notation, n has become more positive by 1 because the value of N has decreased.	4.8
b	Converting the exponents to the same value gives either $(6.923 \times 10^{-3}) - (0.8756 \times 10^{-3}) =$ $(6.923 - 0.8756) \times 10^{-3}$ or $(69.23 \times 10^{-4}) - (8.756 \times 10^{-4}) =$ $(69.23 - 8.756) \times 10^{-4} = 60.474 \times 10^{-4}$. In converting 60.474×10^{-4} to scientific notation, n has become more positive by 1 because the value of N has decreased.	6.0

Multiplication and Division

When multiplying numbers expressed in scientific notation, we multiply the values of N and add together the values of n . Conversely, when dividing, we divide N in the dividend (the number being divided) by N in the divisor (the number by which we are dividing) and then

subtract n in the divisor from n in the dividend. In contrast to addition and subtraction, the exponents do not have to be the same in multiplication and division. Examples of problems involving multiplication and division are shown in Example 2.2.3.

✓ Example 2.2.3: Expressing Products and Quotients in Scientific Notation

Perform the appropriate operation and express your answer in scientific notation.

a. $(6.022 \times 10^{23})(6.42 \times 10^{-2})$

b. $\frac{1.67 \times 10^{-24}}{9.12 \times 10^{-28}}$

c. $\frac{(6.63 \times 10^{-34})(6.0 \times 10)}{8.52 \times 10^{-2}}$

Solution

Solution to Example 2.2.3

Explanation		
a	In multiplication, we add the exponents: $(6.022 \times 10^{23})(6.42 \times 10^{-2}) = (6.022)(6.42) \times 10^{[23+(-2)]} = 38.7 \times 10^{21}$ In converting 38.7×10^{21} to scientific notation, n has become more positive by 1 because the value of N has decreased.	3.87×10^{22}
b	In division, we subtract the exponents: $\frac{1.67 \times 10^{-24}}{9.12 \times 10^{-28}} = \frac{1.67}{9.12} \times 10^{[-24-(-28)]} = 0.183 \times 10^4$ In converting 0.183×10^4 to scientific notation, n has become more negative by 1 because the value of N has increased.	1.83×10^3
c	This problem has both multiplication and division: $\frac{(6.63 \times 10^{-34})(6.0 \times 10)}{8.52 \times 10^{-2}} = \frac{39.78}{8.52} \times 10^{[-34+1-(-2)]}$	4.7×10^{-31}

2.2: Scientific Notation- Writing Large and Small Numbers is shared under a [CC BY-NC-SA 4.0](#) license and was authored, remixed, and/or curated by LibreTexts.

- [2.2: Scientific Notation - Writing Large and Small Numbers](#) by Henry Agnew, Marisa Alviar-Agnew is licensed [CK-12](#). Original source: <https://www.ck12.org/c/chemistry/>.

2.3: Significant Figures- Writing Numbers to Reflect Precision

Template:HideTOC

Learning Objectives

- Identify the number of significant figures in a reported value.

The **significant figures** in a measurement consist of all the certain digits in that measurement plus one uncertain or estimated digit. In the ruler illustration below, the bottom ruler gave a length with 2 significant figures, while the top ruler gave a length with 3 significant figures. In a correctly reported measurement, the final digit is significant but not certain. Insignificant digits are not reported. With either ruler, it would not be possible to report the length at 2.553 cm as there is no possible way that the thousandths digit could be estimated. The 3 is not significant and would not be reported.

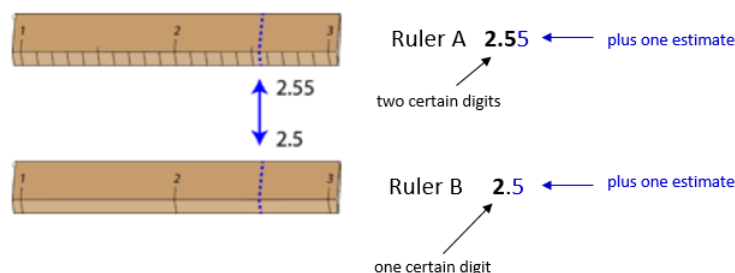


Figure 2.3.1: Measurement with two different rulers.

Ruler A's measurement can be rounded to 2.55, with 2 certain digits, while Ruler B's measurement of 2.5 has 1 certain digit

Measurement Uncertainty

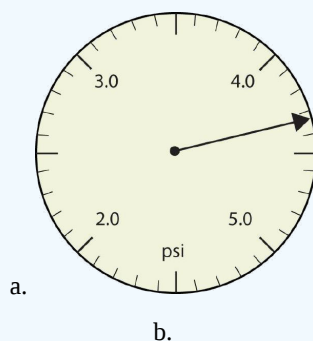
Some error or **uncertainty** always exists in any measurement. The amount of uncertainty depends both upon the skill of the measurer and upon the quality of the measuring tool. While some balances are capable of measuring masses only to the nearest 0.1 g, other highly sensitive balances are capable of measuring to the nearest 0.001 g or even better. Many measuring tools such as rulers and graduated cylinders have small lines which need to be carefully read in order to make a measurement. Figure 2.3.1 shows two rulers making the same measurement of an object (indicated by the blue arrow).

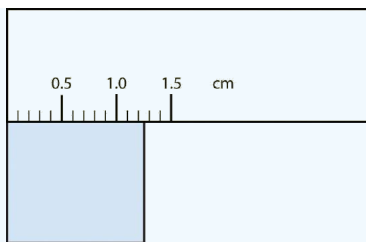
With either ruler, it is clear that the length of the object is between 2 and 3 cm. The bottom ruler contains no millimeter markings. With that ruler, the tenths digit can be estimated and the length may be reported as 2.5 cm. However, another person may judge that the measurement is 2.4 cm or perhaps 2.6 cm. While the 2 is known for certain, the value of the tenths digit is uncertain.

The top ruler contains marks for tenths of a centimeter (millimeters). Now the same object may be measured as 2.55 cm. The measurer is capable of estimating the hundredths digit because he can be certain that the tenths digit is a 5. Again, another measurer may report the length to be 2.54 cm or 2.56 cm. In this case, there are two certain digits (the 2 and the 5), with the hundredths digit being uncertain. Clearly, the top ruler is a superior ruler for measuring lengths as precisely as possible.

✓ Example 2.3.1: Reporting Measurements to the Proper Number of Significant Figures

Use each diagram to report a measurement to the proper number of significant figures.





Ruler measuring a rectangle in units of centimeters, with the rectangle's edge between 1.2 and 1.3 cm marks

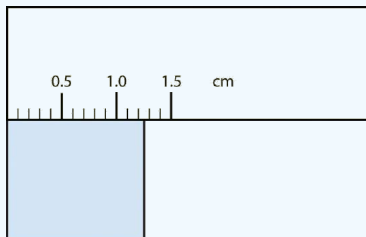
Solutions

Solutions to Example 2.3.1

	Explanation	Answer
a.	The arrow is between 4.0 and 5.0, so the measurement is at least 4.0. The arrow is between the third and fourth small tick marks, so it's at least 0.3. We will have to estimate the last place. It looks like about one-third of the way across the space, so let us estimate the hundredths place as 3. The symbol psi stands for "pounds per square inch" and is a unit of pressure, like air in a tire. The measurement is reported to three significant figures.	4.33 psi
b.	The rectangle is at least 1.0 cm wide but certainly not 2.0 cm wide, so the first significant digit is 1. The rectangle's width is past the second tick mark but not the third; if each tick mark represents 0.1, then the rectangle is at least 0.2 in the next significant digit. We have to estimate the next place because there are no markings to guide us. It appears to be about halfway between 0.2 and 0.3, so we will estimate the next place to be a 5. Thus, the measured width of the rectangle is 1.25 cm. The measurement is reported to three significant figures.	1.25 cm

? Exercise 2.3.1

What would be the reported width of this rectangle?



Answer

1.25 cm

When you look at a reported measurement, it is necessary to be able to count the number of significant figures. The table below details the rules for determining the number of significant figures in a reported measurement. For the examples in the table, assume that the quantities are correctly reported values of a measured quantity.

Table 2.3.1: Significant Figure Rules

Rule	Examples
1. All nonzero digits in a measurement are significant.	<ul style="list-style-type: none"> 237 has three significant figures. 1.897 has four significant figures.
2. Zeros that appear between other nonzero digits (middle zeros) are always significant.	<ul style="list-style-type: none"> 39,004 has five significant figures. 5.02 has three significant figures.
3. Zeros that appear in front of all of the nonzero digits are called leading zeros. Leading zeros are never significant.	<ul style="list-style-type: none"> 0.008 has one significant figure. 0.000416 has three significant figures.
4. Zeros that appear after all nonzero digits are called trailing zeros. A number with trailing zeros that lacks a decimal point may or may not be significant. Use scientific notation to indicate the appropriate number of significant figures.	<ul style="list-style-type: none"> 1400 is ambiguous. <ul style="list-style-type: none"> 1.4×10^3 has two significant figures. 1.40×10^3 three significant figures. 1.400×10^3 has four significant figures.
5. Trailing zeros in a number with a decimal point are significant. This is true whether the zeros occur before or after the decimal point.	<ul style="list-style-type: none"> 620.0 has four significant figures. 19.000 has five significant figures.

Exact Numbers

Integers obtained either by counting objects or from definitions are exact numbers, which are considered to have infinitely many significant figures. If we have counted four objects, for example, then the number 4 has an infinite number of significant figures (i.e., it represents 4.000...). Similarly, 1 foot (ft) is defined to contain 12 inches (in), so the number 12 in the following equation has infinitely many significant figures:

✓ Example 2.3.2

Give the number of significant figures in each. Identify the rule for each.

- 5.87
- 0.031
- 52.90
- 00.2001
- 500
- 6 atoms

Solution

Solution to Example 2.3.2

	Explanation	Answer
a	All three numbers are significant (rule 1).	5.87, three significant figures
b	The leading zeros are not significant (rule 3). The 3 and the 1 are significant (rule 1).	0.031, two significant figures
c	The 5, the 2 and the 9 are significant (rule 1). The trailing zero is also significant (rule 5).	52.90, four significant figures

	Explanation	Answer
d	The leading zeros are not significant (rule 3). The 2 and the 1 are significant (rule 1) and the middle zeros are also significant (rule 2).	00.2001, four significant figures
e	The number is ambiguous. It could have one, two or three significant figures.	500, ambiguous
f	The 6 is a counting number. A counting number is an exact number.	6, infinite

? Exercise 2.3.2

Give the number of significant figures in each.

- 36.7 m
- 0.006606 s
- 2,002 kg
- 306,490,000 people
- 3,800 g

Answer a

three significant figures

Answer b

four significant figures

Answer c

four significant figures

Answer d

infinite (exact number)

Answer e

Ambiguous, could be two, three or four significant figures.

Accuracy and Precision

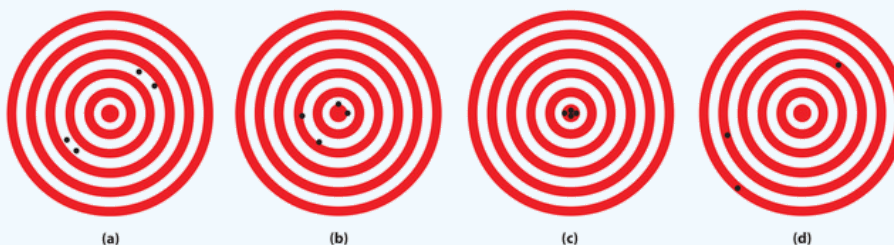
Measurements may be accurate, meaning that the measured value is the same as the true value; they may be precise, meaning that multiple measurements give nearly identical values (i.e., reproducible results); they may be both accurate and precise; or they may be neither accurate nor precise. The goal of scientists is to obtain measured values that are both accurate and precise. The video below demonstrates the concepts of accuracy and precision.



Video 2.3.1: Difference between precision and accuracy.

✓ Example 2.3.3

The following archery targets show marks that represent the results of four sets of measurements.



Which target shows

- a precise, but inaccurate set of measurements?
- a set of measurements that is both precise and accurate?
- a set of measurements that is neither precise nor accurate?

Solution

- Set **(a)** is precise, but inaccurate.
- Set **(c)** is both precise and accurate.
- Set **(d)** is neither precise nor accurate.

Summary

Uncertainty exists in all measurements. The degree of uncertainty is affected in part by the quality of the measuring tool. Significant figures give an indication of the certainty of a measurement. Rules allow decisions to be made about how many digits to use in any given situation.

2.3: Significant Figures- Writing Numbers to Reflect Precision is shared under a [CC BY-NC-SA 4.0](#) license and was authored, remixed, and/or curated by LibreTexts.

- 2.3: Significant Figures - Writing Numbers to Reflect Precision by Henry Agnew, Marisa Alviar-Agnew, Sridhar Budhi is licensed [CK-12](#).
Original source: <https://www.ck12.org/c/chemistry/>.

2.4: Significant Figures in Calculations

Template:HideTOC

Learning Objectives

- Use significant figures correctly in arithmetical operations.

Rounding

Before dealing with the specifics of the rules for determining the significant figures in a calculated result, we need to be able to round numbers correctly. To **round** a number, first decide how many significant figures the number should have. Once you know that, round to that many digits, starting from the left. If the number immediately to the right of the last significant digit is less than 5, it is dropped and the value of the last significant digit remains the same. If the number immediately to the right of the last significant digit is greater than or equal to 5, the last significant digit is increased by 1.

Consider the measurement 207.518 m. Right now, the measurement contains six significant figures. How would we successively round it to fewer and fewer significant figures? Follow the process as outlined in Table 2.4.1.

Table 2.4.1: Rounding examples

Number of Significant Figures	Rounded Value	Reasoning
6	207.518	All digits are significant
5	207.52	8 rounds the 1 up to 2
4	207.5	2 is dropped
3	208	5 rounds the 7 up to 8
2	210	8 is replaced by a 0 and rounds the 0 up to 1
1	200	1 is replaced by a 0

Notice that the more rounding that is done, the less reliable the figure is. An approximate value may be sufficient for some purposes, but scientific work requires a much higher level of detail.

It is important to be aware of significant figures when you are mathematically manipulating numbers. For example, dividing 125 by 307 on a calculator gives 0.4071661238... to an infinite number of digits. But do the digits in this answer have any practical meaning, especially when you are starting with numbers that have only three significant figures each? When performing mathematical operations, there are two rules for limiting the number of significant figures in an answer—one rule is for addition and subtraction, and one rule is for multiplication and division.

*In operations involving significant figures, the answer is reported in such a way that it reflects the reliability of the **least precise** operation. An answer is no more precise than the least precise number used to get the answer.*

Multiplication and Division

For multiplication or division, the rule is to count the number of significant figures in each number being multiplied or divided and then limit the significant figures in the answer to the lowest count. An example is as follows:

$$\underbrace{38.65}_{4 \text{ sig figs}} \times \underbrace{105.93}_{5 \text{ sig figs}} = \underbrace{4,094.1945}_{\text{reduce to 4 sig figs}}$$

The final answer, limited to four significant figures, is 4,094. The first digit dropped is 1, so we do not round up.

Scientific notation provides a way of communicating significant figures without ambiguity. You simply include all the significant figures in the leading number. For example, the number 450 has two significant figures and would be written in scientific notation as 4.5×10^2 , whereas 450.0 has four significant figures and would be written as 4.500×10^2 . In scientific notation, all significant figures are listed explicitly.

✓ Example 2.4.1

Write the answer for each expression using scientific notation with the appropriate number of significant figures.

a. 23.096×90.300

b. 125×9.000

Solution

a

Explanation	Answer
The calculator answer is 2,085.5688, but we need to round it to five significant figures. Because the first digit to be dropped (in the tenths place) is greater than 5, we round up to 2,085.6.	2.0856×10^3

b

Explanation	Answer
The calculator gives 1,125 as the answer, but we limit it to three significant figures.	1.13×10^3

Addition and Subtraction

How are significant figures handled in calculations? It depends on what type of calculation is being performed. If the calculation is an addition or a subtraction, the rule is as follows: limit the reported answer to the rightmost column that all numbers have significant figures in common. For example, if you were to add 1.2 and 4.71, we note that the first number stops its significant figures in the tenths column, while the second number stops its significant figures in the hundredths column. We therefore limit our answer to the tenths column.

$$\begin{array}{r}
 1.2 \\
 \underline{4.71} \\
 5.91 \\
 \uparrow \text{limit final answer to the tenths column: } 5.9
 \end{array}$$

We drop the last digit—the 1—because it is not significant to the final answer.

The dropping of positions in sums and differences brings up the topic of rounding. Although there are several conventions, in this text we will adopt the following rule: the final answer should be rounded up if the first dropped digit is 5 or greater, and rounded down if the first dropped digit is less than 5.

$$\begin{array}{r}
 77.2 \\
 \underline{10.46} \\
 87.66 \\
 \uparrow \text{limit final answer to the tenths column and round up: } 87.7
 \end{array}$$

✓ Example 2.4.2

- a. $13.77 + 908.226$
 b. $1,027 + 611 + 363.06$

Solution

a

Explanation	Answer
The calculator answer is 921.996, but because 13.77 has its farthest-right significant figure in the hundredths place, we need to round the final answer to the hundredths position. Because the first digit to be dropped (in the thousandths place) is greater than 5, we round up to 922.00	$922.00 = 9.2200 \times 10^2$

b

Explanation	Answer
The calculator gives 2,001.06 as the answer, but because 611 and 1027 has its farthest-right significant figure in the ones place, the final answer must be limited to the ones position.	$2,001.06 = 2.001 \times 10^3$

? Exercise 2.4.2

Write the answer for each expression using scientific notation with the appropriate number of significant figures.

- a. $217 \div 903$
 b. $13.77 + 908.226 + 515$
 c. $255.0 - 99$
 d. 0.00666×321

Answer a:

$$0.240 = 2.40 \times 10^{-1}$$

Answer b:

$$1,437 = 1.437 \times 10^3$$

Answer c:

$$156 = 1.56 \times 10^2$$

Answer d:

$$2.14 = 2.14 \times 10^0$$

Remember that calculators do not understand significant figures. *You* are the one who must apply the rules of significant figures to a result from your calculator.

Calculations Involving Multiplication/Division and Addition/Subtraction

In practice, chemists generally work with a calculator and carry all digits forward through subsequent calculations. When working on paper, however, we often want to minimize the number of digits we have to write out. Because successive rounding can compound inaccuracies, intermediate rounding needs to be handled correctly. When working on paper, always round an intermediate result so as to retain at least one more digit than can be justified and carry this number into the next step in the calculation. The final answer is then rounded to the correct number of significant figures at the very end.



Video 2.4.1: Significant figures in mixed operations (<https://www.youtube.com/watch?v=yBntMndXQWA>).



Video 2.4.2: https://www.youtube.com/watch?v=__csP0NtdGI

In the worked examples in this text, we will often show the results of intermediate steps in a calculation. In doing so, we will show the results to only the correct number of significant figures allowed for that step, in effect treating each step as a separate calculation. This procedure is intended to reinforce the rules for determining the number of significant figures, but in some cases it may give a final answer that differs in the last digit from that obtained using a calculator, where all digits are carried through to the last step.

✓ Example 2.4.3

- a. $2(1.008 \text{ g}) + 15.99 \text{ g}$
- b. $137.3 \text{ s} + 2(35.45 \text{ s})$
- c. $\frac{118.7 \text{ g}}{2} - 35.5 \text{ g}$

Solution

a.

Explanation	Answer

$$2(1.008 \text{ g}) + 15.99 \text{ g} =$$

Perform multiplication first.

$$2(1.008 \text{ g } 4 \text{ sig figs}) = 2.016 \text{ g } 4 \text{ sig figs}$$

The number with the least number of significant figures is 1.008 g; *the number 2 is an exact number and therefore has an infinite number of significant figures.*

Then, perform the addition.

$$2.016 \text{ g } \textit{thousandths place} + 15.99 \text{ g } \textit{hundredths place (least precise)} = 18.006 \text{ g}$$

Round the final answer.

Round the final answer to the hundredths place since 15.99 has its farthest right significant figure in the hundredths place (least precise).

18.01 g (rounding up)

b.

Explanation	Answer
$137.3 \text{ s} + 2(35.45 \text{ s}) =$ Perform multiplication first. $2(35.45 \text{ s } 4 \text{ sig figs}) = 70.90 \text{ s } 4 \text{ sig figs}$ The number with the least number of significant figures is 35.45; <i>the number 2 is an exact number and therefore has an infinite number of significant figures.</i> Then, perform the addition. $137.3 \text{ s } \textit{tenths place (least precise)} + 70.90 \text{ s } \textit{hundredths place} = 208.20 \text{ s}$ Round the final answer. Round the final answer to the tenths place based on 137.3 s.	208.2 s

c.

Explanation	Answer
$\frac{118.7 \text{ g}}{2} - 35.5 \text{ g} =$ Perform division first. $\frac{118.7 \text{ g}}{2} 4 \text{ sig figs} = 59.35 \text{ g } 4 \text{ sig figs}$ The number with the least number of significant figures is 118.7 g; <i>the number 2 is an exact number and therefore has an infinite number of significant figures.</i> Perform subtraction next. $59.35 \text{ g } \textit{hundredths place} - 35.5 \text{ g } \textit{tenths place (least precise)} = 23.85 \text{ g}$ Round the final answer. Round the final answer to the tenths place based on 35.5 g.	23.9 g (rounding up)

? Exercise 2.4.3

Complete the calculations and report your answers using the correct number of significant figures.

- a. $5(1.008\text{ s}) - 10.66\text{ s}$
- b. $99.0\text{ cm} + 2(5.56\text{ cm})$

Answer a

-5.62 s

Answer b

110.2 cm

Summary

- Rounding
 - If the number to be dropped is greater than or equal to 5, increase the number to its left by 1 (e.g. 2.9699 rounded to three significant figures is 2.97).
 - If the number to be dropped is less than 5, there is no change (e.g. 4.00443 rounded to four significant figures is 4.004).
- The rule in multiplication and division is that the final answer should have the same number of significant figures as there are in the number with the fewest significant figures.
- The rule in addition and subtraction is that the answer is given the same number of decimal places as the term with the fewest decimal places.

2.4: Significant Figures in Calculations is shared under a [CC BY-NC-SA 4.0](#) license and was authored, remixed, and/or curated by LibreTexts.

- **2.4: Significant Figures in Calculations** by Henry Agnew, Marisa Alviar-Agnew is licensed [CK-12](#). Original source: <https://www.ck12.org/c/chemistry/>.

2.5: The Basic Units of Measurement

Template:HideTOC

Learning Objectives

- State the different measurement systems used in chemistry.
- Describe how prefixes are used in the metric system and identify how the prefixes milli-, centi-, and kilo- compare to the base unit.

How long is a yard? It depends on whom you ask and when you asked the question. Today we have a standard definition of the yard, which you can see marked on every football field. If you move the ball ten yards, you get a first down and it does not matter whether you are playing in Los Angeles, Dallas, or Green Bay. But at one time that yard was arbitrarily defined as the distance from the tip of the king's nose to the end of his outstretched hand. Of course, the problem there is simple: new king, new distance (and then you have to re-mark all of those football fields).



Figure 2.5.1: Meter standard (left) and Kilogram standard (right).

SI Base Units

All measurements depend on the use of units that are well known and understood. The **English system** of measurement units (inches, feet, ounces, etc.) are not used in science because of the difficulty in converting from one unit to another. The **metric system** is used because all metric units are based on multiples of 10, making conversions very simple. The metric system was originally established in France in 1795. The **International System of Units** is a system of measurement based on the metric system. The acronym **SI** is commonly used to refer to this system and stands for the French term, *Le Système International d'Unités*. The SI was adopted by international agreement in 1960 and is composed of seven base units in Table 2.5.1.

Table 2.5.1: SI Base Units of Measurement

Quantity	SI Base Unit	Symbol
Length	meter	m
Mass	kilogram	kg
Temperature	kelvin	K
Time	second	s
Amount of a Substance	mole	mol
Electric Current	ampere	A
Luminous Intensity	candela	cd

The first units are frequently encountered in chemistry. All other measurement quantities, such as volume, force, and energy, can be derived from these seven base units.

Unfortunately, the Metric System is Not Ubiquitous

The map below shows the adoption of the SI units in countries around the world. The United States has legally adopted the metric system for measurements, but does not use it in everyday practice. Great Britain and much of Canada use a combination of metric and imperial units.

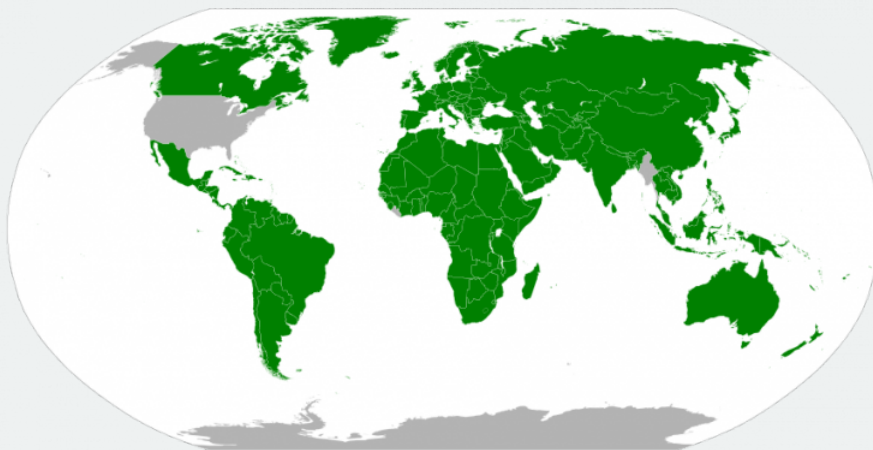


Figure 2.5.1: Areas of world using metric system (in green). Only a few countries are slow or resistant to adoption including the United States.

Prefix Multipliers

Conversions between metric system units are straightforward because the system is based on powers of ten. For example, meters, centimeters, and millimeters are all metric units of length. There are 10 millimeters in 1 centimeter and 100 centimeters in 1 meter. **Metric prefixes** are used to distinguish between units of different size. These prefixes all derive from either Latin or Greek terms. For example, *mega* comes from the Greek word $\mu\epsilon\gamma\alpha\varsigma$, meaning "great". Table 2.5.2 lists the most common metric prefixes and their relationship to the central unit that has no prefix. Length is used as an example to demonstrate the relative size of each prefixed unit.

Table 2.5.2: SI Prefixes

Prefix	Unit Abbreviation	Meaning	Example
giga	G	1,000,000,000	1 gigameter (Gm) = 10^9 m
mega	M	1,000,000	1 megameter (Mm) = 10^6 m
kilo	k	1,000	1 kilometer (km) = 1,000 m
hecto	h	100	1 hectometer (hm) = 100 m
deka	da	10	1 dekameter (dam) = 10 m
		1	1 meter (m)
deci	d	1/10	1 decimeter (dm) = 0.1 m
centi	c	1/100	1 centimeter (cm) = 0.01 m
milli	m	1/1,000	1 millimeter (mm) = 0.001 m
micro	μ	1/1,000,000	1 micrometer (μ m) = 10^{-6} m
nano	n	1/1,000,000,000	1 nanometer (nm) = 10^{-9} m
pico	p	1/1,000,000,000,000	1 picometer (pm) = 10^{-12} m

There are a couple of odd little practices with the use of metric abbreviations. Most abbreviations are lowercase. We use "m" for meter and not "M". However, when it comes to volume, the base unit "liter" is abbreviated as "L" and not "l". So we would write 3.5 milliliters as 3.5 mL.

As a practical matter, whenever possible you should express the units in a small and manageable number. If you are measuring the weight of a material that weighs 6.5 kg, this is easier than saying it weighs 6500 g or 0.65 dag. All three are correct, but the kg units in this case make for a small and easily managed number. However, if a specific problem needs grams instead of kilograms, go with the grams for consistency.

✓ Example 2.5.1: Unit Abbreviations

Give the abbreviation for each unit and define the abbreviation in terms of the base unit.

- a. kiloliter
- b. microsecond
- c. decimeter
- d. nanogram

Solutions

Solutions to Example 2.5.1

	Explanation	Answer
a	The prefix kilo means "1,000 ×," so 1 kL equals 1,000 L.	kL
b	The prefix micro implies 1/1,000,000th of a unit, so 1 μ s equals 0.000001 s.	μ s
c	The prefix deci means 1/10th, so 1 dm equals 0.1 m.	dm
d	The prefix nano means 1/1000000000, so a nanogram is equal to 0.000000001 g.	ng

? Exercise 2.5.1

Give the abbreviation for each unit and define the abbreviation in terms of the base unit.

- a. kilometer
- b. milligram
- c. nanosecond
- d. centiliter

Answer a:

km

Answer b:

mg

Answer c:

ns

Answer d:

cL

Summary

- Metric prefixes derive from Latin or Greek terms. The prefixes are used to make the units manageable.
- The SI system is based on multiples of ten. There are seven basic units in the SI system. Five of these units are commonly used in chemistry.

2.5: The Basic Units of Measurement is shared under a [CC BY-NC-SA 4.0](#) license and was authored, remixed, and/or curated by LibreTexts.

- **2.5: The Basic Units of Measurement** by Henry Agnew, Marisa Alviar-Agnew is licensed [CK-12](#). Original source: <https://www.ck12.org/c/chemistry/>.

2.6: Problem Solving and Unit Conversions

Template:HideTOC

Learning Objectives

- To convert a value reported in one unit to a corresponding value in a different unit using conversion factors.

During your studies of chemistry (and physics also), you will note that mathematical equations are used in many different applications. Many of these equations have a number of different variables with which you will need to work. You should also note that these equations will often require you to use measurements with their units. Algebra skills become very important here!

Converting Between Units with Conversion Factors

A **conversion factor** is a factor used to convert one unit of measurement into another. A simple conversion factor can convert meters into centimeters, or a more complex one can convert miles per hour into meters per second. Since most calculations require measurements to be in certain units, you will find many uses for conversion factors. Always remember that a conversion factor has to represent a fact; this fact can either be simple or more complex. For instance, you already know that 12 eggs equal 1 dozen. A more complex fact is that the speed of light is 1.86×10^5 miles/sec. Either one of these can be used as a conversion factor depending on what type of calculation you are working with (Table 2.6.1).

Table 2.6.1: Conversion Factors from SI units to English Units

English Units	Metric Units	Quantity
1 ounce (oz)	28.35 grams (g)	*mass
1 fluid ounce (oz)	29.6 mL	volume
2.205 pounds (lb)	1 kilogram (kg)	*mass
1 inch (in)	2.54 centimeters (cm)	length
0.6214 miles (mi)	1 kilometer (km)	length
1 quarter (qt)	0.95 liters (L)	volume

*Pounds and ounces are technically units of force, not mass, but this fact is often ignored by the non-scientific community.

Of course, there are other ratios which are not listed in Table 2.6.1. They may include:

- Ratios embedded in the text of the problem (using words such as *per* or *in each*, or using symbols such as / or %).
- Conversions in the metric system, as covered earlier in this chapter.
- Common knowledge ratios (such as 60 seconds = 1 minute).

If you learned the SI units and prefixes described, then you know that 1 cm is 1/100th of a meter.

$$1 \text{ cm} = \frac{1}{100} \text{ m} = 10^{-2} \text{ m}$$

or

$$100 \text{ cm} = 1 \text{ m}$$

Suppose we divide both sides of the equation by 1m (both the number *and* the unit):

$$\frac{100 \text{ cm}}{1 \text{ m}} = \frac{1 \text{ m}}{1 \text{ m}}$$

As long as we perform the same operation on both sides of the equals sign, the expression remains an equality. Look at the right side of the equation; it now has the same quantity in the numerator (the top) as it has in the denominator (the bottom). Any fraction that has the same quantity in the numerator and the denominator has a value of 1:

$$\frac{100 \text{ cm}}{1 \text{ m}} = \frac{1000 \text{ mm}}{1 \text{ m}} = \frac{1 \times 10^6 \mu\text{m}}{1 \text{ m}} = 1$$

We know that 100 cm is 1 m, so we have the same quantity on the top and the bottom of our fraction, although it is expressed in different units.

Performing Dimensional Analysis

Dimensional analysis is amongst the most valuable tools that physical scientists use. Simply put, it is the conversion between an amount in one unit to the corresponding amount in a desired unit using various conversion factors. This is valuable because certain measurements are more accurate or easier to find than others. The use of units in a calculation to ensure that we obtain the final proper units is called *dimensional analysis*.

Here is a simple example. How many centimeters are there in 3.55 m? Perhaps you can determine the answer in your head. If there are 100 cm in every meter, then 3.55 m equals 355 cm. To solve the problem more formally with a conversion factor, we first write the quantity we are given, 3.55 m. Then we multiply this quantity by a conversion factor, which is the same as multiplying it by 1.

We can write 1 as $\frac{100 \text{ cm}}{1 \text{ m}}$ and multiply:

$$3.55 \text{ m} \times \frac{100 \text{ cm}}{1 \text{ m}}$$

The 3.55 m can be thought of as a fraction with a 1 in the denominator. Because m, the abbreviation for meters, occurs in both the numerator *and* the denominator of our expression, they cancel out:

$$\frac{3.55 \cancel{\text{ m}}}{1} \times \frac{100 \text{ cm}}{1 \cancel{\text{ m}}}$$

The final step is to perform the calculation that remains once the units have been canceled:

$$\frac{3.55}{1} \times \frac{100 \text{ cm}}{1} = 355 \text{ cm}$$

In the final answer, we omit the 1 in the denominator. Thus, by a more formal procedure, we find that 3.55 m equals 355 cm. A generalized description of this process is as follows:

$$\text{quantity (in old units)} \times \text{conversion factor} = \text{quantity (in new units)}$$

You may be wondering why we use a seemingly complicated procedure for a straightforward conversion. In later studies, the conversion problems you encounter *will not always be so simple*. If you master the technique of applying conversion factors, you will be able to solve a large variety of problems.

In the previous example, we used the fraction $\frac{100 \text{ cm}}{1 \text{ m}}$ as a conversion factor. Does the conversion factor $\frac{1 \text{ m}}{100 \text{ cm}}$ also equal 1?

Yes, it does; it has the same quantity in the numerator as in the denominator (except that they are expressed in different units). Why did we not use *that* conversion factor? If we had used the second conversion factor, the original unit would not have canceled, and the result would have been meaningless. Here is what we would have gotten:

$$3.55 \text{ m} \times \frac{1 \text{ m}}{100 \text{ cm}} = 0.0355 \frac{\text{m}^2}{\text{cm}}$$

For the answer to be meaningful, we have to *construct the conversion factor in a form that causes the original unit to cancel out*. Figure 2.6.1 shows a concept map for constructing a proper conversion.

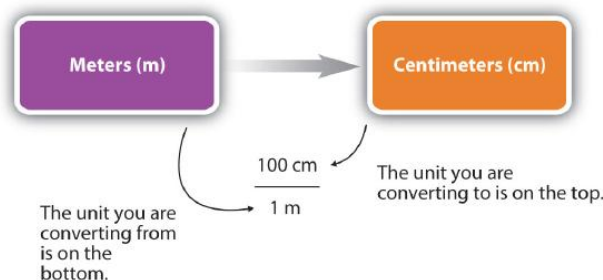


Figure 2.6.1: A Concept Map for Conversions. This is how you construct a conversion factor to convert from one unit to another. Converting meters to centimeters: the unit you are converting is on the bottom of the fraction, and the unit to convert to is on top

General Steps in Performing Dimensional Analysis

1. Identify the **"given"** information in the problem. Look for a number with units to start this problem with.
2. What is the problem asking you to **"find"**? In other words, what unit will your answer have?
3. Use **ratios** and conversion factors to cancel out the units that aren't part of your answer, and leave you with units that are part of your answer.
4. When your units cancel out correctly, you are ready to do the **math**. You are multiplying fractions, so you multiply the top numbers and divide by the bottom numbers in the fractions.

Significant Figures in Conversions

How do conversion factors affect the determination of significant figures?

- Numbers in conversion factors based on prefix changes, such as kilograms to grams, are *not* considered in the determination of significant figures in a calculation because the numbers in such conversion factors are exact.
- Exact numbers are defined or counted numbers, not measured numbers, and can be considered as having an infinite number of significant figures. (In other words, 1 kg is exactly 1,000 g, by the definition of kilo-.)
- Counted numbers are also exact. If there are 16 students in a classroom, the number 16 is exact.
- In contrast, conversion factors that come from measurements (such as density, as we will see shortly) or that are approximations have a limited number of significant figures and should be considered in determining the significant figures of the final answer.

✓ Example 2.6.1

Steps for Problem Solving for Example 2.6.1 and 2.6.2

	Example 2.6.1	Example 2.6.2
Steps for Problem Solving	The average volume of blood in an adult male is 4.7 L. What is this volume in milliliters?	A hummingbird can flap its wings once in 18 ms. How many seconds are in 18 ms?
Identify the "given" information and what the problem is asking you to "find."	Given: 4.7 L Find: mL	Given: 18 ms Find: s
List other known quantities.	$1 \text{ mL} = 10^{-3} \text{ L}$	$1 \text{ ms} = 10^{-3} \text{ s}$
Prepare a concept map and use the proper conversion factor.		

Cancel units and calculate.	$4.7 \cancel{\mu} \times \frac{1 \text{ mL}}{10^{-3} \cancel{\mu}} = 4,700 \text{ mL}$ <p>or</p> $4.7 \cancel{\mu} \times \frac{1,000 \text{ mL}}{1 \cancel{\mu}} = 4,700 \text{ mL}$ <p>or</p> $4.7 \times 10^3 \text{ 2SF, not ambiguous}$	$18 \cancel{\text{ms}} \times \frac{10^{-3} \text{ s}}{1 \cancel{\text{ms}}} = 0.018 \text{ s}$ <p>or</p> $18 \cancel{\text{ms}} \times \frac{1 \text{ s}}{1,000 \cancel{\text{ms}}} = 0.018 \text{ s}$
Think about your result.	The amount in mL should be 1000 times larger than the given amount in L.	The amount in s should be 1/1000 the given amount in ms.

? Exercise 2.6.1

Perform each conversion.

- 101,000 ns to seconds
- 32.08 kg to grams
- 1.53 grams to cg

Answer a:

$$1.01000 \times 10^{-4} \text{ s}$$

Answer b:

$$3.208 \times 10^4 \text{ g}$$

Answer c:

$$1.53 \times 10^2 \text{ cg}$$

Summary

- Conversion factors are used to convert one unit of measurement into another.
- Dimensional analysis (unit conversions) involves the use of conversion factors that will cancel unwanted units and produce the appropriate units.

2.6: Problem Solving and Unit Conversions is shared under a [CC BY-NC-SA 4.0](#) license and was authored, remixed, and/or curated by LibreTexts.

- 2.6: Problem Solving and Unit Conversions by Henry Agnew, Marisa Alviar-Agnew is licensed [CC BY-NC-SA 3.0](#).

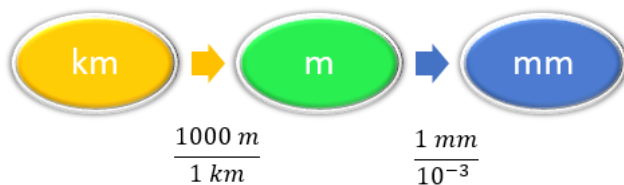
2.7: Solving Multistep Conversion Problems

Multiple Conversions

Sometimes you will have to perform more than one conversion to obtain the desired unit. For example, suppose you want to convert 54.7 km into millimeters. We will set up a series of conversion factors so that each conversion factor produces the next unit in the sequence. We first convert the given amount in km to the base unit which is meters. We know that 1,000 m = 1 km.

Then we convert meters to mm, remembering that 1 mm = 10^{-3} m.

Concept Map



Calculation

$$54.7 \text{ km} \times \frac{1,000 \text{ m}}{1 \text{ km}} \times \frac{1 \text{ mm}}{10^{-3} \text{ m}} = 54,700,000 \text{ mm} \quad (2.7.1)$$

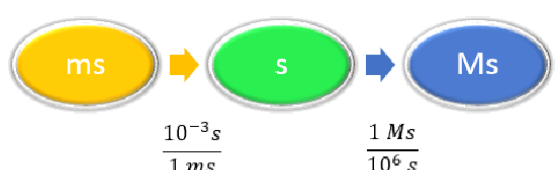
$$= 5.47 \times 10^7 \text{ mm} \quad (2.7.2)$$

In each step, the previous unit is canceled and the next unit in the sequence is produced, each successive unit canceling out until only the unit needed in the answer is left.

Example 2.7.1: Unit Conversion

Convert 58.2 ms to megaseconds in one multistep calculation.


Solution

Steps for Problem Solving	Unit Conversion
Identify the "given" information and what the problem is asking you to "find."	Given: 58.2 ms Find: Ms
List other known quantities	$1 \text{ ms} = 10^{-3} \text{ s}$ $1 \text{ Ms} = 10^6 \text{ s}$
Prepare a concept map	 <pre> graph LR ms((ms)) -- "10^-3 s / 1 ms" --> s((s)) s -- "1 Ms / 10^6 s" --> Ms((Ms)) </pre>
Calculate	$58.2 \text{ ms} \times \frac{10^{-3} \text{ s}}{1 \text{ ms}} \times \frac{1 \text{ Ms}}{1,000,000 \text{ s}} = 0.0000000582 \text{ Ms}$ $= 5.82 \times 10^{-8} \text{ Ms}$ <p>Neither conversion factor affects the number of significant figures in the final answer.</p>

Example 2.7.2: Unit Conversion

How many seconds are in a day?

Solution

Steps for Problem Solving	Unit Conversion
Identify the "given" information and what the problem is asking you to "find."	Given: 1 day Find: s
List other known quantities	1 day = 24 hours 1 hour = 60 minutes 1 minute = 60 seconds
Prepare a concept map	 $\frac{24 \text{ hr}}{1 \text{ day}} \quad \frac{60 \text{ min}}{1 \text{ hr}}$
Calculate	$1 \text{ d} \times \frac{24 \text{ hr}}{1 \text{ d}} \times \frac{60 \text{ min}}{1 \text{ hr}} \times \frac{60 \text{ s}}{1 \text{ min}} = 86,400 \text{ s}$

Exercise 2.7.1

Perform each conversion in one multistep calculation.

- 43.007 ng to kg
- 1005 in to ft
- 12 mi to km

Answer a:

$$4.3007 \times 10^{-14} \text{ kg}$$

Answer b:

$$83.75 \text{ ft}$$

Answer c:

$$19 \text{ km}$$

Career Focus: Pharmacist

A pharmacist dispenses drugs that have been prescribed by a doctor. Although that may sound straightforward, pharmacists in the United States must hold a doctorate in pharmacy and be licensed by the state in which they work. Most pharmacy programs require four years of education in a specialty pharmacy school. Pharmacists must know a lot of chemistry and biology so they can understand the effects that drugs (which are chemicals, after all) have on the body. Pharmacists can advise physicians on the selection, dosage, interactions, and side effects of drugs. They can also advise patients on the proper use of their medications, including when and how to take specific drugs properly. Pharmacists can be found in drugstores, hospitals, and other medical facilities. Curiously, an outdated name for pharmacist is *chemist*, which was used when pharmacists formerly did a lot of drug preparation, or *compounding*. In modern times, pharmacists rarely compound their own drugs, but their knowledge of the sciences, including chemistry, helps them provide valuable services in support of everyone's health.



A woman consulting with a pharmacist. This image was released by the National Cancer Institute, an agency part of the National Institutes of Health. Image used with permission (Public Domain; Rhoda Baer (Photographer) via NIH).

Summary

In multistep conversion problems, the previous unit is canceled for each step and the next unit in the sequence is produced, each successive unit canceling out until only the unit needed in the answer is left.

Contributors and Attributions

- Anonymous

2.7: Solving Multistep Conversion Problems is shared under a [CC BY-NC-SA 4.0](https://creativecommons.org/licenses/by-nc-sa/4.0/) license and was authored, remixed, and/or curated by LibreTexts.

2.8: Units Raised to a Power

Template:HideTOC

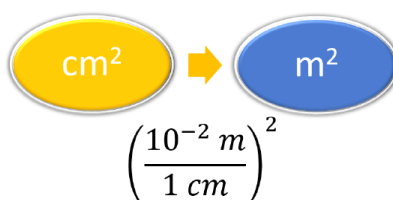
Skills to Develop

- To convert a value reported in one unit raised to a power of 10 to a corresponding value in a different unit raised to the same power of 10 using conversion factors.

Conversion factors for area and volume can also be produced by the dimensional analysis method. Just remember that if a quantity is raised to a power of 10 both the number and the unit must be raised to the same power of 10. For example to convert 1500 cm^2 to m^2 , we need to start with the relationship between centimeter and meter. We know that $1 \text{ cm} = 10^{-2} \text{ m}$ or $100 \text{ cm} = 1 \text{ m}$, but since we are given the quantity in 1500 cm^2 , then we have to use the relationship:

$$1 \text{ cm}^2 = (10^{-2} \text{ m})^2 = 10^{-4} \text{ m}^2 \quad (2.8.1)$$

CONCEPT MAP



CALCULATION

$$1500 \text{ cm}^2 \times \left(\frac{10^{-2} \text{ m}}{1 \text{ cm}} \right)^2 = 0.15 \text{ m}^2 \quad (2.8.2)$$

or

$$1500 \text{ cm}^2 \times \left(\frac{1 \text{ m}}{100 \text{ cm}} \right)^2 = 0.15 \text{ m}^2 \quad (2.8.3)$$

or

$$1500 \text{ cm}^2 \times \frac{1 \text{ m}^2}{10,000 \text{ cm}^2} = 0.15 \text{ m}^2 \quad (2.8.4)$$

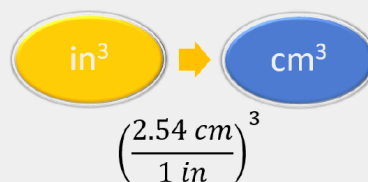
Example 2.8.1: Volume of a sphere

What is the volume of a sphere (radius 4.30 inches) in cubic cm (cm^3)?

Solution

Steps for Problem Solving	What is the volume of a sphere (radius 4.30 inches) in cubic cm (cm^3)?
Identify the "given" information and what the problem is asking you to "find."	Given: radius = 4.30 in Find: cm^3 (volume)
Determine other known quantities	Volume of a sphere: $V = \frac{4}{3} \times \pi \times r^3$ $= \frac{4}{3} \times 3.1416 \times (4.30 \text{ in})^3$ $= 333.04 \text{ in}^3$

Prepare a concept map



Calculate

$$333.04 \cancel{\text{ in}^3} \left(\frac{2.54 \cancel{\text{ cm}}}{1 \cancel{\text{ in}}} \right)^3 = 5.46 \times 10^3 \text{ cm}^3$$

Think about your result

A centimeter is a smaller unit than an inch, so the answer in cubic centimeter is larger than the given value in cubic inch.

Exercise 2.8.1

Lake Tahoe has a surface area of 191 square miles. What is the area in square km (km^2)?

Answer:

495 km^2

[Template:HideTOC](#)

2.8: Units Raised to a Power is shared under a [CC BY-NC-SA 4.0](#) license and was authored, remixed, and/or curated by LibreTexts.

2.9: Density

Template:HideTOC

Learning Objectives

- Define density.
- Use density as a conversion factor.

Density (ρ) is a physical property found by dividing the mass of an object by its volume. Regardless of the sample size, density is always constant. For example, the density of a pure sample of tungsten is always 19.25 grams per cubic centimeter. This means that whether you have one gram or one kilogram of the sample, the density will never vary. The equation, as we already know, is as follows:

$$\text{Density} = \frac{\text{Mass}}{\text{Volume}}$$

or just

$$\rho = \frac{m}{V} \quad (2.9.1)$$

Based on this equation, it's clear that density can, and does, vary from element to element and substance to substance due to differences in the relationship of mass and volume. Pure water, for example, has a density of 0.998 g/cm³ at 25° C. The average densities of some common substances are in Table 2.9.1. Notice that corn oil has a lower mass to volume ratio than water. This means that when added to water, corn oil will “float.”

Table 2.9.1: Densities of Common Substances

Substance	Density at 25°C (g/cm ³)
blood	1.035
body fat	0.918
whole milk	1.030
corn oil	0.922
mayonnaise	0.910
honey	1.420

Density can be measured for all substances—solids, liquids and gases. For solids and liquids, density is often reported using the units of g/cm³. Densities of gases, which are significantly lower than the densities of solids and liquids, are often given using units of g/L.

✓ Example 2.9.1: Ethyl Alcohol

Calculate the density of a 30.2 mL sample of ethyl alcohol with a mass of 23.71002 g

Solution

This is a direct application of Equation 2.9.1:

$$\rho = \frac{23.71002 \text{ g}}{30.2 \text{ mL}} = 0.785 \text{ g/mL}$$

? Exercise 2.9.1

- Find the density (in kg/L) of a sample that has a volume of 36.5 L and a mass of 10.0 kg.
- If you have a 2.130 mL sample of acetic acid with mass 0.002234 kg, what is the density in kg/L?

Answer a

$$0.274 \text{ kg/L}$$

Answer b

$$1.049 \text{ kg/L}$$

Density as a Conversion Factor

Conversion factors can also be constructed for converting between different kinds of units. For example, density can be used to convert between the mass and the volume of a substance. Consider mercury, which is a liquid at room temperature and has a density of 13.6 g/mL. The density tells us that 13.6 g of mercury have a volume of 1 mL. We can write that relationship as follows:

$$13.6 \text{ g mercury} = 1 \text{ mL mercury}$$

This relationship can be used to construct two conversion factors:

$$\frac{13.6 \text{ g}}{1 \text{ mL}} = 1$$

and

$$\frac{1 \text{ mL}}{13.6 \text{ g}} = 1$$

Which one do we use? It depends, as usual, on the units we need to cancel and introduce. For example, suppose we want to know the mass of 2.0 mL of mercury. We would use the conversion factor that has milliliters on the bottom (so that the milliliter unit cancels) and grams on top, so that our final answer has a unit of mass:

$$2.0 \text{ mL} \times \frac{13.6 \text{ g}}{1 \text{ mL}} = 27.2 \text{ g} = 27 \text{ g}$$

In the last step, we limit our final answer to two significant figures because the volume quantity has only two significant figures; the 1 in the volume unit is considered an exact number, so it does not affect the number of significant figures. The other conversion factor would be useful if we were given a mass and asked to find volume, as the following example illustrates.

Density can be used as a conversion factor between mass and volume.

✓ Example 2.9.2: Mercury Thermometer Steps for Problem Solving

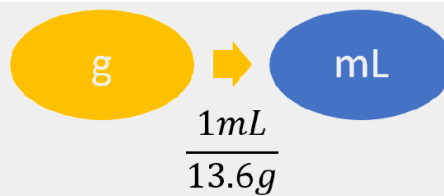
A mercury thermometer for measuring a patient's temperature contains 0.750 g of mercury. What is the volume of this mass of mercury?

Solution

Solution to Example 2.9.2

Steps for Problem Solving	Unit Conversion
Identify the "given" information and what the problem is asking you to "find."	Given: 0.750 g Find: mL
List other known quantities.	13.6 g/mL (density of mercury)

Prepare a concept map.



Calculate.

$$0.750 \cancel{\text{ g}} \times \frac{1 \text{ mL}}{13.6 \cancel{\text{ g}}} = 0.055147 \dots \text{ mL} \approx 0.0551 \text{ mL}$$

We have limited the final answer to three significant figures.

? Exercise 2.9.2

What is the volume of 100.0 g of air if its density is 1.3 g/L?

Answer

77 L

Summary

- Density is defined as the mass of an object divided by its volume.
- Density can be used as a conversion factor between mass and volume.

Contributions & Attributions

2.9: Density is shared under a [CC BY-NC-SA 4.0](https://creativecommons.org/licenses/by-nc-sa/4.0/) license and was authored, remixed, and/or curated by LibreTexts.

- 2.9: Density by Henry Agnew, Marisa Alviar-Agnew is licensed [CK-12](https://creativecommons.org/licenses/by-nc-sa/4.0/). Original source: <https://www.ck12.org/c/chemistry/>.

2.10: Numerical Problem-Solving Strategies and the Solution Map

[Template:HideTOC](#)

2.10: Numerical Problem-Solving Strategies and the Solution Map

2.10: Numerical Problem-Solving Strategies and the Solution Map is shared under a [CC BY-NC-SA 4.0](#) license and was authored, remixed, and/or curated by LibreTexts.

2.11: Taking Measurements

Template:HideTOC

Learning Objectives

- Express quantities properly, using a number and a unit.

A coffee maker's instructions tell you to fill the coffee pot with 4 cups of water and to use 3 scoops of coffee. When you follow these instructions, you are measuring. When you visit a doctor's office, a nurse checks your temperature, height, weight, and perhaps blood pressure (Figure 2.11.1); the nurse is also measuring.



Figure 2.11.1: Measuring Blood Pressure. A nurse or a doctor measuring a patient's blood pressure is taking a measurement. (GFDL; Pia von Lützu).

Chemists measure the properties of matter and express these measurements as quantities. A quantity is an amount of something and consists of a number and a unit. The number tells us how many (or how much), and the unit tells us what the scale of measurement is. For example, when a distance is reported as "5 kilometers," we know that the quantity has been expressed in units of kilometers and that the number of kilometers is 5. If you ask a friend how far they walk from home to school, and the friend answers "12" without specifying a unit, you do not know whether your friend walks 12 kilometers, 12 miles, 12 furlongs, or 12 yards. *Both a number and a unit must be included to express a quantity properly.*

To understand chemistry, we need a clear understanding of the units chemists work with and the rules they follow for expressing numbers. The next two sections examine the rules for expressing numbers.

✓ Example 2.11.1

Identify the number and the unit in each quantity.

- one dozen eggs
- 2.54 centimeters
- a box of pencils
- 88 meters per second

Solution

- The number is one, and the unit is a dozen eggs.
- The number is 2.54, and the unit is centimeter.
- The number 1 is implied because the quantity is only *a* box. The unit is box of pencils.
- The number is 88, and the unit is meters per second. Note that in this case the unit is actually a combination of two units: meters and seconds.

Key Take Away

- Identify a quantity properly with a number and a unit.

2.11: Taking Measurements is shared under a [CC BY-NC-SA 4.0](#) license and was authored, remixed, and/or curated by LibreTexts.

- [2.1: Taking Measurements](#) by Henry Agnew, Marisa Alviar-Agnew is licensed [CC BY-NC-SA 3.0](#).

2.E: Measurement and Problem Solving (Exercises)

[Template:HideTOC](#)

[2.1: Measuring Global Temperatures](#)

[2.2: Scientific Notation: Writing Large and Small Numbers](#)

[2.3: Significant Figures: Writing Numbers to Reflect Precision](#)

1. Define *significant figures*. Why are they important?
2. Define the different types of zeros found in a number and explain whether or not they are significant.
3. How many significant figures are in each number?
 - a. 140
 - b. 0.009830
 - c. 15,050
 - d. 221,560,000
 - e. 5.67×10^3
 - f. 2.9600×10^{-5}
4. How many significant figures are in each number?
 - a. 1.05
 - b. 9,500
 - c. 0.0004505
 - d. 0.00045050
 - e. 7.210×10^6
 - f. 5.00×10^{-6}
5. Round each number to three significant figures.
 - a. 34,705
 - b. 34,750
 - c. 34,570

[2.4: Significant Figures in Calculations](#)

[2.5: The Basic Units of Measurement](#)

[2.6: Problem Solving and Unit Conversions](#)

[2.7: Solving Multi-step Conversion Problems](#)

[2.8: Units Raised to a Power](#)

[2.9: Density](#)

[2.10: Numerical Problem-Solving Strategies and the Solution Map](#)

2.E: Measurement and Problem Solving (Exercises) is shared under a [CC BY-NC-SA 4.0](#) license and was authored, remixed, and/or curated by LibreTexts.

- [2.E: Measurement and Problem Solving \(Exercises\)](#) by Henry Agnew, Marisa Alviar-Agnew is licensed [CK-12](#). Original source: <https://www.ck12.org/c/chemistry/>.

CHAPTER OVERVIEW

3: Matter and Energy

Energy is a very important quantity in science and the world around us. Although most of our energy ultimately comes from the sun, much of the energy we use on a daily basis is rooted in chemical reactions. The gasoline in your car, the electricity in your house, the food in your diet—all provide substances for chemical reactions to provide energy (gasoline, food) or are produced from chemical reactions (electricity, about 50% of which is generated by burning coal). As such, it is only natural that the study of chemistry involves energy.

- [3.1: In Your Room](#)
- [3.2: What is Matter?](#)
- [3.3: Classifying Matter According to Its State- Solid, Liquid, and Gas](#)
- [3.4: Classifying Matter According to Its Composition](#)
- [3.5: Differences in Matter- Physical and Chemical Properties](#)
- [3.6: Changes in Matter- Physical and Chemical Changes](#)
- [3.7: Conservation of Mass- There is No New Matter](#)
- [3.8: Energy](#)
- [3.9: Energy and Chemical and Physical Change](#)
- [3.10: Temperature- Random Motion of Molecules and Atoms](#)
- [3.11: Temperature Changes- Heat Capacity](#)
- [3.12: Energy and Heat Capacity Calculations](#)
- [3.E: Exercises](#)

3: Matter and Energy is shared under a [CC BY-NC-SA 4.0](#) license and was authored, remixed, and/or curated by LibreTexts.

3.1: In Your Room

Template:HideTOC

Matter is any substance that has mass and takes up space. Matter includes atoms and anything made up of atoms, but not other energy phenomena or waves such as light or sound. While this simple definition is easily applied, the way people view matter is often broken down into two characteristic length scales: the macroscopic and the microscopic.



Figure 3.1.1: A typical American university and college dormitory room in 2002 (CC BY-SA 3.0; [Raul654](#)).

The macroscopic scale is the length scale on which objects or phenomena are large enough to be visible almost practically with the naked eye, without magnifying optical instruments. Everything that one can see, touch, and handle in the dorm room of Figure 3.1.1 is within the macroscopic scale. To describe each of these objects, only a few macroscopic properties are required. However, each of these items can be decomposed into smaller microscopic scale properties.

The microscopic scale is the scale of objects and events smaller than those that can easily be seen by the naked eye, requiring a lens or microscope to see them clearly. All of the everyday objects that we can bump into, touch, or squeeze are ultimately composed of atoms. This ordinary atomic matter is in turn made up of interacting subatomic particles—usually a nucleus of protons and neutrons, and a cloud of orbiting electrons. Because of this, a large number of variables are needed to describe such a system which complicates the characterization.

Matter vs. Mass

Matter should not be confused with mass, as the two are not the same in modern physics. Matter is a physical substance of which systems may be composed, while mass is not a substance, but rather a quantitative property of matter and other substances or systems.

Contributions & Attributions

- Wikipedia

3.1: In Your Room is shared under a [CC BY-NC-SA 4.0](#) license and was authored, remixed, and/or curated by LibreTexts.

- **3.1: In Your Room** by Henry Agnew, Marisa Alviar-Agnew is licensed [CK-12](#). Original source: <https://www.ck12.org/c/chemistry/>.

3.2: What is Matter?

Template:HideTOC

Learning Objectives

- Define matter and explain how it is composed of building blocks known as "atoms".

We are all familiar with matter. The definition of **Matter** is anything that has mass and volume (takes up space). For most common objects that we deal with every day, it is fairly simple to demonstrate that they have mass and take up space. You might be able to imagine, however, the difficulty for people several hundred years ago to demonstrate that air had mass and volume. Air (and all other gases) are invisible to the eye, have very small masses compared to equal amounts of solids and liquids, and are quite easy to compress (change volume). Without sensitive equipment, it would have been difficult to convince people that gases are matter. Today, we can measure the mass of a small balloon when it is deflated and then blow it up, tie it off, and measure its mass again to detect the additional mass due to the air inside. The mass of air, under room conditions, that occupies a one quart jar is approximately 0.0002 pounds. This small amount of mass would have been difficult to measure in times before balances were designed to accurately measure very small masses. Later, scientists were able to compress gases into such a small volume that the gases turned into liquids, which made it clear that gases are matter.



Figure 3.2.1: Everything from an ant, to a truck, to the earth, and even the entire galaxy is composed of matter. Images used with permission from Wikipedia (CC_SA-BY-3.0; credit [High Contrast](#)).

Even though the universe consists of "things" as wildly different as ants and galaxies, the matter that makes up all of these "things" is composed of a very limited number of building blocks. These building blocks are known as **atoms**, and so far, scientists have discovered or created a grand total of 118 different types of atoms. Scientists have given a name to each different type of atom. A substance that is composed of only one type of atom is called an element. At this point, what should amaze you is that all forms of matter in our universe are made with only 118 different building blocks. In some ways, it's sort of like cooking a gourmet, five-course meal using only three ingredients! How is it possible? To answer that question, you have to understand the ways in which different elements are put together to form matter.

The most important method that nature uses to organize atoms into matter is the formation of **molecules**. Molecules are groups of two or more atoms that have been bonded together. There are millions of different ways to bond atoms together, which means that there are millions of different possible molecules. Each of these molecules has its own set of chemical properties, and it's these properties with which chemists are most concerned. You will learn a lot more about atoms and molecules, including how they were discovered, in a later part of the textbook.

Summary

All matter has mass and occupies space. All physical objects are made of matter. Matter itself is composed of tiny building blocks known as "atoms". There are only 118 different types of atoms known to man. Frequently, atoms are bonded together to form "molecules".

Contributions & Attributions

- Wikipedia

3.2: What is Matter? is shared under a [CC BY-NC-SA 4.0](#) license and was authored, remixed, and/or curated by LibreTexts.

- 3.2: What is Matter? by Henry Agnew, Marisa Alviar-Agnew is licensed [CK-12](#). Original source: <https://www.ck12.org/c/chemistry/>.

3.3: Classifying Matter According to Its State- Solid, Liquid, and Gas

Template:HideTOC

Learning Objectives

- To describe the solid, liquid and gas phases.

Water can take many forms. At low temperatures (below 0°C), it is a solid. When at "normal" temperatures (between 0°C and 100°C), it is a liquid. While at temperatures above 100°C , water is a gas (steam). The state that water is in depends upon the temperature. Each state has its own unique set of physical properties. Matter typically exists in one of three states: **solid**, **liquid**, or **gas**.




Figure 3.3.1: Matter is usually classified into three classical states, with plasma sometimes added as a fourth state. From left to right: quartz (solid), water (liquid), nitrogen dioxide (gas).

The state that a given substance exhibits is also a physical property. Some substances exist as gases at room temperature (oxygen and carbon dioxide), while others, like water and mercury metal, exist as liquids. Most metals exist as solids at room temperature. All substances can exist in any of these three states. Figure 3.3.2 shows the differences among solids, liquids, and gases at the molecular level. A solid has definite volume and shape, a liquid has a definite volume but no definite shape, and a gas has neither a definite volume nor shape.

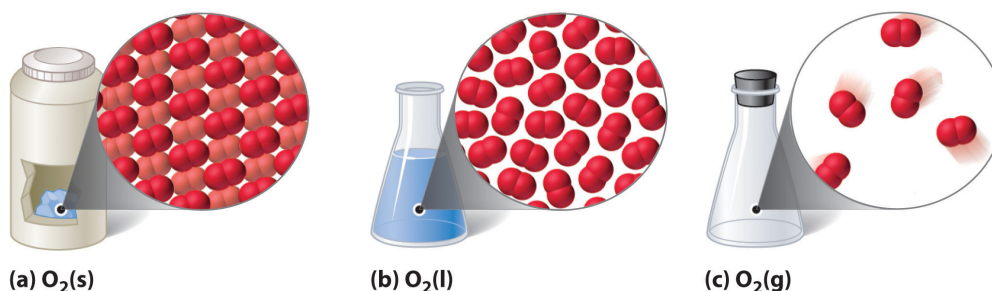
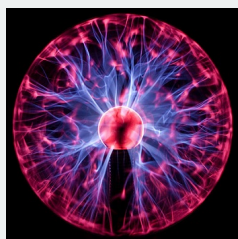


Figure 3.3.2: A Representation of the Solid, Liquid, and Gas States. (a) Solid O_2 has a fixed volume and shape, and the molecules are packed tightly together. (b) Liquid O_2 conforms to the shape of its container but has a fixed volume; it contains relatively densely packed molecules. (c) Gaseous O_2 fills its container completely—regardless of the container's size or shape—and consists of widely separated molecules.

Plasma: A Fourth State of Matter

Technically speaking, a fourth state of matter called plasma exists, but it does not naturally occur on earth, so we will omit it from our study here.



Solids

In the solid state, the individual particles of a substance are in fixed positions with respect to each other because there is not enough thermal energy to overcome the intermolecular interactions between the particles. As a result, solids have a definite shape and volume. Most solids are hard, but some (like waxes) are relatively soft. Many solids composed of ions can also be quite brittle.

Solids are defined by the following characteristics:

- Definite shape (rigid)
- Definite volume
- Particles vibrate around fixed axes

If we were to cool liquid mercury to its freezing point of -39°C , and under the right pressure conditions, we would notice all of the liquid particles would go into the solid state. Mercury can be solidified when its temperature is brought to its freezing point. However, when returned to room temperature conditions, mercury does not exist in solid state for long, and returns back to its more common liquid form.

Solids usually have their constituent particles arranged in a regular, three-dimensional array of alternating positive and negative ions called a **crystal**. The effect of this regular arrangement of particles is sometimes visible macroscopically, as shown in Figure 3.3.3. Some solids, especially those composed of large molecules, cannot easily organize their particles in such regular crystals and exist as amorphous (literally, “without form”) solids. Glass is one example of an amorphous solid.

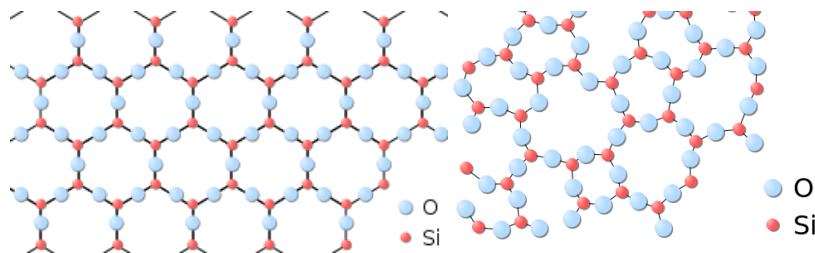


Figure 3.3.3: (left) The periodic crystalline lattice structure of quartz SiO_2 in two-dimensions. (right) The random network structure of glassy SiO_2 in two-dimensions. Note that, as in the crystal, each Silicon atom is bonded to 4 oxygen atoms, where the fourth oxygen atom is obscured from view in this plane. Images used with permission (public domain).

Liquids

If the particles of a substance have enough energy to partially overcome intermolecular interactions, then the particles can move about each other while remaining in contact. This describes the liquid state. In a liquid, the particles are still in close contact, so liquids have a definite volume. However, because the particles can move about each other rather freely, a liquid has no definite shape and takes a shape dictated by its container.

Liquids have the following characteristics:

- No definite shape (takes the shape of its container).
- Has definite volume.
- Particles are free to move over each other, but are still attracted to each other.

A familiar liquid is mercury metal. Mercury is an anomaly. It is the only metal we know of that is liquid at room temperature. Mercury also has an ability to stick to itself (surface tension)—a property that all liquids exhibit. Mercury has a relatively high surface tension, which makes it very unique. Here you see mercury in its common liquid form.



Video 3.3.1: *Mercury boiling to become a gas.*

If we heat liquid mercury to its boiling point of 357°C under the right pressure conditions, we would notice all particles in the liquid state go into the gas state.

Gases

If the particles of a substance have enough energy to completely overcome intermolecular interactions, then the particles can separate from each other and move about randomly in space. This describes the gas state, which we will consider in more detail elsewhere. Like liquids, gases have no definite shape, but unlike solids and liquids, gases have no definite volume either. The change from solid to liquid usually does not significantly change the volume of a substance. However, the change from a liquid to a gas significantly increases the volume of a substance, by a factor of 1,000 or more. Gases have the following characteristics:

- No definite shape (takes the shape of its container)
- No definite volume
- Particles move in random motion with little or no attraction to each other
- Highly compressible

Table 3.3.1: Characteristics of the Three States of Matter

Characteristics	Solids	Liquids	Gases
shape	definite	indefinite	indefinite
volume	definite	definite	indefinite
relative intermolecular interaction strength	strong	moderate	weak
relative particle positions	in contact and fixed in place	in contact but not fixed	not in contact, random positions

✓ Example 3.3.1

What state or states of matter does each statement, describe?

- This state has a definite volume, but no definite shape.
- This state has no definite volume.
- This state allows the individual particles to move about while remaining in contact.

Solution

- This statement describes the liquid state.
- This statement describes the gas state.
- This statement describes the liquid state.

? Exercise 3.3.1

What state or states of matter does each statement describe?

- This state has individual particles in a fixed position with regard to each other.
- This state has individual particles far apart from each other in space.
- This state has a definite shape.

Answer a:

solid

Answer b:

gas

Answer c:

solid

Summary

- Three states of matter exist—solid, liquid, and gas.
- Solids have a definite shape and volume.
- Liquids have a definite volume, but take the shape of the container.
- Gases have no definite shape or volume.

3.3: Classifying Matter According to Its State- Solid, Liquid, and Gas is shared under a [CC BY-NC-SA 4.0](#) license and was authored, remixed, and/or curated by LibreTexts.

- 3.3: Classifying Matter According to Its State—Solid, Liquid, and Gas** by Henry Agnew, Marisa Alviar-Agnew is licensed [CK-12](#).
Original source: <https://www.ck12.org/c/chemistry/>.

3.4: Classifying Matter According to Its Composition

Template:HideTOC

Learning Objectives

- Explain the difference between a pure substance and a mixture.
- Explain the difference between an element and a compound.
- Explain the difference between a homogeneous mixture and a heterogeneous mixture.

One useful way of organizing our understanding of matter is to think of a hierarchy that extends down from the most general and complex to the simplest and most fundamental (Figure 3.4.1). Matter can be classified into two broad categories: pure substances and mixtures. A **pure substance** is a form of matter that has a constant composition (meaning that it is the same everywhere) and properties that are constant throughout the sample (meaning that there is only one set of properties such as melting point, color, boiling point, etc. throughout the matter). A material composed of two or more substances is a **mixture**. Elements and compounds are both examples of pure substances. A substance that cannot be broken down into chemically simpler components is an **element**. Aluminum, which is used in soda cans, is an element. A substance that can be broken down into chemically simpler components (because it has more than one element) is a **compound**. For example, water is a compound composed of the elements hydrogen and oxygen. Today, there are about 118 elements in the known universe. In contrast, scientists have identified tens of millions of different compounds to date.

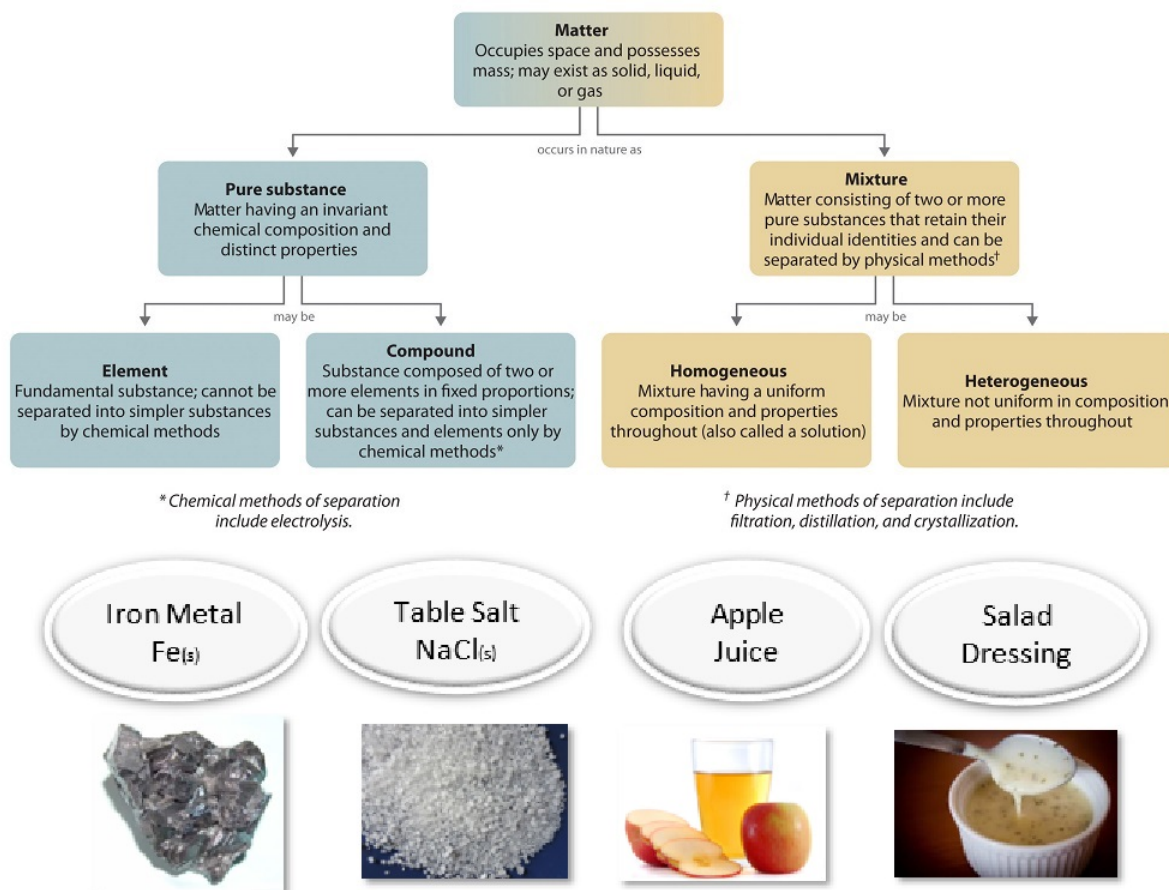


Figure 3.4.1: Relationships between the Types of Matter and the Methods Used to Separate Mixtures

Ordinary table salt is called sodium chloride. It is considered a **substance** because it has a uniform and definite composition. All samples of sodium chloride are chemically identical. Water is also a pure substance. Salt easily dissolves in water, but salt water cannot be classified as a substance because its composition can vary. You may dissolve a small amount of salt or a large amount into a given amount of water. A mixture is a physical blend of two or more components, each of which retains its own identity and

properties in the **mixture**. Only the form of the salt is changed when it is dissolved into water. It retains its composition and properties.

A **homogeneous** mixture is a mixture in which the composition is uniform throughout the mixture. The salt water described above is homogeneous because the dissolved salt is evenly distributed throughout the entire salt water sample. Often it is easy to confuse a homogeneous mixture with a pure substance because they are both uniform. The difference is that the composition of the substance is always the same. The amount of salt in the salt water can vary from one sample to another. All solutions are considered homogeneous because the dissolved material is present in the same amount throughout the solution.

A **heterogeneous mixture** is a mixture in which the composition is not uniform throughout the mixture. Vegetable soup is a heterogeneous mixture. Any given spoonful of soup will contain varying amounts of the different vegetables and other components of the soup.

Phase

A phase is any part of a sample that has a uniform composition and properties. By definition, a pure substance or a homogeneous mixture consists of a single phase. A heterogeneous mixture consists of two or more phases. When oil and water are combined, they do not mix evenly, but instead form two separate layers. Each of the layers is called a phase.

✓ Example 3.4.1

Identify each substance as a compound, an element, a heterogeneous mixture, or a homogeneous mixture (solution).

- filtered tea
- freshly squeezed orange juice
- a compact disc
- aluminum oxide, a white powder that contains a 2:3 ratio of aluminum and oxygen atoms
- selenium

Given: a chemical substance

Asked for: its classification

Strategy:

- Decide whether a substance is chemically pure. If it is pure, the substance is either an element or a compound. If a substance can be separated into its elements, it is a compound.
- If a substance is not chemically pure, it is either a heterogeneous mixture or a homogeneous mixture. If its composition is uniform throughout, it is a homogeneous mixture.

Solution

- A)** Tea is a solution of compounds in water, so it is not chemically pure. It is usually separated from tea leaves by filtration.
B) Because the composition of the solution is uniform throughout, it is **a homogeneous mixture**.
- A)** Orange juice contains particles of solid (pulp) as well as liquid; it is not chemically pure.
B) Because its composition is not uniform throughout, orange juice is **a heterogeneous mixture**.
- A)** A compact disc is a solid material that contains more than one element, with regions of different compositions visible along its edge. Hence, a compact disc is not chemically pure.
B) The regions of different composition indicate that a compact disc is **a heterogeneous mixture**.
- A)** Aluminum oxide is a single, chemically **pure compound**.
- A)** Selenium is one of the known **elements**.

? Exercise 3.4.1

Identify each substance as a compound, an element, a heterogeneous mixture, or a homogeneous mixture (solution).

- white wine
- mercury
- ranch-style salad dressing

d. table sugar (sucrose)

Answer a:

homogeneous mixture (solution)

Answer b:

element

Answer c:

heterogeneous mixture

Answer d:

compound

✓ Example 3.4.2

How would a chemist categorize each example of matter?

- a. saltwater
- b. soil
- c. water
- d. oxygen

Solution

- a. Saltwater acts as if it were a single substance even though it contains two substances—salt and water. Saltwater is a homogeneous mixture, or a solution.
- b. Soil is composed of small pieces of a variety of materials, so it is a heterogeneous mixture.
- c. Water is a substance. More specifically, because water is composed of hydrogen and oxygen, it is a compound.
- d. Oxygen, a substance, is an element.

? Exercise 3.4.2

How would a chemist categorize each example of matter?

- a. coffee
- b. hydrogen
- c. an egg

Answer a:

a homogeneous mixture (solution), assuming it is filtered coffee

Answer b:

element

Answer c:

heterogeneous mixture

Summary

Matter can be classified into two broad categories: pure substances and mixtures. A pure substance is a form of matter that has a constant composition and properties that are constant throughout the sample. Mixtures are physical combinations of two or more elements and/or compounds. Mixtures can be classified as homogeneous or heterogeneous. Elements and compounds are both examples of pure substances. Compounds are substances that are made up of more than one type of atom. Elements are the simplest substances made up of only one type of atom.

Vocabulary

- Element: a substance that is made up of only one type of atom.
- Compound: a substance that is made up of more than one type of atom bonded together.

- Mixture: a combination of two or more elements or compounds which have not reacted to bond together; each part in the mixture retains its own properties.

Contributions & Attributions

-
- Stephen Lower, Professor Emeritus ([Simon Fraser U.](#)) [Chem1 Virtual Textbook](#)

3.4: Classifying Matter According to Its Composition is shared under a [CC BY-NC-SA 4.0](#) license and was authored, remixed, and/or curated by LibreTexts.

- [3.4: Classifying Matter According to Its Composition](#) by Henry Agnew, Marisa Alviar-Agnew, Stephen Lower is licensed [CK-12](#). Original source: <https://www.ck12.org/c/chemistry/>.

3.5: Differences in Matter- Physical and Chemical Properties

Template:HideTOC

Learning Objectives

To separate physical from chemical properties.

All matter has physical and chemical properties. Physical properties are characteristics that scientists can measure without changing the composition of the sample under study, such as mass, color, and volume (the amount of space occupied by a sample). Chemical properties describe the characteristic ability of a substance to react to form new substances; they include its flammability and susceptibility to corrosion. All samples of a pure substance have the same chemical and physical properties. For example, pure copper is always a reddish-brown solid (a physical property) and always dissolves in dilute nitric acid to produce a blue solution and a brown gas (a chemical property).

Physical Property

A *physical property* is a characteristic of a substance that can be observed or measured without changing the identity of the substance. Silver is a shiny metal that conducts electricity very well. It can be molded into thin sheets, a property called malleability. Salt is dull and brittle and conducts electricity when it has been dissolved into water, which it does quite easily. Physical properties of matter include color, hardness, malleability, solubility, electrical conductivity, density, melting point, and boiling point.

For the elements, color does not vary much from one element to the next. The vast majority of elements are colorless, silver, or gray. Some elements do have distinctive colors: sulfur and chlorine are yellow, copper is (of course) copper-colored, and elemental bromine is red. However, density can be a very useful parameter for identifying an element. Of the materials that exist as solids at room temperature, iodine has a very low density compared to zinc, chromium, and tin. Gold has a very high density, as does platinum. Pure water, for example, has a density of 0.998 g/cm^3 at 25°C . The average densities of some common substances are in Table 3.5.1. Notice that corn oil has a lower mass to volume ratio than water. This means that when added to water, corn oil will “float.”

Table 3.5.1: Densities of Common Substances

Substance	Density at 25°C (g/cm^3)
blood	1.035
body fat	0.918
whole milk	1.030
corn oil	0.922
mayonnaise	0.910
honey	1.420

Hardness helps determine how an element (especially a metal) might be used. Many elements are fairly soft (silver and gold, for example) while others (such as titanium, tungsten, and chromium) are much harder. Carbon is an interesting example of hardness. In graphite, (the “lead” found in pencils) the carbon is very soft, while the carbon in a diamond is roughly seven times as hard.



Figure 3.5.1: Pencil (left) and Diamond ring (right). Both are a form of carbon, but exhibit very different physical properties.

Melting and boiling points are somewhat unique identifiers, especially of compounds. In addition to giving some idea as to the identity of the compound, important information can be obtained about the purity of the material.

Chemical Properties

Chemical properties of matter describe its potential to undergo some chemical change or reaction by virtue of its composition. The elements, electrons, and bonds that are present give the matter potential for chemical change. It is quite difficult to define a chemical property without using the word "change". Eventually, after studying chemistry for some time, you should be able to look at the formula of a compound and state some chemical property. For example, hydrogen has the potential to ignite and explode given the right conditions—this is a chemical property. Metals in general have the chemical property of reacting with an acid. Zinc reacts with hydrochloric acid to produce hydrogen gas—this is a chemical property.




Figure 3.5.2: Heavy rust on the links of a chain near the Golden Gate Bridge in San Francisco; it was continuously exposed to moisture and salt spray, causing surface breakdown, cracking, and flaking of the metal. (CC BY-SA 3.0; Marlith).

A chemical property of iron is its capability of combining with oxygen to form iron oxide, the chemical name of rust (Figure 3.5.2). The more general term for rusting and other similar processes is corrosion. Other terms that are commonly used in descriptions of chemical changes are burn, rot, explode, decompose, and ferment. Chemical properties are very useful in identifying substances. However, unlike physical properties, chemical properties can only be observed as the substance is in the process of being changed into a different substance.

Table 3.5.2: Contrasting Physical and Chemical Properties

Physical Properties	Chemical Properties
Gallium metal melts at 30 °C.	Iron metal rusts.
Mercury is a very dense liquid.	A green banana turns yellow when it ripens.
Gold is shiny.	A dry piece of paper burns.

✓ Example 3.5.1

Which of the following is a chemical property of iron?

- a. Iron corrodes in moist air.
- b. Density = 7.874 g/cm^3
- c. Iron is soft when pure.
- d. Iron melts at 1808 K.

Solution

"Iron corrodes in moist air" is the only chemical property of iron from the list.

? Exercise 3.5.1A

Which of the following is a physical property of matter?

- a. corrosiveness
- b. pH (acidity)
- c. density
- d. flammability

Answer

c

? Exercise 3.5.1B

Which of the following is a chemical property?

- a. flammability
- b. melting point
- c. boiling point
- d. density

Answer

a

Summary

A physical property is a characteristic of a substance that can be observed or measured without changing the identity of the substance. Physical properties include color, density, hardness, and melting and boiling points. A chemical property describes the ability of a substance to undergo a specific chemical change. To identify a chemical property, we look for a chemical change. A chemical change always produces one or more types of matter that differ from the matter present before the change. The formation of rust is a chemical change because rust is a different kind of matter than the iron, oxygen, and water present before the rust formed.

3.5: Differences in Matter- Physical and Chemical Properties is shared under a [CC BY-NC-SA 4.0](#) license and was authored, remixed, and/or curated by LibreTexts.

- **3.5: Differences in Matter- Physical and Chemical Properties** by Henry Agnew, Marisa Alviar-Agnew is licensed [CK-12](#). Original source: <https://www.ck12.org/c/chemistry/>.

3.6: Changes in Matter- Physical and Chemical Changes

Template:HideTOC

Learning Objectives

- Label a change as chemical or physical.
- List evidence that can indicate a chemical change occurred.

Change is happening all around us all of the time. Just as chemists have classified elements and compounds, they have also classified types of changes. Changes are classified as either physical or chemical changes. Chemists learn a lot about the nature of matter by studying the changes that matter can undergo. Chemists make a distinction between two different types of changes that they study—physical changes and chemical changes.

Physical Change

Physical changes are changes in which no bonds are broken or formed. This means that the same types of compounds or elements that were there at the beginning of the change are there at the end of the change. Because the ending materials are the same as the beginning materials, the properties (such as color, boiling point, etc.) will also be the same. Physical changes involve moving molecules around, but not changing them. Some types of physical changes include:

- Changes of state (changes from a solid to a liquid or a gas and vice versa).
- Separation of a mixture.
- Physical deformation (cutting, denting, stretching).
- Making solutions (special kinds of mixtures).

As an ice cube melts, its shape changes as it acquires the ability to flow. However, its composition does not change. Melting is an example of a physical change. A physical change is a change to a sample of matter in which some properties of the material change, but the identity of the matter does not. When liquid water is heated, it changes to water vapor. However, even though the physical properties have changed, the molecules are exactly the same as before. We still have each water molecule containing two hydrogen atoms and one oxygen atom covalently bonded. When you have a jar containing a mixture of pennies and nickels and you sort the mixture so that you have one pile of pennies and another pile of nickels, you have not altered the identity of the pennies or the nickels—you've merely separated them into two groups. This would be an example of a physical change. Similarly, if you have a piece of paper, you don't change it into something other than a piece of paper by ripping it up. What was paper before you started tearing is still paper when you are done. Again, this is an example of a physical change.



Figure 3.6.1: Ice melting is a physical change. When liquid water (H_2O) freezes into a solid state (ice), it appears changed; however, this change is only physical, as the composition of the constituent molecules is the same: 11.19% hydrogen and 88.81% oxygen by mass. (Public Domain; Moussa).

Physical changes can further be classified as reversible or irreversible. The melted ice cube may be refrozen, so melting is a reversible physical change. Physical changes that involve a change of state are all reversible. Other changes of state include **vaporization** (liquid to gas), **freezing** (liquid to solid), and **condensation** (gas to liquid). Dissolving is also a reversible physical change. When salt is dissolved into water, the salt is said to have entered the aqueous state. The salt may be regained by boiling off the water, leaving the salt behind.

Chemical Change

Chemical changes occur when bonds are broken and/or formed between molecules or atoms. This means that one substance with a certain set of properties (such as melting point, color, taste, etc) is turned into a different substance with different properties. Chemical changes are frequently harder to reverse than physical changes.

One good example of a chemical change is burning a candle. The act of burning paper actually results in the formation of new chemicals (carbon dioxide and water) from the burning of the wax. Another example of a chemical change is what occurs when natural gas is burned in your furnace. This time, on the left there is a molecule of methane, CH_4 , and two molecules of oxygen, O_2 ; on the right are two molecules of water, H_2O , and one molecule of carbon dioxide, CO_2 . In this case, not only has the appearance changed, but the structure of the molecules has also changed. The new substances do not have the same chemical properties as the original ones. Therefore, this is a chemical change.



Figure 3.6.2: Burning of wax to generate water and carbon dioxide is a chemical reaction. (CC-SA-BY-3.0; Andrikkos)

We can't actually see molecules breaking and forming bonds, although that's what defines chemical changes. We have to make other observations to indicate that a chemical change has happened. Some of the evidence for chemical change will involve the energy changes that occur in chemical changes, but some evidence involves the fact that new substances with different properties are formed in a chemical change.

Observations that help to indicate chemical change include:

- Temperature changes (either the temperature increases or decreases).
- Light given off.
- Unexpected color changes (a substance with a different color is made, rather than just mixing the original colors together).
- Bubbles are formed (but the substance is not boiling—you made a substance that is a gas at the temperature of the beginning materials, instead of a liquid).
- Different smell or taste (do not taste your chemistry experiments, though!).
- A solid forms if two clear liquids are mixed (look for *floaties*—technically called a precipitate).

✓ Example 3.6.1

Label each of the following changes as a physical or chemical change. Give evidence to support your answer.

- Boiling water.
- A nail rusting.
- A green solution and colorless solution are mixed. The resulting mixture is a solution with a pale green color.
- Two colorless solutions are mixed. The resulting mixture has a yellow precipitate.

Solution

- Physical: boiling and melting are physical changes. When water boils, no bonds are broken or formed. The change could be written: $\text{H}_2\text{O} (l) \rightarrow \text{H}_2\text{O} (g)$
- Chemical: The dark grey nail changes color to form an orange flaky substance (the rust); this must be a chemical change. Color changes indicate chemical change. The following reaction occurs: $\text{Fe} + \text{O}_2 \rightarrow \text{Fe}_2\text{O}_3$

- c. Physical: because none of the properties changed, this is a physical change. The green mixture is still green and the colorless solution is still colorless. They have just been spread together. No color *change* occurred or other evidence of chemical change.
- d. Chemical: the formation of a precipitate and the color change from colorless to yellow indicate a chemical change.

? Exercise 3.6.1

Label each of the following changes as a physical or chemical change.

- a. A mirror is broken.
- b. An iron nail corroded in moist air
- c. Copper metal is melted.
- d. A catalytic converter changes nitrogen dioxide to nitrogen gas and oxygen gas.

Answer a:

physical change

Answer b:

chemical change

Answer c:

physical change

Answer d:

chemical change

Separating Mixtures Through Physical Changes

Homogeneous mixtures (solutions) can be separated into their component substances by physical processes that rely on differences in some physical property, such as differences in their boiling points. Two of these separation methods are distillation and crystallization. **Distillation** makes use of differences in volatility, a measure of how easily a substance is converted to a gas at a given temperature. A simple distillation apparatus for separating a mixture of substances, at least one of which is a liquid. The most volatile component boils first and is condensed back to a liquid in the water-cooled condenser, from which it flows into the receiving flask. If a solution of salt and water is distilled, for example, the more volatile component, pure water, collects in the receiving flask, while the salt remains in the distillation flask.




Figure 3.6.3: *The Distillation of a Solution of Table Salt in Water. The solution of salt in water is heated in the distilling flask until it boils. The resulting vapor is enriched in the more volatile component (water), which condenses to a liquid in the cold condenser and is then collected in the receiving flask.*

Parts of a distillation setup: Bunsen burner, salt water in distilling flask, condenser with cool water in and warm water out, pure water in receiving flask

Mixtures of two or more liquids with different boiling points can be separated with a more complex distillation apparatus. One example is the refining of crude petroleum into a range of useful products: aviation fuel, gasoline, kerosene, diesel fuel, and lubricating oil (in the approximate order of decreasing volatility). Another example is the distillation of alcoholic spirits such as brandy or whiskey. This relatively simple procedure caused more than a few headaches for federal authorities in the 1920s during the era of Prohibition, when illegal stills proliferated in remote regions of the United States.

Another example for using physical properties to separate mixtures is filtration (Figure 3.6.4). Filtration is any mechanical, physical or biological operation that separates solids from fluids (liquids or gases) by adding a medium through which only the fluid can pass. The fluid that passes through is called the filtrate. There are many different methods of filtration; all aim to attain the separation of substances. Separation is achieved by some form of interaction between the substance or objects to be removed and the filter. The substance that is to pass through the filter must be a fluid, i.e. a liquid or gas. Methods of filtration vary depending on the location of the targeted material, i.e. whether it is dissolved in the fluid phase or suspended as a solid.

Figure 3.6.4: *Filtration for the separation of solids from a hot solution.* (CC BY-SA 4.0; Suman6395).

Summary

- Chemists make a distinction between two different types of changes that they study—physical changes and chemical changes.
- Physical changes are changes that do not alter the identity of a substance.
- Chemical changes are changes that occur when one substance is turned into another substance.
- Chemical changes are frequently harder to reverse than physical changes. Observations that indicate a chemical change has occurred include color change, temperature change, light given off, formation of bubbles, formation of a precipitate, etc.

Contributions & Attributions

-
- Boundless (www.boundless.com)

3.6: Changes in Matter- Physical and Chemical Changes is shared under a [CC BY-NC-SA 4.0](#) license and was authored, remixed, and/or curated by LibreTexts.

- **3.6: Changes in Matter - Physical and Chemical Changes** by Henry Agnew, Marisa Alviar-Agnew is licensed [CK-12](#). Original source: <https://www.ck12.org/c/chemistry/>.

3.7: Conservation of Mass- There is No New Matter

Template:HideTOC

It may seem as though burning destroys matter, but the same amount, or mass, of matter still exists after a campfire as before. Look at Figure 3.7.1 below. It shows that when wood burns, it combines with oxygen and changes not only to ashes, but also to carbon dioxide and water vapor. The gases float off into the air, leaving behind just the ashes. Suppose you had measured the mass of the wood before it burned and the mass of the ashes after it burned. Also suppose you had been able to measure the oxygen used by the fire and the gases produced by the fire. What would you find? The total mass of matter after the fire would be the same as the total mass of matter before the fire.




Figure 3.7.1: Burning is a chemical process. The flames are caused as a result of a fuel undergoing combustion (burning). (CC BY-SA 2.5; Einar Helland Berger for fire and Walter Siegmund for ash).

Law of Conservation of Mass

The law of conservation of mass was created in 1789 by a French chemist, Antoine Lavoisier. The **law of conservation of mass** states that matter cannot be created or destroyed in a chemical reaction. For example, when wood burns, the mass of the soot, ashes, and gases equals the original mass of the charcoal and the oxygen when it first reacted. So the mass of the product equals the mass of the reactant. A reactant is the chemical reaction of two or more elements to make a new substance, and a product is the substance that is formed as the result of a chemical reaction (Video 3.7.1). Matter and its corresponding mass may not be able to be created or destroyed, but can change forms to other substances like liquids, gases, and solids.



Video 3.7.1: This is a nice little demonstration showing the Conservation of Mass in action.

If you witness a 300 kg tree burn to the ground, there are only ashes left after the burn, and all of them together weigh 10 kg. It may make you wonder where the other 290 kg went. The missing 290 kg was released into the atmosphere as smoke, so the only thing left that you can see is the 10 kg of ash. If you know the law of conservation of mass, then you know that the other 290 kg has to go somewhere, because it has to equal the mass of the tree before it burnt down.

✓ Example 3.7.1

If heating 10.0 grams of calcium carbonate (CaCO_3) produces 4.4 g of carbon dioxide (CO_2) and 5.6 g of calcium oxide (CaO), show that these observations are in agreement with the law of conservation of mass.

Solution

Mass of the reactants = Mass of the products

$$10.0 \text{ g of } \text{CaCO}_3 = 4.4 \text{ g of } \text{CO}_2 + 5.6 \text{ g of } \text{CaO}$$

$$10.0 \text{ g of reactant} = 10.0 \text{ g of products}$$

Because the mass of the reactant is equal to the mass of the products, the observations are in agreement with the law of conservation of mass.

? Exercise 3.7.1

Potassium hydroxide (KOH) readily reacts with carbon dioxide (CO_2) to produce potassium carbonate (K_2CO_3) and water (H_2O). How many grams of potassium carbonate are produced if 224.4 g of KOH reacts with 88.0 g of CO_2 ? The reaction also produces 36.0 g of water.

Answer

276.4 g of potassium carbonate

The Law is also applicable to both chemical and physical changes. For example, if you have an ice cube that melts into a liquid and you heat that liquid up, it becomes a gas. It will appear to have disappeared, but is still there.

Summary

- Burning and other changes in matter do not destroy matter.
- The mass of matter is always the same before and after the changes occur.
- The law of conservation of mass states that matter cannot be created or destroyed.

Contributions & Attributions

- Binod Shrestha (University of Lorraine)

3.7: Conservation of Mass- There is No New Matter is shared under a [CC BY-NC-SA 4.0](#) license and was authored, remixed, and/or curated by LibreTexts.

- **3.7: Conservation of Mass - There is No New Matter** by Henry Agnew, Marisa Alviar-Agnew is licensed [CK-12](#). Original source: <https://www.ck12.org/c/chemistry/>.

3.8: Energy

Template:HideTOC

Learning Objectives

- Define heat and work.
- Distinguish between kinetic energy and potential energy.
- State the law of conservation of matter and energy.

Just like matter, energy is a term that we are all familiar with and use on a daily basis. Before you go on a long hike, you eat an *energy* bar; every month, the *energy* bill is paid; on TV, politicians argue about the *energy* crisis. But what is energy? If you stop to think about it, energy is very complicated. When you plug a lamp into an electric socket, you see energy in the form of light, but when you plug a heating pad into that same socket, you only feel warmth. Without energy, we couldn't turn on lights, we couldn't brush our teeth, we couldn't make our lunch, and we couldn't travel to school. In fact, without energy, we couldn't even wake up because our bodies require energy to function. We use energy for every single thing that we do, whether we are awake or asleep.

Ability to Do Work or Produce Heat

When we speak of *using* energy, we are really referring to *transferring* energy from one place to another. When you use energy to throw a ball, you transfer energy from your body to the ball, and this causes the ball to fly through the air. When you use energy to warm your house, you transfer energy from the furnace to the air in your home, and this causes the temperature in your house to rise. Although energy is used in many kinds of different situations, all of these uses rely on energy being transferred in one of two ways. Energy can be transferred as *heat* or as *work*.

When scientists speak of **heat**, they are referring to energy that is transferred from an object with a higher temperature to an object with a lower temperature, as a result of the temperature difference. Heat will "flow" from the hot object to the cold object until both end up at the same temperature. When you cook with a metal pot, you witness energy being transferred in the form of heat. Initially, only the stove element is hot—the pot and the food inside the pot are cold. As a result, heat moves from the hot stove element to the cold pot. After a while, enough heat is transferred from the stove to the pot, raising the temperature of the pot and all of its contents (Figure 3.8.1).



Figure 3.8.1: Energy is transferred as heat from the hot stove element to the cooler pot until the pot and its contents become just as hot as the element. The energy that is transferred into the pot as heat is then used to cook the food.

Heat is only one way in which energy can be transferred. Energy can also be transferred as **work**. The scientific definition of work is *force (any push or pull) applied over a distance*. When you push an object and cause it to move, you do work, and you transfer some of *your* energy to the object. At this point, it's important to warn you of a common misconception. Sometimes we think that the amount of work done can be measured by the amount of effort put in. This may be true in everyday life, but it is not true in science. By definition, scientific work requires that force be applied *over a distance*. It does not matter how hard you push or how hard you pull. If you have not moved the object, you haven't done any work.

So far, we've talked about the two ways in which energy can be transferred from one place, or object, to another. Energy can be transferred as heat, and energy can be transferred as work. But the question still remains—*what IS energy?*

Kinetic Energy

Machines use energy, our bodies use energy, energy comes from the sun, energy comes from volcanoes, energy causes forest fires, and energy helps us to grow food. With all of these seemingly different types of energy, it's hard to believe that there are really only two different *forms* of energy: kinetic energy and potential energy. **Kinetic energy** is energy associated with motion. When an object is moving, it has kinetic energy. When the object stops moving, it has no kinetic energy. While all moving objects have kinetic energy, not all moving objects have the same amount of kinetic energy. The amount of kinetic energy possessed by an object is determined by its mass and its speed. The heavier an object is and the faster it is moving, the more kinetic energy it has.

Kinetic energy is very common, and it's easy to spot examples of it in the world around you. Sometimes we even try to capture kinetic energy and use it to power things like our home appliances. If you are from California, you might have driven through the Tehachapi Pass near Mojave or the Montezuma Hills in Solano County and seen the windmills lining the slopes of the mountains (Figure 3.8.2). These are two of the larger wind farms in North America. As wind rushes along the hills, the kinetic energy of the moving air particles turns the windmills, trapping the wind's kinetic energy so that people can use it in their houses and offices.



Figure 3.8.2: A wind farm in Solano County harnesses the kinetic energy of the wind. (CC BY-SA 3.0 Unported; [BDS2006](#) at [Wikipedia](#))

Potential Energy

Potential energy is *stored* energy. It is energy that remains available until we choose to use it. Think of a battery in a flashlight. If left on, the flashlight battery will run out of energy within a couple of hours, and the flashlight will die. If, however, you only use the flashlight when you need it, and turn it off when you don't, the battery will last for days or even months. The battery contains a certain amount of energy, and it will power the flashlight for a certain amount of time, but because the battery stores *potential* energy, you can choose to use the energy all at once, or you can save it and only use a small amount at a time.

Any stored energy is potential energy. There are a lot of different ways in which energy can be stored, and this can make potential energy very difficult to recognize. In general, an object has potential energy because of its *position relative to another object*. For example, when a rock is held above the earth, it has potential energy because of its position relative to the ground. This is *potential energy* because the energy is *stored* for as long as the rock is held in the air. Once the rock is dropped, though, the stored energy is released as kinetic energy as the rock falls.

Chemical Energy

There are other common examples of potential energy. A ball at the top of a hill stores potential energy until it is allowed to roll to the bottom. When two magnets are held next to one another, they store potential energy too. For some examples of potential energy, though, it's harder to see how "position" is involved. In chemistry, we are often interested in what is called **chemical potential energy**. Chemical potential energy is energy stored in the atoms, molecules, and chemical bonds that make up matter. How does this depend on position?

As you learned earlier, the world, and all of the chemicals in it are made up of atoms and molecules. These store potential energy that is dependent on their positions relative to one another. Of course, you can't see atoms and molecules. Nevertheless, scientists do know a lot about the ways in which atoms and molecules interact, and this allows them to figure out how much potential energy is stored in a specific quantity (like a cup or a gallon) of a particular chemical. *Different chemicals have different amounts of potential energy* because they are made up of different atoms, and those atoms have different positions relative to one another.

Since different chemicals have different amounts of potential energy, scientists will sometimes say that potential energy depends not only on **position**, but also on **composition**. Composition affects potential energy because it determines which molecules and atoms end up next to one another. For example, the total potential energy in a cup of pure water is different than the total potential energy in a cup of apple juice, because the cup of water and the cup of apple juice are *composed* of different amounts of different chemicals.

At this point, you may wonder just how useful chemical potential energy is. If you want to release the potential energy stored in an object held above the ground, you just drop it. But how do you get potential energy out of chemicals? It's actually not difficult. Use the fact that different chemicals have *different amounts of potential energy*. If you start with chemicals that have a lot of potential energy and allow them to react and form chemicals with less potential energy, all the extra energy that was in the chemicals at the beginning, but not at the end, is released.

Units of Energy

Energy is measured in one of two common units: the calorie and the joule. The joule (J) is the SI unit of energy. The calorie is familiar because it is commonly used when referring to the amount of energy contained within food. A **calorie** (cal) is the quantity of heat required to raise the temperature of 1 gram of water by 1°C. For example, raising the temperature of 100 g of water from 20°C to 22°C would require $100 \times 2 = 200$ cal.

Calories contained within food are actually kilocalories (kcal). In other words, if a certain snack contains 85 food calories, it actually contains 85 kcal or 85,000 cal. In order to make the distinction, the dietary calorie is written with a capital C.

$$1 \text{ kilocalorie} = 1 \text{ Calorie} = 1000 \text{ calories}$$

To say that the snack "contains" 85 Calories means that 85 kcal of energy are released when that snack is processed by your body.

Heat changes in chemical reactions are typically measured in joules rather than calories. The conversion between a joule and a calorie is shown below.

$$1 \text{ J} = 0.2390 \text{ cal} \text{ or } 1 \text{ cal} = 4.184 \text{ J}$$

We can calculate the amount of heat released in kilojoules when a 400 Calorie hamburger is digested.

$$400 \text{ Cal} = 400 \text{ kcal} \times \frac{4.184 \text{ kJ}}{1 \text{ kcal}} = 1.67 \times 10^3 \text{ kJ}$$

Summary

- Any time we use energy, we transfer energy from one object to another.
- Energy can be transferred in one of two ways: as heat, or as work.
- Heat is the term given to energy that is transferred from a hot object to a cooler object due to the difference in their temperatures.
- Work is the term given to energy that is transferred as a result of a force applied over a distance.
- Energy comes in two fundamentally different forms: kinetic energy and potential energy.
- Kinetic energy is the energy of motion.
- Potential energy is stored energy that depends on the position of an object relative to another object.
- Chemical potential energy is a special type of potential energy that depends on the positions of different atoms and molecules relative to one another.
- Chemical potential energy can also be thought of according to its dependence on chemical composition.
- Energy can be converted from one form to another. The total amount of mass and energy in the universe is conserved.

Contributions & Attributions

-
- Wikibooks

3.8: Energy is shared under a [CC BY-NC-SA 4.0](#) license and was authored, remixed, and/or curated by LibreTexts.

- 3.8: Energy by Henry Agnew, Marisa Alviar-Agnew is licensed [CK-12](#). Original source: <https://www.ck12.org/c/chemistry/>.

3.9: Energy and Chemical and Physical Change

Template:HideTOC

Learning Objectives

- Define endothermic and exothermic reactions.
- Describe how heat is transferred in endothermic and exothermic reactions.
- Determine whether a reaction is endothermic or exothermic through observations, temperature changes, or an energy diagram.

So far, we have talked about how energy exists as either *kinetic energy* or *potential energy* and how energy can be transferred as either *heat* or *work*. While it's important to understand the difference between kinetic energy and potential energy and the difference between heat and work, the truth is, energy is constantly changing. Kinetic energy is constantly being turned into potential energy, and potential energy is constantly being turned into kinetic energy. Likewise, energy that is transferred as work might later end up transferred as heat, while energy that is transferred as heat might later end up being used to do work.

Even though energy can change form, it must still follow one fundamental law: *Energy cannot be created or destroyed, it can only be changed from one form to another*. This law is known as the **Law of Conservation of Energy**. In a lot of ways, energy is like money. You can exchange quarters for dollar bills and dollar bills for quarters, but no matter how often you convert between the two, you will not end up with any more or any less money than you started with. Similarly, you can transfer (or spend) money using cash, or transfer money using a credit card; but you still spend the same amount of money, and the store still makes the same amount of money.

A campfire is an example of basic thermochemistry. The reaction is initiated by the application of heat from a match. The reaction converting wood to carbon dioxide and water (among other things) continues, releasing heat energy in the process. This heat energy can then be used to cook food, roast marshmallows, or just keep warm when it's cold outside.



An image of a campfire with colored flames, made by the burning of a garden hose in a copper pipe. (CC SA-BY 3.0; Jared)

Exothermic and Endothermic Processes

When physical or chemical changes occur, they are generally accompanied by a transfer of energy. The **law of conservation of energy** states that in any physical or chemical process, energy is neither created nor destroyed. In other words, the entire energy in the universe is conserved. In order to better understand the energy changes taking place during a reaction, we need to define two parts of the universe: *the system* and *the surroundings*. The **system** is the specific portion of matter in a given space that is being studied during an experiment or an observation. The **surroundings** are everything in the universe that is not part of the system. In practical terms for a laboratory chemist, the system is the particular chemicals being reacted, while the surroundings are the immediate vicinity within the room. During most processes, energy is exchanged between the system and the surroundings. If the system loses a certain amount of energy, that same amount of energy is gained by the surroundings. If the system gains a certain amount of energy, that energy is supplied by the surroundings.

A chemical reaction or physical change is **endothermic** if heat is absorbed by the system from the surroundings. In the course of an endothermic process, the system gains heat from the surroundings and so the temperature of the surroundings decreases. The quantity of heat for a process is represented by the letter q . The sign of q for an endothermic process is positive because the system is gaining heat. A chemical reaction or physical change is **exothermic** if heat is released by the system into the surroundings. Because the surroundings are gaining heat from the system, the temperature of the surroundings increases. The sign of q for an exothermic process is negative because the system is losing heat.

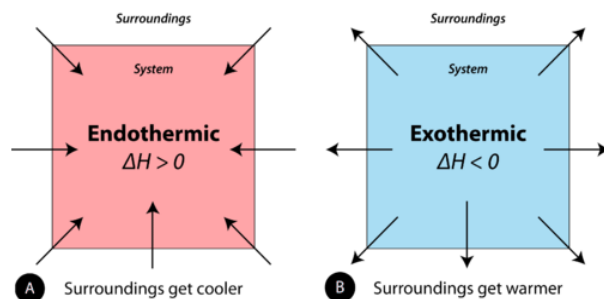


Figure 3.9.1: (A) Endothermic reaction. (B) Exothermic reaction.

Endothermic reaction: surroundings get cooler and ΔH is greater than 0, Exothermic reaction: surroundings get warmer and ΔH is less than 0

During phase changes, energy changes are usually involved. For example, when solid dry ice vaporizes (physical change), carbon dioxide molecules absorb energy. When liquid water becomes ice, energy is released. Remember that all chemical reactions involve a change in the bonds of the reactants. The bonds in the reactants are broken and the bonds of the products are formed. Chemical bonds have **potential energy** or "stored energy". Because we are changing the bonding, this means we are also changing how much of this "stored energy" there is in a reaction.

Energy changes are frequently shown by drawing an energy diagram. Energy diagrams show the stored/hidden energy of the reactants and products as well as the activation energy. If, on an energy diagram, the products have more stored energy than the reactants started with, the reaction is endothermic. You had to give the reaction energy. If, on the energy diagram, the products have less stored energy than the reactants started with, the reaction is exothermic.

✓ Example 3.9.1

Label each of the following processes as endothermic or exothermic.

- water boiling
- gasoline burning
- ice forming on a pond

Solution

- Endothermic—you must put a pan of water on the stove and give it heat in order to get water to boil. Because you are adding heat/energy, the reaction is endothermic.
- Exothermic—when you burn something, it feels hot to you because it is giving off heat into the surroundings.
- Exothermic—think of ice forming in your freezer instead. You put water into the freezer, which takes heat out of the water, to get it to freeze. Because heat is being pulled out of the water, it is exothermic. Heat is leaving.

? Exercise 3.9.1

Label each of the following processes as endothermic or exothermic.

- water vapor condensing
- gold melting

Answer (a)

exothermic

Answer (b)

Summary

Phase changes involve changes in energy. All chemical reactions involve changes in energy. This may be a change in heat, electricity, light, or other forms of energy. Reactions that absorb energy are endothermic. Reactions that release energy are exothermic.

3.9: Energy and Chemical and Physical Change is shared under a [CC BY-NC-SA 4.0](#) license and was authored, remixed, and/or curated by LibreTexts.

- **3.9: Energy and Chemical and Physical Change** by Henry Agnew, Marisa Alviar-Agnew is licensed [CK-12](#). Original source: <https://www.ck12.org/c/chemistry/>.

3.10: Temperature- Random Motion of Molecules and Atoms

Template:HideTOC

Learning Objectives

- Identify the difference between temperature and heat.
- Recognize the different scales used to measure temperature

The concept of temperature may seem familiar to you, but many people confuse temperature with heat. **Temperature** is a measure of how hot or cold an object is relative to another object (its thermal energy content), whereas **heat** is the flow of thermal energy between objects with different temperatures. Temperature is a measure of the average kinetic energy of the particles in matter. In everyday usage, temperature indicates a measure of how hot or cold an object is. Temperature is an important parameter in chemistry. When a substance changes from solid to liquid, it is because there was an increase in the temperature of the material. Chemical reactions usually proceed faster if the temperature is increased. Many unstable materials (such as enzymes) will be viable longer at lower temperatures.



Figure 3.10.1: The glowing charcoal on the left represents high kinetic energy, while the snow and ice on the right are of much lower kinetic energy.

Three different scales are commonly used to measure temperature: Fahrenheit (expressed as °F), Celsius (°C), and Kelvin (K). Thermometers measure temperature by using materials that expand or contract when heated or cooled. Mercury or alcohol thermometers, for example, have a reservoir of liquid that expands when heated and contracts when cooled, so the liquid column lengthens or shortens as the temperature of the liquid changes.



Figure 3.10.2: Daniel Gabriel Fahrenheit (left), Anders Celsius (center), and Lord Kelvin (right).

The Fahrenheit Scale

The first thermometers were glass and contained alcohol, which expanded and contracted as the temperature changed. The German scientist, Daniel Gabriel Fahrenheit used mercury in the tube, an idea put forth by Ismael Boulliau. The Fahrenheit scale was first developed in 1724 and tinkered with for some time after that. The main problem with this scale is the arbitrary definitions of temperature. The freezing point of water was defined as 32°F and the boiling point as 212°F. The Fahrenheit scale is typically not used for scientific purposes.

The Celsius Scale

The Celsius scale of the metric system is named after Swedish astronomer Anders Celsius (1701-1744). The Celsius scale sets the freezing point and boiling point of water at 0°C and 100°C respectively. The distance between those two points is divided into 100 equal intervals, each of which is one degree. Another term sometimes used for the Celsius scale is "centigrade" because there are 100 degrees between the freezing and boiling points of water on this scale. However, the preferred term is "Celsius".

The Kelvin Scale

The Kelvin temperature scale is named after Scottish physicist and mathematician Lord Kelvin (1824-1907). It is based on molecular motion, with the temperature of 0 K, also known as absolute zero, being the point where all molecular motion ceases. The freezing point of water on the Kelvin scale is 273.15 K while the boiling point is 373.15 K. Notice that there is no "degree" used in the temperature designation. Unlike the Fahrenheit and Celsius scales where temperatures are referred to as "degrees F" or "degrees C", we simply designate temperatures in the Kelvin scale as kelvins.

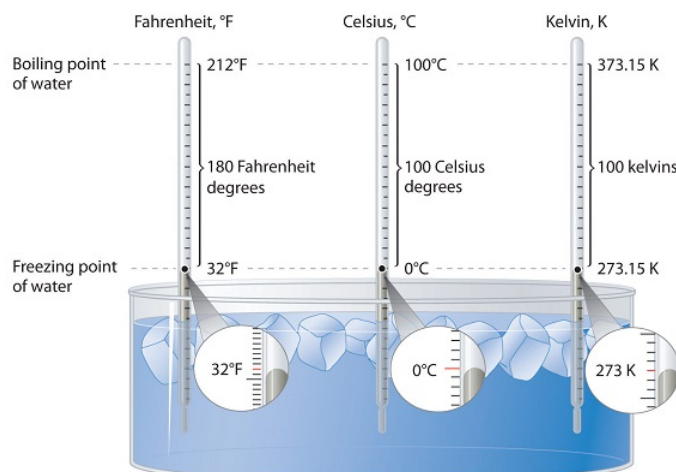


Figure 3.10.1: A Comparison of the Fahrenheit, Celsius, and Kelvin Temperature Scales. Because the difference between the freezing point of water and the boiling point of water is 100° on both the Celsius and Kelvin scales, the size of a degree Celsius (°C) and a kelvin (K) are precisely the same. In contrast, both a degree Celsius and a kelvin are 9/5 the size of a degree Fahrenheit (°F). (CC BY-SA-NC 3.0; anonymous)

Converting Between Scales

The Kelvin is the same size as the Celsius degree, so measurements are easily converted from one to the other. The freezing point of water is 0°C = 273.15 K; the boiling point of water is 100°C = 373.15 K. The Kelvin and Celsius scales are related as follows:

$$T \text{ (in } ^\circ\text{C)} + 273.15 = T \text{ (in K)} \quad (3.10.1)$$

$$T \text{ (in K)} - 273.15 = T \text{ (in } ^\circ\text{C)} \quad (3.10.2)$$

Degrees on the Fahrenheit scale, however, are based on an English tradition of using 12 divisions, just as 1 ft = 12 in. The relationship between degrees Fahrenheit and degrees Celsius is as follows: where the coefficient for degrees Fahrenheit is exact. (Some calculators have a function that allows you to convert directly between °F and °C.) There is only one temperature for which the numerical value is the same on both the Fahrenheit and Celsius scales: -40°C = -40°F. The relationship between the scales is as follows:

$$^\circ\text{C} = \frac{(^{\circ}\text{F} - 32)}{1.8} \quad (3.10.3)$$

$$^\circ\text{F} = 1.8 \times (^\circ\text{C}) + 32 \quad (3.10.4)$$

✓ Example 3.10.1: Temperature Conversions

A student is ill with a temperature of 103.5°F. What is her temperature in °C and K?

Solution

Converting from Fahrenheit to Celsius requires the use of Equation 3.10.3

$$^\circ\text{C} = \frac{(103.5^\circ\text{F} - 32)}{1.8} \quad (3.10.1)$$

$$= 39.7^\circ\text{C} \quad (3.10.2)$$

Converting from Celsius to Kelvin requires the use of Equation 3.10.1:

$$K = 39.7\text{ }^{\circ}\text{C} + 273.15 \quad (3.10.3)$$

$$= 312.9\text{ }K \quad (3.10.4)$$

? Exercise 3.10.1

Convert each temperature to °C and °F.

- the temperature of the surface of the sun (5800 K)
- the boiling point of gold (3080 K)
- the boiling point of liquid nitrogen (77.36 K)

Answer (a)

5527 K, 9980 °F

Answer (b)

2807 K, 5084 °F

Answer (c)

-195.79 K, -320.42 °F

Summary

Three different scales are commonly used to measure temperature: Fahrenheit (expressed as °F), Celsius (°C), and Kelvin (K).

Contributions & Attributions

3.10: Temperature- Random Motion of Molecules and Atoms is shared under a [CC BY-NC-SA 4.0](#) license and was authored, remixed, and/or curated by LibreTexts.

- 3.10: Temperature - Random Motion of Molecules and Atoms** by Henry Agnew, Marisa Alviar-Agnew is licensed [CK-12](#). Original source: <https://www.ck12.org/c/chemistry/>.

3.11: Temperature Changes- Heat Capacity

Template:HideTOC

If a swimming pool and wading pool, both full of water at the same temperature, were subjected to the same input of heat energy, the wading pool would certainly rise in temperature more quickly than the swimming pool. The heat capacity of an object depends on both its mass and its chemical composition. Because of its much larger mass, the swimming pool of water has a larger heat capacity than the wading pool.

Heat Capacity and Specific Heat

Different substances respond to heat in different ways. If a metal chair sits in the bright sun on a hot day, it may become quite hot to the touch. An equal mass of water in the same sun will not become nearly as hot. We would say that water has a high **heat capacity** (the amount of heat required to raise the temperature of an object by 1°C). Water is very resistant to changes in temperature, while metals in general are not. The **specific heat** of a substance is the amount of energy required to raise the temperature of 1 gram of the substance by 1°C. The symbol for specific heat is c_p , with the p subscript referring to the fact that specific heats are measured at constant pressure. The units for specific heat can either be joules per gram per degree (J/g°C) or calories per gram per degree (cal/g°C) (Table 3.11.1). This text will use J/g°C for specific heat.

$$\text{specific heat} = \frac{\text{heat}}{\text{mass} \times \text{cal/g}^\circ\text{C}}$$

Notice that water has a very high specific heat compared to most other substances.

Table 3.11.1: Specific Heat Capacities

Substance	Specific Heat Capacity at 25°C in J/g °C	Substance	Specific Heat Capacity at 25°C in J/g °C
H ₂ gas	14.267	steam @ 100°C	2.010
He gas	5.300	vegetable oil	2.000
H ₂ O(l)	4.184	sodium	1.23
lithium	3.56	air	1.020
ethyl alcohol	2.460	magnesium	1.020
ethylene glycol	2.200	aluminum	0.900
ice @ 0°C	2.010	concrete	0.880
steam @ 100°C	2.010	glass	0.840

Water is commonly used as a coolant for machinery because it is able to absorb large quantities of heat (see table above). Coastal climates are much more moderate than inland climates because of the presence of the ocean. Water in lakes or oceans absorbs heat from the air on hot days and releases it back into the air on cool days.



Figure 3.11.1: This power plant in West Virginia, like many others, is located next to a large lake so that the water from the lake can be used as a coolant. Cool water from the lake is pumped into the plant, while warmer water is pumped out of the plant and back into the lake.

Summary

- Heat capacity is the amount of heat required to raise the temperature of an object by 1°C .
- The specific heat of a substance is the amount of energy required to raise the temperature of 1 gram of the substance by 1°C .

3.11: Temperature Changes- Heat Capacity is shared under a [CC BY-NC-SA 4.0](#) license and was authored, remixed, and/or curated by LibreTexts.

- **3.11: Temperature Changes - Heat Capacity** by Henry Agnew, Marisa Alviar-Agnew is licensed [CK-12](#). Original source: <https://www.ck12.org/c/chemistry/>.

3.12: Energy and Heat Capacity Calculations

Template:HideTOC

Learning Objectives

- To relate heat transfer to temperature change.

Heat is a familiar manifestation of transferring energy. When we touch a hot object, energy flows from the hot object into our fingers, and we perceive that incoming energy as the object being “hot.” Conversely, when we hold an ice cube in our palms, energy flows from our hand into the ice cube, and we perceive that loss of energy as “cold.” In both cases, the temperature of the object is different from the temperature of our hand, so we can conclude that differences in temperatures are the ultimate cause of heat transfer.

The specific heat of a substance can be used to calculate the temperature change that a given substance will undergo when it is either heated or cooled. The equation that relates heat (q) to specific heat (c_p), mass (m), and temperature change (ΔT) is shown below.

$$q = c_p \times m \times \Delta T$$

The heat that is either absorbed or released is measured in joules. The mass is measured in grams. The change in temperature is given by $\Delta T = T_f - T_i$, where T_f is the final temperature and T_i is the initial temperature.

Every substance has a characteristic specific heat, which is reported in units of $\text{cal/g}\cdot^\circ\text{C}$ or $\text{cal/g}\cdot\text{K}$, depending on the units used to express ΔT . The specific heat of a substance is the amount of energy that must be transferred to or from 1 g of that substance to change its temperature by 1° . Table 3.12.1 lists the specific heats for various materials.

Table 3.12.1: Specific Heats of Some Common Substances

Substance	Specific Heat ($\text{J/g}\cdot^\circ\text{C}$)
Water (l)	4.18
Water (s)	2.06
Water (g)	1.87
Ammonia (g)	2.09
Ethanol (l)	2.44
Aluminum (s)	0.897
Carbon, graphite (s)	0.709
Copper (s)	0.385
Gold (s)	0.129
Iron (s)	0.449
Lead (s)	0.129
Mercury (l)	0.140
Silver (s)	0.233

The *direction* of heat flow is not shown in $\text{heat} = mc\Delta T$. If energy goes into an object, the total energy of the object increases, and the values of heat ΔT are positive. If energy is coming out of an object, the total energy of the object decreases, and the values of heat and ΔT are negative.

✓ Example 3.12.1

A 15.0 g piece of cadmium metal absorbs 134 J of heat while rising from 24.0°C to 62.7°C. Calculate the specific heat of cadmium.

Solution

Step 1: List the known quantities and plan the problem.

Known

- Heat = $q = 134 \text{ J}$
- Mass = $m = 15.0 \text{ g}$
- $\Delta T = 62.7^\circ\text{C} - 24.0^\circ\text{C} = 38.7^\circ\text{C}$

Unknown

- c_p of cadmium = ? J/g°C

The specific heat equation can be rearranged to solve for the specific heat.

Step 2: Solve.

$$c_p = \frac{q}{m \times \Delta T} = \frac{134 \text{ J}}{15.0 \text{ g} \times 38.7^\circ\text{C}} = 0.231 \text{ J/g}^\circ\text{C}$$

Step 3: Think about your result.

The specific heat of cadmium, a metal, is fairly close to the specific heats of other metals. The result has three significant figures.

Since most specific heats are known (Table 3.12.1), they can be used to determine the final temperature attained by a substance when it is either heated or cooled. Suppose that a 60.0 g of water at 23.52°C was cooled by the removal of 813 J of heat. The change in temperature can be calculated using the specific heat equation:

$$\Delta T = \frac{q}{c_p \times m} = \frac{813 \text{ J}}{4.18 \text{ J/g}^\circ\text{C} \times 60.0 \text{ g}} = 3.24^\circ\text{C}$$

Since the water was being cooled, the temperature decreases. The final temperature is:

$$T_f = 23.52^\circ\text{C} - 3.24^\circ\text{C} = 20.28^\circ\text{C}$$

✓ Example 3.12.2

What quantity of heat is transferred when a 150.0 g block of iron metal is heated from 25.0°C to 73.3°C? What is the direction of heat flow?

Solution

We can use $\text{heat} = mc\Delta T$ to determine the amount of heat, but first we need to determine ΔT . Because the final temperature of the iron is 73.3°C and the initial temperature is 25.0°C, ΔT is as follows:

$$\Delta T = T_{\text{final}} - T_{\text{initial}} = 73.3^\circ\text{C} - 25.0^\circ\text{C} = 48.3^\circ\text{C}$$

The mass is given as 150.0 g, and Table 7.3 gives the specific heat of iron as 0.108 cal/g•°C. Substitute the known values into $\text{heat} = mc\Delta T$ and solve for amount of heat:

$$\text{heat} = (150.0 \text{ g}) \left(0.108 \frac{\text{cal}}{\text{g} \cdot ^\circ\text{C}} \right) (48.3^\circ\text{C}) = 782 \text{ cal}$$

Note how the gram and °C units cancel algebraically, leaving only the calorie unit, which is a unit of heat. Because the temperature of the iron increases, energy (as heat) must be flowing *into* the metal.

? Exercise 3.12.1

What quantity of heat is transferred when a 295.5 g block of aluminum metal is cooled from 128.0°C to 22.5°C? What is the direction of heat flow?

Answer

Heat leaves the aluminum block.

✓ Example 3.12.2

A 10.3 g sample of a reddish-brown metal gave off 71.7 cal of heat as its temperature decreased from 97.5°C to 22.0°C. What is the specific heat of the metal? Can you identify the metal from the data in Table 3.12.1?

Solution

The question gives us the heat, the final and initial temperatures, and the mass of the sample. The value of ΔT is as follows:

$$\Delta T = T_{\text{final}} - T_{\text{initial}} = 22.0^{\circ}\text{C} - 97.5^{\circ}\text{C} = -75.5^{\circ}\text{C}$$

If the sample gives off 71.7 cal, it loses energy (as heat), so the value of heat is written as a negative number, -71.7 cal. Substitute the known values into $\text{heat} = mc\Delta T$ and solve for c :

$$-71.7 \text{ cal} = (10.3 \text{ g})(c)(-75.5^{\circ}\text{C})$$

$$c = \frac{-71.7 \text{ cal}}{(10.3 \text{ g})(-75.5^{\circ}\text{C})}$$

$$c = 0.0923 \text{ cal/g}\cdot^{\circ}\text{C}$$

This value for specific heat is very close to that given for copper in Table 7.3.

? Exercise 3.12.2

A 10.7 g crystal of sodium chloride (NaCl) has an initial temperature of 37.0°C. What is the final temperature of the crystal if 147 cal of heat were supplied to it?

Answer

Summary

Specific heat calculations are illustrated.

3.12: Energy and Heat Capacity Calculations is shared under a [CC BY-NC-SA 4.0](#) license and was authored, remixed, and/or curated by LibreTexts.

- 3.12: Energy and Heat Capacity Calculations by Henry Agnew, Marisa Alviar-Agnew is licensed [CK-12](#). Original source: <https://www.ck12.org/c/chemistry/>.

3.E: Exercises

[Template:HideTOC](#)

3.1: In Your Room

3.2: What Is Matter?

1. What is matter?
2. What does weight mean?
3. In this chapter, we'll learn about atoms, which are the building blocks of all matter in the universe. As of 2011, scientists only know of 118 different types of atoms. How do you think it's possible to generate so many different forms of matter using only 118 types of building blocks?
4. Which do you think has more matter, a cup of water or a cup of mercury? Explain.
5. Decide whether each of the following statements is true or false.
 - a. Mass and weight are two words for the same concept.
 - b. Molecules are bonded together to form atoms.
 - c. Alchemists couldn't make gold out of common metals because gold is an element.
 - d. The symbol for Gold in the periodic table is Gd.
6. Would you have more mass on the moon or on Earth?
7. Would you have more weight on the moon or on Earth? The force of gravity is stronger on the Earth than it is on the moon.
8. Match the following terms with their meaning.

Terms	Definitions
(a) Mass	a. a measure of the total quantity of matter in an object
(b) Volume	b. a measure of how strongly gravity pulls on an object
(c) Weight	c. a measure of the space occupied by an object

9. For the following statements, circle all of the options that apply:

- Mass depends on...
 - (a) the total quantity of matter
 - (b) the temperature
 - (c) the location
 - (d) the force of gravity
- Volume depends on...
 - (a) the total quantity of matter
 - (b) the temperature
 - (c) the object's shape (independent of size)
 - (d) the object's size (independent of shape)
- Weight depends on...
 - (a) the total quantity of matter
 - (b) the temperature
 - (c) the location
 - (d) the force of gravity

3.3: Classifying Matter According to Its State: Solid, Liquid, and Gas

3.4 Classifying Matter According to Its Composition

3.5: Differences in Matter: Physical and Chemical Properties

3.6: Changes in Matter: Physical and Chemical Changes

3.7: Conservation of Mass: There is No New Matter

3.8: Energy

- Classify each of the following as energy primarily transferred as heat, or energy primarily transferred as work:
 - The energy transferred from your body to a shopping cart as you push the shopping cart down the aisle.
 - The energy transferred from a wave to your board when you go surfing.
 - The energy transferred from the flames to your hotdog when you cook your hotdog over a campfire.
- Decide whether each of the following statements is true or false:
 - When heat is transferred to an object, the object cools down.
 - Any time you raise the temperature of an object, you have done work.
 - Any time you move an object by applying force, you have done work.
 - Any time you apply force to an object, you have done work.
- Rank the following scenarios in order of increasing work:
 - You apply 100 N of force to a boulder and successfully move it by 2 m.
 - You apply 100 N of force to a boulder and successfully move it by 1 m.
 - You apply 200 N of force to a boulder and successfully move it by 2 m.
 - You apply 200 N of force to a boulder but cannot move the boulder.
- In science, a vacuum is defined as space that contains absolutely no matter (no molecules, no atoms, etc.) Can energy be transferred as heat through a vacuum? Why or why not?
- Classify each of the following energies as kinetic energy or potential energy:
 - The energy in a chocolate bar.
 - The energy of rushing water used to turn a turbine or a water wheel.
 - The energy of a skater gliding on the ice.
 - The energy in a stretched rubber band.
- Decide which of the following objects has more kinetic energy:
 - A 200 lb. man running at 6 mph or a 200 lb. man running at 3 mph.
 - A 200 lb. man running at 7 mph or a 150 lb. man running at 7 mph.
 - A 400 lb. man running at 5 mph or a 150 lb. man running at 3 mph.
- A car and a truck are traveling along the highway at the same speed.
 - If the car weighs 1500 kg and the truck weighs 2500 kg, which has more kinetic energy, the car or the truck?
 - Both the car and the truck convert the potential energy stored in gasoline into the kinetic energy of motion. Which do you think uses more gas to travel the same distance, the car or the truck?
- You mix two chemicals in a beaker and notice that as the chemicals react, the beaker becomes noticeably colder. Which chemicals have more chemical potential energy, those present at the start of the reaction or those present at the end of the reaction?

3.9: Energy and Chemical and Physical Change

3.10: Temperature: Random Motion of Molecules and Atoms

3.11: Temperature Changes: Heat Capacity

3.12: Energy and Heat Capacity Calculations

- A pot of water is set on a hot burner of a stove. What is the direction of heat flow?
- Some uncooked macaroni is added to a pot of boiling water. What is the direction of heat flow?
- How much energy in calories is required to heat 150 g of H_2O from 0°C to 100°C ?
- How much energy in calories is required to heat 125 g of Fe from 25°C to 150°C ?

5. If 250 cal of heat were added to 43.8 g of Al at 22.5°C, what is the final temperature of the aluminum?
6. If 195 cal of heat were added to 33.2 g of Hg at 56.2°C, what is the final temperature of the mercury?
7. A sample of copper absorbs 145 cal of energy, and its temperature rises from 37.8°C to 41.7°C. What is the mass of the copper?
8. A large, single crystal of sodium chloride absorbs 98.0 cal of heat. If its temperature rises from 22.0°C to 29.7°C, what is the mass of the NaCl crystal?
9. If 1.00 g of each substance in Table 7.3 were to absorb 100 cal of heat, which substance would experience the largest temperature change?
10. If 1.00 g of each substance in Table 7.3 were to absorb 100 cal of heat, which substance would experience the smallest temperature change?
11. Determine the heat capacity of a substance if 23.6 g of the substance gives off 199 cal of heat when its temperature changes from 37.9°C to 20.9°C.
12. What is the heat capacity of gold if a 250 g sample needs 133 cal of energy to increase its temperature from 23.0°C to 40.1°C?

Answers

1. Heat flows into the pot of water.
3. 15,000 cal
5. 49.0°C
7. 404 g
9. Mercury would experience the largest temperature change.
11. 0.496 cal/g•°C

3.E: Exercises is shared under a [CC BY-NC-SA 4.0](#) license and was authored, remixed, and/or curated by LibreTexts.

- **3.E: Matter and Energy (Exercises)** by Henry Agnew, Marisa Alviar-Agnew is licensed [CK-12](#). Original source: <https://www.ck12.org/c/chemistry/>.

CHAPTER OVERVIEW

4: Atoms and Elements

The basic building block of all matter is the atom. Curiously, the idea of atoms was first proposed in the fifth century BCE, when the Greek philosophers Leucippus and Democritus proposed their existence in a surprisingly modern fashion. However, their ideas never took hold among their contemporaries, and it wasn't until the early 1800s that evidence amassed to make scientists reconsider the idea. Today, the concept of the atom is central to the study of matter.

[4.1: Experiencing Atoms at Tiburon](#)

[4.2: Indivisible- The Atomic Theory](#)

[4.3: The Nuclear Atom](#)

[4.4: The Properties of Protons, Neutrons, and Electrons](#)

[4.5: Elements- Defined by Their Numbers of Protons](#)

[4.6: Looking for Patterns- The Periodic Law and the Periodic Table](#)

[4.7: Ions- Losing and Gaining Electrons](#)

[4.8: Isotopes- When the Number of Neutrons Varies](#)

[4.9: Atomic Mass- The Average Mass of an Element's Atoms](#)

[4: Atoms and Elements](#) is shared under a [CC BY-NC-SA 4.0](#) license and was authored, remixed, and/or curated by LibreTexts.

4.1: Experiencing Atoms at Tiburon

Template:HideTOC

Take some aluminum foil. Cut it in half. Now there are two smaller pieces of aluminum foil. Cut one of the pieces in half again. Cut one of those smaller pieces in half again. Continue cutting, making smaller and smaller pieces of aluminum foil. It should be obvious that the pieces are still aluminum foil; they are just becoming smaller and smaller. But how far can this exercise be taken, at least in theory? Can one continue cutting the aluminum foil into halves forever, making smaller and smaller pieces? Or is there some limit, some absolute smallest piece of aluminum foil? Thought experiments like this—and the conclusions based on them—were debated as far back as the fifth century BC by Democritus and other ancient Greek philosophers (Figure 4.1.1).

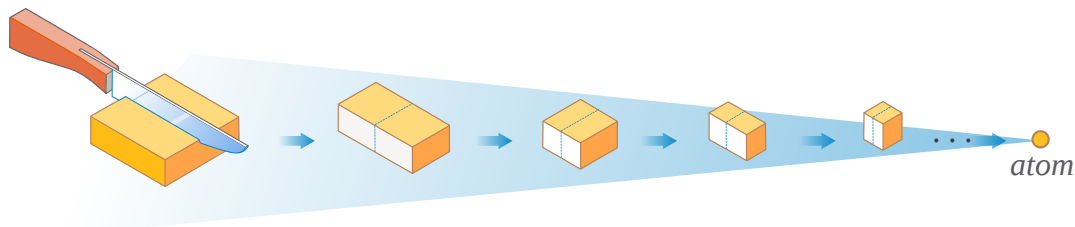


Figure 4.1.1: Democritus argued that matter, like an aluminum block, cannot be repeatedly cut in half perpetually. At some point, a limit is reached before the substance can no longer be called "aluminum"; this is the atomic limit. (CC BY-NC; Ümit Kaya via LibreTexts)

Most elements in their pure form exist as individual atoms. For example, a macroscopic chunk of iron metal is composed, microscopically, of individual atoms. Some elements, however, exist as groups of atoms called molecules. Several important elements exist as two-atom combinations and are called diatomic molecules. In representing a diatomic molecule, we use the symbol of the element and include the subscript 2 to indicate that two atoms of that element are joined together. The elements that exist as diatomic molecules are hydrogen (H_2), oxygen (O_2), nitrogen (N_2), fluorine (F_2), chlorine (Cl_2), bromine (Br_2), and iodine (I_2).

4.1: Experiencing Atoms at Tiburon is shared under a [CC BY-NC-SA 4.0](#) license and was authored, remixed, and/or curated by LibreTexts.

- **4.1: Cutting Aluminum until you get Atoms** by Henry Agnew, Marisa Alviar-Agnew is licensed [CK-12](#). Original source: <https://www.ck12.org/c/chemistry/>.

4.2: Indivisible- The Atomic Theory

Template:HideTOC

Learning Objectives

- Give a short history of the concept of the atom.
- Describe the contributions of Democritus and Dalton to atomic theory.
- Summarize Dalton's atomic theory and explain its historical development.

You learned earlier that all matter in the universe is made out of tiny building blocks called atoms. All modern scientists accept the concept of the atom, but when the concept of the atom was first proposed about 2,500 years ago, ancient philosophers laughed at the idea. It has always been difficult to convince people of the existence of things that are too small to see. We will spend some time considering the evidence (observations) that convince scientists of the existence of atoms.

Democritus and the Greek Philosophers

About 2,500 years ago, early Greek philosophers believed the entire universe was a single, huge, entity. In other words, "everything was one." They believed that all objects, all matter, and all substances were connected as a single, big, unchangeable "thing." One of the first people to propose "atoms" was a man known as Democritus. As an alternative to the beliefs of the Greek philosophers, he suggested that **atomos**, or atomon—tiny, indivisible, solid objects—make up all matter in the universe.



Figure 4.2.1: (left) Democritus by Hendrick ter Brugghen, 1628. Democritus was known as the "laughing philosopher." It was a good thing he liked to laugh, because most other philosophers were laughing at his theories. (right) British physicist and chemist John Dalton (1766-1844). Unlike the Greek philosophers, John Dalton believed in both logical thinking and experimentation.

Democritus then reasoned that changes occur when the many atomos in an object were reconnected or recombined in different ways. Democritus even extended this theory, suggesting that there were different varieties of atomos with different shapes, sizes, and masses. He thought, however, that shape, size, and mass were the only properties differentiating the different types of atomos. According to Democritus, other characteristics, like color and taste, did not reflect properties of the atomos themselves, but rather, resulted from the different ways in which the atomos were combined and connected to one another.

The early Greek philosophers tried to understand the nature of the world through reason and logic, but not through experiment and observation. As a result, they had some very interesting ideas, but they felt no need to justify their ideas based on life experiences. In a lot of ways, you can think of the Greek philosophers as being "all thought and no action." It's truly amazing how much they achieved using their minds, but because they never performed any experiments, they missed or rejected a lot of discoveries that they could have made otherwise. Greek philosophers dismissed Democritus' theory entirely. Sadly, it took over two millennia before the theory of atomos (or "atoms," as they are known today) was fully appreciated.

📌 Greeks: "All Thought and No Action"

Greek philosophers were "all thought and no action" and did not feel the need to test their theories with reality. In contrast, Dalton's efforts were based on experimentation and testing ideas against reality.

While it must be assumed that many more scientists, philosophers, and others studied composition of matter after Democritus, a major leap forward in our understanding of the composition of matter took place in the 1800's with the work of the British scientists John Dalton. He started teaching school at age twelve, and was primarily known as a teacher. In his twenties, he moved to

the growing city of Manchester, where he was able to pursue some scientific studies. His work in several areas of science brought him a number of honors. When he died, over 40,000 people in Manchester marched at his funeral.

The modern atomic theory, proposed about 1803 by the English chemist John Dalton (Figure 4.2.1), is a fundamental concept that states that all elements are composed of atoms. Previously, we defined an atom as the smallest part of an element that maintains the identity of that element. Individual atoms are extremely small; even the largest atom has an approximate diameter of only 5.4×10^{-10} m. With that size, it takes over 18 million of these atoms, lined up side by side, to equal the width of your little finger (about 1 cm).

Dalton studied the weights of various elements and compounds. He noticed that matter always combined in fixed ratios based on weight, or volume in the case of gases. Chemical compounds always contain the same proportion of elements by mass, regardless of amount, which provided further support for Proust's law of definite proportions. Dalton also observed that there could be more than one combination of two elements.

From his experiments and observations, as well as the work from peers of his time, Dalton proposed a new theory of the **atom**. This later became known as Dalton's **atomic theory**. The general tenets of this theory were as follows:

- All matter is composed of extremely small particles called atoms.
- Atoms of a given element are identical in size, mass, and other properties. Atoms of different elements differ in size, mass, and other properties.
- Atoms cannot be subdivided, created, or destroyed.
- Atoms of different elements can combine in simple whole number ratios to form chemical compounds.
- In chemical reactions, atoms are combined, separated, or rearranged.

Dalton's atomic theory has been largely accepted by the scientific community, with the exception of three changes. We know now that (1) an atom can be further subdivided, (2) all atoms of an element are not identical in mass, and (3) using nuclear fission and fusion techniques, we can create or destroy atoms by changing them into other atoms.




Figure 4.2.2: Dalton's symbols from his text "A New System of Chemical Philosophy."

The evidence for atoms is so great that few doubt their existence. In fact, individual atoms are now routinely observed with state-of-the-art technologies. Moreover, they can even be used for making pretty images; or as IBM research demonstrates in Video 4.2.1, control of individual atoms can be used to create animations.



Video 4.2.1: A Boy And His Atom: The World's Smallest Movie.

A Boy and His Atom is a 2012 stop-motion animated short film released by IBM Research. The movie tells the story of a boy and a wayward atom who meet and become friends. It depicts a boy playing with an atom that takes various forms. It was made by moving carbon monoxide molecules viewed with a scanning tunneling microscope, a device that magnifies them 100 million times. These molecules were moved to create images, which were then saved as individual frames to make the film.

Summary

- 2,500 years ago, Democritus suggested that all matter in the universe was made up of tiny, indivisible, solid objects he called "atomos." However, other Greek philosophers disliked Democritus' "atomos" theory because they felt it was illogical.
- Dalton's Atomic Theory is the first scientific theory to relate chemical changes to the structure, properties, and behavior of the atom. The general tenets of this theory are:
 - All matter is composed of extremely small particles called atoms.
 - Atoms of a given element are identical in size, mass, and other properties. Atoms of different elements differ in size, mass, and other properties.
 - Atoms cannot be subdivided, created, or destroyed.
 - Atoms of different elements can combine in simple whole number ratios to form chemical compounds.
 - In chemical reactions, atoms are combined, separated, or rearranged.

4.2: Indivisible- The Atomic Theory is shared under a [CC BY-NC-SA 4.0](#) license and was authored, remixed, and/or curated by LibreTexts.

- **4.2: Indivisible - The Atomic Theory** by Henry Agnew, Marisa Alviar-Agnew is licensed [CK-12](#). Original source: <https://www.ck12.org/c/chemistry/>.

4.3: The Nuclear Atom

Template:HideTOC

Learning Objectives

- Explain the observations that led to Thomson's discovery of the electron.
- Describe Thomson's "plum pudding" model of the atom and the evidence for it.
- Draw a diagram of Thomson's "plum pudding" model of the atom and explain why it has this name.
- Describe Rutherford's gold foil experiment and explain how this experiment altered the "plum pudding" model.
- Draw a diagram of the Rutherford model of the atom and label the nucleus and the electron cloud.

Dalton's Atomic Theory held up well to a lot of the different chemical experiments that scientists performed to test it. In fact, for almost 100 years, it seemed as if Dalton's Atomic Theory was the whole truth. However, in 1897, a scientist named J. J. Thomson conducted some research that suggested that Dalton's Atomic Theory was not the entire story. He suggested that the small, negatively charged particles making up the cathode ray were actually pieces of atoms. He called these pieces "corpuscles," although today we know them as **electrons**. Thanks to his clever experiments and careful reasoning, J. J. Thomson is credited with the discovery of the electron.




Figure 4.3.1: J. J. Thomson (center) concluded experiments that suggested that Dalton's (left) atomic theory was not telling the entire story. Ernest Rutherford (right) later built on Thomson's work to argue for the model nuclear atom.

Electrons and Plums

The electron was discovered by J. J. Thomson in 1897. The existence of protons was also known, as was the fact that atoms were neutral in charge. Since the intact atom had no net charge and the electron and proton had opposite charges, the next step after the discovery of subatomic particles was to figure out how these particles were arranged in the atom. This was a difficult task because of the incredibly small size of the atom. Therefore, scientists set out to design a model of what they believed the atom could look like. The goal of each **atomic model** was to accurately represent all of the experimental evidence about atoms in the simplest way possible.

Following the discovery of the electron, J.J. Thomson developed what became known as the "**plum pudding**" model in 1904. Plum pudding is an English dessert similar to a blueberry muffin. In Thomson's plum pudding model of the atom, the electrons were embedded in a uniform sphere of positive charge like blueberries stuck into a muffin. The positive matter was thought to be jelly-like or similar to a thick soup. The electrons were somewhat mobile. As they got closer to the outer portion of the atom, the positive charge in the region was greater than the neighboring negative charges, and the electron would be pulled back more toward the center region of the atom.

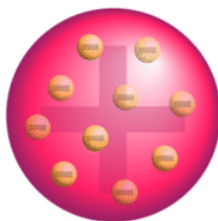


Figure 4.3.2: The "plum pudding" model.

However, this model of the atom soon gave way to a new model developed by New Zealander Ernest Rutherford (1871-1937) about five years later. Thomson did still receive many honors during his lifetime, including being awarded the Nobel Prize in Physics in 1906 and a knighthood in 1908.

Atoms and Gold

In 1911, Rutherford and coworkers Hans Geiger and Ernest Marsden initiated a series of groundbreaking experiments that would completely change the accepted model of the atom. They bombarded very thin sheets of gold foil with fast moving **alpha particles**. Alpha particles, a type of natural radioactive particle, are positively charged particles with a mass about four times that of a hydrogen atom.

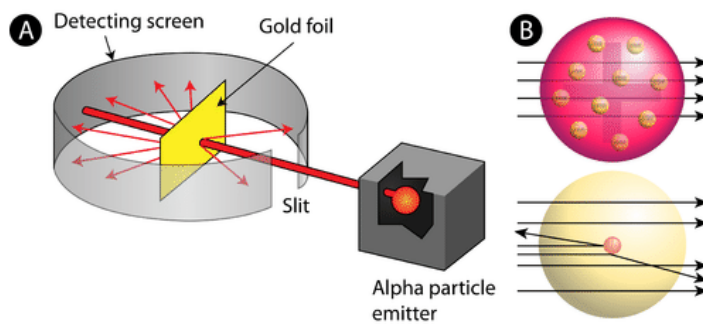


Figure 4.3.3: (A) The experimental setup for Rutherford's gold foil experiment: A radioactive element that emitted alpha particles was directed toward a thin sheet of gold foil that was surrounded by a screen which would allow detection of the deflected particles. (B) According to the plum pudding model (top), all of the alpha particles should have passed through the gold foil with little or no deflection. Rutherford found that a small percentage of alpha particles were deflected at large angles, which could be explained by an atom with a very small, dense, positively-charged nucleus at its center (bottom).

According to the accepted atomic model, in which an atom's mass and charge are uniformly distributed throughout the atom, the scientists expected that all of the alpha particles would pass through the gold foil with only a slight deflection or none at all. Surprisingly, while most of the alpha particles were indeed not deflected, a very small percentage (about 1 in 8000 particles) bounced off the gold foil at very large angles. Some were even redirected back toward the source. No prior knowledge had prepared them for this discovery. In a famous quote, Rutherford exclaimed that it was "as if you had fired a 15-inch [artillery] shell at a piece of tissue and it came back and hit you."

Rutherford needed to come up with an entirely new model of the atom in order to explain his results. Because the vast majority of the alpha particles had passed through the gold, he reasoned that most of the atom was empty space. In contrast, the particles that were highly deflected must have experienced a tremendously powerful force within the atom. He concluded that all of the positive charge and the majority of the mass of the atom must be concentrated in a very small space in the atom's interior, which he called the nucleus. The **nucleus** is the tiny, dense, central core of the atom and is composed of protons and neutrons.

Rutherford's atomic model became known as the **nuclear model**. In the nuclear atom, the protons and neutrons, which comprise nearly all of the mass of the atom, are located in the nucleus at the center of the atom. The electrons are distributed around the nucleus and occupy most of the volume of the atom. It is worth emphasizing just how small the nucleus is compared to the rest of the atom. If we could blow up an atom to be the size of a large professional football stadium, the nucleus would be about the size of a marble.

Rutherford's model proved to be an important step towards a full understanding of the atom. However, it did not completely address the nature of the electrons and the way in which they occupy the vast space around the nucleus. It was not until some years later that a full understanding of the electron was achieved. This proved to be the key to understanding the chemical properties of elements.

Atomic Nucleus

The **nucleus** (plural, nuclei) is a positively charged region at the center of the atom. It consists of two types of subatomic particles packed tightly together. The particles are protons, which have a positive electric charge, and neutrons, which are neutral in electric charge. Outside of the nucleus, an atom is mostly empty space, with orbiting negative particles called electrons whizzing through it. The figure below shows these parts of the atom.

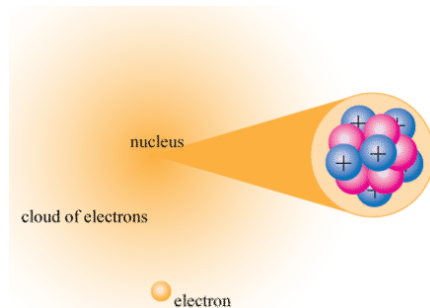


Figure 4.3.4: The nuclear atom.

The nucleus of the atom is extremely small. Its radius is only about $1/100,000$ of the total radius of the atom. Electrons have virtually no mass, but protons and neutrons have a lot of mass for their size. As a result, the nucleus has virtually all the mass of an atom. Given its great mass and tiny size, the nucleus is very dense. If an object the size of a penny had the same density as the nucleus of an atom, its mass would be greater than 30 million tons!

Holding it all Together

Particles with opposite electric charges attract each other. This explains why negative electrons orbit the positive nucleus. Particles with the same electric charge repel each other. This means that the positive protons in the nucleus push apart from one another. So why doesn't the nucleus fly apart? An even stronger force—called the **strong nuclear force**—holds protons and neutrons together in the nucleus.

Summary

- Atoms are the ultimate building blocks of all matter.
- The modern atomic theory establishes the concepts of atoms and how they compose matter.
- Bombardment of gold foil with alpha particles showed that some particles were deflected.
- The nuclear model of the atom consists of a small and dense positively charged interior surrounded by a cloud of electrons.

4.3: The Nuclear Atom is shared under a [CC BY-NC-SA 4.0](#) license and was authored, remixed, and/or curated by LibreTexts.

- 4.3: The Nuclear Atom by Henry Agnew, Marisa Alviar-Agnew is licensed [CK-12](#). Original source: <https://www.ck12.org/c/chemistry/>.

4.4: The Properties of Protons, Neutrons, and Electrons

Template:HideTOC

Learning Objectives

- Describe the locations, charges, and masses of the three main subatomic particles.
- Determine the number of protons and electrons in an atom.
- Define atomic mass unit (amu).

Dalton's Atomic Theory explained a lot about matter, chemicals, and chemical reactions. Nevertheless, it was not entirely accurate, because contrary to what Dalton believed, atoms can, in fact, be broken apart into smaller subunits or subatomic particles. We have been talking about the electron in great detail, but there are two other particles of interest to us: protons and neutrons. We already learned that J. J. Thomson discovered a negatively charged particle, called the **electron**. Rutherford proposed that these electrons orbit a positive nucleus. In subsequent experiments, he found that there is a smaller positively charged particle in the nucleus, called a **proton**. There is also a third subatomic particle, known as a neutron.

Electrons

Electrons are one of three main types of particles that make up atoms. Unlike protons and neutrons, which consist of smaller, simpler particles, electrons are fundamental particles that do not consist of smaller particles. They are a type of fundamental particle called leptons. All leptons have an electric charge of -1 or 0 . Electrons are extremely small. The mass of an electron is only about $1/2000$ the mass of a proton or neutron, so electrons contribute virtually nothing to the total mass of an atom. Electrons have an electric charge of -1 , which is equal but opposite to the charge of a proton, which is $+1$. All atoms have the same number of electrons as protons, so the positive and negative charges "cancel out", making atoms electrically neutral.

Unlike protons and neutrons, which are located inside the nucleus at the center of the atom, electrons are found outside the nucleus. Because opposite electric charges attract one another, negative electrons are attracted to the positive nucleus. This force of attraction keeps electrons constantly moving through the otherwise empty space around the nucleus. The figure below is a common way to represent the structure of an atom. It shows the electron as a particle orbiting the nucleus, similar to the way that planets orbit the sun. However, this is an incorrect perspective, as quantum mechanics demonstrates that electrons are more complicated.



Figure 4.4.1: Electrons are much smaller than protons or neutrons. If an electron was the mass of a penny, a proton or a neutron would have the mass of a large bowling ball!

Protons

A proton is one of three main particles that make up the atom. Protons are found in the nucleus of the atom. This is a tiny, dense region at the center of the atom. Protons have a positive electrical charge of one ($+1$) and a mass of 1 atomic mass unit (amu), which is about 1.67×10^{-27} kilograms. Together with neutrons, they make up virtually all of the mass of an atom.

Neutrons

Atoms of all elements—except for most atoms of hydrogen—have neutrons in their nucleus. Unlike protons and electrons, which are electrically charged, neutrons have no charge—they are electrically neutral. That's why the neutrons in the diagram above are labeled n^0 . The zero stands for "zero charge". The mass of a neutron is slightly greater than the mass of a proton, which is 1 atomic mass unit (amu). (An atomic mass unit equals about 1.67×10^{-27} kilograms.) A neutron also has about the same diameter as a proton, or 1.7×10^{-15} meters.

As you might have already guessed from its name, the neutron is neutral. In other words, it has no charge whatsoever and is therefore neither attracted to nor repelled from other objects. Neutrons are in every atom (with one exception), and they are bound together with other neutrons and protons in the atomic nucleus.

Before we move on, we must discuss how the different types of subatomic particles interact with each other. When it comes to neutrons, the answer is obvious. Since neutrons are neither attracted to nor repelled from objects, they don't really interact with protons or electrons (beyond being bound into the nucleus with the protons).

Even though electrons, protons, and neutrons are all types of subatomic particles, they are not all the same size. When you compare the masses of electrons, protons, and neutrons, what you find is that electrons have an extremely small mass, compared to either protons or neutrons. On the other hand, the masses of protons and neutrons are fairly similar, although technically, the mass of a neutron is slightly larger than the mass of a proton. Because protons and neutrons are so much more massive than electrons, almost all of the mass of any atom comes from the nucleus, which contains all of the neutrons and protons.

Table 4.4.1: Properties of Subatomic Particles

Particle	Symbol	Mass (amu)	Relative Mass (proton = 1)	Relative Charge	Location
proton	p^+	1	1	+1	inside the nucleus
electron	e^-	5.45×10^{-4}	0.00055	-1	outside the nucleus
neutron	n^0	1	1	0	inside the nucleus

Table 4.4.1 gives the properties and locations of electrons, protons, and neutrons. The third column shows the masses of the three subatomic particles in "atomic mass units." An **atomic mass unit (amu)** is defined as one-twelfth of the mass of a carbon-12 atom. Atomic mass units (amu) are useful, because, as you can see, the mass of a proton and the mass of a neutron are almost exactly 1 in this unit system.

Negative and positive charges of equal magnitude cancel each other out. This means that the negative charge on an electron perfectly balances the positive charge on the proton. In other words, a neutral atom must have exactly one electron for every proton. If a neutral atom has 1 proton, it must have 1 electron. If a neutral atom has 2 protons, it must have 2 electrons. If a neutral atom has 10 protons, it must have 10 electrons. You get the idea. In order to be neutral, an atom must have the same number of electrons and protons.

Summary

- Electrons are a type of subatomic particle with a negative charge.
- Protons are a type of subatomic particle with a positive charge. Protons are bound together in an atom's nucleus as a result of the strong nuclear force.
- Neutrons are a type of subatomic particle with no charge (they are neutral). Like protons, neutrons are bound into the atom's nucleus as a result of the strong nuclear force.
- Protons and neutrons have approximately the same mass, but they are both much more massive than electrons (approximately 2,000 times as massive as an electron).
- The positive charge on a proton is equal in magnitude to the negative charge on an electron. As a result, a neutral atom must have an equal number of protons and electrons.
- The atomic mass unit (amu) is a unit of mass equal to one-twelfth the mass of a carbon-12 atom

4.4: The Properties of Protons, Neutrons, and Electrons is shared under a [CC BY-NC-SA 4.0](#) license and was authored, remixed, and/or curated by LibreTexts.

- [4.4: The Properties of Protons, Neutrons, and Electrons](#) by Henry Agnew, Marisa Alviar-Agnew is licensed [CK-12](#). Original source: <https://www.ck12.org/c/chemistry/>.

4.5: Elements- Defined by Their Numbers of Protons

Template:HideTOC

Learning Objectives

- Define atomic number.
- Define mass number.
- Determine the number of protons, neutrons, and electrons in an atom.

It's important to be able to distinguish atoms of one element from atoms of another element. Elements are pure substances that make up all other matter, so each one is given a unique name. The names of elements are also represented by unique one- or two-letter symbols, such as H for hydrogen, C for carbon, or He for helium. However, it would more powerful if these names could be used to identify the numbers of protons and neutrons in the atoms. That's where atomic number and mass number are useful.



Figure 4.5.1: It is difficult to find qualities that differ between each element, and to distinguish one element from another. Each element, however, does have a unique number of protons. Sulfur has 16 protons, silicon has 14 protons, and gold has 79 protons. Images used with permission (public domain for sulfur and silicon, gold is licensed by CC-BY-SA-NC-ND; [Alchemist-hp](#)).

Atomic Number

Scientists distinguish between different elements by counting the number of protons in the nucleus (Table 4.5.1). If an atom has only one proton, we know that it's a hydrogen atom. An atom with two protons is always a helium atom. If scientists count four protons in an atom, they know it's a beryllium atom. An atom with three protons is a lithium atom, an atom with five protons is a boron atom, an atom with six protons is a carbon atom . . . the list goes on.

Since an atom of one element can be distinguished from an atom of another element by the number of protons in its nucleus, scientists are always interested in this number, and how this number differs between different elements. The number of protons in an atom is called its **atomic number** (Z). This number is very important because it is unique for atoms of a given element. All atoms of an element have the same number of protons, and every element has a different number of protons in its atoms. For example, all helium atoms have two protons, and no other elements have atoms with two protons.

Table 4.5.1: Atoms of the First Six Elements

Name	Protons	Neutrons	Electrons	Atomic Number (Z)	Mass Number (A)
Hydrogen	1	0	1	1	1
Helium	2	2	2	2	4
Lithium	3	4	3	3	7
Beryllium	4	5	4	4	9
Boron	5	6	5	5	11
Carbon	6	6	6	6	12

Of course, since neutral atoms have to have one electron for every proton, an element's atomic number also tells you how many electrons are in a neutral atom of that element. For example, hydrogen has an atomic number of 1. This means that an atom of hydrogen has one proton, and, if it's neutral, one electron as well. Gold, on the other hand, has an atomic number of 79, which means that an atom of gold has 79 protons, and, if it's neutral, 79 electrons as well.

Neutral Atoms

Atoms are neutral in electrical charge because they have the same number of negative electrons as positive protons (Table 4.5.1). Therefore, the atomic number of an atom also tells you how many electrons the atom has. This, in turn, determines many of the atom's chemical properties.

Mass Number

The **mass number** (A) of an atom is the total number of protons and neutrons in its nucleus. The mass of the atom is a unit called the atomic mass unit (amu). One atomic mass unit is the mass of a proton, or about 1.67×10^{-27} kilograms, which is an extremely small mass. A neutron has just a tiny bit more mass than a proton, but its mass is often assumed to be one atomic mass unit as well. Because electrons have virtually no mass, just about all the mass of an atom is in its protons and neutrons. Therefore, the total number of protons and neutrons in an atom determines its mass in atomic mass units (Table 4.5.1).

Consider helium again. Most helium atoms have two neutrons in addition to two protons. Therefore the mass of most helium atoms is 4 atomic mass units (2 amu for the protons + 2 amu for the neutrons). However, some helium atoms have more or less than two neutrons. Atoms with the same number of protons but different numbers of neutrons are called isotopes. Because the number of neutrons can vary for a given element, the mass numbers of different atoms of an element may also vary. For example, some helium atoms have three neutrons instead of two (these are called **isotopes** and are discussed in detail later on).

Why do you think that the "mass number" includes protons and neutrons, but not electrons? You know that most of the mass of an atom is concentrated in its nucleus. The mass of an atom depends on the number of protons and neutrons. You have already learned that the mass of an electron is very, very small compared to the mass of either a proton or a neutron (like the mass of a penny compared to the mass of a bowling ball). Counting the number of protons and neutrons tells scientists about the total mass of an atom.

$$\text{mass number } A = (\text{number of protons}) + (\text{number of neutrons})$$

An atom's mass number is very easy to calculate, provided that you know the number of protons and neutrons in an atom.

✓ Example 4.5.1

What is the mass number of an atom of helium that contains 2 neutrons?

Solution

(number of protons) = 2 (Remember that an atom of helium always has 2 protons.)

(number of neutrons) = 2

mass number = (number of protons) + (number of neutrons)

$$\text{mass number} = 2 + 2 = 4$$

A **chemical symbol** is a one- or two-letter designation of an element. Some examples of chemical symbols are O for oxygen, Zn for zinc, and Fe for iron. The first letter of a symbol is always capitalized. If the symbol contains two letters, the second letter is lower case. The majority of elements have symbols that are based on their English names. However, some of the elements that have been known since ancient times have maintained symbols that are based on their Latin names, as shown in Table 4.5.2.

Table 4.5.2: Symbols and Latin Names for Elements

Chemical Symbol	Name	Latin Name
Na	Sodium	Natrium
K	Potassium	Kalium
Fe	Iron	Ferrum
Cu	Copper	Cuprum
Ag	Silver	Argentum

Chemical Symbol	Name	Latin Name
Sn	Tin	Stannum
Sb	Antimony	Stibium
Au	Gold	Aurum
Pb	Lead	Plumbum

Summary

- Elements are pure substances that make up all matter, so each one is given a unique name.
- The names of elements are also represented by unique one- or two-letter symbols.
- Each element has a unique number of protons. An element's atomic number is equal to the number of protons in the nuclei of any of its atoms.
- The mass number of an atom is the sum of the protons and neutrons in the atom.
- Isotopes are atoms of the same element (same number of protons) that have different numbers of neutrons in their atomic nuclei.

4.5: Elements- Defined by Their Numbers of Protons is shared under a [CC BY-NC-SA 4.0](#) license and was authored, remixed, and/or curated by LibreTexts.

- **4.5: Elements- Defined by Their Number of Protons** by Henry Agnew, Marisa Alviar-Agnew is licensed [CK-12](#). Original source: <https://www.ck12.org/c/chemistry/>.

Features of the Periodic Table

Elements that have similar chemical properties are grouped in columns called groups (or families). As well as being numbered, some of these groups have names—for example, *alkali metals* (the first column of elements), *alkaline earth metals* (the second column of elements), *halogens* (the next-to-last column of elements), and *noble gases* (the last column of elements).

The word halogen comes from the Greek for “salt maker” because these elements combine with other elements to form a group of compounds called salts.

To Your Health: Radon

Radon is an invisible, odorless noble gas that is slowly released from the ground, particularly from rocks and soils whose uranium content is high. Because it is a noble gas, radon is not chemically reactive. Unfortunately, it is radioactive, and increased exposure to it has been correlated with an increased lung cancer risk.

Because radon comes from the ground, we cannot avoid it entirely. Moreover, because it is denser than air, radon tends to accumulate in basements, which if improperly ventilated can be hazardous to a building’s inhabitants. Fortunately, specialized ventilation minimizes the amount of radon that might collect. Special fan-and-vent systems are available that draw air from below the basement floor, before it can enter the living space, and vent it above the roof of a house.

After smoking, radon is thought to be the second-biggest *preventable* cause of lung cancer in the United States. The American Cancer Society estimates that 10% of all lung cancers are related to radon exposure. There is uncertainty regarding what levels of exposure cause cancer, as well as what the exact causal agent might be (either radon or one of its breakdown products, many of which are also radioactive and, unlike radon, not gases). The US Environmental Protection Agency recommends testing every floor below the third floor for radon levels to guard against long-term health effects.

Each row of elements on the periodic table is called a period. Periods have different lengths; the first period has only 2 elements (hydrogen and helium), while the second and third periods have 8 elements each. The fourth and fifth periods have 18 elements each, and later periods are so long that a segment from each is removed and placed beneath the main body of the table.

Certain elemental properties become apparent in a survey of the periodic table as a whole. Every element can be classified as either a metal, a nonmetal, or a metalloid (or semi metal), as shown in Figure 4.6.2. A **metal** is a substance that is shiny, typically (but not always) silvery in color, and an excellent conductor of electricity and heat. Metals are also malleable (they can be beaten into thin sheets) and ductile (they can be drawn into thin wires). A **nonmetal** is typically dull and a poor conductor of electricity and heat. Solid nonmetals are also very brittle. As shown in Figure 4.6.2, metals occupy the left three-fourths of the periodic table, while nonmetals (except for hydrogen) are clustered in the upper right-hand corner of the periodic table. The elements with properties intermediate between those of metals and nonmetals are called **metalloids** (or **semi-metals**). Elements adjacent to the bold line in the right-hand portion of the periodic table have semimetal properties.

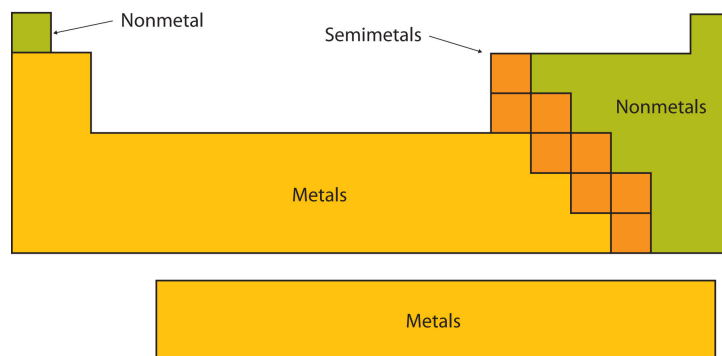


Figure 4.6.2: Types of Elements. Elements are either metals, nonmetals, or metalloids (or semi metals). Each group is located in a different part of the periodic table. (CC BY-NC-SA; Anonymous by request)

✓ Example 4.6.1

Based on its position in the periodic table, classify each element below as metal, a nonmetal, or a metalloid.

a. Se

- b. Mg
- c. Ge

Solution

- a. In Figure 4.6.1, selenium lies above and to the right of the diagonal line marking the boundary between metals and nonmetals, so it should be a nonmetal.
- b. Magnesium lies to the left of the diagonal line marking the boundary between metals and nonmetals, so it should be a metal.
- c. Germanium lies within the diagonal line marking the boundary between metals and nonmetals, so it should be a metalloid.

? Exercise 4.6.1

Based on its location in the periodic table, do you expect indium to be a nonmetal, a metal, or a metalloid?

Answer

Indium is a metal.

Another way to categorize the elements of the periodic table is shown in Figure 4.6.3. The first two columns on the left and the last six columns on the right are called the main group elements. The ten-column block between these columns contains the **transition metals**. The two rows beneath the main body of the periodic table contain the **inner transition metals**. The elements in these two rows are also referred to as, respectively, the **lanthanide metals** and the **actinide metals**.

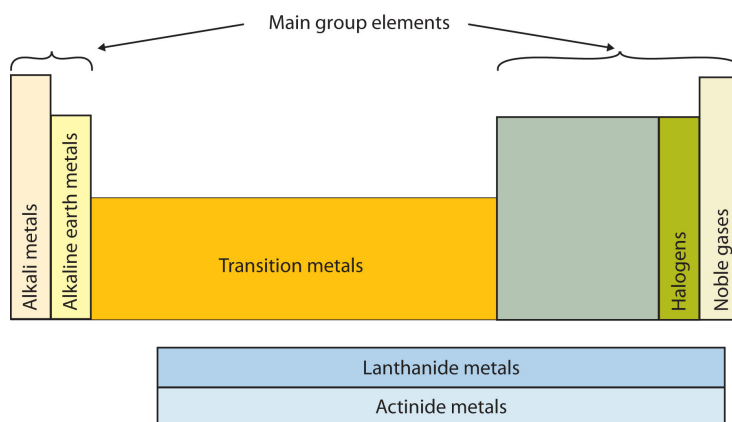


Figure 4.6.3: Special Names for Sections of the Periodic Table. (CC BY-NC-SA; Anonymous by request)

Sections of period table: Alkali metals, alkaline earth metals, transition metals, halogens, noble gases, lanthanide metals, actinide metals.

Descriptive Names

As previously noted, the periodic table is arranged so that elements with similar chemical behaviors are in the same group. Chemists often make general statements about the properties of the elements in a group using descriptive names with historical origins.

Group 1: The Alkali Metals

The alkali metals are lithium, sodium, potassium, rubidium, cesium, and francium. Hydrogen is unique in that it is generally placed in Group 1, but it is not a metal.

The compounds of the alkali metals are common in nature and daily life. One example is table salt (sodium chloride); lithium compounds are used in greases, in batteries, and as drugs to treat patients who exhibit manic-depressive, or bipolar, behavior. Although lithium, rubidium, and cesium are relatively rare in nature, and francium is so unstable and highly radioactive that it exists in only trace amounts, sodium and potassium are the seventh and eighth most abundant elements in Earth's crust, respectively.



Video: Alkali metals in water - Chemical elements: properties and reactions. (The Open University via <https://youtu.be/6ZY6d6jrj-0>)

Group 2: The Alkaline Earth Metals

The **alkaline earth metals** are beryllium, magnesium, calcium, strontium, barium, and radium. Beryllium, strontium, and barium are rare, and radium is unstable and highly radioactive. In contrast, calcium and magnesium are the fifth and sixth most abundant elements on Earth, respectively; they are found in huge deposits of limestone and other minerals.

Group 17: The Halogens

The **halogens** are fluorine, chlorine, bromine, iodine, and astatine. The name halogen is derived from the Greek words for “salt forming,” which reflects that all of the halogens react readily with metals to form compounds, such as sodium chloride and calcium chloride (used in some areas as road salt).

Compounds that contain the fluoride ion are added to toothpaste and the water supply to prevent dental cavities. Fluorine is also found in Teflon coatings on kitchen utensils. Although chlorofluorocarbon propellants and refrigerants are believed to lead to the depletion of Earth’s ozone layer and contain both fluorine and chlorine, the latter is responsible for the adverse effect on the ozone layer. Bromine and iodine are less abundant than chlorine, and astatine is so radioactive that it exists in only negligible amounts in nature.

Group 18: The Noble Gases

The noble gases are helium, neon, argon, krypton, xenon, and radon. Because the noble gases are composed of only single atoms, they are called monatomic. At room temperature and pressure, they are unreactive gases. Because of their lack of reactivity, for many years they were called inert gases or rare gases. However, the first chemical compounds containing the noble gases were prepared in 1962. Although the noble gases are relatively minor constituents of the atmosphere, natural gas contains substantial amounts of helium. Because of its low reactivity, argon is often used as an unreactive (inert) atmosphere for welding and in light bulbs. The red light emitted by neon in a gas discharge tube is used in neon lights.

✓ Example 4.6.2: Groups

Provide the family or group name of each element.

- Li
- Ar
- Cl

Solution

- Lithium is an alkali metal (Group 1)
- Argon is a noble gas (Group 18)
- Chlorine is a halogen (Group 17)

? Exercise 4.6.2: Groups

Provide the family or group name of each element.

- a. F
- b. Ca
- c. Kr

Answer a:

Fluorine is a halogen (Group 17).

Answer b:

Calcium is an alkaline earth metal (Group 2).

Answer c:

Krypton is a noble gas (Group 18).

✓ Example 4.6.3: Classification of Elements

Classify each element as metal, non metal, transition metal or inner transition metal.

- a. Li
- b. Ar
- c. Am
- d. Fe

Solution

- a. Lithium is a metal.
- b. Argon is a non metal.
- c. Americium is an inner transition metal.
- d. Iron is a transition metal.

? Exercise 4.6.3: Classification of Elements

Classify each element as metal, non metal, transition metal or inner transition metal.

- a. F
- b. U
- c. Cu

Answer a:

Fluorine is a nonmetal.

Answer b:

Uranium is a metal (and an inner transition metal too).

Answer c:

Copper is a metal (and a transition metal too).

Summary

The periodic table is an arrangement of the elements in order of increasing atomic number. Elements that exhibit similar chemistry appear in vertical columns called groups (numbered 1–18 from left to right); the seven horizontal rows are called periods. Some of the groups have widely-used common names, including the alkali metals (Group 1) and the alkaline earth metals (Group 2) on the far left, and the halogens (Group 17) and the noble gases (Group 18) on the far right.

The elements can be broadly divided into metals, nonmetals, and semi metals. Semi metals exhibit properties intermediate between those of metals and nonmetals. Metals are located on the left of the periodic table, and nonmetals are located on the upper right. They are separated by a diagonal band of semi metals. Metals are lustrous, good conductors of electricity, and readily shaped (they

are ductile and malleable). Solid nonmetals are generally brittle and poor electrical conductors. Other important groupings of elements in the periodic table are the main group elements, the transition metals, and the inner transition metals (the lanthanides, and the actinides).

References

1. Petrucci, Ralph H., William S. Harwood, F. G. Herring, and Jeffrey D. Madura. General Chemistry: Principles and Modern Applications. 9th ed. Upper Saddle River: Pearson Education, Inc., 2007.
2. Sisler, Harry H. Electronic structure, properties, and the periodic law. New York; Reinhold publishing corporation, 1963.
3. Petrucci, Ralph H., Carey Bissonnette, F. G. Herring, and Jeffrey D. Madura. General Chemistry: Principles and Modern Applications. Custom Edition for CHEM 2. Pearson Learning Solutions, 2010.

Contributions & Attributions

4.6: Looking for Patterns- The Periodic Law and the Periodic Table is shared under a [CC BY-NC-SA 4.0](#) license and was authored, remixed, and/or curated by LibreTexts.

- **4.6: Looking for Patterns - The Periodic Table** by Henry Agnew, Marisa Alviar-Agnew is licensed [CK-12](#). Original source: <https://www.ck12.org/c/chemistry/>.

4.7: Ions- Losing and Gaining Electrons

Template:HideTOC

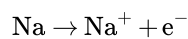
Learning Objectives

- Define the two types of ions.

Atoms tend to lose, gain, or share some valence electrons, making bonds to acquire the electron configuration of the nearest noble gas, i.e., usually eight valence electrons for the main group elements, called an octet. Most atoms do not have eight electrons in their valence electron shell. Some atoms have only a few electrons in their outer shell, while others lack only one or two electrons to have an octet. In cases where an atom has three or fewer valence electrons, the atom may lose those valence electrons quite easily until what remains is a lower shell that contains an octet. Atoms that lose electrons acquire a positive charge because they are left with fewer negatively charged electrons to balance the positive charges of the protons in the nucleus. Positively charged ions are called **cations**. Most metals become cations when they make ionic compounds.

Cations

A neutral sodium atom is likely to achieve an octet in its outermost shell by losing its one valence electron.



The cation produced in this way, Na^+ , is called the sodium ion to distinguish it from the element. The outermost shell of the sodium ion is the second electron shell, which has eight electrons in it. The octet rule has been satisfied. Figure 4.7.1 is a graphical depiction of this process.

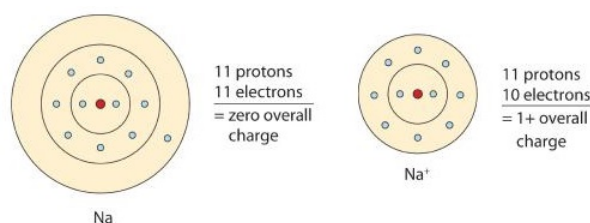
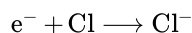


Figure 4.7.1: The Formation of a Sodium Ion. On the left, a sodium atom has 11 electrons. On the right, the sodium ion only has 10 electrons and a 1+ charge. Neutral sodium atom on left has 11 protons and 11 electrons. Sodium ion on right has 11 protons and 10 electrons, with a +1 overall charge.

Anions

Some atoms have nearly eight electrons in their valence shell and can gain additional valence electrons until they have an octet. When these atoms gain electrons, they acquire a negative charge because they now possess more electrons than protons. Negatively charged ions are called **anions**. Most nonmetals become anions when they make ionic compounds.

A neutral chlorine atom has seven electrons in its outermost shell. Only one more electron is needed to achieve an octet in chlorine's valence shell. (In table salt, this electron comes from the sodium atom.)



In this case, the ion has the same outermost shell as the original atom, but now that shell has eight electrons in it. Once again, the octet rule has been satisfied. The resulting anion, Cl^- , is called the chloride ion; note the slight change in the suffix (*-ide* instead of *-ine*) to create the name of this anion. Figure 4.7.2 is a graphical depiction of this process.

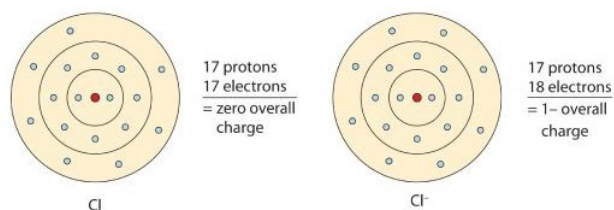


Figure 4.7.2: The Formation of a Chlorine Ion. On the left, the chlorine atom has 17 electrons. On the right, the chloride ion has 18 electrons and has a 1⁻ charge. Neutral chlorine atom on left has 17 protons and 17 electrons. Sodium ion on right has 17 protons and 18 electrons, with a -1 overall charge.

The names for positive and negative ions are pronounced CAT-eye-ons and ANN-eye-ons, respectively.

In many cases, elements that belong to the same group (vertical column) on the periodic table form ions with the same charge because they have the same number of valence electrons. Thus, the periodic table becomes a tool for remembering the charges on many ions. For example, all ions made from alkali metals, the first column on the periodic table, have a 1⁺ charge. Ions made from alkaline earth metals, the second group on the periodic table, have a 2⁺ charge. On the other side of the periodic table, the next-to-last column, the halogens, form ions having a 1⁻ charge. Figure 4.7.3 shows how the charge on many ions can be predicted by the location of an element on the periodic table. Note the convention of first writing the number and then the sign on a ion with multiple charges. The barium cation is written Ba²⁺, not Ba⁺2.

1A						8A
H ⁺	2A					
Li ⁺				N ³⁻	O ²⁻	F ⁻
Na ⁺	Mg ²⁺			P ³⁻	S ²⁻	Cl ⁻
K ⁺	Ca ²⁺				Se ²⁻	Br ⁻
Rb ⁺	Sr ²⁺					I ⁻

Figure 4.7.3: Predicting Ionic Charges. The charge that an atom acquires when it becomes an ion is related to the structure of the periodic table. Within a group (family) of elements, atoms form ions of a certain charge.

4.7: Ions- Losing and Gaining Electrons is shared under a [CC BY-NC-SA 4.0](#) license and was authored, remixed, and/or curated by LibreTexts.

- 4.7: Ions - Losing and Gaining Electrons by Henry Agnew, Marisa Alviar-Agnew is licensed [CC BY-NC-SA 3.0](#).

4.8: Isotopes- When the Number of Neutrons Varies

Template:HideTOC

Learning Objectives

- Explain what isotopes are and how an isotope affects an element's atomic mass.
- Determine the number of protons, electrons, and neutrons of an element with a given mass number.

All atoms of the same element have the same number of protons, but some may have different numbers of neutrons. For example, all carbon atoms have six protons, and most have six neutrons as well. But some carbon atoms have seven or eight neutrons instead of the usual six. Atoms of the same element that differ in their numbers of neutrons are called **isotopes**. Many isotopes occur naturally. Usually one or two isotopes of an element are the most stable and common. Different isotopes of an element generally have the same physical and chemical properties because they have the same numbers of protons and electrons.

An Example: Hydrogen Isotopes

Hydrogen is an example of an element that has isotopes. Three isotopes of hydrogen are modeled in Figure 4.8.1. Most hydrogen atoms have just one proton, one electron, and lack a neutron. These atoms are just called hydrogen. Some hydrogen atoms have one neutron as well. These atoms are the isotope named deuterium. Other hydrogen atoms have two neutrons. These atoms are the isotope named tritium.

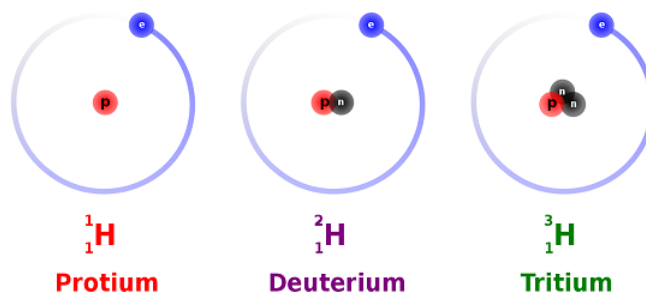


Figure 4.8.1: The three most stable isotopes of hydrogen: protium ($A = 1$), deuterium ($A = 2$), and tritium ($A = 3$). (CC SA-BY 3.0; Balajijagadesh via Wikipedia).

For most elements other than hydrogen, isotopes are named for their mass number. For example, carbon atoms with the usual 6 neutrons have a mass number of 12 (6 protons + 6 neutrons = 12), so they are called carbon-12. Carbon atoms with 7 neutrons have an atomic mass of 13 (6 protons + 7 neutrons = 13). These atoms are the isotope called carbon-13.

✓ Example 4.8.1: Lithium Isotopes

- What is the atomic number and the mass number of an isotope of lithium containing 3 neutrons?
- What is the atomic number and the mass number of an isotope of lithium containing 4 neutrons?

Solution

A lithium atom contains 3 protons in its nucleus irrespective of the number of neutrons or electrons.

a.

$$\begin{aligned}\text{atomic number} &= (\text{number of protons}) = 3 \\ &(\text{number of neutrons}) = 3\end{aligned}$$

$$\begin{aligned}\text{mass number} &= (\text{number of protons}) + (\text{number of neutrons}) \\ \text{mass number} &= 3 + 3 \\ &= 6\end{aligned}$$

b.

$$\begin{aligned}\text{atomic number} &= (\text{number of protons}) = 3 \\ &(\text{number of neutrons}) = 4\end{aligned}$$

$$\begin{aligned}\text{mass number} &= (\text{number of protons}) + (\text{number of neutrons}) \\ \text{mass number} &= 3 + 4 \\ &= 7\end{aligned}$$

Notice that because the lithium atom always has 3 protons, the atomic number for lithium is always 3. The mass number, however, is 6 in the isotope with 3 neutrons, and 7 in the isotope with 4 neutrons. In nature, only certain isotopes exist. For instance, lithium exists as an isotope with 3 neutrons, and as an isotope with 4 neutrons, but it doesn't exist as an isotope with 2 neutrons or as an isotope with 5 neutrons.

Stability of Isotopes

Atoms need a certain ratio of neutrons to protons to have a stable nucleus. Having too many or too few neutrons relative to protons results in an unstable, or radioactive, nucleus that will sooner or later break down to a more stable form. This process is called radioactive decay. Many isotopes have radioactive nuclei, and these isotopes are referred to as radioisotopes. When they decay, they release particles that may be harmful. This is why radioactive isotopes are dangerous and why working with them requires special suits for protection. The isotope of carbon known as carbon-14 is an example of a radioisotope. In contrast, the carbon isotopes called carbon-12 and carbon-13 are stable.

This whole discussion of isotopes brings us back to Dalton's Atomic Theory. According to Dalton, atoms of a given element are identical. But if atoms of a given element can have different numbers of neutrons, then they can have different masses as well! How did Dalton miss this? It turns out that elements found in nature exist as constant uniform mixtures of their naturally occurring isotopes. In other words, a piece of lithium always contains both types of naturally occurring lithium (the type with 3 neutrons and the type with 4 neutrons). Moreover, it always contains the two in the same relative amounts (or "relative abundance"). In a chunk of lithium, 93% will always be lithium with 4 neutrons, while the remaining 7% will always be lithium with 3 neutrons.

Dalton always experimented with large chunks of an element—chunks that contained all of the naturally occurring isotopes of that element. As a result, when he performed his measurements, he was actually observing the averaged properties of all the different isotopes in the sample. For most of our purposes in chemistry, we will do the same thing and deal with the average mass of the atoms. Luckily, aside from having different masses, most other properties of different isotopes are similar.

There are two main ways in which scientists frequently show the mass number of an atom they are interested in. It is important to note that the mass number is *not* given on the periodic table. These two ways include writing a nuclear symbol or by giving the name of the element with the mass number written.

To write a **nuclear symbol**, the mass number is placed at the upper left (superscript) of the chemical symbol and the atomic number is placed at the lower left (subscript) of the symbol. The complete nuclear symbol for helium-4 is drawn below:



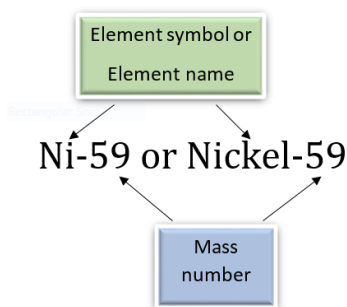
Nuclear symbol for helium-4: The element symbol is He, the mass number to the top left is 4, and the atomic number to the bottom left is 2

The following nuclear symbols are for a nickel nucleus with 31 neutrons and a uranium nucleus with 146 neutrons.



In the nickel nucleus represented above, the atomic number 28 indicates that the nucleus contains 28 protons, and therefore, it must contain 31 neutrons in order to have a mass number of 59. The uranium nucleus has 92 protons, as all uranium nuclei do; and this particular uranium nucleus has 146 neutrons.

Another way of representing isotopes is by adding a hyphen and the mass number to the chemical name or symbol. Thus the two nuclei would be Nickel-59 or Ni-59 and Uranium-238 or U-238, where 59 and 238 are the mass numbers of the two atoms, respectively. Note that the mass numbers (not the number of neutrons) are given to the side of the name.



✓ Example 4.8.2: Potassium-40

How many protons, electrons, and neutrons are in an atom of ${}^{40}_{19}\text{K}$?

Solution

$$\text{atomic number} = (\text{number of protons}) = 19$$

For all atoms with no charge, the number of electrons is equal to the number of protons.

$$\text{number of electrons} = 19$$

The mass number, 40, is the sum of the protons and the neutrons.

To find the number of neutrons, subtract the number of protons from the mass number.

$$\text{number of neutrons} = 40 - 19 = 21.$$

✓ Example 4.8.3: Zinc-65

How many protons, electrons, and neutrons are in an atom of zinc-65?

Solution

$$\text{number of protons} = 30$$

For all atoms with no charge, the number of electrons is equal to the number of protons.

$$\text{number of electrons} = 30$$

The mass number, 65, is the sum of the protons and the neutrons.

To find the number of neutrons, subtract the number of protons from the mass number.

$$\text{number of neutrons} = 65 - 30 = 35$$

? Exercise 4.8.3

How many protons, electrons, and neutrons are in each atom?

- ${}^{60}_{27}\text{Co}$
- Na-24
- ${}^{45}_{20}\text{Ca}$
- Sr-90

Answer a:

27 protons, 27 electrons, 33 neutrons

Answer b:

11 protons, 11 electrons, 13 neutrons

Answer c:

20 protons, 20 electrons, 25 neutrons

Answer d:

38 protons, 38 electrons, 52 neutrons

Summary

- The number of protons is always the same in atoms of the same element.
- The number of neutrons can be different, even in atoms of the same element.
- Atoms of the same element that contain the same number of protons, but different numbers of neutrons, are known as **isotopes**.
- Isotopes of any given element all contain the same number of protons, so they have the same atomic number (for example, the atomic number of helium is always 2).
- Isotopes of a given element contain different numbers of neutrons, therefore, different isotopes have different mass numbers.

4.8: Isotopes- When the Number of Neutrons Varies is shared under a [CC BY-NC-SA 4.0](#) license and was authored, remixed, and/or curated by LibreTexts.

- **4.8: Isotopes - When the Number of Neutrons Varies** by Henry Agnew, Marisa Alviar-Agnew is licensed [CK-12](#). Original source: <https://www.ck12.org/c/chemistry/>.

4.9: Atomic Mass- The Average Mass of an Element's Atoms

Template:HideTOC

Learning Objectives

- Explain what is meant by the atomic mass of an element.
- Calculate the atomic mass of an element from the masses and relative percentages of the isotopes of the element.

In chemistry we very rarely deal with only one isotope of an element. We use a mixture of the isotopes of an element in chemical reactions and other aspects of chemistry, because all of the isotopes of an element react in the same manner. That means that we rarely need to worry about the mass of a specific isotope, but instead we need to know the average mass of the atoms of an element. Using the masses of the different isotopes and how abundant each isotope is, we can find the average mass of the atoms of an element. The **atomic mass** of an element is the weighted average mass of the atoms in a naturally occurring sample of the element. Atomic mass is typically reported in atomic mass units.

Calculating Atomic Mass

You can calculate the atomic mass (or average mass) of an element provided you know the **relative abundance** (the fraction of an element that is a given isotope), the element's naturally occurring isotopes, and the masses of those different isotopes. We can calculate this by the following equation:

$$\text{Atomic mass} = (\%_1)(\text{mass}_1) + (\%_2)(\text{mass}_2) + \dots$$

Look carefully to see how this equation is used in the following examples.

✓ Example 4.9.1: Boron Isotopes

Boron has two naturally occurring isotopes. In a sample of boron, 20% of the atoms are B-10, which is an isotope of boron with 5 neutrons and mass of 10 amu. The other 80% of the atoms are B-11, which is an isotope of boron with 6 neutrons and a mass of 11 amu. What is the atomic mass of boron?

Solution

Boron has two isotopes. We will use the equation:

$$\text{Atomic mass} = (\%_1)(\text{mass}_1) + (\%_2)(\text{mass}_2) + \dots$$

- Isotope 1: $\%_1 = 0.20$ (Write all percentages as decimals), $\text{mass}_1 = 10$
- Isotope 2: $\%_2 = 0.80$, $\text{mass}_2 = 11$

Substitute these into the equation, and we get:

$$\text{Atomic mass} = (0.20)(10) + (0.80)(11)$$

$$\text{Atomic mass} = 10.8 \text{ amu}$$

The mass of an average boron atom, and thus boron's atomic mass, is 10.8 amu

✓ Example 4.9.2: Neon Isotopes

Neon has three naturally occurring isotopes. In a sample of neon, 90.92% of the atoms are Ne-20, which is an isotope of neon with 10 neutrons and a mass of 19.99 amu. Another 0.3% of the atoms are Ne-21, which is an isotope of neon with 11 neutrons and a mass of 20.99 amu. The final 8.85% of the atoms are Ne-22, which is an isotope of neon with 12 neutrons and a mass of 21.99 amu. What is the atomic mass of neon?

Solution

Neon has three isotopes. We will use the equation:

$$\text{Atomic mass} = (\%_1)(\text{mass}_1) + (\%_2)(\text{mass}_2) + \dots$$

- Isotope 1: $\%_1 = 0.9092$ (write all percentages as decimals), $\text{mass}_1 = 19.99$
- Isotope 2: $\%_2 = 0.003$, $\text{mass}_2 = 20.99$
- Isotope 3: $\%_3 = 0.0885$, $\text{mass}_3 = 21.99$

Substitute these into the equation, and we get:

$$\text{Atomic mass} = (0.9092)(19.99) + (0.003)(20.99) + (0.0885)(21.99)$$

$$\text{Atomic mass} = 20.17 \text{ amu}$$

The mass of an average neon atom is **20.17** amu

The periodic table gives the atomic mass of each element. The atomic mass is a number that usually appears below the element's symbol in each square. Notice that the atomic mass of boron (symbol B) is 10.8, which is what we calculated in Example 4.9.1, and the atomic mass of neon (symbol Ne) is 20.8, which is what we calculated in Example 4.9.2. Take time to notice that not all periodic tables have the atomic number above the element's symbol and the mass number below it. If you are ever confused, remember that the atomic number should always be the smaller of the two and will be a whole number, while the atomic mass should always be the larger of the two and will be a decimal number.

? Exercise 4.9.1

Chlorine has two naturally occurring isotopes. In a sample of chlorine, 75.77% of the atoms are Cl-35, with a mass of 34.97 amu. Another 24.23% of the atoms are Cl-37, with a mass of 36.97 amu. What is the atomic mass of chlorine?

Answer

35.45 amu

Summary

- An element's atomic mass is the weighted average of the masses of the isotopes of an element.
- An element's atomic mass can be calculated provided the relative abundance of the element's naturally occurring isotopes and the masses of those isotopes are known.
- The periodic table is a convenient way to summarize information about the different elements. In addition to the element's symbol, most periodic tables will also contain the element's atomic number and the element's atomic mass.

4.9: Atomic Mass- The Average Mass of an Element's Atoms is shared under a [CC BY-NC-SA 4.0](#) license and was authored, remixed, and/or curated by LibreTexts.

- **4.9: Atomic Mass - The Average Mass of an Element's Atoms** by Henry Agnew, Marisa Alviar-Agnew is licensed [CK-12](#). Original source: <https://www.ck12.org/c/chemistry/>.

CHAPTER OVERVIEW

5: Molecules and Compounds

Molecules are groups of atoms that behave as a single unit. Some elements exist as molecules: hydrogen, oxygen, sulfur, and so forth. There are rules that can express a unique name for any given molecule, and a unique formula for any given name.

[5.1: Sugar and Salt](#)

[5.2: Compounds Display Constant Composition](#)

[5.3: Chemical Formulas- How to Represent Compounds](#)

[5.4: A Molecular View of Elements and Compounds](#)

[5.5: Writing Formulas for Ionic Compounds](#)

[5.6: Nomenclature- Naming Compounds](#)

[5.7: Naming Ionic Compounds](#)

[5.8: Naming Molecular Compounds](#)

[5.9: Naming Acids](#)

[5.10: Nomenclature Summary](#)

[5.11: Formula Mass- The Mass of a Molecule or Formula Unit](#)

5: Molecules and Compounds is shared under a [CC BY-NC-SA 4.0](#) license and was authored, remixed, and/or curated by LibreTexts.

5.1: Sugar and Salt

Template:HideTOC

Sodium chloride, also known as table salt, is an ionic compound with the chemical formula NaCl , representing a 1:1 ratio of sodium and chloride ions. It is commonly used as a condiment and food preservative. Salt can be created by adding two very reactive elements together: **sodium** (Na(s)) metal and **chlorine** ($\text{Cl}_2(\text{g})$) gas.



The element sodium (Figure 5.1.1a) is a very reactive metal; given the opportunity, it will react with the sweat on your hands and form sodium hydroxide, which is a very corrosive substance. The element chlorine (Figure 5.1.1b) is a pale yellow, corrosive gas that should not be inhaled due to its poisonous nature. Bring these two hazardous substances together, however, and they react to make the ionic compound sodium chloride (Figure 5.1.1c), known simply as salt.





Figure 5.1.1: Sodium + Chlorine = Sodium Chloride (a) Sodium is a very reactive metal. (b) Chlorine is a pale yellow, noxious gas. (c) Together, sodium and chlorine make sodium chloride—salt—which is necessary for our survival. Source: Photo on the left courtesy of [reenhorn1](#) and photo in the center courtesy of [Benjah-bmm27](#). Photo on the right © Thinkstock.

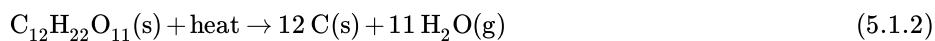
Salt is necessary for life. Na^+ ions are one of the main ions in the human body and are necessary to regulate the fluid balance in the body. Cl^- ions are necessary for proper nerve function and respiration. Both of these ions are supplied by salt. The taste of salt is one of the fundamental tastes; salt is probably the most ancient flavoring known, and one of the few rocks we eat. Clearly when the elemental sodium and chlorine combine (Equation 5.1.1), the resulting salt product has radically different properties (both physical and chemical). This reaction is spectacular to observe (Video 5.1.1).



Video 5.1.1: Making Table Salt using Sodium Metal and Chlorine gas

Another compound is sugar, which is the generic name for sweet, soluble carbohydrates, many of which are used in food. Sugar has the chemical formula $\text{C}_{12}\text{H}_{22}\text{O}_{11}$ and is constructed from different elements than salt: **carbon**, **hydrogen** and **oxygen**. While sugar qualitatively resembles table salt (often confused in the kitchen), the two have distinctly different physical and chemical properties. There are various types of sugar derived from different sources. While sugar is made with carbon, hydrogen, and oxygen, it is considerably harder to synthesize from its constituent elements than table salt is (Equation 5.1.1). However, the

thermal decomposition is considerably easier and can be represented as a dehydration of sucrose to pure carbon and water vapor in Equation 5.1.2, and demonstrated in Video 5.1.2.



Video 5.1.2: *A science experiment in the kitchen shows what happens to sugar molecules when they are heated. The experiment did not disappoint!*

As with salt, sugar has radically different properties (both physical and chemical) than its constituent elements. This difference in properties, of constituent elements and compounds, is a central feature of chemical reactions.

Contributions & Attributions

- Wikipedia

5.1: Sugar and Salt is shared under a [CC BY-NC-SA 4.0](#) license and was authored, remixed, and/or curated by LibreTexts.

- **5.1: Sugar and Salt** by Henry Agnew, Marisa Alviar-Agnew is licensed [CK-12](#). Original source: <https://www.ck12.org/c/chemistry/>.

5.2: Compounds Display Constant Composition

Template:HideTOC

When building a house, the starting point is a blueprint of what the house will look like. The plan states how many windows and what kind, how many doors and what style, how many rooms and what type (bedroom, kitchen, other). The blueprint shows how the different pieces will go together to make the house. As long as the blueprint is followed and exactly the same items are used, the house will be identical to its blueprint.

Compounds

A **compound** is a substance that contains two or more elements chemically combined in a fixed proportion. The elements carbon and hydrogen combine to form many different compounds. One of the simplest is called methane, in which there are always four times as many hydrogen particles as carbon particles. Methane is a pure substance because it always has the same composition. However, it is not an element because it can be broken down into simpler substances—carbon and hydrogen.

Recall that the components of a mixture can be separated from one another by physical means. This is not true for a compound. Table salt is a compound consisting of equal parts of the elements sodium and chlorine. Salt cannot be separated into its two elements by filtering, distillation, or any other physical process. Salt and other compounds can only be decomposed into their elements by a chemical process. A **chemical change** is a change that produces matter with a different composition. Many compounds can be decomposed into their elements by heating. When sugar is heated, it decomposes into carbon and water. Water is still a compound, but one which cannot be broken down into hydrogen and oxygen by heating. Instead, the passage of an electrical current through water will produce hydrogen and oxygen gases.

The properties of compounds are generally very different than the properties of the elements from which the compound is formed. Sodium is an extremely reactive soft metal that cannot be exposed to air or water. Chlorine is a deadly gas. The compound sodium chloride is a white solid which is essential for all living things (see below).




Figure 5.2.1: (A) Sodium is so reactive that it must be stored under oil. (B) Chlorine is a poisonous yellow-green gas. (C) Salt crystals, a compound of sodium and chlorine.

Summary

- A compound is a substance that contains two or more elements chemically combined in a fixed proportion.
- A chemical change is a change that produces matter with a different composition.

5.2: Compounds Display Constant Composition is shared under a [CC BY-NC-SA 4.0](#) license and was authored, remixed, and/or curated by LibreTexts.

- [5.2: Compounds Display Constant Composition](#) by Henry Agnew, Marisa Alviar-Agnew is licensed [CK-12](#). Original source: <https://www.ck12.org/c/chemistry/>.

5.3: Chemical Formulas- How to Represent Compounds

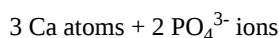
Template:HideTOC

Learning Objectives

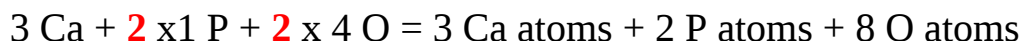
- Determine the number of different atoms in a formula.
- Define chemical formula, molecular formula, and empirical formula.

A **chemical formula** is an expression that shows the elements in a compound and the relative proportions of those elements. Water is composed of hydrogen and oxygen in a 2:1 ratio. The chemical formula for water is H_2O . Sulfuric acid is one of the most widely produced chemicals in the United States and is composed of the elements hydrogen, sulfur, and oxygen. The chemical formula for sulfuric acid is H_2SO_4 .

Certain groups of atoms are bonded together to form what is called a polyatomic ion that acts as a single unit. Polyatomic ions are discussed in more detail in [Section 5.5](#). Polyatomic ions are enclosed in parenthesis followed by a subscript if more than one of the same ion exist in a chemical formula. The formula $\text{Ca}_3(\text{PO}_4)_2$ represents a compound with the following:



To count the total number of atoms for formulas with polyatomic ions enclosed in parenthesis, use the subscript as a multiplier for each atom or number of atoms.



Molecular Formula

A **molecular formula** is a chemical formula of a molecular compound that shows the kinds and numbers of atoms present in a molecule of the compound. Ammonia is a compound of nitrogen and hydrogen as shown below:

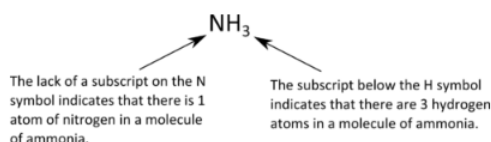


Figure 5.3.1: The molecular formula for ammonia, NH_3 . There is one atom of nitrogen and 3 atoms of hydrogen in a molecule of ammonia.

Note from the example that there are some standard rules to follow in writing molecular formulas. The arrangements of the elements depend on the particular structure, which is not of concern at this point. The number of atoms of each kind is indicated by a subscript following the atom. If there is only one atom, no number is written. If there is more than one atom of a specific kind, the number is written as a subscript following the atom. We would not write N_3H for ammonia, because that would mean that there are three nitrogen atoms and one hydrogen atom in the molecule, which is incorrect.

Empirical Formula

An **empirical formula** is a formula that shows the elements in a compound in their lowest whole-number ratio. Glucose is an important simple sugar that cells use as their primary source of energy. Its molecular formula is $\text{C}_6\text{H}_{12}\text{O}_6$. Since each of the subscripts is divisible by 6, the empirical formula for glucose is CH_2O . When chemists analyze an unknown compound, often the first step is to determine its empirical formula.

- molecular formula: $\text{C}_6\text{H}_{12}\text{O}_6$
- empirical formula: CH_2O

There are a great many compounds whose molecular and empirical formulas are the same. If the molecular formula cannot be simplified into a smaller whole-number ratio, as in the case of H_2O or P_2O_5 , then the empirical formula is also the molecular formula.

Summary

- A chemical formula is an expression that shows the elements in a compound and the relative proportions of those elements.
- If only one atom of a specific type is present, no subscript is used.
- For atoms that have two or more of a specific type of atom present, a subscript is written after the symbol for that atom.
- Polyatomic ions in chemical formulas are enclosed in parentheses followed by a subscript if more than one of the same type of polyatomic ion exist.
- Molecular formulas do not indicate how the atoms are arranged in the molecule.
- The empirical formula tells the lowest whole-number ratio of elements in a compound. The empirical formula does not show the actual number of atoms.

5.3: Chemical Formulas- How to Represent Compounds is shared under a [CC BY-NC-SA 4.0](#) license and was authored, remixed, and/or curated by LibreTexts.

- [5.3: Chemical Formulas - How to Represent Compounds](#) by Henry Agnew, Marisa Alviar-Agnew is licensed [CK-12](#). Original source: <https://www.ck12.org/c/chemistry/>.

5.4: A Molecular View of Elements and Compounds

Template:HideTOC

Learning Objectives

- Classify substances as atomic elements, molecular elements, molecular compounds, or ionic compounds.

Atomic Elements

Most elements exist with **individual atoms** as their basic unit. It is assumed that there is only one atom in a formula if there is no numerical subscript on the right side of an element's symbol.

Molecular Elements

There are many substances that exist as two or more atoms connected together so strongly that they behave as a single particle. These multi-atom combinations are called **molecules**. A molecule is the smallest part of a substance that has the physical and chemical properties of that substance. In some respects, a molecule is similar to an atom. A molecule, however, is composed of more than one atom.

Table 5.4.1: Elements That Exist as Diatomic Molecules

Hydrogen, H	Oxygen	Nitrogen	Fluorine	Chlorine	Bromine	Iodine
-------------	--------	----------	----------	----------	---------	--------

Some elements exist naturally as molecules. For example, hydrogen and oxygen exist as two-atom molecules. Other elements also exist naturally as diatomic molecules—a molecule with only two atoms (Table 5.4.1). As with any molecule, these elements are labeled with a **molecular formula**, a formal listing of what and how many atoms are in a molecule. (Sometimes only the word *formula* is used, and its meaning is inferred from the context.) For example, the molecular formula for elemental hydrogen is H_2 , with H being the symbol for hydrogen and the subscript 2 implying that there are two atoms of this element in the molecule. Other diatomic elements have similar formulas: O_2 , N_2 , and so forth. Other elements exist as molecules—for example, sulfur normally exists as an eight-atom molecule, S_8 , while phosphorus exists as a four-atom molecule, P_4 (Figure 5.4.1).

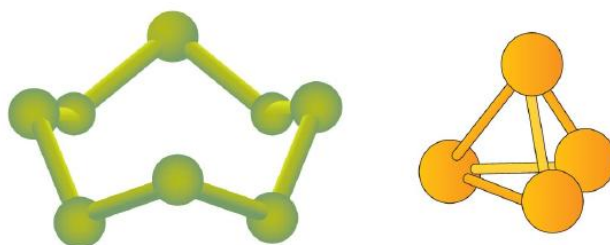


Figure 5.4.1: Molecular Art of S_8 and P_4 Molecules. If each green ball represents a sulfur atom, then the diagram on the left represents an S_8 molecule. The molecule on the right shows that one form of elemental phosphorus exists, as a four-atom molecule.

Figure 5.4.1 shows two examples of how molecules will be represented in this text. An atom is represented by a small ball or sphere, which generally indicates where the nucleus is in the molecule. A cylindrical line connecting the balls represents the connection between the atoms that make this collection of atoms a molecule. This connection is called a chemical bond.

Ionic Compounds

The elements in the periodic table are divided into specific groupings; the metals, the non-metals, the semi-metals, and so on. These groupings are largely based on physical properties and on the tendency of the various elements to bond with other elements by forming either an ionic or a covalent bond. As a general rule of thumb, compounds that involve a metal binding with either a non-metal or a semi-metal will display ionic bonding. Thus, the compound formed from sodium and chlorine will be ionic (a metal and a non-metal). The basic unit of ionic compounds is the **formula unit**.

Molecular Compounds

Compounds that are composed of only non-metals or semi-metals with non-metals will display covalent bonding and will be classified as molecular compounds. Nitrogen monoxide (NO) will be a covalently bound molecule (two non-metals) and silicon dioxide (SiO₂) will also be a covalently bound molecule (a semi-metal and a non-metal). The basic unit of molecular compounds is the **molecule**.

✓ Example 5.4.1

Provide the classification (i.e. atomic element, molecular element, molecular compound, or ionic compound) of each substance.

- a. Fe
- b. PCl₃
- c. LiBr
- d. P₄
- e. oxygen gas

Solution

- a. **Fe** (iron) is an element that is represented with no subscript, so it is an **atomic element**.
- b. **PCl₃** is made up of two nonmetals, so it is a **molecular compound**.
- c. **LiBr** is made up of lithium, a metal, and bromine, a nonmetal, so it is an **ionic compound**.
- d. **P₄** is a substance that is made up of four atoms of the same element, so it is a **molecular element**.
- e. The formula for **oxygen gas** is **O₂** so it is a molecular element.

? Exercise 5.4.1

Provide the classification (i.e. atomic element, molecular element, molecular compound, or ionic compound) of each substance.

- a. I₂
- b. He
- c. H₂O
- d. Al
- e. CuCl

Answer a:

molecular element

Answer b:

atomic element

Answer c:

molecular compound

Answer d:

atomic element

Answer e:

ionic compound

5.4: A Molecular View of Elements and Compounds is shared under a [CC BY-NC-SA 4.0](#) license and was authored, remixed, and/or curated by LibreTexts.

- [5.4: A Molecular View of Elements and Compounds](#) by Henry Agnew, Marisa Alviar-Agnew is licensed [CK-12](#). Original source: <https://www.ck12.org/c/chemistry/>.

5.5: Writing Formulas for Ionic Compounds

Template:HideTOC

Learning Objectives

- Write the correct formula for an ionic compound.
- Recognize polyatomic ions in chemical formulas.

Ionic compounds do not exist as molecules. In the solid state, ionic compounds are in crystal lattice containing many ions each of the cation and anion. An ionic formula, like NaCl, is an empirical formula. This formula merely indicates that sodium chloride is made of an equal number of sodium and chloride ions. Sodium sulfide, another ionic compound, has the formula Na_2S . This formula indicates that this compound is made up of twice as many sodium ions as sulfide ions. This section will teach you how to find the correct ratio of ions, so that you can write a correct formula.

If you know the name of a binary ionic compound, you can write its **chemical formula**. Start by writing the metal ion with its charge, followed by the nonmetal ion with its charge. Because the overall compound must be electrically neutral, decide how many of each ion is needed in order for the positive and negative charges to cancel each other out.

✓ Example 5.5.1: Aluminum Nitride and Lithium Oxide

Write the formulas for aluminum nitride and lithium oxide.

Solution

Solution to Example 5.5.1

	Write the formula for aluminum nitride	Write the formula for lithium oxide
1. Write the symbol and charge of the cation (metal) first and the anion (nonmetal) second.	$\text{Al}^{3+} \quad \text{N}^{3-}$	$\text{Li}^{+} \quad \text{O}^{2-}$
2. Use a multiplier to make the total charge of the cations and anions equal to each other.	total charge of cations = total charge of anions $1(3+) = 1(3-)$ $+3 = -3$	total charge of cations = total charge of anions $2(1+) = 1(2-)$ $+2 = -2$
3. Use the multipliers as subscript for each ion.	Al_1N_1	Li_2O_1
4. Write the final formula. Leave out all charges and all subscripts that are 1.	AlN	Li_2O

An alternative way to writing a correct formula for an ionic compound is to use the **crisscross method**. In this method, the numerical value of each of the ion charges is crossed over to become the subscript of the other ion. Signs of the charges are dropped.

✓ Example 5.5.2: The Crisscross Method for Lead (IV) Oxide

Write the formula for lead (IV) oxide.

Solution

Solution to Example 5.5.2

Crisscross Method	Write the formula for lead (IV) oxide
1. Write the symbol and charge of the cation (metal) first and the anion (nonmetal) second.	$\text{Pb}^{4+} \quad \text{O}^{2-}$

Crisscross Method

Write the formula for lead (IV) oxide

2. Transpose only the number of the positive charge to become the subscript of the anion and the number only of the negative charge to become the subscript of the cation.



3. Reduce to the lowest ratio.



4. Write the final formula. Leave out all subscripts that are 1.



? Exercise 5.5.2

Write the chemical formula for an ionic compound composed of each pair of ions.

- the calcium ion and the oxygen ion
- the 2+ copper ion and the sulfur ion
- the 1+ copper ion and the sulfur ion

Answer a:



Answer b:



Answer c:



Be aware that ionic compounds are empirical formulas and so must be written as the lowest ratio of the ions.

✓ Example 5.5.3: Sulfur Compound

Write the formula for sodium combined with sulfur.

Solution

Solution to Example 5.5.3

Crisscross Method

Write the formula for sodium combined with sulfur

1. Write the symbol and charge of the cation (metal) first and the anion (nonmetal) second.



2. Transpose only the number of the positive charge to become the subscript of the anion and the number only of the negative charge to become the subscript of the cation.



3. Reduce to the lowest ratio.

This step is not necessary.

4. Write the final formula. Leave out all subscripts that are 1.



? Exercise 5.5.3

Write the formula for each ionic compound.

- sodium bromide
- lithium chloride
- magnesium oxide

Answer a:

NaBr

Answer b:

LiCl

Answer c:

MgO

Polyatomic Ions

Some ions consist of groups of atoms bonded together and have an overall electric charge. Because these ions contain more than one atom, they are called polyatomic ions. Polyatomic ions have characteristic formulas, names, and charges that should be memorized. For example, NO_3^- is the nitrate ion; it has one nitrogen atom and three oxygen atoms and an overall 1- charge. Table 5.5.1 lists the most common polyatomic ions.

Table 5.5.1: Some Polyatomic Ions

Name	Formula
ammonium ion	NH_4^+
acetate ion	$\text{C}_2\text{H}_3\text{O}_2^-$ (also written CH_3CO_2^-)
carbonate ion	CO_3^{2-}
chromate ion	CrO_4^{2-}
dichromate ion	$\text{Cr}_2\text{O}_7^{2-}$
hydrogen carbonate ion (bicarbonate ion)	HCO_3^-
cyanide ion	CN^-
hydroxide ion	OH^-
nitrate ion	NO_3^-
nitrite ion	NO_2^-
permanganate ion	MnO_4^-
phosphate ion	PO_4^{3-}
hydrogen phosphate ion	HPO_4^{2-}
dihydrogen phosphate ion	H_2PO_4^-
sulfate ion	SO_4^{2-}
hydrogen sulfate ion (bisulfate ion)	HSO_4^-
sulfite ion	SO_3^{2-}

The rule for constructing formulas for ionic compounds containing polyatomic ions is the same as for formulas containing monatomic (single-atom) ions: the positive and negative charges must balance. If more than one of a particular polyatomic ion is needed to balance the charge, the *entire formula* for the polyatomic ion must be enclosed in parentheses, and the numerical subscript is placed *outside* the parentheses. This is to show that the subscript applies to the entire polyatomic ion. An example is $\text{Ba}(\text{NO}_3)_2$.

Writing Formulas for Ionic Compounds Containing Polyatomic Ions


Writing a formula for ionic compounds containing polyatomic ions also involves the same steps as for a binary ionic compound. Write the symbol and charge of the cation followed by the symbol and charge of the anion.

✓ Example 5.5.4: Calcium Nitrate

Write the formula for calcium nitrate.

Solution

Solution to Example 5.5.4

Crisscross Method	Write the formula for calcium nitrate
1. Write the symbol and charge of the cation (metal) first and the anion (nonmetal) second.	$\text{Ca}^{2+} \quad \text{NO}_3^-$
2. Transpose only the number of the positive charge to become the subscript of the anion and the number only of the negative charge to become the subscript of the cation.	 <p>The 2+ charge on Ca becomes the subscript of NO₃ and the 1- charge on NO₃ becomes the subscript of Ca.</p>
3. Reduce to the lowest ratio.	$\text{Ca}_1(\text{NO}_3)_2$
4. Write the final formula. Leave out all subscripts that are 1. If there is only 1 of the polyatomic ion, leave off parentheses.	$\text{Ca}(\text{NO}_3)_2$

✓ Example 5.5.5

Write the chemical formula for an ionic compound composed of the potassium ion and the sulfate ion.

Solution

Solution to Example 5.5.5

Explanation	Answer
Potassium ions have a charge of 1+, while sulfate ions have a charge of 2-. We will need two potassium ions to balance the charge on the sulfate ion, so the proper chemical formula is K_2SO_4 .	K_2SO_4

? Exercise 5.5.5

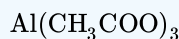
Write the chemical formula for an ionic compound composed of each pair of ions.

- the magnesium ion and the carbonate ion
- the aluminum ion and the acetate ion

Answer a:



Answer b:



Recognizing Ionic Compounds

There are two ways to recognize ionic compounds.

Method 1

Compounds between metal and nonmetal elements are usually ionic. For example, CaBr_2 contains a metallic element (calcium, a [group 2 \[or 2A\]](#) metal) and a nonmetallic element (bromine, a [group 17 \[or 7A\]](#) nonmetal). Therefore, it is most likely an ionic compound (in fact, it *is* ionic). In contrast, the compound NO_2 contains two elements that are both nonmetals (nitrogen, from [group 15 \[or 5A\]](#), and oxygen, from [group 16 \[or 6A\]](#)). It is not an ionic compound; it belongs to the category

of covalent compounds discussed elsewhere. Also note that this combination of nitrogen and oxygen has no electric charge specified, so it is *not* the nitrite ion.

Method 2

Second, if you recognize the formula of a polyatomic ion in a compound, the compound is ionic. For example, if you see the formula $\text{Ba}(\text{NO}_3)_2$, you may recognize the “ NO_3 ” part as the nitrate ion, NO_3^- . (Remember that the convention for writing formulas for ionic compounds is not to include the ionic charge.) This is a clue that the other part of the formula, Ba, is actually the Ba^{2+} ion, with the 2+ charge balancing the overall 2- charge from the two nitrate ions. Thus, this compound is also ionic.

✓ Example 5.5.6

Identify each compound as ionic or not ionic.

- Na_2O
- PCl_3
- NH_4Cl
- OF_2

Solution

Solution to Example 5.5.6

Explanation	Answer
a. Sodium is a metal, and oxygen is a nonmetal. Therefore, Na_2O is expected to be ionic via method 1.	Na_2O , ionic
b. Both phosphorus and chlorine are nonmetals. Therefore, PCl_3 is not ionic via method 1	PCl_3 , not ionic
c. The NH_4 in the formula represents the ammonium ion, NH_4^+ , which indicates that this compound is ionic via method 2	NH_4Cl , ionic
d. Both oxygen and fluorine are nonmetals. Therefore, OF_2 is not ionic via method 1	OF_2 , not ionic

? Exercise 5.5.6

Identify each compound as ionic or not ionic.

- N_2O
- FeCl_3
- $(\text{NH}_4)_3\text{PO}_4$
- SOCl_2

Answer a:

not ionic

Answer b:

ionic

Answer c:

ionic

Answer d:

not ionic

Summary

Formulas for ionic compounds contain the symbols and number of each atom present in a compound in the lowest whole number ratio.

5.5: Writing Formulas for Ionic Compounds is shared under a [CC BY-NC-SA 4.0](#) license and was authored, remixed, and/or curated by LibreTexts.

- **5.5: Writing Formulas for Ionic Compounds** by Henry Agnew, Marisa Alviar-Agnew is licensed [CK-12](#). Original source: <https://www.ck12.org/c/chemistry/>.

5.6: Nomenclature- Naming Compounds

[Template:HideTOC](#)

Nomenclature is the process of naming chemical compounds so that they can be easily identified as separate chemicals. The primary function of chemical nomenclature is to ensure that a spoken or written chemical name leaves no ambiguity concerning which chemical compound the name refers to—each chemical name should refer to a single substance. A less important aim is to ensure that each substance has a single name, although a limited number of alternative names is acceptable in some cases. Preferably, the name also conveys some information about the structure or chemistry of a compound. A common name will often suffice to identify a chemical compound in a particular set of circumstances. To be more generally applicable, the name should indicate at least the chemical formula. To be more specific still, the three-dimensional arrangement of the atoms may need to be specified.

Contributions & Attributions

- Wikipedia (CC-BY-SA-3.0)

5.6: Nomenclature- Naming Compounds is shared under a [CC BY-NC-SA 4.0](#) license and was authored, remixed, and/or curated by LibreTexts.

- **5.6: Nomenclature- Naming Compounds** by Henry Agnew, Marisa Alviar-Agnew is licensed [CK-12](#). Original source: <https://www.ck12.org/c/chemistry/>.

5.7: Naming Ionic Compounds

Template:HideTOC

Learning Objectives

- To use the rules for naming ionic compounds.

After learning a few more details about the names of individual ions, you will be one step away from knowing how to name ionic compounds. This section begins the formal study of nomenclature, the systematic naming of chemical compounds.

Naming Ions

The name of a monatomic cation is simply the name of the element followed by the word *ion*. Thus, Na^+ is the sodium ion, Al^{3+} is the aluminum ion, Ca^{2+} is the calcium ion, and so forth.

We have seen that some elements lose different numbers of electrons, producing ions of different charges (Figure 3.3). Iron, for example, can form two cations, each of which, when combined with the same anion, makes a different compound with unique physical and chemical properties. Thus, we need a different name for each iron ion to distinguish Fe^{2+} from Fe^{3+} . The same issue arises for other ions with more than one possible charge.

There are two ways to make this distinction. In the simpler, more modern approach, called the **Stock system**, an ion's positive charge is indicated by a roman numeral in parentheses after the element name, followed by the word *ion*. Thus, Fe^{2+} is called the iron(II) ion, while Fe^{3+} is called the iron(III) ion. This system is used only for elements that form more than one common positive ion. We do not call the Na^+ ion the sodium(I) ion because (I) is unnecessary. Sodium forms only a 1+ ion, so there is no ambiguity about the name *sodium ion*.

Table 5.7.1: The Modern and Common System of Cation Names

Element	Stem	Charge	Modern Name	Common Name
iron	ferr-	2+	iron(II) ion	ferrous ion
		3+	iron(III) ion	ferric ion
copper	cupr-	1+	copper(I) ion	cuprous ion
		2+	copper(II) ion	cupric ion
tin	stann-	2+	tin(II) ion	stannous ion
		4+	tin(IV) ion	stannic ion
lead	plumb-	2+	lead(II) ion	plumbous ion
		4+	lead(IV) ion	plumbic ion
chromium	chrom-	2+	chromium(II) ion	chromous ion
		3+	chromium(III) ion	chromic ion
gold	aur-	1+	gold(I) ion	aurous ion
		3+	gold(III) ion	auric ion

The second system, called the **common system**, is not conventional but is still prevalent and used in the health sciences. This system recognizes that many metals have two common cations. The common system uses two suffixes (*-ic* and *-ous*) that are appended to the stem of the element name. The *-ic* suffix represents the greater of the two cation charges, and the *-ous* suffix represents the lower one. In many cases, the stem of the element name comes from the Latin name of the element. Table 5.7.1 lists the elements that use the common system, along with their respective cation names.

Table 5.7.2: Some Monatomic Anions

Ion	Name
-----	------

Ion	Name
F^{-}	fluoride ion
Cl^{-}	chloride ion
Br^{-}	bromide ion
I^{-}	iodide ion
O^{2-}	oxide ion
S^{2-}	sulfide ion
P^{3-}	phosphide ion
N^{3-}	nitride ion

The name of a monatomic anion consists of the stem of the element name, the suffix *-ide*, and then the word *ion*. Thus, as we have already seen, Cl^{-} is “chlor-” + “-ide ion,” or the chloride ion. Similarly, O^{2-} is the oxide ion, Se^{2-} is the selenide ion, and so forth. Table 5.7.2 lists the names of some common monatomic ions. The [polyatomic ions](#) have their own characteristic names, as discussed earlier.

✓ Example 5.7.1

Name each ion.

- Ca^{2+}
- S^{2-}
- SO_3^{2-}
- NH_4^{+}
- Cu^{+}

Solution

- the calcium ion
- the sulfide ion
- the sulfite ion
- the ammonium ion
- the copper(I) ion or the cuprous ion

? Exercise 5.7.1

Name each ion.

- Fe^{2+}
- Fe^{3+}
- SO_4^{2-}
- Ba^{2+}
- HCO_3^{-}

Answer a:

iron(II) ion

Answer b:

iron(III) ion

Answer c:

sulfate ion

Answer d:

barium ion

Answer e:

hydrogen carbonate ion or bicarbonate ion

✓ Example 5.7.2

Write the formula for each ion.

- a. the bromide ion
- b. the phosphate ion
- c. the cupric ion
- d. the magnesium ion

Solution

- a. Br^-
- b. PO_4^{3-}
- c. Cu^{2+}
- d. Mg^{2+}

? Exercise 5.7.2

Write the formula for each ion.

- a. the fluoride ion
- b. the carbonate ion
- c. the stannous ion
- d. the potassium ion

Answer a:

F^-

Answer b:

CO_3^{2-}

Answer c:

Sn^{2+}

Answer d:

K^+

Naming Binary Ionic Compounds with a Metal that Forms Only One Type of Cation

A **binary** ionic compound is a compound composed of a **monatomic** metal **cation** and a monatomic nonmetal **anion**. The metal cation is named first, followed by the nonmetal anion as illustrated in Figure 5.7.1 for the compound BaCl_2 . The word *ion* is dropped from both parts.

Name of cation (metal) + Base name of anion (nonmetal) and *-ide*

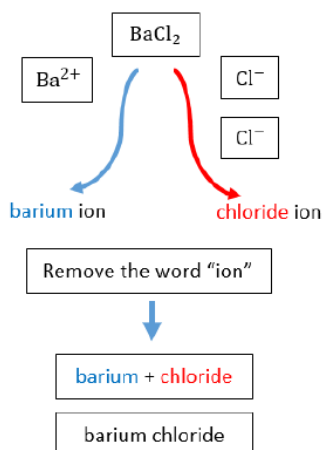


Figure 5.7.1: Naming $BaCl_2$

Naming formula: Name of metal cation + base

name of nonmetal anion + suffix *-ide*. $BaCl_2$ is named as barium chloride.

Subscripts in the formula do not affect the name.

✓ Example 5.7.3: Naming Ionic Compounds

Name each ionic compound.

- $CaCl_2$
- AlF_3
- KCl

Solution

- Using the names of the ions, this ionic compound is named calcium chloride.
- The name of this ionic compound is aluminum fluoride.
- The name of this ionic compound is potassium chloride

? Exercise 5.7.3

Name each ionic compound.

- AgI
- MgO
- Ca_3P_2

Answer a:

silver iodide

Answer b:

magnesium oxide

Answer c:

calcium phosphide

Naming Binary Ionic Compounds with a Metal That Forms More Than One Type of Cation

If you are given a formula for an ionic compound whose cation can have more than one possible charge, you must first determine the charge on the cation before identifying its correct name. For example, consider $FeCl_2$ and $FeCl_3$. In the first compound, the iron ion has a $2+$ charge because there are two Cl^- ions in the formula ($1-$ charge on each chloride ion). In the second compound, the

iron ion has a 3+ charge, as indicated by the three Cl^- ions in the formula. These are two different compounds that need two different names. By the Stock system, the names are iron(II) chloride and iron(III) chloride (Figure 5.7.2).

Table 5.7.3: Naming the FeCl_2 and FeCl_3 Compounds in the Modern/Stock System.

Name of cation (metal) + (Roman Numeral in parenthesis) + Base name of anion (nonmetal) and -ide	

If we were to use the stems and suffixes of the common system, the names would be ferrous chloride and ferric chloride, respectively (Figure 5.7.3).

Table 5.7.4: Naming the FeCl_2 and FeCl_3 Compounds in the Old/Common System.

"Old" base name of cation (metal) and -ic or -ous + Base name of anion (nonmetal) and -ide	
<p>-ous (for ions with lower charge)</p>	<p>-ic (for ions with higher charge)</p>

✓ Example 5.7.4:

Name each ionic compound.

- Co_2O_3
- FeCl_2

Solution

Solutions to Example 5.7.4

	Explanation	Answer
a	<p>We know that cobalt can have more than one possible charge; we just need to determine what it is.</p> <ul style="list-style-type: none"> Oxide always has a 2^- charge, so with three oxide ions, we have a total negative charge of 6^-. This means that the two cobalt ions have to contribute 6^+, which for two cobalt ions means that each one is 3^+. Therefore, the proper name for this ionic compound is cobalt(III) oxide. 	cobalt(III) oxide
b	<p>Iron can also have more than one possible charge.</p> <ul style="list-style-type: none"> Chloride always has a 1^- charge, so with two chloride ions, we have a total negative charge of 2^-. This means that the one iron ion must have a 2^+ charge. Therefore, the proper name for this ionic compound is iron(II) chloride. 	iron(II) chloride

? Exercise 5.7.4

Name each ionic compound.

- AuCl_3
- PbO_2
- CuO

Answer a:

gold(III) chloride

Answer b:

lead(IV) oxide

Answer c:

copper(II) oxide

Naming Ionic Compounds with Polyatomic Ions

The process of naming ionic compounds with polyatomic ions is the same as naming binary ionic compounds. The cation is named first, followed by the anion. One example is the ammonium sulfate compound in Figure 5.7.6.

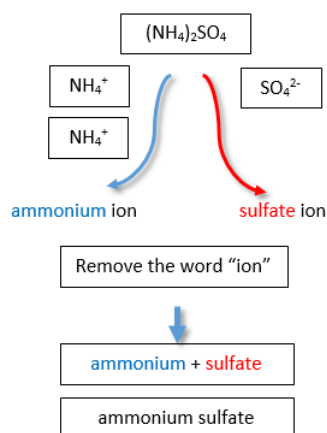


Figure 5.7.2: Naming Ionic Compounds with Polyatomic Ions

✓ Example 5.7.5: Naming Ionic Compounds

Write the proper name for each ionic compound.

- $(\text{NH}_4)_2\text{S}$
- AlPO_4
- $\text{Fe}_3(\text{PO}_4)_2$

Solution

Solutions to Example 5.7.5

Explanation	Answer
a. The ammonium ion has a 1+ charge and the sulfide ion has a 2- charge. Two ammonium ions need to balance the charge on a single sulfide ion. The compound's name is ammonium sulfide.	ammonium sulfide
b. The ions have the same magnitude of charge, one of each (ion) is needed to balance the charges. The name of the compound is aluminum phosphate.	aluminum phosphate
c. Neither charge is an exact multiple of the other, so we have to go to the least common multiple of 6. To get 6+, three iron(II) ions are needed, and to get 6-, two phosphate ions are needed. The compound's name is iron(II) phosphate.	iron(II) phosphate

? Exercise 5.7.5A

Write the proper name for each ionic compound.

- $(\text{NH}_4)_3\text{PO}_4$
- $\text{Co}(\text{NO}_2)_3$

Answer a:

ammonium phosphate

Answer b:

cobalt(III) nitrite

Figure 5.7.1 is a synopsis of how to name simple ionic compounds.

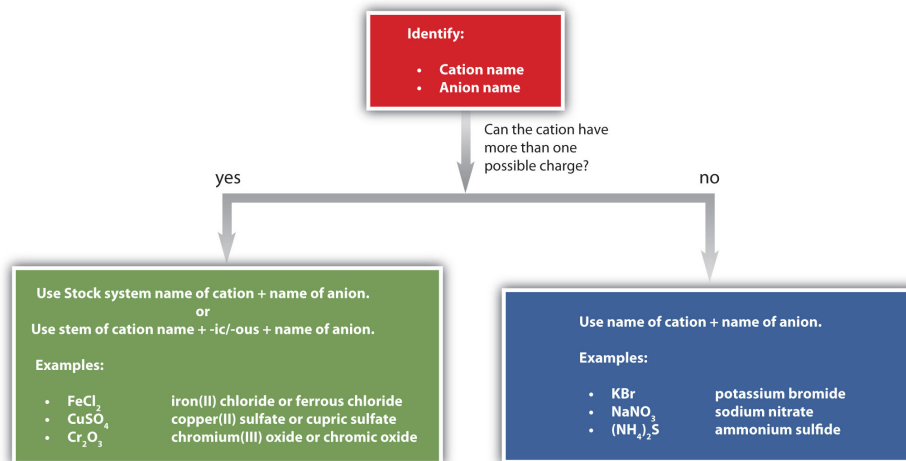


Figure 5.7.3: A Guide to Naming Simple Ionic Compounds.

? Exercise 5.7.5B

Name each ionic compound.

- ZnBr₂
- Al₂O₃
- (NH₄)₃PO₄
- AuF₃
- AgF

Answer a:

zinc bromide

Answer b:

aluminum oxide

Answer c:

ammonium phosphate

Answer d:

gold(III) fluoride or auric fluoride

Answer e:

silver fluoride

Summary

- Ionic compounds are named by stating the cation first, followed by the anion.
- Positive and negative charges must balance.
- Some anions have multiple forms and are named accordingly with the use of roman numerals in parentheses.
- Ternary compounds are composed of three or more elements.

5.7: Naming Ionic Compounds is shared under a [CC BY-NC-SA 4.0](#) license and was authored, remixed, and/or curated by LibreTexts.

- 5.7: Naming Ionic Compounds by Henry Agnew, Marisa Alviar-Agnew is licensed [CK-12](#). Original source: <https://www.ck12.org/c/chemistry/>.

5.8: Naming Molecular Compounds

Template:HideTOC

Learning Objectives

- Determine the name of a simple molecular compound from its chemical formula.

Molecular Compounds

Molecular compounds are inorganic compounds that take the form of discrete **molecules**. Examples include such familiar substances as water (H_2O) and carbon dioxide (CO_2). These compounds are very different from ionic compounds like sodium chloride (NaCl). Ionic compounds are formed when metal atoms lose one or more of their electrons to nonmetal atoms. The resulting cations and anions are electrostatically attracted to each other.

So what holds the atoms of a molecule together? Rather than forming ions, the atoms of a molecule share their **electrons** in such a way that a **bond** forms between a pair of atoms. In a carbon dioxide molecule, there are two of these bonds, each occurring between the carbon atom and one of the two oxygen atoms.

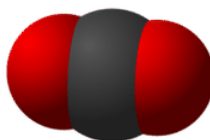


Figure 5.8.1: Carbon dioxide molecules consist of a central carbon atom bonded to 2 oxygen atoms.

Larger molecules can have many, many bonds that serve to keep the molecule together. In a large sample of a given molecular compound, all of the individual molecules are identical.

Naming Binary Molecular Compounds

Recall that a molecular formula shows the number of atoms of each element that a molecule contains. A molecule of water contains two hydrogen atoms and one oxygen atom, so its formula is H_2O . A molecule of octane, which is a component of gasoline, contains 8 atoms of carbon and 18 atoms of hydrogen. The molecular formula of octane is C_8H_{18} .



Figure 5.8.2: Nitrogen dioxide (NO_2) is a reddish-brown toxic gas that is a prominent air pollutant produced by internal combustion engines.

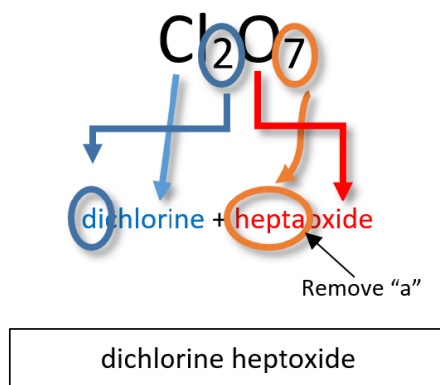
Naming *binary* (two-element) molecular compounds is similar to naming simple ionic compounds. The first element in the formula is simply listed using the name of the element. The second element is named by taking the stem of the element name and adding the suffix *-ide*. A system of numerical prefixes is used to specify the number of atoms in a molecule. Table 5.8.1 lists these numerical prefixes.

Table 5.8.1: Numerical Prefixes for Naming Binary Covalent Compounds

Number of Atoms in Compound	Prefix on the Name of the Element
1	mono-*
2	di-
3	tri-
4	tetra-

Number of Atoms in Compound	Prefix on the Name of the Element
5	penta-
6	hexa-
7	hepta-
8	octa-
9	nona-
10	deca-

*This prefix is not used for the first element's name.



Note

- Generally, the less electronegative element is written first in the formula, though there are a few exceptions. Carbon is always first in a formula and hydrogen is after nitrogen in a formula such as NH_3 . The order of common nonmetals in binary compound formulas is C, P, N, H, S, I, Br, Cl, O, F.
- The *a* or *o* at the end of a prefix is usually dropped from the name when the name of the element begins with a vowel. As an example, four oxygen atoms, is tetraoxide instead of tetraoxide.
- The prefix "mono" is not added to the first element's name if there is only one atom of the first element in a molecule.

Some examples of molecular compounds are listed in Table 5.8.2

Table 5.8.2

Formula	Name
NO	nitrogen monoxide
N_2O	dinitrogen monoxide
S_2Cl_2	disulfur dichloride
Cl_2O_7	dichlorine heptoxide

Notice that the *mono-* prefix is not used with the nitrogen in the first compound, but is used with the oxygen in both of the first two examples. The S_2Cl_2 emphasizes that the formulas for molecular compounds are not reduced to their lowest ratios. The *o* of the *mono-* and the *a* of *hepta-* are dropped from the name when paired with oxide.

? Exercise 5.8.1

Write the name for each compound.

- a. CF_4
- b. SeCl_2
- c. SO_3

Answer a:

carbon tetrafluoride

Answer b:

selenium dichloride

Answer c:

sulfur trioxide

Simple molecular compounds with common names

For some simple covalent compounds, we use common names rather than systematic names. We have already encountered these compounds, but we list them here explicitly:

- H_2O : water
- NH_3 : ammonia
- CH_4 : methane
- H_2O_2 : hydrogen peroxide

Methane is the simplest organic compound. Organic compounds are compounds with carbon atoms and are named by a separate nomenclature system.

Some Compounds Have Both Covalent and Ionic Bonds

If you recall the introduction of polyatomic ions, you will remember that the bonds that hold the polyatomic ions together are covalent bonds. Once the polyatomic ion is constructed with covalent bonds, it reacts with other substances as an ion. The bond between a polyatomic ion and another ion will be ionic. An example of this type of situation is in the compound sodium nitrate. Sodium nitrate is composed of a sodium ion and a nitrate ion. The nitrate ion is held together by covalent bonds and the nitrate ion is attached to the sodium ion by an ionic bond.

Summary

- A molecular compound is usually composed of two or more nonmetal elements.
- Molecular compounds are named with the first element first and then the second element by using the stem of the element name plus the suffix -ide. Numerical prefixes are used to specify the number of atoms in a molecule.

5.8: Naming Molecular Compounds is shared under a [CC BY-NC-SA 4.0](#) license and was authored, remixed, and/or curated by LibreTexts.

- **5.8: Naming Molecular Compounds** by Henry Agnew, Marisa Alviar-Agnew is licensed [CK-12](#). Original source: <https://www.ck12.org/c/chemistry/>.

5.9: Naming Acids

Template:HideTOC

A spot test for gold has been in use for decades. The sample is first treated with nitric acid. Other metals may react or dissolve in this acid, but gold will not. Then the sample is added to a mixture of nitric acid and hydrochloric acid. Gold will only dissolve in this mixture. The term "acid test" arose from the California gold rush in the late 1840's when this combination was used to test for the presence of real gold. It has since come to mean, "tested and approved" in a number of fields.

Acids

An **acid** can be defined in several ways. The most straightforward definition is that an acid is a molecular compound that contains one or more hydrogen atoms and produces hydrogen ions (H^+) when dissolved in water.



Figure 5.9.1: (A) Vinegar comes in a variety of types, but all contain acetic acid. (B) Citrus fruits like grapefruit contain citric and ascorbic acids.

This is a different type of compound than the others we have seen so far. Acids are molecular, which means that in their pure state they are individual molecules and do not adopt the extended three-dimensional structures of ionic compounds like NaCl . However, when these molecules are dissolved in water, the chemical bond between the hydrogen atom and the rest of the molecule breaks, leaving a positively-charged hydrogen ion and an anion. This can be symbolized in a chemical equation:



Since acids produce H^+ cations upon dissolving in water, the H of an acid is written first in the formula of an inorganic acid. The remainder of the acid (other than the H) is the anion after the acid dissolves. Organic acids are also an important class of compounds, but will not be discussed here.

Naming Acids

Since all acids contain hydrogen, the name of an acid is based on the anion that goes with it. These anions can either be monatomic or polyatomic.

Naming Binary acids (in aqueous form)

A **binary acid** is an acid that consists of hydrogen and one other element. The most common binary acids contain a halogen. The acid name begins with the prefix hydro-, followed by the base name of the anion, followed by the suffix -ic.

Hydro- and Base name of Non metal and -ic + acid

Example: $\text{HCl}_{(\text{aq})}$



Cl^- , chloride ion

hydrochloric acid

Formula for naming acids: Hydro- and Base name of nonmetal and -ic + acid. Example: HCl is hydrochloric acid.

Naming Oxyacids

An **oxyacid** is an acid that consists of hydrogen, oxygen, and a third element. The third element is usually a nonmetal.

a. Oxyanions with -ite ending.

The name of the acid is the root of the anion followed by the suffix -ous. There is no prefix.

Base name of oxyanion and -ous+ acid

Example: $\text{H}_2\text{SO}_3(\text{aq})$



SO_3^{2-} , sulfite ion

sulfurous acid

Formula for naming oxyanions with -ite ending: Base name of oxyanion and -ous + acid. Example: H_2SO_3 is sulfurous acid.

b. Oxyanions with -ate ending.

The name of the acid is the root of the anion followed by the suffix -ic. There is no prefix.

Base name of oxyanion and -ic+ acid

Example: $\text{H}_3\text{PO}_4(\text{aq})$



PO_4^{3-} phosphate ion

phosphoric acid

Formula for naming oxyanions with -ate ending: Base name of oxyanion and -ic + acid. Example: H_3PO_4 is phosphoric acid.

Note

The base name for sulfur containing oxyacid is sulfur- instead of just sulf-. The same is true for a phosphorus containing oxyacid. The base name is phosphor- instead of simply phosph-.

Writing Formulas for Acids

Like other compounds that we have studied, acids are electrically neutral. Therefore, the charge of the anion part of the formula must be exactly balanced out by the H^+ ions. Another way to think about writing the correct formula is to utilize the crisscross method, shown below for sulfuric acid.



H_2SO_4 : H has +1 charge and SO_4 has -2 charge, so there must be 2 H^+ and 1 SO_4 for the charges to balance out.

Formula: H_2SO_4

Figure 5.9.2: Crisscross approach to writing formula for sulfuric acid.

Summary

- Acids are molecular compounds that release hydrogen ions.
- A binary acid consists of hydrogen and one other element.
- Oxyacids contain hydrogen, oxygen, and one other element.
- The name of the acid is based on the anion attached to the hydrogen.

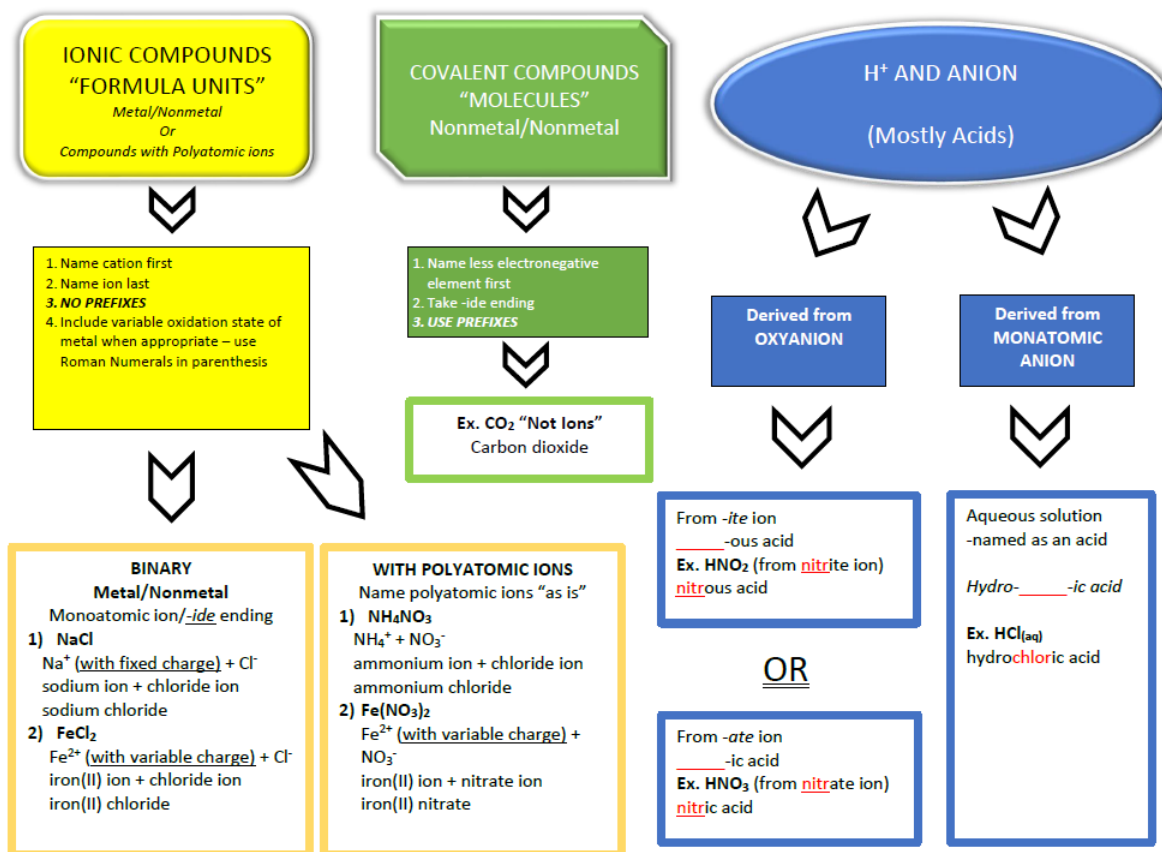
5.9: Naming Acids is shared under a [CC BY-NC-SA 4.0](#) license and was authored, remixed, and/or curated by LibreTexts.

- 5.9: Naming Acids by Henry Agnew, Marisa Alviar-Agnew is licensed [CK-12](#). Original source: <https://www.ck12.org/c/chemistry/>.

5.10: Nomenclature Summary

Template:HideTOC

NOMENCLATURE FLOWCHART



Contributions & Attributions

5.10: Nomenclature Summary is shared under a [CC BY-NC-SA 4.0](#) license and was authored, remixed, and/or curated by LibreTexts.

- 5.10: Nomenclature Summary by Henry Agnew, Marisa Alviar-Agnew is licensed [CK-12](#). Original source: <https://www.ck12.org/c/chemistry/>.

5.11: Formula Mass- The Mass of a Molecule or Formula Unit

Template:HideTOC

Learning Objectives

- To determine the formula mass of an ionic or molecular compound.

A necessary skill for future chapters is the ability to determine the mass of the formula of an ionic compound. This quantity is called the formula mass. The formula mass is obtained by adding the masses of each individual atom in the formula of the compound. Because a proper formula is electrically neutral (with no net electrons gained or lost), the ions can be considered atoms for the purpose of calculating the formula mass.

Let us start by calculating the formula mass of sodium chloride (NaCl). This formula mass is the sum of the atomic masses of one sodium atom and one chlorine atom, which we find from the periodic table; here, we use the masses to two decimal places:

$$\text{Na: } 22.99 \text{ amu}$$

$$\text{Cl: } +35.34 \text{ amu}$$

$$\text{Total: } 58.44 \text{ amu}$$

To two decimal places, the formula mass of NaCl is 58.44 amu.

When an ionic compound has more than one anion or cation, you must remember to use the proper multiple of the atomic mass for the element in question. For the formula mass of calcium fluoride (CaF_2), we must multiply the mass of the fluorine atom by 2 to account for the two fluorine atoms in the chemical formula:

$$\text{Ca: } 1 \times 40.08 = 40.08 \text{ amu}$$

$$\text{F: } 2 \times 19.00 = +38.00 \text{ amu}$$

$$\text{Total} = 78.08 \text{ amu}$$

The formula mass of CaF_2 is 78.08 amu.

For ionic compounds with polyatomic ions, the sum must include the number and mass of each atom in the formula for the polyatomic ion. For example, potassium nitrate (KNO_3) has one potassium atom, one nitrogen atom, and three oxygen atoms:

$$\text{K: } 1 \times 39.10 = 39.10 \text{ amu}$$

$$\text{N: } 1 \times 14.00 = +14.00 \text{ amu}$$

$$\text{O: } 3 \times 16.00 = +48.00 \text{ amu}$$

$$\text{Total} = 101.10 \text{ amu}$$

The formula mass of KNO_3 is 101.10 amu.

Potassium nitrate is a key ingredient in gunpowder and has been used clinically as a diuretic.

When a formula contains more than one polyatomic unit in the chemical formula, as in $\text{Ca}(\text{NO}_3)_2$, do not forget to multiply the atomic mass of every atom inside of the parentheses by the subscript outside of the parentheses. This is necessary because the subscript refers to the *entire polyatomic ion*. Thus, for $\text{Ca}(\text{NO}_3)_2$, the subscript 2 implies two complete nitrate ions, so we must sum the masses of two (1×2) nitrogen atoms and six (3×2) oxygen atoms, along with the mass of a single calcium atom:

$$\text{Ca: } 1 \times 40.08 = 40.08 \text{ amu}$$

$$\text{N: } 2 \times 14.00 = +28.00 \text{ amu}$$

$$\text{O: } 6 \times 16.00 = +96.00 \text{ amu}$$

$$\text{Total} = 164.08 \text{ amu}$$

The key to calculating the formula mass of an ionic compound is to correctly count each atom in the formula and multiply the atomic masses of its atoms accordingly.

✓ Example 5.11.1

Use the atomic masses (rounded to two decimal places) to determine the formula mass for each ionic compound.

- FeCl_3
- $(\text{NH}_4)_3\text{PO}_4$

Solution

a.

$$\text{Fe: } 1 \times 55.85 = 55.85 \text{ amu}$$

$$\text{Cl: } 1 \times 35.45 = +106.35 \text{ amu}$$

$$\text{Total} = 162.20 \text{ amu}$$

The formula mass of FeCl_3 is 162.2 amu.

b. When we distribute the subscript 3 through the parentheses containing the formula for the ammonium ion, we see that we have 3 nitrogen atoms and 12 hydrogen atoms. Thus, we set up the sum as follows:

$$\text{N: } 3 \times 14.00 = 42.00 \text{ amu}$$

$$\text{H: } 12 \times 1.00 = +12.00 \text{ amu}$$

$$\text{P: } 1 \times 30.97 = +30.97 \text{ amu}$$

$$\text{O: } 4 \times 16.00 = +64.00 \text{ amu}$$

$$\text{Total} = 148.97 \text{ amu}$$

The formula mass for $(\text{NH}_4)_3\text{PO}_4$ is 149.0 amu.

? Exercise 5.11.1

Use the atomic masses (rounded to two decimal places) to determine the formula mass for each ionic compound.

- TiO_2
- AgBr
- $\text{Au}(\text{NO}_3)_3$
- $\text{Fe}_3(\text{PO}_4)_2$

Answer

- 79.87 amu
- 187.77 amu
- 383.0 amu

📌 To Your Health: Hydrates

Some ionic compounds have water (H_2O) incorporated within their formula unit. These compounds, called *hydrates*, have a characteristic number of water units associated with each formula unit of the compound. Hydrates are solids, not liquids or solutions, despite the water they contain.

To write the chemical formula of a hydrate, write the number of water units per formula unit of compound after its chemical formula. The two chemical formulas are separated by a vertically centered dot. The hydrate of copper(II) sulfate has five water units associated with each formula unit, so it is written as $\text{CuSO}_4 \cdot 5 \text{H}_2\text{O}$. The name of this compound is copper(II) sulfate pentahydrate, with the *penta-* prefix indicating the presence of five water units per formula unit of copper(II) sulfate.



Cast (CC BY-SA 4.0; JanSLWC via [Wikipedia](#)).

Hydrates have various uses in the health industry. Calcium sulfate hemihydrate ($\text{CaSO}_4 \cdot \frac{1}{2} \text{H}_2\text{O}$), known as **plaster of Paris**, is used to make casts for broken bones. Epsom salt ($\text{MgSO}_4 \cdot 7 \text{H}_2\text{O}$) is used as a bathing salt and a laxative. Aluminum chloride hexahydrate is an active ingredient in antiperspirants. Table 5.11.1 lists some useful hydrates.

Table 5.11.1: Names and Formulas of Some Widely Used Hydrates

Formula	Name	Uses
$\text{AlCl}_3 \cdot 6\text{H}_2\text{O}$	aluminum chloride hexahydrate	antiperspirant
$\text{CaSO}_4 \cdot \frac{1}{2}\text{H}_2\text{O}$	calcium sulfate hemihydrate (plaster of Paris)	casts (for broken bones and castings)
$\text{CaSO}_4 \cdot 2\text{H}_2\text{O}$	calcium sulfate dihydrate (gypsum)	drywall component
$\text{CoCl}_2 \cdot 6\text{H}_2\text{O}$	cobalt(II) chloride hexahydrate	drying agent, humidity indicator
$\text{CuSO}_4 \cdot 5\text{H}_2\text{O}$	copper(II) sulfate pentahydrate	fungicide, algicide, herbicide
$\text{MgSO}_4 \cdot 7\text{H}_2\text{O}$	magnesium sulfate heptahydrate (Epsom salts)	laxative, bathing salt
$\text{Na}_2\text{CO}_3 \cdot 10\text{H}_2\text{O}$	sodium carbonate decahydrate (washing soda)	laundry additive/cleaner

Key Takeaway

- Formula masses of ionic compounds can be determined from the masses of the atoms in their formulas.

5.11: Formula Mass- The Mass of a Molecule or Formula Unit is shared under a [CC BY-NC-SA 4.0](#) license and was authored, remixed, and/or curated by LibreTexts.

- 5.11: Formula Mass - The Mass of a Molecule or Formula Unit by Henry Agnew, Marisa Alviar-Agnew is licensed [CC BY-NC-SA 3.0](#).

CHAPTER OVERVIEW

6: Chemical Composition

Chemical composition refers to the arrangement, type, and ratio of atoms in molecules of chemical substances. Chemical composition varies when chemicals are added or subtracted from a substance, when the ratio of substances changes, or when other chemical changes occur in chemicals.

[6.1: How Much Sodium?](#)

[6.2: Counting Nails by the Pound](#)

[6.3: Counting Atoms by the Gram](#)

[6.4: Counting Molecules by the Gram](#)

[6.5: Chemical Formulas as Conversion Factors](#)

[6.6: Mass Percent Composition of Compounds](#)

[6.7: Mass Percent Composition from a Chemical Formula](#)

[6.8: Calculating Empirical Formulas for Compounds](#)

[6.9: Calculating Molecular Formulas for Compounds](#)

[6: Chemical Composition](#) is shared under a [CC BY-NC-SA 4.0](#) license and was authored, remixed, and/or curated by LibreTexts.

6.1: How Much Sodium?

[Template:HideTOC](#)

Why is knowledge of composition important? Everything in nature is either chemically or physically combined with other substances. To find the amount of a material in a sample, you need to know what fraction of the sample it is. Some simple applications of composition are: the amount of sodium in sodium chloride for a diet, the amount of iron in iron ore for steel production, the amount of hydrogen in water for hydrogen fuel, and the amount of chlorine in freon to estimate ozone depletion.



How much salt is in this salt packet? (CC-BY-SA; 3.0; [Swilliams](#)).

6.1: How Much Sodium? is shared under a [CC BY-NC-SA 4.0](#) license and was authored, remixed, and/or curated by LibreTexts.

- 6.1: Prelude to Chemical Composition - How Much Sodium? by Henry Agnew, Marisa Alviar-Agnew is licensed [CC BY-SA 4.0](#).

6.2: Counting Nails by the Pound

Template:HideTOC

Counting by Weighing and Avogadro's number

The size of molecule is so small that it is physically difficult, if not impossible, to directly count out molecules (Figure 6.2.1). However, we can count them indirectly by using a common trick of "counting by weighing".

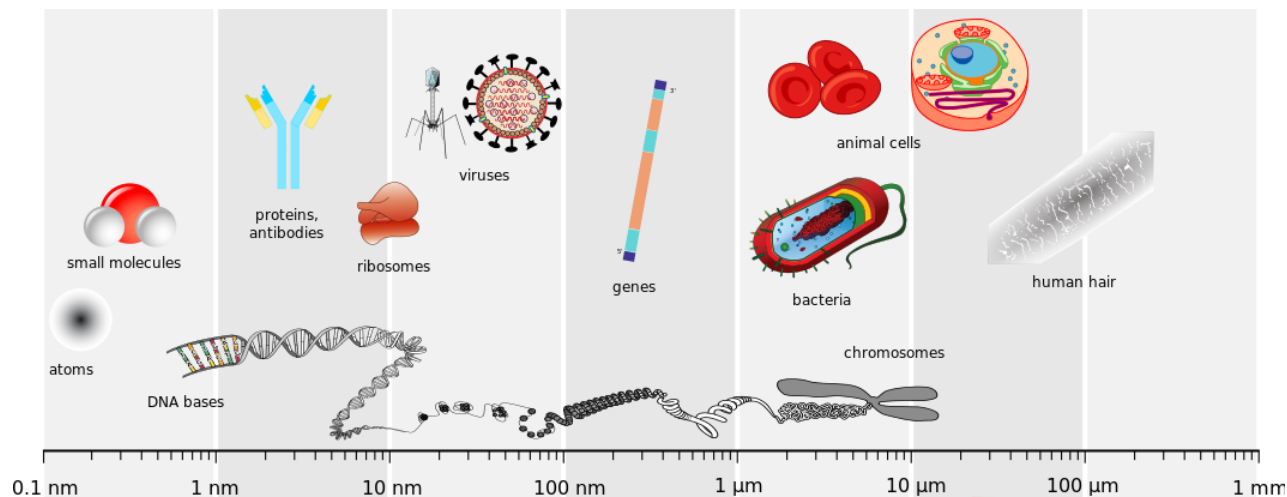


Figure 6.2.1: A comparison of the scales of various biological and technological objects. (CC BY-SA 3.0; Wikipedia)

Consider the example of counting nails in a big box at a hardware store. You need to estimate the number of nails in a box. The weight of an empty box is 213 g and the weight of the box plus a bunch of big nails is 1340 g. Assume that we know that the weight of one big nail is 0.450 g. Hopefully it's not necessary to tear open the package and count the nails. We agree that

$$\text{mass of big nails} = 1340 \text{ g} - 213 \text{ g} = 1227 \text{ g}$$

Therefore

$$\text{Number of big nails in box} = \frac{1227 \text{ g}}{0.450 \text{ g/big nail}} = 2,726.6 \text{ big nails} = 2,730 \text{ big nails.} \quad (6.2.1)$$

You have just counted the number of big nails in the box by weighing them (rather than by counting them individually).



Figure 6.2.2: Galvanized nails. Individually counting nails in a box would require significant effort. Alternatively, we can count them by weighing. (Public Domain; Wikipedia).

Now consider if the box of nails weighed the same, but the box were filled with small nails with an individual mass of 0.23 g/small nail instead? You would do the same math, but use a different denominator in Equation 6.2.1:

$$\text{Number of small nails in box} = \frac{1227 \text{ g}}{0.230 \text{ g/small nail}} = 5,334.7 \text{ small nails} = 5,335 \text{ small nails.} \quad (6.2.2)$$

The individual mass is the conversion factor used in the calculation and changes, based on the nature of the nail (big or small). Let's ask a different question: how many *dozens* of nails are there in the same box of small nails described above?

If we know the information from Equation 6.2.2, we can just use the conversion of how many nails are in a dozen:

$$\frac{5,335 \text{ small nails}}{12 \text{ small nails/dozen}} = 444.6 \text{ dozen small nails} \quad (6.2.3)$$

If we want to get this value from weighing, we use the "dozen mass" instead of individual mass:

$$12 \times 0.23 \text{ g} = 2.76 \text{ g/dozen small nails.} \quad (6.2.4)$$

So following Equation 6.2.2, we get:

$$\text{Number of dozens of small nails} = \frac{1227 \text{ g}}{2.76 \text{ g/dozen small nails}} = 444.6 \text{ dozen small nails} \quad (6.2.5)$$

and this is the same result as Equation 6.2.3. These calculations demonstrate the difference between individual mass (i.e., per individual) and collective mass (e.g., per dozen or per gross). The collective mass of most importance to chemistry is *molar mass* (i.e., mass per mole or mass per 6.022×10^{23}).

Avogadro's Number

Avogadro's number is an accident of nature. It is the number of particles that delivers a mole of a substance. Avogadro's number = 6.022×10^{23} . The reason why the value is an accident of nature is that the mole is tied to the gram mass unit. The gram is a convenient mass unit because it matches human sizes. If we were a thousand times greater in size (like Paul Bunyan) we would find it handy to use kilogram amounts. This means the kilogram mole would be convenient. The number of particles handled in a kilogram mole is 1000 times greater. The kilo Avogadro number for the count of particles in a kilomole is 6.022×10^{26} .

If humans were tiny creatures (like Lilliputians) only 1/1000 our present size, milligrams would be more convenient. This means the milligram mole would be more useful. The number of particles handled in a milligram mole (millimole) would be 1/1000 times smaller. The milli Avogadro number for the count of particles in a millimole is 6.022×10^{20} .

What do you think would happen to Avogadro's number if the American system was used and amounts were measured in pound moles? Remember 1 pound = 454 grams. Avogadro's number would be larger by a factor of 454. A pound mole of hydrogen would weigh 1 pound, which is 454 grams. A gram mole of hydrogen weighs 1 gram and contains 6.022×10^{23} H atoms.

Molar Mass for Elements

You are able to read the [periodic table](#) and determine the average atomic mass for an element like carbon. The average mass is 12.01 amu. This mass is a ridiculously tiny number of grams. It is too small to handle normally. The molar mass of carbon is defined as the mass in grams that is numerically equal to the average atomic weight. This means

$$1 \text{ g/mole carbon} = 12.01 \text{ g carbon}$$

this is commonly written

$$1 \text{ mol carbon} = 12.01 \text{ grams carbon.}$$

This is the mass of carbon that contains 6.022×10^{23} carbon atoms.

- Avogadro's number is 6.022×10^{23} particles.

This same process gives us the molar mass of any element. For example:

- $1 \text{ mol neon} = 20.18 \text{ g neon Ne}$
- $1 \text{ mol sodium} = 22.99 \text{ g sodium Na}$

Molar Mass for Compounds

✓ Example 6.2.1: Molar Mass of Water

The formulas for compounds are familiar to you. You know the formula for water is H_2O . It should be reasonable that the weight of a formula unit can be calculated by adding up the weights for the atoms in the formula.

Solution

The formula weight for water

weight from hydrogen + weight from oxygen

The formula weight for water

$$2 \text{ H atoms} \times 1.008 \text{ amu} + 1 \text{ O atom} \times 16.00 \text{ amu} = 18.016 \text{ amu}$$

The molar mass for water

18.016 grams water or 18 grams to the nearest gram

✓ Example 6.2.2: Molar Mass of Methane

The formula for methane, the major component in natural gas, is CH_4 .

Solution

The formula weight for methane

weight from hydrogen + weight from carbon

The formula weight for methane

$$4 \text{ H atoms} \times 1.008 \text{ amu} + 1 \text{ C atom} \times 12.01 \text{ amu} = 16.04 \text{ amu}$$

The molar mass for methane

16.04 grams per mole of methane

✓ Example 6.2.3: Molar Mass of Ethyl Chloride

What is its molar mass for ethyl chloride $\text{CH}_3\text{CH}_2\text{Cl}$?

Solution

The *formula weight*

weight from hydrogen + weight from carbon + weight from chlorine

The formula weight

$$5 \text{ H atoms} \times 1.008 \text{ amu} + 2 \text{ C atom} \times 12.01 \text{ amu} + 35.5 \text{ amu} = 64.5 \text{ amu}$$

The molar mass for ethyl chloride

64.5 grams per mole of ethyl chloride

✓ Example 6.2.4: Molar Mass of Sulfur Dioxide

What is the molar mass for sulfur dioxide, SO_2 (g), a gas used in bleaching and disinfection processes?

Solution

Look up the atomic weight for each of the elements in the formula.

- 1 sulfur atom = 32.07 amu
- 1 oxygen atom = 16.00 amu

Count the atoms of each element in the formula unit.

- one sulfur atom
- two oxygen atoms

The formula weight

weight from sulfur + weight from oxygen

The formula weight

$$1 \text{ sulfur atom} \times (32.07 \text{ amu}) + 2 \text{ oxygen atoms} \times (16.00 \text{ amu})$$

The formula weight

$$\text{SO}_2 = 32.07 \text{ amu} + 32.00 \text{ amu} = 64.07 \text{ amu} = 64 \text{ amu SO}_2$$

The molar mass for SO_2 is

$$64.07 \text{ grams of SO}_2; 1 \text{ mol SO}_2 = 64 \text{ grams per mole of SO}_2$$

? Exercise 6.2.1

What is the formula weight and molar mass for alum, $\text{KAl}(\text{SO}_4)_2 \cdot 12 \text{H}_2\text{O}$?

Answer

1. Check the periodic table for the atomic masses for each atom in the formula.
2. Count the number of each type of atom in the formula.
3. Multiply the number of atoms by the atomic mass for each element.
4. Add up the masses for all of the elements.

Table 6.2.1: Masses of each element in alum, $\text{KAl}(\text{SO}_4)_2 \cdot 12 \text{H}_2\text{O}$

element	average atomic mass	number of atoms in formula	rounded to nearest one unit for simplicity
potassium k	39.1 amu	1	39. amu
aluminum	26.98 amu	1	27. amu
sulfur	32.07 amu	2	64. amu
oxygen	16.00 amu	$8 + 12 = 20$	320. amu
hydrogen	1.008 amu	$2 \times 12 = 24$	24. amu

Molar mass is 474 grams (add up the amu of each element to find the total of 474 amu). This is a mass in grams that is numerically (474) the same as the formula weight.

$$1 \text{ mole alum } \text{KAl}(\text{SO}_4)_2 \cdot 12 \text{H}_2\text{O} = 474 \text{ grams alum } \text{KAl}(\text{SO}_4)_2 \cdot 12 \text{H}_2\text{O}$$

6.2: Counting Nails by the Pound is shared under a [CC BY-NC-SA 4.0](#) license and was authored, remixed, and/or curated by LibreTexts.

- 6.2: Counting Nails by the Pound by Delmar Larsen, Henry Agnew, Marisa Alviar-Agnew is licensed [CC BY-SA 3.0](#).

6.3: Counting Atoms by the Gram

Template:HideTOC

Learning Objectives

- Use Avogadro's number to convert to moles and vice versa given the number of particles of an element.
- Use the molar mass to convert to grams and vice versa given the number of moles of an element.

When objects are very small, it is often inconvenient, inefficient, or even impossible to deal with the objects one at a time. For these reasons, we often deal with very small objects in groups, and have even invented names for various numbers of objects. The most common of these is "dozen" which refers to 12 objects. We frequently buy objects in groups of 12, like doughnuts or pencils. Even smaller objects such as straight pins or staples are usually sold in boxes of 144, or a dozen dozen. A group of 144 is called a "gross".

This problem of dealing with things that are too small to operate with as single items also occurs in chemistry. Atoms and molecules are too small to see, let alone to count or measure. Chemists needed to select a group of atoms or molecules that would be convenient to operate with.

Avogadro's Number and Mole

In chemistry, it is impossible to deal with a single atom or molecule because we can't see them, count them, or weigh them. Chemists have selected a number of particles with which to work that is convenient. Since molecules are extremely small, you may suspect this number is going to be very large, and you are right. The number of particles in this group is 6.02×10^{23} particles and the name of this group is the **mole** (the abbreviation for **mole** is mol). One mole of any object is 6.02×10^{23} of those objects. There is a particular reason that this number was chosen and this reason will become clear as we proceed.

When chemists are carrying out chemical reactions, it is important that the relationship between the numbers of particles of each reactant is known. Any readily measurable mass of an element or compound contains an extraordinarily large number of atoms, molecules, or ions, so an extremely large numerical unit is needed to count them. The mole is used for this purpose.

The **mole** (symbol: **mol**) is the base unit of amount of substance ("number of substance") in the International System of Units or System International (SI), defined as exactly $6.02214076 \times 10^{23}$ particles, e.g., atoms, molecules, ions or electrons. The current definition was adopted in November 2018, revising its old definition based on the number of atoms in 12 grams of carbon-12 (^{12}C) (the isotope of carbon with relative atomic mass 12 Daltons, by definition). For most purposes, 6.022×10^{23} provides an adequate number of significant figures. Just as 1 mole of atoms contains 6.022×10^{23} atoms, 1 mole of eggs contains 6.022×10^{23} eggs. This number is called Avogadro's number, after the 19th-century Italian scientist who first proposed a relationship between the volumes of gases and the numbers of particles they contain.

It is not obvious why eggs come in dozens rather than 10s or 14s, or why a ream of paper contains 500 sheets rather than 400 or 600. The definition of a mole—that is, the decision to base it on 12 g of carbon-12—is also arbitrary. The important point is that 1 mole of carbon—or of anything else, whether atoms, compact discs, or houses—always has the same number of objects: 6.022×10^{23} .

Converting Between Number of Atoms to Moles and Vice Versa

We can use Avogadro's number as a conversion factor, or ratio, in dimensional analysis problems. If we are given the number of atoms of an element X, we can convert it into moles by using the relationship

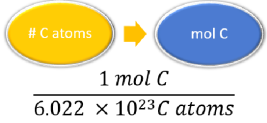
$$1 \text{ mol X} = 6.022 \times 10^{23} \text{ X atoms.}$$

✓ Example 6.3.1: Moles of Carbon

The element carbon exists in two primary forms: graphite and diamond. How many moles of carbon atoms is 4.72×10^{24} atoms of carbon?

Solution

Solutions to Example 6.3.1

Steps for Problem Solving	The element carbon exists in two primary forms: graphite and diamond. How many moles of carbon atoms is 4.72×10^{24} atoms of carbon?
Identify the "given" information and what the problem is asking you to "find."	Given: 4.72×10^{24} C atoms Find: mol C
List other known quantities.	$1 \text{ mol} = 6.022 \times 10^{23} \text{ C atoms}$
Prepare a concept map and use the proper conversion factor.	
Cancel units and calculate.	$4.72 \times 10^{24} \text{ C atoms} \times \frac{1 \text{ mol C}}{6.02 \times 10^{23} \text{ C atoms}} = 7.84 \text{ mol C}$
Think about your result.	The given number of carbon atoms was greater than Avogadro's number, so the number of moles of C atoms is greater than 1 mole. Since Avogadro's number is a measured quantity with three significant figures, the result of the calculation is rounded to three significant figures.

Molar Mass

Molar mass is defined as the mass of one mole of representative particles of a substance. By looking at a periodic table, we can conclude that the molar mass of the element lithium is 6.94g, the molar mass of zinc is 65.38g, and the molar mass of gold is 196.97g. Each of these quantities contains 6.022×10^{23} atoms of that particular element. The units for molar mass are grams per mole or g/mol. 1.00 mol of carbon-12 atoms has a mass of 12.0 g and contains 6.022×10^{23} atoms. 1.00 mole of any element has a mass numerically equal to its atomic mass in grams and contains 6.022×10^{23} particles. The mass, in grams, of 1 mole of particles of a substance is now called the **molar mass** (mass of 1.00 mole).

Converting Grams to Moles of an Element and Vice Versa

We can also convert back and forth between grams of an element and moles. The conversion factor for this is the molar mass of the substance. The **molar mass** is the ratio giving the number of grams for each one mole of the substance. This ratio is easily found by referring to the atomic mass of the element using the periodic table. This ratio has units of grams per mole or g/mol.

Conversions like this are possible for any substance, as long as the proper atomic mass, formula mass, or molar mass is known (or can be determined) and expressed in grams per mole. Figure 6.4.1 illustrates what conversion factor is needed and two examples are given below.

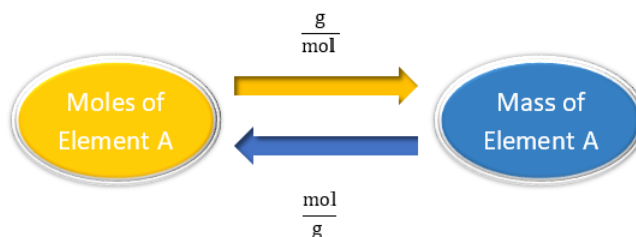


Figure 6.3.1: A Simple Flowchart for Converting Between Mass and Moles of an Element.

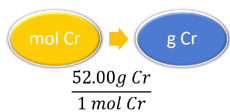
Flowchart: to convert moles of Element A to mass of Element A, use g/mol, and to convert vice versa, use mol/g.

✓ Example 6.3.2: Chromium

Chromium metal is used for decorative electroplating of car bumpers and other surfaces. Find the mass of 0.560 moles of chromium.

Solution

Solutions to Example 6.3.2


Steps for Problem Solving	Chromium metal is used for decorative electroplating of car bumpers and other surfaces. Find the mass of 0.560 moles of chromium.
Identify the "given" information and what the problem is asking you to "find."	Given: 0.560 mol Cr Find: g Cr
List other known quantities.	1 mol Cr = 52.00g Cr
Prepare a concept map and use the proper conversion factor.	
Cancel units and calculate.	$0.560 \cancel{\text{ mol Cr}} \times \frac{52.00 \text{ g Cr}}{1 \cancel{\text{ mol Cr}}} = 29.1 \text{ g Cr}$
Think about your result.	Since the desired amount was slightly more than one half of a mole, the mass should be slightly more than one half of the molar mass. The answer has three significant figures because of the 0.560 mol

✓ Example 6.3.3: Silicon

How many moles are in 107.6g of Si?

Solution

Solutions to Example 6.3.3

Steps for Problem Solving	How many moles are in 107.6g of Si.
Identify the "given" information and what the problem is asking you to "find."	Given: 107.6g Si Find: mol Si
List other known quantities.	1 mol Si = 28.09g Si
Prepare a concept map and use the proper conversion factor.	
Cancel units and calculate.	$107.6 \cancel{\text{ g Si}} \times \frac{1 \text{ mol Si}}{28.09 \cancel{\text{ g Si}}} = 3.83 \text{ mol Si}$
Think about your result.	Since 1 mol of Si is 28.09g, 107.6 should be about 4 moles.

? Exercise 6.3.1

- How many moles are present in 100.0 g of Al?
- What is the mass of 0.552 mol of Ag metal?

Answer a:

3.706 mol Al

Answer b:

59.5 g Ag

Summary

- A mole is defined as exactly $6.02214076 \times 10^{23}$ particles, e.g., atoms, molecules, ions or electrons.
- There are $6.02214076 \times 10^{23}$ particles in 1.00 mole. This number is called Avogadro's number.
- The molar mass of an element can be found by referring to the atomic mass on a periodic table with units of g/mol.
- Using dimensional analysis, it is possible to convert between grams, moles, and the number of atoms or molecules.

Further Reading/Supplemental Links

- learner.org/resources/series61.html - The **learner.org** website allows users to view streaming videos of the Annenberg series of chemistry videos. You are required to register before you can watch the videos, but there is no charge. The website has one video that relates to this lesson called **The Mole**.
- Using Avogadro's law, the mass of a substance can be related to the number of particles contained in that mass. The Mole: (www.learner.org/vod/vod_window.html?pid=803)
- Vision Learning tutorial: The Mole <http://visionlearning.com/library/mo...p?mid-53&1=&c3=>

Contributions & Attributions

-
- Wikipedia

6.3: Counting Atoms by the Gram is shared under a [CC BY-NC-SA 4.0](https://creativecommons.org/licenses/by-nc-sa/4.0/) license and was authored, remixed, and/or curated by LibreTexts.

- 6.3: Counting Atoms by the Gram** by Henry Agnew, Marisa Alviar-Agnew is licensed [CC-12](https://creativecommons.org/licenses/by-nc-sa/4.0/). Original source: <https://www.ck12.org/c/chemistry/>.

6.4: Counting Molecules by the Gram

Template:HideTOC

Learning Objectives

- Define molecular mass and formula mass.
- Perform conversions between mass and moles of a compound.
- Perform conversions between mass and number of particles.

Molecular and Formula Masses

The molecular mass of a substance is the sum of the average masses of the atoms in one molecule of a substance. It is calculated by adding together the atomic masses of the elements in the substance, each multiplied by its subscript (written or implied) in the molecular formula. Because the units of atomic mass are atomic mass units, the units of molecular mass are also atomic mass units. The procedure for calculating molecular masses is illustrated in Example 6.4.1.

✓ Example 6.4.1: Ethanol

Calculate the molecular mass of ethanol, whose condensed structural formula is $\text{CH}_3\text{CH}_2\text{OH}$. Among its many uses, ethanol is a fuel for internal combustion engines

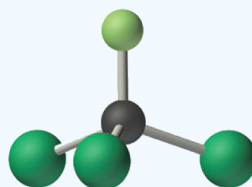
Solution

Solutions to Example 6.4.1

Steps for Problem Solving	Calculate the molecular mass of ethanol, whose condensed structural formula is $\text{CH}_3\text{CH}_2\text{OH}$
Identify the "given" information and what the problem is asking you to "find."	Given: Ethanol molecule ($\text{CH}_3\text{CH}_2\text{OH}$) Find: molecular mass
Determine the number of atoms of each element in the molecule.	The molecular formula of ethanol may be written in three different ways: <ul style="list-style-type: none"> • $\text{CH}_3\text{CH}_2\text{OH}$ (which illustrates the presence of an ethyl group • CH_3CH_2-, and an $-\text{OH}$ group) • $\text{C}_2\text{H}_5\text{OH}$, and $\text{C}_2\text{H}_6\text{O}$; All show that ethanol has two carbon atoms, six hydrogen atoms, and one oxygen atom.
Obtain the atomic masses of each element from the periodic table and multiply the atomic mass of each element by the number of atoms of that element.	1 C atom = 12.011 amu 1 H atom = 1.0079 amu 1 O atom = 15.9994 amu
Add the masses together to obtain the molecular mass.	2C: (2 atoms)(12.011amu/atom) = 24.022 amu 6H: (6 atoms)(1.0079amu/atom) = 6.0474amu +1O: (1 atoms)(15.9994amu/atom) = 15.9994amu $\text{C}_2\text{H}_6\text{O}$: molecular mass of ethanol = 46.069amu

? Exercise 6.4.1: Freon

Calculate the molecular mass of trichlorofluoromethane, also known as Freon-11, which has a condensed structural formula of CCl_3F . Until recently, it was used as a refrigerant. The structure of a molecule of Freon-11 is as follows:



Freon-11, CCl_3F

Figure 6.4.1: Molecular structure of freon-11, CCl_3F .

Answer

137.37 amu

Unlike molecules, which form covalent bonds, ionic compounds do not have a readily identifiable molecular unit. Therefore, for ionic compounds, the **formula mass** (also called the empirical formula mass) of the compound is used instead of the molecular mass. The formula mass is the sum of the atomic masses of all the elements in the empirical formula, each multiplied by its subscript (written or implied). It is directly analogous to the molecular mass of a covalent compound. The units are atomic mass units.

Atomic mass, molecular mass, and formula mass all have the same units: atomic mass units.

✓ Example 6.4.2: Calcium Phosphate

Calculate the formula mass of $\text{Ca}_3(\text{PO}_4)_2$, commonly called calcium phosphate. This compound is the principal source of calcium found in bovine milk.

Solution

Solutions to Example 6.4.2

Steps for Problem Solving	Calculate the formula mass of $\text{Ca}_3(\text{PO}_4)_2$, commonly called calcium phosphate.
Identify the "given" information and what the problem is asking you to "find."	Given: Calcium phosphate $[\text{Ca}_3(\text{PO}_4)_2]$ formula unit Find: formula mass
Determine the number of atoms of each element in the molecule.	<ul style="list-style-type: none"> The empirical formula—$\text{Ca}_3(\text{PO}_4)_2$—indicates that the simplest electrically neutral unit of calcium phosphate contains three Ca^{2+} ions and two PO_4^{3-} ions. The formula mass of this molecular unit is calculated by adding together the atomic masses of three calcium atoms, two phosphorus atoms, and eight oxygen atoms.
Obtain the atomic masses of each element from the periodic table and multiply the atomic mass of each element by the number of atoms of that element.	1 Ca atom = 40.078 amu 1 P atom = 30.973761 amu 1 O atom = 15.9994 amu
Add together the masses to give the formula mass.	3Ca: (3 atoms) (40.078 amu/atom)=120.234amu 2P: (2 atoms) (30.973761amu/atom)=61.947522amu + 8O: (8 atoms)(15.9994amu/atom)=127.9952amu <hr/> Formula mass of $\text{Ca}_3(\text{PO}_4)_2$ =310.177amu

? Exercise 6.4.2: Silicon Nitride

Calculate the formula mass of Si_3N_4 , commonly called silicon nitride. It is an extremely hard and inert material that is used to make cutting tools for machining hard metal alloys.



Figure 6.4.2: Si_3N_4 bearing parts. (Public Domain; David W. Richerson and Douglas W. Freitag; Oak Ridge National Laboratory).

Answer

140.29 amu

Molar Mass

The molar mass of a substance is defined as the mass in grams of 1 mole of that substance. One mole of isotopically pure carbon-12 has a mass of 12 g. For an element, the molar mass is the mass of 1 mol of atoms of that element; for a covalent molecular compound, it is the mass of 1 mol of molecules of that compound; for an ionic compound, it is the mass of 1 mol of formula units. That is, the molar mass of a substance is the mass (in grams per mole) of 6.022×10^{23} atoms, molecules, or formula units of that substance. In each case, the number of grams in 1 mol is the same as the number of atomic mass units that describe the atomic mass, the molecular mass, or the formula mass, respectively.

The molar mass of any substance is its atomic mass, molecular mass, or formula mass in grams per mole.

The periodic table lists the atomic mass of carbon as 12.011 amu; the average molar mass of carbon—the mass of 6.022×10^{23} carbon atoms—is therefore 12.011 g/mol:

Table 6.4.1: Molar Mass of Select Substances

Substance (formula)	Basic Unit	Atomic, Molecular, or Formula Mass (amu)	Molar Mass (g/mol)
carbon (C)	atom	12.011 (atomic mass)	12.011
ethanol ($\text{C}_2\text{H}_5\text{OH}$)	molecule	46.069 (molecular mass)	46.069
calcium phosphate [$\text{Ca}_3(\text{PO}_4)_2$]	formula unit	310.177 (formula mass)	310.177

Converting Between Grams and Moles of a Compound

The molar mass of any substance is the mass in grams of one mole of representative particles of that substance. The representative particles can be atoms, molecules, or formula units of ionic compounds. This relationship is frequently used in the laboratory. Suppose that for a certain experiment you need 3.00 moles of calcium chloride (CaCl_2). Since calcium chloride is a solid, it would be convenient to use a balance to measure the mass that is needed. Dimensional analysis will allow you to calculate the mass of CaCl_2 that you should measure as shown in Example 6.4.3.

✓ Example 6.4.3: Calcium Chloride


Calculate the mass of 3.00 moles of calcium chloride (CaCl_2).



Figure 6.4.3: Calcium chloride is used as a drying agent and as a road deicer.

Solution

Solutions to Example 6.4.3

Steps for Problem Solving	Calculate the mass of 3.00 moles of calcium chloride
Identify the "given" information and what the problem is asking you to "find."	Given: 3.00 moles of CaCl_2 Find: g CaCl_2
List other known quantities.	1 mol $\text{CaCl}_2 = 110.98 \text{ g CaCl}_2$
Prepare a concept map and use the proper conversion factor.	 $\frac{110.98 \text{ g CaCl}_2}{1 \text{ mol CaCl}_2}$
Cancel units and calculate.	$3.00 \text{ mol CaCl}_2 \times \frac{110.98 \text{ g CaCl}_2}{1 \text{ mol CaCl}_2} = 333 \text{ g CaCl}_2$
Think about your result.	

? Exercise 6.4.3: Calcium Oxide

What is the mass of 7.50 mol of (calcium oxide) CaO ?

Answer

420.60 g

✓ Example 6.4.4: Water

How many moles are present in 108 grams of water?

Solution

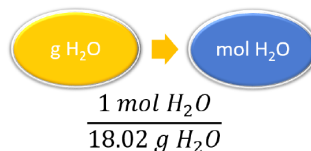
Solutions to Example 6.4.4

Steps for Problem Solving	How many moles are present in 108 grams of water?
Identify the "given" information and what the problem is asking you to "find."	Given: 108 g H_2O Find: mol H_2O
List other known quantities.	1 mol $\text{H}_2\text{O} = 18.02 \text{ g H}_2\text{O}$

Steps for Problem Solving

How many moles are present in 108 grams of water?

Prepare a concept map and use the proper conversion factor.



Cancel units and calculate.

$$108 \cancel{\text{ g H}_2\text{O}} \times \frac{1 \text{ mol H}_2\text{O}}{18.02 \cancel{\text{ g H}_2\text{O}}} = 5.99 \text{ mol H}_2\text{O}$$

Think about your result.

? Exercise 6.4.4: Nitrogen Gas

What is the mass of 7.50 mol of Nitrogen gas N_2 ?

Answer

210 g

Conversions Between Mass and Number of Particles

In "Conversions Between Moles and Mass", you learned how to convert back and forth between moles and the number of representative particles. Now you have seen how to convert back and forth between moles and mass of a substance in grams. We can combine the two types of problems into one. Mass and number of particles are both related to moles. To convert from mass to number of particles or vice-versa, it will first require a conversion to moles as shown in Figure 6.4.1 and Example 6.4.5.

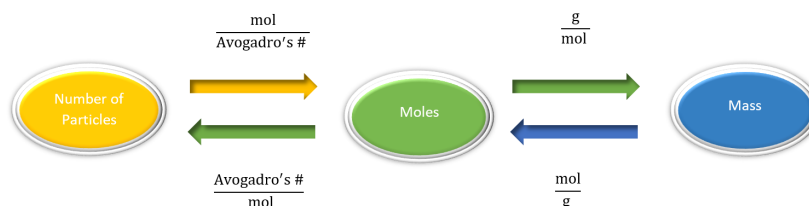


Figure 6.4.4: Conversion from number of particles to mass, or from mass to number of particles, requires two steps. To convert from number of particles to moles, use mol/Avogadro's #, and to convert from moles to mass, use g/mol.

✓ Example 6.4.5: Chlorine

How many molecules is 20.0 g of chlorine gas, Cl_2 ?

Solution

Solutions to Example 6.4.5

Steps for Problem Solving

How many molecules is 20.0 g of chlorine gas, Cl_2 ?

Identify the "given" information and what the problem is asking you to "find."

Given: 20.0 g Cl_2
Find: # Cl_2 molecules

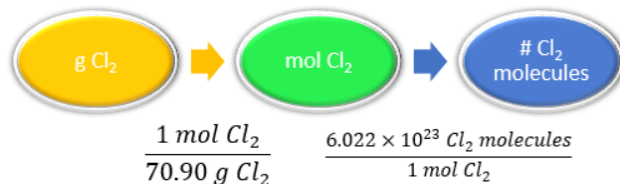
List other known quantities.

- 1 mol Cl_2 = 70.90 g Cl_2 ,
- 1mol Cl_2 = 6.022×10^{23} Cl_2 molecules

Steps for Problem Solving

How many molecules is 20.0 g of chlorine gas, Cl_2 ?

Prepare a concept map and use the proper conversion factor.



The conversion factors are 1 mole Cl_2 over 70.90 grams Cl_2 , and 6.022×10^{23} Cl_2 molecules over 1 mole Cl_2 .

Cancel units and calculate.

$$20.0 \text{ g Cl}_2 \times \frac{1 \text{ mol Cl}_2}{70.90 \text{ g Cl}_2} \times \frac{6.02 \times 10^{23} \text{ molecules Cl}_2}{1 \text{ mol Cl}_2} = 1.70 \times 10^{23} \text{ molecules Cl}_2$$

Think about your result.

Since the given mass is less than half of the molar mass of chlorine, the resulting number of molecules is less than half of Avogadro's number.

? Exercise 6.4.5: Calcium Chloride

How many formula units are in 25.0 g of CaCl_2 ?

Answer

1.36×10^{23} CaCl_2 formula units

Summary

- Calculations for formula mass and molecular mass are described.
- Calculations involving conversions between moles of a material and the mass of that material are described.
- Calculations are illustrated for conversions between mass and number of particles.

6.4: Counting Molecules by the Gram is shared under a [CC BY-NC-SA 4.0](#) license and was authored, remixed, and/or curated by LibreTexts.

- **6.4: Counting Molecules by the Gram** by Henry Agnew, Marisa Alviar-Agnew is licensed [CC BY-NC-SA 3.0](#).

6.5: Chemical Formulas as Conversion Factors

Template:HideTOC

Learning Objectives

- Use chemical formulas as conversion factors.

Figure 6.5.1 shows that we need 2 hydrogen atoms and 1 oxygen atom to make one water molecule. If we want to make two water molecules, we will need 4 hydrogen atoms and 2 oxygen atoms. If we want to make five molecules of water, we need 10 hydrogen atoms and 5 oxygen atoms. The ratio of atoms we will need to make any number of water molecules is the same: 2 hydrogen atoms to 1 oxygen atom.

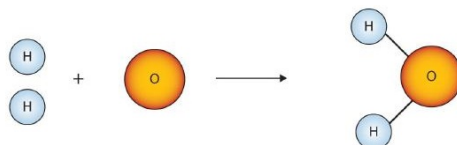


Figure 6.5.1 Water Molecules. The ratio of hydrogen atoms to oxygen atoms used to make water molecules is always 2:1, no matter how many water molecules are being made.

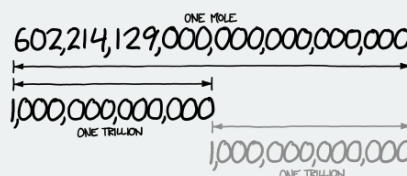
Using formulas to indicate how many atoms of each element we have in a substance, we can relate the number of moles of molecules to the number of moles of atoms. For example, in 1 mol of water (H_2O) we can construct the relationships given in (Table 6.5.1).

Table 6.5.1: Molecular Relationships for Water

1 Molecule of H_2O Has	1 Mol of H_2O Has	Molecular Relationships
2 H atoms	2 mol of H atoms	$\frac{2 \text{ mol H atoms}}{1 \text{ mol H}_2\text{O molecules}}$ or $\frac{1 \text{ mol H}_2\text{O molecules}}{1 \text{ mol H}_2\text{O molecules}}$
1 O atom	1 mol of O atoms	$\frac{2 \text{ mol H atoms}}{1 \text{ mol O atoms}}$ or $\frac{1 \text{ mol H}_2\text{O molecules}}{1 \text{ mol H}_2\text{O molecules}}$

The Mole is big

A mole represents a very large number! The number 602,214,129,000,000,000,000,000 looks about twice as long as a trillion, which means it's about a trillion trillion.



(CC BY-SA NC; *what if?* [what-if.xkcd.com]).

A trillion trillion kilograms is how much a planet weighs. If 1 mol of quarters were stacked in a column, it could stretch back and forth between Earth and the sun 6.8 billion times.

Table 6.5.2: Molecular and Mass Relationships for Ethanol

1 Molecule of $\text{C}_2\text{H}_6\text{O}$ Has	1 Mol of $\text{C}_2\text{H}_6\text{O}$ Has	Molecular and Mass Relationships
2 C atoms	2 mol of C atoms	$\frac{2 \text{ mol C atoms}}{1 \text{ mol C}_2\text{H}_6\text{O molecules}}$ or $\frac{1 \text{ mol C}_2\text{H}_6\text{O molecules}}{1 \text{ mol C}_2\text{H}_6\text{O molecules}}$
6 H atoms	6 mol of H atoms	$\frac{2 \text{ mol C atoms}}{6 \text{ mol H atoms}}$ or $\frac{1 \text{ mol C}_2\text{H}_6\text{O molecules}}{1 \text{ mol C}_2\text{H}_6\text{O molecules}}$

1 Molecule of C_2H_6O Has	1 Mol of C_2H_6O Has	Molecular and Mass Relationships
1 O atom	1 mol of O atoms	$\frac{1 \text{ mol O atoms}}{1 \text{ mol } C_2H_6O \text{ molecules}}$ or $\frac{1 \text{ mol } C_2H_6O \text{ molecules}}{1 \text{ mol } C_2H_6O \text{ molecules}}$
2 (12.01 amu) C 24.02 amu C	2 (12.01 g) C 24.02 g C	$\frac{1 \text{ mol O atoms}}{24.02 \text{ g C}}$ or $\frac{1 \text{ mol } C_2H_6O \text{ molecules}}{24.02 \text{ g C}}$
6 (1.008 amu) H 6.048 amu H	6 (1.008 g) H 6.048 g H	$\frac{6.048 \text{ g H}}{1 \text{ mol } C_2H_6O \text{ molecules}}$ or $\frac{1 \text{ mol } C_2H_6O \text{ molecules}}{6.048 \text{ g H}}$
1 (16.00 amu) O 16.00 amu O	1 (16.00 g) O 16.00 g O	$\frac{16.00 \text{ g O}}{1 \text{ mol } C_2H_6O \text{ molecules}}$ or $\frac{1 \text{ mol } C_2H_6O \text{ molecules}}{16.00 \text{ g O}}$

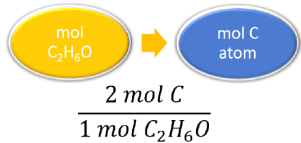
The following example illustrates how we can use the relationships in Table 6.5.2 as conversion factors.

✓ Example 6.5.1: Ethanol

If a sample consists of 2.5 mol of ethanol (C_2H_6O), how many moles of carbon atoms does it have?

Solution

Solutions to Example 6.5.1

Steps for Problem Solving	If a sample consists of 2.5 mol of ethanol (C_2H_6O), how many moles of carbon atoms does it have?
Identify the "given" information and what the problem is asking you to "find."	Given: 2.5 mol C_2H_6O Find: mol C atoms
List other known quantities.	1 mol C_2H_6O = 2 mol C
Prepare a concept map and use the proper conversion factor.	
Cancel units and calculate.	Note how the unit $mol C_2H_6O$ molecules cancels algebraically. $2.5 \cancel{mol C_2H_6O \text{ molecules}} \times \frac{2 \text{ mol C atoms}}{1 \cancel{mol C_2H_6O \text{ molecules}}} = 5.0 \text{ mol C atoms}$
Think about your result.	There are twice as many C atoms in one C_2H_6O molecule, so the final amount should be double.

? Exercise 6.5.1

If a sample contains 6.75 mol of Na_2SO_4 , how many moles of sodium atoms, sulfur atoms, and oxygen atoms does it have?

Answer

13.5 mol Na atoms, 6.75 mol S atoms, and 27.0 mol O atoms

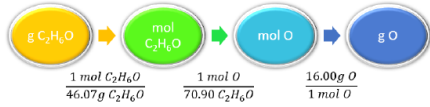
The fact that 1 mol equals 6.022×10^{23} items can also be used as a conversion factor.

✓ Example 6.5.2: Oxygen Mass

Determine the mass of Oxygen in 75.0g of C_2H_6O .

Solution

Solutions to Example 6.5.2

Steps for Problem Solving	Determine the mass of Oxygen in 75.0g of C ₂ H ₆ O
Identify the "given" information and what the problem is asking you to "find."	Given: 75.0g C ₂ H ₆ O Find: g O
List other known quantities.	1 mol O = 16.0g O 1 mol C ₂ H ₆ O = 1 mol O 1 mol C ₂ H ₆ O = 46.07g C ₂ H ₆ O
Prepare a concept map and use the proper conversion factor.	 <p>The conversion factors are 1 mol C₂H₆O over 46.07 g C₂H₆O, 1 mol O over 1 mol C₂H₆O, and 16.00 g O over 1 mole O.</p>
Cancel units and calculate.	$75.0 \text{ g C}_2\text{H}_6\text{O} \times \frac{1 \text{ mol C}_2\text{H}_6\text{O}}{46.07 \text{ g C}_2\text{H}_6\text{O}} \times \frac{1 \text{ mol O}}{1 \text{ mol C}_2\text{H}_6\text{O}} \times \frac{16.00 \text{ g O}}{1 \text{ mol O}} = 26$
Think about your result.	

? Exercise 6.5.2

- How many molecules are present in 16.02 mol of C₄H₁₀? How many C atoms are in 16.02 mol?
- How many moles of each type of atom are in 2.58 mol of Na₂SO₄?

Answer a:

9.647 x 10²⁴ C₄H₁₀ molecules and 3.859 x 10²⁵ C atoms

Answer b:

5.16 mol Na atoms, 2.58 mol S atoms, and 10.3 mol O atoms

Summary

In any given formula, the ratio of the number of moles of molecules (or formula units) to the number of moles of atoms can be used as a conversion factor.

6.5: Chemical Formulas as Conversion Factors is shared under a CC BY-NC-SA 4.0 license and was authored, remixed, and/or curated by LibreTexts.

- 6.5: Chemical Formulas as Conversion Factors by Henry Agnew, Marisa Alviar-Agnew is licensed CK-12. Original source: <https://www.ck12.org/c/chemistry/>.

6.6: Mass Percent Composition of Compounds

Template:HideTOC

Learning Objectives

- Determine percent composition of each element in a compound based on mass.

Packaged foods that you eat typically have nutritional information provided on the label. The label on a jar of peanut butter reveals that one serving size is considered to be 32 g. The label also gives the masses of various types of compounds that are present in each serving. One serving contains 7 g of protein, 15 g of fat, and 3 g of sugar. By calculating the fraction of protein, fat, or sugar in one serving size of peanut butter and converting to percent values, we can determine the composition of peanut butter on a percent by mass basis.

Percent Composition

Chemists often need to know what elements are present in a compound and in what percentage. The **percent composition** is the percent by mass of each element in a compound. It is calculated in a similar way to that of the composition of the peanut butter.

$$\% \text{ by mass} = \frac{\text{mass of element}}{\text{mass of compound}} \times 100\%$$

The sample problem below shows the calculation of the percent composition of a compound based on mass data.

✓ Example 6.6.1: Percent Composition from Mass Data

A certain newly synthesized compound is known to contain the elements zinc and oxygen. When a 20.00 g sample of the compound is decomposed, 16.07 g of zinc remains. Determine the percent composition of the compound.

Solution

Solutions to Example 6.6.1

Steps for Problem Solving	When a 20.00 g sample of the zinc-and-oxygen compound is decomposed, 16.07 g of zinc remains. Determine the percent composition of the compound.
Identify the "given" information and what the problem is asking you to "find."	Given : Mass of compound = 20.00 g Mass of Zn = 16.07 g Find: % Composition (% Zn and %O)
List other known quantities.	Subtract to find the mass of oxygen in the compound. Divide each element's mass by the mass of the compound to find the percent by mass. Mass of oxygen = 20.00 g - 16.07 g = 3.93 g O
Cancel units and calculate.	$\% \text{ Zn} = \frac{16.07 \text{ g Zn}}{20.00 \text{ g}} \times 100\% = 80.35\% \text{ Zn}$ $\% \text{ O} = \frac{3.93 \text{ g O}}{20.00 \text{ g}} \times 100\% = 19.65\% \text{ O}$ <p>Calculate the percent by mass of each element by dividing the mass of that element by the mass of the compound and multiplying by 100%.</p>
Think about your result.	The calculations make sense because the sum of the two percentages adds up to 100%. By mass, the compound is mostly zinc.

? Exercise 6.6.1

Sulfuric acid, H_2SO_4 is a very useful chemical in industrial processes. If 196.0 g of sulfuric acid contained 64.0g oxygen and 4.0 g of hydrogen, what is the percent composition of the compound?

Answer

2.04% H, 32.65% S, and 65.3% O

Summary

- Processes are described for calculating the percent composition of a compound based on mass.

6.6: Mass Percent Composition of Compounds is shared under a [CC BY-NC-SA 4.0](#) license and was authored, remixed, and/or curated by LibreTexts.

- 6.6: Mass Percent Composition of Compounds** by Henry Agnew, Marisa Alviar-Agnew is licensed [CK-12](#). Original source: <https://www.ck12.org/c/chemistry/>.

6.7: Mass Percent Composition from a Chemical Formula

Template:HideTOC

Learning Objectives

- Determine the percent composition of each element in a compound from the chemical formula.

The percent composition of a compound can also be determined from the formula of the compound. The subscripts in the formula are first used to calculate the mass of each element in one mole of the compound. This is divided by the molar mass of the compound and multiplied by 100%.

$$\% \text{ by mass} = \frac{\text{mass of element in 1 mol}}{\text{molar mass of compound}} \times 100\%$$

The percent composition of a given compound is always the same, given that the compound is pure.

✓ Example 6.7.1

Dichlorine heptoxide (Cl_2O_7) is a highly reactive compound used in some organic synthesis reactions. Calculate the percent composition of dichlorine heptoxide.

Solution

Solutions to Example 6.7.1

Steps for Problem Solving	Calculate the percent composition of dichlorine heptoxide (Cl_2O_7).
Identify the "given" information and what the problem is asking you to "find."	Given : Cl_2O_7 Find: % Composition (% Cl and %O)
List other known quantities.	Mass of Cl in 1 mol Cl_2O_7 , 2 Cl : $2 \times 35.45 \text{ g} = 70.90 \text{ g}$ Mass of O in 1 mol Cl_2O_7 , 7 O: $7 \times 16.00 \text{ g} = 112.00 \text{ g}$ Molar mass of $\text{Cl}_2\text{O}_7 = 182.90 \text{ g/mol}$
Cancel units and calculate.	$\% \text{ Cl} = \frac{70.90 \text{ g Cl}}{182.90 \text{ g}} \times 100\% = 38.76\% \text{ Cl}$ $\% \text{ O} = \frac{112.00 \text{ g O}}{182.90 \text{ g}} \times 100\% = 61.24\% \text{ O}$ Calculate the percent by mass of each element by dividing the mass of that element in 1 mole of the compound by the molar mass of the compound and multiplying by 100%.
Think about your result.	The percentages add up to 100%.

Percent composition can also be used to determine the mass of a certain element that is contained in any mass of a compound. In the previous sample problem, it was found that the percent composition of dichlorine heptoxide is 38.76% Cl and 61.24% O. Suppose that you needed to know the masses of chlorine and oxygen present in a 12.50 g sample of dichlorine heptoxide. You can set up a conversion factor based on the percent by mass of each element.

$$12.50 \text{ g Cl}_2\text{O}_7 \times \frac{38.76 \text{ g Cl}}{100 \text{ g Cl}_2\text{O}_7} = 4.845 \text{ g Cl}$$

$$12.50 \text{ g Cl}_2\text{O}_7 \times \frac{61.24 \text{ g O}}{100 \text{ g Cl}_2\text{O}_7} = 7.655 \text{ g O}$$

The sum of the two masses is 12.50 g the mass of the sample size.

? Exercise 6.7.1

Barium fluoride is a transparent crystal that can be found in nature as the mineral frankdicksonite. Determine the percent composition of barium fluoride.

Answer a:

78.32% Ba and 21.67% F

Summary

- Processes are described for calculating the percent composition of a compound based on the chemical formula.

6.7: Mass Percent Composition from a Chemical Formula is shared under a [CC BY-NC-SA 4.0](#) license and was authored, remixed, and/or curated by LibreTexts.

- 6.7: Mass Percent Composition from a Chemical Formula** by Henry Agnew, Marisa Alviar-Agnew is licensed [CK-12](#). Original source: <https://www.ck12.org/c/chemistry/>.

6.8: Calculating Empirical Formulas for Compounds

Template:HideTOC

Learning Objectives

- Define empirical formula.
- Determine empirical formula from percent composition of a compound.

In the early days of chemistry, there were few tools for the detailed study of compounds. Much of the information regarding the composition of compounds came from the elemental analysis of inorganic materials. The "new" field of organic chemistry (the study of carbon compounds) faced the challenge of not being able to characterize a compound completely. The relative amounts of elements could be determined, but so many of these materials had carbon, hydrogen, oxygen, and possibly nitrogen in simple ratios. We did not know exactly how many of these atoms were actually in a specific molecule.

Determining Empirical Formulas

An empirical formula tells us the relative ratios of different atoms in a compound. The ratios hold true on the *molar* level as well. Thus, H_2O is composed of two atoms of hydrogen and 1 atom of oxygen. Likewise, **1.0 mole of H_2O is composed of 2.0 moles of hydrogen and 1.0 mole of oxygen.** We can also work backwards from molar ratios because *if we know the molar amounts of each element in a compound, we can determine the empirical formula.*

*In a procedure called **elemental analysis**, an unknown compound can be analyzed in the laboratory in order to determine the percentages of each element contained within it. These percentages can be transformed into the mole ratio of the elements, which leads to the empirical formula.*

Empirical Formula: In Steps

Steps to determine empirical formula:

1. Assume a 100 g sample of the compound so that the given percentages can be directly converted into grams.
2. Use each element's molar mass to convert the grams of each element to moles.
3. In order to find a whole-number ratio, divide the moles of each element by whichever of the moles from step 2 is the smallest.
4. If all the moles at this point are whole numbers (or very close), the empirical formula can be written with the moles as the subscript of each element.
5. In some cases, one or more of the moles calculated in step 3 will not be whole numbers. Multiply each of the moles by the smallest whole number that will convert each into a whole number. Write the empirical formula.

✓ Example 6.8.1

A compound of iron and oxygen is analyzed and found to contain 69.94% iron and 30.06% oxygen. Find the empirical formula of the compound.

Solution

Solutions to Example 6.8.1

Steps for Problem Solving	Find the empirical formula of a compound of 69.94% iron and 30.06% oxygen.
Identify the "given" information and what the problem is asking you to "find."	Given: % of Fe = 69.94% % of O = 30.06% Find: Empirical formula = Fe_xO_y
Calculate	

Steps for Problem Solving	Find the empirical formula of a compound of 69.94% iron and 30.06% oxygen.
a. Assume a 100 g sample, convert the same % values to grams.	69.94 g Fe 30.06 g O
b. Convert to moles.	$69.94 \text{ g Fe} \times \frac{1 \text{ mol Fe}}{55.85 \text{ g Fe}} = 1.252 \text{ mol Fe}$ $30.06 \text{ g O} \times \frac{1 \text{ mol O}}{16.00 \text{ g O}} = 1.879 \text{ mol O}$
c. Divide both moles by the smallest of the results.	$\text{Fe} : \frac{1.252 \text{ mol}}{1.252}$ $\text{O} : \frac{1.879 \text{ mol}}{1.252}$ <p>The "non-whole number" empirical formula of the compound is $\text{Fe}_1\text{O}_{1.5}$</p>
Multiply each of the moles by the smallest whole number that will convert each into a whole number.	$\text{Fe}:\text{O} = 2 (1:1.5) = 2:3$ <p>Since the moles of O is still not a whole number, both moles can be multiplied by 2, while rounding to a whole number.</p>
Write the empirical formula.	The empirical formula of the compound is Fe_2O_3 .
Think about your result.	The subscripts are whole numbers and represent the mole ratio of the elements in the compound. The compound is the ionic compound iron (III) oxide.

? Exercise 6.8.1

Mercury forms a compound with chlorine that is 73.9% mercury and 26.1% chlorine by mass. What is the empirical formula?

Answer



Summary

- A process is described for the calculation of the empirical formula of a compound, based on the percent composition of that compound.

6.8: Calculating Empirical Formulas for Compounds is shared under a [CC BY-NC-SA 4.0](#) license and was authored, remixed, and/or curated by LibreTexts.

- 6.8: Calculating Empirical Formulas for Compounds by Henry Agnew, Marisa Alviar-Agnew is licensed [CK-12](#). Original source: <https://www.ck12.org/c/chemistry/>.

6.9: Calculating Molecular Formulas for Compounds

Template:HideTOC

Learning Objectives

- Understand the difference between empirical formulas and molecular formulas.
- Determine molecular formula from percent composition and molar mass of a compound.

Below, we see two carbohydrates: [glucose](#) and [sucrose](#). Sucrose is almost exactly twice the size of glucose, although their empirical formulas are very similar. Some people can distinguish them on the basis of taste, but it's not a good idea to go around tasting chemicals. The best way to tell glucose and sucrose apart is to determine the molar masses—this approach allows you to easily tell which compound is which.

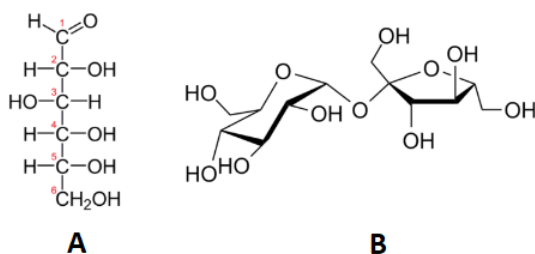


Figure 6.9.1: (A) the molecular structure of glucose and (B) the molecular structure of sucrose.

Molecular Formulas

Molecular formulas give the kind and number of atoms of each element present in the molecular compound. In many cases, the molecular formula is the same as the empirical formula. The chemical formula will always be some *integer multiple* (n) of the empirical formula (i.e. integer multiples of the subscripts of the empirical formula).

$$\text{Molecular Formula} = n(\text{Empirical formula})$$

therefore

$$n = \frac{\text{Molecular Formula}}{\text{Empirical Formula}}$$

The integer multiple, n , can also be obtained by dividing the molar mass, MM , of the compound by the empirical formula mass, EFM (the molar mass represented by the empirical formula).

$$n = \frac{MM(\text{molar mass})}{EFM(\text{empirical formula molar mass})}$$

Table 6.9.1 shows the comparison between the empirical and molecular formula of methane, acetic acid, and glucose, and the different values of n . The molecular formula of methane is CH_4 and because it contains only one carbon atom, that is also its empirical formula. Sometimes, however, the molecular formula is a simple whole number multiple of the empirical formula. Acetic acid is an organic acid that is the main component of vinegar. Its molecular formula is $\text{C}_2\text{H}_4\text{O}_2$. Glucose is a simple sugar that cells use as a primary source of energy. Its molecular formula is $\text{C}_6\text{H}_{12}\text{O}_6$. The structures of both molecules are shown in Figure 6.9.2. They are very different compounds, yet both have the same empirical formula of CH_2O .

Table 6.9.1: Molecular Formula and Empirical Formula of Various Compounds.

Name of Compound	Molecular Formula	Empirical Formula	n
Methane	CH_4	CH_4	1
Acetic acid	$\text{C}_2\text{H}_4\text{O}_2$	CH_2O	2
Glucose	$\text{C}_6\text{H}_{12}\text{O}_6$	CH_2O	6

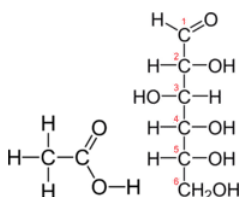


Figure 6.9.2: Acetic acid (left) has a molecular formula of $C_2H_4O_2$, while glucose (right) has a molecular formula of $C_6H_{12}O_6$. Both have the empirical formula CH_2O .

Empirical formulas can be determined from the percent composition of a compound as discussed in section 6.8. In order to determine its molecular formula, it is necessary to know the molar mass of the compound. Chemists use an instrument called a mass spectrometer to determine the molar mass of compounds. In order to go from the empirical formula to the molecular formula, follow these steps:

1. Calculate the **empirical formula molar mass (EFM)**.
2. Divide the molar mass of the compound by the empirical formula molar mass. The result should be a whole number or very close to a whole number.
3. Multiply all the subscripts in the empirical formula by the whole number found in step 2. The result is the molecular formula.

✓ Example 6.9.1

The empirical formula of a compound of boron and hydrogen is BH_3 . Its molar mass is 27.7 g/mol. Determine the molecular formula of the compound.

Solution

Solutions to Example 6.9.1

Steps for Problem Solving	Determine the molecular formula of BH_3 .
Identify the "given" information and what the problem is asking you to "find."	Given: Empirical formula = BH_3 Molar mass = 27.7 g/mol Find: Molecular formula = ?
Calculate the empirical formula mass (EFM).	Empirical formula molar mass (EFM) = 13.84 g/mol
Divide the molar mass of the compound by the empirical formula mass. The result should be a whole number or very close to a whole number.	$\frac{\text{molar mass}}{\text{EFM}} = \frac{27.7 \text{ g/mol}}{13.84 \text{ g/mol}} = 2$
Multiply all the subscripts in the empirical formula by the whole number found in step 2. The result is the molecular formula.	$BH_3 \times 2 = B_2H_6$
Write the molecular formula.	The molecular formula of the compound is B_2H_6 .
Think about your result.	The molar mass of the molecular formula matches the molar mass of the compound.

? Exercise 6.9.1

Vitamin C (ascorbic acid) contains 40.92 % C, 4.58 % H, and 54.50 % O, by mass. The experimentally determined molecular mass is 176 amu. What are the empirical and chemical formulas for ascorbic acid?

Answer Empirical Formula



Answer Molecular Formula



Summary

- A procedure is described that allows the calculation of the exact molecular formula for a compound.

6.9: Calculating Molecular Formulas for Compounds is shared under a [CC BY-NC-SA 4.0](#) license and was authored, remixed, and/or curated by LibreTexts.

- **6.9: Calculating Molecular Formulas for Compounds** by Henry Agnew, Marisa Alviar-Agnew is licensed [CK-12](#). Original source: <https://www.ck12.org/c/chemistry/>.

CHAPTER OVERVIEW

7: Chemical Reactions

A chemical reaction is a process that leads to the transformation of one set of chemical substances to another. Chemical reactions encompass changes that **only involve** the positions of electrons in the forming and breaking of chemical bonds between atoms, with no change to the nuclei (no change to the elements present), and can often be described by a chemical equation.

[7.1: Grade School Volcanoes, Automobiles, and Laundry Detergents](#)

[7.2: Evidence of a Chemical Reaction](#)

[7.3: The Chemical Equation](#)

[7.4: How to Write Balanced Chemical Equations](#)

[7.5: Aqueous Solutions and Solubility- Compounds Dissolved in Water](#)

[7.6: Precipitation Reactions- Reactions in Aqueous Solution That Form a Solid](#)

[7.7: Writing Chemical Equations for Reactions in Solution- Molecular, Complete Ionic, and Net Ionic Equations](#)

[7.8: Acid–Base and Gas Evolution Reactions](#)

[7.9: Oxidation–Reduction Reactions](#)

[7.10: Classifying Chemical Reactions](#)

[7.11: The Activity Series](#)

7: Chemical Reactions is shared under a [CC BY-NC-SA 4.0](#) license and was authored, remixed, and/or curated by LibreTexts.

7.1: Grade School Volcanoes, Automobiles, and Laundry Detergents

[Template:HideTOC](#)

Contributions & Attributions

7.1: Grade School Volcanoes, Automobiles, and Laundry Detergents is shared under a [CC BY-NC-SA 4.0](#) license and was authored, remixed, and/or curated by LibreTexts.

- **7.1: Grade School Volcanoes, Automobiles, and Laundry Detergents** by Henry Agnew, Marisa Alviar-Agnew is licensed [CK-12](#). Original source: <https://www.ck12.org/c/chemistry/>.

7.2: Evidence of a Chemical Reaction

Template:HideTOC

Learning Objectives

- Identify the evidence for chemical reactions.

In a chemical change, new substances are formed. In order for this to occur, the chemical bonds of the substances break, and the atoms that compose them separate and rearrange themselves into new substances with new chemical bonds. When this process occurs, we call it a chemical reaction. A **chemical reaction** is the process in which one or more substances are changed into one or more new substances.




Figure 7.2.1: (a) Copper and nitric acid undergo a chemical change to form copper nitrate and brown, gaseous nitrogen dioxide. (b) During the combustion of a match, cellulose in the match and oxygen from the air undergo a chemical change to form carbon dioxide and water vapor. (c) Cooking red meat causes a number of chemical changes, including the oxidation of iron in myoglobin that results in the familiar red-to-brown color change. (d) A banana turning brown is a chemical change as new, darker (and less tasty) substances form. (Credit b: modification of work by Jeff Turner; credit c: modification of work by Gloria Cabada-Leman; credit d: modification of work by Roberto Verzo.)

To identify a chemical reaction, we look for a **chemical change**. A chemical change always produces one or more types of matter that differ from the matter present before the change. The formation of rust is a chemical change because rust is a different kind of matter than the iron, oxygen, and water present before the rust formed. The explosion of nitroglycerin is a chemical change because the gases produced are very different kinds of matter from the original substance. Other examples of chemical changes include: reactions that are performed in a lab (such as copper reacting with nitric acid), all forms of combustion (burning), and food being cooked, digested, or rotting (Figure 7.2.1).



Video 7.2.1: Evidence of a Chemical Reaction

✓ Example 7.2.1: Evidence of a Chemical Reaction

Which of the following is a chemical reaction?

- a. Freezing liquid mercury.
- b. Adding yellow to blue to make green.
- c. Cutting a piece of paper into two pieces.
- d. Dropping a sliced orange into a vat of sodium hydroxide.
- e. Filling a balloon with natural air.

Solution

A, B, C, & E involve only physical changes. A sliced orange has acid (citric acid) that can react with sodium hydroxide, so the answer is D.

? Exercise 7.2.1

Which of the following is a chemical reaction?

- a. Painting a wall blue.
- b. A bicycle rusting.
- c. Ice cream melting.
- d. Scratching a key across a desk.
- e. Making a sand castle.

Answer

B

✓ Example 7.2.2: Evidence of a Chemical Reaction

Which of the following is not a chemical reaction?

- a. Shattering glass with a baseball.
- b. Corroding metal.
- c. Fireworks exploding.
- d. Lighting a match.
- e. Baking a cake.

Solution

Shattering glass with a baseball results in glass broken into many pieces but no chemical change happens, so the answer is A.

? Exercise 7.2.2

Which of the following is NOT a chemical reaction?

- a. Frying an egg.
- b. Slicing carrots.
- c. A Macbook falling out of a window.
- d. Creating ATP in the human body.
- e. Dropping a fizzy tablet into a glass of water.

Answer

B and C

Summary

Chemical reactions can be identified via a wide range of different observable factors including change in color, energy change (temperature change or light produced), gas production, formation of precipitate and change in properties.

7.2: Evidence of a Chemical Reaction is shared under a [CC BY-NC-SA 4.0](#) license and was authored, remixed, and/or curated by LibreTexts.

- **7.2: Evidence of a Chemical Reaction** by Henry Agnew, Marisa Alviar-Agnew is licensed [CC BY 4.0](#). Original source: <https://www.ck12.org/c/chemistry/>.

7.3: The Chemical Equation

Template:HideTOC

Learning Objectives

- Identify the reactants and products in any chemical reaction.
- Convert word equations into chemical equations.
- Use the common symbols, (s), (l), (g), (aq), and → appropriately when writing a chemical reaction.

In a chemical change, new substances are formed. In order for this to occur, the chemical bonds of the substances break, and the atoms that compose them separate and rearrange themselves into new substances with new chemical bonds. When this process occurs, we call it a chemical reaction. A **chemical reaction** is the process in which one or more substances are changed into one or more new substances.

Reactants and Products

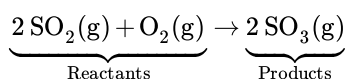
To describe a chemical reaction, we need to indicate what substances are present at the beginning and what substances are present at the end. The substances that are present at the beginning are called **reactants** and the substances present at the end are called **products**.

Sometimes when reactants are put into a reaction vessel, a reaction will take place to produce products. Reactants are the starting materials, that is, whatever we have as our initial ingredients. The products are just that—what is produced—or the result of what happens to the reactants when we put them together in the reaction vessel. If we think about baking chocolate chip cookies, our reactants would be flour, butter, sugar, vanilla, baking soda, salt, egg, and chocolate chips. What would be the products? Cookies! The reaction vessel would be our mixing bowl.

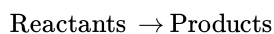


Writing Chemical Equations

When sulfur dioxide is added to oxygen, sulfur trioxide is produced. Sulfur dioxide and oxygen, $\text{SO}_2 + \text{O}_2$, are reactants and sulfur trioxide, SO_3 , is the product.



In chemical reactions, the reactants are found before the symbol "→" and the products are found after the symbol "→". The general equation for a reaction is:



There are a few special symbols that we need to know in order to "talk" in chemical shorthand. In the table below is the summary of the major symbols used in chemical equations. Table 7.3.1 shows a listing of symbols used in chemical equations.

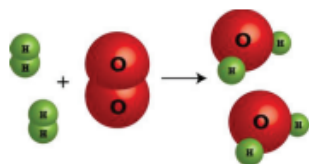
Table 7.3.1: Symbols Used in Chemical Equations

Symbol	Description	Symbol	Description
+	used to separate multiple reactants or products	(s)	reactant or product in the solid state
→	yield sign; separates reactants from products	(l)	reactant or product in the liquid state
⇌	replaces the yield sign for reversible reactions that reach equilibrium	(g)	reactant or product in the gas state

Symbol	Description	Symbol	Description
Pt \rightarrow	formula written above the arrow is used as a catalyst in the reaction	(aq)	reactant or product in an aqueous solution (dissolved in water)
Δ \rightarrow	triangle indicates that the reaction is being heated		

Chemists have a choice of methods for describing a chemical reaction.

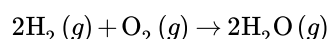
1. They could draw a picture of the chemical reaction.



2. They could write a word equation for the chemical reaction:

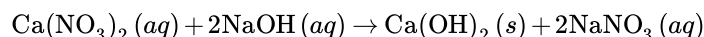
"Two molecules of hydrogen gas react with one molecule of oxygen gas to produce two molecules of water vapor."

3. They could write the equation in chemical shorthand.

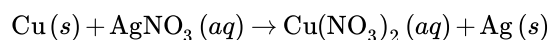


In the symbolic equation, chemical formulas are used instead of chemical names for reactants and products, while symbols are used to indicate the phase of each substance. It should be apparent that the chemical shorthand method is the quickest and clearest method for writing chemical equations.

We could write that an aqueous solution of calcium nitrate is added to an aqueous solution of sodium hydroxide to produce solid calcium hydroxide and an aqueous solution of sodium nitrate. Or in shorthand we could write:



How much easier is that to read? Let's try it in reverse. Look at the following reaction in shorthand and write the word equation for the reaction:



The word equation for this reaction might read something like "solid copper reacts with an aqueous solution of silver nitrate to produce a solution of copper (II) nitrate with solid silver."

To turn word equations into symbolic equations, we need to follow the given steps:

1. Identify the reactants and products. This will help you know which symbols go on each side of the arrow and where the + signs go.
2. Write the correct formulas for all compounds. You will need to use the rules you learned in Chapter 5 (including making all ionic compounds charge balanced).
3. Write the correct formulas for all elements. Usually this is given straight off of the periodic table. However, there are seven elements that are considered diatomic, meaning that they are always found in pairs in nature. They include those elements listed in the table.

Table 7.3.1: Diatomic Elements

Element Name	Hydrogen	Nitrogen	Oxygen	Fluorine	Chlorine	Bromine	Iodine
Formula	H_2	N_2	O_2	F_2	Cl_2	Br_2	I_2

✓ Example 7.3.1

Transfer the following symbolic equations into word equations or word equations into symbolic equations.

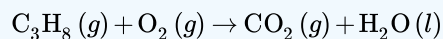
- $\text{HCl} (aq) + \text{NaOH} (aq) \rightarrow \text{NaCl} (aq) + \text{H}_2\text{O} (l)$
- Gaseous propane, C_3H_8 , burns in oxygen gas to produce gaseous carbon dioxide and liquid water.
- Hydrogen fluoride gas reacts with an aqueous solution of potassium carbonate to produce an aqueous solution of potassium fluoride, liquid water, and gaseous carbon dioxide.

Solution

a. An aqueous solution of hydrochloric acid reacts with an aqueous solution of sodium hydroxide to produce an aqueous solution of sodium chloride and liquid water.

b. Reactants: propane (C_3H_8) and oxygen (O_2)

Product: carbon dioxide (CO_2) and water (H_2O)



c. Reactants: hydrogen fluoride and potassium carbonate

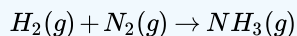
Products: potassium fluoride, water, and carbon dioxide



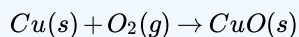
? Exercise 7.3.1

Transfer the following symbolic equations into word equations or word equations into symbolic equations.

- Hydrogen gas reacts with nitrogen gas to produce gaseous ammonia.
- $\text{HCl} (aq) + \text{LiOH} (aq) \rightarrow \text{LiCl} (aq) + \text{H}_2\text{O} (l)$
- Copper metal is heated with oxygen gas to produce solid copper(II) oxide.

Answer a**Answer b**

An aqueous solution of hydrochloric acid reacts with an aqueous solution of lithium hydroxide to produce an aqueous solution of lithium chloride and liquid water.

Answer c**Summary**

- A chemical reaction is the process by which one or more substances are changed into one or more new substances.
- Chemical reactions are represented by chemical equations.
- Chemical equations have reactants on the left, an arrow that is read as "yields", and the products on the right.

7.3: The Chemical Equation is shared under a [CC BY-NC-SA 4.0](#) license and was authored, remixed, and/or curated by LibreTexts.

- 7.3: The Chemical Equation** by Henry Agnew, Marisa Alviar-Agnew is licensed [CK-12](#). Original source: <https://www.ck12.org/c/chemistry/>.

7.4: How to Write Balanced Chemical Equations

Template:HideTOC

Learning Objectives

- Explain the roles of subscripts and coefficients in chemical equations.
- Balance a chemical equation when given the unbalanced equation.
- Explain the role of the Law of Conservation of Mass in a chemical reaction.

Even though chemical compounds are broken up and new compounds are formed during a chemical reaction, atoms in the reactants do not disappear, nor do new atoms appear to form the products. In chemical reactions, atoms are never created or destroyed. The same atoms that were present in the reactants are present in the products—they are merely reorganized into different arrangements. In a complete chemical equation, the two sides of the equation must be present on the reactant and the product sides of the equation.

Coefficients and Subscripts

There are two types of numbers that appear in chemical equations. There are subscripts, which are part of the chemical formulas of the reactants and products; and there are coefficients that are placed in front of the formulas to indicate how many molecules of that substance is used or produced.

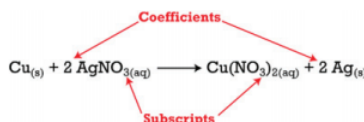
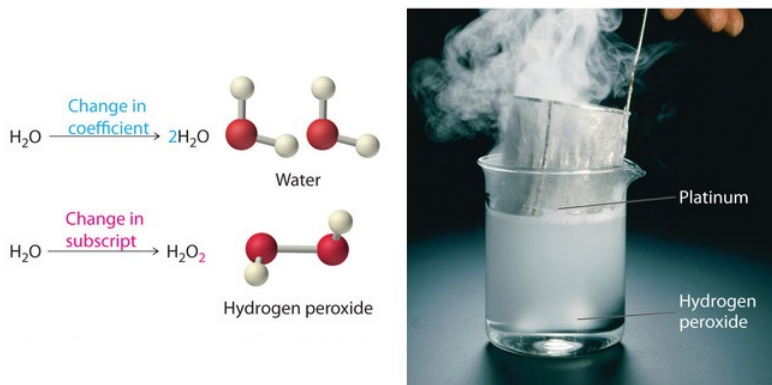


Figure 7.4.1: Balancing Equations. You cannot change subscripts in a chemical formula to balance a chemical equation; you can change only the coefficients. Changing subscripts changes the ratios of atoms in the molecule and the resulting chemical properties. For example, water (H_2O) and hydrogen peroxide (H_2O_2) are chemically distinct substances. H_2O_2 decomposes to H_2O and O_2 gas when it comes in contact with the metal platinum, whereas no such reaction occurs between water and platinum.

The **subscripts** are part of the formulas and once the formulas for the reactants and products are determined, the subscripts may not be changed. The **coefficients** indicate the number of each substance involved in the reaction and may be changed in order to balance the equation. The equation above indicates that one mole of solid copper is reacting with two moles of aqueous silver nitrate to produce one mole of aqueous copper (II) nitrate and two atoms of solid silver.

Balancing a Chemical Equation

Because the identities of the reactants and products are fixed, the equation cannot be balanced by changing the subscripts of the reactants or the products. To do so would change the chemical identity of the species being described, as illustrated in Figure 7.4.1.



Original molecule H_2O : if the coefficient 2 is added in front, that makes 2 water molecules; but if the subscript 2 is added to make H_2O_2 , that's hydrogen peroxide.

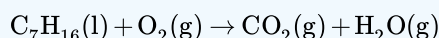
The simplest and most generally useful method for balancing chemical equations is “inspection,” better known as trial and error. The following is an efficient approach to balancing a chemical equation using this method.

Steps in Balancing a Chemical Equation

1. Identify the most complex substance.
2. Beginning with that substance, choose an element(s) that appears in only one reactant and one product, if possible. Adjust the coefficients to obtain the same number of atoms of this element(s) on both sides.
3. Balance polyatomic ions (if present on both sides of the chemical equation) as a unit.
4. Balance the remaining atoms, usually ending with the least complex substance and using fractional coefficients if necessary. If a fractional coefficient has been used, multiply both sides of the equation by the denominator to obtain whole numbers for the coefficients.
5. Count the numbers of atoms of each kind on both sides of the equation to be sure that the chemical equation is balanced.

✓ Example 7.4.1: Combustion of Heptane

Balance the chemical equation for the combustion of Heptane (C_7H_{16}).



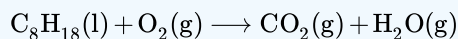
Solution

Solutions to Example 7.4.1

Steps	Example
1. Identify the most complex substance.	The most complex substance is the one with the largest number of different atoms, which is C_7H_{16} . We will assume initially that the final balanced chemical equation contains 1 molecule or formula unit of this substance.
2. Adjust the coefficients.	<p>a. Because one molecule of n-heptane contains 7 carbon atoms, we need 7 CO_2 molecules, each of which contains 1 carbon atom, on the right side:</p> $C_7H_{16}(l) + O_2(g) \rightarrow 7CO_2(g) + H_2O(g)$ <ul style="list-style-type: none"> • 7 carbon atoms on both reactant and product sides <p>b. Because one molecule of n-heptane contains 16 hydrogen atoms, we need 8 H_2O molecules, each of which contains 2 hydrogen atoms, on the right side:</p> $C_7H_{16}(l) + O_2(g) \rightarrow 7CO_2(g) + 8H_2O(g)$ <ul style="list-style-type: none"> • 16 hydrogen atoms on both reactant and product sides
3. Balance polyatomic ions as a unit.	There are no polyatomic ions to be considered in this reaction.
4. Balance the remaining atoms.	<p>The carbon and hydrogen atoms are now balanced, but we have 22 oxygen atoms on the right side and only 2 oxygen atoms on the left. We can balance the oxygen atoms by adjusting the coefficient in front of the least complex substance, O_2, on the reactant side:</p> $C_7H_{16}(l) + 11O_2(g) \rightarrow 7CO_2(g) + 8H_2O(g)$ <ul style="list-style-type: none"> • 22 oxygen atoms on both reactant and product sides
5. Check your work.	The equation is now balanced, and there are no fractional coefficients: there are 7 carbon atoms, 16 hydrogen atoms, and 22 oxygen atoms on each side. Always check to be sure that a chemical equation is balanced.

✓ Example 7.4.2: Combustion of Isooctane

Combustion of Isooctane (C_8H_{18})



Solution

The assumption that the final balanced chemical equation contains only one molecule or formula unit of the most complex substance is not always valid, but it is a good place to start. The combustion of any hydrocarbon with oxygen produces carbon dioxide and water.

Solutions to Example 7.4.2

Steps	Example
1. Identify the most complex substance.	The most complex substance is the one with the largest number of different atoms, which is C_8H_{18} . We will assume initially that the final balanced chemical equation contains 1 molecule or formula unit of this substance.
2. Adjust the coefficients.	<p>a. The first element that appears only once in the reactants is carbon: 8 carbon atoms in isooctane means that there must be 8 CO_2 molecules in the products:</p> $\text{C}_8\text{H}_{18}(\text{l}) + \text{O}_2(\text{g}) \longrightarrow \underline{8}\text{CO}_2(\text{g}) + \text{H}_2\text{O}(\text{g})$ <ul style="list-style-type: none"> 8 carbon atoms on both reactant and product sides <p>b. 18 hydrogen atoms in isooctane means that there must be 9 H_2O molecules in the products:</p> $\text{C}_8\text{H}_{18}(\text{l}) + \text{O}_2(\text{g}) \longrightarrow 8\text{CO}_2(\text{g}) + \underline{9}\text{H}_2\text{O}(\text{g})$ <ul style="list-style-type: none"> 18 hydrogen atoms on both reactant and product sides
3. Balance polyatomic ions as a unit.	There are no polyatomic ions to be considered in this reaction.
4. Balance the remaining atoms.	<p>The carbon and hydrogen atoms are now balanced, but we have 25 oxygen atoms on the right side and only 2 oxygen atoms on the left. We can balance the least complex substance, O_2, but because there are 2 oxygen atoms per O_2 molecule, we must use a fractional coefficient ($\frac{25}{2}$) to balance the oxygen atoms:</p> $\text{C}_8\text{H}_{18}(\text{l}) + \underline{\frac{25}{2}}\text{O}_2(\text{g}) \rightarrow 8\text{CO}_2(\text{g}) + 9\text{H}_2\text{O}(\text{g})$ <ul style="list-style-type: none"> 25 oxygen atoms on both reactant and product sides <p>The equation is now balanced, but we usually write equations with whole number coefficients. We can eliminate the fractional coefficient by multiplying all coefficients on both sides of the chemical equation by 2:</p> $\underline{2}\text{C}_8\text{H}_{18}(\text{l}) + \underline{25}\text{O}_2(\text{g}) \longrightarrow \underline{16}\text{CO}_2(\text{g}) + \underline{18}\text{H}_2\text{O}(\text{g})$

Steps

Example

5. Check your work.

The balanced chemical equation has 16 carbon atoms, 36 hydrogen atoms, and 50 oxygen atoms on each side. Balancing equations requires some practice on your part as well as some common sense. If you find yourself using very large coefficients or if you have spent several minutes without success, go back and make sure that you have written the formulas of the reactants and products correctly.

✓ Example 7.4.3: Precipitation of Lead (II) Chloride

Aqueous solutions of lead (II) nitrate and sodium chloride are mixed. The products of the reaction are an aqueous solution of sodium nitrate and a solid precipitate of lead (II) chloride. Write the balanced chemical equation for this reaction.

Solution

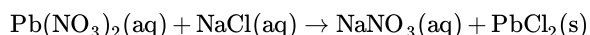
Solutions to Example 7.4.3

Steps

Example

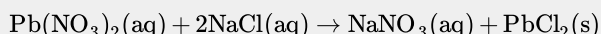
1. Identify the most complex substance.

The most complex substance is lead (II) chloride.



2. Adjust the coefficients.

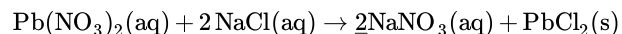
There are twice as many chloride ions in the reactants as there are in the products. Place a 2 in front of the NaCl in order to balance the chloride ions.



- 1 Pb atom on both reactant and product sides
- 2 Na atoms on reactant side, 1 Na atom on product side
- 2 Cl atoms on both reactant and product sides

3. Balance polyatomic ions as a unit.

The nitrate ions are still unbalanced. Place a 2 in front of the NaNO₃. The result is:

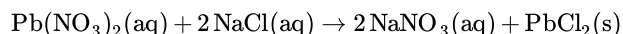


- 1 Pb atom on both reactant and product sides
- 2 Na atoms on both reactant and product sides
- 2 Cl atoms on both reactant and product sides
- 2 NO₃⁻ atoms on both reactant and product sides

4. Balance the remaining atoms.

There is no need to balance the remaining atoms because they are already balanced.

5. Check your work.



- 1 Pb atom on both reactant and product sides
- 2 Na atoms on both reactant and product sides
- 2 Cl atoms on both reactant and product sides
- 2 NO₃⁻ atoms on both reactant and product sides

? Exercise 7.4.1

Is each chemical equation balanced?

- a. $2 \text{Hg}(\ell) + \text{O}_2(\text{g}) \rightarrow \text{Hg}_2\text{O}_2(\text{s})$
- b. $\text{C}_2\text{H}_4(\text{g}) + 2 \text{O}_2(\text{g}) \rightarrow 2 \text{CO}_2(\text{g}) + 2 \text{H}_2\text{O}(\text{g})$
- c. $\text{Mg}(\text{NO}_3)_2(\text{s}) + 2 \text{Li}(\text{s}) \rightarrow \text{Mg}(\text{s}) + 2 \text{LiNO}_3(\text{s})$

Answer a

yes

Answer b

no

Answer c

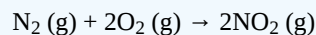
yes

? Exercise 7.4.2

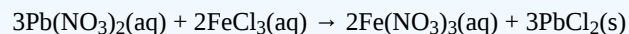
Balance the following chemical equations.

- a. $\text{N}_2(\text{g}) + \text{O}_2(\text{g}) \rightarrow \text{NO}_2(\text{g})$
- b. $\text{Pb}(\text{NO}_3)_2(\text{aq}) + \text{FeCl}_3(\text{aq}) \rightarrow \text{Fe}(\text{NO}_3)_3(\text{aq}) + \text{PbCl}_2(\text{s})$
- c. $\text{C}_6\text{H}_{14}(\text{l}) + \text{O}_2(\text{g}) \rightarrow \text{CO}_2(\text{g}) + \text{H}_2\text{O}(\text{g})$


Answer a



Answer b



Answer c



Summary

- To be useful, chemical equations must always be balanced. Balanced chemical equations have the same number and type of each atom on both sides of the equation.
- The coefficients in a balanced equation must be the simplest whole number ratio. Mass is always conserved in chemical reactions.

Vocabulary

- **Chemical reaction** - The process in which one or more substances are changed into one or more new substances.
- **Reactants** - The starting materials in a reaction.
- **Products** - Materials present at the end of a reaction.
- **Balanced chemical equation** - A chemical equation in which the number of each type of atom is equal on the two sides of the equation.
- **Subscripts** - Part of the chemical formulas of the reactants and products that indicate the number of atoms of the preceding element.
- **Coefficient** - A small whole number that appears in front of a formula in a balanced chemical equation.

7.4: How to Write Balanced Chemical Equations is shared under a [CC BY-NC-SA 4.0](#) license and was authored, remixed, and/or curated by LibreTexts.

- [7.4: How to Write Balanced Chemical Equations](#) by Henry Agnew, Marisa Alviar-Agnew is licensed [CC BY-NC-SA 3.0](#).

7.5: Aqueous Solutions and Solubility- Compounds Dissolved in Water

Template:HideTOC

Learning Objectives

- Define and give examples of electrolytes.

When some substances are dissolved in water, they undergo either a physical or a chemical change that yields ions in solution. These substances constitute an important class of compounds called electrolytes. Substances that do not yield ions when dissolved are called nonelectrolytes. If the physical or chemical process that generates the ions is essentially 100% efficient (all of the dissolved compound yields ions), then the substance is known as a strong electrolyte. If only a relatively small fraction of the dissolved substance undergoes the ion-producing process, it is called a weak electrolyte.

Substances may be identified as strong, weak, or nonelectrolytes by measuring the electrical conductance of an aqueous solution containing the substance. To conduct electricity, a substance must contain freely mobile, charged species. Most familiar is the conduction of electricity through metallic wires, in which case the mobile, charged entities are electrons. Solutions may also conduct electricity if they contain dissolved ions, with conductivity increasing as ion concentration increases. Applying a voltage to electrodes immersed in a solution permits assessment of the relative concentration of dissolved ions, either quantitatively, by measuring the electrical current flow, or qualitatively, by observing the brightness of a light bulb included in the circuit (Figure 7.5.1).

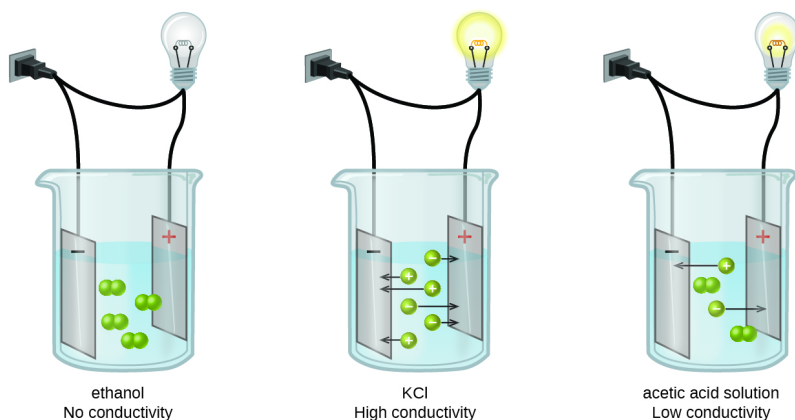


Figure 7.5.1: Solutions of nonelectrolytes, such as ethanol, do not contain dissolved ions and cannot conduct electricity. Solutions of electrolytes contain ions that permit the passage of electricity. The conductivity of an electrolyte solution is related to the strength of the electrolyte. This diagram shows three separate beakers. Each has a wire plugged into a wall outlet. In each case, the wire leads from the wall to the beaker and is split resulting in two ends. One end leads to a light bulb and continues on to a rectangle labeled with a plus sign. The other end leads to a rectangle labeled with a minus sign. The rectangles are in a solution. In the first beaker, labeled "Ethanol No Conductivity," four pairs of linked small green spheres suspended in the solution between the rectangles. In the second beaker, labeled "K C l Strong Conductivity," six individual green spheres, three labeled plus and three labeled minus are suspended in the solution. Each of the six spheres has an arrow extending from it pointing to the rectangle labeled with the opposite sign. In the third beaker, labeled "Acetic acid solution Weak conductivity," two pairs of joined green spheres and two individual spheres, one labeled plus and one labeled minus are shown suspended between the two rectangles. The plus labeled sphere has an arrow pointing to the rectangle labeled minus and the minus labeled sphere has an arrow pointing to the rectangle labeled plus.

Ionic Electrolytes

Water and other polar molecules are attracted to ions, as shown in Figure 7.5.2. The electrostatic attraction between an ion and a molecule with a dipole is called an ion-dipole attraction. These attractions play an important role in the dissolution of ionic compounds in water.

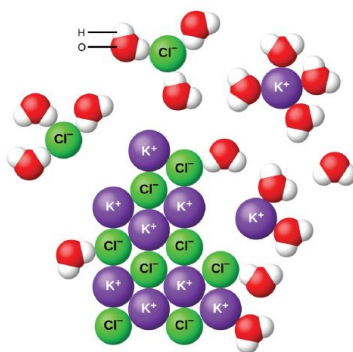


Figure 7.5.2: As potassium chloride (KCl) dissolves in water, the ions are hydrated. The polar water molecules are attracted by the charges on the K^+ and Cl^- ions. Water molecules in front of and behind the ions are not shown. The diagram shows eight purple spheres labeled K superscript plus and eight green spheres labeled Cl superscript minus mixed and touching near the center of the diagram. Outside of this cluster of spheres are seventeen clusters of three spheres, which include one red and two white spheres. A red sphere in one of these clusters is labeled O. A white sphere is labeled H. Two of the green Cl superscript minus spheres are surrounded by three of the red and white clusters, with the red spheres closer to the green spheres than the white spheres. One of the K superscript plus purple spheres is surrounded by four of the red and white clusters. The white spheres of these clusters are closest to the purple spheres.

When ionic compounds dissolve in water, the ions in the solid separate and disperse uniformly throughout the solution because water molecules surround and solvate the ions, reducing the strong electrostatic forces between them. This process represents a physical change known as dissociation. Under most conditions, ionic compounds will dissociate nearly completely when dissolved, and so they are classified as strong electrolytes.

Let us consider what happens at the microscopic level when we add solid KCl to water. Ion-dipole forces attract the positive (hydrogen) end of the polar water molecules to the negative chloride ions at the surface of the solid, and they attract the negative (oxygen) ends to the positive potassium ions. The water molecules penetrate between individual K^+ and Cl^- ions and surround them, reducing the strong interionic forces that bind the ions together and letting them move off into solution as solvated ions, as Figure 7.5.2 shows. The reduction of the electrostatic attraction permits the independent motion of each hydrated ion in a dilute solution, resulting in an increase in the disorder of the system, as the ions change from their fixed and ordered positions in the crystal to mobile and much more disordered states in solution. This increased disorder is responsible for the dissolution of many ionic compounds, including KCl, which dissolve with absorption of heat.

In other cases, the electrostatic attractions between the ions in a crystal are so large, or the ion-dipole attractive forces between the ions and water molecules are so weak, that the increase in disorder cannot compensate for the energy required to separate the ions, and the crystal is insoluble. Such is the case for compounds such as calcium carbonate (limestone), calcium phosphate (the inorganic component of bone), and iron oxide (rust).

Solubility Rules

Some combinations of aqueous reactants result in the formation of a solid precipitate as a product. However, some combinations will not produce such a product. If solutions of sodium nitrate and ammonium chloride are mixed, no reaction occurs. One could write a molecular equation showing a double-replacement reaction, but both products, sodium chloride and ammonium nitrate, are soluble and would remain in the solution as ions. Every ion is a spectator ion and there is no net ionic equation at all. It is useful to be able to predict when a precipitate will occur in a reaction. To do so, you can use a set of guidelines called the **solubility rules** (Tables 7.5.1 and 7.5.2).

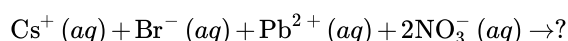
Table 7.5.1: Solubility Rules for Soluble Substances

Soluble in Water	Important Exceptions (Insoluble)
All Group IA and NH_4^+ salts	none
All nitrates, chlorates, perchlorates and acetates	none
All sulfates	$CaSO_4$, $BaSO_4$, $SrSO_4$, $PbSO_4$
All chlorides, bromides, and iodides	AgX , Hg_2X_2 , PbX_2 ($X = Cl, Br, \text{ or } I$)

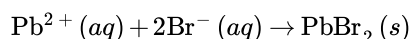
Table 7.5.2: Solubility Rules for Sparingly Soluble Substances

Sparingly Soluble in Water	Important Exceptions (Soluble)
All carbonates and phosphates	Group IA and NH_4^+ salts
All hydroxides	Group IA and NH_4^+ salts; Ba^{2+} , Sr^{2+} , Ca^{2+} sparingly soluble
All sulfides	Group IA, IIA and NH_4^+ salts; MgS , CaS , BaS sparingly soluble
All oxalates	Group IA and NH_4^+ salts
Special note: The following electrolytes are of only moderate solubility in water: CH_3COOAg , Ag_2SO_4 , KClO_4 . They will precipitate only if rather concentrated solutions are used.	

As an example on how to use the solubility rules, predict if a precipitate will form when solutions of cesium bromide and lead (II) nitrate are mixed.



The potential precipitates from a double-replacement reaction are cesium nitrate and lead (II) bromide. According to the solubility rules table, cesium nitrate is soluble because all compounds containing the nitrate ion, as well as all compounds containing the alkali metal ions, are soluble. Most compounds containing the bromide ion are soluble, but lead (II) is an exception. Therefore, the cesium and nitrate ions are spectator ions and the lead (II) bromide is a precipitate. The balanced net ionic reaction is:



✓ Example 7.5.1: Solubility

Classify each compound as soluble or insoluble

- $\text{Zn}(\text{NO}_3)_2$
- PbBr_2
- $\text{Sr}_3(\text{PO}_4)_2$

Solution

- All nitrates are soluble in water, so $\text{Zn}(\text{NO}_3)_2$ is soluble.
- All bromides are soluble in water, except those combined with Pb^{2+} , so PbBr_2 is insoluble.
- All phosphates are insoluble, so $\text{Sr}_3(\text{PO}_4)_2$ is insoluble.

? Exercise 7.5.1: Solubility

Classify each compound as soluble or insoluble.

- $\text{Mg}(\text{OH})_2$
- KBr
- $\text{Pb}(\text{NO}_3)_2$

Answer a

insoluble

Answer b

soluble

Answer c

soluble

Summary

Substances that dissolve in water to yield ions are called electrolytes. Nonelectrolytes are substances that do not produce ions when dissolved in water. Solubility rules allow prediction of what products will be insoluble in water.

Contributions & Attributions

- Paul Flowers (University of North Carolina - Pembroke), Klaus Theopold (University of Delaware) and Richard Langley (Stephen F. Austin State University) with contributing authors. Textbook content produced by OpenStax College is licensed under a [Creative Commons Attribution License 4.0](https://creativecommons.org/licenses/by-nc-sa/4.0/) license. Download for free at <http://cnx.org/contents/85abf193-2bd...a7ac8df6@9.110>).

•

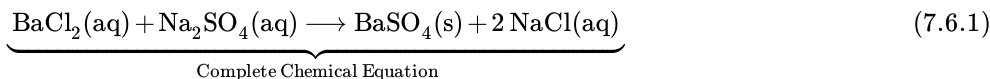
7.5: Aqueous Solutions and Solubility- Compounds Dissolved in Water is shared under a [CC BY-NC-SA 4.0](https://creativecommons.org/licenses/by-nc-sa/4.0/) license and was authored, remixed, and/or curated by LibreTexts.

- **7.5: Aqueous Solutions and Solubility - Compounds Dissolved in Water** by Henry Agnew, Marisa Alviar-Agnew is licensed [CK-12](https://creativecommons.org/licenses/by-nc-sa/4.0/).
Original source: <https://www.ck12.org/c/chemistry/>.

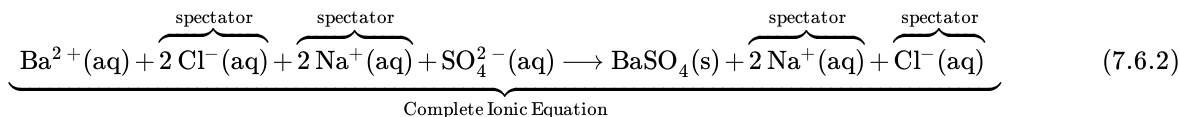
7.6: Precipitation Reactions- Reactions in Aqueous Solution That Form a Solid

Template:HideTOC

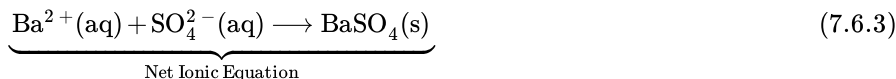
A typical precipitation reaction occurs when an aqueous solution of barium chloride is mixed with one containing sodium sulfate. The **complete chemical equation** can be written to describe what happens, and such an equation is useful in making chemical calculations.



However, Equation 7.6.1 does not really represent the microscopic particles (that is, the ions) present in the solution. Below is the complete ionic equation:



Equation 7.6.2 is rather cumbersome and includes so many different ions that it may be confusing. In any case, we are often interested in the independent behavior of ions, not the specific compound from which they came. A precipitate of $\text{BaSO}_4(\text{s})$ will form when *any* solution containing $\text{Ba}^{2+}(\text{aq})$ is mixed with *any* solution containing $\text{SO}_4^{2-}(\text{aq})$ (provided concentrations are not extremely small). This happens independently of the $\text{Cl}^{-}(\text{aq})$ and $\text{Na}^{+}(\text{aq})$ ions in Equation 7.6.2. These ions are called **spectator ions** because they do not participate in the reaction. When we want to emphasize the independent behavior of ions, a **net ionic equation** is written, omitting the spectator ions. For precipitation of BaSO_4 the net ionic equation is



✓ Example 7.6.1

- When a solution of AgNO_3 is added to a solution of CaCl_2 , insoluble AgCl precipitates. Write three equations (complete chemical equation, complete ionic equation, and net ionic equation) that describe this process.
- Write the balanced net ionic equation to describe any reaction that occurs when the solutions of Na_2SO_4 and NH_4I are mixed.

Solution

Solutions to Example 7.6.1

Equation Type	Example 7.6.1a	Example 7.6.1b
Complete Chemical Equation	$2\text{AgNO}_3(\text{aq}) + \text{CaCl}_2(\text{aq}) \longrightarrow 2\text{AgCl}(\text{s}) + \text{Ca}(\text{NO}_3)_2(\text{aq})$ <p>The proper states and formulas of all products are written and the chemical equation is balanced.</p>	$\text{Na}_2\text{SO}_4(\text{aq}) + 2\text{NH}_4\text{I}(\text{aq}) \longrightarrow 2\text{NaI}(\text{aq}) + (\text{NH}_4)_2\text{SO}_4(\text{aq})$ <p>Both products are aqueous so there is no net ionic equation that can be written.</p>
Complete Ionic Equation	$2\text{Ag}^{+}(\text{aq}) + 2\text{NO}_3^{-}(\text{aq}) + \text{Ca}^{2+}(\text{aq}) + 2\text{Cl}^{-}(\text{aq}) \longrightarrow 2\text{AgCl}(\text{s}) + \text{Ca}^{2+}(\text{aq}) + 2\text{NO}_3^{-}(\text{aq})$ <p>AgCl is a solid so it does not break up into ions in solution.</p>	
Net Ionic Equation	$\text{Ag}^{+}(\text{aq}) + \text{Cl}^{-}(\text{aq}) \longrightarrow \text{AgCl}(\text{s})$ <p>All spectator ions are removed. The chemical equation is written using the lowest common coefficients.</p>	<p>NaI and $(\text{NH}_4)_2\text{SO}_4$ are both soluble. No net ionic equation. There is no reaction.</p>

The occurrence or nonoccurrence of precipitates can be used to detect the presence or absence of various species in solution. A BaCl_2 solution, for instance, is often used as a test for the presence of $\text{SO}_4^{2-}(\text{aq})$ ions. There are several insoluble salts of Ba, but they all dissolve in dilute acid except for BaSO_4 . Thus, if BaCl_2 solution is added to an unknown solution which has previously been acidified, the occurrence of a white precipitate is proof of the presence of the SO_4^{2-} ion.



Figure 7.6.1: The three common silver halide precipitates: AgI , AgBr and AgCl (left to right). The silver halides precipitate out of solution, but often form suspensions before settling. (CC BY-SA 3.0; Cychr).

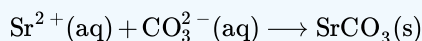
AgNO_3 solutions are often used in a similar way to test for halide ions. If AgNO_3 solution is added to an acidified unknown solution, a white precipitate indicates the presence of Cl^- ions, a cream-colored precipitate indicates the presence of Br^- ions, and a yellow precipitate indicates the presence of I^- ions (Figure 7.6.1). Further tests can then be made to see whether perhaps a mixture of these ions is present. When AgNO_3 is added to tap water, a white precipitate is almost always formed. The Cl^- ions in tap water usually come from the Cl_2 which is added to municipal water supplies to kill microorganisms.

? Exercise 7.6.1

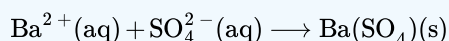
Write balanced net ionic equations to describe any reaction that occurs when the following solutions are mixed.

- $\text{K}_2\text{CO}_3 + \text{SrCl}_2$
- $\text{FeSO}_4 + \text{Ba}(\text{NO}_3)_2$

Answer a



Answer b



Precipitates are also used for quantitative analysis of solutions, that is, to determine the amount of solute or the mass of solute in a given solution. For this purpose it is often convenient to use the first of the three types of equations described above. Then the rules of stoichiometry may be applied.

Contributions & Attributions

- Ed Vitz (Kutztown University), John W. Moore (UW-Madison), Justin Shorb (Hope College), Xavier Prat-Resina (University of Minnesota Rochester), Tim Wendorff, and Adam Hahn.

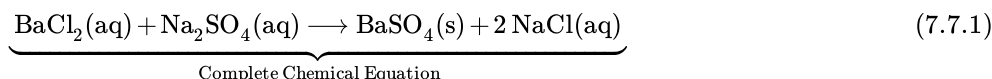
7.6: Precipitation Reactions- Reactions in Aqueous Solution That Form a Solid is shared under a CC BY-NC-SA 4.0 license and was authored, remixed, and/or curated by LibreTexts.

- 7.7: Writing Chemical Equations for Reactions in Solution- Molecular, Complete Ionic, and Net Ionic Equations by Henry Agnew, Marisa Alviar-Agnew is licensed CK-12. Original source: <https://www.ck12.org/c/chemistry/>.

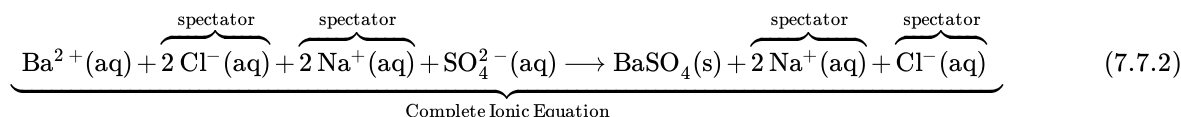
7.7: Writing Chemical Equations for Reactions in Solution- Molecular, Complete Ionic, and Net Ionic Equations

Template:HideTOC

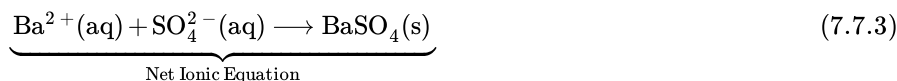
A typical precipitation reaction occurs when an aqueous solution of barium chloride is mixed with one containing sodium sulfate. The **complete chemical equation** can be written to describe what happens, and such an equation is useful in making chemical calculations.



However, Equation 7.7.1 does not really represent the microscopic particles (that is, the ions) present in the solution. Below is the complete ionic equation:



Equation 7.7.2 is rather cumbersome and includes so many different ions that it may be confusing. In any case, we are often interested in the independent behavior of ions, not the specific compound from which they came. A precipitate of $\text{BaSO}_4(\text{s})$ will form when *any* solution containing $\text{Ba}^{2+}(\text{aq})$ is mixed with *any* solution containing $\text{SO}_4^{2-}(\text{aq})$ (provided concentrations are not extremely small). This happens independently of the $\text{Cl}^{-}(\text{aq})$ and $\text{Na}^{+}(\text{aq})$ ions in Equation 7.7.2. These ions are called **spectator ions** because they do not participate in the reaction. When we want to emphasize the independent behavior of ions, a **net ionic equation** is written, omitting the spectator ions. For precipitation of BaSO_4 the net ionic equation is



✓ Example 7.7.1

- When a solution of AgNO_3 is added to a solution of CaCl_2 , insoluble AgCl precipitates. Write three equations (complete chemical equation, complete ionic equation, and net ionic equation) that describe this process.
- Write the balanced net ionic equation to describe any reaction that occurs when the solutions of Na_2SO_4 and NH_4I are mixed.

Solution

Solutions to Example 7.7.1

Equation Type	Example 7.7.1a	Example 7.7.1b
Complete Chemical Equation	$2 \text{AgNO}_3(\text{aq}) + \text{CaCl}_2(\text{aq}) \longrightarrow 2 \text{AgCl}(\text{s}) + \text{Ca}(\text{NO}_3)_2(\text{aq})$ <p>The proper states and formulas of all products are written and the chemical equation is balanced.</p>	$\text{Na}_2\text{SO}_4(\text{aq}) + 2 \text{NH}_4\text{I}(\text{aq}) \longrightarrow 2 \text{NaI}(\text{aq}) + (\text{NH}_4)_2\text{SO}_4(\text{aq})$ <p>Both products are aqueous so there is no net ionic equation that can be written.</p>
Complete Ionic Equation	$2 \text{Ag}^{+}(\text{aq}) + 2 \text{NO}_3^{-}(\text{aq}) + \text{Ca}^{2+}(\text{aq}) + 2 \text{Cl}^{-}(\text{aq}) \longrightarrow 2 \text{AgCl}(\text{s}) + \text{Ca}^{2+}(\text{aq}) + 2 \text{NO}_3^{-}(\text{aq})$ <p>AgCl is a solid so it does not break up into ions in solution.</p>	
Net Ionic Equation	$\text{Ag}^{+}(\text{aq}) + \text{Cl}^{-}(\text{aq}) \longrightarrow \text{AgCl}(\text{s})$ <p>All spectator ions are removed. The chemical equation is written using the lowest common coefficients.</p>	<p>NaI and $(\text{NH}_4)_2\text{SO}_4$ are both soluble. No net ionic equation. There is no reaction.</p>

The occurrence or nonoccurrence of precipitates can be used to detect the presence or absence of various species in solution. A BaCl_2 solution, for instance, is often used as a test for the presence of $\text{SO}_4^{2-}(\text{aq})$ ions. There are several insoluble salts of Ba, but they all dissolve in dilute acid except for BaSO_4 . Thus, if BaCl_2 solution is added to an unknown solution which has previously been acidified, the occurrence of a white precipitate is proof of the presence of the SO_4^{2-} ion.



Figure 7.7.1: The three common silver halide precipitates: AgI , AgBr and AgCl (left to right). The silver halides precipitate out of solution, but often form suspensions before settling. (CC BY-SA 3.0; Cychr).

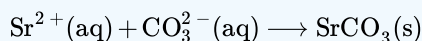
AgNO_3 solutions are often used in a similar way to test for halide ions. If AgNO_3 solution is added to an acidified unknown solution, a white precipitate indicates the presence of Cl^- ions, a cream-colored precipitate indicates the presence of Br^- ions, and a yellow precipitate indicates the presence of I^- ions (Figure 7.7.1). Further tests can then be made to see whether perhaps a mixture of these ions is present. When AgNO_3 is added to tap water, a white precipitate is almost always formed. The Cl^- ions in tap water usually come from the Cl_2 which is added to municipal water supplies to kill microorganisms.

? Exercise 7.7.1

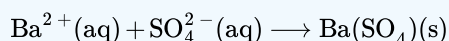
Write balanced net ionic equations to describe any reaction that occurs when the following solutions are mixed.

- $\text{K}_2\text{CO}_3 + \text{SrCl}_2$
- $\text{FeSO}_4 + \text{Ba}(\text{NO}_3)_2$

Answer a



Answer b



Precipitates are also used for quantitative analysis of solutions, that is, to determine the amount of solute or the mass of solute in a given solution. For this purpose it is often convenient to use the first of the three types of equations described above. Then the rules of stoichiometry may be applied.

Contributions & Attributions

- Ed Vitz (Kutztown University), John W. Moore (UW-Madison), Justin Shorb (Hope College), Xavier Prat-Resina (University of Minnesota Rochester), Tim Wendorff, and Adam Hahn.

7.7: Writing Chemical Equations for Reactions in Solution- Molecular, Complete Ionic, and Net Ionic Equations is shared under a CC BY-NC-SA 4.0 license and was authored, remixed, and/or curated by LibreTexts.

- 7.7: Writing Chemical Equations for Reactions in Solution- Molecular, Complete Ionic, and Net Ionic Equations by Henry Agnew, Marisa Alviar-Agnew is licensed CK-12. Original source: <https://www.ck12.org/c/chemistry/>.

7.8: Acid–Base and Gas Evolution Reactions

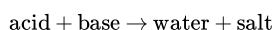
Template:HideTOC

Learning Objectives


- Identify when a reaction will evolve a gas.

Neutralization Reactions

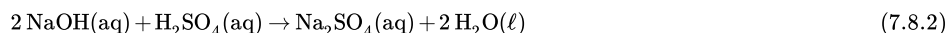
Acids and bases react chemically with each other to form *salts*. A salt is a general chemical term for any ionic compound formed from an acid and a base. In reactions where the acid is a hydrogen-ion-containing compound and the base is a hydroxide-ion-containing compound, water is also a product. The general reaction is as follows:



The reaction of acid and base to make water and a salt is called **neutralization**. Like any chemical equation, a neutralization chemical equation must be properly balanced. For example, the neutralization reaction between sodium hydroxide and hydrochloric acid is as follows:



with coefficients all understood to be one. The neutralization reaction between sodium hydroxide and sulfuric acid is as follows:



✓ Example 7.8.1: Neutralizing Nitric Acid

Nitric acid ($\text{HNO}_3\text{(aq)}$) can be neutralized by calcium hydroxide ($\text{Ca(OH)}_2\text{(aq)}$). Write a balanced chemical equation for the reaction between these two compounds and identify the salt that it produces.

Solution

Solutions to Example 7.8.1

Steps	Explanation	Equation
Write the unbalanced equation.	This is a double displacement reaction, so the cations and anions swap to create new products.	$\text{Ca(OH)}_2\text{(aq)} + \text{HNO}_3\text{(aq)} \rightarrow \text{Ca(NO}_3)_2\text{(aq)} + \text{H}_2\text{O(l)}$
Balance the equation.	Because there are two OH^- ions in the formula for Ca(OH)_2 , we need two moles of HNO_3 to provide H^+ ions	$\text{Ca(OH)}_2\text{(aq)} + 2\text{HNO}_3\text{(aq)} \rightarrow \text{Ca(NO}_3)_2\text{(aq)} + 2\text{H}_2\text{O(l)}$
Additional step: identify the salt.		The salt formed is calcium nitrate.

? Exercise 7.8.1

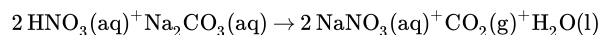
Hydrocyanic acid (HCN(aq)) can be neutralized by potassium hydroxide (KOH(aq)). Write a balanced chemical equation for the reaction between these two compounds and identify the salt that it produces.

Answer

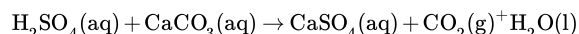


Gas Evolving Reactions

A gas evolution reaction is a chemical process that produces a gas, such as oxygen or carbon dioxide. In the following examples, an acid reacts with a carbonate, producing salt, carbon dioxide, and water, respectively. For example, nitric acid reacts with sodium carbonate to form sodium nitrate, carbon dioxide, and water (Table 7.8.1):



Sulfuric acid reacts with calcium carbonate to form calcium sulfate, carbon dioxide, and water:



Hydrochloric acid reacts with calcium carbonate to form calcium chloride, carbon dioxide, and water:

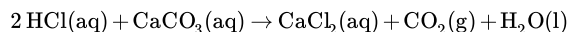


Figure 7.8.1 demonstrates this type of reaction:

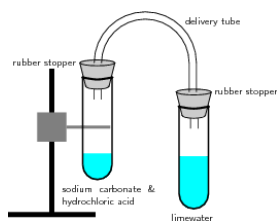


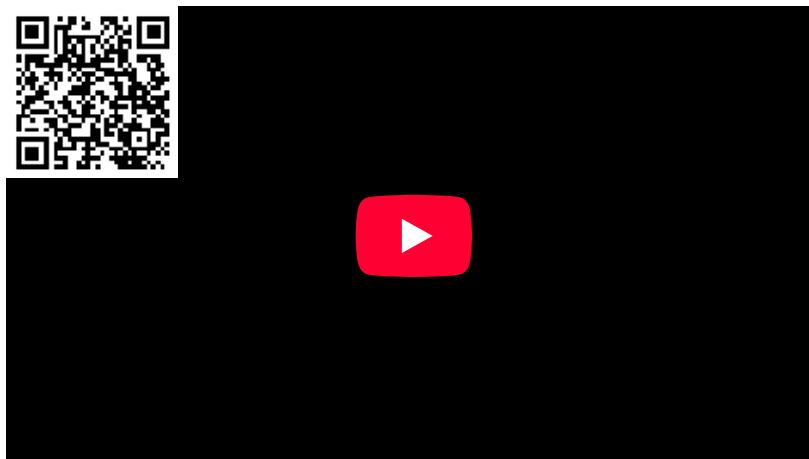
Figure 7.8.1: Reaction of acids with carbonates. In this reaction setup, lime water (water + calcium hydroxide) is poured into one of the test tubes and sealed with a stopper. A small amount of hydrochloric acid is carefully poured into the remaining test tube. A small amount of sodium carbonate is added to the acid, and the tube is sealed with a rubber stopper. The two tubes are connected. As a result of the acid-carbonate reaction, carbon dioxide is produced and the lime water turns milky.

In this reaction setup, lime water, a dilute calcium hydroxide ($Ca(OH)_2$) solution, is poured into one of the test tubes and sealed with a stopper. A small amount of hydrochloric acid is carefully poured into the remaining test tube. A small amount of sodium carbonate is added to the acid, and the tube is sealed with a rubber stopper. The two tubes are connected. As a result of the acid-carbonate reaction, carbon dioxide is produced and the lime water turns milky.

Table 7.8.1: Types of Compounds That Undergo Gas-Evolution Reactions

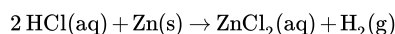
Reactant Type	Intermediate Product	Gas Evolved	Example
sulfide	none	H_2S	$2HCl(aq) + K_2S \rightarrow H_2S(g) + 2KCl(aq)$
carbonates and bicarbonates	H_2CO_3	CO_2	$2HCl(aq) + K_2CO_3 \rightarrow H_2O(l) + CO_2(g) + 2KCl(aq)$
sulfites and bisulfites	H_2SO_3	SO_2	$2HCl(aq) + K_2SO_3 \rightarrow H_2O(l) + SO_2(g) + 2KCl(aq)$
ammonia	NH_4OH	NH_3	$\\ce{NH4Cl(aq) + KOH \\rightarrow H2O(l) + NH3(g) + 2KCl(aq)}$

The gas-evolving experiment lime water is illustrated in the following video:



Video 7.8.1: Carbon Dioxide (CO_2) & Limewater (Chemical Reaction). As the reaction proceeds, the limewater on the turns from clear to milky; this is due to the $CO_2(g)$ reacting with the aqueous calcium hydroxide to form calcium carbonate, which is only slightly soluble in water.

When this experiment is repeated with nitric or sulfuric acid instead of HCl , it yields the same results: the clear limewater turns milky, indicating the production of carbon dioxide. Another method to chemically generate gas is the oxidation of metals in acidic solutions. This reaction will yield a metal salt and hydrogen gas.



Here, hydrochloric acid oxidizes zinc to produce an aqueous metal salt and hydrogen gas bubbles. Recall that oxidation refers to a loss of electrons, and reduction refers to the gain of electrons. In the above redox reaction, neutral zinc is oxidized to Zn^{2+} , and the acid, H^+ , is reduced to $H_2(g)$. The oxidation of metals by strong acids is another common example of a gas evolution reaction.

Contributors & Affiliations

- Boundless (www.boundless.com)
- Wikipedia (CC-BY-SA-3.0)
- Paul Flowers (University of North Carolina - Pembroke), Klaus Theopold (University of Delaware) and Richard Langley (Stephen F. Austin State University) with contributing authors. Textbook content produced by OpenStax College is licensed under a [Creative Commons Attribution License 4.0](https://creativecommons.org/licenses/by-sa/4.0/) license. Download for free at <http://cnx.org/contents/85abf193-2bd...a7ac8df6@9.110>.

7.8: Acid–Base and Gas Evolution Reactions is shared under a [CC BY-NC-SA 4.0](#) license and was authored, remixed, and/or curated by LibreTexts.

- 7.8: Acid–Base and Gas Evolution Reactions by Henry Agnew, Marisa Alviar-Agnew is licensed [CK-12](#). Original source: <https://www.ck12.org/c/chemistry/>.

7.9: Oxidation–Reduction Reactions

Template:HideTOC

Learning Objectives

- Define *oxidation* and *reduction*.
- Assign oxidation numbers to atoms in simple compounds.
- Recognize a reaction as an oxidation-reduction reaction.

In the course of a chemical reaction between a metal and a nonmetal, electrons are transferred from the metal atoms to the nonmetal atoms. For example, when zinc metal is mixed with sulfur and heated, the compound zinc sulfide is produced. Two valence electrons from each zinc atom are transferred to each sulfur atom.

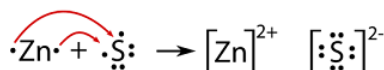


Figure 7.9.1: Reaction between zinc and sulfur.

Since the zinc is losing electrons in the reaction, it is being oxidized. The sulfur is gaining electrons and is thus being reduced. An **oxidation-reduction reaction** is a reaction that involves the full or partial transfer of electrons from one reactant to another. **Oxidation** is the full or partial loss of electrons or the gain of oxygen. **Reduction** is the full or partial gain of electrons or the loss of oxygen. A **redox reaction** is another term for an oxidation-reduction reaction.

Each of these processes can be shown in a separate equation called a half-reaction. A **half-reaction** is an equation that shows either the oxidation or the reduction reaction that occurs during a redox reaction.



It is important to remember that the two half-reactions occur simultaneously. The resulting ions that are formed are then attracted to one another in an ionic bond.

Another example of an oxidation-reduction reaction involving electron transfer is the well-known combination of metallic sodium and chlorine gas to form sodium chloride:



The half reactions are as follows:



We will concern ourselves with the balancing of these equations at another time.

Oxidation Numbers

Redox reactions require that we keep track of the electrons assigned to each atom in a chemical reaction. How do we do that? We use **oxidation numbers** to keep track of electrons in atoms. Oxidation numbers are assigned to atoms based on four rules. Oxidation numbers are not necessarily equal to the charge on the atom (although sometimes they can be); we must keep the concepts of charge and oxidation numbers separate.

Assigning Oxidation Numbers

The rules for assigning oxidation numbers to atoms are as follows:

1. Atoms in their elemental state are assigned an oxidation number of 0.

In H_2 , both H atoms have an oxidation number of 0.

2. Atoms in monatomic (i.e., one-atom) ions are assigned an oxidation number equal to their charge. Oxidation numbers are usually written with the sign first, then the magnitude, to differentiate them from charges.

In $MgCl_2$, magnesium has an oxidation number of +2, while chlorine has an oxidation number of -1.

3. In compounds, fluorine is assigned a -1 oxidation number; oxygen is usually assigned a -2 oxidation number (except in peroxide compounds [where it is -1] and in binary compounds with fluorine [where it is positive]); and hydrogen is usually assigned a +1 oxidation number [except when it exists as the hydride ion (H^-), in which case rule 2 prevails].

In H_2O , the H atoms each have an oxidation number of +1, while the O atom has an oxidation number of -2, even though hydrogen and oxygen do not exist as ions in this compound (rule 3). By contrast, by rule 3, each H atom in hydrogen peroxide (H_2O_2) has an oxidation number of +1, while each O atom has an oxidation number of -1.

4. In compounds, all other atoms are assigned an oxidation number so that the sum of the oxidation numbers on all the atoms in the species equals the charge on the species (which is zero if the species is neutral).

In SO_2 , each O atom has an oxidation number of -2; for the sum of the oxidation numbers to equal the charge on the species (which is zero), the S atom is assigned an oxidation number of +4. Does this mean that the sulfur atom has a 4+ charge on it? No, it means only that the S atom is assigned a +4 oxidation number by our rules of apportioning electrons among the atoms in a compound.

✓ Example 7.9.1: Assigning Oxidation States

Assign oxidation numbers to the atoms in each substance.

- Cl_2
- GeO_2
- $Ca(NO_3)_2$

Solution

- Cl_2 is the elemental form of chlorine. Rule 1 states that each atom has an oxidation number of 0.
- By rule 3, oxygen is normally assigned an oxidation number of -2. For the sum of the oxidation numbers to equal the charge on the species (zero), the Ge atom is assigned an oxidation number of +4.
- $Ca(NO_3)_2$ can be separated into two parts: the Ca^{2+} ion and the NO_3^- ion. Considering these separately, the Ca^{2+} ion has an oxidation number of +2 by rule 2. Now consider the NO_3^- ion. Oxygen is assigned an oxidation number of -2, and there are three of them. According to rule 4, the sum of the oxidation numbers on all atoms must equal the charge on the species, so we have the simple algebraic equation

$$x + 3(-2) = -1$$

where x is the oxidation number of the N atom and the -1 represents the charge on the species. Evaluating for x ,

$$x + (-6) = -1 \quad x = +5$$

Thus the oxidation number on the N atom in the NO_3^- ion is +5.

? Exercise 7.9.1: Assigning Oxidation States

Assign oxidation numbers to the atoms in the following:

- H_3PO_4

b. MgO

Answer a

H: +1; O: -2; P: +5

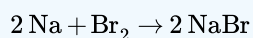
Answer b

Mg: +2, O: -2

All redox reactions occur with a simultaneous change in the oxidation numbers of some atoms. At least two elements must change their oxidation numbers. When an oxidation number of an atom is increased in the course of a redox reaction, that atom is being *oxidized*. When an oxidation number of an atom is decreased in the course of a redox reaction, that atom is being *reduced*. Thus oxidation and reduction can also be defined in terms of increasing or decreasing oxidation numbers, respectively.

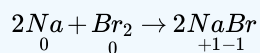
✓ Example 7.9.2: Formation of Sodium Bromide

Identify what is being oxidized and reduced in the following redox reaction.

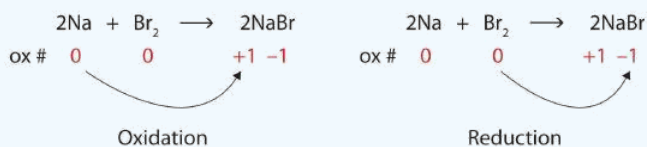


Solution

Both reactants are the elemental forms of their atoms, so the Na and Br atoms have oxidation numbers of 0. In the ionic product, the Na^+ ions have an oxidation number of +1, while the Br^- ions have an oxidation number of -1.



Sodium is increasing its oxidation number from 0 to +1, so it is being oxidized; bromine is decreasing its oxidation number from 0 to -1, so it is being reduced:

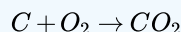


Equation of sodium and bromine reacting, labeled with sodium's oxidation number change from 0 to +1 and bromine's oxidation number change from 0 to -1

Because oxidation numbers are changing, this is a redox reaction. The total number of electrons being lost by sodium (two, one lost from each Na atom) is gained by bromine (two, one gained for each Br atom).

? Exercise 7.9.2: Oxidation of Carbon

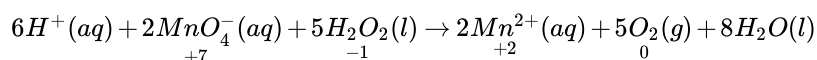
Identify what is being oxidized and reduced in this redox reaction.



Answer

C is being oxidized from 0 to +4; O is being reduced from 0 to -2

Oxidation reactions can become quite complex, as attested by the following redox reaction:



To demonstrate that this is a redox reaction, the oxidation numbers of the species being oxidized and reduced are listed; can you determine what is being oxidized and what is being reduced? This is also an example of a net ionic reaction; spectator ions that do not change oxidation numbers are not displayed in the equation. Eventually, we will need to learn techniques for writing correct (i.e., balanced) redox reactions.

Combustion Reactions

A **combustion reaction** is a reaction in which a substance reacts with oxygen gas, releasing energy in the form of light and heat. Combustion reactions must involve O_2 as one reactant. The combustion of hydrogen gas produces water vapor.



Notice that this reaction also qualifies as a [combination reaction](#).


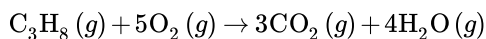


Figure 7.9.2: Explosion of the Hindenberg.

The *Hindenberg* was a hydrogen-filled airship that suffered an accident upon its attempted landing in New Jersey in 1937. The hydrogen immediately combusted in a huge fireball, destroying the airship and killing 36 people. The chemical reaction was a simple one: hydrogen combining with oxygen to produce water (Equation 7.9.6).

Many combustion reactions occur with a [hydrocarbon](#), a compound made up solely of carbon and hydrogen. The products of the combustion of hydrocarbons are carbon dioxide and water. Many hydrocarbons are used as fuel because their combustion releases very large amounts of heat energy. Propane (C_3H_8) is a gaseous hydrocarbon that is commonly used as the fuel source in gas grills.



✓ Example 7.9.3: Combustion of Ethanol

Ethanol can be used as a fuel source in an alcohol lamp. The formula for ethanol is C_2H_5OH . Write the balanced equation for the combustion of ethanol.

Solution

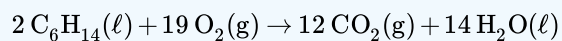
Solutions to Example 7.9.3

Steps	Example Solution
Write the unbalanced reaction.	$C_2H_5OH(l) + O_2(g) \rightarrow CO_2(g) + H_2O(g)$ <p>Ethanol and atmospheric oxygen are the reactants. As with a hydrocarbon, the products of the combustion of an alcohol are carbon dioxide and water.</p>
Balance the equation.	$C_2H_5OH(l) + 3O_2(g) \rightarrow 2CO_2(g) + 3H_2O(g)$
Think about your result.	<p>Combustion reactions must have oxygen as a reactant. Note that the water produced is in the gas state, rather than the liquid state, because of the high temperatures that accompany a combustion reaction.</p>

? Exercise 7.9.3: Combustion of Hexane

Write the balanced equation for the combustion of hexane, C_6H_{14}

Answer



Contributors & Affiliations

-

7.9: Oxidation–Reduction Reactions is shared under a [CC BY-NC-SA 4.0](#) license and was authored, remixed, and/or curated by LibreTexts.

- **7.9: Oxidation–Reduction Reactions** by Henry Agnew, Marisa Alviar-Agnew is licensed [CK-12](#). Original source: <https://www.ck12.org/c/chemistry/>.

7.10: Classifying Chemical Reactions

Template:HideTOC

Learning Objectives

- Classify a chemical reaction as a synthesis, decomposition, single replacement, double replacement, or a combustion reaction.
- Predict the products of simple reactions.

The chemical reactions we have described are only a tiny sampling of the infinite number of chemical reactions possible. How do chemists cope with this overwhelming diversity? How do they predict which compounds will react with one another and what products will be formed? The key to success is to find useful ways to categorize reactions. Familiarity with a few basic types of reactions will help you to predict the products that form when certain kinds of compounds or elements come in contact.

Most chemical reactions can be classified into one or more of five basic types: acid–base reactions, exchange reactions, condensation reactions (and the reverse, cleavage reactions), and oxidation–reduction reactions. The general forms of these five kinds of reactions are summarized in Table 7.10.1, along with examples of each. It is important to note, however, that many reactions can be assigned to more than one classification, as you will see in our discussion.

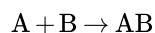
Table 7.10.1: Basic Types of Chemical Reactions

Name of Reaction	General Form	Examples
Oxidation–Reduction (redox)	oxidant + reductant → reduced oxidant + oxidized reductant	$\text{C}_7\text{H}_{16}(\text{l}) + 11\text{O}_2(\text{g}) \rightarrow 7\text{CO}_2(\text{g}) + 8\text{H}_2\text{O}(\text{g})$
Acid–Base	acid + base → salt	$\text{NaOH}(\text{aq}) + \text{HNO}_3(\text{aq}) \rightarrow \text{NaNO}_3(\text{aq}) + \text{H}_2\text{O}(\text{l})$
Exchange: Single Replacement	$\text{AB} + \text{C} \rightarrow \text{AC} + \text{B}$	$\text{ZnCl}_2(\text{aq}) + \text{Mg}(\text{s}) \rightarrow \text{MgCl}_2(\text{aq}) + \text{Zn}(\text{s})$
Exchange: Double Replacement	$\text{AB} + \text{CD} \rightarrow \text{AD} + \text{CB}$	$\text{BaCl}_2(\text{aq}) + \text{Na}_2\text{SO}_4(\text{aq}) \rightarrow \text{BaSO}_4(\text{s}) + 2\text{NaCl}(\text{aq})$
Combination (Synthesis)	$\text{A} + \text{B} \rightarrow \text{AB}$	$\text{CO}_2(\text{g}) + \text{H}_2\text{O}(\text{l}) \rightarrow \text{H}_2\text{CO}_3(\text{aq})$ $\text{N}_2(\text{g}) + 2\text{O}_2(\text{g}) \rightarrow 2\text{NO}_2(\text{g})$
Decomposition	$\text{AB} \rightarrow \text{A} + \text{B}$	$\text{CaCO}_3(\text{s}) \rightarrow \text{CaO}(\text{s}) + \text{CO}_2(\text{g})$

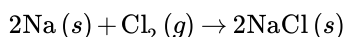
The classification scheme is only for convenience; the same reaction can be classified in different ways, depending on which of its characteristics is most important. Oxidation–reduction reactions, in which there is a net transfer of electrons from one atom to another, and condensation reactions are discussed in this section. Acid–base reactions are one kind of exchange reaction—the formation of an insoluble salt, such as barium sulfate, when solutions of two soluble salts are mixed together.

Combination Reactions

A **combination reaction** is a reaction in which two or more substances combine to form a single new substance. Combination reactions can also be called synthesis reactions. The general form of a combination reaction is:

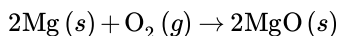


One combination reaction is two elements combining to form a compound. Solid sodium metal reacts with chlorine gas to produce solid sodium chloride.

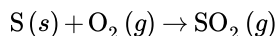


Notice that in order to write and balance the equation correctly, it is important to remember the seven elements that exist in nature as diatomic molecules (H_2 , N_2 , O_2 , F_2 , Cl_2 , Br_2 , and I_2).

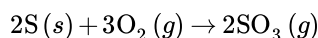
One type of combination reaction that occurs frequently is the reaction of an element with oxygen to form an oxide. Metals and nonmetals both react readily with oxygen under most conditions. Magnesium reacts rapidly and dramatically when ignited, combining with oxygen from the air to produce a fine powder of magnesium oxide:



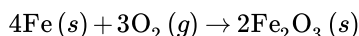
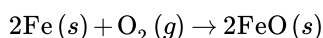
Sulfur reacts with oxygen to form sulfur dioxide:



When nonmetals react with one another, the product is a molecular compound. Often, the nonmetal reactants can combine in different ratios and produce different products. Sulfur can also combine with oxygen to form sulfur trioxide:



Transition metals are capable of adopting multiple positive charges within their ionic compounds. Therefore, most transition metals are capable of forming different products in a combination reaction. Iron reacts with oxygen to form both iron (II) oxide and iron (III) oxide:



✓ Example 7.10.1: Combustion of Solid Potassium

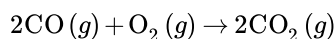
Potassium is a very reactive alkali metal that must be stored under oil in order to prevent it from reacting with air. Write the balanced chemical equation for the combination reaction of potassium with oxygen.

Solution

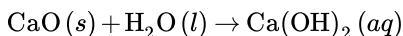
Solutions to Example 7.10.1

Steps	Example Solution
Plan the problem.	Make sure formulas of all reactants and products are correct <u>before</u> balancing the equation. Oxygen gas is a diatomic molecule. Potassium oxide is an ionic compound and so its formula is constructed by the crisscross method. Potassium as an ion becomes K^+ , while the oxide ion is O^{2-} .
Solve.	The skeleton (unbalanced) equation: $\text{K} (s) + \text{O}_2 (g) \rightarrow \text{K}_2\text{O} (s)$ The equation is then easily balanced with coefficients. $4\text{K} (s) + \text{O}_2 (g) \rightarrow 2\text{K}_2\text{O} (s)$
Think about your result.	Formulas are correct and the resulting combination reaction is balanced.

Combination reactions can also take place when an element reacts with a compound to form a new compound composed of a larger number of atoms. Carbon monoxide reacts with oxygen to form carbon dioxide according to the equation:



Two compounds may also react to form a more complex compound. A very common example is the reactions of oxides with water. Calcium oxide reacts readily with water to produce an aqueous solution of calcium hydroxide:



Sulfur trioxide gas reacts with water to form sulfuric acid. This is an unfortunately common reaction that occurs in the atmosphere in some places where oxides of sulfur are present as pollutants. The acid formed in the reaction falls to the ground as acid rain.

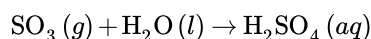
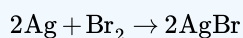


Figure 7.10.1: Acid rain has severe consequences on both natural and manmade objects. Acid rain degrades marble statues like the one on the left (A). The trees in the forest on the right (B) have been killed by acid rain.

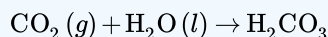
? Exercise 7.10.1

- Write the chemical equation for the synthesis of silver bromide, AgBr.
- Predict the products for the following reaction: $\text{CO}_2(g) + \text{H}_2\text{O}(l)$

Answer a:

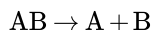


Answer b:



Decomposition Reactions

A **decomposition reaction** is a reaction in which a compound breaks down into two or more simpler substances. The general form of a decomposition reaction is:



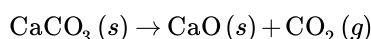
Most decomposition reactions require an input of energy in the form of heat, light, or electricity.

Binary compounds are compounds composed of just two elements. The simplest kind of decomposition reaction is when a binary compound decomposes into its elements. Mercury (II) oxide, a red solid, decomposes when heated to produce mercury and oxygen gas:

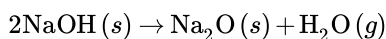


Video 7.10.2: Mercury (II) oxide is a red solid. When it is heated, it decomposes into mercury metal and oxygen gas.

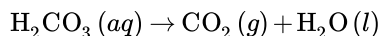
A reaction is also considered to be a decomposition reaction even when one or more of the products are still compounds. A metal carbonate decomposes into a metal oxide and carbon dioxide gas. For example, calcium carbonate decomposes into calcium oxide and carbon dioxide:



Metal hydroxides decompose on heating to yield metal oxides and water. Sodium hydroxide decomposes to produce sodium oxide and water:



Some unstable acids decompose to produce nonmetal oxides and water. Carbonic acid decomposes easily at room temperature into carbon dioxide and water:



✓ Example 7.10.2: Electrolysis of Water

When an electric current is passed through pure water, it decomposes into its elements. Write a balanced equation for the decomposition of water.

Solution

Solutions to Example 7.10.2

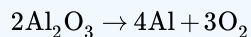
Steps	Example Solution
Plan the problem.	Water is a binary compound composed of hydrogen and oxygen. The hydrogen and oxygen gases produced in the reaction are both diatomic molecules.
Solve.	<p>The skeleton (unbalanced) equation:</p> $\text{H}_2\text{O} (l) \xrightarrow{\text{elec}} \text{H}_2 (g) + \text{O}_2 (g)$ <p>Note the abbreviation "elec" above the arrow to indicate the passage of an electric current to initiate the reaction. Balance the equation.</p> $2\text{H}_2\text{O} (l) \xrightarrow{\text{elec}} 2\text{H}_2 (g) + \text{O}_2 (g)$
Think about your result.	The products are elements and the equation is balanced.

? Exercise 7.10.2

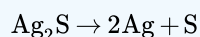
Write the chemical equation for the decomposition of:

- Al_2O_3
- Ag_2S

Answer a

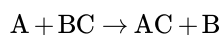


Answer b

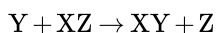


Single Replacement Reactions

A third type of reaction is the single replacement reaction, in which one element replaces a similar element in a compound. The general form of a single-replacement (also called single-displacement) reaction is:



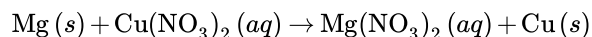
In this general reaction, element A is a metal and replaces element B, also a metal, in the compound. When the element that is doing the replacing is a nonmetal, it must replace another nonmetal in a compound, and the general equation becomes:



where Y is a nonmetal and replaces the nonmetal Z in the compound with X.

Metal Replacement

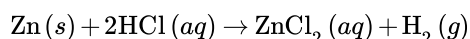
Magnesium is a more reactive metal than copper. When a strip of magnesium metal is placed in an aqueous solution of copper (II) nitrate, it replaces the copper. The products of the reaction are aqueous magnesium nitrate and solid copper metal.



This subcategory of single-replacement reactions is called a metal replacement reaction because it is a metal that is being replaced (copper).

Hydrogen Replacement

Many metals react easily with acids and when they do so, one of the products of the reaction is hydrogen gas. Zinc reacts with hydrochloric acid to produce aqueous zinc chloride and hydrogen (figure below).



In a hydrogen replacement reaction, the hydrogen in the acid is replaced by an active metal. Some metals are so reactive that they are capable of replacing the hydrogen in water. The products of such a reaction are the metal hydroxide and hydrogen gas. All [Group 1](#) metals undergo this type of reaction. Sodium reacts vigorously with water to produce aqueous sodium hydroxide and hydrogen (see figure below).

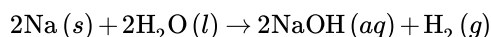
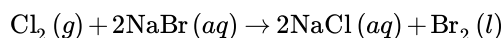


Figure 7.10.2: (First image) Zinc metal reacts with hydrochloric acid to give off hydrogen gas in a single-displacement reaction. (Second image) Sodium metal reacts vigorously with water, giving off hydrogen gas. A large piece of sodium will often generate so much heat that the hydrogen will ignite.

Halogen Replacement

The element chlorine reacts with an aqueous solution of sodium bromide to produce aqueous sodium chloride and elemental bromine:



The reactivity of the halogen group (group 17) decreases from top to bottom within the group. Fluorine is the most reactive halogen, while iodine is the least. Since chlorine is above bromine, it is more reactive than bromine and can replace it in a halogen replacement reaction.

✓ Example 7.10.3

What are the products of the reaction between solid aluminum (Al) and iron (III) oxide (Fe_2O_3)?

Solution

Solutions to Example 7.10.3

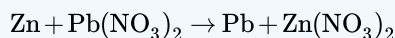
Steps	Example Solution

Steps	Example Solution
Plan the problem.	To predict the products, we need to know that aluminum will replace iron and form aluminum oxide (the metal will replace the metal ion in the compound). Aluminum has a charge of +3 and oxygen has a charge of -2. The compound formed between aluminum and oxygen, therefore, will be Al_2O_3 . Since iron is replaced in the compound by aluminum, the iron will now be the single element in the products.
Solve.	The unbalanced equation will be: $\text{Al} + \text{Fe}_2\text{O}_3 \rightarrow \text{Al}_2\text{O}_3 + \text{Fe}$ and the balanced equation will be: $2\text{Al} + \text{Fe}_2\text{O}_3 \rightarrow \text{Al}_2\text{O}_3 + 2\text{Fe}$
Think about your result.	This is a single replacement reaction, and when balanced the coefficients accurately reflect that the iron and aluminum have the same charge in this reaction.

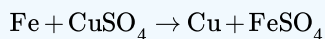
? Exercise 7.10.3

- Write the chemical equation for the single replacement reaction between zinc solid and lead (II) nitrate solution to produce zinc nitrate solution and solid lead. (Note that zinc forms ions with a +2 charge.)
- Predict the products for the following reaction: $\text{Fe} + \text{CuSO}_4$. (In this reaction, assume iron forms ions with a +2 charge.)

Answer a

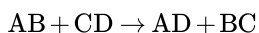


Answer b



Double Replacement Reactions

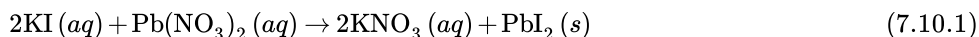
A **double-replacement reaction** is a reaction in which the positive and negative ions of two ionic compounds exchange places to form two new compounds. The general form of a double-replacement (also called double-displacement) reaction is:



In this reaction, A and C are positively-charged cations, while B and D are negatively-charged anions. Double-replacement reactions generally occur between substances in aqueous solution. In order for a reaction to occur, one of the products is usually a solid precipitate, a gas, or a molecular compound such as water.

Formation of a Precipitate

A precipitate forms in a double-replacement reaction when the cations from one of the reactants combine with the anions from the other reactant to form an insoluble ionic compound. When aqueous solutions of potassium iodide and lead (II) nitrate are mixed, the following reaction occurs:



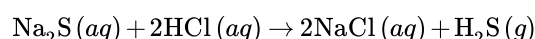
There are very strong attractive forces that occur between Pb^{2+} and I^- ions and the result is a brilliant yellow precipitate (Figure 7.10.3). The other product of the reaction, potassium nitrate, remains soluble.



Figure 7.10.3: Lead (II) iodide precipitates when potassium iodide is mixed with lead (II) nitrate (Equation 7.10.1). (CC BY-SA 3.0; PRHaney).

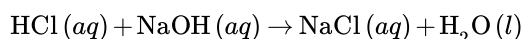
Formation of a Gas

Some double-replacement reactions produce a gaseous product which then bubbles out of the solution and escapes into the air. When solutions of sodium sulfide and hydrochloric acid are mixed, the products of the reaction are aqueous sodium chloride and hydrogen sulfide gas:



Formation of a Molecular Compound

Another kind of double-replacement reaction is one that produces a molecular compound as one of its products. Many examples in this category are reactions that produce water. When aqueous hydrochloric acid is reacted with aqueous sodium hydroxide, the products are aqueous sodium chloride and water:



✓ Example 7.10.4

Write a complete and balanced chemical equation for the double-replacement reaction $\text{NaCN}(aq) + \text{HBr}(aq) \rightarrow$ (hydrogen cyanide gas is formed).

Solution

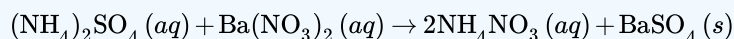
Solutions to Example 7.10.4

Steps	Example Solution
Plan the problem.	The production of a gas drives the reaction.
Solve.	The cations of both reactants are +1 charged ions, while the anions are -1 charged ions. After exchanging partners, the balanced equation is: $\text{NaCN}(aq) + \text{HBr}(aq) \rightarrow \text{NaBr}(aq) + \text{HCN}(g)$
Think about your result.	This is a double replacement reaction. All formulas are correct and the equation is balanced.

? Exercise 7.10.4

Write a complete and balanced chemical equation for the double-replacement reaction $(\text{NH}_4)_2\text{SO}_4(aq) + \text{Ba}(\text{NO}_3)_2(aq) \rightarrow$ (a precipitate of barium sulfate forms).

Answer a:



Occasionally, a reaction will produce both a gas and a molecular compound. The reaction of a sodium carbonate solution with hydrochloric acid produces aqueous sodium chloride, carbon dioxide gas, and water:



7.10: Classifying Chemical Reactions is shared under a [CC BY-NC-SA 4.0](#) license and was authored, remixed, and/or curated by LibreTexts.

- [7.10: Classifying Chemical Reactions](#) by Henry Agnew, Marisa Alviar-Agnew is licensed [CK-12](#). Original source: <https://www.ck12.org/c/chemistry/>.

7.11: The Activity Series

Template:HideTOC

Learning Objectives

- Use the activity series to predict if a reaction will occur.

We see below two metals that can be exposed to water. The picture on the left is of sodium, which has a violent reaction when it comes in contact with water. The picture on the right is of silver, a metal so unreactive with water that it can be made into drinking vessels. Both metals have a single *s* electron in their outer shell, so you would predict a similar reactivity from each. However, we have a tool that allows us to make better predictions about how certain elements will react with others.



Figure 7.11.1: On the left, sodium reacts with water. On the right, silver in the form of cups does not react with water.

The Activity Series

Single-replacement reactions only occur when the element that is doing the replacing is more reactive than the element that is being replaced. Therefore, it is useful to have a list of elements in order of their relative reactivity. The **activity series** is a list of elements in decreasing order of their reactivity. Since metals replace other metals, while nonmetals replace other nonmetals, they each have a separate activity series. The table 7.11.1 below is an activity series of most common metals, and the table 7.11.2 is an activity series of the halogens.

Table 7.11.1: Activity Series of Metal Elements

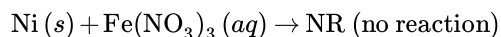
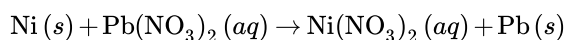
Elements, from most to least reactive	Reaction Occurring
Li K Ba Sr Ca Na	React with cold water, replacing hydrogen.
Mg Al Zn Cr Fe Cd	React with steam, but not cold water, replacing hydrogen.
Co Ni Sn Pb	Do not react with water. React with acids, replacing hydrogen.
H ₂	

Elements, from most to least reactive	Reaction Occurring
Cu Hg Ag Pt Au	Unreactive with water or acids.

Table 7.11.2: Activity Series of Nonmetal elements

Elements, from most to least reactive
F ₂
Cl ₂
Br ₂
I ₂

For a single-replacement reaction, a given element is capable of replacing an element that is below it in the activity series. This can be used to predict if a reaction will occur. Suppose that small pieces of the metal nickel were placed into two separate aqueous solutions: one of iron (III) nitrate and one of lead (II) nitrate. Looking at the activity series, we see that nickel is below iron, but above lead. Therefore, the nickel metal will be capable of replacing the lead in a reaction, but will not be capable of replacing iron.



In the descriptions that accompany the activity series of metals, a given metal is also capable of undergoing the reactions described below that section. For example, lithium will react with cold water, replacing hydrogen. It will also react with steam and with acids, since that requires a lower degree of reactivity.

✓ Examples 7.11.1

Use the activity series to predict if the following reactions will occur. If not, write NR. If the reaction does occur, write the products of the reaction and balance the equation.

- $\text{Al}(s) + \text{Zn}(\text{NO}_3)_2(aq) \rightarrow$
- $\text{Ag}(s) + \text{HCl}(aq) \rightarrow$

Solution

Solutions to Example 7.11.1

Steps	Example 7.11.1A $\text{Al}(s) + \text{Zn}(\text{NO}_3)_2(aq) \rightarrow$	Example 7.11.1B $\text{Ag}(s) + \text{HCl}(aq) \rightarrow$
<i>Plan the problem.</i>	Compare the placements of aluminum and zinc on the activity series (Table 7.11.1)	Compare the placements of silver and hydrogen (Table 7.11.1)

Steps	Example 7.11.1A $\text{Al}(s) + \text{Zn}(\text{NO}_3)_2(aq) \rightarrow$	Example 7.11.1B $\text{Ag}(s) + \text{HCl}(aq) \rightarrow$
Solve.	<p>Since aluminum is above zinc, it is capable of replacing it and a reaction will occur. The products of the reaction will be aqueous aluminum nitrate and solid zinc. Take care to write the correct formulas for the products before balancing the equation. Aluminum adopts a +3 charge in an ionic compound, so the formula for aluminum nitrate is $\text{Al}(\text{NO}_3)_3$. The balanced equation is:</p> $2\text{Al}(s) + 3\text{Zn}(\text{NO}_3)_2(aq) \rightarrow 2\text{Al}(\text{NO}_3)_3(aq) + 3\text{Zn}(s)$	<p>Since silver is below hydrogen, it is not capable of replacing hydrogen in a reaction with an acid.</p> $\text{Ag}(s) + \text{HCl}(aq) \rightarrow \text{NR}$

? Exercise 7.11.1

Use the activity series to predict the products, if any, of each equation.

- $\text{FeCl}_2 + \text{Zn} \rightarrow$
- $\text{HNO}_3 + \text{Au} \rightarrow$

Answer a

The products are $\text{ZnCl}_2 + \text{Fe}$.

Answer b

No reaction.

Summary

- Metals and halogens are ranked according to their ability to displace other metals or halogens below them in the activity series.

7.11: The Activity Series is shared under a [CC BY-NC-SA 4.0](#) license and was authored, remixed, and/or curated by LibreTexts.

- 7.11: The Activity Series- Predicting Spontaneous Redox Reactions by Henry Agnew, Marisa Alviar-Agnew is licensed [CK-12](#). Original source: <https://www.ck12.org/c/chemistry/>.

CHAPTER OVERVIEW

8: Quantities in Chemical Reactions

So far, we have talked about chemical reactions in terms of individual atoms and molecules. Although this works, most of the reactions occurring around us involve much larger amounts of chemicals. Even a tiny sample of a substance will contain millions, billions, or a hundred billion billions of atoms and molecules. How do we compare amounts of substances to each other in chemical terms when it is so difficult to count to a hundred billion billion? Actually, there are ways to do this, which we will explore in this chapter. In doing so, we will increase our understanding of stoichiometry, which is the study of the numerical relationships between the reactants and the products in a balanced chemical reaction.

[8.1: Climate Change- Too Much Carbon Dioxide](#)

[8.2: Stoichiometry](#)

[8.3: Making Molecules- Mole-to-Mole Conversions](#)

[8.4: Making Molecules- Mass-to-Mass Conversions](#)

[8.5: Limiting Reactant, Theoretical Yield, and Percent Yield](#)

[8.6: Limiting Reactant, Theoretical Yield, and Percent Yield from Initial Masses of Reactants](#)

[8.7: Enthalpy- A Measure of the Heat Evolved or Absorbed in a Reaction](#)

8: Quantities in Chemical Reactions is shared under a [CC BY-NC-SA 4.0](#) license and was authored, remixed, and/or curated by LibreTexts.

8.1: Climate Change- Too Much Carbon Dioxide

Template:HideTOC

Carbon dioxide (CO₂) is an important heat-trapping (greenhouse) gas, which is released through human activities such as deforestation and burning fossil fuels, as well as natural processes such as respiration and volcanic eruptions. Figure 8.1.1 shows CO₂ levels during the last three glacial cycles, as reconstructed from ice cores.

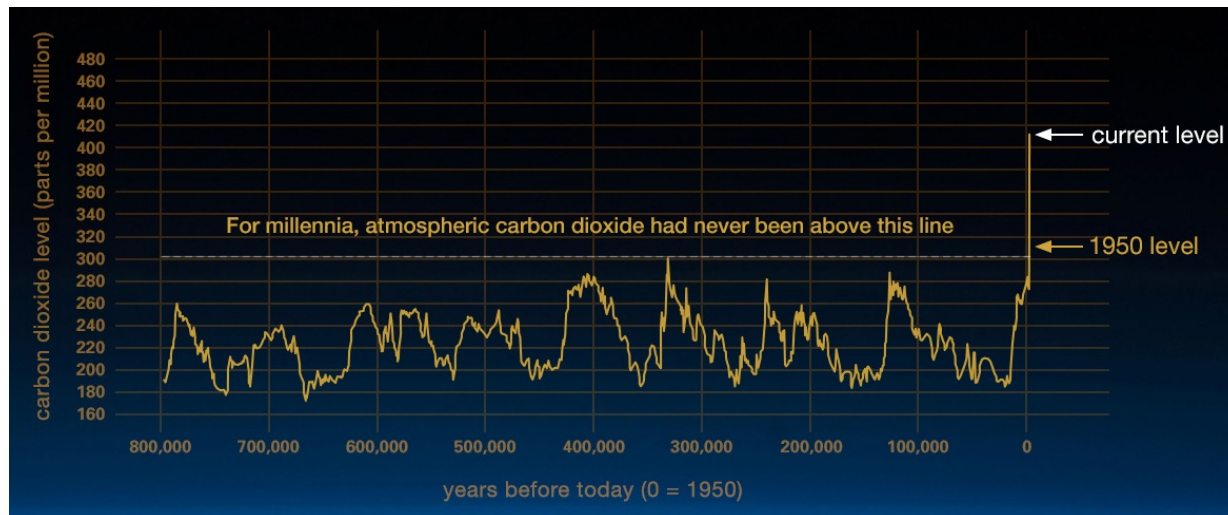
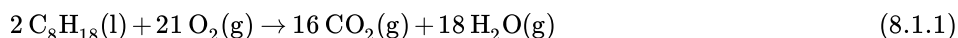


Figure 8.1.1: This graph, based on the comparison of atmospheric samples contained in ice cores and more recent direct measurements, provides evidence that atmospheric CO₂ has increased since the Industrial Revolution. (Luthi, D., et al. 2008; Etheridge, D.M., et al. 2010; Vostok ice core data/J.R.R. Petit et al.; NOAA Mauna Loa CO₂ record. NASA.) Line graph of carbon dioxide levels from 800 thousand before up until present day; current carbon dioxide level is higher than all historical levels.

Carbon dioxide (CO₂) is the primary greenhouse gas emitted through human activities. In 2015, CO₂ accounted for about 82.2% of all U.S. greenhouse gas emissions from human activities. Carbon dioxide is naturally present in the atmosphere as part of the Earth's carbon cycle (the natural circulation of carbon among the atmosphere, oceans, soil, plants, and animals). Human activities are altering the carbon cycle, both by adding more CO₂ to the atmosphere and by influencing the ability of natural sinks, like forests, to remove CO₂ from the atmosphere. While CO₂ emissions come from a variety of natural sources, human-related emissions are responsible for the increase that has occurred in the atmosphere since the industrial revolution.

The main human activity that emits CO₂ is the combustion of fossil fuels (coal, natural gas, and oil) for energy and transportation, although certain industrial processes and land-use changes also emit CO₂. As an example of how CO₂ can be generated, consider the combustion of octane, a component of gasoline:



The balanced reaction in Equation 8.1.1 demonstrates that for every two molecules of octane that are burned, 16 molecules of CO₂ are generated.

Contributions & Attributions

- Earth Science Communications Team at [NASA's Jet Propulsion Laboratory](#), [California Institute of Technology](#)
- EPA

8.1: Climate Change- Too Much Carbon Dioxide is shared under a [CC BY-NC-SA 4.0](#) license and was authored, remixed, and/or curated by LibreTexts.

- **8.1: Climate Change - Too Much Carbon Dioxide** by Henry Agnew, Marisa Alviar-Agnew is licensed [CC BY-NC-SA 4.0](#).

8.2: Stoichiometry

Template:HideTOC

Learning Objectives

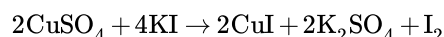
- Explain the meaning of the term "stoichiometry".
- Determine the relative amounts of each substance in chemical equations.

You have learned that chemical equations provide us with information about the types of particles that react to form products. Chemical equations also provide us with the relative number of particles and moles that react to form products. In this section you will explore the quantitative relationships that exist between the quantities of reactants and products in a balanced equation. This is known as **stoichiometry**.

Stoichiometry, by definition, is the calculation of the quantities of reactants or products in a chemical reaction using the relationships found in the balanced chemical equation. The word stoichiometry is actually Greek from two words: *στοικηλον*, which means "element", and *\(\mu\epsilon\tau\rho\omicron\nu\)*, which means "measure".

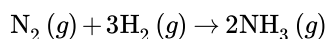
Interpreting Chemical Equations

The mole, as you remember, is a quantitative measure that is equivalent to Avogadro's number of particles. So how does this relate to the chemical equation? Look at the chemical equation below.



The coefficients used, as we have learned, tell us the relative amounts of each substance in the equation. So for every 2 units of copper (II) sulfate (CuSO_4) we have, we need to have 4 units of potassium iodide (KI). For every two dozen copper (II) sulfates, we need 4 dozen potassium iodides. Because the unit "mole" is also a counting unit, we can interpret this equation in terms of moles, as well: For every two moles of copper (II) sulfate, we need 4 moles potassium iodide.

The production of ammonia (NH_3) from nitrogen and hydrogen gases is an important industrial reaction called the [Haber process](#), after German chemist Fritz Haber.



The balanced equation can be analyzed in several ways, as shown in the figure below.

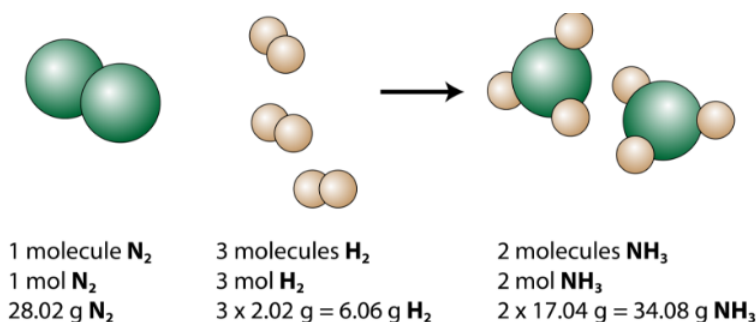
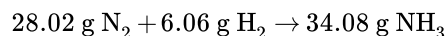


Figure 8.2.1: This representation of the production of ammonia from nitrogen and hydrogen show several ways to interpret the quantitative information of a chemical reaction.

We see that 1 molecule of nitrogen reacts with 3 molecules of hydrogen to form 2 molecules of ammonia. This is the smallest possible relative amount of the reactants and products. To consider larger relative amounts, each coefficient can be multiplied by the same number. For example, 10 molecules of nitrogen would react with 30 molecules of hydrogen to produce 20 molecules of ammonia.

The most useful quantity for counting particles is the mole. So if each coefficient is multiplied by a mole, the balanced chemical equation tells us that 1 mole of nitrogen reacts with 3 moles of hydrogen to produce 2 moles of ammonia. This is the conventional way to interpret any balanced chemical equation.

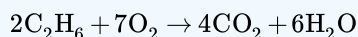
Finally, if each mole quantity is converted to grams by using the molar mass, we can see that the law of conservation of mass is followed. 1 mol of nitrogen has a mass of 28.02 g while 3 mol of hydrogen has a mass of 6.06 g and 2 mol of ammonia has a mass of 34.08 g



Mass and the number of atoms must be conserved in any chemical reaction. The number of molecules is not necessarily conserved.

✓ Example 8.2.1

The equation for the combustion of ethane (C_2H_6) is



- Indicate the number of formula units or molecules in the balanced equation.
- Indicate the number of moles present in the balanced equation.

Solution

- Two molecules of C_2H_6 plus seven molecules of O_2 yields four molecules of CO_2 plus six molecules of H_2O .
- Two moles of C_2H_6 plus seven moles of O_2 yields four moles of CO_2 plus six moles of H_2O .

? Exercise 8.2.1

For the following equation below, indicate the number of formula units or molecules, and the number of moles present in the balanced equation.



Answer

One molecules of KBrO_3 plus six molecules of KI plus six molecules of HBr yields seven molecules of KBr plus three molecules of I_2 and three molecules of H_2O . One mole of KBrO_3 plus six moles of KI plus six moles of HBr yields seven moles of KBr plus three moles of I_2 plus three moles of H_2O .

Summary

- Stoichiometry is the calculation of the quantities of reactants or products in a chemical reaction using the relationships found in a balanced chemical equation.
- The coefficients in a balanced chemical equation represent the reacting ratios of the substances in the reaction.
- The coefficients of a balanced equation can be used to determine the ratio of moles of all substances in the reaction.

Vocabulary

- Stoichiometry** - The calculation of quantitative relationships of the reactants and products in a balanced chemical equation.
- Formula unit** - The empirical formula of an ionic compound.
- Mole ratio** - The ratio of the moles of one reactant or product to the moles of another reactant or product according to the coefficients in the balanced chemical equation.

8.2: Stoichiometry is shared under a [CC BY-NC-SA 4.0](#) license and was authored, remixed, and/or curated by LibreTexts.

- 8.5: Stoichiometry** by Henry Agnew, Marisa Alviar-Agnew is licensed [CK-12](#). Original source: <https://www.ck12.org/c/chemistry/>.

8.3: Making Molecules- Mole-to-Mole Conversions

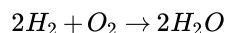
Template:HideTOC

Learning Objectives

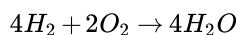
- Use a balanced chemical equation to determine molar relationships between substances.

Previously, you learned to balance chemical equations by comparing the numbers of each type of atom in the reactants and products. The coefficients in front of the chemical formulas represent the numbers of molecules or formula units (depending on the type of substance). As follows, we will extend the meaning of the coefficients in a chemical equation.

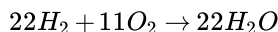
Consider the simple chemical equation:



The convention for writing balanced chemical equations is to use the lowest whole-number ratio for the coefficients. However, the equation is balanced as long as the coefficients are in a 2:1:2 ratio. For example, this equation is also balanced if we write it as

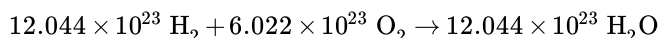


The ratio of the coefficients is 4:2:4, which reduces to 2:1:2. The equation is also balanced if we were to write it as

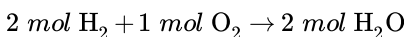


because 22:11:22 also reduces to 2:1:2.

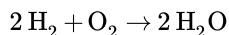
Suppose we want to use larger numbers. Consider the following coefficients:



These coefficients also have the ratio 2:1:2 (check it and see), so this equation is balanced. But 6.022×10^{23} is 1 mol, while 12.044×10^{23} is 2 mol (and the number is written that way to make this more obvious), so we can simplify this version of the equation by writing it as



We can leave out the word *mol* and not write the 1 coefficient (as is our habit), so the final form of the equation, still balanced, is



Now we interpret the coefficients as referring to molar amounts, not individual molecules. The lesson? *Balanced chemical equations are balanced not only at the molecular level, but also in terms of molar amounts of reactants and products.* Thus, we can read this reaction as “two moles of hydrogen react with one mole of oxygen to produce two moles of water.”

By the same token, the ratios we constructed to describe a molecular reaction can also be constructed in terms of moles rather than molecules. For the reaction in which hydrogen and oxygen combine to make water, for example, we can construct the following ratios:

$$\begin{array}{l} \frac{2 \text{ mol H}_2}{1 \text{ mol O}_2} \text{ or } \frac{1 \text{ mol O}_2}{2 \text{ mol H}_2} \\ \frac{2 \text{ mol H}_2\text{O}}{1 \text{ mol O}_2} \text{ or } \frac{1 \text{ mol O}_2}{2 \text{ mol H}_2\text{O}} \\ \frac{2 \text{ mol H}_2}{2 \text{ mol H}_2\text{O}} \text{ or } \frac{2 \text{ mol H}_2\text{O}}{2 \text{ mol H}_2} \end{array}$$


We can use these ratios to determine what amount of a substance, in moles, will react with or produce a given number of moles of a different substance. The study of the numerical relationships between the reactants and the products in balanced chemical reactions is called *stoichiometry*.

✓ Example 8.3.1

How many moles of oxygen react with hydrogen to produce 27.6 mol of H_2O ?

Solution

Solutions to Example 8.3.1


Steps for Problem Solving	How many moles of oxygen react with hydrogen to produce 27.6 mol of H_2O ?
Find a balanced equation that describes the reaction.	Unbalanced: $\text{H}_2 + \text{O}_2 \rightarrow \text{H}_2\text{O}$ Balanced: $2\text{H}_2 + \text{O}_2 \rightarrow 2\text{H}_2\text{O}$
Identify the "given" information and what the problem is asking you to "find."	Given: moles H_2O Find: moles oxygen
List other known quantities.	$1 \text{ mol O}_2 = 2 \text{ mol H}_2\text{O}$
Prepare a concept map and use the proper conversion factor.	 $\frac{1 \text{ mol O}_2}{2 \text{ mol H}_2\text{O}}$
Cancel units and calculate.	$27.6 \text{ mol H}_2\text{O} \times \frac{1 \text{ mol O}_2}{2 \text{ mol H}_2\text{O}} = 13.8 \text{ mol O}_2$ <p>To produce 27.6 mol of H_2O, 13.8 mol of O_2 react.</p>
Think about your result.	Since each mole of oxygen produces twice as many moles of water, it makes sense that the produced amount is greater than the reactant amount

✓ Example 8.3.2

How many moles of ammonia are produced if 4.20 moles of hydrogen are reacted with an excess of nitrogen?

Solution

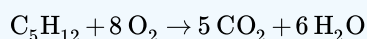
Solutions to Example 8.3.2

Steps for Problem Solving	How many moles of ammonia are produced if 4.20 moles of hydrogen are reacted with an excess of nitrogen?
Find a balanced equation that describes the reaction.	Unbalanced: $\text{N}_2 + \text{H}_2 \rightarrow \text{NH}_3$ Balanced: $\text{N}_2 + 3\text{H}_2 \rightarrow 2\text{NH}_3$
Identify the "given" information and what the problem is asking you to "find."	Given: $\text{H}_2 = 4.20 \text{ mol}$ Find: mol of NH_3
List other known quantities.	$3 \text{ mol H}_2 = 2 \text{ mol NH}_3$
Prepare a concept map and use the proper conversion factor.	 $\frac{2 \text{ mol NH}_3}{3 \text{ mol H}_2}$

Steps for Problem Solving	How many moles of ammonia are produced if 4.20 moles of hydrogen are reacted with an excess of nitrogen?
Cancel units and calculate.	$4.20 \text{ mol } \cancel{H_2} \times \frac{2 \text{ mol } NH_3}{3 \text{ mol } \cancel{H_2}} = 2.80 \text{ mol } NH_3$ <p>The reaction of 4.20 mol of hydrogen with excess nitrogen produces 2.80 mol of ammonia.</p>
Think about your result.	The result corresponds to the 3:2 ratio of hydrogen to ammonia from the balanced equation.

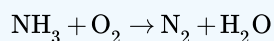
? Exercise 8.3.3

- a. Given the following balanced chemical equation:



, How many moles of H_2O can be formed if 0.0652 mol of C_5H_{12} were to react?

- b. Balance the following unbalanced equation and determine how many moles of H_2O are produced when 1.65 mol of NH_3 react:



Answer a

0.391 mol H_2O

Answer b

$4NH_3 + 3O_2 \rightarrow 2N_2 + 6H_2O$; 2.48 mol H_2O

Summary

- The balanced chemical reaction can be used to determine molar relationships between substances.

8.3: Making Molecules- Mole-to-Mole Conversions is shared under a [CC BY-NC-SA 4.0](#) license and was authored, remixed, and/or curated by LibreTexts.

- 8.3: Making Molecules- Mole-to-Mole Conversions by Henry Agnew, Marisa Alviar-Agnew is licensed [CC BY-NC-SA 3.0](#).

8.4: Making Molecules- Mass-to-Mass Conversions

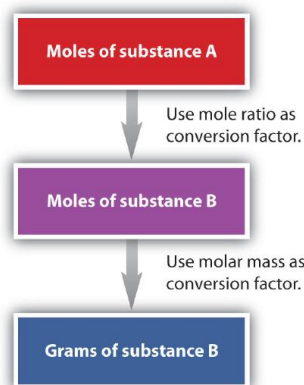
Template:HideTOC

Learning Objectives

- Convert from mass or moles of one substance to mass or moles of another substance in a chemical reaction.

Mole to Mass Conversions

We have established that a balanced chemical equation is balanced in terms of moles, as well as atoms or molecules. We have used balanced equations to set up ratios, in terms of moles of materials, that we can use as conversion factors to answer stoichiometric questions—such as how many moles of substance A react with so many moles of reactant B. We can extend this technique even further. Recall that we can relate a molar amount to a mass amount using molar mass. We can use that relation to answer stoichiometry questions in terms of the masses of a particular substance, in addition to moles. We do this using the following sequence:



Collectively, these conversions are called mole-mass calculations. Flowchart of mole mass calculations: To convert from moles of substance A to moles of substance B, use the mole ratio conversion factor, and to convert from moles to grams of substance B, use molar mass conversion factor

As an example, consider the balanced chemical equation



If we have 3.59 mol of Fe_2O_3 , how many grams of SO_3 can react with it? Using the mole-mass calculation sequence, we can determine the required mass of SO_3 in two steps. First, we construct the appropriate molar ratio, determined from the balanced chemical equation, to calculate the number of moles of SO_3 needed. Then, using the molar mass of SO_3 as a conversion factor, we determine the mass that this number of moles of SO_3 has.

As usual, we start with the quantity we were given:

$$3.59 \text{ mol } \cancel{\text{Fe}_2\text{O}_3} \times \left(\frac{3 \text{ mol } \cancel{\text{SO}_3}}{1 \text{ mol } \cancel{\text{Fe}_2\text{O}_3}} \right) = 10.77 \text{ mol } \text{SO}_3 \quad (8.4.2)$$

The mol Fe_2O_3 units cancel, leaving mol SO_3 unit. Now, we take this answer and convert it to grams of SO_3 , using the molar mass of SO_3 as the conversion factor:

$$10.77 \text{ mol } \cancel{\text{SO}_3} \times \left(\frac{80.06 \text{ g } \cancel{\text{SO}_3}}{1 \text{ mol } \cancel{\text{SO}_3}} \right) = 862 \text{ g } \text{SO}_3 \quad (8.4.3)$$

Our final answer is expressed to three significant figures. Thus, in a two-step process, we find that 862 g of SO_3 will react with 3.59 mol of Fe_2O_3 . Many problems of this type can be answered in this manner.

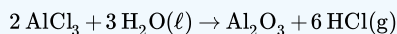
The same two-step problem can also be worked out in a single line, rather than as two separate steps, as follows:

$$3.59 \text{ mol } \cancel{\text{Fe}_2\text{O}_3} \times \underbrace{\left(\frac{3 \text{ mol } \cancel{\text{SO}_3}}{1 \text{ mol } \cancel{\text{Fe}_2\text{O}_3}} \right)}_{\text{converts to moles of } \text{SO}_3} \times \underbrace{\left(\frac{80.06 \text{ g } \cancel{\text{SO}_3}}{1 \text{ mol } \cancel{\text{SO}_3}} \right)}_{\text{converts to grams of } \text{SO}_3} = 862 \text{ g } \text{SO}_3$$

We get exactly the same answer when combining all math steps together.

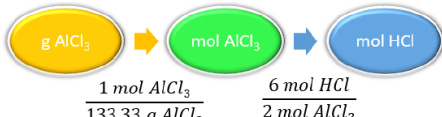
✓ Example 8.4.1: Generation of Aluminum Oxide

How many moles of HCl will be produced when 249 g of AlCl_3 are reacted according to this chemical equation?



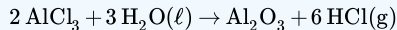
Solution

Solutions to Example 8.5.1

Steps for Problem Solving	Example 8.4.1
Identify the "given" information and what the problem is asking you to "find."	Given: 249 g AlCl_3 Find: moles HCl
List other known quantities.	1 mol AlCl_3 = 133.33 g AlCl_3 6 mol of HCl to 2 mol AlCl_3
Prepare a concept map and use the proper conversion factor.	 <p>Flowchart of needed conversion factors: 1 mole AlCl_3 to 133.33 grams AlCl_3, and 6 moles HCl to 2 moles AlCl_3</p>
Cancel units and calculate.	$249 \text{ g } \cancel{\text{AlCl}_3} \times \frac{1 \text{ mol } \cancel{\text{AlCl}_3}}{133.33 \text{ g } \cancel{\text{AlCl}_3}} \times \frac{6 \text{ mol HCl}}{2 \text{ mol } \cancel{\text{AlCl}_3}} = 5.60 \text{ mol HCl}$
Think about your result.	Since 249 g of AlCl_3 is less than 266.66 g, the mass for 2 moles of AlCl_3 and the relationship is 6 mol of HCl to 2 mol AlCl_3 , the answer should be less than 6 moles of HCl.

? Exercise 8.4.1: Generation of Aluminum Oxide

How many moles of Al_2O_3 will be produced when 23.9 g of H_2O are reacted according to this chemical equation?

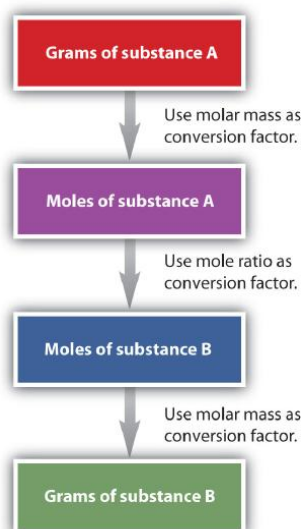


Answer

0.442 mol Al_2O_3

Mass to Mass Conversions

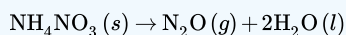
It is a small step from mole-mass calculations to mass-mass calculations. If we start with a known mass of one substance in a chemical reaction (instead of a known number of moles), we can calculate the corresponding masses of other substances in the reaction. The first step in this case is to convert the known mass into moles, using the substance's molar mass as the conversion factor. Then—and only then—we use the balanced chemical equation to construct a conversion factor to convert that quantity to moles of another substance, which in turn can be converted to a corresponding mass. Sequentially, the process is as follows:



This three-part process can be carried out in three discrete steps or combined into a single calculation that contains three conversion factors. The following example illustrates both techniques. Flowchart of mole mass calculations: To convert from grams to moles of substance A, use molar mass conversion factor; To convert from moles of substance A to moles of substance B, use the mole ratio conversion factor, and to convert from moles to grams of substance B, use molar mass conversion factor

✓ Example 8.4.2: Decomposition of Ammonium Nitrate

Ammonium nitrate decomposes to dinitrogen monoxide and water according to the following equation.



In a certain experiment, 45.7 g of ammonium nitrate is decomposed. Find the mass of each of the products formed.

Solutions to Example 8.5.2

Steps for Problem Solving	Example 8.4.2
Identify the "given" information and what the problem is asking you to "find."	Given: 45.7 g NH_4NO_3 Find: Mass N_2O = ? g Mass H_2O = ? g
List other known quantities.	1 mol NH_4NO_3 = 80.06 g 1 mol N_2O = 44.02 g 1 mol H_2O = 18.02 g 1 mol NH_4NO_3 to 1 mol N_2O to 2 mol H_2O
Prepare two concept maps and use the proper conversion factor.	<div style="text-align: center;"> </div> <p>Flowchart of conversion factors: 1 mole NH_4NO_3 to 80.06 grams NH_4NO_3, 1 mole N_2O to 1 mole NH_4NO_3, 44.02 grams N_2O to 1 mole N_2O</p> <div style="text-align: center;"> </div> <p>Flowchart of conversion factors: 1 mole NH_4NO_3 to 80.06 grams NH_4NO_3, 2 moles H_2O to 1 mole NH_4NO_3, 18.02 grams H_2O to 1 mole H_2O</p>
Cancel units and calculate.	$45.7 \text{ g } \text{NH}_4\text{NO}_3 \times \frac{1 \text{ mol } \text{NH}_4\text{NO}_3}{80.06 \text{ g } \text{NH}_4\text{NO}_3} \times \frac{1 \text{ mol } \text{N}_2\text{O}}{1 \text{ mol } \text{NH}_4\text{NO}_3} \times \frac{44.02 \text{ g } \text{N}_2\text{O}}{1 \text{ mol } \text{N}_2\text{O}} = 21.1 \text{ g } \text{N}_2\text{O}$ $45.7 \text{ g } \text{NH}_4\text{NO}_3 \times \frac{1 \text{ mol } \text{NH}_4\text{NO}_3}{80.06 \text{ g } \text{NH}_4\text{NO}_3} \times \frac{2 \text{ mol } \text{H}_2\text{O}}{1 \text{ mol } \text{NH}_4\text{NO}_3} \times \frac{18.02 \text{ g } \text{H}_2\text{O}}{1 \text{ mol } \text{H}_2\text{O}} = 26.1 \text{ g } \text{H}_2\text{O}$

Steps for Problem Solving

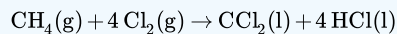
Think about your result.

Example 8.4.2

The total mass of the two products is equal to the mass of ammonium nitrate which decomposed, demonstrating the law of conservation of mass. Each answer has three significant figures.

? Exercise 8.4.2: Carbon Tetrachloride

Methane can react with elemental chlorine to make carbon tetrachloride (CCl_4). The balanced chemical equation is as follows:



How many grams of HCl are produced by the reaction of 100.0 g of CH_4 ?

Answer

908.7g HCl

Summary

- Calculations involving conversions between moles of a substance and the mass of that substance can be done using conversion factors.
- A balanced chemical reaction can be used to determine molar and mass relationships between substances.

8.4: Making Molecules- Mass-to-Mass Conversions is shared under a [CC BY-NC-SA 4.0](#) license and was authored, remixed, and/or curated by LibreTexts.

- 8.4: Making Molecules- Mass-to-Mass Conversions by Henry Agnew, Marisa Alviar-Agnew is licensed [CC BY-NC-SA 3.0](#).

8.5: Limiting Reactant, Theoretical Yield, and Percent Yield

Template:HideTOC

Learning Objectives

- Identify the limiting reactant (limiting reagent) in a given chemical reaction.
- Calculate how much product will be produced from the limiting reactant.
- Calculate how much reactant(s) remains when the reaction is complete.

In all examples discussed thus far, the reactants were assumed to be present in stoichiometric quantities. Consequently, none of the reactants were left over at the end of the reaction. This is often desirable—as in the case of a space shuttle—where excess oxygen or hydrogen is not only extra freight to be hauled into orbit, but also an explosion hazard. More often, however, reactants are present in mole ratios that are not the same as the ratio of the coefficients in the balanced chemical equation. As a result, one or more of them will not be used up completely, but will be left over when the reaction is completed. In this situation, the amount of product that can be obtained is limited by the amount of only one of the reactants. The reactant that restricts the amount of product obtained is called the limiting reactant. The reactant that remains after a reaction has gone to completion is in excess.

Consider a nonchemical example. Assume you have invited some friends for dinner and want to bake brownies for dessert. You find two boxes of brownie mix in your pantry and see that each package requires two eggs. The balanced equation for brownie preparation is:



If you have a dozen eggs, which ingredient will determine the number of batches of brownies that you can prepare? Because each box of brownie mix requires two eggs and you have two boxes, you need four eggs. Twelve eggs is eight more eggs than you need. Although the ratio of eggs to boxes is 2:1, the ratio in your possession is 6:1. Hence the eggs are the ingredient (reactant) present in excess, and the brownie mix is the limiting reactant. Even if you had a refrigerator full of eggs, you could make only two batches of brownies.

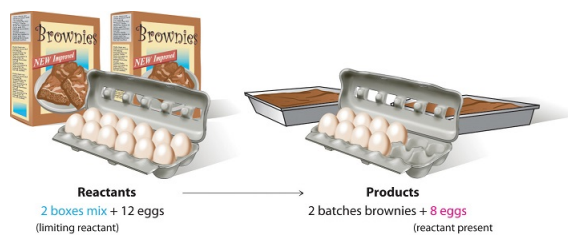
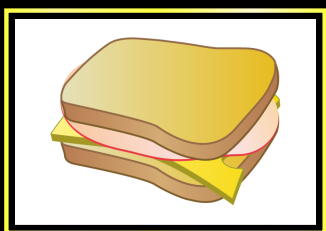


Figure 8.5.1: The Concept of a Limiting Reactant in the Preparation of Brownies. For a chemist, the **balanced** chemical equation is the recipe that must be followed. 2 boxes of brownie mix and 12 eggs results in 2 batches of brownies and 8 eggs; in this case the 8 eggs are reactant present in excess

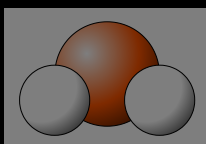
PhET Simulation: Reactants, Products and Leftovers

View this interactive simulation illustrating the concepts of limiting and excess reactants.


Reactants, Products and Leftovers



Sandwiches

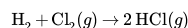


Molecules



Game

Consider this concept now with regard to a chemical process, the reaction of hydrogen with chlorine to yield hydrogen chloride:



The balanced equation shows that hydrogen and chlorine react in a 1:1 stoichiometric ratio. If these reactants are provided in any other amounts, one of the reactants will nearly always be entirely consumed, thus limiting the amount of product that may be generated. This substance is the limiting reactant, and the other substance is the excess reactant. Identifying the limiting and excess reactants for a given situation requires computing the molar amounts of each reactant provided and comparing them to the stoichiometric amounts represented in the balanced chemical equation. For example, imagine combining 3 moles of H_2 and 2 moles of Cl_2 . This represents a 3:2 (or 1.5:1) ratio of hydrogen to chlorine present for reaction, which is greater than the stoichiometric ratio of 1:1. Hydrogen, therefore, is present in excess, and chlorine is the limiting reactant. Reaction of all the provided chlorine (2 mol) will consume 2 mol of the 3 mol of hydrogen provided, leaving 1 mol of hydrogen non-reacted.

An alternative approach to identifying the limiting reactant involves comparing the amount of product expected for the complete reaction of each reactant. Each reactant amount is used to separately calculate the amount of product that would be formed per the reaction's stoichiometry. The reactant yielding the lesser amount of product is the limiting reactant. For the example, in the previous paragraph, complete reaction of the hydrogen would yield:

$$\text{mol HCl produced} = 3 \text{ mol H}_2 \times \frac{2 \text{ mol HCl}}{1 \text{ mol H}_2} = 6 \text{ mol HCl}$$

Complete reaction of the provided chlorine would produce:

$$\text{mol HCl produced} = 2 \text{ mol Cl}_2 \times \frac{2 \text{ mol HCl}}{1 \text{ mol Cl}_2} = 4 \text{ mol HCl}$$

The chlorine will be completely consumed once 4 moles of HCl have been produced. Since enough hydrogen was provided to yield 6 moles of HCl, there will be non-reacted hydrogen remaining once this reaction is complete. Chlorine, therefore, is the limiting reactant and hydrogen is the excess reactant (Figure 8.5.2).

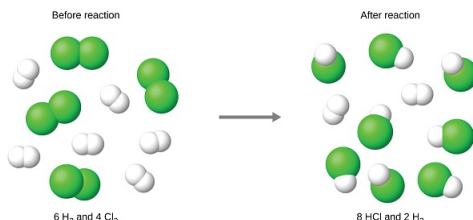


Figure 8.5.2: When H_2 and Cl_2 are combined in nonstoichiometric amounts, one of these reactants will limit the amount of HCl that can be produced. This illustration shows a reaction in which hydrogen is present in excess and chlorine is the limiting reactant. The figure shows a space-filling molecular models reacting. There is a reaction arrow pointing to the right in the middle. To the left of the reaction arrow there are three molecules each consisting of two green spheres bonded together. There are also five molecules each consisting of two smaller, white spheres bonded together. Above these molecules is the label, "Before reaction," and below these molecules is the label, "6 H subscript 2 and 4 Cl subscript 2." To the right of the reaction arrow, there are eight molecules each consisting of one green sphere bonded to a smaller white sphere. There are also two molecules each consisting of two white spheres bonded together. Above these molecules is the label, "After reaction," and below these molecules is the label, "8 H Cl and 2 H subscript 2."

A similar situation exists for many chemical reactions: you usually run out of one reactant before all of the other reactant has reacted. The reactant you run out of is called the limiting reactant; the other reactant or reactants are considered to be *in excess*. A crucial skill in evaluating the conditions of a chemical process is to determine which reactant is the limiting reactant and which is in excess.

How to Identify the Limiting Reactant (Limiting Reagent)

There are two ways to determine the limiting reactant. One method is to find and compare the mole ratio of the reactants used in the reaction (Approach 1). Another way is to calculate the grams of products produced from the given quantities of reactants; the reactant that produces the **smallest** amount of product is the limiting reactant (Approach 2). This section will focus more on the second method.

Approach 1 (The "Reactant Mole Ratio Method"): Find the limiting reactant by looking at the number of moles of each reactant.

1. Determine the balanced chemical equation for the chemical reaction.
2. Convert all given information into moles (most likely, through the use of molar mass as a conversion factor).
3. Calculate the mole ratio from the given information. Compare the calculated ratio to the actual ratio.
4. Use the amount of limiting reactant to calculate the amount of product produced.
5. If necessary, calculate how much is left in excess of the non-limiting (excess) reactant.

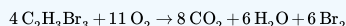
Approach 2 (The "The Product Method"): Find the limiting reactant by calculating and comparing the amount of product that each reactant will produce.

1. Balance the chemical equation for the chemical reaction.
2. Convert the given information into moles.
3. Use stoichiometry for each individual reactant to find the mass of product produced.
4. The reactant that produces a lesser amount of product is the limiting reactant.
5. The reactant that produces a larger amount of product is the excess reactant.
6. To find the amount of remaining excess reactant, subtract the mass of excess reactant consumed from the total mass of excess reactant given.

The key to recognizing which reactant is the limiting reactant is based on a mole-mass or mass-mass calculation: whichever reactant gives the *lesser* amount of product is the limiting reactant. What we need to do is determine an amount of one product (either moles or mass) assuming all of each reactant reacts. Whichever reactant gives the least amount of that particular product is the limiting reactant. It does not matter which product we use, as long as we use the same one each time. It does not matter whether we determine the number of moles or grams of that product; however, we will see shortly that knowing the final mass of product can be useful.

✓ Example 8.5.1: Identifying the Limiting Reactant

As an example, consider the balanced equation



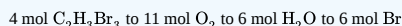
What is the limiting reactant if 76.4 grams of $\text{C}_2\text{H}_3\text{Br}_3$ reacted with 49.1 grams of O_2 ?

Solution

Using Approach 1:

Step 1: Balance the chemical equation.

The equation is already balanced with the relationship



Step 2: Convert all given information into moles.

$$76.4 \text{ g C}_2\text{H}_3\text{Br}_3 \times \frac{1 \text{ mol C}_2\text{H}_3\text{Br}_3}{266.72 \text{ g C}_2\text{H}_3\text{Br}_3} = 0.286 \text{ mol C}_2\text{H}_3\text{Br}_3$$

$$49.1 \text{ g } \cancel{\text{O}_2} \times \frac{1 \text{ mol } \text{O}_2}{32.00 \text{ g } \cancel{\text{O}_2}} = 1.53 \text{ mol } \text{O}_2$$

Step 3: Calculate the mole ratio from the given information. Compare the calculated ratio to the actual ratio.

Assuming that all of the oxygen is used up,

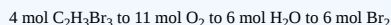
$$1.53 \text{ mol } \cancel{\text{O}_2} \times \frac{4 \text{ mol } \text{C}_2\text{H}_3\text{Br}_3}{11 \text{ mol } \cancel{\text{O}_2}} = 0.556 \text{ mol } \text{C}_2\text{H}_3\text{Br}_3 \text{ are required.}$$

Because 0.556 moles of $\text{C}_2\text{H}_3\text{Br}_3$ required > 0.286 moles of $\text{C}_2\text{H}_3\text{Br}_3$ available, **$\text{C}_2\text{H}_3\text{Br}_3$ is the limiting reactant.**

Using Approach 2:

Step 1: Balance the chemical equation.

The equation is already balanced with the relationship



Step 2 and Step 3: Convert mass to moles and stoichiometry.

$$76.4 \text{ g } \cancel{\text{C}_2\text{H}_3\text{Br}_3} \times \frac{1 \text{ mol } \cancel{\text{C}_2\text{H}_3\text{Br}_3}}{266.72 \text{ g } \cancel{\text{C}_2\text{H}_3\text{Br}_3}} \times \frac{8 \text{ mol } \cancel{\text{CO}_2}}{4 \text{ mol } \cancel{\text{C}_2\text{H}_3\text{Br}_3}} \times \frac{44.01 \text{ g } \text{CO}_2}{1 \text{ mol } \cancel{\text{CO}_2}} = 25.2 \text{ g } \text{CO}_2$$

$$49.1 \text{ g } \cancel{\text{O}_2} \times \frac{1 \text{ mol } \cancel{\text{O}_2}}{32.00 \text{ g } \cancel{\text{O}_2}} \times \frac{8 \text{ mol } \cancel{\text{CO}_2}}{11 \text{ mol } \cancel{\text{O}_2}} \times \frac{44.01 \text{ g } \text{CO}_2}{1 \text{ mol } \cancel{\text{CO}_2}} = 49.1 \text{ g } \text{CO}_2$$

Step 4: The reactant that produces a smaller amount of product is the limiting reactant.

Therefore, by either method, $\text{C}_2\text{H}_3\text{Br}_3$ is the limiting reactant.

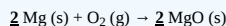
✓ Example 8.5.2: Identifying the Limiting Reactant and the Mass of Excess Reactant

For example, in the reaction of magnesium metal and oxygen, calculate the mass of magnesium oxide that can be produced if 2.40 g Mg reacts with 10.0 g O_2 . Also determine the amount of excess reactant. MgO is the only product in the reaction.

Solution

Following Approach 1:

Step 1: Balance the chemical equation.



The balanced equation provides the relationship of 2 mol Mg to 1 mol O_2 to 2 mol MgO

Step 2 and Step 3: Convert mass to moles and stoichiometry.

$$2.40 \text{ g } \cancel{\text{Mg}} \times \frac{1 \text{ mol } \cancel{\text{Mg}}}{24.31 \text{ g } \cancel{\text{Mg}}} \times \frac{2 \text{ mol } \text{MgO}}{2 \text{ mol } \cancel{\text{Mg}}} \times \frac{40.31 \text{ g } \text{MgO}}{1 \text{ mol } \cancel{\text{MgO}}} = 3.98 \text{ g } \text{MgO}$$

$$10.0 \text{ g } \cancel{\text{O}_2} \times \frac{1 \text{ mol } \cancel{\text{O}_2}}{32.00 \text{ g } \cancel{\text{O}_2}} \times \frac{2 \text{ mol } \text{MgO}}{1 \text{ mol } \cancel{\text{O}_2}} \times \frac{40.31 \text{ g } \text{MgO}}{1 \text{ mol } \cancel{\text{MgO}}} = 25.2 \text{ g } \text{MgO}$$

Step 4: The reactant that produces a smaller amount of product is the limiting reactant.

Mg produces less MgO than does O_2 (3.98 g MgO vs. 25.2 g MgO), therefore Mg is the limiting reactant in this reaction.

Step 5: The reactant that produces a larger amount of product is the excess reactant.

O_2 produces more amount of MgO than Mg (25.2g MgO vs. 3.98 MgO), therefore O_2 is the excess reactant in this reaction.

Step 6: Find the amount of remaining excess reactant by subtracting the mass of the excess reactant consumed from the total mass of excess reactant given.

Mass of excess reactant calculated using the limiting reactant:

$$2.40 \text{ g } \cancel{\text{Mg}} \times \frac{1 \text{ mol } \cancel{\text{Mg}}}{24.31 \text{ g } \cancel{\text{Mg}}} \times \frac{1 \text{ mol } \cancel{\text{O}_2}}{2 \text{ mol } \cancel{\text{Mg}}} \times \frac{32.00 \text{ g } \text{O}_2}{1 \text{ mol } \cancel{\text{O}_2}} = 1.58 \text{ g } \text{O}_2$$

OR

Mass of excess reactant calculated using the mass of the product:

$$3.98 \text{ g } \cancel{\text{MgO}} \times \frac{1 \text{ mol } \cancel{\text{MgO}}}{40.31 \text{ g } \cancel{\text{MgO}}} \times \frac{1 \text{ mol } \cancel{\text{O}_2}}{2 \text{ mol } \cancel{\text{MgO}}} \times \frac{32.0 \text{ g } \text{O}_2}{1 \text{ mol } \cancel{\text{O}_2}} = 1.58 \text{ g } \text{O}_2$$

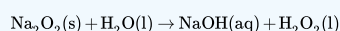
Mass of total excess reactant given – mass of excess reactant consumed in the reaction:

$$10.0 \text{ g } \text{O}_2 - (\text{available}) 1.58 \text{ g } \text{O}_2 (\text{used}) = 8.42 \text{ g } \text{O}_2 (\text{excess})$$

Therefore, O_2 is in excess.

✓ Example 8.5.3: Limiting Reactant

What is the limiting reactant if 78.0 grams of Na_2O_2 were reacted with 29.4 grams of H_2O ? The unbalanced chemical equation is



Solution

Solutions to Example 8.4.3

Steps for Problem Solving- The Product Method	Example 8.5.1
Identify the "given" information and what the problem is asking you to "find."	Given: 78.0 grams of Na_2O_2 29.4 g H_2O Find: limiting reactant

Steps for Problem Solving- The Product Method

Example 8.5.1

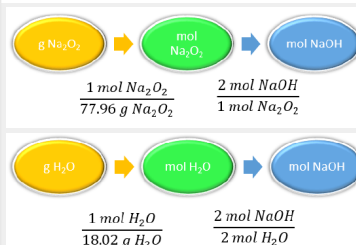
List other known quantities.

1 mol $\text{Na}_2\text{O}_2 = 77.96 \text{ g/mol}$
 1 mol $\text{H}_2\text{O} = 18.02 \text{ g/mol}$
 Since the amount of product in grams is not required, only the molar mass of the reactants is needed.

Balance the equation.

$\text{Na}_2\text{O}_2(\text{s}) + 2\text{H}_2\text{O}(\text{l}) \rightarrow 2\text{NaOH}(\text{aq}) + \text{H}_2\text{O}_2(\text{l})$
 The balanced equation provides the relationship of 1 mol Na_2O_2 to 2 mol H_2O 2mol NaOH to 1 mol H_2O_2

Prepare a concept map and use the proper conversion factor.



Because the question only asks for the limiting reactant, we can perform two **mass-mole** calculations and determine which amount is less.

Cancel units and calculate.

$$78.0 \text{ g Na}_2\text{O}_2 \times \frac{1 \text{ mol Na}_2\text{O}_2}{77.96 \text{ g Na}_2\text{O}_2} \times \frac{2 \text{ mol NaOH}}{1 \text{ mol Na}_2\text{O}_2} \times \frac{40 \text{ g NaOH}}{1 \text{ mol NaOH}} = 2.00 \text{ mol NaOH}$$

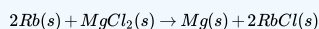
$$29.4 \text{ g H}_2\text{O} \times \frac{1 \text{ mol H}_2\text{O}}{18.02 \text{ g H}_2\text{O}} \times \frac{2 \text{ mol NaOH}}{2 \text{ mol H}_2\text{O}} \times \frac{40 \text{ g NaOH}}{1 \text{ mol NaOH}} = 1.63 \text{ mol NaOH}$$

Therefore, H_2O is the *limiting reactant*.

Think about your result.

✓ Example 8.5.4: Limiting Reactant and Mass of Excess Reactant

A 5.00 g quantity of Rb is combined with 3.44 g of MgCl_2 according to this chemical reaction:



What mass of Mg is formed, and what mass of remaining reactant is left over?

Solution

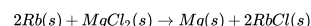
Solutions to Example 8.4.10

Steps for Problem Solving- The Product Method

Example 8.5.2

Steps for Problem Solving

A 5.00 g quantity of Rb is combined with 3.44 g of MgCl_2 according to this chemical reaction:



What mass of Mg is formed, and what mass of remaining reactant is left over?

Identify the "given" information and what the problem is asking you to "find."

Given: 5.00g Rb, 2.44g MgCl_2
 Find: mass of Mg formed, mass of remaining reactant

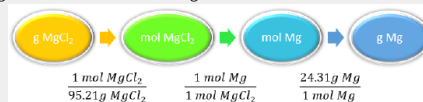
List other known quantities.

- molar mass: Rb = 85.47 g/mol
- molar mass: MgCl_2 = 95.21 g/mol
- molar mass: Mg = 24.31 g/mol

Find mass Mg formed based on mass of Rb



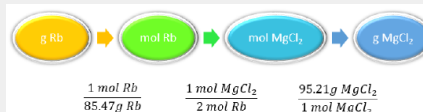
Find mass of Mg formed based on mass of MgCl_2



Prepare concept maps and use the proper conversion factor.

Conversion factors: 1 mole MgCl_2 to 95.21 grams MgCl_2 , 1 mole Mg to 1 mole MgCl_2 , 24.31 grams Mg to 1 mole Mg

Use limiting reactant to determine amount of excess reactant consumed



Conversion factors: 1 mole Rb to 85.47 grams Rb, 1 mole MgCl_2 to 2 moles Rb, 95.21 grams MgCl_2 to 1 mole MgCl_2

Steps for Problem Solving- The Product Method

Example 8.5.2

Cancel units and calculate.

Think about your result.

Because the question asks what mass of magnesium is formed, we can perform two mass-mass calculations and determine which amount is less.

$$5.00 \text{ g Rb} \times \frac{1 \text{ mol Rb}}{85.47 \text{ g Rb}} \times \frac{1 \text{ mol Mg}}{2 \text{ mol Rb}} \times \frac{24.31 \text{ g Mg}}{1 \text{ mol Mg}} = 0.711 \text{ g Mg}$$

$$3.44 \text{ g MgCl}_2 \times \frac{1 \text{ mol MgCl}_2}{95.21 \text{ g MgCl}_2} \times \frac{1 \text{ mol Mg}}{1 \text{ mol MgCl}_2} \times \frac{24.31 \text{ g Mg}}{1 \text{ mol Mg}} = 0.878 \text{ g Mg}$$

The 0.711 g of Mg is the lesser quantity, so the associated reactant—5.00 g of Rb—is the limiting reactant. To determine how much of the other reactant is left, we have to do one more mass-mass calculation to determine what mass of MgCl_2 reacted with the 5.00 g of Rb, and then subtract the amount reacted from the original amount.

$$5.00 \text{ g Rb} \times \frac{1 \text{ mol Rb}}{85.47 \text{ g Rb}} \times \frac{1 \text{ mol MgCl}_2}{2 \text{ mol Rb}} \times \frac{95.21 \text{ g MgCl}_2}{1 \text{ mol MgCl}_2} = 2.78 \text{ g MgCl}_2 \text{ reacted}$$

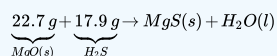
Because we started with 3.44 g of MgCl_2 , we have

$$3.44 \text{ g MgCl}_2 - 2.78 \text{ g MgCl}_2 \text{ reacted} = 0.66 \text{ g MgCl}_2 \text{ left}$$

It usually is not possible to determine the limiting reactant using just the initial masses, as the reagents have different molar masses and coefficients.

? Exercise 8.5.1

Given the initial amounts listed, what is the limiting reactant, and what is the mass of the leftover reactant?



Answer

H_2S is the limiting reagent; 1.5 g of MgO are left over.

8.5: Limiting Reactant, Theoretical Yield, and Percent Yield is shared under a [CC BY-NC-SA 4.0](#) license and was authored, remixed, and/or curated by LibreTexts.

- 8.6: Limiting Reactant and Theoretical Yield by Henry Agnew, Marisa Alviar-Agnew, Sarick Shah is licensed [CC BY-NC-SA 3.0](#).



8.6: Limiting Reactant, Theoretical Yield, and Percent Yield from Initial Masses of Reactants

Template:HideTOC

Learning Objectives

- Calculate percentage or actual yields from known amounts of reactants.

The world of pharmaceutical production is an expensive one. Many drugs have several steps in their synthesis and use costly chemicals. A great deal of research takes place to develop better ways to make drugs faster and more efficiently. Studying how much of a compound is produced in any given reaction is an important part of cost control.

Percent Yield

Chemical reactions in the real world don't always go exactly as planned on paper. In the course of an experiment, many things will contribute to the formation of less product than predicted. Besides spills and other experimental errors, there are usually losses due to an incomplete reaction, undesirable side reactions, etc. Chemists need a measurement that indicates how successful a reaction has been. This measurement is called the percent yield.

To compute the percent yield, it is first necessary to determine how much of the product should be formed based on stoichiometry. This is called the **theoretical yield**, the maximum amount of product that can be formed from the given amounts of reactants. The **actual yield** is the amount of product that is actually formed when the reaction is carried out in the laboratory. The **percent yield** is the ratio of the actual yield to the theoretical yield, expressed as a percentage.

$$\text{Percent Yield} = \frac{\text{Actual Yield}}{\text{Theoretical Yield}} \times 100\%$$

Percent yield is very important in the manufacture of products. Much time and money is spent improving the percent yield for chemical production. When complex chemicals are synthesized by many different reactions, one step with a low percent yield can quickly cause a large waste of reactants and unnecessary expense.

Typically, percent yields are understandably less than 100% because of the reasons indicated earlier. However, percent yields greater than 100% are possible if the measured product of the reaction contains impurities that cause its mass to be greater than it actually would be if the product was pure. When a chemist synthesizes a desired chemical, he or she is always careful to purify the products of the reaction. Example 8.6.1 illustrates the steps for determining percent yield.

✓ Example 8.6.1: Decomposition of Potassium Chlorate

Potassium chlorate decomposes upon slight heating in the presence of a catalyst, according to the reaction below:



In a certain experiment, 40.0 g KClO_3 is heated until it completely decomposes. The experiment is performed and the oxygen gas is collected and its mass is found to be 14.9 g

- What is the theoretical yield of oxygen gas?
- What is the percent yield for the reaction?

Solution

a. Calculation of theoretical yield

First, we will calculate the theoretical yield based on the stoichiometry.

Step 1: Identify the "given" information and what the problem is asking you to "find".

Given: Mass of $\text{KClO}_3 = 40.0 \text{ g}$

Mass of O_2 collected = 14.9g

Find: Theoretical yield, g O_2

Step 2: List other known quantities and plan the problem.

1 mol $\text{KClO}_3 = 122.55 \text{ g/mol}$

1 mol $\text{O}_2 = 32.00 \text{ g/mol}$

Step 3: Apply stoichiometry to convert from the mass of a reactant to the mass of a product:



Step 4: Solve.

$$40.0 \text{ g KClO}_3 \times \frac{1 \text{ mol KClO}_3}{122.55 \text{ g KClO}_3} \times \frac{3 \text{ mol O}_2}{2 \text{ mol KClO}_3} \times \frac{32.00 \text{ g O}_2}{1 \text{ mol O}_2} = 15.7 \text{ g O}_2$$

The theoretical yield of O₂ is 15.7 g 15.67 g unrounded.

Step 5: Think about your result.

The mass of oxygen gas must be less than the 40.0 g of potassium chlorate that was decomposed.

b. Calculation of percent yield

Now we will use the actual yield and the theoretical yield to calculate the percent yield.

Step 1: Identify the "given" information and what the problem is asking you to "find".

Given: Theoretical yield = 15.67 g, use the un-rounded number for the calculation.

Actual yield = 14.9g

Find: Percent yield, % Yield

Step 2: List other known quantities and plan the problem.

No other quantities needed.

Step 3: Use the percent yield equation below.

$$\text{Percent Yield} = \frac{\text{Actual Yield}}{\text{Theoretical Yield}} \times 100\%$$

Step 4: Solve.

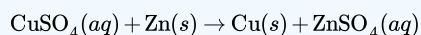
$$\text{Percent Yield} = \frac{14.9 \text{ g}}{15.67 \text{ g}} \times 100\% = 94.9\%$$

Step 5: Think about your result.

Since the actual yield is slightly less than the theoretical yield, the percent yield is just under 100%.

✓ Example 8.6.2: Oxidation of Zinc

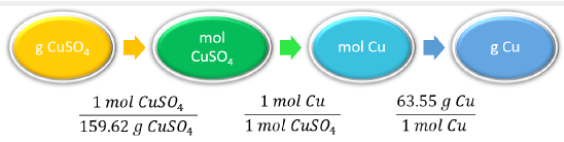
Upon reaction of 1.274 g of copper sulfate with excess zinc metal, 0.392 g copper metal was obtained according to the equation:



What is the percent yield?

Solution

Solutions to Example 8.6.2

Steps for Problem Solving-The Product Method	Example 8.6.1
Identify the "given" information and what the problem is asking you to "find."	Given: 1.274 g CuSO ₄ Actual yield = 0.392 g Cu Find: Percent yield
List other known quantities.	1 mol CuSO ₄ = 159.62 g/mol 1 mol Cu = 63.55 g/mol Since the amount of product in grams is not required, only the molar mass of the reactants is needed.
Balance the equation.	The chemical equation is already balanced. The balanced equation provides the relationship of 1 mol CuSO ₄ to 1 mol Zn to 1 mol Cu to 1 mol ZnSO ₄ .
Prepare a concept map and use the proper conversion factor.	 <p>The provided information identifies copper sulfate as the limiting reactant, and so the theoretical yield (g Cu) is found by performing mass-mass calculation based on the initial amount of CuSO₄.</p>

Steps for Problem Solving-The Product Method

Example 8.6.1

Cancel units and calculate.

Think about your result.

$$1.274 \text{ g } \cancel{\text{CuSO}_4} \times \frac{1 \text{ mol } \cancel{\text{CuSO}_4}}{159.62 \text{ g } \cancel{\text{CuSO}_4}} \times \frac{1 \text{ mol } \cancel{\text{Cu}}}{1 \text{ mol } \cancel{\text{CuSO}_4}} \times \frac{63.55 \text{ g Cu}}{1 \text{ mol } \cancel{\text{Cu}}} = 0.$$

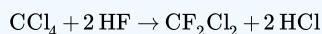
Using this theoretical yield and the provided value for actual yield, the percent yield is calculated to be:

$$\begin{aligned} \text{percent yield} &= \left(\frac{\text{actual yield}}{\text{theoretical yield}} \right) \times 100 \\ &= \left(\frac{0.392 \text{ g Cu}}{0.5072 \text{ g Cu}} \right) \times 100 \\ &= 77.3\% \end{aligned}$$

Since the actual yield is slightly less than the theoretical yield, the percent yield is just under 100%.

? Exercise 8.6.1

What is the percent yield of a reaction that produces 12.5 g of the Freon CF_2Cl_2 from 32.9 g of CCl_4 and excess HF ?



Answer

48.3%

Summary

Theoretical yield is calculated based on the stoichiometry of the chemical equation. The actual yield is experimentally determined. The percent yield is determined by calculating the ratio of actual yield to theoretical yield.

8.6: Limiting Reactant, Theoretical Yield, and Percent Yield from Initial Masses of Reactants is shared under a [CC BY-NC-SA 4.0](#) license and was authored, remixed, and/or curated by LibreTexts.

- 8.7: Limiting Reactant, Theoretical Yield, and Percent Yield from Initial Masses of Reactants by Henry Agnew, Marisa Alviar-Agnew is licensed [CC BY-NC-SA 3.0](#).

8.7: Enthalpy- A Measure of the Heat Evolved or Absorbed in a Reaction

When physical or chemical changes occur, they are generally accompanied by a transfer of energy. The **law of conservation of energy** states that in any physical or chemical process, energy is neither created nor destroyed. In other words, the entire energy in the universe is conserved. In order to better understand the energy changes taking place during a reaction, we need to define two parts of the universe, called the system and the surroundings. The **system** is the specific portion of matter in a given space that is being studied during an experiment or an observation. The **surroundings** are everything in the universe that is not part of the system. In practical terms for a laboratory chemist, the system is the particular chemicals being reacted, while the surroundings is the immediate vicinity within the room. During most processes, energy is exchanged between the system and the surroundings. If the system loses a certain amount of energy, that same amount of energy is gained by the surroundings. If the system gains a certain amount of energy, that energy is supplied by the surroundings.

A chemical reaction or physical change is **endothermic** if heat is absorbed by the system from the surroundings. In the course of an endothermic process, the system gains heat from the surroundings and so the temperature of the surroundings decreases. The quantity of heat for a process is represented by the letter q . The sign of q for an endothermic process is positive because the system is gaining heat. A chemical reaction or physical change is **exothermic** if heat is released by the system into the surroundings. Because the surroundings are gaining heat from the system, the temperature of the surroundings increases. The sign of q for an exothermic process is negative because the system is losing heat.

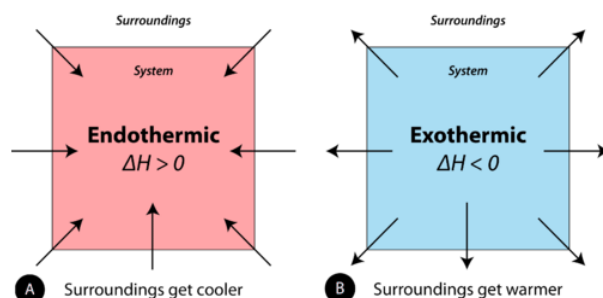


Figure 8.7.1: (A) Endothermic reaction. (B) Exothermic reaction.

Enthalpy

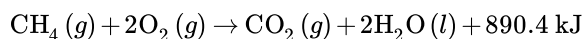
Heat changes in chemical reactions are often measured in the laboratory under conditions in which the reacting system is open to the atmosphere. In that case, the system is at a constant pressure. **Enthalpy** (H) is the heat content of a system at constant pressure. Chemists routinely measure changes in enthalpy of chemical systems as reactants are converted into products. The heat that is absorbed or released by a reaction at constant pressure is the same as the enthalpy change, and is given the symbol ΔH . Unless otherwise specified, all reactions in this material are assumed to take place at constant pressure.

The change in enthalpy of a reaction is a measure of the differences in enthalpy of the reactants and products. The enthalpy of a system is determined by the energies needed to break chemical bonds and the energies needed to form chemical bonds. Energy needs to be put into the system in order to break chemical bonds, as they do not come apart spontaneously in most cases. Bond formation to produce products will involve release of energy. The change in enthalpy shows the trade-offs made in these two processes. Does it take more energy to break bonds than that needed to form bonds? If so, the reaction is endothermic and the enthalpy change is positive. If more energy is produced in bond formation than that needed for bond breaking, the reaction is exothermic and the enthalpy is negative.

Several factors influence the enthalpy of a system. Enthalpy is an extensive property, determined in part by the amount of material we work with. The state of reactants and products (solid, liquid, or gas) influences the enthalpy value for a system. The direction of the reaction affects the enthalpy value. A reaction that takes place in the opposite direction has the same numerical enthalpy value, but the opposite sign.

Thermochemical Equation

When methane gas is combusted, heat is released, making the reaction exothermic. Specifically, the combustion of 1 mol of methane releases 890.4 kilojoules of heat energy. This information can be shown as part of the balanced equation:



The equation tells us that 1 mol of methane combines with 2 mol of oxygen to produce 1 mol of carbon dioxide and 2 mol of water. In the process, 890.4 kJ is released and so it is written as a product of the reaction. A **thermochemical equation** is a chemical equation that includes the enthalpy change of the reaction. The process in the above thermochemical equation can be shown visually in Figure 8.7.2.

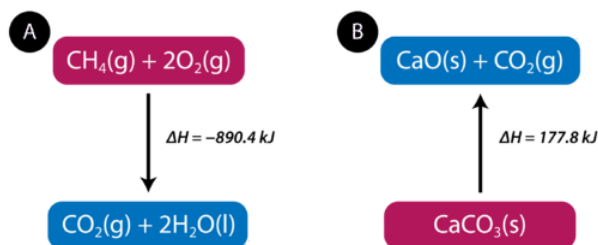
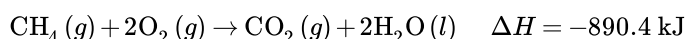


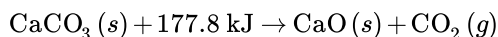
Figure 8.7.2: (A) As reactants are converted to products in an exothermic reaction, enthalpy is released into the surroundings. The enthalpy change of the reaction is negative. (B) As reactants are converted to products in an endothermic reaction, enthalpy is absorbed from the surroundings. The enthalpy change of the reaction is positive.

In the combustion of methane example, the enthalpy change is negative because heat is being released by the system. Therefore, the overall enthalpy of the system decreases. The **heat of reaction** is the enthalpy change for a chemical reaction. In the case above, the heat of reaction is -890.4 kJ . The thermochemical reaction can also be written in this way:

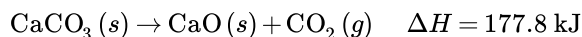


Heats of reaction are typically measured in kilojoules. It is important to include the physical states of the reactants and products in a thermochemical equation as the value of the ΔH depends on those states.

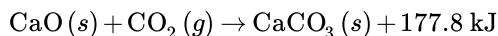
Endothermic reactions absorb energy from the surroundings as the reaction occurs. When 1 mol of calcium carbonate decomposes into 1 mol of calcium oxide and 1 mol of carbon dioxide, 177.8 kJ of heat is absorbed. The process is shown visually in Figure 8.7.2B. The thermochemical reaction is shown below.



Because the heat is absorbed by the system, the 177.8 kJ is written as a reactant. The heat of reaction is positive for an endothermic reaction.



The way in which a reaction is written influences the value of the enthalpy change for the reaction. Many reactions are reversible, meaning that the product(s) of the reaction are capable of combining and reforming the reactant(s). If a reaction is written in the reverse direction, the sign of the ΔH changes. For example, we can write an equation for the reaction of calcium oxide with carbon dioxide to form calcium carbonate.



The reaction is exothermic and thus the sign of the enthalpy change is negative.

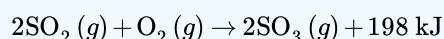


Stoichiometric Calculations and Enthalpy Changes

Chemistry problems that involve enthalpy changes can be solved by techniques similar to stoichiometry problems. Refer again to the combustion reaction of methane. Since the reaction of 1 mol of methane released 890.4 kJ, the reaction of 2 mol of methane would release $2 \times 890.4 \text{ kJ} = 1781 \text{ kJ}$. The reaction of 0.5 mol of methane would release $\frac{890.4 \text{ kJ}}{2} = 445.2 \text{ kJ}$. As with other stoichiometry problems, the moles of a reactant or product can be linked to mass or volume.

✓ Example 8.7.1

Sulfur dioxide gas reacts with oxygen to form sulfur trioxide in an exothermic reaction, according to the following thermochemical equation.



Calculate the enthalpy change that occurs when 58.0 g of sulfur dioxide is reacted with excess oxygen.

Solution

Step 1: List the known quantities and plan the problem.

- Mass $\text{SO}_2 = 58.0 \text{ g}$
- Molar mass $\text{SO}_2 = 64.07 \text{ g/mol}$
- $\Delta H = -198 \text{ kJ}$ for the reaction of 2 mol SO_2

Unknown

- $\Delta H = ? \text{ kJ}$

The calculation requires two steps. The mass of SO_2 is converted to moles. Then the moles of SO_2 is multiplied by the conversion factor of $\left(\frac{-198 \text{ kJ}}{2 \text{ mol SO}_2}\right)$.

Step 2: Solve.

$$\Delta H = 58.0 \text{ g SO}_2 \times \frac{1 \text{ mol SO}_2}{64.07 \text{ g SO}_2} \times \frac{-198 \text{ kJ}}{2 \text{ mol SO}_2} = 89.6 \text{ kJ}$$

Step 3: Think about your result.

The mass of sulfur dioxide is slightly less than 1 mol. Since 198 kJ is released for every 2 mol of SO_2 that reacts, the heat released when about 1 mol reacts is one half of 198. The 89.6 kJ is slightly less than half of 198. The sign of ΔH is negative because the reaction is exothermic.

8.7: Enthalpy- A Measure of the Heat Evolved or Absorbed in a Reaction is shared under a CC BY-NC-SA 4.0 license and was authored, remixed, and/or curated by LibreTexts.

- **8.8: Enthalpy Change is a Measure of the Heat Evolved or Absorbed** by Henry Agnew, Marisa Alviar-Agnew is licensed CK-12. Original source: <https://www.ck12.org/c/chemistry/>.

CHAPTER OVERVIEW

9: Electrons in Atoms and the Periodic Table

Atoms act the way they do because of their structure. We already know that atoms are composed of protons, neutrons, and electrons. Protons and neutrons are located in the nucleus, and electrons orbit around the nucleus. But we need to know the structural details to understand why atoms react the way they do. Virtually everything we know about atoms ultimately comes from light. Before we can understand the composition of atoms (especially electrons), we need to understand the properties of light.

[9.1: Blimps, Balloons, and Models of the Atom](#)

[9.2: Light- Electromagnetic Radiation](#)

[9.3: The Electromagnetic Spectrum](#)

[9.4: The Bohr Model- Atoms with Orbits](#)

[9.5: The Quantum-Mechanical Model- Atoms with Orbitals](#)

[9.6: Quantum-Mechanical Orbitals and Electron Configurations](#)

[9.7: Electron Configurations and the Periodic Table](#)

[9.8: The Explanatory Power of the Quantum-Mechanical Model](#)

[9.9: Periodic Trends- Atomic Size, Ionization Energy, and Metallic Character](#)

9: Electrons in Atoms and the Periodic Table is shared under a [CC BY-NC-SA 4.0](#) license and was authored, remixed, and/or curated by LibreTexts.

9.1: Blimps, Balloons, and Models of the Atom

[Template:HideTOC](#)

Contributions & Attributions

9.1: Blimps, Balloons, and Models of the Atom is shared under a [CC BY-NC-SA 4.0](#) license and was authored, remixed, and/or curated by LibreTexts.

- **9.1: Blimps, Balloons, and Models of the Atom** by Henry Agnew, Marisa Alviar-Agnew is licensed [CK-12](#). Original source: <https://www.ck12.org/c/chemistry/>.

9.2: Light- Electromagnetic Radiation

Template:HideTOC

Learning Objectives

- Define the terms wavelength and frequency with respect to wave-form energy.
- State the relationship between wavelength and frequency with respect to electromagnetic radiation.

During the summer, almost everyone enjoys going to the beach. Beach-goers can swim, have picnics, and work on their tans. But if a person gets too much sun, they can burn. A particular set of solar wavelengths are especially harmful to the skin. This portion of the solar spectrum is known as UV B, with wavelengths of 280-320 nm. Sunscreens are effective in protecting skin against both the immediate skin damage and the long-term possibility of skin cancer.

Waves

Waves are characterized by their repetitive motion. Imagine a toy boat riding the waves in a wave pool. As the water wave passes under the boat, it moves up and down in a regular and repeated fashion. While the wave travels horizontally, the boat only travels vertically up and down. The figure below shows two examples of waves.

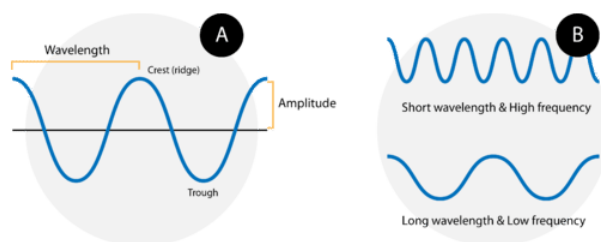


Figure 9.2.1: (A) A wave consists of alternating crests and troughs. The wavelength (λ) is defined as the distance between any two consecutive identical points on the waveform. The amplitude is the height of the wave. (B) A wave with a short wavelength (top) has a high frequency because more waves pass a given point in a certain amount of time. A wave with a longer wavelength (bottom) has a lower frequency.

A wave cycle consists of one complete wave—starting at the zero point, going up to a wave **crest**, going back down to a wave **trough**, and back to the zero point again. The **wavelength** of a wave is the distance between any two corresponding points on adjacent waves. It is easiest to visualize the wavelength of a wave as the distance from one wave crest to the next. In an equation, wavelength is represented by the Greek letter lambda (λ). Depending on the type of wave, wavelength can be measured in meters, centimeters, or nanometers ($1 \text{ m} = 10^9 \text{ nm}$). The **frequency**, represented by the Greek letter nu (ν), is the number of waves that pass a certain point in a specified amount of time. Typically, frequency is measured in units of cycles per second or waves per second. One wave per second is also called a Hertz (Hz) and in SI units is a reciprocal second (s^{-1}).

Figure B above shows an important relationship between the wavelength and frequency of a wave. The top wave clearly has a shorter wavelength than the second wave. However, if you picture yourself at a stationary point watching these waves pass by, more waves of the first kind would pass by in a given amount of time. Thus the frequency of the first wave is greater than that of the second wave. Wavelength and frequency are therefore inversely related. As the wavelength of a wave increases, its frequency decreases. The equation that relates the two is:

$$c = \lambda \nu$$

The variable c is the speed of light. For the relationship to hold mathematically, if the speed of light is used in m/s, the wavelength must be in meters and the frequency in Hertz.

✓ Example 9.2.1: Orange Light

The color orange within the visible light spectrum has a wavelength of about 620 nm. What is the frequency of orange light?

Solution

Solutions to Example 9.2.1

Steps for Problem Solving

Example 9.2.1

Steps for Problem Solving

Example 9.2.1

Identify the "given" information and what the problem is asking you to "find."

Given :

- Wavelength (λ) = 620 nm
- Speed of light (c) = 3.00×10^8 m/s

Find: Frequency (Hz)

List other known quantities.

$$1 \text{ m} = 10^9 \text{ nm}$$

Identify steps to get the final answer.

1. Convert the wavelength to m.
2. Apply the equation $c = \lambda\nu$ and solve for frequency. Dividing both sides of the equation by λ yields:

$$\nu = \frac{c}{\lambda}$$

Cancel units and calculate.

$$620 \text{ nm} \times \left(\frac{1 \text{ m}}{10^9 \text{ nm}} \right) = 6.20 \times 10^{-7} \text{ m}$$

$$\nu = \frac{c}{\lambda} = \frac{3.0 \times 10^8 \text{ m/s}}{6.20 \times 10^{-7}} = 4.8 \times 10^{14} \text{ Hz}$$

Think about your result.

The value for the frequency falls within the range for visible light.

? Exercise 9.2.1

What is the wavelength of light if its frequency is $1.55 \times 10^{10} \text{ s}^{-1}$?

Answer

0.0194 m, or 19.4 mm

Summary

All waves can be defined in terms of their frequency and intensity. $c = \lambda\nu$ expresses the relationship between wavelength and frequency.

9.2: Light- Electromagnetic Radiation is shared under a [CC BY-NC-SA 4.0](https://creativecommons.org/licenses/by-nc-sa/4.0/) license and was authored, remixed, and/or curated by LibreTexts.

- **9.2: Light- Electromagnetic Radiation** by Henry Agnew, Marisa Alviar-Agnew is licensed [CC-12](https://creativecommons.org/licenses/by-nc-sa/4.0/). Original source: <https://www.ck12.org/c/chemistry/>.

9.3: The Electromagnetic Spectrum

Template:HideTOC

Learning Objectives

- Know the properties of different types of electromagnetic radiation.

Electromagnetic waves have an extremely wide range of wavelengths, frequencies, and energies. The highest energy form of electromagnetic waves are gamma (γ) rays and the lowest energy form are radio waves.

The figure below shows the **electromagnetic spectrum**, which is all forms of electromagnetic radiation. On the far left of Figure 9.3.1 are the highest energy electromagnetic waves. These are called **gamma rays** and can be quite dangerous, in large numbers, to living systems. The next lower energy form of electromagnetic waves are called **x-rays**. Most of you are familiar with the penetration abilities of these waves. They can also be dangerous to living systems. Humans are advised to limit as much as possible the number of medical x-rays they have per year. Next lower, in energy, are **ultraviolet rays**. These rays are part of sunlight and the upper end of the ultraviolet range can cause sunburn and perhaps skin cancer. The tiny section next in the spectrum is the **visible range of light**. The visible light spectrum has been greatly expanded in the bottom half of the figure so that it can be discussed in more detail. The visible range of electromagnetic radiation are the frequencies to which the human eye responds. Lower in the spectrum are infrared rays and radio waves.

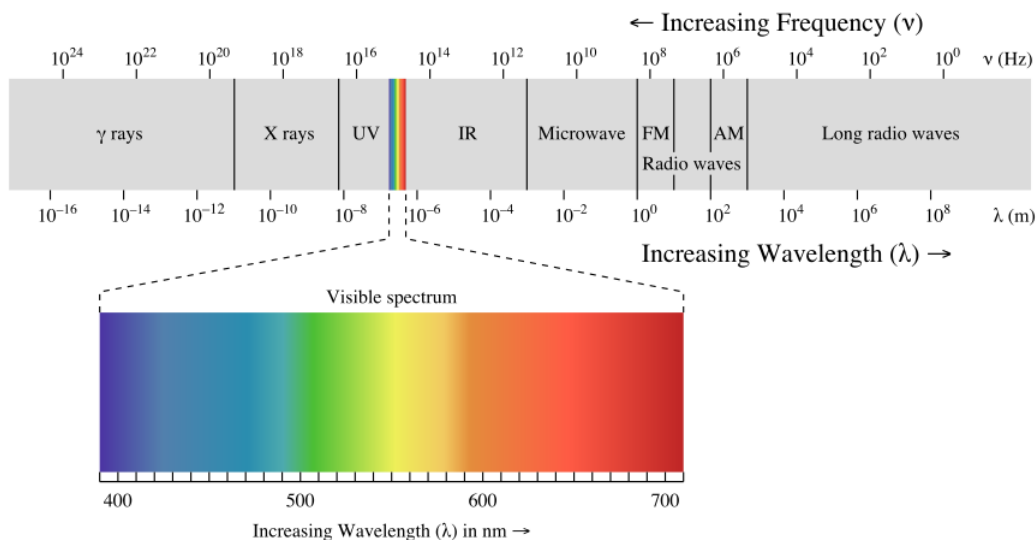


Figure 9.3.1: The electromagnetic spectrum, with its various regions labeled. The borders of each region are approximate. (CC BY-NC-SA; anonymous by request).

The light energies that are in the visible range are electromagnetic waves that cause the human eye to respond when those frequencies enter the eye. The eye sends a signal to the brain and the individual "sees" various colors. The highest energy waves in the visible region cause the brain to see violet and as the energy decreases, the colors change to blue, green, yellow, orange, and red. When the energy of the wave is above or below the visible range, the eye does not respond to them. When the eye receives several different frequencies at the same time, the colors are blended by the brain. If all frequencies of light strike the eye together, the brain sees white. If there are no visible frequencies striking the eye, the brain sees black. The objects that you see around you are light absorbers—that is, the chemicals on the surface of the object will absorb certain frequencies and not others. Your eyes detect the frequencies that strike your eye. Therefore, if your friend is wearing a red shirt, it means the dye in that shirt absorbs every frequency except red and the red frequencies are reflected. If your only light source was one exact frequency of blue light and you shined it on a shirt that was red in sunlight, the shirt would appear black because no light would be reflected. The light from fluorescent types of lights do not contain all the frequencies of sunlight and so clothes inside a store may appear to be a slightly different color when you get them home.

Summary

- Electromagnetic radiation has a wide spectrum, including gamma rays, X-rays, UV rays, visible light, IR radiation, microwaves, and radio waves.
- The different colors of light differ in their frequencies (or wavelengths).

9.3: The Electromagnetic Spectrum is shared under a [CC BY-NC-SA 4.0](#) license and was authored, remixed, and/or curated by LibreTexts.

- [9.3: The Electromagnetic Spectrum](#) by Henry Agnew, Marisa Alviar-Agnew is licensed [CC BY-NC-SA 3.0](#).

9.4: The Bohr Model- Atoms with Orbits

Template:HideTOC

Learning Objectives

- Define an energy level in terms of the Bohr model.
- Discuss how the Bohr model can be used to explain atomic spectra.

Electric light bulbs contain a very thin wire in them that emits light when heated. The wire is called a filament. The particular wire used in light bulbs is made of tungsten. A wire made of any metal would emit light under these circumstances, but tungsten was chosen because the light it emits contains virtually every frequency and therefore, the light emitted by tungsten appears white. A wire made of some other element would emit light of some color that was not convenient for our uses. Every element emits light when energized by heating or passing electric current through it. Elements in solid form begin to glow when they are heated sufficiently, and elements in gaseous form emit light when electricity passes through them. This is the source of light emitted by neon signs and is also the source of light in a fire.



Figure 9.4.1: Human/Need/Desire. Neon sculpture by Bruce Nauman (1983), who has been characterized as a conceptual artist.

Each Element Has a Unique Spectrum

The light frequencies emitted by atoms are mixed together by our eyes so that we see a blended color. Several physicists, including Angstrom in 1868 and Balmer in 1875, passed the light from energized atoms through glass prisms in such a way that the light was spread out so they could see the individual frequencies that made up the light. The **emission spectrum** (or **atomic spectrum**) of a chemical element is the unique pattern of light obtained when the element is subjected to heat or electricity.



Figure 9.4.2: Atomic Emission Spectrum of Hydrogen.

When hydrogen gas is placed into a tube and electric current passed through it, the color of emitted light is pink. But when the color is spread out, we see that the hydrogen spectrum is composed of four individual frequencies. The pink color of the tube is the result of our eyes blending the four colors. Every atom has its own characteristic spectrum; no two atomic spectra are alike. The image below shows the emission spectrum of iron. Because each element has a unique emission spectrum, elements can be defined using them.




Figure 9.4.3: Atomic Emission Spectrum of Iron.

You may have heard or read about scientists discussing what elements are present in the sun or some more distant star, and after hearing that, wondered how scientists could know what elements were present in a place no one has ever been. Scientists determine what elements are present in distant stars by analyzing the light that comes from stars and finding the atomic spectrum of elements in that light. If the exact four lines that compose hydrogen's atomic spectrum are present in the light emitted from the star, that element contains hydrogen.

Bohr's Model of the Atom

By 1913, the concept of the atom had evolved from Dalton's indivisible spheres idea, to J. J. Thomson's plum pudding model, and then to Rutherford's nuclear atom theory. Rutherford, in addition to carrying out the brilliant experiment that demonstrated the presence of the atomic nucleus, also proposed that the electrons circled the nucleus in a planetary type motion. The solar system or planetary model of the atom was attractive to scientists because it was similar to something with which they were already familiar, namely the solar system.



Figure 9.4.3: Niels Bohr with Albert Einstein at Paul Ehrenfest's home in Leiden (December 1925).

Unfortunately, there was a serious flaw in the planetary model. It was already known that when a charged particle (such as an electron) moves in a curved path, it gives off some form of light and loses energy in doing so. This is, after all, how we produce TV signals. If the electron circling the nucleus in an atom loses energy, it would necessarily have to move closer to the nucleus as it loses energy, and would eventually crash into the nucleus. Furthermore, Rutherford's model was unable to describe how electrons give off light forming each element's unique atomic spectrum. These difficulties cast a shadow on the planetary model and indicated that, eventually, it would have to be replaced.

In 1913, the Danish physicist Niels Bohr proposed a model of the electron cloud of an atom in which electrons orbit the nucleus and were able to produce atomic spectra. Understanding Bohr's model requires some knowledge of electromagnetic radiation (or light).

Energy Levels

Bohr's key idea in his model of the atom is that electrons occupy definite orbitals that require the electron to have a specific amount of energy. In order for an electron to be in the electron cloud of an atom, it must be in one of the allowable orbitals and it must have the precise energy required for that orbit. Orbits closer to the nucleus would require smaller amounts of energy for an electron, and orbits farther from the nucleus would require the electron to have a greater amount of energy. The possible orbits are known as **energy levels**. One of the weaknesses of Bohr's model was that he could not offer a reason why only certain energy levels or orbits were allowed.

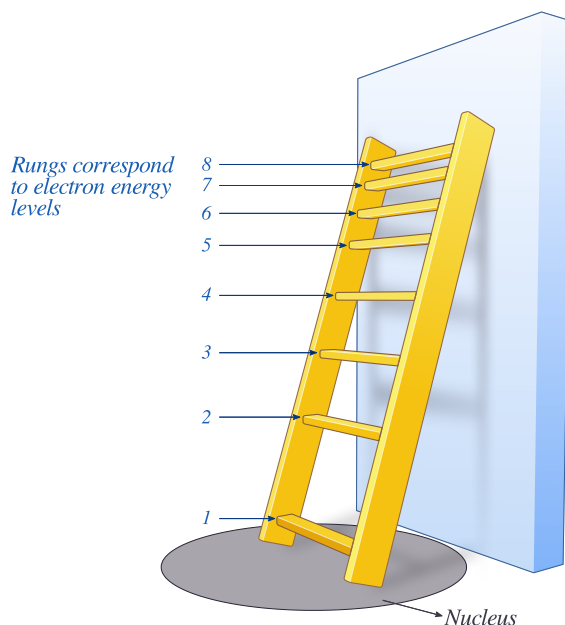


Figure 9.4.4: The energy levels of the electrons can be viewed as rungs on a ladder. Note that the spacing between rungs gets smaller at higher energies (CC BY-NC; Ümit Kaya)

Bohr hypothesized that the only way electrons could gain or lose energy would be to move from one energy level to another, thus gaining or losing precise amounts of energy. The energy levels are **quantized**, meaning that only specific amounts are possible. It would be like a ladder that had rungs only at certain heights. The only way you can be on that ladder is to be on one of the rungs, and the only way you could move up or down would be to move to one of the other rungs. Suppose we had such a ladder with 10 rungs. Other rules for the ladder are that only one person can be on a rung in the normal state, and the ladder occupants must be on the lowest rung available. If the ladder had five people on it, they would be on the lowest five rungs. In this situation, no person could move down because all of the lower rungs are full. Bohr worked out rules for the maximum number of electrons that could be in each energy level in his model, and required that an atom in its normal state (ground state) had all electrons in the lowest energy levels available. Under these circumstances, no electron could lose energy because no electron could move down to a lower energy level. In this way, Bohr's model explained why electrons circling the nucleus did not emit energy and spiral into the nucleus.

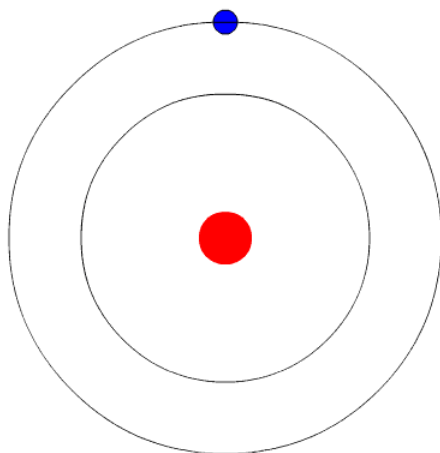


Figure 9.4.5: In Bohr's Model of the atom, electrons absorb energy to move to a higher level and release energy to move to lower levels. (CC BY-SA 3.0; Kurzon).

Bohr's Model and Atomic Spectra

The evidence used to support Bohr's model came from the atomic spectra. He suggested that an atomic spectrum is made by the electrons in an atom moving energy levels. The electrons typically have the lowest energy possible, called the **ground state**. If the electrons are given energy (through heat, electricity, light, etc.) the electrons in an atom could absorb energy by jumping to a higher energy level, or **excited state**. The electrons then give off the energy in the form of a piece of light—called a **photon**—that they had absorbed, to fall back to a lower energy level. The energy emitted by electrons dropping back to lower energy levels will always be precise amounts of energy, because the differences in energy levels are precise. This explains why you see specific lines of light when looking at an atomic spectrum—each line of light matches a specific "step down" that an electron can take in that atom. This also explains why each element produces a different atomic spectrum. Because each element has different acceptable energy levels for its electrons, the possible steps each element's electrons can take differ from all other elements.

Summary

- Bohr's model suggests each atom has a set of unchangeable energy levels, and electrons in the electron cloud of that atom must be in one of those energy levels.
- Bohr's model suggests that the atomic spectra of atoms is produced by electrons gaining energy from some source, jumping up to a higher energy level, then immediately dropping back to a lower energy level and emitting the energy difference between the two energy levels.
- The existence of the atomic spectra is support for Bohr's model of the atom.
- Bohr's model was only successful in calculating energy levels for the hydrogen atom.

Vocabulary

- **Emission spectrum (or atomic spectrum)** - The unique pattern of light given off by an element when it is given energy.
- **Energy levels** - Possible orbits that an electron can have in the electron cloud of an atom.
- **Ground state** - To be in the lowest energy level possible.
- **Excited state** - To be in a higher energy level.
- **Photon** - A piece of electromagnetic radiation, or light, with a specific amount of energy.
- **Quantized** - To have a specific amount.

9.4: The Bohr Model- Atoms with Orbits is shared under a [CC BY-NC-SA 4.0](#) license and was authored, remixed, and/or curated by LibreTexts.

- **9.4: The Bohr Model - Atoms with Orbits** by Henry Agnew, Marisa Alviar-Agnew is licensed [CK-12](#). Original source: <https://www.ck12.org/c/chemistry/>.

9.5: The Quantum-Mechanical Model- Atoms with Orbitals

Template:HideTOC

Learning Objectives

- Define quantum mechanics
- Differentiate between an orbit and an orbital.

How do you study something that seemingly makes no sense? We talk about electrons being in orbits and it sounds like we can tell where that electron is at any moment. We can draw pictures of electrons in orbit, but the reality is that we don't know exactly where they are. We are going to take a look at an area of science that even leaves scientists puzzled. When asked about quantum mechanics, Niels Bohr (who proposed the Bohr model of the atom) said: "Anyone who is not shocked by quantum theory has not understood it". Richard Feynman (one of the founders of modern quantum theory) stated: "I think I can safely say that nobody understands quantum theory." So, let's take a short trip into a land that challenges our everyday world.

Quantum Mechanics

The study of motion of large objects such as baseballs is called mechanics, or more specifically, classical mechanics. Because of the quantum nature of the electron and other tiny particles moving at high speeds, classical mechanics is inadequate to accurately describe their motion. **Quantum mechanics** is the study of the motion of objects that are atomic or subatomic in size and thus demonstrate wave-particle duality. In classical mechanics, the size and mass of the objects involved effectively obscures any quantum effects, so that such objects appear to gain or lose energies in any amounts. Particles whose motion is described by quantum mechanics gain or lose energy in small pieces called **quanta**.

One of the fundamental (and hardest to understand) principles of quantum mechanics is that the electron is both a particle and a wave. In the everyday macroscopic world of things we can see, something cannot be both. But this duality can exist in the quantum world of the submicroscopic on the atomic scale.

At the heart of quantum mechanics is the idea that we cannot accurately specify the location of an electron. All we can say is that there is a probability that it exists within this certain volume of space. The scientist Erwin Schrödinger developed an equation that deals with these calculations, which we will not pursue at this time.



Erwin Schrödinger.

Recall that in the Bohr model, the exact path of the electron was restricted to very well-defined circular **orbits** around the nucleus. An **orbital** is the quantum mechanical refinement of Bohr's orbit. In contrast to his concept of a simple circular orbit with a fixed radius, orbitals are mathematically derived regions of space with different *probabilities* of having an electron.

Summary

Quantum mechanics involves the study of material at the atomic level. This field deals with probabilities, since we cannot definitely locate a particle. Orbitals are mathematically derived regions of space with different *probabilities* of having an electron.

9.5: The Quantum-Mechanical Model- Atoms with Orbitals is shared under a [CC BY-NC-SA 4.0](#) license and was authored, remixed, and/or curated by LibreTexts.

- **9.5: The Quantum-Mechanical Model- Atoms with Orbitals** by Henry Agnew, Marisa Alviar-Agnew is licensed [CK-12](#). Original source: <https://www.ck12.org/c/chemistry/>.

9.6: Quantum-Mechanical Orbitals and Electron Configurations

Template:HideTOC

Learning Objectives

- Represent the organization of electrons by an electron configuration and orbital diagram.

The flight path of a commercial airliner is carefully regulated by the Federal Aviation Administration. Each airplane must maintain a distance of five miles from another plane flying at the same altitude and 2,000 feet above and below another aircraft (1,000 feet if the altitude is less than 29,000 feet). So, each aircraft only has certain positions it is allowed to maintain while it flies. As we explore quantum mechanics, we see that electrons have similar restrictions on their locations.

Orbitals

We can apply our knowledge of [quantum numbers](#) to describe the arrangement of electrons for a given atom. We do this with something called **electron configurations**. They are effectively a map of the electrons for a given atom. We look at the four quantum numbers for a given electron and then assign that electron to a specific orbital below.

s Orbitals

For any value of n , a value of $l = 0$ places that electron in an **s orbital**. This orbital is spherical in shape:

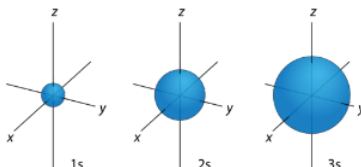


Figure 9.6.1: s orbitals have no orientational preference and resemble spheres.

p Orbitals

For the table below, we see that we can have three possible orbitals when $l = 1$. These are designated as **p orbitals** and have dumbbell shapes. Each of the p orbitals has a different orientation in three-dimensional space.

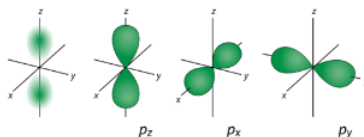


Figure 9.6.2: p orbitals have an orientational preference and resemble dumbbells.

d Orbitals

When $l = 2$, m_l values can be -2 , -1 , 0 , $+1$, $+2$ for a total of five **d orbitals**. Note that all five of the orbitals have specific three-dimensional orientations.

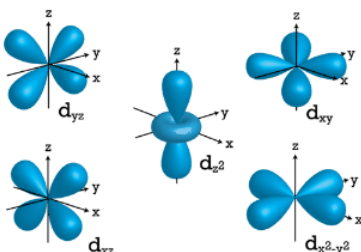


Figure 9.6.3: d orbitals have an orientational preference and exhibit complex structures.

f Orbitals

The most complex set of orbitals are the **f orbitals**. When $l = 3$, m_l values can be -3 , -2 , -1 , 0 , $+1$, $+2$, $+3$ for a total of seven different orbital shapes. Again, note the specific orientations of the different f orbitals.

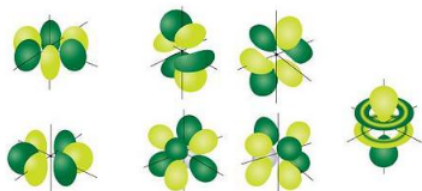


Figure 9.6.4: *f* orbitals have an orientational preference and exhibit quite complex structures.

Orbitals that have the same value of the principal quantum number form a **shell**. Orbitals within a shell are divided into **subshells** that have the same value of the angular quantum number. Some of the allowed combinations of quantum numbers are compared in Table 9.6.1.

Table 9.6.1: Electron Arrangement Within Energy Levels

Principal Quantum Number (n)	Allowable Sublevels	Number of Orbitals per Sublevel	Number of Orbitals per Principal Energy Level	Number of Electrons per Sublevel	Number of Electrons per Principal Energy Level
1	<i>s</i>	1	1	2	2
2	<i>s</i>	1	4	2	8
	<i>p</i>	3		6	
3	<i>s</i>	1	9	2	18
	<i>p</i>	3		6	
	<i>d</i>	5		10	
4	<i>s</i>	1	16	2	32
	<i>p</i>	3		6	
	<i>d</i>	5		10	
	<i>f</i>	7		14	

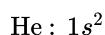
Electron Configurations

Can you name one thing that easily distinguishes you from the rest of the world? And we're not talking about DNA—that's a little expensive to sequence. For many people, it is their email address. Your email address allows people all over the world to contact you. It does not belong to anyone else, but serves to identify you. Electrons also have a unique set of identifiers in the quantum numbers that describe their location and spin. Chemists use an **electronic configuration** to represent the organization of electrons in shells and subshells in an atom. An electron configuration simply lists the shell and subshell labels, with a right superscript giving the number of electrons in that subshell. The shells and subshells are listed in the order of filling. Electrons are typically organized around an atom by starting at the lowest possible quantum numbers first, which are the shells-subshells with lower energies.

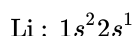
For example, an H atom has a single electron in the 1s subshell. Its electron configuration is



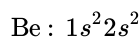
He has two electrons in the 1s subshell. Its electron configuration is



The three electrons for Li are arranged in the 1s subshell (two electrons) and the 2s subshell (one electron). The electron configuration of Li is



Be has four electrons, two in the 1s subshell and two in the 2s subshell. Its electron configuration is



Now that the 2s subshell is filled, electrons in larger atoms must go into the 2p subshell, which can hold a maximum of six electrons. The next six elements progressively fill up the 2p subshell:

- B: $1s^2 2s^2 2p^1$
- C: $1s^2 2s^2 2p^2$
- N: $1s^2 2s^2 2p^3$
- O: $1s^2 2s^2 2p^4$
- F: $1s^2 2s^2 2p^5$
- Ne: $1s^2 2s^2 2p^6$

Now that the 2p subshell is filled (all possible subshells in the $n = 2$ shell), the next electron for the next-larger atom must go into the $n = 3$ shell, s subshell.

Second Period Elements

Periods refer to the horizontal rows of the periodic table. Looking at a periodic table you will see that the first period contains only the elements hydrogen and helium. This is because the first principal energy level consists of only the s sublevel and so only two electrons are required in order to fill the entire principal energy level. Each time a new principal energy level begins, as with the third element lithium, a new period is started on the periodic table. As one moves across the second period, electrons are successively added. With beryllium ($Z = 4$), the $2s$ sublevel is complete and the $2p$ sublevel begins with boron ($Z = 5$). Since there are three $2p$ orbitals and each orbital holds two electrons, the $2p$ sublevel is filled after six elements. Table 9.6.1 shows the electron configurations of the elements in the second period.

Table 9.6.2: Electron Configurations of Second-Period Elements

Element Name	Symbol	Atomic Number	Electron Configuration
Lithium	Li	3	$1s^2 2s^1$
Beryllium	Be	4	$1s^2 2s^2$
Boron	B	5	$1s^2 2s^2 2p^1$
Carbon	C	6	$1s^2 2s^2 2p^2$
Nitrogen	N	7	$1s^2 2s^2 2p^3$
Oxygen	O	8	$1s^2 2s^2 2p^4$
Fluorine	F	9	$1s^2 2s^2 2p^5$
Neon	Ne	10	$1s^2 2s^2 2p^6$

Aufbau Principle

Construction of a building begins at the bottom. The foundation is laid and the building goes up step by step. You obviously cannot start with the roof since there is no place to hang it. The building goes from the lowest level to the highest level in a systematic way. In order to create ground state electron configurations for any element, it is necessary to know the way in which the atomic sublevels are organized in order of increasing energy. Figure 9.6.5 shows the order of increasing energy of the sublevels.

The lowest energy sublevel is always the $1s$ sublevel, which consists of one orbital. The single electron of the hydrogen atom will occupy the $1s$ orbital when the atom is in its ground state. As we proceed with atoms with multiple electrons, those electrons are added to the next lowest sublevel: $2s$, $2p$, $3s$, and so on. The **Aufbau principle** states that an electron occupies orbitals in order from lowest energy to highest. The Aufbau (German: "building up, construction") principle is sometimes referred to as the "building up" principle. It is worth noting that in reality atoms are not built by adding protons and electrons one at a time, and that this method is merely an aid for us to understand the end result.

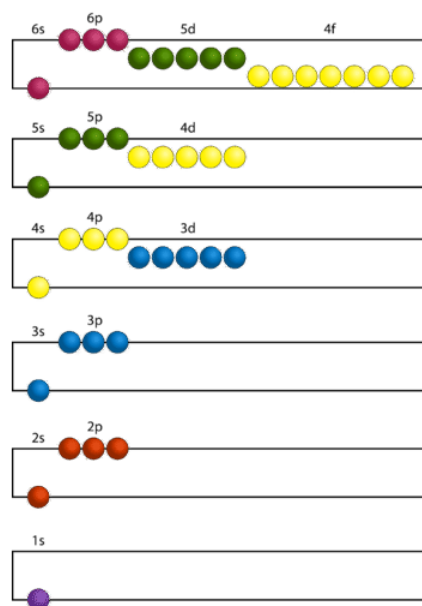


Figure 9.6.5: Electrons are added to atomic orbitals in order from low energy (bottom of the graph) to high (top of the graph) according to the Aufbau principle. Principle energy levels are color coded, while sublevels are grouped together and each circle represents an orbital capable of holding two electrons.

As seen in the figure above, the energies of the sublevels in different principal energy levels eventually begin to overlap. After the $3p$ sublevel, it would seem logical that the $3d$ sublevel should be the next lowest in energy. However, the $4s$ sublevel is slightly lower in energy than the $3d$ sublevel and thus fills first. Following the filling of the $3d$ sublevel is the $4p$, then the $5s$ and the $4d$. Note that the $4f$ sublevel does not fill until just after the $6s$ sublevel. Figure 9.6.6 is a useful and simple aid for keeping track of the order of fill of the atomic sublevels.

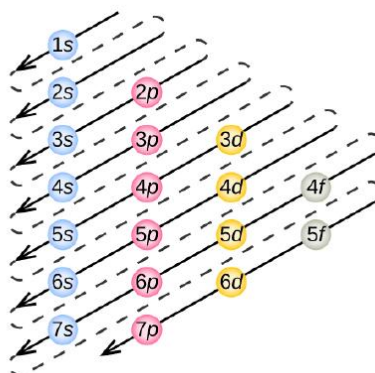


Figure 9.6.6: The arrow leads through each subshell in the appropriate filling order for electron configurations. This chart is straightforward to construct. Simply make a column for all the s orbitals with each n shell on a separate row. Repeat for p , d , and f . Be sure to only include orbitals allowed by the quantum numbers (no $1p$ or $2d$, and so forth). Finally, draw diagonal lines from top to bottom as shown.



Video 9.6.1: Energy levels, sublevels and orbitals.

✓ Example 9.6.1: Nitrogen Atoms

Nitrogen has 7 electrons. Write the electron configuration for nitrogen.

Solution:

Take a close look at Figure 9.6.5, and use it to figure out how many electrons go into each sublevel, and also the order in which the different sublevels get filled.

1. Begin by filling up the 1s sublevel. **This gives $1s^2$.** Now all of the orbitals in the red $n = 1$ block are filled.

Since we used 2 electrons, there are $7 - 2 =$ **5 electrons left**

2. Next, fill the 2s sublevel. This gives $1s^2 2s^2$. Now all of the orbitals in the s sublevel of the orange $n = 2$ block are filled.

Since we used another 2 electrons, there are $5 - 2 =$ **3 electrons left**

3. Notice that we haven't filled the entire $n = 2$ block yet... there are still the p orbitals!

The final 3 electrons go into the 2p sublevel. This gives $1s^2 2s^2 2p^3$

The overall electron configuration is: $1s^2 2s^2 2p^3$.

✓ Example 9.6.2: Potassium Atoms

Potassium has 19 electrons. Write the electron configuration code for potassium.

Solution

This time, take a close look at Figure 9.6.5.

1. Begin by filling up the 1s sublevel. **This gives $1s^2$.** Now the $n = 1$ level is filled.

Since we used 2 electrons, there are $19 - 2 =$ **17 electrons left**

2. Next, fill the 2s sublevel. **This gives $1s^2 2s^2$**

Since we used another 2 electrons, there are $17 - 2 =$ **15 electrons left**

3. Next, fill the 2p sublevel. **This gives $1s^2 2s^2 2p^6$.** Now the $n = 2$ level is filled.

Since we used another 6 electrons, there are $15 - 6 =$ **9 electrons left**

4. Next, fill the 3s sublevel. **This gives $1s^2 2s^2 2p^6 3s^2$**

Since we used another 2 electrons, there are $9 - 2 = \underline{7 \text{ electrons left}}$

5. Next, fill the 3p sublevel. **This gives $1s^2 2s^2 2p^6 3s^2 3p^6$**

Since we used another 6 electrons, there are $7 - 6 = \underline{1 \text{ electron left}}$

Here's where we have to be careful – right after $3p^6$!

Remember, 4s comes before 3d

6. The final electron goes into the 4s sublevel. **This gives $1s^2 2s^2 2p^6 3s^2 3p^6 4s^1$**

The overall electron configuration is: $1s^2 2s^2 2p^6 3s^2 3p^6 4s^1$

? Exercise 9.6.1: Magnesium and Sodium Atoms

What is the electron configuration for Mg and Na?

Answer Mg

Mg: $1s^2 2s^2 2p^6 3s^2$

Answer Na

Na: $1s^2 2s^2 2p^6 3s^1$

Pauli Exclusion Principle

When we look at the orbital possibilities for a given atom, we see that there are different arrangements of electrons for each different type of atom. Since each electron must maintain its unique identity, we intuitively sense that the four quantum numbers for any given electron must not match up exactly with the four quantum numbers for any other electron in that atom.

For the hydrogen atom, there is no problem since there is only one electron in the H atom. However, when we get to helium we see that the first three quantum numbers for the two electrons are the same: same energy level, same spherical shape. What differentiates the two helium electrons is their spin. One of the electrons has a $+\frac{1}{2}$ spin while the other electron has a $-\frac{1}{2}$ spin. So the two electrons in the 1s orbital are each unique and distinct from one another because their spins are different. This observation leads to the **Pauli exclusion principle**, which states that no two electrons in an atom can have the same set of four quantum numbers. The energy of the electron is specified by the principal, angular momentum, and magnetic quantum numbers. If those three numbers are identical for two electrons, the spin numbers must be different in order for the two electrons to be differentiated from one another. The two values of the spin quantum number allow each orbital to hold two electrons. Figure 9.6.7 shows how the electrons are indicated in a diagram.

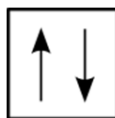


Figure 9.6.7: In an orbital filling diagram, a square represents an orbital, while arrows represent electrons. An arrow pointing upward represents one spin direction, while an arrow pointing downward represents the other spin direction.

Hund's Rule

The last of the three rules for constructing electron arrangements requires electrons to be placed one at a time in a set of orbitals within the same sublevel. This minimizes the natural repulsive forces that one electron has for another. **Hund's rule** states that orbitals of equal energy are each occupied by one electron before any orbital is occupied by a second electron and that each of the single electrons must have the same spin. The figure below shows how a set of three p orbitals is filled with one, two, three, and four electrons.

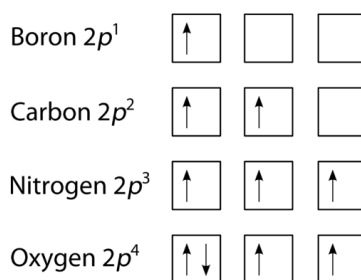


Figure 9.6.8: The $2p$ sublevel, for the elements boron ($Z = 5$), carbon ($Z = 6$), nitrogen ($Z = 7$), and oxygen ($Z = 8$). According to Hund's rule, as electrons are added to a set of orbitals of equal energy, one electron enters each orbital before any orbital receives a second electron.

Orbital Filling Diagrams

An **orbital filling diagram** is the more visual way to represent the arrangement of all the electrons in a particular atom. In an orbital filling diagram, the individual orbitals are shown as circles (or squares) and orbitals within a sublevel are drawn next to each other horizontally. Each sublevel is labeled by its principal energy level and sublevel. Electrons are indicated by arrows inside of the circles. An arrow pointing upwards indicates one spin direction, while a downward pointing arrow indicates the other direction. The orbital filling diagrams for hydrogen, helium, and lithium are shown in the figure below.

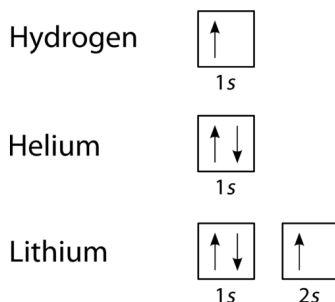


Figure 9.6.9: Orbital filling diagrams for hydrogen, helium, and lithium.

According to the Aufbau process, sublevels and orbitals are filled with electrons in order of increasing energy. Since the s sublevel consists of just one orbital, the second electron simply pairs up with the first electron as in helium. The next element is lithium and necessitates the use of the next available sublevel, the $2s$.

The filling diagram for carbon is shown in Figure 9.6.10. There are two $2p$ electrons for carbon and each occupies its own $2p$ orbital.

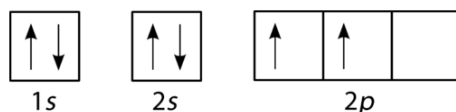


Figure 9.6.10: Orbital filling diagram for carbon.

Oxygen has four $2p$ electrons. After each $2p$ orbital has one electron in it, the fourth electron can be placed in the first $2p$ orbital with a spin opposite that of the other electron in that orbital.

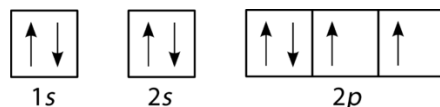


Figure 9.6.11: Orbital filling diagram for oxygen.

If you keep your papers in manila folders, you can pick up a folder and see how much it weighs. If you want to know how many different papers (articles, bank records, or whatever else you keep in a folder), you have to take everything out and count. A computer directory, on the other hand, tells you exactly how much you have in each file. We can get the same information on atoms. If we use an orbital filling diagram, we have to count arrows. When we look at electron configuration data, we simply add up the numbers.

✓ Example 9.6.3: Carbon Atoms

Draw the orbital filling diagram for carbon and write its electron configuration.

Solution

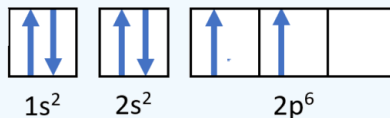
Step 1: List the known quantities and plan the problem.

Known

- Atomic number of carbon, $Z=6$

Use the order of fill diagram to draw an orbital filling diagram with a total of six electrons. Follow Hund's rule. Write the electron configuration.

Step 2: Construct the diagram.



Orbital filling diagram for carbon.

Electron configuration $1s^2 2s^2 2p^2$

Step 3: Think about your result.

Following the 2s sublevel is the 2p, and p sublevels always consist of three orbitals. All three orbitals need to be drawn even if one or more is unoccupied. According to Hund's rule, the sixth electron enters the second of those p orbitals and has the same spin as the fifth electron.

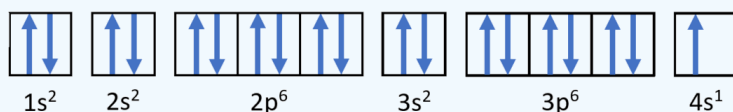
? Exercise 9.6.2: Electronic Configurations

Write the electron configurations and orbital diagrams for

- Potassium atom: K
- Arsenic atom: As
- Phosphorus atom: P

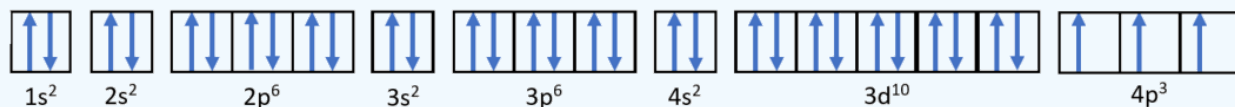
Answer a:

Potassium: $1s^2 2s^2 2p^6 3s^2 3p^6 4s^1$



Answer b:

Arsenic: $1s^2 2s^2 2p^6 3s^2 3p^6 4s^2 3d^{10} 4p^3$



Answer c:

Phosphorus $1s^2 2s^2 2p^6 3s^2 3p^3$



The Atom Neighborhood

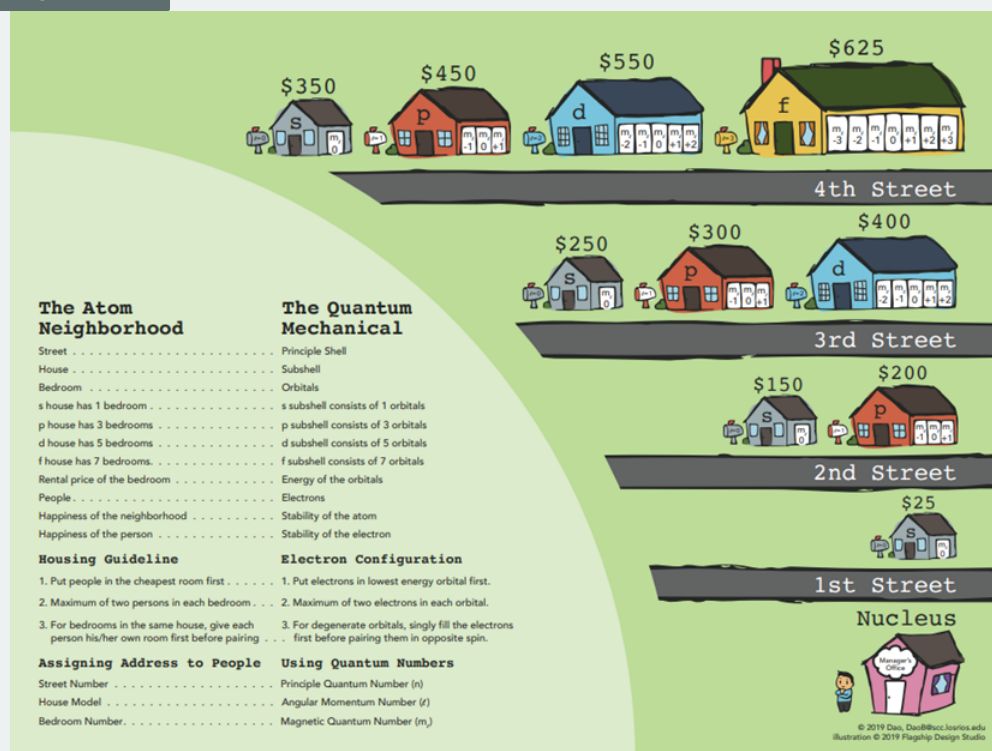


Figure 9.6.12: The atom neighborhood. Source: Dr. Binh Dao, Sacramento City College.

Summary

There are four different classes of electron orbitals. These orbitals are determined by the value of the angular momentum quantum number ℓ . An orbital is a wave function for an electron defined by the three quantum numbers, n , ℓ and m_ℓ . Orbitals define regions in space where you are likely to find electrons. s orbitals ($\ell = 0$) are spherical shaped. p orbitals ($\ell = 1$) are dumb-bell shaped. The three possible p orbitals are always perpendicular to each other.

Electron configuration notation simplifies the indication of where electrons are located in a specific atom. Superscripts are used to indicate the number of electrons in a given sublevel. The Aufbau principle gives the order of electron filling in an atom. It can be used to describe the locations and energy levels of every electron in a given atom. Hund's rule specifies the order of electron filling within a set of orbitals. Orbital filling diagrams are a way of indicating electron locations in orbitals. The Pauli exclusion principle specifies limits on how identical quantum numbers can be for two electrons in the same atom.

Vocabulary

principal quantum number (n)

Defines the energy level of the wave function for an electron, the size of the electron's standing wave, and the number of nodes in that wave.

quantum numbers

Integer numbers assigned to certain quantities in the electron wave function. Because electron standing waves must be continuous and must not "double over" on themselves, quantum numbers are restricted to integer values.

Contributions & Attributions

- Paul Flowers (University of North Carolina - Pembroke), Klaus Theopold (University of Delaware) and Richard Langley (Stephen F. Austin State University) with contributing authors. Textbook content produced by OpenStax College is licensed under a [Creative Commons Attribution License 4.0](https://creativecommons.org/licenses/by/4.0/) license. Download for free at <http://cnx.org/contents/85abf193-2bd...a7ac8df6@9.110>.

9.6: Quantum-Mechanical Orbitals and Electron Configurations is shared under a [CC BY-NC-SA 4.0](#) license and was authored, remixed, and/or curated by LibreTexts.

- **9.6: Quantum-Mechanical Orbitals and Electron Configurations** by Henry Agnew, Marisa Alviar-Agnew is licensed [CK-12](#). Original source: <https://www.ck12.org/c/chemistry/>.

9.7: Electron Configurations and the Periodic Table

Template:HideTOC

Learning Objectives

- Relate the electron configurations of the elements to the shape of the periodic table.
- Determine the expected electron configuration of an element by its place on the periodic table.

Previously, we introduced the periodic table as a tool for organizing the known chemical elements. A periodic table is shown in Figure 9.7.1. The elements are listed by atomic number (the number of protons in the nucleus), and elements with similar chemical properties are grouped together in columns.

1 H 1.00794																	2 He 4.00260				
3 Li 6.941	4 Be 9.012182															5 B 10.811	6 C 12.0107	7 N 14.00674	8 O 15.9994	9 F 18.9984032	10 Ne 20.1797
11 Na 22.989770	12 Mg 24.3050															13 Al 26.981538	14 Si 28.0855	15 P 30.973761	16 S 32.066	17 Cl 35.4527	18 Ar 39.948
19 K 39.0983	20 Ca 40.078	21 Sc 44.955910	22 Ti 47.867	23 V 50.9415	24 Cr 51.9961	25 Mn 54.938049	26 Fe 55.845	27 Co 58.933200	28 Ni 58.6934	29 Cu 63.546	30 Zn 65.39	31 Ga 69.723	32 Ge 72.61	33 As 74.92160	34 Se 78.96	35 Br 79.904	36 Kr 83.80				
37 Rb 85.4678	38 Sr 87.62	39 Y 88.90585	40 Zr 91.224	41 Nb 92.90638	42 Mo 95.94	43 Tc (98)	44 Ru 101.07	45 Rh 102.90550	46 Pd 106.42	47 Ag 107.8682	48 Cd 112.411	49 In 114.818	50 Sn 118.710	51 Sb 121.760	52 Te 127.60	53 I 126.90447	54 Xe 131.29				
55 Cs 132.90545	56 Ba 137.327	57 La 138.9055	58 Ce 140.12	59 Pr 140.90765	60 Nd 144.24	61 Pm (145)	62 Sm 150.36	63 Eu 151.964	64 Gd 157.25	65 Tb 158.92534	66 Dy 162.50	67 Ho 164.93032	68 Er 167.26	69 Tm 168.93421	70 Yb 173.04	71 Lu 174.967					
87 Fr (223)	88 Ra (226)	89 Ac (227)	104 Rf (261)	105 Db (262)	106 Sg (263)	107 Bh (262)	108 Hs (265)	109 Mt (266)	110 Ni (269)	111 Nh (272)	112 Ds (277)				114 Fl (289)	116 Lv (287)					

58 Ce 140.116	59 Pr 140.50765	60 Nd 144.24	61 Pm (145)	62 Sm 150.36	63 Eu 151.964	64 Gd 157.25	65 Tb 158.92534	66 Dy 162.50	67 Ho 164.93032	68 Er 167.26	69 Tm 168.93421	70 Yb 173.04	71 Lu 174.967
90 Th 232.0381	91 Pa 231.03688	92 U 238.0289	93 Np (237)	94 Pu (244)	95 Am (243)	96 Cm (247)	97 Bk (247)	98 Cf (251)	99 Es (252)	100 Fm (257)	101 Md (258)	102 No (259)	103 Lr (262)

Figure 9.7.1: The Periodic Table

Why does the periodic table have the structure it does? The answer is rather simple, if you understand electron configurations: the shape of the periodic table mimics the filling of the subshells with electrons.

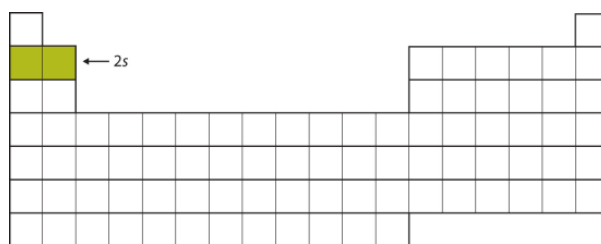
The shape of the periodic table mimics the filling of the subshells with electrons.

Let us start with H and He. Their electron configurations are $1s^1$ and $1s^2$, respectively; with He, the $n = 1$ shell is filled. These two elements make up the first row of the periodic table (Figure 9.7.2)

--	--	--	--	--	--	--	--	--	--	--	--	--	--	--	--	--	--	--	--	--	--	--	--	--	--	--	--	--	--	--	--	--	--	--	--	--	--	--	--	--	--	--	--	--	--	--	--	--	--	--	--	--	--	--	--	--	--	--	--	--	--	--	--	--	--	--	--	--	--	--	--	--	--	--	--	--	--	--	--	--	--	--	--	--	--	--	--	--	--	--	--	--	--	--	--	--	--	--	--	--	--	--	--	--	--	--	--	--	--	--	--	--	--	--	--	--	--	--	--	--	--	--	--	--	--	--	--	--	--	--	--	--	--	--	--	--	--	--	--	--	--	--	--	--	--	--	--	--	--	--	--	--	--	--	--	--	--	--	--	--	--	--	--	--	--	--	--	--	--	--	--	--	--	--	--	--	--	--	--	--	--	--	--	--	--	--	--	--	--	--	--	--	--	--	--	--	--	--	--	--	--	--	--	--	--	--	--	--	--	--	--	--	--	--	--	--	--	--	--	--	--	--	--	--	--	--	--	--	--	--	--	--	--	--	--	--	--	--	--	--	--	--	--	--	--	--	--	--	--	--	--	--	--	--	--	--	--	--	--	--	--	--	--	--	--	--	--	--	--	--	--	--	--	--	--	--	--	--	--	--	--	--	--	--	--	--	--	--	--	--	--	--	--	--	--	--	--	--	--	--	--	--	--	--	--	--	--	--	--	--	--	--	--	--	--	--	--	--	--	--	--	--	--	--	--	--	--	--	--	--	--	--	--	--	--	--	--	--	--	--	--	--	--	--	--	--	--	--	--	--	--	--	--	--	--	--	--	--	--	--	--	--	--	--	--	--	--	--	--	--	--	--	--	--	--	--	--	--	--	--	--	--	--	--	--	--	--	--	--	--	--	--	--	--	--	--	--	--	--	--	--	--	--	--	--	--	--	--	--	--	--	--	--	--	--	--	--	--	--	--	--	--	--	--	--	--	--	--	--	--	--	--	--	--	--	--	--	--	--	--	--	--	--	--	--	--	--	--	--	--	--	--	--	--	--	--	--	--	--	--	--	--	--	--	--	--	--	--	--	--	--	--	--	--	--	--	--	--	--	--	--	--	--	--	--	--	--	--	--	--	--	--	--	--	--	--	--	--	--	--	--	--	--	--	--	--	--	--	--	--	--	--	--	--	--	--	--	--	--	--	--	--	--	--	--	--	--	--	--	--	--	--	--	--	--	--	--	--	--	--	--	--	--	--	--	--	--	--	--	--	--	--	--	--	--	--	--	--	--	--	--	--	--	--	--	--	--	--	--	--	--	--	--	--	--	--	--	--	--	--	--	--	--	--	--	--	--	--	--	--	--	--	--	--	--	--	--	--	--	--	--	--	--	--	--	--	--	--	--	--	--	--	--	--	--	--	--	--	--	--	--	--	--	--	--	--	--	--	--	--	--	--	--	--	--	--	--	--	--	--	--	--	--	--	--	--	--	--	--	--	--	--	--	--	--	--	--	--	--	--	--	--	--	--	--	--	--	--	--	--	--	--	--	--	--	--	--	--	--	--	--	--	--	--	--	--	--	--	--	--	--	--	--	--	--	--	--	--	--	--	--	--	--	--	--	--	--	--	--	--	--	--	--	--	--	--	--	--	--	--	--	--	--	--	--	--	--	--	--	--	--	--	--	--	--	--	--	--	--	--	--	--	--	--	--	--	--	--	--	--	--	--	--	--	--	--	--	--	--	--	--	--	--	--	--	--	--	--	--	--	--	--	--	--	--	--	--	--	--	--	--	--	--	--	--	--	--	--	--	--	--	--	--	--	--	--	--	--	--	--	--	--	--	--	--	--	--	--	--	--	--	--	--	--	--	--	--	--	--	--	--	--	--	--	--	--	--	--	--	--	--	--	--	--	--	--	--	--	--	--	--	--	--	--	--	--	--	--	--	--	--	--	--	--	--	--	--	--	--	--	--	--	--	--	--	--	--	--	--	--	--	--	--	--	--	--	--	--	--	--	--	--	--	--	--	--	--	--	--	--	--	--	--	--	--	--	--	--	--	--	--	--	--	--	--	--	--	--	--	--	--	--	--	--	--	--	--	--	--	--	--	--	--	--	--	--	--	--	--	--	--	--	--	--	--	--	--	--	--	--	--	--	--	--	--	--	--	--	--	--	--	--	--	--	--	--	--	--	--	--	--	--	--	--	--	--	--	--	--	--	--	--	--	--	--	--	--	--	--	--	--	--	--	--	--	--	--	--	--	--	--	--	--	--	--	--	--	--	--	--	--	--	--	--	--	--	--	--	--	--	--	--	--	--	--	--	--	--	--	--	--	--	--	--	--	--	--	--	--	--	--	--	--	--	--	--	--	--	--	--	--	--	--	--	--	--	--	--	--	--	--	--	--	--	--	--	--	--	--	--	--	--	--	--	--	--	--	--	--	--	--	--	--	--	--	--	--	--	--	--	--	--	--	--	--	--	--	--	--	--	--	--	--	--	--	--	--	--	--	--	--	--	--	--	--	--	--	--	--	--	--	--	--	--	--	--	--	--	--	--	--	--	--	--	--	--	--	--	--	--	--	--	--	--	--	--	--	--	--	--	--	--	--	--	--	--	--	--	--	--	--	--	--	--	--	--	--	--	--	--	--	--	--	--	--	--	--	--	--	--	--	--	--	--	--	--	--	--	--	--	--	--	--	--	--	--	--	--	--	--	--	--	--	--	--	--	--	--	--	--	--	--	--	--	--	--	--	--	--	--	--	--	--	--	--	--	--	--	--	--	--	--	--	--	--	--	--	--	--	--	--	--	--	--	--	--	--	--	--	--	--	--	--	--	--	--	--	--	--	--	--	--	--	--	--	--	--	--	--	--	--	--	--	--	--	--	--	--	--	--	--	--	--	--	--	--	--	--	--	--	--	--	--	--	--	--	--	--	--	--	--	--	--	--	--	--	--	--	--	--	--	--	--	--	--	--	--	--	--	--	--	--	--	--	--	--	--	--	--	--	--	--	--	--	--	--	--	--	--	--	--	--	--	--	--	--	--	--	--	--	--	--	--	--	--	--	--	--	--	--	--	--	--	--	--	--	--	--	--	--	--	--	--	--	--	--	--	--	--	--	--	--	--	--	--	--	--	--	--	--	--	--	--	--	--	--	--	--	--	--	--	--	--	--	--	--	--	--	--	--	--	--	--	--	--	--	--

Figure 9.7.2: The 1s Subshell. H and He represent the filling of the 1s subshell.

The next two electrons, for Li and Be, would go into the 2s subshell. Figure 9.7.3 shows that these two elements are adjacent on the periodic table.




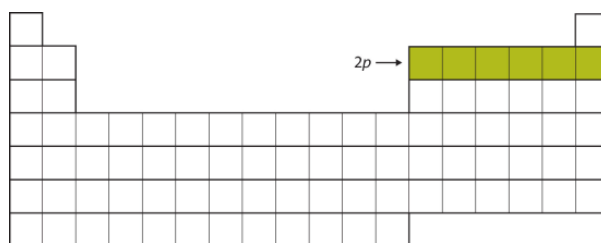


Figure 9.7.3: The 2s Subshell. In Li and Be, the 2s subshell is being filled.

For the next six elements, the 2p subshell is being occupied with electrons. On the right side of the periodic table, these six elements (B through Ne) are grouped together (Figure 9.7.4).




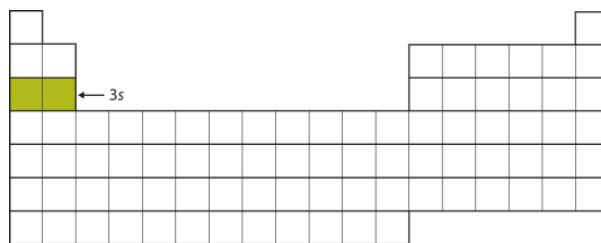


Figure 9.7.4: The 2p Subshell. For B through Ne, the 2p subshell is being occupied.

The next subshell to be filled is the 3s subshell. The elements when this subshell is being filled, Na and Mg, are back on the left side of the periodic table (Figure 9.7.5).






Figure 9.7.5: The 3s Subshell. Now the 3s subshell is being occupied.

Next, the 3p subshell is filled with the next six elements (Figure 9.7.6).

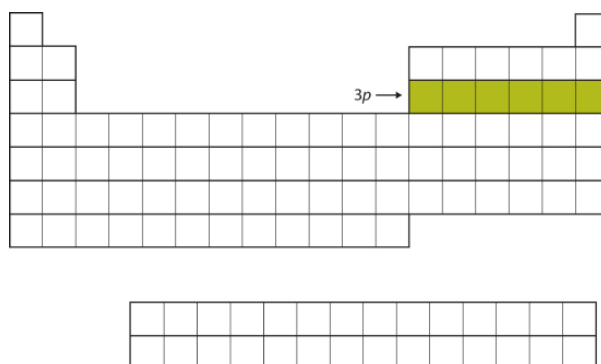


Figure 9.7.6: The 3p Subshell. Next, the 3p subshell is filled with electrons.

Instead of filling the 3d subshell next, electrons go into the 4s subshell (Figure 9.7.7).

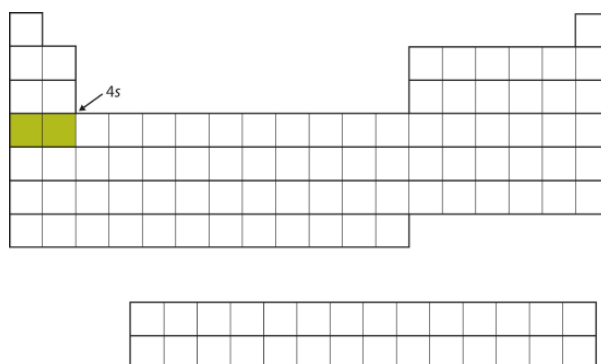


Figure 9.7.7: The 4s Subshell. The 4s subshell is filled before the 3d subshell. This is reflected in the structure of the periodic table.

After the 4s subshell is filled, the 3d subshell is filled with up to 10 electrons. This explains the section of 10 elements in the middle of the periodic table (Figure 9.7.8).

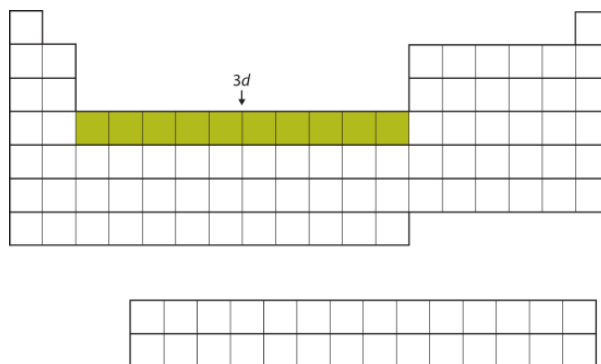


Figure 9.7.8: The 3d Subshell. The 3d subshell is filled in the middle section of the periodic table.

...And so forth. As we go across the rows of the periodic table, the overall shape of the table outlines how the electrons are occupying the shells and subshells.

The first two columns on the left side of the periodic table are where the s subshells are being occupied. Because of this, the first two rows of the periodic table are labeled the **s block**. Similarly, the **p block** are the right-most six columns of the periodic table, the **d block** is the middle 10 columns of the periodic table, while the **f block** is the 14-column section that is normally depicted as detached from the main body of the periodic table. It could be part of the main body, but then the periodic table would be rather long and cumbersome. Figure 9.7.9 shows the blocks of the periodic table.

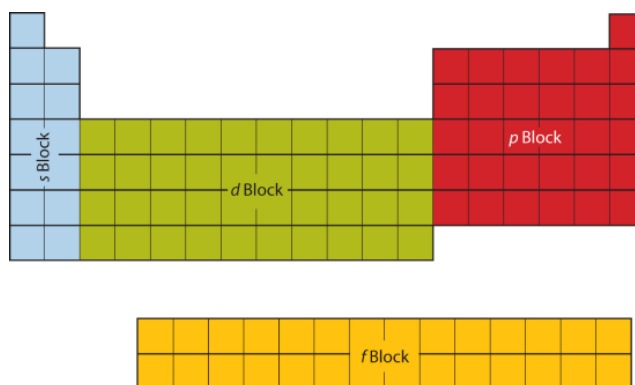


Figure 9.7.9: Blocks on the Periodic Table. The periodic table is separated into blocks depending on which subshell is being filled for the atoms that belong in that section.

The electrons in the highest-numbered shell, plus any electrons in the last unfilled subshell, are called **valence electrons**; the highest-numbered shell is called the **valence shell**. (The inner electrons are called *core electrons*.) The valence electrons largely control the chemistry of an atom. If we look at just the valence shell's electron configuration, we find that in each column, the valence shell's electron configuration is the same. For example, take the elements in the first column of the periodic table: H, Li, Na, K, Rb, and Cs. Their electron configurations (abbreviated for the larger atoms) are as follows, with the valence shell electron configuration highlighted:

Electrons, electron configurations, and the valence shell electron configuration highlighted.

H:	$1s^1$
Li:	$1s^2 2s^1$
Na:	$[\text{Ne}] 3s^1$
K:	$[\text{Ar}] 4s^1$
Rb:	$[\text{Kr}] 5s^1$
Cs:	$[\text{Xe}] 6s^1$

They all have a similar electron configuration in their valence shells: a single s electron. Because much of the chemistry of an element is influenced by valence electrons, we would expect that these elements would have similar chemistry—and they do. The organization of electrons in atoms explains not only the shape of the periodic table, but also the fact that elements in the same column of the periodic table have similar chemistry.

The same concept applies to the other columns of the periodic table. Elements in each column have the same valence shell electron configurations, and the elements have some similar chemical properties. This is strictly true for all elements in the s and p blocks. In the d and f blocks, because there are exceptions to the order of filling of subshells with electrons, similar valence shells are not absolute in these blocks. However, many similarities do exist in these blocks, so a similarity in chemical properties is expected.

Similarity of valence shell electron configuration implies that we can determine the electron configuration of an atom solely by its position on the periodic table. Consider Se, as shown in Figure 9.7.10. It is in the fourth column of the p block. This means that its electron configuration should end in a p^4 electron configuration. Indeed, the electron configuration of Se is $[\text{Ar}] 4s^2 3d^{10} 4p^4$, as expected.

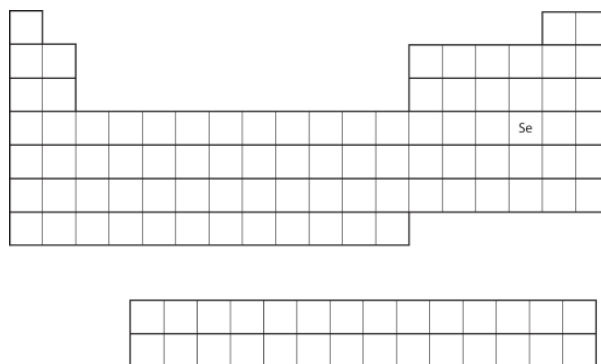


Figure 9.7.10: Selenium on the Periodic Table

✓ Example 9.7.1: Predicting Electron Configurations

From the element's position on the periodic table, predict the valence shell electron configuration for each atom (Figure 9.7.11).

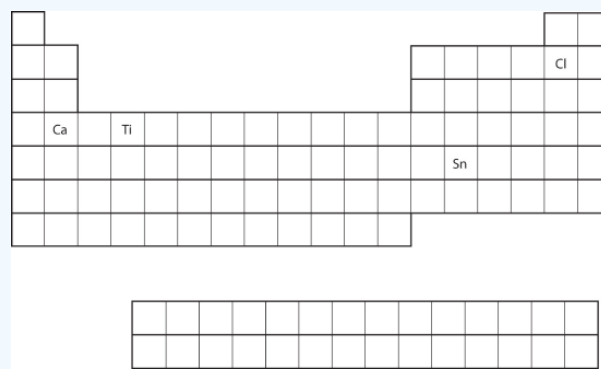


Figure 9.7.11: Various Elements on the Periodic Table

- Ca
- Sn

Solution

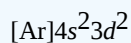
- Ca is located in the second column of the s block. We expect that its electron configuration should end with s^2 . Calcium's electron configuration is $[\text{Ar}]4s^2$.
- Sn is located in the second column of the p block, so we expect that its electron configuration would end in p^2 . Tin's electron configuration is $[\text{Kr}]5s^2 4d^{10} 5p^2$.

? Exercise 9.7.1

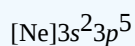
From the element's position on the periodic table, predict the valence shell electron configuration for each atom. Figure 9.7.11.

- Ti
- Cl

Answer a



Answer b



Summary

The arrangement of electrons in atoms is responsible for the shape of the periodic table. Electron configurations can be predicted by the position of an atom on the periodic table.

9.7: Electron Configurations and the Periodic Table is shared under a [CC BY-NC-SA 4.0](#) license and was authored, remixed, and/or curated by LibreTexts.

- **9.7: Electron Configurations and the Periodic Table** by Henry Agnew, Marisa Alviar-Agnew is licensed [CK-12](#). Original source: <https://www.ck12.org/c/chemistry/>.

9.8: The Explanatory Power of the Quantum-Mechanical Model

[Template:HideTOC](#)

9.8: The Explanatory Power of the Quantum-Mechanical Model is shared under a [CC BY-NC-SA 4.0](#) license and was authored, remixed, and/or curated by LibreTexts.

9.9: Periodic Trends- Atomic Size, Ionization Energy, and Metallic Character

Template:HideTOC

Learning Objectives

- Be able to state how certain properties of atoms vary based on their relative position on the periodic table.

One of the reasons the periodic table is so useful is because its structure allows us to qualitatively determine how some properties of the elements vary versus their position on the periodic table. The variations of properties versus positions on the periodic table are called **periodic trends**. There is no other tool in science that allows us to judge relative properties of a class of objects like this, which makes the periodic table a very useful tool. Many periodic trends are general. There may be a few points where an opposite trend is seen, but there is an overall trend when considered across a whole row or down a whole column of the periodic table.

The first periodic trend we will consider is atomic radius. The **atomic radius** is an indication of the size of an atom. Although the concept of a definite radius of an atom is a bit fuzzy, atoms behave as if they have a certain radius. Such radii can be estimated from various experimental techniques, such as the x-ray crystallography of crystals.

As you go down a column of the periodic table, the atomic radii increase. This is because the valence electron shell is getting larger and there is a larger principal quantum number, so the valence shell lies physically farther away from the nucleus. This trend can be summarized as follows:

$$as \downarrow PT, \text{atomic radius} \uparrow$$

where PT stands for periodic table. Going across a row on the periodic table, left to right, the trend is different. Even though the valence shell maintains the same principal quantum number, the number of protons—and hence the nuclear charge—is increasing as you go across the row. The increasing positive charge casts a tighter grip on the valence electrons, so as you go across the periodic table, the atomic radii decrease. Again, we can summarize this trend as follows:

$$as \rightarrow PT, \text{atomic radius} \downarrow$$

Figure 9.9.1 shows spheres representing the atoms of the s and p blocks from the periodic table to scale, showing the two trends for the atomic radius.

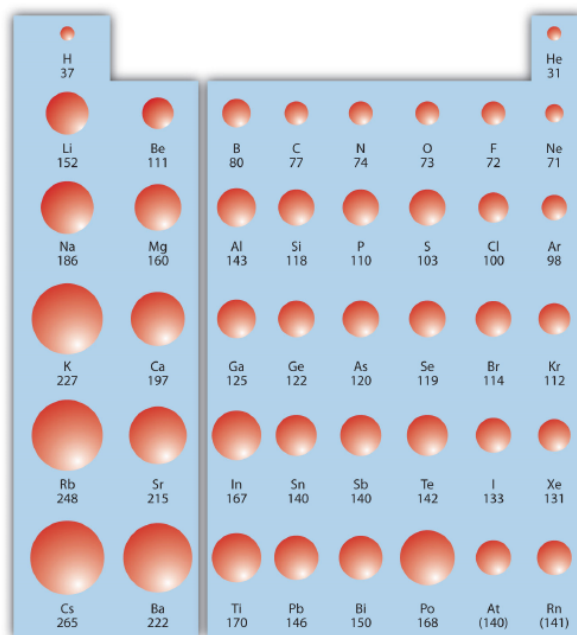


Figure 9.9.1: Atomic Radii Trends on the Periodic Table. Although there are some reversals in the trend (e.g., see Po in the bottom row), atoms generally get smaller as you go across the periodic table and larger as you go down any one column. Numbers are the radii in pm.

✓ Example 9.9.1: Atomic Radii

Referring only to a periodic table and not to Figure 9.9.1, which atom is larger in each pair?

- Si or S
- S or Te

Solution

- Si is to the left of S on the periodic table; it is larger because as you go across the row, the atoms get smaller.
- S is above Te on the periodic table; Te is larger because as you go down the column, the atoms get larger.

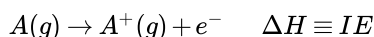
? Exercise 9.9.1: Atomic Radii

Referring only to a periodic table and not to Figure 9.9.1, which atom is smaller, Ca or Br?

Answer

Br

Ionization energy (IE) is the amount of energy required to remove an electron from an atom in the gas phase:



IE is usually expressed in kJ/mol of atoms. It is always positive because the removal of an electron always requires that energy be put in (i.e., it is endothermic). IE also shows periodic trends. As you go down the periodic table, it becomes easier to remove an electron from an atom (i.e., IE decreases) because the valence electron is farther away from the nucleus. Thus,

$$as \downarrow PT, IE \downarrow$$

However, as you go across the periodic table and the electrons get drawn closer in, it takes more energy to remove an electron; as a result, IE increases:

$$as \rightarrow PT, IE \uparrow$$

Figure 9.9.2 shows values of IE versus position on the periodic table. Again, the trend is not absolute, but the general trends going across and down the periodic table should be obvious.

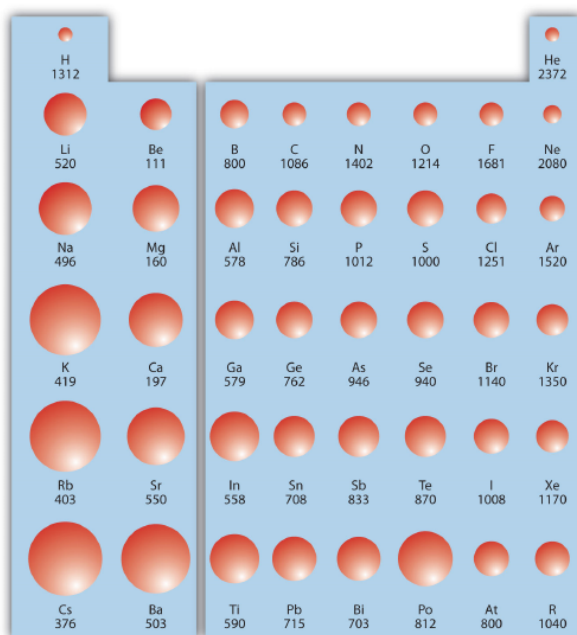
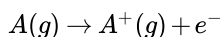


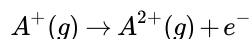
Figure 9.9.2: Ionization Energy on the Periodic Table. Values are in kJ/mol.

IE also shows an interesting trend within a given atom. This is because more than one IE can be defined by removing successive electrons (if the atom has them to begin with):

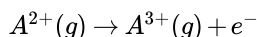
- First Ionization Energy (IE_1):



- Second Ionization Energy (IE_2):



- Third Ionization Energy (IE_3):



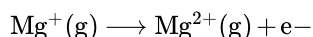
and so forth.

Each successive IE is larger than the previous because an electron is being removed from an atom with a progressively larger positive charge. However, IE takes a large jump when a successive ionization goes down into a new shell. For example, the following are the first three IEs for Mg, whose electron configuration is $1s^2 2s^2 2p^6 3s^2$:

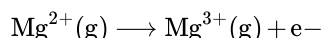
- First Ionization Energy (IE_1) = 738 kJ/mol:



- Second Ionization Energy (IE_2) = 1,450 kJ/mol:



- Third Ionization Energy (IE_3) = 7,734 kJ/mol:



The second IE is twice the first, which is not a surprise: the first IE involves removing an electron from a neutral atom, while the second one involves removing an electron from a positive ion. The third IE, however, is over *five times* the previous one. Why is it so much larger? Because the first two electrons are removed from the 3s subshell, but the third electron has to be removed from the $n = 2$ shell (specifically, the 2p subshell, which is lower in energy than the $n = 3$ shell). Thus, it takes much more energy than just overcoming a larger ionic charge would suggest. It is trends like this that demonstrate that electrons within atoms are organized in groups.

✓ Example 9.9.2: Ionization Energies

Which atom in each pair has the larger first ionization energy?

- Ca or Sr
- K or K^+

Solution

- Because Sr is below Ca on the periodic table, it is easier to remove an electron from it; thus, Ca has the higher IE.
- Because K^+ has a positive charge, it will be harder to remove another electron from it, so its IE is larger than that of K. Indeed, it will be significantly larger because the next electron in K^+ to be removed comes from another shell.

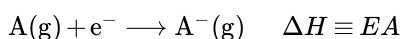
? Exercise 9.9.2: Ionization Energies

Which atom has the lower ionization energy, C or F?

Answer

C

The opposite of IE is described by **electron affinity (EA)**, which is the energy change when a gas-phase atom accepts an electron:



EA is also usually expressed in kJ/mol. EA also demonstrates some periodic trends, although they are less obvious than the other periodic trends discussed previously. Generally, as you go across the periodic table, EA increases its magnitude:

$$as \rightarrow PT, EA \uparrow$$

There is not a definitive trend as you go down the periodic table; sometimes EA increases, sometimes it decreases. Figure 9.9.3 shows EA values versus position on the periodic table for the *s*- and *p*-block elements. The trend is not absolute, especially considering the large positive EA values for the second column. However, the general trend going across the periodic table should be obvious.

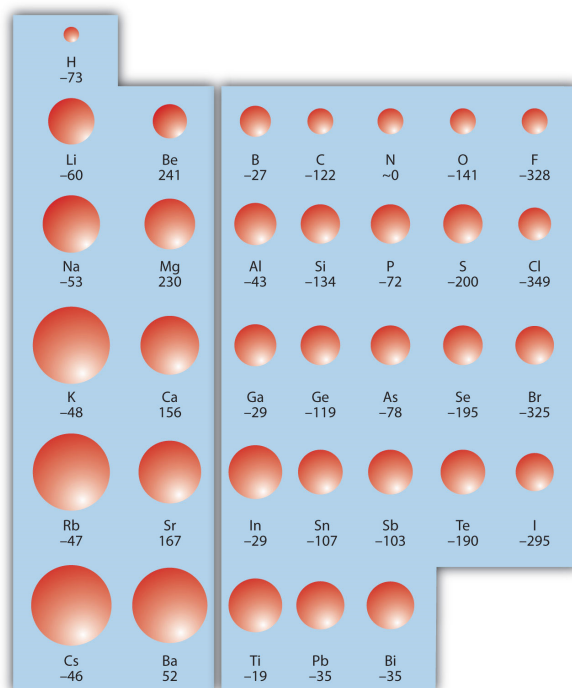


Figure 9.9.3: Electron Affinity on the Periodic Table. Values are in kJ/mol.

✓ Example 9.9.3: Electron Affinities

Predict which atom in each pair will have the highest magnitude of Electron Affinity.

- C or F
- Na or S

Solution

- C and F are in the same row on the periodic table, but F is farther to the right. Therefore, F should have the larger magnitude of EA.
- Na and S are in the same row on the periodic table, but S is farther to the right. Therefore, S should have the larger magnitude of EA.

? Exercise 9.9.3: Electron Affinities

Predict which atom will have the highest magnitude of Electron Affinity: As or Br.

Answer

Br

Metallic Character

The metallic character is used to define the chemical properties that metallic elements present. Generally, metals tend to lose electrons to form cations. Nonmetals tend to gain electrons to form anions. They also have a high oxidation potential—therefore they are easily oxidized and are strong reducing agents. Metals also form basic oxides; the more basic the oxide, the higher the metallic character.

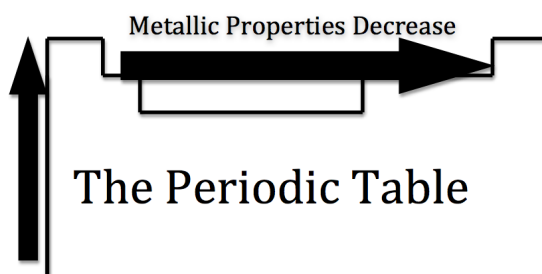


Figure 9.9.4: Courtesy of Jessica Thornton (UCD)

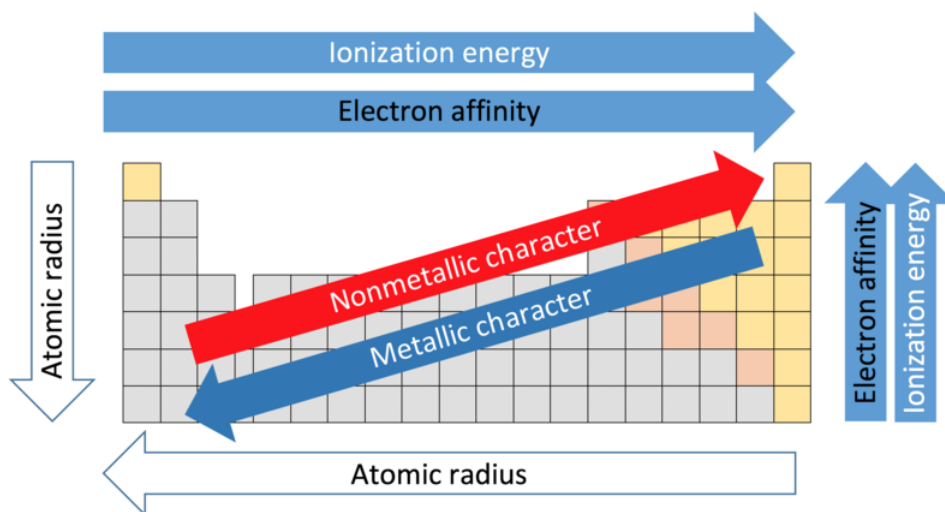
As you move across the table from left to right, the metallic character decreases, because the elements easily accept electrons to fill their valance shells. Therefore, these elements take on the nonmetallic character of forming anions. As you move up the table, the metallic character decreases, due to the greater pull that the nucleus has on the outer electrons. This greater pull makes it harder for the atoms to lose electrons and form cations.

Uses of the Periodic Properties of Elements

1. Predict greater or smaller atomic size and radial distribution in neutral atoms and ions.
2. Measure and compare ionization energies.
3. Compare electron affinities and electronegativities.
 - o Predict redox potential.
 - o Compare metallic character with other elements; ability to form cations.
 - o Predict reactions that may or may not occur due to the trends.
 - o Determine greater cell potential (sum of oxidation and reduction potential) between reactions.
 - o Complete chemical reactions according to trends.

Summary

- Certain properties—notably atomic radius, ionization energies, and electron affinities—can be qualitatively understood by the positions of the elements on the periodic table. The major trends are summarized in the figure below.
- There are three factors that help in the prediction of the trends in the Periodic Table: number of protons in the nucleus, number of shells, and shielding effect.



Various periodic trends (CC BY-SA 4.0; Sandbh via [Wikipedia](#))

9.9: Periodic Trends- Atomic Size, Ionization Energy, and Metallic Character is shared under a [CC BY-NC-SA 4.0](#) license and was authored, remixed, and/or curated by LibreTexts.

- **9.9: Periodic Trends - Atomic Size, Ionization Energy, and Metallic Character** by Henry Agnew, Marisa Alviar-Agnew is licensed [CK-12](#). Original source: <https://www.ck12.org/c/chemistry/>.

CHAPTER OVERVIEW

10: Chemical Bonding

[Template:HideTOC](#)

How do atoms make compounds? Typically they join together in such a way that they lose their identities as elements and adopt a new identity as a compound. These joins are called *chemical bonds*. But how do atoms join together? Ultimately, it all comes down to electrons. Before we discuss how electrons interact, we need to introduce a tool to simply illustrate electrons in an atom.

- [10.1: Bonding Models and AIDS Drugs](#)
- [10.2: Representing Valence Electrons with Dots](#)
- [10.3: Lewis Structures of Ionic Compounds- Electrons Transferred](#)
- [10.4: Covalent Lewis Structures- Electrons Shared](#)
- [10.5: Writing Lewis Structures for Covalent Compounds](#)
- [10.6: Resonance- Equivalent Lewis Structures for the Same Molecule](#)
- [10.7: Predicting the Shapes of Molecules](#)
- [10.8: Electronegativity and Polarity - Why Oil and Water Don't Mix](#)

10: Chemical Bonding is shared under a [CC BY-NC-SA 4.0](#) license and was authored, remixed, and/or curated by LibreTexts.

10.1: Bonding Models and AIDS Drugs

[Template:HideTOC](#)

[10.1: Bonding Models and AIDS Drugs](#)

[10.1: Bonding Models and AIDS Drugs](#) is shared under a [CC BY-NC-SA 4.0](#) license and was authored, remixed, and/or curated by LibreTexts.

10.2: Representing Valence Electrons with Dots

[Template:HideTOC](#)

Learning Objective

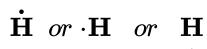
- Draw a Lewis electron dot diagram for an atom or a monatomic ion.

In almost all cases, chemical bonds are formed by interactions of valence electrons in atoms. To facilitate our understanding of how valence electrons interact, a simple way of representing those valence electrons would be useful.

A **Lewis electron dot diagram** (or electron dot diagram, or a Lewis diagram, or a Lewis structure) is a representation of the valence electrons of an atom that uses dots around the symbol of the element. The number of dots equals the number of valence electrons in the atom. These dots are arranged to the right and left and above and below the symbol, with no more than two dots on a side. (The order in which the positions are used does not matter.) For example, the Lewis electron dot diagram for hydrogen is simply



Because the side is not important, the Lewis electron dot diagram could also be drawn as follows:



The electron dot diagram for helium, with two valence electrons, is as follows:



By putting the two electrons together on the same side, we emphasize the fact that these two electrons are both in the 1s subshell; this is the common convention we will adopt, although there will be exceptions later. The next atom, lithium, has an electron configuration of $1s^2 2s^1$, so it has only one electron in its valence shell. Its electron dot diagram resembles that of hydrogen, except the symbol for lithium is used:



Beryllium has two valence electrons in its 2s shell, so its electron dot diagram is like that of helium:



The next atom is boron. Its valence electron shell is $2s^2 2p^1$, so it has three valence electrons. The third electron will go on another side of the symbol:



Again, it does not matter on which sides of the symbol the electron dots are positioned.

For carbon, there are four valence electrons, two in the 2s subshell and two in the 2p subshell. As usual, we will draw two dots together on one side, to represent the 2s electrons. However, conventionally, we draw the dots for the two p electrons on different sides. As such, the electron dot diagram for carbon is as follows:



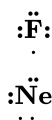
With N, which has three p electrons, we put a single dot on each of the three remaining sides:



For oxygen, which has four p electrons, we now have to start doubling up on the dots on one other side of the symbol. When doubling up electrons, make sure that each side has no more than two electrons.



Fluorine and neon have seven and eight dots, respectively:



With the next element, sodium, the process starts over with a single electron because sodium has a single electron in its highest-numbered shell, the $n = 3$ shell. By going through the periodic table, we see that the Lewis electron dot diagrams of atoms will never have more than eight dots around the atomic symbol.

✓ Example 10.2.1: Lewis Dot Diagrams

What is the Lewis electron dot diagram for each element?

- aluminum
- selenium

Solution

- The valence electron configuration for aluminum is $3s^23p^1$. So it would have three dots around the symbol for aluminum, two of them paired to represent the 3s electrons:



- The valence electron configuration for selenium is $4s^24p^4$. In the highest-numbered shell, the $n = 4$ shell, there are six electrons. Its electron dot diagram is as follows:



? Exercise 10.2.1

What is the Lewis electron dot diagram for each element?

- phosphorus
- argon

Answer a



Answer b



Summary

- Lewis electron dot diagrams use dots to represent valence electrons around an atomic symbol.
- Lewis electron dot diagrams for ions have less (for cations) or more (for anions) dots than the corresponding atom.

10.2: Representing Valence Electrons with Dots is shared under a [CC BY-NC-SA 4.0](https://creativecommons.org/licenses/by-nc-sa/4.0/) license and was authored, remixed, and/or curated by LibreTexts.

- 10.2: Representing Valence Electrons with Dots by Henry Agnew, Marisa Alviar-Agnew is licensed [CC BY-NC-SA 3.0](https://creativecommons.org/licenses/by-nc-sa/3.0/).

10.3: Lewis Structures of Ionic Compounds- Electrons Transferred

Template:HideTOC

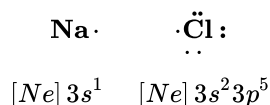
Learning Objectives

- State the octet rule.
- Define *ionic bond*.
- Draw Lewis structures for ionic compounds.

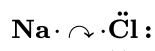
In Section 4.7, we demonstrated that ions are formed by losing electrons to make cations, or by gaining electrons to form anions. The astute reader may have noticed something: many of the ions that form have eight electrons in their valence shell. Either atoms gain enough electrons to have eight electrons in the valence shell and become the appropriately charged anion, or they lose the electrons in their original valence shell; the *lower* shell, now the valence shell, has eight electrons in it, so the atom becomes positively charged. For whatever reason, having eight electrons in a valence shell is a particularly energetically stable arrangement of electrons. The **octet rule** explains the favorable trend of atoms having eight electrons in their valence shell. When atoms form compounds, the octet rule is not always satisfied for all atoms at all times, but it is a very good rule of thumb for understanding the kinds of bonding arrangements that atoms can make.

It is not impossible to violate the octet rule. Consider sodium: in its elemental form, it has one valence electron and is stable. It is rather reactive, however, and does not require a lot of energy to remove that electron to make the Na^+ ion. We *could* remove another electron by adding even more energy to the ion, to make the Na^{2+} ion. However, that requires much more energy than is normally available in chemical reactions, so sodium stops at a 1+ charge after losing a single electron. It turns out that the Na^+ ion has a complete octet in its new valence shell, the $n = 2$ shell, which satisfies the octet rule. The octet rule is a result of trends in energies and is useful in explaining why atoms form the ions that they do.

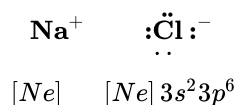
Now consider an Na atom in the presence of a Cl atom. The two atoms have these Lewis electron dot diagrams and electron configurations:



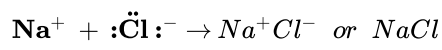
For the Na atom to obtain an octet, it must lose an electron; for the Cl atom to gain an octet, it must gain an electron. An electron transfers from the Na atom to the Cl atom:



resulting in two ions—the Na^+ ion and the Cl^- ion:



Both species now have complete octets, and the electron shells are energetically stable. From basic physics, we know that opposite charges attract. This is what happens to the Na^+ and Cl^- ions:

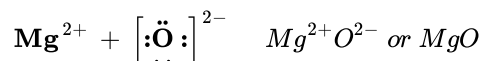


where we have written the final formula (the formula for sodium chloride) as per the convention for ionic compounds, without listing the charges explicitly. The attraction between oppositely charged ions is called an **ionic bond**, and it is one of the main types of chemical bonds in chemistry. Ionic bonds are caused by electrons *transferring* from one atom to another.

In electron transfer, the number of electrons lost must equal the number of electrons gained. We saw this in the formation of NaCl. A similar process occurs between Mg atoms and O atoms, except in this case two electrons are transferred:

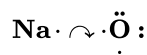


The two ions each have octets as their valence shell, and the two oppositely charged particles attract, making an ionic bond:



Remember, in the final formula for the ionic compound, we do not write the charges on the ions.

What about when an Na atom interacts with an O atom? The O atom needs two electrons to complete its valence octet, but the Na atom supplies only one electron:



The O atom still does not have an octet of electrons. What we need is a second Na atom to donate a second electron to the O atom:



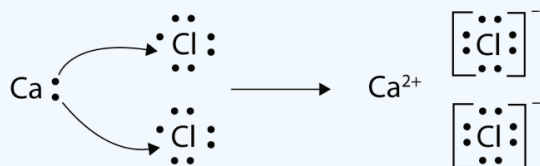
These three ions attract each other to give an overall neutral-charged ionic compound, which we write as Na₂O. The need for the number of electrons lost being equal to the number of electrons gained explains why ionic compounds have the ratio of cations to anions that they do. This is required by the law of conservation of matter as well.

✓ Example 10.3.1: Synthesis of Calcium Chloride from Elements

With arrows, illustrate the transfer of electrons to form calcium chloride from *Ca* atoms and *Cl* atoms.

Solution

A *Ca* atom has two valence electrons, while a *Cl* atom has seven electrons. A *Cl* atom needs only one more to complete its octet, while *Ca* atoms have two electrons to lose. Thus we need two *Cl* atoms to accept the two electrons from one *Ca* atom. The transfer process looks as follows:

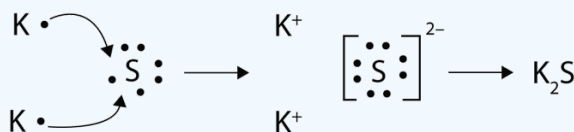


The oppositely charged ions attract each other to make CaCl₂.

? Exercise 10.3.1

With arrows, illustrate the transfer of electrons to form potassium sulfide from *K* atoms and *S* atoms.

Answer



Summary

- The tendency to form species that have eight electrons in the valence shell is called the octet rule.
- The attraction of oppositely charged ions caused by electron transfer is called an ionic bond.
- The strength of ionic bonding depends on the magnitude of the charges and the sizes of the ions.

10.3: Lewis Structures of Ionic Compounds- Electrons Transferred is shared under a [CC BY-NC-SA 4.0](#) license and was authored, remixed, and/or curated by LibreTexts.

- **10.3: Lewis Structures of Ionic Compounds- Electrons Transferred** by Henry Agnew, Marisa Alviar-Agnew is licensed [CC BY-NC-SA 3.0](#).

10.4: Covalent Lewis Structures- Electrons Shared

Template:HideTOC

Learning Objectives

- Define *covalent bond*.
- Illustrate covalent bond formation with Lewis electron dot diagrams.

Ionic bonding typically occurs when it is easy for one atom to lose one or more electrons and another atom to gain one or more electrons. However, some atoms won't give up or gain electrons easily. Yet they still participate in compound formation. How? There is another mechanism for obtaining a complete valence shell: *sharing* electrons. When electrons are shared between two atoms, they make a bond called a **covalent bond**.

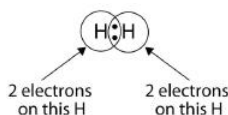
Let us illustrate a covalent bond by using H atoms, with the understanding that H atoms need only two electrons to fill the 1s subshell. Each H atom starts with a single electron in its valence shell:



The two H atoms can share their electrons:



We can use circles to show that each H atom has two electrons around the nucleus, completely filling each atom's valence shell:



Because each H atom has a filled valence shell, this bond is stable, and we have made a diatomic hydrogen molecule. (This explains why hydrogen is one of the diatomic elements.) For simplicity's sake, it is not unusual to represent the covalent bond with a dash, instead of with two dots:



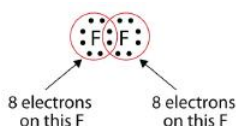
Because two atoms are sharing one pair of electrons, this covalent bond is called a **single bond**. As another example, consider fluorine. F atoms have seven electrons in their valence shell:



These two atoms can do the same thing that the H atoms did; they share their unpaired electrons to make a covalent bond.



Note that each F atom has a complete octet around it now:



We can also write this using a dash to represent the shared electron pair:




There are two different types of electrons in the fluorine diatomic molecule. The **bonding electron pair** makes the covalent bond. Each F atom has three other pairs of electrons that do not participate in the bonding; they are called **lone pair electrons**. Each F

atom has one bonding pair and three lone pairs of electrons.

Covalent bonds can be made between different elements as well. One example is HF . Each atom starts out with an odd number of electrons in its valence shell:



The two atoms can share their unpaired electrons to make a covalent bond:



We note that the H atom has a full valence shell with two electrons, while the F atom has a complete octet of electrons.

✓ Example 10.4.1:


Use Lewis electron dot diagrams to illustrate the covalent bond formation in HBr .

Solution

HBr is very similar to HF , except that it has Br instead of F. The atoms are as follows:



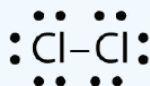
The two atoms can share their unpaired electron:



? Exercise 10.4.1

Use Lewis electron dot diagrams to illustrate the covalent bond formation in Cl_2 .

Answer



When working with covalent structures, it sometimes looks like you have leftover electrons. You apply the rules you learned so far, and there are still some electrons that remain unattached. You can't just leave them there. So where do you put them?

Multiple Covalent Bonds

Some molecules are not able to satisfy the octet rule by making only single covalent bonds between the atoms. Consider the compound ethene, which has a molecular formula of C_2H_4 . The carbon atoms are bonded together, with each carbon also bonded to two hydrogen atoms.

$$\text{two C atoms} = 2 \times 4 = 8 \text{ valence electrons}$$

$$\text{four H atoms} = 4 \times 1 = 4 \text{ valence electrons}$$

$$\text{total of 12 valence electrons in the molecule}$$

If the Lewis electron dot structure was drawn with a single bond between the carbon atoms and with the octet rule followed, it would look like this:

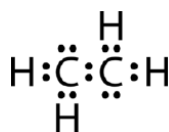


Figure 10.4.1: Incorrect dot structure of ethene. (CK12 License)

This Lewis structure is incorrect because it contains a total of 14 electrons. However, the Lewis structure can be changed by eliminating the lone pairs on the carbon atoms and having to share two pairs instead of only one pair.

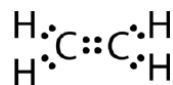


Figure 10.4.2: Correct dot structure for ethene. (CK12 License)

A **double covalent bond** is a covalent bond formed by atoms that share two pairs of electrons. The double covalent bond that occurs between the two carbon atoms in ethane can also be represented by a structural formula and with a molecular model as shown in the figure below.

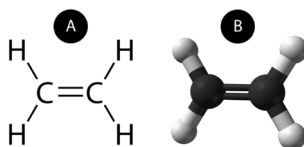


Figure 10.4.3: (A) The structural model for C_2H_4 consists of a double covalent bond between the two carbon atoms and single bonds to the hydrogen atoms. (B) Molecular model of C_2H_4 .

A **triple covalent bond** is a covalent bond formed by atoms that share three pairs of electrons. The element nitrogen is a gas that composes the majority of Earth's atmosphere. A nitrogen atom has five valence electrons, which can be shown as one pair and three single electrons. When combining with another nitrogen atom to form a diatomic molecule, the three single electrons on each atom combine to form three shared pairs of electrons.

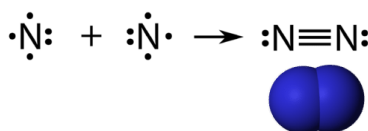


Figure 10.4.4: Triple bond in N_2 .

Each nitrogen atom follows the octet rule with one lone pair of electrons, and six electrons that are shared between the atoms.

Summary

- Covalent bonds are formed when atoms share electrons.
- Lewis electron dot diagrams can be drawn to illustrate covalent bond formation.
- Double bonds or triple bonds between atoms may be necessary to properly illustrate the bonding in some molecules.

Contributions & Attributions

-
- Anonymous by request

10.4: Covalent Lewis Structures- Electrons Shared is shared under a [CC BY-NC-SA 4.0](https://creativecommons.org/licenses/by-nc-sa/4.0/) license and was authored, remixed, and/or curated by LibreTexts.

- 10.4: Covalent Lewis Structures- Electrons Shared by Henry Agnew, Marisa Alviar-Agnew is licensed [notset](https://creativecommons.org/licenses/by-nc-sa/4.0/).

10.5: Writing Lewis Structures for Covalent Compounds

Learning Objectives

- Draw Lewis structures for covalent compounds.

The following procedure can be used to construct Lewis electron structures for more complex molecules and ions.

How-to: Constructing Lewis electron structures

1. Determine the total number of valence electrons in the molecule or ion.

- Add together the valence electrons from each atom. (Recall that the number of valence electrons is indicated by the position of the element in the periodic table.)
- If the species is a polyatomic ion, remember to **add** or **subtract** the number of electrons necessary to give the total charge on the ion.

For CO_3^{2-} , for example, we **add two electrons** to the total because of the **-2** charge.

2. Arrange the atoms to show specific connections.

- When there is a central atom, it is usually the **least electronegative element** in the compound. Chemists usually list this central atom first in the chemical formula (as in CCl_4 and CO_3^{2-} , which both have C as the central atom), which is another clue to the compound's structure.
- Hydrogen and the halogens** are almost always connected to only one other atom, so they are usually **terminal** rather than central.

3. Place a bonding pair of electrons between each pair of adjacent atoms to give a single bond.

- In H_2O , for example, there is a bonding pair of electrons between oxygen and each hydrogen.

4. Beginning with the terminal atoms, add enough electrons to each atom to give each atom an octet (two for hydrogen).

- These electrons will usually be lone pairs.

5. If any electrons are left over, place them on the central atom.

- We will explain later that some atoms are able to accommodate more than eight electrons.

6. If the central atom has fewer electrons than an octet, **use lone pairs** from terminal atoms **to form multiple (double or triple) bonds** to the central atom to achieve an octet.

- This will not change the number of electrons on the terminal atoms.

7. Final check

- Always make sure all valence electrons are accounted for and that each atom has an octet of electrons, except for hydrogen (with two electrons).
- The central atom is usually the least electronegative element in the molecule or ion; hydrogen and the halogens are usually terminal.

Now let's apply this procedure to some particular compounds, beginning with one we have already discussed.

✓ Example 10.5.1: Water

Write the Lewis Structure for H_2O .

Solution

Solutions to Example 10.4.1

Steps for Writing Lewis Structures	Example 10.5.1
1. Determine the total number of valence electrons in the molecule or ion.	Each H atom (group 1) has 1 valence electron, and the O atom (group 16) has 6 valence electrons, for a total of <u>8 valence electrons</u> .

Steps for Writing Lewis Structures

2. Arrange the atoms to show specific connections.

3. Place a bonding pair of electrons between each pair of adjacent atoms to give a single bond.

4. Beginning with the terminal atoms, add enough electrons to each atom to give each atom an octet (two for hydrogen).

5. If any electrons are left over, place them on the central atom.

6. If the central atom has fewer electrons than an octet, use lone pairs from terminal atoms to form multiple (double or triple) bonds to the central atom to achieve an octet.

7. Final check.

Example 10.5.1



Because H atoms are almost always terminal, the arrangement within the molecule must be HOH.

Placing one bonding pair of electrons between the O atom and each H atom gives



with 4 electrons left over.

Each H atom has a full valence shell of 2 electrons.

Adding the remaining 4 electrons to the oxygen (as two lone pairs) gives the following structure:



Not necessary.

The Lewis structure gives oxygen an octet and each hydrogen 2 electrons.

✓ Example 10.5.2

Write the Lewis structure for the CH_2O molecule

Solution

Solutions to Example 10.4.2

Steps for Writing Lewis Structures

1. Determine the total number of valence electrons in the molecule or ion.

2. Arrange the atoms to show specific connections.

3. Place a bonding pair of electrons between each pair of adjacent atoms to give a single bond.

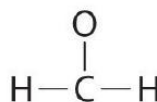
Example 10.5.2

Each hydrogen atom (group 1) has 1 valence electron, carbon (group 14) has 4 valence electrons, and oxygen (group 16) has 6 valence electrons, for a total of $[(2)(1) + 4 + 6] = \underline{12 \text{ valence electrons}}$.



Because carbon is less electronegative than oxygen and hydrogen is normally terminal, C must be the central atom.

Placing a bonding pair of electrons between each pair of bonded atoms gives the following:



6 electrons are used, and 6 are left over.

Steps for Writing Lewis Structures

4. Beginning with the terminal atoms, add enough electrons to each atom to give each atom an octet (two for hydrogen).

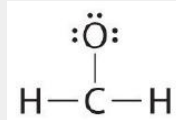
5. If any electrons are left over, place them on the central atom.

6. If the central atom has fewer electrons than an octet, use lone pairs from terminal atoms to form multiple (double or triple) bonds to the central atom to achieve an octet.

7. Final check

Example 10.5.2

Adding all 6 remaining electrons to oxygen (as three lone pairs) gives the following:

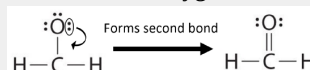


Although oxygen now has an octet and each hydrogen has 2 electrons, carbon has only 6 electrons.

Not necessary.

There are no electrons left to place on the central atom.

To give carbon an octet of electrons, we use one of the lone pairs of electrons on oxygen to form a carbon–oxygen double bond:

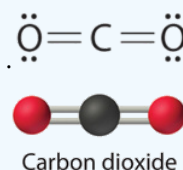


Both the oxygen and the carbon now have an octet of electrons, so this is an acceptable Lewis electron structure. The O has two bonding pairs and two lone pairs, and C has four bonding pairs. This is the structure of formaldehyde, which is used in embalming fluid.

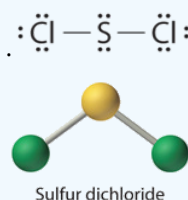
? Exercise 10.5.1

Write Lewis electron structures for CO_2 and SCl_2 , a vile-smelling, unstable red liquid that is used in the manufacture of rubber.

Answer CO_2



Answer SCl_2



The United States Supreme Court has the unenviable task of deciding what the law is. This responsibility can be a major challenge when there is no clear principle involved or where there is a new situation not encountered before. Chemistry faces the same challenge in extending basic concepts to fit a new situation. Drawing of Lewis structures for polyatomic ions uses the same approach, but tweaks the process a little to fit a somewhat different set of circumstances.

Writing Lewis Structures for Polyatomic Ions (CK-12)

Recall that a polyatomic ion is a group of atoms that are covalently bonded together and which carry an overall electrical charge. The ammonium ion, NH_4^+ , is formed when a hydrogen ion (H^+) attaches to the lone pair of an ammonia (NH_3) molecule in a coordinate covalent bond.

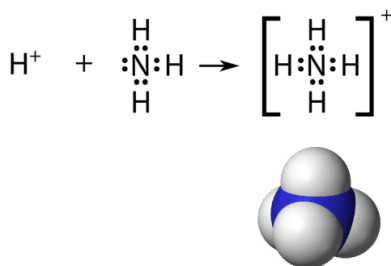


Figure 10.5.3: The ammonium ion. (CK12 License)

When drawing the Lewis structure of a polyatomic ion, the charge of the ion is reflected in the number of total valence electrons in the structure. In the case of the ammonium ion:

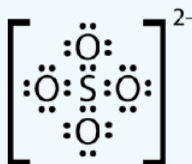
$$\begin{aligned} 1 \text{ N atom} &= 5 \text{ valence electrons} \\ 4 \text{ H atoms} &= 4 \times 1 = 4 \text{ valence electrons} \\ \text{subtract 1 electron for the } 1+ \text{ charge of the ion} \\ \text{total of 8 valence electrons in the ion} \end{aligned}$$

It is customary to put the Lewis structure of a polyatomic ion into a large set of brackets, with the charge of the ion as a superscript outside of the brackets.

✓ Exercise 10.5.2

Draw the Lewis electron dot structure for the sulfate ion.

Answer (CK12 License)



Exceptions to the Octet Rule (BC Campus)

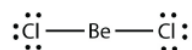
As important and useful as the octet rule is in chemical bonding, there are some well-known violations. This does not mean that the octet rule is useless—quite the contrary. As with many rules, there are exceptions, or violations.

There are three violations to the octet rule. Odd-electron molecules represent the first violation to the octet rule. Although they are few, some stable compounds have an odd number of electrons in their valence shells. With an odd number of electrons, at least one atom in the molecule will have to violate the octet rule. Examples of stable odd-electron molecules are NO, NO₂, and ClO₂. The Lewis electron dot diagram for NO is as follows:

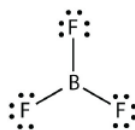


Although the O atom has an octet of electrons, the N atom has only seven electrons in its valence shell. Although NO is a stable compound, it is very chemically reactive, as are most other odd-electron compounds.

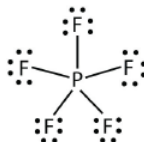
Electron-deficient molecules represent the second violation to the octet rule. These stable compounds have less than eight electrons around an atom in the molecule. The most common examples are the covalent compounds of beryllium and boron. For example, beryllium can form two covalent bonds, resulting in only four electrons in its valence shell:



Boron commonly makes only three covalent bonds, resulting in only six valence electrons around the B atom. A well-known example is BF₃:



The third violation to the octet rule is found in those compounds with more than eight electrons assigned to their valence shell. These are called expanded valence shell molecules. Such compounds are formed only by central atoms in the third row of the periodic table or beyond that have empty *d* orbitals in their valence shells that can participate in covalent bonding. One such compound is PF_5 . The only reasonable Lewis electron dot diagram for this compound has the P atom making five covalent bonds:



Formally, the P atom has 10 electrons in its valence shell.

✓ Example 10.5.3: Octet Violations

Identify each violation to the octet rule by drawing a Lewis electron dot diagram.

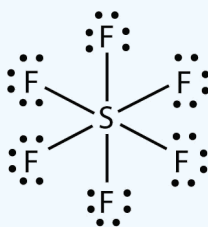
- ClO
- SF_6

Solution

a. With one Cl atom and one O atom, this molecule has $6 + 7 = 13$ valence electrons, so it is an odd-electron molecule. A Lewis electron dot diagram for this molecule is as follows:



b. In SF_6 , the central S atom makes six covalent bonds to the six surrounding F atoms, so it is an expanded valence shell molecule. Its Lewis electron dot diagram is as follows:



? Exercise 10.5.3: Xenon Difluoride

Identify the violation to the octet rule in XeF_2 by drawing a Lewis electron dot diagram.

Answer



The Xe atom has an expanded valence shell with more than eight electrons around it.

Summary

Lewis dot symbols provide a simple rationalization of why elements form compounds with the observed stoichiometries. A plot of the overall energy of a covalent bond as a function of internuclear distance is identical to a plot of an ionic pair because both result from attractive and repulsive forces between charged entities. In Lewis electron structures, we encounter **bonding pairs**, which are shared by two atoms, and **lone pairs**, which are not shared between atoms. Lewis structures for polyatomic ions follow the same rules as those for other covalent compounds. There are three violations to the octet rule: odd-electron molecules, electron-deficient molecules, and expanded valence shell molecules.

10.5: Writing Lewis Structures for Covalent Compounds is shared under a [CC BY-NC-SA 4.0](#) license and was authored, remixed, and/or curated by LibreTexts.

- [10.5: Writing Lewis Structures for Covalent Compounds](#) by Henry Agnew, Marisa Alviar-Agnew is licensed [notset](#). Original source: <https://www.ck12.org/c/chemistry/>.



10.6: Resonance- Equivalent Lewis Structures for the Same Molecule

Template:HideTOC

Learning Objectives

- Explain the concept of resonance and how it works with within molecules.

Resonance

There are some cases in which more than one viable Lewis structure can be drawn for a molecule. An example is the ozone (O_3) molecule in Figure 10.6.1. There are a total of 18 electrons in the structure and so the following two structures are possible.



Figure 10.6.1: Resonance forms of ozone. Note the use of the double-headed arrow.

The structure on the left (10.6.1) can be converted to the structure on the right by a shifting of electrons without altering the positions of the atoms.

It was once thought that the structure of a molecule such as O_3 consisted of one single bond and one double bond which then shifted back and forth as shown above. However, further studies showed that the two bonds are identical. Any double covalent bond between two given atoms is typically shorter than a single covalent bond. Studies of the O_3 and other similar molecules showed that the bonds were identical in length. Interestingly, the length of the bond is in between the lengths expected for an O—O single bond and a double bond.

Resonance is the use of two or more Lewis structures to represent the covalent bonding in a molecule. One of the valid structures is referred to as a resonance structure. It is now understood that the true structure of a molecule which displays resonance is that of an average or a hybrid of all the resonance structures. In the case of the O_3 molecule, each of the covalent bonds between O atoms are best thought of as being "one and a half" bonds, as opposed to either a pure single bond or a pure double bond. This "half-bond" can be shown as a dotted line in both the Lewis structure and the molecular model (Figure 10.6.2).

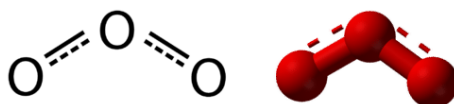


Figure 10.6.2: "Half-bond" model of ozone molecule. This is a better description of the electronic structure of ozone than either of the resonance structures in Figure 10.6.1.

Many polyatomic ions also display resonance. In some cases, the true structure may be an average of three valid resonance structures, as in the case of the nitrate ion, NO_3^- in Figure 10.6.3

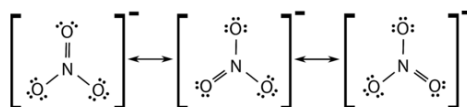


Figure 10.6.3: Resonance structure of nitrate anion.

The bond lengths between the central N atom and each O atom are identical and the bonds can be approximated as being equal to one and one-third bonds.

Summary

- Resonance structures are averages of different Lewis structure possibilities.
- Bond lengths are intermediate between covalent bonds and covalent double bonds.

10.6: Resonance- Equivalent Lewis Structures for the Same Molecule is shared under a [CC BY-NC-SA 4.0](#) license and was authored, remixed, and/or curated by LibreTexts.

- 10.6: Resonance - Equivalent Lewis Structures for the Same Molecule** by Henry Agnew, Marisa Alviar-Agnew is licensed [CK-12](#).
Original source: <https://www.ck12.org/c/chemistry/>.

10.7: Predicting the Shapes of Molecules

Template:HideTOC

Learning Objective

- Determine the shape of simple molecules.

Molecules have shapes. There is an abundance of experimental evidence to that effect—from their physical properties to their chemical reactivity. Small molecules—molecules with a single central atom—have shapes that can be easily predicted. The basic idea in molecular shapes is called **valence shell electron pair repulsion (VSEPR)**. VSEPR says that electron pairs, being composed of negatively charged particles, repel each other to get as far away from one another as possible. VSEPR makes a distinction between *electron group geometry*, which expresses how electron groups (bonds and nonbonding electron pairs) are arranged, and *molecular geometry*, which expresses how the atoms in a molecule are arranged. However, the two geometries are related.

There are two types of **electron groups**: any type of bond—single, double, or triple—and lone electron pairs. When applying VSEPR to simple molecules, the first thing to do is to count the number of electron groups around the central atom. Remember that a multiple bond counts as only *one* electron group.

Any molecule with only two atoms is linear. A molecule whose central atom contains only two electron groups orients those two groups as far apart from each other as possible— 180° apart. When the two electron groups are 180° apart, the atoms attached to those electron groups are also 180° apart, so the overall molecular shape is linear. Examples include BeH_2 and CO_2 :



Figure 10.7.1: Beryllium hydride and carbon dioxide bonding.

The two molecules, shown in the figure below in a "ball and stick" model.

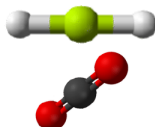


Figure 10.7.2: Beryllium hydride and carbon dioxide models. (CK12 Licence)

A molecule with three electron groups orients the three groups as far apart as possible. They adopt the positions of an equilateral triangle— 120° apart and in a plane. The shape of such molecules is *trigonal planar*. An example is BF_3 :

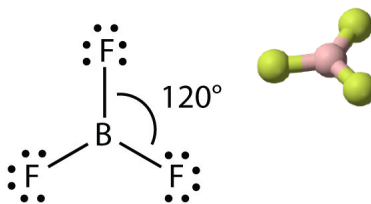


Figure 10.7.3: Boron trifluoride bonding. (CK12 Licence)

Some substances have a trigonal planar electron group distribution but have atoms bonded to only two of the three electron groups. An example is GeF_2 :

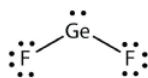


Figure 10.7.4: Germanium difluoride bonding.

From an electron group geometry perspective, GeF_2 has a trigonal planar shape, but its real shape is dictated by the positions of the atoms. This shape is called *bent* or *angular*.

A molecule with four electron groups about the central atom orients the four groups in the direction of a tetrahedron, as shown in Figure 10.7.1 Tetrahedral Geometry. If there are four atoms attached to these electron groups, then the molecular shape is also *tetrahedral*. Methane (CH_4) is an example.

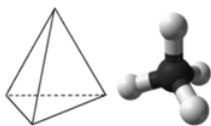


Figure 10.7.5: Tetrahedral structure of methane. (CK12 Licence)

This diagram of CH_4 illustrates the standard convention of displaying a three-dimensional molecule on a two-dimensional surface. The straight lines are in the plane of the page, the solid wedged line is coming out of the plane toward the reader, and the dashed wedged line is going out of the plane away from the reader.

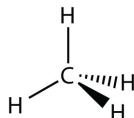


Figure 10.7.6: Methane bonding. (CK12 Licence)

NH_3 is an example of a molecule whose central atom has four electron groups, but only three of them are bonded to surrounding atoms.

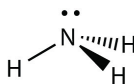


Figure 10.7.7: Ammonia bonding. (CK12 Licence)

Although the electron groups are oriented in the shape of a tetrahedron, from a molecular geometry perspective, the shape of NH_3 is *trigonal pyramidal*.

H_2O is an example of a molecule whose central atom has four electron groups, but only two of them are bonded to surrounding atoms.



Figure 10.7.8: Water bonding.

Although the electron groups are oriented in the shape of a tetrahedron, the shape of the molecule is *bent* or *angular*. A molecule with four electron groups about the central atom, but only one electron group bonded to another atom, is linear because there are only two atoms in the molecule.

Double or triple bonds count as a single electron group. The Lewis electron dot diagram of formaldehyde (CH_2O) is shown in Figure 10.7.9.



Figure 10.7.9: Lewis Electron Dot Diagram of Formaldehyde.

The central C atom has three electron groups around it because the double bond counts as one electron group. The three electron groups repel each other to adopt a trigonal planar shape.

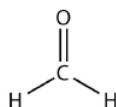


Figure 10.7.10: Formaldehyde bonding.

(The lone electron pairs on the O atom are omitted for clarity.) The molecule will not be a perfect equilateral triangle because the C–O double bond is different from the two C–H bonds, but both planar and triangular describe the appropriate approximate shape of this molecule.

Table 10.7.1 summarizes the shapes of molecules based on the number of electron groups and surrounding atoms.

Table 10.7.1: Summary of Molecular Shapes

Number of Electron Groups on Central Atom	Number of Bonding Groups	Number of Lone Pairs	Electron Geometry	Molecular Shape
2	2	0	linear	linear
3	3	0	trigonal planar	trigonal planar
3	2	1	trigonal planar	bent
4	4	0	tetrahedral	tetrahedral
4	3	1	tetrahedral	trigonal pyramidal
4	2	2	tetrahedral	bent

✓ Example 10.7.1

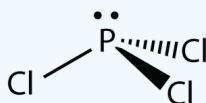
What is the approximate shape of each molecule?

- PCl_3
- NOF

Solution

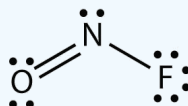
The first step is to draw the Lewis structure of the molecule.

For PCl_3 , the electron dot diagram is as follows:



The lone electron pairs on the Cl atoms are omitted for clarity. The P atom has four electron groups with three of them bonded to surrounding atoms, so the molecular shape is trigonal pyramidal.

The electron dot diagram for NOF is as follows:



The N atom has three electron groups on it, two of which are bonded to other atoms. The molecular shape is bent.

? Exercise 10.7.1

What is the approximate molecular shape of CH_2Cl_2 ?

Answer

Tetrahedral

? Exercise 10.7.2

Ethylene (C_2H_4) has two central atoms. Determine the geometry around each central atom and the shape of the overall molecule. (Hint: hydrogen is a terminal atom.)

Answer

Trigonal planar about both central C atoms.

Summary

The approximate shape of a molecule can be predicted from the number of electron groups and the number of surrounding atoms.

10.7: Predicting the Shapes of Molecules is shared under a [CC BY-NC-SA 4.0](#) license and was authored, remixed, and/or curated by LibreTexts.

- **10.7: Predicting the Shapes of Molecules** by Henry Agnew, Marisa Alviar-Agnew is licensed [notset](#).

10.8: Electronegativity and Polarity - Why Oil and Water Don't Mix

Template:HideTOC

Learning Objectives

- Explain how polar compounds differ from nonpolar compounds.
- Determine if a molecule is polar or nonpolar.
- Given a pair of compounds, predict which would have a higher melting or boiling point.

Bond Polarity

The ability of an atom in a molecule to attract shared electrons is called **electronegativity**. When two atoms combine, the difference between their electronegativities is an indication of the type of bond that will form. If the difference between the electronegativities of the two atoms is small, neither atom can take the shared electrons completely away from the other atom, and the bond will be covalent. If the difference between the electronegativities is large, the more electronegative atom will take the bonding electrons completely away from the other atom (electron transfer will occur), and the bond will be ionic. This is why metals (low electronegativities) bonded with nonmetals (high electronegativities) typically produce ionic compounds.

A bond may be so polar that an electron actually transfers from one atom to another, forming a true ionic bond. How do we judge the degree of polarity? Scientists have devised a scale called **electronegativity**, a scale for judging how much atoms of any element attract electrons. Electronegativity is a unitless number; the higher the number, the more an atom attracts electrons. A common scale for electronegativity is shown in Figure 10.8.1.

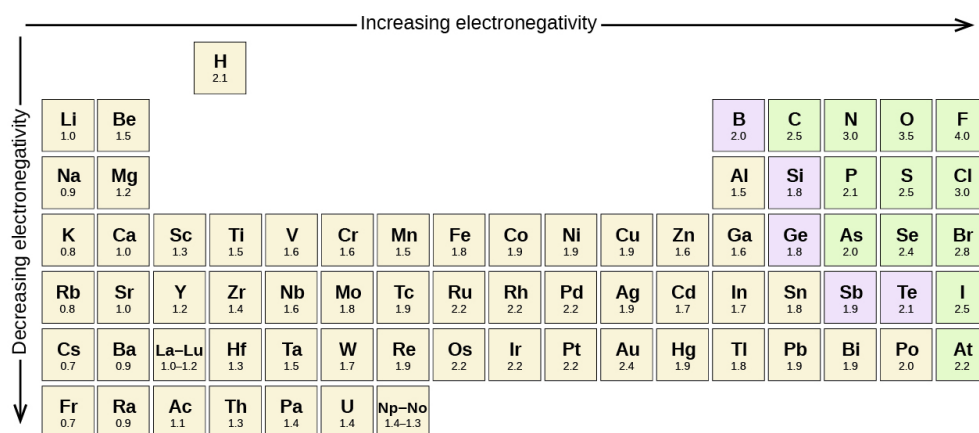


Figure 10.8.1: Electronegativities of the Elements. Electronegativities are used to determine the polarity of covalent bonds.

The polarity of a covalent bond can be judged by determining the *difference* of the electronegativities of the two atoms involved in the covalent bond, as summarized in the following table:

difference of the electronegativities of the two atoms involved in the covalent bond

Electronegativity Difference	Bond Type
0–0.4	pure covalent
0.5–2.0	polar covalent
>2.0	likely ionic

Nonpolar Covalent Bonds

A bond in which the electronegativity difference is less than 1.9 is considered to be mostly covalent in character. However, at this point we need to distinguish between two general types of covalent bonds. A **nonpolar covalent bond** is a covalent bond in which the bonding electrons are shared equally between the two atoms. In a nonpolar covalent bond, the distribution of electrical charge is balanced between the two atoms.

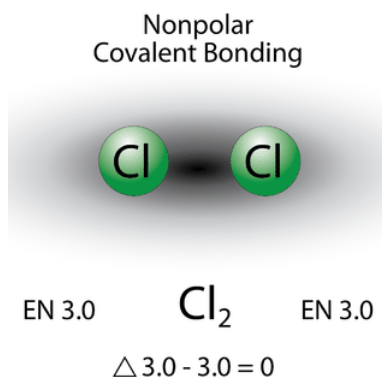


Figure 10.8.2: A nonpolar covalent bond is one in which the distribution of electron density between the two atoms is equal.

The two chlorine atoms share the pair of electrons in the single covalent bond equally, and the electron density surrounding the Cl_2 molecule is symmetrical. Also note that molecules in which the electronegativity difference is very small (<0.5) are also considered nonpolar covalent. An example would be a bond between chlorine and bromine ($\Delta\text{EN} = 3.0 - 2.8 = 0.2$).

Polar Covalent Bonds

A bond in which the electronegativity difference between the atoms is between 0.5 and 2.0 is called a polar covalent bond. A **polar covalent bond** is a covalent bond in which the atoms have an unequal attraction for electrons and so the sharing is unequal. In a polar covalent bond, sometimes simply called a polar bond, the distribution of electrons around the molecule is no longer symmetrical.

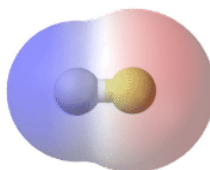


Figure 10.8.3: In the polar covalent bond of HF, the electron density is unevenly distributed. There is a higher density (red) near the fluorine atom, and a lower density (blue) near the hydrogen atom.

An easy way to illustrate the uneven electron distribution in a polar covalent bond is to use the Greek letter delta (δ).



Figure 10.8.4: Use of δ to indicate partial charge.

The atom with the greater electronegativity acquires a partial negative charge, while the atom with the lesser electronegativity acquires a partial positive charge. The delta symbol is used to indicate that the quantity of charge is less than one. A crossed arrow can also be used to indicate the direction of greater electron density.



Figure 10.8.5: Use of crossed arrow to indicate polarity.



Electronegativity differences in bonding using Pauling scale. Differences in electronegativity classify bonds as covalent, polar covalent, or ionic.

✓ Example 10.8.1: Bond Polarity

What is the polarity of each bond?

- C–H
- O–H

Solution

Using Figure 10.8.1, we can calculate the difference of the electronegativities of the atoms involved in the bond.

- For the C–H bond, the difference in the electronegativities is $2.5 - 2.1 = 0.4$. Thus we predict that this bond will be nonpolar covalent.
- For the O–H bond, the difference in electronegativities is $3.5 - 2.1 = 1.4$, so we predict that this bond will be polar covalent.

? Exercise 10.8.1

What is the polarity of each bond?

- Rb–F
- P–Cl

Answer a

likely ionic

Answer b

polar covalent

Molecular Polarity

To determine if a molecule is polar or nonpolar, it is generally useful to look at Lewis structures. **Nonpolar compounds** will be symmetric, meaning all of the sides around the central atom are identical—bonded to the same element with no unshared pairs of electrons. **Polar molecules** are asymmetric, either containing lone pairs of electrons on a central atom or having atoms with different electronegativities bonded. This works pretty well, as long as you can visualize the molecular geometry. That's the hard part. To know how the bonds are oriented in space, you have to have a strong grasp of Lewis structures and VSEPR theory. Assuming that you do, you can look at the structure of each one and decide if it is polar or not, *whether or not you know the individual atom's electronegativity*. This is because you know that all bonds between dissimilar elements are polar, and in these particular examples, it doesn't matter which direction the dipole moment vectors are pointing (out or in).

A **polar molecule** is a molecule in which one end of the molecule is slightly positive, while the other end is slightly negative. A diatomic molecule that consists of a polar covalent bond, such as HF, is a polar molecule. The two electrically charged regions on either end of the molecule are called poles, similar to a magnet having a north and a south pole. A molecule with two poles is called a **dipole** (see figure below). Hydrogen fluoride is a dipole.



Figure 10.8.6: A dipole is any molecule with a positive end and a negative end, resulting from unequal distribution of electron density throughout the molecule.

For molecules with more than two atoms, the molecular geometry must also be taken into account when determining if the molecule is polar or nonpolar. The figure below shows a comparison between carbon dioxide and water. Carbon dioxide (CO_2) is a linear molecule. The oxygen atoms are more electronegative than the carbon atom, so there are two individual dipoles pointing outward from the C atom to each O atom. However, since the dipoles are of equal strength and are oriented this way, they cancel out and the overall molecular polarity of CO_2 is zero.

Water is a bent molecule because of the two lone pairs on the central oxygen atom. The individual dipoles point from the H atoms toward the O atom. Because of the shape, the dipoles do not cancel each other out and the water molecule is polar. In the figure below, the net dipole is shown in blue and points upward.

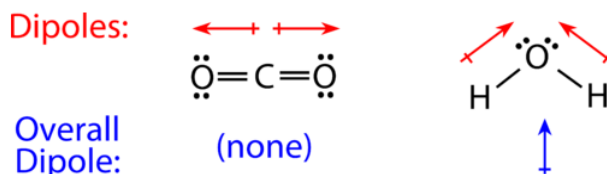


Figure 10.8.7: The molecular geometry of a molecule affects its polarity. Each CO bond has a dipole moment, but they point in opposite directions so that the net CO_2 molecule is nonpolar. In contrast, water is polar because the OH bond moments do not cancel out.

Some other molecules are shown in the figure below. Notice that a tetrahedral molecule such as CH_4 is nonpolar. However, if one of the peripheral H atoms is replaced with another atom that has a different electronegativity, the molecule becomes polar. A trigonal planar molecule (BF_3) may be nonpolar if all three peripheral atoms are the same, but a trigonal pyramidal molecule (NH_3) is polar.

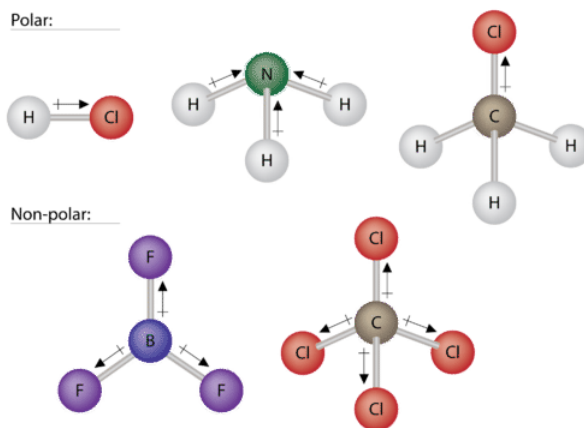


Figure 10.8.8: Some examples of polar and nonpolar molecules based on molecular geometry.

To summarize, to be polar, a molecule must:

1. Contain at least one polar covalent bond.
2. Have a molecular structure such that the sum of the vectors of each bond dipole moment do not cancel.

Steps to Identify Polar Molecules

1. Draw the Lewis structure.
2. Figure out the geometry (using VSEPR theory).
3. Visualize or draw the geometry.
4. Find the net dipole moment (you don't have to actually do calculations if you can visualize it).
5. If the net dipole moment is zero, it is non-polar. Otherwise, it is polar.

Properties of Polar Molecules

Polar molecules tend to align when placed in an electric field with the positive end of the molecule oriented toward the negative plate and the negative end toward the positive plate (Figure 10.8.14). We can use an electrically charged object to attract polar molecules, but nonpolar molecules are not attracted. Also, polar solvents are better at dissolving polar substances, and nonpolar solvents are better at dissolving nonpolar substances.

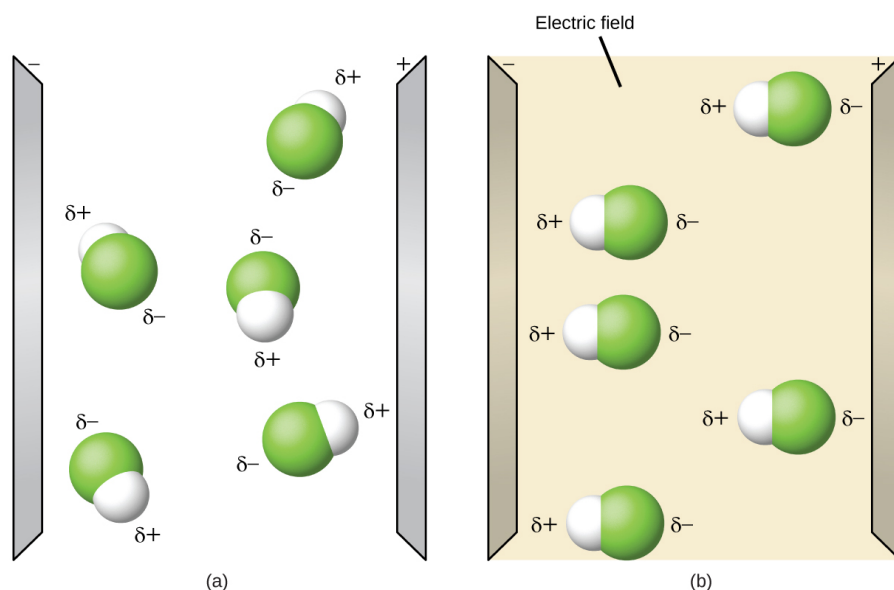


Figure 10.8.9: (a) Molecules are always randomly distributed in the liquid state in the absence of an electric field. (b) When an electric field is applied, polar molecules like HF will align to the dipoles with the field direction. (OpenStax CC-BY-SA);

While molecules can be described as "polar covalent" or "ionic", it must be noted that this is often a relative term, with one molecule simply being *more polar* or *less polar* than another. However, the following properties are typical of such molecules. Polar molecules tend to:

- have higher melting points than nonpolar molecules
- have higher boiling points than nonpolar molecules
- be more soluble in water (dissolve better) than nonpolar molecules
- have lower vapor pressures than nonpolar molecules

✓ Example 10.8.2:

Label each of the following as polar or nonpolar.

a. Water, H_2O :

b. Methanol, CH_3OH :

c. Hydrogen Cyanide, HCN :

d. Oxygen, O_2 :

e. Propane, C_3H_8 :

Solution

- a. Water is polar. Any molecule with lone pairs of electrons around the central atom is polar.
- b. Methanol is polar. This is not a symmetric molecule. The —OH side is different from the other 3 —H sides.
- c. Hydrogen cyanide is polar. The molecule is not symmetric. The nitrogen and hydrogen have different electronegativities, creating an uneven pull on the electrons.
- d. Oxygen is nonpolar. The molecule is symmetric. The two oxygen atoms pull on the electrons by exactly the same amount.
- e. Propane is nonpolar, because it is symmetric, with H atoms bonded to every side around the central atoms and no unshared pairs of electrons.

? Exercise 10.8.2

Label each of the following as polar or nonpolar.

- a. SO_3
- b. NH_3

Answer a

nonpolar

Answer b

polar

Contributions & Attributions

- StackExchange ([thomij](#)).

10.8: Electronegativity and Polarity - Why Oil and Water Don't Mix is shared under a [CC BY-NC-SA 4.0](#) license and was authored, remixed, and/or curated by LibreTexts.

- **10.8: Electronegativity and Polarity - Why Oil and Water Do not Mix** by Henry Agnew, Marisa Alviar-Agnew is licensed [CK-12](#).
Original source: <https://www.ck12.org/c/chemistry/>.

CHAPTER OVERVIEW

11: Gases

Of the three basic phases of matter—solids, liquids, and gases—only one of them has predictable physical properties: gases. In fact, the study of the properties of gases was the beginning of the development of modern chemistry from its alchemical roots. The interesting thing about some of these properties is that they are independent of the identity of the gas. That is, it doesn't matter if the gas is helium gas, oxygen gas, or sulfur vapors; some of their behavior is predictable and, as we will find, very similar. In this chapter, we will review some of the common behaviors of gases. Gases have no definite shape or volume; they tend to fill whatever container they are in. They can compress and expand, sometimes to a great extent. Gases have extremely low densities, one-thousandth or less the density of a liquid or solid. Combinations of gases tend to mix together spontaneously; that is, they form solutions. Air, for example, is a solution of mostly nitrogen and oxygen. Any understanding of the properties of gases must be able to explain these characteristics.

[11.1: Extra-Long Straws](#)

[11.2: Kinetic Molecular Theory- A Model for Gases](#)

[11.3: Pressure- The Result of Constant Molecular Collisions](#)

[11.4: Boyle's Law- Pressure and Volume](#)

[11.5: Charles's Law- Volume and Temperature](#)

[11.6: Gay-Lussac's Law- Temperature and Pressure](#)

[11.7: The Combined Gas Law- Pressure, Volume, and Temperature](#)

[11.8: Avogadro's Law- Volume and Moles](#)

[11.9: The Ideal Gas Law- Pressure, Volume, Temperature, and Moles](#)

[11.10: Mixtures of Gases- Why Deep-Sea Divers Breathe a Mixture of Helium and Oxygen](#)

[11.11: Gases in Chemical Reactions](#)

11: Gases is shared under a [CC BY-NC-SA 4.0](#) license and was authored, remixed, and/or curated by LibreTexts.

11.1: Extra-Long Straws

Template:HideTOC

A drinking straw is a tube for transferring a beverage from its container to the mouth of the drinker and is typically a thin tube of plastic (such as polypropylene and polystyrene) or other material. Many people believe that when they drink a liquid they are sucking the liquid up, however the liquid is really being pushed up. A straw works because when you suck the air out of the straw, it creates a vacuum. This causes a decrease in air pressure on the inside of the straw. Since the atmospheric pressure is greater on the outside of the straw, liquid is forced into and up the straw and into your mouth (Figure 11.1.1).

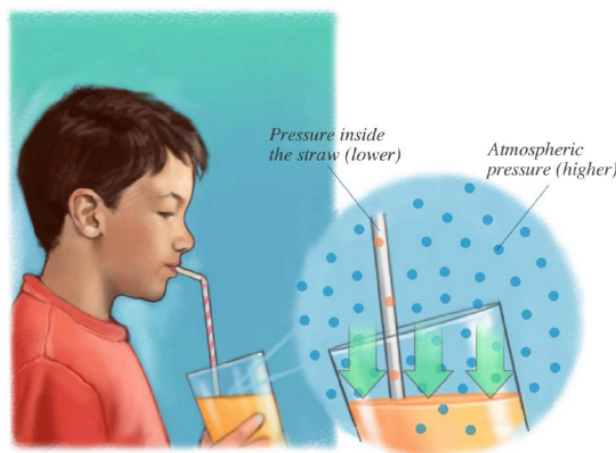


Figure 11.1.1: As you suck the air out of the straw, it creates a low pressure zone inside of it. With a low pressure zone, there is nothing pushing down on the juice, so it moves upward easily. (CC BY-NC 4.0; Ümit Kaya)

How Long of a Straw is Possible?

With the straw just sitting in the glass, the pressure on the surface of the tea is the same all over, including on the little bit of surface inside the straw. When you suck the air out of the straw, you decrease the pressure inside the straw, allowing the higher pressure on the rest of the surface to push the tea up the straw and into your mouth. Because it is really the atmosphere that is doing the pushing, the atmospheric pressure limits how high water will go up a straw.

If you formed a perfect vacuum within the straw, the pressure outside of the straw at sea level would be enough to push water to a total height of about 10.3 m. A 10.3-m column of water exerts the same pressure—101,325 N/m² or 14.7 lb/in² (psi)—as do the gas molecules in our atmosphere. At sea level, the air pressure is enough to support a column of water about thirty feet high. This means that even if you could suck all the air out of a forty-foot straw, the water would not rise more than thirty feet.

Contributions & Attributions

- Lisa Peck's Conceptual Physics Class

11.1: Extra-Long Straws is shared under a [CC BY-NC-SA 4.0](#) license and was authored, remixed, and/or curated by LibreTexts.

- **11.1: Extra-Long Straws** by Henry Agnew, Marisa Alviar-Agnew is licensed [CC BY-SA 3.0](#).

11.2: Kinetic Molecular Theory- A Model for Gases

Template:HideTOC

Learning Objectives

- State the major concepts behind the kinetic theory of gases.
- Relate the general properties of gases to the kinetic theory.

Gases were among the first substances studied in terms of the modern scientific method, which was developed in the 1600s. It did not take long to recognize that gases all shared certain physical behaviors, suggesting that all gases could be described by one all-encompassing theory. Today, that theory is the **kinetic theory of gases**. It is based on the following statements:

1. Gases consist of tiny particles of matter that are in constant motion.
2. Gas particles are constantly colliding with each other and the walls of a container. These collisions are elastic; that is, there is no net loss of energy from the collisions.
3. Gas particles are separated by large distances, with the size of a gas particle tiny compared to the distances that separate them.
4. There are no interactive forces (i.e., attraction or repulsion) between the particles of a gas.
5. The average speed of gas particles is dependent on the temperature of the gas.

Figure 11.2.1 shows a representation of how we mentally picture the gas phase.

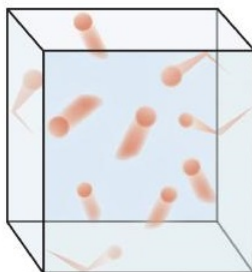


Figure 11.2.1: The Kinetic Theory of Gases. The kinetic theory of gases describes this state of matter as composed of tiny particles in constant motion with a lot of distance between the particles.

This model of gases explains some of the physical properties of gases. Because most of a gas is empty space, a gas has a low density and can expand or contract under the appropriate influence. The fact that gas particles are in constant motion means that two or more gases will always mix, as the particles from the individual gases move and collide with each other.

An **ideal gas** is a gas that exactly follows the statements of the kinetic theory. Unfortunately, *real gases* are not ideal. Many gases deviate slightly from agreeing perfectly with the kinetic theory of gases. However, most gases adhere to the statements so well that the kinetic theory of gases is well accepted by the scientific community.

- The physical behavior of gases is explained by the kinetic theory of gases.
- An ideal gas adheres exactly to the kinetic theory of gases.

11.2: Kinetic Molecular Theory- A Model for Gases is shared under a [CC BY-NC-SA 4.0](#) license and was authored, remixed, and/or curated by LibreTexts.

- [11.2: Kinetic Molecular Theory- A Model for Gases](#) by Henry Agnew, Marisa Alviar-Agnew is licensed [CC BY-NC-SA 3.0](#). Original source: <https://www.ck12.org/c/chemistry/>.

11.3: Pressure- The Result of Constant Molecular Collisions

Template:HideTOC

Learning Objectives

- Define *pressure*.
- Learn the units of pressure and how to convert between them.

The kinetic theory of gases indicates that gas particles are always in motion and are colliding with other particles and the walls of the container holding them. Although collisions with container walls are elastic (i.e., there is no net energy gain or loss because of the collision), a gas particle does exert a force on the wall during the collision. The accumulation of all these forces distributed over the area of the walls of the container causes something we call pressure. **Pressure** (P) is defined as the force of all the gas particle/wall collisions divided by the area of the wall:

$$\text{pressure} = \frac{\text{force}}{\text{area}}$$

All gases exert pressure; it is one of the fundamental measurable quantities of this phase of matter. Even our atmosphere exerts pressure—in this case, the gas is being “held in” by the earth’s gravity, rather than the gas being in a container. The pressure of the atmosphere is about 14.7 pounds of force for every square inch of surface area: 14.7 lb/in².

Pressure has a variety of units. The formal, SI-approved unit of pressure is the *pascal* (Pa), which is defined as 1 N/m² (one newton of force over an area of one square meter). However, this is usually too small in magnitude to be useful. A common unit of pressure is the **atmosphere** (atm), which was originally defined as the average atmospheric pressure at sea level.

However, “average atmospheric pressure at sea level” is difficult to pinpoint because of atmospheric pressure variations. A more reliable and common unit is **millimeters of mercury** (mmHg), which is the amount of pressure exerted by a column of mercury exactly 1 mm high. An equivalent unit is the **torr**, which equals 1 mmHg. (The torr is named after Evangelista Torricelli, a seventeenth-century Italian scientist who invented the mercury barometer.) With these definitions of pressure, the atmosphere unit is redefined: 1 atm is defined as exactly 760 mmHg, or 760 torr. We thus have the following equivalents:

$$1 \text{ atm} = 760 \text{ mmHg} = 760 \text{ torr}$$


We can use these equivalents as with any equivalence—to perform conversions from one unit to another. Relating these to the formal SI unit of pressure, 1 atm = 101,325 Pa.

✓ Example 11.3.1: Pressure Conversion

How many atmospheres are there in 595 torr?

Solution

Solutions to Example 11.3.1

Steps for Problem Solving	Unit Conversion
Identify the “given” information and what the problem is asking you to “find.”	Given: 595 torr Find: ? atm
List other known quantities.	1 atm = 760 torr
Prepare a concept map.	
Cancel units and calculate.	$595 \cancel{\text{ torr}} \times \frac{1 \text{ atm}}{760 \cancel{\text{ torr}}} = 0.783 \text{ atm}$
Think about your result.	595 torr is less than 760 torr so the final answer should be less than 1 atm.

? Exercise 11.3.1

How many atmospheres are there in 1,022 torr?

Answer


1.345 atm

✓ Example 11.3.2: Mars

The atmosphere on Mars is largely CO₂ at a pressure of 6.01 mmHg. What is this pressure in atmospheres?

Solution

Solutions to Example 11.3.2

Steps for Problem Solving	Unit Conversion
Identify the "given" information and what the problem is asking you to "find."	Given: 6.01mmHg Find: ? atm
List other known quantities.	1 atm = 760 mmHg
Prepare a concept map.	 $\frac{1 \text{ atm}}{760 \text{ mmHg}}$
Cancel units and calculate.	$6.01 \cancel{\text{ mmHg}} \times \frac{1 \text{ atm}}{760 \cancel{\text{ mmHg}}} = 0.00791 \text{ atm} = 7.91 \times 10^{-3} \text{ atm}$
Think about your result.	6.01 is a very small number relative to 760 mmHg, just like the value in atmospheres.

? Exercise 11.3.2

Atmospheric pressure is low in the eye of a hurricane. In a 1979 hurricane in the Pacific Ocean, a pressure of 0.859 atm was reported inside the eye. What is this pressure in torr?

Answer

652 torr

Summary

- Pressure is a force exerted over an area.
- Pressure has several common units that can be converted.

11.3: Pressure- The Result of Constant Molecular Collisions is shared under a [CC BY-NC-SA 4.0](https://creativecommons.org/licenses/by-nc-sa/4.0/) license and was authored, remixed, and/or curated by LibreTexts.

- [11.3: Pressure - The Result of Constant Molecular Collisions](https://www.ck12.org/c/chemistry/) by Henry Agnew, Marisa Alviar-Agnew is licensed [CK-12](https://creativecommons.org/licenses/by-nc-sa/4.0/). Original source: <https://www.ck12.org/c/chemistry/>.

11.4: Boyle's Law- Pressure and Volume

Template:HideTOC

Learning Objectives

- Learn what is meant by the term *gas laws*.
- Learn and apply Boyle's Law.

When seventeenth-century scientists began studying the physical properties of gases, they noticed some simple relationships between some of the measurable properties of the gas. Take pressure (P) and volume (V), for example. Scientists noted that for a given amount of a gas (usually expressed in units of moles [n]), if the temperature (T) of the gas was kept constant, pressure and volume were related: as one increases, the other decreases. As one decreases, the other increases. This means that pressure and volume are *inversely related*.

There is more to it, however: pressure and volume of a given amount of gas at constant temperature are *numerically* related. If you take the pressure value and multiply it by the volume value, the product is a constant for a given amount of gas at a constant temperature:

$$P \times V = \text{constant at constant } n \text{ and } T$$

If either volume or pressure changes while amount and temperature stay the same, then the other property must change so that the product of the two properties still equals that same constant. That is, if the original conditions are labeled P_1 and V_1 and the new conditions are labeled P_2 and V_2 , we have

$$P_1 V_1 = \text{constant} = P_2 V_2$$

where the properties are assumed to be multiplied together. Leaving out the middle part, we have simply

$$P_1 V_1 = P_2 V_2 \text{ at constant } n \text{ and } T$$

This equation is an example of a gas law. A **gas law** is a simple mathematical formula that allows you to model, or predict, the behavior of a gas. This particular gas law is called **Boyle's Law**, after the English scientist Robert Boyle, who first announced it in 1662. Figure 11.4.1 shows two representations of how Boyle's Law works.

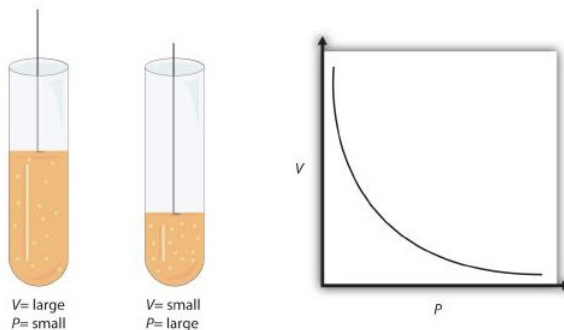


Figure 11.4.1: Boyle's Law. A piston having a certain pressure and volume (left piston) will have half the volume when its pressure is twice as much (right piston). One can also plot P versus V for a given amount of gas at a certain temperature; such a plot will look like the graph on the right.

Boyle's Law is an example of a second type of mathematical problem we see in chemistry—one based on a mathematical formula. Tactics for working with mathematical formulas are different from tactics for working with conversion factors. First, most of the questions you will have to answer using formulas are word-type questions, so the first step is to identify what quantities are known and assign them to variables. Second, in most formulas, some mathematical rearrangements (i.e., algebra) must be performed to solve for an unknown variable. The rule is that to find the value of the unknown variable, you must mathematically isolate the unknown variable *by itself and in the numerator* of one side of the equation. Finally, units must be consistent. For example, in Boyle's Law there are two pressure variables; they must have the same unit. There are also two volume variables; they also must have the same unit. In most cases, it won't matter *what* the unit is, but the unit must be the *same* on both sides of the equation.

✓ Example 11.4.1

A sample of gas has an initial pressure of 2.44 atm and an initial volume of 4.01 L. Its pressure changes to 1.93 atm. What is the new volume if temperature and amount are kept constant?

Solution

Solutions to Example 11.8.1

Steps for Problem Solving	
Identify the "given" information and what the problem is asking you to "find."	Given: $P_1 = 2.44$ atm and $V_1 = 4.01$ L $P_2 = 1.93$ atm Find: $V_2 = ?$ L
List other known quantities.	none
Plan the problem.	First, rearrange the equation algebraically to solve for V_2 . $V_2 = \frac{P_1 \times V_1}{P_2}$
Cancel units and calculate.	Now substitute the known quantities into the equation and solve. $V_2 = \frac{2.44 \text{ atm} \times 4.01 \text{ L}}{1.93 \text{ atm}} = 5.07 \text{ L}$
Think about your result.	We know that pressure and volume are inversely related; as one decreases, the other increases. Pressure is decreasing (from 2.44 atm to 1.93 atm), so volume should be increasing to compensate, and it is (from 4.01 L to 5.07 L). So the answer makes sense based on Boyle's Law.

? Exercise 11.4.1

If $P_1 = 334$ torr, $V_1 = 37.8$ mL, and $P_2 = 102$ torr, what is V_2 ?

Answer

124 mL

As mentioned, you can use any units for pressure and volume, but both pressures must be expressed in the same units, and both volumes must be expressed in the same units.

✓ Example 11.4.2:

A sample of gas has an initial pressure of 722 torr and an initial volume of 88.8 mL. Its volume changes to 0.663 L. What is the new pressure?

Solution

Solutions to Example 11.8.2

Steps for Problem Solving	
Identify the "given" information and what the problem is asking you to "find."	Given: $P_1 = 722$ torr and $V_1 = 88.8$ mL $V_2 = 0.633$ L Find: $P_2 = ?$ torr
List other known quantities.	1 L = 1000 mL to have the same units for volume.

Steps for Problem Solving	
Plan the problem.	1. Perform the conversion of the second volume unit from L to mL. 2. Rearrange the equation algebraically to solve for P_2 . $P_2 = \frac{P_1 \times V_1}{V_2}$
Cancel units and calculate.	1. $0.663 \cancel{\text{L}} \times \frac{1000 \text{ mL}}{1 \cancel{\text{L}}} = 663 \text{ mL}$ 2. Substitute the known quantities into the equation and solve. $P_2 = \frac{722 \text{ torr} \times 88.8 \cancel{\text{ mL}}}{663 \cancel{\text{ mL}}} = 96.7 \text{ torr}$
Think about your result.	When the volume increased, the pressure decreased, which is as expected for Boyle's Law.

? Exercise 11.4.2

If $V_1 = 456 \text{ mL}$, $P_1 = 308 \text{ torr}$, and $P_2 = 1.55 \text{ atm}$, what is V_2 ?

Answer

119 mL

Summary

- The behavior of gases can be modeled with gas laws.
- Boyle's Law relates the pressure and volume of a gas at constant temperature and amount.

11.4: Boyle's Law- Pressure and Volume is shared under a [CC BY-NC-SA 4.0](#) license and was authored, remixed, and/or curated by LibreTexts.

- [11.4: Boyle's Law - Pressure and Volume](#) by Henry Agnew, Marisa Alviar-Agnew is licensed [CK-12](#). Original source: <https://www.ck12.org/c/chemistry/>.

11.5: Charles's Law- Volume and Temperature

Template:HideTOC

Learning Objectives

- Learn and apply Charles's Law.

Everybody enjoys the smell and taste of freshly-baked bread. It is light and fluffy as a result of the action of yeast on sugar. The yeast converts the sugar to carbon dioxide, which at high temperatures causes the dough to expand. The end result is an enjoyable treat, especially when covered with melted butter.

Charles's Law

French physicist Jacques Charles (1746-1823) studied the effect of temperature on the volume of a gas at constant pressure. **Charles's Law** states that the volume of a given mass of gas varies directly with the absolute temperature of the gas when pressure is kept constant. The absolute temperature is temperature measured with the Kelvin scale. The Kelvin scale must be used because zero on the Kelvin scale corresponds to a complete stop of molecular motion.

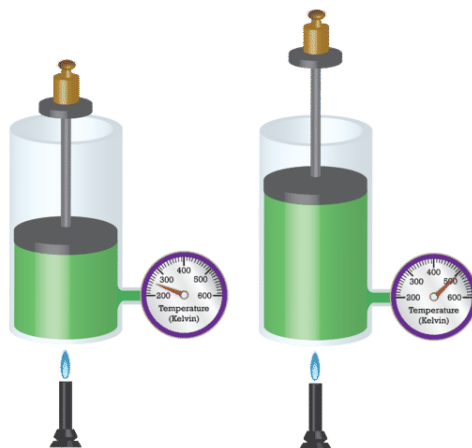


Figure 11.5.1: As a container of confined gas is heated, its molecules increase in kinetic energy and push the movable piston outward, resulting in an increase in volume.

Mathematically, the direct relationship of Charles's Law can be represented by the following equation:

$$\frac{V}{T} = k$$

As with Boyle's Law, k is constant only for a given gas sample. The table below shows temperature and volume data for a set amount of gas at a constant pressure. The third column is the constant for this particular data set and is always equal to the volume divided by the Kelvin temperature.

Table 11.5.1: Temperature-Volume Data

Temperature (K)	Volume (mL)	$\frac{V}{T} = k \left(\frac{\text{mL}}{\text{K}} \right)$
50	20	0.40
100	40	0.40
150	60	0.40
200	80	0.40
300	120	0.40
500	200	0.40

Temperature (K)	Volume (mL)	$\frac{V}{T} = k \left(\frac{\text{mL}}{\text{K}} \right)$
1000	400	0.40

When this data is graphed, the result is a straight line, indicative of a direct relationship, shown in the figure below.

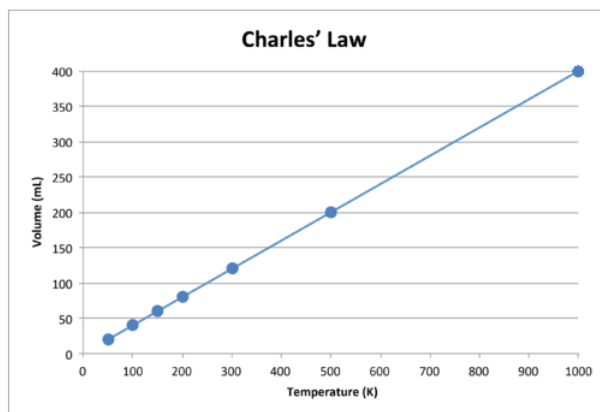


Figure 11.5.2: The volume of a gas increases as the Kelvin temperature increases.

Notice that the line goes exactly toward the origin, meaning that as the absolute temperature of the gas approaches zero, its volume approaches zero. However, when a gas is brought to extremely cold temperatures, its molecules would eventually condense into the liquid state before reaching absolute zero. The temperature at which this change into the liquid state occurs varies for different gases.

Charles's Law can also be used to compare changing conditions for a gas. Now we use V_1 and T_1 to stand for the initial volume and temperature of a gas, while V_2 and T_2 stand for the final volume and temperature. The mathematical relationship of Charles's Law becomes:

$$\frac{V_1}{T_1} = \frac{V_2}{T_2}$$

This equation can be used to calculate any one of the four quantities if the other three are known. The direct relationship will only hold if the temperatures are expressed in Kelvin. Temperatures in Celsius will not work. Recall the relationship that $K = ^\circ\text{C} + 273$.

✓ Example 11.5.1:

A balloon is filled to a volume of 2.20 L at a temperature of 22°C . The balloon is then heated to a temperature of 71°C . Find the new volume of the balloon.

Solution

Solutions to Example 11.5.1

Steps for Problem Solving	
Identify the "given" information and what the problem is asking you to "find."	Given: $V_1 = 2.20 \text{ L}$ and $T_1 = 22^\circ\text{C} = 295 \text{ K}$ $T_2 = 71^\circ\text{C} = 344 \text{ K}$ Find: $V_2 = ? \text{ L}$
List other known quantities.	The temperatures have first been converted to Kelvin.
Plan the problem.	First, rearrange the equation algebraically to solve for V_2 . $V_2 = \frac{V_1 \times T_2}{T_1}$

Steps for Problem Solving

Cancel units and calculate.

Now substitute the known quantities into the equation and solve.

$$V_2 = \frac{2.20 \text{ L} \times 344 \cancel{\text{K}}}{295 \cancel{\text{K}}} = 2.57 \text{ L}$$

Think about your result.

The volume increases as the temperature increases. The result has three significant figures.

? Exercise 11.5.1

If $V_1 = 3.77 \text{ L}$ and $T_1 = 255 \text{ K}$, what is V_2 if $T_2 = 123 \text{ K}$?

Answer

1.82 L

✓ Example 11.5.2:

A sample of a gas has an initial volume of 34.8 L and an initial temperature of -67°C . What must be the temperature of the gas for its volume to be 25.0 L?

Solution

Solutions to Example 11.5.2

Steps for Problem Solving

Identify the "given" information and what the problem is asking you to "find."

Given:

Given: $T_1 = -27^\circ\text{C}$ and $V_1 = 34.8 \text{ L}$

$V_2 = 25.0 \text{ L}$

Find: $T_2 = ? \text{ K}$

List other known quantities.

$\text{K} = -27^\circ\text{C} + 273$

Plan the problem.

1. Convert the initial temperature to Kelvin
2. Rearrange the equation algebraically to solve for T_2 .

$$T_2 = \frac{V_2 \times T_1}{V_1}$$

Cancel units and calculate.

1. $-67^\circ\text{C} + 273 = 206 \text{ K}$

2. Substitute the known quantities into the equation and solve.

$$T_2 = \frac{25.0 \cancel{\text{L}} \times 206 \text{ K}}{34.8 \cancel{\text{L}}} = 148 \text{ K}$$

Think about your result.

This is also equal to -125°C . As temperature decreases, volume decreases—which it does in this example.

? Exercise 11.5.2

If $V_1 = 623 \text{ mL}$, $T_1 = 255^\circ\text{C}$, and $V_2 = 277 \text{ mL}$, what is T_2 ?

Answer

235 K, or -38°C

Summary

- Charles's Law relates the volume and temperature of a gas at constant pressure and amount.

11.5: Charles's Law- Volume and Temperature is shared under a [CC BY-NC-SA 4.0](#) license and was authored, remixed, and/or curated by LibreTexts.

- 11.5: Charles's Law- Volume and Temperature** by Henry Agnew, Marisa Alviar-Agnew is licensed [CK-12](#). Original source: <https://www.ck12.org/c/chemistry/>.

11.6: Gay-Lussac's Law- Temperature and Pressure

Template:HideTOC

Learning Objectives

- Explain Gay-Lussac's Law.

Propane tanks are widely used with barbeque grills. But it's not fun to find out halfway through grilling that you have run out of gas. You can buy gauges that measure the pressure inside the tank to see how much is left. The gauge measures pressure and will register a higher pressure on a hot day than it will on a cold day. So you need to take the air temperature into account when you decide whether or not to refill the tank before your next cook-out.

Gay-Lussac's Law

When the temperature of a sample of gas in a rigid container is increased, the pressure of the gas increases as well. The increase in kinetic energy results in the molecules of gas striking the walls of the container with more force, resulting in a greater pressure. The French chemist Joseph Gay-Lussac (1778-1850) discovered the relationship between the pressure of a gas and its absolute temperature. **Gay-Lussac's Law** states that the pressure of a given mass of gas varies directly with the absolute temperature of the gas, when the volume is kept constant. Gay-Lussac's Law is very similar to Charles's Law, with the only difference being the type of container. Whereas the container in a Charles's Law experiment is flexible, it is rigid in a Gay-Lussac's Law experiment.



Figure 11.6.1: Joseph Gay-Lussac.

The mathematical expressions for Gay-Lussac's Law are likewise similar to those of Charles's Law:

$$\frac{P}{T} \quad \text{and} \quad \frac{P_1}{T_1} = \frac{P_2}{T_2}$$

A graph of pressure vs. temperature also illustrates a direct relationship. As a gas is cooled at constant volume, its pressure continually decreases until the gas condenses to a liquid.

✓ Example 11.6.1

The gas in an aerosol can is under a pressure of 3.00 atm at a temperature of 25°C. It is dangerous to dispose of an aerosol can by incineration. What would the pressure in the aerosol can be at a temperature of 845°C?

Solution

Solutions to Example 11.10.1

Steps for Problem Solving	
Identify the "given" information and what the problem is asking you to "find."	Given: $P_1 = 3.00 \text{ atm}$ $T_1 = 25^\circ\text{C} = 298 \text{ K}$ $T_2 = 845^\circ\text{C} = 1118 \text{ K}$ Find: $P_2 = ? \text{ atm}$
List other known quantities.	The temperatures have first been converted to Kelvin.

Steps for Problem Solving

Plan the problem.

First, rearrange the equation algebraically to solve for P_2 .

$$P_2 = \frac{P_1 \times T_2}{T_1}$$

Calculate.

Now substitute the known quantities into the equation and solve.

$$P_2 = \frac{3.00 \text{ atm} \times 1118 \text{ K}}{298 \text{ K}} = 11.3 \text{ atm}$$

Think about your result.

The pressure increases dramatically due to a large increase in temperature.

Summary

- Pressure and temperature at constant volume are directly proportional.

11.6: Gay-Lussac's Law- Temperature and Pressure is shared under a [CC BY-NC-SA 4.0](#) license and was authored, remixed, and/or curated by LibreTexts.

- **11.11: Gay-Lussac's Law- Temperature and Pressure** by Henry Agnew, Marisa Alviar-Agnew is licensed [CK-12](#). Original source: <https://www.ck12.org/c/chemistry/>.

11.7: The Combined Gas Law- Pressure, Volume, and Temperature

Template:HideTOC

Learning Objectives

- Learn and apply the Combined Gas Law.

One thing we notice about all the gas laws is that, collectively, volume and pressure are always in the numerator, and temperature is always in the denominator. This suggests that we can propose a gas law that combines pressure, volume, and temperature. This gas law is known as the **Combined Gas Law**, and its mathematical form is

$$\frac{P_1 V_1}{T_1} = \frac{P_2 V_2}{T_2} \text{ at constant } n$$

This allows us to follow changes in all three major properties of a gas. Again, the usual warnings apply about how to solve for an unknown algebraically (isolate it on one side of the equation in the numerator), units (they must be the same for the two similar variables of each type), and units of temperature must be in Kelvin.

✓ Example 11.7.1:

A sample of gas at an initial volume of 8.33 L, an initial pressure of 1.82 atm, and an initial temperature of 286 K simultaneously changes its temperature to 355 K and its volume to 5.72 L. What is the final pressure of the gas?

Solution

Solutions to Example 11.4.1

Steps for Problem Solving	
Identify the "given" information and what the problem is asking you to "find."	Given: $V_1 = 8.33 \text{ L}$, $P_1 = 1.82 \text{ atm}$, and $T_1 = 286 \text{ K}$ $V_2 = 5.72 \text{ L}$ and $T_2 = 355 \text{ K}$ Find: $P_2 = ? \text{ atm}$
List other known quantities.	none
Plan the problem.	First, rearrange the equation algebraically to solve for V_2 . $P_2 = \frac{P_1 V_1 T_2}{T_1 V_2}$
Calculate.	Now substitute the known quantities into the equation and solve. $P_2 = \frac{(1.82 \text{ atm})(8.33 \cancel{\text{ L}})(355 \cancel{\text{ K}})}{(286 \cancel{\text{ K}})(5.72 \cancel{\text{ L}})} = 3.22 \text{ atm}$
Think about your result.	Ultimately, the pressure increased, which would have been difficult to predict because two properties of the gas were changing.

? Exercise 11.7.1

If $P_1 = 662 \text{ torr}$, $V_1 = 46.7 \text{ mL}$, $T_1 = 266 \text{ K}$, $P_2 = 409 \text{ torr}$, and $T_2 = 371 \text{ K}$, what is V_2 ?

Answer

105 mL

As with other gas laws, if you need to determine the value of a variable in the denominator of the combined gas law, you can either cross-multiply all the terms or just take the reciprocal of the combined gas law. Remember, the variable you are solving for must be

in the numerator and all by itself on one side of the equation.

Summary

- The Combined Gas Law relates pressure, volume, and temperature of a gas.

11.7: The Combined Gas Law- Pressure, Volume, and Temperature is shared under a [CC BY-NC-SA 4.0](#) license and was authored, remixed, and/or curated by LibreTexts.

- **11.6: The Combined Gas Law- Pressure, Volume, and Temperature** by Henry Agnew, Marisa Alviar-Agnew is licensed [CK-12](#). Original source: <https://www.ck12.org/c/chemistry/>.

11.8: Avogadro's Law- Volume and Moles

Template:HideTOC

A flat tire is not very useful. It does not cushion the rim of the wheel and creates a very uncomfortable ride. When air is added to the tire, the pressure increases as more molecules of gas are forced into the rigid tire. How much air should be put into a tire depends on the pressure rating for that tire. Too little pressure and the tire will not hold its shape. Too much pressure and the tire could burst.

Avogadro's Law

You have learned about Avogadro's hypothesis: equal volumes of any gas at the same temperature and pressure contain the same number of molecules. It follows that the volume of a gas is directly proportional to the number of moles of gas present in the sample. **Avogadro's Law** states that the volume of a gas is directly proportional to the number of moles (or number of particles) of gas when the temperature and pressure are held constant. The mathematical expression of Avogadro's Law is:

$$V = k \times n$$

or

$$\frac{V_1}{n_1} = \frac{V_2}{n_2}$$

where n is the number of moles of gas and k is a constant. Avogadro's Law is in evidence whenever you blow up a balloon. The volume of the balloon increases as you add moles of gas to the balloon by blowing it up.

If the container holding the gas is rigid rather than flexible, pressure can be substituted for volume in Avogadro's Law. Adding gas to a rigid container makes the pressure increase.

✓ Example 11.8.1

A balloon has been filled to a volume of 1.90 L with 0.0920 mol of helium gas. If 0.0210 mol of additional helium is added to the balloon while the temperature and pressure are held constant, what is the new volume of the balloon?

Solution

Solutions to Example 11.11.1

Steps for Problem Solving	
Identify the "given" information and what the problem is asking you to "find."	Given: $V_1 = 1.90 \text{ L}$ $n_1 = 0.0920 \text{ mol}$ Find: $V_2 = ? \text{ L}$
List other known quantities.	Note that the final number of moles has to be calculated by adding the original number of moles to the moles of added helium. $n_2 = 0.0920 + 0.0210 = 0.1130 \text{ mol}$
Plan the problem.	First, rearrange the equation algebraically to solve for V_2 . $V_2 = \frac{V_1 \times n_2}{n_1}$
Calculate.	Now substitute the known quantities into the equation and solve. $V_2 = \frac{1.90 \text{ L} \times 0.1130 \cancel{\text{ mol}}}{0.0920 \cancel{\text{ mol}}} = 2.33 \text{ L}$
Think about your result.	Since a relatively small amount of additional helium was added to the balloon, its volume increases slightly.

? Exercise 11.8.1

A 12.8 L volume of gas contains .000498 moles of oxygen gas. At constant temperature and pressure, what volume does .0000136 moles of the gas fill?

Answer

0.350 L

Summary

- Calculations for relationships between volume and number of moles of a gas can be performed using Avogadro's Law.

11.8: Avogadro's Law- Volume and Moles is shared under a [CC BY-NC-SA 4.0](#) license and was authored, remixed, and/or curated by LibreTexts.

- [11.7: Avogadro's Law- Volume and Moles](#) by Henry Agnew, Marisa Alviar-Agnew is licensed [CK-12](#). Original source: <https://www.ck12.org/c/chemistry/>.

11.9: The Ideal Gas Law- Pressure, Volume, Temperature, and Moles

Template:HideTOC

Learning Objectives

- Explain the Ideal Gas Law.

There are a number of chemical reactions that require ammonia. In order to carry out the reaction efficiently, we need to know how much ammonia we have for stoichiometric purposes. Using gas laws, we can determine the number of moles present in the tank if we know the volume, temperature, and pressure of the system.

Ideal Gas Law

The Combined Gas Law shows that the pressure of a gas is inversely proportional to volume and directly proportional to temperature. Avogadro's Law shows that volume or pressure is directly proportional to the number of moles of gas. Putting these together leaves us with the following equation:

$$\frac{P_1 \times V_1}{T_1 \times n_1} = \frac{P_2 \times V_2}{T_2 \times n_2}$$

As with the other gas laws, we can also say that $\frac{(P \times V)}{(T \times n)}$ is equal to a constant. The constant can be evaluated provided that the gas being described is considered to be ideal.

The **Ideal Gas Law** is a single equation which relates the pressure, volume, temperature, and number of moles of an ideal gas. If we substitute in the variable R for the constant, the equation becomes:

$$\frac{P \times V}{T \times n} = R$$

The Ideal Gas Law is conveniently rearranged to look this way, with the multiplication signs omitted:

$$PV = nRT$$

The variable R in the equation is called the **ideal gas constant**.

Evaluating the Ideal Gas Constant

The value of R , the ideal gas constant, depends on the units chosen for pressure, temperature, and volume in the ideal gas equation. It is necessary to use Kelvin for the temperature and it is conventional to use the SI unit of liters for the volume. However, pressure is commonly measured in one of three units: kPa, atm, or mm Hg. Therefore, R can have three different values.

We will demonstrate how R is calculated when the pressure is measured in kPa. The volume of 1.00 mol of any gas at STP (Standard temperature, 273.15 K and pressure, 1 atm) is measured to be 22.414 L. We can substitute 101.325 kPa for pressure, 22.414 L for volume, and 273.15 K for temperature into the ideal gas equation and solve for R .

$$\begin{aligned} R &= \frac{PV}{nT} \\ &= \frac{101.325 \text{ kPa} \times 22.414 \text{ L}}{1.000 \text{ mol} \times 273.15 \text{ K}} \\ &= 8.314 \text{ kPa} \cdot \text{L/K} \cdot \text{mol} \end{aligned}$$

This is the value of R that is to be used in the ideal gas equation when the pressure is given in kPa. The table below shows a summary of this and the other possible values of R . It is important to choose the correct value of R to use for a given problem.

Table 11.9.1: Values of the Ideal Gas Constant

Unit of P	Unit of V	Unit of n	Unit of T	Value and Unit of R
kPa	L	mol	K	8.314 J/K · mol
atm	L	mol	K	0.08206 L · atm/K · mol
mm Hg	L	mol	K	62.36 L · mm Hg/K · mol

Notice that the unit for R when the pressure is in kPa has been changed to J/K · mol. A kilopascal multiplied by a liter is equal to the SI unit for energy, a joule (J).

✓ Example 11.9.1 Oxygen Gas

What volume is occupied by 3.76 g of oxygen gas at a pressure of 88.4 kPa and a temperature of 19°C? Assume the oxygen is ideal.

Solution

Solutions to Example 11.5.1

Steps for Problem Solving	
Identify the "given" information and what the problem is asking you to "find."	Given: <ul style="list-style-type: none"> $P = 88.4 \text{ kPa}$ $T = 19^\circ\text{C} = 292 \text{ K}$ Mass $\text{O}_2 = 3.76 \text{ g}$ Find: $V = ? \text{ L}$
List other known quantities.	$\text{O}_2 = 32.00 \text{ g/mol}$ $R = 8.314 \text{ J/K} \cdot \text{mol}$
Plan the problem.	1. First, determine the number of moles of O_2 from the given mass and the molar mass. 2. Then, rearrange the equation algebraically to solve for V $V = \frac{nRT}{P}$
Calculate.	1. $3.76 \cancel{\text{g}} \times \frac{1 \text{ mol } \text{O}_2}{32.00 \cancel{\text{g}} \text{O}_2} = 0.1175 \text{ mol } \text{O}_2$ 2. Now substitute the known quantities into the equation and solve. $V = \frac{nRT}{P} = \frac{0.1175 \cancel{\text{mol}} \times 8.314 \text{ J/K} \cdot \cancel{\text{mol}} \times 292 \cancel{\text{K}}}{88.4 \cancel{\text{kPa}}} = 3.23 \text{ L}$
Think about your result.	The number of moles of oxygen is far less than one mole, so the volume should be fairly small compared to molar volume (22.4 L/mol) since the pressure and temperature are reasonably close to standard. The result has three significant figures because of the values for T and P . Since a joule (J) = kPa · L, the units cancel out correctly, leaving a volume in liters.

✓ Example 11.9.2: Argon Gas

A 4.22 mol sample of Ar has a pressure of 1.21 atm and a temperature of 34°C. What is its volume?

Solution

Solutions to Example 11.5.2

Steps for Problem Solving	
Identify the "given" information and what the problem is asking you to "find."	Given: $n = 4.22 \text{ mol}$ $P = 1.21 \text{ atm}$ $T = 34^\circ\text{C}$ Find: $V = ? \text{ L}$
List other known quantities.	none

Steps for Problem Solving

Plan the problem.

1. The first step is to convert temperature to Kelvin.
2. Then, rearrange the equation algebraically to solve for V

$$V = \frac{nRT}{P}$$

Calculate.

1. $34 + 273 = 307 \text{ K}$
2. Now substitute the known quantities into the equation and solve.

$$V = \frac{(4.22 \text{ mol})(0.08205 \frac{\text{L} \cdot \text{atm}}{\text{mol} \cdot \text{K}})(307 \text{ K})}{1.21 \text{ atm}}$$

$$= 87.9 \text{ L}$$

Think about your result.

The number of moles of Ar is large so the expected volume should also be large.

? Exercise 11.9.1

A 0.0997 mol sample of O_2 has a pressure of 0.692 atm and a temperature of 333 K. What is its volume?

Answer

3.94 L

? Exercise 11.9.2

For a 0.00554 mol sample of H_2 , $P = 23.44$ torr and $T = 557 \text{ K}$. What is its volume?

Answer

8.21 L

Summary

- The Ideal Gas Law is a single equation which relates the pressure, volume, temperature, and number of moles of an ideal gas.

11.9: The Ideal Gas Law- Pressure, Volume, Temperature, and Moles is shared under a [CC BY-NC-SA 4.0](#) license and was authored, remixed, and/or curated by LibreTexts.

- [11.8: The Ideal Gas Law- Pressure, Volume, Temperature, and Moles](#) by Henry Agnew, Marisa Alviar-Agnew is licensed [CK-12](#). Original source: <https://www.ck12.org/c/chemistry/>.

11.10: Mixtures of Gases- Why Deep-Sea Divers Breathe a Mixture of Helium and Oxygen

Template:HideTOC

Learning Objectives

- Explain Dalton's Law of Partial Pressures.

The atmosphere of Venus is markedly different from that of Earth. The gases in the Venusian atmosphere are 96.5% carbon dioxide and 3% nitrogen. The atmospheric pressure on Venus is roughly 92 times that of Earth, so the amount of nitrogen on Venus would contribute a pressure well over 2700 mm Hg. And there is no oxygen present, so we couldn't breathe there. Not that we would want to go to Venus, as the surface temperature is usually over 460°C.

Dalton's Law of Partial Pressures

Gas pressure results from collisions between gas particles and the inside walls of their container. If more gas is added to a rigid container, the gas pressure increases. The identities of the two gases do not matter. John Dalton, the English chemist who proposed the atomic theory, also studied mixtures of gases. He found that each gas in a mixture exerts a pressure independently of every other gas in the mixture. For example, our atmosphere is composed of about 78% nitrogen and 21% oxygen, with smaller amounts of several other gases making up the rest. Since nitrogen makes up 78% of the gas particles in a given sample of air, it exerts 78% of the pressure. If the overall atmospheric pressure is 1.00 atm, then the pressure of just the nitrogen in the air is 0.78 atm. The pressure of the oxygen in the air is 0.21 atm.

The **partial pressure** of a gas is the contribution that gas makes to the total pressure when the gas is part of a mixture. The partial pressure of nitrogen is represented by P_{N_2} . **Dalton's Law of Partial Pressures** states that the total pressure of a mixture of gases is equal to the sum of all of the partial pressures of the component gases. Dalton's Law can be expressed with the following equation:

$$P_{\text{total}} = P_1 + P_2 + P_3 + \dots$$

The figure below shows two gases that are in separate, equal-sized containers at the same temperature and pressure. Each exerts a different pressure, P_1 and P_2 , reflective of the number of particles in the container. On the right, the two gases are combined into the same container, with no volume change. The total pressure of the gas mixture is equal to the sum of the individual pressures. If $P_1 = 300$ mm Hg and $P_2 = 500$ mm Hg, then $P_{\text{total}} = 800$ mm Hg.

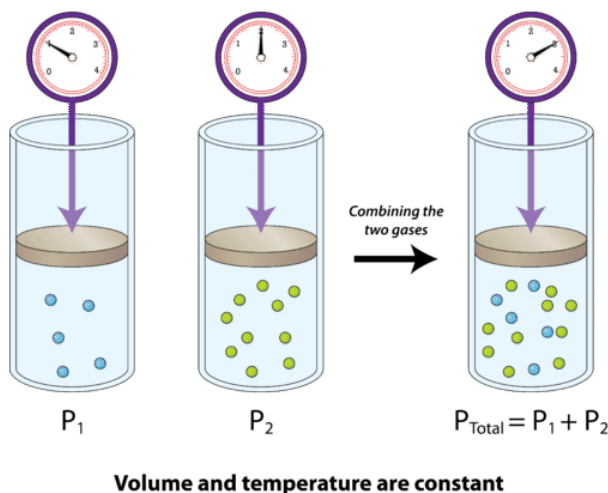


Figure 11.10.1: Dalton's Law states that the pressure of a gas mixture is equal to the partial pressures of the combining gases.

Collecting Gases Over Water

You need to do a lab experiment where hydrogen gas is generated. In order to calculate the yield of gas, you have to know the pressure inside the tube where the gas is collected. But how can you get a barometer in there? Very simple: you don't. All you need

is the atmospheric pressure in the room. As the gas pushes out the water, it is pushing against the atmosphere, so the pressure inside is equal to the pressure outside.

Gas Collection by Water Displacement

Gases that are produced in laboratory experiments are often collected by a technique called **water displacement** (Figure 11.10.2). A bottle is filled with water and placed upside-down in a pan of water. The reaction flask is fitted with rubber tubing, which is then fed under the bottle of water. As the gas is produced in the reaction flask, it exits through the rubber tubing and displaces the water in the bottle. When the bottle is full of the gas, it can be sealed with a lid.



Figure 11.10.2: A gas produced in a chemical reaction can be collected by water displacement.

Because the gas is collected over water, it is not pure, but is mixed with vapor from the evaporation of the water. Dalton's Law can be used to calculate the amount of the desired gas by subtracting the contribution of the water vapor.

$$P_{\text{Total}} = P_g + P_{H_2O}$$

where P_g is the pressure of the desired gas, which can be solved for:

$$P_g = P_{\text{Total}} - P_{H_2O}$$

In order to solve a problem, it is necessary to know the vapor pressure of water at the temperature of the reaction (see table below). The sample problem illustrates the use of Dalton's Law when a gas is collected over water.

Table 11.10.1: Vapor Pressure of Water (mm Hg) at Selected Temperatures ($^{\circ}\text{C}$)

0	5	10	15	20	25	30	35	40	45	50	55	60
4.58	6.54	9.21	12.79	17.54	23.76	31.82	42.18	55.32	71.88	92.51	118.04	149.38

✓ Example 14.14.1

A certain experiment generates 2.58 L of hydrogen gas, which is collected over water. The temperature is 20°C and the atmospheric pressure is 98.60 kPa. Find the volume that the dry hydrogen would occupy at STP.

Solution

Step 1: List the known quantities and plan the problem.

Known

- $V_{\text{Total}} = 2.58 \text{ L}$
- $T = 20^{\circ}\text{C} = 293 \text{ K}$
- $P_{\text{Total}} = 98.60 \text{ kPa} = 739.7 \text{ mm Hg}$

Unknown

- V_{H_2} at STP = ? L

The atmospheric pressure is converted from kPa to mm Hg in order to match units with the table. The sum of the pressures of the hydrogen and the water vapor is equal to the atmospheric pressure. The pressure of the hydrogen is found by subtraction. Then, the volume of the gas at STP can be calculated by using the combined gas law.

Step 2: Solve.

$$\begin{aligned}
 P_{H_2} &= P_{\text{Total}} - P_{H_2O} \\
 &= 739.7 \text{ mm Hg} - 17.54 \text{ mm Hg} \\
 &= 722.2 \text{ mm Hg}
 \end{aligned}$$

Now the combined gas law is used, solving for V_2 , the volume of hydrogen at STP.

$$\begin{aligned} V_2 &= \frac{P_1 \times V_1 \times T_2}{P_2 \times T_1} \\ &= \frac{722.2 \text{ mm Hg} \times 2.58 \text{ L} \times 273 \text{ K}}{760 \text{ mm Hg} \times 293 \text{ K}} \\ &= 2.28 \text{ L H}_2 \end{aligned}$$

Step 3: Think about your result.

If the hydrogen gas were to be collected at STP and without the presence of the water vapor, its volume would be 2.28 L. This is less than the actual collected volume because some of that is water vapor. The conversion using STP is useful for stoichiometry purposes.

Summary

- Dalton's Law of Partial Pressures states that the total pressure in a system is equal to the sum of the partial pressures of the gases present.
- The vapor pressure due to water in a sample can be corrected for, in order to get the true value for the pressure of the gas.

11.10: Mixtures of Gases- Why Deep-Sea Divers Breathe a Mixture of Helium and Oxygen is shared under a [CC BY-NC-SA 4.0](#) license and was authored, remixed, and/or curated by LibreTexts.

- [11.9: Mixtures of Gases - Why Deep-Sea Divers Breathe a Mixture of Helium and Oxygen](#) by Henry Agnew, Marisa Alviar-Agnew is licensed [CK-12](#). Original source: <https://www.ck12.org/c/chemistry/>.

11.11: Gases in Chemical Reactions

[Template:HideTOC](#)

Contributions & Attributions

11.11: Gases in Chemical Reactions is shared under a [CC BY-NC-SA 4.0](#) license and was authored, remixed, and/or curated by LibreTexts.

- **11.10: Gases in Chemical Reactions** by Henry Agnew, Marisa Alviar-Agnew is licensed [CK-12](#). Original source: <https://www.ck12.org/c/chemistry/>.

CHAPTER OVERVIEW

12: Liquids, Solids, and Intermolecular Forces

In [Chapter 6](#), we discussed the properties of gases. Here, we consider some properties of liquids and solids. As a review, the Table below lists some general properties of the three phases of matter.

Phase	Shape	Density	Compressibility
Gas	fills entire container	low	high
Liquid	fills a container from bottom to top	high	low
Solid	rigid	high	low

[12.1: Interactions between Molecules](#)

[12.2: Properties of Liquids and Solids](#)

[12.3: Intermolecular Forces in Action- Surface Tension and Viscosity](#)

[12.4: Evaporation and Condensation](#)

[12.5: Melting, Freezing, and Sublimation](#)

[12.6: Types of Intermolecular Forces- Dispersion, Dipole–Dipole, Hydrogen Bonding, and Ion-Dipole](#)

[12.7: Types of Crystalline Solids- Molecular, Ionic, and Atomic](#)

[12.8: Water- A Remarkable Molecule](#)

[12: Liquids, Solids, and Intermolecular Forces](#) is shared under a [CC BY-NC-SA 4.0](#) license and was authored, remixed, and/or curated by LibreTexts.

12.1: Interactions between Molecules

Template:HideTOC

In the winter, many people find the snow and ice beautiful; they enjoy getting out to ski or ice-skate. When the snow melts, however, the roads get very sloppy and messy. Some people look forward to spring, when the ice and snow are gone and the weather is warmer. All of these events and factors are dependent on the melting point of a solid and the freezing point of a liquid.

Melting Point

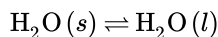
Solids are similar to liquids in that both are condensed states, with particles that are far closer together than those of a gas. However, while liquids are fluid, solids are not. The particles of most solids are packed tightly together in an orderly arrangement. The motion of individual atoms, ions, or molecules in a solid is restricted to **vibrational motion** about a fixed point. Solids are almost completely **incompressible** and are the densest of the three states of matter.

As a solid is heated, its particles vibrate more rapidly as it absorbs kinetic energy. Eventually, the organization of the particles within the solid structure begins to break down and the solid starts to melt. The **melting point** is the temperature at which a solid changes into a liquid. At its melting point, the disruptive vibrations of the particles of the solid overcome the attractive forces operating within the solid. As with boiling points, the melting point of a solid is dependent on the strength of those attractive forces. Sodium chloride (NaCl) is an ionic compound that consists of a multitude of strong ionic bonds. Sodium chloride melts at 801°C. Ice (solid H₂O) is a molecular compound of molecules that are held together by hydrogen bonds. Though hydrogen bonds are the strongest of the intermolecular forces, the strength of hydrogen bonds is much less than that of ionic bonds. The melting point of ice is 0 °C.



Figure 12.1.1: Melting ice cubes illustrate the process of this phase transition. (Public Domain; Moussa).

The melting point of a solid is the same as the **freezing point** of the liquid. At that temperature, the solid and liquid states of the substance are in equilibrium. For water, this equilibrium occurs at 0°C.



We tend to think of solids as those materials that are solid at room temperature. However, all materials have melting points of some sort. Gases become solids at extremely low temperatures, and liquids will also become solid if the temperature is low enough. The table below gives the melting points of some common materials.

Table 12.1.1: Melting Points of Common Materials

Materials	Melting Point (°C)
Hydrogen	-259
Oxygen	-219
Diethyl ether	-116
Ethanol	-114
Water	0

Materials	Melting Point (°C)
Pure silver	961
Pure gold	1063
Iron	1538

Summary

The melting point is the temperature at which a solid changes into a liquid. Intermolecular forces have a strong influence on melting point.

12.1: Interactions between Molecules is shared under a [CC BY-NC-SA 4.0](#) license and was authored, remixed, and/or curated by LibreTexts.

- **12.1: Interactions between Molecules** by Henry Agnew, Marisa Alviar-Agnew is licensed [CK-12](#). Original source: <https://www.ck12.org/c/chemistry/>.

12.2: Properties of Liquids and Solids

Template:HideTOC

Learning Objectives

- Describe the solid and liquid phases.

Solids and liquids are collectively called *condensed phases* because their particles are in virtual contact. The two states share little else, however.

Solids

In the solid state, the individual particles of a substance are in fixed positions with respect to each other because there is not enough thermal energy to overcome the intermolecular interactions between the particles. As a result, solids have a definite shape and volume. Most solids are hard, but some (like waxes) are relatively soft. Many solids composed of ions can also be quite brittle.



Figure 12.2.1: A crystalline arrangement of quartz crystal cluster. Some large crystals look the way they do because of the regular arrangement of atoms (ions) in their crystal structure. (Source: Wikipedia.)

Solids usually have their constituent particles arranged in a regular, three-dimensional array of alternating positive and negative ions called a crystal. The effect of this regular arrangement of particles is sometimes visible macroscopically, as shown in Figure 12.2.1. Some solids, especially those composed of large molecules, cannot easily organize their particles in such regular crystals and exist as amorphous (literally, “without form”) solids. Glass is one example of an amorphous solid.

Liquids

If the particles of a substance have enough energy to partially overcome intermolecular interactions, then the particles can move about each other while remaining in contact. This describes the liquid state. In a liquid, the particles are still in close contact, so liquids have a definite volume. However, because the particles can move about each other rather freely, a liquid has no definite shape and takes a shape dictated by its container.



Figure 12.2.2: The formation of a spherical droplet of liquid water minimizes the surface area, which is the natural result of surface tension in liquids. (Source: Wikipedia.)

Gases

If the particles of a substance have enough energy to completely overcome intermolecular interactions, then the particles can separate from each other and move about randomly in space. Like liquids, gases have no definite shape, but unlike solids and liquids, gases have no definite volume either.

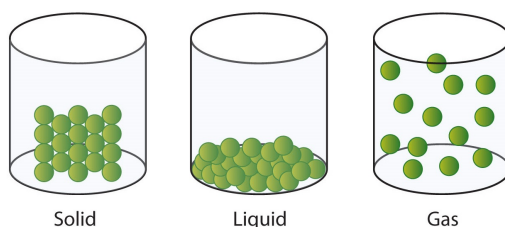


Figure 12.2.3: A Representation of the Solid, Liquid, and Gas States. A solid has definite volume and shape, a liquid has a definite volume but no definite shape, and a gas has neither a definite volume nor shape.

The change from solid to liquid usually does not significantly change the volume of a substance. However, the change from a liquid to a gas significantly increases the volume of a substance, by a factor of 1,000 or more. Figure 12.2.3 shows the differences among solids, liquids, and gases at the molecular level, while Table 12.2.1 lists the different characteristics of these states.

Table 12.2.1: Characteristics of the Three States of Matter

Characteristic	Solid	Liquid	Gas
shape	definite	indefinite	indefinite
volume	definite	definite	indefinite
relative intermolecular interaction strength	strong	moderate	weak
relative particle positions	in contact and fixed in place	in contact but not fixed	not in contact, random positions

✓ Example 12.2.1

What state or states of matter does each statement describe?

- This state has a definite volume.
- This state has no definite shape.
- This state allows the individual particles to move about while remaining in contact.

Solution

- This statement describes either the liquid state or the solid state.
- This statement describes either the liquid state or the gas state.
- This statement describes the liquid state.

? Exercise 12.2.1

What state or states of matter does each statement describe?

- This state has individual particles in a fixed position with regard to each other.
- This state has individual particles far apart from each other in space.
- This state has indefinite shape.

Answer a

solid

Answer b

gas

Answer c

liquid or gas

Looking Closer: Water, the Most Important Liquid

Earth is the only known body in our solar system that has liquid water existing freely on its surface; life on Earth would not be possible without the presence of liquid water.

Water has several properties that make it a unique substance among substances. It is an excellent solvent; it dissolves many other substances and allows those substances to react when in solution. In fact, water is sometimes called the *universal solvent* because of this ability. Water has unusually high melting and boiling points (0°C and 100°C, respectively) for such a small molecule. The boiling points for similar-sized molecules, such as methane (BP = -162°C) and ammonia (BP = -33°C), are more than 100° lower. Though a liquid at normal temperatures, water molecules experience a relatively strong intermolecular interaction that allows them to maintain the liquid phase at higher temperatures than expected.

Unlike most substances, the solid form of water is less dense than its liquid form, which allows ice to float on water. In colder weather, lakes and rivers freeze from the top, allowing animals and plants to continue to live underneath. Water also requires an unusually large amount of energy to change temperature. While 100 J of energy will change the temperature of 1 g of Fe by 230°C, this same amount of energy will change the temperature of 1 g of H₂O by only 100°C. Thus, water changes its temperature slowly as heat is added or removed. This has a major impact on weather, as storm systems like hurricanes can be impacted by the amount of heat that ocean water can store.

Water's influence on the world around us is affected by these properties. Isn't it fascinating that such a small molecule can have such a big impact?

Key Takeaway

- Solids and liquids are phases that have their own unique properties.

12.2: Properties of Liquids and Solids is shared under a [CC BY-NC-SA 4.0](#) license and was authored, remixed, and/or curated by LibreTexts.

- **12.2: Properties of Liquids and Solids** by Henry Agnew, Marisa Alviar-Agnew is licensed [CK-12](#). Original source: <https://www.ck12.org/c/chemistry/>.

12.3: Intermolecular Forces in Action- Surface Tension and Viscosity

Template:HideTOC

Learning Objectives

- Explain the how the surface tension of a liquid relates to intermolecular forces.

The next time you are by a still body of water, take a close look at what is scooting along on the surface. You may see insects seemingly floating on top of the water. These creatures are known by a variety of names including water skaters, water striders, pond skaters, and other equally descriptive names. They take advantage of a property called surface tension to stay above the water and not sink. The force they exert downward is less than the forces exerted among the water molecules on the surface of the pond, so the insect does not penetrate beneath the surface of the water.

Surface Tension

Molecules within a liquid are pulled equally in all directions by intermolecular forces. However, molecules at the surface are pulled downwards and sideways by other liquid molecules, but not upwards away from the surface. The overall effect is that the surface molecules are pulled into the liquid, creating a surface that is tightened like a film (Figure 12.3.1A). The **surface tension** of a liquid is a measure of the elastic force in the liquid's surface. Liquids that have strong intermolecular forces, like the hydrogen bonding in water, exhibit the greatest surface tension. Surface tension allows objects that are denser than water, such as the paper clip shown in B in the figure below, to nonetheless float on its surface. It is also responsible for the beading up of water droplets on a freshly waxed car, because there are no attractions between the polar water molecules and the nonpolar wax.

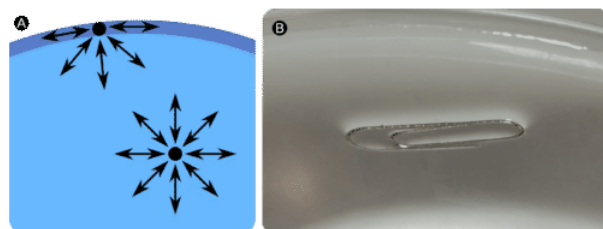


Figure 12.3.1: (A) Molecules at the surface of a liquid are pulled downwards into the liquid, creating a tightened surface. (B) Surface tension allows a paper clip to float on water's surface.

Other liquids, such as diethyl ether, do not demonstrate strong surface tension interactions. The intermolecular forces for the ether are the relatively weak dipole-dipole interactions that do not draw the molecules together as tightly as hydrogen bonds would.

Summary

- The surface tension of a liquid is a measure of the elastic force in the liquid's surface.
- Liquids with strong intermolecular forces have higher surface tensions than liquids with weaker forces.

12.3: Intermolecular Forces in Action- Surface Tension and Viscosity is shared under a [CC BY-NC-SA 4.0](#) license and was authored, remixed, and/or curated by LibreTexts.

- 12.3: Intermolecular Forces in Action- Surface Tension and Viscosity** by Henry Agnew, Marisa Alviar-Agnew is licensed [CK-12](#). Original source: <https://www.ck12.org/c/chemistry/>.

12.4: Evaporation and Condensation

Template:HideTOC

Learning Objectives

- Explain how intermolecular forces affect rates of vaporization, evaporation, and condensation.

On the roof of the house in the picture below is a device known as a "swamp cooler". This piece of equipment traces its origin back to the ancient Egyptians who hung wet blankets across the doors of their homes. As the warm air passed through the blankets, water would evaporate and cool the air. The royalty went one step further and had servants fan wet cloths over jugs of water to get more evaporation and cooling.



Figure 12.4.1: A home with a swamp cooler attached to the roof.

The origin of the term "swamp cooler" is not known - they certainly don't work in a swamp. Best conditions for cooling include a high temperature (over 80°F) and a low humidity (preferably less than 30%). These coolers work well in desert areas, but don't provide any cooling in the humid areas of the country.

Evaporation

A puddle of water left undisturbed eventually disappears. The liquid molecules escape into the gas phase, becoming water vapor. **Vaporization** is the process in which a liquid is converted to a gas. **Evaporation** is the conversion of a liquid to its vapor below the boiling temperature of the liquid. If the water is instead kept in a closed container, the water vapor molecules do not have a chance to escape into the surroundings and so the water level does not change. As some water molecules become vapor, an equal number of water vapor molecules condense back into the liquid state. **Condensation** is the change of state from a gas to a liquid.




Figure 12.4.2: Evaporation (A) and condensation (B).

In order for a liquid molecule to escape into the gas state, the molecule must have enough kinetic energy to overcome the intermolecular attractive forces in the liquid. Recall that a given liquid sample will have molecules with a wide range of kinetic energies. Liquid molecules that have this certain threshold kinetic energy escape the surface and become vapor. As a result, the liquid molecules that remain now have lower kinetic energy. As evaporation occurs, the temperature of the remaining liquid decreases. You have observed the effects of evaporative cooling. On a hot day, the water molecules in your perspiration absorb body heat and evaporate from the surface of your skin. The evaporating process leaves the remaining perspiration cooler, which in turn absorbs more heat from your body.

A given liquid will evaporate more quickly when it is heated. This is because the heating process results in a greater fraction of the liquid's molecules having the necessary kinetic energy to escape the surface of the liquid. The figure below shows the kinetic

energy distribution of liquid molecules at two temperatures. The numbers of molecules that have the required kinetic energy to evaporate are shown in the shaded area under the curve at the right. The higher temperature liquid (T_2) has more molecules that are capable of escaping into the vapor phase than the lower temperature liquid (T_1).

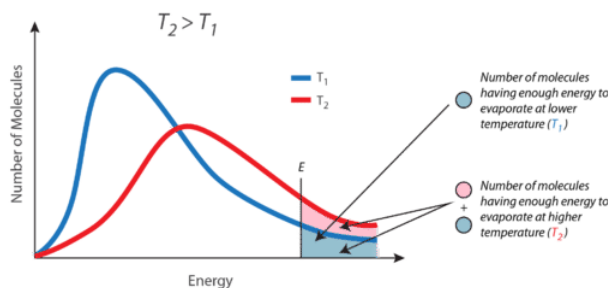


Figure 12.4.3: Kinetic energy distribution curves for a liquid at two temperatures T_1 and T_2 . The shaded area represents the molecules with enough kinetic energy to escape the liquid and become vapor.

At 29,029 feet (8848 m), Mount Everest in the Himalayan range on the border between China and Nepal is the highest point on the earth. Its altitude presents many practical problems to climbers. The oxygen content of the air is much lower than at sea level, making it necessary to bring oxygen tanks along (although a few climbers have reached the peak without oxygen). One other problem is that of boiling water for cooking food. Although water boils at 100°C at sea level, the boiling point on top of Mount Everest is only about 70°C . This difference makes it very difficult to get a decent cup of tea (which definitely frustrated some of the British climbers).

Boiling

As a liquid is heated, the average kinetic energy of its particles increases. The rate of evaporation increases as more and more molecules are able to escape the liquid's surface into the vapor phase. Eventually a point is reached when the molecules all throughout the liquid have enough kinetic energy to **vaporize**. At this point the liquid begins to boil. The **boiling point** is the temperature at which the vapor pressure of a liquid is equal to the external pressure. The figure below illustrates the boiling of liquid.

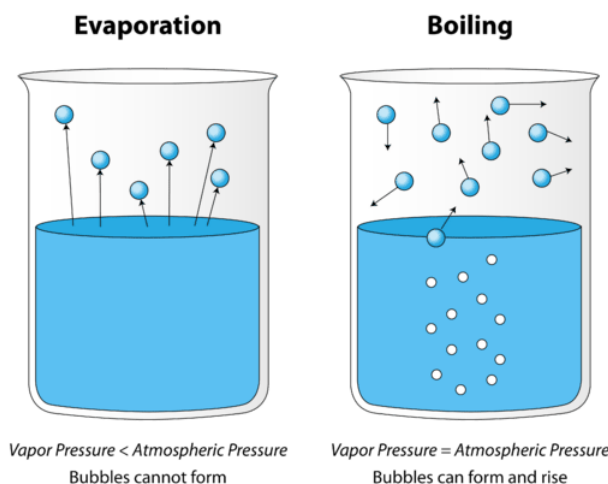


Figure 12.4.4: Comparison between evaporation and boiling.

In the picture on the left, the liquid is below its boiling point, yet some of the liquid evaporates. On the right, the temperature has been increased until bubbles begin to form in the body of the liquid. When the vapor pressure inside the bubble is equal to the external atmospheric pressure, the bubbles rise to the surface of the liquid and burst. The temperature at which this process occurs is the boiling point of the liquid.

The normal boiling point is the temperature at which the vapor pressure of the liquid is equal to standard pressure. Because atmospheric pressure can change based on location, the boiling point of a liquid changes with the external pressure. The normal boiling point is a constant because it is defined relative to the standard atmospheric pressure of 760 mm Hg (or 1 atm or 101.3 kPa).

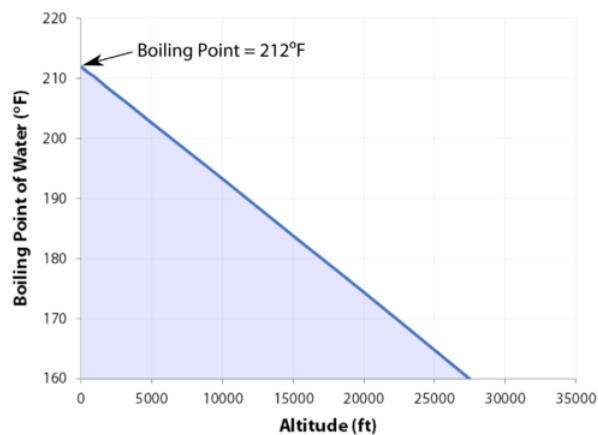


Figure 12.4.5: Influence of altitude on the boiling point of water.

Summary

- The boiling point is the temperature at which the vapor pressure of a liquid is equal to the external pressure.
- As the altitude increases, the boiling point decreases.
- Evaporation is the conversion of a liquid to its vapor below the boiling temperature of the liquid.
- Condensation is the change of state from a gas to a liquid.
- As the temperature increases, the rate of evaporation increases.

12.4: Evaporation and Condensation is shared under a [CC BY-NC-SA 4.0](https://creativecommons.org/licenses/by-nc-sa/4.0/) license and was authored, remixed, and/or curated by LibreTexts.

- **12.4: Evaporation and Condensation** by Henry Agnew, Marisa Alviar-Agnew is licensed [CK-12](https://creativecommons.org/licenses/by-nc-sa/4.0/). Original source: <https://www.ck12.org/c/chemistry/>.

12.5: Melting, Freezing, and Sublimation

Learning Objectives

- Define melting, freezing, and sublimation.

Depending on the surrounding conditions, normal matter usually exists as one of three *phases*: solid, liquid, or gas.

A phase change is a physical process in which a substance goes from one phase to another. Usually the change occurs when adding or removing heat at a particular temperature, known as the melting point or the boiling point of the substance. The melting point is the temperature at which the substance goes from a solid to a liquid (or from a liquid to a solid). The boiling point is the temperature at which a substance goes from a liquid to a gas (or from a gas to a liquid). The nature of the phase change depends on the direction of the heat transfer. Heat going *into* a substance changes it from a solid to a liquid, or a liquid to a gas. Removing heat *from* a substance changes a gas to a liquid, or a liquid to a solid.

Two key points are worth emphasizing. First, at a substance's melting point or boiling point, two phases can exist simultaneously. Take water (H_2O) as an example. On the Celsius scale, H_2O has a melting point of 0°C and a boiling point of 100°C . At 0°C , both the solid and liquid phases of H_2O can coexist. However, if heat is added, some of the solid H_2O will melt and turn into liquid H_2O . If heat is removed, the opposite happens: some of the liquid H_2O turns into solid H_2O . A similar process can occur at 100°C : adding heat increases the amount of gaseous H_2O , while removing heat increases the amount of liquid H_2O (Figure 12.5.1).



Figure 12.5.1: The Boiling Point of Water. Nucleate boiling of water over a kitchen stove burner. (Source: Wikipedia). Water is a good substance to use as an example because many people are already familiar with it. Other substances have melting points and boiling points as well.

Second, the temperature of a substance does not change as the substance goes from one phase to another. In other words, phase changes are isothermal (isothermal means “constant temperature”). Again, consider H_2O as an example. Solid water (ice) can exist at 0°C . If heat is added to ice at 0°C , some of the solid changes phase to make liquid, which is also at 0°C . Remember, the solid and liquid phases of H_2O can coexist at 0°C . Only after all of the solid has melted into liquid does the addition of heat change the temperature of the substance.

For each phase change of a substance, there is a characteristic quantity of heat needed to perform the phase change per gram (or per mole) of material. The heat of fusion (ΔH_{fus}) is the amount of heat per gram (or per mole) required for a phase change that occurs at the melting point. The heat of vaporization (ΔH_{vap}) is the amount of heat per gram (or per mole) required for a phase change that occurs at the boiling point. If you know the total number of grams or moles of material, you can use the ΔH_{fus} or the ΔH_{vap} to determine the total heat being transferred for melting or solidification using these expressions:

$$\text{heat} = n \times \Delta H_{\text{fus}} \quad (12.5.1)$$

where n is the number of moles and ΔH_{fus} is expressed in energy/mole or

$$\text{heat} = m \times \Delta H_{\text{fus}} \quad (12.5.2)$$

where m is the mass in grams and ΔH_{fus} is expressed in energy/gram.

For the boiling or condensation, use these expressions:

$$\text{heat} = n \times \Delta H_{\text{vap}} \quad (12.5.3)$$

where n is the number of moles) and ΔH_{vap} is expressed in energy/mole or

$$\text{heat} = m \times \Delta H_{\text{vap}} \quad (12.5.4)$$

where m is the mass in grams and ΔH_{vap} is expressed in energy/gram.

Remember that a phase change depends on the direction of the heat transfer. If heat transfers in, solids become liquids, and liquids become solids at the melting and boiling points, respectively. If heat transfers out, liquids solidify, and gases condense into liquids.

✓ Example 12.5.1

How much heat is necessary to melt 55.8 g of ice (solid H_2O) at 0°C ? The heat of fusion of H_2O is 79.9 cal/g.

Solution

We can use the relationship between heat and the heat of fusion (Eq. 12.5.1b) to determine how many joules of heat are needed to melt this ice:

$$\begin{aligned} \text{heat} &= m \times \Delta H_{\text{fus}} \\ &= (55.8 \text{ g}) \left(\frac{79.9 \text{ cal}}{\text{g}} \right) \\ &= 4,460 \text{ cal} \end{aligned}$$

? Exercise 12.5.1

How much heat is necessary to vaporize 685 g of H_2O at 100°C ? The heat of vaporization of H_2O is 540 cal/g.

Table 12.5.1 lists the heats of fusion and vaporization for some common substances. Note the units on these quantities; when you use these values in problem solving, make sure that the other variables in your calculation are expressed in units consistent with the units in the specific heats, or the heats of fusion and vaporization.

Table 12.5.1: Heats of Fusion and Vaporization for Selected Substances

Substance	ΔH_{fus} (cal/g)	ΔH_{vap} (cal/g)
aluminum (Al)	94.0	2,602
gold (Au)	15.3	409
iron (Fe)	63.2	1,504
water (H_2O)	79.9	540
sodium chloride (NaCl)	123.5	691
ethanol ($\text{C}_2\text{H}_5\text{OH}$)	45.2	200.3
benzene (C_6H_6)	30.4	94.1


Looking Closer: Sublimation

There is also a phase change where a solid goes directly to a gas:



This phase change is called *sublimation*. Each substance has a characteristic heat of sublimation associated with this process. For example, the heat of sublimation (ΔH_{sub}) of H_2O is 620 cal/g.

We encounter sublimation in several ways. You may already be familiar with dry ice, which is simply solid carbon dioxide (CO_2). At -78.5°C (-109°F), solid carbon dioxide sublimates, changing directly from the solid phase to the gas phase:



Solid carbon dioxide is called dry ice because it does not pass through the liquid phase. Instead, it goes directly to the gas phase. (Carbon dioxide *can* exist as liquid but only under high pressure.) Dry ice has many practical uses, including the long-term preservation of medical samples.

Even at temperatures below 0°C, solid H₂O will slowly sublime. For example, a thin layer of snow or frost on the ground may slowly disappear as the solid H₂O sublimates, even though the outside temperature may be below the freezing point of water. Similarly, ice cubes in a freezer may get smaller over time. Although frozen, the solid water slowly sublimates, redepositing on the colder cooling elements of the freezer, which necessitates periodic defrosting (frost-free freezers minimize this redeposition). Lowering the temperature in a freezer will reduce the need to defrost as often.

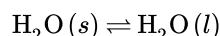
Under similar circumstances, water will also sublime from frozen foods (e.g., meats or vegetables), giving them an unattractive, mottled appearance called freezer burn. It is not really a “burn,” and the food has not necessarily gone bad, although it looks unappetizing. Freezer burn can be minimized by lowering a freezer’s temperature and by wrapping foods tightly so water does not have any space to sublime into.

Melting Point

Solids are similar to liquids in that both are condensed states, with particles that are far closer together than those of a gas. However, while liquids are fluid, solids are not. The particles of most solids are packed tightly together in an orderly arrangement. The motion of individual atoms, ions, or molecules in a solid is restricted to **vibrational motion** about a fixed point. Solids are almost completely **incompressible** and are the most dense of the three states of matter.

As a solid is heated, its particles vibrate more rapidly as the solid absorbs kinetic energy. Eventually, the organization of the particles within the solid structure begins to break down and the solid starts to melt. The **melting point** is the temperature at which a solid changes into a liquid. At its melting point, the disruptive vibrations of the particles of the solid overcome the attractive forces operating within the solid. As with boiling points, the melting point of a solid is dependent on the strength of those attractive forces. Sodium chloride (NaCl) is an ionic compound that consists of a multitude of strong ionic bonds. Sodium chloride melts at 801°C. Ice (solid H₂O) is a molecular compound composed of molecules that are held together by hydrogen bonds. Though hydrogen bonds are the strongest of the intermolecular forces, the strength of hydrogen bonds is much less than that of ionic bonds. The melting point of ice is 0°C.

The melting point of a solid is the same as the freezing point of the liquid. At that temperature, the solid and liquid states of the substance are in equilibrium. For water, this equilibrium occurs at 0°C.



We tend to think of solids as those materials that are solid at room temperature. However, all materials have melting points of some sort. Gases become solids at extremely low temperatures, and liquids will also become solid if the temperature is low enough. The table below gives the melting points of some common materials.

Table 12.5.2: Melting Points of Common Materials

Materials	Melting Point (°C)
Hydrogen	-259
Oxygen	-219
Diethyl ether	-116
Ethanol	-114
Water	0
Pure silver	961
Pure gold	1063
Iron	1538

? Exercise 12.5.2

- Explain what happens when heat flows into or out of a substance at its melting point or boiling point.
- How does the amount of heat required for a phase change relate to the mass of the substance?

Answer a

The energy goes into changing the phase, not the temperature.

Answer b

The amount of heat is a constant per gram of substance.

Summary

- There is an energy change associated with any phase change.
- Sublimation is the change of state from a solid to a gas, without passing through the liquid state.
- Deposition is the change of state from a gas to a solid.
- Carbon dioxide is an example of a material that easily undergoes sublimation.
- The melting point is the temperature at which a solid changes into a liquid.
- Intermolecular forces have a strong influence on melting point.

12.5: Melting, Freezing, and Sublimation is shared under a [CC BY-NC-SA 4.0](#) license and was authored, remixed, and/or curated by LibreTexts.

- 12.5: Melting, Freezing, and Sublimation** by Henry Agnew, Marisa Alviar-Agnew is licensed [CK-12](#). Original source: <https://www.ck12.org/c/chemistry/>.

12.6: Types of Intermolecular Forces- Dispersion, Dipole–Dipole, Hydrogen Bonding, and Ion-Dipole

Template:HideTOC

Learning Objectives

- To describe the intermolecular forces in liquids.

The properties of liquids are intermediate between those of gases and solids, but are more similar to solids. In contrast to *intramolecular* forces, such as the covalent bonds that hold atoms together in molecules and polyatomic ions, *intermolecular* forces hold molecules together in a liquid or solid. Intermolecular forces are generally much weaker than covalent bonds. For example, it requires 927 kJ to overcome the intramolecular forces and break both O–H bonds in 1 mol of water, but it takes only about 41 kJ to overcome the intermolecular attractions and convert 1 mol of liquid water to water vapor at 100°C. (Despite this seemingly low value, the intermolecular forces in liquid water are among the strongest such forces known!) Given the large difference in the strengths of intra- and intermolecular forces, changes between the solid, liquid, and gaseous states almost invariably occur for molecular substances *without breaking covalent bonds*.

The properties of liquids are intermediate between those of gases and solids, but are more similar to solids.

Intermolecular forces determine bulk properties, such as the melting points of solids and the boiling points of liquids. Liquids boil when the molecules have enough thermal energy to overcome the intermolecular attractive forces that hold them together, thereby forming bubbles of vapor within the liquid. Similarly, solids melt when the molecules acquire enough thermal energy to overcome the intermolecular forces that lock them into place in the solid.

Intermolecular forces are electrostatic in nature; that is, they arise from the interaction between positively and negatively charged species. Like covalent and ionic bonds, intermolecular interactions are the sum of both attractive and repulsive components. Because electrostatic interactions fall off rapidly with increasing distance between molecules, intermolecular interactions are most important for solids and liquids, where the molecules are close together. These interactions become important for gases only at very high pressures, where they are responsible for the observed deviations from the ideal gas law at high pressures.

In this section, we explicitly consider three kinds of intermolecular interactions. There are two additional types of electrostatic interaction that you are already familiar with: the ion–ion interactions that are responsible for ionic bonding, and the ion–dipole interactions that occur when ionic substances dissolve in a polar substance such as water. The first two are often described collectively as van der Waals forces.

Dipole–Dipole Interactions

Polar covalent bonds behave as if the bonded atoms have localized fractional charges that are equal but opposite (i.e., the two bonded atoms generate a *dipole*). If the structure of a molecule is such that the individual bond dipoles do not cancel one another, then the molecule has a net dipole moment. Molecules with net dipole moments tend to align themselves so that the positive end of one dipole is near the negative end of another and vice versa, as shown in Figure 12.6.1a.

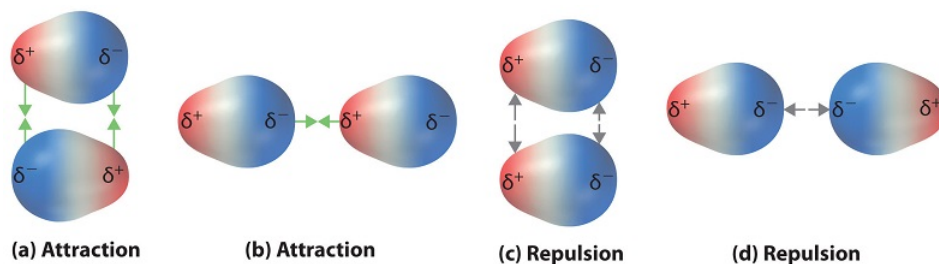


Figure 12.6.1: Attractive and Repulsive Dipole–Dipole Interactions. (a and b) Molecular orientations in which the positive end of one dipole (δ^+) is near the negative end of another (δ^-) (and vice versa) produce attractive interactions. (c and d) Molecular orientations that juxtapose the positive or negative ends of the dipoles on adjacent molecules produce repulsive interactions. (CC BY-SA-NC; anonymous)

These arrangements are more stable than arrangements in which two positive or two negative ends are adjacent (Figure 12.6.1*d*). Hence dipole–dipole interactions, such as those in Figure 12.6.1*b* are *attractive intermolecular interactions*, whereas those in Figure 12.6.1*d* are *repulsive intermolecular interactions*. Because molecules in a liquid move freely and continuously, molecules always experience both attractive and repulsive dipole–dipole interactions simultaneously, as shown in Figure 12.6.2 On average, however, the attractive interactions dominate.

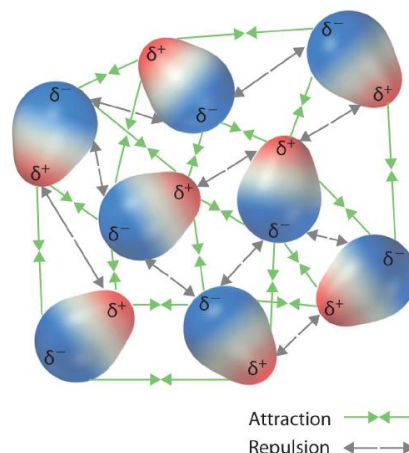


Figure 12.6.2: Both attractive and repulsive dipole–dipole interactions occur in a liquid sample with many molecules. (CC BY-SA-NC; anonymous)

The green arrows pointing towards each other represent attraction. The gray arrows pointing away from each other represent repulsion

Because each end of a dipole possesses only a fraction of the charge of an electron, dipole–dipole interactions are substantially weaker than the interactions between two ions, each of which has a charge of at least ± 1 , or between a dipole and an ion, in which one of the species has at least a full positive or negative charge. In addition, the attractive interaction between dipoles falls off much more rapidly with increasing distance than do the ion–ion interactions. Recall that the attractive energy between two ions is proportional to $1/r$, where r is the distance between the ions. Doubling the distance ($r \rightarrow 2r$) decreases the attractive energy by one-half. In contrast, the energy of the interaction of two dipoles is proportional to $1/r^3$, so doubling the distance between the dipoles decreases the strength of the interaction by 2^3 , or 8-fold. Thus a substance such as HCl, which is partially held together by dipole–dipole interactions, is a gas at room temperature and 1 atm pressure. Conversely, NaCl, which is held together by interionic interactions, is a high-melting-point solid. Within a series of compounds of similar molar mass, the strength of the intermolecular interactions increases as the dipole moment of the molecules increases, as shown in Table 12.6.1.

Table 12.6.1: Relationships Between the Dipole Moment and the Boiling Point for Organic Compounds of Similar Molar Mass

Compound	Molar Mass (g/mol)	Dipole Moment (D)	Boiling Point (K)
C ₃ H ₆ (cyclopropane)	42	0	240
CH ₃ OCH ₃ (dimethyl ether)	46	1.30	248
CH ₃ CN (acetonitrile)	41	3.9	355

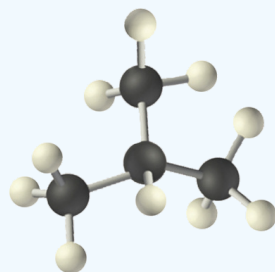
The attractive energy between two ions is proportional to $1/r$, whereas the attractive energy between two dipoles is proportional to $1/r^6$.



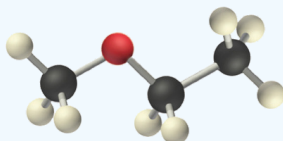
Video Discussing Dipole Intermolecular Forces. Source: [Dipole Intermolecular Force, YouTube\(opens in new window\)](#) [youtu.be]

✓ Example 12.6.1

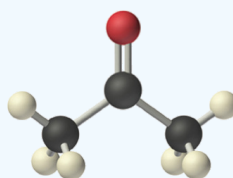
Arrange ethyl methyl ether ($\text{CH}_3\text{OCH}_2\text{CH}_3$), 2-methylpropane [isobutane, $(\text{CH}_3)_2\text{CHCH}_3$], and acetone (CH_3COCH_3) in order of increasing boiling points. Their structures are as follows:



2-Methylpropane



Ethyl methyl ether



Acetone

Given: compounds.

Asked for: order of increasing boiling points.

Strategy:

Compare the molar masses and the polarities of the compounds. Compounds with higher molar masses and that are polar will have the highest boiling points.

Solution:

The three compounds have essentially the same molar mass (58–60 g/mol), so we must look at differences in polarity to predict the strength of the intermolecular dipole–dipole interactions and thus the boiling points of the compounds.

The first compound, 2-methylpropane, contains only C–H bonds, which are not very polar because C and H have similar electronegativities. It should therefore have a very small (but nonzero) dipole moment and a very low boiling point.

Ethyl methyl ether has a structure similar to H_2O ; it contains two polar C–O single bonds oriented at about a 109° angle to each other, in addition to relatively nonpolar C–H bonds. As a result, the C–O bond dipoles partially reinforce one another and generate a significant dipole moment that should give a moderately high boiling point.

Acetone contains a polar C=O double bond oriented at about 120° to two methyl groups with nonpolar C–H bonds. The C–O bond dipole therefore corresponds to the molecular dipole, which should result in both a rather large dipole moment and a high boiling point.

Thus we predict the following order of boiling points:

2-methylpropane < ethyl methyl ether < acetone

This result is in good agreement with the actual data: 2-methylpropane, boiling point = -11.7°C , and the dipole moment (μ) = 0.13 D; methyl ethyl ether, boiling point = 7.4°C and μ = 1.17 D; acetone, boiling point = 56.1°C and μ = 2.88 D.

? Exercise 12.6.1

Arrange carbon tetrafluoride (CF_4), ethyl methyl sulfide ($\text{CH}_3\text{SC}_2\text{H}_5$), dimethyl sulfoxide $[(\text{CH}_3)_2\text{S}=\text{O}]$, and 2-methylbutane [isopentane, $(\text{CH}_3)_2\text{CHCH}_2\text{CH}_3$] in order of decreasing boiling points.

Answer

dimethyl sulfoxide (boiling point = 189.9°C) > ethyl methyl sulfide (boiling point = 67°C) > 2-methylbutane (boiling point = 27.8°C) > carbon tetrafluoride (boiling point = -128°C)

London Dispersion Forces

Thus far, we have considered only interactions between polar molecules. Other factors must be considered to explain why many nonpolar molecules, such as bromine, benzene, and hexane, are liquids at room temperature; why others, such as iodine and naphthalene, are solids. Even the noble gases can be liquefied or solidified at low temperatures, high pressures, or both (Table 12.6.2).

What kind of attractive forces can exist between nonpolar molecules or atoms? This question was answered by Fritz London (1900–1954), a German physicist who later worked in the United States. In 1930, London proposed that temporary fluctuations in the electron distributions within atoms and nonpolar molecules could result in the formation of short-lived instantaneous dipole moments, which produce attractive forces called London dispersion forces between otherwise nonpolar substances.

Table 12.6.2: Normal Melting and Boiling Points of Some Elements and Nonpolar Compounds

Substance	Molar Mass (g/mol)	Melting Point ($^{\circ}\text{C}$)	Boiling Point ($^{\circ}\text{C}$)
Ar	40	-189.4	-185.9
Xe	131	-111.8	-108.1
N_2	28	-210	-195.8
O_2	32	-218.8	-183.0
F_2	38	-219.7	-188.1
I_2	254	113.7	184.4
CH_4	16	-182.5	-161.5

Consider a pair of adjacent He atoms, for example. On average, the two electrons in each He atom are uniformly distributed around the nucleus. Because the electrons are in constant motion, however, their distribution in one atom is likely to be asymmetrical at any given instant, resulting in an instantaneous dipole moment. As shown in part (a) in Figure 12.6.3, the instantaneous dipole moment on one atom can interact with the electrons in an adjacent atom, pulling them toward the positive end of the instantaneous dipole or repelling them from the negative end. The net effect is that the first atom causes the temporary formation of a dipole, called an induced dipole, in the second. Interactions between these temporary dipoles cause atoms to be attracted to one another. These attractive interactions are weak and fall off rapidly with increasing distance. London was able to show with quantum mechanics that the attractive energy between molecules due to temporary dipole-induced dipole interactions falls off as $1/r^6$. Doubling the distance therefore decreases the attractive energy by 2^6 , or 64-fold.

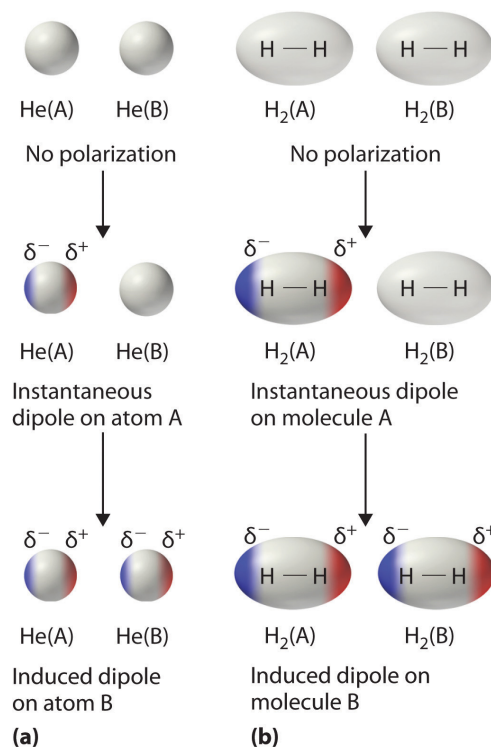


Figure 12.6.3: Instantaneous Dipole Moments. The formation of an instantaneous dipole moment on one He atom (a) or an H₂ molecule (b) results in the formation of an induced dipole on an adjacent atom or molecule.

Instantaneous dipole–induced dipole interactions between nonpolar molecules can produce intermolecular attractions just as they produce interatomic attractions in monatomic substances like Xe. This effect, illustrated for two H₂ molecules in part (b) in Figure 12.6.3, tends to become more pronounced as atomic and molecular masses increase (Table 12.6.2). For example, Xe boils at -108.1°C , whereas He boils at -269°C . The reason for this trend is that the strength of London dispersion forces is related to the ease with which the electron distribution in a given atom can be perturbed. In small atoms such as He, the two 1s electrons are held close to the nucleus in a very small volume, and electron–electron repulsions are strong enough to prevent significant asymmetry in their distribution. In larger atoms such as Xe, however, the outer electrons are much less strongly attracted to the nucleus because of filled intervening shells. As a result, it is relatively easy to temporarily deform the electron distribution to generate an instantaneous or induced dipole. The ease of deformation of the electron distribution in an atom or molecule is called its polarizability. Because the electron distribution is more easily perturbed in large, heavy species than in small, light species, we say that heavier substances tend to be much more *polarizable* than lighter ones.

For similar substances, London dispersion forces get stronger with increasing molecular size.

The polarizability of a substance also determines how it interacts with ions and species that possess permanent dipoles. Thus, London dispersion forces are responsible for the general trend toward higher boiling points with increased molecular mass and greater surface area in a homologous series of compounds, such as the alkanes (part (a) in Figure 12.6.4). The strengths of London dispersion forces also depend significantly on molecular shape because shape determines how much of one molecule can interact with its neighboring molecules at any given time. For example, part (b) in Figure 12.6.4 shows 2,2-dimethylpropane (neopentane) and *n*-pentane, both of which have the empirical formula C₅H₁₂. Neopentane is almost spherical, with a small surface area for intermolecular interactions, whereas *n*-pentane has an extended conformation that enables it to come into close contact with other *n*-pentane molecules. As a result, the boiling point of neopentane (9.5°C) is more than 25°C lower than the boiling point of *n*-pentane (36.1°C).

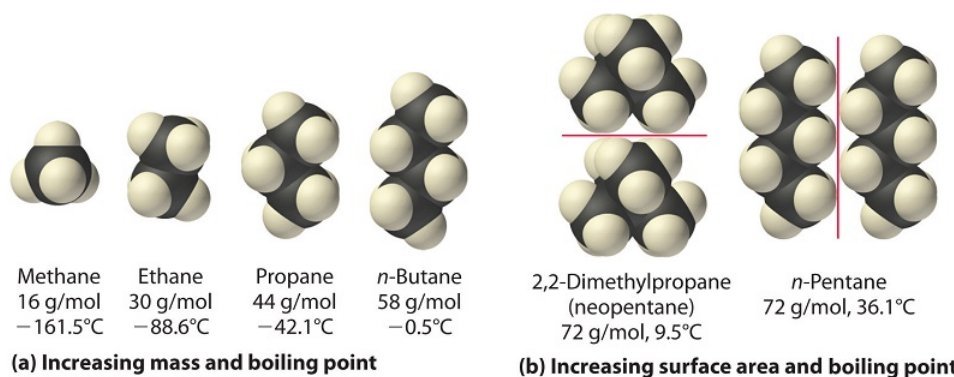


Figure 12.6.4: Mass and Surface Area Affect the Strength of London Dispersion Forces. (a) In this series of four simple alkanes, larger molecules have stronger London forces between them than smaller molecules do, and consequently have higher boiling points. (b) Linear *n*-pentane molecules have a larger surface area and stronger intermolecular forces than spherical neopentane molecules. As a result, neopentane is a gas at room temperature, whereas *n*-pentane is a volatile liquid.

All molecules, whether polar or nonpolar, are attracted to one another by London dispersion forces in addition to any other attractive forces that may be present. In general, however, dipole–dipole interactions in small polar molecules are significantly stronger than London dispersion forces, so the former predominate.



Video Discussing London/Dispersion Intermolecular Forces. Source: [Dispersion Intermolecular Force, YouTube](#)(opens in new window) [youtu.be]

✓ Example 12.6.2

Arrange *n*-butane, propane, 2-methylpropane [isobutene, (CH₃)₂CHCH₃], and *n*-pentane in order of increasing boiling points.

Given: compounds

Asked for: order of increasing boiling points

Strategy:

Determine the intermolecular forces in the compounds, and then arrange the compounds according to the strength of those forces. The substance with the weakest forces will have the lowest boiling point.

Solution:

The four compounds are alkanes and nonpolar, so London dispersion forces are the only important intermolecular forces. These forces are generally stronger with increasing molecular mass, so propane should have the lowest boiling point and *n*-pentane should have the highest, with the two butane isomers falling in between. Of the two butane isomers, 2-methylpropane is more compact, and *n*-butane has the more extended shape. Consequently, we expect intermolecular interactions for *n*-butane to be stronger due to its larger surface area, resulting in a higher boiling point. The overall order is thus as follows, with actual boiling points in parentheses: propane (-42.1°C) < 2-methylpropane (-11.7°C) < *n*-butane (-0.5°C) < *n*-pentane (36.1°C).

? Exercise 12.6.2

Arrange GeH_4 , SiCl_4 , SiH_4 , CH_4 , and GeCl_4 in order of decreasing boiling points.

Answer

GeCl_4 (87°C) > SiCl_4 (57.6°C) > GeH_4 (-88.5°C) > SiH_4 (-111.8°C) > CH_4 (-161°C)

Hydrogen Bonds

Molecules with hydrogen atoms bonded to electronegative atoms such as O, N, and F (and to a much lesser extent, Cl and S) tend to exhibit unusually strong intermolecular interactions. These result in much higher boiling points than are observed for substances in which London dispersion forces dominate, as illustrated for the covalent hydrides of elements of groups 14–17 in Figure 12.6.5. Methane and its heavier congeners in group 14 form a series whose boiling points increase smoothly with increasing molar mass. This is the expected trend in nonpolar molecules, for which London dispersion forces are the exclusive intermolecular forces. In contrast, the hydrides of the lightest members of groups 15–17 have boiling points that are more than 100°C greater than predicted on the basis of their molar masses. The effect is most dramatic for water: if we extend the straight line connecting the points for H_2Te and H_2Se to the line for period 2, we obtain an estimated boiling point of -130°C for water! Imagine the implications for life on Earth if water boiled at -130°C rather than 100°C .

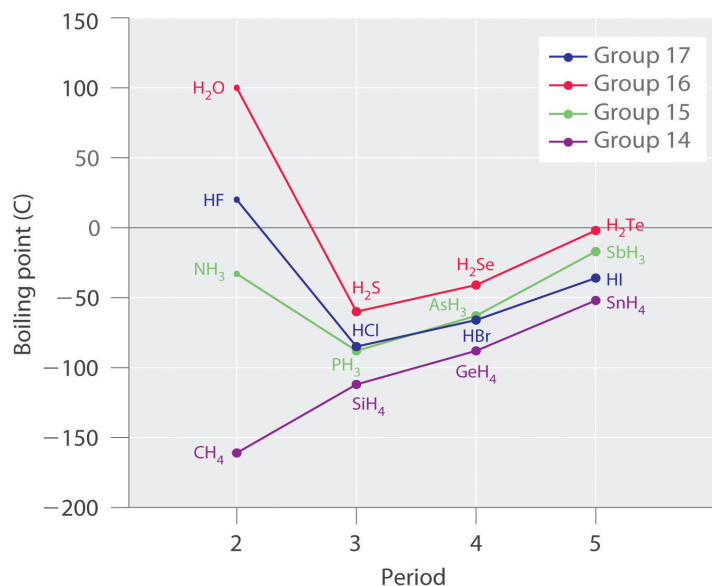


Figure 12.6.5: The Effects of Hydrogen Bonding on Boiling Points. These plots of the boiling points of the covalent hydrides of the elements of groups 14–17 show that the boiling points of the lightest members of each series for which hydrogen bonding is possible (HF , NH_3 , and H_2O) are anomalously high for compounds with such low molecular masses.

Group 14 is in purple, group 15 is in green, group 16 is red, and group 17 is blue. Graph of boiling point against period.

Why do strong intermolecular forces produce such anomalously high boiling points and other unusual properties, such as high enthalpies of vaporization and high melting points? The answer lies in the highly polar nature of the bonds between hydrogen and very electronegative elements such as O, N, and F. The large difference in electronegativity results in a large partial positive charge on hydrogen and a correspondingly large partial negative charge on the O, N, or F atom. Consequently, H–O, H–N, and H–F bonds have very large bond dipoles that can interact strongly with one another. Because a hydrogen atom is so small, these dipoles can also approach one another more closely than most other dipoles. The combination of large bond dipoles and short dipole–dipole distances results in very strong dipole–dipole interactions called hydrogen bonds, as shown for ice in Figure 12.6.6. A hydrogen bond is usually indicated by a dotted line between the hydrogen atom attached to O, N, or F (the *hydrogen bond donor*) and the atom that has the lone pair of electrons (the *hydrogen bond acceptor*). Because each water molecule contains two hydrogen atoms and two lone pairs, a tetrahedral arrangement maximizes the number of hydrogen bonds that can be formed. In the structure of ice, each oxygen atom is surrounded by a distorted tetrahedron of hydrogen atoms that form bridges to the oxygen atoms of adjacent water molecules. The bridging hydrogen atoms are *not* equidistant from the two oxygen atoms they connect, however. Instead, each hydrogen atom is 101 pm from one oxygen and 174 pm from the other. In contrast, each oxygen atom is bonded to two H atoms at

the shorter distance and two at the longer distance, corresponding to two O–H covalent bonds and two O···H hydrogen bonds from adjacent water molecules, respectively. The resulting open, cagelike structure of ice means that the solid is actually slightly less dense than the liquid, which explains why ice floats on water, rather than sinks.

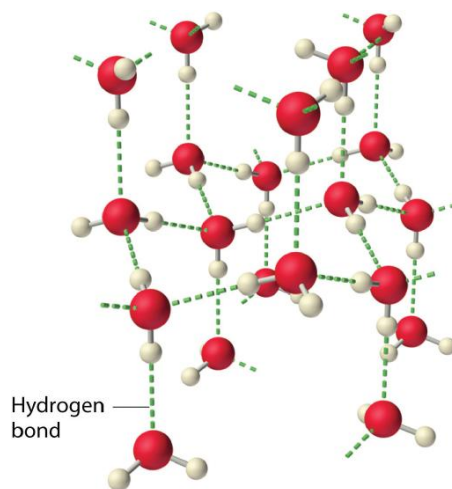


Figure 12.6.6: The Hydrogen-Bonded Structure of Ice

Each water molecule accepts two hydrogen bonds from two other water molecules and donates two hydrogen atoms to form hydrogen bonds with two more water molecules, producing an open, cage like structure. The structure of liquid water is very similar, but in the liquid, the hydrogen bonds are continually broken and formed because of rapid molecular motion.

Hydrogen bond formation requires both a hydrogen bond donor and a hydrogen bond acceptor.

Because ice is less dense than liquid water, rivers, lakes, and oceans freeze from the top down. In fact, the ice forms a protective surface layer that insulates the rest of the water, allowing fish and other organisms to survive in the lower levels of a frozen lake or sea. If ice were denser than the liquid, the ice formed at the surface in cold weather would sink as fast as it formed. Bodies of water would freeze from the bottom up, which would be lethal for most aquatic creatures. The expansion of water when freezing also explains why automobile or boat engines must be protected by “antifreeze” and why unprotected pipes in houses break if they are allowed to freeze.



Video Discussing Hydrogen Bonding Intermolecular Forces. Source: [Hydrogen Bonding Intermolecular Force, YouTube](https://www.youtube.com/watch?v=98083)(opens in new window) [youtu.be]

✓ Example 12.6.3

Considering CH_3OH , C_2H_6 , Xe , and $(\text{CH}_3)_3\text{N}$, which can form hydrogen bonds with themselves? Draw the hydrogen-bonded structures.

Given: compounds

Asked for: formation of hydrogen bonds and structure

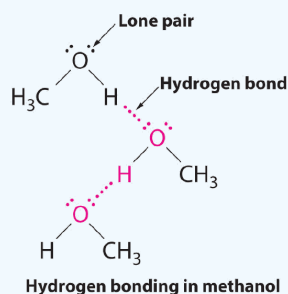
Strategy:

- Identify the compounds with a hydrogen atom attached to O, N, or F. These are likely to be able to act as hydrogen bond donors.
- Of the compounds that can act as hydrogen bond donors, identify those that also contain lone pairs of electrons, which allow them to be hydrogen bond acceptors. If a substance is both a hydrogen donor and a hydrogen bond acceptor, draw a structure showing the hydrogen bonding.

Solution:

A. Of the species listed, xenon (Xe), ethane (C_2H_6), and trimethylamine $[(\text{CH}_3)_3\text{N}]$ do not contain a hydrogen atom attached to O, N, or F; hence they cannot act as hydrogen bond donors.

B. The one compound that can act as a hydrogen bond donor, methanol (CH_3OH), contains both a hydrogen atom attached to O (making it a hydrogen bond donor) and two lone pairs of electrons on O (making it a hydrogen bond acceptor); methanol can thus form hydrogen bonds by acting as either a hydrogen bond donor or a hydrogen bond acceptor. The hydrogen-bonded structure of methanol is as follows:

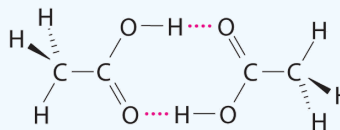
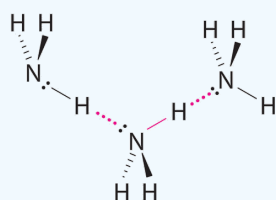


? Exercise 12.6.3

Considering $\text{CH}_3\text{CO}_2\text{H}$, $(\text{CH}_3)_3\text{N}$, NH_3 , and CH_3F , which can form hydrogen bonds with themselves? Draw the hydrogen-bonded structures.

Answer

$\text{CH}_3\text{CO}_2\text{H}$ and NH_3 ;



Hydrogen bonding in ammonia between nitrogen and hydrogen. hydrogen bonding in acetic acid is between oxygen and hydrogen.

Although hydrogen bonds are significantly weaker than covalent bonds, with typical dissociation energies of only 15–25 kJ/mol, they have a significant influence on the physical properties of a compound. Compounds such as HF can form only two hydrogen bonds at a time as can, on average, pure liquid NH_3 . Consequently, even though their molecular masses are similar to that of water, their boiling points are significantly lower than the boiling point of water, which forms *four* hydrogen bonds at a time.

✓ Example 12.6.4: Buckyballs

Arrange C_{60} (buckminsterfullerene, which has a cage structure), NaCl, He, Ar, and N_2O in order of increasing boiling points.

Given: compounds.

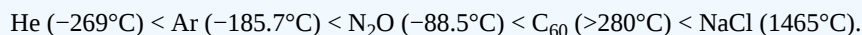
Asked for: order of increasing boiling points.

Strategy:

Identify the intermolecular forces in each compound and then arrange the compounds according to the strength of those forces. The substance with the weakest forces will have the lowest boiling point.

Solution

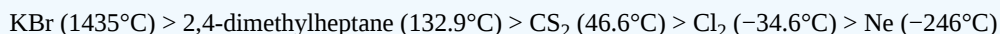
Electrostatic interactions are strongest for an ionic compound, so we expect NaCl to have the highest boiling point. To predict the relative boiling points of the other compounds, we must consider their polarity (for dipole–dipole interactions), their ability to form hydrogen bonds, and their molar mass (for London dispersion forces). Helium is nonpolar and by far the lightest, so it should have the lowest boiling point. Argon and N_2O have very similar molar masses (40 and 44 g/mol, respectively), but N_2O is polar while Ar is not. Consequently, N_2O should have a higher boiling point. A C_{60} molecule is nonpolar, but its molar mass is 720 g/mol, much greater than that of Ar or N_2O . Because the boiling points of nonpolar substances increase rapidly with molecular mass, C_{60} should boil at a higher temperature than the other nonionic substances. The predicted order is thus as follows, with actual boiling points in parentheses:



? Exercise 12.6.4

Arrange 2,4-dimethylheptane, Ne, CS_2 , Cl_2 , and KBr in order of decreasing boiling points.

Answer



✓ Example 12.6.5

Identify the most significant intermolecular force in each substance.

- a. C_3H_8
- b. CH_3OH
- c. H_2S

Solution

- a. Although C–H bonds are polar, they are only minimally polar. The most significant intermolecular force for this substance would be dispersion forces.
- b. This molecule has an H atom bonded to an O atom, so it will experience hydrogen bonding.
- c. Although this molecule does not experience hydrogen bonding, the Lewis electron dot diagram and VSEPR indicate that it is bent, so it has a permanent dipole. The most significant force in this substance is dipole–dipole interaction.

? Exercise 12.6.6

Identify the most significant intermolecular force in each substance.

- a. HF
- b. HCl

Answer a

hydrogen bonding

Answer b

Summary

Intermolecular forces are electrostatic in nature and include van der Waals forces and hydrogen bonds. Molecules in liquids are held to other molecules by intermolecular interactions, which are weaker than the intramolecular interactions that hold the atoms together within molecules and polyatomic ions. Transitions between the solid and liquid, or the liquid and gas phases, are due to changes in intermolecular interactions, but do not affect intramolecular interactions. The three major types of intermolecular interactions are dipole–dipole interactions, London dispersion forces (these two are often referred to collectively as **van der Waals forces**), and hydrogen bonds. **Dipole–dipole interactions** arise from the electrostatic interactions of the positive and negative ends of molecules with permanent dipole moments; their strength is proportional to the magnitude of the dipole moment and to $1/r^3$, where r is the distance between dipoles. **London dispersion forces** are due to the formation of **instantaneous dipole moments** in polar or nonpolar molecules as a result of short-lived fluctuations of electron charge distribution, which in turn cause the temporary formation of an **induced dipole** in adjacent molecules; their energy falls off as $1/r^6$. Larger atoms tend to be more **polarizable** than smaller ones, because their outer electrons are less tightly bound and are therefore more easily perturbed. **Hydrogen bonds** are especially strong dipole–dipole interactions between molecules that have hydrogen bonded to a highly electronegative atom, such as O, N, or F. The resulting partially positively charged H atom on one molecule (the *hydrogen bond donor*) can interact strongly with a lone pair of electrons of a partially negatively charged O, N, or F atom on adjacent molecules (the *hydrogen bond acceptor*). Because of strong $\text{O}\cdots\text{H}$ hydrogen bonding between water molecules, water has an unusually high boiling point, and ice has an open, cage like structure that is less dense than liquid water.

12.6: Types of Intermolecular Forces- Dispersion, Dipole–Dipole, Hydrogen Bonding, and Ion-Dipole is shared under a [CC BY-NC-SA 4.0](#) license and was authored, remixed, and/or curated by LibreTexts.

- [11.2: Intermolecular Forces](#) is licensed [CC BY-NC-SA 3.0](#).

12.7: Types of Crystalline Solids- Molecular, Ionic, and Atomic

Template:HideTOC

Learning Objectives

- Identify different types of solid substances.

As a society, we sometimes take things for granted. For example, it is often assumed that we will get electric power when we connect a plug to an electrical outlet. The wire that comprises that outlet is almost always copper, a material that conducts electricity well. The unique properties of the solid copper allow electrons to flow freely through the wire and into whatever device we connect it to. Then we can enjoy music, television, computer work, or whatever other activity we want to undertake. However, these activities—and the miracle of electricity itself—would not be possible without that copper wire!

Classes of Crystalline Solids

Crystalline substances can be described by the types of particles in them and the types of chemical bonding that take place between the particles. There are four types of crystals: (1) **ionic**, (2) **metallic**, (3) **covalent network**, and (4) **molecular**. Properties and several examples of each type are listed in the following table and are described in the table below.

Table 12.7.1: Crystalline Solids: Melting and Boiling Points

Type of Crystalline Solid	Examples (formulas)	Melting Point (°C)	Normal Boiling Point (°C)
Ionic	NaCl	801	1413
	CaF ₂	1418	1533
Metallic	Hg	-39	630
	Na	371	883
	Au	1064	2856
	W	3410	5660
Covalent Network	B	2076	3927
	C (diamond)	3500	3930
	SiO ₂	1600	2230
Molecular	H ₂	-259	-253
	I ₂	114	184
	NH ₃	-78	-33
	H ₂ O	0	100

Ionic crystals - The ionic crystal structure consists of alternating positively-charged cations and negatively-charged anions (see figure below). The ions may either be monatomic or polyatomic. Generally, ionic crystals form from a combination of Group 1 or 2 metals and Group 16 or 17 nonmetals or nonmetallic polyatomic ions. Ionic crystals are hard and brittle and have high melting points. Ionic compounds do not conduct electricity as solids, but do conduct electricity when molten or in aqueous solution.

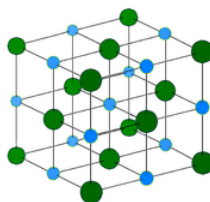


Figure 12.7.1: NaCl crystal.

Metallic crystal - Metallic crystals consist of metal cations surrounded by a "sea" of mobile valence electrons (see figure below). These electrons, also referred to as delocalized electrons, do not belong to any one atom, but are capable of moving through the entire crystal. As a result, metals are good conductors of electricity. As seen in the table above, the melting points of metallic crystals span a wide range.

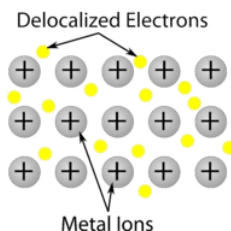


Figure 12.7.2: Metallic crystal lattice with free electrons able to move among positive metal atoms.

Covalent network crystals - A covalent network crystal consists of atoms at the lattice points of the crystal, with each atom being covalently bonded to its nearest neighbor atoms (see figure below). The covalently bonded network is three-dimensional and contains a very large number of atoms. Network solids include diamond, quartz, many metalloids, and oxides of transition metals and metalloids. Network solids are hard and brittle, with extremely high melting and boiling points. Being composed of atoms rather than ions, they do not conduct electricity in any state.

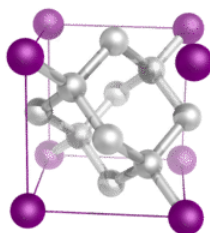


Figure 12.7.3: Diamond is a network solid and consists of carbon atoms covalently bonded to one another in a repeating three-dimensional pattern. Each carbon atom makes for single covalent bonds in a tetrahedral geometry.

Molecular crystals - Molecular crystals typically consist of molecules at the lattice points of the crystal, held together by relatively weak intermolecular forces (see figure below). The intermolecular forces may be dispersion forces in the case of nonpolar crystals, or dipole-dipole forces in the case of polar crystals. Some molecular crystals, such as ice, have molecules held together by hydrogen bonds. When one of the noble gases is cooled and solidified, the lattice points are individual atoms rather than molecules. In all cases, the intermolecular forces holding the particles together are far weaker than either ionic or covalent bonds. As a result, the melting and boiling points of molecular crystals are much lower. Lacking ions or free electrons, molecular crystals are poor electrical conductors.

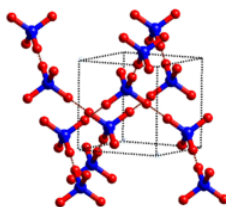


Figure 12.7.4: Ice crystal structure.

Some general properties of the four major classes of solids are summarized in Table 12.7.2

Table 12.7.2: Properties of the Major Classes of Solids

Ionic Solids	Molecular Solids	Covalent Solids	Metallic Solids
poor conductors of heat and electricity	poor conductors of heat and electricity	poor conductors of heat and electricity*	good conductors of heat and electricity
*Many exceptions exist. For example, graphite has a relatively high electrical conductivity within the carbon planes, and diamond has the highest thermal conductivity of any known substance.			

Ionic Solids	Molecular Solids	Covalent Solids	Metallic Solids
relatively high melting point	low melting point	high melting point	melting points depend strongly on electron configuration
hard but brittle; shatter under stress	soft	very hard and brittle	easily deformed under stress; ductile and malleable
relatively dense	low density	low density	usually high density
dull surface	dull surface	dull surface	lustrous

*Many exceptions exist. For example, graphite has a relatively high electrical conductivity within the carbon planes, and diamond has the highest thermal conductivity of any known substance.

✓ Example 12.7.1

Classify Ge, RbI, $C_6(CH_3)_6$, and Zn as ionic, molecular, covalent, or metallic solids and arrange them in order of increasing melting points.

Given: compounds

Asked for: classification and order of melting points

Strategy:

- Locate the component element(s) in the periodic table. Based on their positions, predict whether each solid is ionic, molecular, covalent, or metallic.
- Arrange the solids in order of increasing melting points based on your classification, beginning with molecular solids.

Solution:

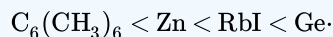
A. **Germanium** lies in the p block just under Si, along the diagonal line of semi-metallic elements, which suggests that elemental Ge is likely to have the same structure as Si (the diamond structure). Thus Ge is probably a **covalent solid**.

RbI contains a metal from group 1 and a nonmetal from group 17, so it is **an ionic solid** containing Rb^+ and I^- ions.

The compound $C_6(CH_3)_6$ is a hydrocarbon (hexamethylbenzene), which consists of isolated molecules that stack to form **a molecular solid** with no covalent bonds between them.

Zn is a d-block element, so it is **a metallic solid**.

B. Arranging these substances in order of increasing melting points is straightforward, with one exception. We expect $C_6(CH_3)_6$ to have the lowest melting point and Ge to have the highest melting point, with RbI somewhere in between. The melting points of metals, however, are difficult to predict based on the models presented thus far. Because Zn has a filled valence shell, it should not have a particularly high melting point, so a reasonable guess is

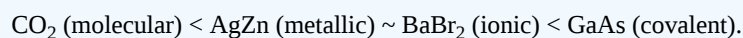


The actual melting points are $C_6(CH_3)_6$, 166°C; Zn, 419°C; RbI, 642°C; and Ge, 938°C. This agrees with our prediction.

? Exercise 12.7.1

Classify CO_2 , $BaBr_2$, GaAs, and AgZn as ionic, covalent, molecular, or metallic solids and then arrange them in order of increasing melting points.

Answer



The actual melting points are: CO_2 , about -15.6°C; AgZn, about 700°C; $BaBr_2$, 856°C; and GaAs, 1238°C.

Summary

- Ionic crystals are composed of alternating positive and negative ions.
- Metallic crystals consist of metal cations surrounded by a "sea" of mobile valence electrons.
- Covalent crystals are composed of atoms which are covalently bonded to one another.
- Molecular crystals are held together by weak intermolecular forces.

12.7: Types of Crystalline Solids- Molecular, Ionic, and Atomic is shared under a [CC BY-NC-SA 4.0](#) license and was authored, remixed, and/or curated by LibreTexts.

- **12.7: Types of Crystalline Solids** by Henry Agnew, Marisa Alviar-Agnew is licensed [CK-12](#). Original source: <https://www.ck12.org/c/chemistry/>.

12.8: Water- A Remarkable Molecule

Template:HideTOC

Learning Objectives

- Interpret the unique properties of water in terms of a phase diagram.

Earth is the only known body in our solar system that has liquid water existing freely on its surface; life on Earth would not be possible without the presence of liquid water. Water has several properties that make it a unique substance among substances. It is an excellent solvent; it dissolves many other substances and allows those substances to react when in solution. In fact, water is sometimes called the *universal solvent* because of this ability. Water has unusually high melting and boiling points (0°C and 100°C , respectively) for such a small molecule. The boiling points for similar-sized molecules, such as methane (BP = -162°C) and ammonia (BP = -33°C), are more than 100° lower. Though a liquid at normal temperatures, water molecules experience a relatively strong intermolecular interaction that allows them to maintain the liquid phase at higher temperatures than expected.

Unlike most substances, the solid form of water is less dense than its liquid form, which allows ice to float on water. In colder weather, lakes and rivers freeze from the top, allowing animals and plants to continue to live underneath. Water also requires an unusually large amount of energy to change temperature. While 100 J of energy will change the temperature of 1 g of Fe by 230°C , this same amount of energy will change the temperature of 1 g of H_2O by only 100°C . Thus, water changes its temperature slowly as heat is added or removed. This has a major impact on weather, as storm systems like hurricanes can be impacted by the amount of heat that ocean water can store. Water's influence on the world around us is affected by these properties. Isn't it fascinating that such a small molecule can have such a big impact?

Phase Diagram for Water

Water is a unique substance in many ways. One of these special properties is the fact that solid water (ice) is less dense than liquid water just above the freezing point. The phase diagram for water is shown in the figure below.

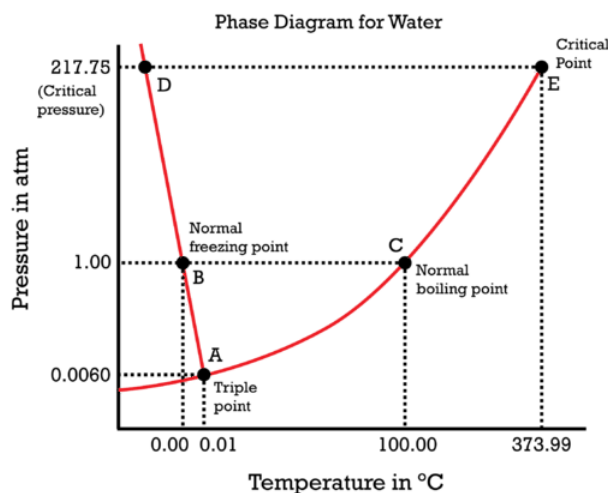


Figure 12.8.1: Phase diagram for water.

Notice one key difference between the general phase diagram and the phase diagram for water. In water's diagram, the slope of the line between the solid and liquid states is negative rather than positive. The reason for this is that water is an unusual substance, as its solid state is less dense than the liquid state. Ice floats in liquid water. Therefore, a pressure change has the opposite effect on those two phases. If ice is relatively near its melting point, it can be changed into liquid water by the application of pressure. The water molecules are actually closer together in the liquid phase than they are in the solid phase.

Refer again to water's phase diagram (figure above). Notice point *E*, labeled the **critical point**. What does that mean? At 373.99°C , particles of water in the gas phase are moving very, very rapidly. At any temperature higher than that, the gas phase cannot be made to liquefy, no matter how much pressure is applied to the gas. The **critical pressure** (P_C) is the pressure that must be applied to the gas at the critical temperature in order to turn it into a liquid. For water, the critical pressure is very high, 217.75 atm. The critical point is the intersection point of the **critical temperature** and the critical pressure.

Summary

- Solid water is less dense than liquid water just above the freezing point.
- The critical temperature (T_C) of a substance is the highest temperature at which the substance can possibly exist as a liquid.
- The critical pressure (P_C) is the pressure that must be applied to the gas at the critical temperature in order to turn it into a liquid.
- The critical point is the intersection point of the critical temperature and the critical pressure.

12.8: Water- A Remarkable Molecule is shared under a [CC BY-NC-SA 4.0](#) license and was authored, remixed, and/or curated by LibreTexts.

- **12.8: Water - A Remarkable Molecule** by Henry Agnew, Marisa Alviar-Agnew is licensed [CK-12](#). Original source: <https://www.ck12.org/c/chemistry/>.

CHAPTER OVERVIEW

13: Solutions

Solutions play a very important role in many biological, laboratory, and industrial applications of chemistry. Of particular importance are solutions involving substances dissolved in water, or aqueous solutions. Solutions represent equilibrium systems, and the lessons learned in our last unit will be of particular importance again. Quantitative measurements of solutions are another key component of this unit. Solutions can involve all physical states - gases dissolved in gases (the air around us), solids dissolved in solids (metal alloys), liquids dissolved in solids (amalgams - liquid mercury dissolved in another metal such as silver, tin or copper). In this unit we will almost exclusively be concerned with aqueous solutions - substances dissolved in water.

[13.1: Prelude - Tragedy in Cameroon](#)

[13.2: Solutions- Homogeneous Mixtures](#)

[13.3: Solutions of Solids Dissolved in Water- How to Make Rock Candy](#)

[13.4: Solutions of Gases in Water- How Soda Pop Gets Its Fizz](#)

[13.5: Solution Concentration- Mass Percent](#)

[13.6: Solution Concentration- Molarity](#)

[13.7: Solution Dilution](#)

[13.8: Solution Stoichiometry](#)

[13.9: Freezing Point Depression and Boiling Point Elevation- Making Water Freeze Colder and Boil Hotter](#)

[13.10: Osmosis- Why Drinking Salt Water Causes Dehydration](#)

13: Solutions is shared under a [CC BY-NC-SA 4.0](#) license and was authored, remixed, and/or curated by LibreTexts.

13.1: Prelude - Tragedy in Cameroon

Template:HideTOC

Lake Nyos is a deep crater lake in the Northwest region of Cameroon, high on the flank of an inactive volcano in the Oku volcanic plain along the Cameroon line of volcanic activity. A volcanic dam impounds the lake waters. A pocket of magma lies beneath the lake and leaks carbon dioxide (CO_2) into the water, changing it into carbonic acid. Nyos is one of only three known exploding lakes to be saturated with carbon dioxide in this way.

In 1986, more than 1700 people in Cameroon were killed when a cloud of gas, almost certainly carbon dioxide, bubbled from Lake Nyos (Figure 13.1.1), a deep lake in a volcanic crater. It is believed that the lake underwent a turnover due to gradual heating from below the lake, and the warmer, less-dense water saturated with carbon dioxide reached the surface. Consequently, tremendous quantities of dissolved CO_2 were released, and the colorless gas, which is denser than air, flowed down the valley below the lake and suffocated humans and animals living in the valley.



Figure 13.1.1: Two photos are shown. The first is an aerial view of a lake surrounded by green hills. The second shows a large body of water with a fountain sending liquid up into the air several yards or meters above the surface of the water. (a) It is believed that the 1986 disaster, that killed more than 1700 people near Lake Nyos in Cameroon, resulted when a large volume of carbon dioxide gas was released from the lake. (b) A CO_2 vent has since been installed to help outgas the lake in a slow, controlled fashion and prevent a similar catastrophe from happening in the future. (Credit a: modification of work by Jack Lockwood; credit b: modification of work by Bill Evans.)

Following the Lake Nyos tragedy, scientists investigated other African lakes to see if a similar phenomenon could happen elsewhere. Lake Kivu in Democratic Republic of Congo, 2,000 times larger than Lake Nyos, was also found to be supersaturated, and geologists found evidence for out-gassing events around the lake about every one thousand years.

Contributions & Attributions

- Wikipedia
- Paul Flowers (University of North Carolina - Pembroke), Klaus Theopold (University of Delaware) and Richard Langley (Stephen F. Austin State University) with contributing authors. Textbook content produced by OpenStax College is licensed under a [Creative Commons Attribution License 4.0](https://creativecommons.org/licenses/by-nc-sa/4.0/) license. Download for free at <http://cnx.org/contents/85abf193-2bd...a7ac8df6@9.110>.

13.1: Prelude - Tragedy in Cameroon is shared under a [CC BY-NC-SA 4.0](https://creativecommons.org/licenses/by-nc-sa/4.0/) license and was authored, remixed, and/or curated by LibreTexts.

- **13.1: Tragedy in Cameroon** by Henry Agnew, Marisa Alviar-Agnew is licensed [CC BY-SA 4.0](https://creativecommons.org/licenses/by-sa/4.0/).

13.2: Solutions- Homogeneous Mixtures

Template:HideTOC

Learning Objectives

- Learn terminology involving solutions.
- Explain the significance of the statement "like dissolves like."
- Explain why certain substances dissolve in other substances.

The major component of a solution is called the **solvent**. The minor component of a solution is called the **solute**. By major and minor we mean whichever component has the greater or lesser presence by mass or by moles. Sometimes this becomes confusing, especially with substances with very different molar masses. However, here we will confine the discussion to solutions for which the major component and the minor component are obvious.



Figure 13.2.1: Making a saline water solution by dissolving table salt (NaCl) in water. The salt is the solute and the water the solvent. (CC-BY-SA 3.0; [Chris 73](#)).

Solutions exist for every possible phase of the solute and the solvent. Salt water, for example, is a solution of solid NaCl in liquid water, while air is a solution of a gaseous solute (O_2) in a gaseous solvent (N_2). In all cases, however, the overall phase of the solution is the same phase as the solvent. Table 13.2.1 lists some common types of solutions, with examples of each.

Table 13.2.1: Types of Solutions

Solvent Phase	Solute Phase	Example
gas	gas	air
liquid	gas	carbonated beverages
liquid	liquid	ethanol (C_2H_5OH) in H_2O (alcoholic beverages)
liquid	solid	salt water
solid	gas	H_2 gas absorbed by Pd metal
solid	liquid	Hg(l) in dental fillings
solid	solid	steel alloys

✓ Example 13.2.1: Sugar and Water

A solution is made by dissolving 1.00 g of sucrose ($C_{12}H_{22}O_{11}$) in 100.0 g of liquid water. Identify the solvent and solute in the resulting solution.

Solution

Either by mass or by moles, the obvious minor component is **sucrose**, so it is **the solute**. **Water**—the majority component—is **the solvent**. The fact that the resulting solution is the same phase as water also suggests that water is the solvent.

? Exercise 13.2.1

A solution is made by dissolving 3.33 g of HCl(g) in 40.0 g of liquid methyl alcohol (CH_3OH). Identify the solvent and solute in the resulting solution.

Answer

solute: HCl(g)

solvent: CH_3OH

Like Dissolves Like

A simple way to predict which compounds will dissolve in other compounds is the phrase "like dissolves like". What this means is that polar compounds dissolve polar compounds, nonpolar compounds dissolve nonpolar compounds, but polar and nonpolar do not dissolve in each other.

Even some nonpolar substances dissolve in water but only to a limited degree. Have you ever wondered why fish are able to breathe? Oxygen gas, a nonpolar molecule, does dissolve in water—it is this oxygen that the fish take in through their gills. The reason we can enjoy carbonated sodas is also due to a nonpolar compound that dissolves in water. Pepsi-cola and all the other sodas have carbon dioxide gas, CO_2 , a nonpolar compound, dissolved in a sugar-water solution. In this case, to keep as much gas in solution as possible, the sodas are kept under pressure.

This general trend of "like dissolves like" is summarized in the following table:

Table 13.2.2: Summary of Solubilities

Solute (Polarity of Compound)	Solvent (Polarity of Compound)	Dominant Intermolecular Force	Is Solution Formed?
Polar	Polar	Dipole-Dipole Force and/or Hydrogen Bond	yes
Non-polar	Non-polar	Dispersion Force	yes
Polar	Non-polar		no
Non-polar	Polar		no
Ionic	Polar	Ion-Dipole	yes
Ionic	Non-polar		no

Note that every time charged particles (ionic compounds or polar substances) are mixed, a solution is formed. When particles with no charges (nonpolar compounds) are mixed, they will form a solution. However, if substances with charges are mixed with other substances without charges, a solution does not form. When an ionic compound is considered "insoluble", it doesn't necessarily mean the compound is completely untouched by water. All ionic compounds dissolve to some extent. An insoluble compound just doesn't dissolve in any noticeable or appreciable amount.

What is it that makes a solute soluble in some solvents but not others?

The answer is intermolecular interactions. The intermolecular interactions include London dispersion forces, dipole-dipole interactions, and hydrogen bonding (as described in [Chapter 10](#)). From experimental studies, it has been determined that if molecules of a solute experience the same intermolecular forces that the solvent does, the solute will likely dissolve in that solvent. So, NaCl —a very polar substance because it is composed of ions—dissolves in water, which is very polar, but not in oil, which is generally nonpolar. Nonpolar wax dissolves in nonpolar hexane, but not in polar water.



Figure 13.2.2: Water (clear liquid) and oil (yellow) do not form liquid solutions. (CC BY-SA 1.0 Generic; Victor Blacus)

✓ Example 13.2.2: Polar and Nonpolar Solvents

Would I_2 be more soluble in CCl_4 or H_2O ? Explain your answer.

Solution

I_2 is nonpolar. Of the two solvents, CCl_4 is nonpolar and H_2O is polar, so I_2 would be expected to be more soluble in CCl_4 .

? Exercise 13.2.2

Would C_3H_7OH be more soluble in CCl_4 or H_2O ? Explain your answer.

Answer

H_2O , because both experience hydrogen bonding.

✓ Example 13.2.3

Water is considered a polar solvent. Which substances should dissolve in water?

- methanol (CH_3OH)
- sodium sulfate (Na_2SO_4)
- octane (C_8H_{18})

Solution

Because water is polar, substances that are polar or ionic will dissolve in it.

- Because of the OH group in methanol, we expect its molecules to be polar. Thus, we expect it to be soluble in water. As both water and methanol are liquids, the word *miscible* can be used in place of *soluble*.
- Sodium sulfate is an ionic compound, so we expect it to be soluble in water.
- Like other hydrocarbons, octane is nonpolar, so we expect that it would not be soluble in water.

? Exercise 13.2.3: Toluene

Toluene ($C_6H_5CH_3$) is widely used in industry as a nonpolar solvent. Which substances should dissolve in toluene?

- water (H_2O)
- sodium sulfate (Na_2SO_4)
- octane (C_8H_{18})

Answer

Octane (C_8H_{18}) will dissolve. It is also non-polar.

Summary

- Solutions are composed of a solvent (major component) and a solute (minor component).
- “Like dissolves like” is a useful rule for deciding if a solute will be soluble in a solvent.

13.2: Solutions- Homogeneous Mixtures is shared under a [CC BY-NC-SA 4.0](#) license and was authored, remixed, and/or curated by LibreTexts.

- **13.2: Solutions - Homogeneous Mixtures** by Henry Agnew, Marisa Alviar-Agnew is licensed [CC BY-NC-SA 3.0](#).

13.3: Solutions of Solids Dissolved in Water- How to Make Rock Candy

Template:HideTOC

Learning Objectives

- Define electrolytes and non electrolytes
- Explain why solutions form.
- Discuss the idea of water as the "universal solvent".
- Explain how water molecules attract ionic solids when they dissolve in water.

We have learned that solutions can be formed in a variety of combinations using solids, liquids, and gases. We also know that solutions have constant composition, and that this composition can be varied up to a point to maintain the homogeneous nature of the solution. But how exactly do solutions form? Why is it that oil and water will not form a solution, and yet vinegar and water will? Why could we dissolve table salt in water, but not in vegetable oil? The reasons why solutions will form will be explored in this section, along with a discussion of why water is used most frequently to dissolve substances of various types.

Solubility and Saturation

Table salt (NaCl) readily dissolves in water. In most cases, only a certain maximum amount of solute can be dissolved in a given amount of solvent. This maximum amount is specified as the **solubility** of the solute. It is usually expressed in terms of the amount of solute that can dissolve in 100 g of the solvent at a given temperature. Table 13.3.1 lists the solubilities of some simple ionic compounds. These solubilities vary widely. NaCl can dissolve up to 31.6 g per 100 g of H_2O , while AgCl can dissolve only 0.00019 g per 100 g of H_2O .

Table 13.3.1: Solubilities of Some Ionic Compounds

Solute	Solubility (g per 100 g of H_2O at 25°C)
AgCl	0.00019
CaCO_3	0.0006
KBr	70.7
NaCl	36.1
NaNO_3	94.6

When the maximum amount of solute has been dissolved in a given amount of solvent, we say that the solution is **saturated** with solute. When less than the maximum amount of solute is dissolved in a given amount of solute, the solution is **unsaturated**. These terms are also qualitative terms because each solute has its own solubility. A solution of 0.00019 g of AgCl per 100 g of H_2O may be saturated, but with so little solute dissolved, it is also rather dilute. A solution of 36.1 g of NaCl in 100 g of H_2O is also saturated, but rather concentrated. In some circumstances, it is possible to dissolve more than the maximum amount of a solute in a solution. Usually, this happens by heating the solvent, dissolving more solute than would normally dissolve at regular temperatures, and letting the solution cool down slowly and carefully. Such solutions are called **supersaturated** solutions and are not stable; given an opportunity (such as dropping a crystal of solute in the solution), the excess solute will precipitate from the solution. The figure below illustrates the above process and shows the distinction between unsaturated and saturated.

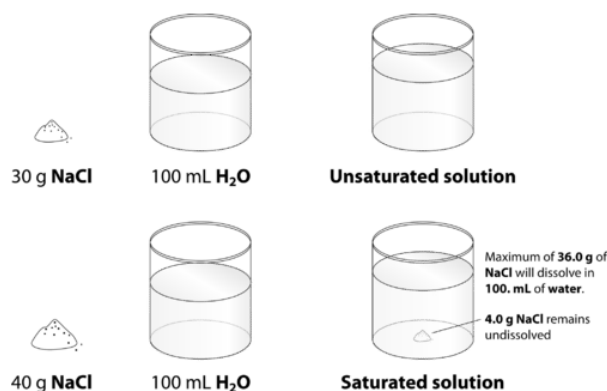


Figure 13.3.1: When 30.0 g of NaCl is added to 100 mL, it all dissolves, forming an unsaturated solution. When 40.0 g is added, 36.0 g dissolves and 4.0 g remains undissolved, forming a saturated solution.

How can you tell if a solution is saturated or unsaturated? If more solute is added and it does not dissolve, then the original solution was saturated. If the added solute dissolves, then the original solution was unsaturated. A solution that has been allowed to reach equilibrium, but which has extra undissolved solute at the bottom of the container, must be saturated.



Electrolyte Solutions: Dissolved Ionic Solids

When some substances are dissolved in water, they undergo either a physical or a chemical change that yields ions in solution. These substances constitute an important class of compounds called **electrolytes**. Substances that do not yield ions when dissolved are called **nonelectrolytes**. If the physical or chemical process that generates the ions is essentially 100% efficient (all of the dissolved compound yields ions), then the substance is known as a strong electrolyte (good conductor). If only a relatively small fraction of the dissolved substance undergoes the ion-producing process, the substance is a weak electrolyte (does not conduct electricity as well).

Substances may be identified as strong, weak, or nonelectrolytes by measuring the electrical conductance of an aqueous solution containing the substance. To conduct electricity, a substance must contain freely mobile, charged species. Most familiar is the conduction of electricity through metallic wires, in which case the mobile, charged entities are electrons. Solutions may also conduct electricity if they contain dissolved ions, with conductivity increasing as ion concentration increases. Applying a voltage to electrodes immersed in a solution permits assessment of the relative concentration of dissolved ions, either quantitatively, by measuring the electrical current flow, or qualitatively, by observing the brightness of a light bulb included in the circuit (Figure 13.3.1).

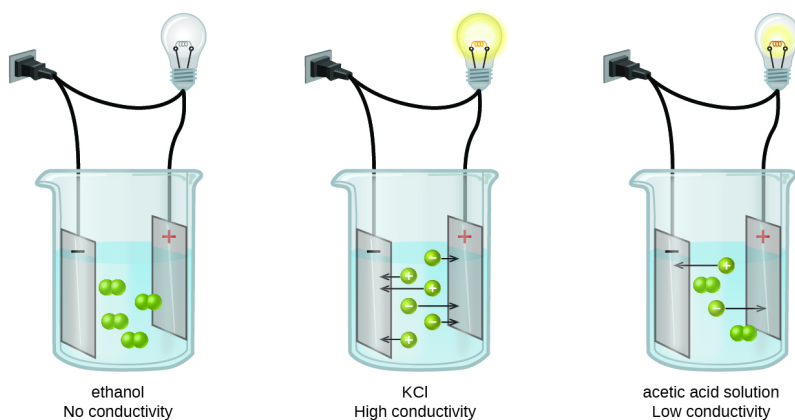


Figure 13.3.1: Solutions of nonelectrolytes, such as ethanol, do not contain dissolved ions and cannot conduct electricity. Solutions of electrolytes contain ions that permit the passage of electricity. The conductivity of an electrolyte solution is related to the strength of the electrolyte. This diagram shows three separate beakers. Each has a wire plugged into a wall outlet. In each case, the wire leads from the wall to the beaker and is split resulting in two ends. One end leads to a light bulb and continues on to a rectangle labeled with a plus sign. The other end leads to a rectangle labeled with a minus sign. The rectangles are in a solution. In the first beaker, labeled “Ethanol No Conductivity,” four pairs of linked small green spheres suspended in the solution between the rectangles. In the second beaker, labeled “K C l Strong Conductivity,” six individual green spheres, three labeled plus and three labeled minus are suspended in the solution. Each of the six spheres has an arrow extending from it pointing to the rectangle labeled with the opposite sign. In the third beaker, labeled “Acetic acid solution Weak conductivity,” two pairs of joined green spheres and two individual spheres, one labeled plus and one labeled minus are shown suspended between the two rectangles. The plus labeled sphere has an arrow pointing to the rectangle labeled minus and the minus labeled sphere has an arrow pointing to the rectangle labeled plus.

Water and other polar molecules are attracted to ions, as shown in Figure 13.3.2 The electrostatic attraction between an ion and a molecule with a dipole is called an ion-dipole attraction. These attractions play an important role in the dissolution of ionic compounds in water.

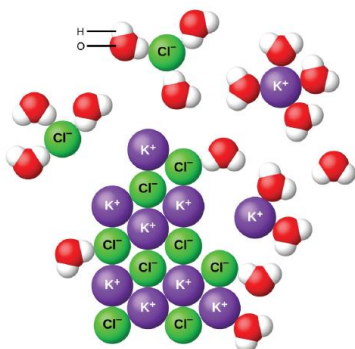


Figure 13.3.2: As potassium chloride (KCl) dissolves in water, the ions are hydrated. The polar water molecules are attracted by the charges on the K^+ and Cl^- ions. Water molecules in front of and behind the ions are not shown. The diagram shows eight purple spheres labeled K superscript plus and eight green spheres labeled C l superscript minus mixed and touching near the center of the diagram. Outside of this cluster of spheres are seventeen clusters of three spheres, which include one red and two white spheres. A red sphere in one of these clusters is labeled O. A white sphere is labeled H. Two of the green C l superscript minus spheres are surrounded by three of the red and white clusters, with the red spheres closer to the green spheres than the white spheres. One of the K superscript plus purple spheres is surrounded by four of the red and white clusters. The white spheres of these clusters are closest to the purple spheres.

When ionic compounds dissolve in water, the ions in the solid separate and disperse uniformly throughout the solution because water molecules surround and solvate the ions, reducing the strong electrostatic forces between them. This process represents a physical change known as dissociation. Under most conditions, ionic compounds will dissociate nearly completely when dissolved, and so they are classified as strong electrolytes.

✓ Example 13.3.1: Identifying Ionic Compounds

Which compound(s) will dissolve in solution to separate into ions?

a. LiF

- b. P_2F_5
- c. $\text{C}_2\text{H}_5\text{OH}$

Solution

LiF will separate into ions when dissolved in solution, because it is an ionic compound. P_2F_5 and $\text{C}_2\text{H}_5\text{OH}$ are both covalent and will stay as molecules in a solution.

? Exercise 13.3.1

Which compounds will dissolve in solution to separate into ions?

- a. $\text{C}_6\text{H}_{12}\text{O}_{11}$, glucose
- b. CCl_4
- c. CaCl_2
- d. AgNO_3

Answer

c & d

How Temperature Influences Solubility

The **solubility** of a substance is the amount of that substance that is required to form a saturated solution in a given amount of solvent at a specified temperature. Solubility is often measured as the grams of solute per 100 g of solvent. The solubility of sodium chloride in water is 36.0 g per 100 g water at 20°C . The temperature must be specified because solubility varies with temperature. For gases, the pressure must also be specified. Solubility is specific for a particular solvent. We will consider solubility of material in water as solvent.

The solubility of the majority of solid substances increases as the temperature increases. However, the effect is difficult to predict and varies widely from one solute to another. The temperature dependence of solubility can be visualized with the help of a **solubility curve**, a graph of the solubility vs. temperature (Figure 13.3.4).

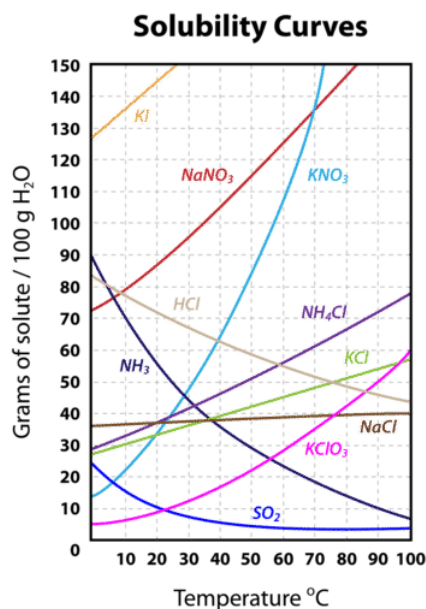


Figure 13.3.4: Solubility curves for several compounds.

Notice how the temperature dependence of NaCl is fairly flat, meaning that an increase in temperature has relatively little effect on the solubility of NaCl . The curve for KNO_3 , on the other hand, is very steep and so an increase in temperature dramatically increases the solubility of KNO_3 .

Several substances— HCl , NH_3 , and SO_2 —have solubility that decreases as temperature increases. They are all gases at standard pressure. When a solvent with a gas dissolved in it is heated, the kinetic energy of both the solvent and solute increase. As the kinetic energy of the gaseous solute increases, its molecules have a greater tendency to escape the attraction of the solvent molecules and return to the gas phase. Therefore, the solubility of a gas decreases as the temperature increases.

Solubility curves can be used to determine if a given solution is saturated or unsaturated. Suppose that 80 g of KNO_3 is added to 100 g of water at 30°C . According to the solubility curve, approximately 48 g of KNO_3 will dissolve at 30°C . This means that the solution will be saturated since 48 g is less than 80 g. We can also determine that there will be $80 - 48 = 32$ g of undissolved KNO_3 remaining at the bottom of the container. Now suppose that this saturated solution is heated to 60°C . According to the curve, the solubility of KNO_3 at 60°C is about 107 g. Now the solution is unsaturated since it contains only the original 80 g of dissolved solute. Now suppose the solution is cooled all the way down to 0°C . The solubility at 0°C is about 14 g, meaning that $80 - 14 = 66$ g of the KNO_3 will re-crystallize.

Summary

- Solubility is the specific amount of solute that can dissolve in a given amount of solvent.
- Saturated and unsaturated solutions are defined.
- Ionic compounds dissolve in polar solvents, especially water. This occurs when the positive cation from the ionic solid is attracted to the negative end of the water molecule (oxygen) and the negative anion of the ionic solid is attracted to the positive end of the water molecule (hydrogen).
- Water is considered the universal solvent since it can dissolve both ionic and polar solutes, as well as some nonpolar solutes (in very limited amounts).
- The solubility of a solid in water increases with an increase in temperature.

Vocabulary

- **Miscible** - Liquids that have the ability to dissolve in each other.
- **Immiscible** - Liquids that do not have the ability to dissolve in each other.
- **Electrostatic attraction** - The attraction of oppositely charged particles.

13.3: Solutions of Solids Dissolved in Water- How to Make Rock Candy is shared under a [CC BY-NC-SA 4.0](#) license and was authored, remixed, and/or curated by LibreTexts.

- **13.3: Solutions of Solids Dissolved in Water- How to Make Rock Candy** by Henry Agnew, Marisa Alviar-Agnew is licensed [CK-12](#).
Original source: <https://www.ck12.org/c/chemistry/>.

13.4: Solutions of Gases in Water- How Soda Pop Gets Its Fizz

Template:HideTOC

Learning Objectives

- Explain how temperature and pressure affect the solubility of gases.

In an earlier module of this chapter, the effect of intermolecular attractive forces on solution formation was discussed. The chemical structures of the solute and solvent dictate the types of forces possible and, consequently, are important factors in determining solubility. For example, under similar conditions, the water solubility of oxygen is approximately three times greater than that of helium, but 100 times less than the solubility of chloromethane, CHCl_3 . Considering the role of the solvent's chemical structure, note that the solubility of oxygen in the liquid hydrocarbon hexane, C_6H_{14} , is approximately 20 times greater than it is in water.

Other factors also affect the solubility of a given substance in a given solvent. Temperature is one such factor, with gas solubility typically decreasing as temperature increases (Figure 13.4.1). This is one of the major impacts resulting from the thermal pollution of natural bodies of water.

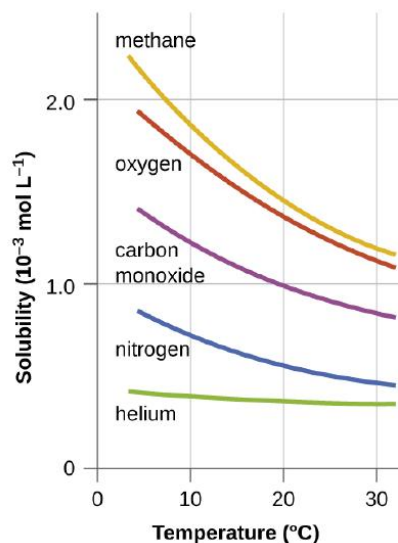


Figure 13.4.1: The solubilities of these gases in water decrease as the temperature increases. All solubilities were measured with a constant pressure of 101.3 kPa (1 atm) of gas above the solutions.

When the temperature of a river, lake, or stream is raised abnormally high, usually due to the discharge of hot water from some industrial process, the solubility of oxygen in the water is decreased. Decreased levels of dissolved oxygen may have serious consequences for the health of the water's ecosystems and, in severe cases, can result in large-scale fish kills (Figure 13.4.2).



(a)



(b)

Figure 13.4.2: (a) The small bubbles of air in this glass of chilled water formed when the water warmed to room temperature and the solubility of its dissolved air decreased. (b) The decreased solubility of oxygen in natural waters subjected to thermal pollution can result in large-scale fish kills. (Credit a: modification of work by Liz West; credit b: modification of work by U.S. Fish and Wildlife Service.)

The solubility of a gaseous solute is also affected by the partial pressure of solute in the gas to which the solution is exposed. Gas solubility increases as the pressure of the gas increases. Carbonated beverages provide a nice illustration of this relationship. The carbonation process involves exposing the beverage to a relatively high pressure of carbon dioxide gas and then sealing the beverage container, thus saturating the beverage with CO_2 at this pressure. When the beverage container is opened, a familiar hiss is heard as the carbon dioxide gas pressure is released, and some of the dissolved carbon dioxide is typically seen leaving solution in the form of small bubbles (Figure 13.4.3). At this point, the beverage is *supersaturated* with carbon dioxide and, with time, the dissolved carbon dioxide concentration will decrease to its equilibrium value and the beverage will become “flat.”


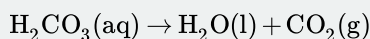


Figure 13.4.3: Opening the bottle of carbonated beverage reduces the pressure of the gaseous carbon dioxide above the beverage. The solubility of CO_2 is thus lowered, and some dissolved carbon dioxide may be seen leaving the solution as small gas bubbles. A dark brown liquid is shown in a clear, colorless container. A thick layer of beige bubbles appear at the surface of the liquid. In the liquid, thirteen small clusters of single black spheres with two red spheres attached to the left and right are shown. Red spheres represent oxygen atoms and black represent carbon atoms. Seven white arrows point upward in the container from these clusters to the bubble layer at the top of the liquid. (Credit: modification of work by Derrick Coetzee.)

"Fizz"

The dissolution in a liquid, also known as fizz, usually involves carbon dioxide under high pressure. When the pressure is reduced, the carbon dioxide is released from the solution as small gas bubbles, which causes the solution to become effervescent, or fizzy. A common example is the dissolving of carbon dioxide in water, resulting in carbonated water.

Carbon dioxide is weakly soluble in water, therefore it separates into a gas when the pressure is released. This process is generally represented by the following reaction, where a pressurized dilute solution of carbonic acid in water releases gaseous carbon dioxide at decompression:



In simple terms, it is the result of the chemical reaction occurring in the liquid which produces a gaseous product.

For many gaseous solutes, the relation between solubility, C_g , and partial pressure, P_g , is a proportional one:

$$C_g = kP_g$$

where k is a proportionality constant that depends on the identities of the gaseous solute and solvent, and on the solution temperature. This is a mathematical statement of Henry's law: *The quantity of an ideal gas that dissolves in a definite volume of liquid is directly proportional to the pressure of the gas.*

✓ Example 13.4.1: Application of Henry's Law

At 20 °C, the concentration of dissolved oxygen in water exposed to gaseous oxygen at a partial pressure of 101.3 kPa (760 torr) is $1.38 \times 10^{-3} \text{ mol L}^{-1}$. Use Henry's law to determine the solubility of oxygen when its partial pressure is 20.7 kPa (155 torr), the approximate pressure of oxygen in earth's atmosphere.

Solution

According to Henry's law, for an ideal solution the solubility, C_g , of a gas ($1.38 \times 10^{-3} \text{ mol L}^{-1}$, in this case) is directly proportional to the pressure, P_g , of the undissolved gas above the solution (101.3 kPa, or 760 torr, in this case). Because we know both C_g and P_g , we can rearrange this expression to solve for k .

$$\begin{aligned} C_g &= kP_g \\ k &= \frac{C_g}{P_g} \\ &= \frac{1.38 \times 10^{-3} \text{ mol L}^{-1}}{101.3 \text{ kPa}} \\ &= 1.36 \times 10^{-5} \text{ mol L}^{-1} \text{ kPa}^{-1} \\ &\quad (1.82 \times 10^{-6} \text{ mol L}^{-1} \text{ torr}^{-1}) \end{aligned}$$

Now we can use k to find the solubility at the lower pressure.

$$\begin{aligned} C_g &= kP_g \\ 1.36 \times 10^{-5} \text{ mol L}^{-1} \text{ kPa}^{-1} \times 20.7 \text{ kPa} \\ &\quad (\text{or } 1.82 \times 10^{-6} \text{ mol L}^{-1} \text{ torr}^{-1} \times 155 \text{ torr}) \\ &= 2.82 \times 10^{-4} \text{ mol L}^{-1} \end{aligned}$$

Note that various units may be used to express the quantities involved in these sorts of computations. Any combination of units that yield to the constraints of dimensional analysis are acceptable.

? Exercise 13.4.1

A 100.0 mL sample of water at 0 °C to an atmosphere containing a gaseous solute at 20.26 kPa (152 torr) resulted in the dissolution of $1.45 \times 10^{-3} \text{ g}$ of the solute. Use Henry's law to determine the solubility of this gaseous solute when its pressure is 101.3 kPa (760 torr).

Answer

$$7.25 \times 10^{-3} \text{ g}$$

📌 Case Study: Decompression Sickness ("The Bends")

Decompression sickness (DCS), or "the bends," is an effect of the increased pressure of the air inhaled by scuba divers when swimming underwater at considerable depths. In addition to the pressure exerted by the atmosphere, divers are subjected to additional pressure due to the water above them, experiencing an increase of approximately 1 atm for each 10 m of depth. Therefore, the air inhaled by a diver while submerged contains gases at the corresponding higher ambient pressure, and the concentrations of the gases dissolved in the diver's blood are proportionally higher per Henry's law.

As the diver ascends to the surface of the water, the ambient pressure decreases and the dissolved gases becomes less soluble. If the ascent is too rapid, the gases escaping from the diver's blood may form bubbles that can cause a variety of symptoms ranging from rashes and joint pain to paralysis and death. To avoid DCS, divers must ascend from depths at relatively slow

speeds (10 or 20 m/min) or otherwise make several decompression stops, pausing for several minutes at given depths during the ascent. When these preventative measures are unsuccessful, divers with DCS are often provided hyperbaric oxygen therapy in pressurized vessels called decompression (or recompression) chambers (Figure 13.4.4).

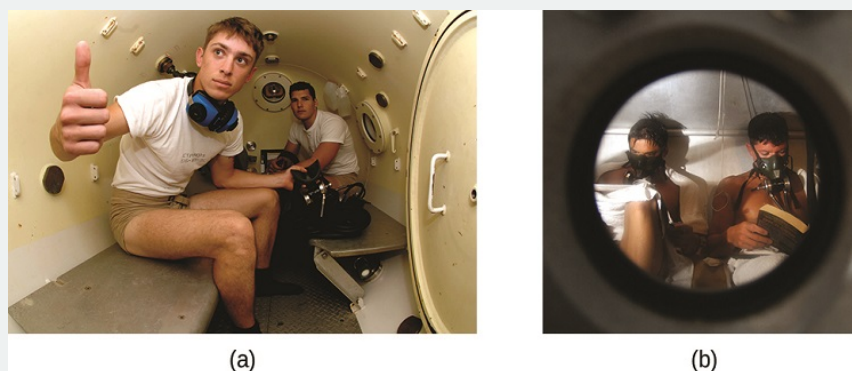
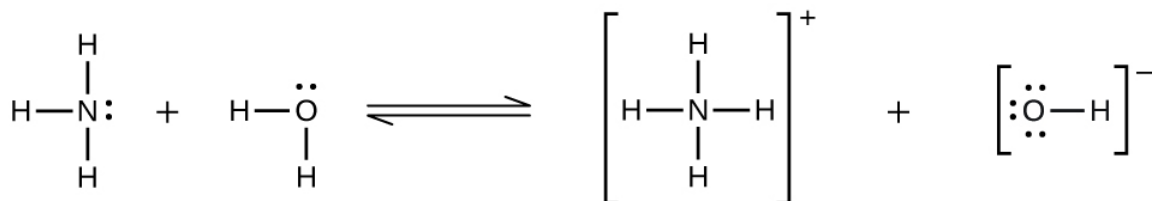


Figure 13.4.4: (a) U.S. Navy divers undergo training in a recompression chamber. (b) Divers receive hyperbaric oxygen therapy. Two photos are shown. The first shows two people seated in a steel chamber on benches that run length of the chamber on each side. The chamber has a couple of small circular windows and an open hatch-type door. One of the two people is giving a thumbs up gesture. The second image provides a view through a small, circular window. Inside the two people can be seen with masks over their mouths and noses. The people appear to be reading.

Deviations from Henry's law are observed when a chemical reaction takes place between the gaseous solute and the solvent. Thus, for example, the solubility of ammonia in water does not increase as rapidly with increasing pressure as predicted by the law because ammonia, being a base, reacts to some extent with water to form ammonium ions and hydroxide ions.



This reaction diagram shows three H atoms bonded to an N atom above, below, and two the left of the N. A single pair of dots is present on the right side of the N. This is followed by a plus, then two H atoms bonded to an O atom to the left and below the O.

Two pairs of dots are present on the O, one above and the other to the right of the O. A double arrow, with a top arrow pointing right and a bottom arrow pointing left follows. To the right of the double arrow, four H atoms are shown bonded to a central N atom. These 5 atoms are enclosed in brackets with a superscript plus outside. A plus follows, then an O atom linked by a bond to an

H atom on its right. The O atom has pairs of dots above, to the left, and below the atom. The linked O and H are enclosed in brackets with superscript minus outside.

Gases can form supersaturated solutions. If a solution of a gas in a liquid is prepared either at low temperature or under pressure (or both), then as the solution warms or as the gas pressure is reduced, the solution may become supersaturated.

Contributions & Attributions

- Wikipedia
- Paul Flowers (University of North Carolina - Pembroke), Klaus Theopold (University of Delaware) and Richard Langley (Stephen F. Austin State University) with contributing authors. Textbook content produced by OpenStax College is licensed under a [Creative Commons Attribution License 4.0](https://creativecommons.org/licenses/by-nc-sa/4.0/) license. Download for free at <http://cnx.org/contents/85abf193-2bd...a7ac8df6@9.110>.

13.4: Solutions of Gases in Water- How Soda Pop Gets Its Fizz is shared under a [CC BY-NC-SA 4.0](https://creativecommons.org/licenses/by-nc-sa/4.0/) license and was authored, remixed, and/or curated by LibreTexts.

- **13.4: Solutions of Gases in Water** by Henry Agnew, Marisa Alviar-Agnew is licensed [CC BY 4.0](https://creativecommons.org/licenses/by/4.0/).

13.5: Solution Concentration- Mass Percent

Template:HideTOC

Learning Objectives

- Express the amount of solute in a solution in various concentration units.

To define a solution precisely, we need to state its concentration: how much solute is dissolved in a certain amount of solvent. Words such as *dilute* or *concentrated* are used to describe solutions that have a little or a lot of dissolved solute, respectively, but these are relative terms with meanings that depend on various factors.

Introduction

Concentration is the measure of how much of a given substance is mixed with another substance. Solutions are said to be either dilute or concentrated. When we say that vinegar is 5% acetic acid in water, we are giving the concentration. If we said the mixture was 10% acetic acid, this would be more concentrated than the vinegar solution.

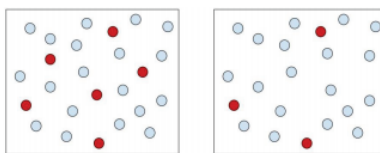


Figure 13.5.1: The solution on the left is more concentrated than the solution on the right because there is a greater ratio of solute (red balls) to solvent (blue balls) particles. The solution particles are closer together. The solution on the right is more dilute (less concentrated). (CC-SA-BY-3.0 Tracy Poulsen).

A **concentrated** solution is one in which there is a large amount of solute in a given amount of solvent. A **dilute** solution is one in which there is a small amount of solute in a given amount of solvent. A dilute solution is a concentrated solution that has been, in essence, watered down. Think of the frozen juice containers you buy in the grocery store. To make juice, you have to mix the frozen juice concentrate from inside these containers with three or four times the container size full of water. Therefore, you are diluting the concentrated juice. In terms of solute and solvent, the concentrated solution has a lot of solute versus the dilute solution that would have a smaller amount of solute.

The terms "concentrated" and "dilute" provide qualitative methods of describing concentration. Although qualitative observations are necessary and have their place in every part of science, including chemistry, we have seen throughout our study of science that there is a definite need for quantitative measurements in science. This is particularly true in solution chemistry. In this section, we will explore some quantitative methods of expressing solution concentration.

Mass Percent

There are several ways of expressing the concentration of a solution by using a percentage. The mass/mass percent (% m/m) is defined as the mass of a solute divided by the mass of a solution times 100:

$$\% \text{ m/m} = \frac{\text{mass of solute}}{\text{mass of solution}} \times 100\%$$

mass of solution = mass of solute + mass solvent

If you can measure the masses of the solute and the solution, determining the mass/mass percent is easy. Each mass must be expressed in the same units to determine the proper concentration.

Suppose that a solution was prepared by dissolving 25.0 g of sugar into 100.0 g of water.

The mass of the solution is

$$\text{mass of solution} = 25.0\text{g sugar} + 100.0\text{g water} = 125.0 \text{ g}$$

The percent by mass would be calculated by:

$$\text{Percent by mass} = \frac{25.0 \text{ g sugar}}{125.0 \text{ g solution}} \times 100\% = 20.0\% \text{ sugar}$$

✓ Example 13.5.1

A saline solution with a mass of 355 g has 36.5 g of NaCl dissolved in it. What is the mass/mass percent concentration of the solution?

Solution

We can substitute the quantities given in the equation for mass/mass percent:

$$\% \text{ m/m} = \frac{36.5 \text{ g}}{355 \text{ g}} \times 100\% = 10.3\%$$

? Exercise 13.5.1

A dextrose (also called D-glucose, $\text{C}_6\text{H}_{12}\text{O}_6$) solution with a mass of $2.00 \times 10^2 \text{ g}$ has 15.8 g of dextrose dissolved in it. What is the mass/mass percent concentration of the solution?

Answer

7.90 %

Using Mass Percent in Calculations

Sometimes you may want to make up a particular mass of solution of a given percent by mass and need to calculate what mass of the solute to use. Using mass percent as a conversion can be useful in this type of problem. The mass percent can be expressed as a conversion factor in the form $\frac{\text{g solute}}{100 \text{ g solution}}$ or $\frac{100 \text{ g solution}}{\text{g solute}}$

For example, if you need to make 3000.0 g of a 5.00% solution of sodium chloride, the mass of solute needs to be determined.

Solution

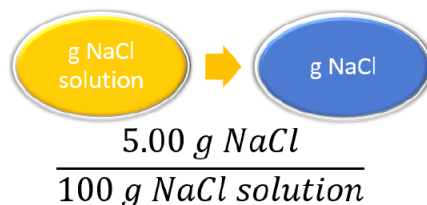
Given: 3000.0 g NaCl solution

5.00% NaCl solution

Find: mass of solute = ? g NaCl

Other known quantities: 5.00 g NaCl is to 100 g solution

The appropriate conversion factor (based on the given mass percent) can be used follows:



$$\frac{5.00 \text{ g NaCl}}{100 \text{ g NaCl solution}}$$

To solve for the mass of NaCl, the given mass of solution is multiplied by the conversion factor.

$$\text{g NaCl} = 3,000.0 \text{ g NaCl solution} \times \frac{5.00 \text{ g NaCl}}{100 \text{ g NaCl solution}} = 150.0 \text{ g NaCl}$$

You would need to weigh out 150 g of NaCl and add it to 2850 g of water. Notice that it was necessary to subtract the mass of the NaCl (150 g) from the mass of solution (3000 g) to calculate the mass of the water that would need to be added.

? Exercise 13.5.1

What is the amount (in g) of hydrogen peroxide (H_2O_2) needed to make a 6.00 kg, 3.00 % (by mass) H_2O_2 solution?

Answer

180 g H₂O₂

Contributors and Attributions

13.5: Solution Concentration- Mass Percent is shared under a [CC BY-NC-SA 4.0](#) license and was authored, remixed, and/or curated by LibreTexts.

- **13.5: Specifying Solution Concentration- Mass Percent** by Henry Agnew, Marisa Alviar-Agnew is licensed [CK-12](#). Original source: <https://www.ck12.org/c/chemistry/>.

13.6: Solution Concentration- Molarity

Template:HideTOC

Learning Objectives

- Use molarity to determine quantities in chemical reactions.
- Use molarity as a conversion factor in calculations.

Another way of expressing concentration is to give the number of moles of solute per unit volume of solution. Of all the quantitative measures of concentration, molarity is the one used most frequently by chemists. **Molarity** is defined as the number of moles of solute per liter of solution.

$$\text{molarity} = \frac{\text{number of moles of solute}}{\text{number of liters of solution}} \quad (13.6.1)$$

The symbol for molarity is M or moles/liter. Chemists also use square brackets to indicate a reference to the molarity of a substance. For example, the expression $[\text{Ag}^+]$ refers to the molarity of the silver ion in solution. Solution concentrations expressed in molarity are the easiest to perform calculations with, but the most difficult to make in the lab. Such concentration units are useful for discussing chemical reactions in which a solute is a product or a reactant. Molar mass can then be used as a conversion factor to convert amounts in moles to amounts in grams.

It is important to remember that "mol" in this expression refers to moles of solute and that "L" refers to liters of solution. For example, if you have 1.5 mol of NaCl dissolved in 0.500 L of solution, its molarity is

$$\frac{1.5 \text{ mol NaCl}}{0.500 \text{ L solution}} = 3.0 \text{ M NaCl}$$

Sometimes (aq) is added when the solvent is water, as in "3.0 M NaCl (aq)." This is read as "a 3.00 **molar** sodium chloride solution," meaning that there are 3.00 moles of NaOH dissolved per one liter of solution.

*Be sure to note that molarity is calculated as the total volume of the **entire** solution, not just volume of solvent! The solute contributes to total volume.*

If the quantity of the solute is given in mass units, you must convert mass units to mole units before using the definition of molarity to calculate concentration. For example, what is the molar concentration of a solution of 22.4 g of HCl dissolved in 1.56 L?

Step 1: First, convert the mass of solute to moles using the molar mass of HCl (36.5 g/mol):

$$22.4 \text{ g HCl} \times \frac{1 \text{ mol HCl}}{36.5 \text{ g HCl}} = 0.614 \text{ mol HCl}$$

Step 2: Now we can use the definition of molarity to determine a concentration:

$$M = \frac{0.614 \text{ mol HCl}}{1.56 \text{ L solution}} = 0.394 \text{ M HCl}$$

Before a molarity concentration can be calculated, the amount of the solute must be expressed in moles, and the volume of the solution must be expressed in liters, as demonstrated in the following example.

✓ Example 13.6.1

A solution is prepared by dissolving 42.23 g of NH_4Cl into enough water to make 500.0 mL of solution. Calculate its molarity.

Solution

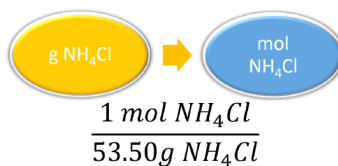
Solutions to Example 13.6.1

Steps for Problem Solving	
Identify the "given" information and what the problem is asking you to "find."	Given: Mass = 42.23 g NH_4Cl Volume solution = 500.0 mL = 0.5000 L Find: Molarity = ? M
List other known quantities.	Molar mass NH_4Cl = 53.50 g/mol

Steps for Problem Solving

Plan the problem.

1. The mass of the ammonium chloride is first converted to moles.



2. Then the molarity is calculated by dividing by liters. Note the given volume has been converted to liters.

$$M = \frac{\text{mol } \text{NH}_4\text{Cl}}{\text{L solution}}$$

Now substitute the known quantities into the equation and solve.

$$42.23 \text{ g } \text{NH}_4\text{Cl} \times \frac{1 \text{ mol } \text{NH}_4\text{Cl}}{53.50 \text{ g } \text{NH}_4\text{Cl}} = 0.7893 \text{ mol } \text{NH}_4\text{Cl}$$

$$\frac{0.7893 \text{ mol } \text{NH}_4\text{Cl}}{0.5000 \text{ L solution}} = 1.579 \text{ M}$$

Think about your result.

The molarity is 1.579 M, meaning that a liter of the solution would contain 1.579 mol NH_4Cl . Four significant figures are appropriate.

? Exercise 13.6.1A

What is the molarity of a solution made when 66.2 g of $\text{C}_6\text{H}_{12}\text{O}_6$ are dissolved to make 235 mL of solution?

Answer

1.57 M $\text{C}_6\text{H}_{12}\text{O}_6$

? Exercise 13.6.1B

What is the concentration, in mol/L, where 137 g of NaCl has been dissolved in enough water to make 500 mL of solution?

Answer

4.69 M NaCl

Using Molarity in Calculations

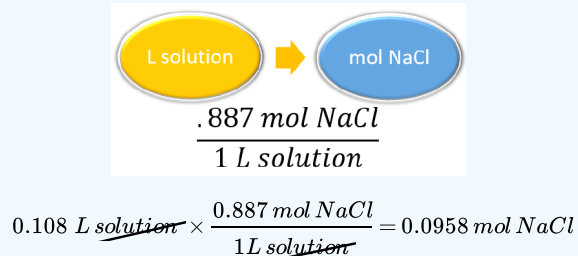
Concentration can be a conversion factor between the amount of solute and the amount of solution or solvent (depending on the definition of the concentration unit). As such, concentrations can be useful in a variety of stoichiometry problems. In many cases, it is best to use the original definition of the concentration unit; it is that definition that provides the conversion factor.

A simple example of using a concentration unit as a conversion factor is one in which we use the definition of the concentration unit and rearrange; we can do the calculation again as a unit conversion, rather than as a definition.

✓ Example 13.6.2: Determining Moles of Solute, Given the Concentration and Volume of a Solution

For example, suppose we ask how many moles of solute are present in 0.108 L of a 0.887 M NaCl solution. Because 0.887 M means 0.887 mol/L, we can use this second expression for the concentration as a conversion factor:

Solution



If we used the definition approach, we get the same answer, but now we are using conversion factor skills.

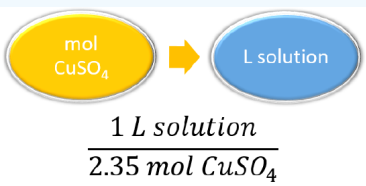
Like any other conversion factor that relates two different types of units, the reciprocal of the concentration can be also used as a conversion factor.

✓ Example 13.6.3: Determining Volume of a Solution, Given the Concentration and Moles of Solute

Using concentration as a conversion factor, how many liters of 2.35 M CuSO_4 are needed to obtain 4.88 mol of CuSO_4 ?

Solution

This is a one-step conversion, but the concentration must be written as the reciprocal for the units to work out:



$$4.88 \text{ mol } \text{CuSO}_4 \times \frac{1 \text{ L solution}}{2.35 \text{ mol } \text{CuSO}_4} = 2.08 \text{ L of solution}$$

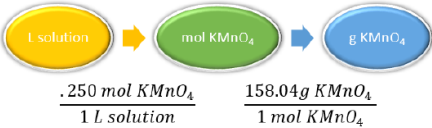
In a laboratory situation, a chemist must frequently prepare a given volume of solutions of a known molarity. The task is to calculate the mass of the solute that is necessary. The molarity equation can be rearranged to solve for moles, which can then be converted to grams. The following example illustrates this.

✓ Example 13.6.4

A chemist needs to prepare 3.00 L of a 0.250 M solution of potassium permanganate (KMnO_4). What mass of KMnO_4 does she need to make the solution?

Solution

Solutions to Example 13.6.4

Steps for Problem Solving	
Identify the "given" information and what the problem is asking you to "find."	<p>Given:</p> <p>Molarity = 0.250 M</p> <p>Volume = 3.00 L</p> <p>Find: Mass KMnO_4 = ? g</p>
List other known quantities.	<p>Molar mass KMnO_4 = 158.04 g/mol</p> <p>0.250 mol KMnO_4 to 1 L of KMnO_4 solution</p>
Plan the problem.	
Cancel units and calculate.	<p>Now substitute the known quantities into the equation and solve.</p> $\text{mol } \text{KMnO}_4 = 0.250 \text{ M } \text{KMnO}_4 \times 3.00 \text{ L} = 0.750 \text{ mol}$ $3.00 \text{ L solution} \times \frac{0.250 \text{ mol } \text{KMnO}_4}{1 \text{ L solution}} \times \frac{158.04 \text{ g } \text{KMnO}_4}{1 \text{ mol } \text{KMnO}_4} = 119 \text{ g KMnO}_4$
Think about your result.	<p>When 119 g of potassium permanganate is dissolved into water to make 3.00 L of solution, the molarity is 0.250 M.</p>

? Exercise 13.6.4A

Using concentration as a conversion factor, how many liters of 0.0444 M CH_2O are needed to obtain 0.0773 mol of CH_2O ?

Answer

1.74 L

? Exercise 13.6.4B

Answer the problems below using concentration as a conversion factor.

- What mass of solute is present in 1.08 L of 0.0578 M H_2SO_4 ?
- What volume of 1.50 M HCl solution contains 10.0 g of hydrogen chloride?

Answer a

6.12 g

Answer b

183 mL or 0.183L

📌 How to Indicate Concentration

- Square brackets are often used to represent concentration, e.g., $[\text{NaOH}] = 0.50 \text{ M}$.
- Use the capital letter M for molarity, not a lower case m (this is a different concentration unit called *molality*).



Watch as the Flinn Scientific Tech Staff demonstrates "How To Prepare Solutions."

It is important to note that there are many different ways you can set up and solve your chemistry equations. Some students prefer to answer multi-step calculations in one long step, while others prefer to work out each step individually. Neither method is necessarily better or worse than the other method—whichever makes the most sense to **you** is the one that you should use. In this text, we will typically use unit analysis (also called dimension analysis or factor analysis).

Contributors and Attributions

- Peggy Lawson (Oxbow Prairie Heights School). Funded by Saskatchewan Educational Technology Consortium.

13.6: Solution Concentration- Molarity is shared under a [CC BY-NC-SA 4.0](#) license and was authored, remixed, and/or curated by LibreTexts.

- 13.6: Specifying Solution Concentration- Molarity by Henry Agnew, Marisa Alviar-Agnew is licensed [CK-12](#). Original source: <https://www.ck12.org/c/chemistry/>.

13.7: Solution Dilution

Template:HideTOC

Learning Objectives

- Explain how concentrations can be changed in the lab.
- Understand how stock solutions are used in the laboratory.

We are often concerned with how much solute is dissolved in a given amount of solution. We will begin our discussion of solution concentration with two related and relative terms: **dilute** and **concentrated**.

- A **dilute** solution is one in which there is a relatively small amount of solute dissolved in the solution.
- A **concentrated** solution contains a relatively large amount of solute.

These two terms do not provide any quantitative information (actual numbers), but they are often useful in comparing solutions in a more general sense. These terms also do not tell us whether or not the solution is saturated or unsaturated, or whether the solution is "strong" or "weak". These last two terms will have special meanings when we discuss acids and bases, so be careful not to confuse them.

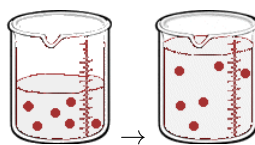
Stock Solutions

It is often necessary to have a solution with a concentration that is very precisely known. Solutions containing a precise mass of solute in a precise volume of solution are called **stock (or standard) solutions**. To prepare a standard solution, a piece of lab equipment called a volumetric flask should be used. These flasks range in size from 10 mL to 2000 mL and are carefully calibrated to a single volume. On the narrow stem is a **calibration mark**. The precise mass of solute is dissolved in a bit of the solvent, and this is added to the flask. Then, enough solvent is added to the flask until the level reaches the calibration mark.

Often, it is convenient to prepare a series of solutions of known **concentrations** by first preparing a single **stock solution**, as described in the previous section. **Aliquots** (carefully measured volumes) of the stock solution can then be diluted to any desired volume. In other cases, it may be inconvenient to weigh a small mass of sample accurately enough to prepare a small volume of a dilute solution. Each of these situations requires that a solution be diluted to obtain the desired concentration.

Dilutions of Stock (or Standard) Solutions

Imagine we have a salt water solution with a certain concentration. That means we have a certain amount of salt (a certain mass or a certain number of moles) dissolved in a certain volume of solution. Next, we will dilute this solution. This is done by adding more water, not more salt:



Before Dilution and After Dilution

The molarity of solution 1 is

$$M_1 = \frac{\text{moles}_1}{\text{liter}_1}$$

and the molarity of solution 2 is

$$M_2 = \frac{\text{moles}_2}{\text{liter}_2}$$

rearrange the equations to find moles:

$$\text{moles}_1 = M_1 \text{liter}_1$$

and

$$\text{moles}_2 = M_2 \text{liter}_2$$

What stayed the same and what changed between the two solutions? By adding more water, we changed the volume of the solution. Doing so also changed its concentration. **However, the number of moles of solute did not change.** So,

$$\text{moles}_1 = \text{moles}_2$$

Therefore

$$\boxed{M_1 V_1 = M_2 V_2} \quad (13.7.1)$$

where

- M_1 and M_2 are the concentrations of the original and diluted solutions
- V_1 and V_2 are the volumes of the two solutions

Preparing dilutions is a common activity in the chemistry lab and elsewhere. Once you understand the above relationship, the calculations are simple.

Suppose that you have 100. mL of a 2.0 M solution of HCl. You dilute the solution by adding enough water to make the solution volume 500. mL. The new molarity can easily be calculated by using the above equation and solving for M_2 .

$$M_2 = \frac{M_1 \times V_1}{V_2} = \frac{2.0 \text{ M} \times 100. \text{ mL}}{500. \text{ mL}} = 0.40 \text{ M HCl}$$

The solution has been diluted by one-fifth since the new volume is five times as great as the original volume. Consequently, the molarity is one-fifth of its original value.

Another common dilution problem involves calculating what amount of a highly concentrated solution is required to make a desired quantity of solution of lesser concentration. The highly concentrated solution is typically referred to as the stock solution.

✓ Example 13.7.1: Diluting Nitric Acid

Nitric acid (HNO_3) is a powerful and corrosive acid. When ordered from a chemical supply company, its molarity is 16 M. How much of the stock solution of nitric acid needs to be used to make 8.00 L of a 0.50 M solution?

Solution

Solutions to Example 13.7.1

Steps for Problem Solving	
Identify the "given" information and what the problem is asking you to "find."	<p>Given:</p> <p>M_1, Stock $\text{HNO}_3 = 16 \text{ M}$</p> <p>$V_2 = 8.00 \text{ L}$</p> <p>$M_2 = 0.50 \text{ M}$</p> <p>Find: Volume stock HNO_3 (V_1) = ? L</p>
List other known quantities.	none
Plan the problem.	<p>First, rearrange the equation algebraically to solve for V_1.</p> $V_1 = \frac{M_2 \times V_2}{M_1}$
Calculate and cancel units.	<p>Now substitute the known quantities into the equation and solve.</p> $V_1 = \frac{0.50 \text{ M} \times 8.00 \text{ L}}{16 \text{ M}} = 0.25 \text{ L} \quad (13.7.2)$
Think about your result.	<p>0.25 L (250 mL) of the stock HNO_3 needs to be diluted with water to a final volume of 8.00 L. The dilution is by a factor of 32 to go from 16 M to 0.5 M.</p>

? Exercise 13.7.1

A 0.885 M solution of KBr with an initial volume of 76.5 mL has more water added until its concentration is 0.500 M. What is the new volume of the solution?

Answer

135.4 mL

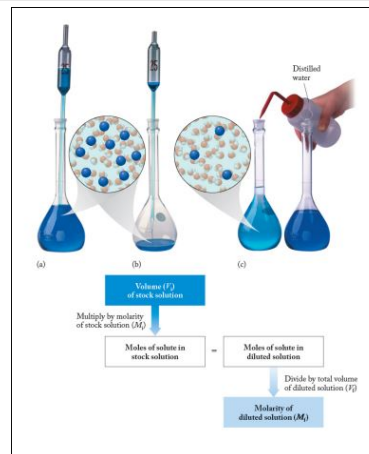
Note that the calculated volume will have the same dimensions as the input volume, and dimensional analysis tells us that in this case we don't need to convert to liters, since L cancels when we divide M (mol/L) by M (mol/L).

Diluting and Mixing Solutions

Diluting and Mixing Solutions



How to Dilute a Solution by CarolinaBiological



13.7: Solution Dilution is shared under a [CC BY-NC-SA 4.0](#) license and was authored, remixed, and/or curated by LibreTexts.

- 13.7: Solution Dilution by Ed Vitz, John W. Moore, Justin Shorb, Xavier Prat-Resina, Tim Wendorff, & Adam Hahn is licensed CC BY-SA 4.0.

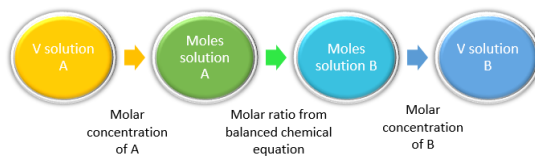
13.8: Solution Stoichiometry

Template:HideTOC

Learning Objectives

- Determine amounts of reactants or products in aqueous solutions.

As we learned previously, double replacement reactions involve the reaction between ionic compounds in solution and, in the course of the reaction, the ions in the two reacting compounds are “switched” (they *replace* each other). Because these reactions occur in aqueous solution, we can use the concept of molarity to directly calculate the number of moles of reactants or products that will be formed, and therefore their amounts (i.e. volume of solutions or mass of precipitates).



As an example, lead (II) nitrate and sodium chloride react to form sodium nitrate and the *insoluble* compound, lead (II) chloride.



In the reaction shown above, if we mixed 0.123 L of a 1.00 M solution of NaCl with 1.50 M solution of $\text{Pb}(\text{NO}_3)_2$, we could calculate the volume of $\text{Pb}(\text{NO}_3)_2$ solution needed to completely precipitate the Pb^{2+} ions.

The molar concentration can also be expressed as the following:

$$1.00 \text{ M NaCl} = \frac{1.00 \text{ mol NaCl}}{1 \text{ L NaCl solution}}$$

and

$$1.50 \text{ M Pb}(\text{NO}_3)_2 = \frac{1.50 \text{ mol Pb}(\text{NO}_3)_2}{1 \text{ L Pb}(\text{NO}_3)_2 \text{ solution}}$$

First, we must examine the reaction stoichiometry in the balanced reaction (Equation 13.8.1). In this reaction, one mole of $\text{Pb}(\text{NO}_3)_2$ reacts with two moles of NaCl to give one mole of PbCl_2 precipitate. Thus, the concept map utilizing the stoichiometric ratios is:



so the volume of lead (II) nitrate that reacted is calculated as:

$$0.123 \text{ L NaCl solution} \times \frac{1.00 \text{ mol NaCl}}{1 \text{ L NaCl solution}} \times \frac{1 \text{ mol Pb}(\text{NO}_3)_2}{2 \text{ mol NaCl}} \times \frac{1 \text{ L Pb}(\text{NO}_3)_2 \text{ solution}}{1.5 \text{ mol Pb}(\text{NO}_3)_2} = 0.041 \text{ L Pb}(\text{NO}_3)_2$$

This volume makes intuitive sense for two reasons: (1) the number of moles of $\text{Pb}(\text{NO}_3)_2$ required is half of the number of moles of NaCl, based off of the stoichiometry in the balanced reaction (Equation 13.8.1); (2) the concentration of $\text{Pb}(\text{NO}_3)_2$ solution is 50% greater than the NaCl solution, so less volume is needed.

✓ Example 13.8.1

What volume (in L) of 0.500 M sodium sulfate will react with 275 mL of 0.250 M barium chloride to completely precipitate all Ba^{2+} in the solution?

Solution

Solutions to Example 13.8.1

Steps for Problem Solving	Example 13.8.1
Identify the "given" information and what the problem is asking you to "find."	Given: 275 mL BaCl_2 0.250 M BaCl_2 or $\frac{0.250 \text{ mol BaCl}_2}{1 \text{ L BaCl}_2 \text{ solution}}$ 0.500 M Na_2SO_4 or $\frac{0.500 \text{ mol Na}_2\text{SO}_4}{1 \text{ L Na}_2\text{SO}_4 \text{ solution}}$ Find: Volume Na_2SO_4 solution.
Set up and balance the chemical equation.	$\text{Na}_2\text{SO}_4(\text{aq}) + \text{BaCl}_2(\text{aq}) \rightarrow \text{BaSO}_4(\text{s}) + 2\text{NaCl}(\text{aq})$ An insoluble product is formed after the reaction.
List other known quantities.	1 mol of Na_2SO_4 to 1 mol BaCl_2 1000 mL = 1 L
Prepare a concept map and use the proper conversion factor.	<pre> graph LR A((mL BaCl2 solution)) -- "1 L / 1000 mL" --> B((L BaCl2 solution)) B -- "0.250 mol BaCl2 / 1 L BaCl2 solution" --> C((mol BaCl2 solution)) C -- "1 mol Na2SO4 / 1 mol BaCl2" --> D((mol Na2SO4 solution)) D -- "1 L Na2SO4 solution / 0.500 mol" --> E((L Na2SO4 solution)) </pre>
Cancel units and calculate.	$275 \text{ mL BaCl}_2 \text{ solution} \times \frac{1 \cancel{\text{L}}}{1000 \text{ mL}} \times \frac{0.250 \text{ mol BaCl}_2}{1 \text{ L BaCl}_2 \text{ solution}} \times \frac{1 \text{ mol Na}_2\text{SO}_4}{1 \text{ mol BaCl}_2} \times \frac{1 \text{ L Na}_2\text{SO}_4 \text{ solution}}{0.500 \text{ mol}} = 0.1375 \text{ L sodium sulfate}$

Steps for Problem Solving

Think about your result.

Example 13.8.1

The lesser amount (almost half) of sodium sulfate is to be expected as it is more concentrated than barium chloride. Also, the units are correct.

? Exercise 13.8.1

What volume of 0.250 M lithium hydroxide will completely react with 0.500 L of 0.250 M of sulfuric acid solution?

Answer

0.250 L LiOH solution

13.8: Solution Stoichiometry is shared under a [CC BY-NC-SA 4.0](#) license and was authored, remixed, and/or curated by LibreTexts.

- 13.8: Solution Stoichiometry by Henry Agnew, Marisa Alviar-Agnew, Paul Young is licensed [CC BY-SA 4.0](#).

13.9: Freezing Point Depression and Boiling Point Elevation- Making Water Freeze Colder and Boil Hotter

Template:HideTOC

Learning Objectives

- Explain what the term "colligative" means, and list the colligative properties.
- Indicate what happens to the boiling point and the freezing point of a solvent when a solute is added to it.
- Calculate boiling point elevations and freezing point depressions for a solution.

People who live in colder climates have seen trucks put salt on the roads when snow or ice is forecast. Why is this done? As a result of the information you explore in this section, you will understand why these events occur. You will also learn to calculate exactly how much of an effect a specific solute can have on the boiling point or freezing point of a solution.

The example given in the introduction is an example of a colligative property. **Colligative properties** are properties that differ based on the concentration of solute in a solvent, but not on the type of solute. What this means for the example above is that people in colder climates do not necessarily need salt to get the same effect on the roads—any solute will work. However, the higher the concentration of solute, the more these properties will change.

Boiling Point Elevation

Water boils at 100°C at 1 atm of pressure, but a solution of saltwater does not. When table salt is added to water, the resulting solution has a higher boiling point than the water did by itself. The ions form an attraction with the solvent particles that prevents the water molecules from going into the gas phase. Therefore, the saltwater solution will not boil at 100°C . In order for the saltwater solution to boil, the temperature must be raised about 100°C . This is true for any solute added to a solvent; the boiling point will be higher than the boiling point of the pure solvent (without the solute). In other words, when anything is dissolved in water, the solution will boil at a higher temperature than pure water would.

The boiling point elevation due to the presence of a solute is also a colligative property. That is, the amount of change in the boiling point is related to the number of particles of solute in a solution and is not related to the chemical composition of the solute. A 0.20 m solution of table salt and a 0.20 m solution of hydrochloric acid would have the same effect on the boiling point.

Freezing Point Depression

The effect of adding a solute to a solvent has the opposite effect on the freezing point of a solution as it does on the boiling point. A solution will have a lower freezing point than a pure solvent. The **freezing point** is the temperature at which the liquid changes to a solid. At a given temperature, if a substance is added to a solvent (such as water), the solute-solvent interactions prevent the solvent from going into the solid phase. The solute-solvent interactions require the temperature to decrease further in order to solidify the solution. A common example is found when salt is used on icy roadways. Salt is put on roads so that the water on the roads will not freeze at the normal 0°C but at a lower temperature, as low as -9°C . The de-icing of planes is another common example of freezing point depression in action. A number of solutions are used, but commonly a solution such as ethylene glycol, or a less toxic monopropylene glycol, is used to de-ice an aircraft. The aircrafts are sprayed with the solution when the temperature is predicted to drop below the freezing point. The **freezing point depression** is the difference in the freezing points of the solution from the pure solvent. This is true for any solute added to a solvent; the freezing point of the solution will be lower than the freezing point of the pure solvent (without the solute). Thus, when anything is dissolved in water, the solution will freeze at a lower temperature than pure water would.

The freezing point depression due to the presence of a solute is also a colligative property. That is, the amount of change in the freezing point is related to the number of particles of solute in a solution and is not related to the chemical composition of the solute. A 0.20 m solution of table salt and a 0.20 m solution of hydrochloric acid would have the same effect on the freezing point.

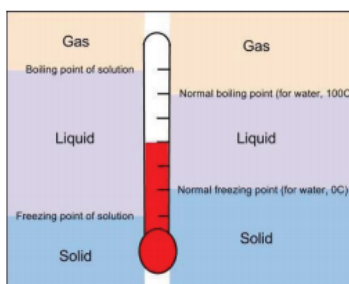


Figure 13.9.1: Comparison of boiling and freezing points of a pure liquid (right side) with a solution (left side).

Comparing the Freezing and Boiling Point of Solutions

Recall that covalent and ionic compounds do not dissolve in the same way. Ionic compounds break up into cations and anions when they dissolve. Covalent compounds typically do not break up. For example a sugar/water solution stays as sugar and water, with the sugar molecules staying as molecules. Remember that colligative properties are due to the number of solute particles in the solution. Adding 10 molecules of sugar to a solvent will produce 10 solute particles in the solution. When the solute is ionic, such as NaCl however, adding 10 formulas of solute to the solution will produce 20 ions (solute particles) in the solution. Therefore, adding enough NaCl solute to a solvent to produce a 0.20 m solution will have twice the effect of adding enough sugar to a solvent to produce a 0.20 m solution. Colligative properties depend on the number of solute particles in the solution.

" i " is the number of particles that the solute will dissociate into upon mixing with the solvent. For example, sodium chloride, NaCl, will dissociate into two ions so for NaCl, $i = 2$; for lithium nitrate, LiNO_3 , $i = 2$; and for calcium chloride, CaCl_2 , $i = 3$. For covalent compounds, i is always equal to 1.

By knowing the *molality* of a solution and the number of particles a compound will dissolve to form, it is possible to predict which solution in a group will have the lowest freezing point. To compare the boiling or freezing points of solutions, follow these general steps:

1. Label each solute as ionic or covalent.
2. If the solute is ionic, determine the number of *ions* in the formula. Be careful to look for polyatomic ions.
3. Multiply the original molality (m) of the solution by the number of particles formed when the solution dissolves. This will give you the total concentration of particles dissolved.
4. Compare these values. The higher total concentration will result in a higher boiling point and a lower freezing point.

✓ Example 13.9.1

Rank the following solutions in water in order of *increasing* (lowest to highest) freezing point:

- 0.1 m NaCl
- 0.1 m $\text{C}_6\text{H}_{12}\text{O}_6$
- 0.1 m CaI_2

Solution

To compare freezing points, we need to know the total concentration of all particles when the solute has been dissolved.

- 0.1 m NaCl: This compound is ionic (metal with nonmetal), and will dissolve into 2 parts. The total final concentration is: $(0.1\text{ m})(2) = 0.2\text{ m}$
- 0.1 m $\text{C}_6\text{H}_{12}\text{O}_6$: This compound is covalent (nonmetal with nonmetal), and will stay as 1 part. The total final concentration is: $(0.1\text{ m})(1) = 0.1\text{ m}$
- 0.1 m CaI_2 : This compound is ionic (metal with nonmetal), and will dissolve into 3 parts. The total final concentration is: $(0.1\text{ m})(3) = 0.3\text{ m}$

Remember, the greater the concentration of particles, the lower the freezing point will be. 0.1 m CaI_2 will have the lowest freezing point, followed by 0.1 m NaCl, and the highest of the three solutions will be 0.1 m $\text{C}_6\text{H}_{12}\text{O}_6$, but all three of them will have a lower freezing point than pure water.

The boiling point of a solution is higher than the boiling point of a pure solvent, and the freezing point of a solution is lower than the freezing point of a pure solvent. However, the amount to which the boiling point increases or the freezing point decreases depends on the amount of solute that is added to the solvent. A mathematical equation is used to calculate the boiling point elevation or the freezing point depression.

The boiling point elevation is the amount that the boiling point temperature *increases* compared to the original solvent. For example, the boiling point of pure water at 1.0 atm is 100°C while the boiling point of a 2% saltwater solution is about 102°C. Therefore, the boiling point elevation would be 2°C. The freezing point depression is the amount that the freezing temperature *decreases*.

Both the boiling point elevation and the freezing point depression are related to the molality of the solution. Looking at the formula for the boiling point elevation and freezing point depression, we see similarities between the two. The equation used to calculate the increase in the boiling point is:

$$\Delta T_b = k_b \cdot m \cdot i \quad (13.9.1)$$

Where:

- ΔT_b = the amount the boiling point increases.
- k_b = the boiling point elevation constant which depends on the solvent (for water, this number is 0.515°C/m).
- m = the molality of the solution.
- i = the number of particles formed when that compound dissolves (for covalent compounds, this number is always 1).

The following equation is used to calculate the decrease in the freezing point:

$$\Delta T_f = k_f \cdot m \cdot i \quad (13.9.2)$$

Where:

- ΔT_f = the amount the freezing temperature decreases.
- k_f = the freezing point depression constant which depends on the solvent (for water, this number is 1.86°C/m).
- m = the molality of the solution.
- i = the number of particles formed when that compound dissolves (for covalent compounds, this number is always 1).

✓ Example 13.9.2: Adding Antifreeze to Protein Engines

Antifreeze is used in automobile radiators to keep the coolant from freezing. In geographical areas where winter temperatures go below the freezing point of water, using pure water as the coolant could allow the water to freeze. Since water expands when it freezes, freezing coolant could crack engine blocks, radiators, and coolant lines. The main component in antifreeze is ethylene glycol, $C_2H_4(OH)_2$. What is the concentration of ethylene glycol in a solution of water, in molality, if the freezing point dropped by 2.64°C? The freezing point constant, k_f , for water is 1.86°C/m.

Solution

Use the equation for freezing point depression of solution (Equation 13.9.2):

$$\Delta T_f = k_f \cdot m \cdot i$$

Substituting in the appropriate values we get:

$$2.64^\circ\text{C} = (1.86^\circ\text{C}/\text{m}) (m) (1)$$

Solve for m by dividing both sides by 1.86°C/m.

$$m = 1.42$$

✓ Example 13.9.3: Adding Salt to Elevate Boiling Temperature

A solution of 10.0 g of sodium chloride is added to 100.0 g of water in an attempt to elevate the boiling point. What is the boiling point of the solution? k_b for water is 0.52°C/m.

Solution

Use the equation for boiling point elevation of solution (Equation 13.9.1):

$$\Delta T_b = k_b \cdot m \cdot i$$

We need to be able to substitute each variable into this equation.

- $k_b = 0.52^\circ\text{C}/m$
- m : We must solve for this using stoichiometry. Given: 10.0 g NaCl and 100.0 g H_2O Find: mol NaCl/kg H_2O Ratios: molar mass of NaCl, 1000 g = 1 kg

$$\frac{10.0 \text{ g NaCl}}{100.0 \text{ g H}_2\text{O}} \cdot \frac{1 \text{ mol NaCl}}{58.45 \text{ g NaCl}} \cdot \frac{1000 \text{ g H}_2\text{O}}{1 \text{ kg H}_2\text{O}} = 1.71 m$$

- For NaCl, $i = 2$

Substitute these values into the equation $\Delta T_b = k_b \cdot m \cdot i$. We get:

$$\Delta T_b = \left(0.52 \frac{^\circ\text{C}}{m} \right) (1.71 m) (2) = 1.78^\circ\text{C}$$

Water normally boils at 100°C , but our calculation shows that the boiling point increased by 1.78°C . Our new boiling point is 101.78°C .

Note: Since sea water contains roughly 28.0 g of NaCl per liter, this saltwater solution is approximately **four times** more concentrated than sea water (all for a 2°C rise of boiling temperature).

Summary

- Colligative properties are properties that are due only to the number of particles in solution, and are not related to the chemical properties of the solute.
- Boiling points of solutions are higher than the boiling points of the pure solvents.
- Freezing points of solutions are lower than the freezing points of the pure solvents.
- Ionic compounds split into ions when they dissolve, forming more particles. Covalent compounds stay as complete molecules when they dissolve.

Vocabulary

- **Colligative property** - A property that is due only to the number of particles in solution, and not the type of the solute.
- **Boiling point elevation** - The amount that the boiling point of a solution increases from the boiling point of the pure solvent.
- **Freezing point depression** - The amount that the freezing point of a solution decreases from the freezing point of the pure solvent.

13.9: Freezing Point Depression and Boiling Point Elevation- Making Water Freeze Colder and Boil Hotter is shared under a CC BY-NC-SA 4.0 license and was authored, remixed, and/or curated by LibreTexts.

- **13.9: Freezing Point Depression and Boiling Point Elevation** by Henry Agnew, Marisa Alviar-Agnew is licensed CC-12. Original source: <https://www.ck12.org/c/chemistry/>.

13.10: Osmosis- Why Drinking Salt Water Causes Dehydration

Template:HideTOC

Learning Objectives

- Explain the following laws within the Ideal Gas Law

Before we introduce the final colligative property, we need to present a new concept. A **semipermeable membrane** is a thin membrane that will pass certain small molecules, but not others. A thin sheet of cellophane, for example, acts as a semipermeable membrane. Consider the system in Figure 13.10.1

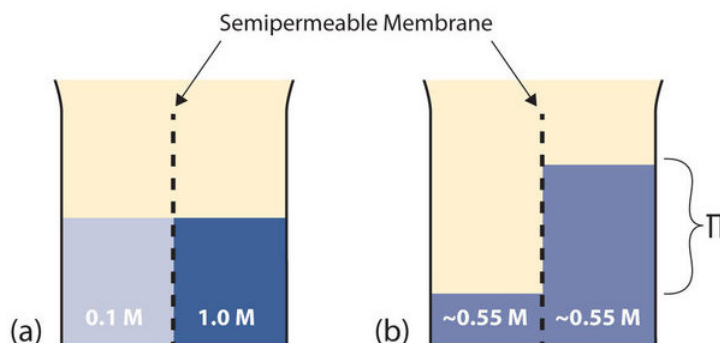


Figure 13.10.1: Osmosis. (a) Two solutions of differing concentrations are placed on either side of a semipermeable membrane. (b) When osmosis occurs, solvent molecules selectively pass through the membrane from the dilute solution to the concentrated solution, diluting it until the two concentrations are the same. The pressure exerted by the different height of the solution on the right is called the osmotic pressure. (CC BY-SA-NC 3.0; anonymous)

- A semipermeable membrane separates two solutions having the different concentrations marked. Curiously, this situation is not stable; there is a tendency for water molecules to move from the dilute side (on the left) to the concentrated side (on the right) until the concentrations are equalized, as in Figure 13.10.1b
- This tendency is called **osmosis**. In osmosis, the solute remains in its original side of the system; only solvent molecules move through the semipermeable membrane. In the end, the two sides of the system will have different volumes. Because a column of liquid exerts a pressure, there is a pressure difference (Π) on the two sides of the system that is proportional to the height of the taller column. This pressure difference is called the **osmotic pressure**, which is a colligative property.

The osmotic pressure of a solution is easy to calculate:

$$\Pi = MRT$$

where Π is the osmotic pressure of a solution, M is the molarity of the solution, R is the ideal gas law constant, and T is the absolute temperature. This equation is reminiscent of the ideal gas law we considered in Chapter 6.

✓ Example 13.10.5: Osmotic Pressure

What is the osmotic pressure of a 0.333 M solution of $C_6H_{12}O_6$ at 25°C?

Solution

First we need to convert our temperature to kelvins:

$$T = 25 + 273 = 298 \text{ K}$$

Now we can substitute into the equation for osmotic pressure, recalling the value for R :

$$\Pi = (0.333 M) \left(0.08205 \frac{L \cdot atm}{mol \cdot K} \right) (298 K)$$

The units may not make sense until we realize that molarity is defined as moles per liter:

$$\Pi = \left(0.333 \frac{mol}{L} \right) \left(0.08205 \frac{L \cdot atm}{mol \cdot K} \right) (298 K)$$

Now we see that the moles, liters, and kelvins cancel, leaving atmospheres, which is a unit of pressure. Solving,

$$\Pi = 8.14 \text{ atm}$$

This is a substantial pressure! It is the equivalent of a column of water 84 m tall.

? Exercise 13.10.5

What is the osmotic pressure of a 0.0522 M solution of $\text{C}_{12}\text{H}_{22}\text{O}_{11}$ at 55°C ?

Answer

1.40 atm

Osmotic pressure is important in biological systems because cell walls are semipermeable membranes. In particular, when a person is receiving intravenous (IV) fluids, the osmotic pressure of the fluid needs to be approximately the same as blood serum to avoid any negative consequences. Figure 13.10.3 shows three red blood cells:

- A healthy red blood cell.
- A red blood cell that has been exposed to a lower concentration than normal blood serum (a *hypotonic* solution); the cell has plumped up as solvent moves into the cell to dilute the solutes inside.
- A red blood cell exposed to a higher concentration than normal blood serum (*hypertonic*); water leaves the red blood cell, so it collapses onto itself. Only when the solutions inside and outside the cell are the same (*isotonic*) will the red blood cell be able to do its job.

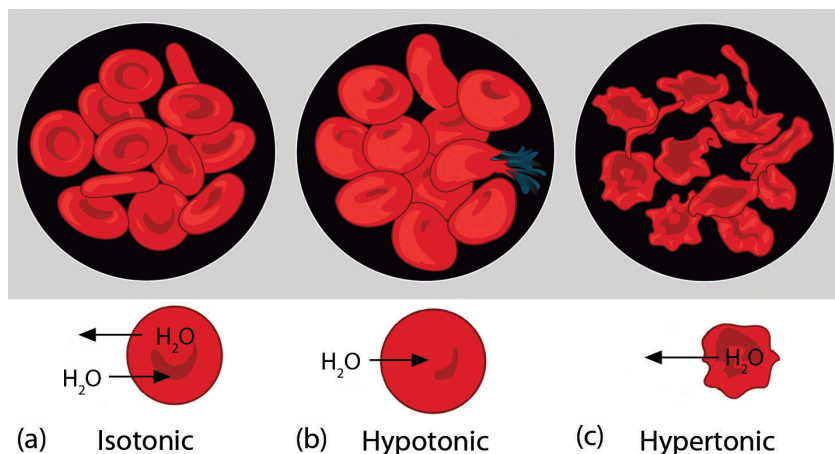


Figure 13.10.3: Osmotic Pressure and Red Blood Cells. (a) This is what a normal red blood cell looks like. (b) When a red blood cell is exposed to a hypotonic solution, solvent goes through the cell membrane and dilutes the inside of the cell. (c) When a red blood cell is exposed to a hypertonic solution, solvent goes from the cell to the surrounding solution, diluting the hypertonic solution and collapsing the cell. Neither of these last two cases is desirable, so IV solutions must be isotonic with blood serum to not cause deleterious effects. (Public Domain; Mariana Ruiz Villareal)

Osmotic pressure is also the reason you should not drink seawater if you're stranded on a lifeboat in the ocean; seawater has a higher osmotic pressure than most of the fluids in your body. You *can* drink the water, but ingesting it will pull water out of your cells as osmosis works to dilute the seawater. Ironically, your cells will die of thirst, and you will also die. (It is okay to drink the water if you are stranded on a body of freshwater, at least from an osmotic pressure perspective.) Osmotic pressure is also thought to be important—in addition to capillary action—in getting water to the tops of tall trees.

Summary

- Osmotic pressure is caused by concentration differences between solutions separated by a semipermeable membrane, and is an important biological consideration.

13.10: Osmosis- Why Drinking Salt Water Causes Dehydration is shared under a [CC BY-NC-SA 4.0](#) license and was authored, remixed, and/or curated by LibreTexts.

- [13.10: Osmosis](#) by Henry Agnew, Marisa Alviar-Agnew is licensed [CC BY-NC-SA 3.0](#).

CHAPTER OVERVIEW

14: Acids and Bases

Acids and bases are common substances found in many every day items, from fruit juices and soft drinks to soap. In this unit we'll exam what the properties are of acids and bases, and learn about the chemical nature of these important compounds. You'll learn what pH is and how to calculate the pH of a solution.

- [14.1: Sour Patch Kids and International Spy Movies](#)
- [14.2: Acids- Properties and Examples](#)
- [14.3: Bases- Properties and Examples](#)
- [14.4: Molecular Definitions of Acids and Bases](#)
- [14.5: Reactions of Acids and Bases](#)
- [14.6: Acid–Base Titration- A Way to Quantify the Amount of Acid or Base in a Solution](#)
- [14.7: Strong and Weak Acids and Bases](#)
- [14.8: Water- Acid and Base in One](#)
- [14.9: The pH and pOH Scales- Ways to Express Acidity and Basicity](#)
- [14.10: Buffers- Solutions That Resist pH Change](#)

14: Acids and Bases is shared under a [CC BY-NC-SA 4.0](#) license and was authored, remixed, and/or curated by LibreTexts.

14.1: Sour Patch Kids and International Spy Movies

[Template:HideTOC](#)

Sour Patch Kids are a soft candy with a coating of invert sugar and sour sugar. The candy's slogan, "Sour. Sweet. Gone.", refers to its sour-to-sweet taste.



Figure 14.1.1: Sour Patch Kids candies. Image courtesy of [Evan-Amos \(public domain\)](#).

Sour sugar is a food ingredient that is used to impart a sour flavor, made from citric or tartaric acid and sugar. It is used to coat sour candies like Sour Patch Kids. Eating large amounts of sour sugar can cause irritation of the tongue because of the acid. It can also cause irreversible dental erosion.

14.1: Sour Patch Kids and International Spy Movies is shared under a [CC BY-NC-SA 4.0](#) license and was authored, remixed, and/or curated by LibreTexts.

- [14.1: Sour Patch Kids and International Spy Movies](#) by Henry Agnew, Marisa Alviar-Agnew is licensed [CC BY-SA 4.0](#). Original source: <https://www.ck12.org/c/chemistry/>.

14.2: Acids- Properties and Examples

Template:HideTOC

Learning Objectives

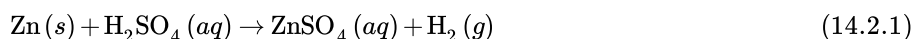
- Examine properties of acids.

Many people enjoy drinking coffee. A cup first thing in the morning helps start the day. But keeping the coffee maker clean can be a problem. Lime deposits build up after a while and slow down the brewing process. The best cure for this is to put vinegar (dilute acetic acid) in the pot and run it through the brewing cycle. The vinegar dissolves the deposits and cleans the maker, which will speed up the brewing process back to its original rate. Just be sure to run water through the brewing process after the vinegar, or you will get some really horrible coffee.

Acids

Acids are very common in some of the foods that we eat. Citrus fruits such as oranges and lemons contain citric acid and ascorbic acid, which is better known as vitamin C. Carbonated sodas contain phosphoric acid. Vinegar contains acetic acid. Your own stomach utilizes hydrochloric acid to digest food. Acids are a distinct class of compounds because of the properties of their aqueous solutions as outlined below:

- Aqueous solutions of acids are electrolytes, meaning that they conduct electrical current. Some acids are strong electrolytes because they ionize completely in water, yielding a great many ions. Other acids are weak electrolytes that exist primarily in a non-ionized form when dissolved in water.
- Acids have a sour taste. Lemons, vinegar, and sour candies all contain acids.
- Acids change the color of certain acid-base indicators. Two common indicators are litmus and phenolphthalein. Blue litmus turns red in the presence of an acid, while phenolphthalein turns colorless.
- Acids react with active metals to yield hydrogen gas. Recall that an activity series is a list of metals in descending order of reactivity. Metals that are above hydrogen in the [activity series](#) will replace the hydrogen from an acid in a single-replacement reaction, as shown below:



- Acids react with bases to produce a salt compound and water. When equal moles of an acid and a base are combined, the acid is neutralized by the base. The products of this reaction are an ionic compound, which is labeled as a salt, and water.

It should not be hard for you to name several common acids (but you might find that listing bases is a little more difficult). Below is a partial list of some common acids, along with some chemical formulas:

Table 14.2.1: Common Acids and Their Uses

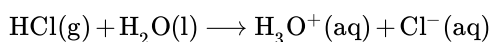
Chemist Name	Common Name	Uses
hydrochloric acid, HCl	muratic acid (used in pools) and stomach acid is HCl	Used in cleaning (refining) metals, in maintenance of swimming pools, and for household cleaning.
sulfuric acid, H ₂ SO ₄		Used in car batteries, and in the manufacture of fertilizers.
nitric acid, HNO ₃		Used in the manufacture of fertilizers, explosives and in extraction of gold.
acetic acid, HC ₂ H ₃ O ₂	vinegar	Main ingredient in vinegar.
carbonic acid, H ₂ CO ₃	responsible for the "fizz" in carbonated drinks	As an ingredient in carbonated drinks.
citric acid, C ₆ H ₈ O ₇		Used in food and dietary supplements. Also added as an acidulant in creams, gels, liquids, and lotions.

Chemist Name	Common Name	Uses
acetylsalicylic acid, $\text{C}_6\text{H}_4(\text{OCOCH}_3)\text{CO}_2\text{H}$	aspirin	The active ingredient in aspirin.

What exactly makes an acid an acid, and what makes a base act as a base? Take a look at the formulas given in the above table and take a guess.

Hydrochloric Acid

Hydrochloric acid is a corrosive, strong mineral acid with many industrial uses. A colorless, highly pungent solution of hydrogen chloride (HCl) in water. Hydrochloric acid is usually prepared by treating HCl with water.



Hydrochloric acid can therefore be used to prepare chloride salts. Hydrochloric acid is a strong acid, since it is completely dissociated in water. Hydrochloric acid is the preferred acid in titration for determining the amount of bases.

Sulfuric Acid

Sulfuric acid is a highly corrosive strong mineral acid with the molecular formula H_2SO_4 . Sulfuric acid is a diprotic acid and has a wide range of applications including use in domestic acidic drain cleaners,¹ as an electrolyte in lead-acid batteries, and in various cleaning agents. It is also a central substance in the chemical industry.



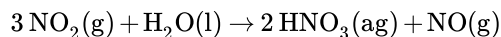
Figure 14.2.1: Drops of concentrated sulfuric acid rapidly decompose a piece of cotton towel by dehydration. (CC BY-SA 3.0; Toxic Walker).

Because the hydration of sulfuric acid is thermodynamically favorable (and is highly exothermic) and the affinity of it for water is sufficiently strong, sulfuric acid is an excellent dehydrating agent. Concentrated sulfuric acid has a very powerful dehydrating property, removing water (H_2O) from other compounds including sugar and other carbohydrates and producing carbon, heat, steam. Sulfuric acid behaves as a typical acid in its reaction with most metals by generating hydrogen gas (Equation 14.2.2).

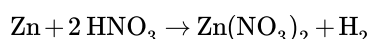
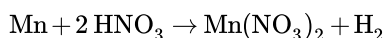
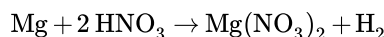


Nitric Acid

Nitric acid (HNO_3) is a highly corrosive mineral acid and is also commonly used as a strong oxidizing agent. Nitric acid is normally considered to be a strong acid at ambient temperatures. Nitric acid can be made by reacting nitrogen dioxide ($\text{NO}_2(\text{g})$) with water.



Nitric acid reacts with most metals, but the details depend on the concentration of the acid and the nature of the metal. Dilute nitric acid behaves as a typical acid in its reaction with most metals (e.g., nitric acid with magnesium, manganese or zinc will liberate H_2 gas):



Nitric acid is a corrosive acid and a powerful oxidizing agent. The major hazard it poses is chemical burn, as it carries out acid hydrolysis with proteins (amide) and fats (ester) which consequently decomposes living tissue (Figure 14.2.2). Concentrated nitric acid stains human skin yellow due to its reaction with the keratin

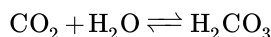


Figure 14.2.2: Second degree burn caused by nitric acid. (CC BY-SA 3.0; Alcamán).

Carbonic Acid

Carbonic acid is a chemical compound with the chemical formula H_2CO_3 and is also a name sometimes given to solutions of carbon dioxide in water (carbonated water), because such solutions contain small amounts of $\text{H}_2\text{CO}_3(\text{aq})$. Carbonic acid, which is a weak acid, forms two kinds of salts: the carbonates and the bicarbonates. In geology, carbonic acid causes limestone to dissolve, producing calcium bicarbonate—which leads to many limestone features such as stalactites and stalagmites. Carbonic acid is a polyprotic acid, specifically it is diprotic, meaning that it has two protons which may dissociate from the parent molecule.

When carbon dioxide dissolves in water, it exists in chemical equilibrium (discussed in [Chapter 15](#)), producing carbonic acid:



The reaction can be pushed to favor the reactants to generate $\text{CO}_2(\text{g})$ from solution, which is key to the bubbles observed in carbonated beverages (Figure 14.2.3).




Figure 14.2.3: A glass of sparkling water. (CC BY-SA 3.0; Nevit Dilmen).

Formic Acid

Formic acid (HCO_2H) is the simplest carboxylic acid and is an important intermediate in chemical synthesis and occurs naturally, most notably in some ants. The word "formic" comes from the Latin word for ant, formica, referring to its early isolation by the distillation of ant bodies. Formic acid occurs widely in nature as its conjugate base formate.

Citric Acid

Citric acid ($\text{C}_6\text{H}_8\text{O}_7$) is a weak organic tricarboxylic acid that occurs naturally in citrus fruits. The citrate ion is an intermediate in the TCA cycle ([Krebs cycle](#)), a central metabolic pathway for animals, plants and bacteria. Because it is one of the stronger edible acids, the dominant use of citric acid is used as a flavoring and preservative in food and beverages, especially soft drinks.



Figure 14.2.4: Lemons, oranges, limes, and other citrus fruits possess high concentrations of citric acid (CC BY-SA 2.5; André Karwath).

Acetylsalicylic Acid

Acetylsalicylic acid (also known as aspirin) is a medication used to treat pain, fever, and inflammation. Aspirin, in the form of leaves from the willow tree, has been used for its health effects for at least 2,400 years.

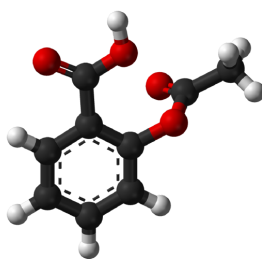


Figure 14.2.5: Ball-and-stick model of the aspirin molecule. (Public Domain; Ben Mills).

Aspirin is a white, crystalline, weakly acidic substance.

Summary

A brief summary of key aspects of several acids commonly encountered by students was given. Acids are a distinct class of compounds because of the properties of their aqueous solutions.

Contributions & Attributions

-
- [Peggy Lawson](#) (Oxbow Prairie Heights School). Funded by Saskatchewan Educational Technology Consortium.

14.2: Acids- Properties and Examples is shared under a [CC BY-NC-SA 4.0](#) license and was authored, remixed, and/or curated by LibreTexts.

- **14.2: Acids- Properties and Examples** by Henry Agnew, Marisa Alviar-Agnew is licensed [CK-12](#). Original source: <https://www.ck12.org/c/chemistry/>.

14.3: Bases- Properties and Examples

Template:HideTOC

Learning Objectives

- Examine properties of bases.

Perhaps you have eaten too much pizza and felt very uncomfortable hours later. This feeling is due to excess stomach acid being produced. The discomfort can be dealt with by taking an antacid. The base in the antacid will react with the HCl in the stomach and neutralize it, taking care of that unpleasant feeling.

Bases

Bases have properties that mostly contrast with those of acids.

- Aqueous solutions of bases are also electrolytes. Bases can be either strong or weak, just as acids can.
- Bases often have a bitter taste and are found in foods less frequently than acids. Many bases, like soaps, are slippery to the touch.
- Bases also change the color of indicators. Litmus turns blue in the presence of a base, while phenolphthalein turns pink.
- Bases do not react with metals in the way that acids do.
- Bases react with acids to produce a salt and water.



Figure 14.3.1: Phenolphthalein indicator in presence of base.

Warning!

Tasting chemicals and touching them are NOT good lab practices and should be avoided—in other words—don't do this at home.

Bases are less common as foods, but they are nonetheless present in many household products. Many cleaners contain ammonia, a base. Sodium hydroxide is found in drain cleaner. **Antacids**, which combat excess stomach acid, are comprised of bases such as magnesium hydroxide or sodium hydrogen carbonate. Various common bases and corresponding uses are given in Table 14.3.2

Table 14.3.1: Common Bases and Corresponding Uses

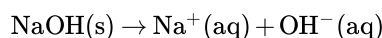
Some Common Bases	Uses
sodium hydroxide, NaOH (lye or caustic soda)	Used in the manufacture of soaps and detergents, and as the main ingredient in oven and drain cleaners.
potassium hydroxide, KOH (lye or caustic potash)	Used in the production of liquid soaps and soft soaps. Used in alkaline batteries.
magnesium hydroxide, Mg(OH) ₂ (milk of magnesia)	Used as an ingredient in laxatives, antacids, and deodorants. Also used in the neutralization of acidic wastewater.
calcium hydroxide, Ca(OH) ₂ (slaked lime)	Used in the manufacture of cement and lime water. Also, added to neutralize acidic soil.
aluminum hydroxide	Used in water purification and as an ingredient in antacids.

Some Common Bases	Uses
ammonia, NH_3	Used as a building block for the synthesis of many pharmaceutical products and in many commercial cleaning products. Used in the manufacture of fertilizers.

Sodium Hydroxide

Sodium hydroxide, also known as lye and caustic soda, is an inorganic compound with formula NaOH . It is a white solid ionic compound consisting of sodium cations Na^+ and hydroxide anions OH^- .

Dissolution of solid sodium hydroxide in water is a highly exothermic reaction:



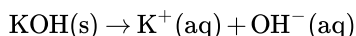
The resulting solution is usually colorless and odorless and feels slippery when it comes in contact with skin.



Figure 14.3.1: Sample of sodium hydroxide as pellets in a watch glass. (Public Domain; Walkerma.)

Potassium Hydroxide

Potassium hydroxide is an inorganic compound with the formula KOH , and is commonly called caustic potash. Along with sodium hydroxide (NaOH), this colorless solid is a prototypical strong base. It has many industrial and niche applications, most of which exploit its corrosive nature and its reactivity toward acids. Its dissolution in water is strongly exothermic.



Concentrated aqueous solutions are sometimes called *potassium lyes*.

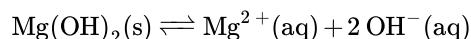
Magnesium Hydroxide

Magnesium hydroxide is the inorganic compound with the chemical formula $\text{Mg}(\text{OH})_2$. Magnesium hydroxide is a common component of antacids, such as milk of magnesia, as well as laxatives.



Figure 14.3.1: Bottle of Antacid tablets. (CC BY 2.,5; Midnightcomm).

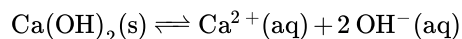
It is a white solid with low solubility in water. Combining a solution of many magnesium salts with basic water induces precipitation of solid $\text{Mg}(\text{OH})_2$. However, a weak concentration of dissociated ions can be found in solution:



Calcium Hydroxide

Calcium hydroxide (traditionally called slaked lime) is an inorganic compound with the chemical formula $\text{Ca}(\text{OH})_2$. It is a colorless crystal or white powder. It has many names including hydrated lime, caustic lime, builders' lime, slaked lime, cal, or pickling lime. Calcium hydroxide is used in many applications, including food preparation. Limewater is the common name for a saturated solution of calcium hydroxide.

Calcium hydroxide is relatively insoluble in water, but is large enough that its solutions are basic according to the following reaction:



Ammonia

Ammonia is a compound of nitrogen and hydrogen with the formula NH_3 and is a colorless gas with a characteristic pungent smell. It is the active product of "smelling salts," and can quickly revive the faint of heart and light of head. Although common in nature and in wide use, ammonia is both caustic and hazardous in its concentrated form.

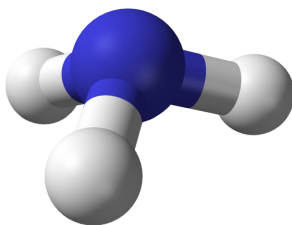
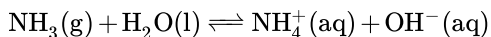


Figure 14.3.1: Ball-and-stick model of the ammonia molecule. (Public Domain; Ben Mills).

In aqueous solution, ammonia acts as a base, acquiring hydrogen ions from H_2O to yield ammonium and hydroxide ions:



Ammonia is also a building block for the synthesis of many pharmaceutical products and is used in many commercial cleaning products.

Summary

- A brief summary of properties of bases was given.
- The properties of bases mostly contrast those of acids.
- Bases have many, varied uses.

14.3: Bases- Properties and Examples is shared under a [CC BY-NC-SA 4.0](#) license and was authored, remixed, and/or curated by LibreTexts.

- **14.3: Bases- Properties and Examples** by Henry Agnew, Marisa Alviar-Agnew is licensed [CK-12](#). Original source: <https://www.ck12.org/c/chemistry/>.

14.4: Molecular Definitions of Acids and Bases

Template:HideTOC

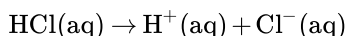
Learning Objectives

- Identify an Arrhenius acid and an Arrhenius base.
- Identify a Brønsted-Lowry acid and a Brønsted-Lowry base.
- Identify conjugate acid-base pairs in an acid-base reaction.

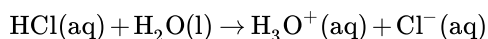
There are three major classifications of substances known as acids or bases. The theory developed by Svante Arrhenius in 1883, the Arrhenius definition, states that an acid produces H^+ in solution and a base produces OH^- . Later, two more sophisticated and general theories were proposed. These theories are the Brønsted-Lowry and Lewis definitions of acids and bases. This section will cover the Arrhenius and Brønsted-Lowry theories; the [Lewis theory](#) is discussed elsewhere.

The Arrhenius Theory of Acids and Bases

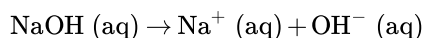
In 1884, the Swedish chemist Svante Arrhenius proposed two specific classifications of compounds, termed acids and bases. When dissolved in an aqueous solution, certain ions were released into the solution. An **Arrhenius acid** is a compound that **increases the concentration of H^+ ions** that are present when added to water. These H^+ ions form the [hydronium](#) ion (H_3O^+) when they combine with water molecules. This process is represented in a chemical equation by adding H_2O to the reactants side.



In this reaction, hydrochloric acid (HCl) dissociates completely into hydrogen (H^+) and chlorine (Cl^-) ions when dissolved in water, thereby releasing H^+ ions into solution. Formation of the hydronium ion equation:



An **Arrhenius base** is a compound that **increases the concentration of OH^- ions** that are present when added to water. The dissociation is represented by the following equation:



In this reaction, sodium hydroxide (NaOH) disassociates into sodium (Na^+) and hydroxide (OH^-) ions when dissolved in water, thereby releasing OH^- ions into solution.

Arrhenius acids are substances which produce hydrogen ions in solution and Arrhenius bases are substances which produce hydroxide ions in solution.

Limitations to the Arrhenius Theory

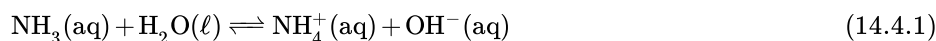
The Arrhenius theory has many more limitations than the other two theories. The theory does not explain the weak base ammonia (NH_3), which in the presence of water, releases hydroxide ions into solution, but does not contain OH^- itself. The Arrhenius definition of acid and base is also limited to aqueous (i.e., water) solutions.

The Brønsted-Lowry Theory of Acids and Bases

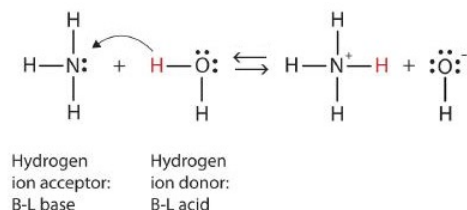
In 1923, Danish chemist Johannes Brønsted and English chemist Thomas Lowry independently proposed new definitions for acids and bases, ones that focus on proton transfer. A **Brønsted-Lowry acid** is any species that can donate a proton (H^+) to another molecule. A **Brønsted-Lowry base** is any species that can accept a proton from another molecule. In short, a **Brønsted-Lowry acid** is a **proton donor (PD)**, while a **Brønsted-Lowry base** is a **proton acceptor (PA)**.

A Brønsted-Lowry acid is a proton donor, while a Brønsted-Lowry base is a proton acceptor.

Let us use the reaction of ammonia in water to demonstrate the Brønsted-Lowry definitions of an acid and a base. Ammonia and water molecules are reactants, while the ammonium ion and the hydroxide ion are products:



What has happened in this reaction is that the original water molecule has donated a hydrogen ion to the original ammonia molecule, which in turn has accepted the hydrogen ion. We can illustrate this as follows:

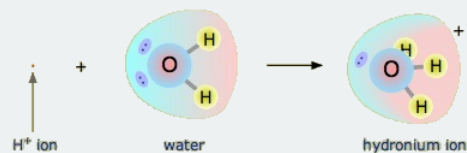


Because the water molecule donates a hydrogen ion to the ammonia, it is the Brønsted-Lowry acid, while the ammonia molecule—which accepts the hydrogen ion—is the Brønsted-Lowry base. Thus, ammonia acts as a base in both the Arrhenius sense and the Brønsted-Lowry sense.

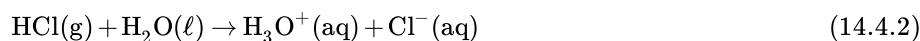
Is an Arrhenius acid like hydrochloric acid still an acid in the Brønsted-Lowry sense? Yes, but it requires us to understand what really happens when HCl is dissolved in water. Recall that the hydrogen *atom* is a single proton surrounded by a single electron. To make the hydrogen *ion*, we remove the electron, leaving a bare proton. Do we *really* have bare protons floating around in aqueous solution? No, we do not. What really happens is that the H^+ ion attaches itself to H_2O to make H_3O^+ , which is called the *hydronium ion*. For most purposes, H^+ and H_3O^+ represent the same species, but writing H_3O^+ instead of H^+ shows that we understand that there are no bare protons floating around in solution. Rather, these protons are actually attached to solvent molecules.

✚ The Hydronium Ion

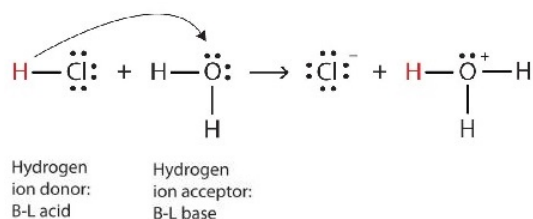
A proton in aqueous solution may be surrounded by more than one water molecule, leading to formulas like H_5O_2^+ or H_9O_4^+ rather than H_3O^+ . It is simpler, however, to use H_3O^+ to represent the [hydronium ion](#).



With this in mind, how do we define HCl as an acid in the Brønsted-Lowry sense? Consider what happens when HCl is dissolved in H_2O :



We can depict this process using Lewis electron dot diagrams:



Now we see that a hydrogen ion is transferred from the HCl molecule to the H_2O molecule to make chloride ions and hydronium ions. As the hydrogen ion donor, HCl acts as a Brønsted-Lowry acid; as a hydrogen ion acceptor, H_2O is a Brønsted-Lowry base. So HCl is an acid not just in the Arrhenius sense, but also in the Brønsted-Lowry sense. Moreover, by the Brønsted-Lowry definitions, H_2O is a base in the formation of aqueous HCl. So the Brønsted-Lowry definitions of an acid and a base classify the dissolving of HCl in water as a reaction between an acid and a base—although the Arrhenius definition would not have labeled H_2O a base in this circumstance.

- A Brønsted-Lowry acid is a proton (hydrogen ion) donor.

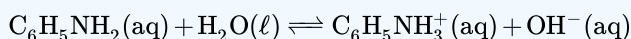
- A Brønsted-Lowry base is a proton (hydrogen ion) acceptor.
- All Arrhenius acids and bases are Brønsted-Lowry acids and bases as well. However, not all Brønsted-Lowry acids and bases are Arrhenius acids and bases.

✓ Example 14.4.1

Aniline ($\text{C}_6\text{H}_5\text{NH}_2$) is slightly soluble in water. It has a nitrogen atom that can accept a hydrogen ion from a water molecule, just like the nitrogen atom in ammonia does. Write the chemical equation for this reaction and identify the Brønsted-Lowry acid and base.

Solution

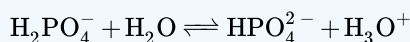
$\text{C}_6\text{H}_5\text{NH}_2$ and H_2O are the reactants. When $\text{C}_6\text{H}_5\text{NH}_2$ accepts a proton from H_2O , it gains an extra H and a positive charge and leaves an OH^- ion behind. The reaction is as follows:



Because $\text{C}_6\text{H}_5\text{NH}_2$ accepts a proton, it is the Brønsted-Lowry base. The H_2O molecule, because it donates a proton, is the Brønsted-Lowry acid.

? Exercise 14.4.1

Identify the Brønsted-Lowry acid and the Brønsted-Lowry base in this chemical equation.



Answer

Brønsted-Lowry acid: H_2PO_4^- ; Brønsted-Lowry base: H_2O

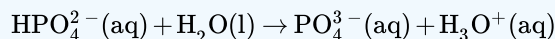
? Exercise 14.4.2

Which of the following compounds is a Brønsted-Lowry base?

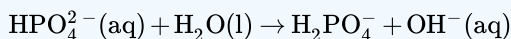
- HCl
- HPO_4^{2-}
- H_3PO_4
- NH_4^+
- CH_3NH_3^+

Answer

A Brønsted-Lowry Base is a proton acceptor, which means it will take in an H^+ . This eliminates HCl , H_3PO_4 , NH_4^+ and CH_3NH_3^+ because they are Brønsted-Lowry acids. They all give away protons. In the case of HPO_4^{2-} , consider the following equation:



Here, it is clear that HPO_4^{2-} is the acid since it donates a proton to water to make H_3O^+ and PO_4^{3-} . Now consider the following equation:

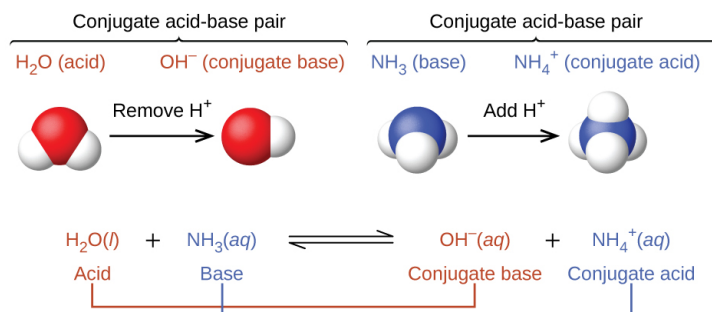


In this case, HPO_4^{2-} is the base since it accepts a proton from water to form H_2PO_4^- and OH^- . Thus, HPO_4^{2-} is an acid and base together, making it amphoteric.

Since HPO_4^{2-} is the only compound from the options that can act as a base, the answer is **(b) HPO_4^{2-}** .

Conjugate Acid-Base Pair

In reality, all acid-base reactions involve the transfer of protons between acids and bases. For example, consider the acid-base reaction that takes place when ammonia is dissolved in water. A water molecule (functioning as an acid) transfers a proton to an ammonia molecule (functioning as a base), yielding the conjugate base of water, OH^- , and the conjugate acid of ammonia, NH_4^+ :



This figure has three parts in two rows. In the first row, two diagrams of acid-base pairs are shown. On the left, a space filling model of H_2O is shown with a red O atom at the center and two smaller white H atoms attached in a bent shape. Above this model is the label " H_2O (acid)" in purple. An arrow points right, which is labeled "Remove H^+ ." To the right is another space filling model with a single red O atom to which a single smaller white H atom is attached. The label in purple above this model reads, " OH^- (conjugate base)." Above both of these red and white models is an upward pointing bracket that is labeled "Conjugate acid-base pair." To the right is a space filling model with a central blue N atom to which three smaller white H atoms are attached in a triangular pyramid arrangement. A label in green above reads " NH_3 (base)." An arrow labeled "Add H^+ " points right. To the right of the arrow is another space filling model with a blue central N atom and four smaller white H atoms in a tetrahedral arrangement. The green label above reads " NH_4^+ (conjugate acid)." Above both of these blue and white models is an upward pointing bracket that is labeled "Conjugate acid-base pair." The second row of the figure shows the chemical reaction, $\text{H}_2\text{O}(\text{l}) + \text{NH}_3(\text{aq}) \rightleftharpoons \text{OH}^-(\text{aq}) + \text{NH}_4^+(\text{aq})$. The acid on the left side of the equation is connected to the conjugate base on the right with a purple line. Similarly, the base on the left is connected to the conjugate acid on the right side.

In the reaction of ammonia with water to give ammonium ions and hydroxide ions, ammonia acts as a base by accepting a proton from a water molecule, which in this case means that water is acting as an acid. In the reverse reaction, an ammonium ion acts as an acid by donating a proton to a hydroxide ion, and the hydroxide ion acts as a base. The conjugate acid–base pairs for this reaction are $\text{NH}_4^+/\text{NH}_3$ and $\text{H}_2\text{O}/\text{OH}^-$.

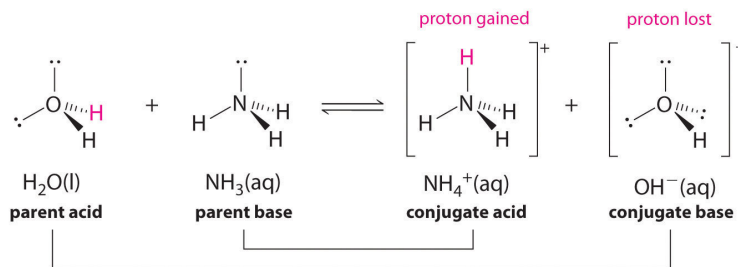


Figure 14.4.1. The pairing of parent acids and bases with conjugate acids and bases.

ACID		BASE	
negligible	OH^-	O^{2-}	strong
	HS^-	S^{2-}	
weak	H_2O	OH^-	weak
	HPO_4^{2-}	PO_4^{3-}	
	HCO_3^-	CO_3^{2-}	
	NH_4^+	NH_3	
	HCN	CN^-	
	H_2PO_4^-	HPO_4^{2-}	
	HSO_3^-	SO_3^{2-}	
	H_2S	HS^-	
	H_2CO_3	HCO_3^-	
	$\text{C}_5\text{H}_5\text{NH}^+$	$\text{C}_5\text{H}_5\text{N}$	
strong	$\text{CH}_3\text{CO}_2\text{H}$	CH_3CO_2^-	negligible
	HF	F^-	
	H_3PO_4	H_2PO_4^-	
	H_2SO_3	HSO_3^-	
	HSO_4^-	SO_4^{2-}	
	H_3O^+	H_2O	
	HNO_3	NO_3^-	
	H_2SO_4	HSO_4^-	
	HCl	Cl^-	
	HBr	Br^-	

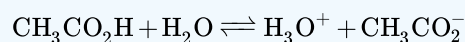
← Relative acid strength increasing

Relative base strength increasing →

Figure 14.4.1: The Relative Strengths of Some Common Conjugate Acid-Base Pairs. The strongest acids are at the bottom left, and the strongest bases are at the top right. The conjugate base of a strong acid is a very weak base, and, conversely, the conjugate acid of a strong base is a very weak acid.

✓ Example 14.4.2

Identify the conjugate acid-base pairs in this equilibrium.

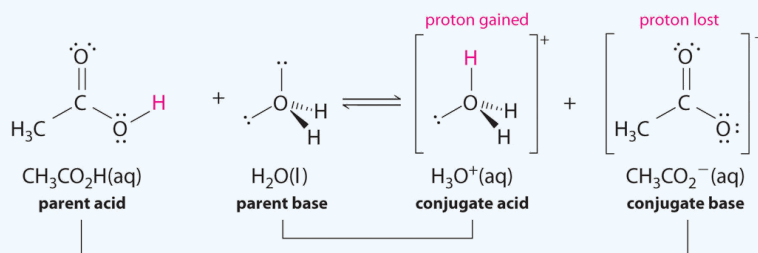


Solution

Similarly, in the reaction of acetic acid with water, acetic acid **donates** a proton to water, which acts as the base. In the reverse reaction, H_3O^+ is the acid that donates a proton to the acetate ion, which acts as the base.

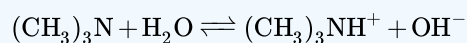
Once again, we have two conjugate acid-base pairs:

- the parent acid and its conjugate base ($\text{CH}_3\text{CO}_2\text{H}/\text{CH}_3\text{CO}_2^-$) and
- the parent base and its conjugate acid ($\text{H}_3\text{O}^+/\text{H}_2\text{O}$).



✓ Example 14.4.3

Identify the conjugate acid-base pairs in this equilibrium.

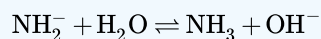
**Solution**

One pair is H_2O and OH^- , where H_2O has one more H^+ and is the conjugate acid, while OH^- has one less H^+ and is the conjugate base.

The other pair consists of $(\text{CH}_3)_3\text{N}$ and $(\text{CH}_3)_3\text{NH}^+$, where $(\text{CH}_3)_3\text{NH}^+$ is the conjugate acid (it has an additional proton) and $(\text{CH}_3)_3\text{N}$ is the conjugate base.

? Exercise 14.4.3

Identify the conjugate acid-base pairs in this equilibrium.

**Answer**

H_2O (acid) and OH^- (base); NH_2^- (base) and NH_3 (acid)

14.4: Molecular Definitions of Acids and Bases is shared under a [CC BY-NC-SA 4.0](#) license and was authored, remixed, and/or curated by LibreTexts.

- 14.4: Molecular Definitions of Acids and Bases by Henry Agnew, Marisa Alviar-Agnew is licensed [CK-12](#). Original source: <https://www.ck12.org/c/chemistry/>.

14.5: Reactions of Acids and Bases

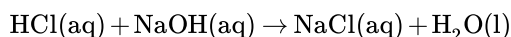
Template:HideTOC

Learning Objectives

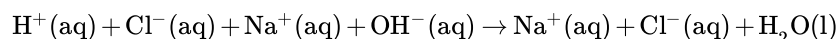
- Write acid-base neutralization reactions.
- Write reactions of acids with metals.
- Write reactions of bases with metals.

Neutralization Reactions

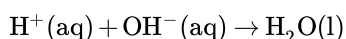
The reaction that happens when an acid, such as HCl, is mixed with a base, such as NaOH:



When an acid and a base are combined, water and a salt are the products. Salts are ionic compounds containing a positive ion other than H^+ and a negative ion other than the hydroxide ion, OH^- . Double displacement reactions of this type are called **neutralization reactions**. We can write an expanded version of this equation, with aqueous substances written in their longer form:



After removing the spectator ions, we get the net ionic equation:



When a strong acid and a strong base are combined in the proper amounts—when $[\text{H}^+]$ equals $[\text{OH}^-]$ —a neutral solution results in which $\text{pH} = 7$. The acid and base have neutralized each other, and the acidic and basic properties are no longer present.

Salt solutions do not always have a pH of 7, however. Through a process known as **hydrolysis**, the ions produced when an acid and base combine may react with the water molecules to produce a solution that is slightly acidic or basic. As a general concept, if a strong acid is mixed with a weak base, the resulting solution will be slightly acidic. If a strong base is mixed with a weak acid, the solution will be slightly basic.



Video: Equimolar (~0.01 M) and equivolume solutions of HCl and NaOH are combined to make salt water. <https://youtu.be/Ts-19KrUjB0>

✓ Example 14.5.1: Propionic Acid + Calcium Hydroxide

Calcium propionate is used to inhibit the growth of molds in foods, tobacco, and some medicines. Write a balanced chemical equation for the reaction of aqueous propionic acid ($\text{CH}_3\text{CH}_2\text{CO}_2\text{H}$) with aqueous calcium hydroxide [$\text{Ca}(\text{OH})_2$].

Solution

Solutions to Example 14.5.1

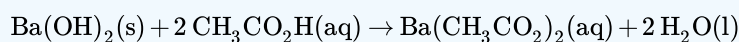
Steps	Reaction

Steps	Reaction
<p><i>Write the unbalanced equation.</i></p> <p>This is a double displacement reaction, so the cations and anions swap to create the water and the salt.</p>	$\text{CH}_3\text{CH}_2\text{CO}_2\text{H}(\text{aq}) + \text{Ca}(\text{OH})_2(\text{aq}) \rightarrow (\text{CH}_3\text{CH}_2\text{CO}_2)_2\text{Ca}(\text{aq}) + \text{H}_2\text{O}(\text{l})$
<p><i>Balance the equation.</i></p> <p>Because there are two OH^- ions in the formula for $\text{Ca}(\text{OH})_2$, we need two moles of propionic acid, $\text{CH}_3\text{CH}_2\text{CO}_2\text{H}$, to provide H^+ ions.</p>	$\underline{2}\text{CH}_3\text{CH}_2\text{CO}_2\text{H}(\text{aq}) + \text{Ca}(\text{OH})_2(\text{aq}) \rightarrow (\text{CH}_3\text{CH}_2\text{CO}_2)_2\text{Ca}(\text{aq}) + \underline{2}\text{H}_2\text{O}(\text{l})$

? Exercise 14.5.1

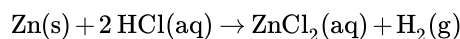
Write a balanced chemical equation for the reaction of solid barium hydroxide with dilute acetic acid.

Answer

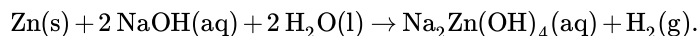


Acids and Bases React with Metals

Acids react with most metals to form a salt and hydrogen gas. As discussed previously, metals that are more active than acids can undergo a **single displacement reaction**. For example, zinc metal reacts with hydrochloric acid, producing zinc chloride and hydrogen gas.



Bases also react with certain metals, like zinc or aluminum, to produce hydrogen gas. For example, sodium hydroxide reacts with zinc and water to form sodium zincate and hydrogen gas.



14.5: Reactions of Acids and Bases is shared under a [CC BY-NC-SA 4.0](https://creativecommons.org/licenses/by-nc-sa/4.0/) license and was authored, remixed, and/or curated by LibreTexts.

- **14.5: Reactions of Acids and Bases** by Henry Agnew, Marisa Alviar-Agnew, Peggy Lawson is licensed [Public Domain](https://creativecommons.org/licenses/by-nc-sa/4.0/). Original source: <https://sites.prairiesouth.ca/legacy/chemistry/chem30>.

14.6: Acid–Base Titration- A Way to Quantify the Amount of Acid or Base in a Solution

Template:HideTOC

Learning Objectives

- Understand the basics of acid-base titrations.
- Understand the use of indicators.
- Perform a titration calculation correctly.

The reaction of an acid with a base to make a salt and water is a common reaction in the laboratory, partly because so many compounds can act as acids or bases. Another reason that acid-base reactions are so prevalent is because they are often used to determine quantitative amounts of one or the other. Performing chemical reactions quantitatively to determine the exact amount of a reagent is called a **titration**. A titration can be performed with almost any chemical reaction for which the balanced chemical equation is known. Here, we will consider titrations that involve acid-base reactions.

During an acid-base titration, an acid with a known concentration (a **standard solution**) is slowly added to a base with an unknown concentration (or vice versa). A few drops of indicator solution are added to the base. The indicator will signal, by color change, when the base has been neutralized (when $[H^+] = [OH^-]$). At that point—called the **equivalence point**, or **end point**—the titration is stopped. By knowing the volumes of acid and base used, and the concentration of the standard solution, calculations allow us to determine the concentration of the other solution.

It is important to accurately measure volumes when doing titrations. The instrument you would use is called a **burette** (or buret).

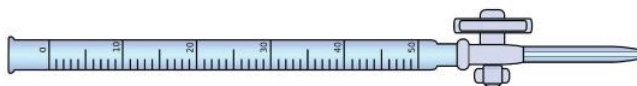
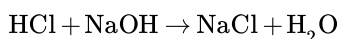


Figure 14.6.1: Equipment for Titrations. A burette is a type of liquid dispensing system that can accurately indicate the volume of liquid dispensed.

For example, suppose 25.66 mL (or 0.02566 L) of 0.1078 M HCl was used to titrate an unknown sample of NaOH. What mass of NaOH was in the sample? We can calculate the number of moles of HCl reacted:

$$\# \text{ mol HCl} = (0.02566 \text{ L})(0.1078 \text{ M}) = 0.002766 \text{ mol HCl}$$

We also have the balanced chemical reaction between HCl and NaOH:



So we can construct a conversion factor to convert to number of moles of NaOH reacted:

$$0.002766 \text{ mol } \cancel{\text{HCl}} \times \frac{1 \text{ mol NaOH}}{1 \text{ mol } \cancel{\text{HCl}}} = 0.002766 \text{ mol NaOH}$$

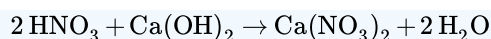
Then we convert this amount to mass, using the molar mass of NaOH (40.00 g/mol):

$$0.002766 \text{ mol } \cancel{\text{HCl}} \times \frac{40.00 \text{ g NaOH}}{1 \text{ mol } \cancel{\text{HCl}}} = 0.1106 \text{ g NaOH}$$

This type of calculation is performed as part of a titration.

✓ Example 14.6.1: Equivalence Point

What mass of Ca(OH)_2 is present in a sample if it is titrated to its equivalence point with 44.02 mL of 0.0885 M HNO_3 ? The balanced chemical equation is as follows:



Solution

In liters, the volume is 0.04402 L. We calculate the number of moles of titrant:

$$\# \text{ moles } \text{HNO}_3 = (0.04402 \text{ L})(0.0885 \text{ M}) = 0.00390 \text{ mol } \text{HNO}_3$$

Using the balanced chemical equation, we can determine the number of moles of $\text{Ca}(\text{OH})_2$ present in the analyte:

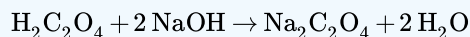
$$0.00390 \text{ mol } \text{HNO}_3 \times \frac{1 \text{ mol } \text{Ca}(\text{OH})_2}{2 \text{ mol } \text{HNO}_3} = 0.00195 \text{ mol } \text{Ca}(\text{OH})_2$$

Then we convert this to a mass using the molar mass of $\text{Ca}(\text{OH})_2$:

$$0.00195 \text{ mol } \text{Ca}(\text{OH})_2 \times \frac{74.1 \text{ g } \text{Ca}(\text{OH})_2}{\text{mol } \text{Ca}(\text{OH})_2} = 0.144 \text{ g } \text{Ca}(\text{OH})_2$$

? Exercise 14.6.1

What mass of $\text{H}_2\text{C}_2\text{O}_4$ is present in a sample if it is titrated to its equivalence point with 18.09 mL of 0.2235 M NaOH? The balanced chemical reaction is as follows:



Answer

0.182 g

? Exercise 14.6.2

If 25.00 mL of HCl solution with a concentration of 0.1234 M is neutralized by 23.45 mL of NaOH, what is the concentration of the base?

Answer

0.1316 M NaOH

? Exercise 14.6.3

A 20.0 mL solution of strontium hydroxide, $\text{Sr}(\text{OH})_2$, is placed in a flask and a drop of indicator is added. The solution turns color after 25.0 mL of a standard 0.0500 M HCl solution is added. What was the original concentration of the $\text{Sr}(\text{OH})_2$ solution?

Answer

$3.12 \times 10^{-2} \text{ M } \text{Sr}(\text{OH})_2$

Indicator Selection for Titrations

The indicator used depends on the type of titration performed. The indicator of choice should change color when enough of one substance (acid or base) has been added to exactly use up the other substance. Only when a strong acid and a strong base are produced will the resulting solution be neutral. The three main types of acid-base titrations, and suggested indicators, are:

The three main types of acid-base titrations, suggested indicators, and explanations

Titration between . . .	Indicator	Explanation
strong acid and strong base	any	
strong acid and weak base	methyl orange	changes color in the acidic range (3.2 - 4.4)

Titration between . . .	Indicator	Explanation
weak acid and strong base	phenolphthalein	changes color in the basic range (8.2 - 10.6)

Summary

A titration is the quantitative reaction of an acid and a base. Indicators are used to show that all the analyte has reacted with the titrant.

Contributions & Attributions

- [Peggy Lawson](#) (Oxbow Prairie Heights School). Funded by Saskatchewan Educational Technology Consortium.

14.6: Acid–Base Titration- A Way to Quantify the Amount of Acid or Base in a Solution is shared under a [CC BY-NC-SA 4.0](#) license and was authored, remixed, and/or curated by LibreTexts.

- **14.6: Acid–Base Titration** by Henry Agnew, Marisa Alviar-Agnew is licensed [CK-12](#). Original source: <https://www.ck12.org/c/chemistry/>.

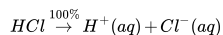
14.7: Strong and Weak Acids and Bases

Learning Objectives

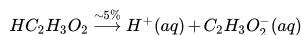
- Define a strong and a weak acid and base.
- Recognize an acid or a base as strong or weak.
- Determine if a salt produces an acidic or a basic solution.

Strong and Weak Acids

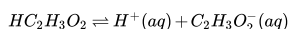
Except for their names and formulas, so far we have treated all acids as equals, especially in a chemical reaction. However, acids can be very different in a very important way. Consider HCl(aq) . When HCl is dissolved in H_2O , it completely dissociates into $\text{H}^+(\text{aq})$ and $\text{Cl}^-(\text{aq})$ ions; all the HCl molecules become ions:



Any acid that dissociates 100% into ions is called a **strong acid**. If it does not dissociate 100%, it is a **weak acid**. $\text{HC}_2\text{H}_3\text{O}_2$ is an example of a weak acid:



Because this reaction does not go 100% to completion, it is more appropriate to write it as a **reversible reaction**:



As it turns out, there are very few strong acids, which are given in Table 14.7.1. If an acid is not listed here, it is a weak acid. It may be 1% ionized or 99% ionized, but it is still classified as a weak acid.

Any acid that dissociates 100% into ions is called a strong acid. If it does not dissociate 100%, it is a weak acid.

Table 14.7.1: Strong Acids and Bases

Acids	Bases
HCl	LiOH
HBr	NaOH
HI	KOH
HNO_3	RbOH
H_2SO_4	CsOH
HClO_3	Mg(OH)_2
HClO_4	Ca(OH)_2
	Sr(OH)_2
	Ba(OH)_2

Strong and Weak Bases

The issue is similar with bases: a **strong base** is a base that is 100% ionized in solution. If it is less than 100% ionized in solution, it is a **weak base**. There are very few strong bases (Table 14.7.1); any base not listed is a weak base. All strong bases are OH^- compounds. So a base based on some other mechanism, such as NH_3 (which does not contain OH^- ions as part of its formula), will be a weak base.

✓ Example 14.7.1: Identifying Strong and Weak Acids and Bases

Identify each acid or base as strong or weak.

- HCl
- Mg(OH)_2
- $\text{C}_5\text{H}_5\text{N}$

Solution

- Because HCl is listed in Table 14.7.1, it is a strong acid.
- Because Mg(OH)_2 is listed in Table 14.7.1, it is a strong base.
- The nitrogen in $\text{C}_5\text{H}_5\text{N}$ would act as a proton acceptor and therefore can be considered a base, but because it does not contain an OH compound, it cannot be considered a strong base; it is a weak base.

? Exercise 14.7.1

Identify each acid or base as strong or weak.

- RbOH
- HNO_2

Answer a

strong base

Answer b

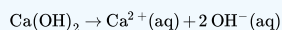
weak acid

✓ Example 14.7.2: Characterizing Base Ionization

Write the balanced chemical equation for the dissociation of Ca(OH)_2 and indicate whether it proceeds 100% to products or not.

Solution

This is an ionic compound of Ca^{2+} ions and OH^- ions. When an ionic compound dissolves, it separates into its constituent ions:



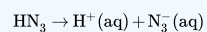
Because $\text{Ca}(\text{OH})_2$ is listed in Table 14.7.1, this reaction proceeds 100% to products.

? Exercise 14.7.2

Write the balanced chemical equation for the dissociation of hydrazoic acid (HN_3) and indicate whether it proceeds 100% to products or not.

Answer a

The reaction is as follows:



It does not proceed 100% to products because hydrazoic acid is not a strong acid.

Key Takeaways

- Strong acids and bases are 100% ionized in aqueous solution.
- Weak acids and bases are less than 100% ionized in aqueous solution.
- Salts of weak acids or bases can affect the acidity or basicity of their aqueous solutions.

Contributions & Attributions

14.7: Strong and Weak Acids and Bases is shared under a [CC BY-NC-SA 4.0](#) license and was authored, remixed, and/or curated by LibreTexts.

- 14.7: Strong and Weak Acids and Bases by Henry Agnew, Marisa Alviar-Agnew is licensed [CK-12](#). Original source: <https://www.ck12.org/c/chemistry/>.

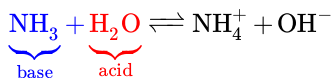
14.8: Water- Acid and Base in One

Template:HideTOC

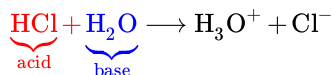
Learning Objectives

- Describe the autoionization of water.
- Calculate the concentrations of H_3O^+ and OH^- in aqueous solutions, knowing the other concentration.

We have already seen that H_2O can act as an acid or a base:




where H_2O acts as an **acid** (in red).



where H_2O acts as an **base** (in blue).

It may not surprise you to learn, then, that within any given sample of water, some H_2O molecules are acting as acids, and other H_2O molecules are acting as bases. The chemical equation is as follows:



This occurs only to a very small degree: only about 6 in 10^8 H_2O molecules are participating in this process, which is called the **autoionization of water**.

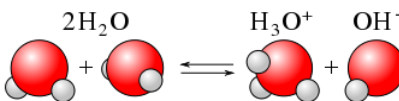


Figure 14.8.1: Autoionization of water, resulting in hydroxide and hydronium ions.

At this level, the concentration of both $\text{H}_3\text{O}^+(\text{aq})$ and $\text{OH}^-(\text{aq})$ in a sample of pure H_2O is about $1.0 \times 10^{-7} \text{ M}$ (at room temperature). If we use square brackets—[]—around a dissolved species to imply the molar concentration of that species, we have

$$[\text{H}_3\text{O}^+] = [\text{OH}^-] = 1.0 \times 10^{-7} \quad (14.8.2)$$

for *any* sample of pure water because H_2O can act as both an acid and a base. The product of these two concentrations is 1.0×10^{-14} :

$$[\text{H}_3\text{O}^+] \times [\text{OH}^-] = (1.0 \times 10^{-7})(1.0 \times 10^{-7}) = 1.0 \times 10^{-14}$$

- For acids, the concentration of $\text{H}_3\text{O}^+(\text{aq})$ (i.e., $[\text{H}_3\text{O}^+]$) is greater than $1.0 \times 10^{-7} \text{ M}$.
- For bases the concentration of $\text{OH}^-(\text{aq})$ (i.e., $[\text{OH}^-]$) is greater than $1.0 \times 10^{-7} \text{ M}$.

However, the *product* of the two concentrations— $[\text{H}_3\text{O}^+][\text{OH}^-]$ —is *always* equal to 1.0×10^{-14} , no matter whether the aqueous solution is an acid, a base, or neutral:

$$[\text{H}_3\text{O}^+][\text{OH}^-] = 1.0 \times 10^{-14}$$

This value of the product of concentrations is so important for aqueous solutions that it is called the **autoionization constant of water** and is denoted K_w :

$$K_w = [\text{H}_3\text{O}^+][\text{OH}^-] = 1.0 \times 10^{-14} \quad (14.8.3)$$

This means that if you know $[\text{H}_3\text{O}^+]$ for a solution, you can calculate what $[\text{OH}^-]$ has to be for the product to equal 1.0×10^{-14} ; or if you know $[\text{OH}^-]$, you can calculate $[\text{H}_3\text{O}^+]$. This also implies that as one concentration goes up, the other must go down to compensate so that their product always equals the value of K_w .

Warning: Temperature Matters

The degree of autoionization of water (Equation 14.8.1)—and hence the value of K_w —changes with temperature, so Equations 14.8.2- 14.8.3 are accurate only at room temperature.

✓ Example 14.8.1: Hydroxide Concentration

What is $[\text{OH}^-]$ of an aqueous solution if $[\text{H}_3\text{O}^+]$ is $1.0 \times 10^{-4} \text{ M}$?

Solution

Solutions to Example 14.7.1

Steps for Problem Solving	
Identify the "given" information and what the problem is asking you to "find."	Given: $[\text{H}_3\text{O}^+] = 1.0 \times 10^{-4} \text{ M}$ Find: $[\text{OH}^-] = ? \text{ M}$
List other known quantities.	none
Plan the problem.	Using the expression for K_w , (Equation 14.8.3), rearrange the equation algebraically to solve for $[\text{OH}^-]$. $[\text{OH}^-] = \frac{1.0 \times 10^{-14}}{[\text{H}_3\text{O}^+]}$
Calculate.	Now substitute the known quantities into the equation and solve. $[\text{OH}^-] = \frac{1.0 \times 10^{-14}}{1.0 \times 10^{-4}} = 1.0 \times 10^{-10} \text{ M}$ It is assumed that the concentration unit is molarity, so $[\text{OH}^-]$ is $1.0 \times 10^{-10} \text{ M}$.
Think about your result.	The concentration of the acid is high ($> 1 \times 10^{-7} \text{ M}$), so $[\text{OH}^-]$ should be low.

? Exercise 14.8.1

What is $[\text{OH}^-]$ in a 0.00032 M solution of H_2SO_4 ?

Hint

Assume **both** protons ionize from the molecule...although this is not the case.

Answer

$3.1 \times 10^{-11} \text{ M}$

When you have a solution of a particular acid or base, you need to look at the formula of the acid or base to determine the number of H_3O^+ or OH^- ions in the formula unit because $[\text{H}_3\text{O}^+]$ or $[\text{OH}^-]$ may not be the same as the concentration of the acid or base itself.

✓ Example 14.8.2: Hydronium Concentration

What is $[\text{H}_3\text{O}^+]$ in a 0.0044 M solution of $\text{Ca}(\text{OH})_2$?

Solution

Solutions to Example 14.7.2

Steps for Problem Solving

Steps for Problem Solving	
Identify the "given" information and what the problem is asking you to "find."	Given: $[\text{Ca}(\text{OH})_2] = 0.0044 \text{ M}$ Find: $[\text{H}_3\text{O}^+] = ? \text{ M}$
List other known quantities.	We begin by determining $[\text{OH}^-]$. The concentration of the solute is 0.0044 M , but because $\text{Ca}(\text{OH})_2$ is a strong base, there are two OH^- ions in solution for every formula unit dissolved, so the actual $[\text{OH}^-]$ is two times this: $[\text{OH}^-] = 2 \times 0.0044 \text{ M} = 0.0088 \text{ M}$
Plan the problem.	Use the expression for K_w (Equation 14.8.3) and rearrange the equation algebraically to solve for $[\text{H}_3\text{O}^+]$. $[\text{H}_3\text{O}^+] = \frac{1.0 \times 10^{-14}}{[\text{OH}^-]}$
Calculate.	Now substitute the known quantities into the equation and solve. $[\text{H}_3\text{O}^+] = \frac{1.0 \times 10^{-14}}{(0.0088)} = 1.1 \times 10^{-12} \text{ M}$ $[\text{H}_3\text{O}^+]$ has decreased significantly in this basic solution.
Think about your result.	The concentration of the base is high ($> 1 \times 10^{-7} \text{ M}$) so $[\text{H}_3\text{O}^+]$ should be low.

? Exercise 14.8.2

What is $[\text{H}_3\text{O}^+]$ of an aqueous solution if $[\text{OH}^-]$ is $1.0 \times 10^{-9} \text{ M}$?

Answer

$$1.0 \times 10^{-5} \text{ M}$$

In any aqueous solution, the product of $[\text{H}_3\text{O}^+]$ and $[\text{OH}^-]$ equals 1.0×10^{-14} (at room temperature).

Contributions & Attributions

14.8: Water- Acid and Base in One is shared under a [CC BY-NC-SA 4.0](#) license and was authored, remixed, and/or curated by LibreTexts.

- 14.8: Water - Acid and Base in One by Henry Agnew, Marisa Alviar-Agnew is licensed [CK-12](#). Original source: <https://www.ck12.org/c/chemistry/>.

14.9: The pH and pOH Scales- Ways to Express Acidity and Basicity

Template:HideTOC

Learning Objectives

- Define pH and pOH.
- Determine the pH of acidic and basic solutions.
- Determine the hydronium ion concentration and pOH from pH.

As we have seen, $[H_3O^+]$ and $[OH^-]$ values can be markedly different from one aqueous solution to another. So chemists defined a new scale that succinctly indicates the concentrations of either of these two ions.

pH is a logarithmic function of $[H_3O^+]$:

$$pH = -\log[H_3O^+] \quad (14.9.1)$$

pH is usually (but not always) between 0 and 14. Knowing the dependence of pH on $[H_3O^+]$, we can summarize as follows:

- If $pH < 7$, then the solution is acidic.
- If $pH = 7$, then the solution is neutral.
- If $pH > 7$, then the solution is basic.

This is known as the pH scale. The pH scale is the range of values from 0 to 14 that describes the acidity or basicity of a solution. You can use pH to make a quick determination whether a given aqueous solution is acidic, basic, or neutral. Figure 14.9.1 illustrates this relationship, along with some examples of various solutions. Because hydrogen ion concentrations are generally less than one (for example $1.3 \times 10^{-3} M$), the log of the number will be a negative number. To make pH even easier to work with, pH is defined as the **negative log of $[H_3O^+]$** , which will give a positive value for pH.




Figure 14.9.1: The pH values for several common materials.

✓ Example 14.9.1

Label each solution as acidic, basic, or neutral based only on the stated pH .

- milk of magnesia, $pH = 10.5$
- pure water, $pH = 7$
- wine, $pH = 3.0$

Answer

- a. With a pH greater than 7, milk of magnesia is basic. (Milk of magnesia is largely $\text{Mg}(\text{OH})_2$.)
- b. Pure water, with a pH of 7, is neutral.
- c. With a pH of less than 7, wine is acidic.

? Exercise 14.9.1

Identify each substance as acidic, basic, or neutral based only on the stated pH .

- a. human blood with $pH = 7.4$
- b. household ammonia with $pH = 11.0$
- c. cherries with $pH = 3.6$

Answer a

basic

Answer b

basic

Answer c

acidic

Calculating pH from Hydronium Concentration

The pH of solutions can be determined by using logarithms as illustrated in the next example for stomach acid. Stomach acid is a solution of HCl with a hydronium ion concentration of $1.2 \times 10^{-3} \text{ M}$, what is the pH of the solution?

$$\begin{aligned} pH &= -\log[\text{H}_3\text{O}^+] \\ &= -\log(1.2 \times 10^{-3}) \\ &= -(-2.92) = 2.92 \end{aligned}$$

📌 Logarithms

To get the **log value** on your calculator, enter the number (in this case, the hydronium ion concentration) first, then press the LOG key.

If the number is 1.0×10^{-5} (for $[\text{H}_3\text{O}^+] = 1.0 \times 10^{-5} \text{ M}$) you should get an answer of "-5".

If you get a different answer, or an error, try pressing the LOG key before you enter the number.

✓ Example 14.9.2: Converting Ph to Hydronium Concentration

Find the pH, given the $[\text{H}_3\text{O}^+]$ of the following:

- a. $1 \times 10^{-3} \text{ M}$
- b. $2.5 \times 10^{-11} \text{ M}$
- c. $4.7 \times 10^{-9} \text{ M}$

Solution

Solutions to Example 14.9.2

Steps for Problem Solving	
Identify the "given" information and what the problem is asking you to "find."	<p>Given:</p> <ul style="list-style-type: none"> a. $[\text{H}_3\text{O}^+] = 1 \times 10^{-3} \text{ M}$ b. $[\text{H}_3\text{O}^+] = 2.5 \times 10^{-11} \text{ M}$ c. $[\text{H}_3\text{O}^+] = 4.7 \times 10^{-9} \text{ M}$ <p>Find: ? pH</p>

Steps for Problem Solving

Plan the problem.

Need to use the expression for pH (Equation 14.9.1).

$$\text{pH} = -\log [\text{H}_3\text{O}^+]$$

Calculate.

Now substitute the known quantity into the equation and solve.

a. $\text{pH} = -\log [1 \times 10^{-3}] = 3.0$ (1 decimal places since 1 has 1 significant figure)

b. $\text{pH} = -\log [2.5 \times 10^{-11}] = 10.60$ (2 decimal places since 2.5 has 2 significant figures)

c. $\text{pH} = -\log [4.7 \times 10^{-9}] = 8.30$ (2 decimal places since 4.7 has 2 significant figures)

The other issue that concerns us here is significant figures. Because the number(s) before the decimal point in a logarithm relate to the power on 10, the number of digits *after* the decimal point is what determines the number of significant figures in the final answer:

$$\begin{array}{c} \text{X.YYY} \\ \swarrow \quad \searrow \\ \text{Y.YY} \times 10^x \end{array}$$

? Exercise 14.9.2

Find the pH, given $[\text{H}_3\text{O}^+]$ of the following:

- a. $5.8 \times 10^{-4} \text{ M}$
- b. 1.0×10^{-7}

Answer a

3.22

Answer b

7.00

Calculating Hydronium Concentration from pH

Sometimes you need to work "backwards"—you know the pH of a solution and need to find $[\text{H}_3\text{O}^+]$, or even the concentration of the acid solution. How do you do that? To convert pH into $[\text{H}_3\text{O}^+]$ we solve Equation 14.9.1 for $[\text{H}_3\text{O}^+]$. This involves taking the [antilog](#) (or inverse log) of the negative value of pH.

$$[\text{H}_3\text{O}^+] = \text{antilog}(-\text{pH})$$

or

$$[\text{H}_3\text{O}^+] = 10^{-\text{pH}} \quad (14.9.2)$$

As mentioned above, different calculators work slightly differently—make sure you can do the following calculations using **your** calculator.

Calculator Skills

We have a solution with a pH = 8.3. What is $[\text{H}_3\text{O}^+]$?

With some calculators you will do things in the following order:

1. Enter 8.3 as a negative number (use the key with both the +/- signs, not the subtraction key).
2. Use your calculator's 2nd or Shift or INV (inverse) key to type in the symbol found above the LOG key. The shifted function should be 10^x .

3. You should get the answer 5.0×10^{-9} .

Other calculators require you to enter keys in the order they appear in the equation.

1. Use the Shift or second function to key in the 10^x function.
2. Use the +/- key to type in a negative number, then type in 8.3.
3. You should get the answer 5.0×10^{-9} .

If neither of these methods work, try rearranging the order in which you type in the keys. Don't give up—you must master your calculator!

✓ Example 14.9.3: Calculating Hydronium Concentration from pH

Find the hydronium ion concentration in a solution with a pH of 12.6. Is this solution an acid or a base? How do you know?

Solution

Solutions to Example 14.9.3

Steps for Problem Solving	
Identify the "given" information and what the problem is asking you to "find."	Given: pH = 12.6 Find: $[\text{H}_3\text{O}^+] = ? \text{ M}$
Plan the problem.	Need to use the expression for $[\text{H}_3\text{O}^+]$ (Equation 14.9.2). $[\text{H}_3\text{O}^+] = \text{antilog}(-\text{pH})$ or $[\text{H}_3\text{O}^+] = 10^{-\text{pH}}$
Calculate.	Now substitute the known quantity into the equation and solve. $[\text{H}_3\text{O}^+] = \text{antilog}(12.60) = 2.5 \times 10^{-13} \text{ M}$ (2 significant figures since 4.7 has 12.60 2 decimal places) or $[\text{H}_3\text{O}^+] = 10^{-12.60} = 2.5 \times 10^{-13} \text{ M}$ (2 significant figures since 4.7 has 12.60 2 decimal places) The other issue that concerns us here is significant figures. Because the number(s) before the decimal point in a logarithm relate to the power on 10, the number of digits <i>after</i> the decimal point is what determines the number of significant figures in the final answer: <div style="text-align: center;"> $\begin{array}{c} \text{X.YYY} \\ \swarrow \quad \searrow \\ \text{Y.YY} \times 10^x \end{array}$ </div>

? Exercise 14.9.3

If moist soil has a pH of 7.84, what is $[\text{H}_3\text{O}^+]$ of the soil solution?

Answer

$1.5 \times 10^{-8} \text{ M}$

The pOH scale

As with the hydrogen-ion concentration, the concentration of the hydroxide ion can be expressed logarithmically by the pOH. The **pOH** of a solution is the negative logarithm of the hydroxide-ion concentration.

$$\text{pOH} = -\log [\text{OH}^-]$$

The relation between the hydronium and hydroxide ion concentrations expressed as p-functions is easily derived from the K_w expression:

$$K_w = [\text{H}_3\text{O}^+][\text{OH}^-] \quad (14.9.3)$$

$$-\log K_w = -\log([\text{H}_3\text{O}^+][\text{OH}^-]) = -\log[\text{H}_3\text{O}^+] + -\log[\text{OH}^-] \quad (14.9.4)$$

$$\text{p}K_w = \text{pH} + \text{pOH} \quad (14.9.5)$$

At 25 °C, the value of K_w is 1.0×10^{-14} , and so:

$$14.00 = \text{pH} + \text{pOH} \quad (14.9.6)$$

The hydronium ion molarity in pure water (or any neutral solution) is $1.0 \times 10^{-7} \text{ M}$ at 25 °C. The pH and pOH of a neutral solution at this temperature are therefore:

$$\text{pH} = -\log[\text{H}_3\text{O}^+] = -\log(1.0 \times 10^{-7}) = 7.00 \quad (14.9.7)$$

$$\text{pOH} = -\log[\text{OH}^-] = -\log(1.0 \times 10^{-7}) = 7.00 \quad (14.9.8)$$

And so, at this temperature, acidic solutions are those with hydronium ion molarities greater than $1.0 \times 10^{-7} \text{ M}$ and hydroxide ion molarities less than $1.0 \times 10^{-7} \text{ M}$ (corresponding to pH values less than 7.00 and pOH values greater than 7.00). Basic solutions are those with hydronium ion molarities less than $1.0 \times 10^{-7} \text{ M}$ and hydroxide ion molarities greater than $1.0 \times 10^{-7} \text{ M}$ (corresponding to pH values greater than 7.00 and pOH values less than 7.00).

✓ Example 14.9.4:

Find the pOH of a solution with a pH of 4.42.

Solution

Solutions to Example 14.9.4

Steps for Problem Solving	
Identify the "given" information and what the problem is asking you to "find."	Given: pH =4.42 Find: ? pOH
Plan the problem.	Need to use the expression $\text{pOH} = 14 - \text{pH}$
Calculate.	Now substitute the known quantity into the equation and solve. $\text{pOH} = 14 - 4.42 = 9.58$
Think about your result.	The pH is that of an acidic solution, and the resulting pOH is the difference after subtracting from 14. The answer has two significant figures because the given pH has two decimal places.

? Exercise 14.9.4

The pH of a solution is 8.22. What is the pOH?

Answer

5.78

The diagram below shows all of the interrelationships between $[\text{H}_3\text{O}^+]$, $[\text{OH}^-]$, pH, and pOH.

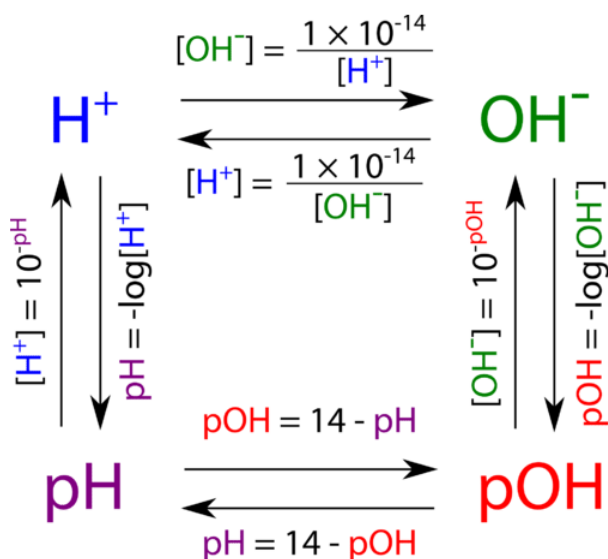


Figure 14.9.1: Relationships between hydrogen ion concentration, hydroxide ion concentration, pH and pOH.

Contributions & Attributions

- [Peggy Lawson](#) (Oxbow Prairie Heights School). Funded by Saskatchewan Educational Technology Consortium.
- [Template:OpenStax](#)

14.9: The pH and pOH Scales- Ways to Express Acidity and Basicity is shared under a [CC BY-NC-SA 4.0](#) license and was authored, remixed, and/or curated by LibreTexts.

- **14.9: The pH and pOH Scales - Ways to Express Acidity and Basicity** by Henry Agnew, Marisa Alviar-Agnew is licensed [CK-12](#). Original source: <https://www.ck12.org/c/chemistry/>.

14.10: Buffers- Solutions That Resist pH Change

Template:HideTOC

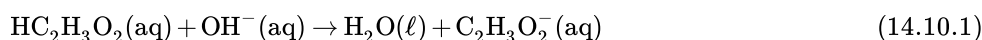
Learning Objective

- Define *buffer* and describe how it reacts with an acid or a base.

Weak acids are relatively common, even in the foods we eat. But we occasionally come across a strong acid or base, such as stomach acid, that has a strongly acidic pH of 1–2. By definition, strong acids and bases can produce a relatively large amount of hydrogen or hydroxide ions and, as a consequence, have marked chemical activity. In addition, very small amounts of strong acids and bases can change the pH of a solution very quickly. If 1 mL of stomach acid [which we will approximate as 0.05 M HCl(aq)] is added to the bloodstream, and if no correcting mechanism is present, the pH of the blood would go from about 7.4 to about 4.9—a pH that is not conducive to life. Fortunately, the body has a mechanism for minimizing such dramatic pH changes.

This mechanism involves a buffer, a solution that resists dramatic changes in pH. Buffers do so by being composed of certain pairs of solutes: either a weak acid plus a salt derived from that weak acid, or a weak base plus a salt of that weak base. For example, a buffer can be composed of dissolved acetic acid ($\text{HC}_2\text{H}_3\text{O}_2$, a weak acid) and sodium acetate ($\text{NaC}_2\text{H}_3\text{O}_2$, a salt derived from that acid). Another example of a buffer is a solution containing ammonia (NH_3 , a weak base) and ammonium chloride (NH_4Cl , a salt derived from that base).

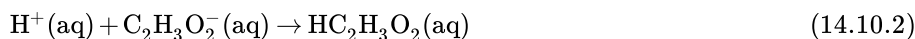
Let us use an acetic acid–sodium acetate buffer to demonstrate how buffers work. If a strong base—a source of OH^- (aq) ions—is added to the buffer solution, those hydroxide ions will react with the acetic acid in an acid-base reaction:



Rather than changing the pH dramatically by making the solution basic, the added hydroxide ions react to make water, and the pH does not change much.

Many people are aware of the concept of buffers from *buffered aspirin*, which is aspirin that also has magnesium carbonate, calcium carbonate, magnesium oxide, or some other salt. The salt acts like a base, while aspirin is itself a weak acid.

If a strong acid—a source of H^+ ions—is added to the buffer solution, the H^+ ions will react with the anion from the salt. Because $\text{HC}_2\text{H}_3\text{O}_2$ is a weak acid, it is not ionized much. This means that if lots of hydrogen ions and acetate ions (from sodium acetate) are present in the same solution, they will come together to make acetic acid:



Rather than changing the pH dramatically and making the solution acidic, the added hydrogen ions react to make molecules of a weak acid. Figure 14.10.1 illustrates both actions of a buffer.

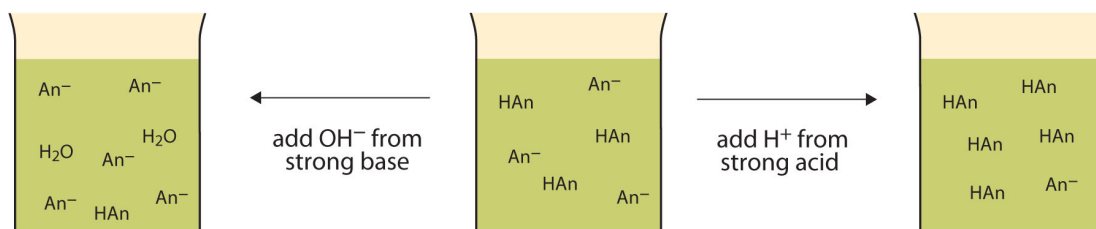
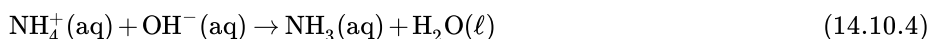


Figure 14.10.1: The Action of Buffers. Buffers can react with both strong acids (top) and strong bases (bottom) to minimize large changes in pH.

Buffers made from weak bases and salts of weak bases act similarly. For example, in a buffer containing NH_3 and NH_4Cl , ammonia molecules can react with any excess hydrogen ions introduced by strong acids:



while the **ammonium ion** (NH_4^+ (aq)) can react with any hydroxide ions introduced by strong bases:



✓ Example 14.10.1: Making Buffer Solutions

Which solute combinations can make a buffer solution? Assume that all are aqueous solutions.

- HCHO_2 and NaCHO_2
- HCl and NaCl
- CH_3NH_2 and $\text{CH}_3\text{NH}_3\text{Cl}$
- NH_3 and NaOH

Solution

- Formic acid (HCHO_2) is a weak acid, while NaCHO_2 is the salt made from the anion of the weak acid—the formate ion (CHO_2^-). The combination of these two solutes would make a buffer solution.
- Hydrochloric acid (HCl) is a strong acid, not a weak acid, so the combination of these two solutes would not make a buffer solution.
- Methylamine (CH_3NH_2) is like ammonia with one of its hydrogen atoms substituted with a CH_3 (methyl) group. Because it is not on our list of strong bases, we can assume that it is a weak base. The compound $\text{CH}_3\text{NH}_3\text{Cl}$ is a salt made from that weak base, so the combination of these two solutes would make a buffer solution.
- Ammonia (NH_3) is a weak base, but NaOH is a strong base. The combination of these two solutes would not make a buffer solution.

? Exercise 14.10.1

Which solute combinations can make a buffer solution? Assume that all are aqueous solutions.

- NaHCO_3 and NaCl
- H_3PO_4 and NaH_2PO_4
- NH_3 and $(\text{NH}_4)_3\text{PO}_4$
- NaOH and NaCl

Answer a

Yes.

Answer b

No. Need a weak acid or base and a salt of its conjugate base or acid.

Answer c

Yes.

Answer d

No. Need a weak base or acid.

Buffers work well only for limited amounts of added strong acid or base. Once either solute is all reacted, the solution is no longer a buffer, and rapid changes in pH may occur. We say that a buffer has a certain **capacity**. Buffers that have more solute dissolved in them to start with have larger capacities, as might be expected.

Human blood has a buffering system to minimize extreme changes in pH. One buffer in blood is based on the presence of HCO_3^- and H_2CO_3 [H_2CO_3 is another way to write $\text{CO}_2(\text{aq})$]. With this buffer present, even if some stomach acid were to find its way directly into the bloodstream, the change in the pH of blood would be minimal. Inside many of the body's cells, there is a buffering system based on phosphate ions.

Career Focus: Blood Bank Technology Specialist

At this point in this text, you should have the idea that the chemistry of blood is fairly complex. Because of this, people who work with blood must be specially trained to work with it properly.

A blood bank technology specialist is trained to perform routine and special tests on blood samples from blood banks or transfusion centers. This specialist measures the pH of blood, types it (according to the blood's ABO+/- type, Rh factors, and other typing schemes), tests it for the presence or absence of various diseases, and uses the blood to determine if a patient has any of several medical problems, such as anemia. A blood bank technology specialist may also interview and prepare donors to give blood and may actually collect the blood donation.

Blood bank technology specialists are well trained. Typically, they require a college degree with at least a year of special training in blood biology and chemistry. In the United States, training must conform to standards established by the American Association of Blood Banks.

Key Takeaway

- A buffer is a solution that resists sudden changes in pH.

Contributions & Attributions

14.10: Buffers- Solutions That Resist pH Change is shared under a [CC BY-NC-SA 4.0](#) license and was authored, remixed, and/or curated by LibreTexts.

- **14.10: Buffers- Solutions that Resist pH Change** by Henry Agnew, Marisa Alviar-Agnew is licensed [CK-12](#). Original source: <https://www.ck12.org/c/chemistry/>.

Index

S

significant figures

[2.4: Significant Figures in Calculations](#)

Index

S

significant figures

[2.4: Significant Figures in Calculations](#)

Glossary

Sample Word 1 | Sample Definition 1

Detailed Licensing

Overview

Title: [CHEM 114: Introductory Chemistry](#)

Webpages: 158

Applicable Restrictions: Noncommercial

All licenses found:

- [CC BY-NC-SA 4.0](#): 92.4% (146 pages)
- [Undeclared](#): 7.6% (12 pages)

By Page

- [CHEM 114: Introductory Chemistry](#) - [CC BY-NC-SA 4.0](#)
 - [Front Matter](#) - [Undeclared](#)
 - [TitlePage](#) - [Undeclared](#)
 - [InfoPage](#) - [Undeclared](#)
 - [Table of Contents](#) - [Undeclared](#)
 - [Licensing](#) - [Undeclared](#)
 - [1: The Chemical World](#) - [CC BY-NC-SA 4.0](#)
 - [1.1: The Scope of Chemistry](#) - [CC BY-NC-SA 4.0](#)
 - [1.2: Chemicals Compose Ordinary Things](#) - [CC BY-NC-SA 4.0](#)
 - [1.3: Hypothesis, Theories, and Laws](#) - [CC BY-NC-SA 4.0](#)
 - [1.4: The Scientific Method- How Chemists Think](#) - [CC BY-NC-SA 4.0](#)
 - [1.5: A Beginning Chemist- How to Succeed](#) - [CC BY-NC-SA 4.0](#)
 - [2: Measurement and Problem Solving](#) - [CC BY-NC-SA 4.0](#)
 - [2.1: Taking Measurements](#) - [CC BY-NC-SA 4.0](#)
 - [2.2: Scientific Notation- Writing Large and Small Numbers](#) - [CC BY-NC-SA 4.0](#)
 - [2.3: Significant Figures- Writing Numbers to Reflect Precision](#) - [CC BY-NC-SA 4.0](#)
 - [2.4: Significant Figures in Calculations](#) - [CC BY-NC-SA 4.0](#)
 - [2.5: The Basic Units of Measurement](#) - [CC BY-NC-SA 4.0](#)
 - [2.6: Problem Solving and Unit Conversions](#) - [CC BY-NC-SA 4.0](#)
 - [2.7: Solving Multistep Conversion Problems](#) - [CC BY-NC-SA 4.0](#)
 - [2.8: Units Raised to a Power](#) - [CC BY-NC-SA 4.0](#)
 - [2.9: Density](#) - [CC BY-NC-SA 4.0](#)
 - [2.10: Numerical Problem-Solving Strategies and the Solution Map](#) - [CC BY-NC-SA 4.0](#)
 - [2.11: Taking Measurements](#) - [CC BY-NC-SA 4.0](#)
 - [2.E: Measurement and Problem Solving \(Exercises\)](#) - [CC BY-NC-SA 4.0](#)
 - [3: Matter and Energy](#) - [CC BY-NC-SA 4.0](#)
 - [3.1: In Your Room](#) - [CC BY-NC-SA 4.0](#)
 - [3.2: What is Matter?](#) - [Undeclared](#)
 - [3.3: Classifying Matter According to Its State- Solid, Liquid, and Gas](#) - [CC BY-NC-SA 4.0](#)
 - [3.4: Classifying Matter According to Its Composition](#) - [CC BY-NC-SA 4.0](#)
 - [3.5: Differences in Matter- Physical and Chemical Properties](#) - [CC BY-NC-SA 4.0](#)
 - [3.6: Changes in Matter- Physical and Chemical Changes](#) - [CC BY-NC-SA 4.0](#)
 - [3.7: Conservation of Mass- There is No New Matter](#) - [CC BY-NC-SA 4.0](#)
 - [3.8: Energy](#) - [CC BY-NC-SA 4.0](#)
 - [3.9: Energy and Chemical and Physical Change](#) - [CC BY-NC-SA 4.0](#)
 - [3.10: Temperature- Random Motion of Molecules and Atoms](#) - [CC BY-NC-SA 4.0](#)
 - [3.11: Temperature Changes- Heat Capacity](#) - [CC BY-NC-SA 4.0](#)
 - [3.12: Energy and Heat Capacity Calculations](#) - [CC BY-NC-SA 4.0](#)
 - [3.E: Exercises](#) - [CC BY-NC-SA 4.0](#)
 - [4: Atoms and Elements](#) - [CC BY-NC-SA 4.0](#)
 - [4.1: Experiencing Atoms at Tiburon](#) - [CC BY-NC-SA 4.0](#)
 - [4.2: Indivisible- The Atomic Theory](#) - [CC BY-NC-SA 4.0](#)
 - [4.3: The Nuclear Atom](#) - [CC BY-NC-SA 4.0](#)
 - [4.4: The Properties of Protons, Neutrons, and Electrons](#) - [CC BY-NC-SA 4.0](#)
 - [4.5: Elements- Defined by Their Numbers of Protons](#) - [CC BY-NC-SA 4.0](#)
 - [4.6: Looking for Patterns- The Periodic Law and the Periodic Table](#) - [CC BY-NC-SA 4.0](#)

- 4.7: Ions- Losing and Gaining Electrons - CC BY-NC-SA 4.0
- 4.8: Isotopes- When the Number of Neutrons Varies - CC BY-NC-SA 4.0
- 4.9: Atomic Mass- The Average Mass of an Element's Atoms - CC BY-NC-SA 4.0
- 5: Molecules and Compounds - CC BY-NC-SA 4.0
 - 5.1: Sugar and Salt - CC BY-NC-SA 4.0
 - 5.2: Compounds Display Constant Composition - CC BY-NC-SA 4.0
 - 5.3: Chemical Formulas- How to Represent Compounds - CC BY-NC-SA 4.0
 - 5.4: A Molecular View of Elements and Compounds - CC BY-NC-SA 4.0
 - 5.5: Writing Formulas for Ionic Compounds - CC BY-NC-SA 4.0
 - 5.6: Nomenclature- Naming Compounds - CC BY-NC-SA 4.0
 - 5.7: Naming Ionic Compounds - CC BY-NC-SA 4.0
 - 5.8: Naming Molecular Compounds - CC BY-NC-SA 4.0
 - 5.9: Naming Acids - CC BY-NC-SA 4.0
 - 5.10: Nomenclature Summary - CC BY-NC-SA 4.0
 - 5.11: Formula Mass- The Mass of a Molecule or Formula Unit - CC BY-NC-SA 4.0
- 6: Chemical Composition - CC BY-NC-SA 4.0
 - 6.1: How Much Sodium? - *Undeclared*
 - 6.2: Counting Nails by the Pound - CC BY-NC-SA 4.0
 - 6.3: Counting Atoms by the Gram - CC BY-NC-SA 4.0
 - 6.4: Counting Molecules by the Gram - CC BY-NC-SA 4.0
 - 6.5: Chemical Formulas as Conversion Factors - CC BY-NC-SA 4.0
 - 6.6: Mass Percent Composition of Compounds - CC BY-NC-SA 4.0
 - 6.7: Mass Percent Composition from a Chemical Formula - CC BY-NC-SA 4.0
 - 6.8: Calculating Empirical Formulas for Compounds - CC BY-NC-SA 4.0
 - 6.9: Calculating Molecular Formulas for Compounds - CC BY-NC-SA 4.0
- 7: Chemical Reactions - CC BY-NC-SA 4.0
 - 7.1: Grade School Volcanoes, Automobiles, and Laundry Detergents - CC BY-NC-SA 4.0
 - 7.2: Evidence of a Chemical Reaction - CC BY-NC-SA 4.0
 - 7.3: The Chemical Equation - CC BY-NC-SA 4.0
 - 7.4: How to Write Balanced Chemical Equations - CC BY-NC-SA 4.0
 - 7.5: Aqueous Solutions and Solubility- Compounds Dissolved in Water - CC BY-NC-SA 4.0
 - 7.6: Precipitation Reactions- Reactions in Aqueous Solution That Form a Solid - CC BY-NC-SA 4.0
 - 7.7: Writing Chemical Equations for Reactions in Solution- Molecular, Complete Ionic, and Net Ionic Equations - CC BY-NC-SA 4.0
 - 7.8: Acid-Base and Gas Evolution Reactions - CC BY-NC-SA 4.0
 - 7.9: Oxidation-Reduction Reactions - CC BY-NC-SA 4.0
 - 7.10: Classifying Chemical Reactions - CC BY-NC-SA 4.0
 - 7.11: The Activity Series - CC BY-NC-SA 4.0
- 8: Quantities in Chemical Reactions - CC BY-NC-SA 4.0
 - 8.1: Climate Change- Too Much Carbon Dioxide - CC BY-NC-SA 4.0
 - 8.2: Stoichiometry - CC BY-NC-SA 4.0
 - 8.3: Making Molecules- Mole-to-Mole Conversions - CC BY-NC-SA 4.0
 - 8.4: Making Molecules- Mass-to-Mass Conversions - CC BY-NC-SA 4.0
 - 8.5: Limiting Reactant, Theoretical Yield, and Percent Yield - CC BY-NC-SA 4.0
 - 8.6: Limiting Reactant, Theoretical Yield, and Percent Yield from Initial Masses of Reactants - CC BY-NC-SA 4.0
 - 8.7: Enthalpy- A Measure of the Heat Evolved or Absorbed in a Reaction - CC BY-NC-SA 4.0
- 9: Electrons in Atoms and the Periodic Table - CC BY-NC-SA 4.0
 - 9.1: Blimps, Balloons, and Models of the Atom - CC BY-NC-SA 4.0
 - 9.2: Light- Electromagnetic Radiation - CC BY-NC-SA 4.0
 - 9.3: The Electromagnetic Spectrum - CC BY-NC-SA 4.0
 - 9.4: The Bohr Model- Atoms with Orbits - CC BY-NC-SA 4.0
 - 9.5: The Quantum-Mechanical Model- Atoms with Orbitals - CC BY-NC-SA 4.0
 - 9.6: Quantum-Mechanical Orbitals and Electron Configurations - CC BY-NC-SA 4.0
 - 9.7: Electron Configurations and the Periodic Table - CC BY-NC-SA 4.0
 - 9.8: The Explanatory Power of the Quantum-Mechanical Model - CC BY-NC-SA 4.0
 - 9.9: Periodic Trends- Atomic Size, Ionization Energy, and Metallic Character - CC BY-NC-SA 4.0
- 10: Chemical Bonding - CC BY-NC-SA 4.0

- 10.1: Bonding Models and AIDS Drugs - *CC BY-NC-SA 4.0*
- 10.2: Representing Valence Electrons with Dots - *CC BY-NC-SA 4.0*
- 10.3: Lewis Structures of Ionic Compounds- Electrons Transferred - *CC BY-NC-SA 4.0*
- 10.4: Covalent Lewis Structures- Electrons Shared - *CC BY-NC-SA 4.0*
- 10.5: Writing Lewis Structures for Covalent Compounds - *CC BY-NC-SA 4.0*
- 10.6: Resonance- Equivalent Lewis Structures for the Same Molecule - *CC BY-NC-SA 4.0*
- 10.7: Predicting the Shapes of Molecules - *CC BY-NC-SA 4.0*
- 10.8: Electronegativity and Polarity - Why Oil and Water Don't Mix - *CC BY-NC-SA 4.0*
- 11: Gases - *CC BY-NC-SA 4.0*
 - 11.1: Extra-Long Straws - *CC BY-NC-SA 4.0*
 - 11.2: Kinetic Molecular Theory- A Model for Gases - *CC BY-NC-SA 4.0*
 - 11.3: Pressure- The Result of Constant Molecular Collisions - *CC BY-NC-SA 4.0*
 - 11.4: Boyle's Law- Pressure and Volume - *CC BY-NC-SA 4.0*
 - 11.5: Charles's Law- Volume and Temperature - *CC BY-NC-SA 4.0*
 - 11.6: Gay-Lussac's Law- Temperature and Pressure - *CC BY-NC-SA 4.0*
 - 11.7: The Combined Gas Law- Pressure, Volume, and Temperature - *CC BY-NC-SA 4.0*
 - 11.8: Avogadro's Law- Volume and Moles - *CC BY-NC-SA 4.0*
 - 11.9: The Ideal Gas Law- Pressure, Volume, Temperature, and Moles - *CC BY-NC-SA 4.0*
 - 11.10: Mixtures of Gases- Why Deep-Sea Divers Breathe a Mixture of Helium and Oxygen - *CC BY-NC-SA 4.0*
 - 11.11: Gases in Chemical Reactions - *CC BY-NC-SA 4.0*
- 12: Liquids, Solids, and Intermolecular Forces - *CC BY-NC-SA 4.0*
 - 12.1: Interactions between Molecules - *CC BY-NC-SA 4.0*
 - 12.2: Properties of Liquids and Solids - *CC BY-NC-SA 4.0*
 - 12.3: Intermolecular Forces in Action- Surface Tension and Viscosity - *CC BY-NC-SA 4.0*
 - 12.4: Evaporation and Condensation - *CC BY-NC-SA 4.0*
 - 12.5: Melting, Freezing, and Sublimation - *CC BY-NC-SA 4.0*
 - 12.6: Types of Intermolecular Forces- Dispersion, Dipole–Dipole, Hydrogen Bonding, and Ion–Dipole - *CC BY-NC-SA 4.0*
 - 12.7: Types of Crystalline Solids- Molecular, Ionic, and Atomic - *CC BY-NC-SA 4.0*
 - 12.8: Water- A Remarkable Molecule - *CC BY-NC-SA 4.0*
- 13: Solutions - *CC BY-NC-SA 4.0*
 - 13.1: Prelude - Tragedy in Cameroon - *CC BY-NC-SA 4.0*
 - 13.2: Solutions- Homogeneous Mixtures - *CC BY-NC-SA 4.0*
 - 13.3: Solutions of Solids Dissolved in Water- How to Make Rock Candy - *CC BY-NC-SA 4.0*
 - 13.4: Solutions of Gases in Water- How Soda Pop Gets Its Fizz - *CC BY-NC-SA 4.0*
 - 13.5: Solution Concentration- Mass Percent - *CC BY-NC-SA 4.0*
 - 13.6: Solution Concentration- Molarity - *CC BY-NC-SA 4.0*
 - 13.7: Solution Dilution - *CC BY-NC-SA 4.0*
 - 13.8: Solution Stoichiometry - *CC BY-NC-SA 4.0*
 - 13.9: Freezing Point Depression and Boiling Point Elevation- Making Water Freeze Colder and Boil Hotter - *CC BY-NC-SA 4.0*
 - 13.10: Osmosis- Why Drinking Salt Water Causes Dehydration - *CC BY-NC-SA 4.0*
- 14: Acids and Bases - *CC BY-NC-SA 4.0*
 - 14.1: Sour Patch Kids and International Spy Movies - *CC BY-NC-SA 4.0*
 - 14.2: Acids- Properties and Examples - *CC BY-NC-SA 4.0*
 - 14.3: Bases- Properties and Examples - *CC BY-NC-SA 4.0*
 - 14.4: Molecular Definitions of Acids and Bases - *CC BY-NC-SA 4.0*
 - 14.5: Reactions of Acids and Bases - *CC BY-NC-SA 4.0*
 - 14.6: Acid–Base Titration- A Way to Quantify the Amount of Acid or Base in a Solution - *CC BY-NC-SA 4.0*
 - 14.7: Strong and Weak Acids and Bases - *CC BY-NC-SA 4.0*
 - 14.8: Water- Acid and Base in One - *CC BY-NC-SA 4.0*
 - 14.9: The pH and pOH Scales- Ways to Express Acidity and Basicity - *CC BY-NC-SA 4.0*
 - 14.10: Buffers- Solutions That Resist pH Change - *CC BY-NC-SA 4.0*
- Back Matter - *Undeclared*
 - Index - *Undeclared*

- [Index](#) - *Undeclared*
- [Glossary](#) - *Undeclared*
- [Detailed Licensing](#) - *Undeclared*