

Mostly Harmless Statistics (Webb)

This text is disseminated via the Open Education Resource (OER) LibreTexts Project (<https://LibreTexts.org>) and like the hundreds of other texts available within this powerful platform, it is freely available for reading, printing and "consuming." Most, but not all, pages in the library have licenses that may allow individuals to make changes, save, and print this book. Carefully consult the applicable license(s) before pursuing such effects.

Instructors can adopt existing LibreTexts texts or Remix them to quickly build course-specific resources to meet the needs of their students. Unlike traditional textbooks, LibreTexts' web based origins allow powerful integration of advanced features and new technologies to support learning.



The LibreTexts mission is to unite students, faculty and scholars in a cooperative effort to develop an easy-to-use online platform for the construction, customization, and dissemination of OER content to reduce the burdens of unreasonable textbook costs to our students and society. The LibreTexts project is a multi-institutional collaborative venture to develop the next generation of open-access texts to improve postsecondary education at all levels of higher learning by developing an Open Access Resource environment. The project currently consists of 14 independently operating and interconnected libraries that are constantly being optimized by students, faculty, and outside experts to supplant conventional paper-based books. These free textbook alternatives are organized within a central environment that is both vertically (from advance to basic level) and horizontally (across different fields) integrated.

The LibreTexts libraries are Powered by [NICE CXOne](#) and are supported by the Department of Education Open Textbook Pilot Project, the UC Davis Office of the Provost, the UC Davis Library, the California State University Affordable Learning Solutions Program, and Merlot. This material is based upon work supported by the National Science Foundation under Grant No. 1246120, 1525057, and 1413739.

Any opinions, findings, and conclusions or recommendations expressed in this material are those of the author(s) and do not necessarily reflect the views of the National Science Foundation nor the US Department of Education.

Have questions or comments? For information about adoptions or adaptations contact info@LibreTexts.org. More information on our activities can be found via Facebook (<https://facebook.com/Libretexts>), Twitter (<https://twitter.com/libretexts>), or our blog (<http://Blog.Libretexts.org>).

This text was compiled on 03/18/2025

TABLE OF CONTENTS

Licensing

1: Introduction to Data

- 1.1: Introduction
- 1.2: Samples vs. Populations
- 1.3: Collecting Data and Sampling Techniques
- 1.4: Chapter 1 Exercises

2: Organizing Data

- 2.1: Introduction
- 2.2: Tabular Displays
- 2.3: Graphical Displays
- 2.4: Chapter 2 Exercises

3: Descriptive Statistics

- 3.1: Measures of Center
- 3.2: Measures of Spread
- 3.3: Measures of Placement
- 3.4: Chapter 3 Formulas
- 3.5: Chapter 3 Exercises

4: Probability

- 4.1: Introduction
- 4.2: Three Types of Probability
- 4.3: Complement Rule
- 4.4: Union and Intersection
- 4.5: Independent Events
- 4.6: Conditional Probability
- 4.7: Counting Rules
- 4.8: Chapter 4 Formulas
- 4.9: Chapter 4 Exercises

5: Discrete Probability Distributions

- 5.1: Introduction
- 5.2: Discrete Probability Distributions
- 5.3: Geometric Distributions
- 5.4: Binomial Distribution
- 5.5: Hypergeometric Distribution
- 5.6: Poisson Distribution
- 5.7: Chapter 5 Exercises
- 5.8: Chapter 5 Formulas

6: Continuous Probability Distributions

- 6.1: Introductions
- 6.2: Uniform Distribution

- 6.3: Exponential Distribution
- 6.4: Normal Distribution
- 6.5: The Central Limit Theorem
- 6.6: Chapter 6 Exercises
- 6.7: Chapter 6 Formulas

7: Confidence Intervals for One Population

- 7.1: Introduction
- 7.2: Confidence Interval for a Proportion
- 7.3: Sample Size Calculation for a Proportion
- 7.4: Z-Interval for a Mean
- 7.5: Interpreting a Confidence Interval
- 7.6: Sample Size for a Mean
- 7.7: t-Interval for a Mean
- 7.8: Chapter 7 Exercises
- 7.9: Chapter 7 Formulas

8: Hypothesis Tests for One Population

- 8.1: Introduction
- 8.2: Type I and II Errors
- 8.3: Hypothesis Test for One Mean
- 8.4: Hypothesis Test for One Proportion
- 8.5: Chapter 8 Exercises
- 8.6: Chapter 8 Formulas

9: Hypothesis Tests and Confidence Intervals for Two Populations

- 9.1: Two Sample Mean T-Test for Dependent Groups
- 9.2: Two Independent Groups
- 9.3: Two Proportion Z-Test and Confidence Interval
- 9.4: Two Variance or Standard Deviation F-Test
- 9.5: Chapter 9 Exercises
- 9.6: Chapter 9 Formulas

10: Chi-Square Tests

- 10.1: Chi-Square Distribution
- 10.2: Goodness of Fit Test
- 10.3: Test for Independence
- 10.4: Chapter 10 Formulas
- 10.5: Chapter 10 Exercises

11: Analysis of Variance

- 11.1: One-Way ANOVA
- 11.2: Pairwise Comparisons of Means (Post-Hoc Tests)
- 11.3: Two-Way ANOVA (Factorial Design)
- 11.4: Chapter 11 Formulas
- 11.5: Chapter 11 Exercises

12: Correlation and Regression

- 12.1: Correlation
 - 12.1.1: Scatterplots
 - 12.1.2: Hypothesis Test for a Correlation
- 12.2: Simple Linear Regression
 - 12.2.1: Hypothesis Test for Linear Regression
 - 12.2.2: Residuals
 - 12.2.3: Coefficient of Determination
 - 12.2.4: Prediction
 - 12.2.5: Outliers
 - 12.2.6: Conclusion - Simple Linear Regression
- 12.3: Multiple Linear Regression
- 12.4: Chapter 12 Formulas
- 12.5: Chapter 12 Exercises

13: Nonparametric Tests

- 13.1: Advantages and Disadvantages of Nonparametric Methods
- 13.2: Sign Test
- 13.3: Ranking Data
- 13.4: Wilcoxon Signed-Rank Test
- 13.5: Mann-Whitney U Test
- 13.6: Chapter 13 Formulas
- 13.7: Chapter 13 Exercises

[Index](#)

[Glossary](#)

[Data Sources and References](#)

[Greek Letter Pronunciations](#)

[Mostly Harmless Statistics Formula Packet](#)

[Symbols](#)

[Detailed Licensing](#)

Licensing

A detailed breakdown of this resource's licensing can be found in [Back Matter/Detailed Licensing](#).

CHAPTER OVERVIEW

1: Introduction to Data

[1.1: Introduction](#)

[1.2: Samples vs. Populations](#)

[1.3: Collecting Data and Sampling Techniques](#)

[1.4: Chapter 1 Exercises](#)

This page titled [1: Introduction to Data](#) is shared under a [CC BY-SA 4.0](#) license and was authored, remixed, and/or curated by [Rachel Webb](#) via [source content](#) that was edited to the style and standards of the LibreTexts platform.

1.1: Introduction

Scientists seek to answer questions using rigorous methods and careful observations. These observations - collected from the likes of field notes, surveys, and experiments - form the backbone of a statistical investigation and are called data. Statistics is the study of how best to collect, analyze, and draw conclusions from data. It is helpful to put statistics in the context of a general process of investigation:

1. Identify a question or problem.
2. Collect relevant data on the topic.
3. Analyze the data.
4. Form a conclusion.

Statistics as a subject focuses on making stages 2-4 objective, rigorous, and efficient. That is, statistics has three primary components: How best can we collect data? How should the data be analyzed? What can we infer from the analysis?

The topics scientists investigate are as diverse as the questions they ask. However, many of these investigations can be addressed with a small number of data collection techniques, analytic tools, and fundamental concepts in statistical inference.

You are exposed to statistics regularly. If you are a sports fan, then you have the statistics for your favorite player. If you are interested in politics, then you look at the polls to see how people feel about certain issues or candidates. If you are an environmentalist, then you research arsenic levels in the water of a town or analyze the global temperatures. If you are in the business profession, then you may track the monthly sales of a store or use quality control processes to monitor the number of defective parts manufactured. If you are in the health profession, then you may look at how successful a procedure is or the percentage of people infected with a disease. There are many other examples from other areas.

“There are of course many problems connected with life, of which some of the most popular are: Why are people born? Why do they die? Why do they want to spend so much time wearing digital watches?” (Adams, 2002)

To understand how to collect and analyze data, you need to understand what the field of statistics is. Many of the words defined throughout this course have common definitions that are also used in non-statistical terminology. In statistics, some of these terms have slightly different definitions. It is important that you notice the difference and utilize the statistical definitions.

Statistics is the study of how to collect, organize, analyze, and interpret data collected from a group

There are two main branches of statistics. One is called **descriptive statistics**, which is where you collect, organize and describe data. The other branch is called **inferential statistics**, which is where you interpret data. First, you need to look at descriptive statistics since you will use the descriptive statistics when making inferences. In order to use inferential statistics, we will briefly touch on a completely new topic called **Probability**. Once we get some background in probability combined with your knowledge of descriptive statistics, we will move into Inferential Statistics.

This page titled [1.1: Introduction](#) is shared under a [CC BY-SA 4.0](#) license and was authored, remixed, and/or curated by [Rachel Webb](#) via [source content](#) that was edited to the style and standards of the LibreTexts platform.

1.2: Samples vs. Populations

The first thing to decide in a statistical study is whom you want to measure and what you want to measure. You always want to make sure that you can answer the question of whom you measured and what you measured. The “who” is known as the individual and the “what” is known as the variable.

Individual – a person, case or object that you are interested in finding out information about.

Variable (also known as a random variable) – the measurement or observation of the individual.

Population – is the total set of all the observations that are the subject of a study.

Notice, the population answers “who” you want to measure and the variable answers “what” you want to measure. Make sure that you always answer both of these questions or you have not given the audience reading your study the entire picture. As an example, if you just say that you are going to collect data from the senators in the United States Congress, you have not told your reader what you are going to collect. Do you want to know their income, their highest degree earned, their voting record, their age, their political party, their gender, their marital status, or how they feel about a particular issue? Without telling “what” you want to measure, your reader has no idea what your study is actually about.

Sometimes the population is very easy to collect. If you are interested in finding the average age of all of the current senators in the United States Congress, there are only 100 senators. This would not be hard to find. However, if instead you were interested in knowing the average age that a senator in the United States Congress first took office for all senators that ever served in the United States Congress, then this would be a bit more work. It is still doable, but it would take a bit of time to collect. However, what if you are interested in finding the average diameter at breast height of all Ponderosa Pine trees in the Coconino National Forest? This data would be impossible to collect. What do you do in these cases? Instead of collecting the entire population, you take a smaller group of the population, a snapshot of the population. This smaller group, called a sample, is a subset of the population, see Figure 1-1.



Figure 1-1

Sample – a subset from the population.

Consider the following three research questions:

1. What is the average mercury content in albacore tuna in the Pacific Ocean?
2. Over the last 5 years, what is the average time to complete a degree for Portland State University undergraduate students?
3. Does a new drug reduce the number of deaths in patients with severe heart disease?

Each research question refers to a target population. In the first question, the target population is all albacore tuna in the Pacific Ocean, and each fish represents a case.

A sample represents a subset of the cases and is often a small fraction of the population. For instance, 60 albacore tuna in the population might be selected and the mercury level is measured in each fish. The sample average of the 60 fish may then be used to provide an estimate of the population average of all the fish and answer the research question.

We use the lower-case n to represent the number of cases in the sample and the upper-case N to represent the number of cases in the population.

n = sample size.

N = population size.

How the sample is collected can determine the accuracy of the results of your study. There are many ways to collect samples. No sampling method is perfect, but some methods are better than other methods. Sampling techniques will be discussed in more detail later.

For now, realize that every time you take a sample you will find different data values. The sample is a snapshot of the population, and there is more information than is in this small picture. The idea is to try to collect a sample that gives you an accurate picture, but you will never know for sure if your picture is the correct picture. Unlike previous mathematics classes, where there was always one right answer, in statistics there can be many answers, and you do not know which are right.

The sample average in this case is the statistic, and the population average is the parameter. We use sample statistics to make inferences, educated guesses made by observation, about the population parameter.

Once you have your data, either from a population or from a sample, you need to know how you want to summarize the data.

As an example, suppose you are interested in finding the proportion of people who like a candidate, the average height a plant grows to using a new fertilizer, or the variability of the test scores. Understanding how you want to summarize the data helps to determine the type of data you want to collect. Since the population is what we are interested in, then you want to calculate a number from the population. This is known as a parameter.

Parameter – An unknown quantity from the population. Usually denoted with a Greek letter (for example μ “mu”). This number is a fixed, unknown number that we want to estimate.

As mentioned already, it is hard to collect the entire population. Even though this is the number you are interested in, you cannot really calculate it. Instead, you use the number calculated from the sample, called a statistic, to estimate the parameter.

Statistic – a number calculated from the sample. Usually denoted with a $\hat{}$ (called a hat, for example \hat{p} “p-hat”) or a $-$ (called a bar, for example \bar{x} “x-bar”) above the letter.

Since most samples are not exactly the same, the statistic values are going to be different from sample to sample. Statistics estimate the value of the parameter, but again, you do not know for sure if your statistic is correctly estimating the parameter.

This page titled [1.2: Samples vs. Populations](#) is shared under a [CC BY-SA 4.0](#) license and was authored, remixed, and/or curated by [Rachel Webb](#) via [source content](#) that was edited to the style and standards of the LibreTexts platform.

1.3: Collecting Data and Sampling Techniques

Qualitative vs. Quantitative

Variables can be either quantitative or qualitative. Quantitative variables are numeric values that count or measure an individual. Qualitative variables are words or categories used to describe a quality of an individual. Qualitative variables are also called categorical variables and can sometimes have numeric responses that represent a category or word.

Qualitative or categorical variable – answer is a word or name that describes a quality of the individual.

Quantitative or numerical variable – answer is a number (quantity), something that can be counted or measured from the individual.

Each type of variable has different graphs, parameters and statistics that you find. Quantitative variables usually have a number line associated with graphical displays. Qualitative variables usually have a category name associated with graphical displays.

Examples of quantitative variables are number of people per household, age, height, weight, time (usually things we can count or measure). Examples of qualitative variables are eye color, gender, sports team, yes/no (usually things that we can name).

When setting up survey questions it is important to know what statistical questions you would like the data to answer. For example, a company is trying to target the best age group to market a new game. They put out a survey with the ordinal age groupings: baby, toddler, adolescent, teenager, adult, and elderly. We could narrow down a range of ages for, say, teenagers to 13-19, although many 19-year-olds may record their response as an adult. The company wants to run an ad for the new game on television and they realize that 13-year-olds do not watch the same shows nor in the same time slots as 19-year-olds. To narrow down the age range the survey question could have just asked the person's age. Then the company could look at a graph or average to decide more specifically that 17-year-olds would be the best target audience.

Types of Measurement Scales

There are four types of data measurement scales: nominal, ordinal, interval and ratio.

Nominal data is categorical data that has no order or rank, for example the color of your car, ethnicity, race, or gender.

Ordinal data is categorical data that has a natural order to it, for example, year in school (freshman, sophomore, junior, senior), a letter grade (A, B, C, D, F), the size of a soft drink (small, medium, large) or Likert scales. A Likert scale is a numeric scale that indicates the extent to which they agree or disagree with a series of statements. Interval data is numeric where there is a known difference between values, but zero does not mean “nothing.”

Interval data is ordinal, but you can now subtract one value from another and that subtraction makes sense. You can do arithmetic on this data. For example, Fahrenheit temperature, 0° is cold but it does not mean that no temperature exists. Time, dates and IQ scores are other examples.

Ratio data is numeric data that has a true zero, meaning when the variable is zero nothing is there. Most measurement data are ratio data. Some examples are height, weight, age, distance, or time running a race.

Here are some ways to help you decide if the data are nominal, ordinal, interval, or ratio. First, if the variable is words instead of numbers then it is either nominal or ordinal data. Now ask yourself if you can put the data in a particular order. If you can order the names then this is ordinal data. Otherwise, it is nominal data. If the variable is numbers (not including words coded as numbers like Yes = 1 and No = 0), then it is either interval or ratio data. For ratio data, a value of zero means there is no measurement. This is known as the absolute zero. If there is an absolute zero in the data, then it means it is ratio. If there is no absolute zero, then the data are interval. An example of an absolute zero is if you have \$0 in your bank account, then you are without money. The amount of money in your bank account is ratio data. Word of caution, sometimes ordinal data is displayed using numbers, such as 5 being strongly agree, and 1 being strongly disagree. These numbers are not really numbers. Instead, they are used to assign numerical values to ordinal data. In reality, you should not perform any computations on this data, though many people do. If there are numbers, make sure the numbers are inherent numbers, and not numbers that were randomly assigned.

Likert scales are frequently misused as quantitative data. A Likert scale is a numeric scale that indicates the extent to which they agree or disagree with a series of statements. For example, if we look at the following 5-point Likert Scale:

1. Strongly disagree
2. Disagree
3. Neither agree nor disagree
4. Agree
5. Strongly agree

Nominal and ordinal data are qualitative, while interval and ratio data are quantitative.

Likert scales are ordinal in that one can easily see that the larger number corresponds to a higher level of agreeableness. Some people argue that since there is a one-unit difference between the numeric values Likert scales should be interval data. However, the number 1 is just a placeholder for someone that strongly disagrees. There is no way to quantify a one-unit difference between two different subjects that answered 1 or 2 on the scale. For example, one person's response for strongly disagree could stem from the exact same reasoning behind another person's response of disagree. People view subjects at different intensities that is not quantifiable.

Discrete vs. Continuous

Quantitative variables are discrete or continuous. This difference will be important later on when we are working with probability. Discrete variables have gaps between points that are countable, usually integers like the number of cars in a parking garage or how many people per household. A continuous variable can take on any value and is measurable, like height, time running a race, distance between two buildings. Usually, just asking yourself if you can count the variable then it is discrete and if you can measure the variable then it is continuous. If you can actually count the number of outcomes (even if you are counting to infinity), then the variable is discrete.

Discrete variables can only take on particular values like integers.

Discrete variables have outcomes you can count.

Continuous variables can take on any value.

Continuous variables have outcomes you can measure.

For example, think of someone's age. They may report in a survey an integer value like 28 years-old. The person is not exactly 28 years-old though. From the time of their birth to the point in time that the survey respondent recorded, their age is a measurable number in some unit of time. A person's true age has a decimal place that can keep going as far as the best clock can measure time. It is more convenient to round our age to an integer rather than 28 years 5 months, 8 days, 14 hours, 12 minutes, 27 seconds, 5 milliseconds or as a decimal 28.440206335775. Therefore, age is continuous.

However, a continuous variable like age could be broken into discrete bins, for example, instead of the question asking for a numeric response for a person's age they could have had discrete age ranges where the survey respondent just checks a box.

1. Under 18
2. 18-24
3. 25-35
4. 36-45
5. 46-62
6. Over 62

When a survey question takes a continuous variable and chunks it into discrete categories, especially categories with different widths, you limit what type of statistics you can do on that data.

Figure 1-2 is a breakdown of the different variable and data types.

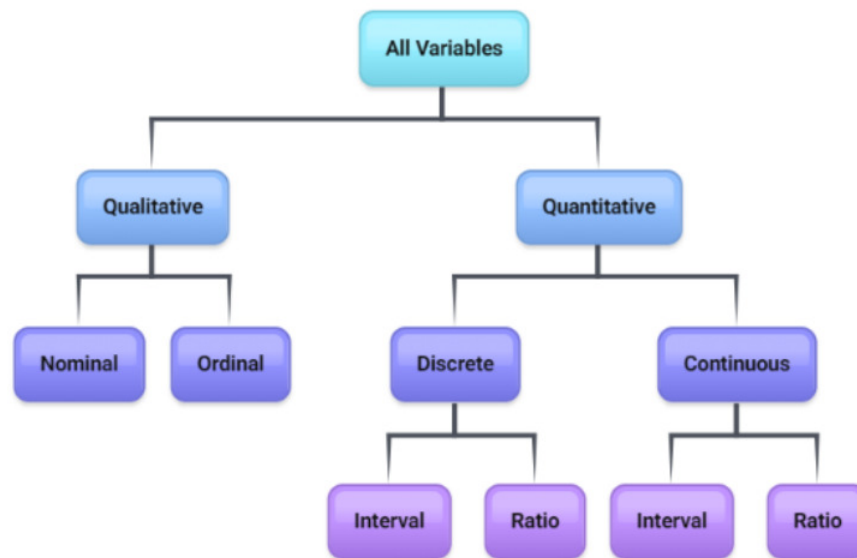


Figure 1-2

Types of Sampling

If you want to know something about a population, it is often impossible or impractical to examine the entire population. It might be too expensive in terms of time or money to survey the population. It might be impractical: you cannot test all batteries for their length of lifetime because there would not be any batteries left to sell.

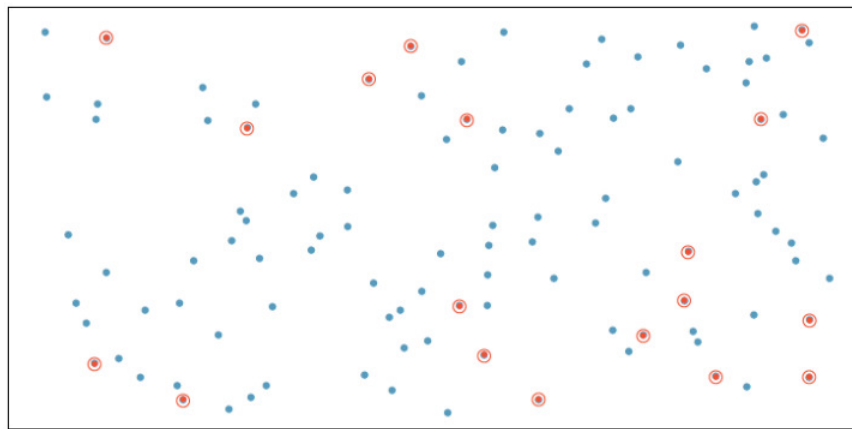
When you choose a sample, you want it to be as similar to the population as possible. If you want to test a new painkiller for adults, you would want the sample to include people of different weights, age, etc. so that the sample would represent all the demographics of the population that would potentially take the painkiller. The more similar the sample is to the population, the better our statistical estimates will be in predicting the population parameters.

There are many ways to collect a sample. No sampling technique is perfect, and there is no guarantee that you will collect a representative sample. That is unfortunately the limitation of sampling. However, several techniques can result in samples that give you a semi-accurate picture of the population. Just remember to be aware that the sample may not be representative of the whole population. As an example, you can take a random sample of a group of people that are equally distributed across all income groups, yet by chance, everyone you choose is only in the high-income group. If this happens, it may be a good idea to collect a new sample if you have the time and money.

When setting up a study there are different ways to sample the population of interest. The five main sampling techniques are:

1. Simple Random Sample
2. Systematic Sample
3. Stratified Sample
4. Cluster Sample
5. Convenience Sample

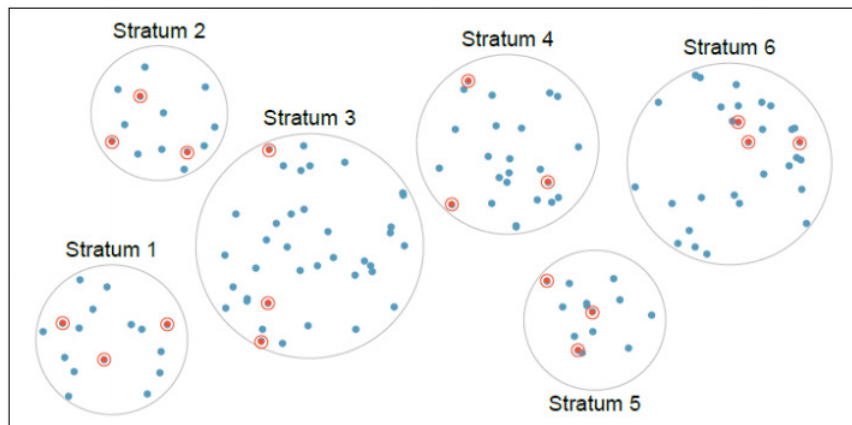
A **simple random sample** (SRS) means selecting a sample size of n objects from the population so that every sample of the same size n has equal probability of being selected as every other possible sample of the same size from that population. For example, we have a database of all PSU student data and we use a random number generator to randomly select students to receive a questionnaire on the type of transportation they use to get to school. See Figure 1-3. Simple random sampling was used to randomly select the 18 cases.



Retrieved from [OpenIntroStatistics](https://openintrostatistics.org/).

Figure 1-3

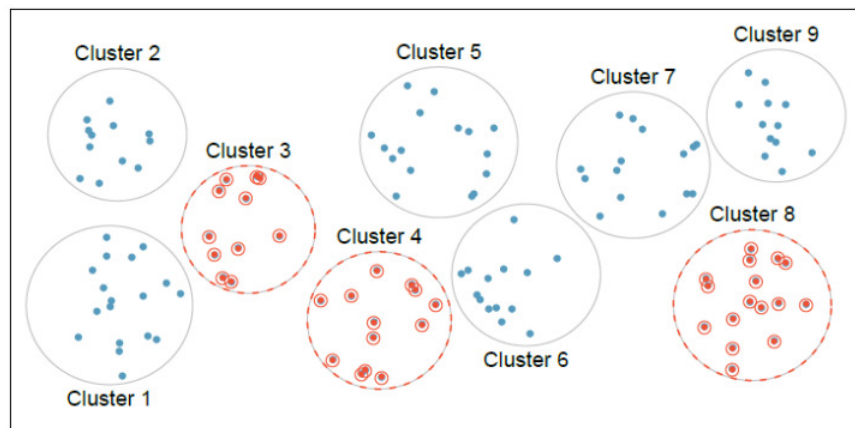
A **stratified sample** is where the population is split into groups called strata, then a random sample is taken from each stratum. For instance, we divide Portland by ZIP code and then randomly select n registered voters out of each ZIP code. See Figure 1-4. Cases were grouped into strata, then simple random sampling was employed within each stratum.



Retrieved from [OpenIntroStatistics](https://openintrostatistics.org/).

Figure 1-4

A **cluster sample** is where the population is split up into groups called clusters, then one or more clusters are randomly selected and all individuals in the chosen clusters are sampled. Similar to the previous example, we split Portland up by ZIP code, randomly pick 5 ZIP codes and then sample every registered voter in those 5 ZIP codes. See Figure 1-5. Data were binned into nine clusters, three of these clusters were sampled, and all observations within these three clusters were included in the sample.



Retrieved from [OpenIntroStatistics](https://openintrostatistics.org/).

Figure 1-5

A **systematic sample** is where we list the entire population, then randomly pick a starting point at the n^{th} object, and then take every n^{th} value until the sample size is reached. For example, we alphabetize every PSU student, randomly choose the number 7. We would sample the 7th, 14th, 21st, 28th, 35th, etc. student.

A **convenience sample** is picking a sample that is conveniently at hand. For example, asking other students in your statistics course or using social media to take your survey. Most convenience samples will give biased views and are not encouraged.

There are many more types of sampling, snowball, multistage, voluntary, purposive, and quota sampling to name some of the ways to sample from a population. We can also combine the different sampling methods. For example, we could stratify by rural, suburban and urban school districts, then take 3rd grade classrooms as clusters.

Guidelines for planning a statistical study

1. Identify the individuals that you are interested in studying. Realize that you can only make conclusions for these individuals. As an example, if you use a fertilizer on a certain genus of plant, you cannot say how the fertilizer will work on any other types of plants. However, if you diversify too much, then you may not be able to tell if there really is an improvement since you have too many factors to consider.
2. Specify the variable. You want to make sure the variable is something that you can measure, and make sure that you control for all other factors too. For example, if you are trying to determine if a fertilizer works by measuring the height of the plants on a particular day, you need to make sure you can control how much fertilizer you put on the plants (which is what we call a treatment), and make sure that all the plants receive the same amount of sunlight, water, and temperature.
3. Specify the population. This is important in order for you to know for whom and what conclusions you can make.
4. Specify the method for taking measurements or making observations.
5. Determine if you are taking a census or sample. If taking a sample, decide on the sampling method.
6. Collect the data.
7. Use appropriate descriptive statistics methods and make decisions using appropriate inferential statistics methods.
8. Note any concerns you might have about your data collection methods and list any recommendations for future.

Observational vs. Experimental

The section is an introduction to experimental design. This is a brief introduction on how to design an experiment or a survey so that they are statistically sound. Experimental design is a very involved process, so this is just a small overview.

There are two types of studies:

1. An **observational study** is when the investigator collects data by observing, measuring, counting, watching or asking questions. The investigator does not change anything.
2. An **experiment** is when the investigator changes a variable or imposes a treatment to determine its effect.

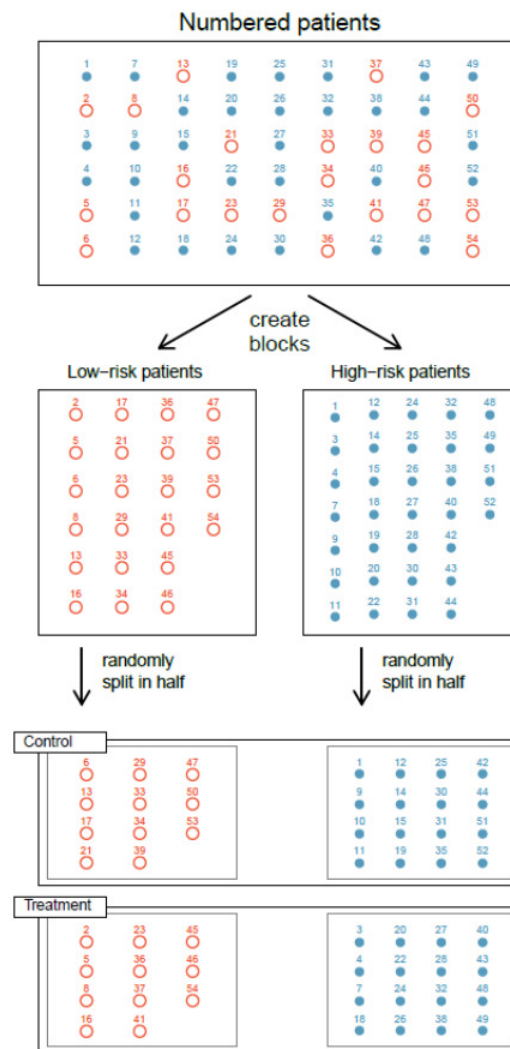
For instance, if you were to poll students to see if they favor increasing tuition, this would be an observational study since you are asking a question and getting data. Give a patient a medication that lowers their blood pressure. This is an experiment since you are giving the treatment and then getting the data.

Many observational studies involve surveys. A **survey** uses questions to collect the data and needs to be written so that there is no bias.

Bias is the tendency of a statistic to incorrectly estimate a parameter. There are many ways bias can seep into statistics. Sometimes we don't ask the correct question, give enough options for answers, survey the wrong people, misinterpret data, sampling or measurement errors, or unrepresentative samples.

In an experiment, there are different options to assign treatments.

1. **Completely Randomized Experiment:** In this experiment, the individuals are randomly placed into two or more groups. One group gets either no treatment or a placebo (a fake treatment); this group is called the control group. The groups getting the treatment are called the treatment groups. The idea of the placebo is that a person thinks they are receiving a treatment, but in reality, they are receiving a sugar pill or fake treatment. Doing this helps to account for the placebo effect, which is where a person's mind makes their body respond to a treatment because they think they are taking the treatment when they are not really taking the treatment. Note, not every experiment needs a placebo, such as when using animals or plants. In addition, you cannot always use a placebo or no treatment. For example, if you are testing a new Ebola vaccination you cannot give a person with the disease a placebo or no treatment because of ethical reasons.
2. **Matched Pairs Design:** This is a subset of the randomized block design where the treatments are given to two groups that can be matched up with each other in some way. One example would be to measure the effectiveness of a muscle relaxer cream on the right arm and the left arm of individuals, and then for each individual you can match up their right arm measurement with their left arm. Another example of this would be before and after experiments, such as weight of a person before and weight after a diet.
3. **Randomized Block Design:** A block is a group of subjects that are considered similar or the same subject measured multiple times, but the blocks differ from each other. Then randomly assign treatments to subjects inside each block. For instance, a company has several new stitching methods for a soccer ball and would like to pick the ball that travels the fastest. We would expect variation in different soccer player's abilities which we do not want affect our results. We randomly choose players to kick each of the new types of balls where the order of the ball design is also randomized. Figure 1-6 shows blocking using a variable depicting patient risk. Patients are first divided into low-risk and high-risk blocks, then each block is evenly separated into the treatment groups using randomization. This strategy ensures an equal representation of patients in each treatment group from both the low-risk and high-risk categories.
4. **Factorial Design:** This design has two or more independent categorical variables called factors. Each factor has two or more different treatment levels. The factorial design allows the researcher to test the effect of the different factors simultaneously on the dependent variable. For example, an educator believes that both the time of day (morning, afternoon, evening) and the way an exam is delivered (multiple-choice paper, short answer paper, multiplechoice electronic, short answer electronic) affects a student's grade on their exam.



Retrieved from [OpenIntroStatistics](https://openintrostatistics.org/).

Figure 1-6

No matter which experiment type you conduct, you should also consider the following:

Replication: repetition of an experiment on more than one subject so you can make sure that the sample is large enough to distinguish true effects from random effects. It is also the ability for someone else to duplicate the results of the experiment.

Blind study is where the individual does not know which treatment they are getting or if they are getting the treatment or a placebo.

Double-blind study is where neither the individual nor the researcher knows who is getting the treatment and who is getting the placebo. This is important so that there can be no bias in the results created by either the individual or the researcher.

One last consideration is the time-period that you are collecting the data. There are different time-periods that you can consider.

Cross-sectional study: observational data collected at a single point in time.

Retrospective study: observational data collected from the past using records, interviews, and other similar artifacts.

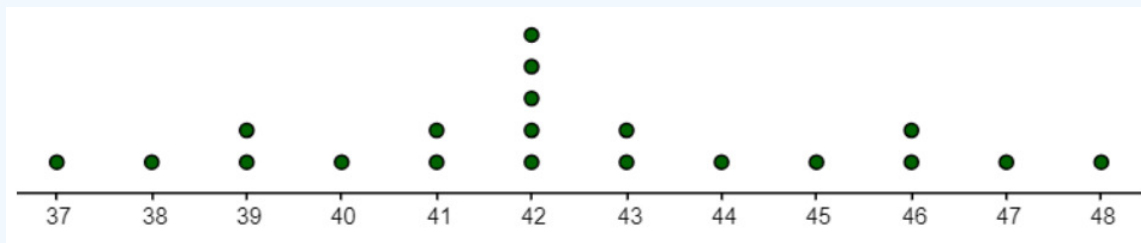
Prospective (or longitudinal or cohort) study: Subjects are measured from a starting point over time for the occurrence of the condition of interest.

This page titled [1.3: Collecting Data and Sampling Techniques](#) is shared under a [CC BY-SA 4.0](#) license and was authored, remixed, and/or curated by [Rachel Webb](#) via [source content](#) that was edited to the style and standards of the LibreTexts platform.

1.4: Chapter 1 Exercises

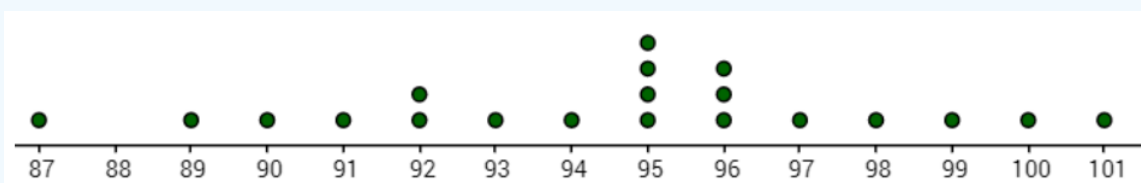
? Chapter 1 Exercises

1. The dotplot shows the height of some 5-year-old children measured in inches. Use the distribution of heights to find the approximate answer to the question, “How many inches tall are 5-year-olds?”



“‘Alright,’ he said, ‘but where do we start? How should I know? They say the Ultimate Answer or whatever is Forty-two, how am I supposed to know what the question is? It could be anything. I mean, what’s six times seven?’ Zaphod looked at him hard for a moment. Then his eyes blazed with excitement. ‘Forty-two!’ he cried.”
(Adams, 2002)

2. The dotplot shows the height of some 3-year-old children measured in cm. You are asked, “How many cm tall are 3-year-olds?”



- Is this a statistical question?
 - Use the distribution of heights to approximate the answer for the question, “How many cm tall are 3-year-olds?”
3. What are statistics?
- A question with a variety of answers.
 - A way to measure the entire population.
 - The science of collecting, organizing, analyzing and interpreting data.
 - A question from a survey.
4. What is a statistical question?
- A question where you expect to get a variety of answers and you are interested in the distribution and tendency of those answers.
 - A question using reported statistics.
 - A question on a survey.
 - A question on a census.
5. Which of the following are statistical questions? Select all that apply.
- How old are you?
 - What is the weight of a mouse?
 - How tall are all 3-year-olds?
 - How tall are you?
 - What is the average blood pressure of adult men?

6. In 2010, the Pew Research Center questioned 1,500 adults in the United States to estimate the proportion of the population favoring marijuana use for medical purposes. It was found that 73% are in favor of using marijuana for medical purposes. Identify the individual, variable, population, sample, parameter and statistic.

- Percentage who favor marijuana for medical purposes calculated from sample.
- Set of 1,500 responses of United States adults who are questioned.
- All adults in the United States.
- Percentage who favor marijuana for medical purposes calculated from population.
- The response to the question “should marijuana be used for medical purposes?”
- An adult in the United States.

7. Suppose you want to estimate the percentage of videos on YouTube that are cat videos. It is impossible for you to watch all videos on YouTube so you use a random video picker to select 1,000 videos for you. You find that 2% of these videos are cat videos. Determine which of the following is an observation, a variable, a sample statistic, or a population parameter.

- Percentage of all videos on YouTube that are cat videos.
- A video in your sample.
- 2%
- Whether a video is a cat video.

8. A doctor wants to see if a new treatment for cancer extends the life expectancy of a patient versus the old treatment. She gives one group of 25 cancer patients the new treatment and another group of 25 the old treatment. She then measures the life expectancy of each of the patients. Identify the individual, variable, population, sample, parameter and statistic.

- Cancer patient given the new treatment and cancer patient given the old treatment.
- The two groups of 25 cancer patients given the old and new treatments.
- Average life expectancy of 25 cancer patients given the old treatment and average life expectancy of 25 cancer patients given the new treatment.
- Average life expectancy of all cancer patients given the old and new treatment.
- All cancer patients.
- Life expectancy of the cancer patients.

9. The 2010 General Social Survey asked the question, “After an average workday, about how many hours do you have to relax or pursue activities that you enjoy?” to a random sample of 1,155 Americans. The average relaxing time was found to be 1.65 hours. Determine which of the following is an individual, a variable, a sample statistic, or a population parameter.

- Average number of hours all Americans spend relaxing after an average workday.
 - 1.65
 - An American in the sample.
 - Number of hours spent relaxing after an average workday.
10. In a study, the sample is chosen by dividing the population by gender, and choosing 30 people of each gender. Which sampling method is used?

11. In a study, the sample is chosen by separating all cars by size, and selecting 10 of each size grouping. What is the sampling method?

12. In a study, the sample is chosen by writing everyone’s name on a playing card, shuffling the deck, then choosing the top 20 cards. What is the sampling method?

13. In a study, the sample is chosen by asking people on the street. What is the sampling method?

14. In a study, the sample is chosen by selecting a room of the house, and appraising all items in that room. What is the sampling method?

15. In a study, the sample is chosen by surveying every 3rd driver coming through a tollbooth. What is the sampling method?

16. Researchers collected data to examine the relationship between air pollutants and preterm births in Southern California. During the study air pollution levels were measured by air quality monitoring stations. Specifically, levels of carbon monoxide (CO) were recorded in parts per million, nitrogen dioxide (NO₂) and ozone (O₃) in parts per hundred million, and coarse particulate matter (PM₁₀) in $\mu\text{g}/\text{m}^3$. Length of gestation data were collected on 143,196 births between the years 1989 and 1993, and air pollution exposure during gestation was calculated for each birth. The analysis suggested that increased ambient

PM₁₀ and, to a lesser degree, CO concentrations may be associated with the occurrence of preterm births. [B. Ritz et al. "Effect of air pollution on preterm birth among children born in Southern California between 1989 and 1993." In: *Epidemiology* 11.5 (2000), pp. 502– 511.] In this study, identify the variables. Select all that apply.

- a. Ozone
- b. Carbon Monoxide
- c. PM₁₀
- d. Preterm Births in California
- e. Length of Gestation
- f. 143,196 Births
- g. 1989-1993
- h. Nitrogen Dioxide

17. State whether each study is observational or experimental.

- a. You want to determine if cinnamon reduces a person's insulin sensitivity. You give patients who are insulin sensitive a certain amount of cinnamon and then measure their glucose levels.
- b. A researcher wants to evaluate whether countries with lower fertility rates have a higher life expectancy. They collect the fertility rates and the life expectancies of countries around the world.
- c. A researcher wants to determine if diet and exercise together helps people lose weight over just exercising. The researcher solicits volunteers to be part of the study, and then randomly assigns the volunteers to be in the diet and exercise group or the exercise only group.
- d. You collect the weights of tagged fish in a tank. You then put an extra protein fish food in water for the fish and then measure their weight a month later.

18. The Buteyko method is a shallow breathing technique developed by Konstantin Buteyko, a Russian doctor, in 1952. Anecdotal evidence suggests that the Buteyko method can reduce asthma symptoms and improve quality of life. In a scientific study to determine the effectiveness of this method, researchers recruited 600 asthma patients aged 18-69 who relied on medication for asthma treatment. These patients were split into two research groups: one practiced the Buteyko method and the other did not. Patients were scored on quality of life, activity, asthma symptoms, and medication reduction on a scale from 0 to 10. On average, the participants in the Buteyko group experienced a significant reduction in asthma symptoms and an improvement in quality of life. [McGowan. "Health Education: Does the Buteyko Institute Method make a difference?" In: *Thorax* 58 (2003).] Which of the following is the main research question?

- a. The Buteyko method causes shallow breathing.
- b. The Buteyko method can reduce asthma symptoms and an improvement in quality of life.
- c. Effectiveness of the Buteyko method.
- d. The patients score on quality of life, activity, asthma symptoms and medication reduction.

19. Researchers studying the relationship between honesty, age and self-control conducted an experiment on 160 children between the ages of 5 and 15. Participants reported their age, sex, and whether they were an only child or not. The researchers asked each child to toss a fair coin in private and to record the outcome (white or black) on a paper sheet, and said they would only reward children who report white. Half the students were explicitly told not to cheat and the others were not given any explicit instructions. In the no instruction group, the probability of cheating was found to be uniform across groups based on child's characteristics. In the group that was explicitly told to not cheat, girls were less likely to cheat, and while rate of cheating did not vary by age for boys, it decreased with age for girls. [Alessandro Bucciol and Marco Piovesan. "Luck or cheating? A field experiment on honesty with children." In: *Journal of Economic Psychology* 32.1 (2011), pp. 73–78.] In this study, identify the variables. Select all that apply.

- a. Age
- b. Sex
- c. Paper Sheet
- d. Cheated or Not
- e. Reward for White Side of Coin
- f. White or Black Side of Coin
- g. Only Child or Not

20. Select the measurement scale Nominal, Ordinal, Interval or Ratio for each scenario.
- A person's age.
 - A person's race.
 - Age groupings (baby, toddler, adolescent, teenager, adult, elderly).
 - Clothing brand.
 - A person's IQ score.
 - Temperature in degrees Celsius.
 - The amount of mercury in a tuna fish.
21. Select the measurement scale Nominal, Ordinal, Interval or Ratio for each scenario.
- Temperature in degrees Kelvin.
 - Eye color.
 - Year in school (freshman, sophomore, junior, senior).
 - The weight of a hummingbird.
 - The height of a building.
 - The amount of iron in a person's blood.
 - A person's gender.
 - A person's race.
22. State which type of variable each is, qualitative or quantitative?
- A person's age.
 - A person's gender.
 - The amount of mercury in a tuna fish.
 - The weight of an elephant.
 - Temperature in degrees Fahrenheit.
23. State which type of variable each is, qualitative or quantitative?
- The height of a giraffe.
 - A person's race.
 - Hair color.
 - A person's ethnicity.
 - Year in school (freshman, sophomore, junior, senior).
24. State whether the variable is discrete or continuous.
- A person's weight.
 - The height of a building.
 - A person's age.
 - The number of floors of a skyscraper.
 - The number of clothing items available for purchase.
25. State whether the variable is discrete or continuous.
- Temperature in degrees Celsius.
 - The number of cars for sale at a car dealership.
 - The time it takes to run a marathon.
 - The amount of mercury in a tuna fish.
 - The weight of a hummingbird.
26. State whether each study is cross-sectional, retrospective or prospective.
- To see if there is a link between smoking and bladder cancer, patients with bladder cancer are asked if they currently smoke or if they smoked in the past.
 - The Nurses Health Survey was a survey where nurses were asked to record their eating habits over a period of time, and their general health was recorded.

- c. A new study is underway to track the eating and exercise patterns of people at different time-periods in the future, and see who is afflicted with cancer later in life.
- d. The prices of generic items are compared to the prices of the equivalent named brand items.

27. Which type of sampling method is used for each scenario, Simple Random Sampling (SRS), Systematic, Stratified, Cluster or Convenience?

- a. The quality control officer at a manufacturing plant needs to determine what percentage of items in a batch are defective. The officer chooses every 15th batch off the line and counts the number of defective items in each chosen batch.
- b. The local grocery store lets you survey customers during lunch hour on their preference for a new bottle design for laundry detergent.
- c. Put all names in a hat and draw a certain number of names out.
- d. The researcher randomly selects 5 hospitals in the United States then measures the cholesterol level of all the heart attack patients in each of those hospitals.

28. Which type of sampling method is used for each scenario, Simple Random Sampling (SRS), Systematic, Stratified, Cluster or Convenience?

- a. If you want to calculate the average price of textbooks, you could divide the individuals into groups by major and then conduct simple random samples inside each group.
- b. Obtain a list of patients who had surgery at a hospital. Divide the patients according to type of surgery. Draw simple random samples from each group.
- c. You want to measure whether a tree in the forest is infected with bark beetles. Instead of having to walk all over the forest, you divide the forest up into sectors, and then randomly pick the sectors that you will travel to. Then record whether a tree is infected or not for every tree in that sector.
- d. You select every 3rd customer that comes that orders from your website.

Answer to Odd Numbered Exercises

1) 42

3) c

5) b, c, e

7)

- a. A question where you expect to get a variety of answers and you are interested in the distribution and tendency of those answers.
- b. A question using reported statistics.
- c. A question on a survey.
- d. A question on a census.

a) Population Parameter b) Observation c) Sample Statistic d) Variable

9)

- a. A question where you expect to get a variety of answers and you are interested in the distribution and tendency of those answers.
- b. A question using reported statistics.
- c. A question on a survey.
- d. A question on a census.

a) Population Parameter b) Sample Statistic c) Individual d) Variable

11) Stratified

13) Convenience

15) Systematic

17)

- a. Experimental
- b. Observational
- c. Experimental
- d. Experimental

19) a, b, d, f, g

21)

- a. Ratio
- b. Nominal
- c. Ordinal
- d. Ratio
- e. Ratio
- f. Ratio
- g. Nomina

23)

- a. Quantitative
- b. Qualitative
- c. Qualitative
- d. Qualitative
- e. Qualitative

25)

- a. Continuous
- b. Discrete
- c. Continuous
- d. Continuous
- e. Continuous

27)

- a. Systematic
- b. Convenience
- c. Random
- d. Cluster

This page titled [1.4: Chapter 1 Exercises](#) is shared under a [CC BY-SA 4.0](#) license and was authored, remixed, and/or curated by [Rachel Webb](#) via [source content](#) that was edited to the style and standards of the LibreTexts platform.

CHAPTER OVERVIEW

2: Organizing Data

- [2.1: Introduction](#)
- [2.2: Tabular Displays](#)
- [2.3: Graphical Displays](#)
- [2.4: Chapter 2 Exercises](#)

This page titled [2: Organizing Data](#) is shared under a [CC BY-SA 4.0](#) license and was authored, remixed, and/or curated by [Rachel Webb](#) via [source content](#) that was edited to the style and standards of the LibreTexts platform.

2.1: Introduction

Once a sample is collected, we can organize and present the data in tables and graphs. These tables and graphs help summarize, interpret and recognize characteristics within the data more easily than raw data. There are many types of graphical summaries. We will concentrate mostly on the ones that we can use technology to create.

A population is a collection of all the measurements from the individuals of interest. Remember, in most cases you cannot collect data on the entire population, so you have to take a sample. Now you have a large number of data values. What can you do with them? Just looking at a large set of numbers does not answer our questions. If we organize the data into a table or graph, we can see patterns in the data. Ultimately, though, you want to be able to use that table or graph to interpret the data, to describe the distribution of the data set, explore different characteristics of the data and make inferences about the original population.

Some characteristics to look for in tables and graphs:

1. Center: middle of the data set, also known as the average.
2. Variation: how spread out is the data.
3. Distribution: shape of the data.
4. Outliers: data values that are far from the majority of the data.
5. Time: changing characteristics of the data over time.

There is technology that will create most of the graphs you need, though it is important for you to understand the basics of how they are created.

Qualitative data are words describing a characteristic of the individual. Qualitative data is graphed using several different types of graphs, bar graphs, Pareto charts, and pie charts. Quantitative data are numbers that we count or measure. Quantitative data graphed using stem-and-leaf plots, dotplots, histograms, ogives, and time series.

The bar graph for quantitative data called a **histogram** looks similar to a bar graph for qualitative data, except there are some major differences. First, in a bar graph the categories can be put in any order on the horizontal axis. There is no set order for these data values. You cannot say how the data is distributed based on the shape, since the shape can change just by putting the categories in different orders. With quantitative data, the data are in specific orders since you are dealing with numbers. With quantitative data, you can talk about a distribution; the shape changes depending on how many categories you set up. This shape of the quantitative graph is called a **frequency distribution**.

This leads to the second difference from bar graphs. In a bar graph, the categories are determined by the name of the label. In quantitative data, the categories are numerical categories, and the frequencies are determined by how many categories (or what are called classes) you choose. There can be many different classes depending on the point of view of the author and how many classes there are. The third difference is that the categories touch with quantitative data, and there will be no gaps in the graph. The reason that bar graphs have gaps is to show that the categories do not continue on, as they do in quantitative data.

This page titled [2.1: Introduction](#) is shared under a [CC BY-SA 4.0](#) license and was authored, remixed, and/or curated by [Rachel Webb](#) via [source content](#) that was edited to the style and standards of the LibreTexts platform.

2.2: Tabular Displays

Frequency Tables for Quantitative Data

To create many of these graphs, you must first create the frequency distribution. The idea of a frequency distribution is to take the interval that the data spans and divide it into equal sized subintervals called classes. The grouped frequency distribution gives either the frequency (count) or the relative frequency (usually expressed as a percent) of individuals who fall into each class. When creating frequency distributions, it is important to note that the number of classes that are used and the value of the first class boundary will change the shape of, and hence the impression given by, the distribution. There is no one correct width to the class boundaries. It usually takes several tries to create a frequency distribution that looks just the way you want. As a reader and interpreter of such tables, you should be aware that such features are selected so that the table looks the way it does to show a particular point of view. For small samples, we usually have between four and seven classes, and as you get more data you will need more classes.

We will start with an example of a random sample of 35 ages from credit card applications given below in no particular order. Organize the data in a frequency distribution table.

46 47 49 25 46 22 42 32 39 24 46 40 39 27 25 30 31 29 33 27 46 21 29 20 26 39 26 25 25 26 35 49 33 26 30

Solution

As you can see, the data is hard to interpret in this format. If we were to peruse through the data we could find that minimum age is 20 and the maximum age is 49. If we cut the age groups up in to 10-year intervals, we get only three classes 20-29, 30-39 and 40-49. Although this would work, if we had more classes we can sometimes see trends within the data at a more granular level. If we split the ages up in to 5-year intervals to 20-24, 25-29, 30-34, 35-39, 40-44, and 45-49 we would get six classes.

Note that the class limits should never overlap; we call these mutually exclusive classes. For example, if your class went from 20-25, 25-30 etc., the 25-year-olds would fall within both classes. Also, make sure each of the classes have the same width. A more formal way to pick your classes uses the following process.

Steps involved in making a frequency distribution table:

1. Find the range = largest value – smallest value.
2. Pick the number of classes to use. Usually the number of classes is between five and twenty. Five classes are used if there are a small number of data points and twenty classes if there are a large number of data points (over 1,000 data points).
3. Class width = $\frac{\text{range}}{\# \text{ of classes}}$. Always round up to the next integer (if the answer is already a whole number, go to the next integer).
If you do not round up, your last class will not contain your largest data value, and you would have to add another class just for it. If you round up, then your largest data value will fall in the last class, and there are no issues.
4. Create the classes. Each class has limits that determine which values fall in each class. To find the **class limits**, set the smallest value in the data set as the lower class limit for the first class. Then add the class width to the lower class limit to get the next lower class limit. Repeat until you get all the classes. The upper class limit for a class is one less than the lower limit for the next class.
5. If your data value has decimal places, then round up the class width to the nearest value with the same number of decimal places as the original data. As an example, if your data was out to two decimal places, and you divided your range by the number of classes to get 4.8333, then the class width would round the second decimal place up and end on 4.84.
6. The frequency for a class is the number of data values that fall in the class.

For the age data let us use 6 classes. Find the range by taking $49 - 20 = 29$ and divide this by the number of classes $29/6 = 4.8333$. Round this number up to 5 and use 5 for the class width. Once you determine your class width and class limits, place each of these classes in a table and then tally up the ages that fall within each class. Count the tally marks and record the number in the frequency table.

The total of the frequency column should be the number of observations in the data. You may want to total the frequencies to make sure you did not leave any of the numbers out of the table.

Class Limits	Tally		Class	Frequency
20-24	4		20-24	4
25-29	12		25-29	12
30-34	6		30-34	6
35-39	4		35-39	4
40-44	2		40-44	2
45-49	7		45-49	7
			Total	35

Figure 2-1

Using the frequency table, we can now see that there are more people in the 25- 29 year-old class, followed by the 45-49 year-old class.

We call this most frequent category the **modal class**. There may be no mode at all or more than one mode.

Frequency Tables for Qualitative Data

A frequency distribution can also be made for qualitative data.

Suppose you have the following data for which type of car students at a college drive. Make a frequency table to summarize the data.

Ford Honda Nissan Chevy Chevy Chevy Chevy Toyota Chevy Saturn Honda Toyota Nissan Honda Toyota Toyota Nissan Ford Toyota Chevy Toyota Ford Chevy Chevy Chevy Nissan Toyota Toyota Ford Nissan Kia Nissan Nissan Nissan Honda Nissan Mercedes Honda Toyota Toyota Chevy Chevy Porsche Chevy Toyota Toyota Ford Hyundai Honda Nissan

Solution

The list of data is hard to analyze, so you need to summarize it. The classes in this case are the car brands. However, several car brands only have one car in the list. In that case, it is easier to make a category called “other” for the categories with low frequencies.

Count how many of each type of cars there are: there are 12 Chevys, 5 Fords, 6 Hondas, 10 Nissans, 12 Toyotas, and 5 other brands (Hyundai, Kia, Mercedes, Porsche, and Saturn). Place the other brands into a frequency distribution table alphabetically:

Category	Frequency
Chevy	12
Ford	5
Honda	6
Nissan	10
Toyota	12
Other	5
Total	50

For nominal data, either alphabetize the classes or arrange the classes from most frequent to least frequent, with the “other” category always at the end. For ordinal data put the classes in their order with the “other” category at the end.

Relative Frequency Tables

Frequencies by themselves are not as useful to tell other people what is going on in the data. If you want to know what percentage the category is of the total sample then we can use the relative frequency of each category. The relative frequency is just the frequency divided by the total. The relative frequency is the proportion in each category and may be given as a decimal, percentage, or fraction.

Using the car data's frequency distribution, we will create a third column labeled relative frequency. Take each frequency and divide by the sample size, see Figure 2-2. The relative frequencies should add up to one (ignoring rounding error).

Type of Car	Frequency	Relative Frequency
Chevy	12	$12/50 = 0.24$
Ford	5	$5/50 = 0.1$
Honda	6	$6/50 = 0.12$
Nissan	10	$10/50 = 0.2$
Toyota	12	$12/50 = 0.24$
Other	5	$5/50 = 0.1$
Total	50	1

Figure 2-2

Many people understand percentages better than proportions so we may want to multiply each of these decimals by 100% to get the following relative frequency percent table.

Type of Car	Percent
Chevy	24
Ford	10
Honda	12%
Nissan	20%
Toyota	24%
Other	10%
Total	100%

Figure 2-3

We can summarize the car data and see that for college students Chevy and Toyota make up 48% of the car models.

Excel

Recall the frequency table for the credit card applicants. The relative frequency table for the random sample of 35 ages from credit card applications follows.

Class **Frequency** **Relative Frequency** 20-24 4 $4/35 = 0.1143$ 25-29 12 $12/35 = 0.3429$ 30-34 6 $6/35 = 0.1714$ 35-39 4 $4/35 = 0.1143$ 40-44 2 $2/35 = 0.0571$ 45-49 7 $7/35 = 0.2$ **Total** **35** **1**

Making a relative frequency table using Excel

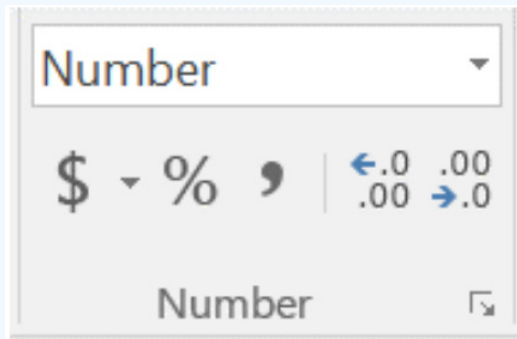
Solution

In Excel, type your frequencies into a column and then in the next column type in $=(\text{cell reference number})/35$. Then copy and paste the formula in cell B2 down the page. If you used the cell reference number, Excel will automatically change the copied cells to the next row down.

You get the following relative frequency table. The sum of the relative frequencies will be one (the sum may add to 0.9999 or 1.0001 if you are doing the calculations by hand due to rounding).

	A	B
1	Frequency	Relative Frequency
2	4	=A2/35
3	12	=A3/35
4	6	=A4/35
5	4	=A5/35
6	2	=A6/35
7	7	=A7/35
8	=SUM(A2:A7)	=SUM(B2:B7)

To get Excel to show the percentage instead of the proportion by highlighting the relative frequencies and selecting the percent % button on the Home tab.



Class	Frequency	Relative Frequency	Relative Frequency Percent
20-24	4	0.1143	11%
25-29	12	0.3429	34%
30-34	6	0.1714	17%
35-39	4	0.1143	11%
40-44	2	0.0571	6%
45-49	7	0.2	20%
Total	35	1	100%

The relative frequency table lets us quickly see that a little more than half $34\% + 20\% = 54\%$ of the ages of the credit card holders are between the ages of 25 – 29 and 45 – 49 years-old.

Cumulative & Cumulative Relative Frequency Tables

Another useful piece of information is how many data points fall below a particular class. As an example, a teacher may want to know how many students received below a 70%, a doctor may want to know how many adults have cholesterol above 160, or a manager may want to know how many stores gross less than \$2,000 per day. This calculation is known as a **cumulative frequency** and is used for ordinal or quantitative data. If you want to know what percent of the data falls below a certain class, then this fact would be a **cumulative relative frequency**.

To create a **cumulative frequency distribution**, count the number of data points that are below the upper class limit, starting with the first class and working up to the top class. The last upper class should have all of the data points below it.

Recall the credit card applicants. Make a cumulative frequency table.

Class **Frequency** **Relative Frequency** **Percent** 20-24 4 11% 25-29 12 34% 30-34 6 17% 35-39 4 11% 40-44 2 6% 45-49 7 20%
Total 35 100%

Solution

To find the cumulative frequency, carry over the first frequency of 4 to the first row of the cumulative frequency column. Then take this 4 and add it to the next frequency of 12 to get 16 for the second cumulative frequency value. For the third cumulative frequency, take 16 and add to the third frequency of 6 to get 22. Keep doing this additive process until you finish the column.

The cumulative frequency in the last class should have the last number as the sample size. The cumulative relative frequency is just the cumulative frequency divided by the sample size. The cumulative relative frequencies should have one as the last number.

Class	Frequency	Relative Frequency	Cumulative Frequency	Cumulative Relative Frequency
20-24	4	0.1143	4	$4/35 = 0.1143$
25-29	12	0.3429	$4 + 12 = 16$	$16/35 = 0.4571$
30-34	6	0.1714	$16 + 6 = 22$	$22/35 = 0.6286$
35-39	4	0.1143	$22 + 4 = 26$	$26/35 = 0.7429$
40-44	2	0.0571	$26 + 2 = 28$	$28/35 = 0.8$
45-49	7	0.2	$28 + 7 = 35$	$35/35 = 1$
Total	35	1		

Use Excel to add up the values for you.

	A	B	C	D
1	Frequency	Relative Frequency	Excel Formula	Cumulative Frequency
2	4	$=A2/35$	4	4
3	12	$=A3/35$	$=C2+A3$	16
4	6	$=A4/35$	$=C3+A4$	22
5	4	$=A5/35$	$=C4+A5$	26
6	2	$=A6/35$	$=C5+A6$	28
7	7	$=A7/35$	$=C6+A7$	35
8	$=SUM(A2:A7)$	$=SUM(B2:B7)$		

You can also express the cumulative relative frequencies as a percentage instead of a proportion.

Class	Cumulative Frequency	Cumulative Relative Frequency
20-24	4	11
25-29	16	46
30-34	22	63
35-39	26	74
40-44	28	80
45-49	35	100

If a manager wanted to know how many applicants were under the age of 40 we could look across the 35-39 year-old class to see that there were 26 applicants that were under 40 (39 years old or younger), or if we used the cumulative relative frequency, 74% of the applicants were under 40 years old. If the manager wants to know how many applicants were over 44, we could subtract $100\% - 80\% = 20\%$.

Contingency Tables

A **contingency table** provides a way of portraying data that can facilitate calculating probabilities. A contingency table summarizes the frequency of two qualitative variables. The table displays sample values in relation to two different variables that may be dependent or contingent on one another. There are other names for contingency tables. Excel calls the contingency table a pivot table. Other common names are two-way table, cross-tabulation, or cross-tab for short.

A fitness center coach kept track of members over the last year. They recorded if the person stretched before they exercised, and whether they sustained an injury. The following contingency table shows their results. Find the relative frequency for each value in the table.

Injury No Injury Stretched 52 270 Did Not Stretch 21 57

Solution

Each value in the table represents the number of times a particular combination of variable outcomes occurred, for example, there were 57 members that did not stretch and did not sustain an injury. It is helpful to total up the categories. The row totals provide the total counts across each row (i.e. $52 + 270 = 322$), and column totals are total counts down each column (i.e. $52 + 21 = 73$). See Figure 2-4.

	Injury	No Injury	Total
Stretched	52	270	322
Did Not Stretch	21	57	78
Total	73	327	400

Figure 2-4

We can quickly summarize the number of athletes for each category. The bottom right-hand number in Figure 2-4 is the grand total and represents the total number of 400 people. There were 322 people that stretched before exercising. There were 73 people that sustained an injury while exercising, etc.

If we find the relative frequency for each value in the table, we can find the proportion of the 400 people for each category. To find a relative frequency we divide each value in the table by the grand total. See Figure 2-5.

	Injury	No Injury	Total
Stretched	$52/400 = 0.13$	$270/400 = 0.675$	$322/400 = 0.805$ or $0.13 + 0.675 = 0.805$
Did Not Stretch	$21/400 = 0.0525$	$57/400 = 0.1425$	$78/400 = 0.195$ or $0.0525 + 0.1425 = 0.195$
Total	$73/400 = 0.1825$ or $0.13 + 0.0525 = 0.1825$	$327/400 = 0.8175$ or $0.675 + 0.1425 = 0.8175$	$400/400 = 1$ or the sum of either the row or column totals

Figure 2-5

When data is collected, it is usually presented in a spreadsheet where each row represents the responses from an individual or case.

"Of course, one never has the slightest notion what size or shape different species are going to turn out to be, but if you were to take the findings of the latest Mid-Galactic Census report as any kind of accurate Guide to statistical averages you would probably guess that the craft would hold about six people, and you would be right. You'd probably guessed that anyway. The Census report, like most such surveys, had cost an awful lot of money and didn't tell anybody

anything they didn't already know - except that every single person in the Galaxy had 2.4 legs and owned a hyena. Since this was clearly not true the whole thing had eventually to be scrapped.” (Adams, 2002)

Make a pivot table using Excel. A random sample of 500 records from the 2010 United States Census were downloaded to Excel. Below is an image of just the first 20 people.

There are seven variables:

- State
- Total family income (in United States dollars)
- Age
- Biological Sex (with reported categories female and male)
- Race (with reported categories American Indian or Alaska Native, Black, Chinese, Japanese, Other Asian or Pacific Islander, Two major races, White, Other)
- Marital status (with reported categories Divorced, Married/spouse absent, Married/spouse present, Never married/single, Separated, Widowed)
- Total personal income (in United States dollars).

	A	B	C	D	E	F	G
1	stateFIPScod	totalFamilyInc	age	sex	raceGeneral	maritalStatus	totalPersonalIncome
2	Alabama	5500	73	Female	Black	Divorced	3000
3	Alabama	63820	40	Male	White	Married/spouse present	47950
4	Alabama	11200	60	Female	Black	Divorced	11200
5	Alabama	34500	43	Female	Other	Married/spouse present	15300
6	Alabama	33600	7	Male	White	Never married/single	NA
7	Arizona	32500	9	Female	White	Never married/single	NA
8	Arizona	46800	53	Female	White	Married/spouse absent	30000
9	Arizona	30000	60	Female	White	Widowed	30000
10	Arizona	0	67	Female	White	Widowed	0
11	Arizona	51000	27	Male	White	Married/spouse present	14000
12	Arizona	6000	10	Male	White	Never married/single	NA
13	Arizona	45000	48	Male	Japanese	Married/spouse present	45000
14	Arkansas	10940	6	Female	Black	Never married/single	NA
15	California	52000	40	Female	White	Married/spouse present	27000
16	California	156000	65	Female	White	Married/spouse present	10000
17	California	59000	80	Male	White	Married/spouse present	52100
18	California	37500	46	Female	White	Married/spouse present	17500
19	California	67500	3	Female	White	Never married/single	NA
20	California	21800	6	Male	Other Asian	Never married/single	NA
21	California	79000	26	Female	White	Never married/single	25000

Solution

In Excel, select the Insert tab, then select Pivot Table.

The screenshot shows an Excel spreadsheet with the following data (rows 1-21):

	A	B	C	D	E	F	G	H	I	J	K	L	M	N
1	stateFIPScod	totalFamilyInc	age	sex	raceGeneral	maritalStatus	totalPersonalIncome							
2	Alabama	5500	73	Female	Black	Divorced	3000							
3	Alabama	63820	40	Male	White	Married/spouse present	47950							
4	Alabama	11200	60	Female	Black	Divorced	11200							
5	Alabama	34500	43	Female	Other	Married/spouse present	15300							
6	Alabama	33600	7	Male	White	Never married/single	NA							
7	Arizona	32500	9	Female	White	Never married/single	NA							
8	Arizona	46800	53	Female	White	Married/spouse absent	30000							
9	Arizona	30000	60	Female	White	Widowed	30000							
10	Arizona	0	67	Female	White	Widowed	0							
11	Arizona	51000	27	Male	White	Married/spouse present	14000							
12	Arizona	6000	10	Male	White	Never married/single	NA							
13	Arizona	45000	48	Male	Japanese	Married/spouse present	45000							
14	Arkansas	10940	6	Female	Black	Never married/single	NA							
15	California	52000	40	Female	White	Married/spouse present	27000							
16	California	156000	65	Female	White	Married/spouse present	10000							
17	California	59000	80	Male	White	Married/spouse present	52100							
18	California	37500	46	Female	White	Married/spouse present	17500							
19	California	67500	3	Female	White	Never married/single	NA							
20	California	21800	6	Male	Other Asian	Never married/single	NA							
21	California	79000	26	Female	White	Never married/single	25000							

The 'Create PivotTable' dialog box is open, showing the 'Table/Range' as 'census!\$A\$1:\$G\$501' and 'New Worksheet' selected for the report location.

Excel should automatically select all 500 rows in the Table/Range cell, if not then use your mouse and highlight all the data including the labels. Then select OK.

Each version of Excel may look different at this point. One common area, though, is the bottom right-hand drag and drop area of the Pivot Table dialogue box.

The left screenshot shows the 'PivotTable Fields' task pane with the following fields selected in the 'Choose fields to add to report' list:

- stateFIPScod
- totalFamilyIncome
- age
- sex
- raceGeneral
- maritalStatus

The right screenshot shows the 'PivotTable Fields' task pane with the following fields in the boxes:

- COLUMNS:** sex
- ROWS:** maritalStatus
- VALUES:** Count of ...

Drag the sex variable to the COLUMNS box, and marital status variable to the ROWS box.

You will see the contingency table column and row headers appear as you drop the variables in the boxes.

To get the counts to appear, drag and drop marital status into the Values box and the default will usually say, "Count of maritalStatus," if not then change it to count in the drop-down menu. A contingency table should appear on your spreadsheet as you fill in the pivot table dialogue box. Contingency tables go by many names including pivot tables, two-way tables, cross tabulations, or cross-tabs.

Count of Marital Status	Column Labels		
Row Labels	Female	Male	Grand Total
Divorced	21	17	38

Married/spouse absent	5	9	14
Married/spouse present	92	100	192
Never married/single	93	129	222
Separated	1	2	3
Widowed	20	11	31
Grand Total	232	268	500

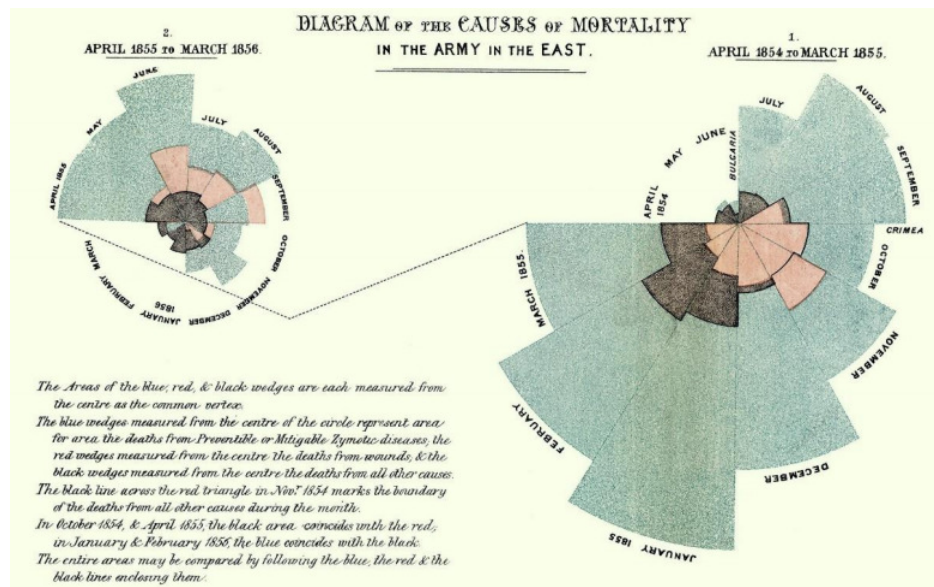
This page titled [2.2: Tabular Displays](#) is shared under a [CC BY-SA 4.0](#) license and was authored, remixed, and/or curated by [Rachel Webb](#) via [source content](#) that was edited to the style and standards of the LibreTexts platform.

2.3: Graphical Displays

Statistical graphs are useful in getting the audience's attention in a publication or presentation. Data presented graphically is easier to summarize at a glance compared to frequency distributions or numerical summaries. Graphs are useful to reinforce a critical point, summarize a data set, or discover patterns or trends over a period of time. Florence Nightingale (1820-1910) was one of the first people to use graphical representations to present data. Nightingale was a nurse in the Crimean War and used a type of graph that she called polar area diagram, or coxcombs to display mortality figures for contagious diseases such as cholera and typhus.



Nightingale



Nightingale-mortality.jpg. (2021, May 18). Wikimedia Commons, the free media repository. Retrieved July 2021 from <https://commons.wikimedia.org/w/index.php?title=File:Nightingale-mortality.jpg&oldid=561529217>.

It is hard to provide a complete overview of the most recent developments in data visualization with the onset of technology. The development of a variety of highly interactive software has accelerated the pace and variety of graphical displays across a wide range of disciplines.

2.3.1 Stem-and-Leaf Plot

Stem-and-leaf plots (or stemplots) are a useful way of getting a quick picture of the shape of a distribution by hand. Turn the graph sideways and you can see the shape of your data. You can now easily identify outliers. Each observation is divided into two pieces; the stem and the leaf. If the number is just two digits then the stem would be the tens digit and the leaf would be the ones digit.

When a number is more than two digits then the cut point should split the data into enough classes that is useful to see the shape of the data.

To create a stem-and-leaf plot:

1. Separate each observation into a stem and a leaf.
2. Write the stems in a vertical column in ascending order (from smallest to largest). Fill in missing numbers even if there are gaps in the data. Draw a vertical line to the right of this column.
3. Write each leaf in the row to the right of its stem, in increasing order.

Create a stem-and-leaf plot for the sample of 35 ages.

46 47 49 25 46 22 42 24 46 40 39 27 25 30 33 27 46 21 29 20 26 25 25 26 35 49 33 26 32 31 39 30 39 29 26

Solution

Divide each number so that the tens digit is the stem and the ones digit is the leaf. The smallest observation is 20. The stem = 2 and the leaf = 0. The next value is 21 and the stem = 2 and the leaf = 1, up to the last value of 49 which would have a stem = 4 and a leaf = 9. If we use the tens categories we have the stems 2, 3 and 4. Line up the stems without skipping a number even if there are no values in that stem. In other words, the stems should have equal spacing (for example, count by ones, tens, hundreds, thousands, etc.). Then place a vertical line to the right of the stems. In each row put the leaves with a space between each leaf. Sort each row from smallest to largest. In Figure 2- 6 the 2 | 0 = 20.

2		0	1	2	4	5	5	5	5	6	6	6	6	7	7	9	9
3		0	0	1	2	3	3	5	9	9	9						
4		0	2	6	6	6	6	7	9	9							

(2.3.1)

Figure 2-6

It is hard to see the shape with so few classes and so many leaves in each class.

We can break each stem in half, putting leaves 0-4 in the first row and 5-9 in the second row, as in Figure 2-7.

2		0	1	2	4												
2		5	5	5	5	6	6	6	6	7	7	9	9				
3		0	0	1	2	3	3										
3		5	9	9	9												
4		0	2														
4		6	6	6	6	7	9	9									

(2.3.2)

Figure 2-7

Now, add labels and make sure the leaves are in ascending order. Be careful to line the leaves up in columns. You need to be able to compare the lengths of the rows when you interpret the graph.

Imagine lines around the leaves and turn the graph 90 degrees to the left. You can now see in Figure 2-8 the shape of the distribution. Note that Excel uses the upper class limit for the axis label.

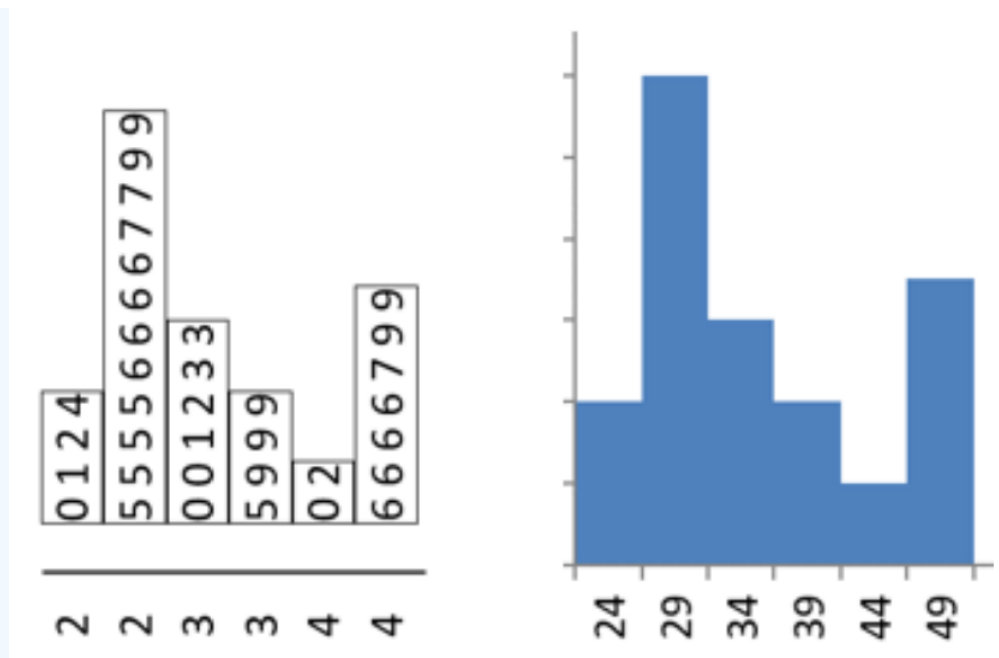


Figure 2-8

If a leaf takes on more than the ones category then supply a footnote at the bottom of the plot with the units.

A small sample of house prices in thousands of dollars was collected: 375, 189, 432, 225, 305, 275. Make a stem-and-leaf plot.

Solution

If we were to split the stem and leaf between the ones and tens place, then we would need stems going from 18 up to 43. Twenty-six stems for only six data points is too many. The next break then for a stem would be between the tens and hundreds. This would give stems from 1 to 4. Then each leaf will be the ones and tens. For example, then number 375 would have a stem = 3 and a leaf = 75.

1	89	
2	25	75
3	05	75
4	32	

(2.3.3)

Leaf = \$1000

A small sample of coffee prices: 3.75, 1.89, 4.32, 2.25, 3.05, 2.75 was collected. Make a stem-and-leaf plot.

Solution

1	89	
2	25	75
3	05	75
4	32	

(2.3.4)

Leaf = \$0.01

Note that the last two stem-and-leaf plots look identical except for the footnote. It is important to include units to tell people what the stems and leaves mean by inserting a legend.

Back-to-back stem-and-leaf plots let us compare two data sets on the same number line. The two samples share the same set of stems. The sample on the right is written backward from largest leaf to smallest leaf, and the sample on the left has leaves from smallest to largest.

Use the following back-to-back stem-and-leaf plot to compare pulse rates before and after exercise.

Before	Pulse Rates	After
9 8 8 7 6 5 2	6	
9 8 8 8 6 5 5 5 1 1 0 0	7	
8 8 7 5 4 2	8	5 6 6 7 8 9
4 0	9	0 1 1 2 3 4 5 5 6 8
4	10	0 1 4 6 7
	11	6 7
	12	4 5 8

Solution

The group on the left has leaves going in descending order and represent the pulse rates before exercise. The stems are in the middle column. The group on the right has leaves going in ascending order and represent the pulse rates after exercise. The first row has pulse rates of 62, 65, 66, 67, 68, 68 and 69. The last row of pulse rates are 124, 125, and 128.

2.3.2 Histogram

A **histogram** is a graph for quantitative data (we call these bar graphs for qualitative data). The data is divided into a number of classes. The class limits become the horizontal axis demarcated with a number line and the vertical axis is either the frequency or the relative frequency of each class. Figure 2-9 is an example of a histogram.

The histogram for quantitative data looks similar to a bar graph, except there are some major differences.

First, in a bar graph the categories can be put in any order on the horizontal axis. There is no set order for these nominal data. You cannot say how the data is distributed based on the shape, since the shape can change just by putting the categories in different orders. With quantitative data, the data are in a specific order, since you are dealing with numbers. With quantitative data, you can talk about a distribution shape.

This leads to the second difference from bar graphs. In a bar graph, the categories that you made in the frequency table were the words used for the category name. In quantitative data, the categories are numerical categories, and the numbers are determined by how many classes you choose. If two people have the same number of categories, then they will have the same frequency distribution. Whereas in qualitative data, there can be many different categories depending on the point of view of the author.

The third difference is that the bars touch with quantitative data, and there will be no gaps in the graph. The reason that bar graphs have gaps is to show that the categories do not continue on, as they do in quantitative data. Since the graph for quantitative data is different from qualitative data, it is given a different name of histogram.

Some key features of a histogram:

- Equal spacing on each axis
- Bars are the same width
- Label each axis and title the graph
- Show the scale on the frequency axis
- Label the categories on the category axis
- The bars should touch at the class boundaries

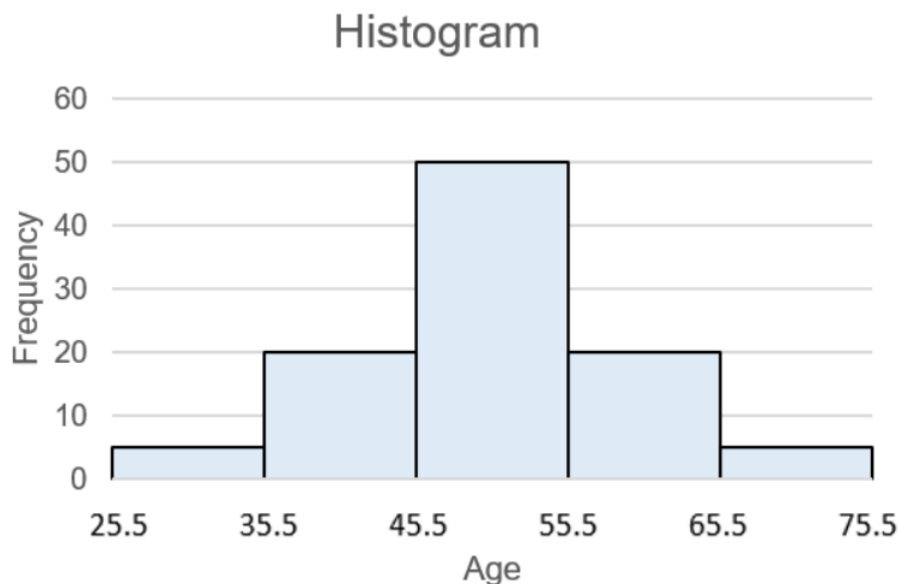


Figure 2-9

To create a histogram, you must first create a frequency distribution. Software and calculators can create histograms easily when a large amount of sample data is being analyzed.

Excel

To create a histogram in Excel you will need to first install the Data Analysis tool.

If your Data Analysis is not showing in the Data tab, follow the directions for installing the free add-in here: <https://support.office.com/en-us/article/Load-the-Analysis-ToolPak-in-Excel-6a63e598-cd6d-42e3-9317-6b40ba1a66b4>.

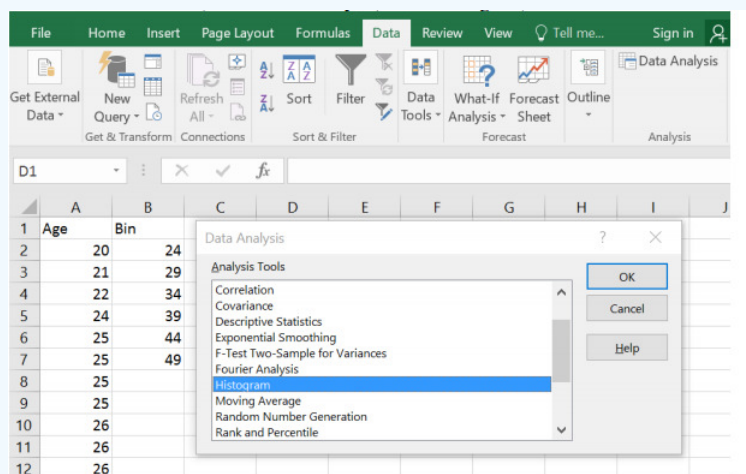
Type in the data into one blank column in any order. If you want to have class widths other than Excel's default setting, type in a new column the endpoints of each class found in your frequency distribution, these are called the bins in Excel.

Using the sample of 35 ages, make a histogram using Excel.

46 47 49 25 46 22 42 24 46 40 39 27 25 30 33 27 46 21 29 20 26 25 25 26 35 49 33 26 32 31 39 30 39 29 26

Solution

Type the data in any order into column A and the bins in order in column B as shown below. Then select the Data tab, select Data Analysis, select Histogram, then select OK.

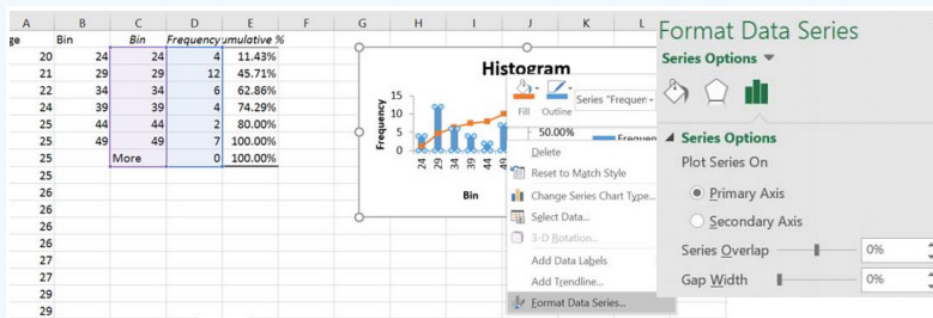


In the dialogue box, click into the Input Range box, then use your mouse and highlight the ages including the label.

Then click into the Bin Range box and use your mouse to highlight the bins including the label.

Select the box for Labels only if you included the labels in your ranges. You can have your output default to a new worksheet, or select the circle to the left of Output Range, click into the box to the right of Output Range and then select one blank cell on your spreadsheet where you want the top left-hand corner of your table and graph to start. Then check the boxes next to Cumulative Percentage and Chart Output. Then select OK, and see below.

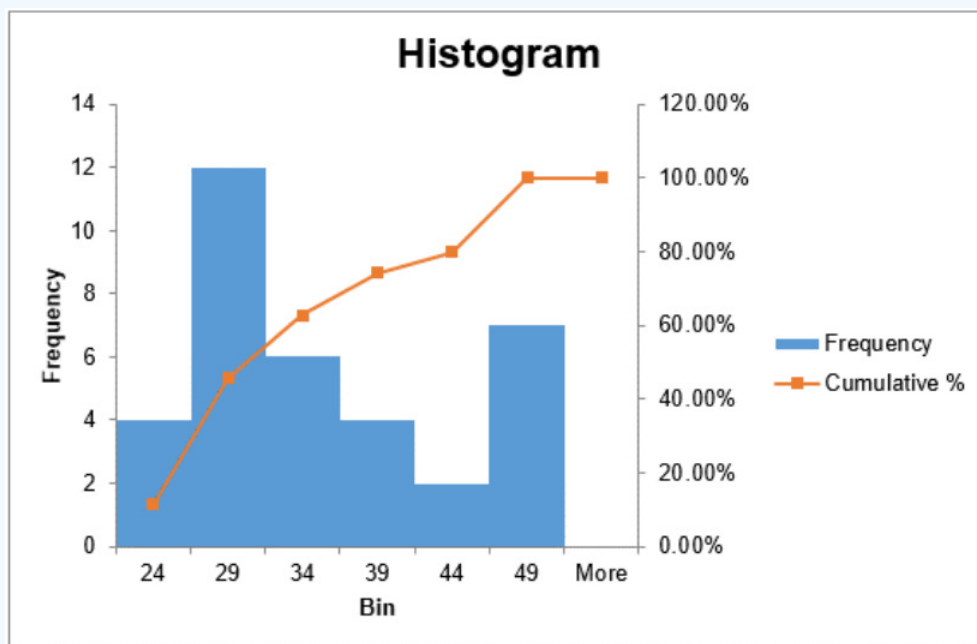
A histogram needs to have bars that touch, which is not the default in Excel. To get the bars to touch, right-click on one of the blue bars and select Format Data Series and slide the Gap Width to 0%.



Excel produces both a frequency table and a histogram. The table has the frequencies and the cumulative relative frequencies.

Bin	Frequency	Cumulative %
24	4	11.43%
29	12	45.71%
34	6	62.86%
39	4	74.29%
44	2	80.00%
49	7	100.00%
More	0	100.00%

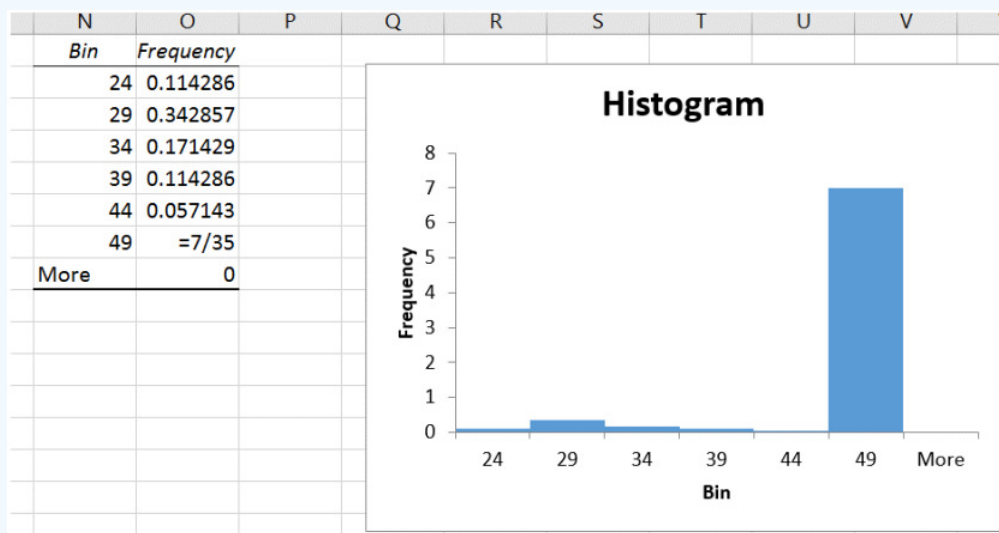
The histogram has bars for the height of each frequency and then makes a line graph of the cumulative relative frequencies over the bars. This red line is a line graph of the cumulative relative frequencies, also called an ogive and is discussed in a later section.



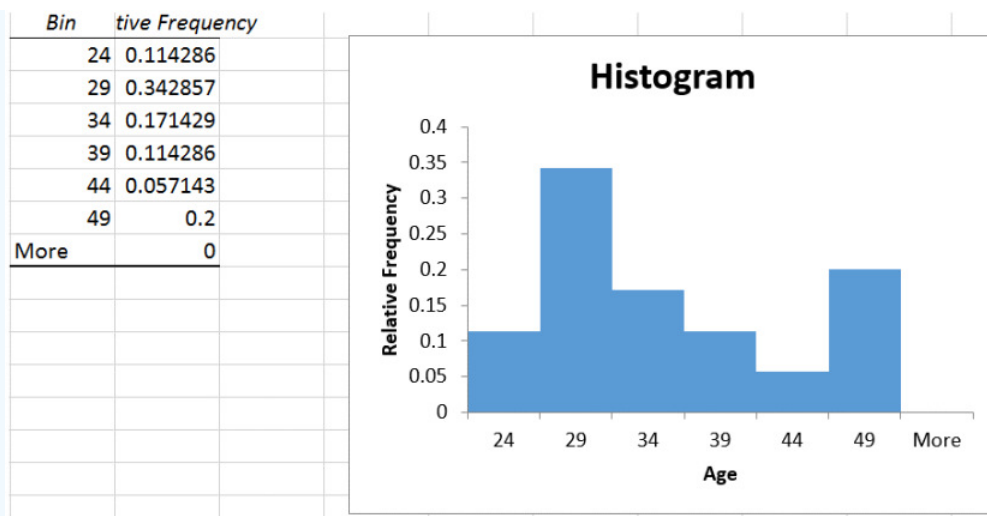
It is important to note that the number of classes that are used and the value of the first class boundary will change the shape of the histogram.

A relative frequency histogram is when the relative frequencies are used for the vertical axis instead of the frequencies and the y-axis will represent a percent instead of the number of people.

In Excel, after you create your histogram, you can manually change the frequency column to the relative frequency values by dividing each number by the sample size. Here is a screen shot just as the last number was changed, note as soon as you hit enter the bars will shrink and adjust.

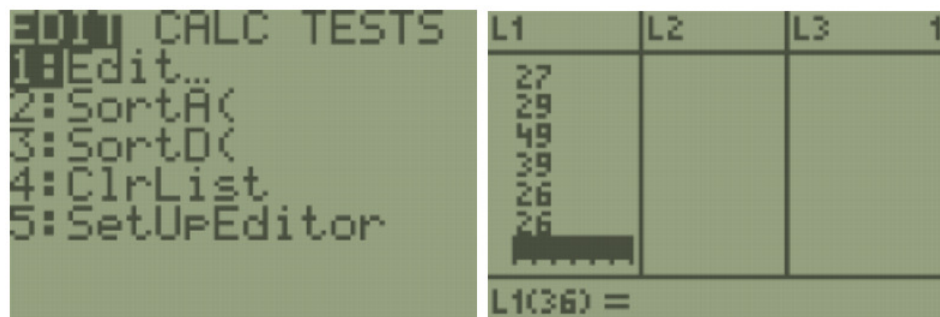


After the last value =7/35 was entered and the label changed to Relative Frequency you get the following graph.

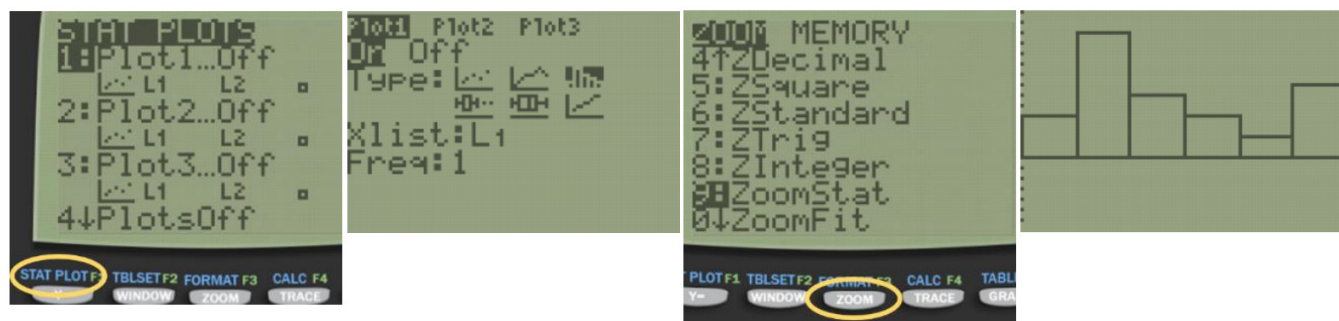


The shape of the histogram will be the same for the relative frequency distribution and the frequency distribution; the height, though, is the proportion instead of frequency.

TI-84: To make a histogram, enter the data by pressing [STAT]. The first option is already highlighted (1:Edit) so you can either press [ENTER] or [1]. Make sure the cursor is in the list, not on the list name and type the desired values pressing [ENTER] after each one.

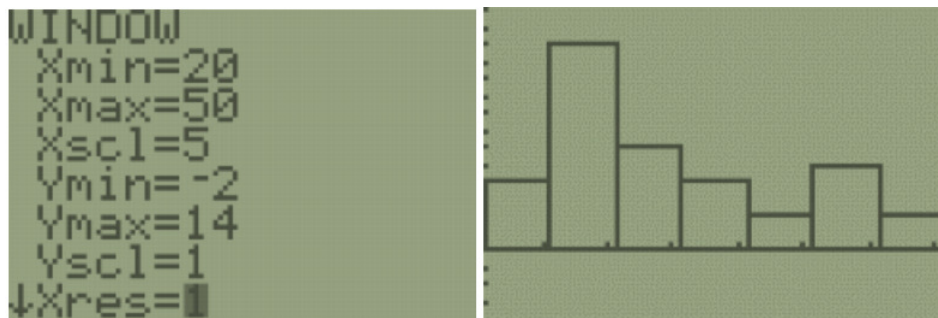


Press [2nd] [QUIT] to return to the home screen. To clear a previously stored list of data values, arrow up to the list name you want to clear, press [CLEAR], and then press enter. An alternative way is press [STAT], press 4 for 4:ClrList, press [2nd], then press the number key corresponding to the data list you wish to clear, for example, [2nd] [1] will clear L₁, then press [ENTER]. After you enter the data, press [2nd] [STAT PLOT]. Select the first plot by hitting [Enter] or the number [1:Plot 1]. Turn the plot [On] by moving the cursor to On and selecting Enter. Select the Histogram option using the right arrow keys. Select [Zoom], then [ZoomStat].

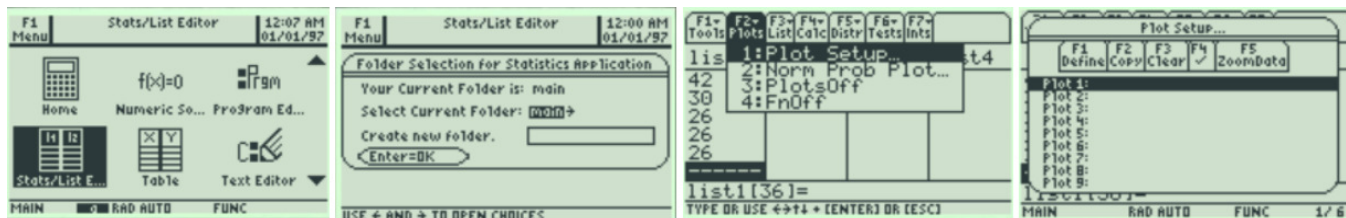


You can see and change the class width by selecting [Window], then change the minimum x value Xmin=20, the maximum x value Xmax=50, the x-scale to Xscl=5 and the minimum y value Ymin=-6.5 and the maximum y value to Ymax=14. Select the [GRAPH]

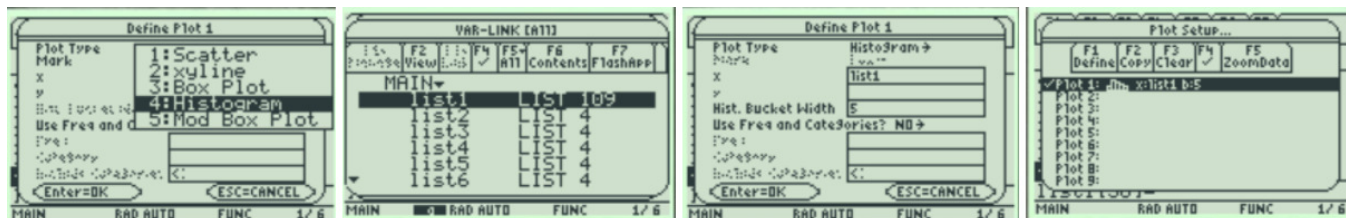
button. We get a similar looking Histogram compared to the stem-and-leaf plot and Excel histogram. Select the [TRACE] button to see the height of each bar and the classes.



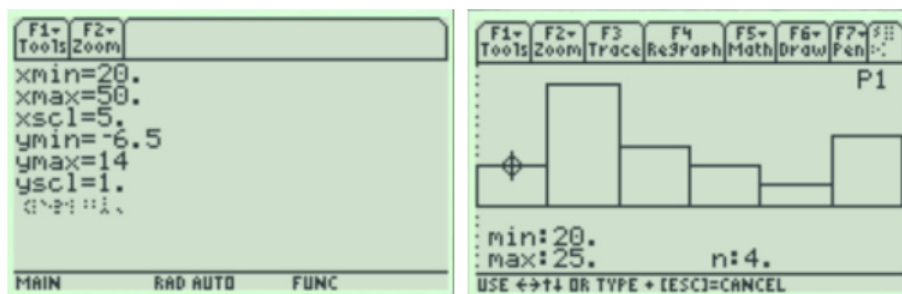
TI-89: First, enter the data into the Stat/List editor under list 1. Press [APP] then scroll down to Stat/List Editor, on the older style TI-89 calculators, go into the Flash/App menu, and then scroll down the list. Make sure the cursor is in the list, not on the list name, and type the desired values pressing [ENTER] after each one. To clear a previously stored list of data values, arrow up to the list name you want to clear, press [CLEAR], and then press enter. After you enter the data, select Press [F2] Plots, scroll down to [1: Plot Setup] and press [Enter].



Select [F1] Define. Use your arrow keys to select Histogram for Type, and then scroll down to the x-variable box. Press [2nd] [Var-Link] this key is above the [+] sign. Then arrow down until you find your List1 name under the Main file folder. Then press [Enter] and this will bring the name List1 back to the menu. You will now see that Plot1 has a small picture of a histogram. To view the histogram, select [F5] [Zoom Data].



The histogram looks a little different from Excel; you can change the settings for the bucket to match your table. Press [♦] [F2:Window]. Change the minimum x value xmin=20, the maximum x value xmax=50, the x-scale to xscl=5 and the minimum y value ymin=-6.5 and the maximum y value to ymax=14. Then press the [♦] [F3:GRAPH] button. Select [F3:Trace] to see the frequency for each bar. Then use your left and right arrow keys to move to the other bars.



Make a histogram for the following random sample of student rent prices using Excel.

1500 1350 350 1200 850 900 1500 1150 1500 900 1400 1100 1250 600 610 960 890 1325 900 800 2550 495 1200 690

Solution

Start by making a relative frequency distribution table with 7 classes.

1. Find the range: largest value – smallest value = 2550 – 350 = 2200, range = \$2,200.
2. Find the class width: width = $\frac{\text{range}}{7} = \frac{2000}{7} \approx 314.286$. Round up to 315. Always round up to the next integer even if the width is already an integer.
3. Find the class limits: Start at the smallest observation. This is the lower class limit for the first class. Add the class width to get the lower limit of the next class. Keep adding the class width to get all the lower limits, 350 + 315 = 665, 665 + 315 = 980, 980 + 315 = 1295, etc. The upper limit is one unit less than the next lower limit: so, for the first class the upper class limit would be 665 – 1 = 664. When you have all 7 classes, make sure the last number, in this case the 2550, is at least as large as the largest value in the data. If not, you made a mistake somewhere.

Using Excel: Type the raw data in Excel in column A, the right-hand class endpoints for the bins in column B. Select Data, Data Analysis, Histogram.

Select the Input Range, Bin Range, Labels (if you selected them), output option, Chart Output, then OK.

See finished histogram below in Figure 2-13.

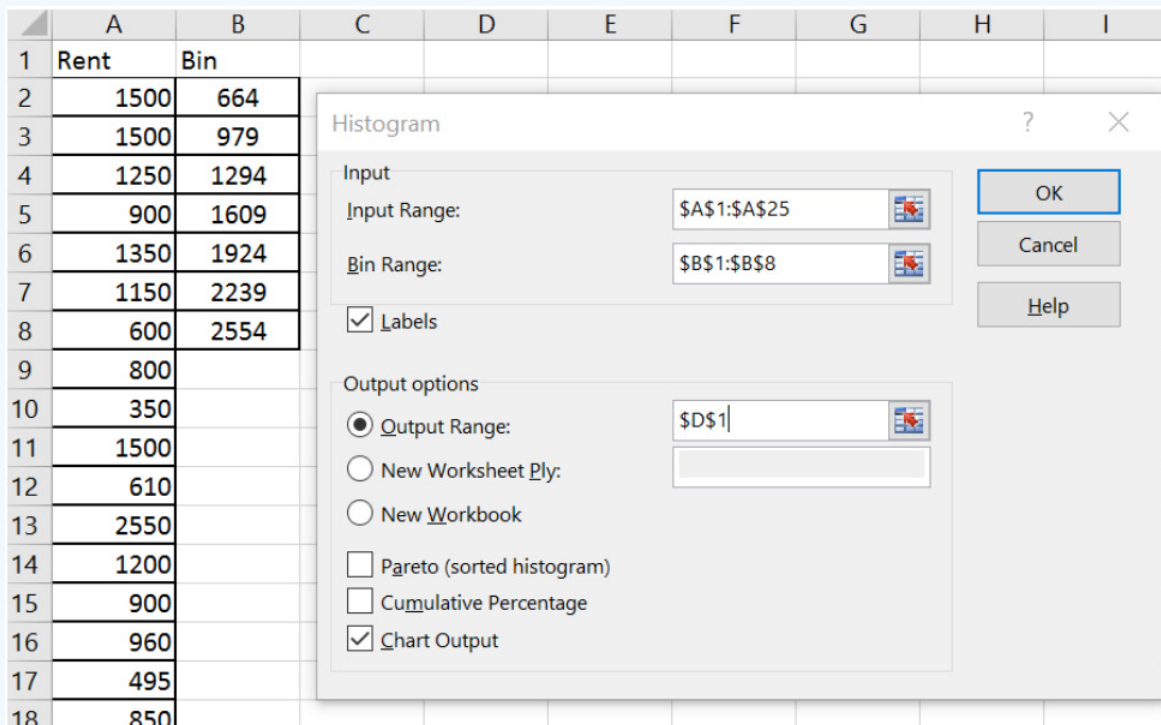


Figure 2-10

By hand: Tally and find the frequency of the data.

Frequency Distribution for Monthly Rent

Class Limits	Tally	Frequency	Relative Frequency
350-664	4	4	0.1667
665-979	8	8	0.333
980-1294	5	5	0.2083

1295-1609	6	6	0.25
1610-1924	0	0	0
1925-2239	0	0	0
2240-2554	1	1	0.0417
Total	0	24	1

Figure 2-11

Make sure the total of the frequencies is the same as the number of data points and the total of the relative frequency is one. Since we want the bars on the histogram to touch, the number line needs to use the class boundaries that are half way between the endpoints of the class limits. Start by finding the distance between the class endpoints and divide by two: $(665-664)/2 = 0.5$. Then subtract 0.5 from the left-hand side of each class limit and this will give you the points to use on the x-axis: 349.5, 664.5, 979.5, 1294.5, 1609.5, 1924.5, 2239.5, and 2554.5. Then draw your graph as in Figure 2-12. You can use frequencies or relative frequencies for the y-axis.

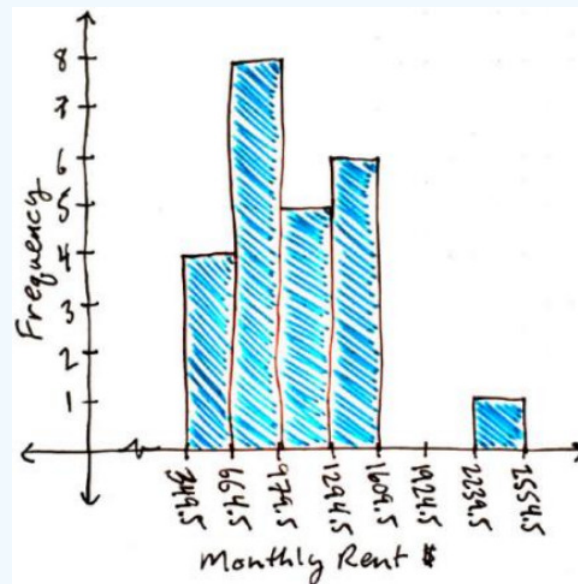


Figure 2-12

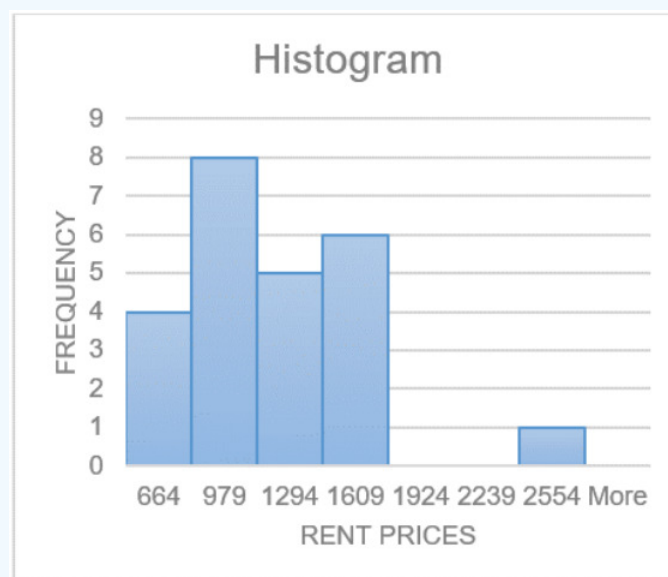


Figure 2-13

Reviewing the graph in Figure 2-13, you can see that most of the students pay around \$750 per month for rent, with about \$1,500 being the other common value. Most students pay between \$600 and \$1,600 per month for rent. Of course, these values are just estimates pulled from the graph.

There is a large gap between the \$1,500 class and the highest data value. This seems to say that one student is paying a great deal more than everyone else is. This value may be an outlier.

An **outlier** is a data value that is far from the rest of the values. It may be an unusual value or a mistake. It is a data value that should be investigated. In this case, the student lives in a very expensive part of town, thus the value is not a mistake, and is just very unusual. There are other aspects that can be discussed, but first some other concepts need to be introduced.

2.3.3 Ogive

The line graph for the cumulative or cumulative relative frequency is called an **ogive** ([oh-jyve](#)). To create an ogive, first create a scale on both the horizontal and vertical axes that will fit the data. Then plot the points of the upper class boundary versus the cumulative (or cumulative relative) frequency. Make sure you include the point with the lowest class and the zero cumulative frequency. Then just connect the dots.

The steeper the line the more accumulation occurs across the corresponding class. If the line is flat then the frequency for that class is zero. The ogive graph will always be going uphill from left to right and should never dip below the previous point. Figure 2-14 is an example of an ogive.

Ogive comes from the uphill shape used in architecture. Here is an example of an ogive in the East Hall staircase at PSU.



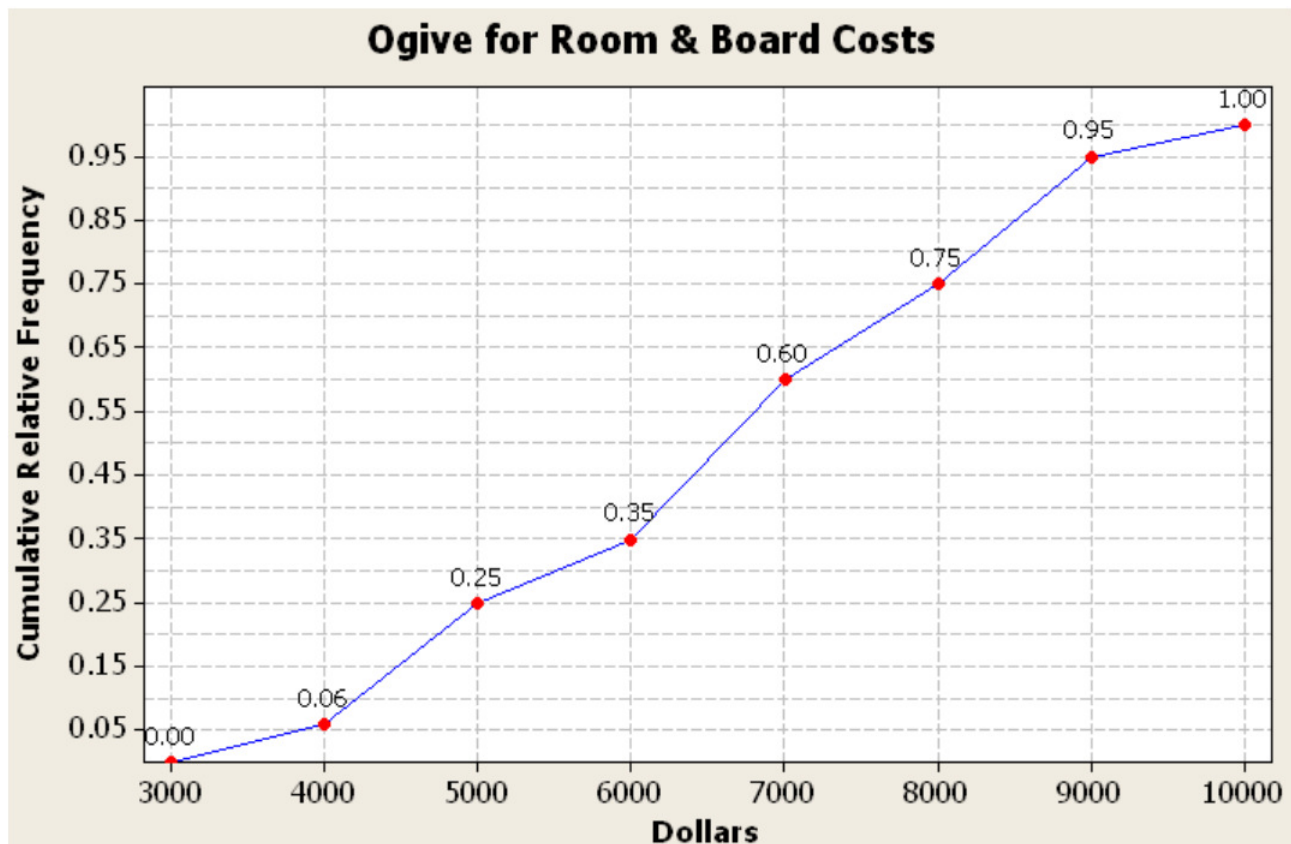


Figure 2-14

Make an ogive for the following random sample of rent prices students pay with the corresponding cumulative frequency distribution table.

1500 1350 350 1200 850 900 1250 600 610 960 890 1325 1500 1150 1500 900 1400 1100 900 800 2550 495 1200 690

Class Limits	Frequency	Cumulative Frequency
350 - 664	4	4
665 - 979	8	12
980 - 1294	5	17
1295 - 1609	6	23
1610 - 1924	0	23
1925 - 2239	0	23
2240 - 2554	1	24

Solution

Find the class boundaries, 349.5, 664.5 ... use these for the tick mark labels on the horizontal x-axis, the same as what was used for the histogram. The y-axis uses the cumulative frequencies. The largest cumulative frequency is 24. Every third number is marked on the y-axis units. See Figure 2-15 and Figure 2-16.

By hand:

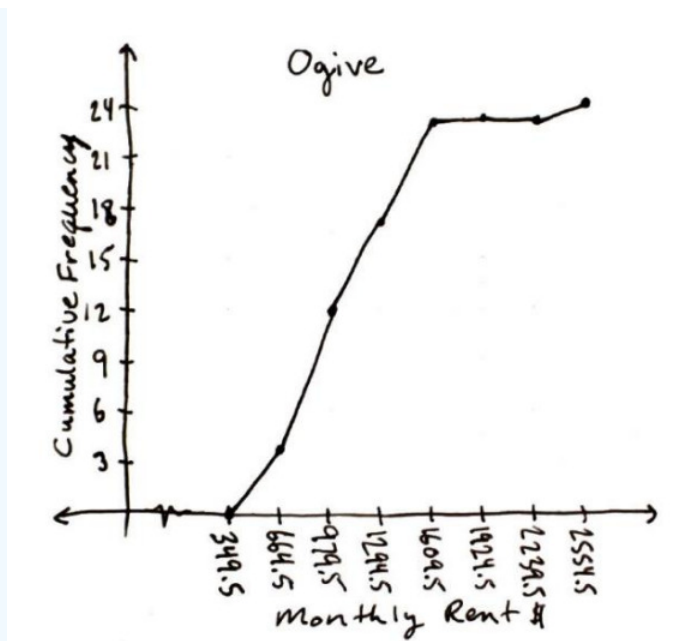


Figure 2-15

Using software:

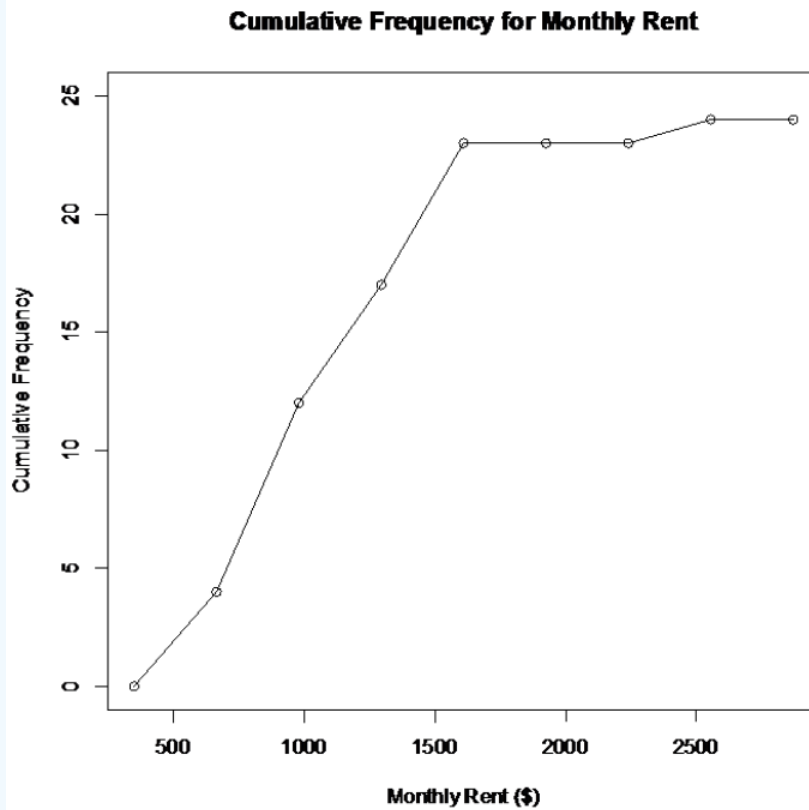


Figure 2-16

The usefulness of an ogive is to allow the reader to find out how many students pay less than a certain value, and what amount of monthly rent a certain number of students pay.

For instance, if you want to know how many students pay less than \$1,500 a month in rent, then you can go up from the \$1,500 until you hit the line and then you go left to the cumulative frequency axis to see what cumulative frequency corresponds to \$1,500. It appears that around 21 students pay less than \$1,500. See Figure 2-17.

If you want to know the cost of rent that 15 students pay less than, then you start at 15 on the vertical axis and then go right to the line and down to the horizontal axis to the monthly rent of about \$1,200. You can see that about 15 students pay less than about \$1,200 a month. See Figure 2-18.

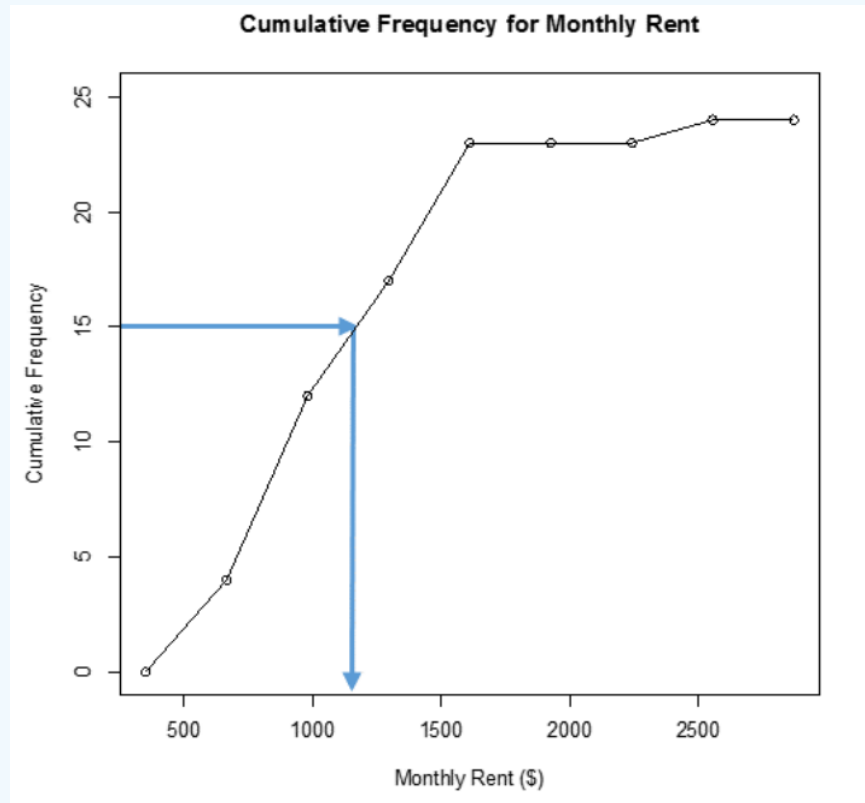


Figure 2-17

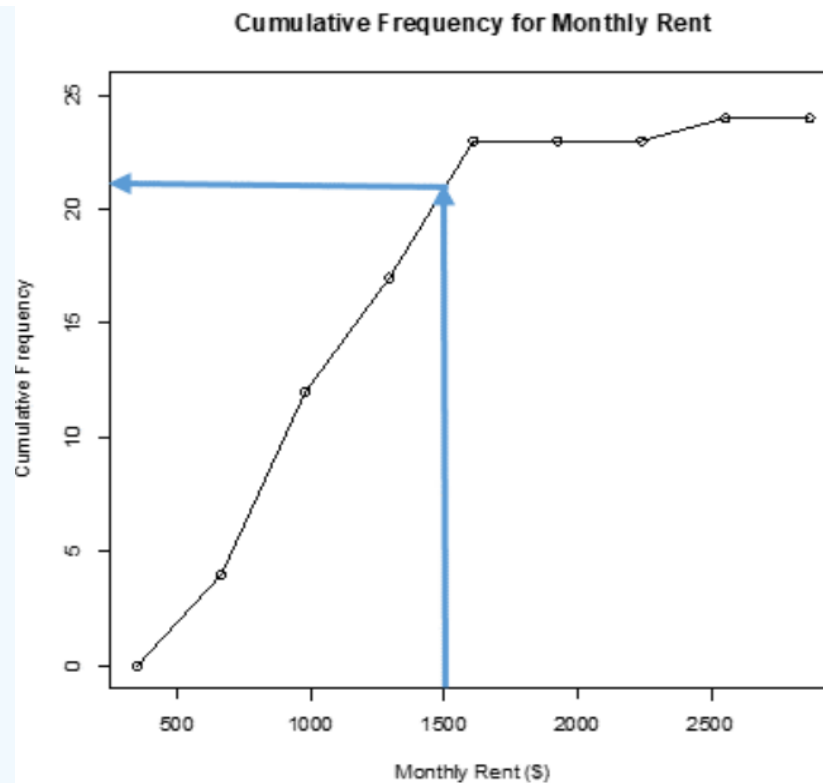


Figure 2-18

If you graph the cumulative relative frequency then you can find out what percentage is below a certain number instead of just the number of people below a certain value.

Using the sample of 35 ages, make an ogive.

46 47 49 25 46 22 42 24 46 40 39 27 25 30 33 27 46 21 29 20 26 25 25 26 35 49 33 26 32 31 39 30 39 29 26

Solution

Excel

Excel will plot an ogive over a histogram as one of its options, but the scale is harder to read.

Type the data in any order into column A and the bins in order in column B as shown below. Then select the Data tab, select Data Analysis, select Histogram, then select OK, see below.

	A	B
1	Age	Bin
2	20	24
3	21	29
4	22	34
5	24	39
6	25	44
7	25	49
8	25	
9	25	
10	26	
11	26	
12	26	

In the dialogue box, click into the Input Range box, then use your mouse and highlight the ages including the label. Then click into the Bin Range box and use your mouse to highlight the bins including the label. Select the box for Labels only if you included the labels in your ranges. You can have your output default to a new worksheet, or select the circle to the left of Output Range, click into the box to the right of Output Range and then select one blank cell on your spreadsheet where you want the top left-hand corner of your table and graph to start. Then check the boxes next to Cumulative Percentage and Chart Output. Then select OK.

Histogram

Input

Input Range:

Bin Range:

☒ Labels

Output options

☒ Output Range:

☐ New Worksheet Ply:

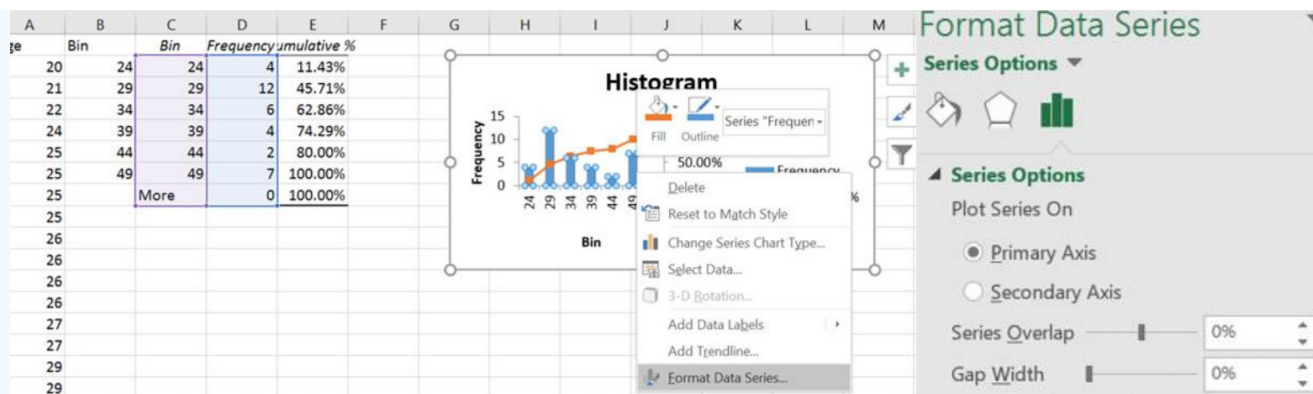
☐ New Workbook

☐ Pareto (sorted histogram)

☒ Cumulative Percentage

☒ Chart Output

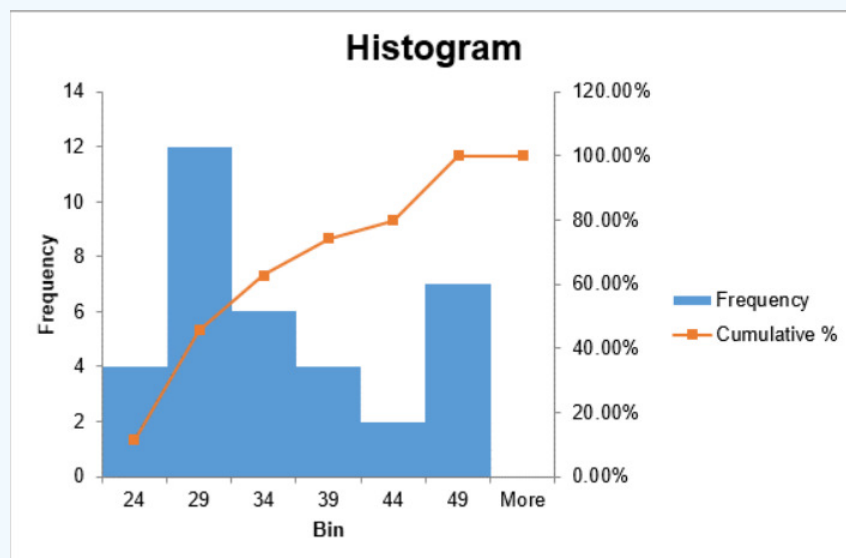
A histogram needs to have bars that touch, which is not the default in Excel. To get the bars to touch, right-click on one of the blue bars and select Format Data Series and slide the Gap Width to 0%.



Excel produces both a frequency table and a histogram. The table has the frequencies and the cumulative relative frequencies.

Bin	Frequency	Cumulative %
24	4	11.43%
29	12	45.71%
34	6	62.86%
39	4	74.29%
44	2	80.00%
49	7	100.00%
More	0	100.00%

The orange line is the ogive and the vertical axis is on the right side.



2.3.4 Pie Chart

You cannot make stem-and-leaf plots, histograms, ogives or time series graphs for qualitative data. Instead, we use bar or pie charts for a qualitative variable, which lists the categories and gives either the frequency (count) or the relative frequency (percent) of individual items that fall into each category.

A **pie chart** or pie graph is a very common and easy-to-construct graph for qualitative data. A pie chart takes a circle and divides the circle into pie shaped wedges that are proportional to the size of the relative frequency. There are 360 degrees in a full circle.

Relative frequency is just the percentage as a decimal. To find the angle for each pie wedge, multiply the relative frequency for each category by 360 degrees. Figure 2-19 is an example of a pie chart.

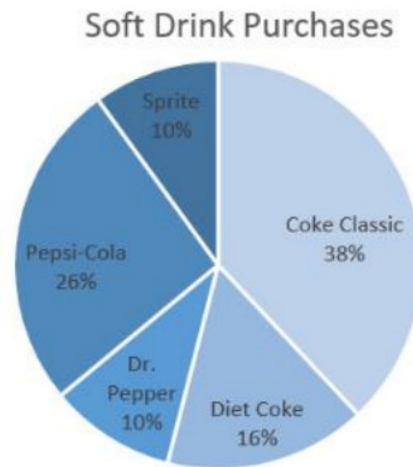


Figure 2-19

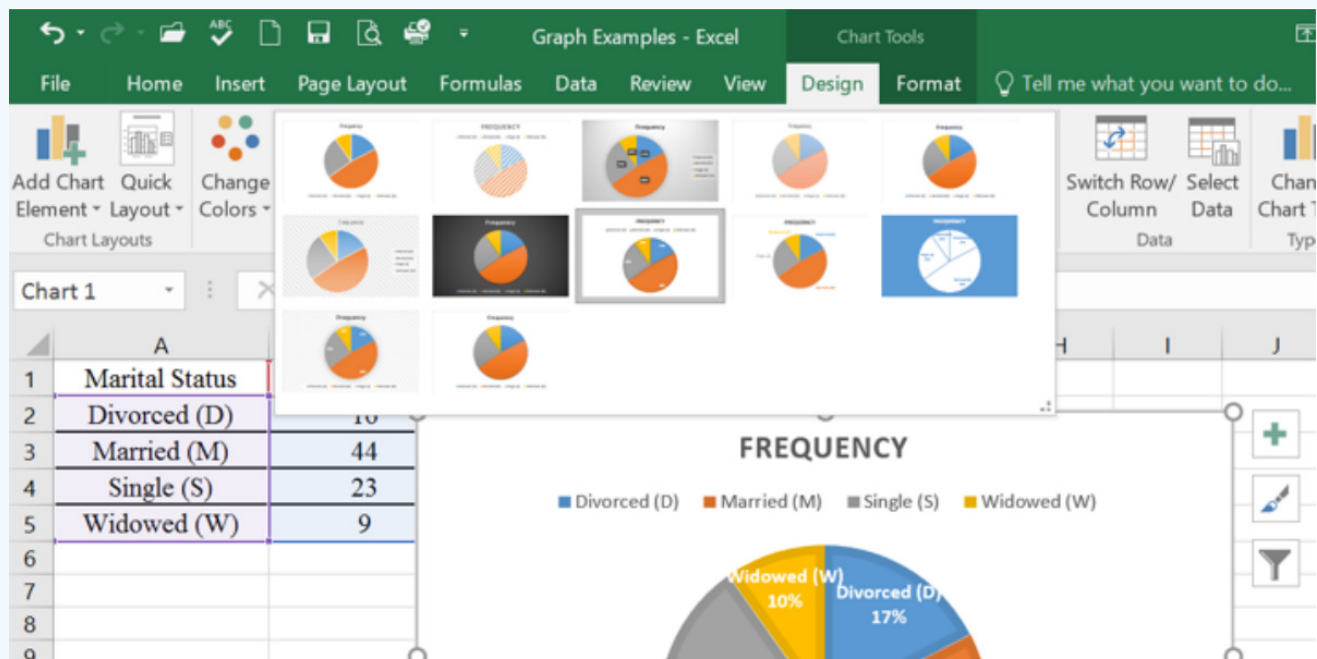
Use Excel to make a pie chart for the following frequency distribution of marital status.

Marital Status Frequency Divorced (D) 16 Married (M) 44 Single (S) 23 Widowed (W) 9

Solution

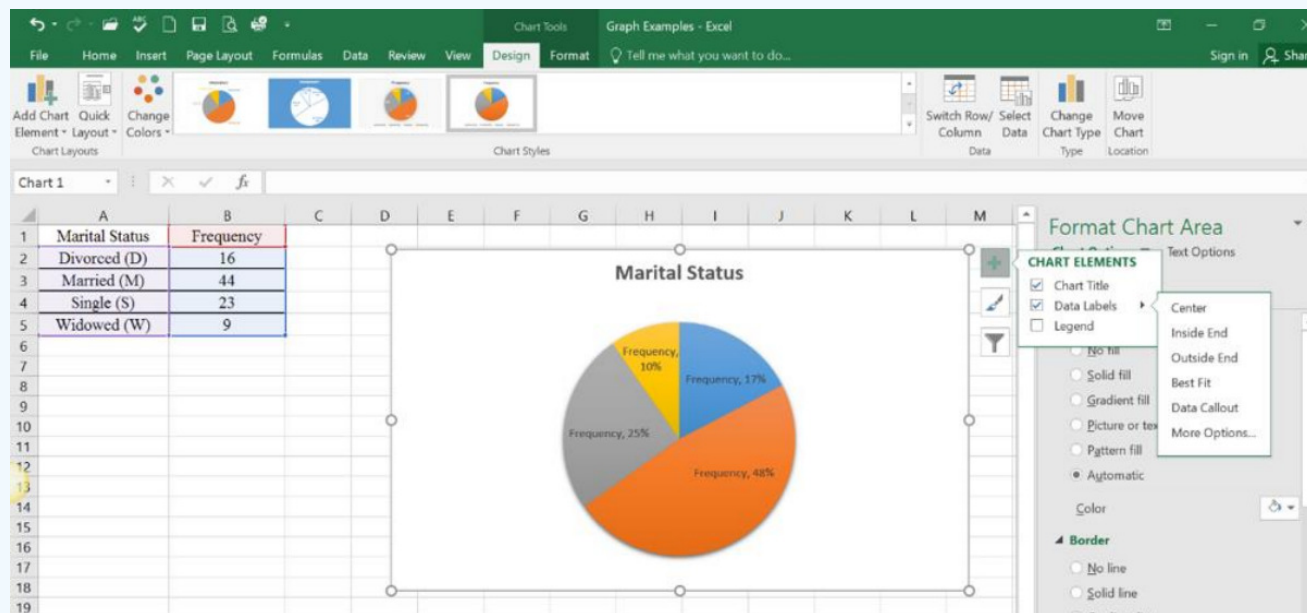
In Excel, type in the table as it appears, then use your mouse and highlight the entire table. Select the Insert tab, then select the pie graph icon, then select the first option under the 2-D Pie.

Once you have the pie chart you can select the Design window to get a graph to your liking.



It is good practice to include the class label and the percent. The percent should add up to 100%, although with rounding sometimes the sum can be off by 1%.

You can also click on the green plus sign to the right of the graph and add different formatting options, or the paintbrush to change colors.



Here is the finished pie graph.

2.3.5 Bar Graph

A bar graph (column graph or bar chart) is another graph of a distribution for qualitative data. **Bar graphs or charts** consist of frequencies on one axis and categories on the other axis. Then you draw rectangles for each category with a height (if frequency is on the vertical axis) or length (if frequency is on the horizontal axis) that is equal to the frequency. All of the rectangles should be the same width, and there should be equally wide gaps between each bar. Figure 2-20 is an example of a bar chart.

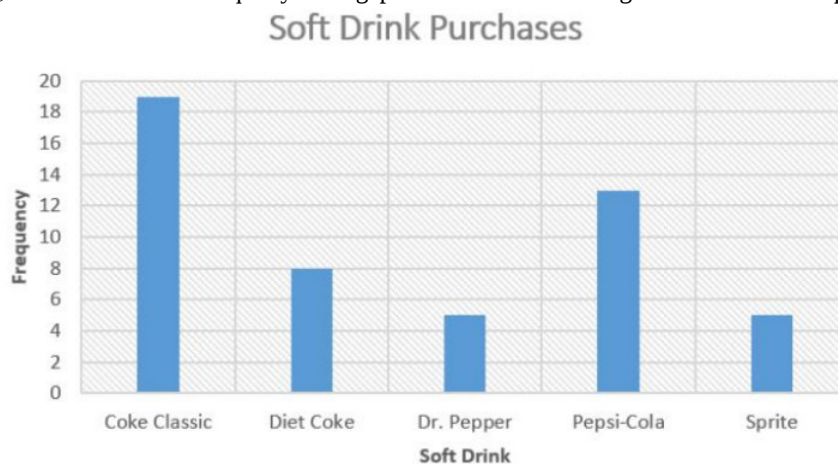


Figure 2-20

Some key features of a bar graph:

- Equal spacing on each axis
- Bars are the same width
- Label each axis and title the graph
- Show the scale on the frequency axis
- Label the categories on the category axis

- The bars do not touch.

You can draw a bar graph with frequency or relative frequency on the vertical axis. The relative frequency is useful when you want to compare two samples with different sample sizes. The relative frequency graph and the frequency graph should look the same, except for the scaling on the frequency axis.

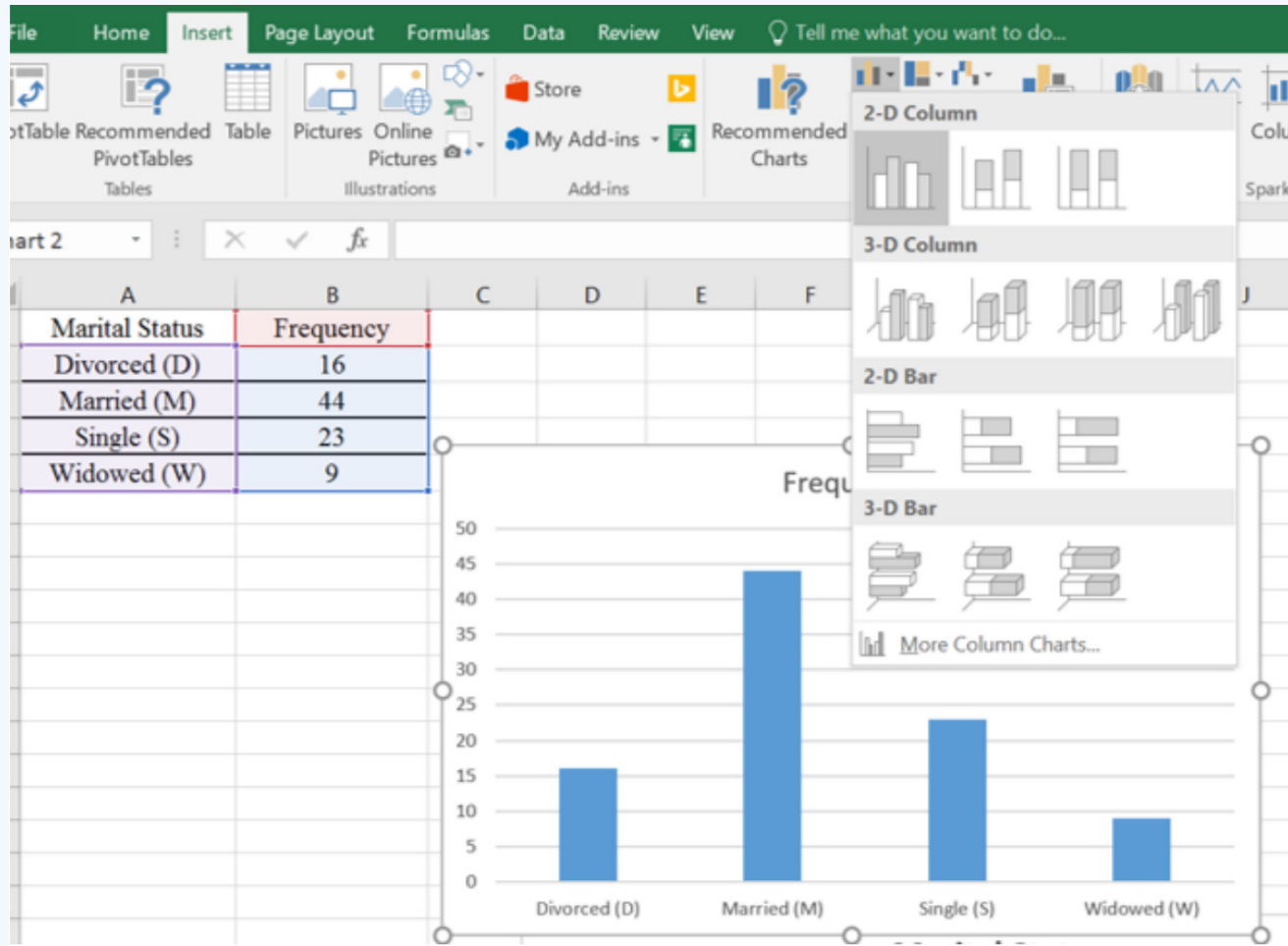
Use Excel to make a bar chart for the following frequency distribution of marital status.

Marital Status Frequency Divorced (D) 16 Married (M) 44 Single (S) 23 Widowed (W) 9

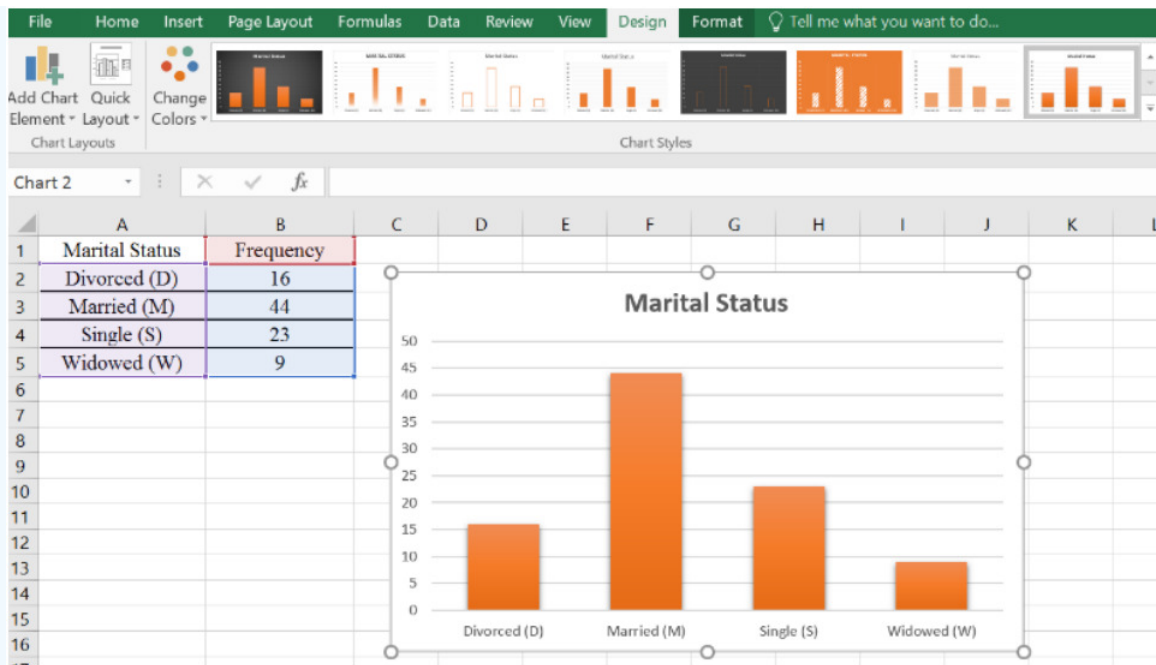
Solution

In Excel, type in the table as it appears, then use your mouse and highlight the entire table.

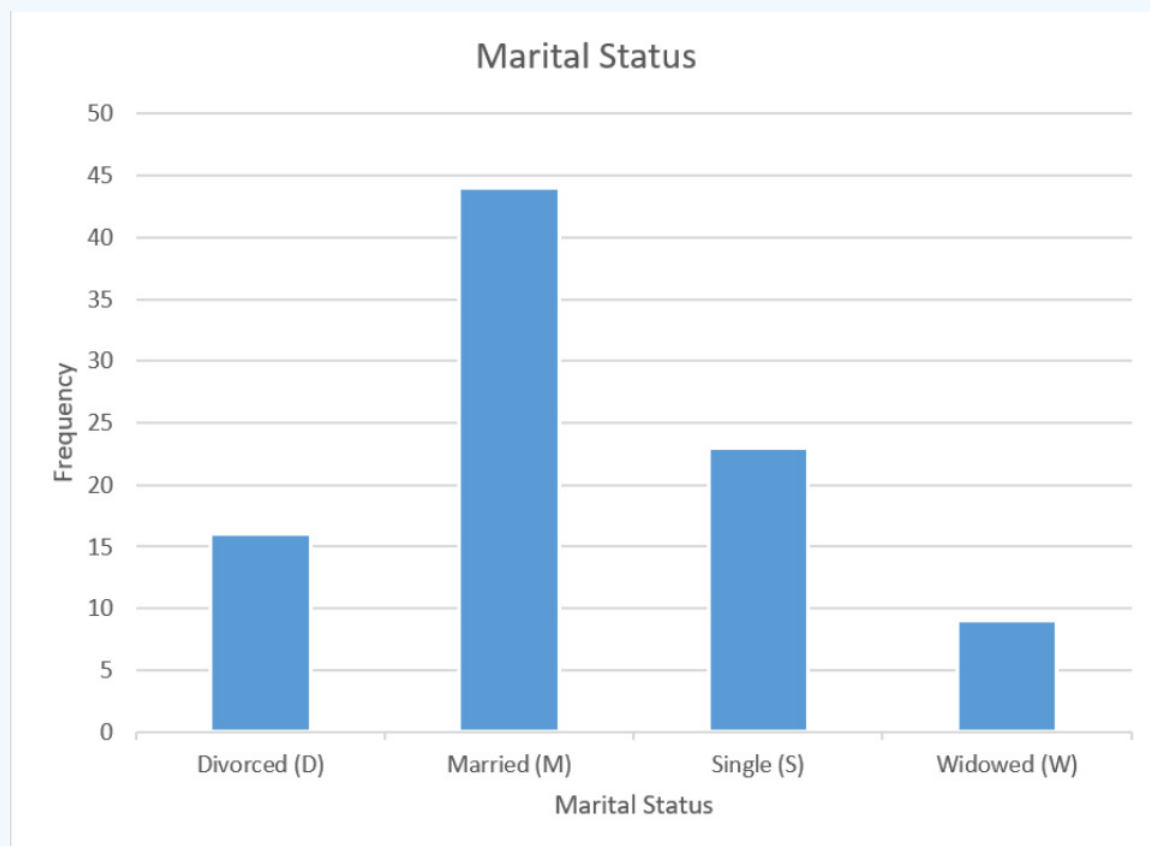
Similar steps as the pie chart, but this time choose the column graph option we get the following bar graph for marital status.



Then format the graph as needed.



The completed bar graph is below.



Pie charts are useful for comparing sizes of categories. Bar charts show similar information. It really is a personal preference and what information you are trying to address. However, pie charts are best when you only have a few categories and the data can be expressed as a percentage.

The data does not have to be percentages to draw the pie chart, but if a data value can fit into multiple categories, you cannot use a pie chart to display the data. As an example, if you are asking people which is their favorite national park and you ask

them to pick their top three choices, then the total number of answers can add up to more than 100% of the people surveyed. Therefore, you cannot use a pie chart to display the favorite national park, but a bar chart would be appropriate.

2.3.6 Pareto Chart

A Pareto (pronounced pə-RAY-toh) chart is a bar graph that starts from the most frequent class to the least frequent class. The advantage of Pareto charts is that you can visually see the more popular answer to the least popular. This is especially useful in business applications, where you want to know what services your customers like the most, what processes result in more injuries, which issues employees find more important, and other type of questions where you are interested in comparing frequency. Figure 2-21 is an example of a Pareto chart.



Pareto

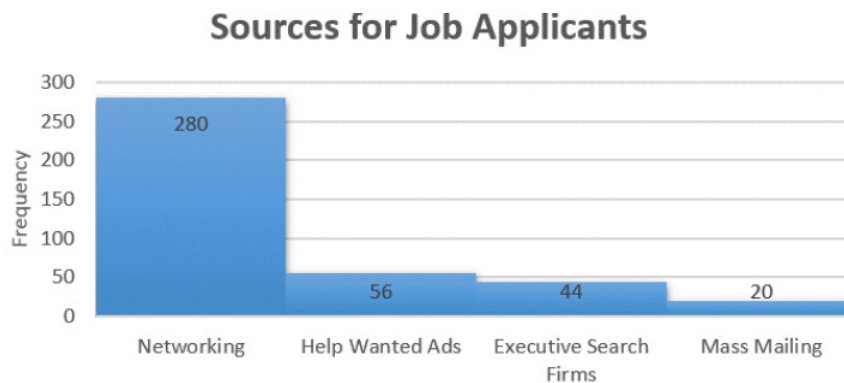


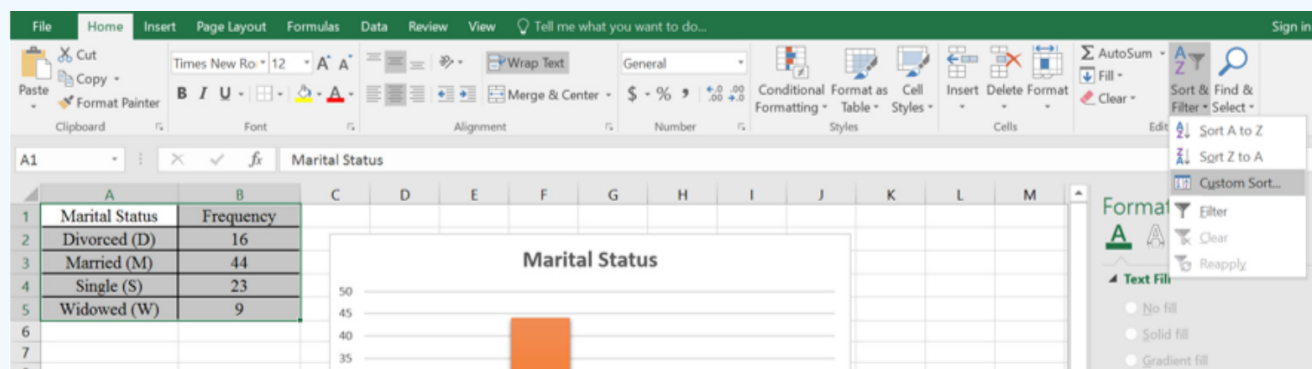
Figure 2-21

Use Excel to make a Pareto chart for the following frequency distribution of marital status.

Marital Status Frequency Divorced (D) 16 Married (M) 44 Single (S) 23 Widowed (W) 9

Solution

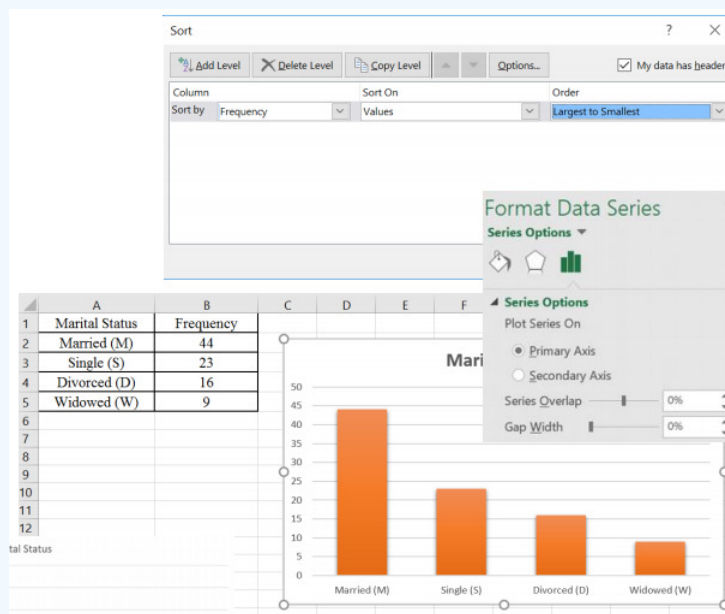
In Excel, type in the table as it appears, then use your mouse and highlight the entire table. Highlight the table, then select the Home tab, then select Sort & Filter, then select Custom Sort.



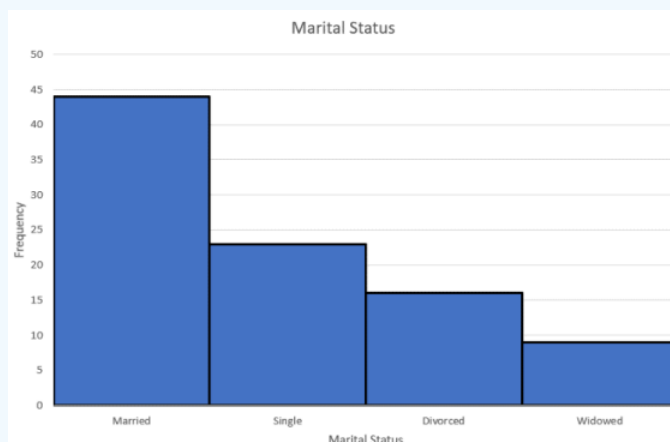
Change the Sort by to Frequency and the Order to Largest to Smallest and click OK.

This will automatically arrange the bars in your bar chart from largest to smallest.

Many Pareto charts will have the bars touching. You can right click on the bars, choose format data series, and then change the Gap Width to zero.



Here is the completed Pareto chart.



There are many other types of graphs used on qualitative data. There are software packages that will create most of them. It depends on your data as to which graph may be best to display the data.

2.3.7 Stacked Column Chart

The next example illustrates one of these types known as a stacked column chart. Stacked column (bar) charts are used when we need to show the ratio between a total and its parts. Each color shows the different series as a part of the same single bar, where the entire bar is used as a total.

In the Wii Fit game, you can do four different types of exercises: yoga, strength, aerobic, and balance. The Wii system keeps track of how many minutes you spend on each of the exercises every day. The following graph is the data for Niko over one-week time-period. Discuss any interpretations you can infer from the graph.

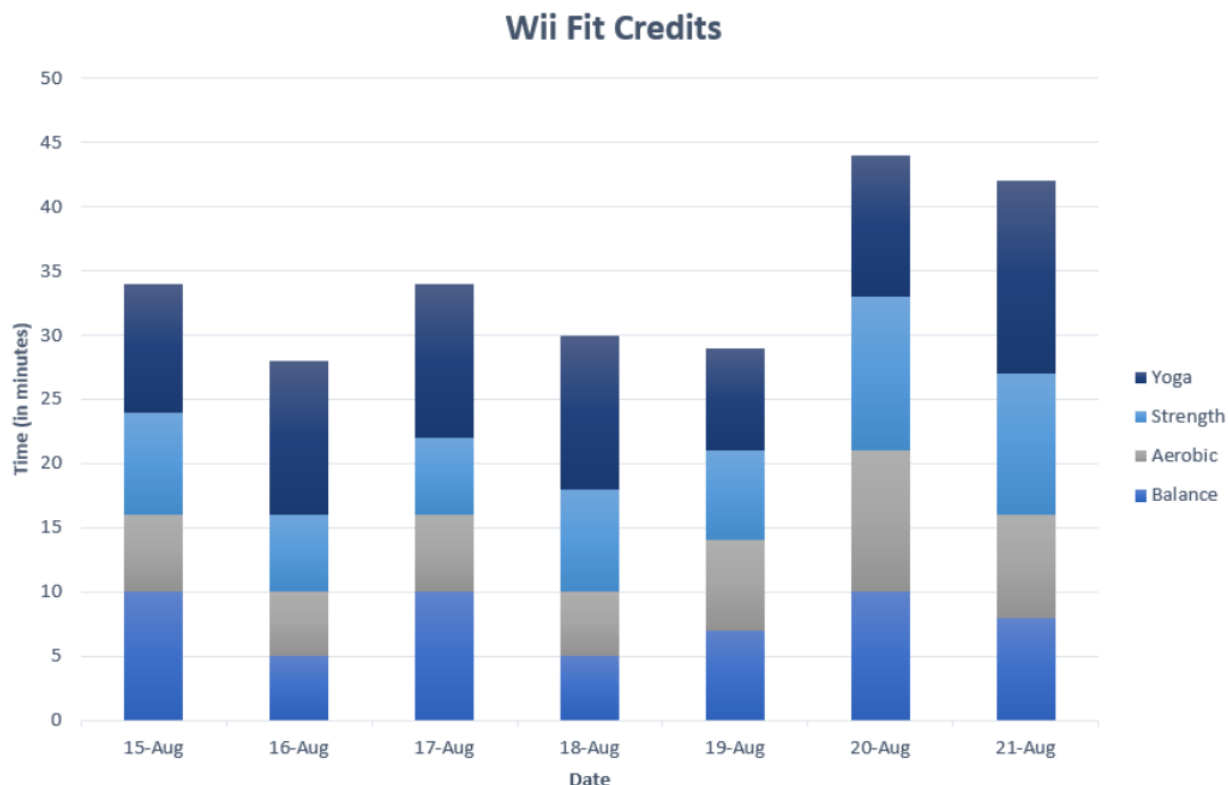


Figure 2-22

Solution

It appears that Niko spends more time on yoga than on any other exercises on any given day. He seems to spend less time on aerobic exercises on a given day. There are several days when the amount of exercise in the different categories is almost equal. The usefulness of a stacked column chart is the ability to compare several different categories over another variable, in this case time. This allows a person to interpret the data with a little more ease.

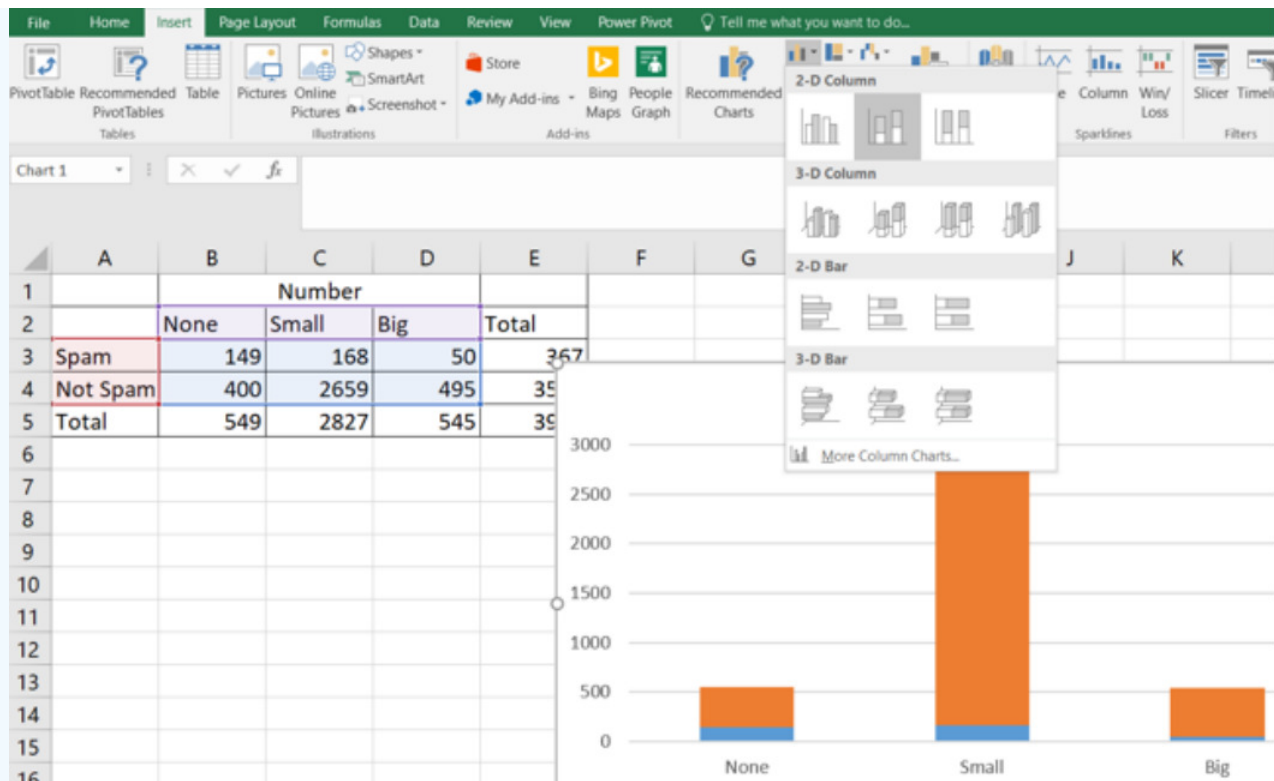
Data scientists write programming using statistics to filter spam from incoming email messages. By noting specific characteristics of an email, a data scientist may be able to classify some emails as spam or not spam with high accuracy. One of those characteristics is whether the email contains no numbers, small numbers, or big numbers. Make a stacked column chart with the data in the table. Which type of email is more likely to be spam?

Number	None	Small	Big	Total
Spam	149	168	50	367
Not Spam	400	2659	495	3554
Total	549	2827	545	3921

Example from [OpenIntroStatistics](https://openintrostatistics.org/).

Solution

Type the summarized table into Excel. Highlight just the inside of the table from the row label, column label and data (do not include the totals or Number label). Select the Insert tab, and then select the 2nd option under the column chart. Add a legend, labels and change colors for clarity.



The completed stacked bar graph is shown in Figure 2-23.

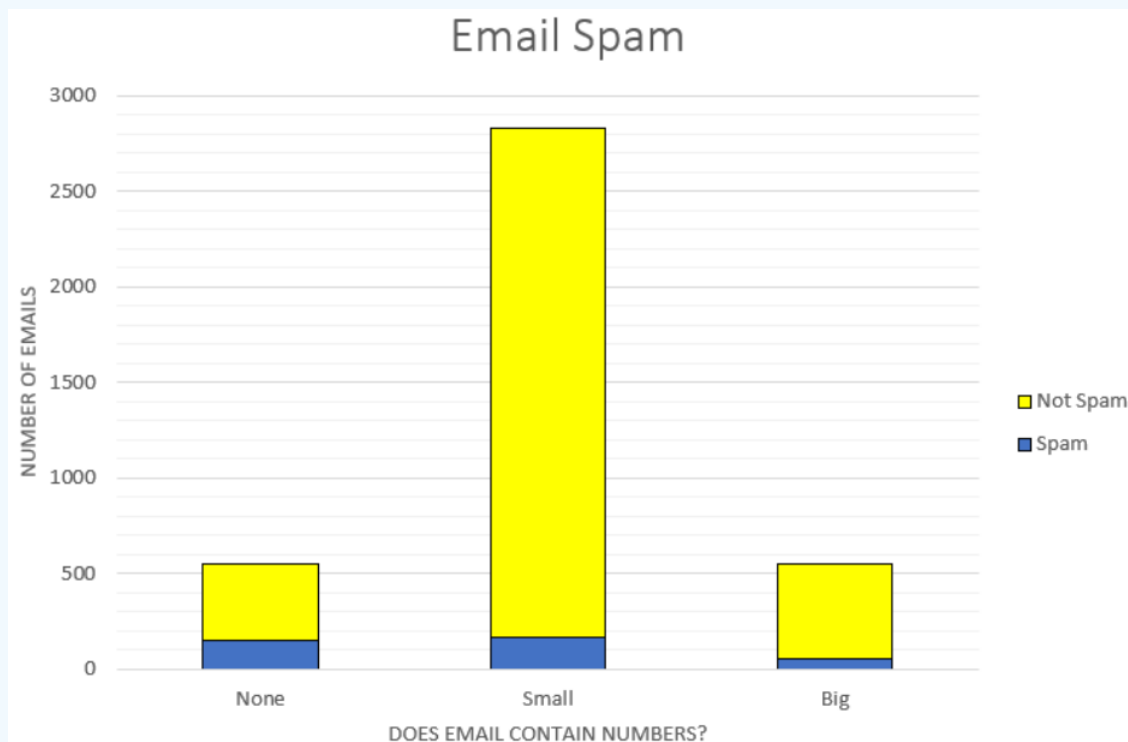


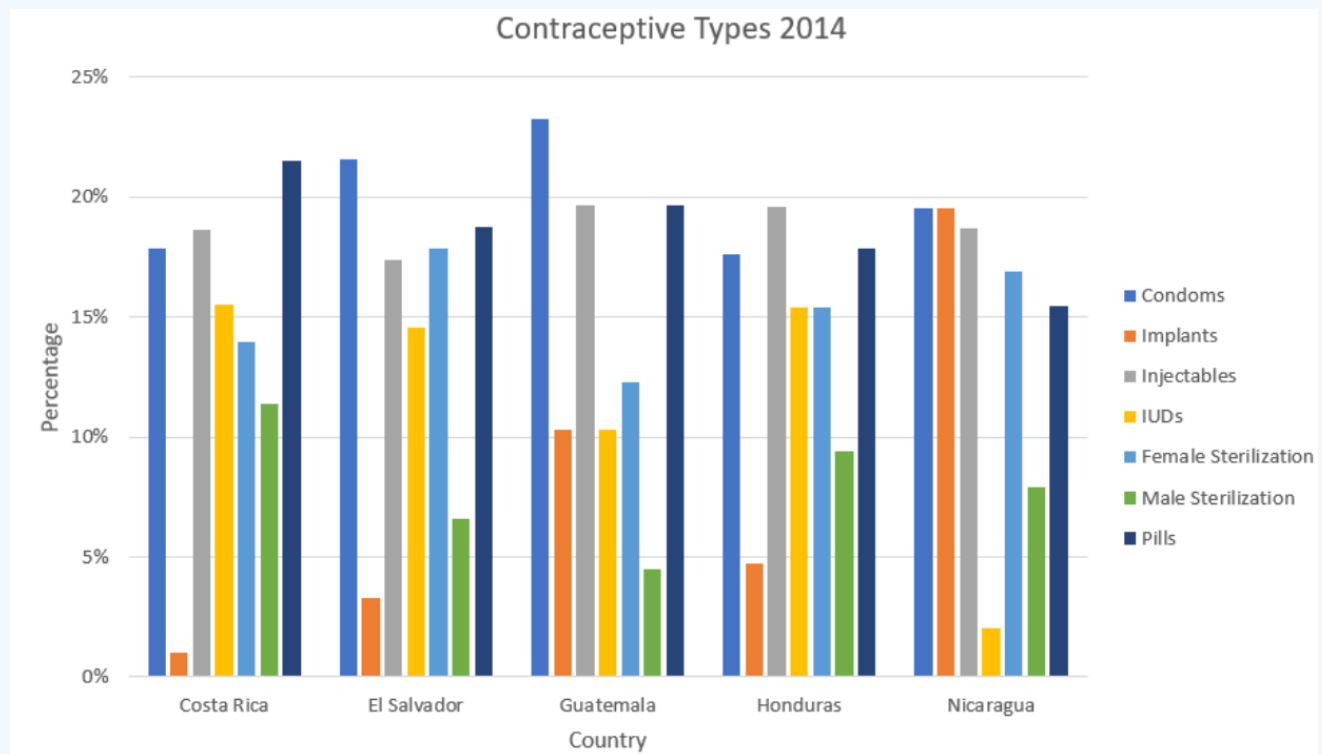
Figure 2-23

Emails with no numbers have a relatively high rate of spam email ($149/549 = 0.271$) about 27%. On the other hand, less than 10% of email with small numbers ($168/2827 = 0.059$) or big numbers ($50/545 = 0.092$) are spam.

2.3.8 Multiple or Side-by-Side Bar Graph

A multiple bar graph, also called a side-by-side bar graph, allows comparisons of several different categories over another variable.

The percentages of people who use certain contraceptives in Central American countries are displayed in the graph below. Use the graph to find the type of contraceptive that is most used in Costa Rica and El Salvador.



(9/21/2020) Retrieved from

<https://public.tableau.com/profile/prbdata#!/vizhome/AccessstoContraceptiveMethods/AccessstoContraceptiveMethods>

Figure 2-24

Solution

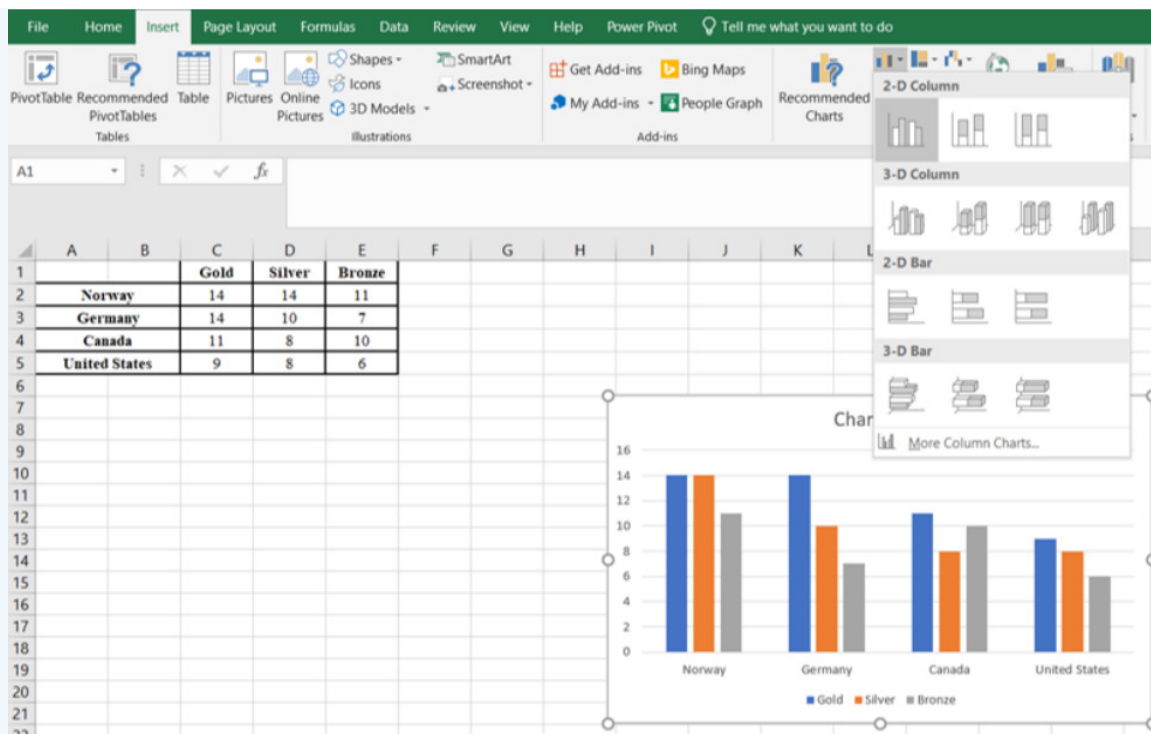
This side-by-side bar graph allows you to quickly see the differences between the countries. For instance, the birth control pill is used most often in Costa Rica, while condoms are most used in El Salvador.

Make a side-by-side bar graph for the following medal count for the 2018 Olympics.

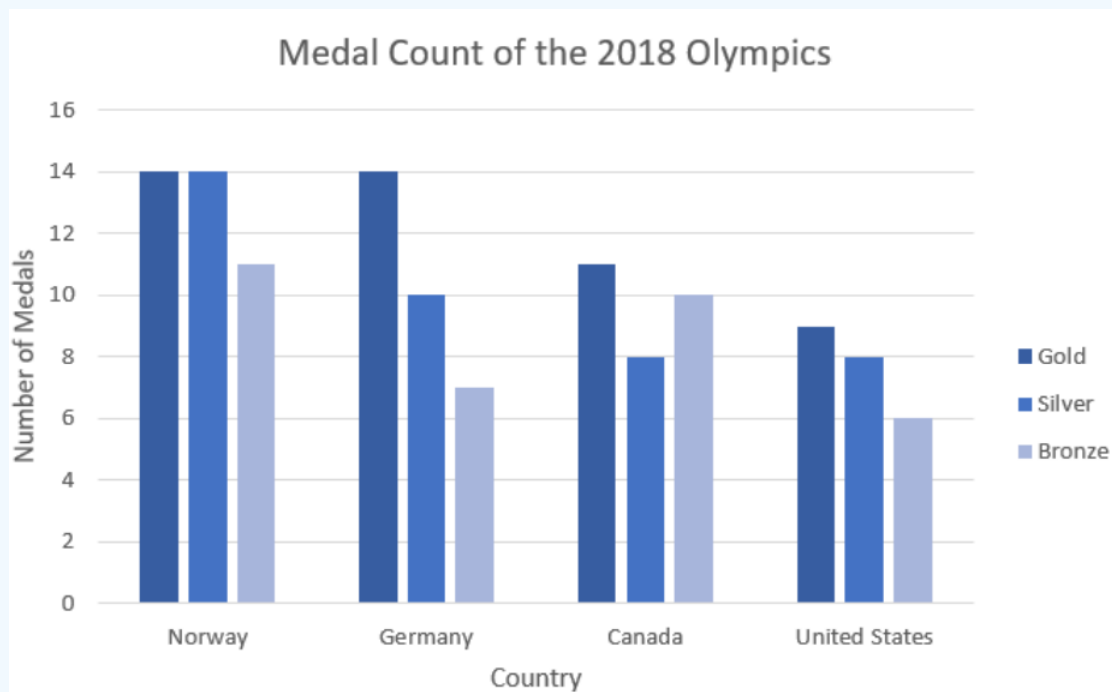
GoldSilverBronzeNorway 14 14 11 **Germany** 14 10 7 **Canada** 11 8 10 **United States** 9 8 6

Solution

Copy the table over to Excel. Highlight the entire table, then use similar steps as the regular bar graph.



Add labels and change the color. The completed graph is shown below.



2.3.9 Time-Series Plot

A **time-series** plot is a graph showing the data measurements in chronological order, where the data is quantitative data. For example, a time-series plot is used to show profits over the last 5 years. To create a time-series plot, time always goes on the horizontal axis, and the frequency or relative frequency goes on the vertical axis. Then plot the ordered pairs and connect the dots. A time series allows you to see trends over time. Caution: You must realize that the trend may not continue. Just because you see an increase does not mean the increase will continue forever. As an example, prior to 2007, many people noticed that housing

prices were increasing. The belief at the time was that housing prices would continue to increase. However, the housing bubble burst in 2007, and many houses lost value during the recession.

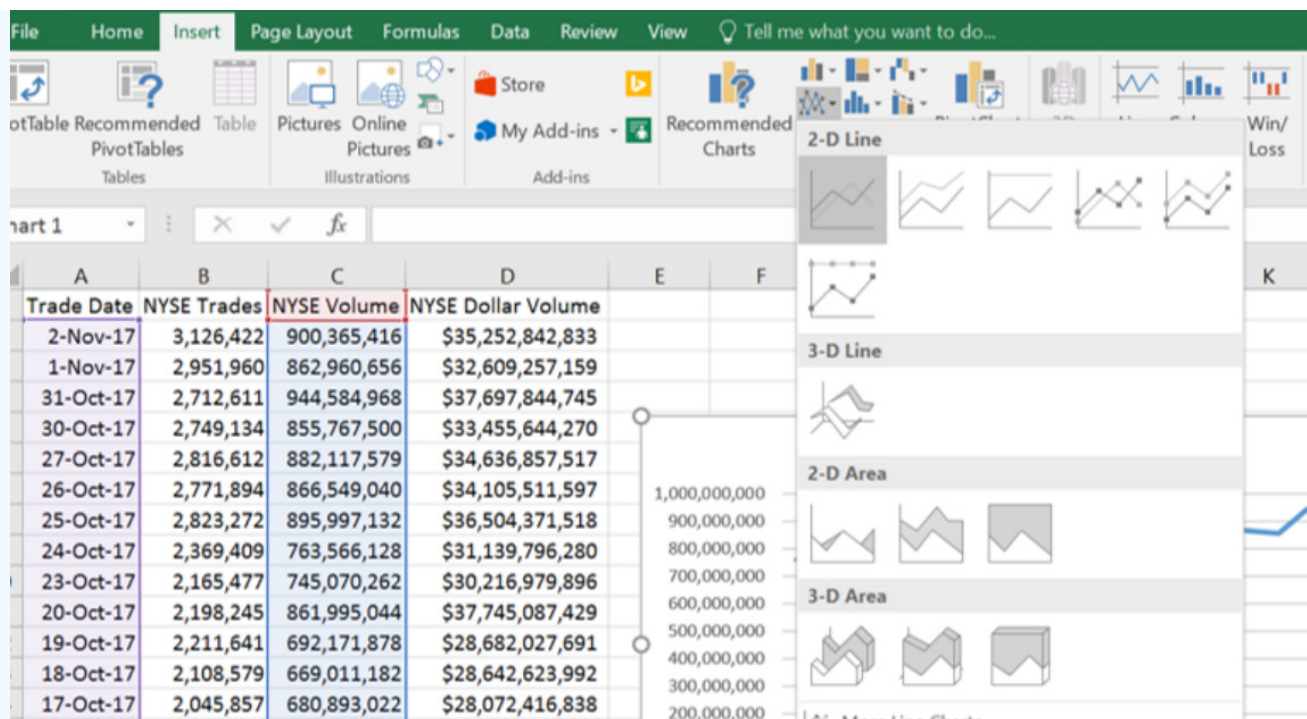
The New York Stock Exchange (NYSE) has a website where you can download information on the stock market. Use technology to make a time-series plot.

The daily trading volume for two weeks was downloaded at <http://www.nyxdata.com/Data-Products/NYSE-Volume-Summary#summaries>.

Trade Date	NYSE Trades	NYSE Volume	NYSE Dollar Volume
2-Nov-17	3,126,422	900,365,416	\$35,252,842,833
1-Nov-17	2,951,960	862,960,656	\$32,609,257,159
31-Oct-17	2,712,611	944,584,968	\$37,697,844,745
30-Oct-17	2,749,134	855,767,500	\$33,455,644,270
27-Oct-17	2,816,612	882,117,579	\$34,636,857,517
26-Oct-17	2,771,894	866,549,040	\$34,105,511,597
25-Oct-17	2,823,272	895,997,132	\$36,504,371,518
24-Oct-17	2,369,409	763,566,128	\$31,139,796,280
23-Oct-17	2,165,477	745,070,262	\$30,216,979,896
20-Oct-17	2,198,245	861,995,044	\$37,745,087,429
19-Oct-17	2,211,641	692,171,878	\$28,682,027,691
18-Oct-17	2,108,579	669,011,182	\$28,642,623,992
17-Oct-17	2,045,857	680,893,022	\$28,072,416,838
16-Oct-17	2,078,792	685,406,032	\$27,524,409,199
13-Oct-17	2,151,643	757,155,836	\$30,624,653,749

Solution

Using Excel, we will make a time series plot for NYSE daily trading volume. Using the Ctrl key highlight just the date column and the NYSE Volume, then select the Insert tab and the first 2-D line graph option.



You can then select different designs.



One can use time-series plots to see when they want to cash out or buy a stock.

The time-series graph shows the behavior of one variable over time and does not reflect other variables that are influencing the trading volume.

2.3.10 Scatter Plot

Sometimes you have two quantitative variables and you want to see if they are related in any way. A scatter plot helps you to see what the relationship may look like. A scatter plot is just a plotting of the ordered pairs.

- When you see the dots increasing from left to right then there is a positive relationship between the two quantitative variables.
- If the dots are decreasing from left to right then there is a negative relationship.
- If there is no apparent pattern going up or down, then we say there is no relationship between the two variables.

Is there any relationship between elevation and high temperature on a given day? The following data are the high temperatures at various cities on a single day and the elevation of the city.

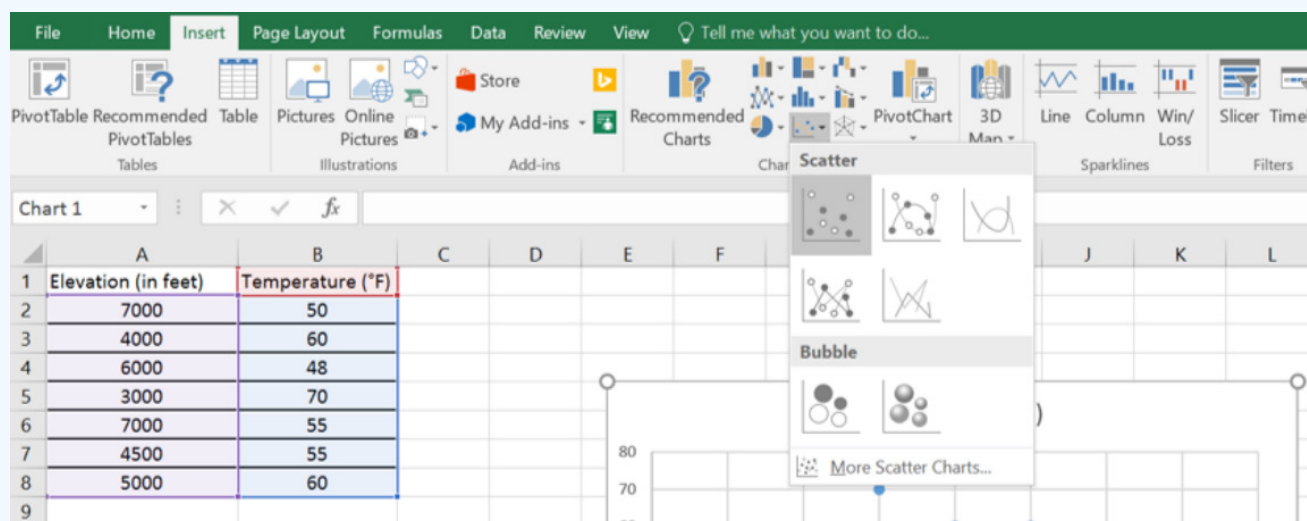
Make a scatterplot to see what type of relationship exists.

Elevation (in feet) 7000 4000 6000 3000 7000 4500 5000 Temperature (°F) 50 60 48 70 55 55 60

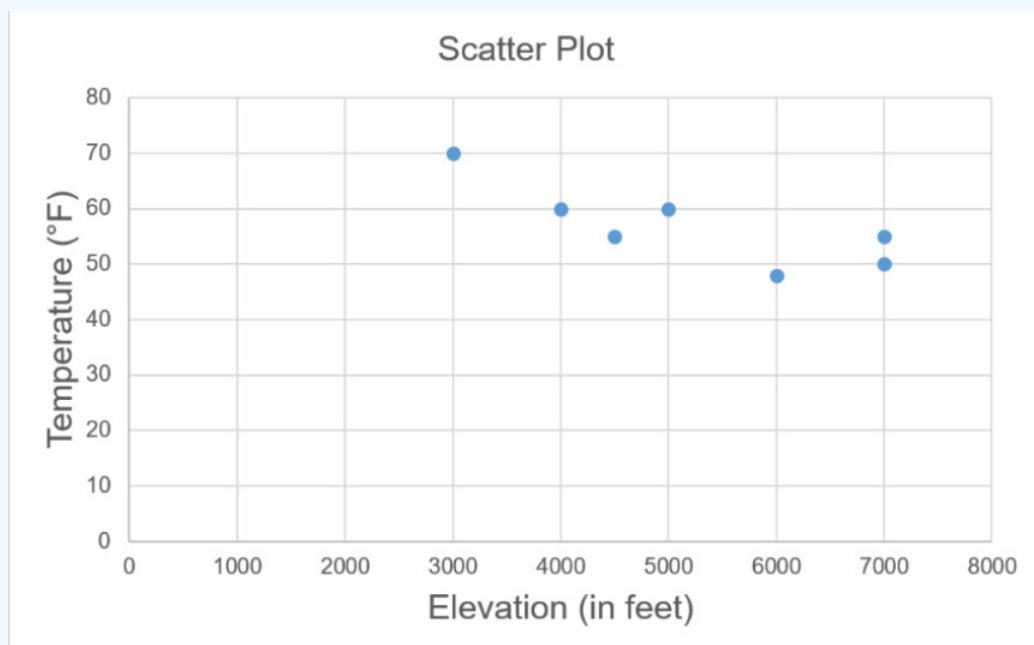
Solution

Excel

Type the data into two columns next to each other. It is important not to have a blank column between the points or Excel may give you an error message. Once you type your data into columns A and B, use your mouse and highlight all the data including the labels. Select the Insert tab, and then select the first box under Scatter.



Add appropriate labels. The completed scatter plot is shown below.

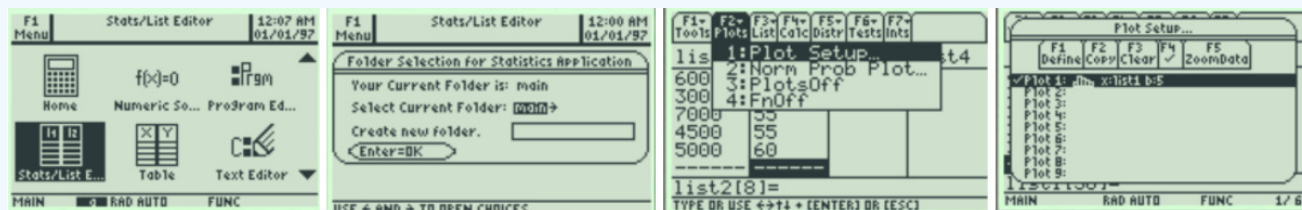


TI-84: First, enter the data into lists 1 and 2. Press [STAT] the first option is already highlighted (1:Edit) so you can either press [ENTER] or 1.Type in the data pressing [ENTER] after each one. For x-y data pairs, enter all x -values in one list. Enter all corresponding y -values in a second list. Press [2nd] [QUIT] to return to the home screen. Make sure you turn off other stat plots or graphs in the y= menu. Press [2nd] then the [y=] button. Select the first plot. Highlight On and press [Enter] so that On is highlighted. Arrow down to Type and highlight the first option that looks like a scatter plot. Make sure your x and y lists are using L₁ and L₂.


Select Zoom and arrow down to ZoomStat and press [Enter]. You will get the following scatterplot. Select Trace and use your arrow keys to see the values at different points.

TI-89: Press [♦] then [F1] (to get Y=) and clear any equations that are in the y-editor. Open the Stats/List Editor. Press [APPS], select **FlashApps** then press [ENTER]. Highlight **Stats/List Editor** then press [ENTER]. Press [ENTER] again to select the

main folder. Type in the data pressing [ENTER] after each one. Enter all x-values in one list. Enter all corresponding y-values in a second list. In the Stats/List Editor, select [F2] for the Plots menu. Use cursor keys to highlight 1:Plot Setup. Make sure that the other graphs are turned off by pressing [F4] button to remove the check marks. Under "Plot 1" press [F1] Define.



In the "Plot Type" menu, select "Scatter." Move the cursor to the "x" space press [2nd] Var-Link, scroll down to list1, and then press [Enter]. This will put the list name in the dialogue box. Do the same for the y values, but this time choose list2. Press [ENTER] twice and you will be returned to the Plot Setup menu.



Press F5 ZoomData to display the graph.

Press F3 Trace and use the arrow keys to scroll along the different points.

Interpreting the scatter plot.

The graph indicates a linear relationship between temperature and elevation. If you were to hold a pencil up to cover the dots, note that you would see that the dots roughly follow a fat line downhill.

It also appears to be a negative relationship, thus as elevation increases, the temperature decreases.

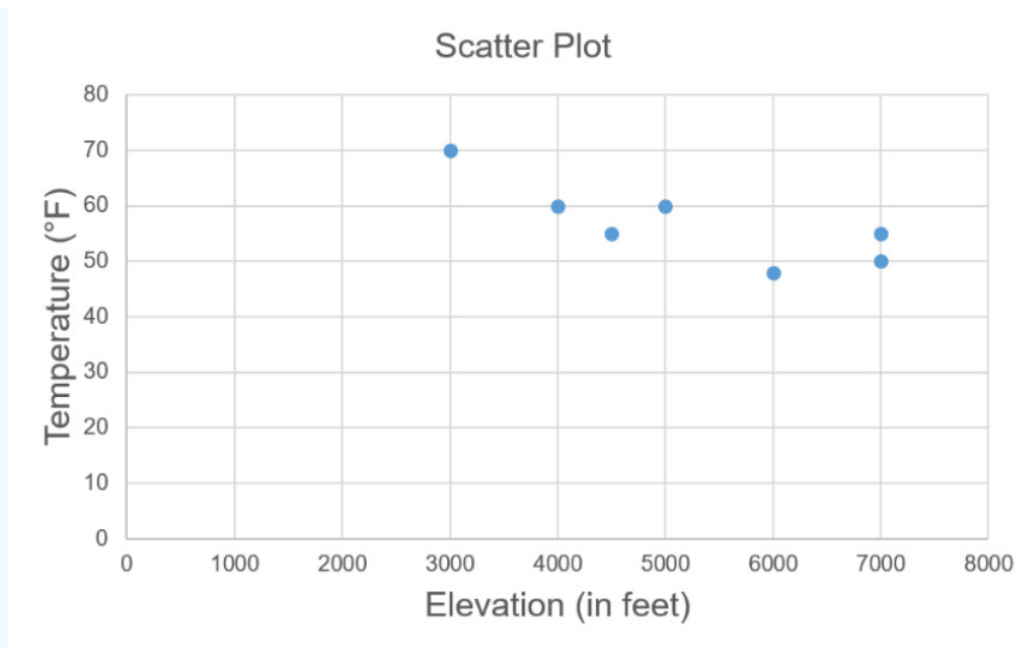


Figure 2-25

Be careful with the vertical axis of both time-series and scatter plots. If the axis does not start at zero the slope of the line can be exaggerated to show more or less of increase than there really is. This is done in politics and advertising to manipulate the data.

For example, if we change the vertical axis of temperature to go between 45°F and 75°F we get the following scatter plot in Figure 2-26.

We have the same arrangements of dots, but the slope looks much steeper over the 30° range.

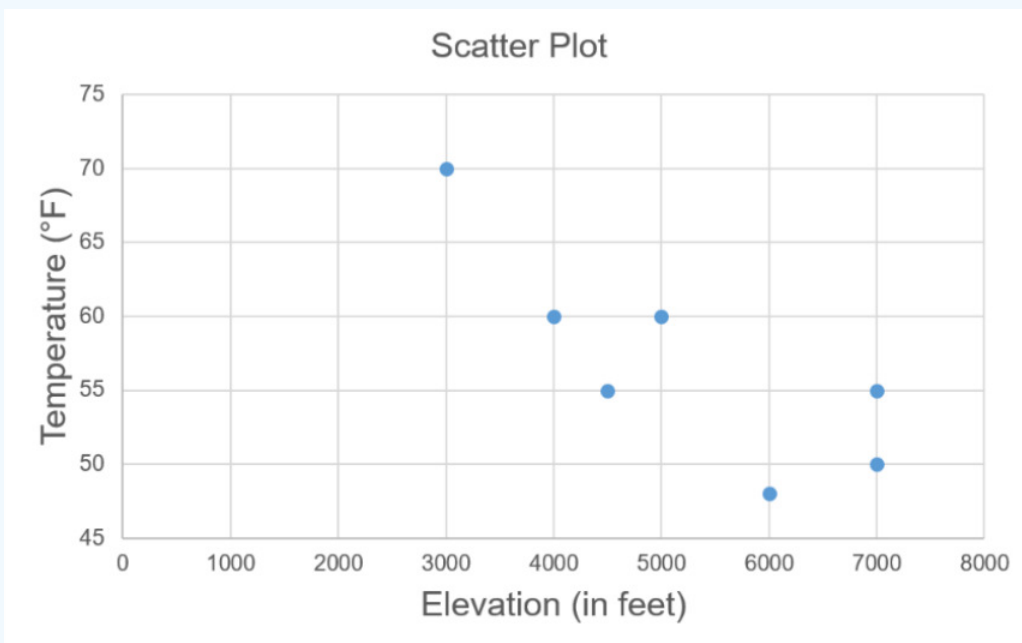


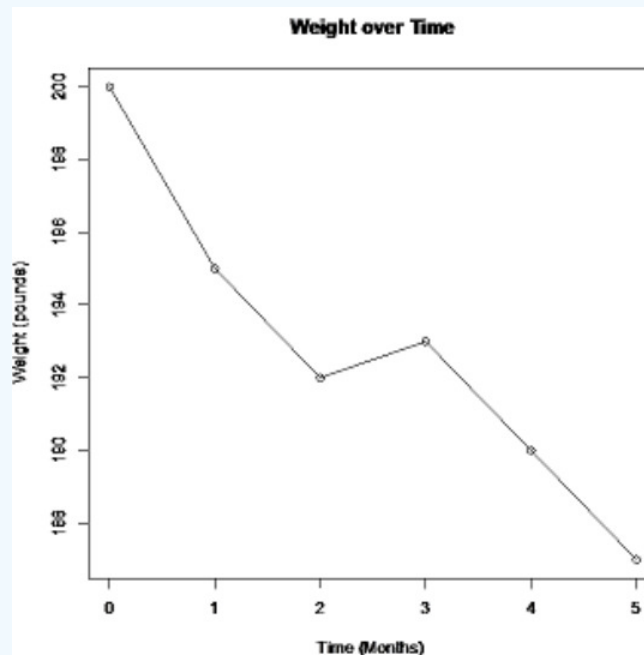
Figure 2-26

2.3.11 Misleading Graphs

One thing to be aware of as a consumer, data in the media may be represented in misleading graphs. Misleading graphs not only misrepresent the data, they can lead the reader to false conclusions. There are many ways that graphs can be misleading. One way to mislead is to use picture graphs or 3D graphs that exaggerate differences and should be used with caution. Leaving off units and labels can result in a misleading graph. Another more common example is to rescale or reverse the vertical axis to try to show a large difference between categories. Not starting the vertical axes at zero will show a more dramatic rate of change. Other ways that graphs can be misleading is to change the horizontal axis labels so that they are out of time sequence, using inappropriate graphs, not showing the base population.

What is misleading about the following graph?

An ad for a new diet pill shows the following time-series plot for someone that has lost weight over a 5-month period.



Solution

If you do not start the vertical axis at zero, then a change can look much more dramatic than it really is. Notice the decrease in weight looks much larger in Figure 2-27. The graph in Figure 2-28 has the vertical axis starting at zero. Notice that over the 5 months, the weight appears to be decreasing, however, it does not look like there is a large decrease.

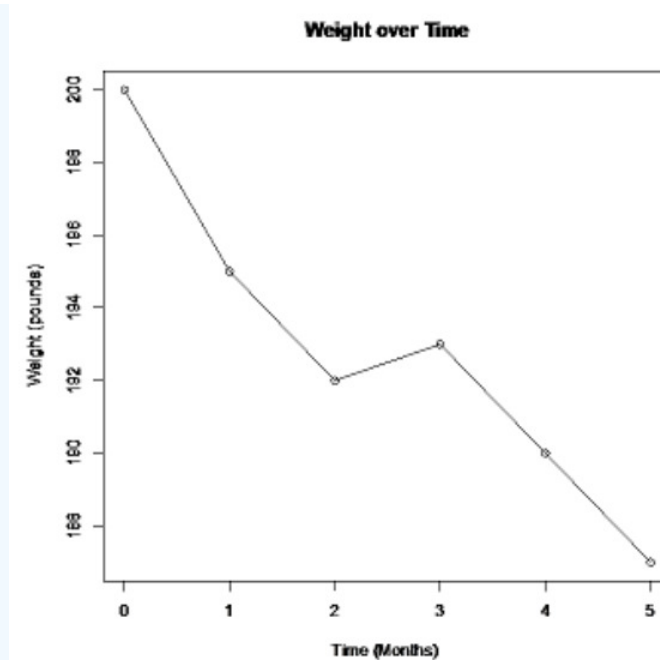


Figure 2-27

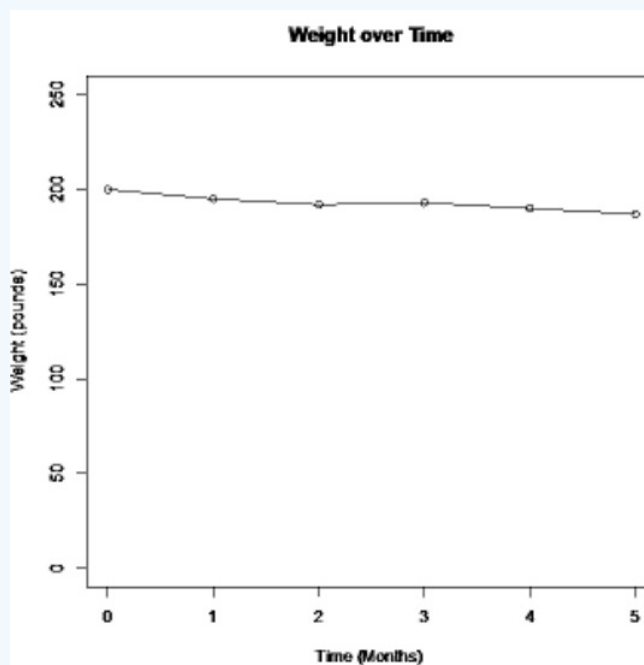


Figure 2-28

What is misleading about the graph in Figure 2-29?



<https://www.mediamatters.org/blog/2014/03/31/dishonest-fox-charts-obamacare-enrollment-editi/198679>.

Figure 2-29

Solution

The y-axis scale is different for each bar and there are no units on the axis. The first bar has each tic mark as 2 billion, the second bar has each tick as less than 1 billion.

This exaggerates the difference. If they used square scaling as in Figure 2-30, there would not be such an extreme difference between the height of the bars.

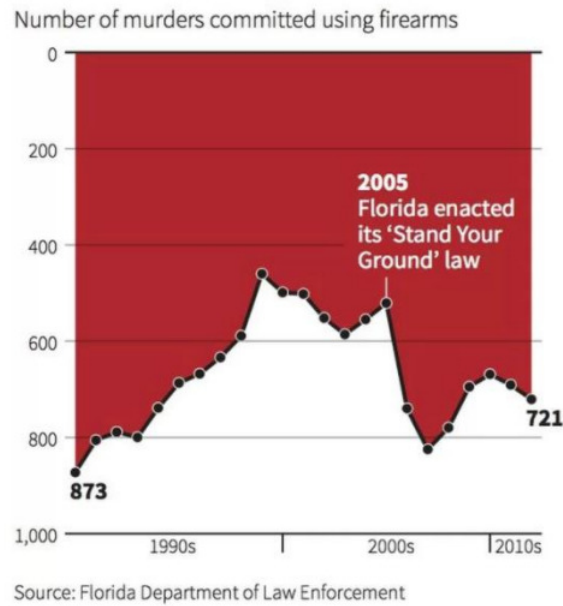


<https://www.mediamatters.org/blog/2014/03/31/dishonest-fox-charts-obamacare-enrollment-editi/198679>.

Figure 2-30

What is misleading about the graph in Figure 2-31?

Gun deaths in Florida



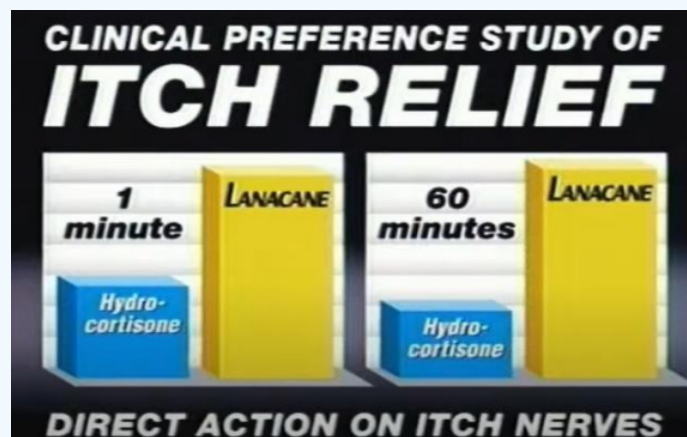
<https://www.livescience.com/45083-misleading-gun-death-chart.html>

Figure 2-31

Solution

The graph has the y-axis reversed. What looks like an increasing trend line really is decreasing when you correct the y-axis. The red background is also an effect to raise alarm, almost like a curtain of blood.

What is misleading about the graph shown in a Lanacane commercial in May 2012, shown in Figure 2-32?



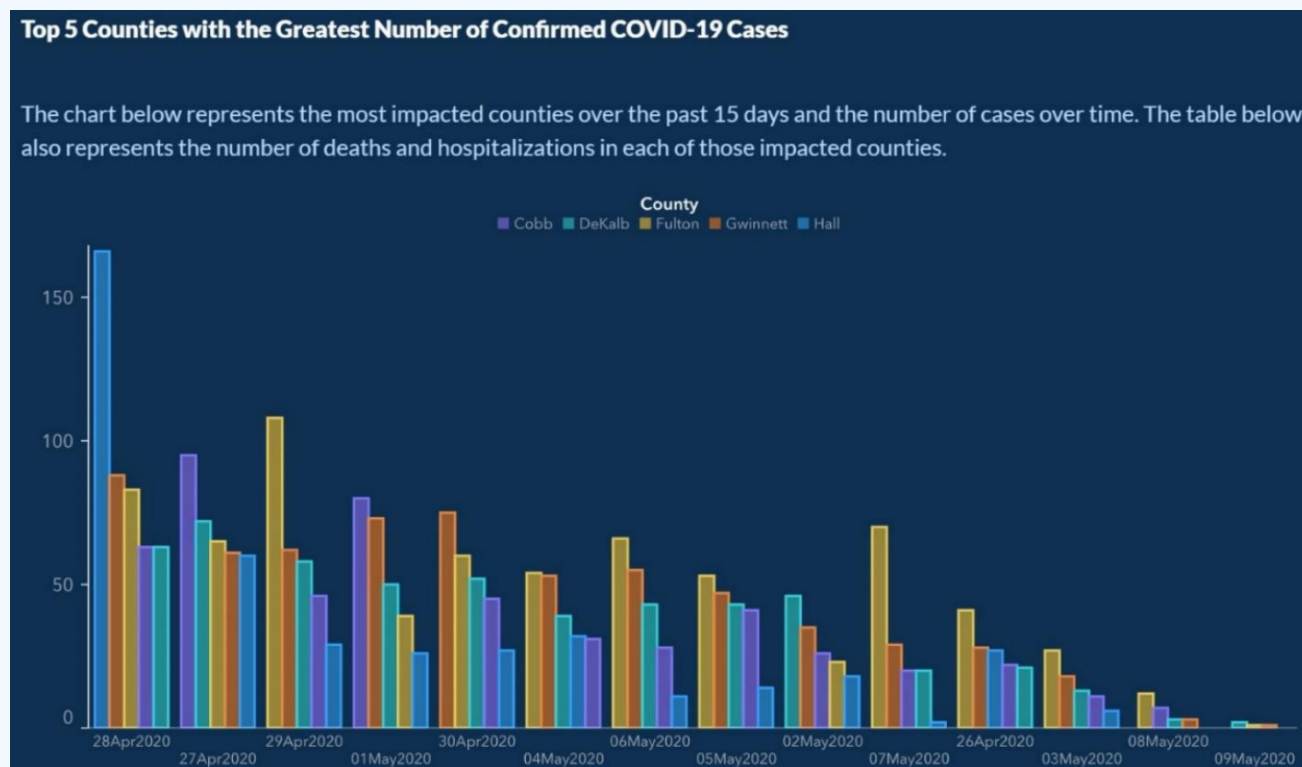
Retrieved 7/2/2021 from <https://youtu.be/I0DapkQ-c1I?t=17>

Figure 2-32

Solution

It appears that Lanacane is better than regular hydrocortisone cream at relieving itching. However, note that there are no units or labels to the axis.

What is misleading about the graph published Georgia's Department of Public Health website in May 2020, shown in Figure 2-33?

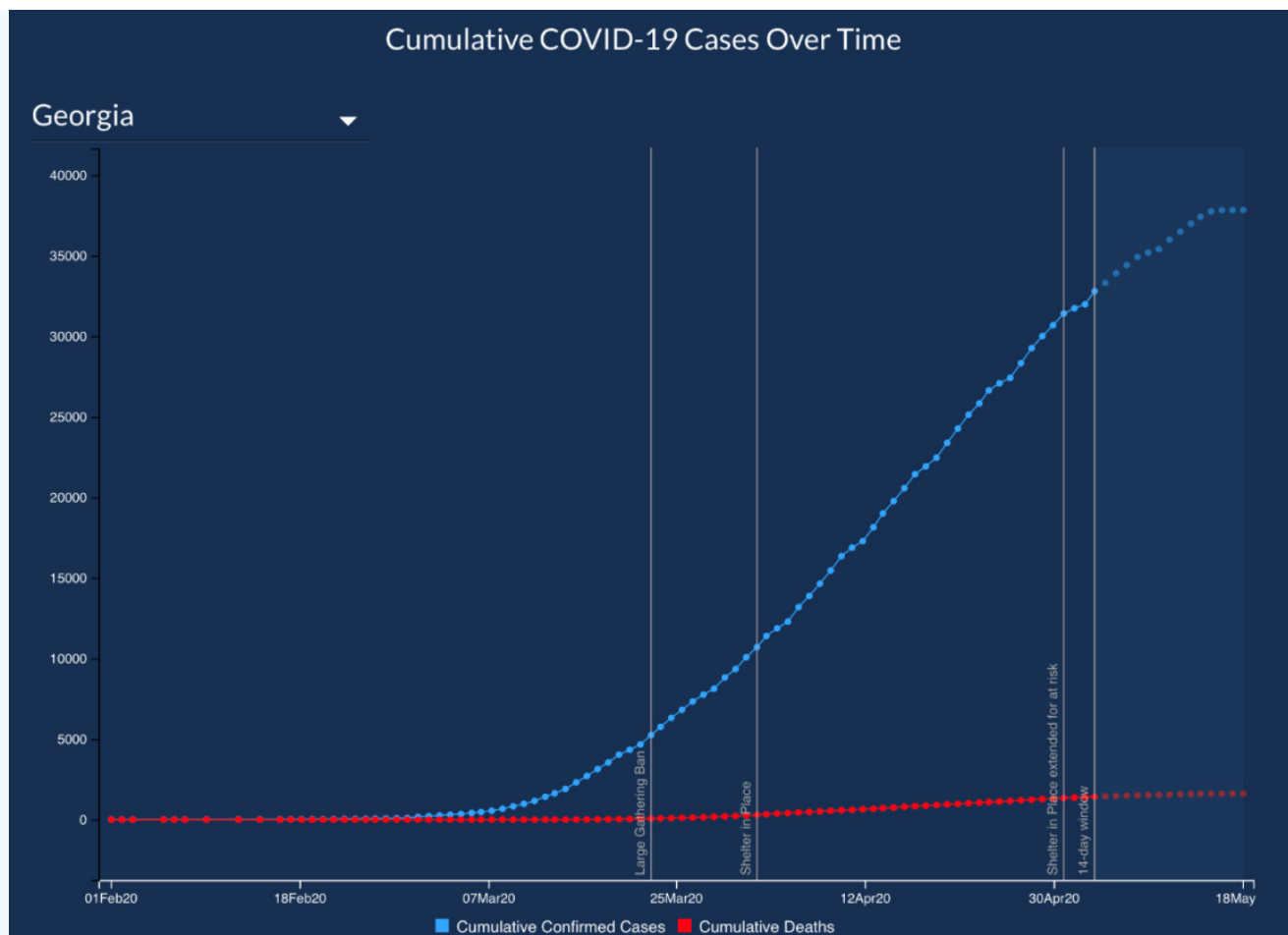


Retrieved 7/3/2021 from <https://www.vox.com/covid-19-coronav...ning-reopening> Figure 2-33

Solution

There are two misleading items for this graph. The horizontal axis is time, yet the dates are out of sequence starting with April 28, April 27, April 29, May 1, April 30, May 4, May 6, May 5, May 2, May 7, April 26, May 3, May 8, May 9. The first date of April 26 is presented almost at the end of the axis. The graph at first glance would deceive viewers in cases going down over time. A Pareto style chart should never be used for time series data.

The second misleading item is the graph's title and no label on the y-axis. What does the height of each bar represent? Is the height the number of cases for each county, or is the height the number of deaths and hospitalizations? The website later corrected the graphic as shown in Figure 2-34.



Retrieved 7/3/2021 from <https://www.vox.com/covid-19-coronav...ning-reopening> Figure 2-34

Large data sets need to be summarized in order to make sense of all the information. The distribution of data can be represented with a table or a graph. It is the role of the researcher or data scientist to make accurate graphical representations that can help make sense of this in the context of the data. Tables and graphs can summarize data, but they alone are insufficient. In the next chapter we will look at describing data numerically.

This page titled [2.3: Graphical Displays](#) is shared under a [CC BY-SA 4.0](#) license and was authored, remixed, and/or curated by [Rachel Webb](#) via [source content](#) that was edited to the style and standards of the LibreTexts platform.

2.4: Chapter 2 Exercises

? Chapter 2 Exercises

1. Which types of graphs are used for quantitative data? Select all that apply.

- a) Ogive
- b) Pie Chart
- c) Histogram
- d) Stem-and-Leaf Plot
- e) Bar Graph

2. Which types of graphs are used for qualitative data? Select all that apply.

- a) Pareto Chart
- b) Pie Chart
- c) Dotplot
- d) Stem-and-Leaf Plot
- e) Bar Graph
- f) Time Series Plot

3. The bars for a histogram should always touch, true or false?

4. A sample of rents found the smallest rent to be \$600 and the largest rent was \$2,500. What is the recommended class width for a frequency table with 7 classes?

5. An instructor had the following grades recorded for an exam.

96	66	65	82	85
82	87	76	80	85
83	69	79	70	83
63	81	94	71	83
99	75	73	83	86

a) Create a stem-and-leaf plot.

b) Complete the following table.

Class	Frequency	Cumulative Frequency	Relative Frequency	Cumulative Relative Frequency
60 – 69				
70 – 79				
80 – 89				
90 – 99				
Total	25			

c) What should the relative frequencies always add up to?

d) What should the last value always be in the cumulative frequency column?

- e) What is the frequency for students that were in the C range of 70-79?
- f) What is the relative frequency for students that were in the C range of 70-79?
- g) Which is the modal class?
- h) Which class has a relative frequency of 12%?
- i) What is the cumulative frequency for students that were in the B range of 80-89?
- j) Which class has a cumulative relative frequency of 40%?

6. Eyeglassomatic manufactures eyeglasses for different retailers. The number of lenses for different activities is in table.

Activity	Grind	Multi-coat	Assemble	Make Frames	Receive Finished	Unknown
Number of lenses	18,872	12,105	4,333	25,880	26,991	1,508

Grind means that they ground the lenses and put them in frames, multi-coat means that they put tinting or scratch resistance coatings on lenses and then put them in frames, assemble means that they receive frames and lenses from other sources and put them together, make frames means that they make the frames and put lenses in from other sources, receive finished means that they received glasses from another source, and unknown means they do not know where the lenses came from.

- a) Make a relative frequency table for the data.
- b) How many of the eyeglasses did Eyeglassomatic assemble?
- c) How many of the eyeglasses did Eyeglassomatic manufacture all together?
- d) What is the relative frequency for the assemble category?
- e) What percent of eyeglasses did Eyeglassomatic grind?

7. The following table is from a sample of five hundred homes in Oregon asked the primary source of heating in their residential homes.

Type of Heat	Percent
Electricity	33
Heating Oil	4
Natural Gas	50
Firewood	8
Other	5

- a) How many of the households heat their home with firewood?
- b) What percent of households heat their home with natural gas?

8. The following table is from a sample of 50 undergraduate PSU students.

Class	Relative Frequency Percent
Freshman	18
Sophomore	13
Junior	23
Senior	46

- a) What percent of students are below a senior class?

b) What is the cumulative frequency of the junior class?

9. A sample of heights of 20 people in cm is recorded below. Make a stem-and-leaf plot.

Height (cm)					
167	201	170	185	175	162
182	186	172	173	188	154
185	178	177	184	178	165
169	171	185	178	175	176

10. The stem-and-leaf plot below is for pulse rates before and after exercise.

Before	Pulse Rates	After
9 8 8 7 6 5 2	6	
9 8 8 8 6 5 5 5 1 1 0 0	7	
8 8 7 5 4 2	8	5 6 6 7 8 9
4 0	9	0 1 1 2 3 4 5 5 6 8
4	10	0 1 4 6 7
	11	6 7
	12	4 5 8

a) Was pulse rate higher on average before or after exercise?

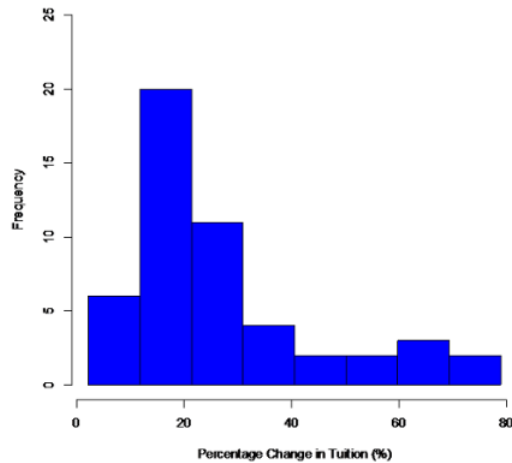
b) What was the fastest pulse rate of the before exercise group?

c) What was the slowest pulse rate of the after-exercise group?

11. The following data represents the percent change in tuition levels at public, four-year colleges (inflation adjusted) from 2008 to 2013 (Weissmann, 2013). Below is the frequency distribution and histogram.

Class Limits	Class Midpoint	Frequency	Relative Frequency
2.2 – 11.7	6.95	6	0.12
11.8 – 21.3	16.55	20	0.40
21.4 – 30.9	26.15	11	0.22
31.0 – 40.5	35.75	4	0.08
40.6 – 50.1	45.35	2	0.04
50.2 – 59.7	54.95	2	0.04
59.8 – 69.3	64.55	3	0.06
69.4 – 78.9	74.15	2	0.04

Percentage Change in Tuition Levels (Inflation Adjusted) 2008 to 2013

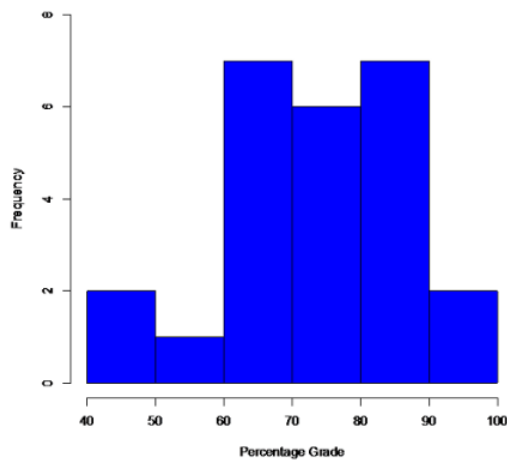


- How many colleges were sampled?
- What was the approximate value of the highest change in tuition?
- What was the approximate value of the most frequent change in tuition?

12. The following data and graph represent the grades in a statistics course.

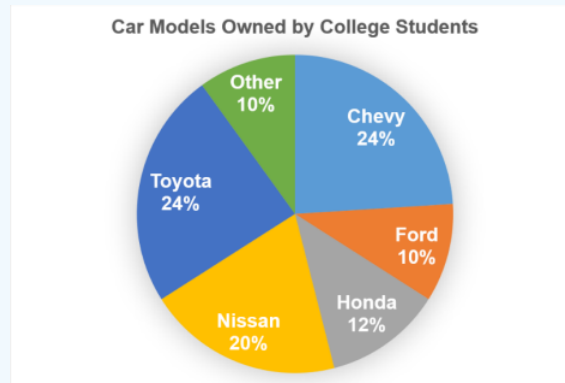
Class Limits	Class Midpoint	Frequency	Relative Frequency
40 – 49.9	45	2	0.08
50 – 59.9	55	1	0.04
60 – 69.9	65	7	0.28
70 – 79.9	75	6	0.24
80 – 89.9	85	7	0.28
90 – 99.9	95	2	0.04

Grades for Statistics Class

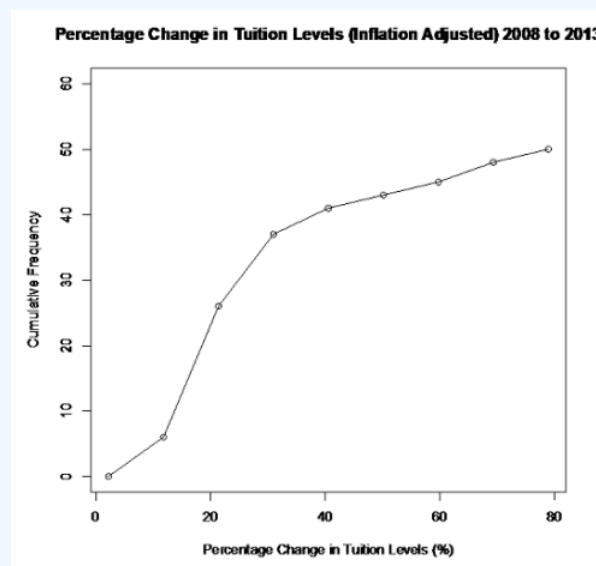


- How many students were in the class?
- What was the approximate lowest and highest grade in the class?
- What percent of students had a passing grade of 70% or higher?

13. The following graph represents a random sample of car models driven by college students. What percent of college students drove a Nissan?



14. The following graph and data represent the percent change in tuition levels at public, four-year colleges (inflation adjusted) from 2008 to 2013 (Weissmann, 2013).



Class Limits	Cumulative Frequency
2.2 – 11.7	6
11.8 – 21.3	26
21.4 – 30.9	37
31.0 – 40.5	41
40.6 – 50.1	43
50.2 – 59.7	45
59.8 – 69.3	48
69.4 – 78.9	50

- How many colleges were sampled?
- What class of percent changes had the most colleges in that range?
- How many colleges had a percent change below 50.2% change in tuition?

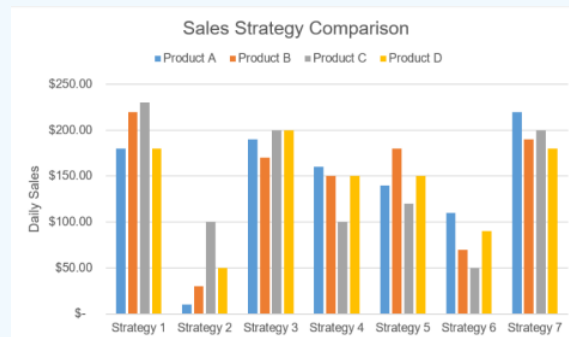
d) What is the cumulative relative frequency for the 50.2% – 59.7% change in tuition class?

15. Eyeglassomatic manufactures eyeglasses for different retailers. The number of lenses for different activities is in table.

Activity	Grind	Multi-coat	Assemble	Make Frames	Receive Finished	Unknown
Number of lenses	18,872	12,105	4,333	25,880	26,991	1,508

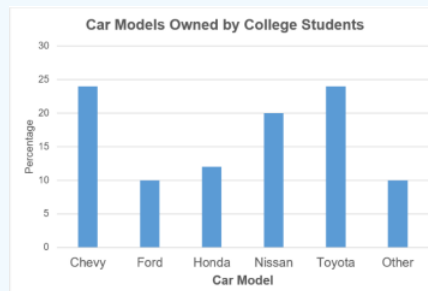
- a) Make a pie chart.
- b) Make a bar chart.
- c) Make a Pareto chart.

16. The daily sales using different sales strategies is shown in the graph below.



- a) Which strategy generated the most sales?
- b) Was there a particular strategy that worked well for one product, but not for another product?

17. The following graph represents a random sample of car models driven by college students. What was the most common car model?

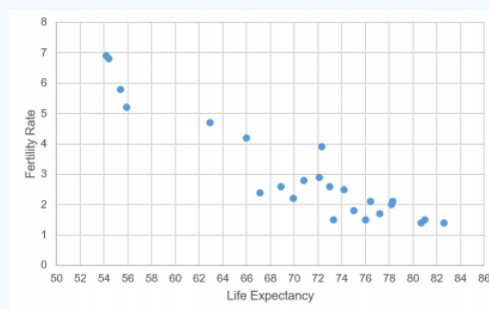


18. The Australian Institute of Criminology gathered data on the number of deaths (per 100,000 people) due to firearms during the period 1983 to 1997. The data is in table below. Create a time-series plot of the data. What is the overall trend over time? (2013, September 26). Retrieved from <http://www.statsci.org/data/oz/firearms.html>.

Year	Rate
1983	4.31
1984	4.42
1985	4.52
1986	4.35
1987	4.39
1988	4.21

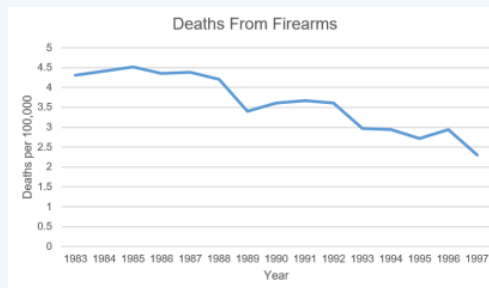
1989	3.4
1990	3.61
1991	3.67
1992	3.61
1993	2.98
1994	2.95
1995	2.72
1996	2.95
1997	2.3

19. A scatter plot for a random sample of 24 countries shows the average life expectancy and the average number of births per woman (fertility rate). What is the approximate fertility rate for a country that has a life expectancy of 76 years?



(2013, October 14). Retrieved from <http://data.worldbank.org/indicator/SP.DYN.TFRT.IN>.

20. The Australian Institute of Criminology gathered data on the number of deaths (per 100,000 people) due to firearms during the period 1983 to 1997. The time-series plot is below. What year had the highest rate of deaths?

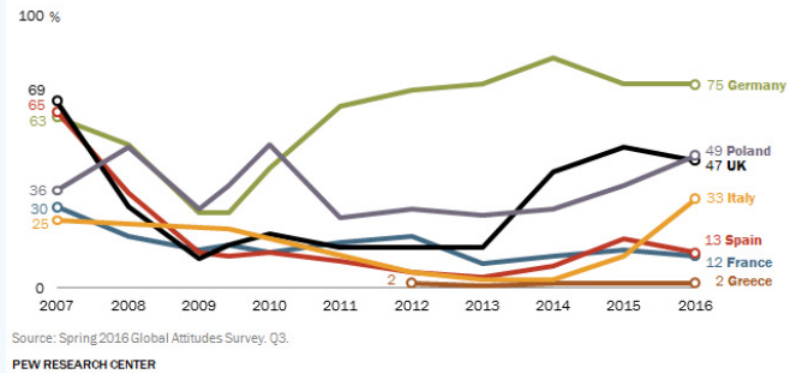


(2013, September 26). Retrieved from <http://www.statsci.org/data/oz/firearms.html>.

21. A survey by the Pew Research Center, conducted in 16 countries among 20,132 respondents from April 4 to May 29, 2016, before the United Kingdom's Brexit referendum to exit the EU. The following is a time series graph for the proportion of survey respondents by country that responded that the current economic situation is their country was good.

Some European publics view economy on the rebound, but others remain negative

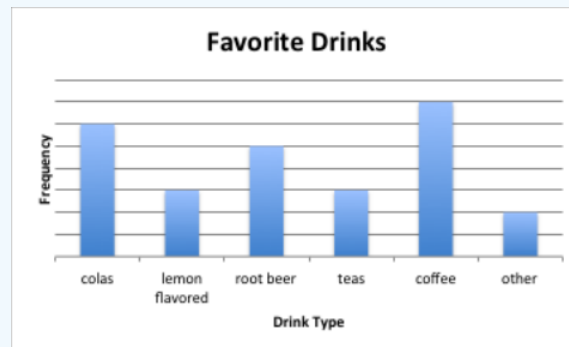
The current economic situation in our country is good



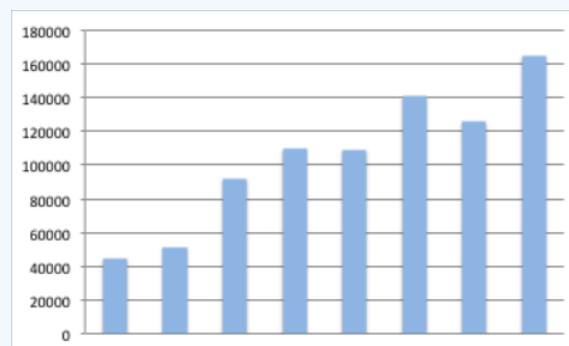
<http://www.pewglobal.org/2016/08/09/views-on-national-economies-mixed-as-many-countries-continue-to-struggle/>

- Which country had the most favorable outlook of their country's economic situation in 2010?
- Which country had the least favorable outlook of their country's economic situation in 2016?

22. Why is this a misleading or poor graph?



23. Why is this a misleading or poor graph?

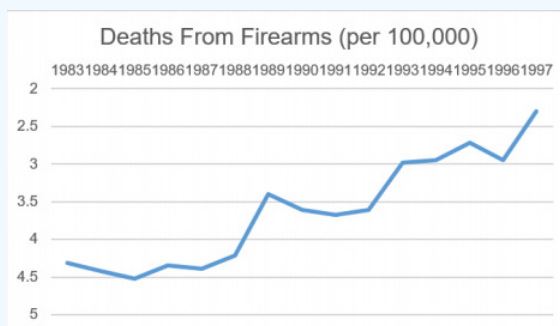


24. Why is this a misleading or poor graph?



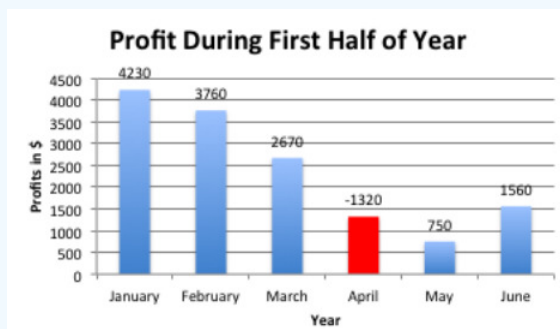
United States unemployment. (2013, October 14). Retrieved from <http://www.tradingeconomics.com/united-states/unemployment-rate>

25. The Australian Institute of Criminology gathered data on the number of deaths (per 100,000 people) due to firearms during the period 1983 to 1997. Why is this a misleading or poor graph?



(2013, September 26). Retrieved from <http://www.statsci.org/data/oz/firearms.html>.

26. Why is this a misleading or poor graph?



Answer to Odd Numbered Exercises

1) a, c,

3) True

5) a)

6	3	5	6	9							
7	0	1	3	5	6	9					
8	0	1	2	2	3	3	3	5	5	6	7
9	4	6	9								

Class	Freq.	Cum. Freq.	Rel. Freq.	Cum. Rel. Freq.
60-69	4	4	$4/25 = 0.16$	$4/25 = 0.16$
70-79	6	$4+6 = 10$	$6/25 = 0.24$	$10/25 = 0.4$
80-89	12	$10+12 = 22$	$12/25 = 0.48$	$22/25 = 0.88$
90-99	3	$22+3 = 25$	$3/25 = 0.12$	$25/25 = 1$
Total	25		1	

b)

Total	25		1
-------	----	--	---

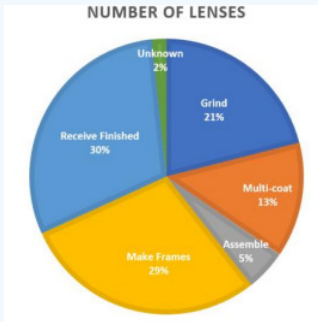
 c) 1 d) The sample size n . e) 6 f) 0.24 g) 80-89 h) 90-99 i) 0.88 j) 70-79

7) a) 40 b) 50%

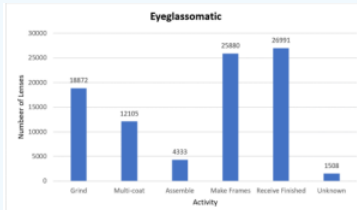
[illegible]

11) a) 50 b) 78 c) 16.55

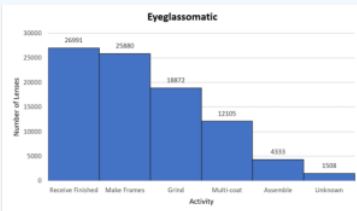
13) 20%



15) a)



b)



c)

17) Chevy & Toyota

19) 1.5

21) a) Poland

b) Greece

23) There are no labels for both axis or categories.

25) The vertical axis is reversed, making the graph appear to increase when it is actually decreasing. There are no labels for both axes.

This page titled [2.4: Chapter 2 Exercises](#) is shared under a [CC BY-SA 4.0](#) license and was authored, remixed, and/or curated by [Rachel Webb](#) via [source content](#) that was edited to the style and standards of the LibreTexts platform.

CHAPTER OVERVIEW

3: Descriptive Statistics

[3.1: Measures of Center](#)

[3.2: Measures of Spread](#)

[3.3: Measures of Placement](#)

[3.4: Chapter 3 Formulas](#)

[3.5: Chapter 3 Exercises](#)

This page titled [3: Descriptive Statistics](#) is shared under a [CC BY-SA 4.0](#) license and was authored, remixed, and/or curated by [Rachel Webb](#) via [source content](#) that was edited to the style and standards of the LibreTexts platform.

3.1: Measures of Center

Both graphical and numerical methods of summarizing data make up the branch of statistics known as descriptive statistics. Later, **descriptive statistics** will be used to estimate and make inferences about population parameters using methods that are part of the branch called **inferential statistics**. This section introduces numerical measurements to describe sample data.

This section focuses on measures of central tendency. Many times, you are asking what to expect “on average.” Such as when you pick a career, you would probably ask how much you expect to earn in that field. If you are trying to buy a home, you might ask how much homes are selling for in your area. If you are planting vegetables in your garden, you might want to know how long it will be until you can harvest. These questions, and many more, can be answered by knowing the center of the data set. The three most common measures of the “center” of the data are called the mode, mean, and median.

3.1.1 Mode

To find the mode, you count how often each data value occurs, and then determine which data value occurs most often.

The **mode** is the data value that occurs the most frequently in the data.

There may not be a mode at all, or you may have more than one mode. If there is a tie between two values for the greatest number of times then both values are the mode and the data is called bimodal (two modes). If every data point occurs the same number of times, there is no mode. If there are more than two numbers that appear the most times, then usually we write there is no mode. When looking at grouped data in a frequency distribution or a histogram then the largest frequency is called the **modal class**.

Below is a dotplot showing the height of some 3-year-old children in cm and we would like to answer the question, “How tall are 3-year-olds?”

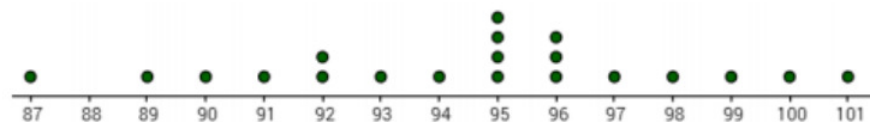


Figure 3-1

From the graph, we can see that the most frequent value is 95 cm. This is not exactly the middle of the distribution, but it is the most common height and is close to the middle in this case. We call this most frequent value the mode.

For larger data sets, use software to find the mode or at least sort the data so that you can see grouping of numbers. Excel reports a mode at the first repetitive value, so be careful in Excel with bimodal data or data with many multiples that would really have no mode at all.

Note that zero may be the most frequent value in a data set. The mode = 0 is not the same as “no mode” in the data set.

The mode is the observation that occurs most often.

- **Example 3-1:** -5 4 8 3 4 2 0 mode = 4
- **Example 3-2:** 3 -6 0 1 -2 1 0 5 0 mode = 0
- **Example 3-3:** 18 25 15 32 10 27 no mode (Excel writes N/A)
- **Example 3-4:** 15 23 18 15 24 23 17 modes = 15, 23 (bimodal)
- **Example 3-5:** 100 125 100 125 130 140 130 140 no mode (Excel gives 100)

Summation Notation

Throughout this course, we will be using **summation notation**, also called sigma notation. The capital Greek letter Σ “sigma” means to add. For example, Σx means to sum up all of the x values where X is the variable name.

A random sample of households had the following number of children living at home 4, -3, 2, 1, and 3. Calculate Σx .

Solution

Let $x_1 = 4$, $x_2 = -3$, $x_3 = 2$, $x_4 = 1$, $x_5 = 3$. Start with the first value $i = 1$ up to the n th value $i = 5$ to get $\sum_{i=1}^n x_i = 4 + -3 + 2 + 1 + 3 = 7$.

To make things simpler we will drop the subscripts and write $\sum_{i=1}^n x_i$ as Σx_i or Σx .

The order of operations is important in summation notation.

For example, $\Sigma x^2 = (4)^2 + (-3)^2 + (2)^2 + (1)^2 + (3)^2 = 39$.

When we insert parentheses $(\Sigma x)^2 = (4 + -3 + 2 + 1 + 3)^2 = (7)^2 = 49$.

Note that $\Sigma x^2 \neq (\Sigma x)^2$.

“One of the interesting things about space,’ Arthur heard Slartibartfast saying to a large and voluminous creature who looked like someone losing a fight with a pink duvet and was gazing raptly at the old man’s deep eyes and silver beard, ‘is how dull it is.’

‘Dull?’ said the creature, and blinked her rather wrinkled and bloodshot eyes.

‘Yes,’ said Slartibartfast, ‘staggeringly dull. Bewilderingly so. You see, there’s so much of it and so little in it. Would you like me to quote some statistics?’

‘Er, well...’

‘Please, I would like to. They, too, are quite sensationally dull.’” (Adams, 2002)

3.1.2 Mean

The **mean** is the arithmetic average of the numbers. This is the center that most people call the average.

Distinguishing between a population and a sample is very important in statistics. We frequently use a representative sample to generalize about a population.

A statistic is any characteristic or measure from a sample. A parameter is any characteristic or measure from a population. We use sample statistics to make inferences about population parameters.

The sample mean = \bar{x} (pronounced “x bar”) of a sample of n observations $x_1, x_2, x_3, \dots, x_n$ taken from a population, is given by the formula:

$$\bar{x} = \frac{\Sigma x}{n} = \frac{x_1 + x_2 + x_3 + \dots + x_n}{n}.$$

The population mean = μ (pronounced “mu”) is the average of the entire population, is given by the formula:

$$\mu = \frac{\Sigma x}{N} = \frac{x_1 + x_2 + x_3 + \dots + x_N}{N}.$$

Most cases, you cannot find the population parameter, so you use the sample statistic to estimate the population parameter. Since μ cannot be calculated in most situations, the value for \bar{x} is used to estimate μ . You should memorize the symbol μ and what it represents for future reference.

Find the mean for the following sample of house prices (\$1,000): 325, 375, 385, 395, 420, and 825.

Solution

Before starting any mathematics problem, it is always a good idea to define the unknown in the problem. In this case, you want to define the variable. The symbol for the variable is x . The variable is x = price of a house in \$1,000.

$$\bar{x} = \frac{\Sigma x}{n} = \frac{325 + 375 + 385 + 395 + 420 + 825}{6} = 454.1\bar{6}$$

The sample mean house price is \$454,166.67.

We can use technology to find the mean. Directions for the TI calculators are in the next section. In Excel, use the cell function AVERAGE(array). For this example, we can type the data into column A and then in a blank cell =AVERAGE(A1:A6).

	A	B
1	325	
2	375	
3	385	
4	395	
5	420	
6	825	=AVERAGE(A1:A6)
7		

3.1.3 Weighted Mean

Weighted averages are used quite often in real life. Some teachers use them in calculating your grade in the course, or your grade on a project. Some employers use them in employee evaluations. The idea is that some components of a mean are more important than others are. As an example, a full-time teacher at a community college may be evaluated on their service to the college, their service to the community, whether their paperwork is turned in on time, and their teaching. However, teaching is much more important than whether their paperwork is turned in on time. When the evaluation is completed, more weight needs to be given to the teaching and less to the paperwork. This is a weighted average.

Weighted Mean = $\frac{\text{sum of the scores times their weights}}{\text{sum of all the weights}} = \frac{\sum(xw)}{\sum w}$, where w is the weight of the data value x .

In your biology class, your final grade is based on several things: a lab score, scores on two major tests, and your score on the final exam. There are 100 points available for each score. The lab score is worth 15% of the course, the two exams are worth 25% of the course each, and the final exam is worth 35% of the course. Suppose you earned scores of 95 on the labs, 83 and 76 on the two exams, and 84 on the final exam. Compute your weighted average for the course.

Solution

Variable: x = score

The weighted mean is $\frac{\sum(xw)}{\sum w} = \frac{95(0.15)+83(0.25)+76(0.25)+84(0.35)}{0.15+0.25+0.25+0.35} = \frac{83.4}{1.00} = 83.4$

The course average is 83.4 %.

A faculty evaluation process at Portland State University rates a faculty member on the following activities: teaching, publishing, committee service, community service, and submitting paperwork in a timely manner. The process involves reviewing student evaluations, peer evaluations, and supervisor evaluation for each teacher and awarding them a score on a scale from 1 to 10 (with 10 being the best). The weights for each activity are 20 for teaching, 18 for publishing, 6 for committee service, 4 for community service, and 2 for paperwork.

- One faculty member had the following ratings: 8 for teaching, 9 for publishing, 2 for committee work, 1 for community service, and 8 for paperwork. Compute the weighted average of their evaluation.
- Another faculty member had ratings of 6 for teaching, 8 for publishing, 9 for committee work, 10 for community service, and 10 for paperwork. Compute the weighted average of their evaluation.
- Which faculty member had the higher average evaluation?

Solution

a) Variable: x = rating

The weighted average is $\frac{\sum(xw)}{\sum w} = \frac{8(20)+9(18)+2(6)+1(4)+8(2)}{20+18+6+4+2} = \frac{354}{50} = 7.08$

The average evaluation score is 7.08.

b) The weighted average is $\frac{\sum(xw)}{\sum w} = \frac{6(20)+8(18)+9(6)+10(4)+10(2)}{20+18+6+4+2} = \frac{378}{50} = 7.56$

The average evaluation score is 7.56.

c) The second faculty member has a higher average evaluation.

3.1.4 Median

Another statistic that measures the center of a distribution is the median.

The **median** is the data value in the middle of the ordered data that has 50% of the data below that point and 50% of the data above that point. The median is also referred to as the 50th percentile and is the midpoint of a distribution.

To find the median:

1. Arrange the observations from smallest to largest.
2. If the number of observations n is odd, the middle observation is the median.
3. If the number of observations n is even, the mean of the two middle observations is the median.

Find the median for the following sample of ages: 15, 23, 18, 15, 24, 23, and 17.

Solution

First, sort the data: 15, 15, 17, 18, 23, 23, and 24. The sample size is odd so the median will be the middle number. Use your fingers to cover outside numbers, one pair at a time until you get to 18. Median = 18 years old.

Find the median for the following sample of house prices (in \$1,000): 325, 375, 385, 395, 420, and 825.

Solution

The data is already ordered from smallest to largest. The sample size is even so take the average of the two middle values $\frac{385+395}{2} = 390$. The median house price is \$390,000.

We can use technology to find the median. Directions for the TI calculators are in the next section. In Excel the median is found using the cell function MEDIAN(array). For this example, we can type the data into column A and then in a blank cell =MEDIAN(A1:A6).

Recall that the sample mean house price is \$454,167. Note that the median is much lower than the mean for this example. The observation of 825 is an outlier and is very large compared to the rest of the data. The sample mean is sensitive to unusual observations, i.e. outliers. The median is resistant to outliers.

3.1.5 Outliers

An **outlier** is a data value that is very different from the rest of the data and is far enough from the center. If there are extreme values in the data, the median is a better measure of the center than the mean. The mean is not a resistant measure because it is moved in the direction of the outlier. The median and the mode are resistant measures because they are not affected by extreme values.

As a consumer, you need to be aware that people choose the measure of center that best supports their claim. When you read an article in the newspaper and it talks about the “average,” it usually means the mean but sometimes it refers to the median. Some articles will use the word “median” instead of “average” to be more specific. If you need to make an important decision and the information says “average,” it would be wise to ask if the “average” is the mean or the median before you decide.

As an example, suppose that a company administration wants to use the mean salary as the average salary for the company. This is because the high salaries of the administration will pull the mean higher. The company can say that the employees are paid well because the average is high. However, the employees’ union wants to use the median since it discounts the extreme values of the administration and will give a lower value of the average. This will make the salaries seem lower and that a raise is in order.

Why use the mean instead of the median? When multiple samples are taken from the same population, the sample means tend to be more consistent than other measures of the center. The sample mean is the more reliable measure of center.

3.1.6 Distribution Shapes

Remember that there are varying levels of skewness and symmetry. Sample data is rarely exactly symmetric, but is approximately symmetric. Outliers will pull the mean in the direction of the outlier. If the distribution has a skewed tail to the left, the mean will be smaller than the median. If the distribution has a skewed tail to the right, the mean will be larger than the median. The mode, or modal class, is the tallest point(s), highest frequency, of the distribution. The following show examples of different distribution shapes. Figures 3-2 to 3-5 show example distribution shapes.

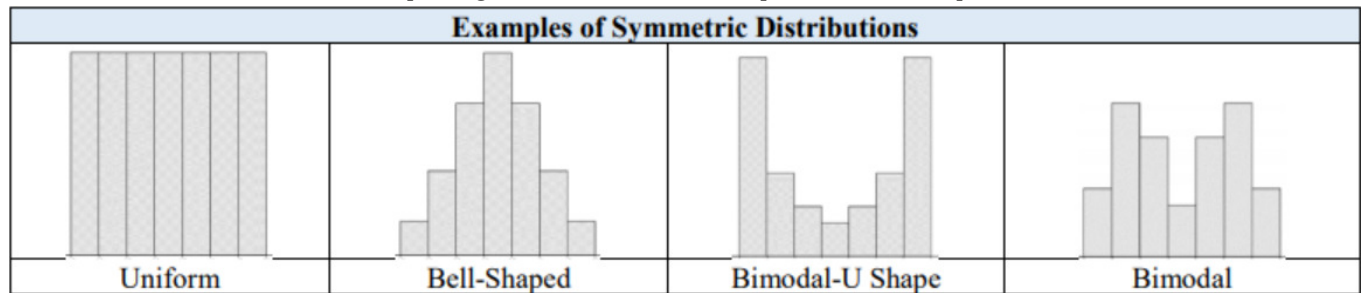


Figure 3-2

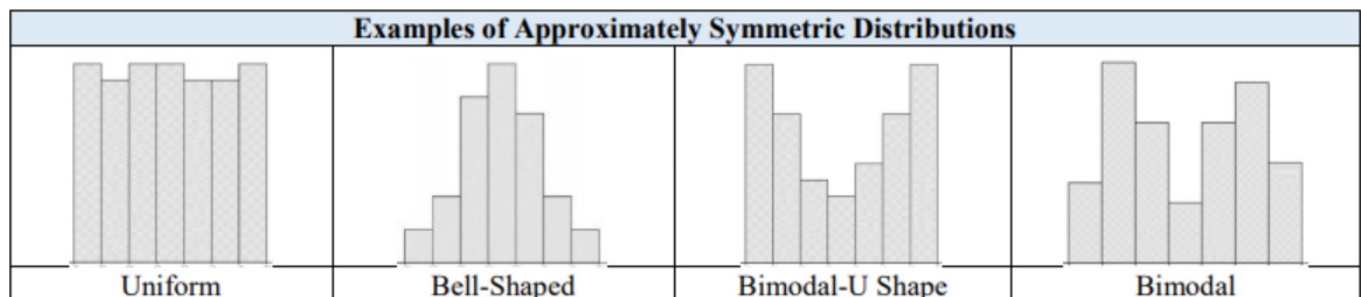


Figure 3-3

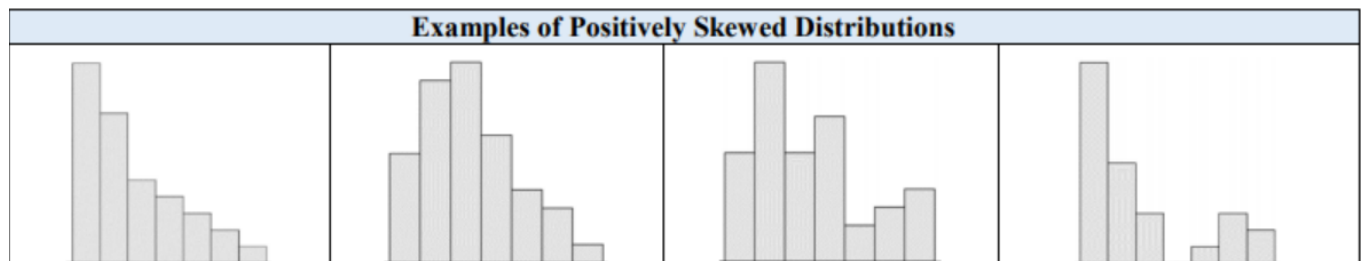


Figure 3-4

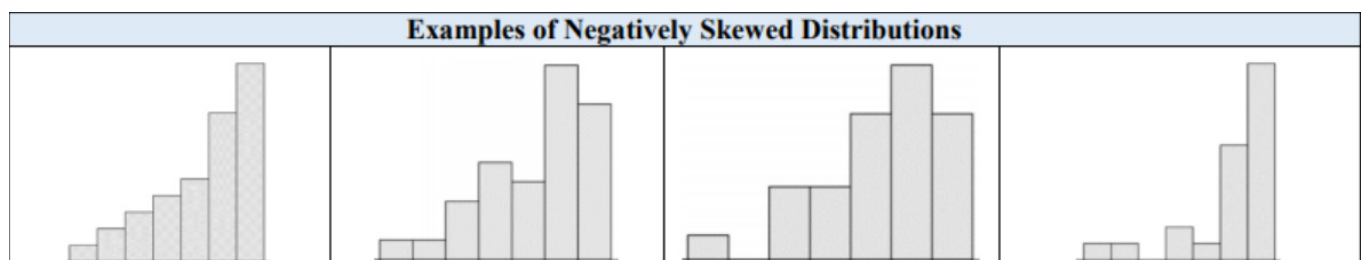


Figure 3-6

Comparing the mean and the median provides useful information about the distribution shape.

- If the mean is equal to the median, the data is symmetric, see Figure 3-6.

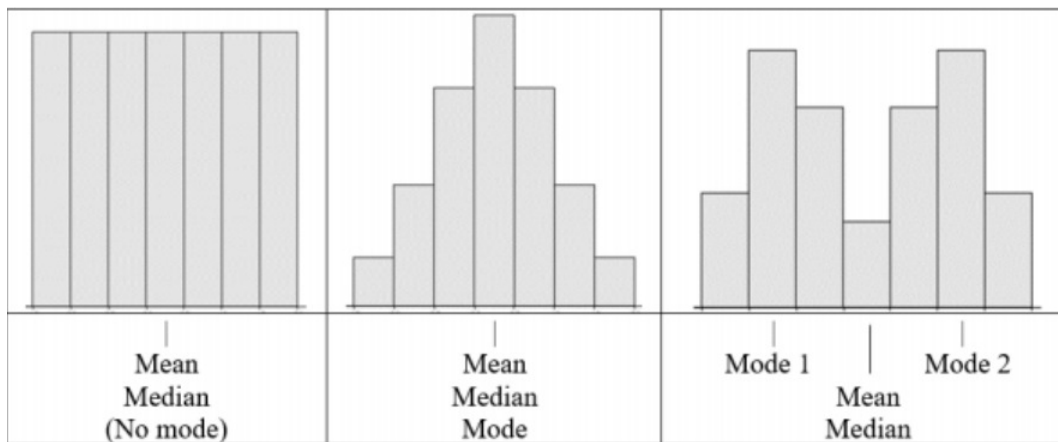


Figure 3-6

If the mean is larger than (to the right of) the median, the data is right skewed or positively skewed, see Figure 3-7.

If the mean is smaller than (to the left of) the median, the data is left skewed, or negatively skewed, see Figure 3-8.

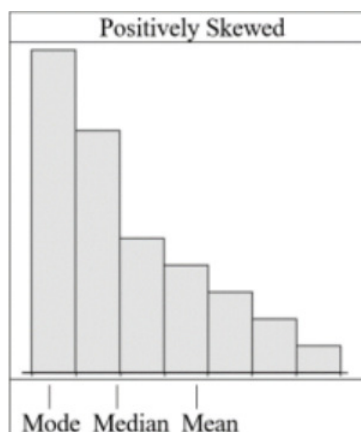


Figure 3-7

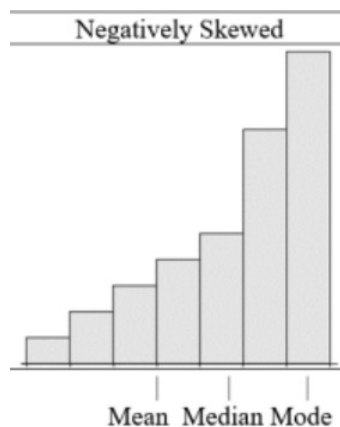


Figure 3-8

The following is a histogram for a random sample of student rent prices. Comment on the distribution shape.

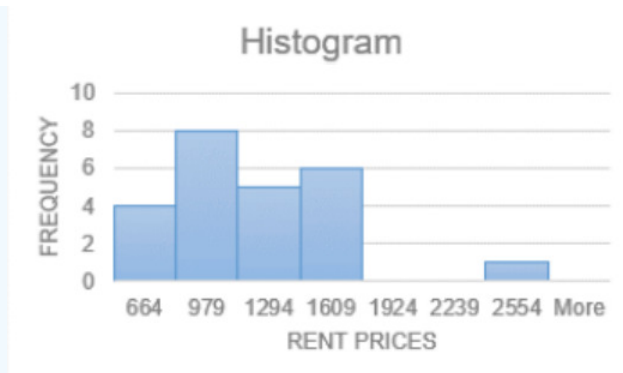


Figure 3-9



Figure 3-10

Solution

If we were to use Excel to find the mean and median we would get that the mean house rental price is \$1,082.08 and the median house rental price is \$1,030. The mean is larger than the median and is being pulled to the right by the outlier of \$2,550.

If you were to draw a curve around the bars as in Figure 3- 10, you would get a tail for the one data point on the right. The outlier on the right is the direction of the skewness.

This distribution is skewed to the right, or positively skewed.

Which measure of center is used on which type of data?

- Mode can be found on nominal, ordinal, interval, and ratio data, since the mode is just the data value that occurs most often. You are just counting the data values.
- Median can be found on ordinal, interval, and ratio data, since you need to put the data in order. As long as there is order to the data, you can find the median.
- Mean can be found on interval and ratio data, since you must have numbers to add together.

This page titled [3.1: Measures of Center](#) is shared under a [CC BY-SA 4.0](#) license and was authored, remixed, and/or curated by [Rachel Webb](#) via [source content](#) that was edited to the style and standards of the LibreTexts platform.

3.2: Measures of Spread

Variability is an important idea in statistics. If you were to measure the height of everyone in your classroom, every student gives you a different value. That means not every student has the same height. Thus, there is variability in people's heights. If you were to take a sample of the income level of people in a town, every sample gives you different information. There is variability between samples too. Variability describes how the data are spread out. If the data are very close to each other, then there is low variability. If the data are very spread out, then there is high variability. How do you measure variability? It would be good to have a number that measures it. This section will describe some of the different measures of variability, also known as variation.

Numerical statistics for variation can show how spread out data is. The variation of data is relative, and is usually used when comparing two sets of similar data. When we are making inferences about an average, we can make better estimates when there is less variation in the data. The four most common measures of the "spread" of data are called the range, variance, standard deviation, and coefficient of variation.

A sample of house prices (in \$1,000): 325, 375, 385, 395, 420, and 825, found the mean house price of \$454,167. How much does this tell you about the price of all houses? Can you tell if most of the prices were close to the mean or were the prices really spread out? What is the highest price and the lowest price? All you know is that the center of the price is \$454,167. What if you were approved for only \$400,000 for a home loan, could you buy a home in this area? You need more information.

3.2.1 Range

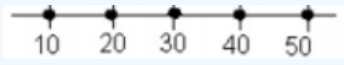


The range of a set of data is the difference between the highest and the lowest data values (or maximum and minimum values). Note in statistics we only report a single number which represents the spread from the lowest to highest value.

$$\text{Range} = \text{Max} - \text{Min.}$$

Look at the following three sets of data. Find the mean, median and range of each of data set.

1. 10, 20, 30, 40, 50
2. 10, 29, 30, 31, 50
3. 28, 29, 30, 31, 32

Solution

1.  mean = 30, median = 30, range = $50 - 10 = 40$
2.  mean = 30, median = 30, range = $50 - 10 = 40$
3.  mean = 30, median = 30, range = $32 - 28 = 4$

Based on the mean, median, and range, the first two distributions are the same, but you can see from the graphs that they are distributed differently. In part 1, the data are spread out equally. In part 2, the data has a clump in the middle and a single value at each end. The mean and median are the same for part 3, but the range is much smaller. All the data is clumped together in the middle.

3.2.2 Variance & Standard Deviation

The range does not really provide a very detailed picture of the variability. A better way to describe how the data is spread out is needed. Instead of looking at the distance as the highest value from the lowest, how about looking at the distance each value is from the mean? This spread is called the deviation.

Suppose a vet wants to analyze the weights of cats. The weights (in pounds) of five cats are 6.8, 8.2, 7.5, 9.4, and 8.2. Compute the deviation for each of the data values. The deviation is how far each data point is from the mean. To be consistent always subtract the data point minus the mean.

Solution

Variable: X = weight of a cat. First, find the mean for the data set. The mean is $\bar{x} = \frac{\Sigma(x)}{n} = \frac{(6.8+8.2+7.5+9.4+8.2)}{5} = 8.02$ pounds. Subtract the mean from each data point to get the deviations.

x	$x - \bar{x}$
6.8	$6.8 - 8.02 = -1.22$
8.2	$8.2 - 8.02 = 0.18$
7.5	$7.5 - 8.02 = -0.52$
9.4	$9.4 - 8.02 = 1.38$
8.2	$8.2 - 8.02 = 0.18$

Figure 3-11

Now average the deviations. Add the deviations together.

x	$x - \bar{x}$
6.8	$6.8 - 8.02 = -1.22$
8.2	$8.2 - 8.02 = 0.18$
7.5	$7.5 - 8.02 = -0.52$
9.4	$9.4 - 8.02 = 1.38$
8.2	$8.2 - 8.02 = 0.18$
Total	0

Figure 3-12

The average distance from the mean cannot be zero. The reason the deviations add to 0 is that there are some positive and negative values. The sum of the deviations from the mean will always be zero.

To get rid of the negative signs square each deviation.

x	$x - \bar{x}$	$(x - \bar{x})^2$
6.8	$6.8 - 8.02 = -1.22$	1.4884
8.2	$8.2 - 8.02 = 0.18$	0.0324
7.5	$7.5 - 8.02 = -0.52$	0.2704
9.4	$9.4 - 8.02 = 1.38$	1.9044
8.2	$8.2 - 8.02 = 0.18$	0.0324
Total	0	3.728

Figure 3-13

Then average the total of the squared deviations. The only thing is that in statistics there is a strange average here. Instead of dividing by the number of data values, you divide by the number of data values minus one. This $n - 1$ is called the degrees of freedom and will be discussed more later in the text. When we divide by the degrees of freedom, this gives an unbiased statistic. In this case, you would have the following:

$$s^2 = \frac{(x - \bar{x})^2}{n - 1} = \frac{3.728}{5 - 1} = \frac{3.728}{4} = 0.932 \text{ pounds}^2$$

Notice that this statistic is denoted as s^2 . This statistic is called the sample variance and it is a measure of the average squared distance from the mean. If you now take the square root, you will get the average distance from the mean. The square root of

the variance is called the sample standard deviation, and is denoted with the letter s .

$$s = \sqrt{0.932} = 0.9654 \text{ pounds}$$

The standard deviation is the average (mean) distance from a data point to the mean. It can be thought of as how much a typical data point differs from the mean.

The **sample variance** formula: $s^2 = \frac{\sum (x - \bar{x})^2}{n - 1}$.

Where \bar{x} is the sample mean, n is the sample size, and Σ means to find the sum.

The **sample standard deviation** formula: $s = \sqrt{s^2} = \sqrt{\frac{\sum (x - \bar{x})^2}{n - 1}}$.

The $n - 1$ in the denominator has to do with a concept called degrees of freedom (df). Dividing by the df makes the sample standard deviation a better approximation of the population standard deviation than dividing by n .

We rarely will find a population variance or standard deviation, but you will need to know the symbols.

The **population variance** formula: $\sigma^2 = \frac{\sum (x - \mu)^2}{N}$.

The population standard deviation formula: $\sigma = \sqrt{\frac{\sum (x - \mu)^2}{N}}$.

The lower-case Greek letter σ pronounced “sigma” and σ^2 represents the population variance, μ is the population mean, and N is the size of the population.

Note: the sum of the deviations should always be zero. Try not to round too much in the calculations for standard deviation since each rounding causes a slight error.

Suppose that a manager wants to test two new training programs. They randomly select 5 people for each training type and measures the time it takes to complete a task after the training. The times for both trainings are in table below. Which training method is more consistent?

Time to Finish Task in Minutes					
Training 1	56	75	48	63	59
Training 2	60	58	66	59	58

Solution

It is important that you define what each variable is since there are two of them.

Variable 1: X_1 = productivity from training 1

Variable 2: X_2 = productivity from training 2

The units and scale are the same for both groups. To answer which training method better, first you need some descriptive statistics. Start with the mean for each sample.

$$\bar{x}_1 = \frac{56 + 75 + 48 + 63 + 59}{5} = 60.2 \text{ minutes}$$

$$\bar{x}_2 = \frac{60 + 58 + 66 + 59 + 58}{5} = 60.2 \text{ minutes}$$

Since both means are the same values, you cannot answer the question about which is better.

Now calculate the standard deviation for each sample.

Squared Deviations for Training 1

x_1	$x_1 - \bar{x}_1$	$(x_1 - \bar{x}_1)^2$
56	-4.2	17.64
75	14.8	219.04
48	-12.2	148.84
63	2.8	7.84
59	-1.2	1.44
Total	0	394.8

Figure 3-14

Squared Deviations for Training 2

x_2	$x_2 - \bar{x}_2$	$(x_2 - \bar{x}_2)^2$
60	-0.2	0.04
58	-2.2	4.84
66	5.8	33.64
59	-1.2	1.44
58	-2.2	4.84
Total	0	44.8

Figure 3-15

The variance for each sample is:

$$s_1^2 = \frac{394.8}{4} = 98.7 \text{ minutes}^2$$

$$s_2^2 = \frac{44.8}{4} = 11.2 \text{ minutes}^2$$

The standard deviations are: $s_1 = \sqrt{98.7} = 9.9348$ minutes

$$s_2 = \sqrt{11.2} = 3.3466 \text{ minutes.}$$

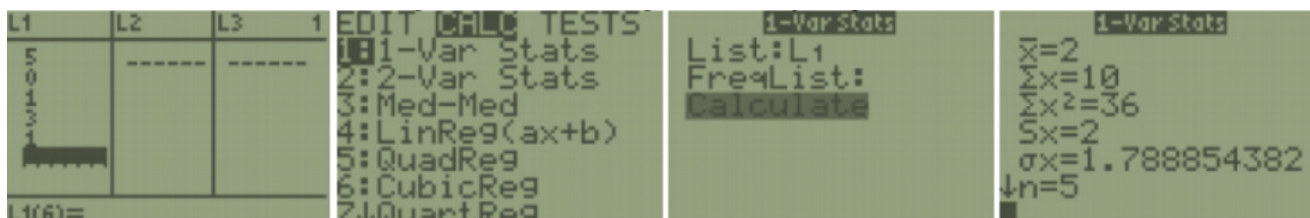
Comparing the standard deviations, the second training method seemed to be the better training since the data is less spread out. This means it is more consistent. It would be better for the managers in this case to have a training program that produces more consistent results so they know what to expect for the time it takes to complete the task.

Descriptive statistics can be time-consuming to calculate by hand so use technology.

One Variable Statistics on the TI Calculator

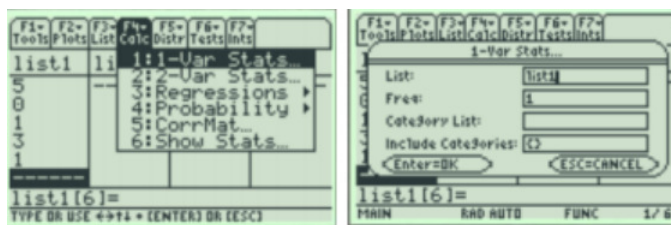
The procedure for calculating the sample mean (\bar{x}) and the sample standard deviation (s_x) for the TI calculator are shown below. Note, the TI calculator also gives you the population standard deviation (σ_x) because it does not know whether the data you input is a population or a sample. You need to decide which value you need to use, based on whether you have a population or sample. In almost all cases you have a sample and will be using s_x . In addition, the calculator uses the notation of s_x instead of just s . It is just a way for it to denote the information.

TI-84: Enter the data in a list and then press [STAT]. Use cursor keys to highlight CALC. Press 1 or [ENTER] to select **1:1-Var Stats**. Press [2nd], then press the number key corresponding to your data list. Press [Enter] to calculate the statistics. Note: the calculator always defaults to L1 if you do not specify a data list.



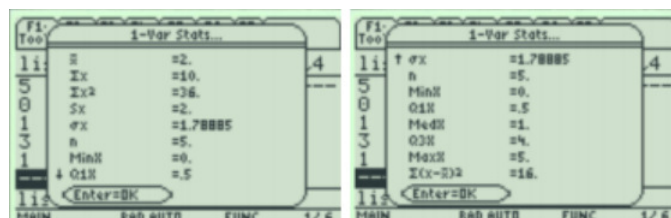
s_x is the sample standard deviation. You can arrow down and find more statistics. Use the min and max to calculate the range by hand. To find the variance simply square the standard deviation.

TI-89: Press [APPS], select **FlashApps** then press [ENTER]. Highlight **Stats/List Editor** then press [ENTER]. Press [ENTER] again to select the main folder. To clear a previously stored list of data values, arrow up to the list name you want to clear, press [CLEAR], then press enter.



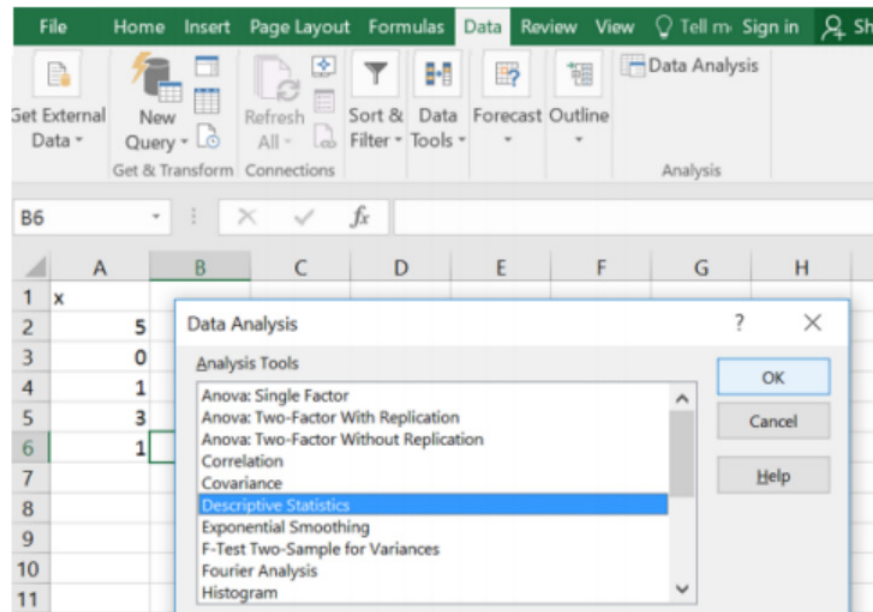
Press [F4], select 1: 1-Var Stats. To get the list name to the List box, press [2nd] [VarLink], arrow down to list1 and press [Enter]. This will bring list1 to the List box. Press [Enter] to enter the list name and then enter again to calculate.

Use the down arrow key to see all the statistics.

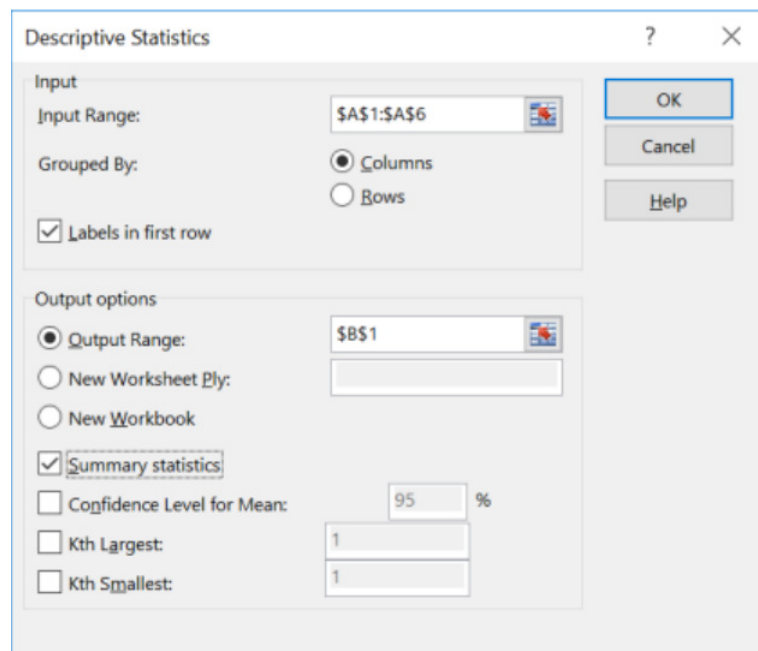


S_x is the sample standard deviation. You can arrow down and find more statistics. Use the min and max to calculate the range by hand. To find the variance simply square the standard deviation or take the last sum of squares divided by $n - 1$.

Excel: Type in the data into one column, select the Data tab, and choose Data Analysis. Select Descriptive Statistics, and then select OK.



Highlight the data for the Input Range, if you highlighted a label; check the Labels in first row box. Select the circle to the left of Output Range, then click into the box to the right of the Output Range and select one cell where you want the top left-hand corner of your summary table to start. Select the box next to Summary statistics, then select OK, see below.



We get the following summary statistics:

x	
Mean	2
Standard Error	0.8944
Median	1
Mode	1
Standard Deviation	2
Sample Variance	4
Kurtosis	-0.1875
Skewness	0.9375
Range	5
Minimum	0
Maximum	5
Sum	10
Count	5

In general, a “small” standard deviation means the data are close together (more consistent) and a “large” standard deviation means the data is spread out (less consistent). Sometimes you want consistent data and sometimes you do not. As an example, if you are making bolts, you want the lengths to be very consistent so you want a small standard deviation. If you are administering a test to see who can be a pilot, you want a large standard deviation so you can tell whom the good and bad pilots are.

What do “small” and “large” mean? To a bicyclist whose average speed is 20 mph, $s = 20$ mph is huge. To an airplane whose average speed is 500 mph, $s = 20$ mph is nothing. The “size” of the variation depends on the size of the numbers in the problem and the mean. Another situation where you can determine whether a standard deviation is small or large is when you are comparing two different samples. A sample with a smaller standard deviation is more consistent than a sample with a larger standard deviation.

If we were to compare the variability between two histograms. The standard deviation and variance measure the average spread from left to right. Take a moment and see if you can order the following histograms from the smallest to the largest standard deviation.

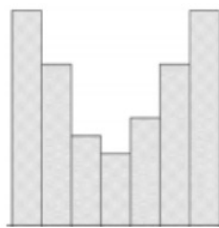


Figure 3-16

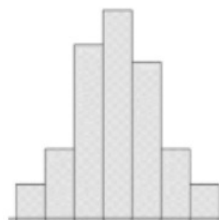


Figure 3-17



Figure 3-18

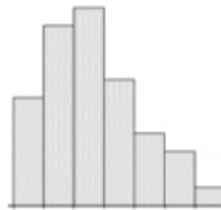


Figure 3-19

The histogram that has more of the data close to the mean will have the smallest standard deviation. The histogram that has more of the data towards the end points will have a larger standard deviation. Figure 3-16 will have the largest standard deviation since more of the data is grouped in the first and last class. Figure 3-17 will have the smallest standard deviation since more of the data is grouped in the center class which will be close to the mean in a symmetric distribution. Figures 3-18 and 3-19 are harder to compare without also having access to the mean and median to indicate skewness. However, Figure 3-19 does have smaller frequencies in the first and last three classes compared to Figure 3-18.

The correct order from smallest to largest standard deviation would be Figure 3-17, Figure 3-19, Figure 3-18, and then Figure 3-16. One should not compare the range, standard deviation or variance of different data sets that have different units or scale.

3.2.3 Coefficient of Variation

The **coefficient of variation**, denoted by CVar or CV, is the standard deviation divided by the mean. The units on the numerator and denominator cancel with one another and the result is usually expressed as a percentage. The coefficient of variation allows you to compare variability among data sets when the units or scale is different.

$$\text{Coefficient of Variation} = \text{CVar} = \left(\frac{s}{\bar{x}} \cdot 100 \right) \%$$

The following is a sample of the alcohol content and calories for 12 oz. beers. Is the alcohol content (alcohol by volume ABV) or calories more variable?

Name Brewery ABV Calories in 12 oz. Big Sky Scape Goat Pale Ale Big Sky Brewing 4.70% 163 Sierra Nevada Harvest Ale Sierra Nevada 6.70% 215 Steel Reserve Miller Coors 8.10% 222 O'Doul's Anheuser Busch 0.40% 70 Coors Light Miller Coors 4.15% 104 Genesee Cream Ale High Falls Brewing 5.10% 162 Breakside Pilsner Breakside 5.00% 158 Dark Ale Alberta Brewing Company 5.00% 155 Flying Dog Doggie Style Flying Dog Brewery 4.70% 158 Big Sky I.P.A. Big Sky Brewing 6.20% 195

Solution

Type in the data to Excel and run descriptive statistics on both data sets to get the following:

Calories in 12 oz.	
Mean	160.2
Standard Error	14.67257
Median	160
Mode	158
Standard Deviation	46.39875
Sample Variance	2152.844

Next, compute the coefficient of variation using the mean and standard deviation for both data sets.

$$\text{Alcohol Content CVar} = \left(\frac{0.02003}{0.05005} \cdot 100 \right) \% = 39.97\%$$

$$\text{Calories CVar} = \left(\frac{46.39875}{160.2} \cdot 100 \right) \% = 28.96\%$$

The alcohol content varies more than the number of calories.

There is no shortcut on the calculator or Excel for CVar, but you can find s and \bar{x} then simply divide.

This page titled [3.2: Measures of Spread](#) is shared under a [CC BY-SA 4.0](#) license and was authored, remixed, and/or curated by [Rachel Webb](#) via [source content](#) that was edited to the style and standards of the LibreTexts platform.

3.3: Measures of Placement

3.3.1 Z-Scores

A **z-score** is the number of standard deviations an observation x is above or below the mean. Z-scores are used to compare placement of a value compared to the mean.

If x is an observation from a sample then the standardized value of x is the z-score where $z = \frac{x - \bar{x}}{s}$

If x is an observation from a population then the standardized value of x is the z-score where $z = \frac{x - \mu}{\sigma}$

If the z-score is negative, x is less than the mean. If the z-score is positive, x is greater than the mean.

There are no shortcuts on the calculator in Excel for z-score, but you can find s and \bar{x} then simply subtract and divide.

The number of standard deviations that a data value is from the mean is frequently used when comparing position of values. If a z-score is zero, then the data value is the same as the mean. If the z-score is one, then the data value x is one standard deviation above the mean. If the z-score is -3.5 , then the data value is three and a half standard deviations below the mean. The shaded area in Figure 3-20 represents one standard deviation from the mean.

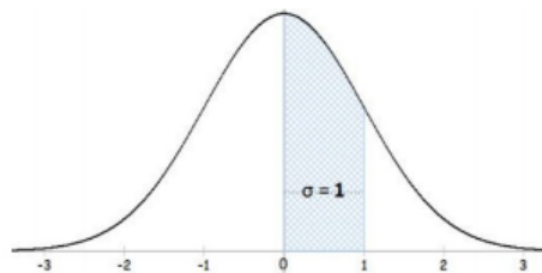


Figure 3-20

For a random sample, the mean time to make a cappuccino is 2.8 minutes with a standard deviation of 0.86 minutes. Find the z-score for someone that makes their cappuccino in 4.95 minutes.

Solution

$z = \frac{x - \bar{x}}{s} = \frac{4.95 - 2.8}{0.86} = 2.5$. Their time is 2.5 standard deviations above average.

On a math test, a student scored 45. The class average was 50 with a standard deviation of 3. The same student scored an 80 on a history test, and the class average was 85 with a standard deviation of 2.5. Which exam did the student perform better on compared with the rest of the class?

Solution

$$z_m = \frac{45 - 50}{3} = -1.67 \quad z_h = \frac{80 - 85}{2.5} = -2$$

Test scores are “better” when they are larger, so whichever has the largest z-score did better. The student did better on the math test than the history test, compared to the rest of the class.

Be careful with the word “better,” depending on the context, better may be smaller rather than larger. For example, golf scores, time running a race, and cholesterol levels would be better if they were smaller values.

The length of a human pregnancy has a mean of 272 days. A pregnancy lasting 281 days or more has a z-score of one. How many standard deviations above the mean is a pregnancy lasting 281 days or more?

Solution

One, since by definition the z-score is the number of standard deviations from the mean.

The length of a human pregnancy has a mean of 272 days. A pregnancy lasting 281 days or more has a z-score of one. What is the standard deviation of human pregnancy length?

Solution

We know the z-score = 1 and mean = 272. Replace these two numbers in the z-score formula then solve for the standard deviation.

$$1 = \frac{281-272}{\sigma} \Rightarrow 1 = \frac{9}{\sigma} \Rightarrow \sigma = 9$$

3.3.2 Percentiles

Along with the center and variability, another useful numerical measure is the ranking of a number. A **percentile** is a measure of ranking. It represents a location measurement of a data value to the rest of the values. Many standardized tests give the results as a percentile. Doctors use percentiles graphs to show height and weight standards.

Interpreting Percentiles

The pth percentile is the value that separates the bottom p% from the upper (100 – p)% of the ordered (smallest to largest) data. For example, the 75th percentile is the value that separates the bottom 75% from the upper 25% of the data. There are several methods used to find percentiles. You may get different percentile values depending on which software or calculator you use. For example, Excel has two methods, both of which are not the same method as the TI calculators.

What does a score of the 90th percentile represent?

Solution

This means that 90% of the scores were at or below this score. (A person did the same as or better than 90% of the test takers.)

What does a score of the 70th percentile represent?

Solution

This means that 70% of the scores were at or below this score.

Percentile versus Score

If the test was out of 100 points and you scored at the 80th percentile, what was your score on the test? You do not know! All you know is that you scored the same as or better than 80% of the people who took the test. If all the scores were low, you could have still failed the test. On the other hand, if many of the scores were high you could have gotten a 95% or so.

Note there is more than one method to find percentiles. This rounding rule in Excel is not the same as used on your TI calculators.

Finding a Percentile:

Step 1: Arrange the data in order from lowest to highest.

Step 2: Substitute into the formula $i = \frac{(n+1) \cdot p}{100}$ where n = sample size and p = percentile.

Step 3A: If i is a whole number, count out i places from the lowest number to find the percentile. For example, if you get i = 3, then the 3rd value is the percentile.

Step 3B: If i is not a whole number, then take the weighted average between the ith and ith + 1 data value as the percentile. For example, if i = 3.25, this would be 25% of the distance between the 3rd and the 4th data values as the percentile. Percentile = ith data value + (ith + 1 data value – ith data value)*(0.##) where ## is the remainder percent.

Compute the 10th percentile of the random sample of 13 ages: 15, 18, 22, 25, 26, 31, 33, 35, 38, 46, 51, 53, and 95.

Solution

Data is already ordered, so next find $i = \frac{(n+1) \cdot p}{100} = \frac{14 \cdot 10}{100} = 1.4$. Since i is not a whole number use Step 3B, take the weighted average of 40% of the way between the 1st and 2nd values. This would be $15 + (18 - 15) \cdot 0.4 = 16.2$ and this is your 10th percentile, $P_{10} = 16.2$.

In Excel use =PERCENTILE.EXC(array, k) where array is the cell reference to where the data is located and k is the percentile as a decimal between 0 and 1. Note you do not have to sort the data prior to typing it in to Excel.

For this example, if you type in the data into column A, then use the formula =PERCENTILE.EXC(A1:A13, 0.1) = 16.2.

	A	B	C	D	E
1	Age				
2	15		=PERCENTILE.EXC(A2:A14,0.1)		
3	18				
4	22				
5	25				
6	26				
7	31				
8	33				
9	35				
10	38				
11	46				
12	51				
13	53				
14	95				

3.3.3 Quartiles

There are special percentiles called quartiles. Quartiles are numbers that divide the data into fourths. One fourth (or a quarter) of the data falls between consecutive quartiles. There are three quartiles Q_1 , Q_2 , and Q_3 that subsequently divide the ordered data into the 4 pieces of approximately equal size, or 25% each. Thus, 25% of the values are less than Q_1 , 25% of the data values are between Q_1 and Q_2 , 25% of the data values are between Q_2 and Q_3 , and 25% are of the data values are greater than Q_3 .

Use the dollar as an example. If we make change for a dollar, we would get four quarters to make one dollar. Hence, quarter for quartiles.



To find the quartiles use the same rules as percentiles where we:

1. Arrange the observations from smallest to largest and use the previous percentile rule.
2. Then find all three quartiles.
 - $Q_1 = \text{first quartile} = 25^{\text{th}} \text{ percentile}$
 - $Q_2 = \text{second quartile} = \text{median} = 50^{\text{th}} \text{ percentile}$
 - $Q_3 = \text{third quartile} = 75^{\text{th}} \text{ percentile}$

Compute all three quartiles for the random sample of 13 ages: 15, 18, 22, 25, 26, 31, 33, 35, 38, 46, 51, 53, and 95.

Solution

For the first quartile $i = \frac{(n+1) \cdot p}{100} = \frac{14 \cdot 25}{100} = 3.5$. Since i is not a whole number take the weighted average of half way between the 3rd and 4th data values $22 + (25 - 22) \cdot 0.5 = 23.5$, so $Q_1 = 23.5$.

In Excel you could use the percentile formula, but there is also a quartile formula: =QUARTILE.EXC(array, quartile), where array is the cell reference to the data and quartile is either 1, 2 or 3 for the 3 possible quartiles.

In this example we would have =QUARTILE.EXC(A1:A13, 1) = 23.5.

To find the second quartile: $i = \frac{(n+1) \cdot p}{100} = \frac{14 \cdot 50}{100} = 7$. Since i is a whole number use the 7th value for Q_2 , so $Q_2 = 33$.

Or use the Excel formula =QUARTILE.EXC(A1:A13, 2) = 33.

For the third quartile, $i = \frac{(n+1) \cdot p}{100} = \frac{14 \cdot 75}{100} = 10.5$. Since i is not a whole number use the weighted average of half way between the 10th and 11th values $46 + (51 - 46) \cdot 0.5 = 48.5$.

Or use the Excel formula =QUARTILE.EXC(A1:A13, 3) = 48.5, so $Q_3 = 48.5$.

The high school graduating class of 2016 in Oregon had the following ACT quartile scores. Interpret what the number 26 under the Composite column represents.

Quartile	English	Mathematics	Reading	Science	Composite
Q ₃ (75th Percentile)	25	26	27	25	26
Q ₂ (50th Percentile)	21	21	22	22	21
Q ₁ (25th Percentile)	16	17	17	18	17

https://www.act.org/content/dam/act/unsecured/documents/P_38_389999_S_S_N00_ACT-GCPR_Oregon.pdf

Solution

From the report we can see that the third quartile for composite score is 26, this means that 75% of Oregon students that took the ACT exam scored 26 or below.

Other Types of Percentiles

Quintiles break a data set up into five equal pieces. We will not be using these, but be aware that percentiles come in different forms.

Deciles break a data set up into ten equal pieces and are found using the percentile rule. For example, the 6th decile = $D_6 = 60^{\text{th}}$ percentile.

Use the dollar as an example. If we make change for a dollar, we would get ten dimes to make one dollar. Hence, a dime might help you remember deciles.



Earlier in Example 2-14, we made an ogive using Excel with the following sample of 35 ages. Use the ogive to find the age for the 8th decile.

46 47 49 25 46 22 42 24 46 40 39 27 25 30 33 27 46 21 29 20 26 25 25 26 35 49 33 26 32 31 39 30 39 29 26

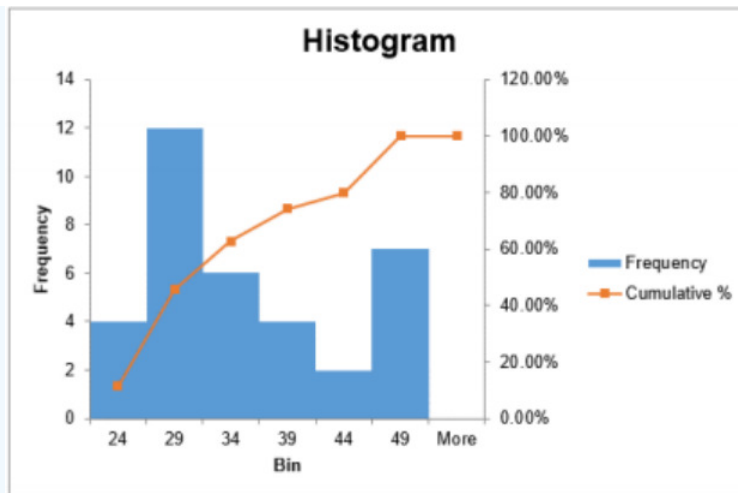


Figure 3-21

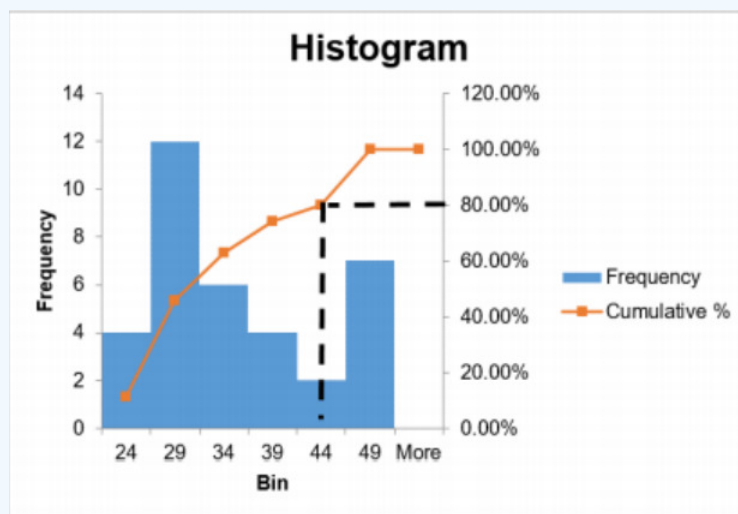


Figure 3-22

Solution

The cumulative % represents the cumulative relative frequencies which are equivalent to the percentiles for each class. The red line is the ogive and the percentiles correspond to the vertical axis on the right side.

If we wanted to know what age the 80th percentile was in the sample, we could use the ogive to get an approximate value. Starting on the right at 80% make a horizontal line until you hit the red cumulative % line, and then make a vertical line from there down to the axis to get the approximate age. See Figure 3-22. In this case, the 80th percentile = 8th decile would be approximately 44.

3.3.4 Five Number Summary & Outliers

If you record the quartiles together with the minimum and maximum values from a data set, you have five numbers. These five numbers are known as the five-number summary consisting of the minimum, the first quartile (Q_1), the median (Q_2), the third quartile (Q_3), and the maximum (in that order).

The **interquartile range**, IQR, is the difference between the first and third quartiles, Q_1 and Q_3 . Half of the data (50%) falls in the interquartile range. If the IQR is "large," the data is spread out and if the IQR is "small," the data is closer together.

$$\text{The interquartile range (IQR)} = Q_3 - Q_1$$

Not only does the IQR give a range of the middle 50% of the data, but is also used to determine outliers in a sample.

To find these outliers we first find what are called a lower and upper limit sometimes called fences.

The lower limit, or inner fence, is $Q_1 - (1.5 \cdot \text{IQR})$. Any values that are less than the lower limit is considered an outlier.

Similarly, the upper limit, or outer fence, is $Q_3 + (1.5 \cdot \text{IQR})$. Any values that are more than the upper limit are considered outliers.

If all the numbers in the sample fall between the lower and upper limit, including the endpoints, then there are no outliers in the sample. Any values outside these limits would be considered outliers.

3.3.5 Modified Box-and-Whisker Plot

A boxplot (or box-and-whisker plot) is a graphical display of the five-number summary. A boxplot can be drawn vertically or horizontally. The modified boxplot shows outliers, whereas a regular boxplot does not show outliers. The basic format of the plot is a box drawn from Q_1 to Q_3 , a vertical line drawn inside the box for the median, and horizontal lines (called whiskers) extending out of the middle of each end of the box to the minimum and maximum. The box should not touch the number line. The modified boxplot extends the left line to the smallest value greater than the lower fence, and extends the right line to the largest value less than the upper fence. Dots, circles or asterisks represent any outlier. We will make modified boxplots for this course. Like always, label the tick marks on the number line and give the graph a title.

A **boxplot** is a graph of the 5-number summary, see Figure 3-23.

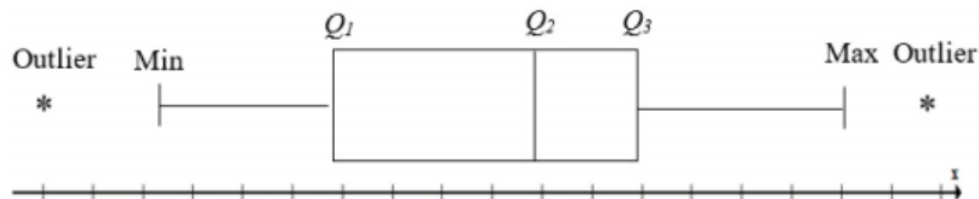


Figure 3-23

It is important to note that when you are making the boxplot the limits for finding outliers are not graphed in the plot, they were only used to find the outliers. The whiskers would go to the next largest (or smallest) value in the data set after you removed the outlier(s).

If the sample has a symmetrical distribution, then the boxplot will be visibly symmetrical. If the data distribution has a left skew or a right skew, the line on that side of the boxplot will be visibly long in the direction of skewness. If the four quartiles are all about the same distance apart, then the data are likely a near uniform distribution. If a boxplot is symmetrical, and both outside lines are noticeably longer than the Q_1 to median and median to Q_3 distance, the distribution is then probably bell-shaped.

Make a modified box-and-whisker plot for the random sample of 13 ages: 15, 18, 22, 25, 26, 31, 33, 35, 38, 46, 51, 53, and 95.

Solution

Use Excel to compute the three quartiles as:

$$Q_1 = \text{QUARTILE.EXC}(A1:A13, 1) = 23.5$$

$$Q_2 = \text{QUARTILE.EXC}(A1:A13, 2) = 33$$

$$Q_3 = \text{QUARTILE.EXC}(A1:A13, 3) = 48.5$$

The 5-number summary values are 15, 23.5, 33, 48.5 and 95. Each of these numbers will need to be incorporated into the box-and-whisker plot, and any outliers to graph the modified box-and-whisker plot.

To find the outliers, first find the IQR, and then find the lower and upper limits. The $\text{IQR} = Q_3 - Q_1 = 48.5 - 23.5 = 25$. The lower limit is $Q_1 - (1.5 \cdot \text{IQR}) = 23.5 - 1.5(25) = -14$. The upper limit is $Q_3 + (1.5 \cdot \text{IQR}) = 48.5 + 1.5(25) = 86$.

Any value in our data set that is not between the lower and upper limits $[-14, 86]$ is an outlier. By observation, we have one number that is outside the range so the outlier is 95.

The whiskers would be drawn to the next largest (or smallest) value in the data set after you removed the outlier(s). For this example, the next largest value in the data set is 53.

Now put that all together to get the following graph in Figure 3-24

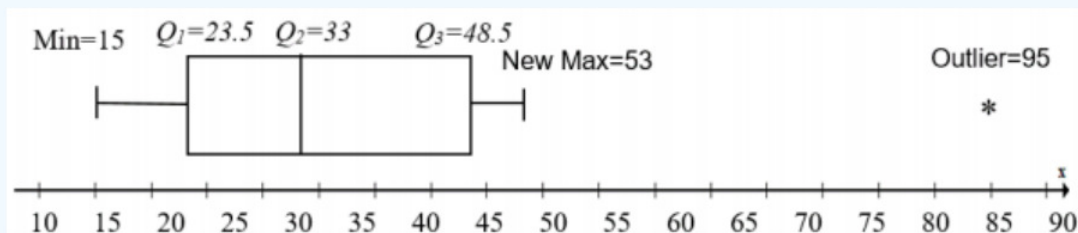
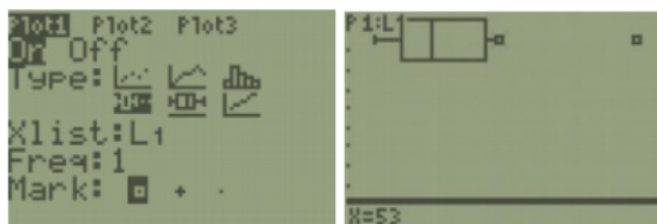


Figure 3-24


The TI-calculator and newer versions of Excel will make a modified boxplot. Note that the quartile rules used in the TI calculators are slightly different than in Excel and what is presented in this content. They do not use a weighted mean between values, just half way between values.

TI-84: First, enter your data in to list 1. Next, press 2^{nd} > STAT PLOT, then choose the first plot. Note that your calculator may say Plot1...Off or show a different type of graph then the screenshot. Using your arrow keys, turn the plot on. Choose the modified boxplot which is the first of the two boxplot options with the small dots to the right of the whiskers representing outliers. Make sure your Xlist: is on L_1 , keep frequency as a one, and any mark will work, but the square shows up best.

Here is screen shot from the calculator for the last example. You can use Trace on the boxplot from the TI-84 calculator below to see where each quartile, whisker and outlier are.



TI-89: Enter the data into the Stat/List editor under list 1. Press [APP] then scroll down to Stat/List Editor; on the older style TI-89 calculators, go into the Flash/App menu, and then scroll down the list. Make sure the cursor is in the list, not on the list name, and type the desired values pressing [ENTER] after each one. To clear a previously stored list of data values, arrow up to the list name you want to clear, press [CLEAR], and then press enter. After you enter the data, select Press [F2] Plots, scroll down to [1: Plot Setup] and press [Enter]. Then select [F1] Define.



Use your arrow keys to select Mod Box Plot for Type, and then scroll down to the x-variable box. Press 2^{nd} [VarLink] this key is above the + sign. Then arrow down until you find your List1 name under the Main file folder.

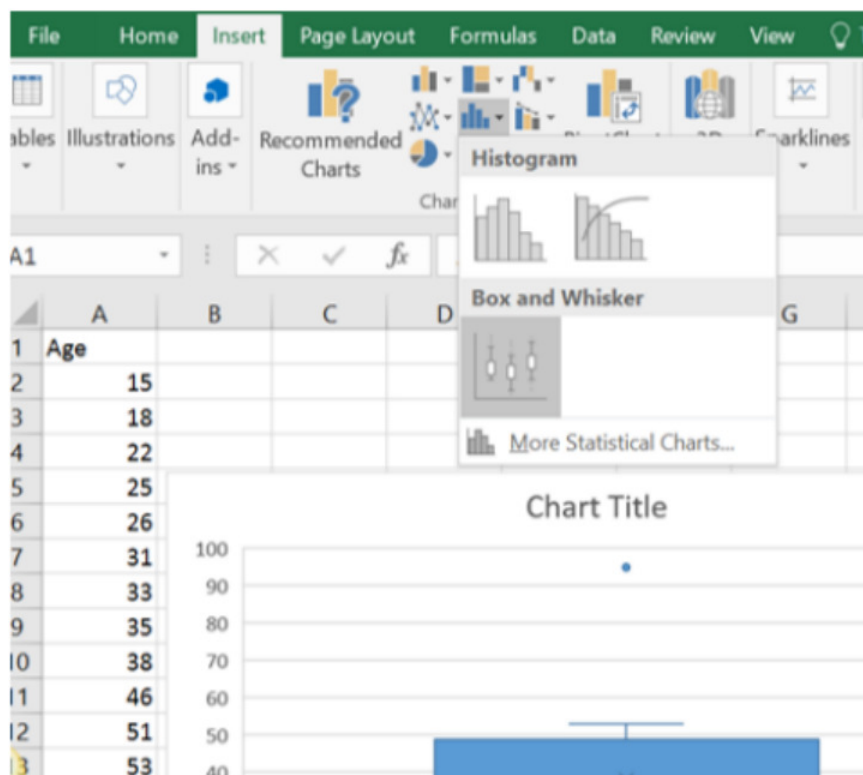
Then press [Enter] and this will bring the name List1 back to the menu. You will now see that Plot1 has a small picture of a boxplot. To view the boxplot, press [F5] Zoom Data.



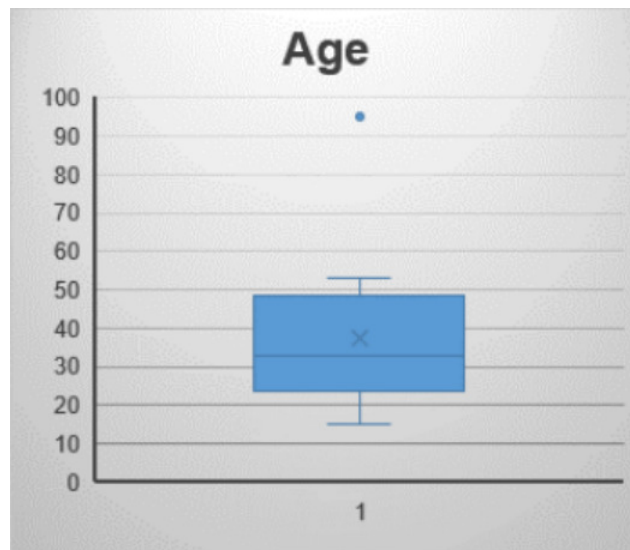
Select [F3:Trace] to see the five-number summary and any outliers. Use the left and right arrow keys to move to the other values.

Excel: Note this example is on a PC running Excel 2019. Older versions of Excel may not have a boxplot option. First, type your sample data into column A in any order. Highlight the data, and then select the Insert tab. Under the graphing options, the picture shaped liked a histogram called statistical charts, select Box and Whisker.

You can change the formatting options and add the chart title as needed.



Below is the finished Excel boxplot. Note that Excel does a vertical boxplot rather than the traditional horizontal number line.



Excel marks an \times just above the median where the mean would fall. Usually one would not include the mean on a boxplot. Remember that when the mean is greater than the median the distribution is usually skewed to the right.

When a boxplot has outliers only on one side, then we can also say the distribution is skewed in the direction of the outlier, which also indicates that these ages are skewed to the right.

Side by side boxplots are great at comparing quartiles and distribution shapes for several samples using the same units and scale.

There are four franchises in different parts of town. Compare the weekly sales over a year for each of the four franchises. Compare the boxplots shown in Figure 3-25.



Figure 3-25

Solution

We can see that Store 2 in Figure 3-25 has the highest sales since the median for this store is higher than the third quartile for all the other stores. Store 2 also has sales that are more consistent from week to week with the smaller range and has a symmetric distribution. The lowest performing store, Store 1, has the lowest median sales and is skewed to the right. Both Stores 3 and 4 have moderate sales and are skewed left

3.3.6 Empirical Rule

Before looking at the process for computing probabilities, it is somewhat useful to look at the Empirical Rule which gives the approximate proportion of data points under a bell-shaped curve between two points. The Empirical Rule is just an approximation,

more precise methods for finding these proportions will be demonstrated in later sections.

The Empirical Rule should only be used with bell-shaped data.



The Empirical Rule (also called the 68-95-99.7 Rule)

In a bell-shaped distribution with mean μ and standard deviation σ ,

- Approximately 68% of the observations fall within 1 standard deviation (σ) of the mean μ .
- Approximately 95% of the observations fall within 2 standard deviations (2σ) of the mean μ .
- Approximately 99.7% of the observations fall within 3 standard deviations (3σ) of the mean μ .

Note that we are using notation for the population mean μ and the population standard deviation σ , but the rule would also work using the sample mean and sample standard deviation.

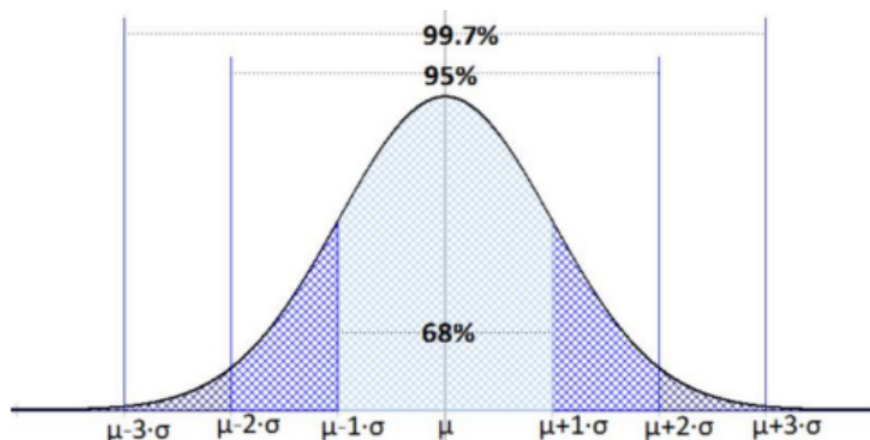


Figure 3-26

In 2009 the average SAT mathematics score was 501, with a standard deviation of 116. Assume that SAT scores are bell-shaped.

- Approximately what proportion of students scored between 269 and 733 on the 2009 SAT mathematics test?
- Approximately what proportion of students scored between 385 and 617 on the 2009 SAT mathematics test?
- Approximately what proportion of students scored at least 617 on the 2009 SAT mathematics test?

Solution

a) The key word is bell shaped so we can use the Empirical Rule. Start by finding the z-scores $z = \frac{x-\mu}{\sigma}$ for both endpoints given in the question.

A z-score by definition is the number of standard deviations a data value is from the mean.

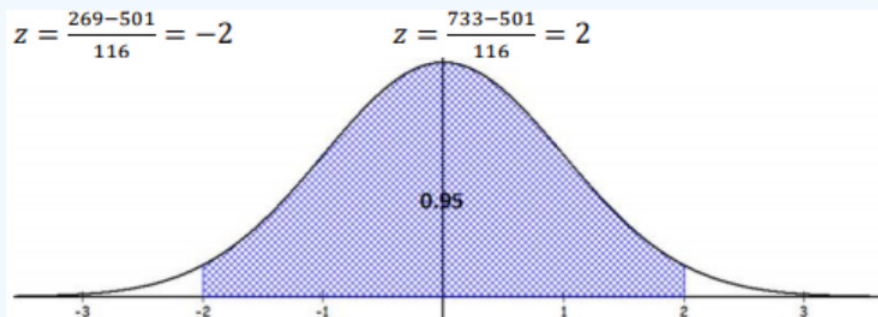


Figure 3-27

The two z-scores show that the test scores of 269 and 733 are two standard deviations from the mean. Using the second bulleted item in the Empirical Rule the answer would be approximately 95% of the math SAT scores will fall between 269 and 733.

b) Take the z-scores of the endpoints to get: $z = \frac{385-501}{116} = -1$, $z = \frac{617-501}{116} = 1$

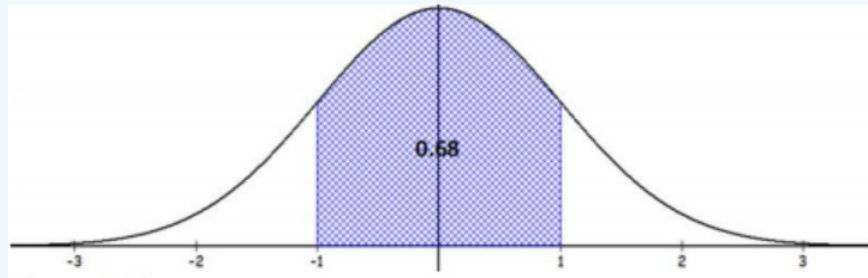


Figure 3-28

The two z-scores show that the test scores of 385 and 617 are one standard deviation from the mean. Using the first bulleted item in the Empirical Rule the answer would be approximately 68% of the math SAT scores will fall between 385 and 617.

c): Start by taking the z-score of 617, we get $z = \frac{617-501}{116} = 1$.

Since a bell-shaped curve is symmetric and we can assume that 100% of the population is represented then we can subtract the middle from the whole to get $100\% - 68\% = 32\%$. If we divide this outside area by two, $\frac{32}{2} = 16\%$, we would expect 16% in each tail area. See Figure 3-29.

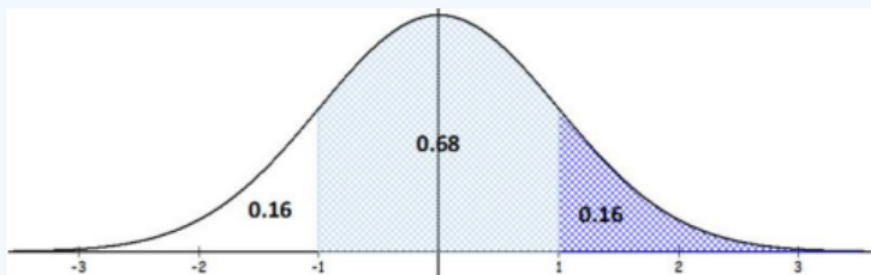


Figure 3-29

The answer would be approximately 16% of students scored at least 617 on the 2009 SAT mathematics test.

If you were to get a z-score that is not -3 , -2 , -1 , 1 , 2 or 3 then you would not be able to apply the Empirical Rule. We also need to ensure that our population has a bell-shaped curve before using the Empirical Rule.

3.3.7 Chebyshev's Theorem

One way of estimating the proportion of values from any data set within a certain number of standard deviations is Chebyshev's Theorem. Pafnuty Chebyshev (Чебышёв) was a Russian mathematician who proved several important theorems. One that we will use for this chapter is called Chebyshev's Inequality. The Empirical Rule only works for bell-shaped distributions. However, we can use Chebyshev's Inequality for any distribution shape.



[Chebyshev](#)

Chebyshev's Inequality: The proportion (percent or fraction) of values from a data set that will fall within k standard deviations of the mean will be at least $\left(\left(1 - \frac{1}{(z)^2} \right) \cdot 100 \right) \%$, where z is a real number that has an absolute value greater than 1 (z is not necessarily an integer).

The average number of acres for farms in a certain country is 443 with a standard deviation of 42 acres. At least what percent of farms will have between 338 and 548 acres?

Solution

The question gives no indication for the distribution shape for number of farm acres so we will use Chebyshev's Inequality instead of the Empirical Rule. The easiest way to start is to find the z -score of the lower and upper bounds given in the question where $\mu = 443$ and $\sigma = 42$.

$$z = \frac{338-443}{42} = -2.5 \text{ and } z = \frac{548-443}{42} = 2.5$$

Use either z -score, but it is easier to use the positive value, and substitute into the formula:

$$\left(\left(1 - \frac{1}{(z)^2} \right) \cdot 100 \right) \% = \left(\left(1 - \frac{1}{(2.5)^2} \right) \cdot 100 \right) \% = 84\%$$

At least 84% of the farms will have between 338 and 548 acres.

The average quiz score for a statistics course is 15.2 with a standard deviation of 3.15. What are the quiz scores that would have at least 75% of the scores between?

Solution

This question gives a percent and we need to work backward. We will use Chebyshev's Inequality since there is no mention of a bell-shaped distribution. Use algebra to solve for z in the following formula

$$\left(\left(1 - \frac{1}{(z)^2} \right) \cdot 100 \right) \% = 75\%.$$

Start by dividing both sides by 100% to get rid of the %. We then have $1 - \frac{1}{(z)^2} = 0.75$.

Next, add $\frac{1}{(z)^2}$ to both sides of the equation and subtract 0.75 from both sides of the equation to get $0.25 = \frac{1}{(z)^2}$.

Multiply both sides by z^2 , divide both sides by 0.25 and simplify to get $(z)^2 = \frac{1}{0.25} \Rightarrow z^2 = 4$.

Take the square root of both sides $\sqrt{z^2} = \sqrt{4} \Rightarrow z = \pm 2$.

This means that according to Chebyshev's Theorem at least 75% of the data will fall within two standard deviations from the mean. Next, we need to find what quiz scores are two standard deviations from the mean.

Find the mean ± 2 standard deviations, by computing:

$$\mu - 2 \cdot \sigma = 15.2 - 2 \cdot 3.15 = 8.9$$

$$\mu + 2 \cdot \sigma = 15.2 + 2 \cdot 3.15 = 21.5$$

At least 75% of the students scored between 8.9 and 21.5 on the quiz.

The general formulas for finding the endpoints are: Lower endpoint: $a = \mu - z \cdot \sigma$

Upper endpoint: $b = \mu + z \cdot \sigma$

If the distribution of quiz scores were bell shaped we would have a larger percent (95%) between 8.9 and 21.5. Chebyshev's Inequality assumes the distribution is skewed and says "at least" which would then also be correct if more students fell within the range.

Since Chebyshev's Inequality works for any shape of a distribution we should only use it between two values, not strictly below or above a point. If we were interested in below a certain point, we would not know if we had the fat or skinny tail of a skewed distribution. The following picture shows a positively skewed distribution with 1.5 standard deviations from the mean shaded in red. Chebyshev's Inequality would guarantee at least

$\left(\left(1 - \frac{1}{(1.5)^2} \right) \cdot 100 \right) \% = 56\%$ of the data in the shaded area would fall within 1.5 standard deviations from the mean.

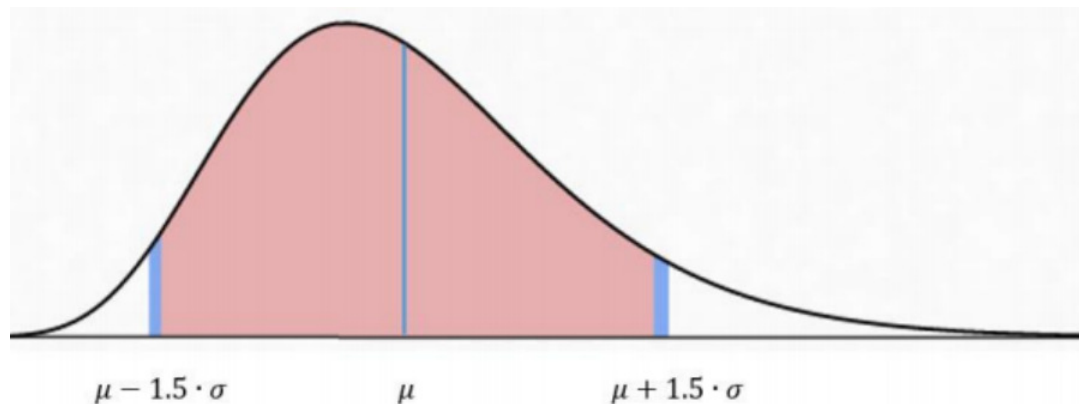


Figure 3-30

Summary:

Use the mode for nominal, ordinal, interval, and ratio data, since the mode is just the data value that occurs most often. You are just counting the data values. The median can be found on ordinal, interval, and ratio data, since you need to put the data in order. As long as there is order to the data you can find the median. The mean can be found on interval and ratio data, since you must have numbers to add together. The mean is pulled in the direction of outliers. By comparing the mean to the median, you can decide if a distribution is symmetric or skewed. The range, variance, standard deviation and coefficient of variation are used to measure how spread out a data set is from the middle. When comparing two data sets with different units or scale use the coefficient of variation. Z-scores tell you how many standard deviations a data point is away from the mean. Quartiles are special percentiles that are used to find the interquartile range, identify outliers, and make a box-and-whisker plot. Use the Empirical Rule when finding the proportion of a sample or population that fall within 1, 2 or 3 standard deviations on a bell-shaped curve. If the distribution is bell shaped then the Empirical Rule states that approximately 68% of the data will fall within one standard deviation, 95% within two standard deviations and 99.7% within three standard deviations. If you do not know the distribution shape, then use Chebyshev's Inequality to find the minimum proportion within $|z| > 1$ standard deviations from the mean.

This page titled [3.3: Measures of Placement](#) is shared under a [CC BY-SA 4.0](#) license and was authored, remixed, and/or curated by [Rachel Webb](#) via [source content](#) that was edited to the style and standards of the LibreTexts platform.

3.4: Chapter 3 Formulas

Sample Mean: $\bar{x} = \frac{\sum x}{n}$	Population Mean: $\mu = \frac{\sum x}{N}$
Weighted Mean: $\bar{x} = \frac{\sum(xw)}{\sum w}$	Range = Max – Min
Sample Standard Deviation: $s = \sqrt{\frac{\sum(x-\bar{x})^2}{n-1}}$	Population Standard Deviation = σ
Sample Variance: $s^2 = \frac{\sum(x-\bar{x})^2}{n-1}$	Population Variance = σ^2
Coefficient of Variation: $CVar = \left(\frac{s}{\bar{x}} \cdot 100\right) \%$	Z-Score: $z = \frac{x-\bar{x}}{s}$
Percentile Index: $i = \frac{(n+1)p}{100}$	Interquartile Range: $IQR = Q_3 - Q_1$
Empirical Rule: $z = 1, 2, 3 \Rightarrow 68\%, 95\%, 99.7\%$	Outlier Lower Limit: $Q_1 - (1.5 \cdot IQR)$
Chebyshev's Inequality: $\left(\left(1 - \frac{1}{(z)^2}\right) \cdot 100\right) \%$	Outlier Upper Limit: $Q_3 + (1.5 \cdot IQR)$

This page titled [3.4: Chapter 3 Formulas](#) is shared under a [CC BY-SA 4.0](#) license and was authored, remixed, and/or curated by [Rachel Webb](#) via [source content](#) that was edited to the style and standards of the LibreTexts platform.

3.5: Chapter 3 Exercises

? Chapter 3 Exercises

1. A sample of eight cats found the following weights in kg.

4.0	4.1	3.2	4.0	3.8	3.6	3.7	3.4
-----	-----	-----	-----	-----	-----	-----	-----

a) Compute the mode.

b) Compute the median.

c) Compute the mean.

2. Cholesterol levels in milligrams (mg) of cholesterol per deciliter (dL) of blood, were collected from patients two days after they had a heart attack (Ryan, Joiner & Ryan, Jr, 1985).

270	236	210	142	280	272	160
220	226	242	186	266	206	318
294	282	234	224	276	282	360
310	280	278	288	288	244	236

Retrieved from <http://www.statsci.org/data/general/cholest.html>.

a) Compute the mode.

b) Compute the median.

c) Compute the mean.

3. The lengths (in kilometers) of rivers on the South Island of New Zealand that flow to the Tasman Sea are listed below.

River	Length (km)	River	Length (km)
Hollyford	76	Waimea	48
Cascade	64	Motueka	108
Arawhata	68	Takaka	72
Haast	64	Aorere	72
Karangarua	37	Heaphy	35
Cook	32	Karamea	80
Waiho	32	Mokihinui	56
Whataroa	51	Buller	177
Wanganui	56	Grey	121
Waitaha	40	Taramakau	80
Hokitika	64	Arahura	56

Data from <http://www.statsci.org/data/oz/nzrivers.html>.

a) Compute the mode.

b) Compute the median.

c) Compute the mean.

4. A university assigns letter grades with the following 4-point scale: A = 4.00, A- = 3.67, B+ = 3.33, B = 3.00, B- = 2.67, C+ = 2.33, C = 2.00, C- = 1.67, D+ = 1.33, D = 1.00, D- = 0.67, F = 0.00. Calculate the grade point average (GPA) for a student who took in one term a 4 credit math course and received a B+, a 1 credit seminar course and received an A, a 3 credit history course and received an A- and a 5 credit writing course and received a D.

5. A university assigns letter grades with the following 4-point scale: A = 4.00, A- = 3.67, B+ = 3.33, B = 3.00, B- = 2.67, C+ = 2.33, C = 2.00, C- = 1.67, D+ = 1.33, D = 1.00, D- = 0.67, F = 0.00. Calculate the grade point average (GPA) for a student

who took in one term a 3 credit biology course and received a C+, a 1 credit lab course and received a B, a 4 credit engineering course and received an A- and a 4 credit chemistry course and received a C+.

6. An employee at Clackamas Community College (CCC) is evaluated based on goal setting and accomplishments toward the goals, job effectiveness, competencies, and CCC core values. Suppose for a specific employee, goal 1 has a weight of 30%, goal 2 has a weight of 20%, job effectiveness has a weight of 25%, competency 1 has a weight of 4%, competency 2 has weight of 3%, competency 3 has a weight of 3%, competency 4 has a weight of 3%, competency 5 has a weight of 2%, and core values has a weight of 10%. Suppose the employee has scores of 3.0 for goal 1, 3.0 for goal 2, 2.0 for job effectiveness, 3.0 for competency 1, 2.0 for competency 2, 2.0 for competency 3, 3.0 for competency 4, 4.0 for competency 5, and 3.0 for core values. Compute the weighted mean score for this employee. If an employee has a score less than 2.5, they must have a Performance Enhancement Plan written. Does this employee need a plan?

7. A statistics class has the following activities and weights for determining a grade in the course: test 1 worth 15% of the grade, test 2 worth 15% of the grade, test 3 worth 15% of the grade, homework worth 10% of the grade, semester project worth 20% of the grade, and the final exam worth 25% of the grade. If a student receives an 85 on test 1, a 76 on test 2, an 83 on test 3, a 74 on the homework, a 65 on the project, and a 61 on the final, what grade did the student earn in the course? All the assignments were out of 100 points.

8. A statistics class has the following activities and weights for determining a grade in the course: test 1 worth 15% of the grade, test 2 worth 15% of the grade, test 3 worth 15% of the grade, homework worth 10% of the grade, semester project worth 20% of the grade, and the final exam worth 25% of the grade. If a student receives a 25 out of 30 on test 1, a 20 out of 30 on test 2, a 28 out of 30 on test 3, a 120 out of 140 points on the homework, a 65 out of 100 on the project, and a 31 out of 35 on the final, what grade did the student earn in the course?

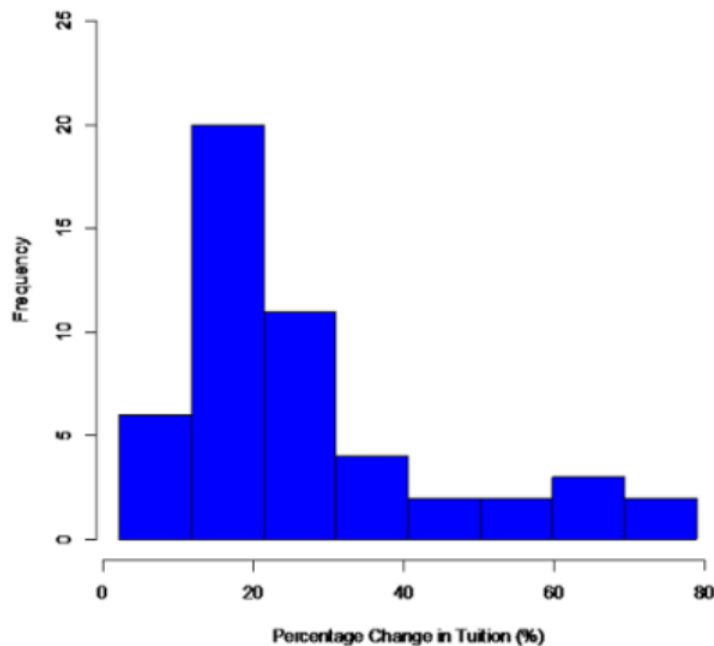
9. A sample of eight cats found the following weights in kg.

3.7	4.1	3.2	4.0	3.8	3.6	3.7	3.4
-----	-----	-----	-----	-----	-----	-----	-----

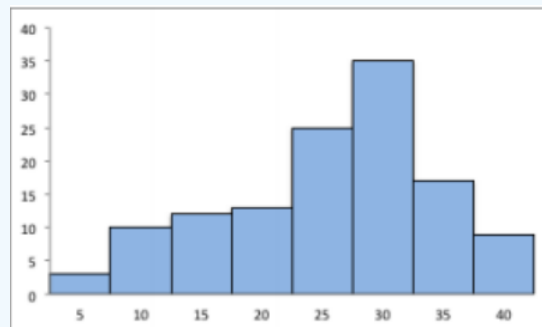
- Compute the range.
- Compute the variance.
- Compute the standard deviation.

10. The following data represents the percent change in tuition levels at public, four-year colleges (inflation adjusted) from 2008 to 2013 (Weissmann, 2013). To the right is the histogram. What is the shape of the distribution?

Percentage Change in Tuition Levels (Inflation Adjusted) 2008 to 2013



11. The following is a histogram of quiz grades.



- What is the shape of the distribution?
- Which is higher, the mean or the median?

12. Cholesterol levels were collected from patients two days after they had a heart attack (Ryan, Joiner & Ryan, Jr, 1985). Retrieved from <http://www.statsci.org/data/general/cholest.html>.

270	236	210	142	280	272	160
220	226	242	186	266	206	318
294	282	234	224	276	282	360
310	280	278	288	288	244	236

- Compute the range.
- Compute the variance.
- Compute the standard deviation.

13. Suppose that a manager wants to test two new training programs. The manager randomly selects five people for each training type and measures the time it takes to complete a task after the training. The times for both trainings are in table below. Which training method is more variable?

Training 1	56	75	48	63	59
Training 2	60	58	66	59	58

14. The lengths (in kilometers) of rivers on the South Island of New Zealand that flow to the Tasman Sea are listed below.

River	Length (km)	River	Length (km)
Hollyford	76	Waimea	48
Cascade	64	Motueka	108
Arawhata	68	Takaka	72
Haast	64	Aorere	72
Karangarua	37	Heaphy	35
Cook	32	Karamea	80
Waiho	32	Mokihinui	56
Whataroa	51	Buller	177
Wanganui	56	Grey	121
Waitaha	40	Taramakau	80
Hokitika	64	Arahura	56

Data from <http://www.statsci.org/data/oz/nzrivers.html>.

- Compute the range.
- Compute the variance.
- Compute the standard deviation.

15. Here are pulse rates before and after exercise. Which group has the larger range?

Before	Pulse Rates	After
9 8 8 7 6 5 2	6	
9 8 8 8 6 5 5 5 1 1 0 0	7	
8 8 7 5 4 2	8	5 6 6 7 8 9
4 0	9	0 1 1 2 3 4 5 5 6 8
4	10	0 1 4 6 7
	11	6 7
	12	4 5 7

16. A midterm in a statistics course had a mean score of 70 with a standard deviation 5. A quiz in a biology course had an average of 20 with a standard deviation of 5.

- Compute the coefficient of variation for the statistics midterm exam.
- Compute the coefficient of variation for the biology quiz.
- Aaliyah scored a 75 on the statistics midterm exam. Compute Aaliyah's z-score.
- Viannie scored a 25 on the biology quiz. Compute Viannie's z-score.
- Which student did better on their respect test? Why? f) Was there more variability for the midterm or the quiz scores? Justify your answer with statistics.

17. The following is a sample of quiz scores.

Score	17	44.5	16.1	37.2	42.8	37.5	19.5	28.2
-------	----	------	------	------	------	------	------	------

- Compute \bar{x} .
- Compute s^2 .

- c) Compute the median.
- d) Compute the coefficient of variation.
- e) Compute the range.

18. The time it takes to fill an online order was recorded and the following descriptive statistics were found using Excel. What is the coefficient of variation?

<i>Time</i>	
Mean	7
Standard Error	0.8085
Median	6.5
Standard Deviation	3.43
Sample Variance	11.7647
Range	12
Minimum	3
Maximum	15
Sum	126
Count	18

19. The following is the height and weight of a random sample of baseball players.

Height (inches)	Weight (pounds)
76	212
76	224
72	180
74	210
75	215
71	200
77	235
78	235
77	194
76	185
72	180
72	170
75	220
74	228
73	210
72	180
70	185
73	190
71	186
74	200
74	200
75	210
78	240
72	208
75	180

- a) Compute the coefficient of variation for both height and weight.
- b) Is there more variation in height or weight? a) Compute the coefficient of variation for both height

and weight.

20. A midterm in a statistics course had a mean score of 70 with a standard deviation 5. A quiz had an average of 20 with a standard deviation of 5. A student scored a 73 on their midterm and 22 on their quiz. On which test did the student do better on compared to the rest of the class? Justify your answer with statistics.

21. The length of a human pregnancy is normally distributed with a mean of 272 days with a standard deviation of 9.1 days. William Hunnicut was born in Portland, Oregon, at just 181 days into his gestation. What is the zscore for William Hunnicut's gestation? Retrieved from: http://digitalcommons.georgefox.edu/cgi/viewcontent.cgi?article=1149&context=gfc_life.

22. Arm span (sometimes referred to as wingspan) is the physical measurement of the length of an individual's arms from fingertip to fingertip. The average arm span of a man is 70 inches with a standard deviation of 4.5 inches. The Olympic gold medalists Michael Phelps has an arm span of 6 feet 7 inches, which is three inches more than his height. What is the z-score for Michael Phelps arm span?

23. The average time to run the Pikes Peak Marathon 2017 was 7.44 hours with a standard deviation of 1.34 hours. Rémi Bonnet won the Pikes Peak Marathon with a run time of 3.62 hours. Retrieved from: <http://pikespeakmarathon.org/results/ppm/2017/>.

The Tevis Cup 100-mile one-day horse race for 2017 had an average finish time of 20.38 hours with a standard deviation of 1.77 hours. Tennessee Lane won the 2017 Tevis cup in a ride time of 14.75 hours. Retrieved from: <https://aerc.org/rpts/RideResults.aspx>.

- Compute the z-score for Rémi Bonnet's time.
- Compute the z-score for Tennessee Lane's time.
- Which competitor did better compared to their respective events?

24. Cholesterol levels were collected from patients two days after they had a heart attack (Ryan, Joiner & Ryan, Jr, 1985). Retrieved from <http://www.statsci.org/data/general/cholest.html>.

270	236	210	142	280	272	160
220	226	242	186	266	206	318
294	282	234	224	276	282	360
310	280	278	288	288	244	236

- Compute the 25th percentile.
- Compute the 90th percentile.
- Compute the 5th percentile.
- Compute Q_3 .

25. A sample of eight cats found the following weights in kg. Compute the 5-number summary.

3.7	4.1	3.2	4.0	3.8	3.6	3.7	3.4
-----	-----	-----	-----	-----	-----	-----	-----

26. The following data represent the grade point averages for a sample of 15 PSU students.

GPA		
3.37	2.61	2.02
3.33	2.93	2.98
3.5	3.81	3.77
2.91	2.51	3.33
3.11	3.32	3.87

- Compute the lower and upper limits.
- Identify if there are any outliers.
- Draw a modified box-and-whisker plot.

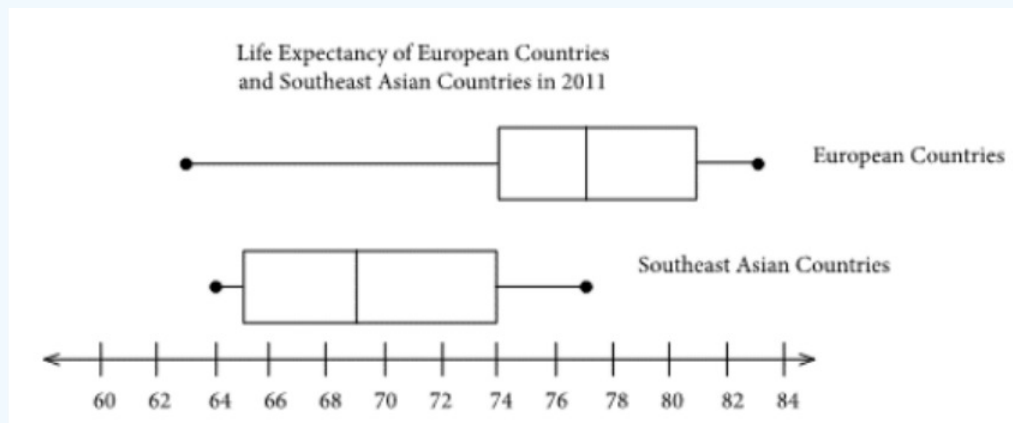
27. The lengths (in kilometers) of rivers on the South Island of New Zealand that flow to the Tasman Sea are listed below.

River	Length (km)	River	Length (km)
Hollyford	76	Waimea	48
Cascade	64	Motueka	108
Arawhata	68	Takaka	72
Haast	64	Aorere	72
Karangarua	37	Heaphy	35
Cook	32	Karamea	80
Waiho	32	Mokihinui	56
Whataroa	51	Buller	177
Wanganui	56	Grey	121
Waitaha	40	Taramakau	80
Hokitika	64	Arahura	56

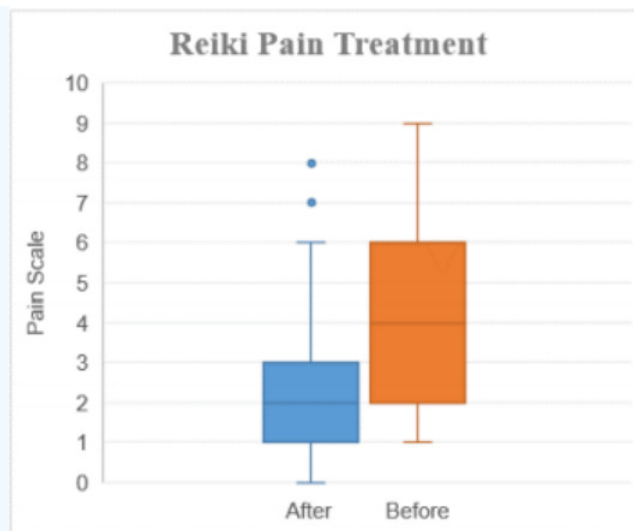
Data from <http://www.statsci.org/data/oz/nzrivers.html>.

- Compute the 5-number summary.
- Compute the lower and upper limits and any outlier(s) if any exist.
- Make a modified box-and-whisker plot.

28. The following are box-and-whiskers plot for life expectancy for European countries and Southeast Asian countries from 2011. What is the distribution shape of the European countries' life expectancy?



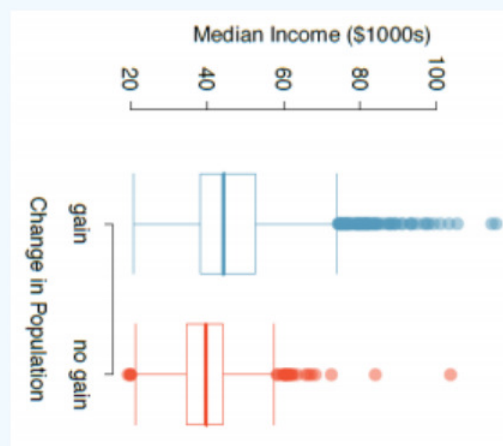
29. To determine if Reiki is an effective method for treating pain, a pilot study was carried out where a certified second-degree Reiki therapist provided treatment on volunteers. Pain was measured using a visual analogue scale (VAS) immediately before and after the Reiki treatment (Olson & Hanson, 1997). Higher numbers mean the patients had more pain.



a) Use the box-and-whiskers plots to determine the IQR for the before treatment measurements.

b) Use the box-and-whiskers plots of the before and after VAS ratings to determine if the Reiki method was effective in reducing pain.

30. The median household income (in \$1,000s) from a random sample of 100 counties that gained population over 2000-2010 are shown on the left. Median incomes from a random sample of 50 counties that had no population gain are shown on the right.




(OpenIntro Statistics, 2016)

What is the distribution shape for the counties with no population gain?


31. Match the correct descriptive statistics to the letter of the corresponding histogram and boxplot. Choose the correct letter for the corresponding histogram and Roman numeral for the corresponding boxplot. You should only use the visual representation, the definition of standard deviation and measures of central tendency to match the graphs with their respective descriptive statistics.

	Mean	Median	Standard Deviation	Histogram Letter	Boxplot Number
1	10.4	11	6.2		
2	16	15.8	1.9		
3	14.8	15	3.1		

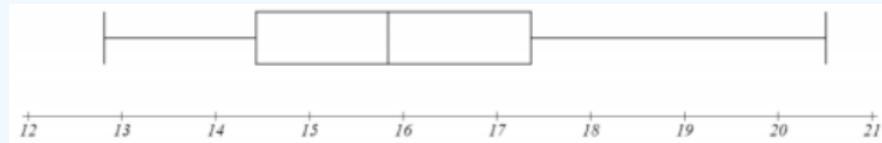
i.



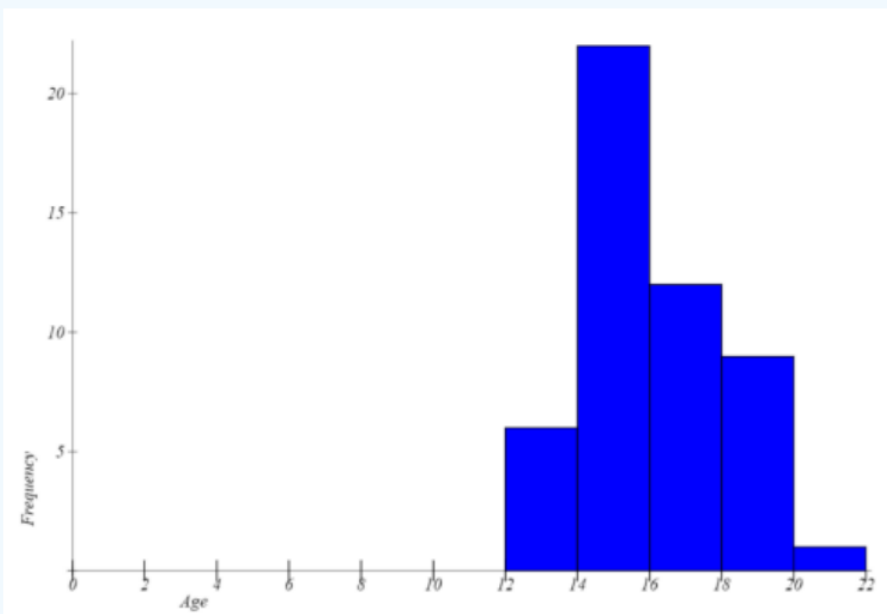
ii.



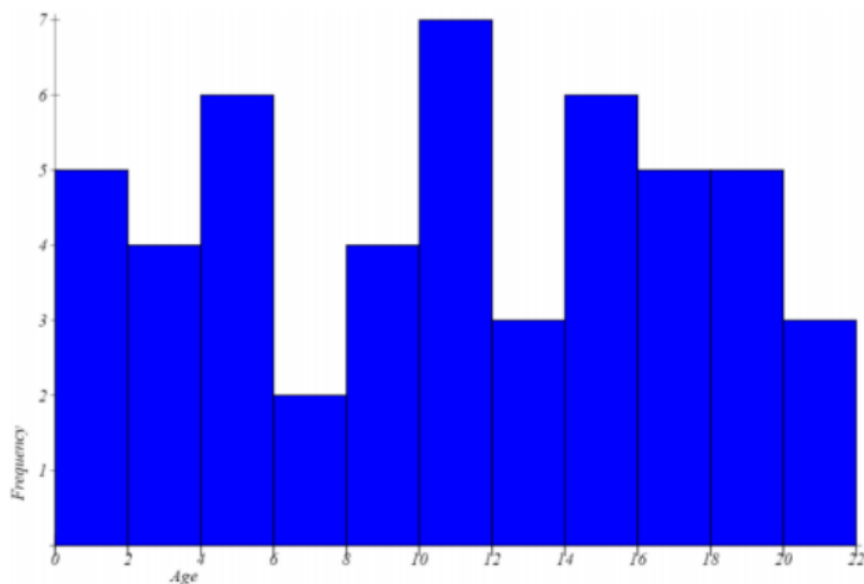
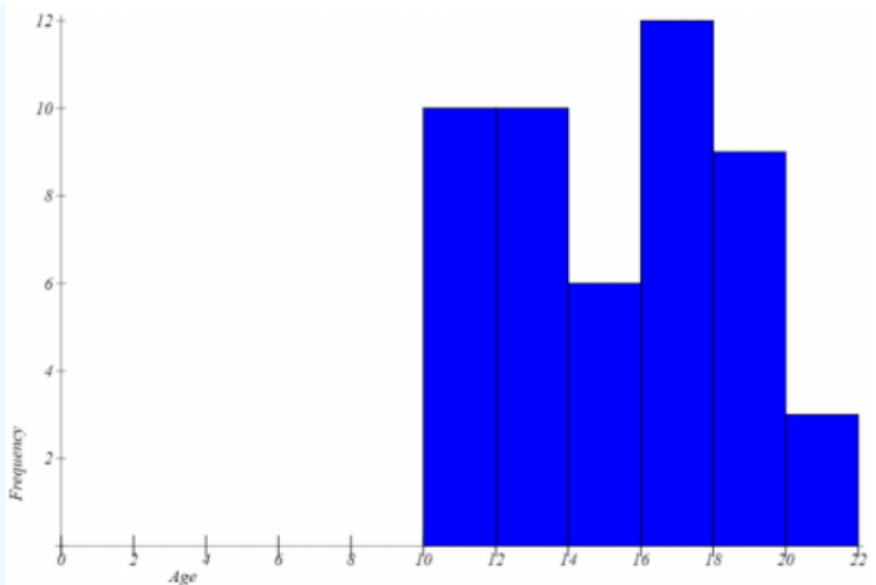
iii.



a)



b)



c)

32. A sample has the following statistics: Minimum = 10, Maximum = 50, Range = 40, \bar{x} = 20, mode = 32, Q_1 = 30, Q_2 = 35, Q_3 = 38, standard deviation = 5 and IQR = 8.

a) According to Chebyshev's Inequality, what percentage of data would fall within the values 12.5 and 27.5?

b) If this sample were bell-shaped what percentage of the data would fall within the values 10 and 30?

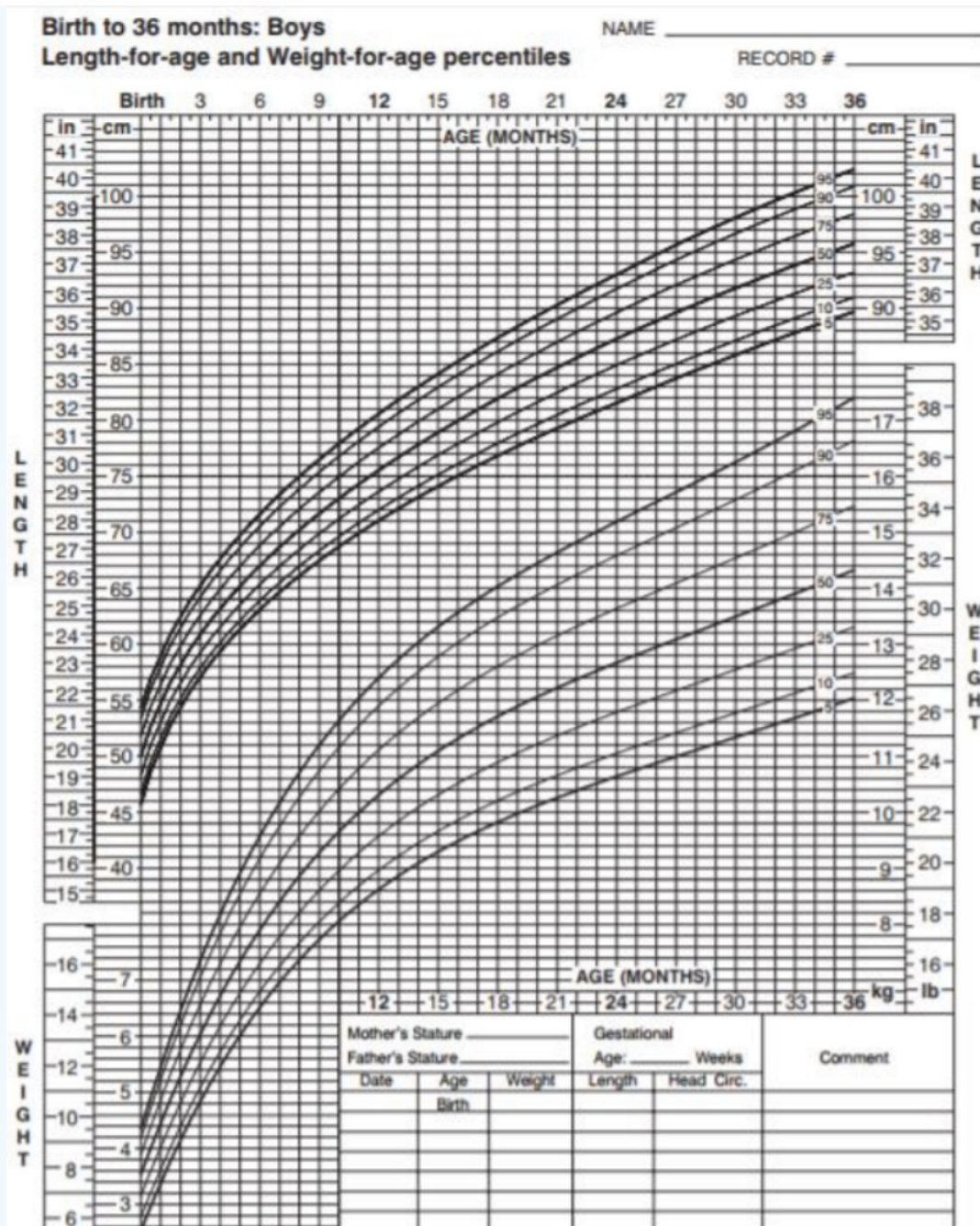
33. The length of a human pregnancy is bell-shaped with a mean of 272 days with a standard deviation of 9 days (Bhat & Kushtagi, 2006). Compute the percentage of pregnancies that last between 245 and 299 days.

34. Arm span is the physical measurement of the length of an individual's arms from fingertip to fingertip. A man's arm span is approximately bell-shaped with mean of 70 inches with a standard deviation of 4.5 inches. What percent of men have an arm span between 61 and 79 inches?

35. The size of fish is very important to commercial fishing. A study conducted in 2012 found the length of Atlantic cod caught in nets in Karlskrona to have a mean of 49.9 cm and a standard deviation of 3.74 cm (Ovegard, Berndt & Lunneryd, 2012).

a) According to Chebyshev's Inequality, at least what percent of Atlantic cod should be between 44.29 and 55.51 cm?

- b) Assume the length of Atlantic cod is bell-shaped. Approximately what percent of Atlantic cod are between 46.16 and 53.64 cm?
- c) Assume the length of Atlantic cod is bell-shaped. Approximately what percent of Atlantic cod are between 42.42 and 57.38 cm?
36. Scores on the SAT for a certain year were bell-shaped with a mean of 1511 and a standard deviation of 194.
- a) What two SAT scores that separated the middle 68% of SAT scores for that year?
- b) What two SAT scores that separated the middle 95% of SAT scores for that year?
- c) How high did a student need to score that year to be in the top 2.5%?
37. In a mid-size company, the distribution of the number of phone calls answered each day by each of the 12 employees is bell-shaped and has a mean of 59 and a standard deviation of 10. Using the empirical rule, what is the approximate percentage of daily phone calls numbering between 29 and 89?
38. The number of potholes in any given 1 mile stretch of pavement in Portland has a bell-shaped distribution. This distribution has a mean of 54 and a standard deviation of 5. Using the empirical rule, what is the approximate percentage of 1-mile long roadways with potholes numbering between 44 and 59?
39. A company has a policy of retiring company cars; this policy looks at number of miles driven, purpose of trips, style of car and other features. The distribution of the number of months in service for the fleet of cars is bellshaped and has a mean of 42 months and a standard deviation of 3 months. Using the Empirical Rule, what is the approximate percentage of cars that remain in service between 48 and 51 months?
40. The following is an infant weight percentile chart. What is the 50th percentile height in cm for a 10-month old boy?



Retrieved from: <https://www.cdc.gov/growthcharts/data/set1clinical/cj411017.pdf>.

Answer to Odd Numbered Exercises

- 1 a) mode = 4 b) median = 3.75 c) $\bar{x} = 3.725$
- 3) a) 56 & 64 b) 64 c) 67.6818
- 5) 2.833
- 7) 72.25
- 9) a) Range = 0.9 b) $s^2 = 0.0870$ c) $s = 0.2949$
- 11) a) Negatively skewed b) The median is higher.
- 13) $s_1 = 9.9348$, $s_2 = 3.3466$; Training 1 is more variable

15) Before range = 42, after range = 42, both groups have the same range.

17) a) 30.35 b) 136.7 c) 32.7 d) 38.52% e) 28.4

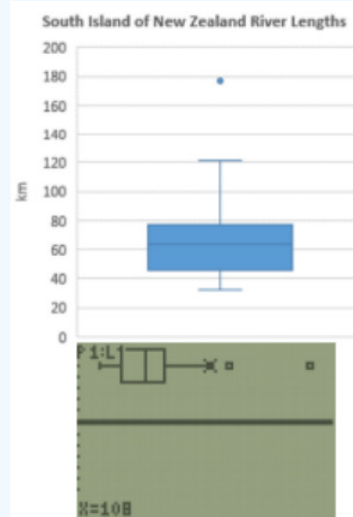
19) a) CVheight = 3.04%; CVweight = 9.84% b) Weight, because it has a higher coefficient of variation.

21) -10

23) a) -2.8507 b) -3.1808 c) Tennessee Lane

25) Min = 3.2, $Q_1 = 3.45$ (TI: 3.55), $Q_2 = 3.7$, $Q_3 = 3.95$ (TI: 3.85), Max = 4.1

27) a) Min = 32, $Q_1 = 46$ (TI: 48), $Q_2 = 64$, $Q_3 = 77$ (TI: 76), Max = 177 b) lower limit = -0.5 (TI: 6), upper limit = 123.5



(TI: 118), outliers = 177 (TI: 121 & 177) c)

29) a) 4 b) Yes, the treatment was effective.

31) 1. c. ii; 2. a. iii; 3. b. i

33) 99.7%

35) a) 55.56% b) 68% c) 95%

37) 99.7%

39) 2.35%

This page titled [3.5: Chapter 3 Exercises](#) is shared under a [CC BY-SA 4.0](#) license and was authored, remixed, and/or curated by [Rachel Webb](#) via [source content](#) that was edited to the style and standards of the LibreTexts platform.

CHAPTER OVERVIEW

4: Probability

- [4.1: Introduction](#)
- [4.2: Three Types of Probability](#)
- [4.3: Complement Rule](#)
- [4.4: Union and Intersection](#)
- [4.5: Independent Events](#)
- [4.6: Conditional Probability](#)
- [4.7: Counting Rules](#)
- [4.8: Chapter 4 Formulas](#)
- [4.9: Chapter 4 Exercises](#)

This page titled [4: Probability](#) is shared under a [CC BY-SA 4.0](#) license and was authored, remixed, and/or curated by [Rachel Webb](#) via [source content](#) that was edited to the style and standards of the LibreTexts platform.

4.1: Introduction

One story about how probability theory was developed is that a gambler wanted to know when to bet more and when to bet less. He talked to a couple of friends of his that happened to be mathematicians. Their names were Pierre de Fermat and Blaise Pascal. Since then many other mathematicians have worked to develop probability theory.



Figure 4.1.1: [Fermat](#) and [Pascal](#)

Understanding probability is important in life. Examples of mundane questions that probability can answer for you are: do I need to carry an umbrella? Do you wear a heavy coat on a given day? More important questions that probability can help with are your chances that the car you are buying will need more maintenance, your chances of passing a class, your chances of winning the lottery, or your chances of catching a deadly virus. The chance of you winning the lottery is very small, yet many people will spend the money on lottery tickets. In general, events that have a low probability (under 5%) are unlikely to occur. Whereas if an event has a high probability of happening (over 80%), then there is a good chance that the event will happen. This chapter will present some of the theory that you need to help decide if an event is likely to happen or not.

First, some definitions:

Definition: Experiment

An activity or process that has specific results that can be repeated indefinitely which has a set of well-defined outcomes.

Definition: Outcomes

The results of an experiment.

Definition: Sample Space

Collection of all possible outcomes of the experiment. Usually denoted as S.

Definition: Event

The set of outcomes that are a subset of the sample space. The symbol used for events is usually a capital letter often at the beginning of the alphabet like A, B or C.

Here are some examples of sample spaces and events.

Figure 4-1

Experiment	Sample Space	Example of Event
Toss a coin twice	{HH, HT, TH, TT}	A = Getting exactly two heads = {HH}
Toss a coin twice	{HH, HT, TH, TT}	B = Getting at least one head = {HH, HT, TH}
Roll a die	{1, 2, 3, 4, 5, 6}	C = Roll an odd number = {1, 3, 5}

Experiment	Sample Space	Example of Event
Roll a die	{1, 2, 3, 4, 5, 6}	$D = \text{Roll a prime number} = \{2, 3, 5\}$
Roll a die	{1, 2, 3, 4, 5, 6}	$E = \text{Roll an even number} = \{2, 4, 6\}$

A tree diagram is a graphical way of representing a random experiment with multiple steps

A bag contains 10 colored marbles: 7 red and 3 blue. A random experiment consists of drawing a marble from the bag, then drawing another marble without replacement (without putting the first marble back in the bag). Create the tree diagram for this experiment and write out the sample space.

Solution

The first marble that is drawn can be either red or blue and is represented with the first sideways V split. The next marble that is drawn is represented by the two sideways V splits on the right. The top sideways V assumes that a red marble was drawn on the first draw, and then the second marble drawn can be either red or blue. The bottom sideways V assumes that a blue marble was drawn on the first draw, and then the second marble drawn can be either red or blue. Then combine the colors as you trace up the four pathways from left to right.

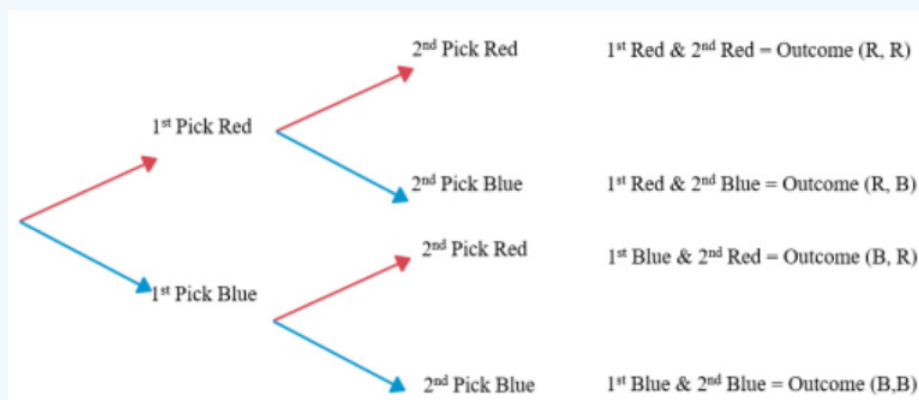


Figure 4-2

The sample space would be $S = \{RR, RB, BR, BB\}$. Note that the event RB and BR are considered different outcomes since they are picked in a different order and are considered distinct events.

This page titled [4.1: Introduction](#) is shared under a [CC BY-SA 4.0](#) license and was authored, remixed, and/or curated by [Rachel Webb](#) via [source content](#) that was edited to the style and standards of the LibreTexts platform.

4.2: Three Types of Probability

Classical Approach to Probability (Theoretical Probability)

$$P(A) = \frac{\text{Number of ways A can occur}}{\text{Number of different outcomes in S}} \quad (4.2.1)$$

The classical approach can only be used if each outcome has equal probability.

If an experiment consists of flipping a coin twice, compute the probability of getting exactly two heads.

Solution

The event of getting exactly two heads is $A = \{HH\}$. The number of ways A can occur is 1. The number of different outcomes in $S = \{HH, HT, TH, TT\}$ is 4. Thus $P(A) = \frac{1}{4}$.

If a random experiment consists of rolling a six-sided die, compute the probability of rolling a 4.

Solution

The sample space is $S = \{1, 2, 3, 4, 5, 6\}$. The event A is that you want is to get a 4, and the event space is $A = \{4\}$. Thus, in theory the probability of rolling a 4 would be $P(A) = \frac{1}{6} = 0.1667$.

Suppose you have an iPhone with the following songs on it: 5 Rolling Stones songs, 7 Beatles songs, 9 Bob Dylan songs, 4 Johnny Cash songs, 2 Carrie Underwood songs, 7 U2 songs, 4 Mariah Carey songs, 7 Bob Marley songs, 6 Bunny Wailer songs, 7 Elton John songs, 5 Led Zeppelin songs, and 4 Dave Matthews Band songs. The different genre that you have are rock from the '60s which includes Rolling Stones, Beatles, and Bob Dylan; country includes Johnny Cash and Carrie Underwood; rock of the '90s includes U2 and Mariah Carey; Reggae includes Bob Marley and Bunny Wailer; rock of the '70s includes Elton John and Led Zeppelin; and bluegrass/rock includes Dave Matthews Band.

- What is the probability that you will hear a Johnny Cash song?
- What is the probability that you will hear a Bunny Wailer song?
- What is the probability that you will hear a song from the '60s?
- What is the probability that you will hear a Reggae song?
- What is the probability that you will hear a song from the '90s or a bluegrass/rock song?
- What is the probability that you will hear an Elton John or a Carrie Underwood song?
- What is the probability that you will hear a country song or a U2 song?

Solution

a) The way an iPhone works, it randomly picks the next song so you have no idea what the next song will be. Now you would like to calculate the probability that you will hear the type of music or the artist that you are interested in. The sample set is too difficult to write out, but you can figure it from looking at the number in each set and the total number. The total number of songs you have is 67. There are 4 Johnny Cash songs out of the 67 songs. $P(\text{Johnny Cash song}) = \frac{4}{67} = 0.0597$

b) There are 6 Bunny Wailer songs. $P(\text{Bunny Wailer}) = \frac{6}{67} = 0.0896$.

c) There are 5, 7, and 9 songs that are classified as rock from the '60s, which is a total of 21. $P(\text{rock from the '60s}) = \frac{21}{67} = 0.3134$.

d) There are total of 13 songs that are classified as Reggae. $P(\text{Reggae}) = \frac{13}{67} = 0.1940$

e) There are 7 and 4 songs that are songs from the '90s and 4 songs that are bluegrass/rock, for a total of 15. $P(\text{rock from the '90s or bluegrass/rock}) = \frac{15}{67} = 0.2239$.

f) There are 7 Elton John songs and 2 Carrie Underwood songs, for a total of 9. $P(\text{Elton John or Carrie Underwood song}) = \frac{9}{67} = 0.1343$.

g) There are 6 country songs and 7 U2 songs, for a total of 13. $P(\text{country or U2 song}) = 13/67 = 0.1940$.

Empirical Probability (Experimental or Relative Frequency Probability)

The experiment is performed many times and the number of times that event A occurs is recorded. Then the probability is approximated by finding the relative frequency.

$$P(A) = \frac{\text{Number of ways A occurred}}{\text{Number of times the experiment was repeated}} \quad (4.2.2)$$

Important: The probability of any event A satisfies $0 \leq P(A) \leq 1$, keep this in mind if the question is asking for a probability, and make sure your answer is a number between 0 and 1. A probability, relative frequency, percentage, and proportion are all different words for the same concept. Probability answers can be given as percentages, decimals, or reduced fractions.

Suppose that the experiment is rolling a die. Compute the probability of rolling a 4.

Solution

The sample space is $S = \{1, 2, 3, 4, 5, 6\}$. The event A is that you want is to get a 4, and the event space is $A = \{4\}$. To do this, roll a die 10 times. When you do that, you get 4 two times. Based on this experiment, the probability of getting a 4 is 2 out of 10 or $1/5 = 0.2$. To get more accuracy, repeat the experiment more times. It is easiest to put this information in a table, where n represents the number of times the experiment is repeated. When you put the number of 4s found divisible by the number of times you repeat the experiment, this is the relative frequency. See the last column in Figure 4-3.

Figure 4-3: Trials for Die Experiment n Number of 4s Relative Frequency 10 2 0.2 50 6 0.12 100 18 0.18 500 81 0.162 1,000 163 0.163

Notice that as n increased, the relative frequency seems to approach a number; it looks like it is approaching 0.163. You can say that the probability of getting a 4 is approximately 0.163. If you want more accuracy, then increase n even more by rolling the die more times.

These probabilities are called **experimental probabilities** since they are found by actually doing the experiment or simulation. They come about from the relative frequencies and give an approximation of the true probability.

The approximate probability of an event A, notated as $P(A)$, is

$$P(A) = \frac{\text{Number of ways A occurred}}{\text{Number of times the experiment was repeated}} \quad (4.2.3)$$

For the event of getting a 4, the probability would be $P(\text{Roll a 4}) = \frac{\text{Number of times A occurred}}{\text{Number of times the experiment was repeated}} = 0.163$

“What was that voice?” shouted Arthur.

‘I don't know,’ yelled Ford, ‘I don't know. It sounded like a measurement of probability.’

‘Probability? What do you mean?’

‘Probability. You know, like two to one, three to one, five to four against. It said two to the power of one hundred thousand to one against. That's pretty improbable you know.’

(Adams, 2002)

Law of Large Numbers: as n increases, the relative frequency tends towards the theoretical probability

Figure 4-4 shows a graph of experimental probabilities as n gets larger and larger. The dashed yellow line is the theoretical probability of rolling a four of $1/6 \approx 0.1667$. Note the x-axis is in a log scale.

Note that the more times you roll the die, the closer the experimental probability gets to the theoretical probability.

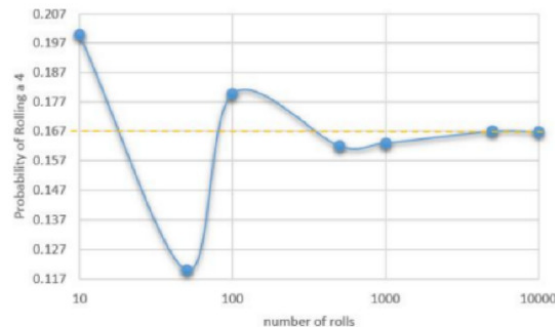


Figure 4-4

You can compute experimental probabilities whenever it is not possible to calculate probabilities using other means. An example is if you want to find the probability that a family has 5 children, you would have to actually look at many families, and count how many have 5 children. Then you could calculate the probability. Another example is if you want to figure out if a die is fair. You would have to roll the die many times and count how often each side comes up. Make sure you repeat an experiment many times, because otherwise you will not be able to estimate the true probability of 5 children. This is due to the law of large numbers, since the more times we repeat the experiment, the closer the experimental probabilities will get to the theoretical probabilities. For difficult theoretical probabilities, we can run computer simulations that can run an experiment repeatedly many times very quickly and come up with accurate estimates of the theoretical probability.

A fitness center coach kept track of members over the last year. They recorded if the person stretched before they exercised, and whether they sustained an injury. The following contingency table shows their results. Select one member at random and find the following probabilities.

Injury No Injury **Stretched** 52 270 **Did Not Stretch** 21 57

- Compute the probability that a member sustained an injury.
- Compute the probability that a member did not stretch.
- Compute the probability that a member sustained an injury and did not stretch.

Solution

- Find the totals for each row, column, and grand total.

	Injury	No Injury	Total
Stretched	52	270	322
Did Not Stretch	21	57	78
Total	73	327	400

Next, find the relative frequencies by dividing each number by the total of 400.

	Injury	No Injury	Total
Stretched	0.13	0.675	0.805
Did Not Stretch	0.0525	0.1425	0.195
Total	0.1825	0.8175	1

Using the definition of a probability we get $P(\text{Injury}) = \frac{\text{Number of injuries}}{\text{Total number of people}} = \frac{73}{400} = 0.1825$.

	Injury	No Injury	Total
--	--------	-----------	-------

Stretched	0.13	0.675	0.805
Did Not Stretch	0.0525	0.1425	0.195
Total	0.1825	0.8175	1

Using the table, we can get the same answer very quickly by just taking the column total under Injury to get 0.1825. As we get more complicated probability questions, these contingency tables will help organize your data.

b) Using the relative frequency contingency table, take the total of the row for all the members that did not stretch and we get the $P(\text{Did Not Stretch}) = 0.195$.

	Injury	No Injury	Total
Stretched	0.13	0.675	0.805
Did Not Stretch	0.0525	0.1425	0.195
Total	0.1825	0.8175	1

c) Using the relative frequency contingency table, take the intersection of the injury column with the did not stretch row and we get $P(\text{Injury and Did Not Stretch}) = 0.0525$.

	Injury	No Injury	Total
Stretched	0.13	0.675	0.805
Did Not Stretch	0.0525	0.1425	0.195
Total	0.1825	0.8175	1

3. Subjective Probability

The probability of event A is estimated using previous knowledge and is someone's opinion.

Compute the probability of meeting Dolly Parton.

Solution

I estimate the probability of meeting Dolly Parton to be $1.2\text{E}-9 \rightarrow 0.0000000012$ (i.e. very, very small).

What is the probability it will rain tomorrow?

Solution

A weather reporter looks at several forecasts, uses their expert knowledge of the region, and reports the probability that it will rain in Portland, OR, is 80%.



This page titled [4.2: Three Types of Probability](#) is shared under a [CC BY-SA 4.0](#) license and was authored, remixed, and/or curated by [Rachel Webb](#) via [source content](#) that was edited to the style and standards of the LibreTexts platform.

4.3: Complement Rule

A random sample of 500 records from the 2010 United States Census were downloaded to Excel and the following contingency table was found for biological sex and marital status. Select one member at random and find the following probabilities.

Count of Marital Status	Column Labels	Row Labels	Female	Male	Grand Total
Divorced	21	17	38		
Married/spouse absent	5	9	14		
Married/spouse present	92	100	192		
Never married/single	93	129	222		
Separated	1	2	3		
Widowed	20	11	31		
Grand Total	232	268	500		

- Compute the probability that a person is divorced.
- Compute the probability that a person is not divorced.

Solution

- Take the row total of all divorced which is 38 and then divide by the grand total of 500 to get $P(\text{Divorced}) = 38/500 = 0.076$.
- We can add up all the other category totals besides divorced $14 + 192 + 222 + 3 + 31 = 462$, then divide by the grand total to get $P(\text{Not Divorced}) = 462/500 = 0.924$.

There is a faster way to compute these probabilities that will be important for more complicated probabilities called the complement rule. The table contains 100% ($100\% = 1$ as a proportion) of our data so we can assume that the probability of the divorced is the opposite (complement) to the probability of not being divorced.


Notice that the $P(\text{Divorced}) + P(\text{Not Divorced}) = 1$. This is because these two events have no outcomes in common, and together they make up the entire sample space. Events that have this property are called **complementary events**. Notice $P(\text{Not Divorced}) = 1 - P(\text{Divorced}) = 1 - 0.076 = 0.924$.

If two events are **complementary events**, then to find the probability of one event just subtract the probability from 1. Notation used for complement of A also called “not A” is A^C .

$$P(A) + P(A^C) = 1 \text{ or } P(A) = 1 - P(A^C) \text{ or } P(A^C) = 1 - P(A)$$

Some texts will use the notation for a complement as A' or \overline{A} , instead of A^C .

Suppose you know that the probability of it raining today is 80%. What is the probability of it not raining today?



Solution

Since not raining is the complement of raining, then $P(\text{not raining}) = 1 - P(\text{raining}) = 1 - 0.8 = 0.2$.

“On a small obscure world somewhere in the middle of nowhere in particular - nowhere, that is, that could ever be found, since it is protected by a vast field of improbability to which only six men in this galaxy have a key - it was raining.” (Adams, 2002)

Venn Diagrams

Figure 4-5 is an example of a Venn diagram and is a visual way to represent sets and probability. The rectangle represents all the possible outcomes in the entire sample space (the population). The shapes inside the rectangle represent each event in the sample space. Usually these are ovals, but they can be any shape you want. If there are any shared elements between the events then the circles should overlap one another.

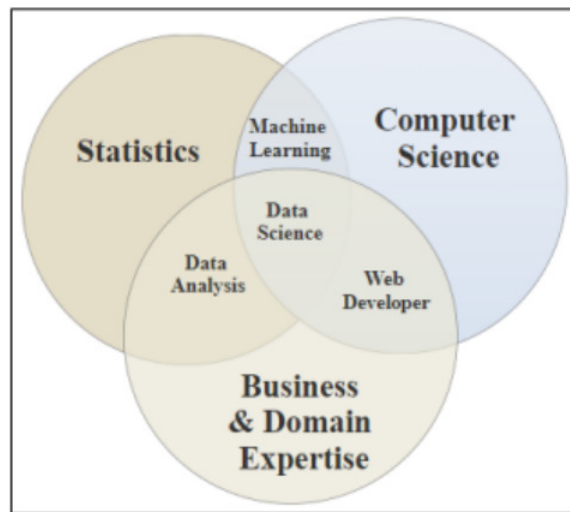


Figure 4-5

The field of statistics includes machine learning, data analysis, and data science. The field of computer science includes machine learning, data science and web development. The field of business and domain expertise includes data analysis, data science and web development. If you know machine learning, then you will need a background in both statistics and computer science. If you are a data scientist, then you will need a background in statistics, computer science, business and domain expertise.

Suppose you know the probability of not getting the flu is 0.24. Draw a Venn diagram and find the probability of getting the flu.

Solution

Since getting the flu is the complement of not getting the flu, the $P(\text{getting the flu}) = 1 - P(\text{not getting the flu}) = 1 - 0.24 = 0.76$.

Label each space as in Figure 4-6.

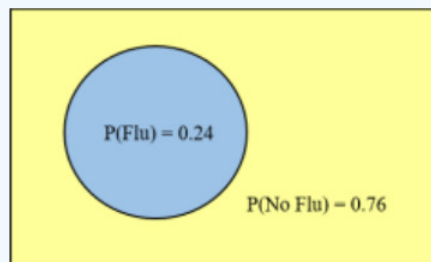


Figure 4-6

The complement is useful when you are trying to find the probability of an event that involves the words “at least” or an event that involves the words “at most.” As an example of an “at least” event is supposing you want to find the probability of making at least \$50,000 when you graduate from college. That means you want the probability of your salary being greater than or equal to \$50,000.

An example of an “at most” event is supposing you want to find the probability of rolling a die and getting at most a 4. That means that you want to get less than or equal to a 4 on the die, a 1, 2, 3, or 4.

The reason to use the complement is that sometimes it is easier to find the probability of the complement and then subtract from 1.

This page titled [4.3: Complement Rule](#) is shared under a [CC BY-SA 4.0](#) license and was authored, remixed, and/or curated by [Rachel Webb](#) via [source content](#) that was edited to the style and standards of the LibreTexts platform.

4.4: Union and Intersection

When two events cannot happen at the same time, they are called **mutually exclusive** or **disjoint events**.

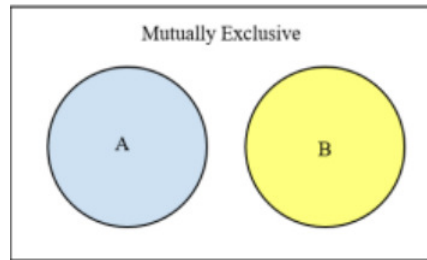


Figure 4-7

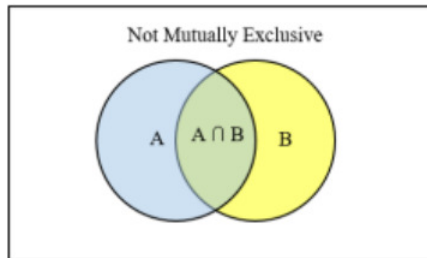


Figure 4-8

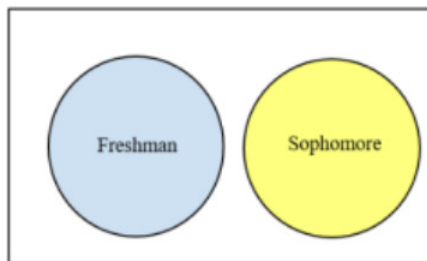


Figure 4-9

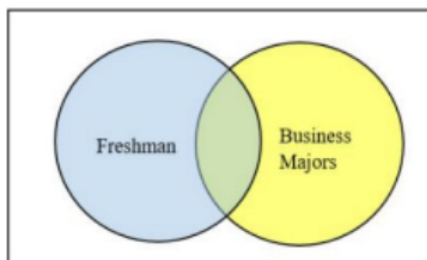


Figure 4-10

For example, a student cannot be a freshman and a sophomore at the same time, see Figure 4-9. These are mutually exclusive events. A student could be freshman and a business major at the same time so the event freshman and the event business major are not mutually exclusive see Figure 4-10.

Intersection

When we are finding the probability of both A **and** B happening at the same time we denote this as $P(A \cap B)$. This overlap is called the intersection.

When two events, say A and B, occur at the same time, this is denoted as the **intersection** of A and B and is denoted as $(A \cap B)$. Think of the symbol \cap as an A in "and."

If two events are mutually exclusive then $A \cap B = \{ \}$ the empty set (also denoted as \emptyset) and the $P(A \cap B) = 0$.

Union

When either event A, event B, or both occur then we call this the **union** of A or B, which is denoted as $(A \cup B)$. When finding the probability of A or B we denote this as $P(A \cup B)$. When we write “or” in statistics, we mean “and/or” unless we explicitly state otherwise. Thus, A or B occurs means A, B, or both A and B occur.

Figure 4-11 is a Venn diagram for the union rule.

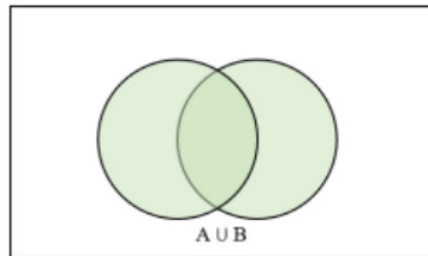


Figure 4-11

The Union Rule: $P(A \cup B) = P(A) + P(B) - P(A \cap B)$.

If two events are mutually exclusive, then the probability of them occurring at the same time is $P(A \cap B) = 0$. So, if A and B are mutually exclusive then the $P(A \cup B) = P(A) + P(B)$ as shown in Figure 4-7. It is best to write out the rule with the intersection so that you do not forget to subtract any overlapping intersection.

The family college data set contains a sample of 792 cases with two variables, teen and parents. The teen variable is either college or not, where the college label means the teen went to college immediately after high school. The parent’s variable takes the value degree if at least one parent of the teenager completed a college degree. Make a Venn Diagram for the data.

Example from [OpenIntroStatistics](#).

		Parent	
		Degree	No Degree
Teen	College	231	214
	No College	49	298
	Total	280	512
		Total	792

Solution

Find the relative frequencies.

	Degree	No Degree	Total
College	0.29	0.27	0.56
No College	0.06	0.38	0.44
Total	0.35	0.65	1

Figure 4-12 for completed Venn Diagram. Note that you do not need to use circles to represent the sets.

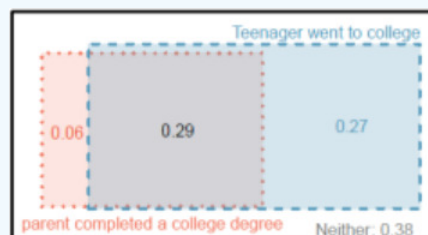


Figure 4-12

A random sample of 500 people was taken from the 2010 United States Census. Their marital status and race were recorded in the following contingency table using the census labels. A person is randomly chosen from the census data. Find the following.

Race Marital Status American Indian Black Asian White Two Major Races Total Divorced 0 6 1 30 1 38 Married 1 25 23 156 4 209 Single 2 33 21 155 11 222 Widowed 0 7 2 22 0 31 Total 3 71 47 363 16 500

- $P(\text{Single} \cap \text{American Indian})$
- $P(\text{Single} \cup \text{American Indian})$
- Probability that the person is Asian or Married.
- $P(\text{Single} \cap \text{Married})$
- $P(\text{Single} \cup \text{Married})$

Solution

- The intersection for a contingency table is found by simply finding where the row or intersection meets. There are 2 Single American Indians, therefore the $P(\text{Single} \cap \text{American Indian}) = P(\text{Single and American Indian}) = 2/500 = 0.004$.
- There are 222 Single people, there are 3 American Indians, but we do not want to count the 2 Single American Indians twice, therefore the $P(\text{Single} \cup \text{American Indian}) = P(\text{Single or American Indian}) = 222/500 + 3/500 - 2/500 = 223/500 = 0.446$.
- The union for a contingency table is found by either using the union formula or adding up all the numbers in the corresponding row and column. There are 47 Asian people, there are 209 Married people, but we do not want to count the 23 Married Asian people twice, therefore the $P(\text{Asian} \cup \text{Married}) = P(\text{Asian or Married}) = 47/500 + 209/500 - 23/500 = 233/500 = 0.466$.
- The events Single and Married are mutually exclusive so the $P(\text{Single} \cap \text{Married}) = 0$. Alternatively, there is no place in the table where the Single row and Married row meet.
- The events single and married are mutually exclusive so the $P(\text{Single} \cup \text{Married}) = P(\text{Single}) + P(\text{Married}) - P(\text{Single} \cap \text{Married}) = 222/500 + 209/500 - 0 = 431/500 = 0.862$.

Use a random experiment consisting of rolling two dice and adding the numbers on the faces.

- Compute the probability of rolling a sum of 8.
- Compute the probability of rolling a sum of 8 or a sum of 5
- Compute the probability of rolling a sum of 8 or a double (each die has the same number).

Solution

- There are 36 possible outcomes for rolling the two dice as shown in the following sum table. There are 5 pairs where the sum of the two dice is an 8, the (2,6), (3,5), (4,4), (5,3) and (6,2). Note that the events (2,6) and (6,2) are different outcomes since they numbers come from different dice.

+		Second Die					
		1	2	3	4	5	6
First Die	1	2	3	4	5	6	7
	2	3	4	5	6	7	8
	3	4	5	6	7	8	9
	4	5	6	7	8	9	10
	5	6	7	8	9	10	11
	6	7	8	9	10	11	12

Thus, the $P(8) = 5/36 = 0.1389$.

- Highlight all the places where a sum of 5 or a sum of 8 occurs. There are 9 pairs where the sum of the two dice is a 5 or an 8.

+		Second Die					
		1	2	3	4	5	6
First Die	1	2	3	4	5	6	7
	2	3	4	5	6	7	8
	3	4	5	6	7	8	9
	4	5	6	7	8	9	10
	5	6	7	8	9	10	11
	6	7	8	9	10	11	12

Thus, the $P(5 \cup 8) = P(5) + P(8) - P(5 \cap 8) = 4/36 + 5/36 - 0 = 9/36 = 0.25$.

Note that rolling a sum of 5 is mutually exclusive from rolling a sum of 8 so the probability is zero for the intersection of the two events.

c) The events rolling an 8 and rolling doubles are not mutually exclusive since the pair of fours (4, 4) falls into both events.

An easy way is to highlight all the places a sum 8 or doubles occur, count the highlighted values, and divide by the total $10/36 = 0.2778$.

+		Second Die					
		1	2	3	4	5	6
First Die	1	2	3	4	5	6	7
	2	3	4	5	6	7	8
	3	4	5	6	7	8	9
	4	5	6	7	8	9	10
	5	6	7	8	9	10	11
	6	7	8	9	10	11	12

When using the union rule, we subtract this overlap out one time to account for this. Using the union formula:

$$P(8 \cup \text{Doubles}) = P(8) + P(\text{Doubles}) - P(8 \cap \text{Doubles}) = 5/36 + 6/36 - 1/36 = 10/36 = 0.2778.$$

“It’s... well, it’s a long story,” he said, “but the Question I would like to know is the Ultimate Question of Life, the Universe and Everything. All we know is that the Answer is Forty-two, which is a little aggravating.”

Prak nodded again.

“Forty-two,” he said. “Yes, that’s right.”

He paused. Shadows of thought and memory crossed his face like the shadows of clouds crossing the land.

“I’m afraid,” he said at last, “that the Question and the Answer are mutually exclusive. Knowledge of one logically precludes knowledge of the other. It is impossible that both can ever be known about the same universe.”

(Adams, 2002)

Randomly pick a card from a standard deck. A standard deck of cards, not including jokers consists of 4 suits called clubs = ♣, spades = ♠, hearts = ♥, and diamonds = ♦. The clubs and spades are called the black cards. The hearts and diamonds are called the red cards. Each suit has 13 cards. The numbered cards shown in Figure 4-13, are Ace = 1 or A, 2, 3, 4, 5, 6, 7, 8, 9, 10. The face cards are the Jack = J, Queen = Q, and King = K.




Figure 4-13


- Compute the probability of selecting a card that shows a club.
- Compute the probability of selecting a heart or a spade card.
- Compute the probability of selecting a spade or a face card.

Solution

a) There are 52 cards in a standard deck. There are 13 cards of each suit. The $P(\clubsuit) = 13/52 = 0.25$.

b) There are 52 cards in a standard deck. There are 13 cards of each suit. $P(\heartsuit \cup \spadesuit) = 26/52 = 0.5$.

c) There are 13 spades and 12 face cards. However, there are 3 cards that are both spades and face cards. $P(\spadesuit \cup FC) = P(\spadesuit) + P(FC) - P(\spadesuit \cap FC) = 13/52 + 12/52 - 3/52 = 22/52 = 0.4231$. Since the sample space is small, you could just count how many spades and face cards there are.



Words Are Important!

When working with probability, words such as “more than” or “less than” can drastically change the answer. Figure 4-14 shows some of the common phrases you may run into while reading a problem. It will be essential later in the course that you can correctly match these phrases with their correct symbol.

=	≤	≥
Is the same as	Is less than or equal to	Is greater than or equal to
Is equal to	Is at most	Is at least
Is exactly the same as	Is not greater than	Is not less than
Has not changed from	Within	

≠	>	<
Is not	More than	Less than
Is not equal to	Greater than	Below
Is different from	Above	Lower than
Has changed from	Higher than	Shorter than
Is not the same as	Longer than	Smaller than
	Bigger than	Decreased
	Increased	Reduced

Figure 4-14

Use a random experiment consisting of rolling two dice and adding the numbers on the faces.

- Compute the probability of rolling a sum of less than 5.
- Compute the probability of rolling a sum of 5 or less.

Solution

a) Let X be the event rolling a sum less than 5. A sum less than 5 would not include the 5. For notation, we use $P(X < 5)$, which is read as the “probability that X is less than five.” Shade in all the sums that are less than 5.

+		Second Die					
		1	2	3	4	5	6
First Die	1	2	3	4	5	6	7
	2	3	4	5	6	7	8
	3	4	5	6	7	8	9
	4	5	6	7	8	9	10
	5	6	7	8	9	10	11
	6	7	8	9	10	11	12

Then the $P(X < 5) = 6/36 = 0.1667$.

b) : Let X be the event rolling a sum of 5 or less. A sum of 5 or less includes the 5. For notation, we can use $P(X \leq 5)$, which is read as the “probability that X is less than or equal to five.” Shade in all the sums that are 5 or less.

+		Second Die					
		1	2	3	4	5	6
First Die	1	2	3	4	5	6	7
	2	3	4	5	6	7	8
	3	4	5	6	7	8	9
	4	5	6	7	8	9	10
	5	6	7	8	9	10	11
	6	7	8	9	10	11	12

Then the $P(X \leq 5) = 10/36 = 0.2778$.

This page titled [4.4: Union and Intersection](#) is shared under a [CC BY-SA 4.0](#) license and was authored, remixed, and/or curated by [Rachel Webb](#) via [source content](#) that was edited to the style and standards of the LibreTexts platform.

4.5: Independent Events

Two trials (or events or results of a random experiment) are independent trials if the outcome of one trial does not influence the outcome of the second trial. If two events are not independent, they are dependent events. For instance, if two coins are flipped they are independent since flipping one coin does not affect the outcome of the second coin.

Independent Events: If A and B are independent events, then $P(A \cap B) = P(A) \cdot P(B)$.

Be careful with this rule. You cannot just multiply probabilities to find an intersection unless you know they are independent. Also, do not confuse independent events with mutually exclusive events. Two events are mutually exclusive when the $P(A \cap B) = 0$.

If a random experiment consists of flipping a coin twice, find the probability of getting heads twice in a row.

Solution

The event of getting a head on the first flip is independent of getting a head on the second flip since the probability does not change with each flip of the coin. Thus, using the multiplication rule of independent events, $P(\text{Both coins are heads}) = P(1^{\text{st}} \text{ coin is a head}) \cdot P(2^{\text{nd}} \text{ coin is a head}) = \frac{1}{2} \cdot \frac{1}{2} = \frac{1}{4} = 0.25$.

The probability of Apple stock rising is 0.3, the probability of Boeing stock rising is 0.4. Assume Apple and Boeing stocks are independent. What is the probability that neither stock rises?

Solution

Let A = Apple stock and B = Boeing stock. Since A and B are independent the probability of both stocks rising at the same time is $P(A \cap B) = 0.3 \cdot 0.4 = 0.12$. Neither is the complement to either. $P(\text{Not Either}) = 1 - P(A \cup B) = 1 - (P(A) + P(B) - P(A \cap B)) = 1 - (0.3 + 0.4 - 0.12) = 1 - 0.58 = 0.42$.

The probability that a student has their own laptop is 0.78. If three students are randomly selected, what is the probability that at least one owns a laptop?

Solution

There is an assumption that the three students are not related and that the probability of one owning a laptop is independent of the other people owning a laptop. The probability of none owning a laptop is $(1 - 0.78)^3 = 0.0106$. The probability of at least one is the same as $1 - P(\text{None}) = 1 - 0.0106 = 0.9894$.

When two events are dependent, you cannot simply multiply their corresponding probabilities to find their intersection. You will need to use the General Multiplication Rule discussed in the next section.

This page titled [4.5: Independent Events](#) is shared under a [CC BY-SA 4.0](#) license and was authored, remixed, and/or curated by [Rachel Webb](#) via [source content](#) that was edited to the style and standards of the LibreTexts platform.

4.6: Conditional Probability

The probability of event B happening, given that event A already happened, is called the **conditional probability**. The conditional probability of B, given A is written as $P(B | A)$, and is read as “the probability of B given A happened first.” We can use the General Multiplication Rule when two events are dependent.

Definition: General Multiplication Rule

$$\begin{aligned} P(A \cap B) &= P(A) \cdot P(B|A)P(A \cap B) \\ &= P(A) \cdot P(B|A) \end{aligned}$$

A bag contains 10 colored marbles: 7 red and 3 blue. A random experiment consists of drawing a marble from the bag, then drawing another marble without replacement (without putting the first marble back in the bag). Find the probability of drawing a red marble on the first draw (event R_1), and drawing another red marble on the second draw (event R_2).

Solution

Drawing a red marble on the first draw and drawing a red marble on the second draw are dependent events because we do not place the marble back in the bag. The probability of drawing a red marble on the first draw is $P(R_1) = \frac{7}{10}$, but on the second draw, the probability of drawing a red marble given that a red marble was drawn on the first draw is $P(R_2|R_1) = \frac{6}{9}$.

Thus, by the general multiplication rule, $P(R_1 \text{ and } R_2) = P(R_1) \cdot P(R_2|R_1) = (\frac{7}{10}) (\frac{6}{9}) = 0.4667$.

A bag contains 10 colored marbles: 7 red and 3 blue. A random experiment consists of drawing a marble from the bag, then drawing another marble without replacement. Create the tree diagram for this experiment and compute the probabilities of each outcome.

Solution

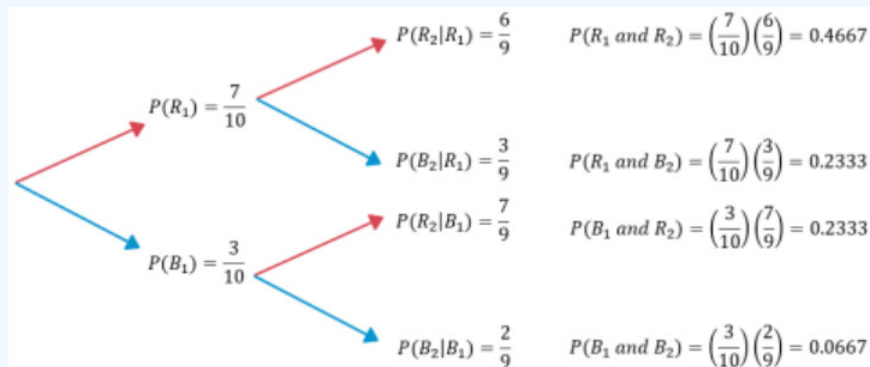


Figure 4-15

If we were to multiply the probabilities as we move from left to right up each set of tree branches as shown in Figure 4-15, we get the intersections. For example, by the general multiplication rule, $P(R_1 \text{ and } R_2) = P(R_1) \cdot P(R_2|R_1) = (\frac{7}{10}) (\frac{6}{9}) = 0.4667$.

Put the four intersection values into a contingency table and total the rows and columns. The table will help solve probability questions of other events.

	R_2	B_2	Total
R_1	0.4667	0.2333	0.7
B_1	0.2333	0.0667	0.3
Total	0.7	0.3	1

The grand total should add up to 1 since we have 100% of the sample space.

$$\text{Conditional Probability Rule: } P(A|B) = \frac{P(A \cap B)}{P(B)} \text{ or } P(B|A) = \frac{P(A \cap B)}{P(A)}$$

The following table shows the utility contract granted for a specific year. One contractor is randomly chosen.

Corporation	Government	Individual	Total	United States	0.45	0.007	0.08	0.537	Foreign	0.41	0.003	0.05	0.463	Total	0.86	0.01
0.13	1															

- Compute the probability the contractor is from the United States and is a corporation.
- Compute the probability the contractor is from the United States given that they are a corporation.
- If the contractor is from a foreign country, what is the probability that it is from a government?
- Are the events a “contractor is an individual” independent of a “contractor from the United States?”

Solution

a) For the intersection in the contingency tables use where the row and column meet. $P(\text{U.S.} \cap \text{Corp}) = 0.45$.

$$b) P(\text{U.S.}|\text{Corp}) = \frac{P(\text{U.S.} \cap \text{Corp})}{P(\text{Corp})} = \frac{0.45}{0.86} = 0.5233.$$

$$c) P(\text{Gov}|\text{Foreign}) = \frac{P(\text{Gov} \cap \text{Foreign})}{P(\text{Foreign})} = \frac{0.003}{0.463} = 0.0065.$$

d) Do not assume independence between two variables in a contingency table since the data may show relationships that you didn’t know were there.

Use the definition of independent events. If the two events are independent then we would have $P(\text{Individual} \cap \text{U.S.}) = P(\text{Individual}) \cdot P(\text{U.S.})$. First find the intersection using where the row and column meet to get $P(\text{Individual} \cap \text{U.S.}) = 0.08$. Then use the row and column totals to find $P(\text{Individual}) \cdot P(\text{U.S.}) = 0.13 \cdot 0.537 = 0.0698$. Since $P(\text{Individual} \cap \text{U.S.}) \neq P(\text{Individual}) \cdot P(\text{U.S.})$ these two events are dependent.

A random sample of 500 people was taken from the 2010 United States Census. Their marital status and race were recorded in the following contingency table. A person is randomly chosen, find the following.

Race	Marital Status	American	Indian	Black	Asian	White	Two Major Races	Total	Divorced	0	6	1	30	1	38	Married	1	25	23	156		
4	209	Single	2	33	21	155	11	222	Widowed	0	7	2	22	0	31	Total	3	71	47	363	16	500

- $P(\text{Single and Asian})$
- $P(\text{Single} | \text{Asian})$
- Given that a person is single what is the probability their race is Asian?

Solution

a) The intersection for a contingency table is found by simply finding where the row or intersection meets. There are 21 single Asians, therefore the $P(\text{Single} \cap \text{Asian}) = P(\text{Single and Asian}) = 21/500 = 0.042$. Do not multiply the row total times the column total since there is no indication that these are independent events.

b) In words we are trying to find the probability that the person is single given that we already know that their race is Asian. Using the conditional probability formula, we get $P(\text{Single} | \text{Asian}) = \frac{P(\text{Single} \cap \text{Asian})}{P(\text{Asian})} = \frac{21}{47} = 0.4468$.

c) This seems similar to the last question, however the part we know is that the person is single, but we do not know their race. In symbols we want to find the $P(\text{Asian} | \text{Single}) = \frac{P(\text{Asian} \cap \text{Single})}{P(\text{Single})} = \frac{21}{222} = 0.0946$.

Keep in mind that $P(A | B) \neq P(B | A)$ since we would divide by a different total in the equation.

A blood test correctly detects a certain disease 95% of the time (positive result), and correctly detects no disease present 90% of the time (negative result). It is estimated that 25% of the population have the disease. A person takes the blood test and they get a positive result. What is the probability that they have the disease?

Solution

Let D = Having the Disease, D^C = Not having the disease, $+$ is a positive result, and $-$ is a negative result. We are given in the problem the following: $P(+ | D) = 0.95$, $P(- | D^C) = 0.90$, $P(D) = 0.25$. We want to find $P(D|+) = \frac{P(D \cap +)}{P(+)}$.

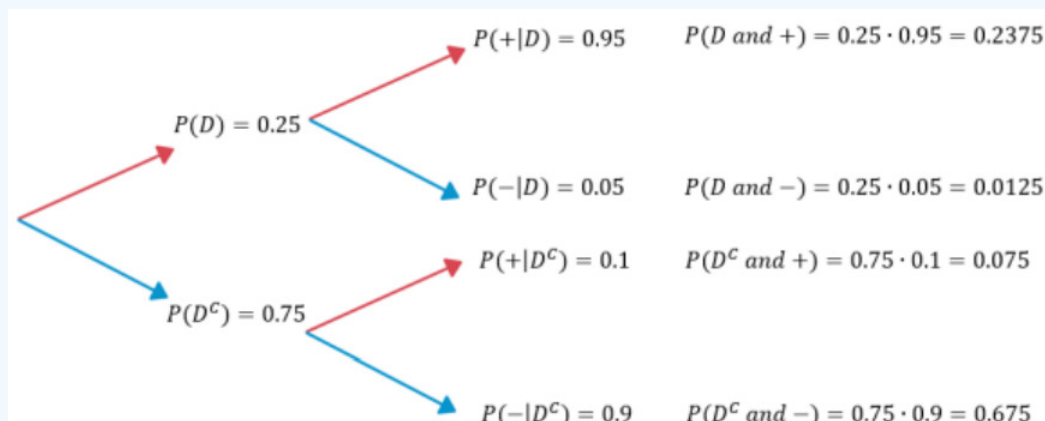


Figure 4-16

When you multiply up each pair of tree branches from left to right as shown in Figure 4-16, you are finding the intersection of the events. Place the multiplied values into a table. Note that the 0.2375 is not our answer. This is the people who have the disease and tested positive, but does not take into consideration the false positives. Since we know that the result was positive, we only divide by the proportion of positive results.

	D^C	D	Total
+	0.075	0.2375	0.3125
-	0.675	0.0125	0.6875
Total	0.75	0.25	1

$$P(D|+) = \frac{P(D \cap +)}{P(+)} = \frac{0.2375}{0.3125} = 0.76 \quad (4.6.1)$$

There is a 76% chance that they have the disease given that they tested positive. Many of the more difficult probability problems can be set up in a table, which makes the probabilities easier to find.

4.7: Counting Rules

There are times when the sample space is very large and is not feasible to write out. In that case, it helps to have mathematical tools for counting the size of the sample space. These tools are known as counting techniques or counting rules.

Fundamental Counting Rule: If task 1 can be done m_1 ways, task 2 can be done m_2 ways, and so forth to task n being done m_n ways. Then the number of ways to do task 1, 2, ..., n together would be to multiply the number of ways for each task $m_1 \cdot m_2 \cdots m_n$.

A menu offers a choice of 3 salads, 8 main dishes, and 5 desserts. How many different meals consisting of one salad, one main dish, and one dessert are possible?

Solution

There are three tasks, picking a salad, a main dish, and a dessert. The salad task can be done 3 ways, the main dish task can be done 8 ways, and the dessert task can be done 5 ways. The ways to pick a salad, main dish, and dessert are:

$$\frac{3}{\text{salad}} \cdot \frac{8}{\text{main}} \cdot \frac{5}{\text{dessert}} = 120 \text{ different meals.}$$

How many 4-digit debit card personal identification numbers (PIN) can be made?

Solution

Four tasks must be done in this example. The tasks are to pick the first number, then the second number, then the third number, and then the fourth number. The first task can be done 10 ways since there are digits 1 through 9 or a zero. We can use the same numbers over again (repeats are allowed) to find that the second task can also be done 10 ways. The same with the third and fourth tasks, which also have 10 ways.

$$\text{There are } \frac{10}{\text{first number}} \cdot \frac{10}{\text{second number}} \cdot \frac{10}{\text{third number}} \cdot \frac{10}{\text{fourth number}} = 10,000 \text{ possible PINs.}$$

How many ways can the three letters a, b, and c be arranged with no letters repeating?

Solution

Three tasks must be done in this case. The tasks are to pick the first letter, then the second letter, and then the third letter. The first task can be done 3 ways since there are 3 letters. The second task can be done 2 ways, since the first task took one of the letters (repeats are not allowed). The third task can be done 1 way, since the first and second task took two of the letters.

$$\text{There are } \frac{3}{\text{1st letter}} \cdot \frac{2}{\text{2nd letter}} \cdot \frac{1}{\text{3rd letter}}$$

You can also look at this example in a tree diagram, see Figure 4-17. There are 6 different arrangements of the letters. The solution was found by multiplying $3 \cdot 2 \cdot 1 = 6$.

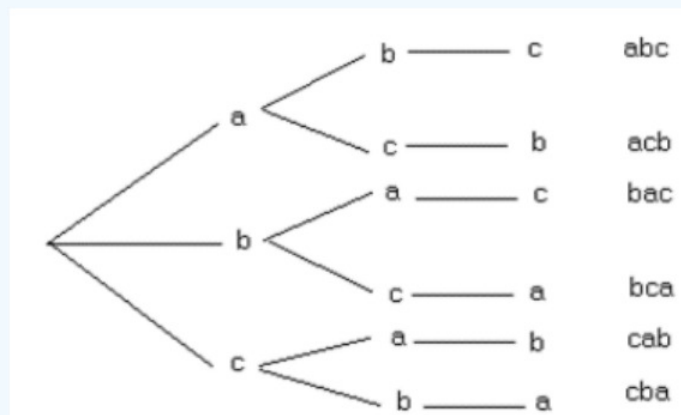


Figure 4-17

If we have 10 different letters for, say, a password, the tree diagram would be very time-consuming to make because of the length of options and tasks, so we have some shortcut formulas that help count these arrangements.

Many counting problems involve multiplying a list of decreasing numbers, which is called a **factorial**. The factorial is represented mathematically by the starting number followed by an exclamation point, in this case $3! = 3 \cdot 2 \cdot 1 = 6$. There is a special symbol for this and a special button on your calculator or computer.

Factorial Rule: The number of different ways to arrange n objects is $n! = n \cdot (n - 1) \cdot (n - 2) \cdots 3 \cdot 2 \cdot 1$, where repetitions are not allowed.

Zero factorial is defined to be $0! = 1$, and 1 factorial is defined to be $1! = 1$.

TI-84: On the home screen, enter the number of which you would like to find the factorial. Press [MATH]. Use cursor keys to move to the PRB menu. Press 4 (4:!) Press [ENTER] to calculate.

TI-89: On the home screen, enter the number of which you would like to find the factorial. Press [2^{nd}] [Math] > 7:Probability > 1:!. Press [ENTER] to calculate.

Excel: In an empty cell type in =FACT(n) where n is the number so $4!$ would be =FACT(4).

How many ways can you arrange five people standing in line?

Solution

No repeats are allowed since you cannot reuse a person twice. Order is important since the first person is first in line and will be selected first. This meets the requirements for the factorial rule,

$$5! = 5 \cdot 4 \cdot 3 \cdot 2 \cdot 1 = 120 \text{ ways.}$$

Sometimes we do not want to select the entire group but only select r objects from n total objects. The number of ways to do this depends on if the order you choose the r objects matters or if it does not matter. As an example, if you are trying to call a person on the phone, you have to have the digits of their number in the correct order. In this case, the order of the numbers matters. If you were picking random numbers for the lottery, it does not matter which number you pick first since they always arrange the numbers from the smallest to largest once the numbers are drawn. As long as you have the same numbers that the lottery officials pick, you win. In this case, the order does not matter.

A **permutation** is an arrangement of items with a specific order. You use permutations to count items when the order matters.

Permutation Rule: The number of different ways of picking r objects from n total objects when repeats are not allowed and order matters ${}_nP_r = \frac{n!}{(n-r)!}$.

When the order does not matter, you use combinations. A **combination** is an arrangement of items when order is not important. When you do a counting problem, the first thing you should ask yourself is “are repeats allowed,” then ask yourself “does order matter?”

Combination Rule: The number of ways to select r objects from n total objects when repeats are not allowed and order does not matter ${}_nC_r = \frac{n!}{(r!(n-r)!)}$.

TI-84: Enter the number “trials” (n) on the home screen. Press [MATH]. Use cursor keys to move to the PRB menu. Press 2 for permutation (2: ${}_nP_r$), 3 for combination (3: ${}_nC_r$). Enter the number of “successes” (r). Press [ENTER] to calculate.

TI-89: Press [2^{nd}] Math > 7:Probability > Press 2 for permutation (2: ${}_nP_r$), 3 for combination (3: ${}_nC_r$). Enter the sample size on the home screen, then a comma, then enter the number of “successes,” then end the parenthesis. Press [ENTER] to calculate.

Excel: In a blank cell type in the formula =COMBIN(n , r) or =PERMUT(n , r) where n is the total number of objects and r is the smaller number of objects that you are selecting out of n . For example =COMBIN(8, 3).

The following flow chart in Figure 4-18 may help with deciding which counting rule to use.

Start on the left; ask yourself if the same item can be repeated. For instance, a person on a committee cannot be counted as two distinct people; however, a number on a car license plate may be used twice. If repeats are not allowed, then ask, does the order in which the item is chosen matter? If it does not then we use the combinations, if it does then ask are you ordering the entire group, use factorial, or just some of the group, use permutation.




Figure 4-18

Critical Miss, PSU's Tabletop Gaming Club, has 15 members this term. How many ways can a slate of 3 officers consisting of a president, vice-president, and treasurer be chosen?

Solution

In this case, repeats are not allowed since we don't want the same member to hold more than one position. The order matters, since if you pick person 1 for president, person 2 for vice-president, and person 3 for treasurer, you would have different members in those positions than if you picked person 2 for president, person 1 for vice-president, and person 3 for treasurer. This is a permutation problem with $n = 15$ and $r = 3$.

$${}_{15}P_3 = \frac{15!}{(15-3)!} = \frac{15!}{12!} = 2730$$

There are 2,730 ways to elect these three positions.

In general, if you were selecting items that involve rank, a position title, 1st, 2nd, or 3rd place or prize, etc. then the order in which the items are arranged is important and you would use permutation.

Critical Miss, PSU's Tabletop Gaming Club, has 15 members this term. They need to select 3 members to have keys to the game office. How many ways can the 3 members be chosen?

Solution

In this case, repeats are not allowed, because we don't want one person to have more than one key. The order in which the keys are handed out does not matter. This is a combination problem with $n = 15$ and $r = 3$.

$${}_{15}C_3 = \frac{15!}{(3!(15-3)!)} = \frac{15!}{(3! \cdot 12!)} = 455 \quad \text{There are 455 ways to hand out the three keys.}$$

We can use these counting rules in finding probabilities. For instance, the probability of winning the lottery can be found using these counting rules.

What is the probability of winning the jackpot in the Pick-4 Lottery? To play Pick-4, you choose 4 numbers from 0 to 9. This will give you a number between 0000 and 9999. You win the jackpot if you match your 4 numbers in the exact order they are drawn.

<https://www.oregonlottery.org/jackpot/pick-4/>

Solution

There is only one winning number, so the numerator for the probability will just be 1. The denominator will be all the ways to select the 4 numbers. Repeat numbers are allowed, for example you can have 4242 with repeating 4s and 2s. The order in which the balls are selected does matter by the rules of the game. Use the fundamental counting rule combined with the fundamental counting rule and we would get $10 \cdot 10 \cdot 10 \cdot 10 = 10,000$.

Thus, the probability of winning the jackpot would be $\frac{1}{10000} = 0.0001$

What is the probability of getting a full house if 5 cards are randomly dealt from a standard deck of cards?

Solution

A full house is a combined three of a kind and pair, for example, QQQ22. There are ${}_{13}C_1$ ways to choose a card between Ace, 2, 3, ..., King. Once a number is chosen, there are 4 cards with that rank and there are ${}_4C_3$ ways to choose a three of kind from that rank. Once we use up one of the ranks, such as the three queens, there are ${}_{12}C_1$ ways to choose the rank for the pair. Once the pair is chosen there are ${}_4C_2$ ways to choose a pair from that rank. All together there are ${}_{52}C_5$ ways to randomly deal out 5 cards. The probability of getting a full house with then be

$$\frac{{}_{13}C_1 \cdot {}_4C_3 \cdot {}_{12}C_1 \cdot {}_4C_2}{{}_{52}C_5} = \frac{3744}{2598960} = 0.00144$$

What is the probability of winning the Powerball jackpot? As of 2021, the Powerball lottery consists of drawing five white balls in any order numbered 1 through 69, and one red Powerball numbered 1 through 26.

<https://www.oregonlottery.org/jackpot/powerball/>

Solution

There is only one winning number, so the numerator for the probability will just be 1. The denominator will be all the ways to select the 5 white balls and 1 red ball. The order in which the balls are selected does not matter and repeat numbers are not allowed. Using the combination rule combined with the fundamental counting rule we would get ${}_{69}C_5 \cdot {}_{26}C_1$.

Thus, the probability of winning the jackpot would be $\frac{1}{{}_{69}C_5 \cdot {}_{26}C_1} = 0.00000003707$.

This page titled [4.7: Counting Rules](#) is shared under a [CC BY-SA 4.0](#) license and was authored, remixed, and/or curated by [Rachel Webb](#) via [source content](#) that was edited to the style and standards of the LibreTexts platform.

4.8: Chapter 4 Formulas

Complement Rules: $P(A) + P(A^C) = 1$ $P(A) = 1 - P(A^C)$ $P(A^C) = 1 - P(A)$	Mutually Exclusive Events: $P(A \cap B) = 0$
Union Rule: $P(A \cup B) = P(A) + P(B) - P(A \cap B)$	Independent Events: $P(A \cap B) = P(A) \cdot P(B)$
Intersection Rule: $P(A \cap B) = P(A) \cdot P(B A)$	Conditional Probability Rule: $P(A B) = \frac{P(A \cap B)}{P(B)}$
Fundamental Counting Rule: $m_1 \cdot m_2 \cdots m_n$	Factorial Rule: $n! = n \cdot (n-1) \cdot (n-2) \cdots 3 \cdot 2 \cdot 1$
Combination Rule: ${}_nC_r = \frac{n!}{(r!(n-r)!)}$	Permutation Rule: ${}_nP_r = \frac{n!}{(n-r)!}$

This page titled [4.8: Chapter 4 Formulas](#) is shared under a [CC BY-SA 4.0](#) license and was authored, remixed, and/or curated by [Rachel Webb](#) via [source content](#) that was edited to the style and standards of the LibreTexts platform.

4.9: Chapter 4 Exercises

? Chapter 4 Exercises

1. The number of M&M candies for each color found in a case were recorded in the table below.

Blue	Brown	Green	Orange	Red	Yellow	Total
481	371	483	544	372	369	2,620

What is the probability of selecting a red M&M?

- An experiment is to flip a fair coin three times. Write out the sample space for this experiment.
- An experiment is to flip a fair coin three times. What is the probability of getting exactly two heads?
- In the game of roulette, there is a wheel with spaces marked 0 through 36 and a space marked 00. Compute the probability of winning if you pick the number 30 and it comes up on the wheel.
- A raffle sells 1,000 tickets for \$35 each to win a new car. What is the probability of winning the car?
- Compute the probability of rolling a sum of two dice that is more than 7.
- Compute the probability of rolling a sum of two dice that is a 7 or a 12.
- A random sample of 500 people's marital status and biological sex from the 2010 United States Census are recorded in the following contingency table.

Count of Marital Status	Column Labels		
Row Labels	Female	Male	Grand Total
Divorced	21	17	38
Married/spouse absent	5	9	14
Married/spouse present	92	100	192
Never married/single	93	129	222
Separated	1	2	3
Widowed	20	11	31
Grand Total	232	268	500

- Compute the probability that a randomly selected person is single.
 - Compute the probability that a randomly selected person is not single.
 - Compute the probability that a randomly selected person is single or male.
 - Compute the probability that a randomly selected person is divorced or widowed.
 - Given that randomly selected person is male, what is the probability they are single?
 - Are the events divorced and male mutually exclusive?
 - Are the events divorced and male independent? Verify using statistics.
- The probability that a consumer entering a retail outlet for microcomputers and software packages will buy a computer of a certain type is 0.15. The probability that the consumer will buy a particular software package is 0.10. There is a 0.05 probability that the consumer will buy both the computer and the software package. What is the probability that the consumer will buy the computer or the software package?
 - A fitness center owner kept track of members over the last year. They recorded if the person stretched before they exercised, and whether they sustained an injury. The following contingency table shows their results. Select one member at random and find the following.

	Injury	No Injury	Total

Stretched	52	270	322
Did Not Stretch	21	57	78
Total	73	327	400

- $P(\text{No Injury})$
- $P(\text{Injury} \cap \text{Stretch})$
- Compute the probability that a randomly selected member stretched or sustained an injury.
- Compute the probability that a randomly selected member stretched given that they sustained an injury.
- $P(\text{Injury} \mid \text{Did Not Stretch})$

11. Giving a test to a group of students, the grades and if they were business majors are summarized below. One student is chosen at random. Give your answer as a decimal out to at least 4 places.

	A	B	C	Total
Business Majors	4	5	13	22
Non-business Majors	18	10	19	47
Total	22	15	32	69

- Compute the probability that the student was a non-business major or got a grade of C.
- Compute the probability that the student was a non-business major and got a grade of C.
- Compute the probability that the student was a non-business major given they got a C grade.
- Compute the probability that the student did not get a B grade.
- Compute $P(B \cup \text{Business Major})$.
- Compute $P(C \mid \text{Business Major})$.

12. A poll showed that 48.7% of Americans say they believe that Marilyn Monroe had an affair with JFK. What is the probability of randomly selecting someone who does not believe that Marilyn Monroe had an affair with JFK.

13. Your favorite basketball player is an 81% free throw shooter. Find the probability that they do not make their next free throw shot.

14. A report for a school's computer web visits for the past month obtained the following information. Find the percentage that visited none of these three sites last month. Hint: Draw a Venn Diagram.

- 37% visited Facebook.
- 42% visited LinkedIn.
- 29% visited Google.
- 27% visited Facebook and LinkedIn.
- 19% visited Facebook and Google.
- 19% visited LinkedIn and Google.
- 14% visited all three sites.

15. The smallpox data set provides a sample of 6,224 individuals from the year 1721 who were exposed to smallpox in Boston.

	Inoculated	Not Inoculated	Total
Lived	238	5136	5374
Died	6	844	850

Total	244	5980	6224
-------	-----	------	------

Fenner F. 1988. Smallpox and Its Eradication (History of International Public Health, No. 6). Geneva: World Health Organization. ISBN 92-4-156110-6.

a) Compute the relative frequencies.

	Inoculated	Not Inoculated	Total
Lived			
Died			
Total			1

b) Compute the probability that a person was inoculated.

c) Compute the probability that a person lived.

d) Compute the probability that a person died or was inoculated.

e) Compute the probability that a person died if they were inoculated.

f) Given that a person was not inoculated, what is the probability that they died?

16. A certain virus infects one in every 400 people. A test used to detect the virus in a person is positive 90% of the time if the person has the virus and 8% of the time if the person does not have the virus. (This 8% result is called a false positive.) Let A be the event "the person is infected" and B be the event "the person tests positive."

a) Find the probability that a person has the virus given that they have tested positive, i.e. find $P(A|B)$.

b) Find the probability that a person does not have the virus given that they test negative, i.e. find $P(A^C|B^C)$.

17. A store purchases baseball hats from three different manufacturers. In manufacturer A's box there are 12 blue hats, 6 red hats, and 6 green hats. In manufacturer B's box there are 10 blue hats, 10 red hats, and 4 green hats. In manufacturer C's box, there are 8 blue hats, 8 red hats, and 8 green hats. A hat is randomly selected. Given that the hat selected is green, what is the probability that it came from manufacturer B's box? Hint: Make a table with the colors as the columns and the manufacturers as the rows.

18. The following table represents food purchase amounts and whether the customer used cash or a credit/debit card. One customer is chosen at random. Give your answer as a decimal out to at least 4 places.

	Less than \$10	\$10-\$49	\$50 or More	Total
Cash Purchase	11	10	18	39
Card Purchase	17	6	19	42
Total	28	16	37	81

a) Compute the probability that the customer's purchasing method was a cash purchase or the customer spent \$10-\$49.

b) Compute the probability that the customer's purchasing method was cash purchase and the customer spent \$10-\$49.

c) Compute the probability that the customer's purchasing method was a cash purchase given they spent \$10-\$49.

d) Compute the probability that the customer spent less than \$50.

e) What percent of cash purchases were for \$50 or more?

19. The probability of stock A rising is 0.3; and of stock B rising is 0.4. What is the probability that neither of the stocks rise, assuming that these two stocks are independent?

20. You are going to a Humane Society benefit dinner, and need to decide before the dinner what you want for salad, main dish, and dessert. You have 2 salads to choose from, 3 main dishes, and 5 desserts. How many different meals are available?

21. How many different phone numbers are possible in the area code 503, if the first number cannot start with a 0 or 1?
22. You are opening a screen-printing business. You can have long sleeves or short sleeves, three different colors, five different designs, and four different sizes. How many different shirts can you make?
23. The California license plate has one number followed by three letters followed by three numbers. How many different license plates are possible?
24. Calculate the following.
 - a) ${}_9P_4$
 - b) ${}_{10}P_6$
 - c) ${}_{10}C_5$
 - d) ${}_{20}C_4$
 - e) $8!$
 - f) $5!$
25. The PSU's Mixed Me club has 30 members. You need to pick a president, treasurer, and secretary from the 30. How many different ways can you do this?
26. How many different 4-digit personal identification numbers (PIN) are there if repeats are not allowed?
27. A baseball team has a 20-person roster. A batting order has nine people. How many different batting orders are there?
28. How many ways can you choose 4 cookies from a cookie jar containing 25 cookies of all the same type?
29. A computer generates a random password for your account (the password is not case sensitive). The password must consist of 8 characters, each of which can be any letter or number. How many different passwords could be generated?
30. How many unique tests can be made from a test bank of 20 questions if the test consists of 8 questions, order does not matter?
31. A typical PSU locker is opened with correct sequence of three numbers between 0 and 49 inclusive. A number can be used more than once, for example 8-8-8 is valid. How many possible locker combinations are there?
32. In the game of Megabucks, you get six numbers from 48 possible numbers without replacement. Megabucks jackpots start at \$1 million and grow until someone wins. What is the probability of matching all 6 numbers in any order?

Answer to Odd Numbered Exercises

- 1) 0.1420
- 3) 0.375
- 5) 0.001
- 7) 0.1944
- 9) 0.2
- 11) a) 0.8696 b) 0.2754 c) 0.5938 d) 0.7826 e) 0.4638 f) 0.5909
- 13) 0.19
- 15) a)

	Inoculated	Not Inoculated	Total
Lived	0.0382	0.8252	0.8634
Died	0.0010	0.1356	0.1366
Total	0.0392	0.9608	1

- b) 0.0392 c) 0.8643 d) 0.1748 e) 0.026 f) 0.141

- 17) 0.2222
- 19) 0.42
- 21) 8,000,000
- 23) 138,240,000
- 25) 24,360
- 27) 60,949,324,800
- 29) 2,821,109,907,456
- 31) 125,000

This page titled [4.9: Chapter 4 Exercises](#) is shared under a [CC BY-SA 4.0](#) license and was authored, remixed, and/or curated by [Rachel Webb](#) via [source content](#) that was edited to the style and standards of the LibreTexts platform.

CHAPTER OVERVIEW

5: Discrete Probability Distributions

- [5.1: Introduction](#)
- [5.2: Discrete Probability Distributions](#)
- [5.3: Geometric Distributions](#)
- [5.4: Binomial Distribution](#)
- [5.5: Hypergeometric Distribution](#)
- [5.6: Poisson Distribution](#)
- [5.7: Chapter 5 Exercises](#)
- [5.8: Chapter 5 Formulas](#)

This page titled [5: Discrete Probability Distributions](#) is shared under a [CC BY-SA 4.0](#) license and was authored, remixed, and/or curated by [Rachel Webb](#) via [source content](#) that was edited to the style and standards of the LibreTexts platform.

5.1: Introduction

A variable or what will be called the random variable from now on, is represented by the letter X and it represents a quantitative (numerical) variable that is measured or observed in an experiment.

A random variable (usually X) is a numeric description of an event. Recall that a sample space is all the possible outcomes and an event is a subset of the sample space.

Usually we use capital letters from the beginning of the alphabet to represent events, A, B, C, etc. We use capital letters from the end of the alphabet to represent random variables, X, Y, and Z. The possible outcomes of X are labeled with a corresponding lower-case letter x and subscripts like x_1 , x_2 , etc.

For instance, if we roll two 6-sided dice the sample space is $S = \{(1,1), (1,2), (1,3), (1,4), (1,5), (1,6), (2,1), (2,2), \dots, (6,6)\}$ and the event E the sum of the two rolls is five, then $E = \{(1,4), (2,3), (3,2), (4,1)\}$.

Now, we could define the random variable X to denote the sum of the two rolls, then $X = \{2, 3, 4, 5, 6, 7, 8, 9, 10, 11, 12\}$ and event E corresponds to $x = 5$.

There are different types of quantitative variables, called discrete or continuous. Discrete random variables can only take on particular values in a range. Continuous random variables can take on any value in a range. Discrete random variables usually arise from counting while continuous random variables usually arise from measuring

A **discrete random variable** is a variable that is finite or infinitely countable.

A **continuous random variable** is a variable that has an infinite number of possible values in an interval of numbers.

This page titled [5.1: Introduction](#) is shared under a [CC BY-SA 4.0](#) license and was authored, remixed, and/or curated by [Rachel Webb](#) via [source content](#) that was edited to the style and standards of the LibreTexts platform.

5.2: Discrete Probability Distributions

In many cases, the random variable is what you are measuring, but when it comes to discrete random variables, it is usually what you are counting. For the example of height, the random variable is the height of the child. For the example of how many fleas are on prairie dogs in a colony, the random variable is the number of fleas on a prairie dog in a colony.

Now suppose you put all the possible values of the random variable together with the probability that the random variable would occur. You could then have a distribution like before, but now it is called a probability distribution since it involves probabilities. A **probability distribution** is an assignment of probabilities to all the possible values of the random variable. The abbreviation of pdf is used for a probability density (distribution) function in your calculators.

The probability distribution of X lists all the possible values of x and their corresponding probabilities.

A valid discrete probability distribution has to satisfy two criteria:

1. The probability of x is between 0 and 1, $0 \leq P(x_i) \leq 1$.
2. The probability of all x values adds up to 1, $\sum P(x_i) = 1$.

Two books are assigned for a statistics class: a textbook and its corresponding study guide. No students buy just the study guide. The university bookstore determined 20% of enrolled students do not buy either book, 55% buy the textbook only, 25% buy both books, and these percentages are relatively constant from one term to another. Is this a valid discrete probability distribution?

Solution

Each probability is a number between 0 and 1; $0 \leq 0.2 \leq 1$, $0 \leq 0.55 \leq 1$, and $0 \leq 0.25 \leq 1$. The sum of the probabilities adds up to 1; $\sum P(x_i) = 0.2 + 0.55 + 0.25 = 1$. Yes, this is a valid discrete probability distribution.

A random experiment consists of flipping a fair coin three times. Let X = the number of heads that show up. Create the probability distribution of X .

Solution

When you flip a coin three times, you can get 0 heads, 1 head, 2 heads or 3 heads, the corresponding values of x are 0, 1, 2, 3. We can find the probabilities for each of these values by finding the sample space and using the classical method of computing probability.

The sample space is $S = \{HHH, HHT, HTH, THH, HTT, THT, TTH, TTT\}$.

The event $x = 0$ can happen one way, namely $\{TTT\}$. Thus $P(X = x) = P(X = 0) = \frac{1}{8}$.

The event $x = 1$ can happen three ways, namely $\{HTT, THT, TTH\}$. Thus $P(X = 1) = \frac{3}{8}$.

The event $x = 2$ can happen three ways, namely $\{HHT, HTH, THH\}$. Thus $P(X = 2) = \frac{3}{8}$.

The event $x = 3$ can happen one way, namely $\{HHH\}$. Thus $P(X = 3) = \frac{1}{8}$.

Therefore, the probability distribution of X is:

$$x \quad 0 \quad 1 \quad 2 \quad 3 \quad P(X=x) \quad \frac{1}{8} \quad \frac{3}{8} \quad \frac{3}{8} \quad \frac{1}{8}$$

Figure 5-1

Note this is a valid probability distribution because the probability of each x , $P(x)$, is between 0 and 1, and the probability of the sum of all x values from 0 to 3 is $\sum P(x) = \frac{1}{8} + \frac{3}{8} + \frac{3}{8} + \frac{1}{8} = 1$.

Figure 5-2 is a graph of the probability distribution using Example 5-2.



Figure 5-2

The height of each line corresponds to the probability of each x value. Sometimes you will see a bar graph instead.

The following table shows the probability of winning an online video game, where X = the net dollar winnings for the video game. Is the following table a valid discrete probability distribution?

x -5 -2.5 0 2.5 5 $P(X=x)$ 0.55 $\frac{1}{4}$ 0.15 0 5%

Solution

It is easier to have all the probabilities as proportions: $\frac{1}{4} = 0.25$ and $5\% = 0.05$. Each probability is a number between 0 and 1: $0 \leq 0.55 \leq 1$, $0 \leq 0.25 \leq 1$, $0 \leq 0.15 \leq 1$, $0 \leq 0 \leq 1$, $0 \leq 0.05 \leq 1$. The sum of the probabilities is equal to one: $\sum P(x) = 0.55 + 0.25 + 0.15 + 0 + 0.05 = 1$. Yes, this is a valid discrete probability distribution since the table has the two properties that each probability is between 0 and 1, and the sum of the probabilities is one.

x 0 1 2 3 $P(X=x)$ $\frac{1}{2}$ $\frac{1}{4}$ $\frac{1}{4}$ $\frac{1}{4}$

Solution

It is easier to have all the probabilities as proportions: $\frac{1}{2} = 0.5$ and $\frac{1}{4} = 0.25$. Each probability is a number between 0 and 1: $0 \leq 0.5 \leq 1$, $0 \leq 0.25 \leq 1$, $0 \leq 0.25 \leq 1$, $0 \leq 0.25 \leq 1$. The sum of the probabilities does not equal one: $\sum P(x) = 0.5 + 0.25 + 0.25 + 0.25 = 1.25$. No, this is not a valid discrete probability distribution since the sum of the probabilities is not equal to one.

Words Are Important!

When finding probabilities pay close attention to the following phrases.

$P(X=x)$	$P(X \leq x)$	$P(X \geq x)$
Is the same as	Is less than or equal to	Is greater than or equal to
Is equal to	Is at most	Is at least
Is exactly the same as	Is not greater than	Is not less than
Has not changed from	Within	

	$P(X > x)$	$P(X < x)$
	More than	Less than
	Greater than	Below
	Above	Lower than
	Higher than	Shorter than
	Longer than	Smaller than
	Bigger than	Decreased
	Increased	Reduced

Figure 5-2

The following is a valid discrete probability distribution of X = the net dollar winnings for an online video game. Find the probability of winning at most \$2.50.

x -5 -2.5 0 2.5 5 $P(X=x)$ 0.55 $\frac{1}{4}$ 0.15 0 5%

Solution

It is easier to have all the probabilities as proportions: $\frac{1}{4} = 0.25$ and $5\% = 0.05$.

At most means the same as, less than or equal to. The probabilities can be found by adding all the probabilities that are less than or equal to 2.5. $P(X \leq 2.5) = 0.55 + 0.25 + 0.15 + 0 = 0.95$.

You can also use the complement rule since all the probabilities add to one.

$$P(X \leq 2.5) = 1 - P(X > 2.5) = 1 - 0.05 = 0.95.$$

The 2010 United States Census found the chance of a household being a certain size.

Size of Household	1	2	3	4	5	6	7 or more
Probability	26.7%	33.6%	15.8%	13.7%	6.3%	2.4%	1.5%

- Is this a valid probability distribution?
- Compute the probability that a household has exactly 3 people.
- Compute the probability that a household has at most 3 people.
- Compute the probability that a household has more than 3 people.
- Compute the probability that a household has at least 3 people.
- Compute the probability that a household has 3 or more people.

Solution

a) In this case, the random variable is X = number of people in a household. This is a discrete random variable, since you are counting the number of people in a household. This is a probability distribution since you have the x value and the probabilities that go with it, all of the probabilities are between zero and one, and the sum of all of the probabilities is one. We can use these discrete probability distribution tables to find probabilities.

b) Let X = the number of people per household. Trace along the Size of Household row until you get to 3, then take the corresponding probability in that column, $P(X = 3) = 0.158$.

c) "At most" 3 would be 3 or less. $P(X \leq 3) = P(X = 1) + P(X = 2) + P(X = 3) = 0.267 + 0.336 + 0.158 = 0.761$.

d) "More than" 3, does not include the 3, and would be all the probabilities for 4 or more added together. $P(X > 3) = P(X \geq 4) = 0.137 + 0.063 + 0.024 + 0.015 = 0.239$.

e) "At least" 3, means 3 or more. $P(X \geq 3) = 0.158 + 0.137 + 0.063 + 0.024 + 0.015 = 0.397$.

f) This would be the same as the previous question just worded differently, $P(X \geq 3) = 0.158 + 0.137 + 0.063 + 0.024 + 0.015 = 0.397$.

Rare Events

The reason probability is studied in statistics is to help in making decisions in inferential statistics.

To understand how making decisions is done, the concept of a rare event is needed.

Rare Event Rule for Inferential Statistics: If, under a given assumption, the probability of a particular observed event is extremely small, then you can conclude that the assumption is probably not correct.

An example of this is suppose you roll an assumed fair die 1,000 times and get six 600 times, when you should have only rolled a six around 160 times, then you should believe that your assumption about it being a fair die is untrue.

Determining if an event is unusual: If you are looking at a value of X for a discrete variable, and the $P(\text{the variable has a value of } x \text{ or more}) \leq 0.05$, then you can consider the x an unusually high value. Another way to think of this is if the probability of getting such a high value is less than or equal to 0.05, then the event of getting the value x is unusual.

Similarly, if the $P(\text{the variable has a value of } x \text{ or less}) \leq 0.05$, then you can consider this an unusually low value. Another way to think of this is if the probability of getting a value as small as x is less than or equal to 0.05, then the event x is considered unusual.

Why is it "x or more" or "x or less" instead of just "x" when you are determining if an event is unusual?

Consider this example: you and your friend go out to lunch every day. Instead of each paying for their own lunch, you decide to flip a coin, and the loser pays for both lunches. Your friend seems to be winning more often than you would expect, so you want to determine if this is unusual before you decide to change how you pay for lunch (or accuse your friend of cheating). The process for how to calculate these probabilities will be presented in a later section on the binomial distribution.

If your friend won 6 out of 10 lunches, the probability of that happening turns out to be about 20.5%, not unusual. The probability of winning 6 or more is about 37.7%, still not unusual.

However, what happens if your friend won 501 out of 1,000 lunches? That does not seem so unlikely! The probability of winning 501 or more lunches is about 47.8%, and that is consistent with your hunch that this probability is not so unusual. Nevertheless, the probability of winning exactly 501 lunches is much less, only about 2.5%.

That is why the probability of getting exactly that value is not the right question to ask: you should ask the probability of getting that value or more (or that value or less on the other side).

The value 0.05 will be explained later, and it is not the only value you can use for deciding what is unusual.

The 2010 United States Census found the chance of a household being a certain size.

Size of Household	1	2	3	4	5	6	7 or more	Probability
	26.7%	33.6%	15.8%	13.7%	6.3%	2.4%	1.5%	

a) Is it unusual for a household to have six people in the family?

b) Is it unusual for a household to have four people in the family?

Solution

a) To determine this, you need to look at probabilities. However, you cannot just look at the probability of six people. You need to look at the probability of x being six or more people $P(X \geq 6) = 0.024 + 0.015 = 0.039$. Since this probability is less than 5%, then six is an unusually high value. It is unusual for a household to have six people in the family.

b) Four is toward the middle so we need to look at both the probability of x being four or more and the probability of x being four or less. $P(X \geq 4) = 0.137 + 0.063 + 0.024 + 0.015 = 0.239$, since this probability is more than 5%, four is not an unusually high value. $P(X \leq 4) = 0.267 + 0.336 + 0.158 + 0.137 = 0.898$, since this probability is more than 5%, four is not an unusually low value. Thus, four is not an unusual size of a family.

What was that voice?" shouted Arthur. "I don't know," yelled Ford,

"I don't know. It sounded like a measurement of probability."

"Probability? What do you mean?"

"Probability. You know, like two to one, three to one, five to four against. It said two to the power of one hundred thousand to one against. That's pretty improbable you know."

A million-gallon vat of custard upended itself over them without warning.

"But what does it mean?" cried Arthur.

"What, the custard?" "No, the measurement of probability!"

"I don't know. I don't know at all. I think we're on some kind of spaceship."

(Adams, 2002)

5.2.1 Mean of a Discrete Probability Distribution

The mean of a discrete random variable X is an average of the possible values of x , which considers the fact that not all outcomes are equally likely. The mean of a random variable is the value of x that one would expect to see after averaging a large number of

trials. The mean of a random variable does not need to be a possible value of x .

Two books are assigned for a statistics class: a textbook and its corresponding study guide. No students buy just the study guide. The university bookstore determined 20% of enrolled students do not buy either book, 55% buy the textbook only, 25% buy both books, and these percentages are relatively constant from one term to another. If there are 100 students enrolled, how many books should the bookstore expect to sell to this class?

Solution

It is expected that $0.20 \times 100 = 20$ students will not buy either book (0 books total), that $0.55 \times 100 = 55$ will buy just the textbook (55 books total), and $0.25 \times 100 = 25$ will buy both books (totaling 50 books for these 25 students). The bookstore should expect to sell about 105 total books for this class.

The textbook costs \$137 and the study guide \$33. How much revenue should the bookstore expect from this class of 100 students? Use the results from the previous example.

Solution

It is expected that 55 students will just buy a textbook, providing revenue of $\$137 \times 55 = \$7,535$. The roughly 25 students who buy both the textbook and the study guide would pay a total of $(\$137 + \$33)25 = \$170 \times 25 = \$4,250$. Thus, the bookstore should expect to generate about $\$7,535 + \$4,250 = \$11,785$ from these 100 students for this one class. However, there might be some sampling variability so the actual amount may differ by a little bit.

Probability distribution for the bookstore's revenue from a single student. The distribution balances on a triangle representing the average revenue per student represented in Figure 5-4.

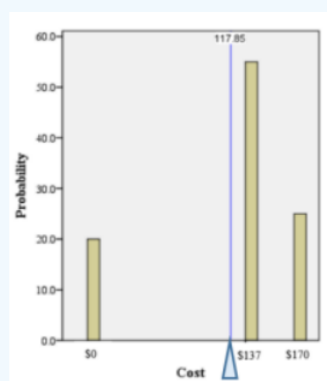


Figure 5-4

What is the average revenue per student for this course?

Solution

The expected total revenue is \$11,785, and there are 100 students. Therefore, the expected revenue per student is $\$11,785/100 = \117.85 .

Mean of a Discrete Random Variable: Suppose that X is a discrete random variable with values x_1, x_2, \dots, x_k . Then the mean of X is, $\mu = \Sigma(x_i \cdot P(x_i)) = x_1 \cdot P(x_1) + x_2 \cdot P(x_2) + \dots + x_k \cdot P(x_k)$. The mean is also referred to as the expected value of x denoted as $E(X)$.

Two books are assigned for a statistics class: a textbook and its corresponding study guide. The university bookstore determined 20% of enrolled students do not buy either book, 55% buy the textbook only, 25% buy both books, and these percentages are relatively constant from one term to another. Use the formula for the mean to find the average textbook cost.

Solution

Let X = the revenue from statistics students for the bookstore, then $x_1 = \$0$, $x_2 = \$137$, and $x_3 = \$170$, which occur with probabilities 0.20, 0.55, and 0.25. The distribution of X is summarized in the table below.

x \$0 \$137 \$170 $P(X=x)$ 0.2 0.55 0.25

Compute the average outcome of X as $\mu = \sum(x_i \cdot P(x_i)) = x_1 \cdot P(x_1) + x_2 \cdot P(x_2) + x_3 \cdot P(x_3) = 0 \cdot 0.2 + 137 \cdot 0.55 + 170 \cdot 0.25 = 117.85$.

We call this average the expected value of X , denoted by $E(X) = \$117.85$.

Note using this method we are not dividing the answer by the total number of students since the probabilities are found by dividing the frequency by the total so we would not divide again.

It may have been tempting to set up the table with the x values 0, 1 and 2 books. This would be fine if the question was asking for the average number of books sold. Since the books are different prices, we would not be able to get an average cost. Make sure X represents the variable that you are using to calculate the mean.

The following is a valid discrete probability distribution of X = the net dollar winnings for an online video game. Find the mean net earnings for playing the game.

x -5 -2.5 0 2.5 5 $P(X = x)$ 0.55 $\frac{1}{4}$ 0.15 0 5%

Solution

It is easier to have all the probabilities as proportions: $\frac{1}{4} = 0.25$ and $5\% = 0.05$. Be careful with the negative x values.

$\mu = \sum(x_i \cdot P(x_i)) = x_1 \cdot P(x_1) + x_2 \cdot P(x_2) + x_3 \cdot P(x_3) = (-5) \cdot 0.55 + (-2.5) \cdot 0.25 + 0 \cdot 0.15 + 5 \cdot 0.05 = (-2.75) + (-0.625) + 0 + 0.25 = -3.125$.

If you were to play the game many times, in the long run, you can expect to lose, on average, \$3.125.

The 2010 United States Census found the chance of a household being a certain number of people (household size). Compute the mean household size.

Size of Household 1 2 3 4 5 6 7 or more Probability 26.7% 33.6% 15.8% 13.7% 6.3% 2.4% 1.5%

Solution

To find the mean it is easier to use a table as shown below. We will need to consider the category 7 or more to just be one number, we will use the lower bound of 7 since the mean could not be calculated with the information provided. The formula for the mean says to multiply the x value by the $P(x)$ value, so add a row into the table for this calculation.

Also, convert all $P(x)$ to decimal form.

x	1	2	3	4	5	6	7
$P(x)$	0.267	0.336	0.158	0.137	0.063	0.024	0.015
$x \cdot P(x)$	0.267	0.672	0.474	0.548	0.315	0.144	0.105

Add up the new row and you get the answer 2.525. This is the mean or the expected value, $\mu = 2.525$ people.

This means that you expect a household in the United States to have 2.525 people in it. Keep your answer as a decimal. Now of course you cannot have part of a person, but what this tells you is that you expect a household to have either 2 or 3 people, with a little more 3-person households than 2-person households.

Just as with any data set, you can calculate the mean and standard deviation. In problems involving a table of probabilities, the probability distribution represents a population. The probability distribution in most cases comes from repeating an experiment

many times. This is because you are using the data from repeated experiments to estimate the true probability.

Since a **probability distribution** represents a population, the mean and standard deviation that are calculated are actually the population parameters and not the sample statistics. The notation used is for the population mean μ “mu” and population standard deviation σ “sigma.”

Note, the mean can be thought of as the **expected value**. It is the value you expect to get on average, if the trials were repeated an infinite number of times. The mean or expected value does not need to be a whole number, even if the possible values of x are whole numbers.

In the Oregon lottery called Pick-4, a player pays \$1 and then picks a four-digit number. If those four numbers are picked in that specific order, the person wins \$2,000. What is the expected value in this game?

Solution

To find the expected value, you need to first create the probability distribution. In this case, the random variable x = \$ net winnings. If you pick the right numbers in the right order, then you win \$2,000, but you paid \$1 to play, so you actually win a net amount of \$1,999. If you did not pick the right numbers, you lose the \$1, the x net value is $-\$1$.

You also need the probability of winning and losing. Since you are picking a four-digit number, and for each digit, there are 10 possible numbers to pick from, with each independent of the others, you can use the fundamental counting rule. To win, you have to pick the right numbers in the right order. The first digit, you pick 1 number out of 10, the second digit you pick 1 number out of 10, and the third digit you pick 1 number out of 10. The probability of picking the right number in the right order is $\frac{1}{10} \cdot \frac{1}{10} \cdot \frac{1}{10} \cdot \frac{1}{10} = \frac{1}{10000} = 0.0001$

The probability of losing (not winning) would be the complement rule $1 - 0.0001 = 0.9999$.

Putting this information into a table will help to calculate the expected value.

Game Outcome Win Lose x \$1,999 $-\$1$ $P(X = x)$ 0.0001 0.9999

Find the mean which is the same thing as the expected value.

Game Outcome	Win	Lose	
x	\$1,999	$-\$1$	
$P(x)$	0.0001	0.9999	Total
$x \cdot P(x)$	\$0.1999	$-\$0.9999$	$-\$0.80$

Now sum the last row and you have the expected value of $\$0.1999 + (-\$0.9999) = -\$0.80$. If you kept playing this game, in the long run, you will expect to lose \$0.80 per game. Since the expected value is not 0, this game is not fair.

Most lottery and casino games such as craps, 21, roulette, etc. and insurance policies are built with negative expectations for the consumer. This is how casinos and insurance companies stay in business.

5.2.2 Variance & Standard Deviation of Discrete Probability Distributions

Suppose you ran the university bookstore. Besides how much revenue you expect to generate, you might also want to know the volatility (variability) in your revenue.

The variance and standard deviation can be used to describe the variability of a random variable. When we first introduced a method for finding the variance and standard deviation for a data set we had sample data and found sample statistics. We first computed deviations from the mean ($x_i - \mu$), squared those deviations $(x_i - \mu)^2$, and took an average to get the variance. In the case of a random variable, we again compute squared deviations. However, we take their sum weighted by their corresponding probabilities, just as we did for the expectation. This weighted sum of squared deviations equals the variance, and we calculate the standard deviation by taking the square root of the variance, just as we did for a sample variance. We also are using notation for the population parameters σ and σ^2 , instead of the sample statistics s and s^2 .

Variance of a Discrete Random Variable X:

Suppose that X is a discrete random variable with values x_1, x_2, \dots, x_k .

Then the variance of X is, $\sigma^2 = \sum (x_i - \mu)^2 \cdot P(x_i)$ or an easier to compute, algebraically equivalent formula $\sigma^2 = \sum (x_i^2 \cdot P(x_i)) - \mu^2 = (x_1^2 \cdot P(x_1) + x_2^2 \cdot P(x_2) + \dots + x_k^2 \cdot P(x_k)) - \mu^2$.

Standard Deviation of a Discrete Random Variable X:

The standard deviation of X is the positive square root of the variance, $\sigma = \sqrt{\sigma^2}$

There are many situations that we can model a discrete distribution with a formula. This will make finding probabilities with large sample sizes much easier than making a table. There are many types of discrete distributions. We will just be covering a few of them.

The following is a valid discrete probability distribution of X = the net dollar winnings for an online video game. Find the standard deviation of the net earnings for playing the game.

x -5 -2.5 0 2.5 5 P(x) 0.55 ¼ 0.15 0 5%

Solution

It is easier to have all the probabilities as proportions: $\frac{1}{4} = 0.25$ and $5\% = 0.05$. Be careful with the negative x values. First, find the mean $\mu = \sum (x_i \cdot P(x_i)) = x_1 \cdot P(x_1) + x_2 \cdot P(x_2) + x_3 \cdot P(x_3) = (-5) \cdot 0.55 + (-2.5) \cdot 0.25 + 0 \cdot 0.15 + 5 \cdot 0.05 = (-2.75) + (-0.625) + 0 + 0.25 = -3.125$.

Next find the variance, $\sigma^2 = \sum (x_i^2 \cdot P(x_i)) - \mu^2 = (x_1^2 \cdot P(x_1) + x_2^2 \cdot P(x_2) + x_3^2 \cdot P(x_3) + x_4^2 \cdot P(x_4) + x_5^2 \cdot P(x_5)) - \mu^2 = ((-5)^2 \cdot 0.55 + (-2.5)^2 \cdot 0.25 + 0^2 \cdot 0.15 + 2.5^2 \cdot 0 + 5^2 \cdot 0.05) - (-3.125)^2 = (13.75 + 1.5625 + 0 + 0 + 1.25) - 9.765625 = 16.5625 - 9.765625 = 6.796875$.

Now take the square root of the variance to get to the standard deviation, $\sqrt{6.796875} = 2.607$, or $\sigma = \$2.607$.

The 2010 United States Census found the chance of a household being a certain size. Compute the variance and standard deviation.

Size of Household 1 2 3 4 5 6 7 or more Probability 26.7% 33.6% 15.8% 13.7% 6.3% 2.4% 1.5%

Solution

Make a table similar to how we started the mean by changing the probabilities to decimals and use 7 for the category 7 or more, but this time square each x value before multiplying by its corresponding probability.

x	1	2	3	4	5	6	7
P(x)	0.267	0.336	0.158	0.137	0.063	0.024	0.015
$x^2 \cdot P(x)$	0.267	1.344	1.422	2.192	1.575	0.864	0.735

Add this new row up to get the beginning of the variance formula $\sum (x_i^2 \cdot P(x_i)) = 8.399$.

In a previous example we found the mean household size to be $\mu = 2.525$ people.

To finish finding the variance we need to square the mean and subtract from the sum to get $\sigma^2 = \sum (x_i^2 \cdot P(x_i)) - \mu^2 = 8.399 - 2.525^2 = 2.023375$ people².

Having a measurement in squared units is not very helpful when trying to interpret so we take the square root to find the standard deviation, which is back in the original units.

The standard deviation of the number of people in a household is $\sigma = \sqrt{2.023375} = 1.4225$ people. This means that you can expect an average United States household to have 2.525 people in it, with an average spread or standard deviation of 1.42

people.

TI-84: Press [STAT], choose 1:Edit. For x and $P(x)$ data pairs, enter all x -values in one list. Enter all corresponding $P(x)$ values in a second list. Press [STAT]. Use cursor keys to highlight CALC. Select **1:1-Var Stats**.

Enter list 1 for List and list 2 for frequency list. Press Enter to calculate the statistics. For TI-83, you will just see 1-Var Stats on the screen. Enter each list separated with a comma by pressing [2nd], then press the number 1 key corresponding to your x list, then a comma, then [2nd] and the number 2 key corresponding to your $P(x)$ values. The home screen should look like this 1-Var Stats L_1, L_2 .

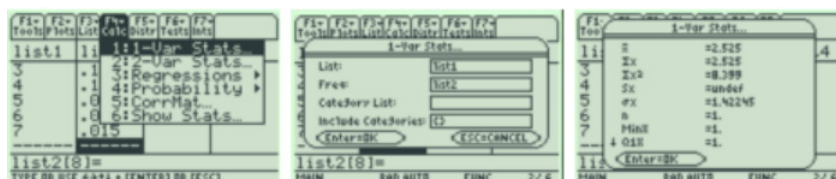


Where the calculator says \bar{x} is μ the population mean and σ_x is the population standard deviation (square this number to get the population variance).

TI-89: Go to the [Apps] **Stat/List Editor**, and type the x values into List 1 and $P(x)$ values into List2. Select F4 for the **Calc** menu. Use cursor keys to highlight **1:1-Var Stats**.

Under List, press [2nd] Var-Link, then select list1. Under Freq, press [2nd] Var-Link, then select list2. Press enter twice and the statistics will appear in a new window.

Use the cursor keys to arrow up and down to see all of the values. Note: \bar{x} this is μ the population mean and σx is the population standard deviation; square this value to get the variance.



Bernoulli trial

The focus of the previous section was on discrete probability distribution tables. To find the table for those situations, we usually need to actually conduct the experiment and collect data. Then one can calculate the experimental probabilities.



[Jacob Bernoulli](#)

If certain conditions are met, we can instead use theoretical probabilities. One of these theoretical probabilities can be used when we have a **Bernoulli trial**.

Properties of a **Bernoulli trial** or binomial trial:

1. Trials are independent, which means that what happens on one trial does not influence the outcomes of other trials.
2. There are only two outcomes, which are called a success and a failure.
3. The probability of a success does not change from trial to trial, where p = probability of success and q = probability of failure, the complement of p , $q = 1 - p$.

If you know you have a Bernoulli trial, then you can calculate probabilities using some theoretical probability formulas. This is important because Bernoulli trials come up often in real life.

Examples of Bernoulli experiments are:

- Toss a fair coin twice, and find the probability of getting two heads.
- Question twenty people in class, and look for the probability of more than half are business majors.
- A patient has a virus.
- What is the probability of passing a multiple-choice test if you have not studied?

Bernoulli trials are used in both the geometric and binomial distributions.

This page titled [5.2: Discrete Probability Distributions](#) is shared under a [CC BY-SA 4.0](#) license and was authored, remixed, and/or curated by [Rachel Webb](#) via [source content](#) that was edited to the style and standards of the LibreTexts platform.

5.3: Geometric Distributions

The geometric distribution is a discrete probability distribution used to find the probability of success when there are two outcomes to each trial, and the trials are independent with the same probability of occurrence. A geometric probability distribution results from a random experiment that meets all of the following requirements.

1. Repeat the trials until you get a success.
2. The trials must be independent.
3. Each trial must have exactly two categories that can be labeled “success” and “failure.”
4. The probability of a “success,” denoted by p , remains the same in all trials. The probability of “failure” is often denoted by q , thus $q = 1 - p$.
5. Random Variable, X , counts the number of trials until your first success

If a random experiment satisfies all of the above, the distribution of the random variable X , where X counts the number of trials until the first success, is called a geometric distribution. If a discrete random variable X has a geometric distribution with the probability of success is p , we write $X \sim G(p)$.

The geometric distribution is $P(X = x) = p \cdot q^{(x-1)}$, $x = 1, 2, 3, \dots$ where x is the number of trials up to the first success that you are trying to find the probability for, p is the probability of a success for one trial and $q = 1 - p$ is the probability of a failure for one trial.

Be careful, a “success” is not always a “good” thing. Sometimes a success is something that is “bad,” like finding a defect or getting in a car crash. The success will be the event from the probability question.

A game of chance has only two possible outcomes to win or lose for each time you play. The probability of losing the game is 65%. You play this game until your first loss. What is the probability of playing the game exactly 6 times in a row?

Solution

We have independent trials with two outcomes, no set sample size and the same probability of success each time we play so we can use the geometric distribution. Let $p = 0.65$, which means $q = 1 - 0.65 = 0.35$ and $x = 6$. $P(X = 6) = 0.65 \cdot 0.35^5 = 0.0034$. This is the probability of winning the first 5 games and losing on the 6th game in which you would stop playing.

TI-84: Press [2nd] [DISTR]. This will get you a menu of probability distributions. Press 0 or arrow down to `geometpdf(` and press [ENTER]. This puts **geometpdf(** on the home screen. Enter the values for p and x with a comma between each. Press [ENTER]. This is the probability density function and will return you the probability of exactly x successes. For the previous example, we would use `geometpdf(0.65,6)`.



TI-89: Go to the [Apps] **Stat/List Editor**, then select F5 [DISTR]. This will get you a menu of probability distributions. Arrow down to **Geometric Pdf** and press [ENTER]. Enter the values for p and x into each cell. Press [ENTER]. This gives the probability density function and will return you the probability of exactly x successes.



Flip a fair coin until you get a tail. What is the probability of flipping the coin exactly 8 times until you get a tail?

Solution

In this case the probability of a success is getting a tail on any one toss which is $p = \frac{1}{2} = 0.5$. We are interested in a success on the eighth flip so $x = 8$.

$$P(X = 8) = 0.5 \cdot 0.5^7 = 0.00391.$$

Figure 5-5 shows a graph of the discrete probability distribution.

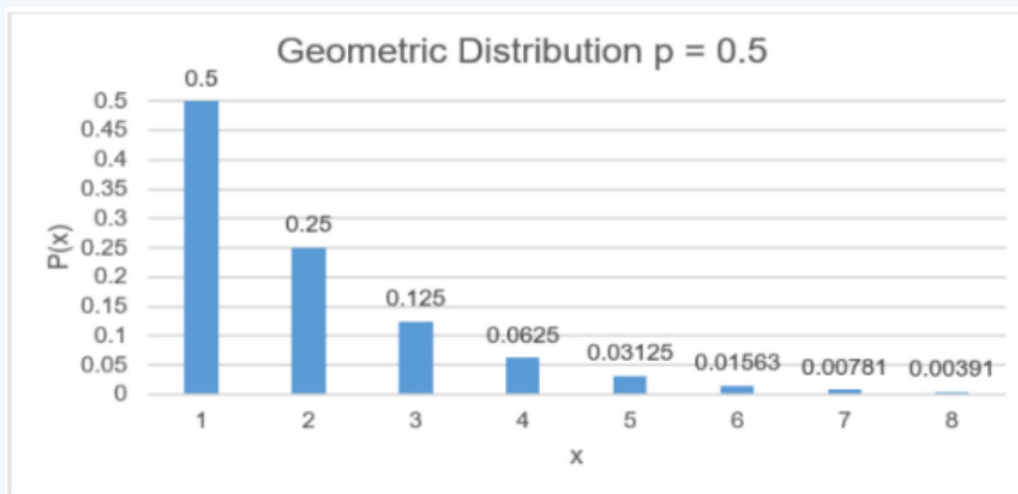


Figure 5-5

When looking at a person's eye color, it turns out that only 2% of people in the world have green eyes (not to be confused with hazel colored eyes). Randomly select people and look at their eye color. What is the probability that you get someone with green eyes on the 5th person?



Solution

The probability of a success is 0.02. We are looking for $P(X = 5) = 0.02 \cdot 0.98^4 = 0.0184$.

Mean, Variance & Standard Deviation of a Geometric Distribution

For a geometric distribution, μ , the expected number of successes, σ^2 , the variance, and σ , the standard deviation for the number of success are given by the formulas, where p is the probability of success and $q = 1 - p$.

$$\mu = \frac{1}{p} \quad \sigma^2 = \frac{1-p}{p^2} \quad \sigma = \sqrt{\frac{1-p}{p^2}}$$

This page titled [5.3: Geometric Distributions](#) is shared under a [CC BY-SA 4.0](#) license and was authored, remixed, and/or curated by [Rachel Webb](#) via [source content](#) that was edited to the style and standards of the LibreTexts platform.

5.4: Binomial Distribution

The binomial distribution is a discrete probability distribution used to find the probability of success when there are two outcomes to each trial, and there are a set number of independent trials with the same probability of occurrence. To develop the process for calculating the probabilities in a binomial experiment, consider the following example.

Suppose you are given a three-question multiple-choice test. Each question has four responses and only one is correct. Suppose you want to find the probability that you can just guess at the answers and get two questions correct. To help with the idea that you are going to guess, suppose the test is on string theory.

- Is this a binomial experiment? Since all of the properties are met, this is a binomial experiment.
- What is the probability of getting two questions right?
- What is the probability of getting zero right, one right, two right and all three right?

Solution

a) The random variable is x = number of correct answers. 1. There are three questions, and each question is a trial, so there are a fixed number of trials. In this case, $n = 3$. 2. Getting the first question right has no effect on getting the second or third question correct, thus the trials are independent. 3. Either you get the question right or you get it wrong, so there are only two outcomes. In this case, the success is getting the question right. 4. The probability of getting a question right is one out of four. This is the same for every trial since each question has 4 responses. In this case, $p = \frac{1}{4}$ and $q = 1 - \frac{1}{4} = \frac{3}{4}$.

b) To answer this question, start with the sample space. $SS = \{RRR, RRW, RWR, WRR, WWR, WRW, RWW, WWW\}$, where RRW means you get the first question right, the second question right, and the third question wrong.

Now the event space for getting 2 right is $\{RRW, RWR, WRR\}$. What you did in chapter four was just to find three divided by eight to compute the probability outcome. However, this would not be correct in this case, because the probability of getting a question right is different from getting a question wrong. What else can you do?

Look at just $P(RRW)$ for the moment. Again, that means $P(RRW) = P(R \text{ on 1st}, R \text{ on 2nd}, \text{ and } W \text{ on 3rd})$. Since the trials are independent, then $P(RRW) = P(R \text{ on 1st}, R \text{ on 2nd}, \text{ and } W \text{ on 3rd}) = P(R \text{ on 1st}) \cdot P(R \text{ on 2nd}) \cdot P(W \text{ on 3rd})$. Just multiply $p \cdot p \cdot q = P(RRW) = \frac{1}{4} \cdot \frac{1}{4} \cdot \frac{3}{4} = (\frac{1}{4})^2 \cdot (\frac{3}{4})^1$.

Similarly, you can compute the $P(RWR)$ and $P(WRR)$. To find the probability of 2 correct answers, just add these three probabilities together.

$$P(2 \text{ correct answers}) = P(RRW) + P(RWR) + P(WRR) = (\frac{1}{4})^2 \cdot (\frac{3}{4})^1 + (\frac{1}{4})^2 \cdot (\frac{3}{4})^1 + (\frac{1}{4})^2 \cdot (\frac{3}{4})^1 = 3 \cdot (\frac{1}{4})^2 \cdot (\frac{3}{4})^1.$$

- You could go through the same argument that you did above and come up with the following:

r right	P(r right)
0 right	$1 \cdot (\frac{1}{4})^0 \cdot (\frac{3}{4})^3$
1 right	$3 \cdot (\frac{1}{4})^1 \cdot (\frac{3}{4})^2$
2 right	$3 \cdot (\frac{1}{4})^2 \cdot (\frac{3}{4})^1$
3 right	$1 \cdot (\frac{1}{4})^3 \cdot (\frac{3}{4})^0$

Do you see the resulting pattern? You can now write the general formula for the probabilities for a binomial experiment.

First, the random variable in a binomial experiment is x = number of successes.

A binomial probability distribution results from a random experiment that meets all of the following requirements.

- The procedure has a fixed number of trials (or steps), which is denoted by n .
- The trials must be independent.
- Each trial must have exactly two categories that can be labeled “success” and “failure.”
- The probability of a “success,” denoted by p , remains the same in all trials. The probability of “failure” is often denoted by q , thus $q = 1 - p$.
- Random Variable, X , counts the number of “successes.”

If a random experiment satisfies all of the above, the distribution of the random variable X , where X counts the number of successes, is called a binomial distribution. A binomial distribution is described by the population proportion p and the sample size n . If a discrete random variable X has a binomial distribution with population proportion p and sample size n , we write $X \sim B(n, p)$.

Be careful, a “success” is not always a “good” thing. Sometimes a success is something that is “bad,” like finding a defect or getting in a car crash. The success will be the event from the probability question.

The geometric and binomial distributions are easy to mix up. Keep in mind that the binomial distribution has a given sample size, whereas the geometric is sampling until you get a success.

Excel Formula for Binomial Distribution: For exactly $P(X = x)$ use `=binom.dist(x,n,p,false)`.

For $P(X \leq x)$ use `=binom.dist(x,n,p,true)`.

TI-84: Press [2nd] [DISTR]. This will get you a menu of probability distributions. Press 0 or arrow down to **0:binompdf**(and press [ENTER]. This puts `binompdf`(on the home screen. Enter the values for n , p and x with a comma between each. Press [ENTER]. This is the probability density function and will return you the probability of exactly x successes. If you leave off the x value and just enter n and p , you will get all the probabilities for each x from 0 to n . Press [ALPHA] A or arrow down to **A:binomcdf**(and press [ENTER]. This puts `binomcdf`(on the home screen. Enter the values for n , p and x with a comma between each. If you have the newer operating system on the TI84, the screen will prompt you for each value. Press [ENTER]. This is the cumulative distribution function and will return you the probability of at most (\leq) x successes. If you have at least x success (\geq), use the complement rule. If you have $<$ or $>$ adjust x to get \leq or \geq .

TI-89: Go to the [Apps] **Stat/List Editor**, then select F5 [DISTR]. This will get you a menu of probability distributions. Arrow down to **binomial Pdf** and press [ENTER]. Enter the values for n , p and x into each cell. Press [ENTER]. This is the probability density function and will return you the probability of exactly x successes. If you leave off the x value and just enter n and p , you will get all the probabilities for each x from 0 to n . Arrow down to **binomial Cdf** and press [ENTER]. Enter the values for n , p and lower and upper value of x into each cell. Press [ENTER]. This is the cumulative distribution function and will return you the probability between the lower and upper x -values, inclusive.

When looking at a person’s eye color, it turns out that only 2% of people in the world have green eyes (not to be confused with hazel colored eyes). Consider a randomly selected group of 20 people.

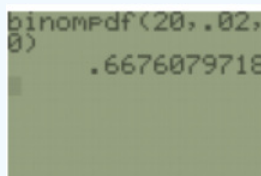
- Is this a binomial experiment?
- Compute the probability that none have green eyes.
- Compute the probability that nine have green eyes.

Solution

a) Yes, since all the requirements are met:

- There are 20 people, and each person is a trial, so there are a fixed number of trials.
- If you assume that each person in the group is chosen at random the eye color of one person does not affect the eye color of the next person, thus the trials are independent.
- Either a person has green eyes or they do not have green eyes, so there are only two outcomes. In this case, the success is a person has green eyes.
- The probability of a person having green eyes is 0.02. This is the same for every trial since each person has the same chance of having green eyes.

b) You are looking for $P(X = 0)$, since this problem is asking for none $x = 0$. There are 20 people so $n = 20$. The success is selecting someone with green eyes, so the probability of a success $p = 0.02$. Then the probability of not selecting someone with green eyes is $q = 1 - p = 1 - 0.02 = 0.98$. Using the formula: $P(X = 0) = {}_{20}C_0 \cdot 0.02^0 \cdot 0.98^{(20-0)} = 0.6676$. Thus, there is a 66.76% chance that in a group of 20 people none of them will have green eyes.



c) $P(X = 9) = \text{binom.dist}(9, 20, 0.02, \text{false}) = 6.8859\text{E-}11 = 0.00000000006859$ which is zero rounded to four decimal places. The probability that out of 20 people, nine of them have green eyes is a very small chance and would be considered a rare event.

As you read through a problem look for some of the following key phrases in Figure 5-6. Once you find the phrase then match up to what sign you would use and then use the table to walk you through the computer or calculator formula. The same idea about signs applies to all the discrete probabilities that follow.

$P(X = x)$	$P(X \leq x)$	$P(X \geq x)$
Is the same as	Is less than or equal to	Is greater than or equal to
Is equal to	Is at most	Is at least
Is exactly the same as	Is not greater than	Is not less than
Has not changed from	Within	Is more than or equal to
Excel =binom.dist(x,n,p,false)	Excel =binom.dist(x,n,p,true)	Excel =1-binom.dist(x-1,n,p,true)
TI Calculator binompdf(n,p,x)	TI Calculator binomcdf(n,p,x)	TI Calculator 1-binomcdf(n,p,x-1)
	$P(X > x)$	$P(X < x)$
	More than	Less than
	Greater than	Below
	Above	Lower than
	Higher than	Shorter than
	Longer than	Smaller than
	Bigger than	Decreased
	Increased	Reduced
	Excel =1-binom.dist(x,n,p,true)	Excel =binom.dist(x-1,n,p,true)
	TI Calculator 1-binomcdf(n,p,x)	TI Calculator binomcdf(n,p,x-1)

Figure 5-6

As of 2018, the Centers for Disease Control and Prevention (CDC) reported that about 1 in 88 children in the United States have been diagnosed with autism spectrum disorder (ASD). A researcher randomly selects 10 children. Compute the probability that 2 children have been diagnosed with ASD.

Solution

The random variable x = number of children with ASD. There are 10 children, and each child is a trial, so there are a fixed number of trials. In this case, $n = 10$. If you assume that each child in the group is chosen at random, then whether a child has ASD does not affect the chance that the next child has ASD. Thus, the trials are independent. Either a child has been diagnosed with ASD or they have not been diagnosed ASD, so there are two outcomes. In this case, the success is a child has ASD. The probability of a child having ASD is $1/88$. This is the same for every trial since each child has the same chance of having ASD, $p = \frac{1}{88}$ and $q = 1 - \frac{1}{88} = \frac{87}{88}$

Using the formula: $P(X = 2) = {}_{10}C_2 \cdot \left(\frac{1}{88}\right)^2 \cdot \left(\frac{87}{88}\right)^{(10-2)} = 0.0053$

Using the TI-83/84 Calculator: $P(X = 2) = \text{binompdf}(10, 1/88, 2) = 0.0053$.

Using Excel: =BINOM.DIST(2,10,1/88,FALSE) = 0.0053.

Flip a fair coin exactly 10 times.

- What is the probability of getting exactly 8 tails?
- What is the probability of getting 8 or more tails?

Solution

a) There are only two outcomes to each trial, heads or tails. The coin flips are independent and the probability of a success, flipping a tail, $p = \frac{1}{2} = 0.5$ is the same for each trial. This is a binomial experiment with a sample size $n = 10$. Using the

formula: $P(X = 8) = {}_{10}C_8 \cdot 0.58 \cdot 0.5^{(10-8)} = 0.0439$

b) We still have $p = 0.5$ and $n = 10$, however we need to look at the probability of 8 or more. The $P(X \geq 8) = P(X = 8) + P(X = 9) + P(X = 10)$. We can stop at $x = 10$ since the coin was only flipped 10 times. $P(X \geq 8) = {}_{10}C_8 \cdot 0.58 \cdot 0.5^{(10-8)} + {}_{10}C_9 \cdot 0.59 \cdot 0.5^{(10-9)} + {}_{10}C_{10} \cdot 0.5^{10} \cdot 0.5^{(10-10)} = 0.0439 + 0.0098 + 0.0010 = 0.0547$.

So far, most of the examples for the binomial distribution were for exactly x successes. If we want to find the probability of accumulation of x values then we would use the cumulative distribution function (cdf) instead of the pdf. Phrases such as “at least,” “more than,” or “below” can drastically change the probability answers.

Approximately 10.3% of American high school students drop out of school before graduation. Choose 10 students entering high school at random. Find the following probabilities.

- No more than two drop out.
- At least 6 students graduate.
- Exactly 10 stay in school and graduate.

Solution

a) There is a set sample size of independent trials. The person either has or has not dropped out of school before graduation. A “success” is what we are finding the probability for, so in this case a success is to drop out so $p = 0.103$ and $q = 1 - 0.103 = 0.897$.

$$P(X \leq 2) = P(X = 0) + P(X = 1) + P(X = 2) = {}_{10}C_0 \cdot 0.103^0 \cdot 0.897^{10} + {}_{10}C_1 \cdot 0.103^1 \cdot 0.897^9 + {}_{10}C_2 \cdot 0.103^2 \cdot 0.897^8 = 0.3372 + 0.3872 + 0.2001 = 0.9245$$

Calculator shortcut use $\text{binompdf}(10,0.103,0) + \text{binompdf}(10,0.103,1) + \text{binompdf}(10,0.103,2) = 0.9245$ or the $\text{binomcdf}(10,0.103,2) = 0.9245$. On the TI-89 cdf enter the lower value of x as 0 and upper value of x as 2.

In Excel use the function $=\text{BINOM.DIST}(2,10,0.103,\text{TRUE})$. Note that if you choose False under cumulative this would return just the $P(X = 2)$ not $P(X \leq 2)$.

b) A success is to graduate so $p = 0.897$ and $q = 0.103$.

$$P(X \geq 6) = P(X = 6) + P(X = 7) + P(X = 8) + P(X = 9) + P(X = 10) = {}_{10}C_6 \cdot 0.897^6 \cdot 0.103^4 + {}_{10}C_7 \cdot 0.897^7 \cdot 0.103^3 + {}_{10}C_8 \cdot 0.897^8 \cdot 0.103^2 + {}_{10}C_9 \cdot 0.897^9 \cdot 0.103^1 + {}_{10}C_{10} \cdot 0.897^{10} \cdot 0.103^0 = 0.0123 + 0.0613 + 0.2001 + 0.3872 + 0.3372 = 0.9981$$

This is a lot of work to do each one so we can use technology to find the answer.

Note that Excel and the older TI-84 programs only find the probability below x so you have to use the complement rule.

For the TI-84 calculator shortcut use $\text{binompdf}(10,0.897,6) + \text{binompdf}(10,0.897,7) + \text{binompdf}(10,0.897,8) + \text{binompdf}(10,0.897,9) + \text{binompdf}(10,0.897,10) = 0.9981$ or use the complement rule $P(X \geq 6) = 1 - P(X \leq 5) = 1 - \text{binomcdf}(10,0.897,5) = 0.9981$.

On the TI-89, just use the binomcdf with the lower x value as 6 and the upper x value as 10.

In Excel use $=1 - \text{BINOM.DIST}(5,10,0.897,\text{TRUE})$.

c) A success is to graduate so $p = 0.897$ and $q = 0.103$. Find $P(X = 10) = {}_{10}C_{10} \cdot 0.897^{10} \cdot 0.103^0 = 0.3372$.

On the TI-84 use $\text{binompdf}(10,0.897,10) = 0.3372$.

In Excel $=\text{BINOM.DIST}(10,10,0.897,\text{FALSE}) = 0.3372$.

When looking at a person’s eye color, it turns out that only 2% of people in the world have green eyes (not to be confused with hazel colored eyes). Consider a randomly selected group of 20 people.

- Compute the probability that at most 3 have green eyes.
- Compute the probability that less than 3 have green eyes.
- Compute the probability that more than 3 have green eyes.

d) Compute the probability that 3 or more have green eyes.

Solution

a) This fits a binomial experiment. $P(X \leq 3) = P(X = 0) + P(X = 1) + P(X = 2) + P(X = 3) = {}_{20}C_0 \cdot 0.02^0 \cdot 0.80^{20} + {}_{20}C_1 \cdot 0.02^1 \cdot 0.80^{19} + {}_{20}C_2 \cdot 0.02^2 \cdot 0.80^{18} + {}_{20}C_3 \cdot 0.02^3 \cdot 0.80^{17} = 0.667608 + 0.272493 + 0.05283 + 0.006469 = 0.9994$.

On the TI-84 use $\text{binompdf}(20,0.02,3) = 0.9994$.

In Excel $=\text{BINOM.DIST}(3,20,0.02,\text{true}) = 0.9994$.

b) $P(X < 3) = P(X = 0) + P(X = 1) + P(X = 2) = 0.667608 + 0.272493 + 0.05283 = 0.9929$.

On the TI-84 use $\text{binompdf}(20,0.02,2) = 0.9929$.

In Excel $=\text{BINOM.DIST}(2,20,0.02,\text{true}) = 0.9929$.

c) $P(X > 3) = 1 - P(X \leq 3) = 1 - 0.9994 = 0.0006$.

On the TI-84 use $1 - \text{binompdf}(20,0.02,3) = 0.0006$.

In Excel $=1 - \text{BINOM.DIST}(3,20,0.02,\text{true}) = 0.0006$.

d) $P(X \geq 3) = 1 - P(X \leq 2) = 1 - 0.9929 = 0.0071$

On the TI-84 use $1 - \text{binompdf}(20,0.02,2) = 0.0071$.

In Excel $=1 - \text{BINOM.DIST}(2,20,0.02,\text{true}) = 0.0071$.

As of 2018, the Centers for Disease Control and Prevention (CDC) reported that about 1 in 88 children in the United States have been diagnosed with autism spectrum disorder (ASD). A researcher randomly selects 10 children. Compute the probability that at least 2 children have been diagnosed with ASD.

Solution

$P(X \geq 2) = 1 - P(X \leq 1) = 1 - \left({}_{10}C_0 \cdot \left(\frac{1}{88}\right)^0 \cdot \left(\frac{87}{88}\right)^{10-0} + {}_{10}C_1 \cdot \left(\frac{1}{88}\right)^1 \cdot \left(\frac{87}{88}\right)^{(10-1)} \right) = 1 - (0.89202 + 0.102528) = 0.0055$

On the TI-84 use $1 - \text{binompdf}(10,1/88,1) = 0.0055$.

In Excel $=1 - \text{BINOM.DIST}(1,10,1/88,\text{true}) = 0.0055$.

Mean, Variance & Standard Deviation of a Binomial Distribution

If you list all possible values of x in a Binomial distribution, you get the Binomial Probability Distribution (pdf). You can then find the mean, the variance, and the standard deviation using the general formulas $\mu = \sum(x_i \cdot P(x_i))$ and $\sigma^2 = \sum(x_i^2 \cdot P(x_i)) - \mu^2$. This, however, would take a lot of work if you had a large value for n . If you know the type of distribution, like binomial, then you can find the mean, variance and standard deviation using easier formulas. They are derived from the general formulas. For a Binomial distribution, μ , the expected number of successes, σ^2 , the variance, and σ , the standard deviation for the number of success are given by the formulas, where p is the probability of success and $q = 1 - p$.

$$\mu = n \cdot p \quad \sigma^2 = n \cdot p \cdot q \quad \sigma = \sqrt{n \cdot p \cdot q}$$

A random experiment consists of flipping a coin three times. Let X = the number of heads that show up. Compute the mean and standard deviation of X , that is, the mean and standard deviation for the number of heads that show up when a coin is flipped three times.

Solution

This experiment follows a binomial distribution; hence, we can use the mean and standard deviation formulas for a binomial. The mean of number of heads is $\mu = 3 \cdot 0.5 = 1.5$. The standard deviation of X is $\sigma = \sqrt{n \cdot p \cdot q} = \sqrt{(3 \cdot 0.5 \cdot (1 - 0.5))} = 0.8660$

When looking at a person's eye color, it turns out that only 2% of people in the world have green eyes (not to be confused with hazel colored eyes). Consider a randomly selected group of 20 people. Compute the mean, variance and standard deviation.

Solution

Since this is a binomial experiment, then you can use the formula $\mu = n \cdot p$. So $\mu = 20 \cdot 0.02 = 0.4$ people. You would expect on average that out of 20 people, less than 1 would have green eyes. The variance would be $\sigma^2 = n \cdot p \cdot q = 20(0.02)(0.98) = 0.392$ people². Once you have the variance, you just take the square root of the variance to find the standard deviation $\sigma = \sqrt{0.392} = 0.6261$ people. We would expect on average spread of the distribution to have 0.4 ± 0.6261 or 0 to 1 person out of 20 people to have green eyes.

This page titled [5.4: Binomial Distribution](#) is shared under a [CC BY-SA 4.0](#) license and was authored, remixed, and/or curated by [Rachel Webb](#) via [source content](#) that was edited to the style and standards of the LibreTexts platform.

5.5: Hypergeometric Distribution

The hypergeometric distribution is a discrete probability distribution used to find the probability of success when there are two outcomes to each trial, and there are a set number of dependent trials. A hypergeometric probability distribution results from a random experiment that meets all of the following requirements. ¹²

1. The procedure has a fixed sample size n taken from a population N .
2. The trials are taken without replacement (dependent).
3. Each trial has exactly two outcomes, the number of successes = a and the number of failures = b . Note $a + b = N$.

If a random experiment satisfies all of the above, the distribution of the random variable X , where X counts the number of successes, is called a hypergeometric distribution, we write $X \sim H(n, a, N)$.

The hypergeometric distribution is $P(X = x) = \frac{{}_a C_x \cdot {}_b C_{n-x}}{{}_N C_n}$, $x = 0, 1, 2, \dots, n$ or a , whichever is smaller. Where n is the sample size taken without replacement from the population size N , x is the number of successes out of n that you are trying to find the probability for, a is the number of a successes and $b = N - a$ is the number of failures out of the population N .

A committee of 5 people is to be formed from 15 volunteers and 6 appointed positions. Compute the probability that the committee will consist of 4 randomly selected volunteers.

Solution

There are a total of $N = 15 + 6 = 21$ people. A sample of $n = 5$ people are selected without replacement. The success is choosing a volunteer, so $a = 15$. Of the 15 volunteers, we are asked to find the probability of selecting $x = 4$. Substitute in each value: $P(X = 4) = \frac{{}_{15}C_4 \cdot {}_6C_1}{{}_{21}C_5} = 0.4025$.

There is a pattern to the numbers in the formula. The top two numbers on the left of the C's add up to the bottom number on the left of C, and the top two numbers on the right of the C's add up to the bottom number on the right of C.

The waiting room for jury selection has 40 people with a college degree and 30 people without. A jury of 12 is selected from this waiting room. What is the probability that exactly 5 of the jury members will have a college degree?

Solution

There are a total of $N = 40 + 30 = 70$ people. A sample of $n = 12$ people are selected without replacement. The success is choosing someone with a college degree, so $a = 40$. Of the 12 jurors we are asked to find the probability of selecting $x = 5$.

Substitute in each value: $P(X = 5) = \frac{{}_{40}C_5 \cdot {}_{30}C_7}{{}_{70}C_{12}} = 0.1259$.

A wallet contains three \$100 bills and five \$1 bills. You randomly choose four bills. What is the probability that you will choose exactly two \$100 bills?

Solution

There are a total of $N = 3 + 5 = 8$ bills. A sample of $n = 4$ bills are selected without replacement. The success is choosing a \$100 bill, so $a = 3$. Of the 3 \$100 bills we are asked to find the probability of selecting $x = 2$. Substitute in each value: $P(X = 2) = \frac{{}_3C_2 \cdot {}_5C_2}{{}_8C_4} = 0.4286$.

Note: the calculator does not have the hypergeometric distribution shortcut. The following online calculator will calculate the probability: <https://homepage.divms.uiowa.edu/~mbognar/applets/hg.html>. The $M = a$ is the number of successes a from our example, or use Excel.

Figure 5-7 may help you decide when to use the "True" for cumulative in Excel.

$P(X = x)$	$P(X \leq x)$	$P(X \geq x)$
Is the same as	Is less than or equal to	Is greater than or equal to
Is equal to	Is at most	Is at least
Is exactly the same as	Is not greater than	Is not less than
Has not changed from	Within	
=HYPGEOM.DIST(x, n, a, N, false)	= HYPGEOM.DIST(x, n, a, N, true)	=1- HYPGEOM.DIST($x-1, n, a, N, \text{true}$)
Where:	$P(X > x)$	$P(X < x)$
x is the value in the question that you are finding the probability for.	More than	Less than
N = Population Size	Greater than	Below
n = Sample Size	Above	Lower than
a = Number of Successes out of N	Higher than	Shorter than
b = Number of Failures out of N	Longer than	Smaller than
	Bigger than	Decreased
	Increased	Reduced
No shortcut for the TI	Smaller	Larger
	=1- HYPGEOM.DIST(x, n, a, N, true)	= HYPGEOM.DIST($x-1, n, a, N, \text{true}$)

Figure 5-7

A bookstore owner examines 5 books from each lot of 25 to check for missing pages. If they find at least 2 books with missing pages, the entire lot is returned. If, indeed, there are 4 books with missing pages, find the probability that the lot will be returned.

Solution

Sometimes the hardest part is determining which of the numbers goes in the right place in the formula. The population size is always the largest number, $N = 25$. A success is what you are trying to find the probability for, which is getting a book with a missing page. The number of successes out of the population is $a = 4$ (the 4 books with the missing pages). This means $b = 25 - 4 = 21$ (the number of books without missing pages). Note $a + b = N$. The sample size is the $n = 5$ is the number of books the owner examines. The owner will send the lot back if X is at least 2 missing pages.

We can stop at $X = 4$ since there are only 4 books with missing pages. Your stopping point will be the smaller of n or a . $P(X \geq 2) = P(X = 2) + P(X = 3) + P(X = 4) = \frac{{}^4C_2 \cdot {}^{21}C_3}{{}^{25}C_5} + \frac{{}^4C_3 \cdot {}^{21}C_2}{{}^{25}C_5} + \frac{{}^4C_4 \cdot {}^{21}C_1}{{}^{25}C_5} = 0.1502 + 0.0158 + 0.0004 = 0.1664$.

In Excel use the formula: =1- HYPGEOM.DIST(1,5,4,25,TRUE).

Figure 5-8 shows the online calculator at <https://homepage.divms.uiowa.edu/~mbognar/applets/hg.html>.

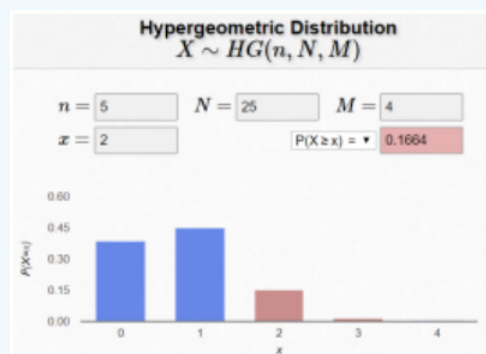


Figure 5-8

5.6: Poisson Distribution

The Poisson distribution was named after the French mathematician Siméon Poisson (pronounced pwɑːsɔ̃n, means fish in French).



[Poisson](#)

The Poisson discrete probability distribution finds the probability of an event over some unit of time or space. A Poisson probability distribution may be used when a random experiment meets all of the following requirements.

1. Events occur independently.
2. The discrete random variable X is the number of occurrences over an interval of time, volume, space, area, etc.
3. The mean number of successes μ over time, volume, space, area, etc. is given. (Note some textbooks and calculators use λ instead of μ for the mean).

The formula for the Poisson distribution is $P(X = x) = \frac{e^{-\mu} \mu^x}{x!}$, where e is a mathematical constant approximately equal to 2.71828, $x = 0, 1, 2, \dots$ is the number successes that you are trying to find the probability for, μ is the mean number of a success over one interval of time, space, volume, etc.

The value of x has no stopping point since there is no set sample size like the binomial distribution. Note that e is not a variable, it is a constant number. Use the e^x button on your calculator.

Mean, Variance & Standard Deviation of a Poisson Distribution

For a Poisson distribution, μ , the expected number of successes, and the variance σ^2 are equal to one another.

$$\mu = \sigma^2 \quad \sigma = \sqrt{\sigma^2}$$

Sometimes the question will ask for a probability over a different unit of time, space or area than originally given in the problem. Always change the mean to fit the new units in the question.

This formula will help in correctly rescaling the mean to fit the questions new units: $\text{New } \mu = \text{old } \mu \left(\frac{\text{new units}}{\text{old units}} \right)$. The “old” would be the original stated mean and units and the “new” is the units from the question.

TI-84: Press [2nd] [DISTR]. This will get you a menu of probability distributions. Press [ALPHA] B or arrow down to **B:poissonpdf**(and press [ENTER]. This puts poissonpdf(on the home screen. Enter the values for μ and x with a comma between each. Press [ENTER]. This is the probability density function and will return you the probability of exactly x successes. Press [ALPHA] C or arrow down to **C:poissoncdf**(and press [ENTER]. This puts poissoncdf(on the home screen. Enter the values for μ and x with a comma between each. Press [ENTER]. This is the cumulative distribution function and will return you the probability of at most x successes.

TI-89: Go to the [Apps] **Stat/List Editor**, then select F5 [DISTR]. This will get you a menu of probability distributions. Arrow down to **Poisson Pdf** and press [ENTER]. Enter the values for μ and x into each cell. Press [ENTER]. This is the probability density function and will return you the probability of exactly x successes. Arrow down to **Poisson Cdf** and press [ENTER]. Enter the values for μ and the lower and upper values of x into each cell. Press [ENTER]. This is the cumulative distribution function and will return you the probability between the lower and upper x -values, inclusive.

Excel: Use the formula =POISSON.DIST(x,mean,false) for $P(X = x)$. Use the formula =POISSON.DIST(x,mean,true) for $P(X \leq x)$.

There are about 8 million individuals in New York City. Using historical records, the average number of individuals hospitalized for acute myocardial infarction (AMI), i.e. a heart attack, each day is 4.4 individuals. What is the probability that exactly 6 people are hospitalized for AMI in NY City tomorrow?

Solution

First, note that the probability question is over the same units of time, one day, which the average is given. It is important that these units always match. The random variable X = the number of individuals hospitalized each day in NY City for an AMI.

We are trying to find $P(X = 6)$ and the mean $\mu = 4.4$ people.

Using the formula $P(X = 6) = \frac{e^{-4.4} 4.4^6}{6!} = 0.1237$.

TI-84: poissonpdf(4.4,6) = 0.1237.

Excel =POISSON.DIST(6,4.4,FALSE) = 0.1237.

A bank drive-through has an average of 10 customers every hour. Find the following probabilities.

- Compute the probability that no customers arrive in an hour.
- Compute the probability of exactly 2 customers use the drive-through in an hour.
- Compute the probability that exactly 2 customers use the drive-through in a 30-minute period.
- Compute the probability that fewer than 2 customers use the drive-through in a half hour.

Solution

a) In this case, X is the number of customers that use the drive-through. We are trying to find the probability that $x = 0$. The average is given in the problem as $\mu = 10$. This gives $P(X = 0) = \frac{e^{-10} 10^0}{0!} = 4.53999E-5 = 0.0000454$.

TI-84: poissonpdf(10,0) = 0.0000454.

Excel: =POISSON.DIST(0,10,FALSE) = 0.0000454.

b) $P(X = 2) = \frac{e^{-10} 10^2}{2!} = 0.0023$.

TI-84: P(X = 2) = poissonpdf(10,2) = 0.0023.

Excel: =POISSON.DIST(2,10,FALSE) = 0.0023.

c) The unit of time has changed from 1 hour to 30 minutes, so we need to rescale the mean to fit the new unit of time. Use the following formula to convert your units, New μ = old $\mu (\frac{\text{new units}}{\text{old units}}) = 10 (\frac{30 \text{ minutes}}{60 \text{ minutes}}) = 5$.

$P(X = 2) = \frac{e^{-5} 5^2}{2!} = 0.0842$.

TI-84: P(X = 2) = poissonpdf(5,2) = 0.0842.

Excel: P(X = 2) = POISSON.DIST(2,5,FALSE) = 0.0842.

Note; always rescale the mean to fit the units of the question, not the other way around.

d) The time-period is half an hour = 30 minutes. The mean from part c would be $\mu = 5$. To find “less than” 2 we would have zero or one customer.

$P(X < 2) = P(X = 0) + P(X = 1) = \frac{e^{-5} 5^0}{0!} + \frac{e^{-5} 5^1}{1!} = 0.0067 + 0.0337 = 0.0404$.

TI-84: P(X = 2) = poissoncdf(5,1) = 0.0404.

Excel: =POISSON.DIST(1,5,TRUE) = 0.0404.

So far, most of the examples for the Poisson distribution were for exactly x successes. If we want to find the probability of accumulation of x values then we would use the cumulative distribution function (cdf) instead of the pdf. As you read through a problem look for some of the following key phrases in Figure 5-9. Once you find the phrase then match up to what sign you would use and then use the table to walk you through the computer or calculator formula.

$P(X = x)$	$P(X \leq x)$	$P(X \geq x)$
Is the same as	Is less than or equal to	Is greater than or equal to
Is equal to	Is at most	Is at least
Is exactly the same as	Is not greater than	Is not less than
Has not changed from	Within	
=POISSON.DIST(x, μ, false)	=POISSON.DIST(x, μ, true)	=1-POISSON.DIST($x-1, \mu, \text{true}$)
TI: poissonpdf(μ, x)	TI: poissoncdf(μ, x)	TI: 1-poissoncdf($\mu, x-1$)
Where:	$P(X > x)$	$P(X < x)$
x is the value in the	More than	Less than
question that you are	Greater than	Below
finding the probability for.	Above	Lower than
	Higher than	Shorter than
The mean has been rescaled to	Longer than	Smaller than
the units of the question.	Bigger than	Decreased
	Increased	Reduced
	Smaller	Larger
Excel:	=1-POISSON.DIST(x, μ, true)	=POISSON.DIST($x-1, \mu, \text{true}$)
TI-Calculator:	1-poissoncdf(μ, x)	poissoncdf($\mu, x-1$)

Figure 5-9

A bank drive-through has an average of 10 customers every hour. Find the following probabilities.

- Compute the probability of at least four customers arriving in an hour.
- Compute the probability of at most four customers arriving in an hour.
- Compute the probability of fewer than four customers arriving in an hour.
- Compute the probability of more than four customers arriving in an hour.
- Compute the probability that fewer than 2 customers arrive in a 15-minute period.

Solution

a) Because we do not have a set sample size to stop at like the binomial distribution, you would have to find the probability of 4 or more until your answers are small enough that they are not changing your answer out to at least four decimal places 0.0000. This may take a lot of work; instead, we will use the complement rule. The complement to “at least 4,” is “3 or less.” Find $P(X \geq 4) = 1 - P(X \leq 3) = 1 - P(X = 0) + P(X = 1) + P(X = 2) + P(X = 3) = 1 - \left(\frac{e^{-10} 10^0}{0!} + \frac{e^{-10} 10^1}{1!} + \frac{e^{-10} 10^2}{2!} + \frac{e^{-10} 10^3}{3!} \right) = 1 - 0.000045 + 0.000454 + 0.00227 + 0.007567 = 1 - 0.0103 = 0.9897$. Note that the value of x went from 4 to 3. The complement of strictly less than 4 starts at $x = 3$.

TI-84: $1 - \text{poissoncdf}(10, 3) = 0.9897$.

Excel: $=1-\text{POISSON.DIST}(3, 10, \text{TRUE}) = 0.9897$.

b) $P(X \leq 4) = P(X = 0) + P(X = 1) + P(X = 2) + P(X = 3) + P(X = 4) = \frac{e^{-10} 10^0}{0!} + \frac{e^{-10} 10^1}{1!} + \frac{e^{-10} 10^2}{2!} + \frac{e^{-10} 10^3}{3!} + \frac{e^{-10} 10^4}{4!} = 0.000045 + 0.000454 + 0.00227 + 0.007567 + 0.018917 = 0.0293$.

TI-84: $\text{poissoncdf}(10, 4) = 0.0293$.

Excel: $=\text{POISSON.DIST}(4, 10, \text{TRUE}) = 0.0293$.

$$c) P(X < 4) = P(X = 0) + P(X = 1) + P(X = 2) + P(X = 3) = \frac{e^{-10}10^0}{0!} + \frac{e^{-10}10^1}{1!} + \frac{e^{-10}10^2}{2!} + \frac{e^{-10}10^3}{3!} = 0.000045 + 0.000454 + 0.00227 + 0.007567 = 0.0103.$$

TI-84: poissoncdf(10,3) = 0.0103.

Excel: =POISSON.DIST(3,10,TRUE) = 0.0103.

$$d) \text{ Using part b, } P(X > 4) = 1 - P(X \leq 4) = 1 - 0.0293 = 0.9707.$$

TI-84: 1 - poissoncdf(10,4) = 0.9707.

Excel: =1-POISSON.DIST(4,10,TRUE) = 0.9707.

e) The unit of time has changed from 1 hour to 15 minutes, so we need to rescale the mean to fit the new unit of time. Use the following formula to convert your units, New μ = old $\mu \left(\frac{\text{new units}}{\text{old units}} \right) = 10 \left(\frac{15 \text{ minutes}}{60 \text{ minutes}} \right) = 2.5$.

$$P(X < 2) = P(X = 0) + P(X = 1) = \frac{e^{-2.5}2.5^0}{0!} + \frac{e^{-2.5}2.5^1}{1!} = 0.0821 + 0.2052 = 0.2873.$$

TI-84: poissoncdf(2.5,1) = 0.2873.

Excel: =POISSON.DIST(1,2.5,TRUE) = 0.2873.

The last ever dolphin message was misinterpreted as a surprisingly sophisticated attempt to do a double--- backwards – somersault through a hoop whilst whistling the "Star Sprangled Banner," but in fact the message was this: So long and thanks for all the fish.

(Adams, 2002)

This page titled [5.6: Poisson Distribution](#) is shared under a [CC BY-SA 4.0](#) license and was authored, remixed, and/or curated by [Rachel Webb](#) via [source content](#) that was edited to the style and standards of the LibreTexts platform.

5.7: Chapter 5 Exercises

? Chapter 5 Exercises

1. Determine if the following tables are valid discrete probability distributions. If they are not state why.

a)

x	-5	-2.5	0	2.5	5
P(X = x)	0.15	0.25	0.32	0.18	0.1

b)

x	0	1	2	3	4
P(X = x)	0.111	0.214	0.312	0.163	0.159

c)

x	0	1	2	3	4
P(X = x)	0.2	-0.3	0.5	0.4	0.2

2. The random variable X = the number of vehicles owned.

x	0	1	2	3	4
P(X = x)	0.1	0.35	0.25	0.2	0.1

- Compute the probability that a person owns at least 2 vehicles.
- Compute the $P(X > 2)$.
- Compute the probability that a person owns less than 2 vehicles.
- Compute the expected number of vehicles owned.
- Compute the standard deviation of the number of vehicles owned.
- Compute σ^2 .

3. The following discrete probability distribution represents the amount of money won for a raffle game.

x	-5	-2.5	0	2.5	5
P(X = x)	0.15	0.25	0.32	0.18	0.1

- Compute μ .
- Compute σ

4. Keke's Kookies sells mini cookies in packs of 5 and has determined a probability distribution for the number of cookies that they sell in a given day.

x = #sold	0	5	10	15	20
P(X = x)	0.22	0.38	0.14	..?	0.07

- What is the probability of selling 15 mini cookies in a given day?
- Find the expected number of mini cookies sold in a day using the discrete probability distribution.

c) Find the variance of the number of mini cookies sold in a day using the discrete probability distribution.

5. The bookstore also offers a chemistry textbook for \$159 and a book supplement for \$41. From experience, they know about 25% of chemistry students just buy the textbook while 60% buy both the textbook and supplement. Compute the standard deviation of the bookstore revenue.

6. A \$100,000 life insurance policy for a 50-year-old woman has an annual cost of \$335. The probability that a 50-year-old woman will die is 0.003118. What is the expected value of the policy for the woman's estate?

7. An LG Dishwasher, which costs \$1000, has a 24% chance of needing to be replaced in the first 2 years of purchase. If the company has to replace the dishwasher within the two-year extended warranty, it will cost the company \$112.10 to replace the dishwasher.

a) Fill out the probability distribution for the value of the extended warranty from the perspective of the company.

x		
P(X=x)		

b) What is the expected value of the extended warranty?

c) Write a sentence interpreting the expected value of the warranty.

8. The Oregon lottery has a game called Pick 4 where a player pays \$1 and picks a four-digit number. If the four numbers come up in the order you picked, then you win \$2000.

a) Fill out the probability distribution for a player's winnings

x		
P(X=x)		

b) What are your expected winnings?

c) Write a sentence interpreting the expected winnings.

9. The following table represents the probability of the number of pets owned by a college student.

x	0	1	2	3
P(X=x)	0.46	0.35	0.12	0.07

a) Is this a valid discrete probability distribution? Explain your answer.

b) Find the mean number of pets owned.

c) Find the standard deviation of the number of cars owned.

d) Find σ^2 .

10. Suppose a random variable, X, arises from a geometric distribution. If $p = 0.13$, compute the $P(X = 4)$.

11. Approximately 10% of all people are left-handed. You randomly sample people until you get someone who is left-handed. What is the probability that the 4th person selected will be the left-handed person?

12. An actress has a probability of getting offered a job after a tryout of 0.12. She plans to keep trying out for new jobs until she is offered a job. Assume outcomes of tryouts are independent. Compute the probability she will need to attend more than 7 tryouts.

13. A fair coin is flipped until a head is shown. What is the probability that head shows on the 6th flip?

14. When you post a picture on social media, it seems like your friends randomly "like" the picture. Independent of the quality or the humor of the photo, there seems to be an 18% chance of the picture being "liked" for any given picture. Let X represent the number of pictures you post until one is "liked." (X represents the photo number that is actually liked.) Compute $P(X = 15)$.

15. Suppose a random variable, x , arises from a binomial experiment. If $n = 14$, and $p = 0.13$, find the following probabilities.
- $P(X = 3)$
 - $P(X \leq 3)$
 - $P(X < 3)$
 - $P(X > 3)$
 - $P(X \geq 3)$
16. Suppose a random variable, X , arises from a binomial experiment. If $n = 25$, and $p = 0.85$, find the following probabilities.
- $P(X = 15)$
 - $P(X \leq 15)$
 - $P(X < 15)$
 - $P(X > 15)$
 - $P(X \geq 15)$
17. Suppose a random variable, X , arises from a binomial experiment. If $n = 14$, and $p = 0.13$, compute the standard deviation.
18. Suppose a random variable, X , arises from a binomial experiment. If $n = 25$, and $p = 0.85$, compute the variance.
19. A fair coin is flipped 30 times.
- What is the probability of getting exactly 15 heads?
 - What is the probability of getting 15 or more heads?
 - What is the probability of getting at most 15 heads?
 - How many times would you expect to get heads?
 - What is the standard deviation of the number of heads?
20. Approximately 10% of all people are left-handed. Out of a random sample of 15 people, find the following.
- What is the probability that 4 of them are left-handed?
 - What is the probability that less than 4 of them are left-handed?
 - What is the probability that at most 4 of them are left-handed?
 - What is the probability that at least 4 of them are left-handed?
 - What is the probability that more than 4 of them are left-handed?
 - Compute μ .
 - Compute σ .
 - Compute σ^2 .
21. Approximately 8% of all people have blue eyes. Out of a random sample of 20 people, find the following.
- What is the probability that 2 of them have blue eyes?
 - What is the probability that at most 2 of them have blue eyes?
 - What is the probability that less than 2 of them have blue eyes?
 - What is the probability that at least 2 of them have blue eyes?
 - What is the probability that more than 2 of them have blue eyes?
 - Compute μ .
 - Compute σ .
 - Compute σ^2 .

22. An unprepared student takes a 10 question TRUE/FALSE quiz and ended up guessing each answer.
- What is the probability that the student got 7 questions correct?
 - What is the probability that the student got 7 or more questions correct?
23. A local county has an unemployment rate of 7.3%. A random sample of 20 employable people are picked at random from the county and are asked if they are employed. The distribution is a binomial. Round answers to 4 decimal places.
- Find the probability that exactly 3 in the sample are unemployed.
 - Find the probability that there are fewer than 4 in the sample are unemployed.
 - Find the probability that there are more than 2 in the sample are unemployed.
 - Find the probability that there are at most 4 in the sample are unemployed.
24. About 1% of the population has a particular genetic mutation. Find the standard deviation for the number of people with the genetic mutation in a group of 100 randomly selected people from the population.
25. You really struggle remembering to bring your lunch to work. Each day seems to be independent as to whether you remember to bring your lunch or not. The chance that you forget your lunch each day is 25.6%. Consider the next 48 days. Let X be the number of days that you forget your lunch out of the 48 days. Compute $P(10 \leq X \leq 14)$.
26. A flu vaccine has a 90% effective rate. If a random sample of 200 people are given the vaccine, what is the probability that at most 180 people did not get the flu?
27. The Lee family had 6 children. Assuming that the probability of a child being a girl is 0.5, find the probability that the Smith family had at least 4 girls?
28. If a seed is planted, it has a 70% chance of growing into a healthy plant. If 142 randomly selected seeds are planted, answer the following.
- What is the probability that exactly 100 of them grow into a healthy plant?
 - What is the probability that less than 100 of them grow into a healthy plant?
 - What is the probability that more than 100 of them grow into a healthy plant?
 - What is the probability that exactly 103 of them grow into a healthy plant?
 - What is the probability that at least 103 of them grow into a healthy plant?
 - What is the probability that at most 103 of them grow into a healthy plant?
29. A manufacturing machine has a 6% defect rate. An inspector chooses 4 items at random.
- What is the probability that at least one will have a defect?
 - What is the probability that exactly two will have a defect?
 - What is the probability that less than two will have a defect?
 - What is the probability that more than one will have a defect?
30. A large fast-food restaurant is having a promotional game where game pieces can be found on various products. Customers can win food or cash prizes. According to the company, the probability of winning a prize (large or small) with any eligible purchase is 0.162. Consider your next 33 purchases that produce a game piece. Calculate the following:
- What is the probability that you win 5 prizes?
 - What is the probability that you win more than 8 prizes?
 - What is the probability that you win between 3 and 7 (inclusive) prizes?
 - What is the probability that you win 3 prizes or fewer?
31. A small regional carrier accepted 20 reservations for a particular flight with 17 seats. 15 reservations went to regular customers who will arrive for the flight. Each of the remaining passengers will arrive for the flight with a 60% chance, independently of each other.

- a) Find the probability that overbooking occurs.
 - b) Find the probability that the flight has empty seats.
32. A poll is given, showing 72% are in favor of a new building project. Let X be the number of people who favor the new building project when 37 people are chosen at random. What is the probability that between 10 and 16 (including 10 and 16) people out of 37 favor the new building project?
33. A committee of 5 people is to be formed from 10 students and 7 parents. Compute the probability that the committee will consist of exactly 3 students and 2 parents.
34. In endurance horse racing, people over the age of 15 are called seniors and people 15 years or younger are called juniors. An endurance horse race consists of 25 seniors and 5 juniors. What is the probability that the top three finishers were:
- a) All seniors.
 - b) All juniors.
 - c) 2 seniors and one junior.
 - d) 1 senior and two juniors.
35. A bag contains 9 strawberry Starbursts and 21 other flavored Starbursts. 5 Starbursts are chosen randomly without replacement. Find the probability that 3 of the Starbursts drawn are strawberry.
36. A jury selection room has 12 people that are married and 20 people that are not married to choose from. What is the probability that in a jury of 12 randomly selected people, exactly 3 of them would be married?
37. A pharmaceutical company receives large shipments of ibuprofen tablets and uses this acceptance sampling plan: randomly select and test 25 tablets, then accept the whole batch if there is at most one that doesn't meet the required specifications. If a particular shipment of 100 ibuprofen tablets actually has 5 tablets that have defects, what is the probability that this whole shipment will be accepted?
38. In a shipment of 24 keyboards, there are 3 that are defective (a success is a defective keyboard). A random sample of 4 keyboards are selected. The shipment will be returned if one or more of the 4 keyboards in the sample is defective. What is the probability that the shipment will be returned?
39. A writer makes on average one typographical error every page. The writer has landed a 3-page article in an important magazine. If the magazine editor finds any typographical errors, they probably will not ask the writer for any more material. What is the probability that the reporter made no typographical errors for the 3-page article?
40. A coffee shop serves an average of 75 customers per hour during the morning rush, which follows a Poisson distribution. Find the following.
- a) Compute the probability that 80 customers arrive in an hour during tomorrow's morning rush.
 - b) Compute the probability that less than 60 customers arrive in an hour during tomorrow's morning rush.
 - c) Compute the probability that more than 60 customers arrive in an hour during tomorrow's morning rush.
41. Suppose a random variable, x , follows a Poisson distribution. Let $\mu = 2.5$ every minute, find the following probabilities.
- a) $P(X = 5)$ over a minute.
 - b) $P(X < 5)$ over a minute.
 - c) $P(X \leq 5)$ over a minute.
 - d) $P(X > 5)$ over a minute.
 - e) $P(X \geq 5)$ over a minute.
 - f) $P(X = 125)$ over an hour.
 - g) $P(X \geq 125)$ over an hour.
42. The PSU computer help line receives, on average, 14 calls per hour asking for assistance. What is the probability that the company will receive more than 20 calls per hour?

43. There are on average 5 old-growth Sitka Spruce trees per $\frac{1}{8}$ of an acre in a local forest.
- a) Compute the probability that there are exactly 30 Sitka Spruce trees in 1 acre.
 - b) Compute the probability that there are more than 8 Sitka Spruce trees in a $\frac{1}{4}$ acre.
44. The number of rescue calls received by Pacific Northwest Search & Rescue follows a Poisson distribution with an average of 2.83 rescues every eight hours.
- a) What is the probability that the squad will have exactly 4 calls in two hours?
 - b) What is the probability that the company will receive 2 calls in a 12-minute period?
 - c) What is the probability that the squad will have at most 2 calls in an hour?
45. Suppose a random variable, x , follows a Poisson distribution. Let $\mu = 3$ every day; compute the $P(X \leq 12)$ over a week.

Answer to Odd Numbered Exercises

- 1) a) Yes b) No c) No
- 3) a) -\$0.425 b) \$2.9592
- 5) \$69.283
- 7) a) $x = -112.1$ 887.9 $P(X = x)$ 0.76 0.24 b) \$127.90 c) For many of these extended warranties bought by customers, they can expect to gain 127.9 dollars per warranty on average.
- 9) a) Yes, $\sum P(x) = 1$ and $0 \leq P(x) \leq 1$ b) 0.8 c) 0.9055 d) 0.82
- 11) 0.0729
- 13) 0.0156
- 15) a) 0.1728 b) 0.9021 c) 0.7292 d) 0.0979 e) 0.2708
- 17) 1.2583
- 19) a) 0.1445 b) 0.5722 c) 0.5722 d) 15 e) 2.7386
- 21) a) 0.2711 b) 0.7879 c) 0.5169 d) 0.4831 e) 0.2121 f) 1.6 g) 1.2133 h) 1.472
- 23) a) 0.1222 b) 0.9464 c) 0.1759 d) 0.9873
- 25) 0.5923
- 27) 0.3438
- 29) a) 0.2193 b) 0.0191 c) 0.9801 d) 0.0199
- 31) a) 0.6826 b) 0.087
- 33) 0.4072
- 35) 0.1238
- 37) 0.6328
- 39) 0.0498
- 41) a) 0.0668 b) 0.8912 c) 0.958 d) 0.042 e) 0.1088 f) 0.0039 g) 0.9835
- 43) a) 0.0185 b) 0.6672
- 45) 0.0245

5.8: Chapter 5 Formulas

Discrete Distribution Table: $0 \leq P(x_i) \leq 1$ $\sum P(x_i) = 1$	Discrete Distribution Mean: $\mu = \sum(x_i \cdot P(x_i))$
Discrete Distribution Variance: $\sigma^2 = \sum(x_i^2 \cdot P(x_i)) - \mu^2$	Discrete Distribution Standard Deviation: $\sigma = \sqrt{\sigma^2}$
Geometric Distribution: $P(X = x) = p \cdot q^{(x-1)}$, $x = 1, 2, 3, \dots$	Geometric Distribution Mean: $\mu = \frac{1}{p}$ Variance: $\sigma^2 = \frac{1-p}{p^2}$ Standard Deviation: $\sigma = \sqrt{\frac{1-p}{p^2}}$
Binomial Distribution: $P(X = x) = {}_n C_x \cdot p^x \cdot q^{(n-x)}$, $x = 0, 1, 2, \dots, n$	Binomial Distribution Mean: $\mu = n \cdot p$ Variance: $\sigma^2 = n \cdot p \cdot q$ Standard Deviation: $\sigma = \sqrt{n \cdot p \cdot q}$
Hypergeometric Distribution: $P(X = x) = \frac{{}_a C_x \cdot {}_{N-a} C_{n-x}}{{}_N C_n}$	$p = P(\text{success})$ $q = P(\text{failure}) = 1 - p$ $n = \text{sample size}$ $N = \text{population size}$
Unit Change for Poisson Distribution: New $\mu = \text{old } \mu \left(\frac{\text{new units}}{\text{old units}} \right)$	Poisson Distribution: $P(X = x) = \frac{e^{-\mu} \mu^x}{x!}$

This page titled [5.8: Chapter 5 Formulas](#) is shared under a [CC BY-SA 4.0](#) license and was authored, remixed, and/or curated by [Rachel Webb](#) via [source content](#) that was edited to the style and standards of the LibreTexts platform.

CHAPTER OVERVIEW

6: Continuous Probability Distributions

[6.1: Introductions](#)

[6.2: Uniform Distribution](#)

[6.3: Exponential Distribution](#)

[6.4: Normal Distribution](#)

[6.5: The Central Limit Theorem](#)

[6.6: Chapter 6 Exercises](#)

[6.7: Chapter 6 Formulas](#)

This page titled [6: Continuous Probability Distributions](#) is shared under a [CC BY-SA 4.0](#) license and was authored, remixed, and/or curated by [Rachel Webb](#) via [source content](#) that was edited to the style and standards of the LibreTexts platform.

6.1: Introductions

A continuous random variable (usually denoted as X) is a variable that has an infinite number of random values in an interval of numbers. There are many different types of continuous distributions. To be a valid continuous distribution the total area under the curve has to be equal to one and the function's y-values need to be positive.

For example, we may have a random variable that is uniformly distributed so we could use the [Uniform distribution](#) that looks like a rectangle. See Figure 6-1.

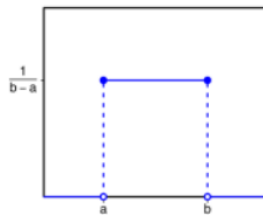


Figure 6-1

We may want to model the time it takes customer service to complete a call with the [exponential distribution](#). See Figure 6-2.

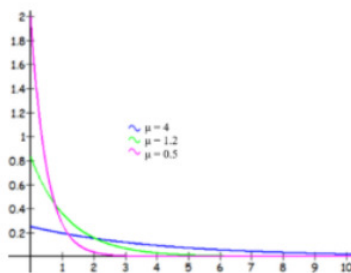


Figure 6-2

We may have standardized test scores that follow a bell-shaped curve like the [Gaussian \(Normal\) Distribution](#). See Figure 6-3.

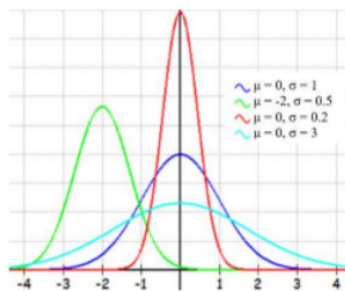


Figure 6-3

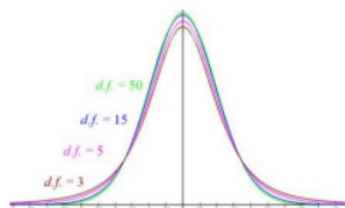


Figure 6-4

We may want to model the average time it takes for a component to be manufactured and use the bell-shaped Student t-distribution. See Figure 6-4.

This is just an introductory course so we are only going to cover a few distributions. If you want to explore more distributions, check out the chart by Larry Leemis at: <http://www.math.wm.edu/~leemis/chart/UDR/UDR.html>.

Very Important

The probability of an interval between two X values is equal to the area under the density curve between those two X values. For a discrete random variable, we can assign probabilities to each outcome. We cannot do this for a continuous random variable. The probability for a single X value for a continuous random variable is 0. Thus “ $=$ ” are equivalent to “ \leq ” and “ \geq .” In other words,

$$P(a \leq X \leq b) = P(a < X < b) = P(a \leq X < b) = P(a < X \leq b)$$

since there is no area of a line.

We now will look at some specific models that have been found useful in practice. Consider an experiment that consists of observing events in a certain time frame, such as buses arriving at a bus stop or telephone calls coming into a switchboard during a specified period. It may then be of interest to place a probability distribution on the actual time of occurrence. In this section, we will tell you which distribution to use in the question.

This page titled [6.1: Introductions](#) is shared under a [CC BY-SA 4.0](#) license and was authored, remixed, and/or curated by [Rachel Webb](#) via [source content](#) that was edited to the style and standards of the LibreTexts platform.

6.2: Uniform Distribution

The continuous uniform distribution models the probability that is the same on an interval from a to b . We use the following probability density function (PDF) to graph a straight line.

$$f(x) = \begin{cases} \frac{1}{b-a}, & \text{for } a \leq x \leq b \\ 0, & \text{elsewhere} \end{cases}$$

The probability is found by taking the area between two points within the rectangle formed from the x-axis, between the endpoints a and b , the length, and $f(x) = 1/(b-a)$, the height. When working with continuous distributions it is helpful to draw a picture of the distribution, then shade in the area of the probability that you are trying to find. See Figure 6-5.

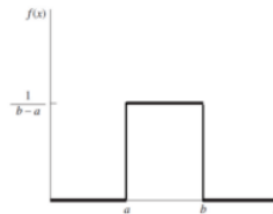


Figure 6-5

If a continuous random variable X has a uniform distribution with starting point a and ending point b then the distribution is denoted as $X \sim U(a, b)$.

Area of a Rectangle = length*height

To find the probability (area) under the uniform distribution, use the following formulas.

- $P(X \geq x) = P(X > x) = \left(\frac{1}{b-a}\right) \cdot (b - x)$
- $P(X \leq x) = P(X < x) = \left(\frac{1}{b-a}\right) \cdot (x - a)$
- $P(x_1 \leq X \leq x_2) = P(x_1 < X < x_2) = \left(\frac{1}{b-a}\right) \cdot (x_2 - x_1)$

The arrival time between trains at a train stop is uniformly distributed between 0 and 15 minutes. A student does not check the schedule and has arrived at the train stop.

- Compute the probability they wait more than 10 minutes.
- Compute the probability of waiting between 2 and 8 minutes.

Solution

a) First plug in the endpoints $a = 0$ and $b = 15$ into the PDF to get the height of the rectangle. The height is $f(x) = \frac{1}{15-0} = \frac{1}{15}$. Draw and label the distribution with the a , b and the height as in Figure 6-6. The probability is the area of the shaded rectangle $P(X > 10)$. Draw a vertical line at $x = 10$. We want x values that are greater than 10, so shade the area to the right of 10, stopping at $b = 15$. To find the area of the shaded rectangle in Figure 6-6, we can take the length times the height. The length would be $b - a = 15 - 10 = 5$ and the height is $f(x) = 1/15$.

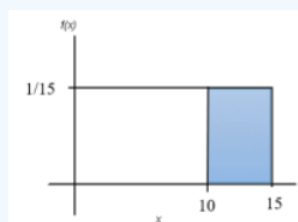


Figure 6-6

The area of the shaded rectangle is $5 \left(\frac{1}{15} \right) = \frac{1}{3} = 0.3333$ or $P(X > 10) = 0.3333$, which is the probability of waiting more than 10 minutes. Note that this would be the same if we asked $P(X \geq 10) = 0.3333$ since there is no area at the line $X = 10$.

b) The area will be length times height. Draw the picture and shade the rectangle between 2 and 8, see Figure 6-7. The length is $b - a = 8 - 2 = 6$ and the height is still $f(x) = 1/15$. $P(2 \leq X \leq 8) = 6 \left(\frac{1}{15} \right) = 0.4$

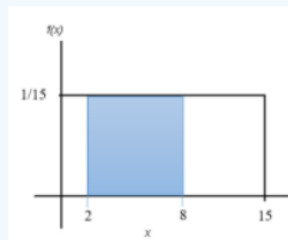


Figure 6-7

This page titled [6.2: Uniform Distribution](#) is shared under a [CC BY-SA 4.0](#) license and was authored, remixed, and/or curated by [Rachel Webb](#) via [source content](#) that was edited to the style and standards of the LibreTexts platform.

6.3: Exponential Distribution

An **exponential distribution** models a continuous random variable over time, area or space where the rate of occurrences decreases as X gets larger.

The probability density function (PDF) for an exponential curve is

$$f(x) = \begin{cases} \lambda e^{-x\lambda}, & \text{for } x \geq 0 \\ 0, & \text{elsewhere} \end{cases} \quad (6.3.1)$$

The value lambda λ is the fixed rate of occurrence and is equal to one divided by the mean, $\frac{1}{\mu}$.

If the mean is given in the problem then you write the PDF as $f(x) = \frac{1}{\mu} e^{-\frac{x}{\mu}}$, where e is a mathematical constant approximately equal to 2.71828, $x \geq 0$ and x is the value you are trying to find the probability for, μ is the mean number of a successes over an interval of time, space, volume, etc. The distribution is denoted as $X \sim \text{Exp}(\lambda)$.

Figure 6-8 gives example graphs for a mean of 5, 10 and 20. Note the curve hits the y-axis at $1/\mu$ and keeps going forever to the right with an asymptote at $y = 0$.

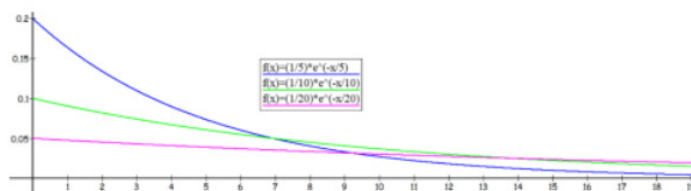


Figure 6-8

You would need integral calculus skills to find the area under this curve. To get around having the calculus requirement, we have three scenarios that we can use to find probability for an exponential distribution where we will not have to use the PDF.

To find the probability (area) under the exponential curve, use the following formulas.

- $P(X \geq x) = P(X > x) = e^{-x/\mu}$
- $P(X \leq x) = P(X < x) = 1 - e^{-x/\mu}$
- $P(x_1 \leq X \leq x_2) = P(x_1 < X < x_2) = e^{-(x_1/\mu)} - e^{-(x_2/\mu)}$

The time it takes to help a customer at the customer service desk is exponentially distributed with an average help time of 45 seconds. Find the probability that a customer waits less than two minutes.

Solution

We need to have the same units as the mean in the question so instead of finding $P(X < 2 \text{ minutes})$ we will use $P(X < 120 \text{ seconds})$. Also note that $<$ and \leq find the same probabilities so use the equation $P(X \leq x)$.

$$P(X < 120) = 1 - e^{-120/45} = 0.9305.$$

In Excel use `=EXPON.DIST(x,λ,TRUE)` `=EXPON.DIST(120,1/45,TRUE)` = 0.9305.

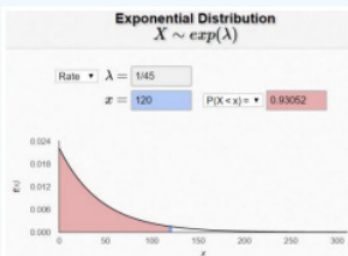


Figure 6-9

Alternatively, as shown in Figure 6-9, the following website will calculate the exponential probability:
<https://homepage.divms.uiowa.edu/~mbognar/applets/exp.html>.

This page titled [6.3: Exponential Distribution](#) is shared under a [CC BY-SA 4.0](#) license and was authored, remixed, and/or curated by [Rachel Webb](#) via [source content](#) that was edited to the style and standards of the LibreTexts platform.

6.4: Normal Distribution

Empirical Rule

Before looking at the process for finding the probabilities under a normal curve, recall the Empirical Rule that gives approximate values for areas under a bell-shaped distribution. The Empirical Rule, shown in Figure 6-10, is just an approximation for probability under any bell-shaped distribution and will only be used in this section to give you an idea of the size of the probability for different shaded areas. A more precise method for finding probabilities will be demonstrated using technology. Please do not use the empirical rule in the homework questions except for rough estimates.

The Empirical Rule (or 68-95-99.7 Rule)

In a bell-shaped distribution with mean μ and standard deviation σ ,

- Approximately 68% of the observations fall within one standard deviation (σ) of the mean μ .
- Approximately 95% of the observations fall within two standard deviations (2σ) of the mean μ .
- Approximately 99.7% of the observations fall within three standard deviations (3σ) of the mean μ .



Gauss

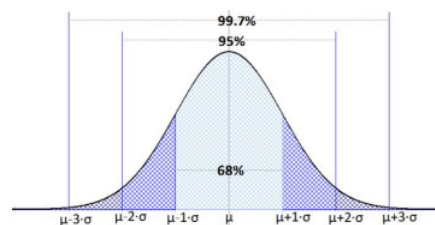


Figure 6-10

For now, we will be working with the most common bell-shaped probability distribution known as the normal distribution, also called the Gaussian distribution, named after the German mathematician Johann Carl Friedrich Gauss. See Figure 6-11.

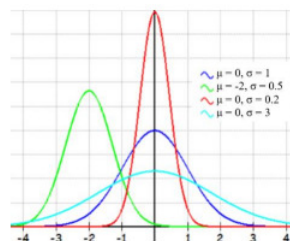


Figure 6-11

A normal distribution is a special type of distribution for a continuous random variable. Normal distributions are important in statistics because many situations in the real world have normal distributions.

Properties of the normal density curve:

1. Symmetric bell-shaped.
2. Unimodal (one mode).
3. Centered at the mean μ = median = mode.
4. The total area under the curve is equal to 1 or 100%.
5. The spread of a normal distribution is determined by the standard deviation σ . The larger σ is, the more spread out the normal curve is from the mean.
6. Follows the Empirical Rule.

If a continuous random variable X has a Normal distribution with mean μ and standard deviation σ then the distribution is denoted as $X \sim N(\mu, \sigma)$. Any x values from a Normal distribution can be transformed or standardized into a standard Normal distribution by taking the z-score of x .

The formula for the normal probability density function is: $f(x) = \frac{1}{\sigma\sqrt{2\pi}} e^{\left(-\frac{1}{2}\left(\frac{x-\mu}{\sigma}\right)^2\right)}$. We will not be using this formula.

The probability is found by using integral calculus to find the area under the PDF curve. Prior to the handheld calculators and personal computers, there were probability tables made to look up these areas. This text does not use probability tables and will instead rely on technology to compute the area under the curve.

Every time the mean or standard deviation changes the shape of the normal distribution changes. The center of the normal curve will be the mean and the spread of the normal curve gets wider as the standard deviation gets larger.

Figure 6-12 compares two normal distributions $N(0, 1)$ in green on the left and $N(7, 6)$ in blue on the right.

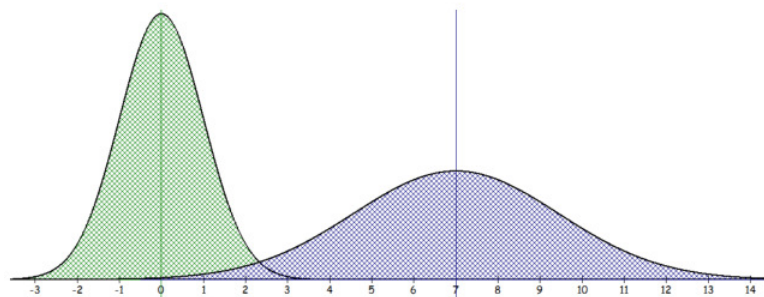


Figure 6-12

“So, what's odd about it?”

‘Nothing, it's Perfectly Normal.’”

(Adams, 2002)

6.4.1 Standard Normal Distribution

A normal distribution with mean $\mu = 0$ and standard deviation $\sigma = 1$ is called the **standard normal** distribution.

The letter Z is used exclusively to denote a variable that has a standard normal distribution and is written $Z \sim N(0, 1)$. A particular value of Z is denoted z (lower-case) and is referred to as a z-score.

Recall that a z-score is the number of standard deviations x is from the mean. Anytime you are asked to find a probability of Z use the standard normal distribution.

Standardizing and z-scores:

A z-score is the number of standard deviations an observation x is above or below the mean μ . If the z-score is negative, x is below the mean. If the z-score is positive, x is above the mean.

If x is an observation from a distribution that has mean μ and standard deviation σ , the standardized value of x (or z-score) is $z = \frac{x-\mu}{\sigma}$.

To find the area under the probability density curve involves calculus so we will need to rely on technology to find the area.

Compute the area under the standard normal distribution to the left of $z = 1.39$.

Solution

First, draw a bell-shaped distribution with 0 in the middle as shown in Figure 6-13. Mark 1.39 on the number line and shade to the left of $z = 1.39$.

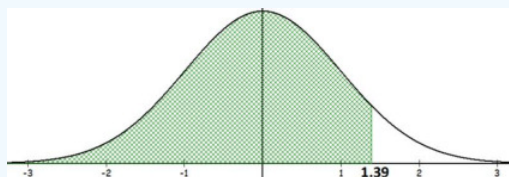



Figure 6-13

Note that the lower value of the shaded region is $-\infty$, which the TI-84 does not have. Instead we use a really small number in scientific notation $-1E99$ or $-1*1099$ (make sure you use the negative sign (-) not the minus – sign).

The normalcdf on the calculator needs the lower and upper value of the shaded area followed by the mean and standard deviation. (The TI-89 uses $-\infty$ for the lower boundary instead of $-1E99$.)

TI-84: Press [2nd] [DISTR] menu, select the normalcdf. Then type in the lower value, upper value, mean = 0, standard deviation = 1 to get $\text{normalcdf}(-1E99, 1.39, 0, 1) = 0.9177$, which is your answer. The area under the curve is equivalent to the probability of getting a z-score less than 1.39, or $P(Z < 1.39) = 0.9177$.



TI-89: Go to the [Apps] **Stat/List Editor**, then select F5 [DISTR]. This will get you a menu of probability distributions. Arrow down to **Normal Cdf** and press [ENTER]. Enter the values for the lower z value (z1), upper z value (z2), $\mu = 0$, and $\sigma = 1$ into each cell. Press [ENTER]. This is the cumulative distribution function and will return $P(z1 < Z < z2)$. For a left-tail area use a lower bound of negative infinity ($-\infty$), and for a right-tail area use an upper bound infinity (∞).



Excel: For Excel the program will only find the area to the left of a point. Therefore, if we want to find the area to the right of a point or between two points there will be one extra step. Use the formula $=\text{NORM.S.DIST}(1.39, \text{TRUE})$.

Compute the probability of getting a z-score between -1.37 and 1.68 .

Solution

$P(-1.37 \leq Z \leq 1.68)$ is the same as finding the area under the curve between -1.37 and 1.68 . First, draw a bell-shaped distribution and identify the two points on the number line. Shade the area between the two points as shown in Figure 6-14.

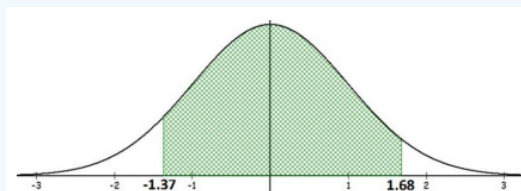


Figure 6-14

TI Calculator: $P(-1.37 \leq Z \leq 1.68) = \text{normalcdf}(-1.37, 1.68, 0, 1) = 0.8682$.

Excel: $P(-1.37 \leq Z \leq 1.68) = \text{NORM.S.DIST}(1.68, \text{TRUE}) - \text{NORM.S.DIST}(-1.37, \text{TRUE}) = 0.8682$.

Using Excel or TI-Calculator to Find Standard Normal Distribution

As you read through a problem look for some of the following key phrases in Figure 6-15. Once you find the phrase then match up to what sign you would use and then use the table to walk you through using Excel or the calculator. Note that we could also use the NORM.DIST function with $\mu = 0$ and $\sigma = 1$.




Standard Normal Distribution Finding a Probability		
$P(Z \leq z)$ or $P(Z < z)$	$P(z_1 < Z < z_2)$ or $P(z_1 \leq Z \leq z_2)$	$P(Z \geq z)$ or $P(Z > z)$
Is less than or equal to	Between	Is greater than or equal to
Is at most		Is at least
Is not greater than		Is not less than
Within		More than
Less than		Greater than
Below		Above
Lower than		Higher than
Shorter than		Longer than
Smaller than		Bigger than
Decreased		Increased
Reduced		Larger
		
$=\text{NORM.S.DIST}(z, \text{true})$ $\text{normalcdf}(-1\text{E}99, z, 0, 1)$	$=\text{NORM.S.DIST}(z_2, \text{true}) - \text{NORM.S.DIST}(z_1, \text{true})$ $\text{normalcdf}(z_1, z_2, 0, 1)$	$=1 - \text{NORM.S.DIST}(z, \text{true})$ $\text{normalcdf}(z, 1\text{E}99, 0, 1)$

Figure 6-15

Compute the area under the standard normal distribution that is 2 standard deviations from the mean.

Solution

A rough estimate using the Empirical Rule would be 0.95, however since this is not just any bell-shaped distribution, we will find the $P(-2 \leq Z \leq 2)$. Draw and shade the curve as in Figure 6-16.

TI Calculator: $P(-2 \leq Z \leq 2) = \text{normalcdf}(-2, 2, 0, 1) = 0.9545$.

Excel: $P(-2 \leq Z \leq 2) = \text{NORM.S.DIST}(2, \text{TRUE}) - \text{NORM.S.DIST}(-2, \text{TRUE}) = 0.9545$.

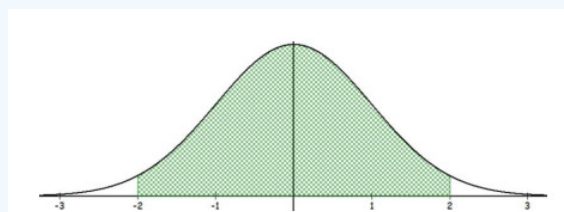


Figure 6-16

Compute the area to the right of $z = 1$.

Solution

Draw and shade the curve to find $P(Z > 1)$. See Figure 6-17.

TI Calculator: $P(Z > 1) = \text{normalcdf}(1, 1\text{E}99, 0, 1) = 0.1587$.

Excel: $P(Z > 1) = 1 - \text{NORM.S.DIST}(1, \text{TRUE}) = 0.1587$.

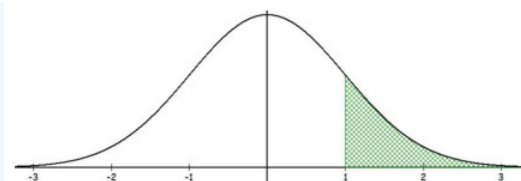


Figure 6-17

6.4.2 Applications of the Normal Distribution

Many variables are nearly normal, but none are exactly normal. Thus, the normal distribution, while not perfect for any single problem, is very useful for a variety of problems. Variables such as SAT scores and heights of United States adults closely follow the normal distribution. Note that the Excel function NORM.S.DIST is for a standard normal when $\mu = 0$ and $\sigma = 1$

Using Excel or TI-Calculator to Find Normal Distribution Probabilities

Normal Distribution Finding a Probability		
$P(X \leq x)$ or $P(X < x)$	$P(x_1 < X < x_2)$ or $P(x_1 \leq X \leq x_2)$	$P(X \geq x)$ or $P(X > x)$
Is less than or equal to	Between	Is greater than or equal to
Is at most		Is at least
Is not greater than		Is not less than
Within		More than
Less than		Greater than
Below		Above
Lower than		Higher than
Shorter than		Longer than
Smaller than		Bigger than
Decreased		Increased
Reduced		Larger
<code>=NORM.DIST(x,μ,σ,true)</code>	<code>=NORM.DIST(x2,μ,σ,true)-NORM.DIST(x1,μ,σ,true)</code>	<code>=1-NORM.DIST(x,μ,σ,true)</code>
<code>=normalcdf(-1E99,x,μ,σ)</code>	<code>=normalcdf(x1,x2,μ,σ)</code>	<code>=normalcdf(x,1E99,μ,σ)</code>

Figure 6-18

TI-84: Press [2nd] [DISTR]. This will show a menu of probability distributions. Arrow down to **2:normalcdf**(and press [ENTER]. This puts normalcdf(on the home screen. Enter the values for the lower x value (x_1), upper x value (x_2), μ , and σ with a comma between each. Press [ENTER]. This is the cumulative distribution function and will return $P(x_1 < X < x_2)$. For example, to find $P(80 < X < 110)$ when the mean is 100 and the standard deviation is 20, you should have normalcdf(80,110,100,20). If you leave out the μ and σ , then the default is the standard normal distribution. For a left-tail area use a lower bound of $-1E99$ (negative infinity), (press [2nd] [EE] to get E) and for a right-tail area use an upper bound of $1E99$ (infinity). For example, to find $P(Z < -1.37)$ you should have normalcdf(-1E99,-1.37).

TI-89: Go to the [Apps] **Stat/List Editor**, select F5 [DISTR]. This will show a menu of probability distributions. Arrow down to **Normal Cdf** and press [ENTER]. Enter the values for the lower x value (x_1), upper x value (x_2), μ , and σ into each cell. Press [ENTER]. This is the cumulative distribution function and will return $P(x_1 < X < x_2)$. For example, to find $P(80 < X < 110)$ when the mean is 100 and the standard deviation is 20, you should have in the following order 80, 110, 100, 20. If you have a z-score, use $\mu = 0$ and $\sigma = 1$, then you will get a standard normal distribution. For a left-tail area use a lower bound of negative infinity ($-\infty$), and for a right-tail area use an upper bound infinity (∞).

"The Hitchhiker's Guide to the Galaxy offers this definition of the word "Infinite." Infinite: Bigger than the biggest thing ever and then some. Much bigger than that in fact, really amazingly immense, a totally stunning size, "wow, that's big," time. Infinity is just so big that by comparison, bigness itself looks really titchy. Gigantic multiplied by colossal multiplied by staggeringly huge is the sort of concept we're trying to get across here."

(Adams, 2002)

Let X be the height of 15-year old boys in the United States. Studies show that the heights of 15-year old boys in the United States are normally distributed with average height 67 inches and a standard deviation of 2.5 inches. Compute the probability of randomly selecting one 15-year old boy who is 69.5 inches or taller.

Solution

Find $P(X \geq 69.5)$ where $X \sim N(67, 2.5)$. Draw the curve and label the mean, then shade the area to the right of 69.5.

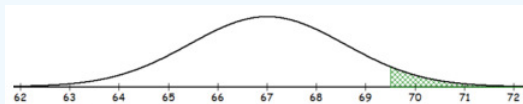


Figure 6-19

First, standardize the value of $x = 69.5$ using the z-score formula $z = \frac{x - \mu}{\sigma}$, where $\mu = 67$ and $\sigma = 2.5$. The standardized value of $x = 69.5$ is $z = \frac{69.5 - 67}{2.5} = 1$.

Now using the standard normal distribution and shading the area to the right of $z = 1$ gives:

TI calculator: $P(Z \geq 1) = \text{normalcdf}(1, 1E99, 0, 1) = 0.158655$.

Excel: $P(Z \geq 1) = 1 - \text{NORM.S.DIST}(1, \text{TRUE}) = 0.158655$.

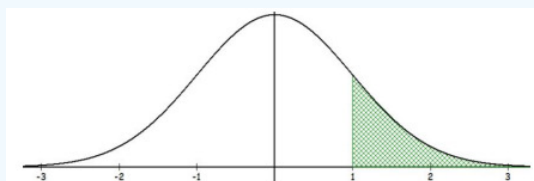


Figure 6-20

We could also use the Empirical rule to approximate $P(X \geq 69.5)$ because this is the same as being more than one standard deviation above the mean. Do you see why this makes sense?

If we were to add a standard deviation to 67 we would get 69.5. Thus $P(X \geq 69.5) \approx 0.16$, which is close to our 15.87% using the standard normal distribution. The Empirical rule only gives an approximate value though.

The process of standardizing the X value was started so that we could use the standard normal distribution table to look up probabilities instead of using calculus. With technology, you no longer have to standardize first, we can just find $P(X \geq 69.5)$.

TI calculator: $P(X \geq 69.5) = \text{normalcdf}(69.5, 1E99, 67, 2.5) \approx 0.158655$ (The TI-89 use ∞ for the upper boundary instead of 1E99).

Excel: $P(X \geq 69.5) = 1 - \text{NORM.DIST}(69.5, 67, 2.5, \text{TRUE}) = 0.158655$.

Note that in Excel you can do this in two cells. First find the area to the left of 69.5 by using $=\text{NORM.DIST}(69.5, 67, 2.5, \text{TRUE})$ and the value 0.8413 is returned. In a new cell then subtract this value from 1 to get the answer 0.1587.

	A	B	C
1			
2		$=\text{NORM.DIST}(69.5, 67, 2.5, \text{TRUE})$	$=1 - B2$

In 2009, the average SAT mathematics score was 501, with a standard deviation of 116. If we randomly selected a student from that year who took the SAT, what is the probability of getting a SAT mathematics score between 400 and 600?

Solution

Find $P(400 \leq X \leq 600)$ using the TI calculator $\text{normalcdf}(400, 600, 501, 116) = 0.6113$, which is also close to our results above. In Excel we can use the following formula $=\text{NORM.DIST}(600, 501, 116, \text{TRUE}) - \text{NORM.DIST}(400, 501, 116, \text{TRUE})$. Note that the right-hand endpoint goes in first. If you put the 400 in first you would get a negative answer, and probabilities are never negative. You can also do each piece separately in two cells, then in a third cell subtract the smaller area from the larger area.

A nice feature of this section is that the problems will say that the distribution is normally distributed, unlike the discrete distributions where you have to look for certain characteristics. However, when handling real data, you may have to know how to detect whether the data is normally distributed. One way to see if your variable is approximately normally distributed is by looking at a histogram, or we can use a normal probability plot.

6.4.3 Normal Probability Plot

A normal quantile plot, also called a normal probability plot, is a graph that is useful in assessing normality. A normal quantile plot plots the variable x against each of the x values corresponding z -score. It is not practical to make a normal quantile plot by hand.

Interpreting a normal quantile plot to see if a distribution is approximately normally distributed.

1. All of the points should lie roughly on a straight line $y = x$.
2. There should be no S pattern present.
3. Outliers appear as points that are far away from the overall pattern of the plot.

Here are two examples of histograms with their corresponding quantile plots. Note that as the distribution becomes closer to a normal distribution the dots on the quantile plot will be in a straighter line. Figures 6-21 is the histogram and figure 6-22 is the corresponding normal probability plot. Note the histogram is skewed to the left and dots do not line up on the $y = x$ line. Figures 6-23 and Figure 6-24 represent a sample that is approximately normally distributed. Note that the dots still do not line up perfectly on the line $y = x$, but they are close to the line.

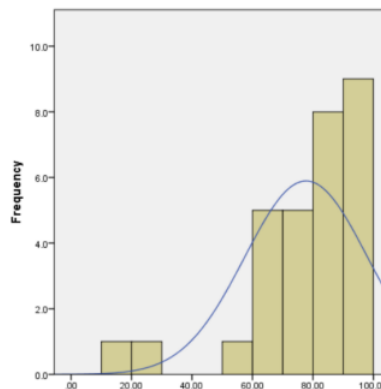


Figure 6-21

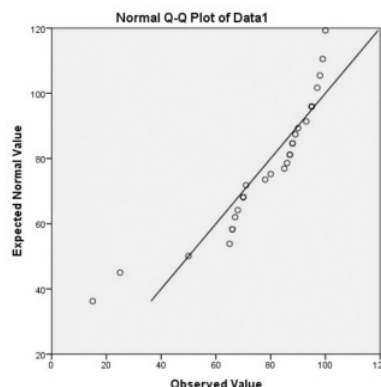


Figure 6-22

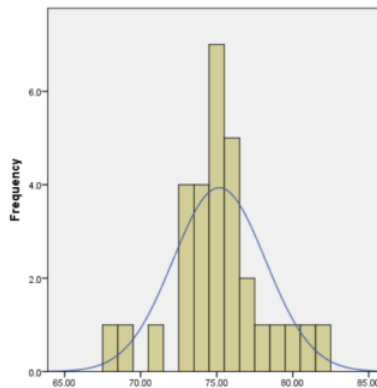


Figure 6-23

Figure 6-24

6.4.4 Finding Percentiles for a Normal Distribution

Sometimes you will be given an area or probability and have to find the associated random variable x or z -score. For example, the probability below a point on the normal distribution is a percentile. If we find that the $P(Z < 1.645) = \text{NORM.S.DIST}(1.645, \text{TRUE}) = 0.950015$, that tells us that about 95% of z -scores are below 1.645. In other words, the z -score of 1.645 is the 95th percentile.

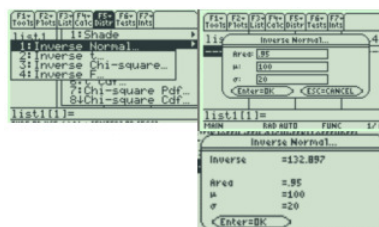
We can use technology to find z -score given a percentile. Most technology has built in commands that will find the probability below a point. If you want to find the area above a point, or between two points, then find the area below a point by using the complement rule and keep in mind that the total area under the curve is 1 and the total area below the mean is 0.5.

If x is an observation from a distribution that has mean μ and standard deviation σ , the standardized value of x (or z -score) is $z = \frac{x - \mu}{\sigma}$.

If you have a z -score and want to convert back to x , you can do so by solving the above equation for x , which yields $x = z\sigma + \mu$.

TI-84: Press [2nd] [DISTR]. This will get you a menu of probability distributions. Press 3 or arrow down to **3:invNorm(** and press [ENTER]. This puts invNorm(on the home screen. Enter the area to the left of the x value, μ , and σ with a comma between each. Press [ENTER]. This will return the percentile for the x value. For example, to find the 95th percentile when the mean is 100 and the standard deviation is 20, you should have invNorm(0.95,100,20). If you leave out the μ and σ , then the default is the **z -score** for the standard normal distribution

TI-89: Go to the [Apps] **Stat/List Editor**, then select F5 [DISTR]. This will get you a menu of probability distributions. Arrow down to **Inverse Normal** and press [ENTER]. Enter the area to the left of the x value, μ , and σ into each cell. Press [ENTER]. This will return the percentile for the x value. For example, to find the 95th percentile when the mean is 100 and the standard deviation is 20, you should enter 0.95, 100, 20.



If you use $\mu = 0$ and $\sigma = 1$, then the default is the **z -score** for the standard normal distribution.

Compute the z-score that corresponds to the 25th percentile.

Solution

First, draw the standard normal curve with zero in the middle as in Figure 6-25. The 25th percentile would have to be below the mean since the mean = median = 50th percentile for a bell-shaped distribution.

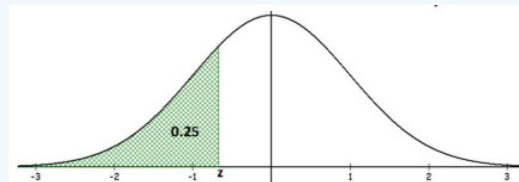


Figure 6-25

```

1:QUIT DRAW
2:normalpdf(
3:normalcdf(
4:invNorm(
5:invT(
6:tpdf(
7:tcdf(
8:x^2pdf(
invNorm(.25,0,1)
-.6744897495

```

It is okay if you do not have this drawing to scale, but drawing a picture similar to Figure 6-25 will give you a good idea if your answer is correct. For instance, by just looking at this graph we can see that the answer for the z-score will need to be a negative number.

TI Calculator: $z = \text{invNorm}(0.25, 0, 1) = -0.6745$.

Excel: $z = \text{NORM.S.INV}(0.25) = -0.6745$.

The $z = -0.6745$ represents the 25th percentile.

Compute the z-score that corresponds to the area of 0.4066 between zero and z shown in Figure 6-26.

Solution

First notice that this picture does not quite match the calculator or Excel, which will only find for a left-tail area. The value of zero is the median on a standard normal distribution, so 50% of the area lies to the left of $z = 0$. This means that the total area to the left of the unknown z-score would be $0.5 + 0.4066 = 0.9066$.

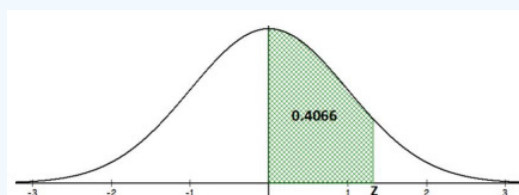


Figure 6-26

TI Calculator: $z = \text{invNorm}(0.9066) = 1.32$.

Excel: $z = \text{NORM.S.INV}(0.9066) = 1.32$.

Using Excel or TI-Calculator for the Percentile of a Normal Distribution

Note that the NORM.S.INV function is for a standard normal when $\mu = 0$ and $\sigma = 1$.


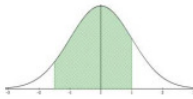
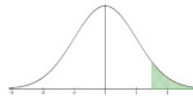
Normal Distribution Finding an x-value Given an Area or Probability		
$P(X \leq x)$ or $P(X < x)$	$P(x_1 < X < x_2)$ or $P(x_1 \leq X \leq x_2)$	$P(X \geq x)$ or $P(X > x)$
Lower	Between	Upper
Bottom		Top
Below		Above
Reduced		More than
Less than		Greater than
Lower than		Larger
Shorter than		Higher than
Smaller than		Longer than
Decreased		Bigger than
		Increased
		
$=\text{NORM.INV}(\text{area}, \mu, \sigma)$	$x_1 = \text{NORM.INV}((1-\text{area})/2, \mu, \sigma)$ $x_2 = \text{NORM.INV}(1-(1-\text{area})/2, \mu, \sigma)$	$=\text{NORM.INV}(1-\text{area}, \mu, \sigma)$
$=\text{invNorm}(\text{area}, \mu, \sigma)$	$x_1 = \text{invNorm}((1-\text{area})/2, \mu, \sigma)$ $x_2 = \text{invNorm}(1-(1-\text{area})/2, \mu, \sigma)$	$=\text{invNorm}(1-\text{area}, \mu, \sigma)$

Figure 6-27

In 2009, the average SAT mathematics score was 501, with a standard deviation of 116. Find the SAT score that is for the top 10% of students taking the exam that year.

Solution

Draw the distribution curve and shade the top 10% as shown in Figure 6- 28. The area below the unknown x value in Figure 6- 28 is $1 - 0.10 = 0.90$.

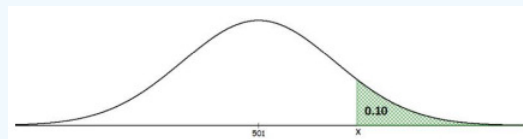


Figure 6-28

TI Calculator: $\text{invNorm}(0.9, 501, 116) = 649.66$.

Excel: $=\text{NORM.INV}(0.9, 501, 116) = 649.66$.

A student that scored above 649.66 would be in the top 10%, also known as the 90th percentile.

We could have also found the z-score that corresponds to the top 10%. Then use the z-score formula to find the xvalue. Using Excel $=\text{NORM.S.INV}(0.9) = 1.2816$. Then use the formula $x = z\sigma + \mu = 1.2816 \cdot 116 + 501 = 649.67$. This is using a rounded z-score so the answer is slightly off, but close.

Note: It is common practice to round z-scores to two decimal places. This is left over from using probability tables that only went out to two decimal places. If you use a rounded z-score in other calculations then keep in mind that you will get a larger rounding error.

If the average price of a new one family home is \$246,300 with a standard deviation of \$15,000, find the minimum and maximum prices of the houses that a contractor will build to satisfy the middle 98% of the market. Assume that the variable is normally distributed.

Solution

First, draw the curve and shade the middle area of 0.98, see Figure 6-29. We need to get the area to the left of the x_1 value. Take the complement $1 - 0.98 = 0.02$, then split this area between both tails.

The lower tail area for x_1 would have $0.02/2 = 0.01$. The upper value of x_2 will have a left tail area of 0.99.

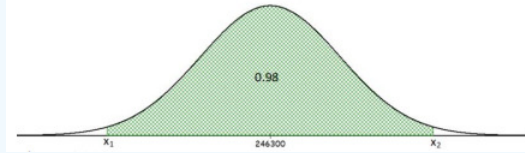


Figure 6-29

On the calculator use, $\text{invNorm}(0.01, 246300, 15000)$ and you get a minimum price of \$211404.78 and use $\text{invNorm}(0.99, 246300, 15000)$ and you get a maximum price of \$281195.22.

In Excel you would have to do this in two separate cells $=\text{NORM.INV}(0.01, 246300, 15000) = \$211,404.78$ and $=\text{NORM.INV}(0.99, 246300, 15000) = \$281,195.22$.

This page titled [6.4: Normal Distribution](#) is shared under a [CC BY-SA 4.0](#) license and was authored, remixed, and/or curated by [Rachel Webb](#) via [source content](#) that was edited to the style and standards of the LibreTexts platform.

6.5: The Central Limit Theorem

The sample mean, denoted \bar{x} , is the average of a sample of a variable X . The sample mean is an estimate of the population mean μ . Every sample has a sample mean and these sample means differ (depending on the sample). Thus, before a sample is selected \bar{x} is a variable, in fact, if the sample is a random sample then \bar{x} is a random variable. For this reason, we can think of the “distribution of \bar{x} ,” called the “Sampling Distribution of \bar{x} ,” as the theoretical histogram constructed from the sample averages of all possible samples of size n . Definition: Word

Mean and Standard Deviation of a Sample Mean

Let \bar{x} be the mean of a random sample of size n from a population having mean μ and standard deviation σ , then

The mean of the sample means = $\mu_{\bar{x}} = \mu$.

The standard deviation (standard error) of the sample means = $\sigma_{\bar{x}} = \frac{\sigma}{\sqrt{n}}$.

This says that the mean of the sample means is the same as the population mean. The standard deviation of the sample means is the population standard deviation divided by the square root of the sample size. This is called the **sampling distribution** of the mean.

Let X be the height of men in the United States. Studies show that the heights of 15-year old boys in the United States are normally distributed with average height 67 inches and a standard deviation of 2.5 inches. A random experiment consists of choosing 16 15-year old boys at random. Compute the mean and standard deviation of \bar{x} , that is, the mean and standard deviation for the average height of a random sample of 16 boys.

Solution

The mean of the sample means is the same as the population mean $\mu_{\bar{x}} = 67$.

The standard deviation in the sample means is the population standard deviation divided by the square root of the sample size, $\sigma_{\bar{x}} = \frac{\sigma}{\sqrt{n}} = \frac{2.5}{\sqrt{16}} = 0.625$.

Notice that the mean of a sample means is always the same as the mean of the population, but the standard deviation is smaller. See Figure 6-30.

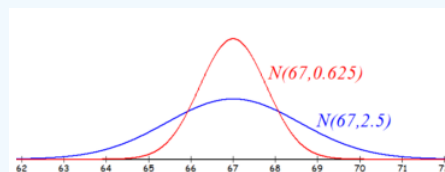
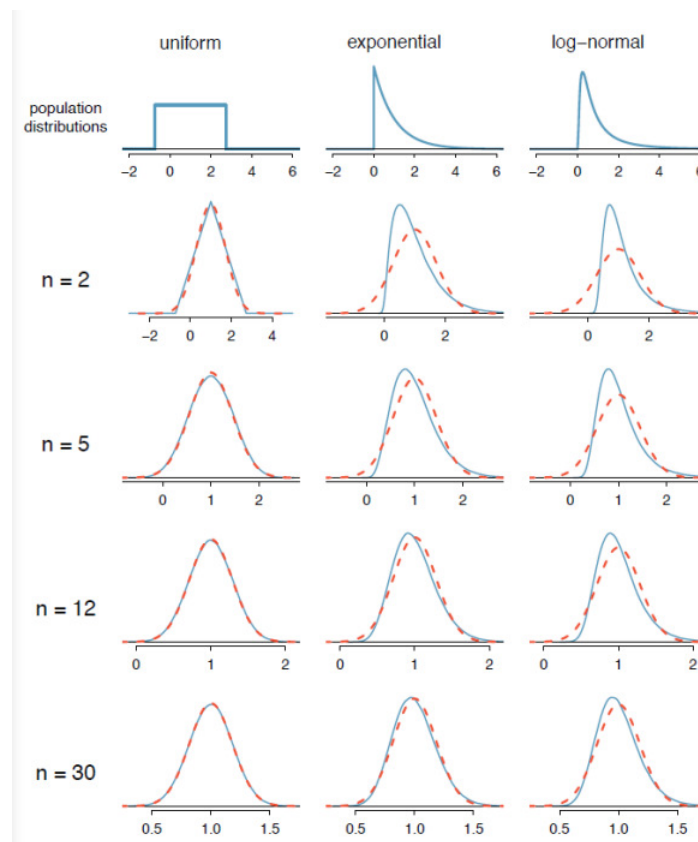


Figure 6-30

Sampling Distribution of a Sample Mean

If a population is normally distributed $N(\mu, \sigma)$, then the sample mean \bar{x} of n independent observations is normally distributed as $N\left(\mu, \frac{\sigma}{\sqrt{n}}\right)$.

Figure 6-31 shows three population distributions and the corresponding sampling distributions for sample sizes of 2, 5, 12 and 30. Notice as the sample size gets larger, the sampling distribution gets closer to the dashed red line of the normal distribution. **Video explanation of this process:** https://youtu.be/IsCc_pS3O28.



Retrieved from [OpenIntroStatistics](https://openintrostatistics.org/).

Figure 6-31

The Central Limit Theorem establishes that in some situations the distribution of the sample statistic will take on a normal distribution, even when the population is not normally distributed. This allows us to use the normal distribution to make inferences from samples to populations.

The Central Limit Theorem guarantees that the distribution of the sample mean will be normally distributed when the sample size is large (usually 30 or higher) no matter what shape the population distribution is.

Finding Probabilities Using the Central Limit Theorem (CLT)

If we are finding the probability of a sample mean and have a sample size of 30 or more, or the population was normally distributed, then we can use the normal distribution to find the probability that the sample mean is below, above or between two values using the CLT.

Watch this video on using this applet for the Central Limit Theorem, and then take some time to play with the applet to get a sense of the difference between the distribution of the population, the distribution of a sample and the sampling distribution.

Watch the video on how to use the applet: <https://youtu.be/aIPvgiXyBMI>.

Try the applet on your own. Applet: http://onlinestatbook.com/stat_sim/sampling_dist/index.html.

The population of midterm scores for all students taking a PSU Business Statistics course has a known standard deviation of 5.27. The mean of the population is 18.07 and the median of the population is 19. A sample of 25 was taken and the sample mean was 18.07 and we want to know what the sampling distribution for the mean looks like. Figure 6-32 shows 3 graphs using the [Sampling Distribution Applet](#).

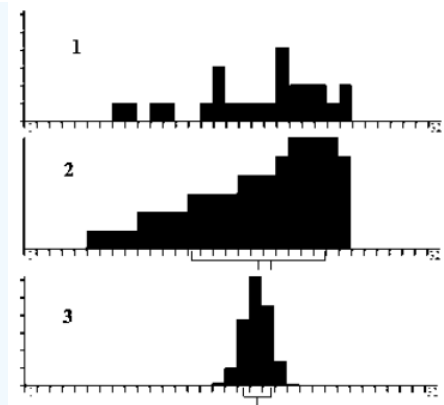


Figure 6-32

- What is the mean and standard deviation of the sampling distribution?
- Would you expect midterm exam scores to be skewed or bell-shaped?
- Which of these graphs in Figure 6-32 correspond to the distribution of the population, distribution of a single sample and the sampling distribution of the mean?
- Compute the probability that for next term's class they have a sample mean of more than 20.

Solution

a) By the Central Limit Theorem (CLT) the mean of the sampling distribution $\mu_{\bar{x}}$ equals the mean of the population which was given as $\mu=18.07$. The standard deviation of the sampling distribution by the CLT would be the population standard deviation divided by the square root of the sample size $\sigma_{\bar{x}} = \frac{\sigma}{\sqrt{n}} = \frac{5.27}{\sqrt{25}} = 1.054$

b) The population mean = 18.07 is smaller than the median = 19 therefore the distribution is negatively skewed, the mean is pulled in the direction of the outliers.

c) Using the [Sampling Distribution Applet](#) and the CLT, the sampling distribution will be bell-shaped therefore, graph 3 has to be the sampling distribution.

Graphs 1 & 2 in Figure 6-32 are both negatively skewed. A single sample of 25 should look similar to the entire population, but we would expect only 25 items and not every score possible would be received from the 25 students.

Graph 1 in Figure 6-32 fits this description and therefore the graph of the distribution of a single sample (which is not the same thing as the sampling distribution) is graph 1.

This leaves graph 2 as the distribution of the population. Figure 6-33 is a picture of the applet modeling the exam scores. Note the top picture is the population distribution, the second graph is simulating a single sample drawn and the bottom picture is a graph of all the sample means for each sample. This last graph is the sampling distribution of the means.

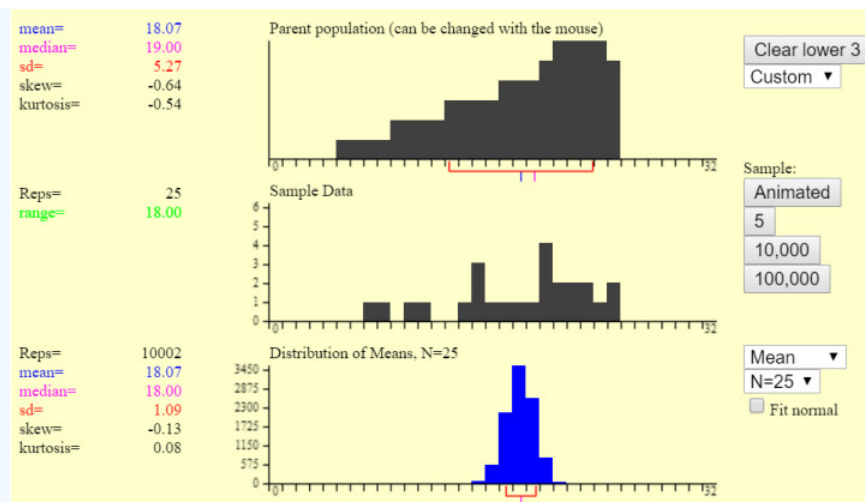


Figure 6-33

d) The $P(\bar{X} > 20)$ would be normally distributed with a mean $\mu_{\bar{x}} = 18.07$ with a standard deviation of $\sigma_{\bar{x}} = \frac{\sigma}{\sqrt{n}} = \frac{5.27}{\sqrt{25}} = 1.054$

Draw and shade the sampling distribution curve.

This calculator can be used to draw and shade the sampling distribution: <http://homepage.divms.uiowa.edu/~mbogner/applets/normal.html>, filling in the mean μ , standard deviation $\frac{\sigma}{\sqrt{n}}$ and x-value (in this case the sample mean) will find the probability. See Figure 6-34.

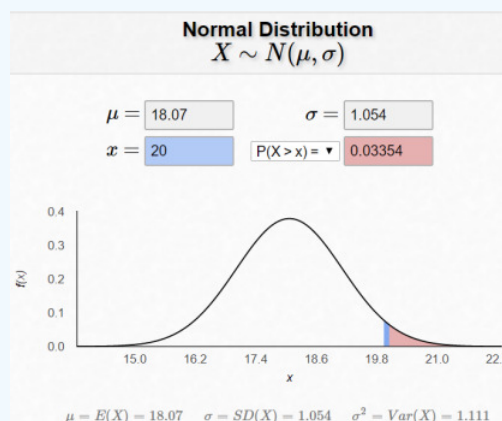


Figure 6-34

TI Calculator: $\text{normalcdf}(20, 1E99, 18.07, 5.27/\sqrt{25}) = 0.0335$.

Excel: $P(\bar{X} > 20) = 1 - \text{NORM.DIST}(20, 18.07, 5.27/\text{SQRT}(25), \text{TRUE}) = 0.0335$.

Let X be the height of 15-year old boys in the United States. Studies show that the heights of 15-year old boys in the United States are normally distributed with average height of 67 inches and a standard deviation of 2.5 inches. A random experiment consists of randomly choosing sixteen 15-year old boys. Compute the probability that the mean height of those sampled is 69.5 inches or taller.

Solution

The sample mean $\mu_{\bar{x}}$ is approximately $N(67, 0.625)$. $P(\bar{X} \geq 69.5) = P\left(\frac{\bar{x} - 67}{0.625} \geq \frac{69.5 - 67}{0.625}\right) = P(Z \geq 4) \approx 0.00003$, using the calculator, be careful with the scientific notation. This is a very small probability.

```
normalcdf(69.5,1E99,67,2.5/sqrt(16))
3.168603459E-5
```

This should make sense because one would think that the likelihood of randomly selecting 16 boys that have an average height of 5'9.5" would be slim.

Figure 6-35 shows the density curves showing the shaded areas of $P(X \geq 69.5)$ and $P(\mu_{\bar{x}} \geq 69.5)$.

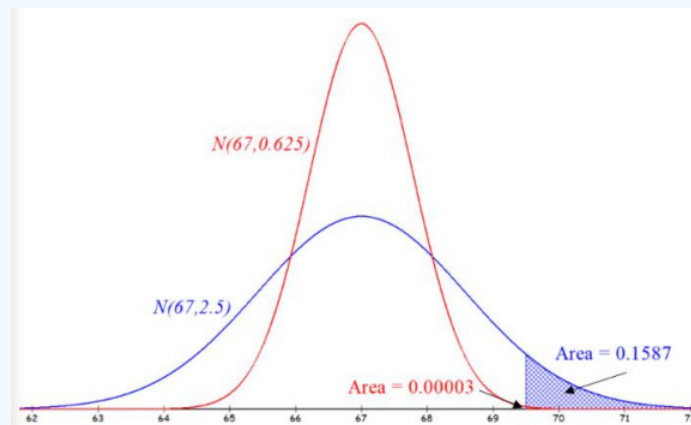


Figure 6-35

The sampling distribution has a much smaller spread (standard deviation) and hence less area to the right of 69.5.

In general, the Central Limit Theorem questions will use the same method as previous sections, however you will use a standard deviation of $\frac{\sigma}{\sqrt{n}}$ and a z-score of $z = \frac{\bar{x} - \mu}{\left(\frac{\sigma}{\sqrt{n}}\right)}$.

The average teacher's salary in Connecticut (ranked first among states) is \$57,337. Suppose that the distribution of salaries is normally distributed with a standard deviation of \$7,500.

- What is the probability that a randomly selected teacher makes less than \$55,000 per year?
- If we sample 10 teachers' salaries, what is the probability that the sample mean is less than \$55,000?
- If we sample 100 teachers' salaries, what is the probability that the sample mean is less than \$55,000?

Solution

a) Find $P(X < 55000)$, since we are only looking at one person use $z = \frac{x - \mu}{\sigma}$. If we were asked to standardize the salary, $z = \frac{55000 - 57337}{7500} = -0.3116$, however we can use technology and skip this step.

Use the normalcdf(-1E99, 55000, 57337, 7500) (the TI-89 use $-\infty$ for the lower boundary instead of -1E99) and you get the probability of 0.3777. The $P(X < 55000) = P(Z < -0.3116) = 0.3777$.

Note that we are not using the CLT since we are not finding the probability of an average for a group of people, just the probability for one person.

```
normalcdf(-1E99,55000,57337,7500)
.3776723318
```

b) Find $P(\mu_{\bar{x}} < 55000)$, but we are looking at the probability of a mean for 10 teachers, so use $z = \frac{\bar{x} - \mu}{\left(\frac{\sigma}{\sqrt{n}}\right)}$. Standardize the salary, $z = \frac{55000 - 57337}{\left(\frac{7500}{\sqrt{10}}\right)} = -0.9853657189$, use your calculator to get $P(\mu_{\bar{x}} < 55000) = P(Z < -0.9853657189) = 0.1622$.

You do not need the extra step of finding the z-score first. Instead you can use `normalcdf(-1E99, 55000, 57337, 7500/√10) = 0.1622`.

```
(55000-57337)/(7500/√(10))
-0.9853657189
normalcdf(-1E99,
-0.9853657189,0,1)
.162222231
```

c) Find $P(\mu_{\bar{x}} < 55000)$, but we are looking at the probability of a mean for 100 teachers, so use $z = \frac{\bar{x} - \mu}{\left(\frac{\sigma}{\sqrt{n}}\right)}$. Standardize the salary, $z = \frac{55000 - 57337}{\left(\frac{7500}{\sqrt{100}}\right)} = -3.116$ use your calculator `normalcdf(-1E99, 55000, 57337, 7500/√100)` to get $P(\mu_{\bar{x}} < 55000) = P(Z < -3.116) = 0.0009167$.

```
(55000-57337)/(7500/√(100))
-3.116
normalcdf(-1E99,
-3.116,0,1)
9.166789234E-4
```

As the sample size increase, the probability of seeing a sample mean of less than \$55,000 is getting smaller.

When you have a z-score that is less than -3 or greater than 3 we would call this a rare event or outlier. We will use this same process in inferential statistics in chapter 8.

This page titled [6.5: The Central Limit Theorem](#) is shared under a [CC BY-SA 4.0](#) license and was authored, remixed, and/or curated by [Rachel Webb](#) via [source content](#) that was edited to the style and standards of the LibreTexts platform.

6.6: Chapter 6 Exercises

? Chapter 6 Exercises

1. The waiting time for a bus is uniformly distributed between 0 and 15 minutes. What is the probability that a person has to wait at most 8 minutes for a bus?
2. The distance a golf ball travels when hit by a driver club is uniformly distributed between 200 and 300 feet. What is the probability that the ball hit by a driver club with travel at least 280 feet?
3. The time it takes me to wash the dishes is uniformly distributed between 7 minutes and 16 minutes. What is the probability that washing dishes tonight will take me between 9 and 14 minutes?
4. Bus wait times are uniformly distributed between 5 minutes and 18 minutes. Compute the probability that a randomly selected bus wait time will be between 9 and 13 minutes.
5. The lengths of an instructor's classes have a continuous uniform distribution between 60 and 90 minutes. If one such class is randomly selected, find the probability that the class length is less than 70.7 minutes.
6. The time it takes for students to finish an exam is uniformly distributed between 1 to 2 hours. What is the probability that a randomly selected students finishes their exam in at least 95 minutes?
7. Suppose the commuter trains of a public transit system have a waiting time during peak rush hour periods of fifteen minutes. Assume the waiting times are uniformly distributed. Find the probability of waiting between 7 and 8 minutes.
8. Suppose that elementary students' ages are uniformly distributed from 5 to 13 years old. Compute the probability that a randomly selected elementary student will be between ages 7.07 and 10.33 years old.
9. The amount of gasoline sold daily at a service station is uniformly distributed with a minimum of 2,000 gallons and a maximum of 5,000 gallons.
 - a) Compute the probability that the service station will sell at least 4,000 gallons?
 - b) Compute the probability that daily sales will fall between 2,500 and 3,000 gallons?
 - c) What is the probability that the station will sell exactly 2,500 gallons?
10. The sojourn time (waiting time plus service time) for customers waiting at a movie theater box office is exponentially distributed with a mean of 4 minutes. Find the following.
 - a) The probability that the sojourn time will be more than 5 minutes.
 - b) The probability that the sojourn time will be less than 5 minutes.
 - c) The probability that the sojourn time will be at most 5 minutes.
11. Suppose that the distance, in miles, that people are willing to commute to work is exponentially distributed with mean 24 miles. What is the probability that people are willing to commute at most 12 miles to work?
12. On average, a pair of running shoes lasts 13 months if used every day. The length of time running shoes last is exponentially distributed. What is the probability that a pair of running shoes last less than 6 months if used every day?
13. The lifetime of a light emitting diode (LED) lightbulb is exponentially distributed with an average lifetime of 5,000 hours. Find the following.
 - a) The probability that the LED lightbulb will last more than 3,500 hours.
 - b) The probability that the LED lightbulb will last less than 4,000 hours.
 - c) The probability that the LED lightbulb will last between 3,500 and 4,500 hours.
14. The number of days ahead travelers purchase their airline tickets can be modeled by an exponential distribution with the average amount of time equal to 50 days.
 - a) Compute the probability that a traveler purchases a ticket no more than 85 days ahead of time.
 - b) Compute the probability that a traveler purchases a ticket more than 90 days ahead of time.

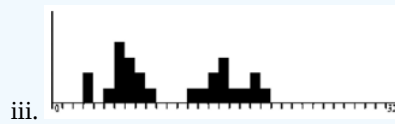
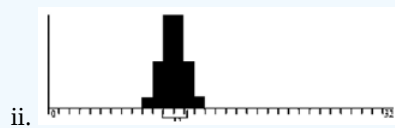
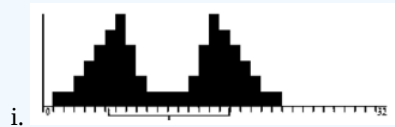
- c) Compute the probability that a traveler purchases a ticket within 85 and 90 days ahead of the flight date.
15. The average time it takes a salesperson to finish a sale on the phone is 5 minutes and is exponentially distributed.
- a) Compute the probability that less than 10 minutes pass before a sale is completed.
- b) Compute the probability that more than 15 minutes pass before a sale is completed.
- c) Compute the probability that between 10 and 15 minutes pass before a sale is completed.
16. A brand of battery is advertised to last 3 years. Assume the advertised claim is true and that the time the battery lasts is exponentially distributed. What is the probability that one of these batteries will last within 15 months of the advertised average?
17. For a standard normal distribution, find the following probabilities.
- a) $P(Z > -2.06)$
- b) $P(-2.83 < Z < 0.21)$
- c) $P(Z < 1.58)$ d) $P(Z \geq 1.69)$
- e) $P(Z < -2.82)$
- f) $P(Z > 2.14)$
- g) $P(1.97 \leq Z \leq 2.93)$
- h) $P(Z \leq -0.51)$
18. Compute the following probabilities where $Z \sim N(0,1)$.
- a) $P(Z < 1.57)$
- b) $P(Z > -1.24)$
- c) $P(-1.96 \leq Z \leq 1.96)$
- d) $P(Z \leq 3)$
- e) $P(1.31 < Z < 2.15)$
- f) $P(Z \geq 1.8)$
19. Compute the following probabilities where $Z \sim N(0,1)$.
- a) $P(Z \leq -2.03)$
- b) $P(Z > 1.58)$
- c) $P(-1.645 \leq Z \leq 1.645)$
- d) $P(Z < 2)$
- e) $P(-2.38 < Z < -1.12)$
- f) $P(Z \geq -1.75)$
20. Compute the area under the standard normal distribution to the left of $z = -1.05$.
21. Compute the area under the standard normal distribution to the left of $z = -0.69$.
22. Compute the area under the standard normal distribution to the right of $z = 2.08$.
23. Compute the area under the standard normal distribution to the right of $z = 1.22$.
24. Compute the area under the standard normal distribution between $z = -0.29$ and $z = 0.14$.
25. Compute the area under the standard normal distribution between $z = -2.97$ and $z = -2.14$.
26. Compute the area under the curve of the standard normal distribution that is within 1.328 standard deviations from either side of the mean.
27. Compute the area under the standard normal distribution to the left of $z = 0.85$.

28. Compute the z-score that has an area of 0.85 to the left of the z-score.
29. For the standard normal distribution, find the z-score that gives the 29th percentile.
30. For the standard normal distribution, find the z-score that gives the 75th percentile.
31. Compute the two z-scores that give the middle 99% of the standard normal distribution.
32. Compute the two z-scores that give the middle 95% of the standard normal distribution.
33. Find the IQR for the standard normal distribution.
34. The length of a human pregnancy is normally distributed with a mean of 272 days with a standard deviation of 9 days (Bhat & Kushtagi, 2006).
- Compute the probability that a pregnancy lasts longer than 281 days.
 - Compute the probability that a pregnancy lasts less than 250 days.
 - How many days would a pregnancy last for the shortest 20%?
35. Arm span is the physical measurement of the length of an individual's arms from fingertip to fingertip. A man's arm span is approximately normally distributed with mean of 70 inches with a standard deviation of 4.5 inches.
- Compute the probability that a randomly selected man has an arm span below 65 inches.
 - Compute the probability that a randomly selected man has an arm span between 60 and 72 inches.
 - Compute the length in inches of the 99th percentile for a man's arm span.
36. The size of fish is very important to commercial fishing. A study conducted in 2012 found the length of Atlantic cod caught in nets in Karlskrona to have a mean of 49.9 cm and a standard deviation of 3.74 cm (Ovegard, Berndt & Lunneryd, 2012). Assume the length of fish is normally distributed.
- Compute the probability that a cod is longer than 55 cm.
 - What is the length in cm of the longest 15% of Atlantic cod in this area?
37. A dishwasher has a mean life of 12 years with an estimated standard deviation of 1.25 years ("Appliance life expectancy," 2013). Assume the life of a dishwasher is normally distributed.
- Compute the probability that a dishwasher will last less than 10 years.
 - Compute the probability that a dishwasher will last between 8 and 10 years.
 - Compute the number of years that the bottom 25% of dishwashers would last.
38. The price of a computer is normally distributed with a mean of \$1400 and a standard deviation of \$60.
- What is the probability that a buyer paid less than \$1220?
 - What is the probability that a buyer paid between \$1400 and \$1580?
 - What is the probability that a buyer paid more than \$1520?
 - What is the probability that a buyer paid between \$1340 and \$1460?
 - What is the probability that a buyer paid between \$1400 and \$1520?
 - What is the probability that a buyer paid between \$1400 and \$1460?
39. Heights of 10-year-old children, regardless of sex, closely follow a normal distribution with mean 55.7 inches and standard deviation 6.8 inches.
- Compute the probability that a randomly chosen 10-year-old child is less than 50.4 inches.
 - Compute the probability that a randomly chosen 10-year-old child is more than 59.2 inches.
 - What proportion of 10-year-old children are between 50.4 and 61.5 inches tall?
 - Compute the 85th percentile for 10-year-old children.

40. The mean yearly rainfall in Sydney, Australia, is about 137 mm and the standard deviation is about 69 mm ("Annual maximums of," 2013). Assume rainfall is normally distributed. How many yearly mm of rainfall would there be in the top 25%?
41. The mean daily milk production of a herd of cows is assumed to be normally distributed with a mean of 33 liters, and standard deviation of 10.3 liters. Compute the probability that daily production is more than 40.9 liters?
42. The amount of time to complete a physical activity in a PE class is normally distributed with a mean of 33.2 seconds and a standard deviation of 5.8 seconds. Round answers to 4 decimal places.
- a) What is the probability that a randomly chosen student completes the activity in less than 28.9 seconds?
 - b) What is the probability that a randomly chosen student completes the activity in more than 37.2 seconds?
 - c) What proportion of students take between 28.5 and 37.3 seconds to complete the activity? d) 70% of all students finish the activity in less than ____ seconds.
43. A study was conducted on students from a particular high school over the last 8 years. The following information was found regarding standardized tests used for college admittance. Scores on the SAT test are normally distributed with a mean of 1023 and a standard deviation of 204. Scores on the ACT test are normally distributed with a mean of 19.3 and a standard deviation of 5.2. It is assumed that the two tests measure the same aptitude, but use different scales.
- a) Compute the SAT score that is the 50-percentile.
 - b) Compute the ACT score that is the 50-percentile.
 - c) If a student gets an SAT score of 1288, find their equivalent ACT score. Go out at least 5 decimal places between steps.
44. Delivery times for shipments from a central warehouse are exponentially distributed with a mean of 1.73 days (note that times are measured continuously, not just in number of days). The standard deviation of an exponential distribution is equal to the mean of 1.73 days. A random sample of 108 shipments are selected and their shipping times are observed. Use the Central Limit Theorem to find the probability that the mean shipping time for the 108 shipments is less than 1.53 days.
45. The MAX light rail in Portland, OR has a waiting time that is uniformly distributed with a mean waiting time of 5 minutes with a standard deviation of 2.9 minutes. A random sample of 40 wait times was selected. What is the probability the sample mean wait time is under 4 minutes?
46. The average credit card debt back in 2016 was \$16,061 with a standard deviation of \$4100. What is the probability that a sample of 35 people owe a mean of more than \$18,000?
47. A certain brand of electric bulbs has an average life of 300 hours with a standard deviation of 45. A random sample of 100 bulbs is tested. What is the probability that the sample mean will be less than 295?
48. Assume that the birth weights of babies are normally distributed with a mean of 3363 grams and a standard deviation of 563 grams.
- a) Compute the probability that a randomly selected baby weighs between 3200 grams and 3600 grams.
 - b) Compute the probability that the average weight of 30 randomly selected babies is between 3200 grams and 3600 grams.
 - c) Why did the probability increase?
49. If the Central Limit Theorem is applicable, this means that the sampling distribution of a _____ population can be treated as normal since the _____ is _____.
- a) symmetrical; variance; large
 - b) positively skewed; sample size; small
 - c) negatively skewed; standard deviation; large
 - d) non-normal; mean; large
 - e) negatively skewed; sample size; large

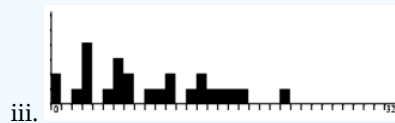
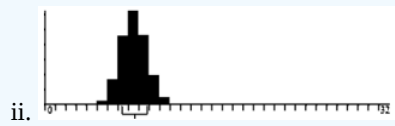

50. Match the following 3 graphs with the distribution of the population, the distribution of the sample, and the sampling distribution.

- a) Distribution of the Population
- b) Distribution of the Sample
- c) Sampling Distribution




51. Match the following 3 graphs with the distribution of the population, the distribution of the sample, and the sampling distribution.

- a) Distribution of the Population
- b) Distribution of the Sample
- c) Sampling Distribution

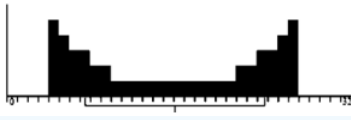


52. Match the following 3 graphs with the distribution of the population, the distribution of the sample, and the sampling distribution.

- a) Distribution of the Population
- b) Distribution of the Sample
- c) Sampling Distribution

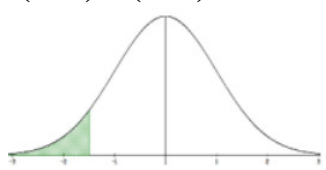
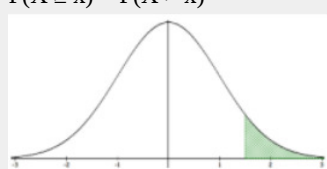
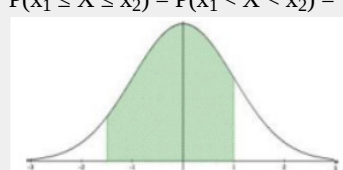
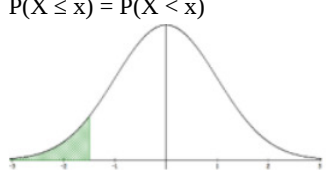
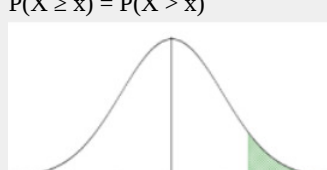
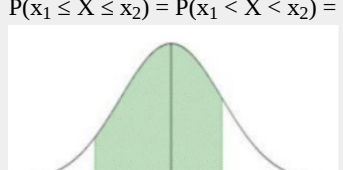


iii.



This page titled [6.6: Chapter 6 Exercises](#) is shared under a [CC BY-SA 4.0](#) license and was authored, remixed, and/or curated by [Rachel Webb](#) via [source content](#) that was edited to the style and standards of the LibreTexts platform.

6.7: Chapter 6 Formulas

<p>Uniform Distribution</p> $f(x) = \frac{1}{b-a}, \text{ for } a \leq x \leq b$ <ul style="list-style-type: none"> $P(X \geq x) = P(X > x) = \left(\frac{1}{b-a}\right) \cdot (b-x)$ $P(X \leq x) = P(X < x) = \left(\frac{1}{b-a}\right) \cdot (x-a)$ $P(x_1 \leq X \leq x_2) = P(x_1 < X < x_2) = \left(\frac{1}{b-a}\right) \cdot (x_2 - x_1)$ 	<p>Exponential Distribution</p> $f(x) = \frac{1}{\mu} e^{\left(-\frac{x}{\mu}\right)}, \text{ for } x \geq 0$ <ul style="list-style-type: none"> $P(X \geq x) = P(X > x) = e^{-x/\mu}$ $P(X \leq x) = P(X < x) = 1 - e^{-x/\mu}$ $P(x_1 \leq X \leq x_2) = P(x_1 < X < x_2) = e^{\left(-\frac{x_1}{\mu}\right)} - e^{\left(-\frac{x_2}{\mu}\right)}$
<p>Standard Normal Distribution</p> $\mu = 0, \sigma = 1$ $z\text{-score: } z = \frac{x-\mu}{\sigma}$ $x = z\sigma + \mu$	<p>Central Limit Theorem</p> $Z\text{-score: } z = \frac{\bar{x}-\mu}{\left(\frac{\sigma}{\sqrt{n}}\right)}$
<p>Normal Distribution Probabilities:</p>	<p>$P(X \leq x) = P(X < x)$</p>  <p>Excel: =NORM.DIST(x,μ,σ,true) TI-84: normalcdf(-1E99,x,μ,σ)</p>
<p>$P(X \geq x) = P(X > x)$</p>  <p>Excel: =1-NORM.DIST(x,μ,σ,true) TI-84: normalcdf(x,1E99,μ,σ)</p>	<p>$P(x_1 \leq X \leq x_2) = P(x_1 < X < x_2) =$</p>  <p>Excel: =NORM.DIST(x2,μ,σ,true)-NORM.DIST(x1,μ,σ,true) TI-84: normalcdf(x1,x2,μ,σ)</p>
<p>Percentiles for Normal Distribution:</p>	<p>$P(X \leq x) = P(X < x)$</p>  <p>Excel: =NORM.INV(area,μ,σ) TI-84: invNorm(area,μ,σ)</p>
<p>$P(X \geq x) = P(X > x)$</p>  <p>Excel: =NORM.INV(1-area,μ,σ) TI-84: invNorm(1-area,μ,σ)</p>	<p>$P(x_1 \leq X \leq x_2) = P(x_1 < X < x_2) =$</p>  <p>Excel: $x_1 = \text{NORM.INV}((1-\text{area})/2, \mu, \sigma)$ $x_2 = \text{NORM.INV}(1-((1-\text{area})/2), \mu, \sigma)$ TI-84: $x_1 = \text{invNorm}((1-\text{area})/2, \mu, \sigma)$ $x_2 = \text{invNorm}(1-((1-\text{area})/2), \mu, \sigma)$</p>

This page titled [6.7: Chapter 6 Formulas](#) is shared under a [CC BY-SA 4.0](#) license and was authored, remixed, and/or curated by [Rachel Webb](#) via [source content](#) that was edited to the style and standards of the LibreTexts platform.

CHAPTER OVERVIEW

7: Confidence Intervals for One Population

- [7.1: Introduction](#)
- [7.2: Confidence Interval for a Proportion](#)
- [7.3: Sample Size Calculation for a Proportion](#)
- [7.4: Z-Interval for a Mean](#)
- [7.5: Interpreting a Confidence Interval](#)
- [7.6: Sample Size for a Mean](#)
- [7.7: t-Interval for a Mean](#)
- [7.8: Chapter 7 Exercises](#)
- [7.9: Chapter 7 Formulas](#)

This page titled [7: Confidence Intervals for One Population](#) is shared under a [CC BY-SA 4.0](#) license and was authored, remixed, and/or curated by [Rachel Webb](#) via [source content](#) that was edited to the style and standards of the LibreTexts platform.

7.1: Introduction

Statistical inference is used to draw conclusions about a population based on a sample. We can use the probability distributions and Central Limit Theorem to understand what is going on in the population. The population can be difficult to measure so we take a sample from that population and use descriptive statistics to measure the sample. We can then use those sample statistics to infer back to what is happening in our population. Although there are many types of statistical inference tools, we will only cover some of the more common techniques.

Distinguishing between a population and a sample is important in statistics. We frequently use a representative sample to generalize a population.

- A statistic is any characteristic or measure from a sample. One example is the sample mean \bar{x} .
- A parameter is any characteristic or measure from a population. One example is the population mean μ .
- A point estimate for a parameter (a characteristic from a population) is a statistic (a characteristic from a sample). For example, the point estimate for the population mean μ is the sample mean \bar{x} . The point estimate for the population standard deviation σ is the sample standard deviation s , etc.
- A $100(1 - \alpha)\%$ confidence interval for a population parameter (μ , σ , etc.) represents that the proportion $100(1 - \alpha)\%$ of times the true value of the population parameter is contained within the interval.
- The confidence level (or level of confidence) is $1 - \alpha$. The common percentages used for confidence interval levels are 90%, 95%, and 99%. Some corresponding values of alpha are: 90% would be $\alpha = 0.10 = 10\%$, 95% would be $\alpha = 0.05 = 5\%$, and 99% would be $\alpha = 0.01 = 1\%$. In this context, α , “alpha,” represents the complement of the confidence level, and its definition will be explained in the next chapter.

When a symmetric distribution, such as a normal distribution, is used, confidence intervals are *always* of the form: *point estimate* \pm *margin of error*

The margin of error defines the “radius” of the interval necessary to obtain the desired confidence level. The margin of error depends on the desired confidence level. Higher levels of confidence come at a cost, namely larger margins of error, which means our estimate will be less accurate.

The margin of error formula will usually include a value from a sampling distribution called the critical value. The critical value measures the number of standard errors to be added and subtracted in order to achieve your desired confidence level based on the α level chosen.

For large sample sizes, the sampling distribution of a mean is normal. We can use the standard normal distribution values that would give the middle 95% of the distribution when $\alpha = 0.05$ since $100(1 - 0.05)\% = 95\%$.

The two critical values $-z_{\alpha/2}$ and $+z_{\alpha/2}$, as shown Figure 7-1. Note: in the notation $z_{\alpha/2}$ the $\alpha/2$ represents the area in each of the tails.

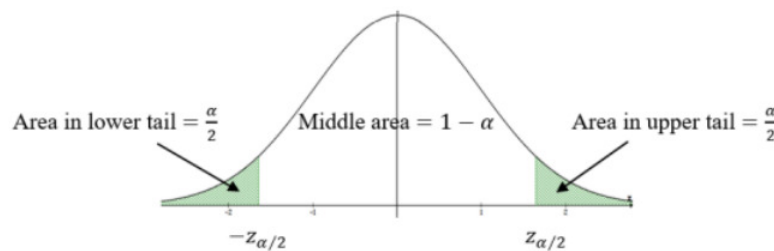


Figure 7-1

Assumption: If the sample size is small ($n < 30$), the population we are sampling from must be normal. If the sample size is “large” ($n \geq 30$), the Central Limit Theorem guarantees that the sampling distribution will be normally distributed no matter how the population distribution is distributed.

This page titled [7.1: Introduction](#) is shared under a [CC BY-SA 4.0](#) license and was authored, remixed, and/or curated by [Rachel Webb](#) via [source content](#) that was edited to the style and standards of the LibreTexts platform.

7.2: Confidence Interval for a Proportion

Suppose you want to estimate the population proportion, p . As an example, an administrator may want to know what proportion of students at your school smoke. An insurance company may want to know what proportion of accidents are caused by teenage drivers who do not have a drivers' education class. Every time we collect data from a new sample, we would expect the estimate of the proportion to change slightly. If you were to find a range of values over an interval this would give a better estimate of where the population proportion falls. This range of values that would better predict the true population parameter is called an interval estimate or confidence interval.

The sample proportion \hat{p} is the point estimate for p , the standard error (the standard deviation of the sampling distribution) of \hat{p} is $\sqrt{\left(\frac{\hat{p}\hat{q}}{n}\right)}$, the $z_{\alpha/2}$ is the critical value using the standard normal distribution, and the margin of error $E = Z_{\alpha/2} \sqrt{\left(\frac{\hat{p}\hat{q}}{n}\right)}$. Some textbooks use π instead of p for the population proportion, and \bar{p} (pronounced "p-bar") instead of \hat{p} for sample proportion.

Choose a simple random sample of size n from a population having unknown population proportion p . The $100(1 - \alpha)\%$ confidence interval estimate for p is given by $\hat{p} \pm Z_{\alpha/2} \sqrt{\left(\frac{\hat{p}\hat{q}}{n}\right)}$.

Where $\hat{p} = \frac{x}{n} = \frac{\text{\# of successes}}{\text{\# of trials}}$ (read as "p hat") is the sample proportion, and $\hat{q} = 1 - \hat{p}$ is the complement.

The above confidence interval can be expressed as an inequality or an interval of values.

$$\hat{p} - z_{\alpha/2} \sqrt{\left(\frac{\hat{p}\hat{q}}{n}\right)} < p < \hat{p} + z_{\alpha/2} \sqrt{\left(\frac{\hat{p}\hat{q}}{n}\right)} \quad \text{or} \quad \left(\hat{p} - z_{\alpha/2} \sqrt{\left(\frac{\hat{p}\hat{q}}{n}\right)}, \hat{p} + z_{\alpha/2} \sqrt{\left(\frac{\hat{p}\hat{q}}{n}\right)}\right)$$

Assumption: $n \cdot \hat{p} \geq 10$ and $n \cdot \hat{q} \geq 10$

*This assumption **must be** addressed before using these statistical inferences.

This formula is derived from the normal approximation of the binomial distribution, therefore the same conditions for a binomial need to be met, namely a set sample size of independent trials, two outcomes that have the same probability for each trial.

Steps for Calculating a Confidence Interval

1. State the random variable and the parameter in words.

x = number of successes

p = proportion of successes

2. State and check the assumptions for confidence interval.

a. A simple random sample of size n is taken.

b. The conditions for the binomial distribution are satisfied.

c. To determine the sampling distribution of \hat{p} , you need to show that $n \cdot \hat{p} \geq 10$ and $n \cdot \hat{q} \geq 10$, where $\hat{q} = 1 - \hat{p}$. If this requirement is true, then the sampling distribution of \hat{p} is well approximated by a normal curve. (In reality, this is not really true, since the correct assumption deals with p . However, in a confidence interval you do not know p , so you must use \hat{p} . This means you just need to show that $x \geq 10$ and $n - x \geq 10$.)

3. Compute the sample statistic $\hat{p} = \frac{x}{n}$ and the confidence interval $\hat{p} \pm z_{\alpha/2} \sqrt{\left(\frac{\hat{p}\hat{q}}{n}\right)}$.

4. Statistical Interpretation: In general, this looks like:

"We can be $(1 - \alpha) \cdot 100\%$ confident that the interval

$$\hat{p} - z_{\alpha/2} \sqrt{\left(\frac{\hat{p}\hat{q}}{n}\right)} < p < \hat{p} + z_{\alpha/2} \sqrt{\left(\frac{\hat{p}\hat{q}}{n}\right)} \quad (7.2.1)$$

Real World Interpretation: This is where you state what interval contains the true proportion.

A concern was raised in Australia that the percentage of deaths of indigenous Australian prisoners was higher than the percent of deaths of nonindigenous Australian prisoners, which is 0.27%. A sample of six years (1990- 1995) of data was collected, and it was found that out of 14,495 indigenous Australian prisoners, 51 died (“Indigenous deaths in,” 1996). Find a 95% confidence interval for the proportion of indigenous Australian prisoners who died.

Solution

1. State the random variable and the parameter in words.

x = number of indigenous Australian prisoners who die

p = proportion of indigenous Australian prisoners who die

2. State and check the assumptions for a confidence interval.

a. A simple random sample of 14,495 indigenous Australian prisoners was taken. However, the sample was not a random sample, since it was data from six years. It is the numbers for all prisoners in these six years, but the six years were not picked at random. Unless there was something special about the six years that were chosen, the sample is probably a representative sample. This assumption is probably met.

b. There are 14,495 prisoners in this case. The prisoners are all indigenous Australians, so you are not mixing indigenous Australian with nonindigenous Australian prisoners. There are only two outcomes, the prisoner either dies or does not. The chance that one prisoner dies over another may not be constant, but if you consider all prisoners the same, then it may be close to the same probability. Thus, the assumptions for the binomial distribution are satisfied.

c. In this case, $x = 51$ and $n - x = 14,495 - 51 = 14,444$. Both are greater than or equal to 10. The sampling distribution for \hat{p} is a normal distribution.

3. Compute the sample statistic and the confidence interval.

Sample Proportion: $\hat{p} = \frac{x}{n} = \frac{51}{14495} = .003518$,

Critical Value: $z_{\alpha/2} = 1.96$, since 95% confidence level

Margin of Error $E = z_{\alpha/2} \sqrt{\left(\frac{\hat{p} \cdot \hat{q}}{n}\right)} = 1.96 \sqrt{\left(\frac{0.003518(1-0.003518)}{14495}\right)} = 0.000964$

Confidence Interval: $\hat{p} - E < p < \hat{p} + E$

$0.003518 - 0.000964 < p < 0.003518 + 0.000964$

$0.002554 < p < 0.004482$ or (0.002554, 0.004482)

4. Statistical Interpretation: We can be 95% confident that $0.002554 < p < 0.004482$ contains the proportion of all indigenous Australian prisoners who died.

5. Real World Interpretation: We can be 95% confident that the percentage of all indigenous Australian prisoners who died is between 0.26% and 0.45%.

Using Technology

Excel has no built-in shortcut key for finding a confidence interval for a proportion, but if you type in the following formulas shown below you can make your own Excel calculator where you just change the highlighted cells and all the numbers below will update with the relevant information.

Type in the following be cognizant of cell reference numbers.

	A	B
1	Confidence Interval for a Proportion	
2	x	51
3	n	14495
4	C-Level	0.95
5	z	=NORM.S.INV((1-B4)/2)
6	p-bar	=B2/B3
7	q-bar	=1-B6
8	E	=B5*SQRT(B6*B7/B3)
9	Lower boundary	=B6-B8
10	Upper boundary	=B6+B8

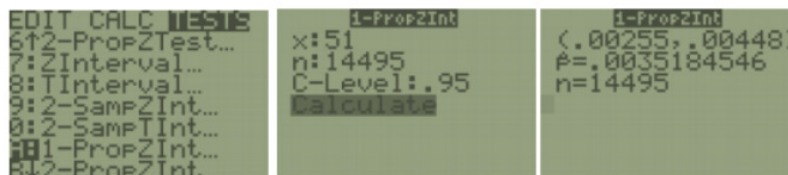
You get the following answers where the last two numbers are your confidence interval limits.

Confidence Interval for a Proportion	
x	51
n	14495
C-Level	0.95
z	1.9600
p-bar	0.003518
q-bar	0.996482
E	0.000964
Lower boundary	0.002555
Upper boundary	0.004482

Make sure to put your answer in interval notation (0.002555, 0.004482) or $0.26\% < p < 0.45\%$.

You can also do the calculations for the confidence interval with the TI Calculator.

TI-84: Press the [STAT] key, arrow over to the [TESTS] menu, arrow down to the [A:1-PropZInt] option and press the [ENTER] key. Then type in the values for x, sample size and confidence level, arrow down to [Calculate] and press the [ENTER] key. The calculator returns the answer in interval notation. Note: Sometimes you are not given the x value but a percentage instead. To find the x to use in the calculator, multiply \hat{p} by the sample size and round off to the nearest integer. The calculator will give you an error message if you put in a decimal for x or n. For example, if $\hat{p} = 0.22$ and $n = 124$ then $0.22 \cdot 124 = 27.28$, so use $x = 27$.



TI-89: Go to the [Apps] Stat/List Editor, then press [2nd] then F7 [Ints], then select **5: 1-PropZInt**. Type in the values for x, sample size and confidence level, and press the [ENTER] key. The calculator returns the answer in interval notation. Note: sometimes you are not given the x value but a percentage instead. To find the x value to use in the calculator, multiply \hat{p} by the sample size and round off to the nearest integer. The calculator will give you an error message if you put in a decimal for x or n. For example, if $\hat{p} = 0.22$ and $n = 124$ then $0.22 \cdot 124 = 27.28$, so use $x = 27$.

A researcher studying the effects of income levels on new mothers breastfeeding their infants hypothesizes that those countries where the income level is lower has a higher rate of infants breastfeeding than higher income countries. It is known that in Germany, considered a high-income country by the World Bank, 22% of all babies are breastfed. In Tajikistan, considered a low-income country by the World Bank, researchers found that in a random sample of 500 new mothers that 125 were breastfeeding their infants. Find a 90% confidence interval of the proportion of mothers in low-income countries who breastfeed their infants.

Solution

1. State your random variable and the parameter in words.

x = The number of new mothers who breastfeed in a low-income country.

p = The proportion of new mothers who breastfeed in a low-income country.

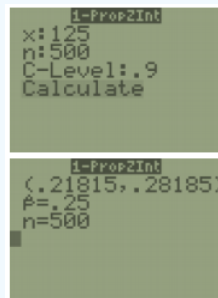
2. State and check the assumptions for a confidence interval.

a. A simple random sample of 500 breastfeeding habits of new mothers in a low-income country was taken as was stated in the problem.

b. There were 500 women in the study. The women are considered identical, though they probably have some differences. There are only two outcomes - either the woman breastfeeds her baby or she does not. The probability of a woman breastfeeding her baby is probably not the same for each woman, but it is probably not that different for each woman. The assumptions for the binomial distribution are satisfied.

c. $x = 125$ and $n - x = 500 - 125 = 375$ and both are greater than or equal to 10, so the sampling distribution of \hat{p} is well approximated by a normal curve.

3. Compute the sample statistic and the confidence interval. On the TI-83/84: Go into the STAT menu. Move over to TESTS and choose 1- PropZInt, then press Calculate.



4. Statistical Interpretation: We are 90% confident that the interval $0.219 < p < 0.282$ contains the population proportion of all women in low-income countries who breastfeed their infants.

5. Real World Interpretation: The proportion of women in low-income countries who breastfeed their infants is between 0.219 and 0.282 with 90% confidence.

This page titled [7.2: Confidence Interval for a Proportion](#) is shared under a [CC BY-SA 4.0](#) license and was authored, remixed, and/or curated by [Rachel Webb](#) via [source content](#) that was edited to the style and standards of the LibreTexts platform.

7.3: Sample Size Calculation for a Proportion

A confidence interval for a population proportion p and $q = 1 - p$, with specific margin of error E is given by:

$$n = p^* \cdot q^* \left(\frac{z_{\alpha/2}}{E} \right)^2 \text{ Always round up to the next whole number.}$$

Note: If the sample size is determined before the sample is selected, the p^* and q^* in the above equation are our best guesses. Often times statisticians will use $p^* = q^* = 0.5$; this takes the guesswork out of determining p^* and provides the “worst case scenario” for n . In other words, if $p^* = 0.5$ is used, then you are guaranteed that the margin of error will not exceed E but you also will have to sample the largest possible sample size. Some texts will use p or π instead of p^* .

A study found that 73% of prekindergarten children ages 3 to 5 whose mothers had a bachelor’s degree or higher were enrolled in early childhood care and education programs.

- How large a sample is needed to estimate the true proportion within 3% with 95% confidence?
- How large a sample is needed if you had no prior knowledge of the proportion?

Solution

a) Use $n = p^* \cdot q^* \left(\frac{z_{\alpha/2}}{E} \right)^2 = 0.73 \cdot 0.27 \left(\frac{1.96}{0.03} \right)^2 = 841.3104$. Since we cannot have 0.3104 of a person, we need to round up to the next whole person and use $n = 842$. Don’t round down since we may not get within our margin of error for a smaller sample size.

b) Since no proportion is given, use the planning value of $p^* = 0.5$.

$$n = 0.5 \cdot 0.5 \left(\frac{1.96}{0.03} \right)^2 = 1067.1111$$

Round up and use $n = 1,068$.

Note the sample sizes of 842 and 1,068. If you have a prior knowledge about the sample proportion then you may not have to sample as many people to get the same margin of error. The larger the sample size, the smaller the confidence interval.

This page titled [7.3: Sample Size Calculation for a Proportion](#) is shared under a [CC BY-SA 4.0](#) license and was authored, remixed, and/or curated by [Rachel Webb](#) via [source content](#) that was edited to the style and standards of the LibreTexts platform.

7.4: Z-Interval for a Mean

Suppose you want to estimate the mean weight of newborn infants, or you want to estimate the mean salary of college graduates. A confidence interval for the mean would be the way to estimate these means.

A $100(1 - \alpha)\%$ confidence interval for a population mean μ : (σ known) Choose a simple random sample of size n from a population having unknown mean μ . The $100(1 - \alpha)\%$ confidence interval estimate for μ is given by, $\bar{x} \pm z_{\alpha/2} \left(\frac{\sigma}{\sqrt{n}} \right)$.

The point estimate for μ is \bar{x} , and the margin of error is $z_{\alpha/2} \left(\frac{\sigma}{\sqrt{n}} \right)$.

Where $z_{\alpha/2}$ is the value on the standard normal curve with area $1 - \alpha$ between the critical values $-z_{\alpha/2}$ and $+z_{\alpha/2}$, as shown below in Figure 7-2.

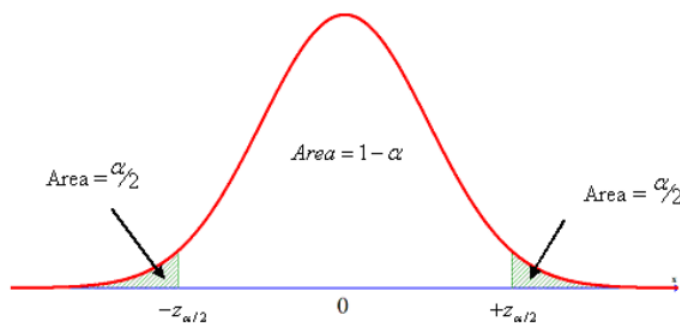


Figure 7-2

Note: In the notation, $z_{\alpha/2}$ the $\alpha/2$ represents the area in each of the tails, see Figure 7-2.

The confidence interval can be expressed as an inequality or an interval of values.

$$\bar{x} - z_{\alpha/2} \cdot \frac{\sigma}{\sqrt{n}} < \mu < \bar{x} + z_{\alpha/2} \cdot \frac{\sigma}{\sqrt{n}} \quad \text{or} \quad \left(\bar{x} - z_{\alpha/2} \cdot \frac{\sigma}{\sqrt{n}}, \bar{x} + z_{\alpha/2} \cdot \frac{\sigma}{\sqrt{n}} \right)$$

Assumptions:

1. If the sample size is small ($n < 30$), the population we are sampling from must be normally distributed. If the sample size is “large” ($n \geq 30$) the Central Limit Theorem guarantees that the sampling distribution of the mean will be normally distributed no matter how the population distribution is distributed.
2. The population standard deviation σ must be known. Most of the time we are using σ from a similar study or a prior year’s data. If you have a sample standard deviation then we will use a different method introduced in a later section.

These assumptions **must be** addressed before using these statistical inferences. In most cases, we do not know the population standard deviation so will not use the z-interval. Instead, we will use a different sampling distribution called the Student’s t-distribution or t-distribution for short.

Suppose we select a random sample of 100 pennies in circulation in order to estimate the average age of all pennies that are still in circulation. The sample average age, in years, was found to be $\bar{x} = 14.6$. For the sake of this example, let us assume that the population standard deviation is 4 years old. Find a 95% confidence interval for the true average age of pennies that are still in circulation.

Solution

We can use the above (z) model because σ is known, the population distribution shape is unknown, but the sample size is over 30.

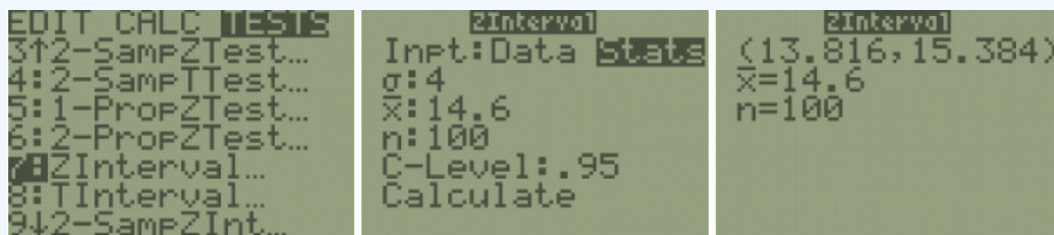
Use Excel or your calculator to find $z_{\alpha/2}$ for a 95% confidence interval. In Excel use =NORM.INV(lower tail area, mean, standard deviation). It is easier to deal with the positive z-score so use the z to the right of the mean which would have $1 - \alpha/2 = 0.975$ area. In Excel use =NORM.INV(0.975,0,1) or the calculator invNorm(0.975,0,1) which gives $z_{\alpha/2} = 1.96$.

$$\bar{x} \pm z_{\frac{\alpha}{2}} \frac{\sigma}{\sqrt{n}} \Rightarrow 14.6 \pm 1.96 \left(\frac{4}{\sqrt{100}} \right) \Rightarrow 14.6 \pm 0.784 \Rightarrow (13.816, 15.384)$$

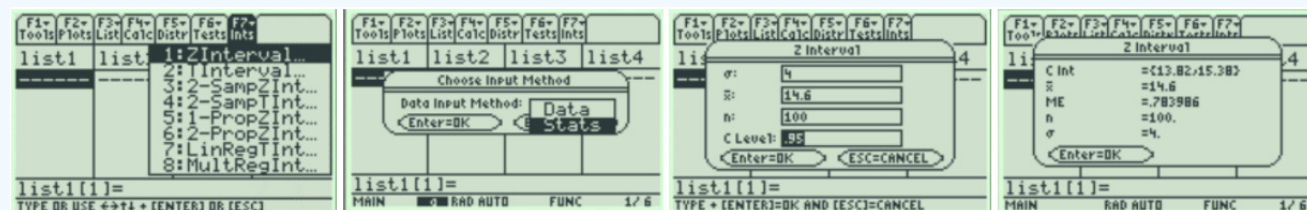
The point estimate for μ is 14.6 years, and the margin of error is 0.784 years. If we were to repeat this same sampling process, we would expect 95 out of 100 such intervals to contain the true population mean age of all pennies in circulation. A shorthand way to say this is, with 95% confidence that the population mean age of all pennies in circulation is between 13.816 to 15.384 years.

The answer is expressed as an inequality so the confidence interval is $13.816 < \mu < 15.384$. You can also use interval notation (13.816, 15.384) which is more common and matches the notation found on most calculators.

TI-84: Press the [STAT] key, arrow over to the [TESTS] menu, arrow down to the [7:ZInterval] option and press the [ENTER] key. Arrow over to the [Stats] menu and press the [ENTER] key. Then type in the population or sample standard deviation, sample mean, sample size and confidence level, arrow down to [Calculate] and press the [ENTER] key. The calculator returns the answer in interval notation.



TI-89: Go to the [Apps] **Stat/List Editor**, then press [2nd] then F7 [Ints], then select **1: ZInterval**. Choose the input method, data is when you have entered **data** into a list previously or **stats** when you are given the mean and standard deviation already. Type in the population standard deviation, sample mean, sample size (or list name (list1), and Freq: 1) and confidence level, and press the [ENTER] key to calculate. The calculator returns the answer in interval notation.



This page titled [7.4: Z-Interval for a Mean](#) is shared under a [CC BY-SA 4.0](#) license and was authored, remixed, and/or curated by [Rachel Webb](#) via [source content](#) that was edited to the style and standards of the LibreTexts platform.

7.5: Interpreting a Confidence Interval

There is always a chance that the confidence interval would not contain the true parameter that we are looking for. Inferential statistics does not “prove” that the population parameter is within the boundaries of the confidence interval. If the sample we took had all outliers and the sample statistic is far away from the true population parameter, then when we subtract and add the margin of error to the point estimate, the population parameter may not be within the limits.

Both the sample size and confidence level affect how wide the interval is. The following discussion demonstrates what happens to the width of the interval as you get more confident.

Think about shooting an arrow into the target. Suppose you are really good at that and that you have a 90% chance of hitting the bull’s-eye. Now the bull’s-eye is very small. Since you hit the bull’s eye approximately 90% of the time, then you probably hit inside the next ring out 95% of the time. You have a better chance of doing this, but the circle is bigger. You probably have a 99% chance of hitting the target, but that is a much bigger circle to hit. As your confidence in hitting the target increases, the circle you hit gets bigger. The same is true for confidence intervals.

The higher level of confidence makes a wider interval. There is a tradeoff between width and confidence level. You can be really confident about your answer, but your answer will not be very precise. On the other hand, you can have a precise answer (small margin of error) but not be very confident about your answer.

When we increase the confidence level, the confidence interval becomes wider to be more confident that the population parameter is within the lower and upper boundaries. A wider margin of error means less accuracy. When one is more confident, one would have a harder time predicting the true parameter with the larger range of values. See Figure 7-3.



Figure 7-3

For instance, if we wanted to find the true mean grade for a statistics course using a 99% confidence critical value, we may get a very large margin of error, $75\% \pm 25\%$. This would say that we would be 99% confident that the average grade for all students is between 50% to 100%. This is of little help since that is anywhere between the grade range of F to an A. There are two ways to narrow this margin of error. The best way to reduce the margin of error is to increase the sample size, which decreases the standard deviation of the sampling distribution. When you take a larger sample, you will get a narrower interval. The other way to decrease the margin of error is to decrease your confidence level. When you decrease the confidence level, the critical value will be smaller. If we have a smaller margin of error then one can more accurately predict the population parameter.

Now look at how the sample size affects the size of the interval. Suppose the following Figure 7-4 represents confidence intervals calculated on a 95% interval.




Figure 7-4

A larger sample size from a representative sample makes the standard error smaller and hence the width of the interval narrower. Large samples are closer to the true population so the point estimate is pretty close to the true value.

The following website is an applet where you can simulate confidence intervals with different parameters, sample sizes and confidence levels, take a moment and play around with the applet:

<http://www.rossmanchance.com/applets/ConfSim.html>.

The vertical bar in Figure 7-5 represents the true population mean test score of 75 (which would be unknown in real life). If you were to compute 100 confidence intervals using a 95% confidence level, then approximately $95/100 = 95\%$ would contain the true

population mean. The figure shows the confidence intervals as horizontal lines. There are 95 confidence intervals that contain the population mean shown in green. There are 5 confidence intervals that did not capture the population mean within the interval endpoints that are shown in red.

The probability that one confidence interval contains the mean is either zero or one. However, if we were to repeat the same sampling process, the proportion of times that the confidence intervals would capture the populations parameter is $(1 - \alpha)$, where α is the complement of the confidence level. As an example, if you have a 95% confidence interval of $0.65 < p < 0.73$, then you would say, “If we were to repeat this process, then 95% of the time the interval 0.65 to 0.73 would contain the true population proportion.” This means that if you have 100 intervals, 95 of them will contain the true proportion, and 5% will not.

The incorrect interpretation is that there is a 95% probability that the true value of p will fall between 0.65 and 0.73. The reason that this interpretation is incorrect is that the true value is fixed out there somewhere. You are trying to capture it with this interval. This is the chance that your interval captures the true mean, and not that the true value falls in the interval.

In addition, a real-world interpretation depends on the situation. It is where you are telling people what numbers you found the parameter to lie between. Therefore, your real-world interpretation is where you tell what values your parameter is between. There is no probability attached to this statement. That probability is in the statistical interpretation.




Figure 7-5

In the following Figure 7-6, confidence intervals were simulated using a 90% confidence level and then again using the 99% confidence level. Each confidence level was run 100 times with sample sizes of $n = 30$, then again using a sample size of $n = 100$, holding all other variables constant.

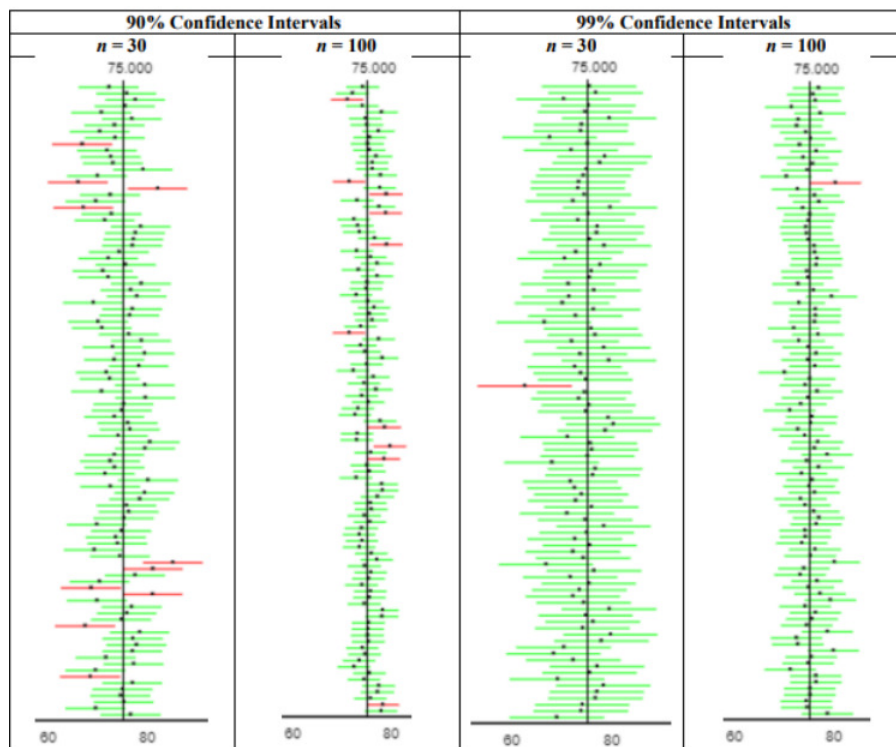


Figure 7-6

Compare columns 1 & 2 with columns 3 & 4 in Figure 7-6. For columns 1 & 2, $90/100 = 90\%$ of the confidence intervals contain the mean. For columns 3 & 4, $99/100 = 99\%$ of the confidence intervals contain the mean. Note the higher confidence level is wider for the same sample size.

Compare columns 1 & 3 in Figure 7-6 and you can see that the width of the confidence interval is wider for the 99% confidence level compared to the 90% confidence level. Holding all other variables constant the confidence interval captured the population mean 99% of the time. Then compare columns 2 & 4 to see similar results.

The wider confidence intervals will more likely capture the true population mean, however you will have less accuracy in predicting what the true mean is.

State the statistical and real-world interpretations of the following confidence intervals.

- Suppose you have a 95% confidence interval for the mean age a woman gets married in 2013 is $26 < \mu < 28$.
- Suppose a 99% confidence interval for the proportion of Americans who have tried cannabis as of 2019 is $0.55 < p < 0.61$.

Solution

a

- Statistical Interpretation: We are 95% confident that the interval $26 < \mu < 28$ contains the population mean age of all women that got married in 2013.
- Real World Interpretation: We are 95% confident that the mean age of women that got married in 2013 is between 26 and 28 years of age.

b

- Statistical Interpretation: We are 99% confident that the interval $0.55 < p < 0.61$ contains the population proportion of all Americans who have tried cannabis as of 2019.
- Real World Interpretation: We are 99% confident that the proportion of all Americans who have tried cannabis as of 2019 is between 55% and 61%.

“I'm not trying to prove anything, by the way. I'm a scientist and I know what constitutes proof. But the reason I call myself by my childhood name is to remind myself that a scientist must also be absolutely like a child. If he sees a thing, he must say that he sees it, whether it was what he thought he was going to see or not. See first, think later, then test. But always see first. Otherwise you will only see what you were expecting. Most scientists forget that.”

(Adams, 2002)

This page titled [7.5: Interpreting a Confidence Interval](#) is shared under a [CC BY-SA 4.0](#) license and was authored, remixed, and/or curated by [Rachel Webb](#) via [source content](#) that was edited to the style and standards of the LibreTexts platform.

7.6: Sample Size for a Mean

Often, we need a specific confidence level, but we need our margin of error to be within a set range. We are able to accomplish this by increasing the sample size. However, taking large samples is often difficult or costly to accomplish. Thus, it is useful to be able to determine the minimum sample size necessary to achieve our confidence interval.

A confidence interval for a population mean μ with specific margin of error E and known population standard deviation σ is given by, $n = \left(\frac{z_{\alpha/2} \cdot \sigma}{E} \right)^2$.

Always round up to the next whole number.

Keep in mind that we rarely know the value of the population standard deviation. We can estimate σ by using a previous year's standard deviation or a standard deviation from a similar study, a pilot sample, or by dividing the range by 4.

A researcher is interested in estimating the average salary of teachers. She wants to be 95% confident that her estimate is correct. In a previous study, she found the population standard deviation was \$1,175. How large a sample is needed to be accurate within \$100?

Solution

First find the $z_{\alpha/2}$ for 95% confidence using Excel or your calculator, so $z_{\alpha/2} = 1.96$. Most of the time the margin of error = E follows the word “within” in the question, $E = 100$. The standard deviation $\sigma = 1175$. Replace each number into the formula: $n = \left(\frac{1.96 \cdot 1175}{100} \right)^2 = 530.38$. If we round down, we would not get “within” the \$100 margin of error. Always round sample sizes up to the next whole number so that your margin of error will be within the specified amount. The larger the sample size, the smaller the confidence interval. The answer is $n = 531$.

This page titled [7.6: Sample Size for a Mean](#) is shared under a [CC BY-SA 4.0](#) license and was authored, remixed, and/or curated by [Rachel Webb](#) via [source content](#) that was edited to the style and standards of the LibreTexts platform.

7.7: t-Interval for a Mean

7.7.1 Student's T-Distribution

A **t-distribution** is another symmetric distribution for a continuous random variable.



[Gosset](#)

William Gosset was a statistician employed at Guinness and performed statistics to find the best yield of barley for their beer. Guinness prohibited its employees to publish papers so Gosset published under the name Student. Gosset's distribution is called the Student's t-distribution.

A t-distribution is another special type of distribution for a continuous random variable.

Properties of the t-distribution density curve:

1. Symmetric, Unimodal (one mode) Bell-shaped.
2. Centered at the mean μ = median = mode = 0.
3. The spread of a t-distribution is determined by the degrees of freedom which are determined by the sample size.
4. As the degrees of freedom increase, the t-distribution approaches the standard normal curve.
5. The total area under the curve is equal to 1 or 100%.

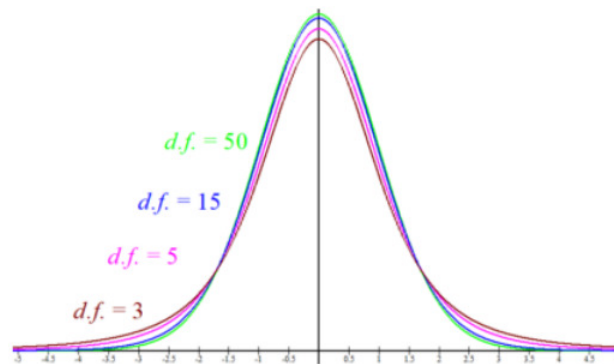


Figure 7-7

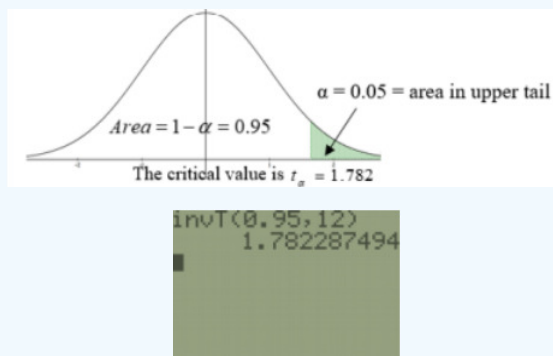
Figure 7-7 shows examples of three different t-distributions with degrees of freedom of 1, 5 and 30. Note that as the degrees of freedom increase the distribution has a smaller standard deviation and will get closer in shape to the normal distribution.

The t-critical value that has 5% of the area in the upper tail for $n = 13$.

Solution

Use a t-distribution with the degrees of freedom, $df = n - 1 = 13 - 1 = 12$. Draw and shade the upper tail area as in Figure 7-8. Use the DISTR menu invT option. Note that if you have an older TI-84 or a TI-83 calculator you need to have the program INVT installed.

For this function, you always use the area to the left of the point. If want 5% in the upper tail, then that means there is 95% in the bottom tail area. $t_{\alpha} = \text{invT}(\text{area below } t\text{-score}, df) = \text{invT}(0.95, 12) = 1.782$



You can download the INVT program to your calculator from <http://MostlyHarmlessStatistics.com> or use Excel $=\text{T.INV}(0.95, 12) = 1.7823$.

Compute the probability of getting a t-score larger than 1.8399 with a sample size of 13.

Solution

To find the $P(t > 1.8399)$ on the TI calculator, go to DISTR use $\text{tcdf}(\text{lower}, \text{upper}, df)$. For this example, we would have $\text{tcdf}(1.8399, \infty, 12)$. In Excel use $=1 - \text{T.DIST}(1.8399, 12, \text{TRUE}) = 0.0453$. $P(t > 1.8399) = 0.0453$.

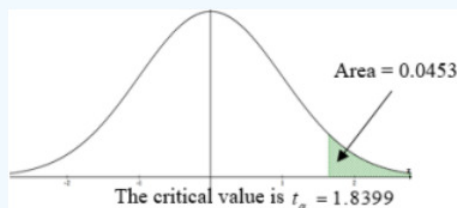


Figure 7-9

7.7.2 T-Confidence Interval

Note that we rarely have a calculation for the population standard deviation so in most cases we would need to use the sample standard deviation as an estimate for the population standard deviation. If we have a normally distributed population with an unknown population standard deviation then the sampling distribution of the sample mean will follow a t-distribution.

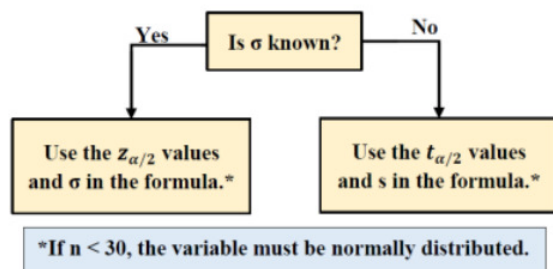


Figure 7-10

A $100(1 - \alpha)\%$ Confidence Interval for a Population Mean μ : (σ unknown)

Choose a simple random sample of size n from a population having *unknown* mean μ .

The $100(1 - \alpha)\%$ confidence interval estimate for μ is given by $\bar{x} \pm t_{\alpha/2, n-1} \left(\frac{s}{\sqrt{n}} \right)$.

The df = degrees of freedom* are $n - 1$.

The degrees of freedom are the number of values that are free to vary after a sample statistic has been computed. For example, if you know the mean was 50 for a sample size of 4, you could pick any 3 numbers you like, but the 4th value would have to be fixed to have the mean come out to be 50. For this class we just need to know that degrees of freedom will be based on the sample size.

The sample mean \bar{x} is the point estimate for μ , and the margin of error is $t_{\alpha/2} \left(\frac{s}{\sqrt{n}} \right)$. Where $t_{\alpha/2}$ is the positive critical value on the t -distribution curve with $df = n - 1$ and area $1 - \alpha$ between the critical values $-t_{\alpha/2}$ and $+t_{\alpha/2}$, as shown in Figure 7-11.

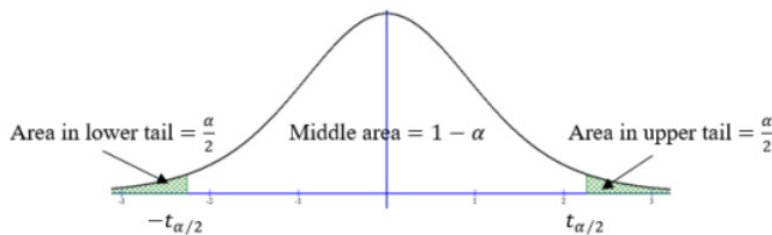


Figure 7-11

Before we compute a t -interval we will practice getting t critical values using Excel and the TI calculator's built in t distribution.

Compute the critical values $-t_{\alpha/2}$ and $+t_{\alpha/2}$ for a 90% confidence interval with a sample size of 10.

Solution

Draw a t -distribution with $df = n - 1 = 9$, see Figure 7-12. In Excel use $=T.INV(\text{lower tail area}, df) = T.INV(0.95, 9)$ or in the TI calculator use $\text{invT}(\text{lower tail area}, df) = \text{invT}(0.95, 9)$. The critical values are $t = \pm 1.833$

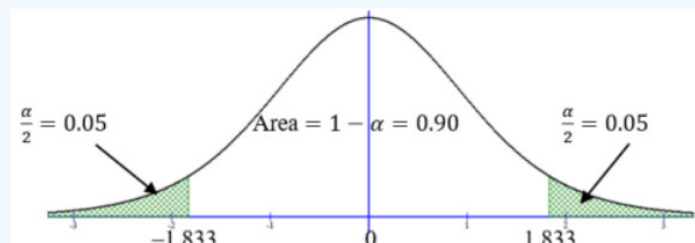


Figure 7-12

```
invT(.95,9)
1.833112923
```

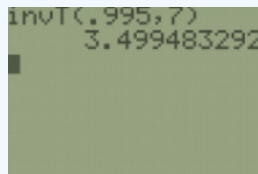
We can use Excel to find the margin of error when raw data is given in a problem. The following example is first done longhand and then done using Excel's Data Analysis Tool and the T -Interval shortcut key on the TI calculator.

The yearly salary for mathematics assistant professors are normally distributed. A random sample of 8 math assistant professor's salaries are listed below in thousands of dollars. Estimate the population mean salary with a 99% confidence interval.

66.0 75.8 70.9 73.9 63.4 68.5 73.3 65.9

Solution

First find the t critical value using $df = n - 1 = 7$ and 99% confidence, $t_{\alpha/2} = 3.4995$.



Then use technology to find the sample mean and sample standard deviation and substitute the numbers into the formula.

$$\bar{x} \pm t_{\alpha/2, n-1} \left(\frac{s}{\sqrt{n}} \right) \Rightarrow 69.7125 \pm 3.4995 \left(\frac{4.4483}{\sqrt{8}} \right) \Rightarrow 69.7125 \pm 5.5037 \Rightarrow (64.2088, 75.2162)$$

The answer can be given as an inequality $64.2088 < \mu < 75.2162$ or in interval notation $(64.2088, 75.2162)$.

We are 99% confident that the interval 64.2 and 75.2 contains the true population mean salary for all mathematics assistant professors.

We are 99% confident that the mean salary for mathematics assistant professors is between \$64,208.80 and \$75,216.20.

Assumption: The population we are sampling from must be normal* or approximately normal, and the population standard deviation σ is unknown. *This assumption **must be** addressed before using statistical inference for sample sizes of under 30.

TI-84: Press the [STAT] key, arrow over to the [TESTS] menu, arrow down to the [8:TInterval] option and press the [ENTER] key. Arrow over to the [Stats] menu and press the [ENTER] key. Then type in the mean, sample standard deviation, sample size and confidence level, arrow down to [Calculate] and press the [ENTER] key. The calculator returns the answer in interval notation. Be careful. If you accidentally use the [7:ZInterval] option you would get the wrong answer.

Alternatively (If you have raw data in list one) Arrow over to the [Data] menu and press the [ENTER] key. Then type in the list name, L₁, leave Freq:1 alone, enter the confidence level, arrow down to [Calculate] and press the [ENTER] key.

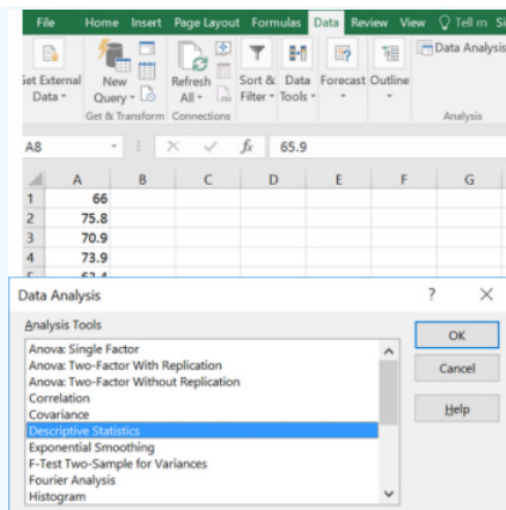
TI-89: Go to the [Apps] **Stat/List Editor**, then press [2nd] then F7 [Ints], then select **2:TInterval**. Choose the input method, data is when you have entered **data** into a list previously or **stats** when you are given the mean and standard deviation already. Type in the mean, standard deviation, sample size (or list name (list1), and Freq: 1) and confidence level, and press the [ENTER] key. The calculator returns the answer in interval notation. Be careful: If you accidentally use the [1:ZInterval] option you would get the wrong answer.

Excel Directions

Type the data into Excel. Select the Data Analysis Tool under the Data tab.

	A
1	66
2	75.8
3	70.9
4	73.9
5	63.4
6	68.5
7	73.3
8	65.9

Select Descriptive Statistics. Select OK.

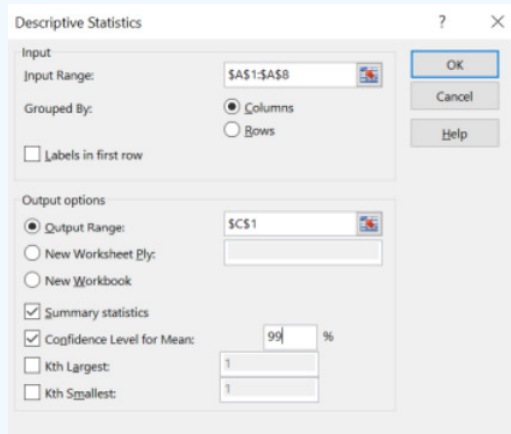


Use your mouse and click into the Input Range box, then select the cells containing the data. If you highlighted the label then check the box next to Labels in first row. In this case no label was typed in so the box is left blank. (Be very careful with this step. If you check the box and do not have a label then the first data point will become the label and all your descriptive statistics will be incorrect.)

Check the boxes next to Summary statistics and Confidence Level for Mean. Then change the confidence level to fit the question. Select OK.

The table output does not find the confidence interval. However, the output does give you the sample mean and margin of error.

The margin of error is the last entry labeled Confidence Level. To find the confidence interval subtract and add the margin of error to the sample mean to get the lower and upper limit of the interval in two separate cells.



The following screenshot shows the cell references to find the lower limit as $=D3-D16$ and the upper limit as $=D3+D16$. Make sure to put your answer in interval notation.

	A	B	C	D	E	F
1	66		Column1			
2	75.8					
3	70.9		Mean	69.7125		=D3-D16
4	73.9		Standard Error	1.572695309		=D3+D16
5	63.4		Median	69.7		
6	68.5		Mode	#N/A		
7	73.3		Standard Deviation	4.448254071		
8	65.9		Sample Variance	19.78696428		
9			Kurtosis	-1.53765685		
10			Skewness	-0.02822188		
11			Range	12.4		
12			Minimum	63.4		
13			Maximum	75.8		
14			Sum	557.7		
15			Count	8		
16			Confidence Level(99.0%)	5.503620966		

The answer is given as an inequality $64.2088 < \mu < 75.2162$ or in interval notation $(64.2088, 75.2162)$.

We are 99% confident that the interval 64.2 and 75.2 contains the true population mean salary for all mathematics assistant professors.

Summary

A t-confidence interval is used to estimate an unknown value of the population mean for a single sample. We need to make sure that the population is normally distributed or the sample size is 30 or larger. Once this is verified we use the interval $\bar{x} - t_{\alpha/2, n-1} \left(\frac{s}{\sqrt{n}} \right) < \mu < \bar{x} + t_{\alpha/2, n-1} \left(\frac{s}{\sqrt{n}} \right)$ to estimate the true population mean. Most of the time we will be using the t-interval, not the z-interval, when estimating a mean since we rarely know the population standard deviation. It is important to interpret the confidence interval correctly. A general interpretation where you would change what is in the parentheses to fit the context of the problem is: "One can be $100(1 - \alpha)\%$ confident that between (lower boundary) and (upper boundary) contains the population mean of (random variable in words using context and units from problem)."

This page titled [7.7: t-Interval for a Mean](#) is shared under a [CC BY-SA 4.0](#) license and was authored, remixed, and/or curated by [Rachel Webb](#) via [source content](#) that was edited to the style and standards of the LibreTexts platform.

7.8: Chapter 7 Exercises

? Chapter 7 Exercises

1. Which confidence level would give the narrowest margin of error?
 - a) 80%
 - b) 90%
 - c) 95%
 - d) 99%
2. Suppose you compute a confidence interval with a sample size of 25. What will happen to the width of the confidence interval if the sample size increases to 50, assuming everything else stays the same? Choose the correct answer below.
 - a) Gets smaller
 - b) Stays the same
 - c) Gets larger
3. For a confidence level of 90% with a sample size of 35, find the critical z values.
4. For a confidence level of 99% with a sample size of 18, find the critical z values.
5. A researcher would like to estimate the proportion of all children that have been diagnosed with autism spectrum disorder (ASD) in their county. They are using 95% confidence level and the Centers for Disease Control and Prevention (CDC) 2018 national estimate that 1 in 68 ≈ 0.0147 children are diagnosed with ASD. What sample size should the researcher use to get a margin of error to be within 2%?
6. A political candidate has asked you to conduct a poll to determine what percentage of people support her. If the candidate only wants a 9% margin of error at a 99% confidence level, what size of sample is needed?
7. A pilot study found that 72% of adult Americans would like an Internet connection in their car.
 - a) Use the given preliminary estimate to determine the sample size required to estimate the proportion of adult Americans who would like an Internet connection in their car to within 0.02 with 95% confidence.
 - b) Use the given preliminary estimate to determine the sample size required to estimate the proportion of adult Americans who would like an Internet connection in their car to within 0.02 with 99% confidence.
 - c) If the information in the pilot study was not given, determine the sample size required to estimate the proportion of adult Americans who would like an Internet connection in their car to within 0.02 with 99% confidence.
8. Out of a sample of 200 adults ages 18 to 30, 54 still lived with their parents. Based on this, construct a 95% confidence interval for the true population proportion of adults ages 18 to 30 that still live with their parents.
9. In a random sample of 200 people, 135 said that they watched educational TV. Find and interpret the 95% confidence interval of the true proportion of people who watched educational TV.
10. In a certain state, a survey of 600 workers showed that 35% belonged to a union. Find and interpret the 95% confidence interval of true proportion of workers who belong to a union.
11. A teacher wanted to estimate the proportion of students who take notes in her class. She used data from a random sample size of 82 and found that 50 of them took notes. The 99% confidence interval for the proportion of student that take notes is _____ $< p <$ _____.
12. A random sample of 150 people was selected and 12% of them were left-handed. Find and interpret the 90% confidence interval for the proportion of left-handed people.
13. A survey asked people if they were aware that maintaining a healthy weight could reduce the risk of stroke. A 95% confidence interval was found using the survey results to be (0.54, 0.62). Which of the following is the correct interpretation of this interval?

- a) We are 95% confident that the interval $0.54 < p < 0.62$ contains the population proportion of people who are aware that maintaining a healthy weight could reduce the risk of stroke.
- b) There is a 95% chance that the sample proportion of people who are aware that maintaining a healthy weight could reduce the risk of stroke is between $0.54 < p < 0.62$.
- c) There is a 95% chance of having a stroke if you do not maintain a healthy weight.
- d) There is a 95% chance that the proportion of people who will have a stroke is between 54% and 62%.

14. Gallup tracks daily the percentage of Americans who approve or disapprove of the job Donald Trump is doing as president. Daily results are based on telephone interviews with approximately 1,500 national adults. Margin of error is ± 3 percentage points. On December 15, 2017, the Gallup poll using a 95% confidence level showed that 34% approved of the job Donald Trump was doing. Which of the following is the correct statistical interpretation of the confidence interval?

- a) As of December 15, 2017, 34% of American adults approve of the job Donald Trump is doing as president.
- b) We are 95% confident that the interval $0.31 < p < 0.37$ contains the proportion of American adults who approve of the job Donald Trump is doing as president as of December 15, 2017.
- c) As of December 15, 2017, 95% of American adults approve of the job Donald Trump is doing as president. d) We are 95% confident that the proportion of adult Americans who approve of the job Donald Trump is doing as president is 0.34 as of December 15, 2017.

15. A laboratory in Florida is interested in finding the mean chloride level for a healthy resident in the state. A random sample of 25 healthy residents has a mean chloride level of 80 mEq/L. If it is known that the chloride levels in healthy individuals residing in Florida is normally distributed with a population standard deviation of 27 mEq/L, find and interpret the 95% confidence interval for the true mean chloride level of all healthy Florida residents.

16. Out of 500 people sampled in early October 2020, 315 preferred Biden. Based on this, compute the 95% confidence interval for the proportion of the voting population that preferred Biden.

17. The age when smokers first start from previous studies is normally distributed with a mean of 13 years old with a population standard deviation of 2.1 years old. A survey of smokers of this generation was done to estimate if the mean age has changed. The sample of 33 smokers found that their mean starting age was 13.7 years old. Find the 99% confidence interval of the mean.

18. The scores on an examination in biology are approximately normally distributed with a known standard deviation of 20 points. The following is a random sample of scores from this year's examination: 403, 418, 460, 482, 511, 543, 576, 421. Find and interpret the 99% confidence interval for the population mean scores.

19. The undergraduate grade point average (GPA) for students admitted to the top graduate business schools was 3.53. Assume this estimate was based on a sample of 8 students admitted to the top schools. Assume that the population is normally distributed with a standard deviation of 0.18. Find and interpret the 99% confidence interval estimate of the mean undergraduate GPA for all students admitted to the top graduate business schools.

20. The Food & Drug Administration (FDA) regulates that fresh albacore tuna fish that is consumed is allowed to contain 0.82 ppm of mercury or less. A laboratory is estimating the amount of mercury in tuna fish for a new company and needs to have a margin of error within 0.03 ppm of mercury with 95% confidence. Assume the population standard deviation is 0.138 ppm of mercury. What sample size is needed?

21. You want to obtain a sample to estimate a population mean age of the incoming fall term transfer students. Based on previous evidence, you believe the population standard deviation is approximately 5.3. You would like to be 90% confident that your estimate is within 1.9 of the true population mean. How large of a sample size is required?

22. SAT scores are distributed with a mean of 1,500 and a standard deviation of 300. You are interested in estimating the average SAT score of first year students at your college. If you would like to limit the margin of error of your 95% confidence interval to 25 points, how many students should you sample?

23. An engineer wishes to determine the width of a particular electronic component. If she knows that the standard deviation is 1.2 mm, how many of these components should she consider to be 99% sure of knowing the mean will be within 0.5 mm?

24. For a confidence level of 90% with a sample size of 30, find the critical t values.

25. For a confidence level of 99% with a sample size of 24, find the critical t values.
26. For a confidence level of 95% with a sample size of 40, find the critical t values.
27. The amount of money in the money market accounts of 26 customers is found to be approximately normally distributed with a mean of \$18,240 and a sample standard deviation of \$1,100. Find and interpret the 95% confidence interval for the mean amount of money in the money market accounts at this bank.
28. A professor wants to estimate how long students stay connected during two-hour online lectures. From a random sample of 25 students, the mean stay time was 93 minutes with a standard deviation of 10 minutes. Assuming the population has a normal distribution, compute a 95% confidence interval estimate for the population mean.
29. A random sample of stock prices per share (in dollars) is shown. Find and interpret the 90% confidence interval for the mean stock price. Assume the population of stock prices is normally distributed.
- 26.60 75.37 3.81 28.37 40.25 13.88 53.80 28.25 10.87 12.25
30. In a certain city, a random sample of executives have the following monthly personal incomes (in thousands) 35, 43, 29, 55, 63, 72, 28, 33, 36, 41, 42, 57, 38, 30. Assume the population of incomes is normally distributed. Find and interpret the 95% confidence interval for the mean income.
31. A tire manufacturer wants to estimate the average number of miles that may be driven in a tire of a certain type before the tire wears out. Assume the population is normally distributed. A random sample of tires is chosen and are driven until they wear out and the number of thousands of miles is recorded, find and interpret the 99% confidence interval for the mean using the sample data 32, 33, 28, 37, 29, 30, 22, 35, 23, 28, 30, 36.
32. Recorded here are the germination times (in days) for ten randomly chosen seeds of a new type of bean: 18, 12, 20, 17, 14, 15, 13, 11, 21, 17. Assume that the population germination time is normally distributed. Find and interpret the 99% confidence interval for the mean germination time.
33. A sample of the length in inches for newborns is given below. Assume that lengths are normally distributed. Find the 95% confidence interval of the mean length.

Length	20.8	16.9	21.9	18	15	20.8	15.2	22.4	19.4	20.5
--------	------	------	------	----	----	------	------	------	------	------

34. Suppose you are a researcher in a hospital. You are experimenting with a new tranquilizer. You collect data from a random sample of 10 patients. The period of effectiveness of the tranquilizer for each patient (in hours) is as follows:

Hours	2	2.9	2.6	2.9	3	3	2	2.1	2.9	2.1
-------	---	-----	-----	-----	---	---	---	-----	-----	-----

- What is a point estimate for the population mean length of time?
- What must be true in order to construct a confidence interval for the population mean length of time in this situation? Choose the correct answer below.
 - The sample size must be greater than 30.
 - The population must be normally distributed.
 - The population standard deviation must be known.
 - The population mean must be known.
- Construct a 99% confidence interval for the population mean length of time.
- What does it mean to be "99% confident" in this problem? Choose the correct answer below.
 - 99% of all confidence intervals found using this same sampling technique will contain the population mean time.
 - There is a 99% chance that the confidence interval contains the sample mean time.
 - The confidence interval contains 99% of all sample times.
 - 99% of all times will fall within this interval.

e) Suppose that the company releases a statement that the mean time for all patients is 2 hours. Is this possible? Is it likely?

35. Which of the following would result in the widest confidence interval?

- a) A sample size of 100 with 99% confidence.
- b) A sample size of 100 with 95% confidence.
- c) A sample size of 30 with 95% confidence.
- d) A sample size of 30 with 99% confidence.

36. The world's smallest mammal is the bumblebee bat (also known as Kitti's hog-nosed bat or *Craseonycteris thonglongyai*). Such bats are roughly the size of a large bumblebee. A sample of bats, weighed in grams, is given in the below. Assume that bat weights are normally distributed. Find the 99% confidence interval of the mean.

Weight	
2.11	1.53
2.27	1.98
2.27	2.11
1.75	2.06
1.92	2.01

37. The total of individual weights of garbage discarded by 20 households in one week is normally distributed with a mean of 30.2 lbs. with a sample standard deviation of 8.9 lbs. Find the 90% confidence interval of the mean.

38. A student was asked to find a 90% confidence interval for widget width using data from a random sample of size $n = 29$. Which of the following is a correct interpretation of the interval $14.3 < \mu < 26.8$? Assume the population is normally distributed.

- a) There is a 90% chance that the sample mean widget width will be between 14.3 and 26.8.
- b) There is a 90% chance that the widget width is between 14.3 and 26.8.
- c) With 90% confidence, the width of a widget will be between 14.3 and 26.8.
- d) With 90% confidence, the mean width of all widgets is between 14.3 and 26.8.
- e) The sample mean width of all widgets is between 14.3 and 26.8, 90% of the time.

39. A researcher finds a 95% confidence interval for the average commute time in minutes using public transit is (15.75, 28.25). Which of the following is the correct interpretation of this interval?

- a) We are 95% confident that all commute time in minutes for the population using public transit is between 15.75 and 28.25 minutes.
- b) There is a 95% chance commute time in minutes using public transit is between 15.75 and 28.25 minutes.
- c) We are 95% confident that the interval $15.75 < \mu < 28.25$ contains the sample mean commute time in minutes using public transportation.
- d) We are 95% confident that the interval $15.75 < \mu < 28.25$ contains the population mean commute time in minutes using public transportation

7.9: Chapter 7 Formulas

Confidence Interval for One Proportion $\hat{p} \pm z_{\frac{\alpha}{2}} \sqrt{\left(\frac{\hat{p}\hat{q}}{n}\right)}$ $\hat{p} = \frac{x}{n}$ $\hat{q} = 1 - \hat{p}$ TI-84: 1-PropZInt	Sample Size for Proportion $n = p^* \cdot q^* \left(\frac{z_{\alpha/2}}{E}\right)^2$ Always round up to whole number. If p is not given use $p^* = 0.5$. E = Margin of Error
Confidence Interval for One Mean Use z-interval when σ is given. Use t-interval when s is given. If $n < 30$, population needs to be normal.	Z-Confidence Interval $\bar{x} \pm z_{\frac{\alpha}{2}} \left(\frac{\sigma}{\sqrt{n}}\right)$ TI-84: ZInterval
Z-Critical Values Excel: $z_{\alpha/2} = \text{NORM.INV}(1 - \text{area}/2, 0, 1)$ TI-84: $z_{\alpha/2} = \text{invNorm}(1 - \text{area}/2, 0, 1)$	t-Critical Values Excel: $t_{\alpha/2} = \text{T.INV}(1 - \text{area}/2, df)$ TI-84: $t_{\alpha/2} = \text{invT}(1 - \text{area}/2, df)$
t-Confidence Interval $\bar{x} \pm t_{\alpha/2} \left(\frac{s}{\sqrt{n}}\right)$ $df = n - 1$ TI-84: TInterval	Sample Size for Mean $n = \left(\frac{z_{\alpha/2} \cdot \sigma}{E}\right)^2$ Always round up to whole number. E = Margin of Error

This page titled [7.9: Chapter 7 Formulas](#) is shared under a [CC BY-SA 4.0](#) license and was authored, remixed, and/or curated by [Rachel Webb](#) via [source content](#) that was edited to the style and standards of the LibreTexts platform.

CHAPTER OVERVIEW

8: Hypothesis Tests for One Population

[8.1: Introduction](#)

[8.2: Type I and II Errors](#)

[8.3: Hypothesis Test for One Mean](#)

[8.4: Hypothesis Test for One Proportion](#)

[8.5: Chapter 8 Exercises](#)

[8.6: Chapter 8 Formulas](#)

This page titled [8: Hypothesis Tests for One Population](#) is shared under a [CC BY-SA 4.0](#) license and was authored, remixed, and/or curated by [Rachel Webb](#) via [source content](#) that was edited to the style and standards of the LibreTexts platform.

8.1: Introduction

A statistic is a characteristic or measure from a sample. A parameter is a characteristic or measure from a population. We use statistics to generalize about parameters, known as estimations. Every time we take a sample statistic, we would expect that estimate to be close to the parameter, but not necessarily exactly equal to the unknown population parameter. How close would depend on how large a sample we took, who was sampled, how they were sampled and other factors. Hypothesis testing is a scientific method used to evaluate claims about population parameters.

A statistical hypothesis is an educated conjecture about a population parameter. This conjecture may or may not be true. We will take sample data and infer from the sample if there is evidence to support our claim about the unknown population parameter.

The null hypothesis (H_0 , pronounced “H-naught” or “H-zero”), is a statistical hypothesis that states that there is no difference between a parameter and a specific value, or that there is no difference between two parameters. The null hypothesis is assumed true until there is sufficient evidence otherwise.

The alternative hypothesis (H_1 or H_a , pronounced “H-one” or “H-ā”), is a statistical hypothesis that states that there is a difference between a parameter and a specific value, or that there is a difference between two parameters. H_1 is always the complement of H_0 .

The researcher decides the probability that the test is true by setting the level of significance, also called the significance level. We use the Greek letter α , pronounced “alpha,” to represent the significance level. The level of significance is the probability that the null hypothesis is rejected when it is actually true. Note: like in the previous chapter, $1 - \alpha$ is the confidence level.

When doing your own research, you should set up their hypotheses and choose the significance level before analyzing the sample data.

When reading a word problem, your first step is to identify the parameter(s), for example μ , you are testing and which direction (left, right, or two-tail) test you are being asked to perform. For this course, the homework problems will state the researcher’s claim; usually this is the alternative hypothesis.

The null-hypothesis is always set up as a parameter equal to some value (called the test value) or equal to another parameter. The null hypothesis is assumed true unless there is strong evidence from the sample to suggest otherwise. Similar to our judicial system that a person is innocent until the prosecutor shows enough evidence that they are not innocent.

For example, an investment company wants to build a new food cart. They know from experience that food carts are successful if they have on average more than 100 people a day walk by the location. They have a potential site to build on, but before they begin, they want to see if they have enough foot traffic. They observe how many people walk by the site every day over a month. The investors want to be very careful about setting up in a bad location where the food cart will fail, rather than the missed opportunity build in a prime location. We have two hypotheses. For an average of more than 100 people, we would write this in symbols as $\mu > 100$. This claim needs to go into the alternative hypothesis since there is no equality, just strictly greater than 100. The complement of greater than is $\mu \leq 100$. This has a form of equality (\leq) so needs to go in the null hypothesis.

We then would set up the hypotheses as:

- $H_0: \mu \leq 100$ (Do not build)
- $H_1: \mu > 100$ (Build).

When performing the hypothesis test, the test statistic assumes that the parameter is the null hypothesis equal to some value. This still implies that the parameter could be any value less than or equal to 100 but our hypothesis test should be written as:

- $H_0: \mu = 100$
- $H_1: \mu > 100$

Either notation is fine, but most textbooks will always have the = sign in the null hypothesis. The null hypothesis is based off historical value, a claim or product specification.

Signs are Important

When there is a greater than sign ($>$) in the alternative hypothesis, we call this a right-tailed test. If we had a less than sign ($<$) in the alternative hypothesis, then we would have a left-tailed test. If there were a not equal sign (\neq) in the alternative hypothesis, we would have a two-tailed test. The tails will determine which side the critical region will fall on the sampling distribution. Note that you should never have an $=$, \leq or \geq sign appear in the alternative hypothesis.

There are three ways to set up the hypotheses for a population mean μ :

Two-tailed test Right-tailed test Left-tailed test

$$\begin{array}{lll} H_0 : \mu = \mu_0 & H_0 : \mu = \mu_0 & H_0 : \mu = \mu_0 \\ H_1 : \mu \neq \mu_0 & H_1 : \mu > \mu_0 & H_1 : \mu < \mu_0 \end{array}$$

or

Two-tailed test Right-tailed test Left-tailed test

$$\begin{array}{lll} H_0 : \mu = \mu_0 & H_0 : \mu \leq \mu_0 & H_0 : \mu \geq \mu_0 \\ H_1 : \mu \neq \mu_0 & H_1 : \mu > \mu_0 & H_1 : \mu < \mu_0 \end{array}$$

where μ_0 is a placeholder for the numeric test value.

- The null-hypothesis of a two-tailed test states that the mean μ is equal to some value μ_0 .
- The null-hypothesis of a right-tailed test implies that the mean μ is less than or equal to some value μ_0 .
- The null-hypothesis of a left-tailed test implies that the mean μ is greater than or equal to some value μ_0 .

Look for key phrases in the research question to help you set up the hypotheses. Make sure that the $=$, \leq and \geq sign always go in the null hypothesis. The \neq , $>$ and $<$ sign always go in the alternative hypothesis. Look for these phrases in Figure 8-1 to help you decide if you are setting up a two-tailed test (first column), a right-tailed test (second column), or left-tailed test (third column).

When you read a question, it is essential that you identify the parameter of interest. The parameter determines which distribution to use. Make sure that you can recognize and distinguish which parameter you are making a conjecture about: mean $= \mu$, proportion $= p$, variance $= \sigma^2$, standard deviation $= \sigma$. There will be more parameters in later chapters.

Do not use the sample statistics, like \bar{x} or \hat{p} , in the hypotheses. We are not making any inference about the sample statistics. We know the value of the sample statistic. We use the sample statistics to infer if a change has occurred in the population.

For example, if we were making a conjecture about the percent or proportion in a population we would have the hypotheses:

$$H_0: p = p_0$$

$$H_1: p \neq p_0.$$

Setting up the hypotheses correctly is the most important step in hypothesis testing. Here are some example research questions and how to set up the null and alternative hypotheses correctly; in a later section, we will perform the entire hypothesis test.

Use Figure 8-1 as a guide in setting up your hypotheses. The first column shows the hypotheses and how to shade in the distribution for a two-tailed test, with common phrases in the claim. The two-tailed test will always have a not equal \neq sign in the alternative hypothesis and both tails shaded. The second column is for a right-tailed test. Note that the greater than $>$ sign always will be in the alternative hypothesis and the right tail is shaded. The third column is for a left-tailed test. The left-tailed test will always have a less than $<$ sign in the alternative hypothesis and the left tail shaded in.

Hypothesis Testing Common Phrases

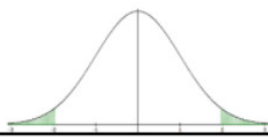

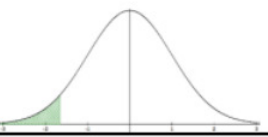
Two-tailed Test	Right-tailed Test	Left-tailed Test
$H_0: \mu = \mu_0$ $H_1: \mu \neq \mu_0$	$H_0: \mu = \mu_0$ $H_1: \mu > \mu_0$	$H_0: \mu = \mu_0$ $H_1: \mu < \mu_0$
		
Claim is in the Null Hypothesis		
=	≤	≥
Is equal to	Is less than or equal to	Is greater than or equal to
Is exactly the same as	Is at most	Is at least
Has not changed from	Is not more than	Is not less than
Is the same as	Within	Is more than or equal to
Claim is in the Alternative Hypothesis		
≠	>	<
Is not	More than	Less than
Is not equal to	Greater than	Below
Is different from	Above	Lower than
Has changed from	Higher than	Shorter than
Is not the same as	Longer than	Smaller than
	Bigger than	Decreased
	Increased	Reduced

Figure 8-1

State the hypotheses in both words and symbols for the following claims.

- The national mean salary for high school teachers is \$61,420. A random sample of 30 teacher's salaries had a mean of \$49,850. A new director for a graduate teacher education program (GTEP) believes that the average salary of a teacher in Oregon is significantly less than national average.
- A high school principal is looking into assigning parking spaces at their school if the proportion of students who own their own car is more than 30%. The principal does not have the time to ask all 1,200 students at their school so instead takes a random sample of 70 students and found that 33% owned their own car.
- A teacher would like to know if the average age of students taking evening classes is different from the university's average age of 26. They sample 40 students from a random sample of evening classes and found the average age to be 27.

Solution

a) The key phrase in the claim is "less than." The less than sign $<$ is only allowed in the alternative hypothesis and we are testing against the national average.

H_0 : The national mean salary is \$61,420.

H_1 : The GTEP director believes the mean salary in Oregon is less than \$61,420.

$H_0: \mu = 61420$

$H_1: \mu < 61420$

b) The key phrase in the claim is "more than." The greater than sign $>$ is only allowed in the alternative hypothesis. This is about a proportion, not a mean, so use the parameter p .

H_0 : The principal will not assign parking spaces if 30% or less of students own a car.

H_1 : The principal will assign parking spaces if more than 30% of students own a car.

$H_0: p = 0.3$

$H_1: p > 0.3$

c) The key word in the claim is "different." The not equal sign \neq is only allowed in the alternative hypothesis.

H_0 : The population mean age is 26 years old.

H_1 : The evening students' mean age is believed to be different from 26 years old.

$H_0: \mu = 26$

$H_1: \mu \neq 26$

Once we collect sample data we need to find out how far away the sample statistic can be from the hypothesized parameter to say that a statistically significant change has occurred.

Suppose a manufacturer of a new laptop battery claims the mean life of the battery is 900 days with a standard deviation of 40 days. You are the buyer of this battery and you think this claim is inflated. You would like to test your belief because without a good reason you cannot get out of your contract. You take a random sample of 35 batteries and find that the mean battery life is 890 days. What are the hypotheses for this question?

Solution

You have a guess that the mean life of a battery is less than 900 days. This is opposed to what the manufacturer claims. There really are two hypotheses, which are just guesses here – the one that the manufacturer claims and the one that you believe. For this problem:

$H_0: \mu = 900$, since the manufacturer says the mean life of a battery is 900 days.

$H_1: \mu < 900$, since you believe the mean life of the battery is less than 900 days.

Note that we do not put the sample mean of 890 in our hypotheses.

Is the sample mean of 890 days small enough to believe that you are right and the manufacturer is wrong? We would expect variation in our sample data and every time we take a new sample, the sample mean will most likely be different. How far away does the sample mean have to be from the product specification to verify our claim was correct? The sample data and the answer to these questions will be answered once we run the hypothesis test.

If you calculated a sample mean of 435, you would definitely believe the population mean is less than 900. However, even if you had a sample mean of 835 you would probably believe that the true mean was less than 900. What about 875? Or 893? There is some point where you would stop being so sure that the population mean is less than 900. That point separates the values of where you are sure or pretty sure that the mean is less than 900 from the area where you are not so sure.

How do you find that point where the sample mean is close enough to the hypothesized population mean? How close depends on how much error you want to make. Of course, you do not want to make any errors, but unfortunately, that is unavoidable in statistics since we are not measuring the entire population. You need to figure out how much error you made with your sample. Take the sample mean, and find the probability of getting another sample mean less than it, assuming for the moment that the manufacturer is right. The idea behind this is that you want to know what is the chance that you could have come up with your sample mean even if the population mean really is 900 days.

You want to find $P(\bar{X} < 890 \mid H_0 \text{ is true}) = P(\bar{X} < 890 \mid \mu = 900)$. For short, we will call this probability the p-value or simply p.

To compute this p-value, you need to know how the sample mean is distributed. Since the sample size is at least 30 you know the sample mean is approximately normally distributed, by the Central Limit Theorem (CLT). Remember $\mu_{\bar{x}} = \mu$ and $\sigma_{\bar{x}} = \frac{\sigma}{\sqrt{n}}$. Before calculating the probability, it is useful to see how many standard deviations away from the mean the sample mean is. Using the formula for the z-score for CLT, $z = \frac{\bar{x} - \mu}{\left(\frac{\sigma}{\sqrt{n}}\right)}$ we can compare this z-score to a zscore based on how sure we want to be of not making a mistake.

Using our sample mean we compute the z-score: $z = \frac{\bar{x} - \mu_0}{\left(\frac{\sigma}{\sqrt{n}}\right)} = \frac{890 - 900}{\left(\frac{40}{\sqrt{35}}\right)} = -1.479$. This sample mean is more than one standard deviation away from the mean. Is that far enough?

Look at the probability $P(\bar{X} < 890 \mid H_0 \text{ is true}) = P(\bar{X} < 890 \mid \mu = 900) = P(Z < -1.479)$.

Using the TI Calculator `normalcdf(-1E99,890,900,40/√35)` ≈ 0.0696 .

Alternatively, in Excel use `=NORM.DIST(890,900,40/SQRT(35),TRUE) ≈ 0.0696`.

Hence the p-value = 0.0696.

A picture is always useful. Figures 8-2 shows the populations distribution. Figure 8-3 shows the sampling distribution of the mean.

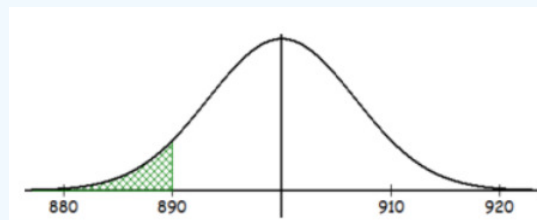


Figure 8-2

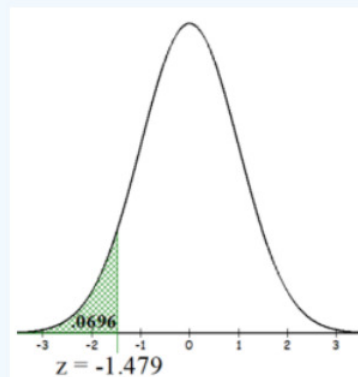


Figure 8-3

There is approximately a 6.96% chance that you could find a sample mean less than 890 when the population mean is 900 days. This is small but not really small. But how do you quantify really small? Is 5% or 10% or 15% really small? How do you decide? That depends on your field of study and the importance of the situation and will be answered in the next section.

To understand the process of a hypothesis test, you need to first understand what a hypothesis is, which is an educated guess about a parameter. Once you have the alternative hypothesis, you collect data and use the data to decide to see if there is enough evidence to show that the alternative hypothesis is true. However, in hypothesis testing you actually assume something else is true, the null hypothesis, and then you look at your data to see how likely it is to get an event that your data demonstrates with that assumption. If the event is very unusual, then you might think that your assumption is actually false. If you are able to say this assumption is false, then your alternative hypothesis could be true. You assume the opposite of your alternative hypothesis is true and show that it cannot be true. If this happens, then your alternative hypothesis is probably true. All hypothesis tests go through the same process. Once you have the process down, then the concept is much easier.

When setting up your hypotheses make sure the parameter, not the statistic, is used in the hypotheses. The equality always goes in the null hypothesis H_0 and the alternative hypothesis H_a will be a left-tailed test with a less than sign $<$, a two-tailed test with a not equal sign \neq , or a right-tailed test with a greater than sign $>$.

“‘But alright,’ went on the rumblings, ‘so what’s the alternative?’”

‘Well,’ said Ford, brightly but slowly, ‘stop doing it of course!’”

(Adams, 2002)

This page titled [8.1: Introduction](#) is shared under a [CC BY-SA 4.0](#) license and was authored, remixed, and/or curated by [Rachel Webb](#) via [source content](#) that was edited to the style and standards of the LibreTexts platform.

8.2: Type I and II Errors

How do you quantify really small? Is 5% or 10% or 15% really small? How do you decide? That depends on your field of study and the importance of the situation. Is this a pilot study? Is someone's life at risk? Would you lose your job? Most industry standards use 5% as the cutoff point for how small is small enough, but 1%, 5% and 10% are frequently used depending on what the situation calls for.

Now, how small is small enough? To answer that, you really want to know the types of errors you can make in hypothesis testing.

The first error is if you say that H_0 is false, when in fact it is true. This means you reject H_0 when H_0 was true. The second error is if you say that H_0 is true, when in fact it is false. This means you fail to reject H_0 when H_0 is false.

Figure 8-4 shows that if we "Reject H_0 " when H_0 is actually true, we are committing a type I error. The probability of committing a type I error is the Greek letter α , pronounced alpha. This can be controlled by the researcher by choosing a specific level of significance α .

	H_0 True	H_0 False
Reject H_0	Type I Error	Correct Decision
Do Not Reject H_0	Correct Decision	Type II Error

Figure 8-4

Figure 8-4 shows that if we "Do Not Reject H_0 " when H_0 is actually false, we are committing a type II error. The probability of committing a type II error is denoted with the Greek letter β , pronounced beta. When we increase the sample size this will reduce β . The power of a test is $1 - \beta$.

A jury trial is about to take place to decide if a person is guilty of committing murder. The hypotheses for this situation would be:

- H_0 : The defendant is innocent
- H_1 : The defendant is not innocent

The jury has two possible decisions to make, either acquit or convict the person on trial, based on the evidence that is presented. There are two possible ways that the jury could make a mistake. They could convict an innocent person or they could let a guilty person go free. Both are bad news, but if the death penalty was sentenced to the convicted person, the justice system could be killing an innocent person. If a murderer is let go without enough evidence to convict them then they could possibly murder again. In statistics we call these two types of mistakes a type I and II error.

Figure 8-5 is a diagram to see the four possible jury decisions and two errors.

Jury's Decision	What really happened?	
	H_0 True (the person is innocent)	H_0 False (the person is guilty)
Reject H_0 (Convict)	Type I Error $\alpha = P(\text{Type I error})$ (Level of Significance)	Correct Decision $1 - \beta$ (Power)
Do Not Reject H_0 (Acquit)	Correct Decision $1 - \alpha$ (Confidence Level)	Type II Error $\beta = P(\text{Type II error})$

Figure 8-5

Type I Error is rejecting H_0 when H_0 is true, and **Type II Error** is failing to reject H_0 when H_0 is false.

Since these are the only two possible errors, one can define the probabilities attached to each error.

$$\alpha = P(\text{Type I Error}) = P(\text{Rejecting } H_0 \mid H_0 \text{ is true})$$

$$\beta = P(\text{Type II Error}) = P(\text{Failing to reject } H_0 \mid H_0 \text{ is false})$$

An investment company wants to build a new food cart. They know from experience that food carts are successful if they have on average more than 100 people a day walk by the location. They have a potential site to build on, but before they begin, they want to see if they have enough foot traffic. They observe how many people walk by the site every day over a month. They will build if there is more than an average of 100 people who walk by the site each day. In simple terms, explain what the type I & II errors would be using context from the problem.

Solution

The hypotheses are: $H_0: \mu = 100$ and $H_1: \mu > 100$.

Sometimes it is helpful to use words next to your hypotheses instead of the formal symbols

- $H_0: \mu \leq 100$ (Do not build)
- $H_1: \mu > 100$ (Build).

A type I error would be to reject the null when in fact it is true. Take your finger and cover up the null hypothesis (our decision is to reject the null), then what is showing? The alternative hypothesis is what action we take.

If we reject H_0 then we would build the new food cart. However, H_0 was actually true, which means that the mean was less than or equal to 100 people walking by.

In more simple terms, this would mean that our evidence showed that we have enough foot traffic to support the food cart. Once we build, though, there was not on average more than 100 people that walk by and the food cart may fail.

A type II error would be to fail to reject the null when in fact the null is false. Evidence shows that we should not build on the site, but this actually would have been a prime location to build on.

The missed opportunity of a type II error is not as bad as possibly losing thousands of dollars on a bad investment.

What is more severe of an error is dependent on what side of the desk you are sitting on. For instance, if a hypothesis is about miles per gallon for a new car the hypotheses may be set up differently depending on if you are buying the car or selling the car. For this course, the claim will be stated in the problem and always set up the hypotheses to match the stated claim. In general, the research question should be set up as some type of change in the alternative hypothesis.

Controlling for Type I Error

The significance level used by the researcher should be picked prior to collection and analyzing data. This is called “a priori,” versus picking α after you have done your analysis which is called “post hoc.” When deciding on what significance level to pick, one needs to look at the severity of the consequences of the type I and type II errors. For example, if the type I error may cause the loss of life or large amounts of money the researcher would want to set α low.

Controlling for Type II Error

The power of a test is the complement of a type II error or correctly rejecting a false null hypothesis. You can increase the power of the test and hence decrease the type II error by increasing the sample size. Similar to confidence intervals, where we can reduce our margin of error when we increase the sample size. In general, we would like to have a high confidence level and a high power for our hypothesis tests. When you increase your confidence level, then in turn the power of the test will decrease. Calculating the probability of a type II error is a little more difficult and it is a conditional probability based on the researcher’s hypotheses and is not discussed in this course.

“‘That’s right!’ shouted Vroomfondel, ‘we demand rigidly defined areas of doubt and uncertainty!’”

(Adams, 2002)

Visualizing α and β

If α increases that means the chances of making a type I error will increase. It is more likely that a type I error will occur. It makes sense that you are less likely to make type II errors, only because you will be rejecting H_0 more often. You will be failing to reject

H_0 less, and therefore, the chance of making a type II error will decrease. Thus, as α increases, β will decrease, and vice versa. That makes them seem like complements, but they are not complements. Consider one more factor – sample size.

Consider if you have a larger sample that is representative of the population, then it makes sense that you have more accuracy than with a smaller sample. Think of it this way, which would you trust more, a sample mean of 890 if you had a sample size of 35 or sample size of 350 (assuming a representative sample)? Of course, the 350 because there are more data points and so more accuracy. If you are more accurate, then there is less chance that you will make any error.

By increasing the sample size of a representative sample, you decrease β .

- For a constant sample size, n , if α increases, β decreases.
- For a constant significance level, α , if n increases, β decreases.

When the sample size becomes large, point estimates become more precise and any real differences in the mean and null value become easier to detect and recognize. Even a very small difference would likely be detected if we took a large enough sample size. Sometimes researchers will take such a large sample size that even the slightest difference is detected. While we still say that difference is statistically significant, it might not be practically significant. Statistically significant differences are sometimes so minor that they are not practically relevant. This is especially important to research: if we conduct a study, we want to focus on finding a meaningful result. We do not want to spend lots of money finding results that hold no practical value.

The role of a statistician in conducting a study often includes planning the size of the study. The statistician might first consult experts or scientific literature to learn what would be the smallest meaningful difference from the null value. They also would obtain some reasonable estimate for the standard deviation. With these important pieces of information, they would choose a sufficiently large sample size so that the power for the meaningful difference is perhaps 80% or 90%. While larger sample sizes may still be used, the statistician might advise against using them in some cases, especially in sensitive areas of research.

If we look at the following two sampling distributions in Figure 8-6, the one on the left represents the sampling distribution for the true unknown mean. The curve on the right represents the sampling distribution based on the hypotheses the researcher is making. Do you remember the difference between a sampling distribution, the distribution of a sample, and the distribution of the population? Revisit the Central Limit Theorem in Chapter 6 if needed.

If we start with $\alpha = 0.05$, the critical value is represented by the vertical green line at $z_\alpha = 1.96$. Then the blue shaded area to the right of this line represents α . The area under the curve to the left of $z_{\alpha/2} = 1.96$ based on the researcher's claim would represent β .

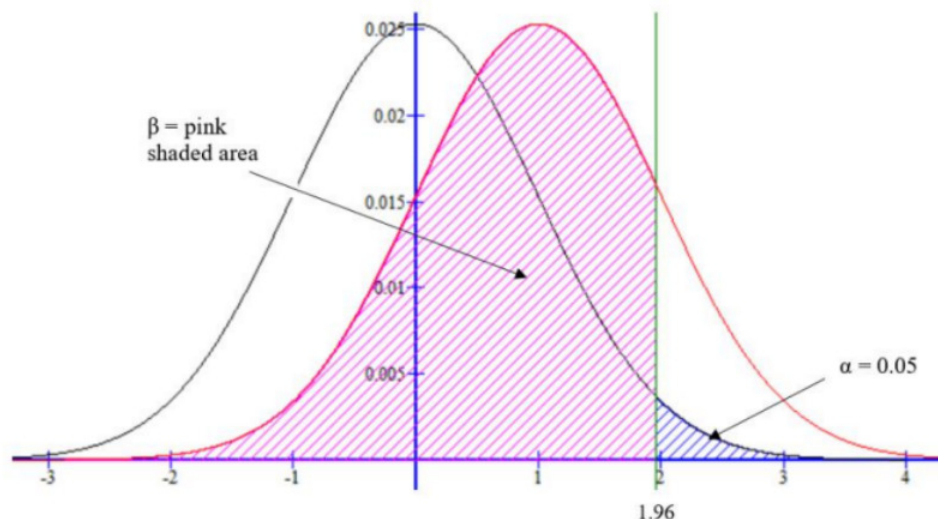


Figure 8-6

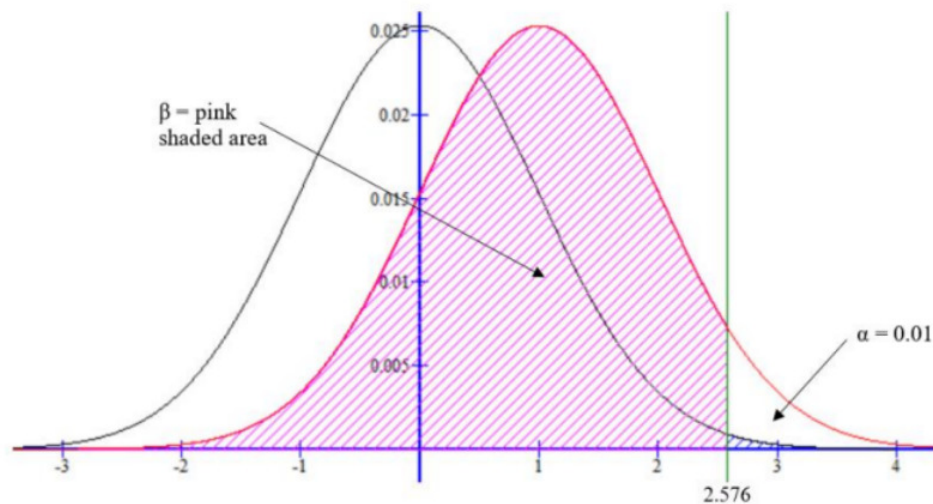


Figure 8-7

If we were to change α from 0.05 to 0.01 then we get a critical value of $z_{\alpha/2} = 2.576$. Note that when α decreases, then β increases which means your power $1 - \beta$ decreases. See Figure 8-7.

This text does not go over how to calculate β . You will need to be able to write out a sentence interpreting either the type I or II errors given a set of hypotheses. You also need to know the relationship between α , β , confidence level, and power.

Hypothesis tests are not flawless, since we can make a wrong decision in statistical hypothesis tests based on the data. For example, in the court system, innocent people are sometimes wrongly convicted and the guilty sometimes walk free, or diagnostic tests that have false negatives or false positives. However, the difference is that in statistical hypothesis tests, we have the tools necessary to quantify how often we make such errors. A type I Error is rejecting the null hypothesis when H_0 is actually true. A type II Error is failing to reject the null hypothesis when the alternative is actually true (H_0 is false).

We use the symbols $\alpha = P(\text{Type I Error})$ and $\beta = P(\text{Type II Error})$. The critical value is a cutoff point on the horizontal axis of the sampling distribution that you can compare your test statistic to see if you should reject the null hypothesis. For a left-tailed test the critical value will always be on the left side of the sampling distribution, the right-tailed test will always be on the right side, and a two-tailed test will be on both tails. Use technology to find the critical values. Most of the time in this course the shortcut menus that we use will give you the critical values as part of the output.

8.2.1 Finding Critical Values

A researcher decides they want to have a 5% chance of making a type I error so they set $\alpha = 0.05$. What z-score would represent that 5% area? It would depend on if the hypotheses were a left-tailed, two-tailed or right-tailed test. This zscore is called a critical value. Figure 8-8 shows examples of critical values for the three possible sets of hypotheses.

Two-Tailed Test	Right-Tailed Test	Left-Tailed Test
$H_0: \mu = \mu_0$ $H_1: \mu \neq \mu_0$	$H_0: \mu = \mu_0$ $H_1: \mu > \mu_0$	$H_0: \mu = \mu_0$ $H_1: \mu < \mu_0$

Figure 8-8

Two-tailed Test

If we are doing a two-tailed test then the $\alpha = 5\%$ area gets divided into both tails. We denote these critical values $z_{\alpha/2}$ and $z_{1-\alpha/2}$. When the sample data finds a z-score (*test statistic*) that is either less than or equal to $z_{\alpha/2}$ or greater than or equal to $z_{1-\alpha/2}$ then

we would reject H_0 . The area to the left of the critical value $z_{\alpha/2}$ and to the right of the critical value $z_{1-\alpha/2}$ is called the critical or rejection region. See Figure 8-9.

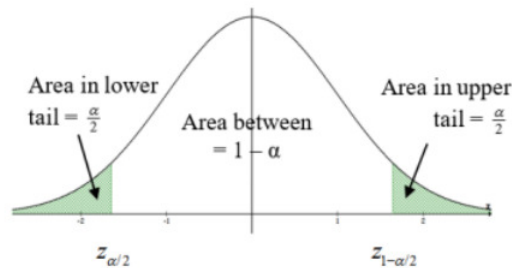


Figure 8-9

When $\alpha = 0.05$ then the critical values $z_{\alpha/2}$ and $z_{1-\alpha/2}$ are found using the following technology.

Excel: $z_{\alpha/2} = \text{NORM.S.INV}(0.025) = -1.96$ and $z_{1-\alpha/2} = \text{NORM.S.INV}(0.975) = 1.96$

TI-Calculator: $z_{\alpha/2} = \text{invNorm}(0.025, 0, 1) = -1.96$ and $z_{1-\alpha/2} = \text{invNorm}(0.975, 0, 1) = 1.96$

Since the normal distribution is symmetric, you only need to find one side's z-score and we usually represent the critical values as $\pm z_{\alpha/2}$.

Most of the time we will be finding a probability (p-value) instead of the critical values. The p-value and critical values are related and tell the same information so it is important to know what a critical value represents.

Right-tailed Test

If we are doing a right-tailed test then the $\alpha = 5\%$ area goes into the right tail. We denote this critical value $z_{1-\alpha}$. When the sample data finds a z-score more than $z_{1-\alpha}$ then we would reject H_0 , reject H_0 if the test statistic is $\geq z_{1-\alpha}$. The area to the right of the critical value $z_{1-\alpha}$ is called the critical region. See Figure 8-10.

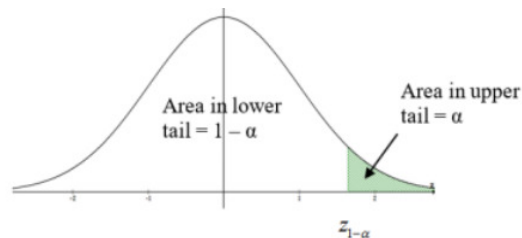


Figure 8-10

When $\alpha = 0.05$ then the critical value $z_{1-\alpha}$ is found using the following technology.

Excel: $z_{1-\alpha} = \text{NORM.S.INV}(0.95) = 1.645$ Figure 8-10

TI-Calculator: $z_{1-\alpha} = \text{invNorm}(0.95, 0, 1) = 1.645$

Left-tailed Test

If we are doing a left-tailed test then the $\alpha = 5\%$ area goes into the left tail. If the sampling distribution is a normal distribution then we can use the inverse normal function in Excel or calculator to find the corresponding z-score. We denote this critical value z_{α} .

When the sample data finds a z-score less than z_{α} then we would reject H_0 , reject H_0 if the test statistic is $\leq z_{\alpha}$. The area to the left of the critical value z_{α} is called the critical region. See Figure 8-11.

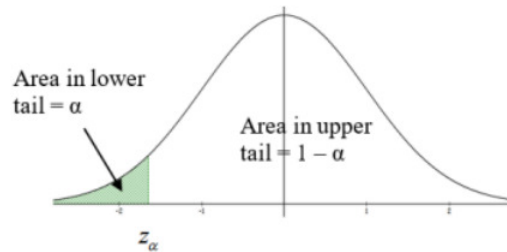


Figure 8-11

When $\alpha = 0.05$ then the critical value z_α is found using the following technology.

Excel: $z_\alpha = \text{NORM.S.INV}(0.05) = -1.645$

TI-Calculator: $z_\alpha = \text{invNorm}(0.05, 0, 1) = -1.645$

The Claim and Summary

The wording on the summary statement changes depending on which hypothesis the researcher claims to be true. We really should always be setting up the claim in the alternative hypothesis since most of the time we are collecting evidence to show that a change has occurred, but occasionally a textbook will have the claim in the null hypothesis. **Do not use the phrase “accept H_0 ” since this implies that H_0 is true.** The lack of evidence is not evidence of nothing.

There were only two possible correct answers for the decision step.

- i. Reject H_0
- ii. Fail to reject H_0

Caution! If we fail to reject the null this does not mean that there was no change, we just do not have any evidence that change has occurred. The absence of evidence is not evidence of absence. On the other hand, we need to be careful when we reject the null hypothesis we have not proved that there is change.

When we reject the null hypothesis, there is only evidence that a change has occurred. Our evidence could have been false and lead to an incorrect decision. If we use the phrase, “accept H_0 ” this implies that H_0 was true, but we just do not have evidence that it is false. Hence you will be marked incorrect for your decision if you use accept H_0 , use instead “fail to reject H_0 ” or “do not reject H_0 .”

This page titled [8.2: Type I and II Errors](#) is shared under a [CC BY-SA 4.0](#) license and was authored, remixed, and/or curated by [Rachel Webb](#) via [source content](#) that was edited to the style and standards of the LibreTexts platform.

8.3: Hypothesis Test for One Mean

There are three methods used to test hypotheses:

The Traditional Method (Critical Value Method)

There are five steps in hypothesis testing when using the traditional method:

- i. Identify the claim and formulate the hypotheses.
- ii. Compute the test statistic.
- iii. Compute the critical value(s) and state the rejection rule (the rule by which you will reject the null hypothesis (H_0)).
- iv. Make the decision to reject or not reject the null hypothesis by comparing the test statistic to the critical value(s). Reject H_0 when the test statistic is in the critical tail(s).
- v. Summarize the results and address the claim using context and units from the research question.

Steps ii and iii do not have to be in that order so make sure you know the difference between the critical value, which comes from the stated significance level α , and the test statistic, which is calculated from the sample data.

Note: The test statistic and the critical value(s) come from the same distribution and will usually have the same letter such as z, t, or F. The critical value(s) will have a subscript with the lower tail area ($z_\alpha, z_{1-\alpha}, z_{\alpha/2}$) or an asterisk next to it (z^*) to distinguish it from the test statistic.

You can find the critical value(s) or test statistic in any order, but make sure you know the difference when you compare the two. The critical value is found from α and is the start of the shaded area called the critical region (also called rejection region or area). The test statistic is computed using sample data and may or may not be in the critical region.

The critical value(s) is set before you begin (a priori) by the level of significance you are using for your test. This critical value(s) defines the shaded area known as the rejection area. The test statistic for this example is the z-score we find using the sample data that is then compared to the shaded tail(s). When the test statistic is in the shaded rejection area, you reject the null hypothesis. When your test statistic is not in the shaded rejection area, then you fail to reject the null hypothesis. Depending on if your claim is in the null or the alternative, the sample data may or may not support your claim.

The P-value Method

Most modern statistics and research methods utilize this method with the advent of computers and graphing calculators.

There are five steps in hypothesis testing when using the p-value method:

- i. Identify the claim and formulate the hypotheses.
- ii. Compute the test statistic.
- iii. Compute the p-value.
- iv. Make the decision to reject or not reject the null hypothesis by comparing the p-value with α . Reject H_0 when the p-value $\leq \alpha$.
- v. Summarize the results and address the claim.

The ideas below review the process of evaluating hypothesis tests with p-values:

- The null hypothesis represents a skeptic's position or a position of no difference. We reject this position only if the evidence strongly favors the alternative hypothesis.
- A small p-value means that if the null hypothesis is true, there is a low probability of seeing a point estimate at least as extreme as the one we saw. We interpret this as strong evidence in favor of the alternative hypothesis.
- The p-value is constructed in such a way that we can directly compare it to the significance level (α) to determine whether to reject H_0 . We reject the null hypothesis if the p-value is smaller than the significance level, α , which is usually 0.05. Otherwise, we fail to reject H_0 .
- We should always state the conclusion of the hypothesis test in plain language use context and units so non-statisticians can also understand the results.

The Confidence Interval Method (results are in the same units as the data)

There are four steps in hypothesis testing when using the confidence interval method:

- i. Identify the claim and formulate the hypotheses.

- ii. Compute confidence interval.
- iii. Make the decision to reject or not reject the null hypothesis by comparing the p-value with α . Reject H_0 when the hypothesized value found in H_0 is outside the bounds of the confidence interval. We only will be doing a two-tailed version of this.
- iv. Summarize the results and address the claim.

For all 3 methods, Step i is the most important step. If you do not correctly set up your hypotheses then the next steps will be incorrect.

The decision and summary would be the same no matter which method you use. Figure 8-12 is a flow chart that may help with starting your summaries, but make sure you finish the sentence with context and units from the question.

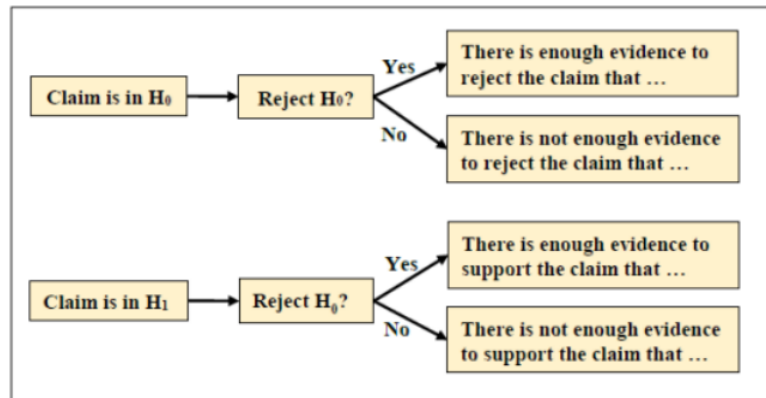


Figure 8-12

The hypothesis-testing framework is a very general tool, and we often use it without a second thought. If a person makes a somewhat unbelievable claim, we are initially skeptical. However, if there is sufficient evidence that supports the claim, we set aside our skepticism and reject the null hypothesis in favor of the alternative.

8.3.1 Z-Test

When the population standard deviation is known and stated in the problem, we will use the **z-test**.

The **z-test** is a statistical test for the mean of a population. It can be used when σ is known. The population should be approximately normally distributed when $n < 30$.

When using this model, the *test statistic* is $Z = \frac{\bar{x} - \mu_0}{\left(\frac{\sigma}{\sqrt{n}}\right)}$ where μ_0 is the test value from the H_0 .

M&Ms candies advertise a mean weight of 0.8535 grams. A sample of 50 M&M candies are randomly selected from a bag of M&Ms and the mean is found to be $\bar{x} = 0.8472$ grams. The standard deviation of the weights of all M&Ms is (somehow) known to be $\sigma = 0.06$ grams. A skeptic M&M consumer claims that the mean weight is less than what is advertised. Test this claim using the **traditional method** of hypothesis testing. Use a 5% level of significance.

Solution

By letting $\alpha = 0.05$, we are allowing a 5% chance that the null hypothesis (average weight that is at least 0.8535 grams) is rejected when in actuality it is true.

1. Identify the Claim: The claim is “M&Ms candies have a mean weight that is less than 0.8535 grams.” This translates mathematically to $\mu < 0.8535$ grams. Therefore, the null and alternative hypotheses are:

$H_0: \mu = 0.8535$

$H_1: \mu < 0.8535$ (claim)

This is a left-tailed test since the alternative hypothesis has a “less than” sign.

We are performing a test about a population mean. We can use the z-test because we were given a population standard deviation σ (not a sample standard deviation s). In practice, σ is rarely known and usually comes from a similar study or

previous year's data.

2. Find the Critical Value: The critical value for a left-tailed test with a level of significance $\alpha = 0.05$ is found in a way similar to finding the critical values from confidence intervals. Because we are using the z-test, we must find the critical value z_α from the z (standard normal) distribution.

This is a left-tailed test since the sign in the alternative hypothesis is $<$ (most of the time a left-tailed test will have a negative z-score test statistic).

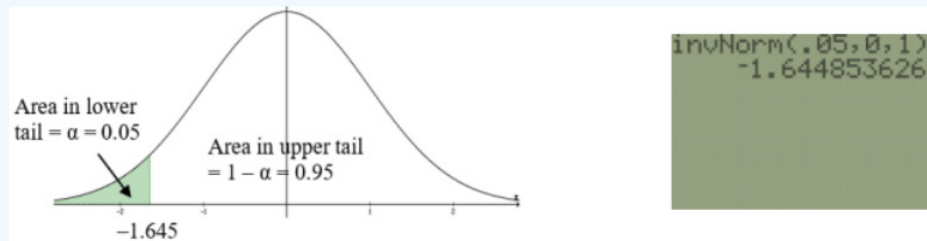


Figure 8-13

First draw your curve and shade the appropriate tale with the area $\alpha = 0.05$. Usually the technology you are using only asks for the area in the left tail, which in this case is $\alpha = 0.05$. For the TI calculators, under the DISTR menu use `invNorm(0.05,0,1)` = -1.645. See Figure 8-13.

For Excel use `=NORM.S.INV(0.05)`.

3. Find the Test Statistic: The formula for the test statistic is the z-score that we used back in the Central Limit Theorem section $z = \frac{\bar{x} - \mu_0}{\left(\frac{\sigma}{\sqrt{n}}\right)} = \frac{0.8472 - 0.8535}{\left(\frac{0.06}{\sqrt{50}}\right)} = -0.7425$.

4. Make the Decision: Figure 8-14 shows both the critical value and the test statistic. There are only two possible correct answers for the decision step.

- i. Reject H_0
- ii. Fail to reject H_0

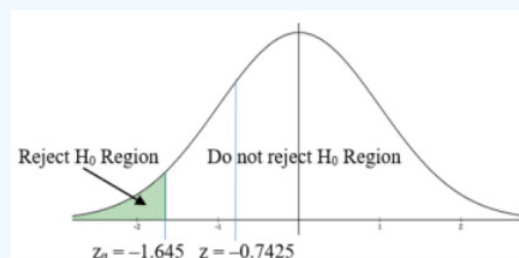


Figure 8-14

To make the decision whether to “Do not reject H_0 ” or “Reject H_0 ” using the traditional method, we must compare the test statistic $z = -0.7425$ with the critical value $z_\alpha = -1.645$.

When the test statistic is in the shaded tail, called the rejection area, then we would reject H_0 , if not then we fail to reject H_0 . Since the test statistic $z \approx -0.7425$ is in the unshaded region, the decision is: Do not reject H_0 .

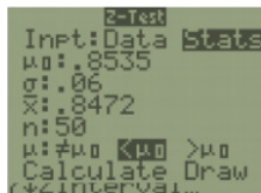
5. Summarize the Results: At 5% level of significance, there is not enough evidence to support the claim that the mean weight is less than 0.8535 grams.

Example 8-5 used the traditional critical value method. With the onset of computers, this method is outdated and the p-value and confidence interval methods are becoming more popular.

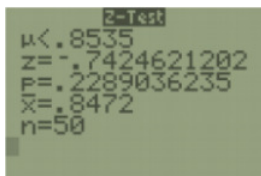
Most statistical software packages will give a p-value and confidence interval but not the critical value.

TI-84: Press the [STAT] key, go to the [TESTS] menu, arrow down to the [Z-Test] option and press the [ENTER] key. Arrow over to the [Stats] menu and press the [ENTER] key. Then type in value for the hypothesized mean (μ_0), standard deviation, sample

mean, sample size, arrow over to the \neq , $<$, $>$ sign that is in the alternative hypothesis statement then press the [ENTER] key, arrow down to [Calculate] and press the [ENTER] key. *Alternatively* (If you have raw data in a list) Select the [Data] menu and press the [ENTER] key. Then type in the value for the hypothesized mean (μ_0), type in your list name (TI-84 L₁ is above the 1 key).



Press the [STAT] key, go to the [TESTS] menu, arrow down to either the [Z-Test] option and press the [ENTER] key. Arrow over to the [Stats] menu and press the [ENTER] key. Then type in value for the hypothesized mean (μ_0), standard deviation, sample mean, sample size, arrow over to the \neq , $<$, $>$ sign that is in the alternative hypothesis statement then press the [ENTER] key, arrow down to [Calculate] and press the [ENTER] key. *Alternatively* (If you have raw data in a list) Select the [Data] menu and press the [ENTER] key. Then type in the value for the hypothesized mean (μ_0), type in your list name (TI-84 L₁ is above the 1 key).



The calculator returns the alternative hypothesis (check and make sure you selected the correct sign), the test statistic, p-value, sample mean, and sample size.

TI-89: Go in to the Stat/List Editor App. Select [F6] Tests. Select the first option Z-Test. Select Data if you have raw data in a list, select Stats if you have the summarized statistics given to you in the problem. If you have data, press [2nd] Var-Link, the go down to list1 in the main folder to select the list name. If you have statistics then enter the values. Leave Freq:1 alone, arrow over to the \neq , $<$, $>$ sign that is in the alternative hypothesis statement then press the [ENTER] key, arrow down to [Calculate] and press the [ENTER] key. The calculator returns the test statistic and the p-value.



What is the p-value?

The p-value is the probability of observing an effect as least as extreme as in your sample data, assuming that the null hypothesis is true. The p-value is calculated based on the assumptions that the null hypothesis is true for the population and that the difference in the sample is caused entirely by random chance.

Recall the example at the beginning of the chapter.

Suppose a manufacturer of a new laptop battery claims the mean life of the battery is 900 days with a standard deviation of 40 days. You are the buyer of this battery and you think this claim is inflated. You would like to test your belief because without a good reason you cannot get out of your contract. You take a random sample of 35 batteries and find that the mean battery life is 890 days. Test the claim using the p-value method. Let $\alpha = 0.05$.

Solution

We had the following hypotheses:

$H_0: \mu = 900$, since the manufacturer says the mean life of a battery is 900 days.

$H_1: \mu < 900$, since you believe the mean life of the battery is less than 900 days.

The test statistic was found to be: $Z = \frac{\bar{x} - \mu_0}{\left(\frac{\sigma}{\sqrt{n}}\right)} = \frac{890 - 900}{\left(\frac{40}{\sqrt{35}}\right)} = -1.479$.

The p-value is $P(\bar{x} < 890 \mid H_0 \text{ is true}) = P(\bar{x} < 890 \mid \mu = 900) = P(Z < -1.479)$.

On the TI Calculator use `normalcdf(-1E99,890,900,40/√35) ≈ 0.0696`. See Figure 8-15.

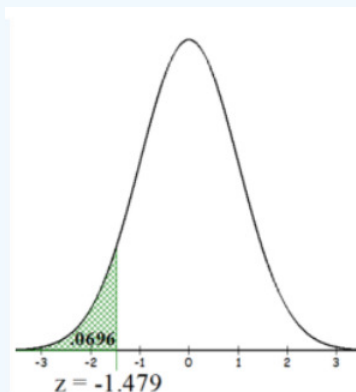
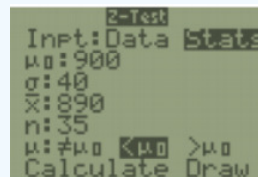
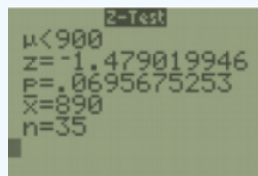


Figure 8-15

Alternatively, in Excel use `=NORM.DIST(890,900,40/SQRT(35),TRUE) ≈ 0.0696`.



The TI calculators will easily find the p-value for you.



Now compare the p-value = 0.0696 to $\alpha = 0.05$. Make the decision to reject or not reject the null hypothesis by comparing the p-value with α . Reject H_0 when the p-value $\leq \alpha$, and do not reject H_0 when the p-value $> \alpha$. The p-value for this example is larger than alpha $0.0696 > 0.05$, therefore the decision is to not reject H_0 .

Since we fail to reject the null, there is not enough evidence to indicate that the mean life of the battery is less than 900 days.

8.3.2 T-Test

When the population standard deviation is unknown, we will use the **t-test**.

The **t-test** is a statistical test for the mean of a population. It will be used when σ is unknown. The population should be approximately normally distributed when $n < 30$.

When using this model, the *test statistic* is $t = \frac{\bar{x} - \mu_0}{\left(\frac{s}{\sqrt{n}}\right)}$ where μ_0 is the test value from the H_0 . The degrees of freedom are $df = n - 1$.

Z Versus T

The z and t-tests are easy to mix up. Sometimes a standard deviation will be stated in the problem without specifying if it is a population's standard deviation σ or the sample standard deviation s . If the standard deviation is in the same sentence that describes

the sample or only raw data is given then this would be s . When you only have sample data, use the t -test.

Figure 8-16 is a flow chart to remind you when to use z versus t .

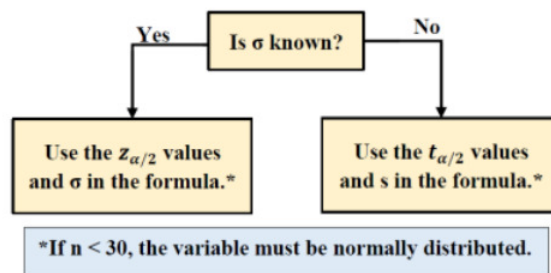


Figure 8-16

Use Figure 8-17 as a guide in setting up your hypotheses. The two-tailed test will always have a not equal \neq sign in H_1 and both tails shaded. The right-tailed test will always have the greater than $>$ sign in H_1 and the right tail shaded. The left-tailed test will always have a less than $<$ sign in H_1 and the left tail shaded.



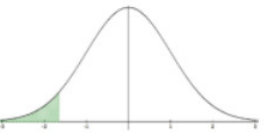
Two-tailed Test	Right-tailed Test	Left-tailed Test
$H_0: \mu = \mu_0$ $H_1: \mu \neq \mu_0$	$H_0: \mu = \mu_0$ $H_1: \mu > \mu_0$	$H_0: \mu = \mu_0$ $H_1: \mu < \mu_0$
		
Claim is in the Null Hypothesis		
$=$	\leq	\geq
Is equal to	Is less than or equal to	Is greater than or equal to
Is exactly the same as	Is at most	Is at least
Has not changed from	Is not more than	Is not less than
Is the same as	Within	Is more than or equal to
Claim is in the Alternative Hypothesis		
\neq	$>$	$<$
Is not	More than	Less than
Is not equal to	Greater than	Below
Is different from	Above	Lower than
Has changed from	Higher than	Shorter than
Is not the same as	Longer than	Smaller than
	Bigger than	Decreased
	Increased	Reduced

Figure 8-17

The label on a particular brand of cream of mushroom soup states that (on average) there is 870 mg of sodium per serving. A nutritionist would like to test if the average is actually more than the stated value. To test this, 13 servings of this soup were randomly selected and amount of sodium measured. The sample mean was found to be 882.4 mg and the sample standard deviation was 24.3 mg. Assume that the amount of sodium per serving is normally distributed. Test this claim using the traditional method of hypothesis testing. Use the $\alpha = 0.05$ level of significance.

Solution

Step 1: State the hypotheses and identify the claim: The statement “the average is more ($>$) than 870” must be in the alternative hypothesis. Therefore, the null and alternative hypotheses are:

$$H_0: \mu = 870$$

$$H_1: \mu > 870 \text{ (claim)}$$

This is a right-tailed test with the claim in the alternative hypothesis.

Step 2: Compute the test statistic: We are using the t-test because we are performing a test about a population mean. We must use the t-test (instead of the z-test) because the population standard deviation σ is unknown. (Note: be sure that you know why we are using the t-test instead of the z-test in general.)

$$\text{The formula for the test statistic is } t = \frac{\bar{x} - \mu_0}{\left(\frac{s}{\sqrt{n}}\right)} = \frac{882.4 - 870}{\left(\frac{24.3}{\sqrt{13}}\right)} = 1.8399.$$

Note: If you were given raw data use 1-var Stats on your calculator to find the sample mean, sample size and sample standard deviation.

Step 3: Compute the critical value(s): The critical value for a right-tailed test with a level of significance $\alpha = 0.05$ is found in a way similar to finding the critical values from confidence intervals.

Since we are using the t-test, we must find the critical value $t_{1-\alpha}$ from a t-distribution with the degrees of freedom, $df = n - 1 = 13 - 1 = 12$. Use the DISTR menu **invT** option. Note that if you have an older TI-84 or a TI-83 calculator you need to have the invT program installed or use Excel.

Draw and label the t-distribution curve with the critical value as in Figure 8-18.

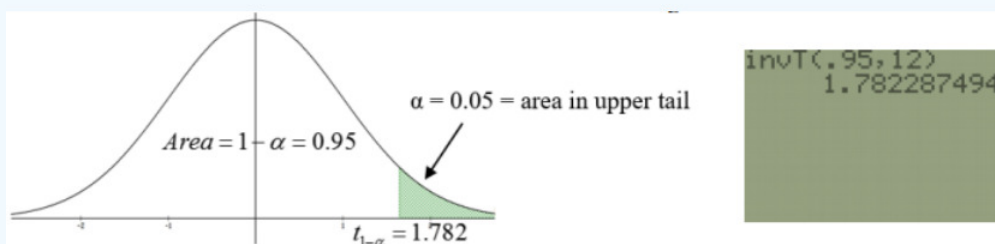


Figure 8-18

The critical value is $t_{1-\alpha} = 1.782$ and the rejection rule becomes: Reject H_0 if the test statistic $t \geq t_{1-\alpha} = 1.782$.

Step 4: State the decision. Decision: Since the test statistic $t = 1.8399$ is in the critical region, we should Reject H_0 .

Step 5: State the summary. Summary: At the 5% significance level, we have sufficient evidence to say that the average amount of sodium per serving of cream of mushroom soup exceeds the stated 870 mg amount.

Example 8-7 Continued:

Use the prior example, but this time use the **p-value method**. Again, let the significance level be $\alpha = 0.05$.

Solution

Step 1: The hypotheses remain the same. $H_0: \mu = 870$

$$H_1: \mu > 870 \text{ (claim)}$$

Step 2: The test statistic remains the same, $t = \frac{\bar{x} - \mu_0}{\left(\frac{s}{\sqrt{n}}\right)} = \frac{882.4 - 870}{\left(\frac{24.3}{\sqrt{13}}\right)} = 1.8399$.

Step 3: Compute the p-value.

For a right-tailed test, the p-value is found by finding the area to the right of the test statistic $t = 1.8399$ under a t-distribution with 12 degrees of freedom. See Figure 8-19.

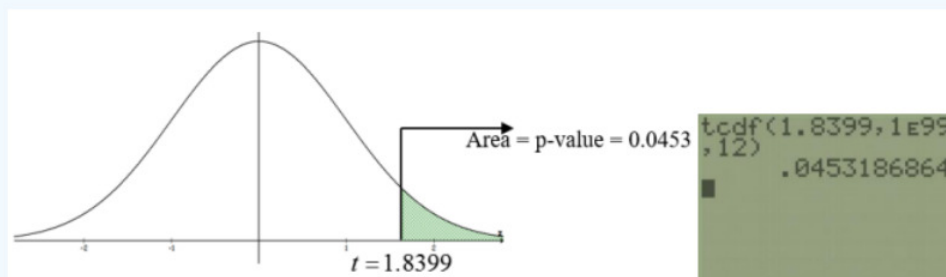


Figure 8-19

Note that exact p-values for a t-test can only be found using a computer or calculator. For the TI calculators this is in the DISTR menu. Use $\text{tcdf}(\text{lower}, \text{upper}, df)$.

For this example, we would have $p\text{-value} = \text{tcdf}(1.8399, \infty, 12) = 0.0453$.

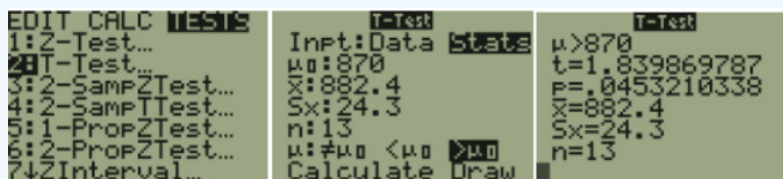
The p-value is the probability of observing an effect as least as extreme as in your sample data, assuming that the null hypothesis is true. The p-value is calculated based on the assumptions that the null hypothesis is true for the population and that the difference in the sample is caused entirely by random chance.

Step 4: State the decision. The rejection rule: reject the null hypothesis if the $p\text{-value} \leq \alpha$. Decision: Since the $p\text{-value} = 0.0453$ is less than $\alpha = 0.05$, we Reject H_0 . This agrees with the decision from the traditional method. (These two methods should always agree!)

Step 5: State the summary. The summary remains the same as in the previous method. At the 5% significance level, we have sufficient evidence to say that the average amount of sodium per serving of cream of mushroom soup exceeds the stated 870 mg amount.

We can use technology to get the test statistic and p-value.

TI-84: If you have raw data, enter the data into a list before you go to the test menu. Press the [STAT] key, arrow over to the [TESTS] menu, arrow down to the [2:T-Test] option and press the [ENTER] key. Arrow over to the [Stats] menu and press the [ENTER] key. Then type in the hypothesized mean (μ_0), sample or population standard deviation, sample mean, sample size, arrow over to the $\neq, <, >$ sign that is the same as the problem's alternative hypothesis statement then press the [ENTER] key, arrow down to [Calculate] and press the [ENTER] key. The calculator returns the t-test statistic and p-value.



Alternatively (If you have raw data in list one) Arrow over to the [Data] menu and press the [ENTER] key. Then type in the hypothesized mean (μ_0), L_1 , leave Freq:1 alone, arrow over to the $\neq, <, >$ sign that is the same in the problem's alternative hypothesis statement then press the [ENTER] key, arrow down to [Calculate] and press the [ENTER] key. The calculator returns the t-test statistic and the p-value.

TI-89: Go to the [Apps] Stat/List Editor, then press [2nd] then F6 [Tests], then select 2: T-Test. Choose the input method, data is when you have entered data into a list previously or stats when you are given the mean and standard deviation already. Then type in the hypothesized mean (μ_0), sample standard deviation, sample mean, sample size (or list name (list1), and Freq: 1), arrow over to the $\neq, <, >$ and select the sign that is the same as the problem's alternative hypothesis statement then press the [ENTER] key to calculate. The calculator returns the t-test statistic and p-value.



The weight of the world's smallest mammal is the bumblebee bat (also known as Kitt's hog-nosed bat or *Craseonycteris thonglongyai*) is approximately normally distributed with a mean 1.9 grams. Such bats are roughly the size of a large bumblebee. A chiropterologist believes that the Kitt's hog-nosed bats in a new geographical region under study has a different average weight than 1.9 grams. A sample of 10 bats weighed in grams in the new region are shown below. Use the confidence interval method to test the claim that mean weight for all bumblebee bats is not 1.9 g using a 10% level of significance.

Weight	1.9	2.24	2.13	2	1.54	1.96	1.79	2.18	1.81	2.3
--------	-----	------	------	---	------	------	------	------	------	-----

Solution

Step 1: State the hypotheses and identify the claim. The key phrase is “mean weight not equal to 1.9 g.” In mathematical notation, this is $\mu \neq 1.9$. The not equal \neq symbol is only allowed in the alternative hypothesis so the hypotheses would be:

$$H_0: \mu = 1.9$$

$$H_1: \mu \neq 1.9$$

Step 2: Compute the confidence interval. First, find the t critical value using $df = n - 1 = 9$ and 90% confidence. In Excel $t_{\alpha/2} = \text{T.INV}(.1/2,9) = 1.833113$.

Then use technology to find the sample mean and sample standard deviation and substitute in your numbers to the formula.

$$\begin{aligned} \bar{x} \pm t_{\alpha/2} \left(\frac{s}{\sqrt{n}} \right) \\ \Rightarrow 1.985 \pm 1.833113 \left(\frac{0.235242}{\sqrt{10}} \right) \\ \Rightarrow 1.985 \pm 1.833113(0.07439) \\ \Rightarrow 1.985 \pm 0.136365 \\ \Rightarrow (1.8486, 2.1214) \end{aligned}$$

The answer can be given as an inequality $1.8486 < \mu < 2.1214$

or in interval notation (1.8486, 2.1214).

Step 3: Make the decision: The rejection rule is to reject H_0 when the hypothesized value found in H_0 is outside the bounds of the confidence interval. The null hypothesis was $\mu = 1.9$ g. Since 1.9 is between the lower and upper boundary of the confidence interval $1.8486 < \mu < 2.1214$ then we would not reject H_0 .

The sampling distribution, assuming the null hypothesis is true, will have a mean of $\mu = 1.9$ and a standard error of $\frac{0.2352}{\sqrt{10}} = 0.07439$. When we calculated the confidence interval using the sample mean of 1.985 the confidence interval captured the hypothesized mean of 1.9. See Figure 8-20.

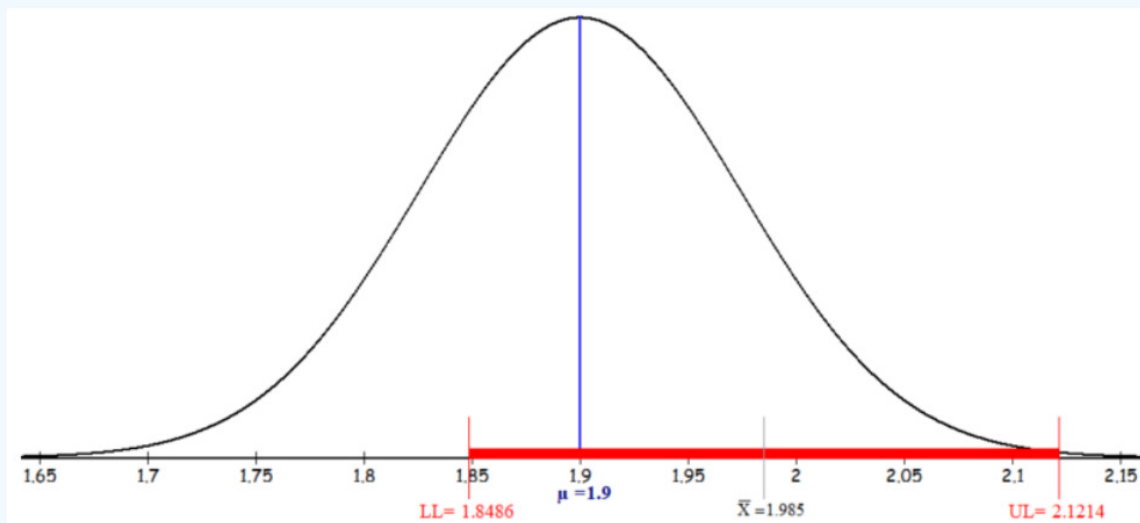
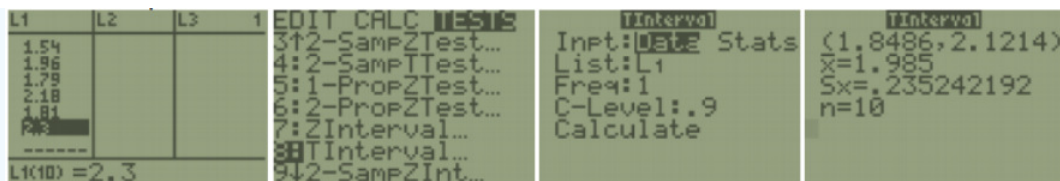


Figure 8-20

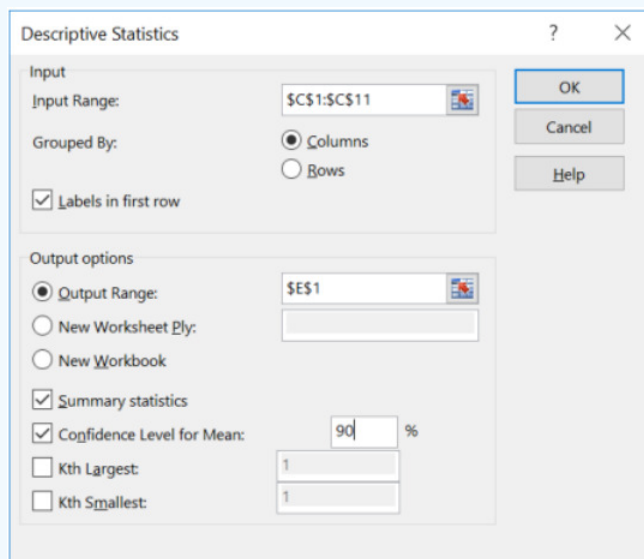
Step 4: State the summary: At the 10% significance level, there is not enough evidence to support the claim that the population mean weight for bumblebee bats in the new geographical region is different from 1.9 g.

This interval can also be computed using a TI calculator or Excel.

TI-84: Enter the data in a list, choose Tests > TInterval. Select and highlight Data, change the list and confidence level to match the question. Choose Calculate.



Excel: Select Data Analysis > Descriptive Statistics: Note, you will need to change the cell reference numbers to where you copy and paste your data, only check the label box if you selected the label in the input range, and change the confidence level to $1 - \alpha$.



Below is the Excel output. Excel only calculates the descriptive statistics with the margin of error.

Weight	
Mean	1.985
Standard Error	0.07439
Median	1.98
Mode	#N/A
Standard Deviation	0.235242
Sample Variance	0.055339
Kurtosis	-0.23332
Skewness	-0.46112
Range	0.76
Minimum	1.54
Maximum	2.3
Sum	19.85
Count	10
Confidence Level(90.0%)	0.136365

Use Excel to find each piece of the interval $\bar{x} \pm t_{\alpha/2} \left(\frac{s}{\sqrt{n}} \right)$.

Excel $t_{\alpha/2} = \text{T.INV}(0.1/2, 9) = 1.8311$.

$$\begin{aligned}
 & \bar{x} \pm t_{\alpha/2} \left(\frac{s}{\sqrt{n}} \right) \\
 & \Rightarrow 1.985 \pm 1.8311 \left(\frac{0.2352}{\sqrt{10}} \right) \\
 & \Rightarrow 1.985 \pm 1.8311(0.07439)
 \end{aligned}$$

Can you find the mean and standard error $\frac{s}{\sqrt{n}} = 0.07439$ in the Excel output?

$\Rightarrow 1.985 \pm 0.136365$

Can you find the margin of error $t_{\frac{\alpha}{2}} \left(\frac{s}{\sqrt{n}} \right) = 0.136365$ in the Excel output?

Subtract and add the margin of error from the sample mean to get each confidence interval boundary (1.8486, 2.1214).

If we have raw data, Excel will do both the traditional and p-value method.

Example 8-8 Continued:

Use the prior example, but this time use the **p-value method**. Again, let the significance level be $\alpha = 0.05$.

Solution

Step 1: State the hypotheses. The hypotheses are: $H_0: \mu = 1.9$

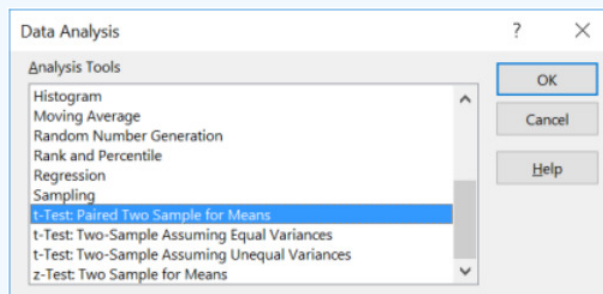
$$H_1: \mu \neq 1.9$$

Step 2: Compute the test statistic, $t = \frac{\bar{x} - \mu_0}{\left(\frac{s}{\sqrt{n}} \right)} = \frac{1.985 - 1.9}{\left(\frac{.235249}{\sqrt{10}} \right)} = 1.1426$

Verify using Excel. Excel does not have a one-sample t-test, but it does have a two-sample t-test that can be used with a dummy column of zeros as the second sample to get the results for just one sample. Copy over the data into cell A1. In column B, next to the data, type in a dummy column of zeros, and label it Dummy. (We frequently use placeholders in statistics called dummy variables.)

	A	B	C
1	Weight	Dummy	
2	1.9	0	
3	2.24	0	
4	2.13	0	
5	2	0	
6	1.54	0	
7	1.96	0	
8	1.79	0	
9	2.18	0	
10	1.81	0	
11	2.3	0	
12			

Select the Data Analysis tool and then select t-Test: Paired Two Sample for Means, then select OK.



For the Variable 1 Range select the data in cells A1:A11, including the label. For the Variable 2 Range select the dummy column of zeros in cells B1:B11, including the label. Change the hypothesized mean to 1.9. Check the Labels box and change the alpha value to 0.10, then select OK.

t-Test: Paired Two Sample for Means

Input

Variable 1 Range:

Variable 2 Range:

Hypothesized Mean Difference:

☒ Labels

Alpha:

Output options

☐ Output Range:

☒ New Worksheet Ply:

☐ New Workbook

OK Cancel Help

Excel provides the following output:

t-Test: Paired Two Sample for Means			
	Weight	Dummy	What it Means
Mean	1.985	0	Sample Mean
Variance	0.055339	0	Sample Variance
Observations	10	10	Sample Size
Pearson Correlation	#DIV/0!		Ignore this
Hypothesized Mean Difference	1.9		Hypothesized Mean
df	9		Degrees of Freedom
t Stat	1.142625		Test Statistic
P(T<=t) one-tail	0.14134		p-value for a one-tail test
t Critical one-tail	1.383029		Critical Value
P(T<=t) two-tail	0.282679		p-value for a two-tail test
t Critical two-tail	1.833113		±Critical Value

Step 3: Compute the p-value. Since the alternative hypothesis has a \neq symbol, use the Excel output next two-tailed p-value = 0.2826.

Step 4: Make the decision. For the p-value method we would compare the two-tailed p-value = 0.2826 to $\alpha = 0.10$. The rule is to reject H_0 if the p-value $\leq \alpha$. In this case the p-value $> \alpha$, therefore we do not reject H_0 . Again, the same decision as the confidence interval method.

For the critical value method, we would compare the test statistic $t = 1.142625$ with the critical values for a twotailed test $t_{\frac{\alpha}{2}} = \pm 1.833113$. Since the test statistic is between -1.8331 and 1.8331 we would not reject H_0 , which is the same decision using the p-value method or the confidence interval method.

Step 5: State the summary. There is not enough evidence to support the claim that the population mean weight for all bumblebee bats is not equal to 1.9 g.

One-Tailed Versus Two-Tailed Tests

Most software packages do not ask which tailed test you are performing. Make sure you look at the sign in the alternative hypothesis to and determine which p-value to use. The difference is just what part of the picture you are looking at. In Excel, the critical value shown is for a one-tail test and does not specify left or right tail. The critical value in the output will always be positive, it is up to you to know if the critical value should be a negative or positive value. For example, Figures 8-21, 8-22, and 8-23 uses $df = 9$, $\alpha = 0.10$ to show all three tests comparing either the test statistic with the critical value or the p-value with α .

Two-Tailed Test

The test statistic can be negative or positive depending on what side of the distribution it falls; however, the p-value is a probability and will always be a positive number between 0 and 1. See Figure 8-21.

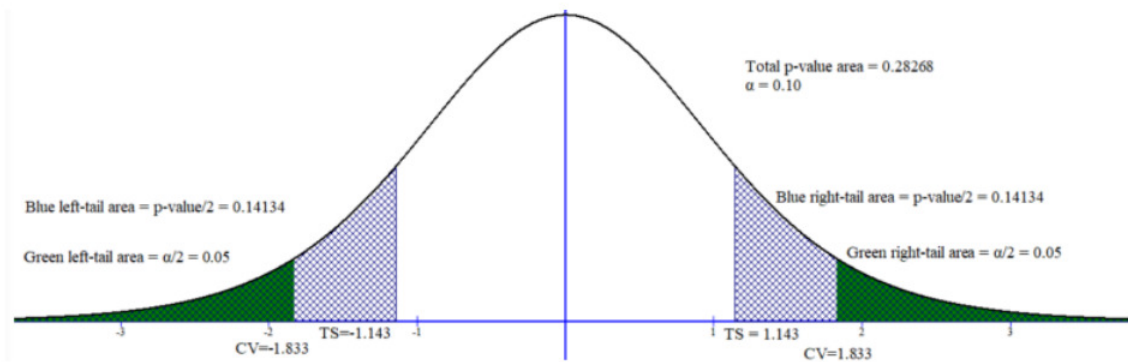


Figure 8-21

Right-Tailed Test

If we happened to do a right-tailed test with $df = 9$ and $\alpha = 0.10$, the critical value $t_{1-\alpha} = 1.383$ will be in the right tail and usually the test statistic will be a positive number. See Figure 8-22.

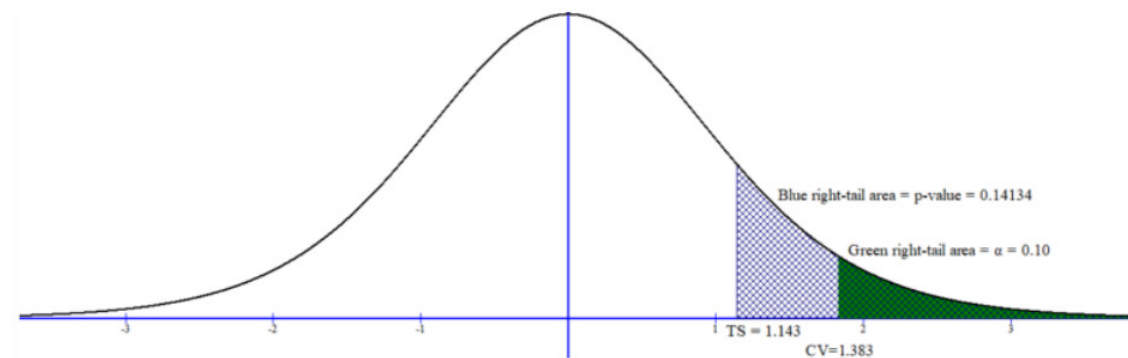


Figure 8-22

Left-Tailed Test

If we happened to do a left-tailed test with $df = 9$ and $\alpha = 0.10$, the critical value $t_{\alpha} = -1.383$ will be in the left tail and usually the test statistic will be a negative number. See Figure 8-23.

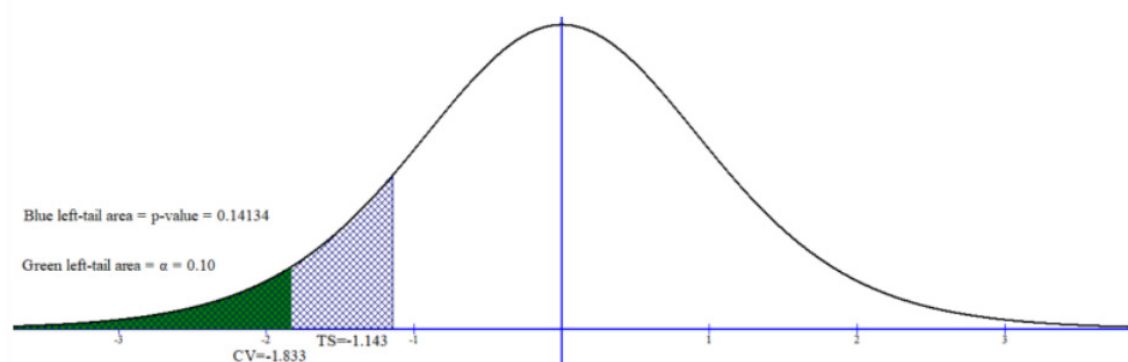


Figure 8-23

This page titled [8.3: Hypothesis Test for One Mean](#) is shared under a [CC BY-SA 4.0](#) license and was authored, remixed, and/or curated by [Rachel Webb](#) via [source content](#) that was edited to the style and standards of the LibreTexts platform.

8.4: Hypothesis Test for One Proportion

When you read a question, it is essential that you correctly identify the parameter of interest. The parameter determines which model to use. Make sure that you can recognize and distinguish between a question regarding a population mean and a question regarding a population proportion.

The z-test is a statistical test for a population proportion. It can be used when $np \geq 10$ and $nq \geq 10$.

Definition: z-Test

The formula for the *test statistic* is:

$$Z = \frac{\hat{p} - p_0}{\sqrt{\left(\frac{p_0 q_0}{n}\right)}} \quad (8.4.1)$$

where

n is the sample size

$\hat{p} = \frac{x}{n}$ is the sample proportion (sometimes already given as a %) and

p_0 is the hypothesized population proportion,

$$q_0 = 1 - p_0.$$

Use the phrases in Figure 8-24 to help with setting up the hypotheses.



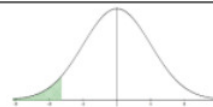
Two-tailed Test	Right-tailed Test	Left-tailed Test
$H_0: p = p_0$ $H_1: p \neq p_0$	$H_0: p = p_0$ $H_1: p > p_0$	$H_0: p = p_0$ $H_1: p < p_0$
		
Claim is in the Null Hypothesis		
=	≤	≥
Is equal to	Is less than or equal to	Is greater than or equal to
Is exactly the same as	Is at most	Is at least
Has not changed from	Is not more than	Is not less than
Is the same as	Within	Is more than or equal to
Claim is in the Alternative Hypothesis		
≠	>	<
Is not	More than	Less than
Is not equal to	Greater than	Below
Is different from	Above	Lower than
Has changed from	Higher than	Shorter than
Is not the same as	Longer than	Smaller than
	Bigger than	Decreased
	Increased	Reduced

Figure 8-24

Note we will not be using the t-distribution with proportions. We will use a standard normal z distribution for testing a proportion since this test uses the normal approximation to the binomial distribution (never use the t-distribution).

If you are doing a left-tailed z-test the critical value will be negative. If you are performing a right-tailed z-test the critical value will be positive. If you were performing a two-tailed z-test then your critical values would be \pm critical value. The p-value will always be a positive number between 0 and 1. The most important step in any method you use is setting up your null and alternative hypotheses. The critical values and p-value can be found using a standard normal distribution the same way that we did for the one sample z-test.

It has been found that 85.6% of all enrolled college and university students in the United States are undergraduates. A random sample of 500 enrolled college students in a particular state revealed that 420 of them were undergraduates. Is there sufficient evidence to conclude that the proportion differs from the national percentage? Use $\alpha = 0.05$. Show that all three methods of hypothesis testing yield the same results.

Solution

At this point you should be more comfortable with the steps of a hypothesis test and not have to number each step, but know what each step means.

Critical Value Method

Step 1: State the hypotheses: The key words in this example, “proportion” and “differs,” give the hypotheses:

$$H_0: p = 0.856$$

$$H_1: p \neq 0.856 \text{ (claim)}$$

Step 2: Compute the test statistic. Before finding the test statistic, find the sample proportion $\hat{p} = \frac{420}{500} = 0.84$ and $q_0 = 1 - 0.856 = 0.144$.

Next, compute the test statistic:

$$z = \frac{\hat{p} - p_0}{\sqrt{\left(\frac{p_0 q_0}{n}\right)}} = \frac{0.84 - 0.856}{\sqrt{\left(\frac{0.856 \cdot 0.144}{500}\right)}} = -1.019. \quad (8.4.2)$$

Step 3: Draw and label the curve with the critical values. See Figure 8-25.

Use $\alpha = 0.05$ and technology to compute the critical values $z_{\alpha/2}$ and $z_{1-\alpha/2}$.

Excel: $z_{\alpha/2} = \text{NORM.S.INV}(0.025) = -1.96$ and $z_{1-\alpha/2} = \text{NORM.S.INV}(0.975) = 1.96$.

TI-Calculator: $z_{\alpha/2} = \text{invNorm}(0.025, 0, 1) = -1.96$ and $z_{1-\alpha/2} = \text{invNorm}(0.975, 0, 1) = 1.96$.

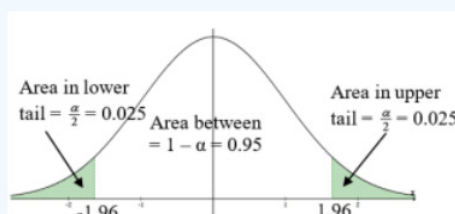


Figure 8-25

Step 4: State the decision. Since the test statistic is not in the shaded rejection area, do not reject H_0 .

Step 5: State the summary. At the 5% level of significance, there is not enough evidence to conclude that the proportion of undergraduates in college for this state differs from the national average of 85.6%.

P-value Method

The hypotheses and test statistic stay the same.

$$H_0: p = 0.856$$

$$H_1: p \neq 0.856 \text{ (claim)}$$

$$Z = \frac{\hat{p} - p_0}{\sqrt{\left(\frac{p_0 q_0}{n}\right)}} = \frac{0.84 - 0.856}{\sqrt{\left(\frac{0.856 \cdot 0.144}{500}\right)}} = -1.019$$

To find the p-value we need to find the $P(Z > |1.019|)$ the area to the left of $z = -1.019$ and to the right of $z = 1.019$. First, find the area below (since the test statistic is negative) $z = -1.019$ using the normalcdf we get 0.1541. Then, double this area to get

the p-value = 0.3082.

```
normalcdf(-1E99,
-1.019,0,1)
.1541014962
Ans*2
.3082029924
```

Since the p-value $> \alpha$ the decision is to not reject H_0 .

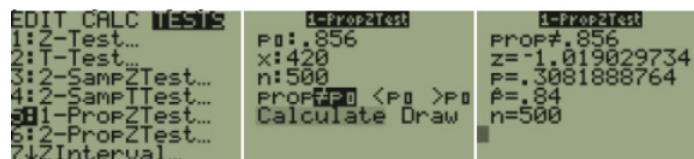
Summary: There is not enough evidence to conclude that the proportion of undergraduates in college for this state differs from the national average of 85.6%.

There is a shortcut for this test on the TI Calculators, which will quickly find the test statistic and p-value.

The rejection rule for the two methods are:

- P-value method: reject H_0 when the p-value $\leq \alpha$.
- Critical value method: reject H_0 when the test statistic is in the critical region.

TI-84: Press the [STAT] key, arrow over to the [TESTS] menu, arrow down to the option [5:1-PropZTest] and press the [ENTER] key. Type in the hypothesized proportion (p_0), x, sample size, arrow over to the \neq , $<$, $>$ sign that is the same in the problem's alternative hypothesis statement then press the [ENTER] key, arrow down to [Calculate] and press the [ENTER] key.



The calculator returns the z-test statistic and the p-value. Note: sometimes you are not given the x value but a percentage instead. To find the x to use in the calculator, multiply \hat{p} by the sample size and round off to the nearest integer. The calculator will give you an error message if you put in a decimal for x or n. For example, if $\hat{p} = 0.22$ and $n = 124$ then $0.22 \times 124 = 27.28$, so use $x = 27$.

TI-89: Go to the [Apps] Stat/List Editor, then press [2nd] then F6 [Tests], then select **5: 1-PropZ-Test**. Type in the hypothesized proportion (p_0), x, sample size, arrow over to the \neq , $<$, $>$ sign that is the same in the problem's alternative hypothesis statement then press the [ENTER] key to calculate. The calculator returns the z-test statistic and the pvalue. Note: sometimes you are not given the x value but a percentage instead. To find the x value to use in the calculator, multiply \hat{p} by the sample size and round off to the nearest integer. The calculator will give you an error message if you put in a decimal for x or n. For example, if $\hat{p} = 0.22$ and $n = 124$ then $0.22 \times 124 = 27.28$, so use $x = 27$.

This page titled [8.4: Hypothesis Test for One Proportion](#) is shared under a [CC BY-SA 4.0](#) license and was authored, remixed, and/or curated by [Rachel Webb](#) via [source content](#) that was edited to the style and standards of the LibreTexts platform.

8.5: Chapter 8 Exercises

? Chapter 8 Exercises

1. The plant-breeding department at a major university developed a new hybrid boysenberry plant called Stumptown Berry. Based on research data, the claim is made that from the time shoots are planted 90 days on average are required to obtain the first berry. A corporation that is interested in marketing the product tests 60 shoots by planting them and recording the number of days before each plant produces its first berry. The sample mean is 92.3 days. The corporation wants to know if the mean number of days is different from the 90 days claimed. Which one is the correct set of hypotheses?

- a) $H_0: p = 90\%$ $H_1: p \neq 90\%$
- b) $H_0: \mu = 90$ $H_1: \mu \neq 90$
- c) $H_0: p = 92.3\%$ $H_1: p \neq 92.3\%$
- d) $H_0: \mu = 92.3$ $H_1: \mu \neq 92.3$
- e) $H_0: \mu \neq 90$ $H_1: \mu = 90$

2. Match the symbol with the correct phrase.

<	More than
>	At most
\leq	Reduced
\geq	Different from
\neq	At least

3. According to the February 2008 Federal Trade Commission report on consumer fraud and identity theft, 23% of all complaints in 2007 were for identity theft. In that year, Alaska had 321 complaints of identity theft out of 1,432 consumer complaints. Does this data provide enough evidence to show that Alaska had a lower proportion of identity theft than 23%? Which one is the correct set of hypotheses?

Federal Trade Commission, (2008). *Consumer fraud and identity theft complaint data: January-December 2007*. Retrieved from website: <http://www.ftc.gov/opa/2008/02/fraud.pdf>.

- a) $H_0: p = 23\%$ $H_1: p < 23\%$
- b) $H_0: \mu = 23$ $H_1: \mu < 23$
- c) $H_0: p < 23\%$ $H_1: p \geq 23\%$
- d) $H_0: p = 0.224$ $H_1: p < 0.224$
- e) $H_0: \mu < 0.224$ $H_1: \mu \geq 0.224$

4. Compute the z critical value for a right-tailed test when $\alpha = 0.01$.

5. Compute the z critical value for a two-tailed test when $\alpha = 0.01$.

6. Compute the z critical value for a left-tailed test when $\alpha = 0.05$.

7. Compute the z critical value for a two-tailed test when $\alpha = 0.05$.

8. As of 2018, the Centers for Disease Control and Protection's (CDC) national estimate that 1 in 68 ≈ 0.0147 children have been diagnosed with autism spectrum disorder (ASD). A researcher believes that the proportion of children in their county is different from the CDC estimate. Which one is the correct set of hypotheses?

- a) $H_0: p = 0.0147$ $H_1: p \neq 0.0147$
- b) $H_0: \mu = 0.0147$ $H_1: \mu \neq 0.0147$
- c) $H_0: p \neq 0.0147$ $H_1: p = 0.0147$
- d) $H_0: \mu = 68$ $H_1: \mu \neq 68$
- e) $H_0: = 0.0147$ $H_1: \neq 0.0147$

9. Match the phrase with the correct symbol.

- a. Sample Size i. α
- b. Population Mean ii. n
- c. Sample Variance iii. σ^2
- d. Sample Mean iv. s^2
- e. Population Standard Deviation v. s
- f. P(Type I Error) vi. \bar{x}
- g. Sample Standard Deviation vii. σ
- h. Population Variance viii. μ

10. The Food & Drug Administration (FDA) regulates that fresh albacore tuna fish contains at most 0.82 ppm of mercury. A scientist at the FDA believes the mean amount of mercury in tuna fish for a new company exceeds the ppm of mercury. Which one is the correct set of hypotheses?

- a) $H_0: p = 82\%$ $H_1: p > 82\%$
- b) $H_0: \mu = 0.82$ $H_1: \mu > 0.82$
- c) $H_0: p > 82\%$ $H_1: p \leq 82\%$
- d) $H_0: \mu = 0.82$ $H_1: \mu \neq 0.82$
- e) $H_0: \mu > 0.82$ $H_1: \mu \leq 0.82$

11. Match the symbol with the correct phrase.

$100(1 - \alpha)\%$	Parameter
$1 - \beta$	P(Type II Error)
β	Power
μ	Significance Level
α	Confidence Level

12. The plant-breeding department at a major university developed a new hybrid boysenberry plant called Stumptown Berry. Based on research data, the claim is made that from the time shoots are planted 90 days on average are required to obtain the first berry. A corporation that is interested in marketing the product tests 60 shoots by planting them and recording the number of days before each plant produces its first berry. The sample mean is 92.3 days. The corporation will not market the product if the mean number of days is more than the 90 days claimed. The hypotheses are $H_0: \mu = 90$ $H_1: \mu > 90$. Which answer is the correct type I error in the context of this problem?

- a) The corporation will not market the Stumptown Berry even though the berry does produce fruit within the 90 days.
- b) The corporation will market the Stumptown Berry even though the berry does produce fruit within the 90 days.
- c) The corporation will not market the Stumptown Berry even though the berry does produce fruit in more than 90 days.
- d) The corporation will market the Stumptown Berry even though the berry does produce fruit in more than 90 days.

13. The Food & Drug Administration (FDA) regulates that fresh albacore tuna fish contains at most 0.82 ppm of mercury. A scientist at the FDA believes the mean amount of mercury in tuna fish for a new company exceeds the ppm of mercury. The hypotheses are $H_0: \mu = 0.82$ $H_1: \mu > 0.82$. Which answer is the correct type II error in the context of this problem?

- a) The fish is rejected by the FDA when in fact it had less than 0.82 ppm of mercury.
- b) The fish is accepted by the FDA when in fact it had less than 0.82 ppm of mercury.
- c) The fish is rejected by the FDA when in fact it had more than 0.82 ppm of mercury.
- d) The fish is accepted by the FDA when in fact it had more than 0.82 ppm of mercury.

14. A two-tailed z-test found a test statistic of $z = 2.153$. At a 1% level of significance, which would the correct decision?

- a) Do not reject H_0

- b) Reject H_0
- c) Accept H_0
- d) Reject H_1
- e) Do not reject H_1

15. A left-tailed z-test found a test statistic of $z = -1.99$. At a 5% level of significance, what would the correct decision be?

- a) Do not reject H_0
- b) Reject H_0
- c) Accept H_0
- d) Reject H_1
- e) Do not reject H_1

16. A right-tailed z-test found a test statistic of $z = 0.05$. At a 5% level of significance, what would the correct decision be?

- a) Reject H_0
- b) Accept H_0
- c) Reject H_1
- d) Do not reject H_0
- e) Do not reject H_1

17. A two-tailed z-test found a test statistic of $z = -2.19$. At a 1% level of significance, which would the correct decision?

- a) Do not reject H_0
- b) Reject H_0
- c) Accept H_0
- d) Reject H_1
- e) Do not reject H_1

18. According to the February 2008 Federal Trade Commission report on consumer fraud and identity theft, 23% of all complaints in 2007 were for identity theft. In that year, Alaska had 321 complaints of identity theft out of 1,432 consumer complaints. Does this data provide enough evidence to show that Alaska had a lower proportion of identity theft than 23%? The hypotheses are $H_0: p = 23\%$ $H_1: p < 23\%$. Which answer is the correct type I error in the context of this problem?

Federal Trade Commission, (2008). *Consumer fraud and identity theft complaint data: January-December 2007*. Retrieved from website: <http://www.ftc.gov/opa/2008/02/fraud.pdf>.

- a) It is believed that less than 23% of Alaskans had identity theft and there really was 23% or less that experienced identity theft.
- b) It is believed that more than 23% of Alaskans had identity theft and there really was 23% or more that experience identity theft.
- c) It is believed that less than 23% of Alaskans had identity theft even though there really was 23% or more that experienced identity theft.
- d) It is believed that more than 23% of Alaskans had identity theft even though there really was less than 23% that experienced identity theft

19. A hypothesis test was conducted during a clinical trial to see if a new COVID-19 vaccination reduces the risk of contracting the virus. What is the Type I and II errors in terms of approving the vaccine for use?

20. A manufacturer of rechargeable laptop batteries claims its batteries have, on average, 500 charges. A consumer group decides to test this claim by assessing the number of times 30 of their laptop batteries can be recharged and finds a p-value is 0.1111; thus, the null hypothesis is not rejected. What is the Type II error for this situation?

21. A commonly cited standard for one-way length (duration) of school bus rides for elementary school children is 30 minutes. A local government office in a rural area conducts a study to determine if elementary schoolers in their district have a longer average one-way commute time. If they determine that the average commute time of students in their district is significantly higher than the commonly cited standard they will invest in increasing the number of school buses to help shorten commute time. What would a Type II error mean in this context?
22. The Centers for Disease Control and Prevention (CDC) 2018 national estimate that 1 in 68 ≈ 0.0147 children have been diagnosed with autism spectrum disorder (ASD). A researcher believes that the proportion of children in their county is different from the CDC estimate. The hypotheses are $H_0: p = 0.0147$ $H_1: p \neq 0.0147$. Which answer is the correct type II error in the context of this problem?
- a) The proportion of children diagnosed with ASD in the researcher's county is believed to be different from the national estimate, even though the proportion is the same.
 - b) The proportion of children diagnosed with ASD in the researcher's county is believed to be different from the national estimate and the proportion is different.
 - c) The proportion of children diagnosed with ASD in the researcher's county is believed to be the same as the national estimate, even though the proportion is different.
 - d) The proportion of children diagnosed with ASD in the researcher's county is believed to be the same as the national estimate and the proportion is the same.
23. The Food & Drug Administration (FDA) regulates that fresh albacore tuna fish contains at most 0.82 ppm of mercury. A scientist at the FDA believes the mean amount of mercury in tuna fish for a new company exceeds the ppm of mercury. A test statistic was found to be 2.576 and a critical value was found to be 1.645, what is the correct decision and summary?
- a) Reject H_0 , there is enough evidence to support the claim that the amount of mercury in the new company's tuna fish exceeds the FDA limit of 0.82 ppm.
 - b) Accept H_0 , there is not enough evidence to reject the claim that the amount of mercury in the new company's tuna fish exceeds the FDA limit of 0.82 ppm.
 - c) Reject H_1 , there is not enough evidence to reject the claim that the amount of mercury in the new company's tuna fish exceeds the FDA limit of 0.82 ppm.
 - d) Reject H_0 , there is not enough evidence to support the claim that the amount of mercury in the new company's tuna fish exceeds the FDA limit of 0.82 ppm.
 - e) Do not reject H_0 , there is not enough evidence to support the claim that the amount of mercury in the new company's tuna fish exceeds the FDA limit of 0.82 ppm.
24. The plant-breeding department at a major university developed a new hybrid boysenberry plant called Stumptown Berry. Based on research data, the claim is made that from the time shoots are planted 90 days on average are required to obtain the first berry. A corporation that is interested in marketing the product tests 60 shoots by planting them and recording the number of days before each plant produces its first berry. The corporation wants to know if the mean number of days is different from the 90 days claimed. A random sample was taken and the following test statistic was $z = -2.15$ and critical values of $z = \pm 1.96$ was found. What is the correct decision and summary?
- a) Do not reject H_0 , there is not enough evidence to support the corporation's claim that the mean number of days until a berry is produced is different from the 90 days claimed by the university.
 - b) Reject H_0 , there is enough evidence to support the corporation's claim that the mean number of days until a berry is produced is different from the 90 days claimed by the university.
 - c) Accept H_0 , there is enough evidence to support the corporation's claim that the mean number of days until a berry is produced is different from the 90 days claimed by the university.
 - d) Reject H_1 , there is not enough evidence to reject the corporation's claim that the mean number of days until a berry is produced is different from the 90 days claimed by the university.
 - e) Reject H_0 , there is not enough evidence to support the corporation's claim that the mean number of days until a berry is produced is different from the 90 days claimed by the university.

25. You are conducting a study to see if the accuracy rate for fingerprint identification is significantly different from 0.34. Thus, you are performing a two-tailed test. Your sample data produce the test statistic $z = 2.504$. Use your calculator to find the p-value and state the correct decision and summary.

26. The SAT exam in previous years is normally distributed with an average score of 1,000 points and a standard deviation of 150 points. The test writers for this upcoming year want to make sure that the new test does not have a significantly different mean score. They have a random sample of 20 students take the SAT and their mean score was 1,050 points.

- Test to see if the mean time has significantly changed using a 5% level of significance. Show all your steps using the critical value method.
- What is a type I error for this problem?
- What is a type II error for this problem?

27. A sample of 45 body temperatures of athletes had a mean of 98.8°F . Assume the population standard deviation is known to be 0.62°F . Test the claim that the mean body temperature for all athletes is more than 98.6°F . Use a 1% level of significance. Show all your steps using the p-value method.

28. Compute the t critical value for a left-tailed test when $\alpha = 0.10$ and $df = 10$.

29. Compute the t critical value for a two-tailed test when $\alpha = 0.05$ with a sample size of 18.

30. Using a t-distribution with $df = 25$, find the $P(t \geq 2.185)$.

31. A student is interested in becoming an actuary. They know that becoming an actuary takes a lot of schooling and they will have to take out student loans. They want to make sure the starting salary will be higher than \$55,000/year. They randomly sample 30 starting salaries for actuaries and find a p-value of 0.0392. Use $\alpha = 0.05$.

- Choose the correct hypotheses.
 - $H_0: \mu = 55,000$ $H_1: \mu < 55,000$
 - $H_0: \mu > 55,000$ $H_1: \mu \leq 55,000$
 - $H_0: \mu = 55,000$ $H_1: \mu > 55,000$
 - $H_0: \mu < 55,000$ $H_1: \mu \geq 55,000$
 - $H_0: \mu = 55,000$ $H_1: \mu \neq 55,000$
- Should the student pursue an actuary career?
 - Yes, since we reject the null hypothesis.
 - Yes, since we reject the claim.
 - No, since we reject the claim.
 - No, since we reject the null hypothesis.

32. The workweek for adults in the United States work full-time is normally distributed with a mean of 47 hours. A newly hired engineer at a start-up company believes that employees at start-up companies work more on average then working adults in the U.S. She asks 12 engineering friends at start-ups for the lengths in hours of their workweek. Their responses are shown in the table below. Test the claim using a 5% level of significance. Show all 5 steps using the p-value method.

Hours	46	42	54	52	48	45	49	49	50	46	55	55
-------	----	----	----	----	----	----	----	----	----	----	----	----

33. The average number of calories from a fast food meal for adults in the United States is 842 calories. A nutritionist believes that the average is higher than reported. They sample 11 meals that adults ordered and measure the calories for each meal shown below. Test the claim using a 5% level of significance. Assume that fast food calories are normally distributed. Show all 5 steps using the p-value method.

Calories	855	854	785	854	952	860	853	760	862	851	919
----------	-----	-----	-----	-----	-----	-----	-----	-----	-----	-----	-----

34. Honda advertises the 2018 Honda Civic as getting 32 mpg for city driving. A skeptical consumer about to purchase this model believes the mpg is less than the advertised amount and randomly selects 35 2018 Honda Civic owners and asks them

what their car's mpg is. Use a 1% significance level. They find a p-value of 0.0436.

a) Choose the correct hypotheses.

- i. $H_0: \mu = 32$ $H_1: \mu < 32$
- ii. $H_0: \mu < 32$ $H_1: \mu \geq 32$
- iii. $H_0: \mu = 32$ $H_1: \mu > 32$
- iv. $H_0: \mu = 35$ $H_1: \mu \neq 35$
- v. $H_0: \mu = 32$ $H_1: \mu \neq 32$

b) Choose the correct decision based off the reported p-value.

- i. Reject H_0
- ii. Do not reject H_0
- iii. Do not reject H_1
- iv. Reject H_1

For exercises 35-40, show all 5 steps for hypothesis testing:

- a) State the hypotheses.
- b) Compute the test statistic.
- c) Compute the critical value or p-value.
- d) State the decision.
- e) Write a summary.

35. The total of individual pounds of garbage discarded by 17 households in one week is shown below. The current waste removal system company has a weekly maximum weight policy of 36 pounds. Test the claim that the average weekly household garbage weight is less than the company's weekly maximum. Use a 5% level of significance.

Weight				
34.5	32.9	42.9	32.9	31.8
40	33.8	35.8	35.4	30.5
31.4	39.2	26.8	30.6	34.5
34.7	32.8			

36. The world's smallest mammal is the bumblebee bat (also known as Kitti's hog-nosed bat or *Craseonycteris thonglongyai*). Such bats are roughly the size of a large bumblebee. A sample of 10 bats weighed in grams are shown below. Test the claim that mean weight for all bumblebee bats is not equal to 2.1 g using a 1% level of significance. Assume that the bat weights are normally distributed.

Weight	2.22	1.6	1.78	1.52	1.61	1.98	1.56	2.24	1.55	2.28
--------	------	-----	------	------	------	------	------	------	------	------

37. The average age of an adult's first vacation without a parent or guardian was reported to be 23 years old. A travel agent believes that the average age is different from what was reported. They sample 28 adults and they asked their age in years when they first vacationed as an adult without a parent or guardian, data shown below. Test the claim using a 10% level of significance.

Age						
21	22	25	26	24	27	22
23	24	27	20	18	24	22
22	28	26	25	26	22	23
24	27	25	22	21	24	22

38. Test the claim that the proportion of people who own dogs is less than 32%. A random sample of 1,000 people found that 28% owned dogs. Do the sample data provide convincing evidence to support the claim? Test the relevant hypotheses using a 10% level of significance.

39. The National Institute of Mental Health published an article stating that in any one-year period, approximately 9.3% of American adults suffer from depression or a depressive illness. Suppose that in a survey of 2,000 people in a certain city, 11.1% of them suffered from depression or a depressive illness. Conduct a hypothesis test to determine if the true proportion of people in that city suffering from depression or a depressive illness is more than the 9.3% in the general adult American population. Test the relevant hypotheses using a 5% level of significance.

40. The United States Department of Energy reported that 48% of homes were heated by natural gas. A random sample of 333 homes in Oregon found that 149 were heated by natural gas. Test the claim that the proportion of homes in Oregon that were heated by natural gas is different from what was reported. Use a 1% significance level.

41. A 2019 survey by the Bureau of Labor Statistics reported that 92% of Americans working in large companies have paid leave. In January 2021, a random survey of workers showed that 89% had paid leave. The resulting p-value is 0.009; thus, the null hypothesis is rejected. It is concluded that there has been a decrease in the proportion of people, who have paid leave from 2019 to January 2021. What type of error is possible in this situation?

- a) Type I Error
- b) Type II Error
- c) Standard Error
- d) Margin of Error
- e) No error was made.

For exercises 42-44, show all 5 steps for hypothesis testing:

- a) State the hypotheses.
- b) Compute the test statistic.
- c) Compute the critical value or p-value.
- d) State the decision.
- e) Write a summary.

42. Nationwide 40.1% of employed teachers are union members. A random sample of 250 Oregon teachers showed that 110 belonged to a union. At $\alpha = 0.10$, is there sufficient evidence to conclude that the proportion of union membership for Oregon teachers is higher than the national proportion?

43. You are conducting a study to see if the proportion of men over the age of 50 who regularly have their prostate examined is significantly less than 0.31. A random sample of 735 men over the age of 50 found that 208 have their prostate regularly examined. Do the sample data provide convincing evidence to support the claim? Test the relevant hypotheses using a 5% level of significance.

44. Nationally the percentage of adults that have their teeth cleaned by a dentist yearly is 64%. A dentist in Portland, Oregon believes that regionally the percent is higher. A sample of 2,000 Portlanders found that 1,312 had their teeth cleaned by a dentist in the last year. Test the relevant hypotheses using a 10% level of significance.

Answer to Odd Numbered Exercises

- 1) b
- 3) a
- 5) ± 2.5758
- 7) ± 1.96
- 9) a) ii. b) viii. c) iv. d) vi. e) vii. f) i. g) v. h) iii.
- 11) $100(1 - \alpha)\% = \text{Confidence Level}$ $1 - \beta = \text{Power}$ $\beta = P(\text{Type II Error})$ $\mu = \text{Parameter}$ $\alpha = \text{Significance Level}$
- 13) d
- 15) b

17) a

19) The implication of a Type I error from the clinical trial is that the vaccination will be approved when it indeed does not reduce the risk of contracting the virus. The implication of a Type II error from the clinical trial is that the vaccination will not be approved when it indeed does reduce the risk of contracting the virus.

21) The local government decides that the data do not provide convincing evidence of an average commute time higher than 30 minutes, when the true average commute time is in fact higher than 30 minutes.

23) a

25) 0.0123

27) $H_0: \mu = 98.6$; $H_1: \mu > 98.6$; $z = 2.1639$; $p\text{-value} = 0.0152$; Do not reject H_0 . There is not enough evidence to support the claim that the mean body temperature for all athletes is more than 98.6°F.

29) ± 2.1098

31) a) iii. b) i.

33) $H_0: \mu = 842$; $H_1: \mu > 842$; $t = 0.8218$; $p\text{-value} = 0.2152$; Do not reject H_0 . We do not have evidence to support the claim the average calories from a fast food meal is higher than reported.

35) $H_0: \mu = 36$; $H_1: \mu < 36$; $t = -1.9758$; $p\text{-value} = 0.0438$; Reject H_0 . There is enough evidence to support the claim the average weekly household garbage weight is less than the company's weekly 36 lb. maximum.

37) $H_0: \mu = 23$; $H_1: \mu \neq 23$; $t = 1.4224$; $p\text{-value} = 0.1664$; Do not reject H_0 . We do not have enough evidence to support the claim that the mean age adults travel without a parent or guardian differs from 23.

39) $H_0: p = 0.093$; $H_1: p > 0.093$; $t = 2.7116$; $p\text{-value} = 0.0027$; Reject H_0 . There is enough evidence to support the claim the population proportion of American adults that suffer from depression or a depressive illness is more than 9.3%.

41) a

43) $H_0: p = 0.31$; $H_1: p < 0.31$; $t = -1.5831$; $p\text{-value} = 0.0567$; Do not reject H_0 . There is not enough evidence to support the claim the population proportion of men over the age of 50 who regularly have their prostate examined is significantly less than 0.31

This page titled [8.5: Chapter 8 Exercises](#) is shared under a [CC BY-SA 4.0](#) license and was authored, remixed, and/or curated by [Rachel Webb](#) via [source content](#) that was edited to the style and standards of the LibreTexts platform.

8.6: Chapter 8 Formulas

Hypothesis Test for One Mean Use z-test when σ is given. Use t-test when s is given. If $n < 30$, population needs to be normal.	Type I Error- Reject H_0 when H_0 is true. Type II Error- Fail to reject H_0 when H_0 is false.
Z-Test: $H_0: \mu = \mu_0$ $H_1: \mu \neq \mu_0$ $Z = \frac{\bar{x} - \mu_0}{\left(\frac{\sigma}{\sqrt{n}}\right)}$ TI-84: Z-Test	t-Test: $H_0: \mu = \mu_0$ $H_1: \mu \neq \mu_0$ $t = \frac{\bar{x} - \mu_0}{\left(\frac{s}{\sqrt{n}}\right)}$ TI-84: T-Test
z-Critical Values Excel: Two-tail: $z_{\alpha/2} = \text{NORM.INV}(1-\alpha/2, 0, 1)$ Right-tail: $z_{1-\alpha} = \text{NORM.INV}(1-\alpha, 0, 1)$ Left-tail: $z_{\alpha} = \text{NORM.INV}(\alpha, 0, 1)$ TI-84: Two-tail: $z_{\alpha/2} = \text{invNorm}(1-\alpha/2, 0, 1)$ Right-tail: $z_{1-\alpha} = \text{invNorm}(1-\alpha, 0, 1)$ Left-tail: $z_{\alpha} = \text{invNorm}(\alpha, 0, 1)$	t-Critical Values Excel: Two-tail: $t_{\alpha/2} = \text{T.INV}(1-\alpha/2, \text{df})$ Right-tail: $t_{1-\alpha} = \text{T.INV}(1-\alpha, \text{df})$ Left-tail: $t_{\alpha} = \text{T.INV}(\alpha, \text{df})$ TI-84: Two-tail: $t_{\alpha/2} = \text{invT}(1-\alpha/2, \text{df})$ Right-tail: $t_{1-\alpha} = \text{invT}(1-\alpha, \text{df})$ Left-tail: $t_{\alpha} = \text{invT}(\alpha, \text{df})$
Hypothesis Test for One Proportion $H_0: p = p_0$ $H_1: p \neq p_0$ $Z = \frac{\hat{p} - p_0}{\sqrt{\left(\frac{p_0 q_0}{n}\right)}}$ TI-84: 1-PropZTest	Rejection Rules: <ul style="list-style-type: none"> P-value method: reject H_0 when the p-value $\leq \alpha$. Critical value method: reject H_0 when the test statistic is in the critical region (shaded tails).

This page titled [8.6: Chapter 8 Formulas](#) is shared under a [CC BY-SA 4.0](#) license and was authored, remixed, and/or curated by [Rachel Webb](#) via [source content](#) that was edited to the style and standards of the LibreTexts platform.

CHAPTER OVERVIEW

9: Hypothesis Tests and Confidence Intervals for Two Populations

There are many instances where researchers wish to compare two groups. A clinical trial may want to use a control group and an experiment group to see if a new medication is effective. Identical twin studies help geneticists learn more about inherited traits. Educators may want to test to see if there is a difference between before and after test scores. A farmer may wish to see if there is a difference between two types of fertilizer. A marketing firm may want to see if there is a preference between two different bottle designs. Hypothesis testing for two groups takes on similar steps as one group. It is important to know if the two groups are dependent (related) or independent (not related) from one another.

[9.1: Two Sample Mean T-Test for Dependent Groups](#)

[9.2: Two Independent Groups](#)

[9.3: Two Proportion Z-Test and Confidence Interval](#)

[9.4: Two Variance or Standard Deviation F-Test](#)

[9.5: Chapter 9 Exercises](#)

[9.6: Chapter 9 Formulas](#)

This page titled [9: Hypothesis Tests and Confidence Intervals for Two Populations](#) is shared under a [CC BY-SA 4.0](#) license and was authored, remixed, and/or curated by [Rachel Webb](#) via [source content](#) that was edited to the style and standards of the LibreTexts platform.

9.1: Two Sample Mean T-Test for Dependent Groups

Dependent samples or matched pairs, occur when the subjects are paired up, or matched in some way. Most often, this model is characterized by selection of a random sample where each member is observed under two different conditions, before/after some experiment, or subjects that are similar (matched) to each other are studied under two different conditions.

There are 3 types of hypothesis tests for comparing two **dependent** population means μ_1 and μ_2 , where, μ_D is the expected difference of the matched pairs.

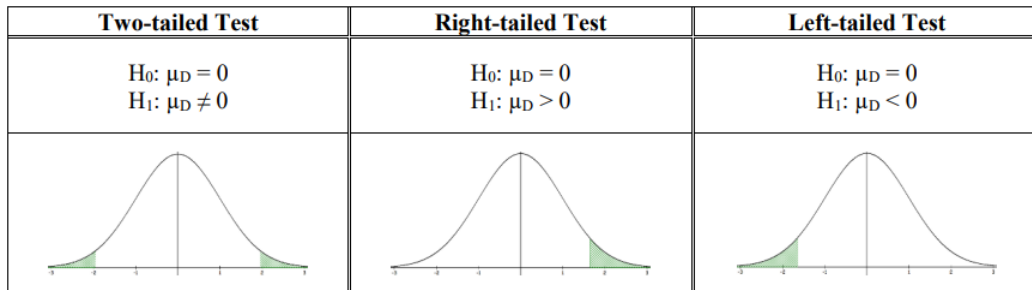


Figure 9-1

Note: If each pair were equal to one another then the mean of the differences would be zero. We could also use this model to test with a magnitude of a difference, but we rarely cover that scenario, therefore we are usually test against the difference of zero.

The t-test for **dependent** samples is a statistical test for comparing the means from two dependent populations (or the difference between the means from two populations). The t-test is used when the differences are normally distributed. The samples also must be dependent.

The formula for the t-test statistic is: $t = \frac{\bar{D} - \mu_D}{\left(\frac{s_D}{\sqrt{n}}\right)}$.

Where the t-distribution with degrees of freedom, $df = n - 1$

Note we will usually only use the case where μ_D equals zero.

The subscript “D” denotes the difference between population one and two. It is important to compute $D = x_1 - x_2$ for each pair of observations. However, this makes setting up the hypotheses more challenging for one-tailed tests.

If we were looking for an increase in test scores from before to after, then we would expect the after score to be larger. When we take a smaller number minus a larger number then the difference would be negative. If we put the before group first and the after group second then we would need a left-tailed test $\mu_D < 0$ to test the “increase” in test scores. This is opposite of the sign we associate for “increase.” If we swap the order and use the after group first, then the before group would have a larger number minus a smaller number which would be positive and we would do a right-tailed test $\mu_D > 0$.

Always subtract in the same order the data is presented in the question. An easier way to decide on the one-tailed test is to write down the two labels and then put a less than (<) symbol between them depending on the question. For example, if the research statement is a weight loss program significantly decreases the average weight, the sign of the test would change depending on which group came first. If we subtract before weight – after weight, then we would want to have before > after and use $\mu_D > 0$. If we have the after weight as the first measurement then we would subtract the after weight – before weight and want after < before and use $\mu_D < 0$. If you keep your labels in the same order as they appear in the question, compare them and carry this sign down to the alternative hypothesis.

The traditional method (or critical value method), the p-value method, and the confidence interval method are performed with steps that are identical to those when performing hypothesis tests for one population.

A dietician is testing to see if a new diet program reduces the average weight. They randomly sample 35 patients and measure them before they start the program and then weigh them again after 2 months on the program. What are the correct hypotheses?

Solution

Let x_1 = weight before a weight-loss program and x_2 = weight after the weight-loss program. We want to test if, on average, participants lose weight. Therefore, the difference $D = x_1 - x_2$. This gives D = before weight – after weight, thus if on average people do lose weight, then in general the before > after and the D 's are positive. How we define our differences determines that this example is a right-tailed test (carry the > sign down to the alternative hypothesis) and the correct hypotheses are:

$$H_0: \mu_D = 0$$

$$H_1: \mu_D > 0$$

If we were to do the same problem but reverse the order and take D = after weight – before weight the correct alternative hypothesis is $H_1: \mu_D < 0$ since after weight < before weight. Just be consistent throughout your problem, and never switch the order of the groups in a problem.

P-Value Method Example

In an effort to increase production of an automobile part, the factory manager decides to play music in the manufacturing area. Eight workers are selected, and the number of items each produced for a specific day is recorded. After one week of music, the same workers are monitored again. The data are given in the table. At $\alpha = 0.05$, can the manager conclude that the music has increased production? Assume production is normally distributed. Use the p-value method.

Worker 1 2 3 4 5 6 7 8 **Before** 6 8 10 9 5 12 9 7 **After** 10 12 9 12 8 13 8 10

Solution

Assumptions: We are comparing production rates before and after music is played in the manufacturing area. We are given that the production rates are normally distributed. Because these are consecutive times from the same population, they are dependent samples, so we must use the t-test for matched pairs.

Let population 1 be the number of items before the music, and population 2 be after. The claim is that music increases production so before production < after production. Carry this same sign to the alternative hypothesis.

The correct hypotheses are: $H_0: \mu_D = 0$; $H_1: \mu_D < 0$, this is a left-tailed test.

In order to compute the t-test statistic, we must first compute the differences between each of the matched pairs.

Before (x_1)	6	8	10	9	5	12	9	7
After (x_2)	10	12	9	12	8	13	8	10
$D = x_1 - x_2$	-4	-4	1	-3	-3	-1	1	-3

Using the 1-var stats on the differences in your calculator, we compute $\bar{D} = \bar{x} = 2$, $s_D = s_x = 2.0702$, $n = 8$.

The test statistic is: $t = \frac{\bar{D} - \mu_D}{\left(\frac{s_D}{\sqrt{n}}\right)} = \frac{-2 - 0}{\left(\frac{2.0702}{\sqrt{8}}\right)} = -2.7325$.

The p-value for a two-tailed t-test with degrees of freedom = $n - 1 = 7$, is found by finding the area to the left of the test statistic -2.7325 using technology.

Decision: Since the p-value = 0.0146 is less than $\alpha = 0.05$, we reject H_0 .

Summary: At the 5% level of significance, there is enough evidence to support the claim that the mean production rate increases when music is played in the manufacturing area.

TI-84: Find the differences between the sample pairs (you can subtract two lists to do this). Press the [STAT] key and then the [EDIT] function, enter the difference column into list one. Press the [STAT] key, arrow over to the [TESTS] menu. Arrow down to the option [2:T -Test] and press the [ENTER]. Arrow over to the [Data] menu and press the [ENTER] key. Then type in the hypothesized mean as 0, List: L3, leave Freq:1 alone, arrow over to the \neq , $<$, $>$, sign that is the same in the problem's alternative hypothesis statement then press the [ENTER] key, arrow down to [Calculate] and press the [ENTER] key. The calculator returns the t-test statistic, the p-value, mean of the differences $\bar{D} = \bar{x}$ and standard deviation of the differences $s_D = s_x$.

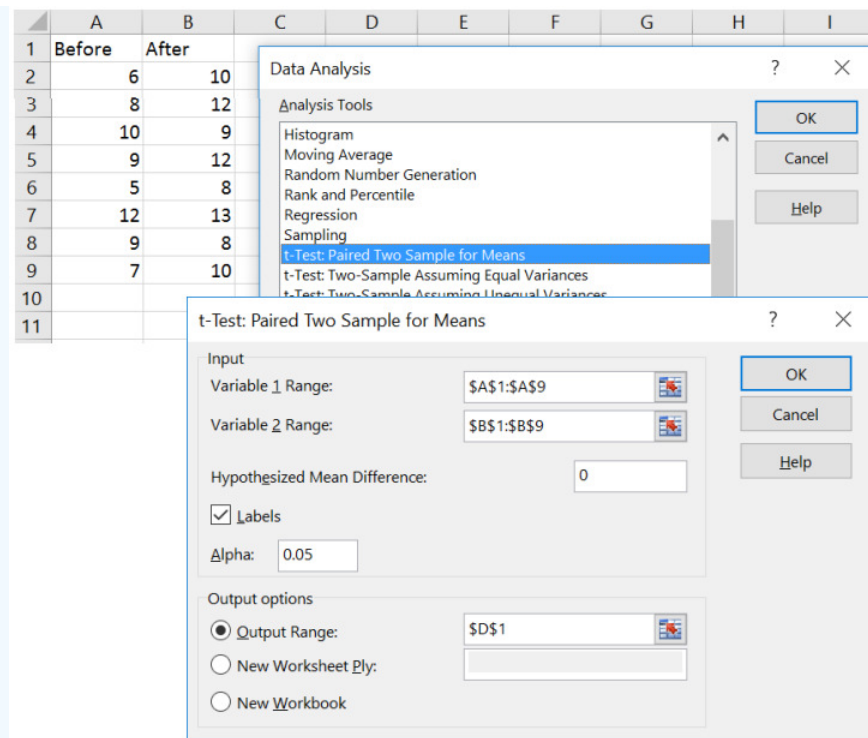
L1	L2	L3	L1	L2	L3
6	10		6	10	-4
8	12		8	12	-4
10	9		10	9	1
9	12		9	12	-3
5	8		5	8	-3
12	13		12	13	-1
9	8		9	8	1
L3=L1-L2			L3(1)=-4		
T-Test Inpt:Data Stats μ_0 :0 List:L3 Freq:1 μ : $\neq \mu_0$ $< \mu_0$ $> \mu_0$ Calculate Draw			T-Test $\mu < 0$ $t = -2.732520204$ $P = .0146160554$ $\bar{x} = -2$ $Sx = 2.070196678$ $n = 8$		

TI-89: Find the differences between the sample pairs (you can subtract two lists to do this). Go to the [Apps] **Stat/List Editor**, enter the two data sets in lists 1 and 2. Move the cursor so that it is highlighted on the header of list3. Press [2nd] Var-Link and move down to list1 and press [Enter]. This brings the name list1 back to the list3 at the bottom, select the minus [-] key, then select [2nd] Var-link and this time highlight list2 and press [Enter]. You should now see list1-list2 at the bottom of the window. Press [Enter] then the differences will be stored in list3. Press [2nd] then F6 [Tests], select **2: T-Test**. Select the [Data] menu. Then type in the hypothesized mean as 0, List: list1, Freq:1, arrow over to the \neq , $<$, $>$, and select the sign that is the same in the problem's alternative hypothesis, press the [ENTER] key to calculate. The calculator returns the t-test statistic, p-value, $\bar{D} = \bar{x}$ and $s_D = s_x$.

F1- F2- F3- F4- F5- F6- F7- ToolsPlotsListCalcDistrTestsInts list1 list2 list3 list4 6 10 8 12 10 9 9 12 5 8 12 13 list3=0 MAIN RAD AUTO FUNC 3/6	F1- F2- F3- F4- F5- F6- F7- ToolsPlotsListCalcDistrTestsInts VAR-LINK [ATT] F1- F2- F3- F4- F5- F6- F7- Main34ViewLink All ContentsFlashApps MAIN list1 list2 list2 list1 list3 list4 list4 list3 list5 list4 list6 list4 list4 list4 MAIN RAD AUTO FUNC 3/6
F1- F2- F3- F4- F5- F6- F7- ToolsPlotsListCalcDistrTestsInts list1 list2 list3 list4 6 10 8 12 10 9 9 12 5 8 12 13 list3=list1-list2 MAIN RAD AUTO FUNC 3/6	F1- F2- F3- F4- F5- F6- F7- ToolsPlotsListCalcDistrTestsInts list1 list2 list3 list4 6 10 8 12 10 9 9 12 5 8 12 13 list3(1)=-4 MAIN RAD AUTO FUNC 3/6
F1- F2- F3- F4- F5- F6- F7- ToolsPlotsListCalcDistrTestsInts list1 list2 list3 list4 6 10 8 12 10 9 9 12 5 8 12 13 list3(1)=-4 MAIN RAD AUTO FUNC 3/6	F1- F2- F3- F4- F5- F6- F7- ToolsPlotsListCalcDistrTestsInts list1 list2 list3 list4 6 10 8 12 10 9 9 12 5 8 12 13 list3(1)=-4 MAIN RAD AUTO FUNC 3/6
F1- F2- F3- F4- F5- F6- F7- ToolsPlotsListCalcDistrTestsInts list1 list2 list3 list4 6 10 8 12 10 9 9 12 5 8 12 13 list3(1)=-4 MAIN RAD AUTO FUNC 3/6	F1- F2- F3- F4- F5- F6- F7- ToolsPlotsListCalcDistrTestsInts list1 list2 list3 list4 6 10 8 12 10 9 9 12 5 8 12 13 list3(1)=-4 MAIN RAD AUTO FUNC 3/6

Excel: Start by entering the data in two columns in the same order that they appear in the problem. Then select Data > Data Analysis > t-test: Paired Two Sample for Means, then select OK.

Select the Before data (including the label) into the Variable 1 Range, and the After data (including the label) in the Variable 2 Range. Type in zero for the Hypothesized Mean Difference box. Select the box for Labels (do not select this if you do not have labels in the variable range selected). Change alpha to fit the problem. You can leave the default to open in a new worksheet or change output range to be one cell where you want the top left of the output table to start (make sure this cell does not overlap any existing data). Then select OK. See below for example.



You get the following output:

t-Test: Paired Two Sample for Means			
	<i>Before</i>	<i>After</i>	
Mean	8.25	10.25	Sample mean for each group.
Variance	5.0714	3.6429	Sample variance for each group.
Observations	8	8	Sample size for each group.
Pearson Correlation	0.5152		Ignore this for now.
Hypothesized Mean Difference	0		This is the zero we set for H_0 .
df	7		$df = \text{number of pairs} - 1$.
t Stat	-2.7325		Test Statistic t-score.
P(T<=t) one-tail	0.0146		p-value for a 1-tailed test
t Critical one-tail	1.8946		Absolute value of the critical value for a one-tailed test.
P(T<=t) two-tail	0.0292		p-value for a two-tailed test.
t Critical two-tail	2.3646		Positive critical value for a two-tailed test.

One nice feature in Excel is that you get the p-value and the critical value in the output. The critical value can be taken from the Excel output; however, Excel never gives negative critical values. Since we are doing a left-tailed test we will need to use the t-score = -1.8946.

If we were to draw and shade the critical region for the sampling distribution, it would look like Figure 9 -2.

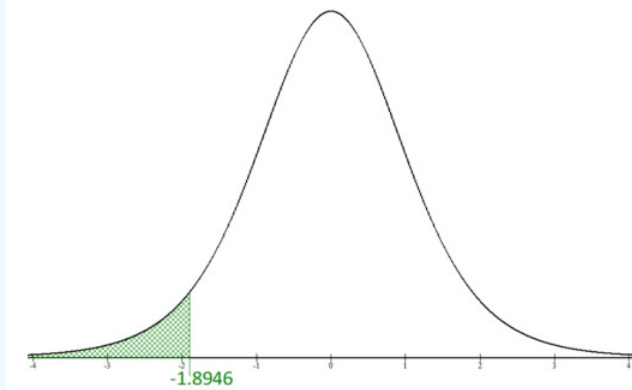


Figure 9-2

The decision is made by comparing the test statistic $t = -2.7325$ with the critical value $t_{\alpha} = -1.8946$.

Since the test statistic is in the shaded critical region, we would reject H_0 .

At the 5% level of significance, there is enough evidence to support the claim that the mean production rate increases when music is played in the manufacturing area.

The decision and summary should not change from using the p-value method.

Confidence Interval Method

A $(1 - \alpha) \cdot 100\%$ confidence interval for the difference between two population means with matched pairs: μ_D = mean of the differences.

$$\left(\bar{D} - t_{\frac{\alpha}{2}} \left(\frac{s_D}{\sqrt{n}} \right), \bar{D} + t_{\frac{\alpha}{2}} \left(\frac{s_D}{\sqrt{n}} \right) \right)$$

Or more compactly as $\bar{D} \pm t_{\alpha/2} \left(\frac{s_D}{\sqrt{n}} \right)$

Where the t-distribution has degrees of freedom, $df = n - 1$, where n is the number of pairs.

Hands-On Cafe records the number of online orders for eight randomly selected locations for two consecutive days. Assume the number of online orders is normally distributed. Find the 95% confidence interval for the mean difference. Is there evidence of a difference in mean number of orders for the two days?

Location 1 2 3 4 5 6 7 8 **Thursday** 67 65 68 68 68 70 69 70 **Friday** 68 70 69 71 72 69 70 70

Solution

First set up the hypotheses. We are testing to see if Thursday \neq Friday orders. The hypotheses would be:

$$H_0: \mu_D = 0$$

$$H_1: \mu_D \neq 0$$

Next, compute the $t_{\alpha/2}$

critical value for a 95% confidence interval and $df = 7$. Use the t-distribution with technology using confidence level 95%, lower tail area of $\alpha/2 = 0.025$ to get $t_{\alpha/2} = t_{0.025} = \pm 2.36462$. Compute the differences of Thursday – Friday for each pair.

Thursday	67	65	68	68	68	70	69	70
Friday	68	70	69	71	72	69	70	70
D	-1	-5	-1	-3	-4	1	-1	0

Use technology to compute the mean, standard deviation and sample size.

Note if you use a TI calculator then $\bar{D} = \bar{x}$ and $s_D = s_x$.

Find the interval estimate: $\bar{D} \pm t_{\frac{\alpha}{2}} \left(\frac{s_D}{\sqrt{n}} \right)$

$$\Rightarrow -1.75 \pm 2.36462 \left(\frac{2.05287}{\sqrt{8}} \right)$$

$$\Rightarrow -1.75 \pm 1.7162.$$

Write the answer using standard notation $-3.4662 < \mu_D < -0.0335$ or interval notation $(-3.4662, -0.0338)$.

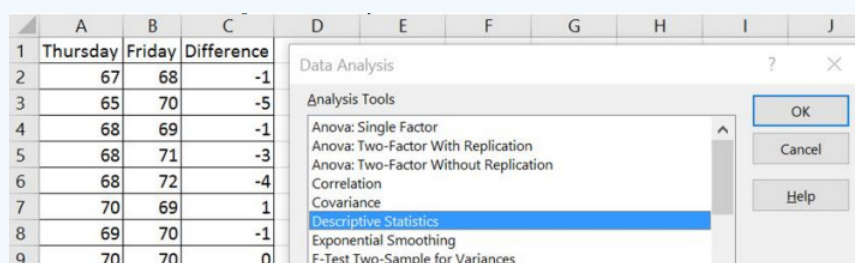
For an interpretation of the interval, if we were to use the same sampling techniques, approximately 95 out of 100 times the confidence interval $(-3.4662, -0.0338)$ would contain the population mean difference in the number of orders between Thursday and Friday.

Since both endpoints are negative, we can be 95% confident that the population mean number of orders for Thursday is between 3.4662 and 0.0338 orders lower than Friday.

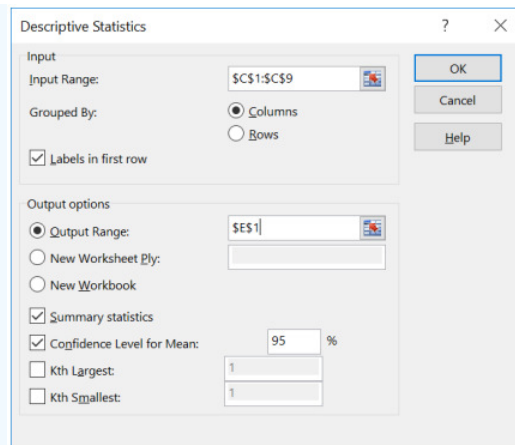
Excel: Type in both samples in two adjacent columns, and then subtract each pair in a third column and label the column Difference.

Thursday	Friday	Difference
67	68	=A2-B2
65	70	=A3-B3
68	69	=A4-B4
68	71	=A5-B5
68	72	=A6-B6
70	69	=A7-B7
69	70	=A8-B8
70	70	=A9-B9

Select Data > Data Analysis > Descriptive Statistics and click OK.



Select the Difference column for the input range including the label, then check the box next to Labels in first row (do not select this box if you did not highlight a label in the input range). Use the default new worksheet or select a single cell for the Output Range where you want your top left-hand corner of the table to start. Check the boxes Summary Statistics and Confidence Level for Mean. Change the confidence level to fit the question, and then select OK.



Descriptive Statistics

Input
 Input Range:
 Grouped By: ☒ Columns ☐ Rows
☒ Labels in first row

Output options
☒ Output Range:
☐ New Worksheet Ply:
☐ New Workbook
☒ Summary statistics
☒ Confidence Level for Mean: %
☐ Kth Largest:
☐ Kth Smallest:

OK Cancel Help

You get the following output:

<i>Difference</i>		
Mean	-1.75	\bar{D} = Mean of the differences
Standard Error	0.7258	
Median	-1	
Mode	-1	
Standard Deviation	2.0529	s_D = Standard Deviation of the differences
Sample Variance	4.2143	
Kurtosis	-0.9009	
Skewness	-0.4458	
Range	6	
Minimum	-5	
Maximum	1	
Sum	-14	
Count	8	Sample Size = Number of Pairs
Confidence Level(95.0%)	1.7162	Margin of Error

The confidence interval is the mean \pm margin of error. In two different cells subtract and then add the margin of error from the mean to get the confidence interval limits and then put your answer in interval notation $(-3.4662, -0.0338)$.

TI-84: First, find the differences between the samples. Then on the TI-83 press the [STAT] key, arrow over to the [TESTS] menu, arrow down to the [8:TInterval] option and press the [ENTER] key. Arrow over to the [Data] menu and press the [ENTER] key. The defaults are List: L1, Freq:1. If this is set with a different list, arrow down and use [2nd] [1] to get L1. Then type in the confidence level. Arrow down to [Calculate] and press the [ENTER] key. The calculator returns the confidence interval, $\bar{D} = \bar{x}$ and $s_D = s_x$.

TI-89: First, find the differences between the samples. Go to the [Apps] **Stat/List Editor**, then enter the differences into list 1. Press [2nd] then F7 [Ints], then select **2: T-Interval**. Select the [Data] menu. Enter in List: list1, Freq:1. Then type in the confidence level. Press the [ENTER] key to calculate. The calculator returns the confidence interval, $\bar{D} = \bar{x}$ and $s_D = s_x$.

This page titled [9.1: Two Sample Mean T-Test for Dependent Groups](#) is shared under a [CC BY-SA 4.0](#) license and was authored, remixed, and/or curated by [Rachel Webb](#) via [source content](#) that was edited to the style and standards of the LibreTexts platform.

9.2: Two Independent Groups

This section will look at how to analyze a difference in the mean for two independent samples. As with all other hypothesis tests and confidence intervals, the process is the same, though the formulas and assumptions are different.

The symbol used for the population mean has been μ up to this point. In order to use formulas that compare the means from two populations, we use subscripts to show which population statistic or parameter we are referencing.

Parameters

- μ_1 = population mean of population 1
- μ_2 = population mean of population 2
- σ_1 = population standard deviation of population 1
- σ_2 = population standard deviation of population 2
- σ_1^2 = population variance of population 1
- σ_2^2 = population variance of population 2
- p_1 = population proportion of population 1
- p_2 = population proportion of population 2

Statistics

- \bar{x}_1 = mean of sample from population 1
- \bar{x}_2 = mean of sample from population 2
- s_1 = standard deviation of sample from population 1
- s_2 = standard deviation of sample from population 2
- s_1^2 = variance of sample from population 1
- s_2^2 = variance of sample from population 2
- \hat{p}_1 = proportion of sample from population 1
- \hat{p}_2 = proportion of sample from population 2
- n_1 = sample size from population 1
- n_2 = sample size from population 2

You do not need to use the subscripts 1 and 2. You can use a letter or symbol that helps you differentiate between the two groups. For instance, if you have two manufacturers labeled A and B, you may want to use μ_A and μ_B .

When setting up the null hypothesis we are testing if there is a difference in the two means equal to some known difference. $H_0: \mu_1 - \mu_2 = (\mu_1 - \mu_2)_0$. We will focus on the case where $(\mu_1 - \mu_2)_0 = 0$, which says that, tentatively, we assume that there is no difference in population means $H_0: \mu_1 - \mu_2 = 0$. If we were to subtract μ_2 from both sides of the equation $\mu_1 - \mu_2 = 0$ we would get $\mu_1 = \mu_2$. For instance, if the average age for group one was 25 and the average age for group two was also 25, then the difference between the two means would be $25 - 25 = 0$.

There are three ways to set up the hypotheses for comparing two **independent** population means μ_1 and μ_2 .




Two-tailed Test	Right-tailed Test	Left-tailed Test
$H_0: \mu_1 = \mu_2$ $H_1: \mu_1 \neq \mu_2$	$H_0: \mu_1 = \mu_2$ $H_1: \mu_1 > \mu_2$	$H_0: \mu_1 = \mu_2$ $H_1: \mu_1 < \mu_2$
		
$H_0: \mu_1 - \mu_2 = 0$ $H_1: \mu_1 - \mu_2 \neq 0$	$H_0: \mu_1 - \mu_2 = 0$ $H_1: \mu_1 - \mu_2 > 0$	$H_0: \mu_1 - \mu_2 = 0$ $H_1: \mu_1 - \mu_2 < 0$

Figure 9-3

For a one-tailed test, one could alternatively write the null hypotheses as:

Right-tailed test Left-tailed test

$$H_0: \mu_1 \leq \mu_2 \quad H_0: \mu_1 \geq \mu_2$$

$$H_1: \mu_1 > \mu_2 \quad H_1: \mu_1 < \mu_2$$

This text mostly will use an = sign in the null hypothesis.

Most of the time the groups are numbered from the order in which their statistics or data appear in the problem. To keep the correct sign of the test, make sure you do not switch the order of the groups.

For instance, if we were comparing the mean SAT score between high school juniors and seniors and our hypothesis is that the mean for seniors is higher we could set up the alternative hypotheses as either $\mu_j < \mu_s$ if we had the juniors be group 1 and $\mu_j > \mu_s$ if we had the seniors be group 1. This change would switch the sign of both the test statistic and the critical value.

When performing a one-tailed test the sign of the test statistic and critical value will match most of the time. For example, if your test statistic came out to be $z = -1.567$ and your critical value was $z = 1.645$ you most likely have the incorrect order in your hypotheses.

When you are making a conjecture about a population mean, we have **two** different situations, depending on if we know that population standard deviation, or not, called the z-test and t-test, respectively. Use Figure 9-4 to help decide when to use the z-test and t-test.

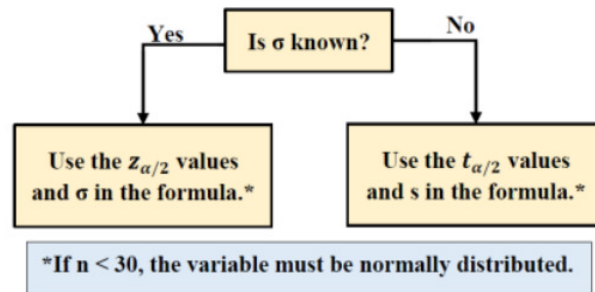


Figure 9-4

Note that you should never use the value of σ_x on your calculator since you would rarely ever have an entire population of raw data to input into a calculator. The problem may give you raw data, but σ or σ^2 would be stated in the problem and you should be using a z-test, otherwise use the t-test with the sample standard deviation s_x . Usually, σ is known from a previous year or similar study.

In either case if the sample sizes are below 30 we need to check that the population is approximately normally distributed for the Central Limit Theorem to hold. We can do this with a normal probability plot. Most examples that we deal with just assume the population is normally distributed, but in practice, you should always check these assumptions.

9.3.1 Two Sample Mean Z-Test & Confidence Interval

The two-sample z-test is a statistical test for comparing the means from two independent populations with σ_1 and σ_2 stated in the problem and using the formula for the test statistic

$$z = \frac{(\bar{x}_1 - \bar{x}_2) - (\mu_1 - \mu_2)}{\sqrt{\left(\frac{\sigma_1^2}{n_1} + \frac{\sigma_2^2}{n_2}\right)}}$$

Note that $\mu_1 - \mu_2$ is the hypothesized difference found in the null hypothesis and is usually zero.

The traditional method (or critical value method), the p-value method, and the confidence interval method are performed with steps that are identical to those when performing hypothesis tests for one population. We will show an example of a two-sample z-test, but seldom in practice will we perform this type of test since we rarely have access to a population standard deviation.

A university adviser wants to see whether there is a significant difference in ages of full-time students and part-time students. They select a random sample of 50 students from each group. The ages are shown below. At $\alpha = 0.05$, decide if there is enough evidence to support the claim that there is a difference in the ages of the two groups. Assume the population standard deviation for full-time students is 3.68 years old and for part-time students is 4.7 years old. Use the p-value method.

Full-time students

22 25 27 23 26 28 26 24 25 20 19 18 30 26 18 18 19 32 23 19 18 22 26 19 19 21 23 18 20 18 22 18 20 19 23 26 24 27 26 18 22 21 19 21 21 19 18 29 19 22

Part-time students

18	20	19	18	22	25	24	35	23	18
24	26	30	22	22	22	21	18	20	19
19	32	29	23	21	19	36	27	27	20
20	19	19	20	25	23	22	28	25	20
20	21	18	19	23	26	35	19	19	18

Solution

Assumptions: The two populations we are sampling from are not necessarily normal, but the sample sizes are greater than 30, so the Central Limit Theorem holds. The population standard deviations σ_1 and σ_2 are known; therefore, we use the z-test for comparing two population means μ_1 and μ_2 .

The claim is that there is a difference in the ages of the two student groups. Let full-time students be population 1 and part-time students be population 2 (always go in the same order as the data are presented in the problem unless otherwise stated). Then μ_1 would be the average age for full-time students and μ_2 would be the average age for parttime students. The key phrase is difference: $\mu_1 \neq \mu_2$.

The correct hypotheses are $H_0: \mu_1 = \mu_2$

$H_1: \mu_1 \neq \mu_2$.

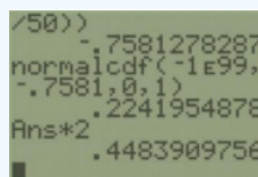
This is a two-tailed test and the claim is in the alternative hypothesis.

Note that if we had decided to have population 1 be part-time students, the test statistic would be negated from that given below, but the p-value and result would be identical. In general, you should take population 1 as whatever group comes first in the problem.

Using technology, we compute $\bar{x}_1 = 22.12$, $\bar{x}_2 = 22.76$, $n_1 = 50$ and $n_2 = 50$. From the problem we have $\sigma_1 = 3.68$ and $\sigma_2 = 4.7$. Since $\mu_1 = \mu_2$ then we know that $\mu_1 - \mu_2 = 0$, and that we do not use the sample standard deviations.

The test statistic is: $Z = \frac{(\bar{x}_1 - \bar{x}_2) - (\mu_1 - \mu_2)_0}{\sqrt{\left(\frac{\sigma_1^2}{n_1} + \frac{\sigma_2^2}{n_2}\right)}} = \frac{(22.12 - 22.76) - 0}{\sqrt{\left(\frac{3.68^2}{50} + \frac{4.7^2}{50}\right)}} = -0.7581$.

The p-value for a two-tailed z-test is found by finding the area to the left (since z is negative) of the test statistic using a normal distribution and multiplying the area by two. Using the normalcdf($-\infty, -0.7581, 0, 1$) we get an area of 0.2242. Since this is a two-tailed test we need to double the area, which gives a p-value = 0.4484.



Note that if the z-score was positive, find the area to the right of z, then double.

Decision: Because the p-value = 0.4484 is larger than $\alpha = 0.05$, we do not reject H_0 .

Summary: At the 5% level of significance, there is not enough evidence to support the claim that there is a difference in the ages of full-time students and part-time students.

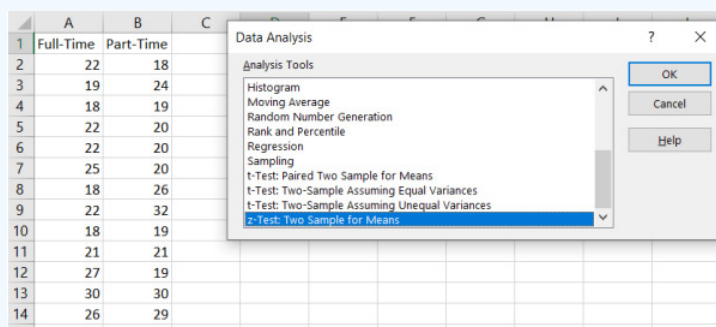
TI-84: Press the [STAT] key, arrow over to the [TESTS] menu, arrow down to the option [3:2-SampZTest] and press the [ENTER] key. Arrow over to the [Data] menu and press the [ENTER] key. Then type in the population standard deviations, the

first sample mean and sample size, then the second sample mean and sample size, arrow over to the \neq , $<$, $>$ sign that is the same in the problem's alternative hypothesis statement, then press the [ENTER]key, arrow down to [Calculate] and press the [ENTER] key. The calculator returns the test statistic z and the p-value.



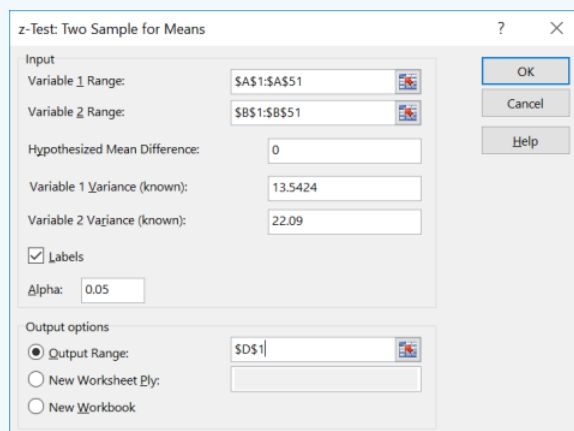
TI-89: Go to the [Apps] Stat/List Editor, then press [2^{nd}] then F6 [Tests], then select 3: 2-SampZ-Test. Then type in the population standard deviations, the first sample mean and sample size, then the second sample mean and sample size (or list names (list3 & list4), and Freq1:1 & Freq2:1), arrow over to the \neq , $<$, $>$ sign that is the same in the problem's alternative hypothesis statement then press the [ENTER] key to calculate. The calculator returns the z-test statistic and the p-value.

Excel: Start by entering the data in two columns in the same order that they appear in the problem. Then select Data > Data Analysis > z-test: Two Sample for Means, then select OK.



Click into the box next to Variable 1 Range and select the cells where the first data set is, including the label. Click into the box next to Variable 2 Range and select the cells where the second data set is, including the label. Type in zero for the hypothesized mean; this comes from the null hypothesis that if $\mu_1 = \mu_2$ then $\mu_1 - \mu_2 = 0$.

Type in the variance for each group, and be careful with this step: the variance is the standard deviation squared $\sigma_1^2 = 3.68^2 = 13.5424$ and $\sigma_2^2 = 4.7^2 = 22.09$. Select the Label box only if you highlighted the label in the variable range box. Change alpha to fit the significance level given in the problem. The output range is one cell reference number where you want the top left-hand corner of your output table to start, or you can use the default to have your output open in a new worksheet. Then select Ok. See Excel output below.



You get the following output in Excel:

z-Test: Two Sample for Means			
	Full-Time	Part-Time	
Mean	22.12	22.76	Sample means for each group.
Known Variance	13.5424	22.09	Population variance for each group.
Observations	50	50	Sample size for each group.
Hypothesized Mean Difference	0		This is the zero we set for H_0 .
z	-0.7581		Test statistic.
P(Z<=z) one-tail	0.2242		P-value for either a left or right-tailed test.
z Critical one-tail	1.6449		Absolute value of the critical value for a one-tailed test.
P(Z<=z) two-tail	0.4484		P-value for a two-tailed test.
z Critical two-tail	1.9600		Positive critical value for a two-tailed test.

Note you can only use the Excel shortcut if you have the raw data. If you have summarized data then you would need to do everything by hand.

Two-Sample Z-Interval

For independent samples, we take the mean of each sample, then take the difference in the means. If the means are equal, then the difference of the two means would be equal to zero. We can then compare the null hypothesis, that there is no difference in the means $\mu_1 - \mu_2 = 0$, with the confidence interval limits to decide whether to reject the null hypothesis. If zero is contained within the confidence interval, then we fail to reject H_0 . If zero is not contained within the confidence interval, then we reject H_0 .

A $(1 - \alpha) \cdot 100\%$ confidence interval for the difference between two population means $\mu_1 - \mu_2$:

$$(\bar{x}_1 - \bar{x}_2) \pm z_{\alpha/2} \sqrt{\left(\frac{\sigma_1^2}{n_1} + \frac{\sigma_2^2}{n_2}\right)}$$

The requirements for the confidence interval are identical to the previous hypothesis test.

Non-rechargeable alkaline batteries and nickel metal hydride (NiMH) batteries are tested, and their voltage is compared. The data follow. Test to see if there is a difference in the means using a 95% confidence interval. Assume that both variables are normally distributed.

Alkaline	NiMH
$\bar{x}_1 = 9.2$ Volts	$\bar{x}_2 = 8.8$ Volts
$\sigma_1 = 0.3$ Volts	$\sigma_2 = 0.1$ Volts
$n_1 = 27$	$n_2 = 30$

Solution

First, set up the hypotheses $H_0: \mu_1 = \mu_2$

$$H_1: \mu_1 \neq \mu_2.$$

Next, find the $z_{\alpha/2}$ critical value for a 95% confidence interval. Use technology to get $z_{\alpha/2} = 1.96$.

Find the interval estimate (confidence interval): $(\bar{x}_1 - \bar{x}_2) \pm z_{\alpha/2} \sqrt{\left(\frac{\sigma_1^2}{n_1} + \frac{\sigma_2^2}{n_2}\right)}$

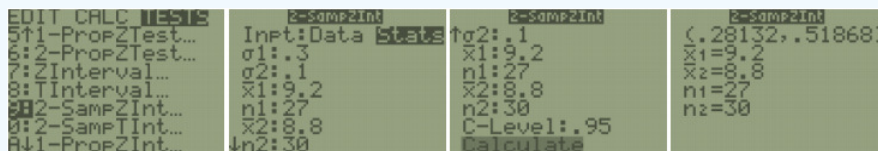
$$\begin{aligned} &\Rightarrow (9.2 - 8.8) \pm 1.96 \sqrt{\left(\frac{0.3^2}{27} + \frac{0.1^2}{30}\right)} \\ &\Rightarrow 0.4 \pm 0.1187. \end{aligned}$$

Use interval notation (0.2813, 0.5187) or standard notation $0.28 < \mu_1 - \mu_2 < 0.52$.

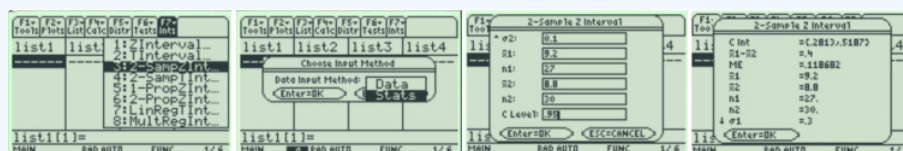
For an interpretation, if we were to use the same sampling techniques, approximately 95 out of 100 times the confidence interval (0.2813, 0.5187) would contain the population mean difference in voltage between alkaline and NiMH batteries. Since both endpoints are positive, we can reject H_0 . We can be 95% confident that the population mean voltage for alkaline batteries is between 0.28 and 0.52 volts higher than nickel metal hydride batteries.

There is no shortcut option for a two-sample z confidence interval in Excel.

TI-84: Press the [STAT] key, arrow over to the [TESTS] menu, arrow down to the option [9:2-SampZInt] and press the [ENTER] key. Arrow over to the [Stats] menu and press the [ENTER] key. Then type in the population standard deviations, the first sample mean and sample size, then the second sample mean and sample size, then enter the confidence level. Arrow down to [Calculate] and press the [ENTER] key. The calculator returns the confidence interval.



TI-89: Go to the [Apps] Stat/List Editor, then press [2nd] then F5 [Ints], then select 3: 2-SampZInt. Then type in the population standard deviations, the first sample mean and sample size, then the second sample mean and sample size (or list names (list3 & list4), and Freq1:1 & Freq2:1), then enter the confidence level. To calculate press the [ENTER] key. The calculator returns the confidence interval.



9.3.2 Two Sample Mean T-Test & Confidence Interval

The t-test is a statistical test for comparing the means from two independent populations. The t-test is used when σ_1 and/or σ_2 are both unknown. The samples must be independent and if the sample sizes are less than 30 then the populations need to be normally distributed. The t-test, as opposed to the z-test, for two independent samples has two different versions depending on if a particular assumption that the unknown population variances are unequal or equal. Since we do not know the true value of the population variances, we usually will use the first version and assume that the population variances are not equal $\sigma_1^2 \neq \sigma_2^2$. Both versions are presented, so make sure to check with your instructor if you are using both versions.

9.3.2.a Unequal Variance Method t-Test

If we assume the variances are unequal ($\sigma_1^2 \neq \sigma_2^2$), the formula for the t test statistic is

$$t = \frac{(\bar{x}_1 - \bar{x}_2) - (\mu_1 - \mu_2)}{\sqrt{\left(\frac{s_1^2}{n_1} + \frac{s_2^2}{n_2}\right)}}$$

Use the t-distribution where the degrees of freedom are $df = \frac{\left(\frac{s_1^2}{n_1} + \frac{s_2^2}{n_2}\right)^2}{\left(\left(\frac{s_1^2}{n_1}\right)^2 \left(\frac{1}{n_1-1}\right) + \left(\frac{s_2^2}{n_2}\right)^2 \left(\frac{1}{n_2-1}\right)\right)}$.

Note that $\mu_1 - \mu_2$ is the hypothesized difference found in the null hypothesis and is usually zero.

Some older calculators only accept the df as an integer, in this case round the df down to the nearest integer if needed. For most technology, you would want to keep the decimal df .

Some textbooks use an approximation for the df as the smaller of $n_1 - 1$ or $n_2 - 1$, so you may find a different answer using your calculator compared to examples found elsewhere.

The traditional method (or critical value method), the p-value method, and the confidence interval method are performed with steps that are identical to those when performing hypothesis tests for one population.

The sample sizes both need to be 30 or more, or the populations need to be approximately normally distributed in order for the Central Limit Theorem to hold.

Two-Sample T-Interval

For independent samples, we take the mean of each sample, then take the difference in the means. If the means are equal, then the difference of the two means would be equal to zero. We can then compare the null hypothesis, that there is no difference in the

means $\mu_1 - \mu_2 = 0$, with the confidence interval limits to decide whether to reject the null hypothesis. If zero is contained within the confidence interval, then we fail to reject H_0 . If zero is not contained within the confidence interval, then we reject H_0 .

A $(1 - \alpha) \cdot 100\%$ confidence interval for the difference between two population means $\mu_1 - \mu_2$ for independent samples with unequal variances: $(\bar{x}_1 - \bar{x}_2) \pm t_{\alpha/2} \sqrt{\left(\frac{s_1^2}{n_1} + \frac{s_2^2}{n_2}\right)}$.

The requirements and degrees of freedom are identical to the above hypothesis test.

The general United States adult population volunteer an average of 4.2 hours per week. A random sample of 18 undergraduate college students and 20 graduate college students indicated the results below concerning the amount of time spent in volunteer service per week. At $\alpha = 0.01$ level of significance, is there sufficient evidence to conclude that a difference exists between the mean number of volunteer hours per week for undergraduate and graduate college students? Assume that number of volunteer hours per week is normally distributed.

Undergraduate Sample Mean 2.5 Sample Variance 2.2 Sample Size 18
Graduate Sample Mean 3.8 Sample Variance 3.5 Sample Size 20

Solution

Assumptions: The two populations we are comparing are undergraduate and graduate college students. We are given that the number of volunteer hours per week is normally distributed. We are told that the samples were randomly selected and should therefore be independent. We do not know the two population standard deviations (we only have the sample standard deviations as the square root of the sample variances), so we must use the t -test. Using the critical value method steps, we get the following.

The question is asking if there is a difference between the mean number of volunteer hours per week for undergraduate and graduate level college students. We let population 1 be undergraduate students, and population 2 be graduate students.

The correct hypotheses for a two-tailed test are: $H_0: \mu_1 = \mu_2$

$$H_1: \mu_1 \neq \mu_2.$$

The test statistic is $t = \frac{(\bar{x}_1 - \bar{x}_2) - (\mu_1 - \mu_2)}{\sqrt{\left(\frac{s_1^2}{n_1} + \frac{s_2^2}{n_2}\right)}} = \frac{(2.5 - 3.8) - 0}{\sqrt{\left(\frac{2.2}{18} + \frac{3.5}{20}\right)}} = -2.3845$.

The critical value for a two-tailed t -test with degrees of freedom is found by using tail area $\alpha/2 = 0.005$ with

$$df = \frac{\left(\frac{s_1^2}{n_1} + \frac{s_2^2}{n_2}\right)^2}{\left(\frac{s_1^2}{n_1}\right)^2 \left(\frac{1}{n_1 - 1}\right) + \left(\frac{s_2^2}{n_2}\right)^2 \left(\frac{1}{n_2 - 1}\right)} = \frac{\left(\frac{2.2}{18} + \frac{3.5}{20}\right)^2}{\left(\frac{2.2}{18}\right)^2 \left(\frac{1}{17}\right) + \left(\frac{3.5}{20}\right)^2 \left(\frac{1}{19}\right)} = 35.0753$$

Draw the curve and label the critical values. Use the invT function on your calculator to compute the critical value $\text{invT}(0.005, 35.0753) = -2.724$ (older calculators may require you to use a whole number, round down to $df = 35$), or use Excel =T.INV(0.005, 35.0753) to compute the critical value.

The test statistic is between the critical values -2.724 and 2.724 , therefore do not reject H_0 .

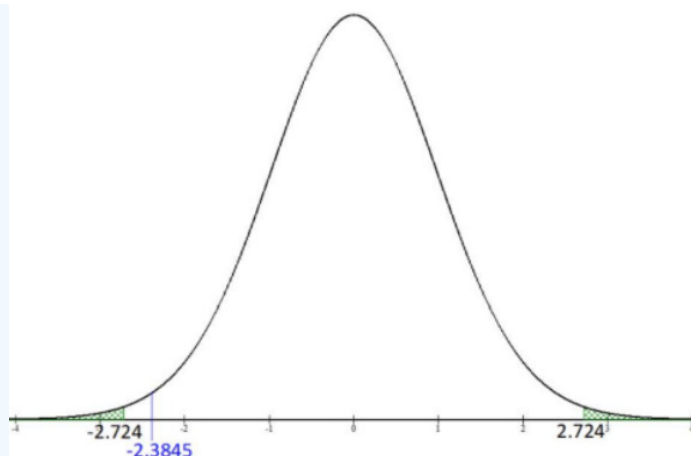
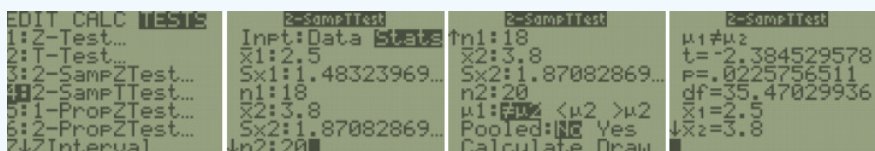


Figure 9-5

There is not enough evidence to suggest a difference between the population mean number of volunteer hours per week for undergraduate and graduate college students.

Note that if we had decided to have population 1 be graduate students, the test statistic would be positive 2.3845, but this would not change our decision for a two-tailed test. If you are doing a one-tailed test, then you need to be consistent on which sign your test statistic has. Most of the time for a left-tailed test both the critical value and the test statistic will be negative and for a right-tailed test both the critical value and test statistic will be positive.

TI-84: Press the [STAT] key, arrow over to the [TESTS] menu, arrow down to the option [4:2-SampTTest] and press the [ENTER] key. Arrow over to the [Stats] menu and press the [Enter] key. Enter the means, standard deviations, sample sizes, confidence level. Then arrow over to the not equal $<$, $>$ sign that is the same in the problem's alternative hypothesis statement, then press the [ENTER] key. Highlight the No option under Pooled for unequal variances. Arrow down to [Calculate] and press the [ENTER] key. The calculator returns the test statistic and the p-value. If you have raw data, press the [STAT] key and then the [EDIT] function, then enter the data into list one and list two. Press the [STAT] key, arrow over to the [TESTS] menu, arrow down to the option [4:2- SampTTest] and press the [ENTER] key. Arrow over to the [Data] menu and press the [ENTER] key. The defaults are List1: L₁, List2: L₂, Freq1:1, Freq2:1. If these are set different arrow down and use [2nd] [1] to get L₁ and [2nd] [2] to get L₂.



TI-89: Go to the [Apps] Stat/List Editor, then press [2nd] then F6 [Tests], then select 4: 2-SampT-Test. Enter the sample means, sample standard deviations, and sample sizes (or list names (list3 & list4), and Freq1:1 & Freq2:1). Then arrow over to the not equal $<$, $>$ and select the sign that is the same in the problem's alternative hypothesis statement. Highlight the No option under Pooled. Press the [ENTER] key to calculate. The calculator returns the t-test statistic and the p-value.



A researcher is studying how much electricity (in kilowatt hours) households from two different cities use in their homes. Random samples of 17 days in Sacramento and 16 days in Portland are given below. Test to see if there is a difference using all 3 methods (critical value, p-value and confidence interval). Assume that electricity use is normally distributed and the population variances are unequal. Use $\alpha = 0.10$.

Sacramento			
474	414	692	467
443	605	419	277
670	696	783	
577	813	694	
565	663	884	

Portland			
783	587	527	546
442	107	728	662
371	427	277	474
605	293	320	555

Solution

The populations are independent and normally distributed.

The hypotheses for all 3 methods are: $H_0: \mu_1 = \mu_2$

$$H_1: \mu_1 \neq \mu_2.$$

Use technology to find the sample means, standard deviations and sample sizes.

Enter the Sacramento data into list 1, then do 1-Var Stats L1 and you should get $\bar{x}_1 = 596.2353$, $s_1 = 163.2362$, and $n_1 = 17$.

Enter the Portland data into list 2, then do 1-Var Stats L2 and you should get $\bar{x}_2 = 481.5$, $s_1 = 179.3957$, and $n_1 = 16$.

$$\text{The test statistic is } t = \frac{(\bar{x}_1 - \bar{x}_2) - (\mu_1 - \mu_2)_0}{\sqrt{\left(\frac{s_1^2}{n_1} + \frac{s_2^2}{n_2}\right)}} = \frac{(596.2353 - 481.5) - 0}{\sqrt{\left(\frac{163.2362^2}{17} + \frac{179.3957^2}{16}\right)}} = 1.9179.$$

$$\text{The } df = \frac{\left(\frac{s_1^2}{n_1} + \frac{s_2^2}{n_2}\right)^2}{\left(\left(\frac{s_1^2}{n_1}\right)^2 \left(\frac{1}{n_1 - 1}\right) + \left(\frac{s_2^2}{n_2}\right)^2 \left(\frac{1}{n_2 - 1}\right)\right)} = \frac{\left(\frac{163.2362^2}{17} + \frac{179.3957^2}{16}\right)^2}{\left(\left(\frac{163.2362^2}{17}\right)^2 \left(\frac{1}{16}\right) + \left(\frac{179.3957^2}{16}\right)^2 \left(\frac{1}{15}\right)\right)} = 30.2598.$$

The p-value would be double the area to the right of $t = 1.9179$. Using the TI calculator or Excel we get the p-value = 0.0646. Stop and see if you can find this p-value using the same process from previous sections.

Since the p-value is less than alpha, we would reject H_0 .

At the 10% level of significance, there is a statistically significant difference between the mean electricity use in Sacramento and Portland.

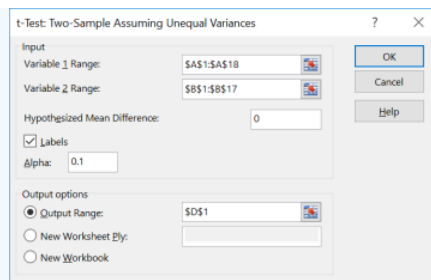
Excel

When you have raw data, you can use Excel to find all this information using the Data Analysis tool. Enter the data into Excel, then choose Data > Data Analysis > t-Test: Two Sample Assuming Unequal Variances.

The screenshot shows an Excel spreadsheet with two columns of data: Sacramento (List 1) and Portland (List 2). The Data Analysis tool is open, and the 't-Test: Two-Sample Assuming Unequal Variances' option is selected. The tool is configured to compare the means of the two samples, with the Sacramento data in the first range and the Portland data in the second range. The output range is set to a blank area of the spreadsheet.

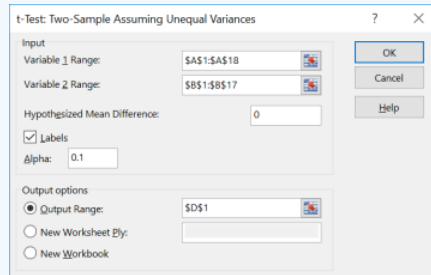
	A	B	C	D	E	F	G	H	I	J
1	Sacramento	Portland								
2	474	783								
3	443	442								
4	670	371								
5	577	605								
6	565	587								
7	414	107								
8	605	427								
9	696	293								
10	813	527								
11	663	728								
12	692	277								
13	419	320								
14	783	546								
15	694	662								
16	884	474								
17	467	555								
18	277									
19										

Enter the necessary information as we did in previous sections (see output below) and select OK.



You can use this Excel shortcut only if you have raw data given in the question.

We get the following output, which has both p-values and critical values.



Critical Value Method

The hypotheses and test statistic steps do not change compared to the p-value method.

Hypotheses: $H_0: \mu_1 = \mu_2$

$H_1: \mu_1 \neq \mu_2$.

$$\text{Test Statistic: } t = \frac{(\bar{x}_1 - \bar{x}_2) - (\mu_1 - \mu_2)_0}{\sqrt{\left(\frac{s_1^2}{n_1} + \frac{s_2^2}{n_2}\right)}} = \frac{(596.2353 - 481.5) - 0}{\sqrt{\left(\frac{163.2362^2}{17} + \frac{179.3957^2}{16}\right)}} = 1.9179$$

Compute the t critical values.

$$\text{The degrees of freedom stay the same: } df = \frac{\left(\frac{163.2362^2}{17} + \frac{179.3957^2}{16}\right)^2}{\left(\left(\frac{163.2362^2}{17}\right)^2 \left(\frac{1}{16}\right) + \left(\frac{179.3957^2}{16}\right)^2 \left(\frac{1}{15}\right)\right)} = 30.2598$$

We can use the t Critical two-tail value given in the Excel output or use the Tcalculator $\text{invT}(0.05, 30.2598) = -1.697$. Some older calculators do not let you use a decimal for df so round down and use $\text{invT}(0.05, 30)$.

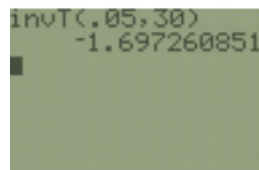


Figure 9-6.

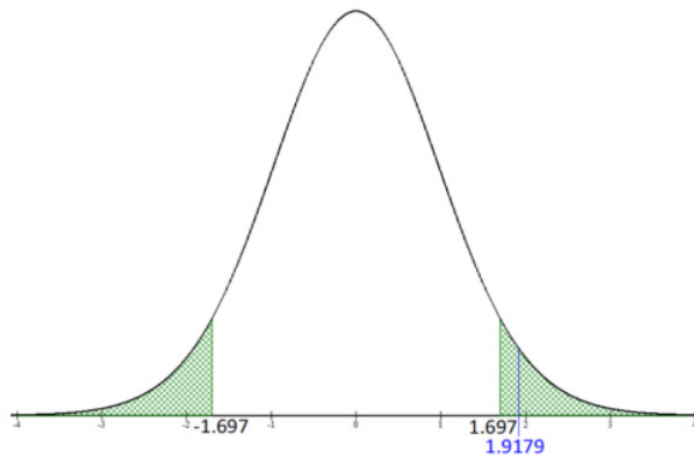


Figure 9-6

Since the test statistic is in the critical region, we would reject H_0 . This agrees with the same decision that we had using the p-value method.

Summary: At the 10% level of significance, there is statistically significant difference between the mean electricity use between Sacramento and Portland.

Confidence Interval Method

The hypotheses are the same. The main difference is that we would find a confidence interval and compare $H_0: \mu_1 - \mu_2 = 0$ with the endpoints to make the decision.

Hypotheses: $H_0: \mu_1 = \mu_2$

$H_1: \mu_1 \neq \mu_2$.

Find the confidence interval. First, compute the $t_{\alpha/2}$ critical value for a 90% confidence interval since $\alpha = 0.10$.

$$\text{Use } df = \frac{\left(\frac{s_1^2}{n_1} + \frac{s_2^2}{n_2}\right)^2}{\left(\left(\frac{s_1^2}{n_1}\right)^2 \left(\frac{1}{n_1-1}\right) + \left(\frac{s_2^2}{n_2}\right)^2 \left(\frac{1}{n_2-1}\right)\right)} = \frac{\left(\frac{163.2362^2}{17} + \frac{179.3957^2}{16}\right)^2}{\left(\left(\frac{163.2362^2}{17}\right)^2 \left(\frac{1}{16}\right) + \left(\frac{179.3957^2}{16}\right)^2 \left(\frac{1}{15}\right)\right)} = 30.2598.$$

The critical value is $t_{\alpha/2} = \text{invT}(0.05, 30.2598) = -1.697$.

The older TI-83 invT program only accepts integer df , use $df = 30$. Alternatively, use the output from the Excel output under the t Critical two-tail row.

$$\begin{aligned} \text{Next, find the interval estimate } (\bar{x}_1 - \bar{x}_2) \pm t_{\alpha/2} \sqrt{\left(\frac{s_1^2}{n_1} + \frac{s_2^2}{n_2}\right)} \\ \Rightarrow (596.2353 - 481.5) \pm 1.697 \sqrt{\left(\frac{163.2362^2}{17} + \frac{179.3957^2}{16}\right)} \\ \Rightarrow 114.7353 \pm 101.5203. \end{aligned}$$

Use interval notation (13.215, 216.2556) or standard notation $13.215 < \mu_1 - \mu_2 < 216.2556$. Note the calculator does not round between steps and gives a more accurate answer of (13.23, 216.24).

For an interpretation, if we were to use the same sampling techniques, approximately 90 out of 100 times a confidence interval with the same margin of error of (13.23, 216.24) would contain the population mean difference in electricity use between Sacramento and Portland.

We are 90% confident that the population mean household electricity use for Sacramento is between 13.23 and 216.24 kilowatt hours more than Portland households.

Since both endpoints are positive, zero would not be captured in the confidence interval so we would reject H_0 .

Summary: At the 10% level of significance, there is statistically significant difference between the mean electricity use between Sacramento and Portland.

All 3 methods should yield the same result. This text is only using the two-sided confidence interval.

TI-84: Press the [STAT] key, arrow over to the [TESTS] menu, arrow down to the option **[0:2-SampTInt]** and press the [ENTER] key. Arrow over to the [Stats] menu and press the [Enter] key. Enter the means, standard deviations, sample sizes, confidence level. Highlight the No option under Pooled for unequal variances. Arrow down to [Calculate] and press the [ENTER] key. The calculator returns the confidence interval.

Or (if you have raw data in list one and list two) press the [STAT] key and then the [EDIT] function, type the data into list one for sample one and list two for sample two. Press the [STAT] key, arrow over to the [TESTS] menu, arrow down to the option **[0:2-SampTInt]** and press the [ENTER] key. Arrow over to the [Data] menu and press the [ENTER] key. The defaults are List1: L₁, List2: L₂, Freq1:1, Freq2:1. If these are set different, arrow down and use [2nd] [1] to get L₁ and [2nd] [2] to get L₂. Then type in the confidence level. Highlight the No option under Pooled for unequal variances. Arrow down to [Calculate] and press the [ENTER] key. The calculator returns the confidence interval.

TI-89: Go to the [Apps] **Stat/List Editor**, then press [2nd] then F5 [Ints], then select **4: 2-SampTInt**. Enter the sample means, sample standard deviations, sample sizes (or list names (list3 & list4), and Freq1:1 & Freq2:1), confidence level. Highlight the No option under Pooled. Press the [ENTER] key to calculate. The calculator returns the confidence interval. If you have the raw data, select Data and enter the list names.

Summary

Use the z-test only if the population variances (or standard deviations) are given in the problem. Most of the time we do not know these values and will use the t-test. A t-test is used for many applications. We use the t-test for a hypothesis test to see if there is a change in the mean between the groups for dependent samples. We can also use the t-test for a hypothesis test to see if there is a change in the mean for independent samples. Be careful which t-test you use, paying attention to the assumption that the variances are equal or not.

9.3.2.b Equal Variance Method t-Test

This method assumes that we know the population's standard deviations have approximately the same spread. Be careful with this since both populations could be normally distributed and independent, but one population may be way more spread out (larger variance) than the other so you would want to use the unequal variance version. For this text, we will state in the problem whether or not the population's variances (or standard deviations) are equal. Also, be careful when distinguishing between when to use the z-test versus t-test, just because we assume the population variances or standard deviations are equal does not mean we know their numeric values. We also need to assume the populations are normally distributed if either sample size is below 30.

If we assume the variances are **equal** ($\sigma_1^2 = \sigma_2^2$), the formula for the *t* test statistic is

$$t = \frac{(\bar{x}_1 - \bar{x}_2) - (\mu_1 - \mu_2)}{\sqrt{\left(\frac{(n_1 - 1)s_1^2 + (n_2 - 1)s_2^2}{(n_1 + n_2 - 2)}\right) \left(\frac{1}{n_1} + \frac{1}{n_2}\right)}}$$

Use the t-distribution with pooled degrees of freedom $df = n_1 + n_2 - 2$.

The value $s^2 = \frac{(n_1 - 1)s_1^2 + (n_2 - 1)s_2^2}{(n_1 + n_2 - 2)}$ under the square root is called the **pooled variance** and is a weighted mean of the two sample variances, weighted on the corresponding sample sizes.

In some textbooks, they may find the pooled variance first, then place into the formula as $t = \frac{(\bar{x}_1 - \bar{x}_2) - (\mu_1 - \mu_2)}{\sqrt{\left(\frac{s^2}{n_1} + \frac{s^2}{n_2}\right)}}$.

Note: The *df* formula matches what your calculator gives you when you select Yes under the Pooled option.

The traditional method (or critical value method), the p-value method, and the confidence interval method are performed with steps that are identical to those when performing hypothesis tests for one population.

TI-84: Press the [STAT] key, arrow over to the [TESTS] menu, arrow down to the option **[4:2-SampTTest]** and press the [ENTER] key. Arrow over to the [Stats] menu and press the [Enter] key. Enter the means, standard deviations, sample sizes, confidence level. Then arrow over to the not equal, <, > sign that is the same in the problem's alternative hypothesis statement, then press the

[ENTER] key. Highlight the Yes option under Pooled for unequal variances. Arrow down to [Calculate] and press the [ENTER] key. The calculator returns the test statistic and the p-value. If you have raw data, press the [STAT] key and then the [EDIT] function, enter the data into list one and list two. Press the [STAT] key, arrow over to the [TESTS] menu, arrow down to the option [4:2-SampTTest] and press the [ENTER] key. Arrow over to the [Data] menu and press the [ENTER] key. The defaults are List1: L1, List2: L2, Freq1:1, Freq2:1. If these are set different arrow down and use [2nd] [1] to get L1 and [2nd] [2] to get L2.

TI-89: Go to the [Apps] **Stat/List Editor**, then press [2nd] then F6 [Tests], then select **4: 2-SampT-Test**. Enter the sample means, sample standard deviations, and sample sizes (or list names (list3 & list4), and Freq1:1 & Freq2:1). Then arrow over to the not equal, and select the sign that is the same in the problem's alternative hypothesis statement. Highlight the Yes option under Pooled. Press the [ENTER] key to calculate. The calculator returns the ttest statistic and the p-value.

Two-Sample t-Interval Assuming Equal Variances

For independent samples, we take the mean of each sample, then take the difference in the means. If the means are equal, then the difference of the two means would be equal to zero. We can then compare the null hypothesis, that there is no difference in the means $\mu_1 - \mu_2 = 0$, with the confidence interval limits to decide whether to reject the null hypothesis. If zero is contained within the confidence interval, then we fail to reject H_0 . If zero is not contained within the confidence interval, then we reject H_0 .

A $(1 - \alpha) \cdot 100\%$ confidence interval for the difference between two population means $\mu_1 - \mu_2$ for independent samples with unequal variances:

$$(\bar{x}_1 - \bar{x}_2) \pm t_{\alpha/2} \sqrt{\left(\left(\frac{(n_1-1)s_1^2 + (n_2-1)s_2^2}{n_1+n_2-2} \right) \left(\frac{1}{n_1} + \frac{1}{n_2} \right) \right)}$$

The requirements and degrees of freedom are identical to the above hypothesis test.

A manager believes that the average sales in coffee at their Portland store is more than the average sales at their Cannon Beach store. They take a random sample of weekly sales from the two stores over the last year. Assume that the sales are normally distributed with equal variances. Use the p-value method with $\alpha = 0.05$ to test the manager's claim.

Portland		Cannon Beach	
1510	1257	3585	1510
4125	4677	4399	5244
1510	3055	1764	1510
5244	1764	3853	4399
4125	6128	5244	1510
6128	3319	1510	5244
3319	6433	2533	4125
3319	5244	3585	2275
3055		2533	2275
		4399	3585
		4125	5244

Solution

Assumptions: The sample sizes are both less than 30, but the problem states that the populations are normally distributed. We are testing two means. We do not have population standard deviations or variances given in the problem so this will be a t-test not a z-test. The sales at each store are independent and the problem states that we are assuming, $\sigma_1^2 = \sigma_2^2$.

Set up the hypotheses, where group 1 is Portland, and group 2 is Cannon Beach.

We want to test if the Portland mean $>$ Cannon Beach mean, so carry this sign down to the alternative hypothesis to get a right-tailed test:

$$H_0: \mu_1 = \mu_2$$

$$H_1: \mu_1 > \mu_2.$$

Use technology to compute the sample means, standard deviations and sample sizes to get the following test statistic.

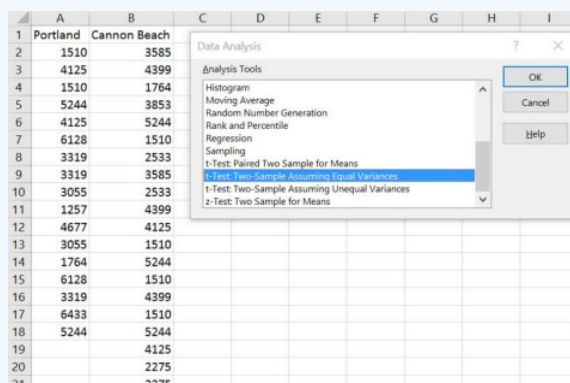
$$t = \frac{(\bar{x}_1 - \bar{x}_2) - (\mu_1 - \mu_2)_0}{\sqrt{\left(\frac{(n_1-1)s_1^2 + (n_2-1)s_2^2}{n_1+n_2-2} \right) \left(\frac{1}{n_1} + \frac{1}{n_2} \right)}} = \frac{(3776.9959 - 3384.0908) - 0}{\sqrt{\left(\frac{(16 \cdot 2864304.884 + 21 \cdot 1854752.617)}{(17+22-2)} \right) \left(\frac{1}{17} + \frac{1}{22} \right)}} = 0.8038$$

The $df = n_1 + n_2 - 1$. To find the p-value using the TI calculator DIST menu with tcdf(0.8038,1E99,37) or in Excel using =1-T.DIST(0.8038,37,TRUE) = 0.2133.

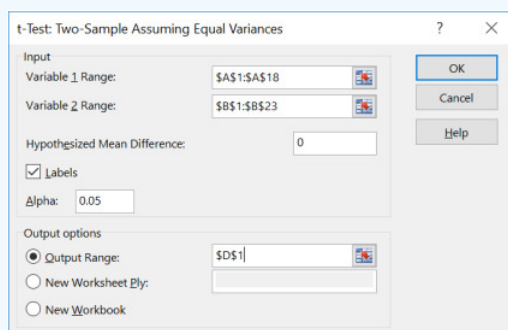
The p-value = 0.2133 is larger than $\alpha = 0.05$, therefore we do not reject H_0 .

There is not enough evidence to conclude that there is a significant difference in the average sales for Portland and Cannon Beach.

Excel: Follow the same steps with the Data Analysis tool, except choose the t-Test: Two-Sample Assuming Equal Variances.



Enter the necessary information as we did in previous sections (see output below) and select OK.



You can only use this Excel shortcut if you have raw data given in the question.

You get the following output:

t-Test: Two-Sample Assuming Equal Variances			
	Portland	Cannon Beach	
Mean	3776.9959	3384.0908	Sample means for each group.
Variance	2864304.884	1854752.617	Sample variance for each group.
Observations	17	22	Sample size for each group.
Pooled Variance	2291315.76		Pooled Variance.
Hypothesized Mean Difference	0		Zero that we used from the null hypothesis.
df	37		df
t Stat	0.8038		Test Statistic.
P(T<=t) one-tail	0.2133		P-value for either a left- or right-tailed test.
t Critical one-tail	1.6871		Absolute value of the critical value for a one-tailed test.
P(T<=t) two-tail	0.4266		P-value for a two-tailed test.
t Critical two-tail	2.0262		Positive critical value for a two-tailed test.

When reading the Excel output for a z or t-test, be careful with your signs.

- For a left-tailed t-test the critical value will be negative.
- For a right-tailed t-test the critical value will be positive.
- For a two-tailed t-test then your critical values would be \pm critical value.

TI-84: Press the [STAT] key, arrow over to the [TESTS] menu, arrow down to the option [0:2-SampTInt] and press the [ENTER] key. Arrow over to the [Stats] menu and press the [Enter] key. Enter the means, sample standard deviations, sample sizes, confidence level. Highlight the Yes option under Pooled for unequal variances. Arrow down to [Calculate] and press the [ENTER] key. The calculator returns the confidence interval.

Or (if you have raw data in list one and list two) press the [STAT] key and then the [EDIT] function, type the data into list one for sample one and list two for sample two. Press the [STAT] key, arrow over to the [TESTS] menu, arrow down to the option

[0:2-SampTInt] and press the [ENTER] key. Arrow over to the [Data] menu and press the [ENTER] key. The defaults are List1: L_1 , List2: L_2 , Freq1:1, Freq2:1. If these are set different, arrow down and use [2nd] [1] to get L_1 and [2nd] [2] to get L_2 . Then type in the confidence level. Highlight the Yes option under Pooled for unequal variances. Arrow down to [Calculate] and press the [ENTER] key. The calculator returns the confidence interval.

TI-89: Go to the [Apps] **Stat/List Editor**, then press [2nd] then F5 [Ints], then select **4: 2-SampTInt**. Enter the sample means, sample standard deviations, sample sizes (or list names (list3 & list4) and Freq1:1 & Freq2:1), confidence level. Highlight the Yes option under Pooled. Press the [ENTER] key to calculate. The calculator returns the confidence interval. If you have the raw data, select Data and enter the list names as in the following example to the right.

This page titled [9.2: Two Independent Groups](#) is shared under a [CC BY-SA 4.0](#) license and was authored, remixed, and/or curated by [Rachel Webb](#) via [source content](#) that was edited to the style and standards of the LibreTexts platform.

9.3: Two Proportion Z-Test and Confidence Interval

This section will look at how to analyze a difference in the proportions for two independent samples. As with all other hypothesis tests and confidence intervals, the process of testing is the same, though the formulas and assumptions are different.

There are three types of hypothesis tests for comparing the difference in 2 population proportions $p_1 - p_2$, see Figure 9-7.




Two-tailed Test	Right-tailed Test	Left-tailed Test
$H_0: p_1 = p_2$ $H_1: p_1 \neq p_2$	$H_0: p_1 = p_2$ $H_1: p_1 > p_2$	$H_0: p_1 = p_2$ $H_1: p_1 < p_2$
		
$H_0: p_1 - p_2 = 0$ $H_1: p_1 - p_2 \neq 0$	$H_0: p_1 - p_2 = 0$ $H_1: p_1 - p_2 > 0$	$H_0: p_1 - p_2 = 0$ $H_1: p_1 - p_2 < 0$

Figure 9-7

Note that for our purposes, $p_1 - p_2 = 0$. We could also use a variant of this model to test for a magnitude difference for when $p_1 - p_2 \neq 0$, but we will not cover that scenario.

The z-test is a statistical test for comparing the proportions from two populations. It can be used when the samples are independent, $n_1\hat{p}_1 \geq 10$, $n_1\hat{q}_1 \geq 10$, $n_2\hat{p}_2 \geq 10$, and $n_2\hat{q}_2 \geq 10$.

The formula for the z-test statistic is:

$$z = \frac{(\hat{p}_1 - \hat{p}_2) - (p_1 - p_2)}{\sqrt{\hat{p} \cdot \hat{q} \left(\frac{1}{n_1} + \frac{1}{n_2} \right)}}$$

$$\text{Where } \hat{p} = \frac{(x_1 + x_2)}{(n_1 + n_2)} = \frac{(\hat{p}_1 \cdot n_1 + \hat{p}_2 \cdot n_2)}{(n_1 + n_2)}, \quad \hat{q} = 1 - \hat{p}, \quad \hat{p}_1 = \frac{x_1}{n_1}, \hat{p}_2 = \frac{x_2}{n_2}.$$

The pooled proportion \hat{p} is a weighted mean of the proportions and \hat{q} is the complement of \hat{p} . Some texts or software may use different notation for the pooled proportion, note that $\hat{p} = \bar{p}$.

A vice principal wants to see if there is a difference between the number of students who are late to class for the first class of the day compared to the student's class right after lunch. To test their claim to see if there is a difference in the proportion of late students between first and after lunch classes, the vice-principal randomly selects 200 students from first class and records if they are late, then randomly selects 200 students in their class after lunch and records if they are late. At the 0.05 level of significance, can a difference be concluded?

First Class After Lunch Class Sample Size 200 200 Number of late students 13 16

Solution

Assumptions: We are comparing the proportion of late students' first and after lunch classes. The number of "successes" and "failures" from each population must be greater than 10 ($= 13 \geq 10$, $= 187 \geq 10$, $= 16 \geq 10$, and $= 184 \geq 10$). We must assume that the samples were independent.

Using the Traditional Method The claim is that there is a difference between the proportion of late students. Let population 1 be the first class, and population 2 be the class after lunch. Our claim would then be $p_1 \neq p_2$.

The correct hypotheses are: $H_0: p_1 = p_2$

$$H_1: p_1 \neq p_2.$$

Compute the $z_{\alpha/2}$ critical values. Draw and label the sampling distribution.

Use the inverse normal function $\text{invNorm}(0.025, 0, 1)$ to get $z_{\alpha/2} = \pm 1.96$. See Figure 9-8.

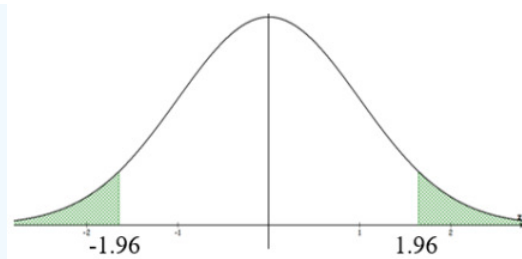


Figure 9-8

In order to compute the test statistic, we must first compute the following proportions:

$$\hat{p} = \frac{(x_1 + x_2)}{(n_1 + n_2)} = \frac{(13 + 16)}{(200 + 200)} = 0.0725 \quad \hat{q} = 1 - \hat{p} = 1 - 0.0725 = 0.9275$$

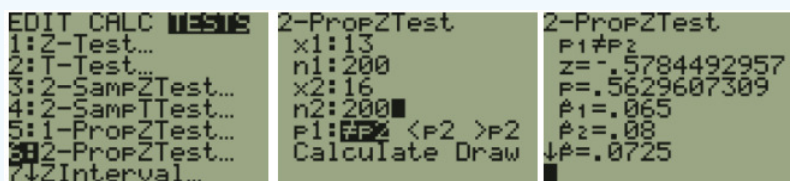
$$\hat{p}_1 = \frac{x_1}{n_1} = \frac{13}{200} = 0.065 \quad \hat{p}_2 = \frac{x_2}{n_2} = \frac{16}{200} = 0.08$$

The test statistic is, $z = \frac{(\hat{p}_1 - \hat{p}_2) - (p_1 - p_2)}{\sqrt{\hat{p} \cdot \hat{q} \left(\frac{1}{n_1} + \frac{1}{n_2} \right)}} = \frac{(0.065 - 0.08)}{\sqrt{(0.0725 \cdot 0.9275) \left(\frac{1}{200} + \frac{1}{200} \right)}} = -0.5784$.

Decision: Because the test statistic is between the critical values, we do not reject H_0 .

Summary: There is not enough evidence to support any difference in the proportion of students that are late for their first class compared to the class after lunch.

TI-84: Press the [STAT] key, arrow over to the [TESTS] menu, arrow down to the option [6:2-PropZTest] and press the [ENTER] key. Type in the x_1 , n_1 , x_2 , and n_2 arrow over to the \neq , $<$, $>$ sign that is the same in the problem's alternative hypothesis statement, then press the [ENTER] key, arrow down to [Calculate] and press the [ENTER] key. The calculator returns the z-test statistic and the p-value.



TI-89: Go to the [Apps] Stat/List Editor, then press [2nd] then F6 [Tests], then select **6: 2-PropZTest**. Type in the x_1 , n_1 , x_2 , and n_2 arrow over to the \neq , $<$, $>$ and select the sign that is the same in the problem's alternative hypothesis statement. Press the [ENTER] key to calculate. The calculator returns the z-test statistic, sample proportions, pooled proportion, and the p-value.



Two Proportions Z-Interval

A $100(1 - \alpha)\%$ confidence interval for the difference between two population proportions $p_1 - p_2$:

$$(\hat{p}_1 - \hat{p}_2) - z_{\alpha/2} \sqrt{\left(\frac{\hat{p}_1 \hat{q}_1}{n_1} + \frac{\hat{p}_2 \hat{q}_2}{n_2} \right)} < p_1 - p_2 < (\hat{p}_1 - \hat{p}_2) + z_{\alpha/2} \sqrt{\left(\frac{\hat{p}_1 \hat{q}_1}{n_1} + \frac{\hat{p}_2 \hat{q}_2}{n_2} \right)}$$

Or more compactly as $(\hat{p}_1 - \hat{p}_2) \pm z_{\alpha/2} \sqrt{\left(\frac{\hat{p}_1 \hat{q}_1}{n_1} + \frac{\hat{p}_2 \hat{q}_2}{n_2} \right)}$

The requirements are identical to the 2-proportion hypothesis test. Note that the standard error does not rely on a hypothesized proportion so do not use a confidence interval to make decisions based on a hypothesis statement.

Find the 95% confidence interval for the difference in the proportion of late students in their first class and the proportion who are late to their class after lunch.

First Class **After Lunch Class** Sample Size 200 200 Number of late students 13 16

Solution

First, compute the following:

$$\hat{p}_1 = \frac{x_1}{n_1} = \frac{13}{200} = 0.065 \quad \hat{q}_1 = 1 - \hat{p}_1 = 1 - 0.065 = 0.935$$

$$\hat{p}_2 = \frac{x_2}{n_2} = \frac{16}{200} = 0.08 \quad \hat{q}_2 = 1 - \hat{p}_2 = 1 - 0.08 = 0.92$$

Find the $z_{\alpha/2}$ critical value. Use the inverse normal to get $z_{\alpha/2} = 1.96$.

Now substitute the numbers into the interval estimate: $(\hat{p}_1 - \hat{p}_2) \pm z_{\alpha/2} \sqrt{\left(\frac{\hat{p}_1 \hat{q}_1}{n_1} + \frac{\hat{p}_2 \hat{q}_2}{n_2}\right)}$

$$\Rightarrow (0.065 - 0.08) \pm 1.96 \sqrt{\left(\frac{0.065 \cdot 0.935}{200} + \frac{0.08 \cdot 0.92}{200}\right)}$$

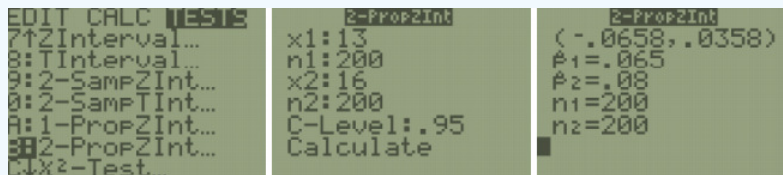
$$\Rightarrow -0.015 \pm 0.0508$$

$$\Rightarrow (-0.0508, 0.0358).$$

Use interval notation $(-0.0508, 0.0358)$ or standard notation $-0.0508 < p_1 - p_2 < 0.0358$. Note that we can have negative numbers here since we are taking the difference of two proportions.

Since $p_1 - p_2 = 0$ is in the interval, we are 95% confident that there is no difference in the proportion of late students between their first class or those who are late for their class after lunch.

TI-84: Press the [STAT] key, arrow over to the [TESTS] menu, arrow down to the option [2-PropZInt] and press the [ENTER] key. Type in the x_1 , n_1 , x_2 , n_2 , the confidence level, then press the [ENTER] key, arrow down to [Calculate] and press the [ENTER] key. The calculator returns the confidence interval.



TI-89: Go to the [Apps] **Stat/List Editor**, then press [2nd] then F7 [Ints], then select **6: 2-PropZInt**. Type in the x_1 , n_1 , x_2 , n_2 , the confidence level, then press the [ENTER] key to calculate. The calculator returns the confidence interval.

This page titled [9.3: Two Proportion Z-Test and Confidence Interval](#) is shared under a [CC BY-SA 4.0](#) license and was authored, remixed, and/or curated by [Rachel Webb](#) via [source content](#) that was edited to the style and standards of the LibreTexts platform.

9.4: Two Variance or Standard Deviation F-Test

9.5.1 The F-Distribution

An F-distribution is another special type of distribution for a continuous random variable.

Properties of the F-distribution density curve:

- Right skewed.
- F-scores cannot be negative.
- The spread of an F-distribution is determined by the degrees of freedom of the numerator, and by the degrees of freedom of the denominator. The df are usually determined by the sample sizes of the two populations or number of groups.
- The total area under the curve is equal to 1 or 100%.

The shape of the distribution curve changes when the degrees of freedom change. Figure 9-9 shows examples of F-distributions with different degrees of freedom.

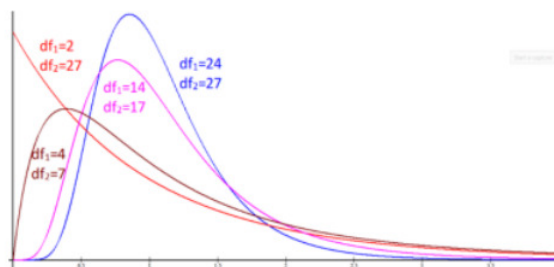


Figure 9-9

We will use the F-distribution in several types of hypothesis testing. For now, we are just learning how to find the critical value and probability using the F-distribution.

Use the TI-89 Distribution menu; or in Excel F.INV to find the critical values for the F-distribution for tail areas only, depending on the degrees of freedom. When finding a probability given an F-score, use the calculator Fcdf function under the DISTR menu or in Excel use F.DIST. Note that the TI-83 and TI-84 do not come with the INVF function, but you may be able to find the program online or from your instructor.

Alternatively, use the calculator at <https://homepage.divms.uiowa.edu/~mbogner/applets/f.html> which will also graph the distribution for you and shade in one tail at a time. You will see the shape of the F-distribution change in the following examples depending on the degrees of freedom used. For your own sketch just make sure you have a positively skewed distribution starting at zero.

The critical values $F_{\alpha/2}$ and $F_{1-\alpha/2}$ are for a two-tailed test on the F-distribution curve with area $1 - \alpha$ between the critical values as shown in Figure 9-10. Note that the distribution starts at zero, is positively skewed, and never has negative F-scores.

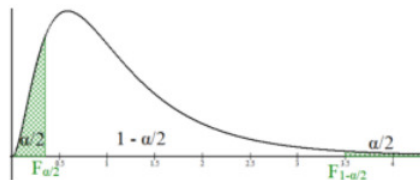


Figure 9-10

Compute the critical values $F_{\alpha/2}$ and $F_{1-\alpha/2}$ with $df_1 = 6$ and $df_2 = 14$ for a two-tailed test, $\alpha = 0.05$.

Solution

Start by drawing the curve and finding the area in each tail. For this case, it would be an area of $\alpha/2$ in each tail. Then use technology to find the F-scores. Most technology only asks for the area to the left of the F-score you are trying to find. In Excel the function for $F_{\alpha/2}$ is F.INV(area in left-tail, df_1 , df_2).

There is only one function, so use areas 0.025 and 0.975 in the left tail. For this example, we would have critical values $F_{0.025} = F.INV(0.025, 6, 14) = 0.1888$ and $F_{0.975} = F.INV(0.975, 6, 14) = 3.5014$. See Figure 9-11.

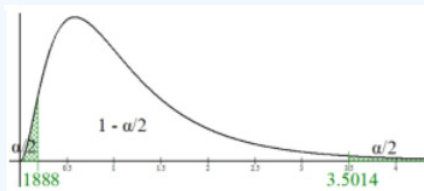


Figure 9-11

We have to calculate two distinct F-scores unlike symmetric distribution where we could just do $\pm z$ -score or $\pm t$ -score.

Note if you were doing a one-tailed test then do not divide alpha by two and use area = α for a left-tailed test and area = $1 - \alpha$ for a right-tailed test.

Find the critical value for a right-tailed test with denominator degrees of freedom of 12 and numerator degrees of freedom of 2 with a 5% level of significance.

Solution

Draw the curve and shade in the top 5% of the upper tail since $\alpha = 0.05$, see Figure 9-12. When using technology, you will need the area to the left of the critical value that you are trying to find. This would be $1 - \alpha = 0.95$. Then identify the degrees of freedom. The first degrees of freedom are the numerator df , therefore $df_1 = 2$. The second degrees of freedom are the denominator df , therefore $df_2 = 12$. Using Excel, we would have $=F.INV(0.95, 2, 12) = 3.8853$.

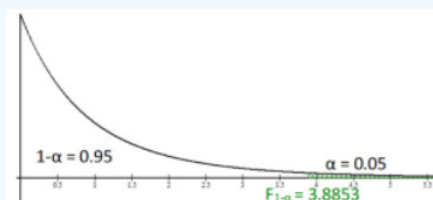


Figure 9-12

Compute $P(F > 3.894)$, with $df_1 = 3$ and $df_2 = 18$

Solution

In Excel, use the function $F.DIST(x, \text{deg_freedom1}, \text{deg_freedom2}, \text{cumulative})$. Always use TRUE for the cumulative. The F.DIST function will find the probability (area) below F. Since we want the area above F we would need to also use the complement rule. The formula would be $=1 - F.DIST(3.894, 3, 18, \text{TRUE}) = 0.0263$.

TI-84: The TI-84 calculator has a built in F-distribution. Press $[2^{\text{nd}}]$ [DISTR] (this is F5: DISTR in the STAT app in the TI-89), then arrow down until you get to the Fcdf and press [Enter]. Depending on your calculator, you may not get a prompt for the boundaries and df. If you just see Fcdf(then you will need to enter each the lower boundary, upper boundary, df_1 , and df_2 with a comma between each argument. The lower boundary is the 3.394 and the upper boundary is infinity (TI-83 and 84 use a really large number instead of ∞), then enter the two degrees of freedom. Press [Paste] and then [Enter], this will put the $Fcdf(3.894, 1E99, 3, 18)$ on your screen and then press [Enter] again to calculate the value.

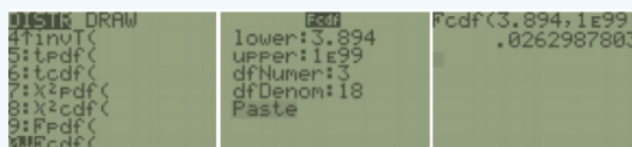


Figure 9-13.

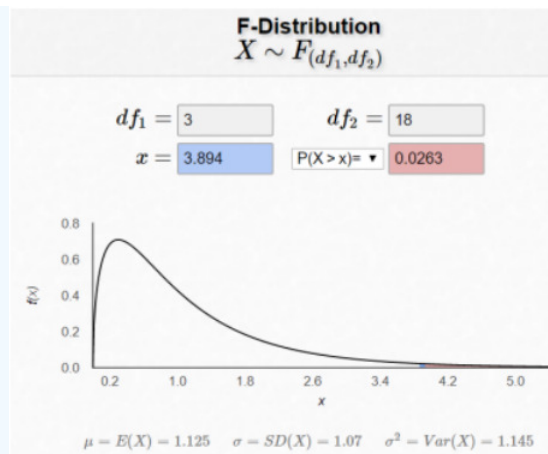


Figure 9-13

9.5.2 Hypothesis Test for Two Variances

Sometimes we will need to compare the variation or standard deviation between two groups. For example, let's say that the average delivery time for two locations of the same company is the same but we hear complaint of inconsistent delivery times for one location. We can use an F-test to see if the standard deviations for the two locations was different.

There are three types of hypothesis tests for comparing the ratio of two population variances, see Figure 9-14.

Two-tailed Test	Right-tailed Test	Left-tailed Test
$H_0: \sigma_1^2 = \sigma_2^2$ $H_1: \sigma_1^2 \neq \sigma_2^2$	$H_0: \sigma_1^2 = \sigma_2^2$ $H_1: \sigma_1^2 > \sigma_2^2$	$H_0: \sigma_1^2 = \sigma_2^2$ $H_1: \sigma_1^2 < \sigma_2^2$
$H_0: \frac{\sigma_1^2}{\sigma_2^2} = 1$ $H_1: \frac{\sigma_1^2}{\sigma_2^2} \neq 1$	$H_0: \frac{\sigma_1^2}{\sigma_2^2} = 1$ $H_1: \frac{\sigma_1^2}{\sigma_2^2} > 1$	$H_0: \frac{\sigma_1^2}{\sigma_2^2} = 1$ $H_1: \frac{\sigma_1^2}{\sigma_2^2} < 1$

Figure 9-14

If we take the square root of the variance, we get a standard deviation. Therefore, taking the square root of both sides of the hypotheses, we can also use the same test for standard deviations. We use the following notation for the hypotheses.

There are 3 types of hypothesis tests for comparing the population standard deviations σ_1/σ_2 , see Figure 9-15.

Two-tailed Test	Right-tailed Test	Left-tailed Test
$H_0: \sigma_1 = \sigma_2$ $H_1: \sigma_1 \neq \sigma_2$	$H_0: \sigma_1 = \sigma_2$ $H_1: \sigma_1 > \sigma_2$	$H_0: \sigma_1 = \sigma_2$ $H_1: \sigma_1 < \sigma_2$

Figure 9-15

The F-test is a statistical test for comparing the variances or standard deviations from two populations.

The formula for the test statistic is $F = \frac{s_1^2}{s_2^2}$.

With numerator degrees of freedom = $Ndf = n_1 - 1$, and denominator degrees of freedom = $Ddf = n_2 - 1$.

This test may only be used when both populations are independent and normally distributed.

Important: This F-test is **not** robust (a statistic is called “robust” if it still performs reasonably well even when the necessary conditions are not met). In particular, this F-test demands that both populations be normally distributed even for larger sample sizes. This F-test yields unreliable results when this condition is not met.

The traditional method (or critical value method), and the p-value method are performed with steps that are identical to those when performing hypothesis tests from previous sections.

A researcher claims that IQ scores of university students vary less than (have a smaller variance than) IQ scores of community college students. Based on a sample of 28 university students, the sample standard deviation 10, and for a sample of 25 community college students, the sample standard deviation 12. Test the claim using the traditional method of hypothesis testing with a level of significance $\alpha = 0.05$. Assume that IQ scores are normally distributed.

Solution

1. The claim is “IQ scores of university students (Group 1) have a smaller variance than IQ scores of community college students (Group 2).”

This is a left-tailed test; therefore, the hypotheses are:

$$H_0 : \sigma_1^2 = \sigma_2^2$$

$$H_1 : \sigma_1^2 < \sigma_2^2$$

2. We are using the F-test because we are performing a test about two population variances. We can use the F-test only if we assume that both populations are normally distributed. We will assume that the selection of each of the student groups was independent.

The problem gives us $s_1 = 10$, $n_1 = 28$, $s_2 = 12$, and $n_2 = 25$.

The formula for the test statistic is $F = \frac{s_1^2}{s_2^2} = \frac{10^2}{12^2} = 0.6944$.

3. The critical value for a left-tailed test with a level of significance $\alpha = 0.05$ is found using the invF program or Excel. See Figure 9-16.

Using Excel: The critical value is $F_\alpha = F.INV(0.05, 27, 24) = 0.5182$.

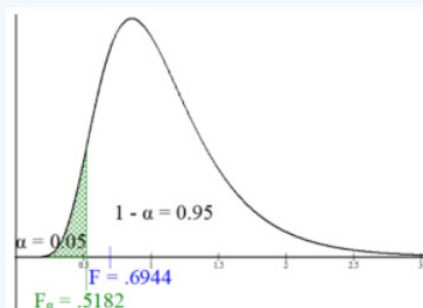


Figure 9-16

4. Decision: Compare the test statistic $F = 0.6944$ with the critical value $F_\alpha = 0.5182$, see Figure 9-16. Since the test statistic is not in the rejection region, we do not reject H_0 .

5. Summary: There is not enough evidence to support the claim that the IQ scores of university students have a smaller variance than IQ scores of community college students.

A random sample of 20 graduate college students and 18 undergraduate college students indicated these results concerning the amount of time spent in volunteer service per week. At $\alpha = 0.01$ level of significance, is there sufficient evidence to conclude that graduate students have a higher standard deviation of the number of volunteer hours per week compared to undergraduate students? Assume that number of volunteer hours per week is normally distributed.

Solution

Assumptions: The two populations we are comparing are graduate and undergraduate college students. We are given that the number of volunteer hours per week is normally distributed. We are told that the samples were randomly selected and should therefore be independent.

Using the Traditional Method

1. We are trying to determine whether the standard deviation of the number of volunteer hours per week for graduate students (Group 1) is larger than undergraduate students (Group 2) or $\sigma_1 > \sigma_2$.

Therefore, the hypotheses are:

$$H_0 : \sigma_1 = \sigma_2$$

$$H_1 : \sigma_1 > \sigma_2$$

2. We are given that $s_1^2 = 3.5$, $s_2^2 = 2.2$, $n_1 = 20$ and $n_2 = 18$. Note variances were given, so do not square the numbers again. The test statistic is, $F = \frac{s_1^2}{s_2^2} = \frac{3.5}{2.2} = 1.5909$.

3. Draw and label the distribution with the critical value for a right-tailed F-test with numerator degrees of freedom = $n_1 - 1 = 19$, and with denominator degrees of freedom = $n_2 - 1 = 17$. See Figure 9-17. Use right-tail area $\alpha = 0.01$ in Excel $F_{1-\alpha} = F.INV.RT(0.01, 19, 17)$ to find the critical value 3.1857.

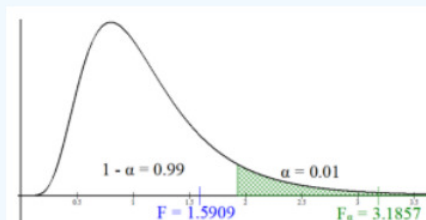


Figure 9-17

4. Decision: Since the test statistic is not in the rejection region, we do not reject H_0 .
5. Summary: There is not enough evidence to support the claim that the population standard deviation of the number of volunteer hours per week for graduate college students is higher than undergraduate college students.

Using the p-value method

1. Step 1 remains the same.

Therefore, the hypotheses are:

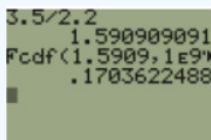
$$H_0 : \sigma_1 = \sigma_2$$

$$H_1 : \sigma_1 > \sigma_2$$

2. Step 2 remains the same.

The test statistic is, $F = \frac{s_1^2}{s_2^2} = \frac{3.5}{2.2} = 1.5909$.

3. Compute the p-value using either the Fcdf on the calculator or Excel. If your test statistic is less than 1, then find the area to the left of the test statistic, if F is above 1 then find the area to the right of the test statistic. If you have a two-tailed test then double your tail area.



TI: $Fcdf(lower, upper, df_1, df_2) = Fcdf(1.5909, 1E99, 19, 17)$.

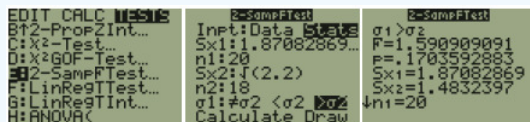
Excel: $=F.DIST.RT(1.5909, 19, 17) = 0.1704$.

4. Decision: Since the p-value = 0.1704 is greater than $\alpha = 0.01$, we "Do Not Reject H_0 ."

5. Step 5, the summary remains the same. There is not enough evidence to support the claim that the population standard deviation of the number of volunteer hours per week for graduate college students is higher than undergraduate college students.

Alternatively use the following 2-Sample F-test shortcut on the TI calculator.

TI-84: Press the [STAT] key, arrow over to the [TESTS] menu, arrow down to the option [E:2-SampFTest] and press the [ENTER] key. Arrow over to the [Stats] menu and press the [Enter] key. Then type in the s_1 , n_1 , s_2 , n_2 , arrow over to the \neq , $<$, $>$ sign that is the same in the problem's alternative hypothesis statement, then press the [ENTER] key, arrow down to [Calculate] and press the [ENTER] key. The calculator returns the test statistic F and the p-value.



Note: You have to put the standard deviation in the calculator, not the variance.

TI-89: Go to the [Apps] Stat/List Editor, then push 2nd then F6 [Tests], then select **9: 2-SampFTest**. Then type in the s_1 , n_1 , s_2 , n_2 (or list names list1 & list2), select the sign \neq , $<$, $>$ that is the same in the problem's alternative hypothesis statement, press the [ENTER] key to calculate. The calculator returns the F-test statistic and the p-value.

A researcher is studying the variability in electricity (in kilowatt hours) people from two different cities use in their homes. Random samples of 17 days in Sacramento and 16 days in Portland are given below. Test to see if there is a difference in the variance of electricity use between the two cities at $\alpha = 0.10$. Assume that electricity use is normally distributed, use the p-value method.

Sacramento				Portland			
474	414	692	467	783	587	527	546
443	605	419	277	442	107	728	662
670	696	783		371	427	277	474
577	813	694		605	293	320	555
565	663	884					

Solution

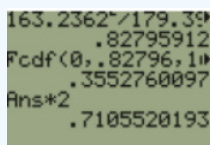
The populations are independent and normally distributed.

The hypotheses are
 $H_0 : \sigma_1^2 = \sigma_2^2$
 $H_1 : \sigma_1^2 \neq \sigma_2^2$

Use technology to compute the standard deviations and sample sizes. Enter the Sacramento data into list 1, then do 1-Var Stats L1 and you should get $s_1 = 163.2362$ and $n_1 = 17$. Enter the Portland data into list 2, then do 1-Var Stats L2 and you should get $s_2 = 179.3957$ and $n_2 = 16$. Alternatively, use Excel's descriptive statistics.

The test statistic is

The p-value would be double the area to the left of $F = 0.82796$ (Use double the area to the right if the test statistic is > 1).



Using the TI calculator Fcdf(0,0.82796,16,15).

In Excel we get the p-value = $2 * F.DIST(E8,E7,F7,TRUE) = 0.7106$.

Since the p-value is greater than alpha, we would fail to reject H_0 .

There is no statistically significant difference between variance of electricity use between Sacramento and Portland.

Excel: When you have raw data, you can use Excel to find all this information using the Data Analysis tool. Enter the data into Excel, then choose Data > Data Analysis > F-Test: Two Sample for Variances.

	A	B	C	D	E	F	G	H
1	Sacramento	Portland						
2	474	783						
3	443	442						
4	670	371						
5	577	605						
6	565	587						
7	414	107						
8	605	427						
9	696	293						
10	813	527						
11	663	728						
12	692	277						
13	419	320						
14	783	546						
15	694	662						
16	884	474						
17	467	555						
18	277							

Enter the necessary information as we did in previous sections (see below) and select OK. Note that Excel only does a one-tail F-test so use $\alpha/2 = 0.10/2 = 0.05$ in the Alpha box.

F-Test Two-Sample for Variances

Input
 Variable 1 Range:
 Variable 2 Range:
☒ Labels
 Alpha:

Output options
☒ Output Range:
☐ New Worksheet Ply:
☐ New Workbook

OK Cancel Help

We get the following output. Note you can only use the critical value in Excel for a left-tail test.

F-Test Two-Sample for Variances			
	Sacramento	Portland	
Mean	596.2352941	481.5	Sample means for each group.
Variance	26646.06618	32182.8	Sample variance for each group.
Observations	17	16	Sample size for each group.
df	16	15	df for each group.
F	0.827959847		Test statistic.
P(F<=f) one-tail	0.355275877		p-value for a left-tailed test.
F Critical one-tail	0.425129803		Critical value for a left-tailed test.

Excel for some reason only does the smaller tail area for the F-test, so you will need to double the p-value for a two-tailed test, $p\text{-value} = 0.355275877 * 2 = 0.7106$.

9.5: Chapter 9 Exercises

? Chapter 9 Exercises

For exercises 1-6, show all 5 steps for hypothesis testing:

- State the hypotheses.
- Compute the test statistic.
- Compute the critical value or p-value.
- State the decision.
- Write a summary.

1. An adviser is testing out a new online learning module for a placement test. Test the claim that on average the new online learning module increased placement scores at a significance level of $\alpha = 0.05$. For the context of this problem, $\mu_D = \mu_{\text{Before}} - \mu_{\text{After}}$ where the first data set represents the after test scores and the second data set represents before test scores. Assume the population is normally distributed. You obtain the following paired sample of 19 students that took the placement test before and after the learning module.

Before	After	Before	After	Before	After
55.8	57.1	30.6	35.2	26.8	28.6
51.7	58.3	53	46.7	11.4	14.5
76.6	83.6	21	22.5	56.3	43.7
47.5	49.5	58.5	47.7	46.1	57
48.6	51.1	42.6	51.5	72.8	66.1
11.4	20.6	61.2	76.6	42.2	38.1
				51.3	42.4

2. A veterinary nutritionist developed a diet for overweight dogs. The total volume of food consumed remains the same, but half of the dog food is replaced with a low-calorie “filler” such as green beans. Ten overweight dogs were randomly selected from her practice and were put on this program. Their initial weights were recorded, and then the same dogs were weighed again after 4 weeks. At the 0.01 level of significance, can it be concluded that the dogs lost weight? Use the following computer output to answer the following questions. Assume the populations are normally distributed and the groups are dependent.

Paired Samples Statistics					
		Mean	N	Std. Deviation	Std. Error Mean
Pair 1	Before	41.8000	10	13.09623	4.14139
	After	39.4000	10	12.60688	3.98664

Paired Samples Test								
		Paired Differences			99% Confidence Interval of the Difference			
		Mean	Std. Deviation	Std. Error Mean	Lower	Upper	t	df
Pair 1	Before - After	2.400	2.503	.7916	-.17264	4.97264	3.032	9

3. A manager wishes to see if the time (in minutes) it takes for their workers to complete a certain task will decrease when they are allowed to wear earbuds at work. A random sample of 20 workers' times was collected before and after. Test the claim that the time to complete the task has decreased at a significance level of $\alpha = 0.01$. For the context of this problem, $\mu_D = \mu_{\text{Before}} - \mu_{\text{After}}$ where the first data set represents before measurement and the second data set represents the after measurement. Assume the population is normally distributed. You obtain the following sample data.

Before	After	Before	After
69	62.3	61.7	56.8
71.5	61.6	55.9	44.7
39.3	21.4	56.8	50.6
67.7	60.4	71	63.4
38.3	47.9	80.6	68.9
85.9	77.6	59.8	35.5
67.3	75.1	72.1	77
59.8	46.3	49.9	38.4
72.1	65	56.2	55.4
79	83	63.3	51.6

4. A physician wants to see if there was a difference in the average smoker's daily cigarette consumption after wearing a nicotine patch. The physician sets up a study to track daily smoking consumption. They give the patients a placebo patch that did not contain nicotine for 4 weeks, then a nicotine patch for the following 4 weeks. Use the following computer output to test to see if there was a difference in the average smoker's daily cigarette consumption using $\alpha = 0.01$.

t-Test: Paired Two Sample for Means		
	Placebo	Nicotine
Mean	16.75	10.3125
Variance	64.46667	33.29583
Observations	16	16
Pearson Correlation	0.6105	
Hypothesized Mean Difference	0	
df	15	
t Stat	4.0119	
P(T<=t) one-tail	0.0006	
t Critical one-tail	2.6025	
P(T<=t) two-tail	0.0011	
t Critical two-tail	2.9467	

5. A researcher is testing reaction times between the dominant and non-dominant hand. They randomly start with different hands for 20 subjects and their reaction times for both hands is recorded in milliseconds. Use the following computer output to test to see if the reaction time is faster for the dominant hand using a 5% level of significance.

t-Test: Paired Two Sample for Means		
	Non-Dominant	Dominant
Mean	63.33	56.28
Variance	218.9643158	128.7522105
Observations	20	20
Pearson Correlation	0.9067	
Hypothesized Mean Difference	0	
df	19	
t Stat	4.7951	
P(T<=t) one-tail	0.0001	
t Critical one-tail	1.7291	
P(T<=t) two-tail	0.0001	
t Critical two-tail	2.0930	

6. A manager wants to see if it is worth going back for an MBA degree. They randomly sample 18 managers' salaries before and after undertaking an MBA degree and record their salaries in thousands of dollars. Assume salaries are normally distributed. Use the following computer output to test the claim that the MBA degree, on average, increases a manager's salary. Use a 10% level of significance.

t-Test: Paired Two Sample for Means		
	Before	After
Mean	52.66667	59.82778
Variance	112.7012	175.5551
Observations	18	18
Pearson Correlation	0.7464	
Hypothesized Mean Difference	0	
df	17	
t Stat	-3.4340	
P(T<=t) one-tail	0.0016	
t Critical one-tail	1.3334	
P(T<=t) two-tail	0.0033	
t Critical two-tail	1.7396	

7. Doctors developed an intensive intervention program for obese patients with heart disease. Subjects with a BMI of 30 kg/m² or more with heart disease were assigned to a three-month lifestyle change of diet and exercise. Patients' Left Ventricle Ejection Fraction (LVEF) are measured before and after intervention. Assume that LVEF measurements are normally distributed.

Before	After
44	56
49	58
50	64
49	60
57	63
62	71
39	49
41	51
52	60
42	55

a) Find the 95% confidence interval for the mean of the differences.

b) Using the confidence interval answer, did the intensive intervention program significantly increase the mean LVEF? Explain why.

For exercises 8-14, show all 5 steps for hypothesis testing:

a) State the hypotheses.

b) Compute the test statistic.

c) Compute the critical value or p-value.

d) State the decision.

e) Write a summary.

8. In a study that followed a group of students who graduated from high school in 1997, each was monitored in progress made toward earning a bachelor's degree. The group was divided in two – those who started at community college and later transferred to a four-year college, and those that started out in a four-year college as freshmen. That data below summarizes the findings. Is there evidence to suggest that community college transfer students take longer to earn a bachelor's degree? Use $\alpha = 0.05$.

	Community College Transfers	Non-Transfers
Number of Students	317	1,297
Mean Time to Graduate (<i>in years</i>)	5.09	4.68
Population Standard Deviation	1.896	1.097

9. A liberal arts college in New Hampshire implemented an online homework system for their introductory math courses and wanted to know whether the system improved test scores. In the Fall semester, homework was completed with pencil and paper, checking answers in the back of the book. In the Spring semester, homework was completed online – giving students instant feedback on their work. The results are summarized below. Population standard deviations were used from past studies. Is there evidence to suggest that the online system improves test scores? Use $\alpha = 0.05$.

	Fall Semester	Spring Semester
Number of Students	127	144
Mean Test Score	73.4	77.4
Population Standard Deviation	10.2	11.1

10. Researchers conducted a study to measure the effectiveness of the drug Adderall on patients diagnosed with ADHD. A total of 112 patients with ADHD were randomly split into two groups. Group 1 included 56 patients and they were each given a dose of 15 mg. of Adderall daily. The 56 patients in Group 2 were given a daily placebo. The effectiveness of the drug was measured by testing the patients score on a behavioral test. Higher scores indicate more ADHD symptoms. Group 1 was found to have a mean improvement of 9.3 points and Group 2 had a mean improvement of 11.7 points. From past studies, the population standard deviation of both groups is known to be 6.5 points. Is there evidence to suggest the patients taking Adderall have improved the mean ADHD symptoms? Test at the 0.01 level of significance.

11. In Major League Baseball, the American League (AL) allows a designated hitter (DH) to bat in place of the pitcher, but in the National League (NL), the pitcher has to bat. However, when an AL team is the visiting team for a game against an NL team, the AL team must abide by the home team's rules and thus, the pitcher must bat. A researcher is curious if an AL team would score more runs for games in which the DH was used. She samples 20 games for an AL team for which the DH was used, and 20 games for which there was no DH. The data are below. Assume the population is normally distributed with a population standard deviation for runs scored of 2.54. Is there evidence to suggest that AL team would score more runs for games in which the DH was used? Use $\alpha = 0.10$.

With Designated Hitter				Without Designated Hitter			
0	5	4	7	3	6	5	2
1	2	7	6	12	4	0	1
6	4	2	10	6	3	7	8
1	2	7	5	4	0	5	1
8	4	11	0	2	4	6	4

12. The mean speeds (mph) of fastball pitches from two different left-handed baseball pitchers are to be compared. A sample of 14 fastball pitches is measured from each pitcher. The populations have normal distributions. Scouts believe that Brandon Eisert pitches a speedier fastball. Test the scouts' claim that Eisert's mean speed is faster at the 5% level of significance?

Pitcher	Sample Mean	Population Standard Deviation
Nico Tellache	87	5
Brandon Eisert	91	7

13. A physical therapist believes that at 30 years old adults begin to decline in flexibility and agility. To test this, they randomly sample 35 of their patients who are less than 30 years old and 32 of their patients who are 30 or older and measure each patient's flexibility in the Sit-and-Reach test. The results are below. Is there evidence to suggest that adults under the age of 30 are more flexible? Use $\alpha = 0.05$.

	Less Than 30	30 or Older
n	35	32
Mean Sit-and-Reach Score	20.46	18.84
Population Standard Dev.	2.237	2.118

14. Two groups of students are given a problem-solving test, and the results are compared. Test the hypotheses that there is a difference in the test scores using the p-value method with $\alpha = 0.05$. Assume the populations are normally distributed.

Mathematics Majors	Computer Science Majors
$\bar{x}_1 = 83.6$	$\bar{x}_2 = 79.2$
$\sigma_1 = 4.3$	$\sigma_2 = 3.8$
$n_1 = 16$	$n_2 = 20$

15. A survey found that the average daily cost to rent a car in Los Angeles is \$103.24 and in Las Vegas is \$97.24. The data were collected from two random samples of 40 in each of the two cities and the population standard deviations are \$5.98 for Los Angeles and \$4.21 for Las Vegas. At the 0.05 level of significance, construct a confidence interval for the difference in the means and then decide if there is a significant difference in the rates between the two cities using the confidence interval method.

For exercises 16-26, show all 5 steps for hypothesis testing:

- State the hypotheses.
- Compute the test statistic.
- Compute the critical value or p-value.
- State the decision.
- Write a summary.

16. In a random sample of 50 Americans five years ago, the average credit card debt was \$5,798 with a standard deviation of \$1,154. In a random sample of 50 Americans in the present day, the average credit card debt is \$6,511, with a standard deviation of \$1,645. Using a 0.05 level of significance, test if there is a difference in credit card debt today versus five years ago. Assume the population variances are unequal.

17. A movie theater company wants to see if there is a difference in the average movie ticket sales in San Diego and Portland per week. They sample 20 sales from San Diego and 20 sales from Portland over a week. Test the claim using a 5% level of significance. Assume the population variances are unequal, the samples are independent, and that movie sales are normally distributed.

San Diego				Portland			
223	243	231	235	233	228	209	214
221	182	217	211	219	212	214	222
206	229	219	239	226	216	223	220
215	214	234	221	226	219	221	223
226	233	239	232	219	211	218	224

18. A researcher is curious what year in college students make use of the gym at a university. They take a random sample of 30 days and count the number of sophomores and seniors who use the gym each day. Is there evidence to suggest that a difference exists in gym usage based on year in college? Construct a confidence interval for the data below to decide. Use $\alpha = 0.10$. Assume the population variances are unequal.

Sophomores					Seniors				
189	203	167	154	217	209	199	186	210	221
209	198	143	208	220	204	214	230	170	197
188	197	165	207	231	190	201	165	183	235
201	177	186	193	201	187	199	189	194	197
190	165	180	245	200	192	195	200	211	205
199	155	165	188	187	200	190	218	210	229

19. A national food product company believes that it sells more frozen pizza during the winter months than during the summer months. Weekly samples of sales found the following statistics in volume of sales (in hundreds of pounds). Use $\alpha = 0.10$. Use the p-value method to test the company's claim. Assume the populations are approximately normally distributed with unequal variances.

Season	n	\bar{x}	s
Winter	24	312.34	135
Summer	22	224.75	84.42

20. You are testing the claim that the mean GPA of students who take evening classes is less than the mean GPA of students who only take day classes. You sample 20 students who take evening classes, and the sample mean GPA is 2.74 with a standard deviation of 0.86. You sample 25 students who only take day classes, and the sample mean GPA is 2.86 with a standard deviation of 0.54. Test the claim using a 10% level of significance. Assume the population standard deviations are unequal and that GPAs are normally distributed.

21. "Durable press" cotton fabrics are treated to improve their recovery from wrinkles after washing. "Wrinkle recovery angle" measures how well a fabric recovers from wrinkles. Higher scores are better. Here are data on the wrinkle recovery angle (in degrees) for a random sample of fabric specimens. Assume the populations are approximately normally distributed with unequal variances. A manufacturer believes that the mean wrinkle recovery angle for Hylite is better. A random sample of 20 Permafresh (group 1) and 25 Hylite (group 2) were measured. Test the claim using a 10% level of significance.

Permafresh				Hylite				
124	139	164	142	139	146	139	139	146
144	102	131	118	131	138	138	132	142
136	127	137	148	133	142	138	137	134
117	137	147	129	146	137	138	138	133
133	137	148	135	139	140	141	140	141

22. A large fitness center manager wants to test the claim that the mean delivery time for REI is faster than the delivery time for Champs Sports. The manager randomly samples 30 REI delivery times and finds a mean of 3.05 days with a standard deviation of 0.75 days. The manager randomly selects 30 Champs Sports delivery times and finds a mean delivery time of 3.262 days with a standard deviation of 0.27 days. Test the claim using a 5% level of significance. Assume the populations variances are unequal.

23. Two competing fast food restaurants advertise that they have the *fastest* wait time from when you order to when you receive your meal. A curious critic takes a random sample of 40 customers at each restaurant to test the claim. They find that Restaurant A has a sample mean wait time of 2.25 minutes with a standard deviation of 0.35 minutes and Restaurant B has a

sample mean wait time of 2.15 minutes with a standard deviation of 0.57 minutes in wait time. Can they conclude that the mean wait time is significantly different for the two restaurants? Test at $\alpha = 0.05$. Assume the population variances are unequal.

24. The manager at a pizza place has been getting complaints that the auto-fill soda machine is either under filling or over filling their cups. The manager took a random sample of 20 fills from her machine, and a random sample of 20 fills from another branch of the restaurant that has not been having complaints. From her machine, she found a sample mean of 11.5 oz. with a standard deviation of 1.3 oz. and from the other restaurant's machine she found a sample mean of 10.95 oz. with a standard deviation of 0.65 oz. At the 0.05 level of significance, does it seem her machine has a significantly different mean than the other machine? Use the confidence interval method. Assume the populations are normally distributed with unequal variances.

25. A new over-the-counter medicine to treat a sore throat is to be tested for effectiveness. The makers of the medicine take two random samples of 25 individuals showing symptoms of a sore throat. Group 1 receives the new medicine and Group 2 receives a placebo. After a few days on the medicine, each group is interviewed and asked how they would rate their comfort level 1-10 (1 being the most uncomfortable and 10 being no discomfort at all). The results are below. Is there sufficient evidence to conclude the mean scores from Group 1 is more than Group 2? Test at $\alpha = 0.01$. Assume the populations are normally distributed and have unequal variances.

Group 1					Group 2				
3	5	6	7	5	4	5	8	3	5
3	4	5	7	7	2	7	8	2	4
3	2	5	8	8	1	2	2	3	2
7	7	8	4	8	1	3	5	5	1
4	8	3	9	10	6	4	7	8	1

26. In a random sample of 60 pregnant women with preeclampsia, their systolic blood pressure was taken right before beginning to push during labor. The mean systolic blood pressure was 174 with a standard deviation of 12. In another random sample of 80 pregnant women without preeclampsia, there was a mean systolic blood pressure of 133 and a standard deviation of 8 when the blood pressure was also taken right before beginning to push. Is there sufficient evidence to conclude that women with preeclampsia have a higher mean blood pressure in the late stages of labor? Test at the 0.01 level of significance. Assume the population variances are unequal.

New York City			Phoenix		
98	85.4	87.7	106.8	82	120.1
95.5	75.4	86.1	98.6	72	114.4
92.2	79.5	74.3	91.5	115.2	93.7
102	82.4	85.2	82	94.2	89.7
85.4	64.3	82.8	97.7	72	104.7
80	65.5		64.9	86.8	76.6

28. An employee at a large company is told that the mean starting salary at her company differs based on level of experience. The employee is skeptical and randomly samples 30 new employees with less than 5 years of experience and categorizes them as Group 1 and 30 new employees with 5 years of experience or more and categorizes them as Group 2. In Group 1, she finds the sample mean starting salary to be \$50,352 with a standard deviation of \$4,398.10. Group 2 has a sample mean starting salary of \$52,391 with a standard deviation of \$7,237.32. Test her claim at the 0.10 level of significance. Use the confidence interval method. Assume the populations are normally distributed with unequal variances.

29. Two random samples are taken from private and public universities (out-of-state tuition) around the nation. The yearly tuition is recorded from each sample and the results can be found below. Find the 95% confidence interval for the mean difference between private and public institutions. Assume the populations are normally distributed and have unequal variances.

Private Institutions				Public Institutions			
43,120	34,750	29,498	30,129	25,469	21,871	22,650	28,745
28,190	44,897	31,980	33,980	19,450	24,120	29,143	30,120
34,490	32,198	22,764	47,909	18,347	27,450	25,379	21,190
20,893	18,432	54,190	32,200	28,560	29,100	23,450	21,540
42,984	33,981	37,756	38,120	32,592	21,870	23,871	26,346

For exercises 30-33, show all 5 steps for hypothesis testing:

a) State the hypotheses.

- b) Compute the test statistic.
- c) Compute the critical value or p-value.
- d) State the decision.
- e) Write a summary.

30. A professor wants to know if there is a difference in comprehension of a lab assignment among students depending if the instructions are given all in text, or if they are given primarily with visual illustrations. She randomly divides her class into two groups of 15, gives one group instructions in text and the second group instructions with visual illustrations. The following data summarizes the scores the students received on a test given after the lab. Assume the populations are normally distributed with equal variances. Is there evidence to suggest that a difference exists in the comprehension of the lab based on the test scores? Use $\alpha = 0.10$.

Text			Visual Illustrations		
57.3	87.3	67.2	59.0	76.7	88.2
45.3	75.2	54.4	57.6	78.2	43.8
87.1	88.2	93.0	72.9	64.4	97.1
61.2	67.5	89.2	83.2	89.0	95.1
43.1	86.2	52.0	64.0	72.9	84.1

31. A large shoe company is interested in knowing if the amount of money a customer is willing to pay on a pair of shoes is different depending on location. They take a random sample of 50 single-pair purchases from Southern states and another random sample of 50 single-pair purchases from Midwestern states and record the cost for each. The results can be found below. At the 0.05 level of significance, is there evidence that the mean cost differs between the Midwest and the South? Assume the population variances are equal.

Midwest (cost in dollars)					South (cost in dollars)				
70	43	21	62	45	73	75	34	59	81
60	23	15	37	66	80	17	18	65	27
65	38	30	46	64	62	32	60	60	56
71	54	51	61	82	30	28	31	17	34
33	79	28	84	63	36	54	48	85	54
68	72	78	43	84	46	55	30	41	53
78	80	24	80	16	80	16	67	36	39
82	45	38	84	84	22	16	38	46	50
73	23	36	69	78	16	49	43	54	27
76	71	38	46	18	83	50	57	51	68

32. The manager at a local coffee shop is trying to decrease the time customers wait for their orders. He wants to find out if keeping multiple registers open will make a difference. He takes a random sample of 30 customers when only one register is open and finds that they wait an average of 6.4 minutes to reach the front with a standard deviation of 1.34 minutes. He takes another random sample of 35 customers when two registers are open and finds that they wait an average of 4.2 minutes to reach the front with a standard deviation of 1.21 minutes. He takes both his samples during peak hours to maintain consistency. Can it be concluded at the 0.05 level of significance that mean wait time is less with two registers open? Assume the population variances are equal.

33. The CEO of a large manufacturing company is curious if there is a difference in productivity level of her warehouse employees based on the region of the country the warehouse is located in. She randomly selects 35 employees who work in warehouses on the East Coast and 35 employees who work in warehouses in the Midwest and records the number of parts shipped out from each for a week. She finds that East Coast group ships an average of 1,287 parts and a standard deviation of 348. The Midwest group ships an average of 1,449 parts and a standard deviation of 298. Using a 0.01 level of significance, test if there is a difference in productivity level. Assume the population variances are equal.

34. In a random sample of 100 college students, 47 were sophomores and 53 were seniors. The sophomores reported spending an average of \$37.03 per week going out for food and drinks with a standard deviation of \$7.23, while the seniors reported spending an average of \$52.94 per week going out for food and drinks with a standard deviation of \$12.33. Find the 90% confidence interval for difference in the mean amount spent on food and drinks between sophomores and seniors? Assume the population variances are equal.

35. A pet store owner believes that dog owners, on average spend a different amount on their pets compared to cat owners. The owner randomly records the sales of 40 customers who said they only owned dogs and found the mean of the sales of \$56.07 with a standard deviation of \$24.50. The owner randomly records the sales of 40 customers who said they only owned cats and found a mean of the sales of \$52.92 with a standard deviation of \$23.53. Find the 95% confidence interval to test the pet store owner's claim. Assume the population variances are equal.

For exercises 36-42, show all 5 steps for hypothesis testing:

- State the hypotheses.
- Compute the test statistic.
- Compute the critical value or p-value.
- State the decision.
- Write a summary.

36. A researcher wants to see if there is a difference in the proportion of on-time flights for two airlines. Test the claim using $\alpha = 0.10$.

	United Airlines	Alaska Airlines
Number of flights	350	400
Number of on-time flights	215	280

37. A random sample of 406 college freshmen found that 295 bought most of their textbooks from the college's bookstore. A random sample of 772 college seniors found that 537 bought their textbooks from the college's bookstore. You wish to test the claim that the proportion of all freshmen who purchase most of their textbooks from the college's bookstore is greater than the proportion of all seniors at a significance level of $\alpha = 0.01$.

38. To determine whether various antismoking campaigns have been successful, annual surveys are conducted. Randomly selected individuals are asked whether they smoke. The responses for this year had 163 out of 662 who smoked. Ten years ago, the survey found 187 out of 695 who smoked. Can we infer that the proportion of smokers has declined from 10 years ago? Use $\alpha = 0.10$.

39. TDaP is a booster shot that prevents Diphtheria, Tetanus, and Pertussis in adults and adolescents. The shot should be administered every 8 years in order for it to remain effective. A random sample of 500 people living in a town that experienced a pertussis outbreak this year were divided into two groups. Group 1 was made up of 132 individuals who had not had the TDaP booster in the past 8 years, and Group 2 consisted of 368 individuals who had. In Group 1, 15 individuals caught pertussis during the outbreak, and in Group 2, 11 individuals caught pertussis. Is there evidence to suggest that the proportion of individuals who caught pertussis and were not up to date on their booster shot is significantly higher than those that were? Test at the 0.05 level of significance.

40. The makers of a smartphone have received complaints that the facial recognition tool often does not work, or takes multiple attempts to finally unlock the phone. The company upgraded to a new version and are claiming the tool has improved. To test the claim, a critic takes a random sample of 75 users of the old version (Group 1) and 80 users of the new version (Group 2). They find that the facial recognition tool works on the first try 56% of the time in the old version and 70% of the time in the new version. Can it be concluded that the new version is performing better? Test at $\alpha = 0.10$.

41. In a sample of 80 faculty from Portland State University, it was found that 90% were union members, while in a sample of 96 faculty at University of Oregon, 75% were union members. Find the 95% confidence interval for the difference in the proportions of faculty that belong to the union for the two universities.

42. A random sample of 54 people who live in a city were selected and 16 identified as a "dog person." A random sample of 84 people who live in a rural area were selected and 34 identified as a "dog person." Test the claim that the proportion of people who live in a city and identify as a "dog person" is significantly different from the proportion of people who live in a rural area and identify as a "dog person" at the 10% significance level. Use the confidence interval method.

43. What is the critical value for a right-tailed F-test with a 5% level of significance with $df_1 = 4$ and $df_2 = 33$? Round answer to 4 decimal places.

44. What is the critical value for a right-tailed F-test with a 1% level of significance with $df_1 = 3$ and $df_2 = 55$? Round answer to 4 decimal places.

45. What is the critical value for a left-tailed F-test with a 10% level of significance with $df_1 = 29$ and $df_2 = 20$? Round answer to 4 decimal places.
46. What are the critical values for a two-tailed F-test with a 1% level of significance with $df_1 = 31$ and $df_2 = 10$? Round answer to 4 decimal places.

For exercises 47-61, show all 5 steps for hypothesis testing:

- State the hypotheses.
- Compute the test statistic.
- Compute the critical value or p-value.
- State the decision.
- Write a summary.

47. A researcher wants to compare the variances of the heights (in inches) of four-year college basketball players with those of players in junior colleges. A sample of 30 players from each type of school is selected, and the variances of the heights for each type are 2.43 and 3.15 respectively. At $\alpha = 0.10$, test to see if there is a significant difference between the variances of the heights in the two types of schools.

48. The marketing manager for a minor league baseball team suspects that there is a greater variance in game attendance during the spring months (April and May) than in the summer months (June, July, August). They take a random sample of 15 games in the spring and find that there is a mean attendance of 7,543 with a standard deviation of 87.4. In another random sample of 20 games in the summer, they find a mean attendance of 8,093 with a standard deviation of 56.2. Can the manager conclude that there is a greater variance in attendance in the spring? Test at $\alpha = 0.05$. Assume the populations are normally distributed.

49. A researcher takes sample temperatures in Fahrenheit of 17 days from New York City and 18 days from Phoenix. Test the claim that the standard deviation of temperatures in New York City is different from the standard deviation of temperatures in Phoenix. Use a significance level of $\alpha = 0.05$. Assume the populations are approximately normally distributed. You obtain the following two samples of data.

New York City			Phoenix		
98	85.4	87.7	106.8	82	120.1
95.5	75.4	86.1	98.6	72	114.4
92.2	79.5	74.3	91.5	115.2	93.7
102	82.4	85.2	82	94.2	89.7
85.4	64.3	82.8	97.7	72	104.7
80	65.5		64.9	86.8	76.6

50. Two random samples are taken from private and public universities (out-of-state tuition) around the nation. The yearly tuition is recorded from each sample and the results can be found below. Private colleges are typically more expensive than public schools, however, a student is curious if the variance is different between the two. Can it be concluded that the variances of private and public tuition differ at the 0.05 level of significance? Assume the populations are normally distributed.

Private Institutions				Public Institutions			
43,120	34,750	29,498	30,129	25,469	21,871	22,650	28,745
28,190	44,897	31,980	33,980	19,450	24,120	29,143	30,120
34,490	32,198	22,764	47,909	18,347	27,450	25,379	21,190
20,893	18,432	54,190	32,200	28,560	29,100	23,450	21,540
42,984	33,981	37,756	38,120	32,592	21,870	23,871	26,346

51. Two competing fast food restaurants advertise that they have the *fastest* wait time from when you order to when you receive your meal. A curious critic takes a random sample of 40 customers at each restaurant and finds that there is no statistically significant difference in the average wait time between the two restaurants. Both restaurants are in fact advertising truthfully then. However, as a skeptical statistician, this critic knows that a high standard deviation may also keep a customer waiting for a long time on any given trip to the restaurant, so they test for the difference in standard deviation of wait time from this same sample. They find that Restaurant A has a sample standard deviation of 0.35 minutes and Restaurant B has a sample standard deviation of 0.57 minutes in wait time. Can they conclude that the standard deviation in wait time is significantly longer for Restaurant B? Test at $\alpha = 0.05$.

52. A new over-the-counter medicine to treat a sore throat is to be tested for effectiveness. The makers of the medicine take two random samples of 25 individuals showing symptoms of a sore throat. Group 1 receives the new medicine and Group 2 receives a placebo. After a few days on the medicine, each group is interviewed and asked how they would rate their comfort level 1-10 (1 being the most uncomfortable and 10 being no discomfort at all). The results are below. Is there sufficient evidence to conclude the variance in scores from Group 1 is less than the variance in scores from Group 2? Test at $\alpha = 0.01$. Assume the populations are normally distributed.

Group 1					Group 2				
3	5	6	7	5	4	5	8	3	5
3	4	5	7	7	2	7	8	2	4
3	2	5	8	8	1	2	2	3	2
7	7	8	4	8	1	3	5	5	1
4	8	3	9	10	6	4	7	8	1

53. The manager at a pizza place has been getting complaints that the auto-fill soda machine is either under filling or over filling their cups. The manager ran several tests on the machine before using it and knows that the average fill quantity is 12 oz. – exactly as she was hoping. However, she did not test the variance. She took a random sample of 20 fills from her machine, and a random sample of 20 fills from another branch of the restaurant that has not been having complaints. From her machine, she found a sample standard deviation of 1.3 oz. and from the other restaurant's machine she found a sample standard deviation of 0.65 oz. At the 0.05 level of significance, does it seem her machine has a higher variance than the other machine? Assume the populations are normally distributed.

54. An employee at a large company believes that the variation in starting salary at her company differs based on level of experience. She randomly samples 30 new employees with less than 5 years of experience and categorizes them as Group 1 and 30 new employees with 5 years of experience or more and categorizes them as Group 2. In Group 1, she finds the sample standard deviation in starting salary to be \$4,398.10 and in Group 2 she finds the sample standard deviation in starting salary to be \$7,237.32. Test her claim at the 0.10 level of significance. Assume the populations are normally distributed.

55. In a random sample of 100 college students, 47 were sophomores and 53 were seniors. The sophomores reported spending an average of \$37.03 per week going out for food and drinks with a standard deviation of \$7.23, while the seniors reported spending an average of \$52.94 per week going out for food and drinks with a standard deviation of \$12.33. Can it be concluded that there is a difference in the standard deviation spent on food and drinks between sophomores and seniors? Test at $\alpha = 0.10$.

56. A large shoe company is interested in knowing if the amount of money a customer is willing to pay on a pair of shoes varies differently depending on location. They take a random sample of 50 single-pair purchases from Southern states and another random sample of 50 single-pair purchases from Midwestern states and record the cost for each. The results can be found below. At the 0.05 level of significance, is there evidence that the variance in cost differs between the Midwest and the South?

Midwest (cost in dollars)					South (cost in dollars)				
70	43	21	62	45	73	75	34	59	81
60	23	15	37	66	80	17	18	65	27
65	38	30	46	64	62	32	60	60	56
71	54	51	61	82	30	28	31	17	34
33	79	28	84	63	36	54	48	85	54
68	72	78	43	84	46	55	30	41	53
78	80	24	80	16	80	16	67	36	39
82	45	38	84	84	22	16	38	46	50
73	23	36	69	78	16	49	43	54	27
76	71	38	46	18	83	50	57	51	68

57. The math department chair at a university is proud to boast an average satisfaction score of 8.4 out of 10 for her department's courses. This year, the English department advertised an average of 8.5 out of 10. Not to be outdone, the math department chair decides to check if there is a difference in how the scores vary between the departments. She takes a random sample of 65 math department evaluations and finds a sample standard deviation of 0.75 and a random sample of 65 English department evaluations and finds a sample standard deviation of 1.04. Does she have sufficient evidence to claim that the English department may have a higher average, but also has a higher standard deviation – meaning that their scores are not as consistent as the math department's? Test at $\alpha = 0.05$.

58. An investor believes that investing in international stock is riskier because the variation in the rate of return is greater. She takes two random samples of 15 months over the past 30 years and finds the following rates of return from a selection of her

own domestic and international investments. Can she conclude that the standard deviation in International Rate of Return is higher at the 0.10 level of significance? Assume the populations are normally distributed.

Monthly Rate of Return – Domestic (%)				
7.56	2.35	-3.48	1.09	10.2
3.49	-1.97	-8.22	-2.98	5.49
2	4.49	4.09	-0.98	7.22

Monthly Rate of Return – International (%)				
3.49	10.23	9.02	-4.98	3.2
-1.29	6.57	-4.6	-3.89	4.9
6.22	7.43	6.2	-2.33	5.55

59. The manager at a local coffee shop is trying to decrease the time customers wait for their orders. He wants to find out if keeping multiple registers open will make a difference. He takes a random sample of 30 customers when only one register is open and finds that they wait an average of 6.4 minutes to reach the front with a standard deviation of 1.34 minutes. He takes another random sample of 35 customers when two registers are open and finds that they wait an average of 4.2 minutes to reach the front with a standard deviation of 1.21 minutes. He takes both his samples during peak hours to maintain consistency. Can it be concluded at the 0.05 level of significance that there is a smaller standard deviation in wait time with two registers open?

60. A movie theater company wants to see if there is a difference in the variance of movie ticket sales in San Diego and Portland per week. They sample 20 sales from San Diego and 20 sales from Portland and count the number of tickets sold over a week. Test the claim using a 5% level of significance. Assume that movie sales are normally distributed.

San Diego			
223	243	231	235
221	182	217	211
206	229	219	239
215	214	234	221
226	233	239	232

Portland			
233	228	209	214
219	212	214	222
226	216	223	220
226	219	221	223
219	211	218	224

61. In a random sample of 60 pregnant women with preeclampsia, their systolic blood pressure was taken right before beginning to push during labor. The mean systolic blood pressure was 174 with a standard deviation of 12. In another random sample of 80 pregnant women without preeclampsia, there was a mean systolic blood pressure of 133 and a standard deviation of 8 when the blood pressure was also taken right before beginning to push. Is there sufficient evidence to conclude that women with preeclampsia have a larger variation in blood pressure in the late stages of labor? Test at the 0.01 level of significance.

Trillian punched up the figures. They showed two-to-the power-of-Infinity-minus-one (an irrational number that only has a conventional meaning in Improbability physics).

"... it's pretty low," continued Zaphod with a slight whistle.

"Yes," agreed Trillian, and looked at him quizzically.

"That's one big whack of Improbability to be accounted for. Something pretty improbable has got to show up on the balance sheet if it's all going to add up into a pretty sum."

Zaphod scribbled a few sums, crossed them out and threw the pencil away.

"Bat's dots, I can't work it out."

"Well?"

Zaphod knocked his two heads together in irritation and gritted his teeth.

"OK," he said. "Computer!"

(Adams, 2002)

Answers to Odd Numbered Exercises

1) $H_0: \mu_D = 0$; $H_1: \mu_D < 0$; $t = -0.7514$; $p\text{-value} = 0.2311$; Do not reject H_0 . There is not enough evidence to support the claim on average the new online learning module increased placement scores.

- 3) $H_0: \mu_D = 0$; $H_1: \mu_D > 0$; $t = 3.5598$; $p\text{-value} = 0.001$; Reject H_0 . There is enough evidence to support the claim that the mean time to complete a task decreases when workers are allowed to wear their ear buds.
- 5) $H_0: \mu_D = 0$; $H_1: \mu_D > 0$; $t = 4.7951$; $p\text{-value} = 0.0001$; Reject H_0 . There is enough evidence to support the claim that the mean reaction time is significantly faster for a person's dominant hand.
- 7) a) $-11.9129 < \mu_D < -8.4871$ b) Yes, since $\mu_D = 0$ is not captured in the interval $(-11.9129, -8.4871)$.
- 9) $H_0: \mu_1 = \mu_2$; $H_1: \mu_1 < \mu_2$; $z = -3.0908$; $p\text{-value} = 0.001$; Reject H_0 . There is enough evidence to support the claim that the online homework system for introductory math courses improved student's average test scores.
- 11) $H_0: \mu_1 = \mu_2$; $H_1: \mu_1 > \mu_2$; $z = 0.5602$; $p\text{-value} = 0.2877$; Do not reject H_0 . There is not enough evidence to support the claim that the American League team would score on average more runs for games in which the designated hitter was used.
- 13) $H_0: \mu_1 = \mu_2$; $H_1: \mu_1 > \mu_2$; $z = 3.0444$; $p\text{-value} = 0.0012$; Reject H_0 . There is enough evidence to support the claim that adults under the age of 30 are more flexible.
- 15) $H_0: \mu_1 = \mu_2$; $H_1: \mu_1 \neq \mu_2$; $3.7336 < \mu_1 - \mu_2 < 8.2664$; Reject H_0 . There is a statistically significant difference in the mean daily car rental cost between Las Angeles and Las Vegas at the 5% level of significance.
- 17) $H_0: \mu_1 = \mu_2$; $H_1: \mu_1 \neq \mu_2$; $t = 1.0624$; $p\text{-value} = 0.2978$; fail to reject H_0 . There is not enough evidence to support the claim that there is a difference in the average movie ticket sales in San Diego and Portland per week.
- 19) $H_0: \mu_1 = \mu_2$; $H_1: \mu_1 > \mu_2$; $t = 2.6612$; $p\text{-value} = 0.0056$; Reject H_0 . There is enough evidence to support the claim that the mean number of frozen pizzas sold during the winter months is more than during the summer months.
- 21) $H_0: \mu_1 = \mu_2$; $H_1: \mu_1 < \mu_2$; $t = -1.2639$; $p\text{-value} = 0.1098$; Do not reject H_0 . There is not enough evidence to support the claim that the mean wrinkle recovery angle for Hylite is better than Permafresh.
- 23) $H_0: \mu_1 = \mu_2$; $H_1: \mu_1 \neq \mu_2$; $t = 0.9455$; $p\text{-value} = 0.3479$; Do not reject H_0 . There is not enough evidence to support the claim that the mean wait time for the two restaurants is different.
- 25) $H_0: \mu_1 = \mu_2$; $H_1: \mu_1 \neq \mu_2$; $t = 22.9197$; Reject H_0 . There is enough evidence to support the claim that the soda machine is different from the other restaurants.
- 27) $H_0: \mu_1 = \mu_2$; $H_1: \mu_1 \neq \mu_2$; $-16.3925 < \mu_1 - \mu_2 < -1.1153$; Reject H_0 . There is enough evidence to support the claim that women with preeclampsia have a higher mean blood pressure in the late stages of labor.
- 29) $\$5,070.33 < \mu_1 - \mu_2 < \$14,049.47$
- 31) $H_0: \mu_1 = \mu_2$; $H_1: \mu_1 \neq \mu_2$; $t = 2.0435$; $p\text{-value} = 0.0437$; Reject H_0 . There is enough evidence to support the claim that the mean cost for a pair of shoes in the Midwest and the South are different.
- 33) $H_0: \mu_1 = \mu_2$; $H_1: \mu_1 \neq \mu_2$; $t = -2.0919$; $p\text{-value} = 0.0402$; Do not reject H_0 . There is not enough evidence to support the claim that there is a statistically significant difference in the mean productivity level between the two locations.
- 35) $H_0: \mu_1 = \mu_2$; $H_1: \mu_1 \neq \mu_2$; $-7.5429 < \mu_1 - \mu_2 < 13.8429$; Do not reject H_0 . There is not enough evidence to support the claim that dog owners spend more on average than cat owners on their pets.
- 37) $H_0: \mu_1 = \mu_2$; $H_1: p_1 > p_2$; $z = 1.1104$; $p\text{-value} = 0.1334$; Do not reject H_0 . There is not enough evidence to support the claim that the proportion of all freshman that purchase most of their textbooks from the college's bookstore is greater than the proportion of all seniors.
- 39) $H_0: \mu_1 = \mu_2$; $H_1: p_1 > p_2$; $z = 3.7177$; $p\text{-value} = 0.0001$; Reject H_0 . Yes, there is evidence that the proportion of those who caught pertussis is higher for those who were not up to date on their booster.
- 41) $0.04126 < p_1 - p_2 < 0.25874$
- 43) 2.6589
- 45) 0.5967
- 47) $H_0: \sigma_1^2 = \sigma_2^2$; $H_1: \sigma_1^2 \neq \sigma_2^2$; $F = 0.7714$; $p\text{-value} = 0.4891$; Do not reject H_0 . There is not enough evidence to support the claim that there a significant difference between the variances of the heights of four-year college basketball players with those of players in junior colleges.

49) $H_0: \sigma_1 = \sigma_2$; $H_1: \sigma_1 \neq \sigma_2$; $F = 0.4154$; $CV = 0.3652$ & 2.6968 ; Do not reject H_0 . There is not enough evidence to support the claim that there is a significant difference between the standard deviation of temperatures in New York City compared to Phoenix.

51) $H_0: \sigma_1 = \sigma_2$; $H_1: \sigma_1 < \sigma_2$; $F = 0.377$; $p\text{-value} = 0.0015$; Reject H_0 . There is enough evidence to support the claim that the standard deviation of wait times for Restaurant B is significantly longer than Restaurant A.

53) $H_0: \sigma_1^2 = \sigma_2^2$; $H_1: \sigma_1^2 \neq \sigma_2^2$; $F = 4$; $p\text{-value} = 0.002$; Reject H_0 . There is enough evidence to support the claim that the soda machine has a higher variance compared to the other restaurant.

55) $H_0: \sigma_1 = \sigma_2$; $H_1: \sigma_1 \neq \sigma_2$; $F = 0.3438$; $p\text{-value} = 0.0003$; Reject H_0 . There is enough evidence to claim that the standard deviation in money spent on food and drinks differs between sophomores and seniors.

57) $H_0: \sigma_1 = \sigma_2$; $H_1: \sigma_1 < \sigma_2$; $F = 0.5201$; $p\text{-value} = 0.0049$; Reject H_0 . There is enough evidence to claim that the standard deviation in satisfaction scores is higher for the English department compared to the Math department.

59) $H_0: \sigma_1 = \sigma_2$; $H_1: \sigma_1 > \sigma_2$; $F = 1.2264$; $p\text{-value} = 0.282$; Do not reject H_0 . There is not enough evidence to claim that the standard deviation in wait time with two registers open is smaller.

61) $H_0: \sigma_1 = \sigma_2$; $H_1: \sigma_1 > \sigma_2$; $F = 2.25$; $p\text{-value} = 0.0004$; Reject H_0 . There is evidence to claim that the standard deviation in blood pressure for women with preeclampsia has a larger variation in the late stages of labor.

This page titled [9.5: Chapter 9 Exercises](#) is shared under a [CC BY-SA 4.0](#) license and was authored, remixed, and/or curated by [Rachel Webb](#).

9.6: Chapter 9 Formulas

Hypothesis Test for 2 Dependent Means $H_0 : \mu_D = 0$ $H_1 : \mu_D \neq 0 \quad t = \frac{\bar{D} - \mu_D}{\left(\frac{s_D}{\sqrt{n}}\right)}$ TI-84: T-Test	Confidence Interval for 2 Dependent Means $\bar{D} \pm t_{\alpha/2} \left(\frac{s_D}{\sqrt{n}} \right)$ TI-84: TInterval
Hypothesis Test for 2 Independent Means Z-Test: $H_0 : \mu_1 = \mu_2$ $H_1 : \mu_1 \neq \mu_2$ $z = \frac{(\bar{x}_1 - \bar{x}_2) - (\mu_1 - \mu_2)_0}{\sqrt{\left(\frac{\sigma_1^2}{n_1} + \frac{\sigma_2^2}{n_2}\right)}}$ TI-84: 2-SampZTest	Confidence Interval for 2 Independent Means Z-Interval $(\bar{x}_1 - \bar{x}_2) \pm z_{\alpha/2} \sqrt{\left(\frac{\sigma_1^2}{n_1} + \frac{\sigma_2^2}{n_2}\right)}$ TI-84: 2-SampZInt
Hypothesis Test for 2 Independent Means $H_0 : \mu_1 = \mu_2$ $H_1 : \mu_1 \neq \mu_2$ T-Test: Assume variances are unequal $t = \frac{(\bar{x}_1 - \bar{x}_2) - (\mu_1 - \mu_2)_0}{\sqrt{\left(\frac{s_1^2}{n_1} + \frac{s_2^2}{n_2}\right)}}$ TI-84: 2-SampTTest $df = \frac{\left(\frac{s_1^2}{n_1} + \frac{s_2^2}{n_2}\right)^2}{\left(\left(\frac{s_1^2}{n_1}\right)^2 \left(\frac{1}{n_1 - 1}\right) + \left(\frac{s_2^2}{n_2}\right)^2 \left(\frac{1}{n_2 - 1}\right)\right)}$ T-Test: Assume variances are equal $t = \frac{(\bar{x}_1 - \bar{x}_2) - (\mu_1 - \mu_2)}{\sqrt{\left(\frac{(n_1 - 1)s_1^2 + (n_2 - 1)s_2^2}{(n_1 + n_2 - 2)}\right) \left(\frac{1}{n_1} + \frac{1}{n_2}\right)}}$ $df = n_1 + n_2 - 2$	Confidence Interval for 2 Independent Means $(\bar{x}_1 - \bar{x}_2) \pm t_{\alpha/2} \sqrt{\left(\frac{s_1^2}{n_1} + \frac{s_2^2}{n_2}\right)}$ TI-84: 2-SampTInt $df = \frac{\left(\frac{s_1^2}{n_1} + \frac{s_2^2}{n_2}\right)^2}{\left(\left(\frac{s_1^2}{n_1}\right)^2 \left(\frac{1}{n_1 - 1}\right) + \left(\frac{s_2^2}{n_2}\right)^2 \left(\frac{1}{n_2 - 1}\right)\right)}$ T-Interval: Assume variances are equal $(\bar{x}_1 - \bar{x}_2) \pm t_{\alpha/2} \sqrt{\left(\frac{(n_1 - 1)s_1^2 + (n_2 - 1)s_2^2}{(n_1 + n_2 - 2)}\right) \left(\frac{1}{n_1} + \frac{1}{n_2}\right)}$ $df = n_1 + n_2 - 2$
Hypothesis Test for 2 Proportions $H_0 : p_1 = p_2$ $H_1 : p_1 \neq p_2$ $Z = \frac{(\hat{p}_1 - \hat{p}_2) - (p_1 - p_2)}{\sqrt{\hat{p}\hat{q}\left(\frac{1}{n_1} + \frac{1}{n_2}\right)}}$ $\hat{p} = \frac{x_1 + x_2}{(n_1 + n_2)} = \frac{(\hat{p}_1 n_1 + \hat{p}_2 n_2)}{(n_1 + n_2)}$ $\hat{q} = 1 - \hat{p} \quad \hat{p}_1 = \frac{x_1}{n_1} \quad \hat{p}_2 = \frac{x_2}{n_2}$ TI-84: 2-PropZInt	Confidence Interval for 2 Proportions $(\hat{p}_1 - \hat{p}_2) \pm z_{\alpha/2} \sqrt{\left(\frac{\hat{p}_1 \hat{q}_1}{n_1} + \frac{\hat{p}_2 \hat{q}_2}{n_2}\right)}$ $\hat{p}_1 = \frac{x_1}{n_1} \quad \hat{p}_2 = \frac{x_2}{n_2}$ $\hat{q}_1 = 1 - \hat{p}_1 \quad \hat{q}_2 = 1 - \hat{p}_2$ TI-84: 2-PropZInt
Hypothesis Test for 2 Variances $H_0 : \sigma_1^2 = \sigma_2^2 \quad F = \frac{s_1^2}{s_2^2}$ $H_1 : \sigma_1^2 \neq \sigma_2^2$ $df N = n_1 - 1, df D = n_2 - 1$ TI-84: 2-SampFTest	Hypothesis Test for 2 Standard Deviations $H_0 : \sigma_1 = \sigma_2 \quad F = \frac{s_1^2}{s_2^2}$ $H_1 : \sigma_1 \neq \sigma_2$ $df N = n_1 - 1, df D = n_2 - 1$ TI-84: 2-SampFTest

The following flow chart in Figure 9-18 can help you decide which formula to use. Start on the left, ask yourself is the question about proportions (%), means (averages), standard deviations or variances? Are there 1 or 2 samples? Was the population standard deviation given? Are the samples dependent or independent? Are you asked to test a claim? If yes then use the test statistic (TS) formula. Are you asked to find a confidence interval? If yes then use the confidence interval (CI) formula. In each box is the null hypothesis and the corresponding TI calculator shortcut key.

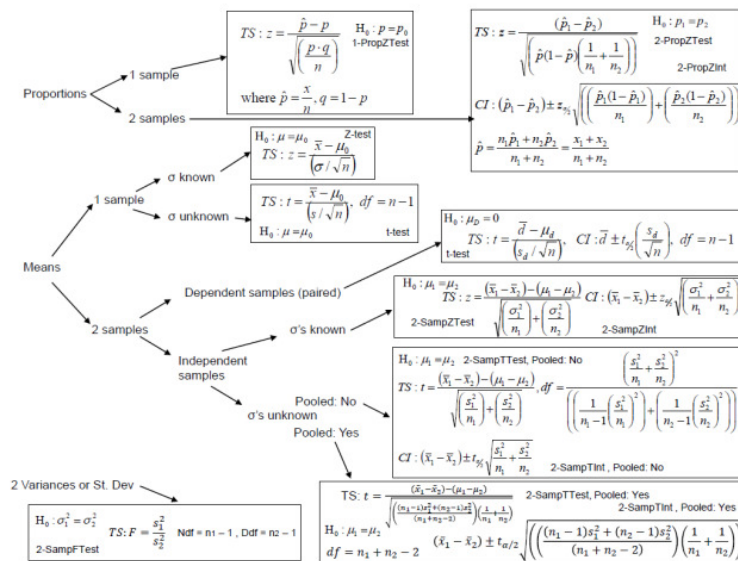


Figure 9-18

Download a .pdf version of the flowchart at: <http://MostlyHarmlessStatistics.com>.

The same steps are used in hypothesis testing for a one sample test. Use technology to find the p-value or critical value. A clue with many of these questions of whether the samples are dependent is the term “paired” is used, or the same person was being measured before and after some applied experiment or treatment. The p-value will always be a positive number between 0 and 1.

The same three methods to hypothesis testing, critical value method, p-value method and the confidence interval method are also used in this section. The p-value method is used more often than the other methods. The rejection rule for the three methods are:

- P-value method: reject H_0 when the p-value $\leq \alpha$.
- Critical value method: reject H_0 when the test statistic is in the critical tail(s).
- Confidence Interval method, reject H_0 when the hypothesized value (0) found in H_0 is outside the bounds of the confidence interval.

The most important step in any method you use is setting up your null and alternative hypotheses.

This page titled 9.6: Chapter 9 Formulas is shared under a CC BY-SA 4.0 license and was authored, remixed, and/or curated by Rachel Webb.

CHAPTER OVERVIEW

10: Chi-Square Tests

[10.1: Chi-Square Distribution](#)

[10.2: Goodness of Fit Test](#)

[10.3: Test for Independence](#)

[10.4: Chapter 10 Formulas](#)

[10.5: Chapter 10 Exercises](#)

This page titled [10: Chi-Square Tests](#) is shared under a [CC BY-SA 4.0](#) license and was authored, remixed, and/or curated by [Rachel Webb](#) via [source content](#) that was edited to the style and standards of the LibreTexts platform.

10.1: Chi-Square Distribution

A χ^2 -distribution (chi-square, pronounced “ki-square”) is another special type of distribution for a continuous random variable. The sampling distribution for a variance and standard deviation follows a chi-square distribution.

Properties of the χ^2 -distribution density curve:

1. Right skewed starting at zero.
2. The center and spread of a χ^2 -distribution are determined by the degrees of freedom with a mean = df and standard deviation = $\sqrt{2df}$.
3. Chi-square variables cannot be negative.
4. As the degrees of freedom increase, the χ^2 -distribution becomes normally distributed for $df > 50$. Figure 10-1 shows χ^2 -distributions for df of 2, 4, 10, and 30.
5. The total area under the curve is equal to 1, or 100%.

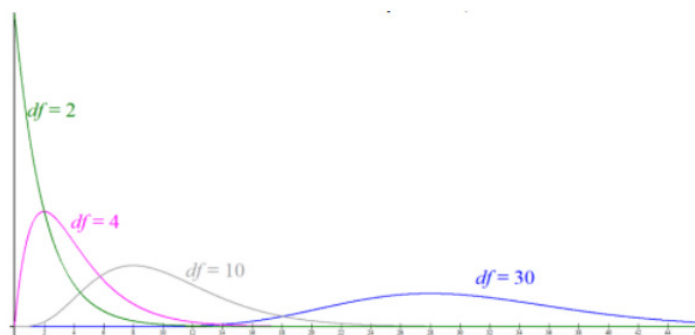


Figure 10-1

We will use the χ^2 -distribution for hypothesis testing later in this chapter. For now, we are just learning how to find a critical value χ^2_{α} .

The symbol χ^2_{α} is the critical value on the χ^2 -distribution curve with area $1 - \alpha$ below the critical value and area α above the critical value, as shown below in Figure 10-2.

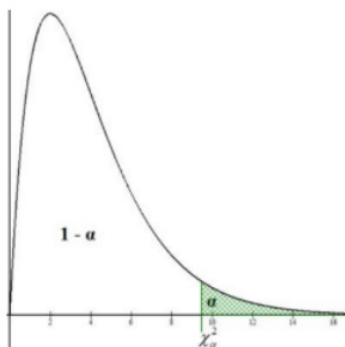


Figure 10-2

Use technology to compute the critical value for the χ^2 -distribution.

TI-84: Use the INVCHI2 program downloaded at Rachel Webb’s website: <http://MostlyHarmlessStatistics.com>. Start the program and enter the area α and the df when prompted.

TI-89: Go to the [Apps] **Stat/List Editor**, then select F5 [DISTR]. This will get you a menu of probability distributions. Arrow down to **Inverse > Inverse Chi-Square** and press [ENTER]. Enter the area $1 - \alpha$ to the left of the χ value and the df into each cell. Press [ENTER].

Excel: =CHISQ.INV($1 - \alpha$, df) or =CHISQ.INV.RT(α , df)

Alternatively, use the following online calculator: <https://homepage.divms.uiowa.edu/~mbognar/applets/chisq.html>.

Compute the critical value χ^2_α for a $\alpha = 0.05$ and $df = 6$.

Solution

Start by drawing the curve and determining the area in the right-tail as shown in Figure 10-3. Then use technology to find the critical value.

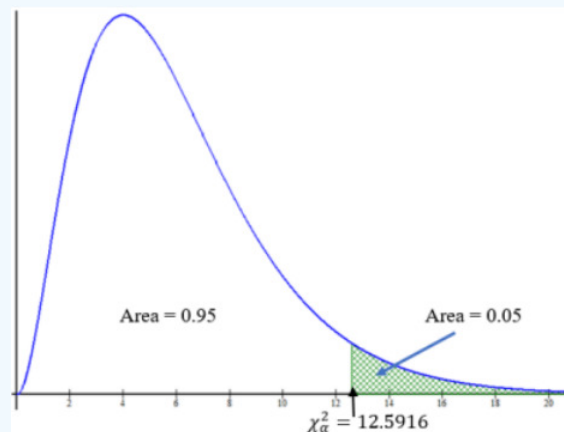



Figure 10-3

In Excel there are two options. Use $=\text{CHISQ.INV}(\text{area in left-tail}, df)$ or right-tail $=\text{CHISQ.INV.RT}(\text{area in righttail}, df)$. For this example, then we would have $\chi^2_\alpha = \text{CHISQ.INV}(0.95, 6)$ or $=\text{CHISQ.INV.RT}(0.05, 6) = 12.5916$.

TI-89 use Distr > Inverse Chi-square with area 0.95 and $df = 6$



This page titled [10.1: Chi-Square Distribution](#) is shared under a [CC BY-SA 4.0](#) license and was authored, remixed, and/or curated by [Rachel Webb](#) via [source content](#) that was edited to the style and standards of the LibreTexts platform.

10.2: Goodness of Fit Test

The χ^2 **goodness-of-fit test** can be used to test the distribution of three or more proportions within a single population.

Definition: χ^2 goodness-of-fit test

The χ^2 -test is a statistical test for testing the goodness-of-fit of a variable. It can be used when the data are obtained from a random sample and when the expected frequency (E) from each category is 5 or more.

The formula for the χ^2 -test statistic is:

$$\chi^2 = \sum \frac{(o - E)^2}{E} \quad (10.2.1)$$

Use a right-tailed χ^2 -distribution with $df = k - 1$ where k = the number of categories.

with

- O = the observed frequency (what was observed in the sample) and
- E = the expected frequency (based on H_0 and the sample size).
- $H_0 : p_1 = p_0, p_2 = p_0, \dots, p_k = p_0$
- H_1 : At least one proportion is different.

An instructor claims that their students' grade distribution is different than the department's grade distribution. The department's grades have the following proportion of students who get A's is 35%, B's is 23%, C's is 25%, D's is 10% and F's is 7% in introductory statistics courses. For a sample of 250 introductory statistics students with this instructor, there were 80 A's, 50 B's, 58 C's, 38 D's, and 24 F's. Test the instructor's claim at the 5% level of significance.

Solution

This is a test for three or more proportions within a single population, so use the goodness-of-fit test. We will always use a right-tailed χ^2 -test. The hypotheses for this example would be:

$$H_0 : p_A = 0.35, p_B = 0.23, p_C = 0.25, p_D = 0.10, p_F = 0.07$$

H_1 : At least one proportion is different.

Even though there is an inequality in H_1 , the goodness-of-fit test is always a right-tailed test. This is because we are testing to see if there is a large variation between the observed versus the expected values. If the variance between the observed and expected values is large, then there is a difference in the proportions.

Also note that we do not write the alternative hypothesis as $p_A \neq 0.35, p_B \neq 0.23, p_C \neq 0.25, p_D \neq 0.10, p_F \neq 0.07$ since it could be that any one of these proportions is different. All of the proportions not being equal to their hypothesized values is just one possible case.

There are $k = 5$ categories that we are comparing: A's, B's, C's, D's and F's.

The observed counts are the actual number of A's, B's, C's, D's and F's from the sample.

We must compute the expected count for each of the five categories. Find the expected counts by multiplying the expected proportion of A's, B's, C's, D's and F's by the sample size.

It will be helpful to make a table to organize the work.

Grade	A's	B's	C's	D's	F's
Observed (O)	80	50	58	38	24
Expected (E)	$0.35 \cdot 250 = 87.5$	$0.23 \cdot 250 = 57.5$	$0.25 \cdot 250 = 62.5$	$0.10 \cdot 250 = 25$	$0.07 \cdot 250 = 17.5$
$\frac{(O - E)^2}{E}$	$\frac{(80 - 87.5)^2}{87.5} = 0.6429$	$\frac{(50 - 57.5)^2}{57.5} = 0.9738$	$\frac{(58 - 62.5)^2}{62.5} = 0.324$	$\frac{(38 - 25)^2}{25} = 6.76$	$\frac{(24 - 17.5)^2}{17.5} = 2.4143$

The test statistic is the sum of this last row: $\chi^2 = \sum \frac{(O - E)^2}{E} = 0.6429 + 0.9783 + 0.324 + 6.76 + 2.4143 = 11.1195$

The critical value for a right-tailed χ^2 -test with $df = k - 1 = 5 - 1 = 4$ is found by finding the area in the χ^2 -distribution using your calculator or Excel. Use $\alpha = 0.05$ area in the right-tail, to get the critical value of $\chi^2_{\alpha} = \text{CHISQ.INV.RT}(0.05, 4) = 9.4877$. Draw and label the curve as shown in Figure 10-4.

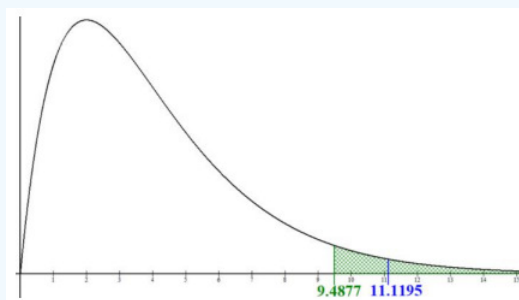


Figure 10-4: Values of χ^2_{α} and χ^2 on a χ^2 -test with $df = 4$ and $\alpha = 0.05$.

The test statistic of $\chi^2 = 11.1195 > \chi^2_{\alpha} = 9.4877$ and is in the rejection area, so our decision is: Reject H_0 .

There is sufficient evidence to support the claim that the proportion of students who get A's, B's, C's, D's and F's in introductory statistics courses for this instructor is different than the department's proportions of 35%, 23%, 25%, 10% and 7% respectively.

If we were asked to find the p-value, you would just find the area to right of the test statistic (always a right-tailed test) using your calculator or Excel $=\text{CHISQ.DIST.RT}(11.1195, 4) = 0.0253$.

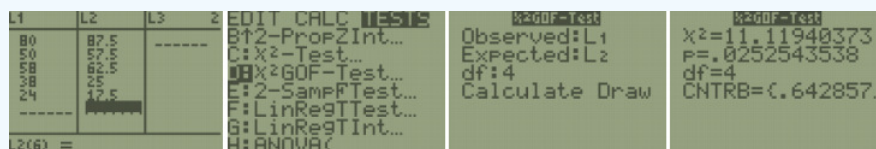
```
χ²cdf(11.1195,1E
99,4)
.0252533235
```

This gives a p-value = 0.0252 which is less than $\alpha = 0.05$, therefore reject H_0 .

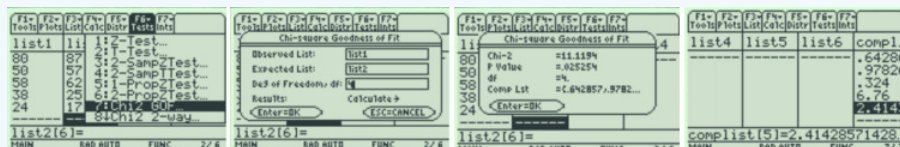
You can use the GOF shortcut function on your calculator to get a p-value; see directions below. If you get the program from your instructor or the website for your TI-83, you can also have the calculator find the $\frac{(O-E)^2}{E}$ values. The TI-84 and 89 already does this.

TI-84: Note: For the TI-83 download a GOF program from <http://MostlyHarmlessStatistics.com>. Only newer TI-84 operating systems have a calculator shortcut key for GOF. Use the same GOF program as for the TI-83 if your 84 does not have the χ^2 GOF-Test.

Before you start, write down your observed and expected values. Select Stat, then Calc. Type in the observed values into list 1, and the expected values into list 2. Select Stat, then Tests. Go down to option D: χ^2 GOF-Test. Choose L1 for the Observed category and L2 for the Expected category, type in your degrees of freedom ($df = k - 1$), and then select Calculate. The calculator returns the χ^2 -test statistic and the p-value. Use the right arrow to see the rest of the $\frac{(O-E)^2}{E}$ values.



TI-89: Go to the [Apps] Stat/List Editor, then type in the observed values into list 1, and the expected values into list 2. Press [2nd] then F6 [Tests], then select 7: Chi-2GOF. Type in the list names and the degrees of freedom ($df = k - 1$). Then press the [ENTER] key to calculate. The calculator returns the χ^2 -test statistic and the p-value. The $\frac{(O-E)^2}{E}$ values are stored in the comp list.



A research company is looking to see if the proportion of consumers who purchase a cereal is different based on shelf placement. They have four locations: Bottom Shelf, Middle Shelf, Top Shelf, and Aisle End Shelf. Test to see whether there is a preference among the four shelf placements. Use the p-value method with $\alpha = 0.05$.

Shelf	Bottom	Middle	Top	End
Observed	45	67	55	73

Solution

The hypotheses can be written as a sentence or as proportions. If you use proportions, note that there are no percentages given. We would expect that each shelf placement be the same if there was no preference. There are 4 categories, so $p_0 = \frac{1}{4} = 0.25$ or 25% for each placement.

- $H_0 : p_B = 0.25, p_M = 0.25, p_T = 0.25, p_E = 0.25$
- $H_1 : \text{At least one proportion is different.}$

It is also acceptable to write the hypotheses as a sentence.

- $H_0 : \text{Proportion of cereal sales is equally distributed across the four shelf placements.}$
- $H_1 : \text{Proportion of cereal sales is not equally distributed across the four shelf placements.}$

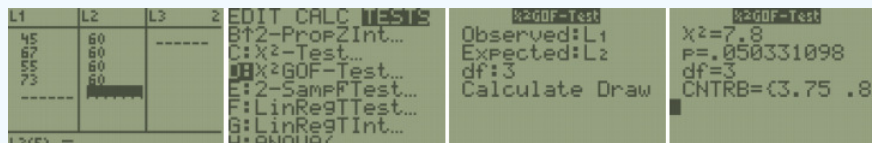
Find the expected values. Total all the observed values to get the sample size: $n = 45 + 67 + 55 + 73 = 240$. Then take the sample size and divide by 4 to get $\frac{240}{4} = 60$. The expected value for each group is 60.

Compute the test statistic:

$$\chi^2 = \sum \frac{(O - E)^2}{E} = \frac{(45 - 60)^2}{60} + \frac{(67 - 60)^2}{60} + \frac{(55 - 60)^2}{60} + \frac{(73 - 60)^2}{60}$$

$$= 3.75 + 0.816667 + 0.416667 + 2.816667 = 7.8$$

Check your work using technology and find the p-value. The degrees of freedom are the number of groups minus one: $df = k - 1 = 3$.



You can scroll right by selecting the right arrow button to see the rest of the contribution values.

In Excel the p-value is found by the formula `=CHISQ.DIST.RT(7.8,3)`. On the TI-Calculator, use the χ^2 GOF-Test shortcut. The p-value = 0.05033 which is larger than $\alpha = 0.05$; therefore, do not reject H_0 .

There is not enough evidence to support the claim that cereal shelf placement makes a statistically significant difference in the proportion of sales at the 5% level of significance.

10.3: Test for Independence

Use the chi-square test for independence to test the independence of two categorical variables. Remember, qualitative data is collected on individuals that are categories or names. Then you would count how many of the individuals had particular qualities. An example is that there is a theory that there is a relationship between breastfeeding and having autism spectrum disorder (ASD). To determine if there is a relationship, researchers could collect the time-period that a mother breastfed her child and if that child was diagnosed with ASD. Then you would have a table containing this information. Now you want to know if each cell is independent of each other cell. Remember, independence says that one event does not affect another event. Here it means that having ASD is independent of being breastfed. What you really want is to see if they are dependent (not independent). In other words, does one affect the other? If you were to do a hypothesis test, this is your alternative hypothesis and the null hypothesis is that they are independent. There is a hypothesis test for this and it is called the **chi-square test for independence**.

There is only a right-tailed test for testing the independence between two variables:

H_0 : Variable 1 and Variable 2 are independent (unrelated).

H_1 : Variable 1 and Variable 2 are dependent (related).

Finding the test statistic involves several steps. First, the data is collected, counted, and then organized into a contingency table. These values are known as the observed frequencies, and the symbol for an observed frequency is O . Total each row and column.

The null hypothesis is that the two variables are independent. If two events are independent then $P(B) = P(B|A)$ and we can use the multiplication rule for independent events, to calculate the probability that variable A and B as the $P(A \text{ and } B) = P(A) \cdot P(B)$. Remember in a hypothesis test, you assume that H_0 is true, the two variables are assumed to be independent.

$$\begin{aligned} P(A \text{ and } B) &= P(A) \cdot P(B) \text{ if } A \text{ and } B \text{ are independent} \\ &= \frac{\text{Number of ways A can happen}}{\text{Total number of individuals}} \cdot \frac{\text{Number of ways B can happen}}{\text{Total number of individuals}} \\ &= \frac{\text{Row Total}}{n} \cdot \frac{\text{Column Total}}{n} \end{aligned}$$

Variable 2	Variable 1		Total
	B	Not B	
A	P(A and B)	P(A and Not B)	Row Total for A
Not A	P(Not A and B)	P(Not A and Not B)	Row Total for Not A
Total	Column Total for B	Column Total for Not B	n

Now you want to find out how many individuals you expect to be in a certain cell. To find the expected frequencies, you just need to multiply the probability of that cell times the total number of individuals. Do not round the expected frequencies.

$$\begin{aligned} \text{Expected frequency (cell A and B)} &= E(A \text{ and } B) \\ &= n \left(\frac{\text{Row Total}}{n} \cdot \frac{\text{Column Total}}{n} \right) = \frac{\text{Row Total} \cdot \text{Column Total}}{n} \end{aligned}$$

If the variables are independent, the expected frequencies and the observed frequencies should be the same.

The test statistic here will involve looking at the difference between the expected frequency and the observed frequency for each cell. Then you want to find the “total difference” of all of these differences. The larger the total, the smaller the chances that you could find that test statistic given that the assumption of independence is true. That means that the assumption of independence is not true.

How do you find the test statistic? First, compute the differences between the observed and expected frequencies. Because some of these differences will be positive and some will be negative, you need to square these differences. These squares could be large just because the frequencies are large, so you need to divide by the expected frequencies to scale them. Then finally add up all of these fractional values. This process finds the variance, and we use a chi-square distribution to find the critical value or p-value. Hence, sometimes this test is called a chi-square test.

The χ^2 -test is a statistical test for testing the independence between two variables. It can be used when the data are obtained from a random sample, and when the expected value (E) from each cell is 5 or more.

$$\text{The formula for the } \chi^2 \text{-test statistic is: } \chi^2 = \sum \frac{(O-E)^2}{E}.$$

Use χ^2 -distribution with degrees of freedom

$$df = (\text{the number of rows} - 1)(\text{the number of columns} - 1), \text{ that is, } df = (R - 1)(C - 1).$$

where O = the observed frequency (sample results) and

E = the expected frequency (based on H_0 and the sample size).

Is there a relationship between autism spectrum disorder (ASD) and breastfeeding? To determine if there is, a researcher asked mothers of ASD and non-ASD children to say what time-period they breastfed their children. Does the data provide enough evidence to show that breastfeeding and ASD are independent? Test at the 1% level.

	Length of Breastfeeding				
ASD	None	Less than 2 months	2 to 6 months	Over 6 months	Total
Yes	241	198	164	215	818
No	20	25	27	44	116
Total	261	223	191	259	934

(Schultz, Klonoff-Cohen, Wingard, Askhoomoff, Macera, Ji & Bacher, 2006.)

Solution

The question is asking if breastfeeding and ASD are independent. The correct hypothesis is:

H_0 : Autism spectrum disorder and length of breastfeeding are independent.

H_1 : Autism spectrum disorder and length of breastfeeding are dependent.

There are 2 rows and 4 columns of data. We must compute the Expected count for each of the $2 \times 4 = 8$ cells.

The expected counts for each cell are found by the formula:

$$\text{Expected Value} = \frac{\text{Row Total} \cdot \text{Column Total}}{\text{Grand Total}}$$

It will be helpful to make a table for the expected counts and another one for each of the $\frac{(O-E)^2}{E}$ values to aid in computing the test statistic.

Observed	ASD	None	Below 2	2-6	Over 6	Total
	Yes	241	198	164	215	818
	No	20	25	27	44	116
	Total	261	223	191	259	934

Expected	ASD	None	Below 2	2-6	Over 6	Total
	Yes	$\frac{818 \cdot 261}{934} = 228.585$	$\frac{818 \cdot 223}{934} = 195.304$	$\frac{818 \cdot 191}{934} = 167.278$	$\frac{818 \cdot 259}{934} = 226.833$	818
	No	$\frac{116 \cdot 261}{934} = 32.415$	$\frac{116 \cdot 223}{934} = 27.696$	$\frac{116 \cdot 191}{934} = 23.722$	$\frac{116 \cdot 259}{934} = 32.167$	116
	Total	261	223	191	259	934

$\frac{(O-E)^2}{E}$	ASD	None	Below 2	2-6	Over 6	Total
	Yes	$\frac{(241-228.585)^2}{228.585} = 0.6743$	$\frac{(198-195.304)^2}{195.304} = 0.0372$	$\frac{(164-167.278)^2}{167.278} = 0.0642$	$\frac{(215-226.833)^2}{226.833} = 0.6173$	
	No	$\frac{(20-32.415)^2}{32.415} = 4.7552$	$\frac{(25-27.696)^2}{27.696} = 0.2624$	$\frac{(27-23.722)^2}{23.722} = 0.4531$	$\frac{(44-32.167)^2}{32.167} = 4.3529$	11.217

The test statistic is the sum of all eight $\frac{(O-E)^2}{E}$ values: $\chi^2 = \sum \frac{(O-E)^2}{E} = 11.217$.

The critical value for a right-tailed χ^2 -test with degrees of freedom $df = (R-1)(C-1) = (2-1)(4-1) = 3$ is found using a χ^2 -distribution $\alpha = 0.01$ right-tail area. The critical value is $\chi^2 = \text{CHISQ.INV.RT}(0.01,3) = 11.3449$. See Figure 10-5.

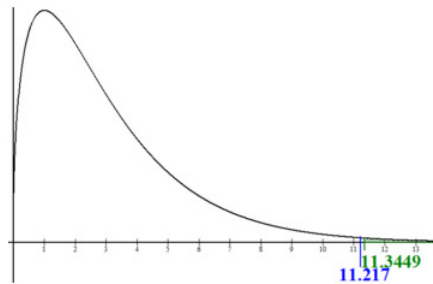
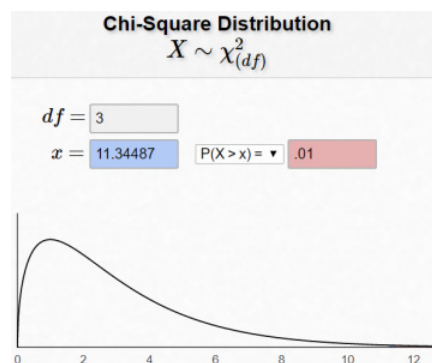


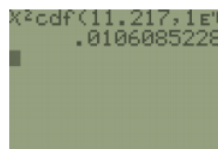
Figure 10-5: Values of χ^2 and χ^2_{α} on a χ^2 -test with $df = 3$ and $\alpha = 0.01$.

Alternatively, use the online calculator: <https://homepage.divms.uiowa.edu/~mbognar/applets/chisq.html>.



Since the test statistic $\chi^2 = 11.217$ is not in the rejection area, our decision is to fail to reject H_0 .

There is not enough evidence to show a relationship between autism spectrum disorder and breastfeeding.



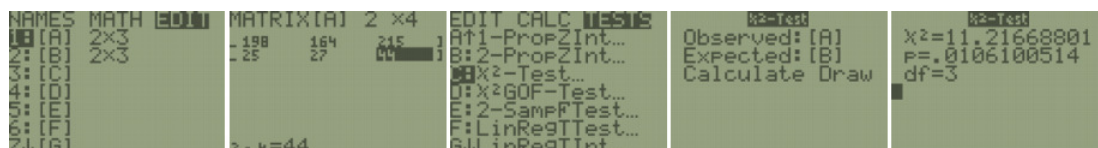
If we were asked to find the p-value, you would just find the area to right of the test statistic (always a right-tailed test) using your calculator or Excel. This gives a p-value = 0.0106, which is more than $\alpha = 0.01$; therefore, we do not reject H_0 .

You can also use the χ^2 -Test shortcut keys on your calculator to get a p-value, see directions below.


TI-84: Press the [2nd] then [MATRX] key. Arrow over to the EDIT menu and 1:[A] should be highlighted, press the [ENTER] key. For a $m \times n$ contingency table, type in the number of rows (m) and the number of columns (n) at the top of the screen so that it looks like this: MATRIX[A] $m \times n$. For a 2×4 contingency table, the top of the screen would look like this: MATRIX[A] 2×4 . As you hit [ENTER], the table will automatically widen to the size you put in. Now enter all of the observed values in their proper positions. Then press the [STAT] key, arrow over to the [TESTS] menu, arrow down to the option [C: χ^2 -Test] and press the [ENTER] key. Leave the default as Observed:[A] and Expected:[B], arrow down to [Calculate] and press the [ENTER] key.

The calculator returns the χ^2 -test statistic and the p-value.

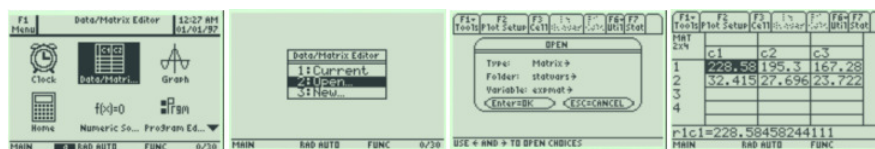
If you go back to the matrix menu [2nd] then [MATRX] key, arrow over to EDIT and choose 2:[B], you will see all of the expected values.



TI-89: First you need to create the matrix for the observed values: Press [Home] to return to the Home screen, press [Apps] and select Data/Matrix Editor. A menu is displayed, select 3:New. The New dialog box is displayed. Press the right arrow key to highlight 2:Matrix, and press [ENTER] to choose Matrix type. Press the down arrow key to highlight 1:Main, and press [ENTER], to choose main folder. Press the down arrow key, and then enter the letter *o* for the name in the Variable field. Enter 2 for Row dimension and 4 for Column dimension. Press [ENTER] to display the matrix editor. Enter the observed value (do not include total row or column). Important: Next time you use this test instead of option 3:New, choose 2: Open. The open dialog box is displayed. Press the right arrow key to highlight 2:Matrix, and press [ENTER] to choose Matrix type. Press the down arrow key to make sure you are in the Main folder and that your variable says *o*. Press [Apps], and then select Stats/List Editor. To display the Chi-square 2-Way dialog box, press 2nd then F6 [Tests], then select 8: Chi-2 2-way. Enter in the Observed Mat: *o*; leave the other rows alone: Store Expected to: statvars\e; Store CompMat to: statvars\c. This will store the expected values in the matrix folder statvars with the name expmat, and the $(o - e)^2/e$ values in the matrix compmat. Press the [ENTER] key to calculate. The calculator returns the χ^2 -test statistic and the p-value. If you go back to the matrix menu, you will see some of the expected and $(o - e)^2/e$ values.



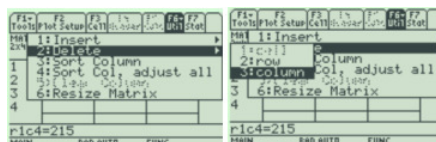
To see all the expected values, select [APPS] and select Data/Matrix Editor. Select 2:Open, change the Type to Matrix, change the Folder to statvars, and change the Variable to expmat.



To see all the $(o - e)^2/e$ values, select [APPS] and select Data/Matrix Editor. Select 2:Open, change the Type to Matrix, change the Folder to statvars, and change the Variable to compmat.



If you need to delete a row or column, move the cursor to the row or column that you want to delete, then select F6 Util, then 2:Delete, then choose row or column, then enter. To add a row or column, just arrow over to the new row or column and type in the observed values.



The sample data below show the number of companies providing dental insurance for small, medium and large companies. Test to see if there is a relationship between dental insurance coverage and company size. Use $\alpha = 0.05$.

	Size of the Company		
Dental Insurance	Small	Medium	Large
Yes	21	25	19
No	46	39	10

Solution

State the hypotheses.

H_0 : Dental insurance coverage and company size are independent.

H_1 : Dental insurance coverage and company size are dependent.

Compute the expected values by taking each row total times column total, divided by grand total.

$O = \text{observed}$	Size of the Company			
Dental Insurance	Small	Medium	Large	Total
Yes	21	25	19	65
No	46	39	10	95
Total	67	64	29	160

For the small companies with dental insurance: $(65 \cdot 67)/160 = 27.21875$

small companies without dental insurance: $(95 \cdot 67)/160 = 39.78125$

medium companies with dental insurance: $(65 \cdot 64)/160 = 26$, etc. See table below.

$E = \text{expected}$	Size of the Company			
Dental Insurance	Small	Medium	Large	Total
Yes	27.21875	26	11.78125	65
No	39.78125	38	17.21875	95
Total	67	64	29	160

Compute the test statistic.

$\frac{(O - E)^2}{E}$	Size of the Company		
Dental Insurance	Small	Medium	Large
Yes	$\frac{(21 - 27.21875)^2}{27.21875} = 1.42082$	$\frac{(25 - 26)^2}{26} = 0.03846$	$\frac{(19 - 11.78125)^2}{11.78125} = 4.42316$
No	$\frac{(46 - 39.78125)^2}{39.78125} = 0.97214$	$\frac{(39 - 38)^2}{38} = 0.02632$	$\frac{(10 - 17.21875)^2}{17.21875} = 3.02637$

Test statistic is $\chi^2 = \sum \frac{(O - E)^2}{E} = 1.42082 + 0.03846 + 4.42316 + 0.97214 + 0.02632 + 3.02637 = 9.9073$

Use technology to find the p-value using the chi-square cdf with $df = (R - 1)(C - 1) = (2 - 1)(3 - 1) = 2$.

$\chi^2 = 9.907263904$
$P = .007057729$
$df = 2$

Using the TI-Calculator, we find the p-value = 0.0071.

The p-value is less than α ; therefore, reject H_0 .

There is enough evidence to support the claim that there is a relationship between dental insurance coverage and company size.

This page titled [10.3: Test for Independence](#) is shared under a [CC BY-SA 4.0](#) license and was authored, remixed, and/or curated by [Rachel Webb](#) via [source content](#) that was edited to the style and standards of the LibreTexts platform.

10.4: Chapter 10 Formulas

Goodness of Fit Test

$H_0 : p_1 = p_0, p_2 = p_0, \dots, p_k = p_0 .$

$H_1 : \text{At least one proportion is different.}$

$$\chi^2 = \sum \frac{(O-E)^2}{E}$$

$df = k - 1, p_0 = \frac{1}{k} \text{ or given } \%$

TI-84: χ^2 GOF-Test

Test for Independence

$H_0 : \text{Variable 1 and Variable 2 are independent.}$

$H_1 : \text{Variable 1 and Variable 2 are dependent.}$

$$\chi^2 = \sum \frac{(O-E)^2}{E}$$

$df = (R - 1)(C - 1)$

TI-84: χ^2 -Test

One of the major selling points of that wholly remarkable travel book, the Hitchhiker's Guide to the Galaxy, apart from its relative cheapness and the fact that it has the words DON'T PANIC written in large friendly letters on its cover, is its compendious and occasionally accurate glossary. The statistics relating to the geo-social nature of the Universe, for instance, are deftly set out between pages nine hundred and thirty-eight thousand and twenty-four and nine hundred and thirty-eight thousand and twenty-six; and the simplistic style in which they are written is partly explained by the fact that the editors, having to meet a publishing deadline, copied the information off the back of a packet of breakfast cereal, hastily embroidering it with a few footnotes in order to avoid prosecution under the incomprehensibly tortuous Galactic Copyright laws.

(Adams, 2002)

This page titled [10.4: Chapter 10 Formulas](#) is shared under a [CC BY-SA 4.0](#) license and was authored, remixed, and/or curated by [Rachel Webb](#) via [source content](#) that was edited to the style and standards of the LibreTexts platform.

10.5: Chapter 10 Exercises

? Chapter 10 Exercises

1. The shape of the χ^2 -distribution is usually:

- a) Normal
- b) Bell-shaped
- c) Skewed left
- d) Skewed right
- e) Uniform

2. Why are Goodness of Fit tests always right-tailed?

- a) Because the test checks for a large variance between observed and expected values.
- b) Because the χ^2 -distribution is skewed right.
- c) Because χ^2 values can never be negative.
- d) Because they test a variance and variance is always positive.

3. What are the requirements to be satisfied before using a Goodness of Fit test? Check all that apply.

- a) The data are obtained using systematic sampling.
- b) The data are obtained from a simple random sample.
- c) The expected frequency from each category is 5 or more.
- d) The observed frequency from each category is organized from largest to smallest.
- e) The degrees of freedom are less than 30.

For exercises 4-19, show all 5 steps for hypothesis testing:

- a) State the hypotheses.
- b) Compute the test statistic.
- c) Compute the critical value or p-value.
- d) State the decision.
- e) Write a summary.

4. Pamplona, Spain, is the home of the festival of San Fermin – The Running of the Bulls. The town is in festival mode for a week and a half every year at the beginning of July. There is a running joke in the city that Pamplona has a baby boom every April – 9 months after San Fermin. To test this claim, a resident takes a random sample of 200 birthdays from native residents and finds the following. At the 0.05 level of significance, can it be concluded that births in Pamplona are not equally distributed throughout the 12 months of the year?

January	17	July	13
February	19	August	16
March	16	September	18
April	24	October	16
May	15	November	14
June	16	December	16

5. A professor using an open-source introductory statistics book predicts that 60% of the students will purchase a hard copy of the book, 25% will print it out from the web, and 15% will read it online. At the end of the term she asks her students to complete a survey where they indicate what format of the book they used. Of the 126 students, 45 said they bought a hard copy

of the book, 25 said they printed it out from the web, and 56 said they read it online. Run a Goodness of Fit test at $\alpha = 0.05$ to see if the distribution is different than expected.

6. The proportion of final grades for an anatomy class for the whole department are distributed as 10% A's, 23% B's, 45% C's, 14% D's, and 8% F's. A department chair is getting quite a few student complaints about a particular professor. The department chair wants to check to see if the professor's students' grades have a different distribution compared to the rest of the department. At the end of the term, the students have the following grades. Use $\alpha = 0.05$.

Grades	A	B	C	D	F
Observed	12	18	25	8	5

7. You might think that if you looked at the first digit in randomly selected numbers that the distribution would be uniform. Actually, it is not! Simon Newcomb and later Frank Benford both discovered that the digits occur according to the following distribution.

Digit	1	2	3	4	5	6	7	8	9
Probability	0.301	0.176	0.125	0.097	0.079	0.067	0.058	0.051	0.046

A forensic accountant can use Benford's Law to detect fraudulent tax data. Suppose you work for the IRS and are investigating an individual suspected of embezzling. The first digit of 192 checks to a supposed company are as follows.

Digit	1	2	3	4	5	6	7	8	9
Observed Frequency	56	23	19	20	16	19	17	10	12

Run a complete Goodness of Fit test to see if the individual is likely to have committed tax fraud. Use $\alpha = 0.05$. Should law enforcement officials pursue the case? Explain.

8. A college professor is curious if location of seat in class affects grade in the class. She is teaching in a lecture hall to 200 students. The lecture hall has 10 rows, so she splits it into 5 categories – Rows 1-2, Rows 3-4, Rows 5-6, Rows 7-8, and Rows 9-10. At the end of the course, she determines the top 25% of grades in the class, and if location of seat makes no difference, she would expect that these top 25% of students would be equally dispersed throughout the classroom. Her observations are recorded below. Run a Goodness of Fit test to determine whether location has an impact on grade. Let $\alpha = 0.05$.

# in Top 25%	Rows 1-2	Rows 3-4	Rows 5-6	Rows 7-8	Rows 9-10
Observed	12	7	10	8	13

9. Consumer panel preferences for four store displays follow. Test to see whether there is a preference among the four display designs. Use $\alpha = 0.05$.

Display	A	B	C	D
Observed	43	60	47	50

10. The manager of a coffee shop wants to know if his customers' drink preferences have changed in the past year. He knows that last year the preferences followed the following proportions – 34% Americano, 21% Cappuccino, 14% Espresso, 11% Latte, 10% Macchiato, 10% Other. In a random sample of 300 customers, he finds that 90 ordered Americanos, 65 ordered Cappuccinos, 52 ordered Espressos, 35 ordered Lattes, 34 ordered Macchiatos, and the rest ordered something in the Other category. Run a Goodness of Fit test to determine whether drink preferences have changed at his coffee shop. Use a 0.05 level of significance.

11. The director of a Driver's Ed program is curious if the time of year has an impact on number of car accidents in the United States. They assume that weather may have a significant impact on the ability of drivers to control their vehicles. They take a random sample of 100 car accidents and record the season each occurred in. They found that 20 occurred in the spring, 31 in the summer, 23 in the fall, and 26 in the winter. Can it be concluded at the 0.05 level of significance that car accidents are not equally distributed throughout the year?

12. A college prep school advertises that their students are more prepared to succeed in college than other schools. To show this, they categorize GPAs into 4 groups and look up the proportion of students at a state college in each category. They find that 7% have a 0-0.99, 21% have a 1-1.99, 37% have a 2-2.99, and 35% have a 3-4.00 in GPA. They then take a random sample of 150 of their graduates at the state college and find that 5 graduates have a 0- 0.99, 18 have a 1-1.99, 67 have a 2-2.99, and 60 have a 3-4.00. Can they conclude that the grades of their graduates are distributed differently than the general population at the school? Test at the 0.05 level of significance.

13. The permanent residence of adults aged 18-25 in the United States was examined in a survey from the year 2000. The survey revealed that 27% of these adults lived alone, 32% lived with a roommate(s), and 41% lived with their parents/guardians. In 2008, during an economic recession in the country, another such survey of 1,500 people revealed that 378 lived alone, 452 lived with a roommate(s), and 670 lived with their parents. Is there a significant difference in where young adults lived in 2000 versus 2008? Test with a Goodness of Fit test at $\alpha = 0.05$.

14. A color code personality test categorizes people into four colors – Red (Power), Blue (Intimacy), Green (Peace), and Yellow (Fun). In general, 25% of people are Red, 35% Blue, 20% Green, and 20% Yellow. An art class of 33 students is tested at a university and 4 are found to be Red, 14 Blue, 7 Green, and 8 Yellow. Can it be concluded that personality type has an impact on students' areas of interest and talents, such as artistic students? Test at a 0.05 level of significance.

15. An urban economist is curious if the distribution in where Oregon residents live is different today than it was in 1990. She observes that today there are approximately 3,050 thousand residents in NW Oregon, 907 thousand residents in SW Oregon, 257 thousand in Central Oregon, and 106 thousand in Eastern Oregon. She knows that in 1990 the breakdown was as follows: 72.7% NW Oregon, 19.7% SW Oregon, 4.8% Central Oregon, and 2.8% Eastern Oregon. Can she conclude that the distribution in residence is different today at a 0.05 level of significance?

16. A large department store is curious what sections of the store make the most sales. The manager has data from 10 years prior that show 30% of sales come from Clothing, 25% Home Appliances, 18% Housewares, 13% Cosmetics, 12% Jewelry, and 2% Other. In a random sample of 500 current sales, 176 came from Clothing, 150 from Home Appliances, 75 from Housewares, 42 from Cosmetics, 51 from Jewelry, and 6 from Other. At $\alpha = 0.10$, can the manager conclude that the distribution of sales among the departments has changed?

17. Students at a high school are asked to evaluate their experience in a class at the end of each school year. The courses are evaluated on a 1-4 scale – with 4 being the best experience possible. In the History Department, the courses typically are evaluated at 10% 1's, 15% 2's, 34% 3's, and 41% 4's. A new history teacher, Mr. Mendoza, sets a goal to outscore these numbers. At the end of the year, he takes a random sample of his evaluations and finds 11 1's, 14 2's, 47 3's, and 53 4's. At the 0.05 level of significance, can Mr. Mendoza claim that his evaluations are significantly different from the History Department's?

18. A company manager believes that a person's ability to be a leader is directly related to their zodiac sign. He never selects someone to chair a committee without first evaluating their zodiac sign. An irate employee sets out to show her manager is wrong. She claims that if zodiac sign truly makes a difference in leadership, then a random sample of 200 CEOs in our country would reveal a difference in zodiac sign distribution. She finds the following zodiac signs for her random sample of 200 CEOs. Can the employee conclude that there is a difference in the proportion of CEOs for the twelve zodiac signs? Use $\alpha = 0.05$.

Births	Signs	Births	Signs
23	Aries	15	Libra
12	Taurus	14	Scorpio
16	Gemini	20	Sagittarius
20	Cancer	11	Capricorn
14	Leo	17	Aquarius
16	Virgo	22	Pisces

19. A company that develops over-the-counter medicines is working on a new product that is meant to shorten the length of time that sore throats persist. To test their product for effectiveness, they take a random sample of 100 people and record how long it took for their symptoms to completely disappear. The results are in the table below. The company knows that on average (without medication) it takes a sore throat 6 days or less to heal 42% of the time, 7-9 days 31% of the time, 10-12 days 16% of the time, and 13 days or more 11% of the time. Can it be concluded at the 0.01 level of significance that the patients who took the medicine healed at a different rate than these percentages?

Duration of Sore Throat	6 days or less	7-9 days	10-12 days	13 or more days
Observed	47	38	10	5

20. What are the requirements to be satisfied before using the χ^2 Independence Test? Check all that apply.

- a) The sample sizes must be greater than 30.
- b) The data are obtained from a random sample.
- c) The data are obtained using stratified sampling.

- d) The expected frequency from each category is 5 or more.
- e) The observed frequency from each category is organized from largest to smallest.
- f) The population is normally distributed.

21. The null hypothesis for the χ^2 Independence Test always states that _____.

- a) the two values are equal.
- b) one variable is dependent on another variable.
- c) one variable is independent of another variable.
- d) the expected values and observed values are the same.

22. What are the degrees of freedom used in the χ^2 Independence Test?

- a) $n - 1$
- b) Rows + Columns
- c) n
- d) $(\text{Rows} - 1) \times (\text{Columns} - 1)$
- e) $n - 2$

For exercises 23-33, show all 5 steps for hypothesis testing:

- a) State the hypotheses.
- b) Compute the test statistic.
- c) Compute the critical value or p-value.
- d) State the decision.
- e) Write a summary.

23. A manufacturing company knows that their machines produce parts that are defective on occasion. They have 4 machines producing parts and want to test if defective parts are dependent on the machine that produced it. They take a random sample of 300 parts and find the following results. Test at the 0.05 level of significance.

	Machine 1	Machine 2	Machine 3	Machine 4
Defective	9	12	15	6
Non-Defective	63	70	68	57

24. The sample data below show the number of companies providing health insurance for small, medium and large companies. Test to see whether health insurance coverage and company size are dependent. Use $\alpha = 0.01$.

Health Insurance	Size of the Company		
	Small	Medium	Large
Yes	40	70	90
No	20	20	10

25. A restaurant chain that has 3 locations in Portland is trying to determine which of their 3 locations they should keep open on New Year's Eve. They survey a random sample of customers at each location and ask each whether they plan to go out to eat on New Year's Eve. The results are below. Run a test for independence to decide if the proportion of customers who will go out to eat on New Year's Eve is dependent on location. Use $\alpha = 0.05$.

	NW Location	NE Location	SE Location
Will Go Out	45	33	36
Won't Go Out	23	29	25

26. The following sample was collected during registration at a large middle school. At the 0.05 level of significance, can it be concluded that level of math is dependent on grade level?

	Honors Math	Regular Math	General Math
6 th Grade	34	45	15
7 th Grade	37	49	13
8 th Grade	29	45	17

27. A high school offers math placement exams for incoming freshmen to place students into the appropriate math class during their freshman year. Three middle schools were sampled and the following pass/fail results were found. Test to see if the math placement exam result and the school that students attend are dependent at the 0.10 level of significance.

	School A	School B	School C
Pass	42	29	45
Fail	57	35	61

28. A public opinion poll surveyed a simple random sample of 500 voters in Oregon. The respondents were asked which political party they identified with most and were categorized by residence. Results are shown below. Decide if voting preference is dependent on location of residence. Let $\alpha = 0.05$.

	Republican	Democrat	Independent
NW Oregon	72	104	24
SW Oregon	31	59	10
Central Oregon	42	47	11
Eastern Oregon	59	33	8

29. A university changed to a new learning management system (LMS) during the past school year. The school wants to find out how it is working for the different departments – the results in preference found from a survey are below. Test to see if the department and LMS preference are dependent at $\alpha = 0.05$.

	Prefers Old LMS	Prefers New LMS	No Preference
School of Business	15	24	6
College of Liberal Arts & Science	34	7	19
College of Education	21	19	5

30. The medal count for the 2018 winter Olympics is recorded below. Run an independence test to find out if the medal won is dependent on country. Use $\alpha = 0.10$.

	Gold	Silver	Bronze
Norway	14	14	11
Germany	14	10	7
Canada	11	8	10
United States	9	8	6

31. An electronics store has 4 branches in a large city. They are curious if sales in any particular department are different depending on location. They take a random sample of purchases throughout the 4 branches – the results are recorded below. Test to see if the type of electronic device and store branch are dependent at the 0.05 level of significance.

	Appliances	TV	Computers	Cameras	Cellphones
Branch 1	54	28	61	24	81
Branch 2	44	21	55	23	92
Branch 3	49	18	49	30	72
Branch 4	51	29	65	29	102

32. A high school runs a survey asking students if they participate in sports. The results are found below. Test to see if there is a relationship between participating in sports and year in school at $\alpha = 0.05$.

	Freshmen	Sophomores	Juniors	Seniors
Yes	82	89	54	42
No	29	25	38	37

33. A 4-year college is curious which of their students hold down a job while also attending school. They poll the students and find the results below. Test to see if there is a relationship between college students having a job and year in school. Use $\alpha = 0.05$.

	Freshmen	Sophomores	Juniors	Seniors
Works	61	45	31	72
Doesn't Work	45	33	38	19

Answers to Odd Numbered Exercises

1) d

3) b & c

5) $H_0 : p_1 = 0.6, p_2 = 0.25, p_3 = 0.15$; H_1 : At least one proportion is different. $\chi^2 = 86.5529$; p-value = $1.604 \times 10^{-19} = 0$; reject H_0 . There is enough evidence to support the claim that the distribution is different than expected. There were more students than expected that would read the text online.

7) $H_0 : p_1 = 0.301, p_2 = 0.176, p_3 = 0.125, p_4 = 0.097, p_5 = 0.079, p_6 = 0.067, p_7 = 0.058, p_8 = 0.051, p_9 = 0.046$; H_1 : At least one proportion is different. $\chi^2 = 11.8466$; CV = 15.5073; do not reject H_0 . There is no evidence of tax fraud so law enforcement officials should not pursue the case.

9) $H_0 : p_1 = 0.25, p_2 = 0.25, p_3 = 0.25, p_4 = 0.25$; H_1 : At least one proportion is different. $\chi^2 = 3.16$; p-value = 0.3676; do not reject H_0 . There is not enough evidence to support the claim that preference among the four display designs.

11) $H_0 : p_1 = 0.25, p_2 = 0.25, p_3 = 0.25, p_4 = 0.25$; H_1 : At least one proportion is different. $\chi^2 = 2.64$; p-value = 0.4505; do not reject H_0 . There is not enough evidence to support the claim that car accidents are not equally distributed throughout the year.

13) $H_0 : p_1 = 0.27, p_2 = 0.32, p_3 = 0.41$; H_1 : At least one proportion is different. $\chi^2 = 8.352$; p-value = 0.0154; reject H_0 . There is enough evidence to support the claim that there is a significant difference in where young adults lived in 2000 versus 2008. There are fewer young adults living at home than expected.

15) $H_0 : p_1 = 0.727, p_2 = 0.197, p_3 = 0.048, p_4 = 0.028$; H_1 : At least one proportion is different. $\chi^2 = 20.0291$; p-value = 0.0002; reject H_0 . There is enough evidence to support the claim that the distribution of Oregon residents is different now compared to 1990. There were more Oregonians in central Oregon than expected.

17) $H_0 : p_1 = 0.1, p_2 = 0.15, p_3 = 0.34, p_4 = 0.4$; H_1 : At least one proportion is different. $\chi^2 = 1.9196$; p-value = 0.5893; do not reject H_0 . There is not enough evidence to support the claim that the Mr. Mendoza's course evaluation scores are different compared to the rest of the History Department's evaluations.

19) $H_0 : p_1 = 0.42, p_2 = 0.31, p_3 = 0.16, p_4 = 0.11$; H_1 : At least one proportion is different. $\chi^2 = 7.6986$; p-value = 0.05267; do not reject H_0 . There is not enough evidence to support the claim that the patients who took the medicine healed at a different rate than these percentages.

21) c

23) H_0 : The number of defective parts is independent on the machine that produced it. H_1 : The number of defective parts is dependent on the machine that produced it. $\chi^2 = 2.3536$; p-value = 0.5023; do not reject H_0 . There is not enough evidence to support the claim that the number of defective parts is dependent on the machine that produced it.

25) H_0 : The proportion of customers who will go out to eat on New Year's Eve is independent of location. H_1 : The proportion of customers who will go out to eat on New Year's Eve is dependent on location. $\chi^2 = 2.2772$; p-value = 0.3203; do not reject H_0 . There is not enough evidence to support the claim that the proportion of customers who will go out to eat on New Year's Eve is dependent on location.

27) H_0 : The math placement exam and where students are placed are independent. H_1 : The math placement exam and which middle school students attend are dependent. $\chi^2 = 0.1642$; p-value = 0.9212; do not reject H_0 . There is not enough evidence to support the claim that the math placement exam and which middle school students attend are dependent.

29) H_0 : Department and LMS preference are independent. H_1 : Department and LMS preference are dependent. $\chi^2 = 24.7778$; p-value = 0.000056; reject H_0 . There is enough evidence to support the claim that department and LMS preference are dependent.

31) H_0 : Type of electronic device and store branch are dependent. H_1 : Type of electronic device and store branch are independent. $\chi^2 = 7.4224$; p-value = 0.8285; do not reject H_0 . There is not enough evidence to support the claim that type of

electronic device and store branch are dependent.

33) H_0 : Having a job in college and year in school are not related. H_1 : Having a job in college and year in school are related. $\chi^2 = 20.8875$; p-value = 0.0001; reject H_0 . There is enough evidence to support the claim that having a job in college and year in school are related.

This page titled [10.5: Chapter 10 Exercises](#) is shared under a [CC BY-SA 4.0](#) license and was authored, remixed, and/or curated by [Rachel Webb](#) via [source content](#) that was edited to the style and standards of the LibreTexts platform.

CHAPTER OVERVIEW

11: Analysis of Variance

[11.1: One-Way ANOVA](#)

[11.2: Pairwise Comparisons of Means \(Post-Hoc Tests\)](#)

[11.3: Two-Way ANOVA \(Factorial Design\)](#)

[11.4: Chapter 11 Formulas](#)

[11.5: Chapter 11 Exercises](#)

This page titled [11: Analysis of Variance](#) is shared under a [CC BY-SA 4.0](#) license and was authored, remixed, and/or curated by [Rachel Webb](#) via [source content](#) that was edited to the style and standards of the LibreTexts platform.

11.1: One-Way ANOVA

The z - and t -tests can be used to test the equality between two population means μ_1 and μ_2 . When we have more than two groups, we would inflate the probability of making a type I error if we were to compare just two at a time and make a conclusion about all the groups together. To account for this P(Type I Error) inflation, we instead will do an analysis of variance (ANOVA) to test the equality between 3 or more population means $\mu_1, \mu_2, \mu_3, \dots, \mu_k$.

The F-test (for ANOVA) is a statistical test for testing the equality of k population means.

The one-way ANOVA F-test is a statistical test for testing the equality of k population means from 3 or more groups within one variable or factor. There are many different types of ANOVA; for now, we are going to start with what is commonly referred to as a one-way ANOVA, which has one main effect or factor that is split up into three or more independent treatment levels. In more advanced courses you would learn about dependent groups or two or more factors.

Assumptions:

- The populations are normally distributed continuous variables with equal variances.
- The observations are independent.

The hypotheses for testing the equality of k population means (ANOVA) are set up with all the means equal to one another in the null hypothesis and at least one mean is different in the alternative hypothesis.

$$H_0 : \mu_1 = \mu_2 = \mu_3 = \dots = \mu_k$$

H_1 : At least one mean is different.

Even though there is equality in H_0 , the ANOVA test is testing if the variance between groups is significantly greater than the variance within groups; hence, this will always be set up as a right-tailed test.

We will be using abbreviations for many of the numbers found in this section.

B = Between, W = Within

MS = Mean Square (This is a variance)

MSB = Mean Square (Variance) Between groups.

MSW = Mean Square (Variance) Within groups.

$$\text{The formula for the F-test statistic is } F = \frac{MSB}{MSW}.$$

Use the F-distribution with degrees of freedom from the between and within groups. The numerator degrees of freedom are equal to the number of groups minus one, that is numerator degrees of freedom are $df_B = k - 1$. The denominator degrees of freedom are equal to the total of all the sample sizes minus the number of groups, that is denominator degrees of freedom are $df_W = N - k$.

The sum of squares, degrees of freedom and mean squares are organized in a table called an ANOVA table. Figure 11-1 below is a template for an ANOVA table.

Source	SS = Sum of Squares	df	MS = Mean Square	F
Between (Factor)	SSB	$k - 1$	$MSB = \frac{SSB}{k - 1}$	$F = \frac{MSB}{MSW}$
Within (Error)	SSW	$N - k$	$MSW = \frac{SSW}{N - k}$	
Total	SST	$N - 1$		

Figure 11-1: ANOVA table template.

Where:

\bar{x}_i = sample mean from the i^{th} group

s_i^2 = sample variance from the i^{th} group

n_i = sample size from the i^{th} group

k = number of groups

$N = n_1 + n_2 + \dots + n_k$ = sum of the individual sample sizes for groups

Grand mean from all groups = $\bar{x}_{GM} = \frac{\sum x_i}{N}$

Sum of squares between groups = $SSB = \sum n_i (\bar{x}_i - \bar{x}_{GM})^2$

Sum of squares within groups = $SSW = \sum (n_i - 1) s_i^2$

Mean squares between groups (or the between-groups variance s_B^2) = $MSB = \frac{SSB}{k-1}$

Mean squares within-group (or error within-groups variance s_W^2) = $MSW = \frac{SSW}{N-k}$

$F = \frac{MSB}{MSW}$ is the test statistic.

These calculations can be time-consuming to do by hand, so use technology to find the ANOVA table values, critical value and/or p-value.

Different textbooks and computer software programs use different labels in the ANOVA tables.

- The TI-calculators use the word Factor for Between Groups and Error for Within Groups.
- Some software packages use Treatment instead of Between groups. You may see different notation depending on which textbook, software or video you are using.
- For between groups $SSB = SS_B = SSTR = SST = SSF$ and for within groups $SSW = SS_W = SSE$.
- One thing that is consistent within the ANOVA table is that the between = factor = treatment always appears on the first row of the ANOVA table, and the within = error always is in the second row of the ANOVA table.
- The df column usually is in the second column since we divide the sum of squares by the df to find the mean squares. However, some software packages will put the df column before the sum of squares column.
- The test statistic is under the column labeled F.
- Many software packages will give an extra column for the p-value and some software packages give a critical value too.

Assumption: The population we are sampling from must be approximately normal with equal variances. If these assumptions are not met there are more advanced statistical methods that should be used.

An educator wants to see if there is a difference in the average grades given to students for the 4 different instructors who teach intro statistics courses. They randomly choose courses that each of the 4 instructors taught over the last few years and perform an ANOVA test. What would be the correct hypotheses for this test?

Solution

There are 4 groups (the 4 instructors) so there will be 4 means in the null hypothesis, $H_0 : \mu_1 = \mu_2 = \mu_3 = \mu_4$.

It is tempting to write $\mu_1 \neq \mu_2 \neq \mu_3 \neq \mu_4$ for the alternative hypothesis, but the test is testing the opposite of all equal is that at least one mean is different. We could for instance have just the mean for group 2 be different and groups 1, 3 and 4 have equal means. If we wanted to write out all the way to have unequal groups, you would have a combination problem with ${}_4C_3 + {}_4C_2 + {}_4C_1$ ways of getting unequal means. Instead of all of these possibilities, we just write a sentence: "at least one mean is different."

The hypotheses are:

$$H_0 : \mu_1 = \mu_2 = \mu_3 = \mu_4$$

H_1 : At least one mean is different.

A researcher claims that there is a difference in the average age of assistant professors, associate professors, and full professors at her university. Faculty members are selected randomly and their ages are recorded. Assume faculty ages are normally distributed. Test the claim at the $\alpha = 0.01$ significance level. The data are listed below.

Assistant Prof	28	32	36	42	50	33	38
Associate Prof	44	61	52	54	62	45	46
Prof	54	56	55	65	52	50	46

Solution

The claim is that there is a difference in the average age of assistant professors (μ_1), associate professors (μ_2), and full professors (μ_3) at her university.

The correct hypotheses are:

$$H_0 : \mu_1 = \mu_2 = \mu_3$$

$$H_1 : \text{At least one mean differs.}$$

We need to compute all of the necessary parts for the ANOVA table and F-test.

Compute the descriptive stats for each group with your calculator using 1-Var Stats L1.

<p>1-Var Stats</p> <p>$\bar{x}=37$ $\Sigma x=259$ $\Sigma x^2=9901$ $Sx=7.280109889$ $\sigma x=6.740072064$ $\downarrow n=7$</p>	<p>1-Var Stats</p> <p>$\bar{x}=52$ $\Sigma x=364$ $\Sigma x^2=19262$ $Sx=7.461009762$ $\sigma x=6.907552802$ $\downarrow n=7$</p>	<p>1-Var Stats</p> <p>$\bar{x}=54$ $\Sigma x=378$ $\Sigma x^2=20622$ $Sx=5.916079783$ $\sigma x=5.477225575$ $\downarrow n=7$</p>
---	--	--

Record the sample size, sample mean, sum of χ , and sample variances. Take the standard deviation s_x and square it to find the variance s_x^2 for each group.

Assistant Prof	$n_1 = 7$	$\bar{\chi}_1 = 37$	$\Sigma \chi_1 = 259$	$s_1^2 = 53$
Associate Prof	$n_2 = 7$	$\bar{\chi}_2 = 52$	$\Sigma \chi_2 = 364$	$s_2^2 = 55.6667$
Prof	$n_3 = 7$	$\bar{\chi}_3 = 54$	$\Sigma \chi_3 = 378$	$s_3^2 = 35$

Compute the grand mean: $N = n_1 + n_2 + n_3 = 7 + 7 + 7 = 21$, $\bar{\chi}_{GM} = \frac{\Sigma \chi_i}{N} = \frac{(259+364+378)}{21} = 47.66667$.

Compute the sum of squares for between groups: $SSB = \Sigma n_i (\bar{\chi}_i - \bar{\chi}_{GM})^2 = n_1 (\bar{\chi}_1 - \bar{\chi}_{GM})^2 + n_2 (\bar{\chi}_2 - \bar{\chi}_{GM})^2 + n_3 (\bar{\chi}_3 - \bar{\chi}_{GM})^2 = 7(37 - 47.66667)^2 + 7(52 - 47.66667)^2 + 7(54 - 47.66667)^2 = 1208.66667$

Compute the sum of squares within groups: $SSW = \Sigma (n_i - 1) s_i^2 = (n_1 - 1) s_1^2 + (n_2 - 1) s_2^2 + (n_3 - 1) s_3^2 = 6 \cdot 53 + 6 \cdot 55.66667 + 6 \cdot 35 = 862$.

Place the sum of squares into your ANOVA table and add them up to get the total.

Source	SS	df	MS	F
Between	1208.6667			
Within	862			
Total	2070.6001			

Next, find the degrees of freedom: $k = 3$ since there are 3 groups, so $df_B = k - 1 = 2$; $df_W = N - k = 21 - 3 = 18$.

Add the degrees of freedom to the table to get the total df .

Source	SS	df	MS	F
Between	1208.6667	2		
Within	862.0002	18		
Total	2070.6667	20		

Compute the mean squares by dividing the sum of squares by their corresponding df , then add these numbers to the table.

$$MSB = \frac{SSB}{k-1} = \frac{1208.6667}{2} = 604.3333 \quad MSW = \frac{SSW}{N-k} = \frac{862}{18} = 47.8889$$

The test statistic is the ratio of these two mean squares: $F = \frac{MSB}{MSW} = \frac{604.3333}{47.8889} = 12.6195$. Add the test statistic to the table under F.

Source	SS	df	MS	F
Between	1208.6667	2	604.3333	12.6195
Within	862	18	47.8889	
Total	2070.6667	20		

All ANOVA tests are right-tailed tests, so the critical value for a right-tailed F-test is found with the F-distribution. Use $\alpha = 0.01$ area in the right-tail. The degrees of freedom are $df_N = 2$, and $df_D = 18$. The critical value is 6.0129; see the sampling distribution curve in Figure 11-2.

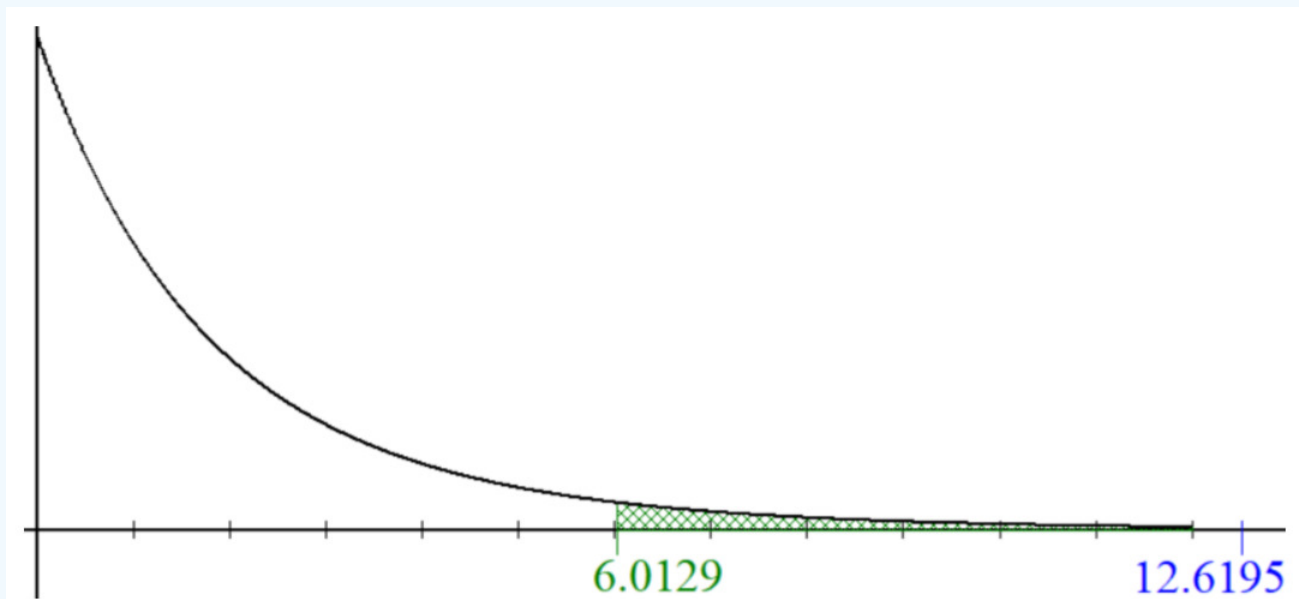


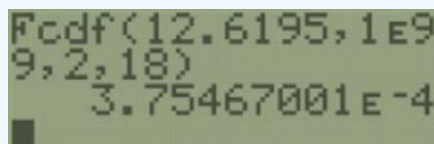
Figure 11-2: Sampling distribution curve with the critical value and calculated F-value shown.

Note that the F-distribution starts at zero, and is skewed to the right. The test statistic of 12.6295 is larger than the critical value of 6.0129 so the decision would be to reject the null hypothesis.

Decision: Reject H_0 .

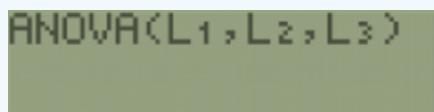
Summary: There is enough evidence to support the claim that there is a difference in the average age of assistant professors, associate professors, and full professors at her university.

If we were using the p-value method, then we would use the calculator or computer for a right-tailed test. The p-value = 0.0003755 is less than $\alpha = 0.01$, which leads to the same decision of rejecting H_0 that we found using the critical value method.

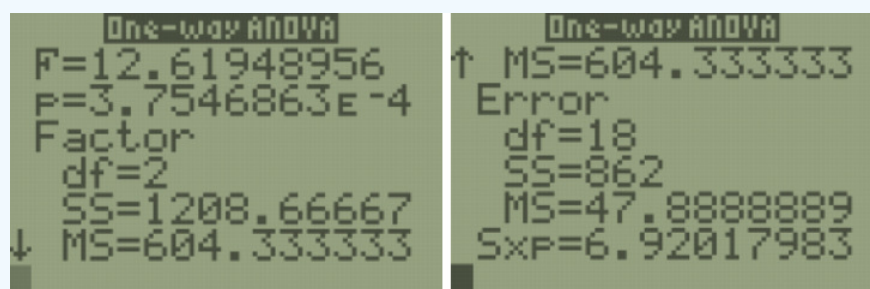


Alternatively, use technology to compute the ANOVA table and p-value.

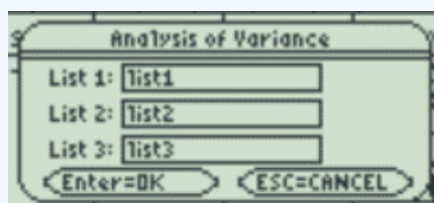
TI-84: ANOVA, hypothesis test for the equality of k population means. Note you have to have the actual raw data to do this test on the calculator. Press the [STAT] key and then the [EDIT] function, type the three lists of data into list one, two and three. Press the [STAT] key, arrow over to the [TESTS] menu, arrow down to the option [F:ANOVA()] and press the [ENTER] key. This brings you back to the regular screen where you should now see ANOVA(. Now hit the [2nd] [L1] [,] [2nd] [L2] [,] [2nd] [L3][)] keys in that order. You should now see ANOVA(L1,L2,L3); if you had 4 lists you would then have an additional list.



Press the [ENTER] key. The calculator returns the F-test statistic, the p-value, Factor (Between) df , SS and MS, Error (Within) df , SS and MS. The last value, Sxp is the square root of the MSE.



TI-89: ANOVA, hypothesis test for the equality of k population means. Go to the [Apps] Stat/List Editor, then type in the data for each group into a separate list (or if you don't have the raw data, enter the sample size, sample mean and sample variance for group 1 into list1 in that order, repeat for list2, etc.). Press [2nd] then F6 [Tests], then select C:ANOVA. Select the input method data or stats. Select the number of groups. Press the [ENTER] key to calculate. The calculator returns the F-test statistic, the p-value, Factor (Between) df , SS and MS, Error (Within) df , SS and MS. The last value, Sxp, is the square root of the MSE.



Excel: Type the labels and data into adjacent columns (it is important not to have any blank columns, which would be an additional group counted as zeros). Select the Data tab, then Data Analysis, ANOVA: Single-Factor, then OK.

	A	B	C	D	E	F	G	H	I	J
1	Asst Prof	Assoc Prof	Prof							
2	28	44	54							
3	32	61	56							
4	36	52	55							
5	42	54	65							
6	50	62	52							
7	33	45	50							
8	38	46	46							
9										
10										
11										

?

×

Data Analysis

Analysis Tools

Anova: Single Factor

Anova: Two-Factor With Replication

Anova: Two-Factor Without Replication

Correlation

Covariance

Descriptive Statistics

Exponential Smoothing

F-Test Two-Sample for Variances

Fourier Analysis

Histogram

OK

Cancel

Help

Next, select all three columns of data at once for the input range. Check the box that says Labels in first row (only select this if you actually selected the labels in the input range). Change your value of alpha and output range will be one cell reference where you want your output to start, see below.

?

×

Anova: Single Factor

Input

Input Range:

\$A\$1:\$C\$8

Grouped By:

☒ Columns

☐ Rows

☒ Labels in first row

Alpha:

0.01

OK

Cancel

Help

Output options

☒ Output Range:

\$E\$1

☐ New Worksheet Ply:

☐ New Workbook

You get the following output:

Anova: Single Factor						
SUMMARY						
<i>Groups</i>	<i>Count</i>	<i>Sum</i>	<i>Average</i>	<i>Variance</i>		
Asst Prof	7	259	37	53		
Assoc Prof	7	364	52	55.6667		
Prof	7	378	54	35		
ANOVA						
<i>Source of Variation</i>	<i>SS</i>	<i>df</i>	<i>MS</i>	<i>F</i>	<i>P-value</i>	<i>F crit</i>
Between Groups	1208.6667	2	604.3333	12.6195	0.0004	6.0129
Within Groups	862	18	47.8889			
Total	2070.6667	20				

Excel gives both the p-value and critical value so you can use either method when making your decision, but make sure you are comfortable with both.

Summary

The ANOVA test gives evidence that there is a difference between three or more means. The null hypothesis will always have the means equal to one another versus the alternative hypothesis that at least one mean is different. The F-test results are about the difference in means, but the test is actually testing if the variation between the groups is larger than the variation within the groups. If this between group variation is significantly larger than the within groups then we can say there is a statistically significant difference in the population means. Hence, we are always performing a right-tailed F-test for ANOVA. Make sure to only compare the p-value with α and the test statistic to the critical value.

This page titled [11.1: One-Way ANOVA](#) is shared under a [CC BY-SA 4.0](#) license and was authored, remixed, and/or curated by [Rachel Webb](#) via [source content](#) that was edited to the style and standards of the LibreTexts platform.

11.2: Pairwise Comparisons of Means (Post-Hoc Tests)

If you do in fact reject H_0 , then you know that at least two of the means are different. The ANOVA test does not tell which of those means are different, only that a difference exists. Most likely your sample means will be different from each other, but how different do they need to be for there to be a statistically significant difference?

To determine which means are significantly different, you need to conduct further tests. These post-hoc tests include the range test, multiple comparison tests, Duncan test, Student-Newman-Keuls test, Tukey test, Scheffé test, Dunnett test, Fisher's least significant different test, and the Bonferroni test, to name a few. There are more options, and there is no consensus on which test to use. These tests are available in statistical software packages such as R, Minitab and SPSS.

One should **never** use two-sample t -tests from the previous chapter. This would inflate the type I error.

The probability of at least one type I error increases exponentially with the number of groups you are comparing. Let us assume that $\alpha = 0.05$, then the probability that an observed difference between two groups that does not occur by chance is $1 - \alpha = 0.95$. If two comparisons are made, the probability that the observed difference is true is no longer 0.95. The probability is $(1 - \alpha)^2 = 0.9025$, and the $P(\text{Type I Error}) = 1 - 0.9025 = 0.0975$. Therefore, the $P(\text{Type I Error})$ occurs if m comparisons are made is $1 - (1 - \alpha)^m$.

For instance, if we are comparing the means of four groups: There would be $m = {}_4C_2 = 6$ different ways to compare the 4 groups: groups (1,2), (1,3), (1,4), (2,3), (2,4), and (3,4). The $P(\text{Type I Error}) = 1 - (1 - \alpha)^6 = 0.2649$. This is why a researcher should use ANOVA for comparing means, instead of independent t -tests.

There are many different methods to use. Many require special tables or software. We could actually just start with post-hoc tests, but they are a lot of work. If we run an ANOVA and we fail to reject the null hypothesis, then there is no need for further testing and it will save time if you were doing these steps by hand. Most statistical software packages give you the ANOVA table followed by the pairwise comparisons with just a change in the options menu. Keep in mind that Excel is not a statistical software and does not give pairwise comparisons.

We will use the Bonferroni Test, named after the mathematician Carlo Bonferroni. The Bonferroni Test uses the t -distribution table and is similar to previous t -tests that we have used, but adjusts α to the number of comparisons being made.



Carlo Bonferroni

The Bonferroni test is a statistical test for testing the difference between two population means (only done after an ANOVA test shows not all means are equal).

The formula for the Bonferroni test statistic is
$$t = \frac{\bar{x}_i - \bar{x}_j}{\sqrt{MSW \left(\frac{1}{n_i} + \frac{1}{n_j} \right)}}$$

where \bar{x}_i and \bar{x}_j are the means of the samples being compared, n_i and n_j are the sample sizes, and MSW is the within-group variance from the ANOVA table.

The Bonferroni test critical value or p-value is found by using the t -distribution with within degrees of freedom $df_W = N - k$, using an adjusted $\frac{\alpha}{m}$ two-tail area under the t -distribution, where k = number of groups and $m = {}_kC_2$, all the combinations of pairs out of k groups.

Critical Value Method

According to the ANOVA test that we previously performed, there does appear to be a difference in the average age of assistant professors (μ_1), associate professors (μ_2), and full professors (μ_3) at this university.

Source	SS	df	MS	F
Between	1208.6667	2	604.3333	12.6195
Within	862	18	47.8889	
Total	2070.6667	20		

The hypotheses were:

$$H_0 : \mu_1 = \mu_2 = \mu_3$$

$$H_1 : \text{At least one mean differs.}$$

The decision was to reject H_0 , which means there is a significant difference in the mean age. The ANOVA test does not tell us, though, where the differences are. Determine which of the difference between each pair of means is significant. That is, test if $\mu_1 \neq \mu_2$, if $\mu_1 \neq \mu_3$, and if $\mu_2 \neq \mu_3$.

Solution

The alternative hypothesis for the ANOVA was “at least one mean is different.” There will be ${}_3C_2 = 3$ subsequent hypothesis tests to compare all the combinations of pairs (Group 1 vs. Group 2, Group 1 vs. Group 3, and Group 2 vs. Group 3). Note that if you have 4 groups then you would have to do ${}_4C_2 = 6$ comparisons, etc.

Use the t-distribution to find the critical value for the Bonferroni test. The total of all the individual sample sizes $N = 21$ and $k = 3$, and $m = {}_3C_2 = 3$, then the area for both tails would be $\frac{\alpha}{m} = \frac{0.01}{3} = 0.003333$.

This is a two-tailed test so the area in one tail is $\frac{0.003333}{2}$ with $df_W = N - k = 21 - 3 = 18$ gives C.V. = ± 3.3804 . The critical values are really far out in the tail so it is hard to see the shaded area. See Figure 11-3.

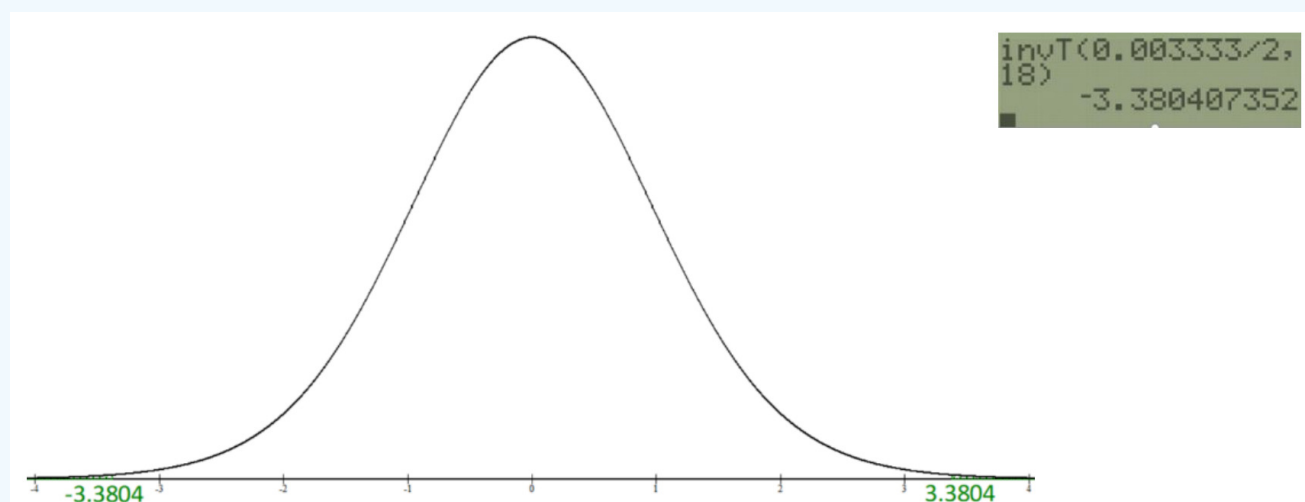


Figure 11-3: t-distribution with critical values.

Compare μ_1 and μ_2 :

$$H_0 : \mu_1 = \mu_2$$

$$H_1 : \mu_1 \neq \mu_2$$

$$\text{The test statistic is } t = \frac{\bar{x}_1 - \bar{x}_2}{\sqrt{MSW\left(\frac{1}{n_1} + \frac{1}{n_2}\right)}} = \frac{37 - 52}{\sqrt{47.8889\left(\frac{1}{7} + \frac{1}{7}\right)}} = -4.0552.$$

Compare the test statistic to the critical value. Since the test statistic $-4.0552 < \text{critical value} = -3.3804$ we reject H_0 .

There is enough evidence to conclude that there is a difference in the average age of assistant and associate professors.

Compare μ_1 and μ_3 :

$$H_0 : \mu_1 = \mu_3$$

$$H_1 : \mu_1 \neq \mu_3$$

$$\text{The test statistic is } t = \frac{\bar{x}_1 - \bar{x}_3}{\sqrt{MSW\left(\frac{1}{n_1} + \frac{1}{n_3}\right)}} = \frac{37 - 54}{\sqrt{(47.8889\left(\frac{1}{7} + \frac{1}{7}\right))}} = -4.5958.$$

Compare the test statistic to the critical value. Since the test statistic $-4.5958 < \text{critical value} = -3.3804$ we reject H_0 .

Reject H_0 , since the test statistic is in the lower tail. There is enough evidence to conclude that there is a difference in the average age of assistant and full professors.

Compare μ_2 and μ_3 :

$$H_0 : \mu_2 = \mu_3$$

$$H_1 : \mu_2 \neq \mu_3$$

$$\text{The test statistic is } t = \frac{\bar{x}_2 - \bar{x}_3}{\sqrt{MSW\left(\frac{1}{n_2} + \frac{1}{n_3}\right)}} = \frac{52 - 54}{\sqrt{(47.8889\left(\frac{1}{7} + \frac{1}{7}\right))}} = -0.5407$$

Compare the test statistic to the critical value. Since the test statistic is between the critical values $-3.3804 < -0.5407 < 3.3804$ we fail to reject H_0 .

Do not reject H_0 , since the test statistic is between the two critical values. There is enough evidence to conclude that there is not a difference in the average age of associate and full professors.

Note: you should get at least one group that has a reject H_0 , since you only do the Bonferroni test if you reject H_0 for the ANOVA. Also, note that the transitive property does not apply. It could be that group 1 = group 2 and group 2 = group 3; this does not mean that group 1 = group 3.

P-Value Method

A research organization tested microwave ovens. At $\alpha = 0.10$, is there a significant difference in the average prices of the three types of oven?

1000-watts	270	245	190	215	250	230		
900-watts	240	135	160	230	250	200	200	210
800-watts	180	155	200	120	140	180	140	130

Solution

The ANOVA was run in Excel.

SUMMARY				
Groups	Count	Sum	Average	Variance
1000-watts	6	1400	233.3333	796.6667
900-watts	8	1625	203.125	1549.554
800-watts	8	1245	155.625	795.9821

ANOVA						
Source of Variation	SS	df	MS	F	P-value	F crit
Between Groups	21729.73	2	10864.87	10.1182	0.001019	2.61
Within Groups	20402.08	19	1073.794			
Total	42131.82	21				

To test if there is a significant difference in the average prices of the three types of oven, the hypotheses are:

$$H_0 : \mu_1 = \mu_2 = \mu_3$$

$$H_1 : \text{At least one mean differs.}$$

Use the Excel output to find the p-value in the ANOVA table of 0.001019, which is less than α so reject H_0 ; there is at least one mean that is different in the average oven prices.

There is a statistically significant difference in the average prices of the three types of oven. Use the Bonferroni test p-value method to see where the differences are.

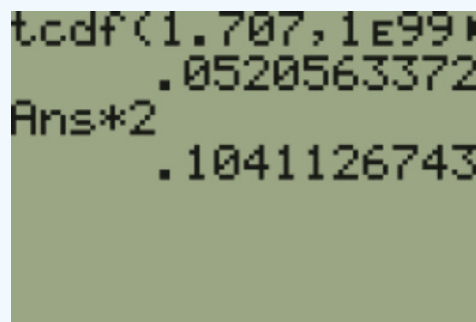
Compare μ_1 and μ_2 :

$$H_0 : \mu_1 = \mu_2$$

$$H_1 : \mu_1 \neq \mu_2$$

$$t = \frac{\bar{x}_1 - \bar{x}_2}{\sqrt{\left(MSW\left(\frac{1}{n_1} + \frac{1}{n_2}\right)\right)}} = \frac{233.3333 - 203.125}{\sqrt{\left(1073.794\left(\frac{1}{6} + \frac{1}{8}\right)\right)}} = 1.7070$$

To find the p-value, find the area in both tails and multiply this area by m . The area to the right of $t = 1.707$, using $df_W = 19$, is 0.0520563. Remember these are always two-tail tests, so multiply this area by 2, to get both tail areas of 0.104113.



```

tcdf(1.707, 1E99, 19)
.0520563372
Ans*2
.1041126743

```

Then multiply this area by $m = {}_3C_2 = 3$ to get a p-value = 0.3123.

```
tcdf(1.707, 1E99▶
.0520563372
Ans*2
.1041126743
Ans*3
.312338023
```

Since the p-value = 0.3123 > $\alpha = 0.10$, we do not reject H_0 . There is a statistically significant difference in the average price of the 1,000- and 900-watt ovens.

Compare μ_1 and μ_3 :

$$H_0 : \mu_1 = \mu_3$$

$$H_1 : \mu_1 \neq \mu_3$$

$$t = \frac{\bar{x}_1 - \bar{x}_3}{\sqrt{\left(MSW\left(\frac{1}{n_1} + \frac{1}{n_3}\right)\right)}} = \frac{233.3333 - 155.625}{\sqrt{\left((1073.794)\left(\frac{1}{6} + \frac{1}{8}\right)\right)}} = 4.3910$$

Use $df_W = 19$ to find the p-value.

```
tcdf(4.391, 1E99▶
1.570414446E -4
Ans*2
3.140828892E -4
Ans*3
9.422486676E -4
```

Since the p-value = (tail areas)*3 = 0.00094 < $\alpha = 0.10$, we reject H_0 . There is a statistically significant difference in the average price of the 1,000- and 800-watt ovens.

Compare μ_2 and μ_3 :

$$H_0 : \mu_2 = \mu_3$$

$$H_1 : \mu_2 \neq \mu_3$$

$$t = \frac{\bar{x}_2 - \bar{x}_3}{\sqrt{\left(MSW\left(\frac{1}{n_2} + \frac{1}{n_3}\right)\right)}} = \frac{203.125 - 155.625}{\sqrt{\left((1073.794)\left(\frac{1}{8} + \frac{1}{8}\right)\right)}} = 2.8991$$

Use $df_W = 19$ to find the p-value (remember that these are always two-tail tests).

```
tcdf(2.8991, 1E99▶
.0045984289
Ans*2
.0091968577
Ans*3
.0275905732
```

Since the p-value = 0.0276 < $\alpha = 0.10$, we reject H_0 . There is a statistically significant difference in the average price of the 900- and 800-watt ovens.

There is a chance that after we multiply the area by the number of comparisons, the p-value would be greater than one. However, since the p-value is a probability we would cap the probability at one.

This is a lot of math! The calculators and Excel do not have post-hoc pairwise comparisons shortcuts, but we can use the statistical software called SPSS to get the following results. We will look specifically at interpreting the SPSS output for Example 11-4.

Descriptives								
Price								
	N	Mean	Std. Deviation	Std. Error	95% Confidence Interval for Mean		Minimum	Maximum
					Lower Bound	Upper Bound		
800	8	155.6250	28.21316	9.97486	132.0382	179.2118	120.00	200.00
900	8	203.1250	39.36437	13.91741	170.2156	236.0344	135.00	250.00
1000	6	233.3333	28.22528	11.52292	203.7127	262.9540	190.00	270.00
Total	22	194.0909	44.79148	9.54958	174.2315	213.9503	120.00	270.00

ANOVA					
Price					
	Sum of Squares	df	Mean Square	F	Sig.
Between Groups	21729.735	2	10864.867	10.118	.001
Within Groups	20402.083	19	1073.794		
Total	42131.818	21			

Multiple Comparisons						
Dependent Variable: Price						
Bonferroni						
(I) Watts	(J) Watts	Mean Difference (I-J)	Std. Error	Sig.	90% Confidence Interval	
					Lower Bound	Upper Bound
1000-Watts	900-Watts	30.20833	17.69717	.312	-10.3959	70.8126
	800-Watts	77.70833*	17.69717	.001	37.1041	118.3126
900-Watts	1000-Watts	-30.20833	17.69717	.312	-70.8126	10.3959
	800-Watts	47.50000*	16.38440	.028	9.9078	85.0922
800-Watts	1000-Watts	-77.70833*	17.69717	.001	-118.3126	-37.1041
	900-Watts	-47.50000*	16.38440	.028	-85.0922	-9.9078

*. The mean difference is significant at the 0.10 level.

Figure 11-4: Multiple Comparisons table.

The first table, labeled "Descriptives", gives descriptive statistics; the second table is the ANOVA table, and note that the p-value is in the column labeled Sig. The Multiple Comparisons table is where we want to look. There are repetitive pairs in the last table, just in a different order.

The first two rows in Figure 11-4 are comparing group 1 with groups 2 and 3. If we follow the first row across under the Sig. column, this gives the p-value = 0.312 for comparing the 1,000- and 900-watt ovens.

1000-Watts	900-Watts	30.20833	17.69717	.312	-10.3959	70.8126
------------	-----------	----------	----------	------	----------	---------

The second row in Figure 11-4 compares the 1,000- and 800-watt ovens, p -value = 0.001.

1000-Watts	900-Watts	30.20833	17.69717	.312	-10.3959	70.8126
	800-Watts	77.70833*	17.69717	.001	37.1041	118.3126

The third row in Figure 11-4 compares the 900- and 1000-watt ovens in the reverse order as the first row; note that the difference in the means is negative but the p -value is the same.

900-Watts	1000-Watts	-30.20833	17.69717	.312	-70.8126	10.3959
-----------	------------	-----------	----------	------	----------	---------

The fourth row in Figure 11-4 compares the 900- and 800-watt ovens, p -value = 0.028.

900-Watts	1000-Watts	-30.20833	17.69717	.312	-70.8126	10.3959
	800-Watts	47.50000*	16.38440	.028	9.9078	85.0922

The last set of rows in Figure 11-4 are again repetitive and give the 800-watt oven compared to the 900- and 1000-watt ovens.

Keep in mind that post-hoc is defined as occurring after an event. A post-hoc test is done after an ANOVA test shows that there is a statistically significant difference. You should get at least one group that has a result of "reject H_0 ", since you only do the Bonferroni test if you reject H_0 for the ANOVA.

This page titled [11.2: Pairwise Comparisons of Means \(Post-Hoc Tests\)](#) is shared under a [CC BY-SA 4.0](#) license and was authored, remixed, and/or curated by [Rachel Webb](#) via [source content](#) that was edited to the style and standards of the LibreTexts platform.

11.3: Two-Way ANOVA (Factorial Design)

Two-way analysis of variance (two-way ANOVA) is an extension of one-way ANOVA. It can be used to compare the means of two independent variables or **factors** from two or more populations. It can also be used to test for interaction between the two independent variables.

We will not be doing the sum of squares calculations by hand. These numbers will be given to you in a partially filled out ANOVA table or an Excel output will be given in the problem.

There are three sets of hypotheses for testing the equality of k population means from two independent variables, and to test for interaction between the two variables (two-way ANOVA):

Row Effect (Factor A):	H_0 : The <u>row variable</u> has no effect on the average _____. H_1 : The <u>row variable</u> has an effect on the average _____.
Column Effect (Factor B):	H_0 : The <u>column variable</u> has no effect on the average _____. H_1 : The <u>column variable</u> has an effect on the average _____.
Interaction Effect (A×B):	H_0 : There is no interaction effect between <u>row variable</u> and <u>column variable</u> on the average _____. H_1 : There is an interaction effect between <u>row variable</u> and <u>column variable</u> on the average _____.

These ANOVA tests are always right-tailed F-tests.

The F-test (for two-way ANOVA) is a statistical test for testing the equality of k independent quantitative population means from two nominal variables, called factors. The two-way ANOVA also tests for interaction between the two factors.

Assumptions:

1. The populations are normal.
2. The observations are independent.
3. The variances from each population are equal.
4. The groups must have equal sample sizes.

The formulas for the F-test statistics are:

Factor 1:	$F_A = \frac{MS_A}{MSE}$ with $df_A = a - 1$ and $df_E = ab(n - 1)$
Factor 2:	$F_B = \frac{MS_B}{MSE}$ with $df_B = b - 1$ and $df_E = ab(n - 1)$
Interaction:	$F_{A \times B} = \frac{MS_{A \times B}}{MSE}$ with $df_{A \times B} = (a - 1)(b - 1)$ and $df_E = ab(n - 1)$

Where:

SS_A = sum of squares for factor A, the row variable

SS_B = sum of squares for factor B, the column variable

$SS_{A \times B}$ = sum of squares for interaction between factor A and B

SSE = sum of squares of error, also called sum of squares within groups

a = number of levels of factor A

b = number of levels of factor B

n = number of subjects in each group

It will be helpful to make a table. Figure 11-5 is called a two-way ANOVA table.

Source	SS = Sum of Squares	df	MS = Mean Square	F
A (row factor)	SS_A	$a - 1$	$MS_A = \frac{SS_A}{df_A}$	$F_A = \frac{MS_A}{MSE}$
B (column factor)	SS_B	$b - 1$	$MS_B = \frac{SS_B}{df_B}$	$F_B = \frac{MS_B}{MSE}$
A×B (interaction)	$SS_{A \times B}$	$(a - 1)(b - 1)$	$MS_{A \times B} = \frac{SS_{A \times B}}{df_{A \times B}}$	$F_{A \times B} = \frac{MS_{A \times B}}{MSE}$
Error (within)	SSE	$ab(n - 1)$	$MSE = \frac{SSE}{df_E}$	
Total	SST	$N - 1$		

Figure 11-5: Two-way ANOVA table template.

Since the computations for the two-way ANOVA are tedious, this text will not cover performing the calculations by hand. Instead, we will concentrate on completing and interpreting the two-way ANOVA tables.

A farmer wants to see if there is a difference in the average height for two new strains of hemp plants. They believe there also may be some interaction with different soil types so they plant 5 hemp plants of each strain in 4 types of soil: sandy, clay, loam and silt. At $\alpha = 0.01$, analyze the data shown, using a two-way ANOVA as started below in Figure 11-6. See below for raw data.

	Sandy	Clay	Loam	Silt
Strain A	60	54	80	62
	53	63	82	76
	58	62	62	55
	62	71	88	48
	57	76	71	61
Strain B	36	62	68	63
	41	61	72	65
	54	77	71	72
	65	53	82	71
	53	64	86	63

Source	<i>SS</i>	<i>df</i>	<i>MS</i>	F
Strain	12.1			
Soil Type	2501			
Interaction	268.1			
Error				
Total	5108			

Figure 11-6: Data and initial ANOVA table.

Solution

First, find the missing values for the ANOVA table in Figure 11-6. The sum of squares should add up to the total in the *SS* column of 5108.

Subtract the 3 sum of squares that were already given in the table from the total sum of squares to find the missing error sum of squares: $5108 - 12.1 - 2501 - 268.1 = 2326.8$.

Find the degrees of freedom for each category.

There are 2 types of hemp strains so $a = 2$ and the $df_A = 2 - 1 = 1$.

There are 4 soil types so $b = 4$ and the $df_B = 4 - 1 = 3$.

The interaction $df_{A \times B} = (2 - 1)(4 - 1) = 3$.

There are 5 plants within each group so $n = 5$, and $df_E = 2 \cdot 4(5 - 1) = 32$.

The total df should add up to $N - 1$. There are 8 groups of 5 so there are 40 data points all together; $df_{Total} = 39$. Fill in your *SS* and df to the ANOVA table and then divide the sum of squares by df to get the mean squares. See below.

Source	<i>SS</i>	<i>df</i>	<i>MS</i>	F
Strain	12.1	1	12.1	
Soil Type	2501	3	833.6667	
Interaction	268.1	3	89.3667	
Error	2326.8	32	72.7125	
Total	5108	39		

Next, find the test statistic for by dividing the *MS* for each category by the *MSE*. For the row effect $F_A = 12.1/72.7125 = 0.1664$ for the column effect $F_B = 833.6667/72.7125 = 11.4652$ and for the interaction effect $F_{A \times B} = 89.3667/72.7125 = 1.2290$ Add these to complete the ANOVA table.

Source	<i>SS</i>	<i>df</i>	<i>MS</i>	<i>F</i>
Strain	12.1	1	12.1	0.1664
Soil Type	2501	3	833.6667	11.4652
Interaction	268.1	3	89.3667	1.229
Error	2326.8	32	72.7125	
Total	5108	39		

There are three hypothesis tests that we are performing: the strain of hemp plant has an effect on the mean plant height (row effect), the type of soil has an effect on the mean plant height (column effect), and the interaction effect between strain of hemp plant and soil type on the mean plant height.

Row Effect-Factor A:

H_0 : The strain of hemp plant has no effect on the mean plant height.

H_1 : The strain of hemp plant has an effect on the mean plant height.

Test Statistic: $F_A = 0.1664$.

Critical Value: Use an F-distribution with $\alpha = 0.01$ right-tail area, $df_A = 1$ and $df_E = 32$.

The critical value is 7.4993. See Figure 11-7.

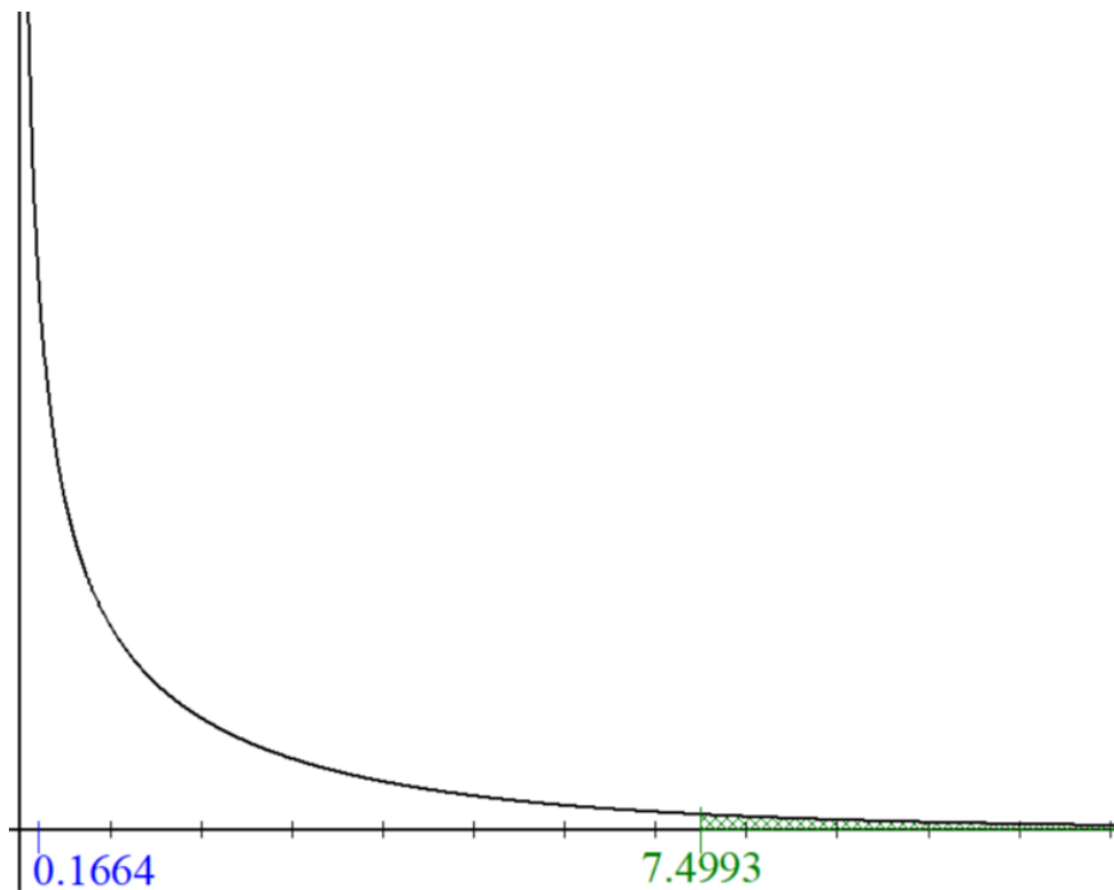


Figure 11-7: Graph of F-distribution for the row effect (plant strain).

The test statistic of 0.1664 is less than the critical value and not in the shaded tail; therefore, do not reject H_0 . There is no significant difference in the mean plant height between the two hemp strains.

Column Effect-Factor B:

H_0 : The type of soil has no effect on the mean plant height.

H_1 : The type of soil has an effect on the mean plant height.

Test Statistic: $F_B = 11.4652$

Critical Value: Use an F-distribution with $\alpha = 0.01$ right-tail area, $df_B = 3$ and $df_E = 32$. The critical value is 4.4594.

Interaction Effect-Factor A \times B

H_0 : There is no interaction effect between the strain of hemp and the soil type on the mean plant height.

H_1 : There is an interaction effect between the strain of hemp and the soil type on the mean plant height.

Test Statistic: $F_{A \times B} = 1.229$ Figure 11-8: Graph of F-distribution for the column effect (soil type).

The test statistic is greater than the critical value and is in the shaded tail; therefore, reject H_0 . The type of soil has a significant effect on the mean plant height.

Critical Value: Use an F-distribution with $\alpha = 0.01$ right-tail area, $df_{A \times B} = 3$ and $df_E = 32$. The critical value is 4.4594.

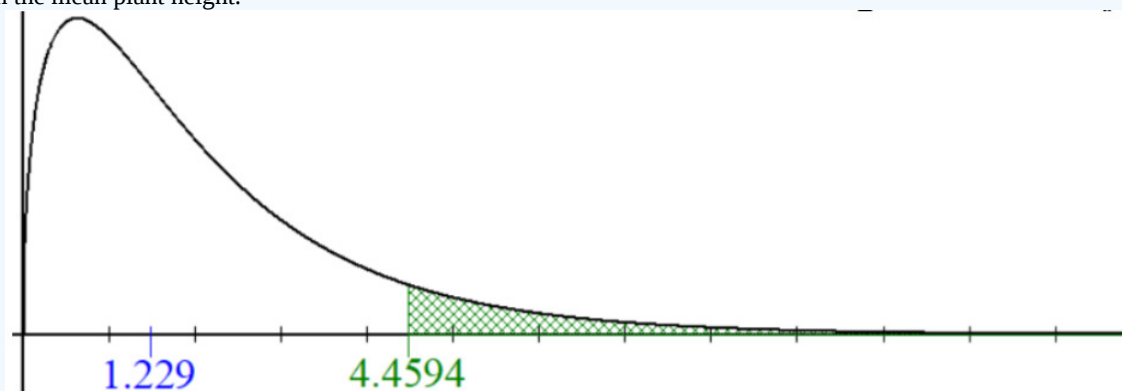


Figure 11-9: Graph of F-distribution for the interaction effect.

The test statistic is not in the shaded tail; therefore, do not reject H_0 . There is no significant interaction effect between the hemp strain and the soil type on the mean plant height.

Rough drawings from memory were futile. He didn't even know how long it had been, beyond Ford Prefect's rough guess at the time that it was "a couple of million years" and he simply didn't have the maths. Still, in the end he worked out a method which would at least produce a result. He decided not to mind the fact that with the extraordinary jumble of rules of thumb, wild approximations and arcane guesswork he was using he would be lucky to hit the right galaxy, he just went ahead and got a result. He would call it the right result. Who would know?

As it happened, through the myriad and unfathomable chances of fate, he got it exactly right, though he of course would never know that. He just went up to London and knocked on the appropriate door. "Oh. I thought you were going to phone me first."

(Adams, 2002)

This page titled [11.3: Two-Way ANOVA \(Factorial Design\)](#) is shared under a [CC BY-SA 4.0](#) license and was authored, remixed, and/or curated by [Rachel Webb](#) via [source content](#) that was edited to the style and standards of the LibreTexts platform.

11.4: Chapter 11 Formulas

One-Way ANOVA

$$H_0 : \mu_1 = \mu_2 = \mu_3 = \dots = \mu_k$$

H_1 : At least one mean is different.

Source	SS = Sum of Squares	df	MS = Mean Square	F
Between (Factor)	$\sum n_i (\bar{x}_i - \bar{x}_{GM})^2$	$k - 1$	$MSB = \frac{SSB}{k-1}$	$F = \frac{MSB}{MSW}$
Within (Error)	$\sum (n_i - 1) s_i^2$	$N - k$	$MSW = \frac{SSW}{N-k}$	
Total	SST	$N - 1$		

\bar{x}_i = sample mean from the i^{th} group

n_i = sample size of the i^{th} group

k = number of groups

s_i^2 = sample variance from the i^{th} group

$$N = n_1 + n_2 + \dots + n_k$$

$$\bar{x}_{GM} = \frac{\sum x_i}{N}$$

Bonferroni Test

$$H_0 : \mu_i = \mu_j$$

$$H_1 : \mu_i \neq \mu_j$$

$$\text{Bonferroni test statistic: } t = \frac{\bar{x}_i - \bar{x}_j}{\sqrt{MSW \left(\frac{1}{n_i} + \frac{1}{n_j} \right)}}$$

Multiply p-value by $m = {}_k C_2$, divide area for critical value by $m = {}_k C_2$.

Two-Way ANOVA

Row Effect (Factor A):	H_0 : The <u>row variable</u> has no effect on the average _____. H_1 : The <u>row variable</u> has an effect on the average _____.
Column Effect (Factor B):	H_0 : The <u>column variable</u> has no effect on the average _____. H_1 : The <u>column variable</u> has an effect on the average _____.
Interaction Effect (A×B):	H_0 : There is no interaction effect between <u>row variable</u> and <u>column variable</u> on the average _____. H_1 : There is an interaction effect between <u>row variable</u> and <u>column variable</u> on the average _____.

Source	SS	df	MS	F
A (row factor)	SS_A	$a - 1$	$MS_A = \frac{SS_A}{df_A}$	$F_A = \frac{MS_A}{MSE}$

Source	SS	df	MS	F
B (column factor)	SS_B	$b - 1$	$MS_B = \frac{SS_B}{df_B}$	$F_B = \frac{MS_B}{MSE}$
$A \times B$ (interaction)	$SS_{A \times B}$	$(a - 1)(b - 1)$	$MS_{A \times B} = \frac{SS_{A \times B}}{df_{A \times B}}$	$F_{A \times B} = \frac{MS_{A \times B}}{MSE}$
Error (within)	SSE	$ab(n - 1)$	$MSE = \frac{SSE}{df_E}$	
Total	SST	$N - 1$		

This page titled [11.4: Chapter 11 Formulas](#) is shared under a [CC BY-SA 4.0](#) license and was authored, remixed, and/or curated by [Rachel Webb](#).

11.5: Chapter 11 Exercises

? Exercises

1. What does the acronym ANOVA stand for?

- a) Analysis of Variance
- b) Analysis of Means
- c) Analyzing Various Means
- d) Analysis of Variance
- e) Anticipatory Nausea and Vomiting
- f) Average Noise Variance

2. What would the test statistic equal if $MSB = MSW$?

- a) -1
- b) 0
- c) 1
- d) 4
- e) 1.96

3. A researcher would like to test to see if there is a difference in the average profit between 5 different stores. Which are the correct hypotheses for an ANOVA?

- a) $H_0 : \mu_1 = \mu_2 = \mu_3$ $H_1 : \text{At least one mean is different.}$
- b) $H_0 : \mu_1 = \mu_2 = \mu_3 = \mu_4 = \mu_5$ $H_1 : \mu_1 \neq \mu_2 \neq \mu_3 \neq \mu_4 \neq \mu_5$
- c) $H_0 : \mu_1 \neq \mu_2 \neq \mu_3 \neq \mu_4 \neq \mu_5$ $H_1 : \mu_1 = \mu_2 = \mu_3 = \mu_4 = \mu_5$
- d) $H_0 : \sigma_B^2 \neq \sigma_W^2$ $H_1 : \sigma_B^2 = \sigma_W^2$
- e) $H_0 : \mu_1 = \mu_2 = \mu_3 = \mu_4 = \mu_5$ $H_1 : \text{At least one mean is different}$

4. An ANOVA was run to test to see if there was a significant difference in the average cost between three different brands of snow skis. Random samples for each of the three brands were collected from different stores. Assume the costs are normally distributed. At $\alpha = 0.05$, test to see if there is a difference in the means. State the hypotheses, fill in the ANOVA table to find the test statistic, compute the p-value, state the decision and summary.

Source	SS	df	MS	F
Between	25.3633	2		
Within	23.3617	15		
Total	48.725	17		

5. An ANOVA test was run for the per-pupil costs for private school tuition for three counties in the Portland, Oregon, metro area. Assume tuition costs are normally distributed. At $\alpha = 0.05$, test to see if there is a difference in the means.

SUMMARY				
Groups	n	Sum	Average	Variance
Clackamas County	11	147215	13383.1818	36734231.36
Multnomah County	12	182365	15197.0833	33731956.63
Washington County	10	124555	12455.5	40409869.17

- a) State the hypotheses.
- b) Fill out the ANOVA table to find the test statistic.

ANOVA				
Source	<i>SS</i>	<i>df</i>	<i>MS</i>	<i>F</i>
Between Groups				
Within Groups				
Total				

c) Compute the p-value.

d) State the correct decision and summary.

6. Cancer is a terrible disease. Surviving may depend on the type of cancer the person has. To see if the mean survival time for several types of cancer are different, data was collected on the survival time in days of patients with one of these cancers in advanced stage. The data is from "Cancer survival story," 2013. (Please realize that this data is from 1978. There have been many advances in cancer treatment, so do not use this data as an indication of survival rates from these cancers.) Does the data indicate that there is a difference in the mean survival time for these types of cancer? Use a 1% significance level.

SUMMARY				
<i>Groups</i>	<i>n</i>	<i>Sum</i>	<i>Average</i>	<i>Variance</i>
Stomach	13	3718	286	119930.333
Bronchus	17	3597	211.5882	44040.6324
Colon	17	7776	457.4118	182473.007
Ovary	6	5306	884.3333	1206875.47
Breast	11	15355	1395.9091	1535038.49

a) State the hypotheses.

b) Fill in an ANOVA table to find the test statistic.

c) Compute the p-value.

d) State the correct decision and summary.

7. What does the Bonferroni comparison test for?

a) The analysis of between and within variance.

b) The difference between all the means at once.

c) The difference between two pairs of mean.

d) The sample size between the groups.

8. True or false: The Bonferroni test should only be done when you reject the null hypothesis F-test?

9. A manufacturing company wants to see if there is a significant difference in three types of plastic for a new product. They randomly sample prices for each of the three types of plastic and run an ANOVA. Use $\alpha = 0.05$ to see if there is a statistically significant difference in the mean prices. Part of the computer output is shown below.

SUMMARY				
<i>Groups</i>	<i>n</i>	<i>Sum</i>	<i>Average</i>	<i>Variance</i>
Plastic A	39	512	13.12821	15.48313
Plastic B	41	679	16.56098	1.302439
Plastic C	34	470	13.82353	22.08913

- State the hypotheses.
- Fill in the ANOVA table to find the test statistic.

ANOVA				
Source of Variation	<i>SS</i>	<i>df</i>	<i>MS</i>	<i>F</i>
Between Groups				
Within Groups				
Total	1631.939	113		

- Compute the critical value.
- State the decision and summary.
- Which group(s) are significantly different based on the Bonferroni test?

10. A manager on an assembly line wants to see if they can speed up production by implementing a new switch for their conveyor belts. There are four switches to choose from and replacing all the switches along the assembly line will be quite costly. They test out each of the four designs and record assembly times. Use $\alpha = 0.05$ to see if there is a statistically significant difference in the mean times.

ANOVA				
Source of Variation	<i>SS</i>	<i>df</i>	<i>MS</i>	<i>F</i>
Between Groups	80.3951	3		
Within Groups	875.9111	87		
Total	956.3062	90		

- State the hypotheses.
- Fill in the ANOVA table to find the test statistic.
- Compute the critical value.
- State the correct decision and summary.
- Should a post-hoc Bonferroni test be done? Why?
 - No, since the p-value $> \alpha$ there is no difference in the means.
 - Yes, we should always perform a post-hoc test after an ANOVA
 - No, since we already know that there is a difference in the means.
 - Yes, since the p-value $< \alpha$ we need to see where the differences are.
- All four new switches are significantly faster than the current switch method. Of the four new types of switches, switch 3 cost the least amount to implement. Which of the 4, if any, should the manager choose?

- i. The manager should stay with the old switch method since we failed to reject the null hypothesis.
- ii. The manager should switch to any of the four new switches since we rejected the null hypothesis.
- iii. The manager should randomly pick from switch types 1, 2 or 4.
- iv. Since there is no statistically significant difference in the mean time they should choose switch 3 since it is the least expensive.

For exercises 11-16, Assume that all distributions are normal with equal population standard deviations, and the data was collected independently and randomly. Show all 5 steps for hypothesis testing. If there is a significant difference is found, run a Bonferroni test to see which means are different.

- a) State the hypotheses.
- b) Compute the test statistic.
- c) Compute the critical value or p-value.
- d) State the decision.
- e) Write a summary.

11. Is a statistics class's delivery type a factor in how well students do on the final exam? The table below shows the average percent on final exams from several randomly selected classes that used the different delivery types. Use a level of significance of $\alpha = 0.10$.

Face-to-Face	Blended	Online
79	70	100
77	58	66
75	55	91
68	74	91
95	76	98
78	83	74
69	66	57
65		88
65		

12. The dependent variable is the number of times a photo gets a like on social media. The independent variable is the subject matter, selfie or people, landscape, meme, or a cute animal. The researcher is exploring whether the type of photo makes a difference on the mean number of likes. A random sample of photos were taken from social media. Test to see if there is a significant difference in the means using $\alpha = 0.05$.

Selfie or People	Landscape	Meme	Cute Animal
9	17	13	14
16	15	12	10
18	13	15	13
6	14	20	16
10	17	21	18
16	9	19	14
17	24	21	13
12	23	22	19
18	21	14	17
7	6	20	13
14	17	10	18

13. The dependent variable is movie ticket prices, and the groups are the geographical regions where the theaters are located (suburban, rural, urban). A random sample of ticket prices were taken from randomly chosen states. Test to see if there is a significant difference in the means using $\alpha = 0.05$.

Suburb	Rural	Urban
11.25	11.75	11.25
11	9.5	11.25
11	11.25	12.25
12.25	10.5	9.75
11.25	10	10.75
10	10	11.75
8.75	11.5	12
11	10.75	12.5
10.75	10.25	11
10.75	9.25	10.75
11.5	10.75	12
9.75	10	12
12.25	13	10.75
9.75	11	10.5
9.25	12	12.75

14. Recent research indicates that the effectiveness of antidepressant medication is directly related to the severity of the depression (Khan, Brodhead, Kolts & Brown, 2005). Based on pre-treatment depression scores, patients were divided into four groups based on their level of depression. After receiving the antidepressant medication, depression scores were measured again and the amount of improvement was recorded for each patient. The following data are similar to the results of the study. Use a significance level of $\alpha = 0.05$. Test to see if there is a difference in the mean scores.

Low	Moderate	High	Moderate	Moderately Severe	Severe
1.3		2.3		1.7	2.6
0.8		0.3		2.7	4.4
2.2		1.2		2.1	3.6
1.6		2.1		2.7	3.1
0.5		1.3		1.7	2.1
1.4		1.7		1.8	2
2.1		2.4		3.1	2.4
1.3		1.4		2.1	2.9
0		3.7		1.5	3.2
4		3.8		3.5	1.9
2		2.8		1.9	3.1
2.4		2.5		1.5	3
3.8		1.5		2.9	2
2.2		2.7		1.6	2.2
2.3		1.2		2.1	3.7
1.5		0.5		3.4	3.5
0.5		2		2.5	3.4
2.1		3.4		2.9	3
0.5		0.9		2.2	4.8
1.7		1.6		4.4	2.8
0.8		3.5		1.8	1.5
1.3		2.5		1.5	6.1
1.3		2.8		3.4	1.7
0.8		3.7		2.9	0.2
2.5		1.8		2.7	1.9

15. An ANOVA was run to test to see if there was a significant difference in the average cost between three different types of fabric for a new clothing company. Random samples for each of the three fabric types was collected from different manufacturers. At $\alpha = 0.10$, run an ANOVA test to see if there is a difference in the means.

SUMMARY

<i>Groups</i>	<i>n</i>	<i>Sum</i>	<i>Average</i>	<i>Variance</i>
A	34	10608	312	204.1212
B	37	11655	315	97.5
C	32	9600	300	2019.548

16. Three students, Linda, Tuan, and Javier, are given laboratory rats for a nutritional experiment. Each rat's weight is recorded in grams. Linda feeds her 9 rats Formula A, Tuan feeds his 9 rats Formula B, and Javier feeds his 9 rats Formula C. At the end of a specified time-period, each rat is weighed again, and the net gain in grams is recorded. Using a significance level of 0.10, test to see if there is a difference in the mean weight gain for the three formulas.

Formula A	Formula B	Formula C
44.2	10.5	42.8
39.3	52.8	41
29.5	49.2	32.8
47.9	32.1	36.5
37.3	33.5	50.2
53.6	37.3	39.7
31.2	27.2	43.6
49.9	13.1	47.7
45.1	26.3	44.2

17. For a two-way ANOVA, a row factor has 3 different levels, a column factor has 4 different levels. There are 15 data values in each group. Find the following.

- The degrees of freedom for the row effect.
- The degrees of freedom for the column effect.
- The degrees of freedom for the interaction effect.

18. Fill out the following two-way ANOVA table.

Source	Sum of Squares	d.f.	Mean Square	F
Row Factor	408.33	2		
Column Factor	8.33	3		
Interaction Factor	2187	6		
Error				
Total	26872.99	49		

19. Fill out the following two-way ANOVA table.

Source	Sum of Squares	d.f.	Mean Square	<i>F</i>
Row Factor	4357.17	2		
Column Factor	341.33	1		
Interaction Factor	129.17	2		
Error	1256	6		
Total	6083.67	11		

20. Fill out the following two-way ANOVA table.

Source	Sum of Squares	d.f.	Mean Square	<i>F</i>
Row Factor	538.78	2		
Column Factor	6108.44	2		
Interaction Factor		4		
Error	1375.5	9		
Total	8268.28	17		

21. Fill out the following two-way ANOVA table.

Source	Sum of Squares	d.f.	Mean Square	<i>F</i>
Row Factor	10.08	1		
Column Factor	720.75	1		
Interaction Factor				
Error	33.33	8		
Total	904.24			

22. Fill out the following two-way ANOVA table.

Source	Sum of Squares	d.f.	Mean Square	<i>F</i>
Row Factor	227.556	1		
Column Factor	11.444	2		
Interaction Factor	7.444			
Error				
Total	463.111	17		

23. A professor is curious if class size and format for which homework is administered has an impact on students' test grades. In a particular semester, she samples 4 students in each category below and records their grade on the department-wide final exam. The data are recorded below. Assume the variables are normally distributed. Run a two-way ANOVA using $\alpha = 0.05$.

	Less Than 30 Students	More Than 30 Students
Paper HW	92, 85, 72, 84	64, 72, 80, 88
Online HW	91, 90, 75, 78	82, 55, 62, 71

Source	Sum of Squares	d.f.	Mean Square	<i>F</i>
HW Factor	68.0625			
Class Size Factor	540.5625			
Interaction Factor	76.5625			
Error				
Total	1821.9375			

24. A study was conducted to observe the impact of young adults eating a diet that is high in healthy fats. A random sample of young adults was instructed to eat a particular menu for a month. They were then tested to check a combination of recall skills, reflexes, and physical fitness and scored from 1-10 based on performance. They were divided into two groups, one eating a menu that is high in healthy fats, and the other low in healthy fats. They were also divided based on age. The data are recorded below. Assume the variables are normally distributed. Run a two-way ANOVA using $\alpha = 0.05$.

	High Fats	Low Fats
Age 14-16	9, 7, 8, 8, 8	5, 8, 6, 3, 4
Age 17-19	10, 9, 7, 7, 8	7, 2, 4, 6, 6
Age 20-22	8, 10, 10, 9, 9	8, 7, 5, 8, 6

Source	Sum of Squares	d.f.	Mean Square	F
Age Factor	13.067			
Diet Factor	58.8			
Interaction Factor	0.8			
Error	49.2			
Total	121.867			

25. A door-to-door sales company sells three types of vacuums. The company manager is interested to find out if the type of vacuum sold has an effect on whether a sale is made, as well as what time of day the sale is made. She samples 36 sales representatives and divides them into the following categories, then records their sales (in hundreds of dollars) for a week. Assume the variables are normally distributed. Run a two-way ANOVA using $\alpha = 0.05$.

	Vacuum 1	Vacuum 2	Vacuum 3
Morning	5.3, 4.2, 3.1, 4.8	6.2, 5.9, 7.1, 5.5	4.2, 3.9, 6.1, 4.8
Afternoon	4.8, 4.7, 5.1, 3.7	6.8, 7.2, 6.6, 5.3	4.1, 4.1, 5.3, 3.9
Evening	4.8, 4.9, 5.5, 5.7	7.5, 8.2, 9.1, 6.4	4.1, 5.2, 5.9, 4.3

Source	Sum of Squares	d.f.	Mean Square	F
Time of Day				
Vacuum Type	36.2872			
Interaction	2.3878			
Error	17.8675			
Total	62.3897			

26. A customer shopping for a used car is curious if the price of a vehicle varies based on type of vehicle and location of used car dealership. She samples 5 vehicles in each category below and records the price of each vehicle. Each vehicle is in similar shape in regards to age, mileage, and condition. A two-way ANOVA test was run and the information from the test is summarized in the table below. State all 3 hypotheses, critical values, decisions and summaries using $\alpha = 0.05$.

	SUV	Truck	Sedan
Urban Location	22,564	25,460	14,560
	21,150	26,800	13,255
	23,564	27,100	16,812
	25,400	25,230	15,500
	28,100	24,150	15,854
Rural Location	20,640	24,200	12,541
	19,200	25,198	13,600
	21,400	23,299	12,452
	18,246	25,600	11,500
	19,452	26,410	13,989

Source	Sum of Squares	d.f.	Mean Square	<i>F</i>
Location	47557466.13	1	47557466.13	19.622
Vehicle	677943740.9	2	338971870.4	139.862
Interaction	15926222.87	2	7963111.433	3.286
Error	58166875.6	24	2423619.817	
Total	799594305.5	29		

27. A sample of patients are tested for cholesterol level and divided into categories by age and by location of residence in the United States. The data are recorded below. Assume the variables are normally distributed. A two-way ANOVA test was run and the information from the test is summarized in the table below. State all 3 hypotheses, critical values, decisions and summaries using $\alpha = 0.05$.

	East Coast	Midwest	South	West Coast
18-35 yrs.	185, 193, 172	202, 193, 187	220, 218, 198	184, 199, 203
36-53 yrs.	202, 218, 199	205, 219, 215	205, 224, 229	205, 187, 190
54+ yrs.	222, 231, 206	215, 209, 197	225, 233, 214	184, 212, 216

Source	Sum of Squares	d.f.	Mean Square	<i>F</i>
Age Factor	1922.000	2	961.000	7.863
Location Factor	2093.333	3	697.778	5.709
Interaction Factor	1067.333	6	177.889	1.455
Error	2933.333	24	122.222	
Total	8016.000	35		

28. The employees at a local nursery swear by a certain variety of tomato seed and a certain variety of fertilizer. To test their instincts, they take a sample of 3 varieties of tomato seed and 4 varieties of fertilizer and find the following yield of tomatoes from each tomato plant. Assume the variables are normally distributed. Run a two-way ANOVA using $\alpha = 0.05$.

	Fertilizer 1	Fertilizer 2	Fertilizer 3	Fertilizer 4
Seed 1	23, 25, 29	21, 20, 22	26, 20, 22	27, 25, 24
Seed 2	21, 25, 30	29, 19, 25	24, 21, 20	23, 27, 28
Seed 3	19, 18, 15	14, 16, 18	20, 17, 17	16, 19, 18

Source	Sum of Squares	d.f.	Mean Square	F
Seed Factor	367.1667			
Fertilizer Factor	47.4167			
Interaction Factor	36.8333			
Error Factor	185.3333			
Total	636.75			

29. An obstetrician feels that her patients who are taller and leaner before becoming pregnant typically have quicker deliveries. She samples 3 women in each of the following categories of Height and Body Mass Index and records the time they spent in the pushing phase of labor in minutes. All women in the sample had a natural vaginal delivery and it was their first childbirth. The data are recorded below. Assume the variables are normally distributed. Run a two-way ANOVA using $\alpha = 0.05$.

	BMI 20-24	BMI 25-29	BMI 30-35
58 – 63 in.	143, 95, 162	212, 51, 146	208, 162, 84
64 – 69 in.	165, 45, 130	133, 42, 110	125, 137, 162
70 – 75 in.	89, 102, 35	46, 33, 114	95, 125, 110

Source	Sum of Squares	d.f.	Mean Square	F
Height Factor	14814.5185			
BMI Factor	6216.5185			
Interaction Factor	1016.5926			
Error Factor	42910.6667			
Total	64958.2963			

Solutions to Odd-Numbered Exercises

1. a

3. e

5. $H_0 : \mu_1 = \mu_2 = \mu_3$; H_1 : At least one mean is different.

F = 0.5902; p-value = 0.5605.

Do not reject H_0 . There is not enough evidence to support the claim that there is a difference in the mean per-pupil costs for private school tuition for three counties in the Portland, Oregon, metro area.

7. c

9. a) $H_0 : \mu_A = \mu_B = \mu_C$; H_1 : At least one mean is different.

b) $F = 10.64046$

c) $F_\alpha = 3.0781$

d) Reject H_0 . There is enough evidence to support the claim that there is a difference in the mean price of the three types of plastic.

e) $H_0 : \mu_A = \mu_B$; $H_1 : \mu_A \neq \mu_B$; p-value=0; reject H_0 . There is significant difference in price between plastics A and B. $H_0 : \mu_A = \mu_C$; $H_1 : \mu_A \neq \mu_C$; p-value = 1; do not reject H_0 . There is not a significant difference in price

between plastics A and C. $H_0 : \mu_B = \mu_C$; $H_1 : \mu_B \neq \mu_C$; p-value = 0.003; reject H_0 . There is significant difference in price between plastics B and C.

11. $H_0 : \mu_1 = \mu_2 = \mu_3$; H_1 : At least one mean is different. $F = 2.5459$; p-value = 0.0904; do not reject H_0 . There is not enough evidence to support the claim that there is a difference in the mean movie ticket prices by geographical regions.

13. $H_0 : \mu_1 = \mu_2 = \mu_3$; H_1 : At least one mean is different. $F = 2.7121$; p-value = 0.0896; reject H_0 . There is sufficient evidence to support the claim that course delivery type is a factor in final exam score.

15. $H_0 : \mu_A = \mu_B = \mu_C$; H_1 : At least one mean is different. $F = 2.895$; p-value = 0.06; reject H_0 . 0. There is sufficient evidence to support the claim that there is a difference in the mean cost between three different types of fabric.

$H_0 : \mu_A = \mu_B$; $H_1 : \mu_A \neq \mu_B$; p-value = 1; do not reject H_0 . There is not a significant difference in the mean cost of fabrics A and B. $H_0 : \mu_A = \mu_C$; $H_1 : \mu_A \neq \mu_C$; p-value = 0.222; do not reject H_0 . There is not a significant difference in the mean cost of fabrics A and C. $H_0 : \mu_B = \mu_C$; $H_1 : \mu_B \neq \mu_C$; p-value = 0.07; reject H_0 . There is significant difference in the mean cost of fabrics B and C.

17. a) $df_A = 2$, $df_E = 168$

b) $df_B = 3$, $df_E = 168$

c) $df_{A \times B} = 6$, $df_E = 168$

19.

Source	SS	d.f.	MS	F
Row	4357.17	2	2178.585	10.4073
Col.	341.33	1	341.33	1.6306
Int.	129.17	2	64.585	0.3085
Error	1256	6	209.3333	
Total	6083.67	11		

21.

Source	SS	d.f.	MS	F
Row	10.08	1	10.08	2.4194
Col.	720.75	1	720.75	172.9973
Int.	140.08	1	140.08	33.6226
Error	33.33	8	4.16625	
Total	904.24	11		

23. H_0 : The format of the homework (paper vs. online) has no effect on the mean test grade. H_1 : The format of the homework (paper vs. online) has an effect on the mean test grade. $F = 0.7185$; $CV = F.INV.RT(0.05, 1, 12) = 4.7472$; do not reject H_0 . There is not enough evidence to support the claim that the format of the homework (paper vs. online) has an effect on the mean test grade.

H_0 : The class size has no effect on the mean test grade. H_1 : The class size has an effect on the mean test grade. $F = 5.7064$; $CV = F.INV.RT(0.05, 1, 12) = 4.7472$; reject H_0 . There is enough evidence to support the claim that the class size has an effect on the mean test grade.

H_0 : There is no interaction effect between the format of the homework (paper vs. online) and the class size on the mean test grade. H_1 : There is an interaction effect between the format of the homework (paper vs. online) and the class size on the mean test grade. $F = 0.8082$; $CV = F.INV.RT(0.05, 1, 12) = 4.7472$; do not reject H_0 . There is not

enough evidence to support the claim that there is an interaction effect between the format of the homework (paper vs. online) and the class size on the mean test grade.

25. H_0 : The time of day has no effect on the mean number of vacuum sales. H_1 : The time of day has an effect on the mean number of vacuum sales. $F = 4.4179$; $CV = F.INV.RT(0.05,2,27) = 3.3541$; reject H_0 . There is enough evidence to support the claim that the time of day has an effect on the mean number of vacuum sales.

H_0 : The type of vacuum has no effect on the mean number of vacuum sales. H_1 : The type of vacuum has an effect on the mean number of vacuum sales. $F = 27.4172$; $CV = F.INV.RT(0.05,2,27) = 3.3541$; reject H_0 . There is enough evidence to support the claim that the type of vacuum has an effect on the mean number of vacuum sales.

H_0 : There is no interaction effect between time of day and type of vacuum on the mean number of vacuum sales. H_1 : There is an interaction effect between time of day and type of vacuum on the mean number of vacuum sales. $F = 0.9021$; $CV = F.INV.RT(0.05,4,27) = 2.7278$; do not reject H_0 . There is not enough evidence to support the claim that there is an interaction effect between time of day and type of vacuum on the mean number of vacuum sales.

27. H_0 : Age has no effect on the mean cholesterol level. H_1 : Age has an effect on the mean cholesterol level. $F = 7.863$; $CV = F.INV.RT(0.05,2,24) = 3.4028$; reject H_0 . There is enough evidence to support the claim that age has an effect on the mean cholesterol level.

H_0 : Location has no effect on the mean cholesterol level. H_1 : Location has no effect on the mean cholesterol level. $F = 5.709$; $CV = F.INV.RT(0.05,3,24) = 3.0087$; reject H_0 . There is enough evidence to support the claim that the location has an effect on the mean cholesterol level.

H_0 : There is no interaction effect between age and location on the mean cholesterol level. H_1 : There is an interaction effect between age and location on the mean cholesterol level. $F = 1.455$; $CV = F.INV.RT(0.05,6,24) = 2.5082$; do not reject H_0 . There is not enough evidence to support the claim that there is an interaction effect between age and location on the mean cholesterol level.

29. H_0 : Height has no effect on the mean delivery time. H_1 : Height has an effect on the mean delivery time. $F = 3.2798$; $CV = F.INV.RT(0.05,2,19) = 3.5219$; do not reject H_0 . There is not enough evidence to support the claim that height has an effect on the mean delivery time.

H_0 : BMI has no effect on the mean delivery time. H_1 : BMI has an effect on the mean delivery time. $F = 1.3763$; $CV = F.INV.RT(0.05,2,19) = 3.5219$; do not reject H_0 . There is not enough evidence to support the claim that BMI has an effect on the mean delivery time.

H_0 : There is no interaction effect between the height and BMI on the mean delivery time. H_1 : There is an interaction effect between the height and BMI on the mean delivery time. $F = 0.1125$; $CV = F.INV.RT(0.05,4,19) = 2.8951$; do not reject H_0 . There is not enough evidence to support the claim that there is an interaction effect between the height and BMI on the mean delivery time.

CHAPTER OVERVIEW

12: Correlation and Regression

12.1: Correlation

12.1.1: Scatterplots

12.1.2: Hypothesis Test for a Correlation

12.2: Simple Linear Regression

12.2.1: Hypothesis Test for Linear Regression

12.2.2: Residuals

12.2.3: Coefficient of Determination

12.2.4: Prediction

12.2.5: Outliers

12.2.6: Conclusion - Simple Linear Regression

12.3: Multiple Linear Regression

12.4: Chapter 12 Formulas

12.5: Chapter 12 Exercises

This page titled [12: Correlation and Regression](#) is shared under a [CC BY-SA 4.0](#) license and was authored, remixed, and/or curated by [Rachel Webb](#) via [source content](#) that was edited to the style and standards of the LibreTexts platform.

12.1: Correlation

We are often interested in the relationship between two variables. This chapter determines whether a linear relationship exists between sets of quantitative data and making predictions for a population—for instance, the relationship between the number of hours of study time and an exam score, or smoking and heart disease.

A predictor variable (also called the independent or explanatory variable; usually we use the letter x) explains or causes changes in the response variable. The predictor variable can be manipulated or changed by the researcher.

A response variable (also called the dependent variable; usually we use the letter y) measures the outcome of a study. The different outcomes for a dependent variable are measured or observed by the researcher. For instance, suppose we are interested in how much time spent studying affects the scores on an exam. In this study, study time is the predictor variable, and exam score is the response variable.

In data from an experiment, it is much easier to know which variable we should use for the independent and dependent variables. This can be harder to distinguish in observational data. Think of the dependent variable as the variable that you are trying to learn about.

If we were observing the relationship between unemployment rate and economic growth rate, it may not be clear which variable should be x and y . Do we want to predict the unemployment rate or the economic growth rate? One should never jump to a cause and effect reasoning with observational data. Just because there is a strong relationship between unemployment rate and economic growth rate does not mean that one causes the other to change directly. There may be many other contributing factors to both of these rates changing at the same time, such as retirements or pandemics.

This page titled [12.1: Correlation](#) is shared under a [CC BY-SA 4.0](#) license and was authored, remixed, and/or curated by [Rachel Webb](#) via [source content](#) that was edited to the style and standards of the LibreTexts platform.

12.1.1: Scatterplots

A scatterplot shows the relationship between two quantitative variables measured on the same individuals.

- The predictor variable is labeled on the horizontal or x -axis.
- The response variable is labeled on the vertical or y -axis.

How to Interpret a Scatterplot:

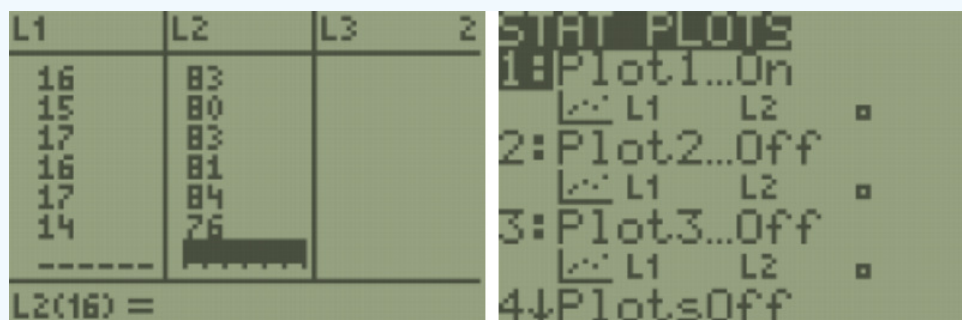
- Look for the overall pattern and for deviations from that pattern.
- Look for outliers, individual values that fall outside the overall pattern of the relationship.
- A positive linear relation results when larger values of one variable are associated with larger values of the other.
- A negative linear relation results when larger values of one variable are associated with smaller values of the other.
- A scatterplot has no association if no obvious linear pattern is present.

Use technology to make a scatterplot for the following sample data set:

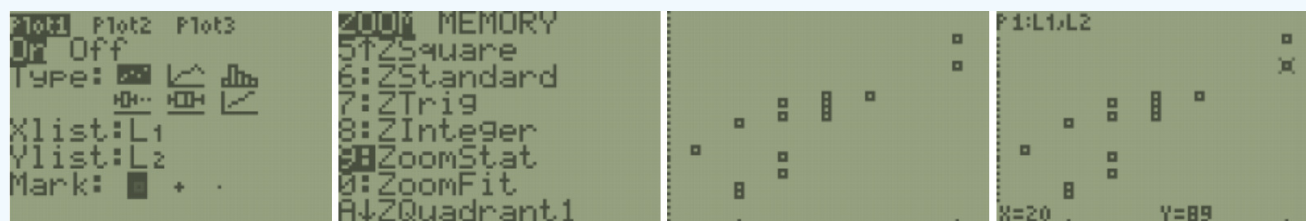
Hours Studied for Exam 20 16 20 18 17 16 15 17 15 16 15 17 16 17 14 Grade on Exam 89 72 93 84 81 75 70 82 69 83 80 83 81 84 76

Solution

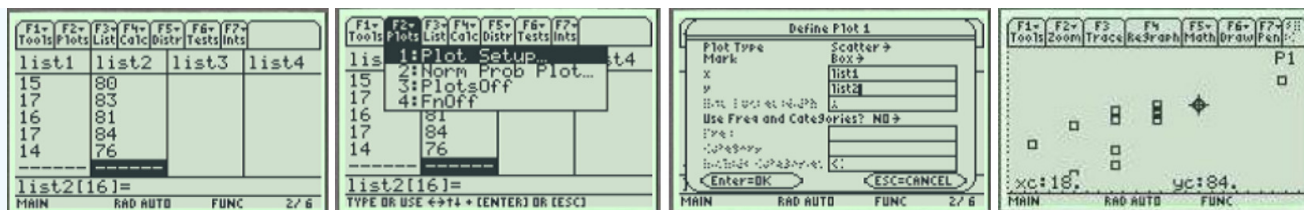
TI-84: On the TI-84 press the [STAT] key and then the [EDIT] function; type the x values into L1 and the y values into L2. Press [Y=] and clear any equations that are in the y -editor. Press [2nd] then [STAT PLOT] (above the [Y=] button.) Press 4 or scroll down to PlotsOff and press enter. Press [ENTER] once more to turn off all of the existing plots.



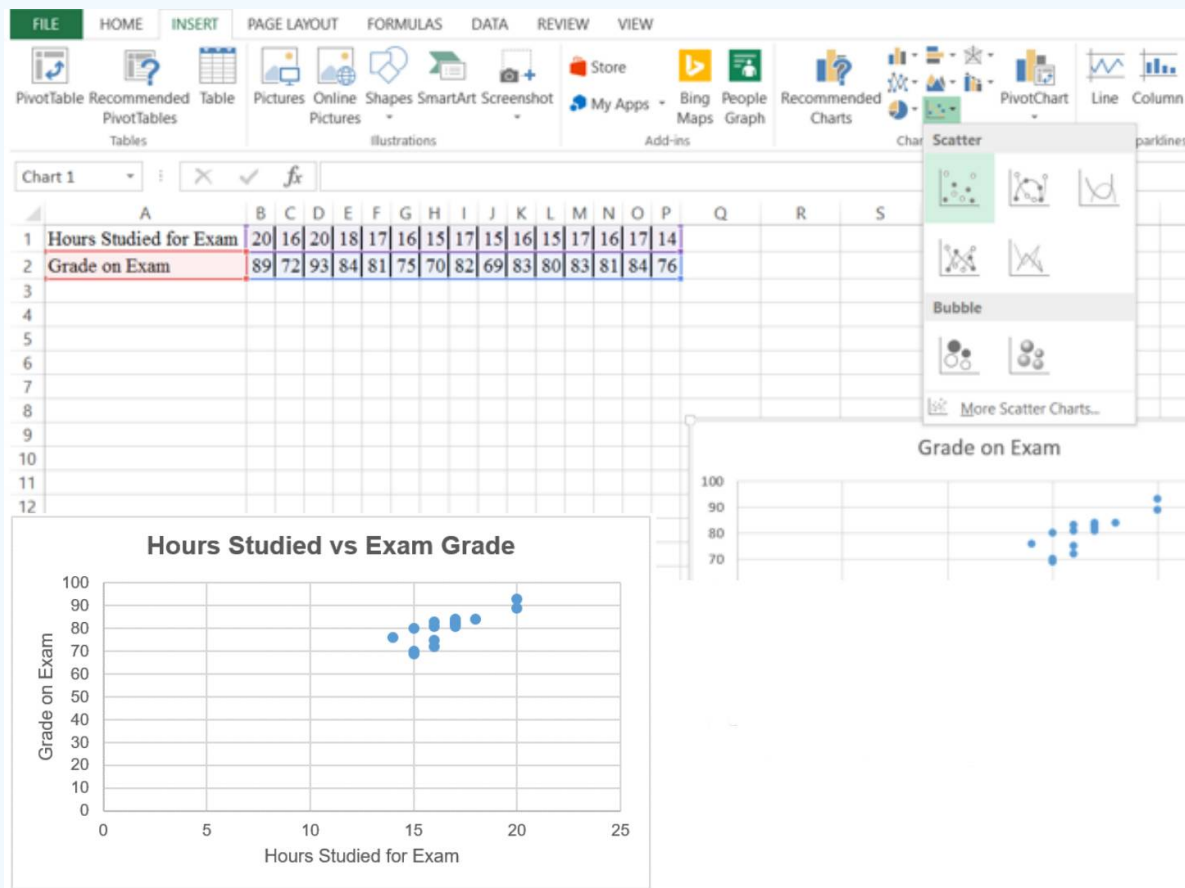
Press [2nd], then [STAT PLOT], then press 1 or hit [ENTER] and select Plot1. Select On and press [ENTER] to activate plot 1. For “Type” select the first graph that looks like a scatterplot and press [ENTER]. For “Xlist” enter the list where your explanatory variable data is stored. For our example, enter L1. For “Ylist” enter the list where your response variable data is stored. For our example, enter L2. Press [ZOOM] then press 9 or scroll down to ZoomStat and press [ENTER]. Press Trace and you can use your arrow keys to see the coordinates of each point.



TI-89: Press [♦] then [F1] (the Y=) and clear any equations that are in the y -editor. Open the Stats/List Editor. Enter all x -values in one list. Enter all corresponding y -values in a second list. Double check that the data you entered is correct. In the Stats/List Editor select F2 for the Plots menu. Use cursor keys to highlight 1:Plot Setup. Make sure that the other graphs are turned off by pressing F4 button to remove the check marks. Under “Plot 1” press F1 for the Define menu. In the “Plot Type” menu select “Scatter.” In the “x” space type in the name of your list with the x variable without space: for our example, “list1.” In the “y” space type in the name of your list with the y variable without space: for our example, “list2.” Press [ENTER] twice and you will be returned to the Plot Setup menu. Press F5 ZoomData to display the graph. Press F3 Trace and use the arrow keys to scroll along the different points.




Excel: Copy the data over to Excel in either two adjacent rows or columns. Select the data, select the Insert tab, then select Scatter, select the first scatter plot.



Then add labels for your axis and change the title to produce the completed scatter plot.

Correlation Coefficient

The sample correlation coefficient measures the direction and strength of the linear relationship between two quantitative variables. There are several different types of correlations. We will be using the Pearson Product Moment Correlation Coefficient (PPMCC). The PPMCC is named after biostatistician Karl Pearson. We will just use the lower-case r for short when we want to find the correlation coefficient, and the Greek letter ρ , pronounced “rho,” (rhymes with sew) when referring to the population correlation coefficient.



Karl Pearson

Interpreting the Correlation:

- A positive r indicates a positive association (positive linear slope).
- A negative r indicates a negative association (negative linear slope).
- r is always between -1 and 1 , inclusive.
- If r is close to 1 or -1 , there is a strong linear relationship between x and y .
- If r is close to 0 , there is a weak linear relationship between x and y . There may be a non-linear relation or there may be no relation at all.
- Like the mean, r is strongly affected by outliers. Figure 12-1 gives examples of correlations with their corresponding scatterplots.

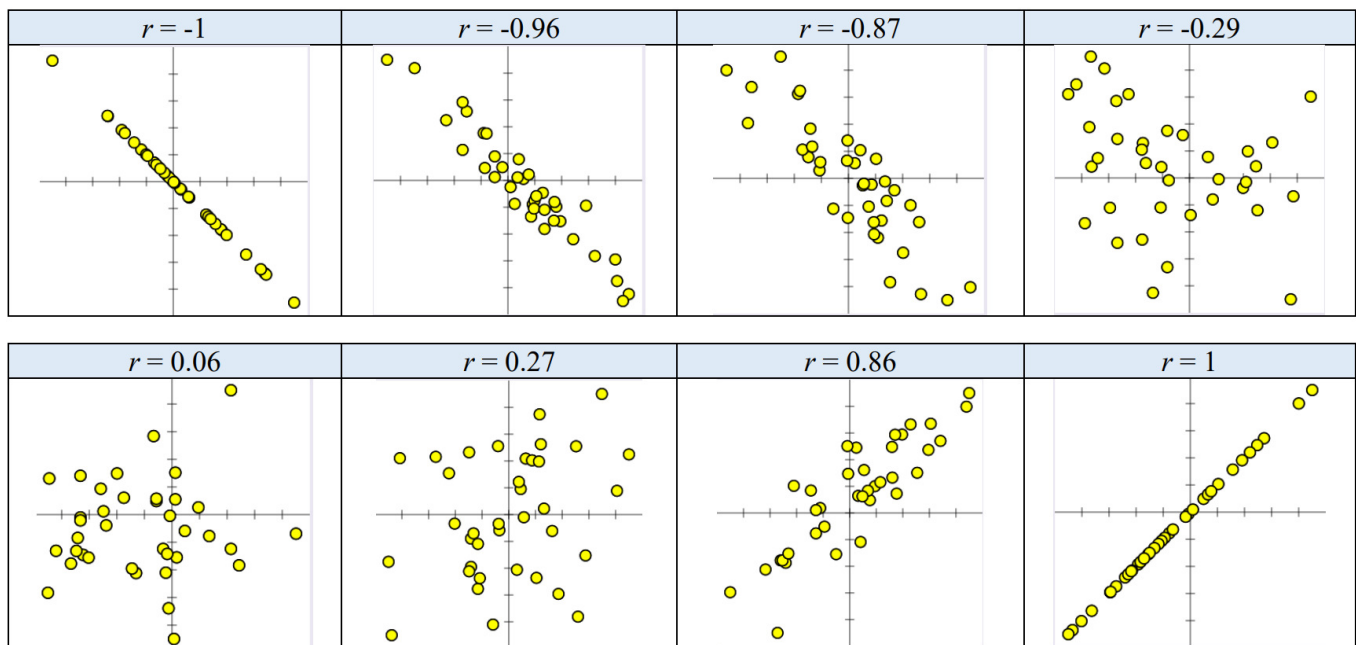
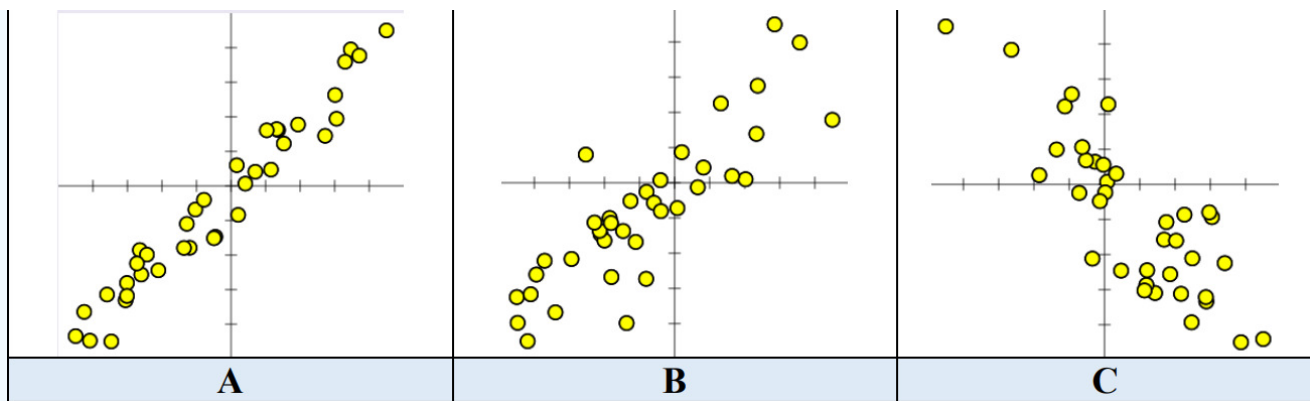


Figure 12-1: Sample scatterplots with various values of r .

When you have a correlation that is very close to -1 or 1 , then the points on the scatter plot will line up in an almost perfect line. The closer r gets to 0 , the more scattered your points become.

Take a moment and see if you can guess the approximate value of r for the scatter plots below.



Solution

Scatterplot A: $r = 0.98$, Scatterplot B: $r = 0.85$, Scatterplot C: $r = -0.85$.

When r is equal to -1 or 1 all the dots in the scatterplot line up in a straight line. As the points disperse, r gets closer to zero. The correlation tells the direction of a linear relationship only. It does not tell you what the slope of the line is, nor does it recognize nonlinear relationships. For instance, in Figure 12-2, there are three scatterplots overlaid on the same set of axes. All three data sets would have $r = 1$ even though they all have different slopes.

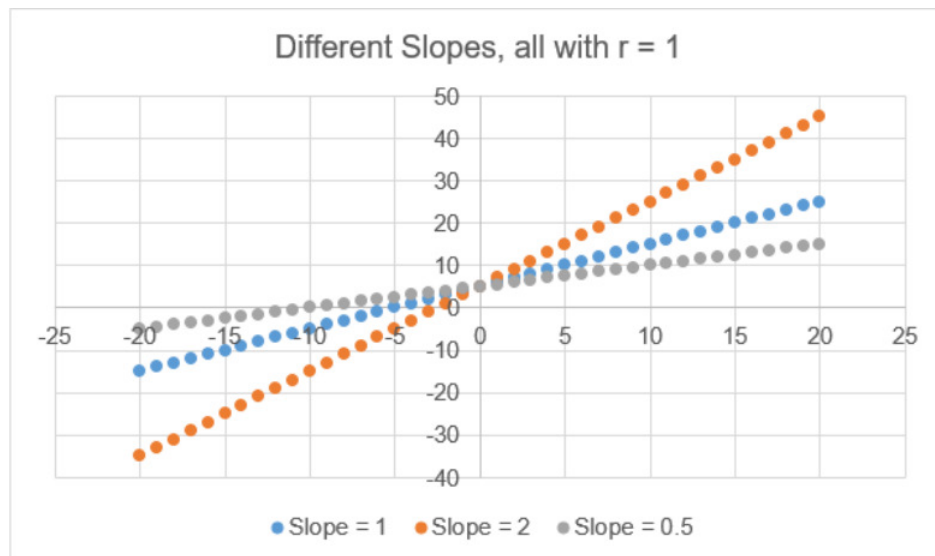


Figure 12-2: Any straight line has $r = 1$.

For the next example in Figure 12-3, $r = 0$ would indicate no linear relationship; however, there is clearly a non-linear pattern with the data.

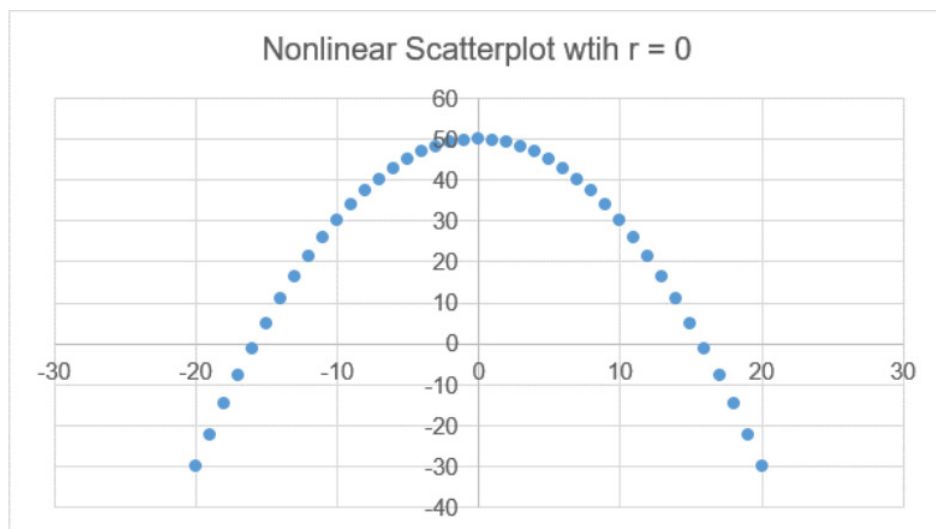


Figure 12-3: A plot of points in a parabola, a non-linear pattern, has $r = 0$.

Figure 12-4 shows a correlation $r = 0.874$, which is pretty close to one, indicating a strong linear relationship. However, there is an outlier, called a leverage point, which is inflating the value of the slope. If you remove the outlier then $r = 0$, and there is no up or down trend to the data.

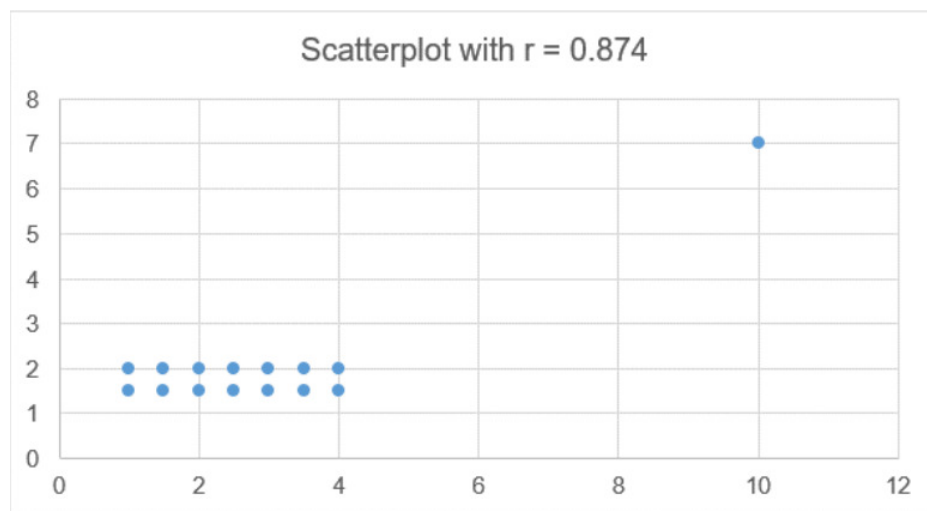


Figure 12-4: A single outlier can significantly change the value of r .

Calculating Correlation

To calculate the correlation coefficient by hand we would use the following formula.

Sample Correlation Coefficient

$$r = \frac{\sum ((x_i - \bar{x})(y_i - \bar{y}))}{\sqrt{\left(\sum (x_i - \bar{x})^2\right) \left(\sum (y_i - \bar{y})^2\right)}} = \frac{SS_{xy}}{\sqrt{(SS_{xx} \cdot SS_{yy})}} \quad (12.1.1.1)$$

Instead of doing all of these sums by hand we can use the output from summary statistics. Recall that the formula for a variance of a sample is $s_x^2 = \frac{\sum (x_i - \bar{x})^2}{n-1}$. If we were to multiply both sides by the degrees of freedom, we would get $\sum (x_i - \bar{x})^2 = (n-1)s_x^2$. We use these sums of squares $\sum (x_i - \bar{x})^2$ frequently, so for shorthand we will use the notation $SS_{xx} = \sum (x_i - \bar{x})^2$. The same would hold true for the y variable; just changing the letter, the variance of y would be $s_y^2 = \frac{\sum (y_i - \bar{y})^2}{n-1}$, therefore $SS_{yy} = (n-1)s_y^2$.

The numerator of the correlation formula is taking in the horizontal distance of each data point from the mean of the x values, times the vertical distance of each point from the mean of the y values. This is time-consuming to find so we will use an algebraically equivalent formula $\sum((x_i - \bar{x})(y_i - \bar{y})) = \sum(xy) - n \cdot \bar{x}\bar{y}$, and for short we will use the notation $SS_{xy} = \sum(xy) - n \cdot \bar{x}\bar{y}$.

To start each problem, use descriptive statistics to find the sum of squares.

$$SS_{xx} = (n-1)s_x^2$$

$$SS_{yy} = (n-1)s_y^2$$

$$SS_{xy} = \text{sum}(xy) - n \cdot \bar{x}\bar{y}$$

Use the following data to calculate the correlation coefficient.

Hours Studied for Exam 20 16 20 18 17 16 15 17 15 16 15 17 16 17 14 Grade on Exam 89 72 93 84 81 75 70 82 69 83 80 83 81 84 76

Solution

We could show all the work the long way by hand using the shortcut formula. On the TI-83 press the [STAT] key and then the [EDIT] function, type the x values into L_1 and the y values into L_2 . Press the [STAT] key again and arrow over to highlight [CALC], select 2-Var Stats, then press [ENTER]. This will return the descriptive stats.

The TI calculator can run descriptive statistics and quickly get everything we need to find the sum of squares. Go to STAT > CALC > 2-Var Stats. For TI-83, you may need to enter your list names separated by a comma, for example 2-Var Stats L_1, L_2 then hit enter. On the TI-89, open the Stats/List Editor. Enter all x -values in one list. Enter all corresponding y -values in a second list. Press F4, then select 2-Var Stats, then press [ENTER]. This will return the descriptive stats. Use the down arrow to see everything.

EDIT [CHG] TESTS 1:1-Var Stats 2:2-Var Stats 3:Med-Med 4:LinReg(ax+b) 5:QuadReg 6:CubicReg 7:QuartReg	2-Var Stats Xlist:L1 Ylist:L2 FreqList: Calculate	2-Var Stats $\bar{x}=16.6$ $\Sigma x=249$ $\Sigma x^2=4175$ $Sx=1.723783215$ $\sigma x=1.6653328$ $n=15$	2-Var Stats $\bar{y}=80.13333333$ $\Sigma y=1202$ $\Sigma y^2=96952$ $Sy=6.717425811$ $\sigma y=6.489649879$ $\Sigma xy=20087$
--	---	--	--

Once you do this the statistics are stored in your calculator so you can use the VARS key, go to Statistics, then select the standard deviation for x , and repeat for the y -variable. This will reduce rounding errors by using exact values. For the SS_{xy} you can also use the stored sum of xy and means.

14*	Y-VARS 1:Window... 2:Zoom... 3:GDB... 4:Picture... 5:Statistics... 6:Table... 7:String...	Σ EQ TEST PTS 1:n 2: \bar{x} 3: Sx 4: σx 5: \bar{y} 6: Sy 7: σy	14* Sx^2 41.6
Σ EQ TEST PTS 1:n 2: \bar{x} 3: Sx 4: σx 5: \bar{y} 6: Sy 7: σy	14* Sy^2 631.7333333	Σxy EQ TEST PTS 1: Σx 2: Σx^2 3: Σy 4: Σy^2 5: Σxy	$\Sigma xy - 15 \cdot \bar{x} \cdot \bar{y}$ 133.8

This gives the following results:

$$SS_{xx} = (n-1)s_x^2 = (15-1)1.723783215^2 = 41.6$$

$$SS_{yy} = (n-1)s_y^2 = (15-1)6.717425811^2 = 631.7333$$

$$SS_{xy} = \sum(xy) - n\bar{x}\bar{y} = 20087 - (15 \cdot 16.6 \cdot 80.133333) = 133.8$$

Note that both SS_{xx} and SS_{yy} will always be positive, but SS_{xy} could be negative or positive. For the TI-89, you will see the sum of squares at the very bottom of the descriptive statistics: $\sum (x - \bar{x})^2 = 41.6$ and $\sum (y - \bar{y})^2 = 631.7333$

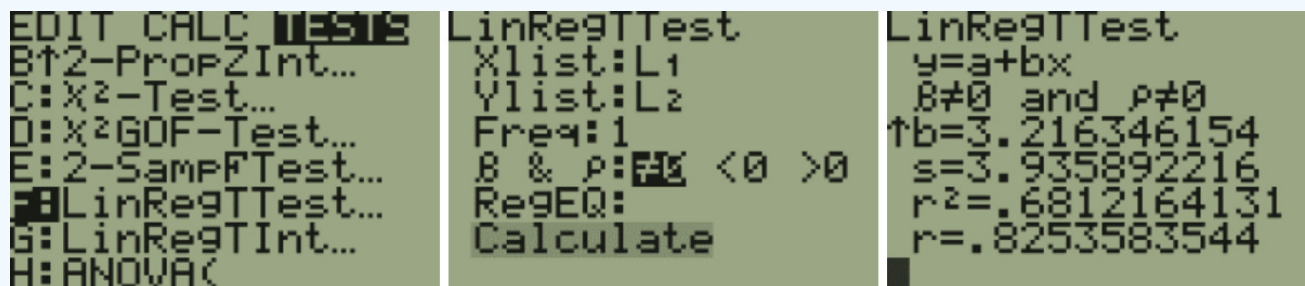
To find the correlation, substitute the three sums of squares into the formula to get:

$$r = \frac{SS_{xy}}{\sqrt{(SS_{xx} \cdot SS_{yy})}} = \frac{133.8}{\sqrt{(41.6 \cdot 631.7333)}} = 0.8524$$
 Try this now on your calculator to see if you are getting your order of operations correct.

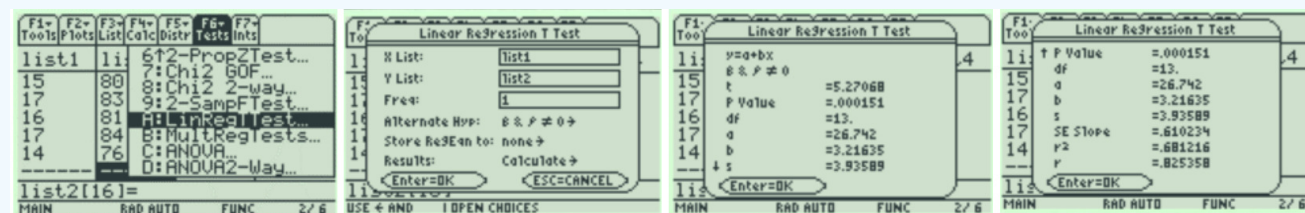
For our example, $r = 0.8254$ is close to 1; therefore it looks like there is positive linear relationship between the number of hours studying for an exam and the grade on the exam.

Most software has a built-in correlation function.

TI-84: On the TI-83 press the [STAT] key and then the [EDIT] function, type the x values into L_1 and the y values into L_2 . Press the [STAT] key again and arrow over to highlight [TEST], select LinRegTTest, then press [ENTER]. The default is Xlist: L_1 , Ylist: L_2 , Freq:1, β and $\rho \neq 0$. Arrow down to Calculate and press the [ENTER] key. Scroll down to the bottom until see you r .



TI-89: On the TI-89, open the Stats/List Editor. Enter all x -values in one list. Enter all corresponding y -values in a second list. Press F6, then select LinRegTTest, then press [ENTER]. Scroll down to the bottom of the output to see r .



Excel:

	A	B	C	D	E	F	G	H	I	J	K	L	M	N	O	P	Q	R	S	T
1	Hours Studied for Exam	20	16	20	18	17	16	15	17	15	16	15	17	16	17	14				
2	Grade on Exam	89	72	93	84	81	75	70	82	69	83	80	83	81	84	76		=CORREL(B1:P1,B2:P2)		

$r = \text{CORREL}(\text{array1}, \text{array2}) = \text{CORREL}(B1:P1, B2:P2) = 0.8254$

When is a correlation statistically significant? The next subsection shows how to run a hypothesis test for correlations.

This page titled [12.1.1: Scatterplots](#) is shared under a [CC BY-SA 4.0](#) license and was authored, remixed, and/or curated by [Rachel Webb](#).

12.1.2: Hypothesis Test for a Correlation

One should perform a hypothesis test to determine if there is a statistically significant correlation between the independent and the dependent variables. The population correlation coefficient ρ (this is the Greek letter rho, which sounds like “row” and is not a p) is the correlation among all possible pairs of data values (x, y) taken from a population.

We will only be using the two-tailed test for a population correlation coefficient ρ . The hypotheses are:

$$H_0 : \rho = 0$$

$$H_1 : \rho \neq 0$$

The null-hypothesis of a two-tailed test states that there is no correlation (there is not a linear relation) between x and y . The alternative-hypothesis states that there is a significant correlation (there is a linear relation) between x and y .

The t-test is a statistical test for the correlation coefficient. It can be used when x and y are linearly related, the variables are random variables, and when the population of the variable y is normally distributed.

$$\text{The formula for the t-test statistic is } t = r \sqrt{\frac{n-2}{1-r^2}}.$$

Use the t-distribution with degrees of freedom equal to $df = n - 2$.

Note the $df = n - 2$ since we have two variables, x and y .

Test to see if the correlation for hours studied on the exam and grade on the exam is statistically significant. Use $\alpha = 0.05$.

Hours Studied for Exam 20 16 20 18 17 16 15 17 15 16 15 17 16 17 14 Grade on Exam 89 72 93 84 81 75 70 82 69 83 80 83 81 84 76

Solution

The hypotheses are:

$$H_0 : \rho = 0$$

$$H_1 : \rho \neq 0$$

Find the critical value using $df = n - 2 = 13$ for a two-tailed test $\alpha = 0.05$ inverse t-function to get the critical values ± 2.160 . Draw the sampling distribution and label the critical values as shown in Figure 12-5.

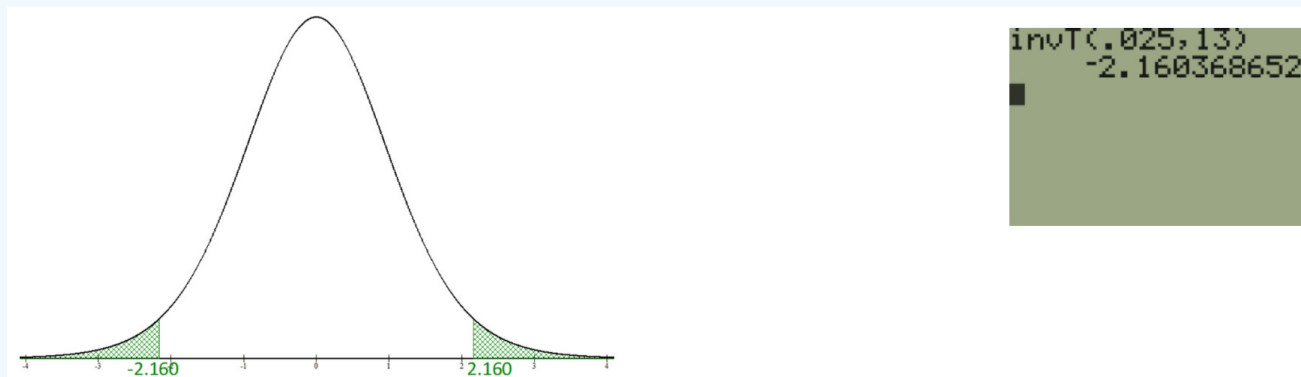


Figure 12-5: Sampling distribution of t-function with critical values labeled.

Next, find the test statistic $t = r \sqrt{\frac{n-2}{1-r^2}} = 0.8254 \sqrt{\frac{13}{1-0.8254^2}} = 5.271$, which is greater than 2.160 and in the rejection region.

Summary: At the 5% significance level, there is enough evidence to support the claim that there is a statistically significant linear relationship (correlation) between the number of hours studied for an exam and exam scores.

The p-value method could also be used to find the same decision. We will use technology shortcuts for the p-value method. The p-value = $2 \cdot P(t \geq 5.271 | H_0 \text{ is true}) = 0.000151$, which is less than $\alpha = 0.05$; therefore we reject H_0 .

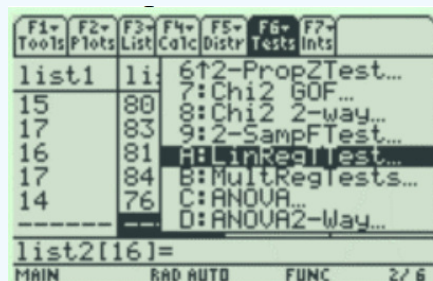
Alternatively, we could test to see if the slope was equal to zero. If the slope is zero then the correlation will also be zero. The setup of a test is a little different, but we get the same results. Most software packages report the test statistic and p-value for a slope. This test is introduced in the next section.

TI-84: Enter the data in L_1 and L_2 . Press the [STAT] key, arrow over to the [TESTS] menu, arrow down to the option [LinRegTTest] and press the [ENTER] key. The default is Xlist: L_1 , Ylist: L_1 , Freq:1, β and $\rho \neq 0$. Arrow down to Calculate and press the [ENTER] key. The calculator returns the t-test statistic, p-value and the correlation coefficient = r . Note the p-value = 0.0001513, is less than $\alpha = 0.05$; therefore reject H_0 , as there is a significant correlation.

```

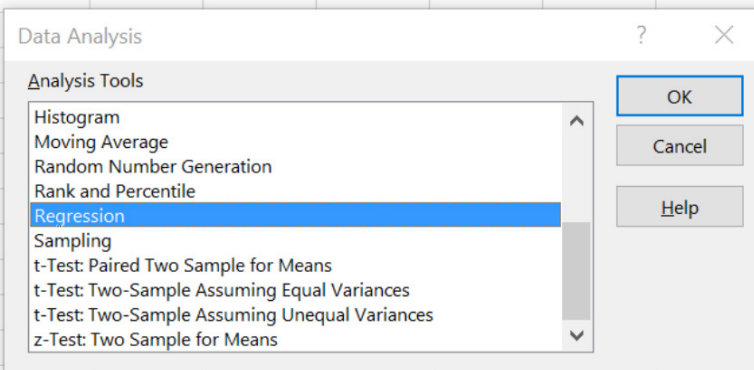
LinRegTTest
y=a+bx
 $\beta \neq 0$  and  $\rho \neq 0$ 
t=5.270675167
P=1.5134617E-4
df=13
 $\downarrow$ a=26.74198718
    
```

TI-89: Enter the data in List1 and List2. In the Stats/List Editor select F6 for the Tests menu. Use cursor keys to select A:LinRegTTest and press [Enter]. In the “X List” space type in the name of your list with the x variable without space, for our example “list1” or use [2nd] [Var-Link] and highlight list1. In the “Y List” space type in the name of your list with the y variable without space, for our example “list2” or use [2nd] [Var-Link] and highlight list2. Under the “Alternate Hyp” menu select the β and $\rho \neq 0$ option, which is the same as the question’s alternative hypothesis statement, then press the [ENTER] key, arrow down to [Calculate] and press the [ENTER] key. The calculator returns the t-test statistic, p-value, and the correlation = r .



Excel: Type the data into two columns in Excel. Select the Data tab, then Data Analysis, then choose Regression and select OK.

	A	B	C	D	E	F	G	H	I
1	Hours Studied for Exam	Grade on Exam							
2		20	89						
3		16	72						
4		20	93						
5		18	84						
6		17	81						
7		16	75						
8		15	70						
9		17	82						
10		15	69						
11		16	83						
12		15	80						
13		17	83						
14		16	81						
15		17	84						
16		14	76						
17									



Be careful here. The second column is the y range, and the first column is the x range. Only check the Labels box if you highlight the labels in the input range. The output range is one cell reference where you want the output to start, and then select OK.

Regression

?

×

Input

Input Y Range:

\$B\$1:\$B\$16

Input X Range:

\$A\$1:\$A\$16

☒ Labels

☐ Constant is Zero

☐ Confidence Level:

95

%

Output options

☒ Output Range:

\$D\$1

☐ New Worksheet Ply:

☐ New Workbook

Residuals

☐ Residuals

☐ Residual Plots

☐ Standardized Residuals

☐ Line Fit Plots

Normal Probability

☐ Normal Probability Plots

OK

Cancel

Help

Figure 12-6 shows the regression output.

Regression Statistics	
Multiple R	0.825358
R Square	0.681216
Adjusted R Square	0.656695
Standard Error	3.935892
Observations	15

← Absolute value of the correlation coefficient $|r|$

← Sample size n

ANOVA					
	<i>df</i>	<i>SS</i>	<i>MS</i>	<i>F</i>	<i>Significance F</i>
Regression	1	430.3471	430.3471	27.78002	0.000151
Residual	13	201.3862	15.49125		
Total	14	631.7333			

	<i>Coefficients</i>	<i>Standard Error</i>	<i>t Stat</i>	<i>P-value</i>
Intercept	26.74199	10.18074	2.626725	0.020917
Hours Studied for Exam	3.216346	0.610234	5.270675	0.000151

← t-test statistic ← p-value

Figure 12-6: Excel-generated regression output.

When you reject H_0 , the slope is significantly different from zero. This means there is a significant relationship (correlation) between x and y , and you can then find a regression line to use for prediction which we explore in the next section, called Simple Linear Regression.

Correlation is Not Causation

Just because two variables are significantly correlated does not imply a cause and effect relationship. There are several relationships that are possible. It could be that x causes y to change. You can actually swap x and y in the fields and get the same r value and y could be causing x to change. There could be other variables that are affecting the two variables of interest. For instance, you can usually show a high correlation between ice cream sales and home burglaries. Selling more ice cream does not “cause” burglars to rob homes. More home burglaries do not cause more ice cream sales. We would probably notice that the temperature outside may be causing both ice cream sales to increase and more people to leave their windows open. This third variable is called a **lurking variable** and causes both x and y to change, making it look like the relationship is just between x and y .

There are also highly correlated variables that seemingly have nothing to do with one another. These seemingly unrelated variables are called spurious correlations.

The following website has some examples of spurious correlations (a slight caution that the author has some gloomy examples): <http://www.tylervigen.com/spurious-correlations>. Figure 12-7 is one of their examples:

Per capita consumption of mozzarella cheese correlates with **Civil engineering doctorates awarded**

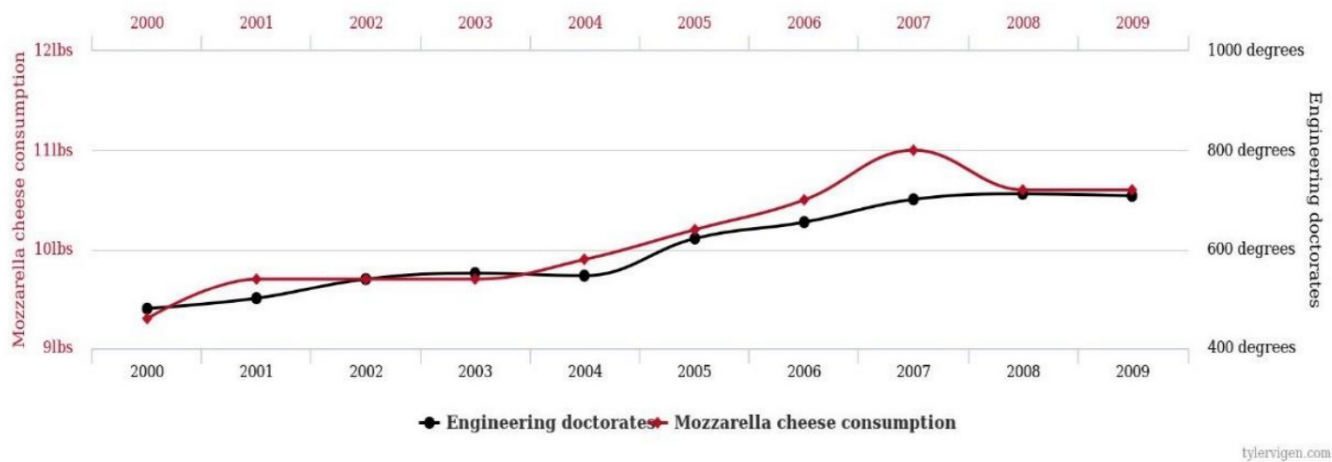


Figure 12-7: Example of spurious correlations. (6/25/2020) Retrieved from http://tylervigen.com/view_correlation?id=28726.

If we were to take out each pair of measurements by year from the time-series plot in Figure 12-7, we would get the following data.

Year	Engineering Doctorates	Mozzarella Cheese Consumption
2000	480	9.3
2001	501	9.7
2002	540	9.7
2003	552	9.7
2004	547	9.9
2005	622	10.2
2006	655	10.5
2007	701	11
2008	712	10.6
2009	708	10.6

Using Excel to find a scatterplot and compute a correlation coefficient, we get the scatterplot shown in Figure 12-8 and a correlation of $r = 0.9586$.

Spurious Correlation Example

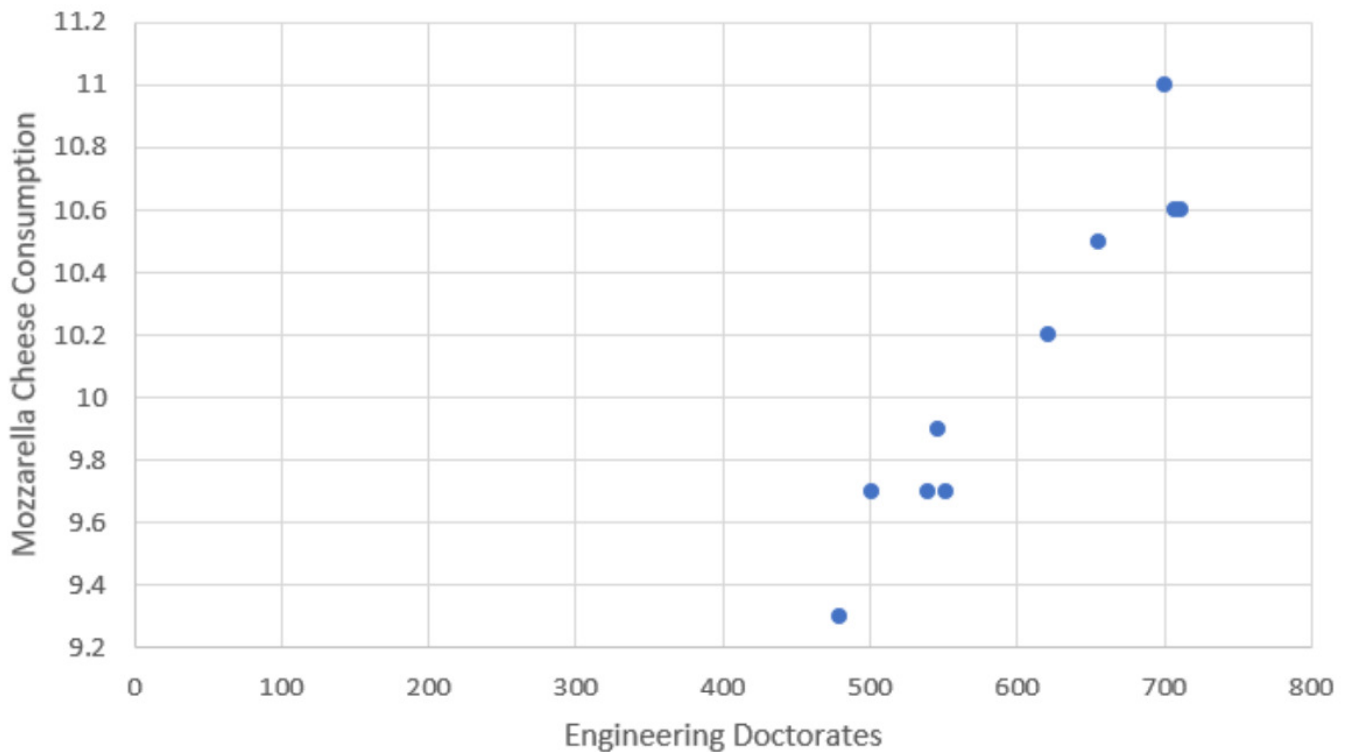


Figure 12-8: Scatterplot for spurious correlation example.

With $r = 0.9586$, there is strong correlation between the number of engineering doctorate degrees earned and mozzarella cheese consumption over time, but earning your doctorate degree does not cause one to go eat more cheese. Nor does eating more cheese cause people to earn a doctorate degree. Most likely these items are both increasing over time and therefore show a spurious correlation to one another.

When two variables are correlated, it does not imply that one variable causes the other variable to change.

“Correlation is causation” is an incorrect assumption that because something correlates, there is a causal relationship. Causality is the area of statistics that is most commonly misused, and misinterpreted, by people. Media, advertising, politicians and lobby groups often leap upon a perceived correlation and use it to “prove” their own agenda. They fail to understand that, just because results show a correlation, there is no proof of an underlying causality. Many people assume that because a poll, or a statistic, contains many numbers, it must be scientific, and therefore correct. The human brain is built to try and subconsciously establish links between many pieces of information at once. The brain often tries to construct patterns from randomness, and may jump to conclusions, and assume that a cause and effect relationship exists. Relationships may be accidental or due to other unmeasured variables. Overcoming this tendency to jump to a cause and effect relationship is part of academic training for students and in most fields, from statistics to the arts.

Summary

When looking at correlations, start with a scatterplot to see if there is a linear relationship prior to finding a correlation coefficient. If there is a linear relationship in the scatterplot, then we can find the correlation coefficient to tell the strength and direction of the relationship. Clusters of dots forming a linear uphill pattern from left to right will have a positive correlation. The closer the dots in the scatterplot are to a straight line, the closer r will be to 1. If the cluster of dots in the scatterplots go downhill from left to right in linear pattern, then there is a negative relationship. The closer those dots in the scatterplot are to a straight line going downhill, the closer r will be to -1 . Use a t-test to see if the correlation is statistically significant. As sample sizes get larger, smaller values of r become statistically significant. Be careful with outliers, which can heavily influence correlations. Most importantly, correlation is not causation. When x and y are significantly correlated, this does not mean that x causes y to change.

This page titled [12.1.2: Hypothesis Test for a Correlation](#) is shared under a [CC BY-SA 4.0](#) license and was authored, remixed, and/or curated by [Rachel Webb](#).

12.2: Simple Linear Regression

A linear regression is a straight line that describes how the values of a response variable y change as the predictor variable x changes. The equation of a line, relating x to y uses the slope-intercept form of a line, but with different letters than what you may be used to in a math class. We let b_0 represent the sample y -intercept (the value of y when $x = 0$), b_1 the sample slope (rise over run), and \hat{y} the predicted value of y for a specific value of x . The equation is written as $\hat{y} = b_0 + b_1x$.

Some textbooks and the TI calculators use the letter a to represent the y -intercept and b to represent the slope, and the equation is written as $\hat{y} = a + bx$. These letters are just symbols representing the placeholders for the numeric values for the y -intercept and slope.

If we were to fit the best line that was closest to all the points on the scatterplot we would get what we call the “line of best fit,” also known as the “regression equation” or “least squares regression line.” Figure 12-9 is a scatterplot with just five points.

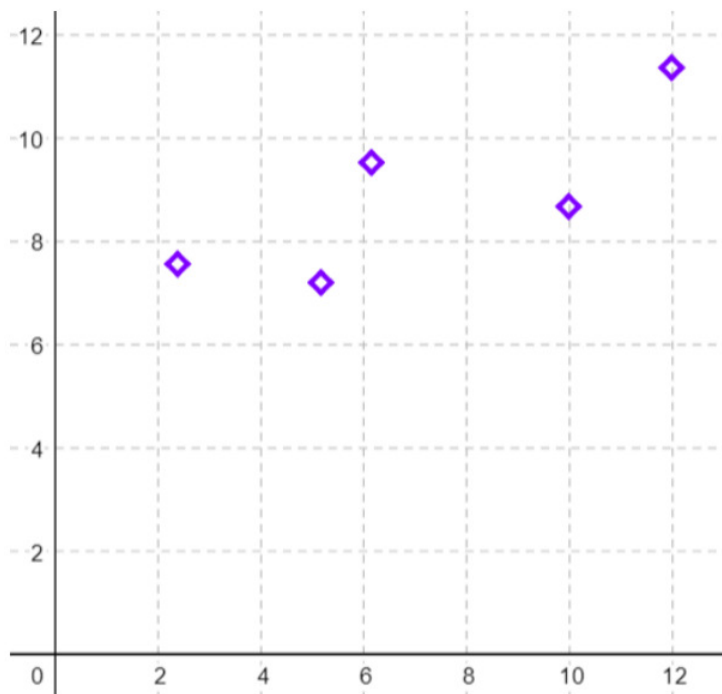


Figure 12-9: A scatterplot.

Figure 12-10 shows the **least-squares regression line** of y on x , which is the line that minimizes the squared vertical distance from all of the data. If we were to fit the line that best fits through the points, we would get the line pictured below.

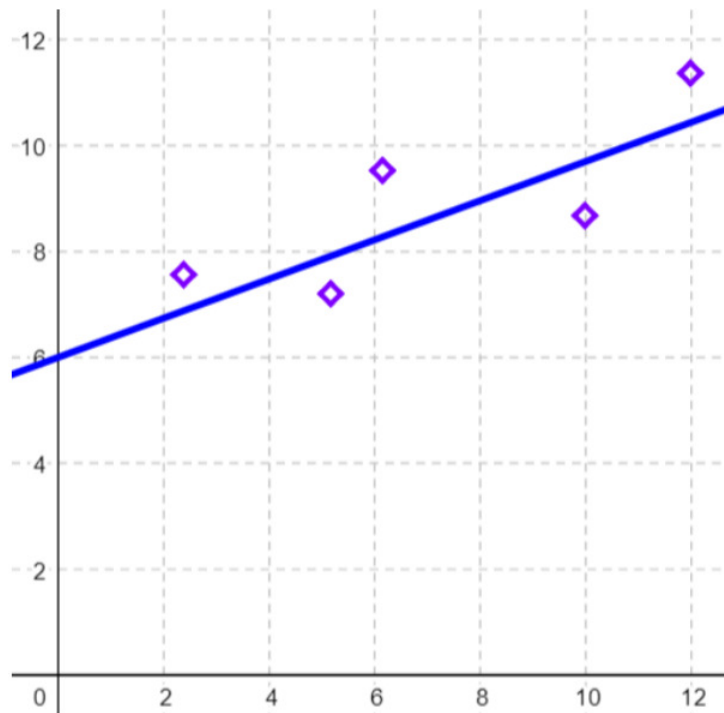


Figure 12-10: Scatterplot with least-squares regression line.

What we want to look for is the minimum of the squared vertical distance between each point and the regression equation, called a residual. This is where the name of the least squares regression line comes from. Figure 12-11 shows the squared residuals.

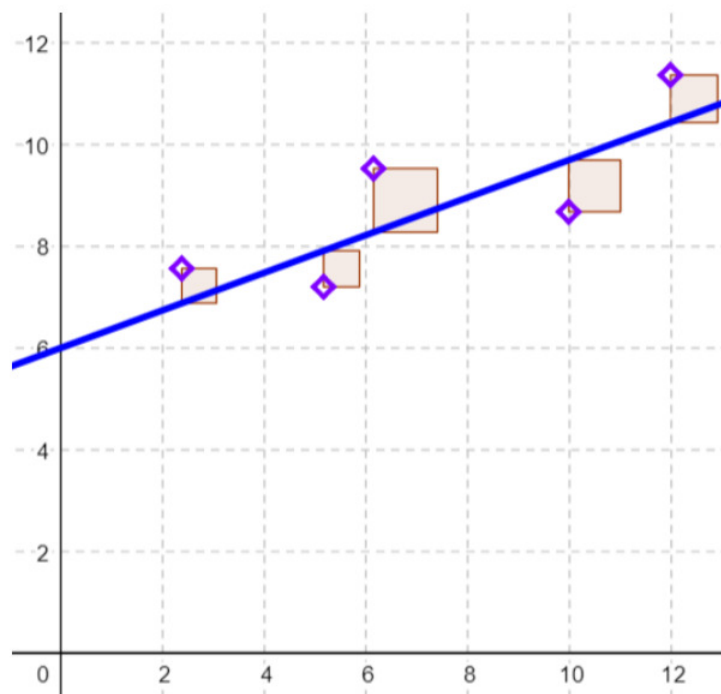


Figure 12-11: Scatterplot with least-squares regression line and squared residuals.

To find the slope and y -intercept for the equation of the least-squares regression line $\hat{y} = b_0 + b_1x$ we use the following formulas: slope $= b_1 = \frac{SS_{xy}}{SS_{xx}}$, y -intercept: $b_0 = \bar{y} - b_1\bar{x}$.

To compute the least squares regression line, you will need to first find the slope. Then substitute the slope into the following equation of the y -intercept: $b_0 = \bar{y} - b_1 \bar{x}$, where \bar{x} = the sample mean of the x 's and \bar{y} = the sample mean of the y 's.

Once we find the equation for the regression line, we can use it to estimate the response variable y for a specific value of the predictor variable x .

Note: we would only want to use the regression equation for prediction if we reject H_0 and find that there is a significant correlation between x and y . Alternatively, we could start with the regression equation and then test to see if the slope is significantly different from zero.

Use the following data to find the line of best fit.

Hours Studied for Exam 20 16 20 18 17 16 15 17 15 16 15 17 16 17 14 Grade on Exam 89 72 93 84 81 75 70 82 69 83 80 83 81 84 76

Solution

Start with finding the 2-Var Stats and sum of squares as shown in the steps for correlation.

$$SS_{xx} = (n - 1)s_x^2 = (15 - 1)1.723783215^2 = 41.6$$

$$SS_{yy} = (n - 1)s_y^2 = (15 - 1)6.71742581^2 = 631.7333$$

$$SS_{xy} = \sum(xy) - n \cdot \bar{x} \cdot \bar{y} = 20087 - (15 \cdot 16.6 \cdot 80.133333) = 133.8$$

Calculate the slope: $b_1 = \frac{SS_{xy}}{SS_{xx}} = \frac{133.8}{41.6} = 3.216346$.

Calculate the y -intercept: $b_0 = \bar{y} - b_1 \cdot \bar{x} = 80.133333 - 3.216346 \cdot 16.6 = 26.742$.

Put these numbers back into the regression equation and write your answer as: $\hat{y} = 26.742 + 3.216346x$

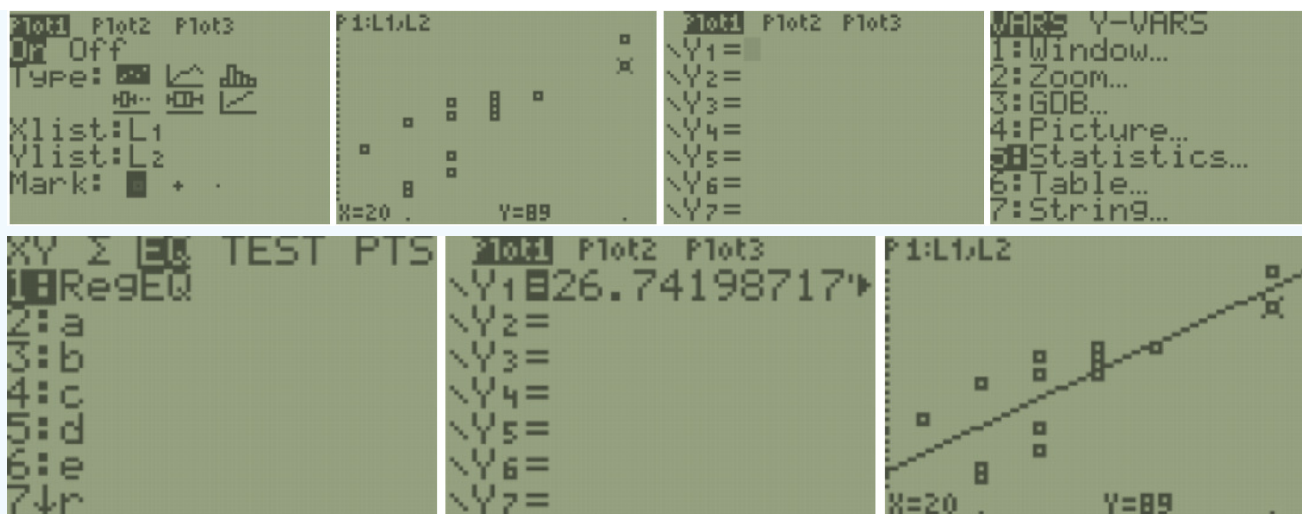
Interpreting the y -intercept coefficient: When $x = 0$, note that $\hat{y} = 26.742$. This means that we would expect a failing midterm score of 26.742 for students who had studied zero hours.

Interpreting the slope coefficient: For each additional hour studied for the exam, we would expect an increase in the midterm grade of 3.2163 points.

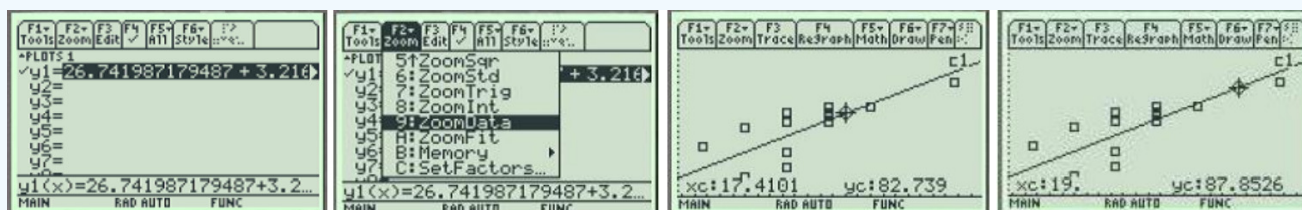
In general, when interpreting the slope coefficient, for each additional 1 unit increase in x , the predicted \hat{y} value will change by b_1 units.

Adding the Regression Line to the Scatterplot

TI-84: Make a scatterplot using the directions from the previous section. Turn your STAT scatter plot on. Press [Y=] and clear any equations that are in the y -editor. Into Y1, enter the least-squares regression equation manually as found above. Or, press the VARS key, go to option 5: Statistics, arrow over to EQ for equation, then choose the first option RegEQ. This will bring the equation over to the Y= menu without rounding error. Press [GRAPH]. You can press [TRACE] and use the arrow keys to scroll left or right. Pressing up or down on the arrow keys will change between tracing the scatterplot and the regression line. You can use the regression line to predict values of the response variable for a given value of the explanatory variable. While tracing the regression line type the value of the explanatory variable and press [ENTER]. For example, for $x = 19$ the value of $\hat{y} = 87.8526$.



TI-89: Make a scatterplot and find the regression line using the directions in the previous section. If you press [\blacklozenge] then [F1] (Y=) you will notice the regression equation has been stored into y1 in the y-editor. Press [F2] **Trace** and use the left and right arrow keys to trace along the plot. Use the up and down arrow keys to toggle between the regression line and the scatterplot. You can use the regression line to predict values of the response variable for a given value of the explanatory variable. While tracing the regression line type the value of the explanatory variable and press [ENTER]. For example, for $x = 19$ the value of $y = 87.8526$.



This page titled [12.2: Simple Linear Regression](#) is shared under a [CC BY-SA 4.0](#) license and was authored, remixed, and/or curated by [Rachel Webb](#) via [source content](#) that was edited to the style and standards of the LibreTexts platform.

12.2.1: Hypothesis Test for Linear Regression

To test to see if the slope is significant we will be doing a two-tailed test with hypotheses. The population least squares regression line would be $y = \beta_0 + \beta_1 + \varepsilon$ where β_0 (pronounced “beta-naught”) is the population y -intercept, β_1 (pronounced “beta-one”) is the population slope and ε is called the error term.

If the slope were horizontal (equal to zero), the regression line would give the same y -value for every input of x and would be of no use. If there is a statistically significant linear relationship then the slope needs to be different from zero. We will only do the two-tailed test, but the same rules for hypothesis testing apply for a one-tailed test.

We will only be using the two-tailed test for a population slope.

The hypotheses are:

$$H_0 : \beta_1 = 0$$

$$H_1 : \beta_1 \neq 0$$

The null hypothesis of a two-tailed test states that there is not a linear relationship between x and y . The alternative hypothesis of a two-tailed test states that there is a significant linear relationship between x and y .

Either a t-test or an F-test may be used to see if the slope is significantly different from zero. The population of the variable y must be normally distributed.

F-Test for Regression

An F-test can be used instead of a t-test. Both tests will yield the same results, so it is a matter of preference and what technology is available. Figure 12-12 is a template for a regression ANOVA table,

Source	SS = Sum of Squares	df	MS = Mean Square	F
Regression	$SSR = \frac{(SS_{xy})^2}{SS_{xx}}$	p	$MSR = \frac{SSR}{p}$	$F = \frac{MSR}{MSE}$
Error	$SSE = SS_{yy} - SSR$	$n - p - 1$	$MSE = \frac{SSE}{n - p - 1}$	
Total	$SST = SS_{yy}$	$n - 1$		

Figure 12-12: Regression ANOVA table template.

where n is the number of pairs in the sample and p is the number of predictor (independent) variables; for now this is just $p = 1$. Use the F-distribution with degrees of freedom for regression = $df_R = p$, and degrees of freedom for error = $df_E = n - p - 1$. This F-test is always a right-tailed test since ANOVA is testing the variation in the regression model is larger than the variation in the error.

Use an F-test to see if there is a significant relationship between hours studied and grade on the exam. Use $\alpha = 0.05$.

Hours Studied for Exam 20 16 20 18 17 16 15 17 15 16 15 17 16 17 14 Grade on Exam 89 72 93 84 81 75 70 82 69 83 80 83 81 84 76

Solution

The hypotheses are:

$$H_0 : \beta_1 = 0$$

$$H_1 : \beta_1 \neq 0$$

Compute the sum of squares.

$$SS_{xx} = 41.6, SS_{yy} = 631.7333, SS_{xy} = 133.8, n = 15 \text{ and } p = 1$$

$$SSR = \frac{(SS_{xy})^2}{SS_{xx}} = \frac{(133.8)^2}{41.6} = 430.3471154$$

$$SSE = SST - SSR = 631.7333 - 430.3471154 = 201.3862$$

$$SST = SS_{yy} = 631.7333$$

Compute the degrees freedom.

$$df_T = n - 1 = 14 \quad df_E = n - p - 1 = 15 - 1 - 1 = 13$$

Compute the mean squares.

$$MSR = \frac{SSR}{p} = \frac{430.3471154}{1} = 430.3471154 \quad MSE = \frac{SSE}{n-p-1} = \frac{201.3862}{13} = 15.4912$$

Compute the Test Statistic

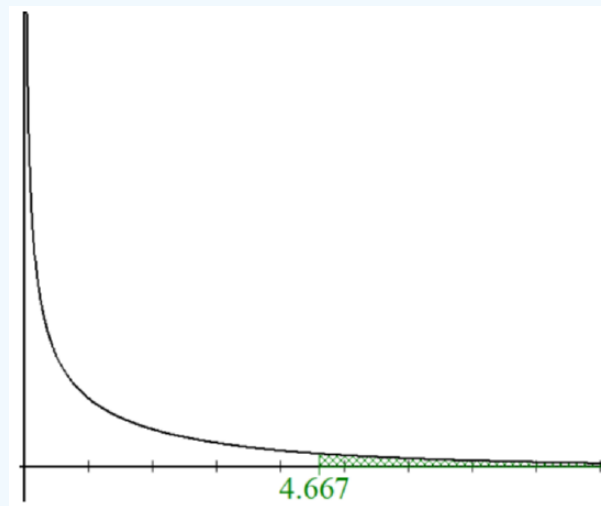
$$F = \frac{MSR}{MSE} = \frac{430.3471154}{15.4912} = 27.7801$$

Substitute the numbers into the ANOVA table:

Source	SS	df	MS	F
Regression	430.3471154	1	430.3471154	27.780
Error	201.3862	13	15.4912	
Total	631.7333	14		

This is a right-tailed F-test with $df = 1, 13$ and $\alpha = 0.05$, which gives a critical value of 4.667.

In Excel we can find the critical value by using the function `=F.INV.RT(0.05,1,13) = 4.667`.



Or use the online calculator at <https://homepage.divms.uiowa.edu/~mbognar/applets/f.html> to visualize the critical value, as shown in Figure 12-13. It is hard to see the shaded tail in the following picture above the test statistic since the F-distribution is so close to the x -axis after 3, but it has the right-tail shaded from 4.667 and greater.

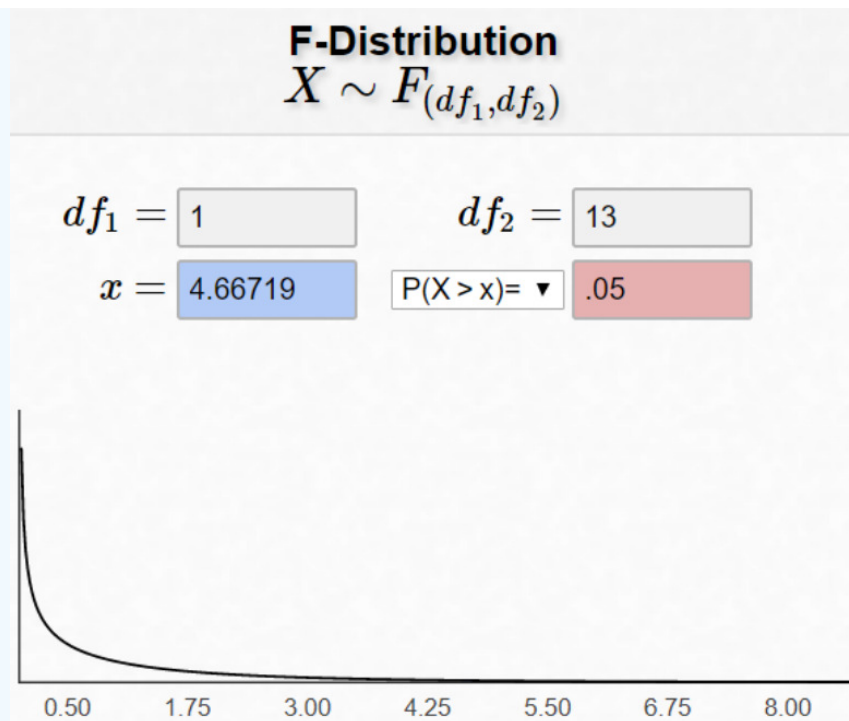


Figure 12-13: F-distribution graph generated by online calculator, with the input values displayed.

The test statistic 27.78 is even further out in the tail than the critical value, so we would reject H_0 . At the 5% level of significance, there is a statistically significant relationship between hours studied and grade on a student's final exam.

The p-value could also be used to make the decision. The p-value method would use the function `=F.DIST.RT(27.78,1,13) = 0.00015` in Excel. The p-value is less than $\alpha = 0.05$, which also verifies that we reject H_0 .

The following is the output from Excel and SPSS. Note the same ANOVA table information is shown but the columns are in a different order.

Excel

ANOVA					
	<i>df</i>	<i>SS</i>	<i>MS</i>	<i>F</i>	<i>Significance F</i>
Regression	1	430.3471	430.3471	27.78002	0.000151
Residual	13	201.3862	15.49125		
Total	14	631.7333			

SPSS

ANOVA ^a						
Model		Sum of Squares	df	Mean Square	F	Sig.
1	Regression	430.347	1	430.347	27.780	.000 ^b
	Residual	201.386	13	15.491		
	Total	631.733	14			

a. Dependent Variable: Exam Grade

b. Predictors: (Constant), Hours Studied

T-Test for Regression

If the regression equation has a slope of zero, then every x value will give the same y value and the regression equation would be useless for prediction. We should perform a t-test to see if the slope is significantly different from zero before using the regression equation for prediction. The numeric value of t will be the same as the t-test for a correlation. The two test statistic formulas are algebraically equal; however, the formulas are different and we use a different parameter in the hypotheses.

$$\text{The formula for the t-test statistic is } t = \frac{b_1}{\sqrt{\left(\frac{MSE}{SS_{xx}}\right)}}$$

Use the t-distribution with degrees of freedom equal to $n - p - 1$.

The t-test for slope has the same hypotheses as the F-test:

$$H_0 : \beta_1 = 0$$

$$H_1 : \beta_1 \neq 0$$

Use a t-test to see if there is a significant relationship between hours studied and grade on the exam, use $\alpha = 0.05$.

Hours Studied for Exam 20 16 20 18 17 16 15 17 15 16 15 17 16 17 14 Grade on Exam 89 72 93 84 81 75 70 82 69 83 80 83 81 84 76

Solution

The hypotheses are:

$$H_0 : \beta_1 = 0$$

$$H_1 : \beta_1 \neq 0$$

Find the critical value using $df_E = n - p - 1 = 13$ for a two-tailed test $\alpha = 0.05$ inverse t-distribution to get the critical values ± 2.160 .

Draw the sampling distribution and label the critical values, as shown in Figure 12-14.

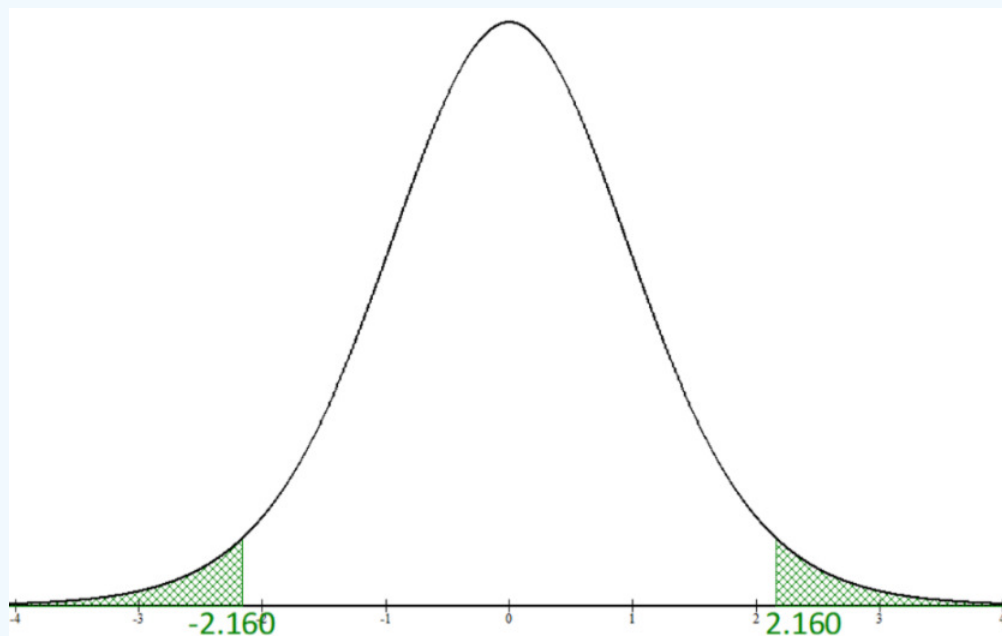


Figure 12-14: Graph of t-distribution with labeled critical values.

The critical value is the same as we found using the t-test for correlation.

Next, find the test statistic $t = \frac{b_1}{\sqrt{\left(\frac{MSE}{SS_{xx}}\right)}} = \frac{3.216346}{\sqrt{\left(\frac{15.4912}{41.6}\right)}} = 5.271$.

The test statistic value is the same value of the t-test for correlation even though they used different formulas. We look in the same place using technology as the correlation test.

```

LinReSTTest
y=a+bx
b≠0 and ρ≠0
t=5.270675167
P=1.5134617E-4
df=13
↓a=26.74198718
  
```

The test statistic is greater than the critical value of 2.160 and in the rejection region. The decision is to reject H_0 .

Summary: At the 5% significance level, there is enough evidence to support the claim that there is a significant linear relationship (correlation) between the number of hours studied for an exam and exam scores. The p-value method could also be used to find the same decision.

The p-value = 0.00015, the same as the previous tests. We will use technology for the p-value method. In the SPSS output, they use Sig. for the p-value.

Excel

	<i>Coefficients</i>	<i>Standard Error</i>	<i>t Stat</i>	<i>P-value</i>
Intercept	26.74199	10.18074	2.626725	0.020917
Hours Studied for Exam	3.216346	0.610234	5.270675	0.000151

SPSS

Coefficients ^a					
Model	Unstandardized Coefficients		Standardized Coefficients		Sig.
	B	Std. Error	Beta	t	
1 (Constant)	26.742	10.181		2.627	.021
Hours Studied	3.216	.610	.825	5.271	.000

a. Dependent Variable: Exam Grade

This page titled [12.2.1: Hypothesis Test for Linear Regression](#) is shared under a [CC BY-SA 4.0](#) license and was authored, remixed, and/or curated by [Rachel Webb](#).

12.2.2: Residuals

When we overlay the regression equation on a scatterplot, most of the time, the points do not lie on the line itself. The vertical distance between the actual value of y and the predicted value of \hat{y} is called the **residual**. The numeric value of the residual is found by subtracting the predicted value of y from the actual value of y : $y - \hat{y}$. When we find the line of best fit using least squares regression, this finds the regression equation with the smallest sum of the residuals $\sum y - \hat{y}$.

When your residual is positive, then your data point is above the regression line, when the residual is negative, your data point is below the regression line. If you were to find the residuals for all the sample points and add them up you would get zero. The expected value of the residuals will always be zero. The regression equation is found so that there is just as much distance for the residuals above the line as there is below the line.

Find the residual for the point (15, 80) for the exam data.

Hours Studied for Exam 20 16 20 18 17 16 15 17 15 16 15 17 16 17 14 Grade on Exam 89 72 93 84 81 75 70 82 69 83 80 83 81 84 76

Solution

Figure 12-15 is a scatterplot with the regression equation $\hat{y} = 26.742 + 3.216346x$ from the exam data.

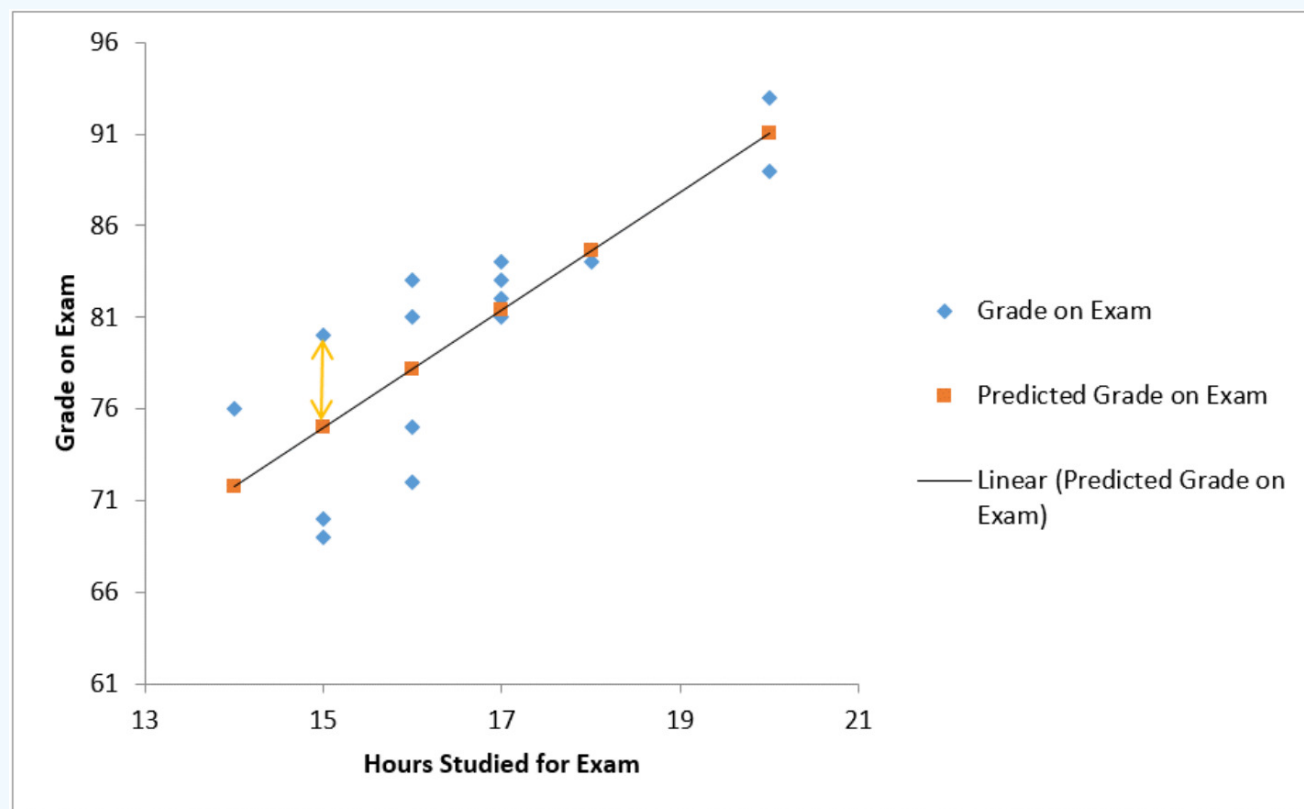


Figure 12-15: Scatterplot showing the linear prediction of grades and the distance from point (15, 80) to the predicted grade for $x = 15$.

The blue diamonds represent the sample data points. The orange squares are the predicted y for each value of x . If we connect the orange squares, we get the linear regression equation. The vertical distance between each data point and the regression equation is called the residual. The numeric value can be found by subtracting the observed y with its corresponding predicted value, $y - \hat{y}$. We use e_i to represent the i^{th} residual where $e_i = y_i - \hat{y}_i$. The residual for the point (15, 80) is drawn on the scatterplot vertically as a yellow double-sided arrow to visually show the size of the residual.

If you were to predict a student's exam grade when they studied 15 hours, you would get a predicted grade of $\hat{y} = 26.742 + 3.216346 \cdot 15 = 74.9865$. The residual for the point (15, 80) then would be $y - \hat{y} = 80 - 74.9865 = 5.0135$. This is the length of the vertical yellow arrow connecting the point (15, 80) to the point (15, 74.9865).

Standard Error of Estimate

The standard deviation of the residuals is called the **standard error of estimate** or s . Some texts will use a subscript s_e or s_{est} to distinguish the different standard deviations from one another. When all of your data points line up in a perfectly straight line, $s = 0$ since none of your points deviate from the regression line. As your data points get more scattered away from a regression line, s gets larger. When you are analyzing a regression model, you want s to be as small as possible.

Standard Error of Estimate

$$s_{est} = s = \sqrt{\frac{\sum (y_i - \hat{y}_i)^2}{n - 2}} = \sqrt{MSE}$$

The standard error of estimate is the standard deviation of the residuals. The standard error of estimate measures the deviation in the vertical distance from data points to the regression equation. The units of s are the same as the units of y .

Use the exam data to find the standard error of estimate.

Solution

To find the $\sum (y_i - \hat{y}_i)^2$ you would need to find the residual for every data point, square the residuals, and sum them up. This is a lot of math. Recall the regression ANOVA table found earlier. The $MSE = 15.4912$.

Source	SS	df	MS	F
Regression	430.3471154	1	430.3471154	27.780
Error	201.3862	13	15.4912	
Total	631.7333	14		

The mean square error is the variance of the residuals, if we take the square root of the MSE we find the standard deviation of the residuals, which is the standard error of estimate.

$$s = \sqrt{MSE} = \sqrt{15.4912} = 3.9359$$

You can also use the technology to find s .

Excel:

Regression Statistics	
Multiple R	0.825358
R Square	0.681216
Adjusted R Square	0.656695
Standard Error	3.935892
Observations	15

SPSS:

Model Summary				
Model	R	R Square	Adjusted R Square	Std. Error of the Estimate
1	.825 ^a	.681	.657	3.93589

TI-84:

```
LinRegTTest
y=a+bx
8≠0 and p≠0
b=3.216346154
s=3.935892216
r²=.6812164131
r=.8253583544
```

TI-89:

```
Linear Regression T Test
11: y=a+bx
15: 8≠0 and p≠0
17: t = 5.27068
16: P Value = .000151
17: df = 13
14: a = 3.21635
14: b = 3.93589
11: Enter=OK
MAIN END AUTO FUNC 2/6
```

$s = \text{standard error}$

This page titled [12.2.2: Residuals](#) is shared under a [CC BY-SA 4.0](#) license and was authored, remixed, and/or curated by [Rachel Webb](#).

12.2.3: Coefficient of Determination

The **coefficient of determination** R^2 (or r^2) is the fraction (or percent) of the variation in the values of y that is explained by the least-squares regression of y on x . R^2 is a measure of how well the values of y are explained by x .

For example, there is some variability in the dependent variable values, such as grade. Some of the variation in student's grades is due to hours studied and some is due to other factors. How much of the variation in a student's grade is due to hours studied?

When considering this question, you want to look at how much of the variation in a student's grade is explained by the number of hours they studied and how much is explained by other variables. Realize that some of the changes in grades have to do with other factors. You can have two students who study the same number of hours, but one student may have a higher grade. Some variability is explained by the model and some variability is not explained. Together, both of these give the total variability.

$$\begin{aligned} (\text{Total Variation}) &= (\text{Explained Variation}) + (\text{Unexplained Variation}) \\ \sum (y - \bar{y})^2 &= \sum (\hat{y} - \bar{y})^2 + \sum (y - \hat{y})^2 \end{aligned}$$

Coefficient of Determination

The proportion of the variation that is explained by the model is

$$R^2 = \frac{\text{Explained Variation}}{\text{Total Variation}} = \frac{SSR}{SST}$$

Find and interpret the coefficient of determination for the hours studied and exam grade data.

Hours Studied for Exam 20 16 20 18 17 16 15 17 15 16 15 17 16 17 14 Grade on Exam 89 72 93 84 81 75 70 82 69 83 80 83 81 84 76

Solution

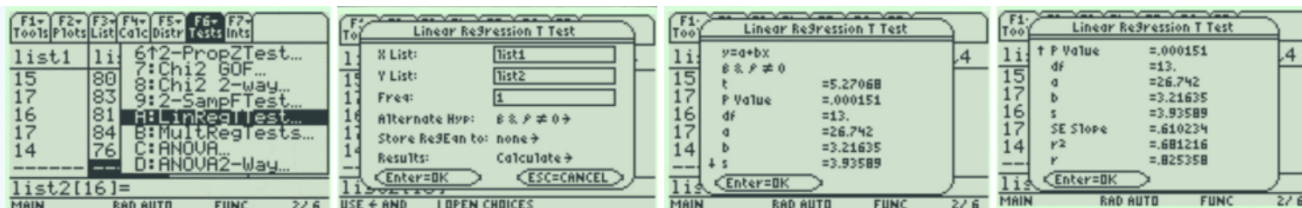
The coefficient of determination is this correlation coefficient squared. Note: when r is negative, then when you square r the answer becomes positive. For the hours studied and exam grade $r = 0.825358$, so $r^2 = R^2 = 0.825358^2 = 0.6812$.

Approximately 68% of the variation in a student's exam grade is explained by the least square regression equation and the number of hours a student studied.

TI-84: Press the [STAT] key, arrow over to the [TESTS] menu, arrow down to the option [LinRegTTest] and press the [ENTER] key. The default is Xlist:L1, Ylist:L2, Freq:1, β and $\rho \neq 0$. Arrow down to Calculate and press the [ENTER] key. The calculator returns the y -intercept = $a = b_0$, slope = $b = b_1$, the standard error of estimate = s , the coefficient of determination = $r^2 = R^2$, and the correlation coefficient = r .

<pre> EDIT CALC TESTS 1:Z-PropZInt... 2:X²-Test... 3:X²GOF-Test... 4:2-SampFTest... 5:LinRegTTest... 6:LinRegTInt... 7:ANOVA(</pre>	<pre> LinRegTTest Xlist:L1 Ylist:L2 Freq:1 8 & ρ: [≠] <0 >0 RegEQ: Calculate </pre>	<pre> LinRegTTest y=a+bx 8≠0 and ρ≠0 t=5.270675167 p=1.5134617e-4 df=13 a=26.74198718 </pre>	<pre> LinRegTTest y=a+bx 8≠0 and ρ≠0 t=5.270675167 p=1.5134617e-4 df=13 a=26.74198718 </pre>
--	---	--	--

TI-89: In the Stats/List Editor select F6 for the Tests menu. Use cursor keys to select A:LinRegTTest and press [Enter]. In the "X List" space type in the name of your list with the x variable without spaces: for our example, "list1." In the "Y List" space type in the name of your list with the y variable without spaces: for our example, "list2." Under the "Alternate Hyp" menu, select the \neq sign that is the same as the problem's alternative hypothesis statement then press the [ENTER] key, arrow down to [Calculate] and press the [ENTER] key. The calculator returns the y -intercept of the regression line = $a = b_0$, the slope of the regression line = $b = b_1$, the correlation = r , and the coefficient of determination = $r^2 = R^2$.



Excel:

Regression Statistics	
Multiple R	0.825358
R Square	0.681216
Adjusted R Square	0.656695
Standard Error	3.935892
Observations	15

Coefficient of Determination R^2

TI-84:

```
LinRegTTest
y=a+bx
8≠0 and P≠0
↑b=3.216346154
s=3.935892216
r²=.6812164131
r=.8253583544
```

SPSS:

Model Summary

Model	R	R Square	Adjusted R Square	Std. Error of the Estimate
1	.825 ^a	.681	.657	3.93589

a. Predictors: (Constant), Hours Studied

The coefficient of determination can take on any value between 0 and 1, or 0% to 100%. The closer R^2 is to 100%, the better the regression equation models the data. Unlike r , which can only be used for simple linear regression, we can use R^2 for different types of regression. In more advanced courses, if we were to do non-linear or multiple linear regression we could compare different models and pick the one that has the highest R^2 .

For instance, if we ran a linear regression the scatterplot that showed an obvious curve pattern we would get a regression equation with a zero slope and $R^2 = 0$. See Figure 12-16.

If we were to fit a parabola through the data we get a perfect fit and $R^2 = 1$. See Figure 12-17.

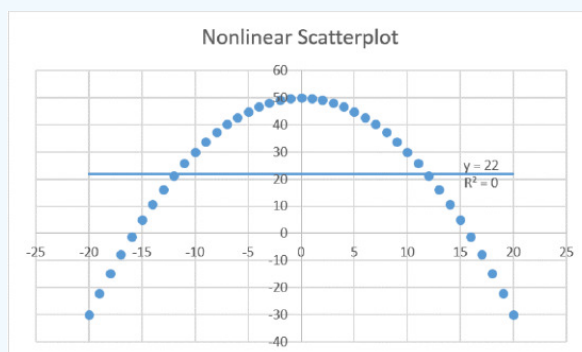


Figure 12-16: Linear regression on parabolic scatterplot.

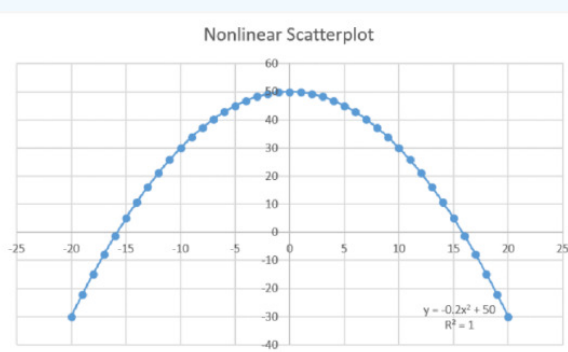


Figure 12-17: Nonlinear regression on parabolic scatterplot.

12.2.4: Prediction

We can now use the least squares regression equation for prediction.

Use the regression equation to predict the grade for a student who has studied for 18 hours for their exam using the previous data.

Hours Studied for Exam 20 16 20 18 17 16 15 17 15 16 15 17 16 17 14 Grade on Exam 89 72 93 84 81 75 70 82 69 83 80 83 81 84 76

Solution

We found the regression equation $\hat{y} = 26.742 + 3.216346x$. The x -variable is the hours studied so let $x = 18$ hours. \hat{y} is the symbol for the predicted y .

Substitute $x = 18$ into the regression equation and you get: $\hat{y} = 26.742 + 3.216346 \cdot 18 = 84.636228$. We would estimate the student's grade to be 84.6 when they studied 18 hours. This is a point estimate for the grade on the exam for a student that studied 18 hours.

Prediction Interval

We can find a special type of confidence interval to estimate the true value of y called the **prediction interval**.

The prediction interval is the confidence interval for the actual value of y :

$$\hat{y} \pm t_{\alpha/2} \cdot s \sqrt{\left(1 + \frac{1}{n} + \frac{(x - \bar{x})^2}{SS_{xx}}\right)}$$

where \hat{y} is the predicted value of y for the given value of x .

Using the previous data, find and interpret the 95% prediction interval for a student who studies 18 hours.

Solution

From the question, $x = 18$. From previous examples we found that $\hat{y} = 26.742 + 3.216346 \cdot 18 = 84.636228$ and $s = 3.935892$. Find the critical value from the invT using $df = n - 2 = 13$; we get $t_{\alpha/2} = 2.160369$. Make sure to go out at least 6 decimal places in between steps. Ideally, never round between steps. Use the 2-Var Stats from your calculator to find the sums and then substitute values back into the equation to get

$$\begin{aligned} & 84.636228 \pm 2.160369 \cdot 3.935892 \sqrt{\left(1 + \frac{1}{15} + \frac{(18 - 16.6)^2}{41.6}\right)} \\ \Rightarrow & 84.636228 \pm 8.9723 \\ \Rightarrow & 75.6639 < y < 93.6085 \end{aligned}$$

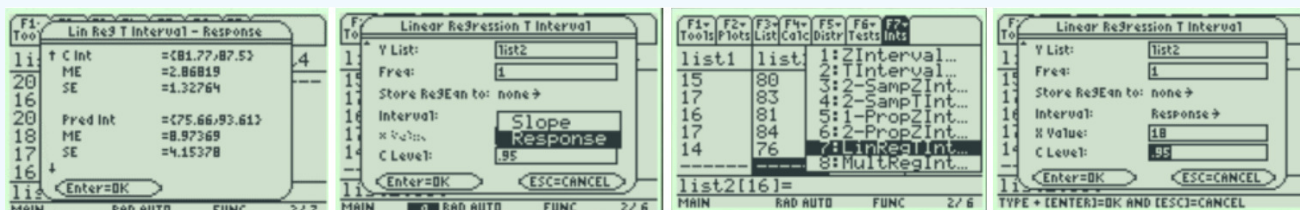
We are 95% confident that the predicted exam grade for a student that studies 18 hours is between 75.6639 and 93.6085.

A confidence interval can be more accurate (narrower) when you increase the sample size. Note that in the last example, the predicted grade for an individual student could have been anywhere from a C to an A grade. If you wanted to predict y with more accuracy, then you would want to sample more than 15 students to get a smaller margin of error. The confidence interval for a mean will have a smaller margin of error than for an individual's predicted value.

Excel, the TI-83 and 84 do not have built in prediction intervals.

TI-89: Enter the x -values in list1 and the y -values in list2, select [F7] Intervals, then select option 7:LinRegTInt... Use the Var-Link button to enter in list1 and list2 for the X List and Y List. Select Response in the drop-down menu for Interval. Enter in the x -value given in the question. Change the confidence level (C-Level) to match what was in the question, the [Enter].

Scroll down to Pred Int for the prediction interval. The calculator does not round between steps so if you rounded b_0 and b_1 , for instance, when doing hand calculations, your answer may be slightly different than the calculator results.



Extrapolation is the use of a regression line for prediction far outside the range of values of the independent variable x . As a general rule, one should not use linear regression to estimate values too far from the given data values. The further away you move from the center of the data set, the more variable results become. For instance, we would not want to estimate a student's grade for someone that studied way less than 14 hours or more than 20 hours.

This page titled [12.2.4: Prediction](#) is shared under a [CC BY-SA 4.0](#) license and was authored, remixed, and/or curated by [Rachel Webb](#).

12.2.5: Outliers

A scatter plot should be checked for outliers. An outlier is a point that seems out of place when compared with the other points. Some of these points can affect the equation of the regression line.

Should linear regression be used with this data set?

x 1 3 8 2 1 3 2 2 3 1 y 2 3 8 2 3 1 3 1 2 1

Solution

A regression analysis for the data set was run on Excel.

<i>Regression Statistics</i>	
Multiple R	0.844
R Square	0.712
Adjusted R Square	0.676
Standard Error	1.176
Observations	10

	<i>Coefficients</i>	<i>Standard Error</i>	<i>t Stat</i>	<i>P-value</i>
Intercept	0.406	0.618	0.658	0.529
x	0.844	0.19	4.446	0.002

If we test for a significant correlation:

$$H_0 : \rho = 0$$

$$H_1 : \rho \neq 0$$

The correlation is $r = 0.844$ and the p-value is 0.002, which is less than $\alpha = 0.05$, so we would reject H_0 and conclude there is a significant relationship between x and y .

However, if look at the scatterplot in Figure 12-18, with the regression equation we can clearly see that the point (8, 8) is an outlier. The outlier is pulling the slope up towards the point (8, 8).

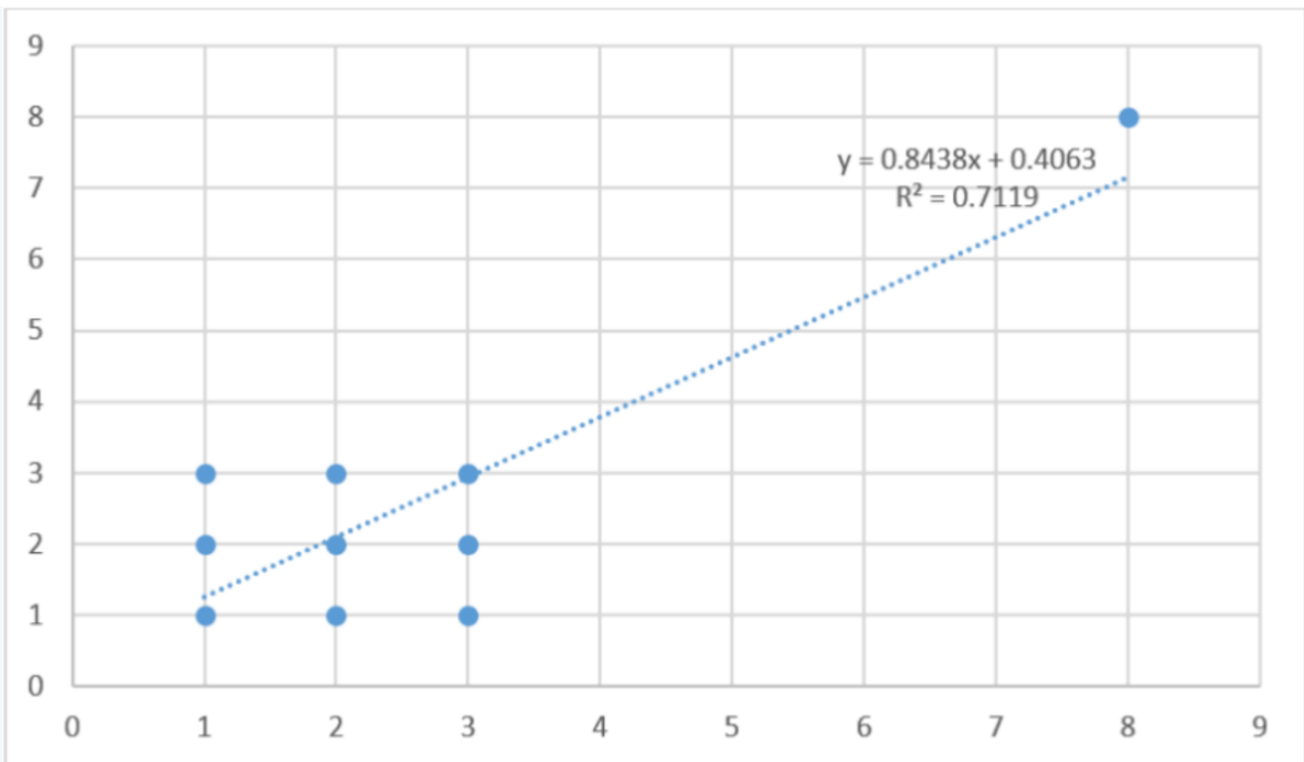


Figure 12-18: Scatterplot of data with an outlier.

If we were to take out the outlier point (8, 8) and run the regression analysis again on the modified data set we get the following Excel output.

<i>Regression Statistics</i>	
Multiple R	0
R Square	0
Adjusted R Square	-0.142857
Standard Error	0.92582
Observations	9

	<i>Coefficients</i>	<i>Standard Error</i>	<i>t Stat</i>	<i>P-value</i>
Intercept	2	0.816	2.449	0.044
x	0	0.378	0	1

See Figure 12-19: note the correlation is now 0 and the p-value is 1, so there is no relationship at all between x and y .

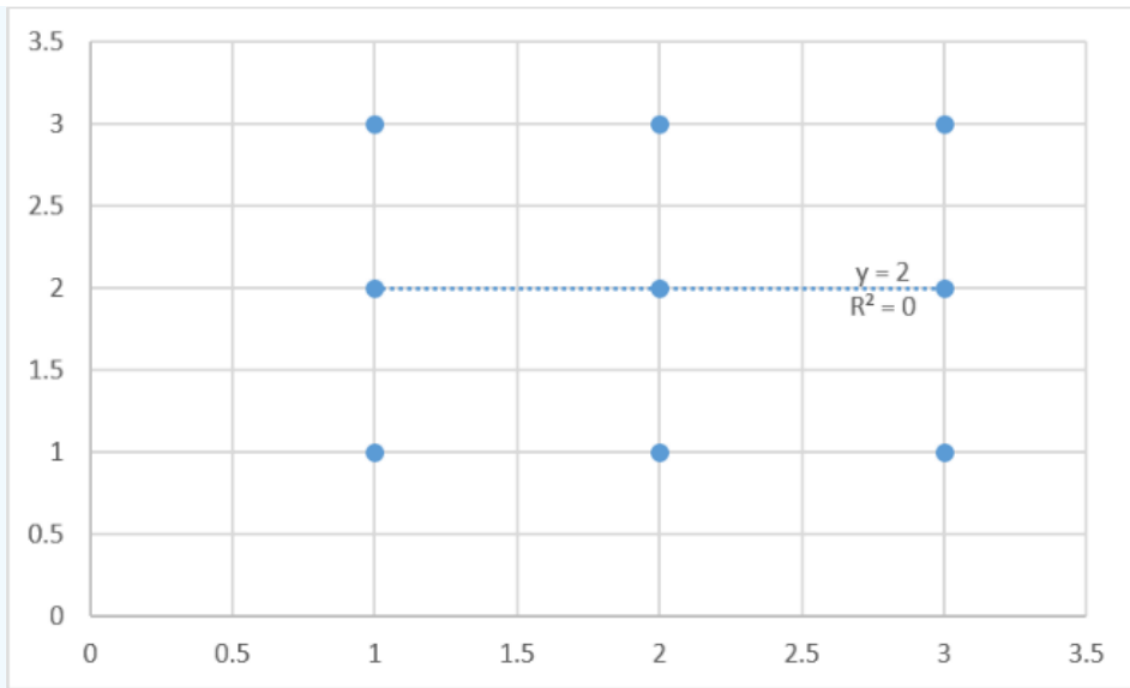


Figure 12-19: Scatterplot of the same data as above with outlier removed.

This type of outlier is called a **leverage point**. Leverage points are positioned far away from the main cluster of data points on the x -axis.

There is another type of outlier called an **influential point**. Influential points are positioned far away from the main cluster of data points on the y -axis. There is an option in most software packages to get the “standardized” residuals. Standardized residuals are z -scores of the residuals. Any standardized residual that is not between -2 and 2 may be an outlier. If it is not between -3 and 3 then the point is an outlier. When this happens, the points are called influential points or influential observations.

Use technology to compute the standardized residuals. Should linear regression be used with this data set?

x 1 3 2 2 4 5 7 9 6 8 y 1 3 10 2 4 5 7 9 6 8

Solution

A regression analysis for the given data set was run on Excel, producing the following results:

<i>Observation</i>	<i>Predicted y</i>	<i>Residuals</i>	<i>Standard Residuals</i>
1	2.974	-1.974	-0.831
2	4.339	-1.339	-0.564
3	3.656	6.344	2.671
4	3.656	-1.656	-0.698
5	5.022	-1.022	-0.430
6	5.705	-0.705	-0.297
7	7.070	-0.070	-0.030
8	8.436	0.564	0.237
9	6.388	-0.388	-0.163
10	7.753	0.247	0.104

The point (2, 10) shown in Figure 12-20 is pulling the left side of the line up and away from the points that form a line. This influential point changes the y -intercept and slope.

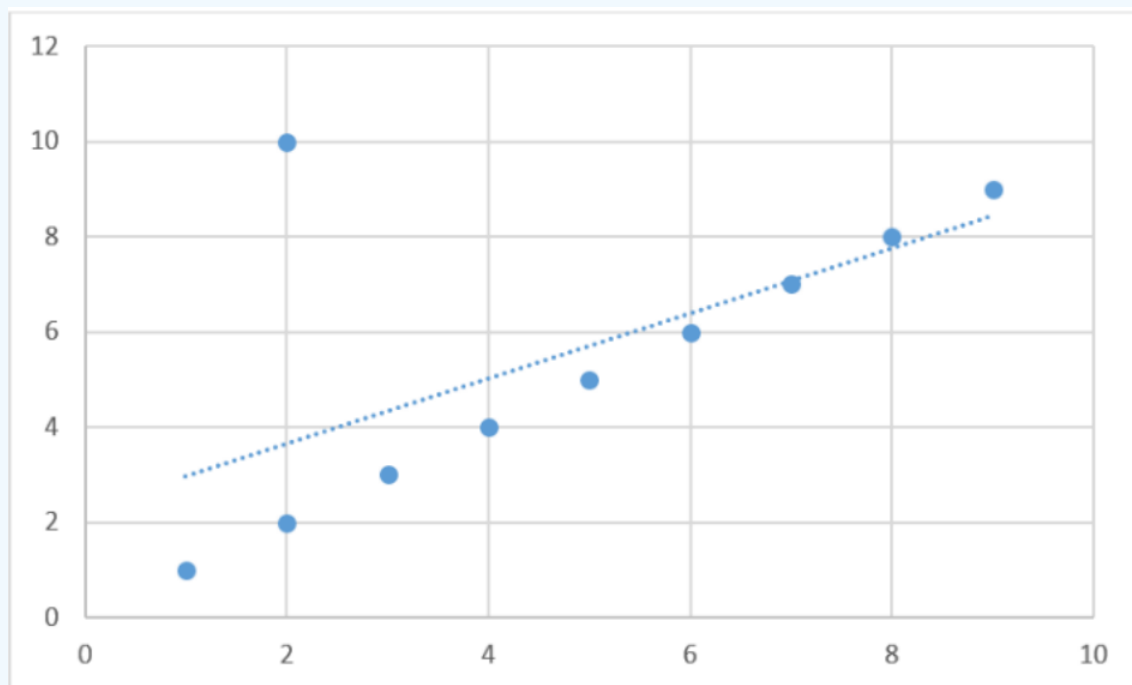


Figure 12-20:

This page titled [12.2.5: Outliers](#) is shared under a [CC BY-SA 4.0](#) license and was authored, remixed, and/or curated by [Rachel Webb](#).

12.2.6: Conclusion - Simple Linear Regression

A **lurking variable** is a variable other than the independent or dependent variables that may influence the regression line. For instance, the highly correlated ice cream sales and home burglary rates probably have to do with the season. Hence, linear regression does not imply cause and effect.

Two variables are **confounded** when their effects on the dependent variable cannot be distinguished from each other. For instance, if we are looking at diet predicting weight, a confounding variable would be age. As a person gets older, they can gain more weight with fewer calories compared to when they were younger. Another example would be predicting someone's midterm score from hours studied for the exam. Some confounding variables would be GPA, IQ score, and teacher's difficulty level.

Assumptions for Linear Regression

There are assumptions that need to be met when running simple linear regression. If these assumptions are not met, then one should use more advanced regression techniques.

The assumptions for simple linear regression are:

- The data need to follow a linear pattern.
- The observations of the dependent variable y are independent of one another.
- Residuals are approximately normally distributed.
- The variance of the residuals is constant.

Most software packages will plot the residuals for each x on the y -axis against either the x -variable or \hat{y} along the x -axis. This plot is called a residual plot. Residual plots help determine some of these assumptions.

Use technology to compute the residuals and make a residual plot for the hours studied and exam grade data.

Hours Studied for Exam 20 16 20 18 17 16 15 17 15 16 15 17 16 17 14 Grade on Exam 89 72 93 84 81 75 70 82 69 83 80 83 81 84 76

Solution

Plot the residuals.

TI-84: Find the least-squares regression line as described in the previous section. Press [Y=] and clear any equations that are in the y -editor. Press [2nd] then [STAT PLOT] then press 1 or hit [ENTER] to select **Plot1**. Select **On** and press [ENTER] to activate plot 1. For "Type" select the first graph that looks like a scatterplot and press [ENTER]. For "Xlist" enter whichever list where your explanatory variable data is stored. For our example, enter L_1 . For "Ylist" press [2nd] [LIST] then scroll down to RESID and press [ENTER]. The calculator automatically computes the residuals and stores them in a list called **RESID**. Press [ZOOM] then press 9 or scroll down to **ZoomStat** and press [ENTER].

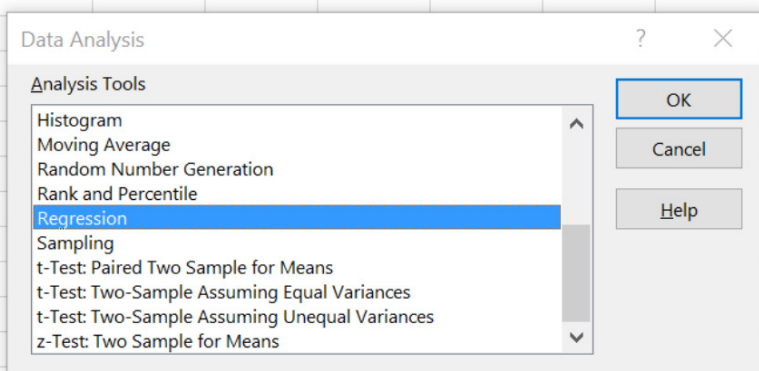


TI-89: Find the least-squares regression line as described in the previous section. Press [\blacklozenge] then [F1] (Y=) and clear any equations that are in the y -editor. In the **Stats/List Editor** select F2 for the **Plots** menu. Use cursor keys to highlight **1:Plot Setup**. Make sure that the other graphs are turned off by pressing F4 button to remove the check marks. Under "Plot 2" press F1 for the **Define** menu. In the "Plot Type" menu select "Scatter." In the "x" space type in the name of your list with the x variable without space, for our example "list1." In the "y" space press [2ND] [-] for the **VAR-LINK** menu. Scroll down the list and find "resid" in the "STATVARS" menu. Press [ENTER] twice and you will be returned to the **Plot Setup** menu. Press F5 **ZoomData** to display the graph. Press F3 **Trace** and use the arrow keys to scroll along the different points.



Excel: Run the regression the same as in the last section when testing to see if there is a significant correlation. Type the data into two columns in Excel. Select the Data tab, then Data Analysis, then choose Regression and select OK.

	A	B	C	D	E	F	G	H	I
1	Hours Studied for Exam	Grade on Exam							
2	20	89							
3	16	72							
4	20	93							
5	18	84							
6	17	81							
7	16	75							
8	15	70							
9	17	82							
10	15	69							
11	16	83							
12	15	80							
13	17	83							
14	16	81							
15	17	84							
16	14	76							
17									



Be careful here, the second column is the y range, and the first column is the x range.

Only check the Labels box if you highlight the labels in the input range. The output range is one cell reference where you want the output to start. Check the residuals, residual plots and normal probability plots, then select OK.

Regression?×

Input

Input Y Range:

Input X Range:

☒ Labels
 ☐ Constant is Zero

☐ Confidence Level: %

Output options

☒ Output Range:
☐ New Worksheet Ply:
☐ New Workbook

Residuals

☒ Residuals
 ☒ Residual Plots
 ☐ Standardized Residuals
 ☐ Line Fit Plots

Normal Probability

☒ Normal Probability Plots

OK

Cancel

Help

Figure 12-21 shows the Excel Output.

CC BY SA

12.2.6.3

<https://stats.libretexts.org/@go/page/34855>

Regression Statistics					
Multiple R	0.825358	←	Absolute value of the correlation coefficient $ r $		
R Square	0.681216	←	Coefficient of Determination R^2		
Adjusted R Square	0.656695				
Standard Error	3.935892	←	Standard Error of Estimate		
Observations	15	←	Sample size n		

ANOVA				F-test statistic	F p-value
	<i>df</i>	<i>SS</i>	<i>MS</i>	<i>F</i>	<i>Significance F</i>
Regression	1	430.3471	430.3471	27.78002	0.000151
Residual	13	201.3862	15.49125		
Total	14	631.7333			

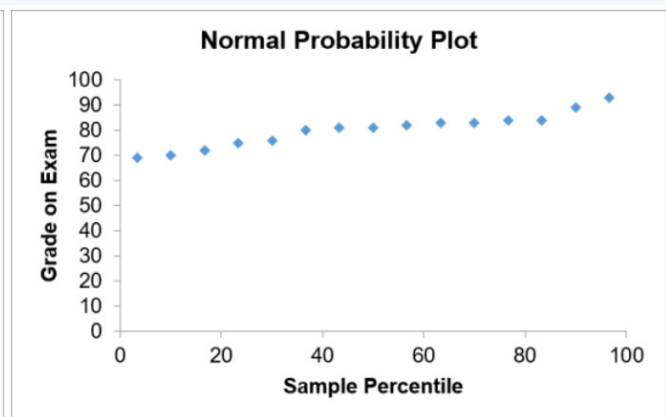
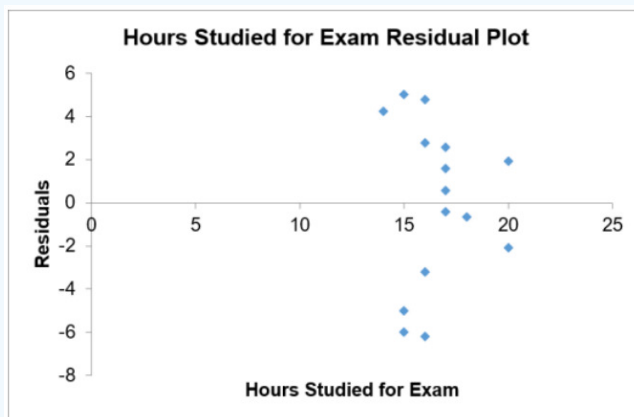
	<i>Coefficients</i>	<i>Standard Error</i>	<i>t Stat</i>	<i>P-value</i>
Intercept	26.74199	10.18074	2.626725	0.020917
Hours Studied for Exam	3.216346	0.610234	5.270675	0.000151

y-intercept b_0 Slope b_1 t-test statistic t p-value

Figure 12-21: Output for running a regression in Excel.

Additional output from Excel gives the residuals, residual plot, and normal probability plot; see below.

RESIDUAL OUTPUT		
<i>Observation</i>	<i>Predicted Grade on Exam</i>	<i>Residuals</i>
1	91.0689	-2.0689
2	78.2035	-6.2035
3	91.0689	1.9311
4	84.6362	-0.6362
5	81.4199	-0.4199
6	78.2035	-3.2035
7	74.9872	-4.9872
8	81.4199	0.5801
9	74.9872	-5.9872
10	78.2035	4.7965
11	74.9872	5.0128
12	81.4199	1.5801
13	78.2035	2.7965
14	81.4199	2.5801
15	71.7708	4.2292



With this additional output, you can check the assumptions about the residuals. The residual plot is random and the normal probability plot forms an approximately straight line.

Putting It All Together

High levels of hydrogen sulfide (H_2S) in the ocean can be harmful to animal life. It is expensive to run tests to detect these levels. A scientist would like to see if there is a relationship between sulfate (SO_4) and H_2S levels, since SO_4 is much easier and less expensive to test in ocean water. A sample of SO_4 and H_2S were recorded together at different depths in the ocean. The sample is reported below in millimolar (mM). If there were a significant relationship, the scientist would like to predict the H_2S level when the ocean has an SO_4 level of 25 mM. Run a complete regression analysis and check the assumptions. If the model is significant, then find the 95% prediction interval to predict the sulfide level in the ocean when the sulfate level is 25 mM.

Sulfate 22.5 27.5 24.6 27.3 23.1 24 24.5 28.4 25.1 24.4 Sulfide 0.6 0.3 0.6 0.4 0.7 0.5 0.7 0.2 0.3 0.7

Solution

Start with a scatterplot to see if a linear relation exists.

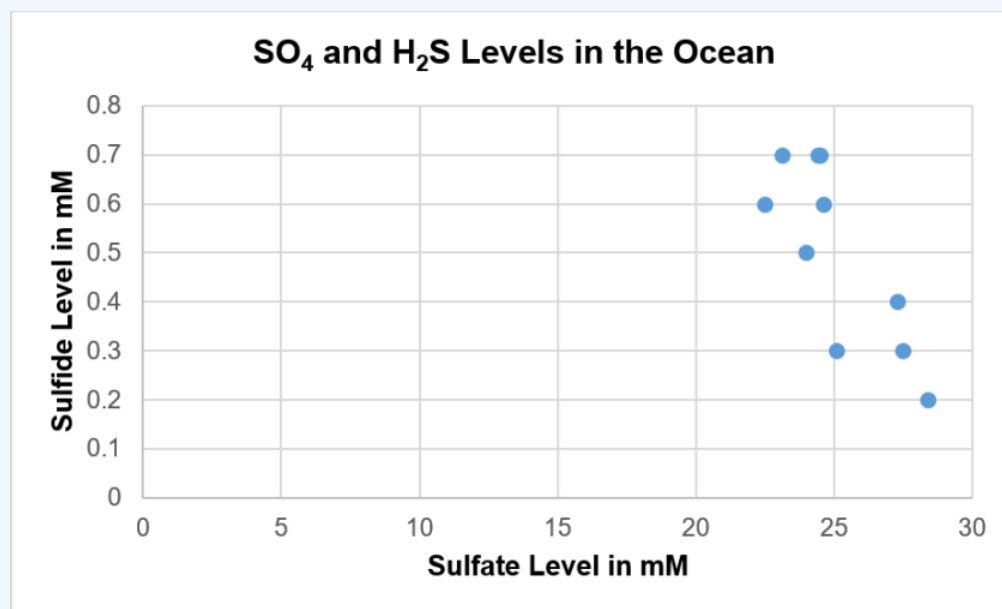


Figure 12-22: Scatterplot of sulfide and sulfate level data.

The scatterplot in Figure 12-22 shows a negative linear relationship. Test to see if the linear relationship is statistically significant. Use $\alpha = 0.05$. You could use an F- or a t-test. I would recommend the t-test if you are using a TI calculator and an F-test if you are using a computer program like Excel or SPSS. We will do the F-test for the following example.

The hypotheses are:

$$H_0 : \beta_1 = 0$$

$$H_1 : \beta_1 \neq 0$$

Compute the sum of squares.

$$SS_{xx} = (n-1)s_x^2 = (10-1)1.959138^2 = 34.544$$

$$SS_{yy} = (n-1)s_y^2 = (10-1)0.188561^2 = 0.32$$

$$SS_{xy} = \sum(xy) - n \cdot \bar{x} \cdot \bar{y} = 123.04 - 10 \cdot 25.14 \cdot 0.5 = -2.66$$

Next, compute the test statistic.

$$SSR = \frac{(SS_{xy})^2}{SS_{xx}} = \frac{(-2.66)^2}{34.544} = 0.2048286$$

$$SST = SS_{yy} = 0.32$$

$$SSE = SST - SSR = 0.32 - 0.2048286 = 0.1151714$$

$$df_T = n - 1 = 9$$

$$df_E = n - p - 1 = 10 - 1 - 1 = 8$$

$$MSR = \frac{SSR}{p} = \frac{0.24829}{1} = 0.204829$$

$$SE = \frac{SSE}{n-p-1} = \frac{0.115171}{8} = 0.014396$$

$$F = \frac{MSR}{MSE} = \frac{0.204829}{0.014396} = 14.228$$

Source	SS	<i>df</i>	MS	F
Regression	0.2048	1	0.2048	14.228
Error	0.1152	8	0.0144	
Total	0.32	9		

Compute the p-value. This is a right-tailed F-test with $df = 1, 8$, which gives a p-value of $=F.DIST.RT(14.2277, 1, 8) = 0.00545$.

We could also use Excel to generate the p-value.

ANOVA					
	<i>df</i>	SS	MS	F	Significance F
Regression	1	0.204829	0.204829	14.22775	0.00545
Residual	8	0.115171	0.014396		
Total	9	0.32			

The p-value = $0.00545 < \alpha = 0.05$; therefore, reject H_0 . There is a statistically significant linear relationship between hydrogen sulfide and sulfate levels in the ocean.

From the linear regression, check the assumptions and make sure there are no outliers.

The standardized residuals are between -2 and 2 , and the scatterplot does not indicate any outliers.

Standard Residuals
-0.91306
-0.16153
0.516413
0.586326
0.379351
-0.776
1.332336
-0.43289
-1.79521
1.264266

The Normal Probability Plot in Figure 12-23 forms an approximately straight line. This indicates that the residuals are approximately normally distributed.

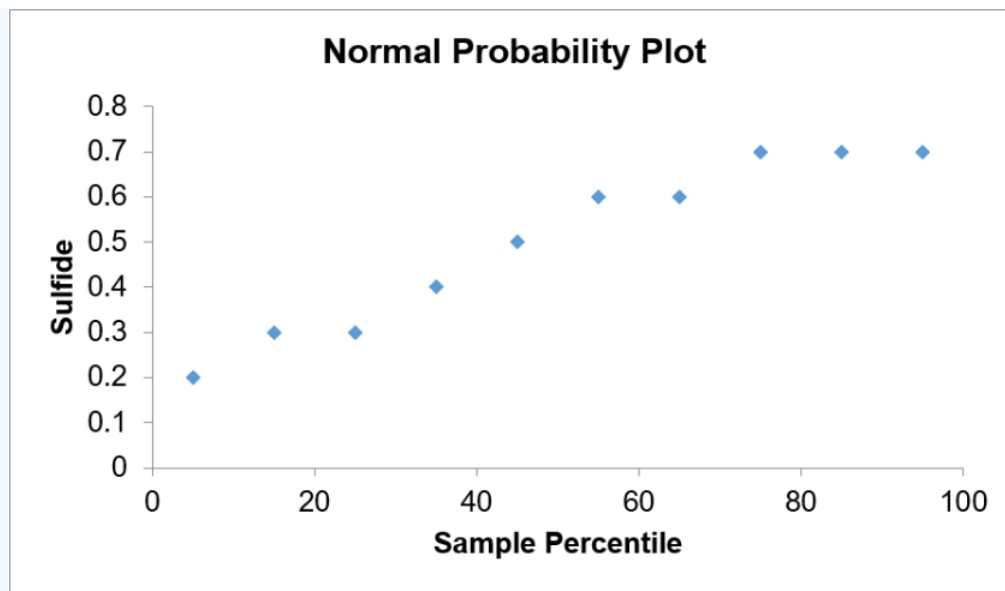


Figure 12-23: Normal probability plot.

The residual plot in Figure 12-24 has no unusual pattern. This indicates that a linear model would work well for this data.

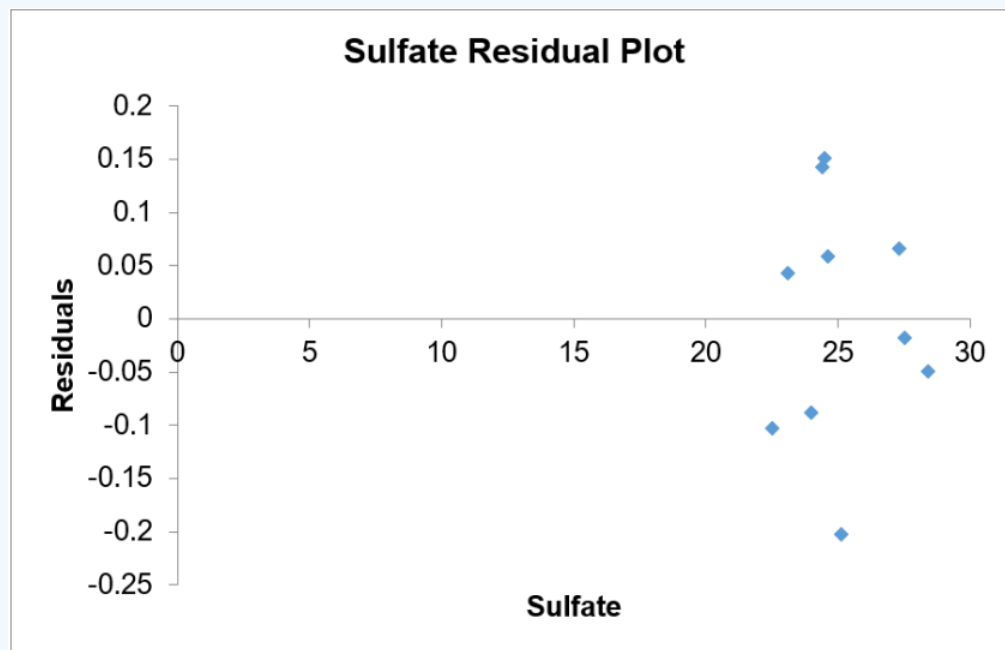


Figure 12-24: Sulfate residual plot.

Now find and use the regression equation to calculate the 95% prediction interval to predict the sulfide level in the ocean when the sulfate level is 25 mM.

Find the regression equation. Calculate the slope: $b_1 = \frac{SS_{xy}}{SS_{xx}} = \frac{-2.66}{34.544} = -0.077$.

Then calculate the y -intercept: $b_0 = \bar{y} - b_1 \cdot \bar{x} = 0.5 - (-0.077) \cdot 25.14 = 2.43586$.

Put the numbers back into the regression equation and write your answer as: $\hat{y} = 2.4359 + (-0.077)x$ or as $\hat{y} = 2.4359 - 0.077x$.

We can use technology to get the regression equation. Coefficients are found in the first column in the computer output.


	<i>Coefficients</i>	<i>Standard Error</i>	<i>t Stat</i>	<i>P-value</i>	<i>Lower 95%</i>	<i>Upper 95%</i>
Intercept	2.43586	0.5146	4.7333	0.0015	1.2491	3.6226
Sulfate	-0.0770032	0.0204	-3.7720	0.0055	-0.1241	-0.0299

We would expect variation in our predicted value every time a new sample is used. Find the 95% prediction interval to estimate the sulfide level when the sulfate level is 25 mM.

Use the prediction interval equation $\hat{y} \pm t_{\alpha/2} \cdot s \sqrt{\left(1 + \frac{1}{n} + \frac{(x - \bar{x})^2}{SS_{xx}}\right)}$.

Substitute $x = 25$ into the equation to get $\hat{y} = 2.43586 - 0.0770032 \cdot 25 = 0.51078$

To find $t_{\alpha/2}$ use your calculator's invT with $df_E = n - 2 = 8$ and left-tail area $\frac{\alpha}{2} = \frac{0.05}{2} = 0.025$, gives $t_{0.025} = \pm 2.306004$.



LinRegTInterval - Response	
t C Int	= 2.4235985
ME	= .087744
SE	= .03805
Pred Int	= 0.2205801
ME	= .290266
SE	= .125874

The standard error of estimate $s = \sqrt{MSE} = \sqrt{0.014396} = 0.11998$, which can also be found using technology.

<i>Regression Statistics</i>	
Multiple R	0.800056
R Square	0.640089
Adjusted R Square	0.595101
Standard Error	0.119985
Observations	10

From the earlier descriptive statistics, we have $n = 10$, $\bar{x} = 25.14$, $SS_{xx} = 34.544$. Substitute each of these values into the prediction interval to get the following:

$$0.51078 \pm 2.306004 \cdot 0.119985 \sqrt{\left(1 + \frac{1}{10} + \frac{(25 - 25.14)^2}{34.544}\right)}$$

$$0.51078 \pm 0.290265$$

$$0.2205 < y < 0.8010$$

We can be 95% confident that the true sulfide level in the ocean will be between 0.2205 and 0.801 mM when the sulfate level is 25 mM.

Summary

A simple linear regression should only be performed if you observe visually that there is a linear pattern in the scatterplot and that there is a statistically significant correlation between the independent and dependent variables. Use technology to find the numeric values for the y -intercept $= a = b_0$ and slope $= b = b_1$, then make sure to use the correct notation when substituting your numbers back in the regression equation $\hat{y} = b_0 + b_1x$. Another measure of how well the line fits the data is called the coefficient of

determination R^2 . When R^2 is close to 1 (or 100%), then the line fits the data very closely. The advantage over using R^2 over r is that we can use R^2 for nonlinear regression, whereas r is only for linear regression.

One should always check the assumptions for regression before using the regression equation for prediction. Make sure that the residual plots have a completely random horizontal band around zero. There should be no patterns in the residual plots such as a sideways V that may indicate a non-constant variance. A pattern like a slanted line, a U, or an upside-down U shape would suggest a non-linear model. Check that the residuals are normally distributed; this is not the same as the population being normally distributed. Check to make sure that there are no outliers. Be careful with lurking and confounding variables.

This page titled [12.2.6: Conclusion - Simple Linear Regression](#) is shared under a [CC BY-SA 4.0](#) license and was authored, remixed, and/or curated by [Rachel Webb](#).

12.3: Multiple Linear Regression

A multiple linear regression line describes how two or more predictor variables affect the response variable y . An equation of a line relating p independent variables to y is of the form for the population as: $y = \beta_0 + \beta_1 x_1 + \beta_2 x_2 + \cdots + \beta_p x_p + \varepsilon$, where $\beta_1, \beta_2, \dots, \beta_p$ are the slopes, β_0 is the y -intercept and ε is called the error term.

We use sample data to estimate this equation using the predicted value of y as \hat{y} with the regression equation (also called the line of best fit or least squares regression line) as:

$$y = b_0 + b_1 x_1 + b_2 x_2 + \cdots + b_p x_p$$

where b_1, b_2, \dots, b_p are the slopes, and b_0 is the y -intercept

For example, if we had two independent variables, we would have a 3-dimensional space as in Figure 12-25 where the red dots represent the sample data points and the equation would be a plane in the space represented by $y = b_0 + b_1 x_1 + b_2 x_2$.

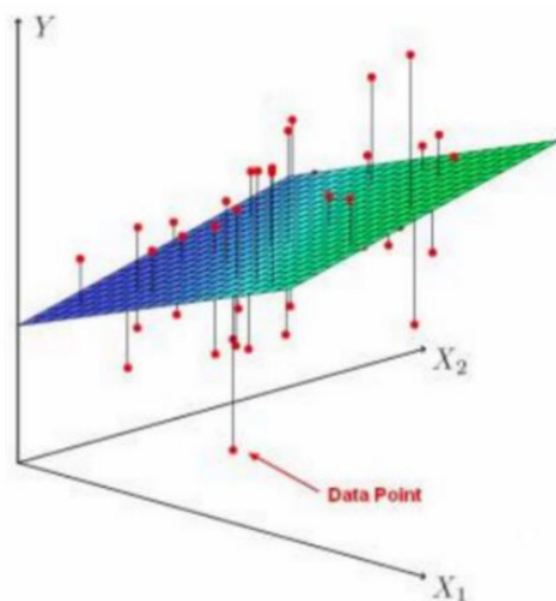


Figure 12-25: Multiple linear regression with 2 independent variables. [This photo](#) by unknown author is licensed under CC BY-SA-NC.

The calculations use matrix algebra, which is not a prerequisite for this course. We will instead rely on a computer to calculate the multiple regression model.

If all the population slopes were equal to zero, the model $y = \beta_0 + \beta_1 x_1 + \beta_2 x_2 + \cdots + \beta_p x_p + \varepsilon$ would not be significant and should not be used for prediction. If one or more of the population slopes are not equal to zero then the model will be significant, meaning there is a significant relationship between the independent variables and the dependent variable and we may want to use this model for prediction. There are other statistics to look at to decide if this would be the best model to use. Those methods are discussed in more advanced courses.

The hypotheses will always have an equal sign in the null hypotheses.

The hypotheses are:

$$H_0 : \beta_1 = \beta_2 = \cdots = \beta_p = 0$$

H_1 : At least one slope is not zero.

Note that the alternative hypothesis is not written as $H_1 : \beta_1 \neq \beta_2 \neq \cdots \neq \beta_p \neq 0$. This is because we just want one or more of the independent variables to be significantly different from zero, not necessarily all the slopes unequal to zero.

Use the F-distribution with degrees of freedom for regression = $df_R = p$, where p = the number of independent variables (predictors), and degrees of freedom for error = $df_E = n - p - 1$, where n is the number of pairs. This is always a right-tailed

ANOVA test, since we are testing if the variation in the regression model is larger than the variation in the error.

The test statistic and p-value are the last two values on the right in the ANOVA table. The p-value rule is easiest to use since the p-value is part of the outcome, but a critical value can be found using the invF program on your calculator or in Excel using =F.INV.RT(α , df_R , df_E) We can also single out one independent variable at a time and use a t-test to see if the variable is significant by itself in predicting y .

This would have hypotheses:

$$H_0 : \beta_i = 0$$

$$H_1 : \beta_i \neq 0$$

where i is a placeholder for whichever independent variable is being tested.

This t-test is found in the same row as the coefficient that you are testing.

Assumptions for Multiple Linear Regression

When doing multiple regression, the following assumptions need to be met:

1. The residuals of the model are approximately normally distributed.
2. The residuals of the model are independent (not autocorrelated) and have a constant variance (homoscedasticity).
3. There is a liner relationship between the dependent variable and each independent variable.
4. Independent variables are uncorrelated with each other (no multicollinearity).

The following is a schematic for the regression output for Microsoft Excel. Other software usually has a similar output but may have numbers in slightly different places. The blue spaces have the descriptions of the corresponding numbers.

Regression Statistics	
Multiple R	Multiple Correlation Coefficient = $ r $
R Square	Coefficient of Determination = R^2
Adjusted R Square	R^2 Adjusted for degrees of freedom for Multiple Regression
Standard Error	Standard Error of Estimate (Residual Standard Deviation) = s
Observations	Number of data pairs = n

ANOVA

	df	SS	MS	F	Significance F
Regression	p =number of independent variables	SSR =Regression Sum of Squares	$MSR=SSR/k$	Test Statistic $F=MSR/MSE$	p-value for whole model
Residual	$n - p - 1$	SSE =Error Sum of Squares	$MSE=SSE/(n-p-1)$		
Total	$n - 1$	SST =Total Sum of Squares			

	Coefficients	Standard Error	t Stat	P-value
Y-Intercept	b_0	Standard Deviation of b_0	Test Stat for b_0	p-value for b_0
1 st X Variable	b_1	Standard Deviation of b_1	Test Stat for b_1	p-value for b_1
2 nd X Variable	b_2	Standard Deviation of b_2	Test Stat for b_2	p-value for b_2
3 rd X Variable	b_3	Standard Deviation of b_3	Test Stat for b_3	p-value for b_3

Figure 12-26: Excel output for multiple linear regression.

The coefficients column gives the numeric values to find the regression equation $y = b_0 + b_1x_1 + b_2x_2 + \dots + b_px_p$. The p-values for b_i should be investigated to see if the variable is statistically significant. One should also be careful that the independent variables are not significantly correlated amongst themselves. Correlated independent variables may give unexpected outcomes in the overall regression model and actually flip the sign on a coefficient.

A sample of 30 homes that were recently on the market were selected. The listing price in \$1,000's of the home, the livable square feet of the home, the lot size in 1,000's of square feet and the number of bathrooms in the home were recorded. A multiple linear regression was done in Excel with the following output. Test to see if there is a significant relationship between the listing price of a home with the livable square feet, lot size, and number of bathrooms. If there is a relationship, then use the regression model to predict the listing price for a home that has 2,350 square feet, 3 bathrooms and has a 5,000 square foot lot. Use $\alpha = 0.05$.

SUMMARY OUTPUT

<i>Regression Statistics</i>	
Multiple R	0.977709
R Square	0.955915
Adjusted R Square	0.950828
Standard Error	20.3056
Observations	30

ANOVA

	<i>df</i>	<i>SS</i>	<i>MS</i>	<i>F</i>	<i>Significance F</i>
Regression	3	232450.1	77483.36	187.9217	9.74E-18
Residual	26	10720.25	412.3173		
Total	29	243170.3			

	<i>Coefficients</i>	<i>Standard Error</i>	<i>t Stat</i>	<i>P-value</i>	<i>Lower 95%</i>	<i>Upper 95%</i>
Intercept	-28.8477	29.71148	-0.97093	0.34053	-89.9206	32.22507
Square Feet	0.170908	0.015448	11.06366	2.48E-11	0.139155	0.202661
Lot Size	6.777705	1.421295	4.768683	6.19E-05	3.856191	9.699218
Bathrooms	15.5347	9.20827	1.687038	0.10356	-3.39317	34.46257

Solution

First, we need to test to see if the overall model is significant.

The hypotheses are:

$$H_0 : \beta_1 = \beta_2 = \beta_3 = 0$$

$$H_1 : \text{At least one slope is not zero.}$$

The test statistic is $F = 187.9217$ and the p-value = $9.74E - 18 \sim 0$

ANOVA

	<i>df</i>	<i>SS</i>	<i>MS</i>	<i>F</i>	<i>Significance F</i>
Regression	3	232450.1	77483.36	187.9217	9.74E-18
Residual	26	10720.25	412.3173		
Total	29	243170.3			

We reject H_0 , since the p-value is less than $\alpha = 0.05$. There is enough evidence to support the claim that there is a significant relationship between the number of bathrooms and lot size of a home with its listing price. Since we reject H_0 , we can use the regression model for prediction.

The question asked to predict the listing price for a home that has 2,350 square feet, 3 bathrooms and has a 5,000 square foot lot. This gives us $x_1 = 2350$, $x_2 = 5$ (5,000 square feet), and $x_3 = 3$.

The coefficients column has the values that correspond to the y-intercept and slopes gives the regression equation:
 $\hat{y} = -28.8477 + 0.170908 \cdot x_1 + 6.7705 \cdot x_2 + 15.5347 \cdot x_3$.

	<i>Coefficients</i>	<i>Standard Error</i>	<i>t Stat</i>	<i>P-value</i>	<i>Lower 95%</i>	<i>Upper 95%</i>
Intercept	-28.8477	29.71148	-0.97093	0.34053	-89.9206	32.22507
Square Feet	0.170908	0.015448	11.06366	2.48E-11	0.139155	0.202661
Lot Size	6.777705	1.421295	4.768683	6.19E-05	3.856191	9.699218
Bathrooms	15.5347	9.20827	1.687038	0.10356	-3.39317	34.46257

Substitute the three given x values into the equation in the correct order and you get
 $\hat{y} = -28.8477 + 0.170908 \cdot 2350 + 6.7705 \cdot 5 + 15.5347 \cdot 3 = 453.2787$

This then gives a predicted listing price of \$453,278.

Note that our sample size is very small and we really need to check assumptions in order to use this predicted value with any reliability.

Is this the best model to use? Note that not all the p-values for each of the individual slope coefficients are significant. The number of bathrooms has a t-test statistic = 1.687038 and p-value = 0.10356, which is not statistically significant at the 5% level of significance.

	<i>Coefficients</i>	<i>Standard Error</i>	<i>t Stat</i>	<i>P-value</i>	<i>Lower 95%</i>	<i>Upper 95%</i>
Intercept	-28.8477	29.71148	-0.97093	0.34053	-89.9206	32.22507
Square Feet	0.170908	0.015448	11.06366	2.48E-11	0.139155	0.202661
Lot Size	6.777705	1.421295	4.768683	6.19E-05	3.856191	9.699218
Bathrooms	15.5347	9.20827	1.687038	0.10356	-3.39317	34.46257

We may want to rerun the regression model without the number of bathroom variables and see if we get a higher R^2 and a lower standard error of estimate. Ideally, we would try all the different combinations of independent variables and see which combination gives the best model. This is a lot of work to do if you have many independent variables. Most statistical software packages have built in functions that find the best fit.

Adjusted Coefficient of Determination

When we add more predictor variables into the model, this inflates the coefficient of variation, R^2 . In multiple regression, we adjust for this inflation using the following formula for adjusted coefficient of variation.

Adjusted Coefficient of Determination

$$R_{adj}^2 = 1 - \left(\frac{(1 - R^2)(n - 1)}{(n - p - 1)} \right)$$

Use the previous example to verify the value of the adjusted coefficient of determination starting with the regular coefficient of determination $R^2 = 0.955915$.

Solution

First identify in the Excel output $R^2 = 0.955915$, $n - 1 = df_T = 29$, and $n - p - 1 = df_E = 26$.

SUMMARY OUTPUT

<i>Regression Statistics</i>	
Multiple R	0.977709
R Square	0.955915
Adjusted R Square	0.950828
Standard Error	20.3056
Observations	30

ANOVA

	<i>df</i>	<i>SS</i>	<i>MS</i>	<i>F</i>	<i>Significance F</i>
Regression	3	232450.1	77483.36	187.9217	9.74E-18
Residual	26	10720.25	412.3173		
Total	29	243170.3			

Substitute these values in and we get $R_{adj}^2 = 1 - \left(\frac{(1-0.955915)(29)}{(26)} \right) = 0.950828$. This is the same value as the adjusted R^2 reported in the Excel output.

SUMMARY OUTPUT

<i>Regression Statistics</i>	
Multiple R	0.977709
R Square	0.955915
Adjusted R Square	0.950828

The Excel output has both the adjusted coefficient of determination and the regular coefficient of determination. However, you may need the equation for the adjusted coefficient of determination depending on what information is given in a problem.

There are more types of regression models and more that should be done for a complete regression analysis. Ideally, you would find several models and pick the one with no outliers, the smallest standard error of estimate, a good residual plot, and the highest adjusted R^2 and check the assumptions behind each model before using for prediction. More advanced techniques are discussed in a regression course.

“Well, I was in fact, I was moving backwards in time. Hmmm. Well, I think we've sorted all that out now. If you'd like to know, I can tell you that in your universe you move freely in three dimensions that you call space. You move in a straight line in a fourth, which you call time, and stay rooted to one place in a fifth, which is the first fundamental of probability. After that it gets a bit complicated, and there's all sorts of stuff going on in dimensions 13 to 22 that you really wouldn't want to know about. All you really need to know for the moment is that the universe is a lot more complicated than you might think...”

(Adams, 2002)

This page titled [12.3: Multiple Linear Regression](#) is shared under a [CC BY-SA 4.0](#) license and was authored, remixed, and/or curated by [Rachel Webb](#) via [source content](#) that was edited to the style and standards of the LibreTexts platform.

12.4: Chapter 12 Formulas

$SS_{xx} = (n-1)s_x^2$ $SS_{yy} = (n-1)s_y^2$ $SS_{xy} = \sum(xy) - n \cdot \bar{x} \cdot \bar{y}$	Correlation Coefficient $r = \frac{SS_{xy}}{\sqrt{(SS_{xx} \cdot SS_{yy})}}$
Correlation t-test $H_0 : \rho = 0$ $H_1 : \rho \neq 0$ $t = r \sqrt{\frac{n-2}{1-r^2}}$ $df = n - 2$	Regression Equation (Line of Best Fit) $\hat{y} = b_0 + b_1x$
Slope $b_1 = \frac{SS_{xy}}{SS_{xx}}$	y-Intercept $b_0 = \bar{y} - b_1\bar{x}$
Slope t-test $H_0 : \beta_1 = 0$ $H_1 : \beta_1 \neq 0$ $t = \frac{b_1}{\sqrt{\frac{MSE}{SS_{xx}}}}$ $df = n - p - 1 = n - 2$	Slope/Model F-test $H_0 : \beta_1 = 0$ $H_1 : \beta_1 \neq 0$
Standard Error of Estimate $s_{est} = \sqrt{\frac{\sum(y_i - \hat{y}_i)^2}{n-2}} = \sqrt{MSE}$	Residual $e_i = y_i - \hat{y}_i$
Prediction Interval $\hat{y} \pm t_{\alpha/2} \cdot s_{est} \sqrt{\left(1 + \frac{1}{n} + \frac{(x - \bar{x})^2}{SS_{xx}}\right)}$	Coefficient of Determination $R^2 = (r)^2 = \frac{SSR}{SST}$
Multiple Linear Regression Equation $\hat{y} = b_0 + b_1x_1 + b_2x_2 + \dots + b_px_p$	Model F-Test for Multiple Regression $H_0 : \beta_1 = \beta_2 = \dots = \beta_p = 0$ $H_1 : \text{At least one slope is not zero.}$
Adjusted Coefficient of Determination $R_{adj}^2 = 1 - \left(\frac{(1-R^2)(n-1)}{(n-p-1)}\right)$	

Source	SS = Sum of Squares	df	MS = Mean Square	F
Regression	$SSR = \frac{(SS_{xy})^2}{SS_{xx}}$	p	$MSR = \frac{SSR}{p}$	$F = \frac{MSR}{MSE}$
Error	$SSE = SS_{yy} - SSR$	$n - p - 1$	$MSE = \frac{SSE}{n - p - 1}$	
Total	$SST = SS_{yy}$	$n - 1$		

This page titled [12.4: Chapter 12 Formulas](#) is shared under a [CC BY-SA 4.0](#) license and was authored, remixed, and/or curated by [Rachel Webb](#) via [source content](#) that was edited to the style and standards of the LibreTexts platform.

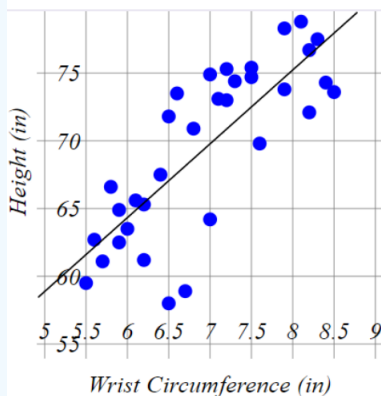
12.5: Chapter 12 Exercises

? Chapter 12 Exercises

- The correlation coefficient, r , is a number between _____.
 - 1 and 1
 - 10 and 10
 - 0 and 10
 - 0 and ∞
 - 0 and 1
 - $-\infty$ and ∞
- To test the significance of the correlation coefficient, we use the t-distribution with how many degrees of freedom?
 - $n - 1$
 - n
 - $n + 1$
 - $n - 2$
 - $n_1 + n_2 - 2$
- What are the hypotheses for testing to see if a correlation is statistically significant?
 - $H_0 : r = 0 \quad H_1 : r \neq 0$
 - $H_0 : \rho = 0 \quad H_1 : \rho \neq 0$
 - $H_0 : \rho = \pm 1 \quad H_1 : \rho \neq \pm 1$
 - $H_0 : r = \pm 1 \quad H_1 : r \neq \pm 1$
 - $H_0 : \rho = 0 \quad H_1 : \rho = 1$
- The coefficient of determination is a number between _____.
 - 1 and 1
 - 10 and 10
 - 0 and 10
 - 0 and ∞
 - 0 and 1
 - $-\infty$ and ∞
- Which of the following is not a valid linear regression equation?
 - $\hat{y} = -5 + \frac{2}{9}x$
 - $\hat{y} = 3x + 2$
 - $\hat{y} = \frac{2}{9} - 5x$
 - $\hat{y} = 5 + 0.4x$
- Body frame size is determined by a person's wrist circumference in relation to height. A researcher measures the wrist circumference and height of a random sample of individuals. The data is displayed below. Use $\alpha = 0.05$.

Regression Statistics	
Multiple R	0.7938
R Square	0.6301
Adjusted R Square	0.6182
Standard Error	3.8648
Observations	33

	Coefficients	Standard Error	t Stat	P-value
Intercept	31.6304	5.2538	6.0205	1.16E-06
Circumference	5.4496	0.7499	7.2673	3.55E-08



- What is the value of the test statistic to see if the correlation is statistically significant?
 - 6.0205
 - 1.16E-06

- iii. 3.55E-08
- iv. 5.2538
- v. 7.2673
- vi. 0.7499
- vii. 0.7938

b) What is the correct p-value and conclusion for testing if there is a significant correlation?

- i. 1.16E-06; there is a significant correlation.
- ii. 3.55E-08; there is a significant correlation.
- iii. 1.16E-06; There is not a significant correlation.
- iv. 3.55E-08, There is not a significant correlation.
- v. 0.7938, There is a significant correlation.
- vi. 0.7938, There is not a significant correlation.

7. Bone mineral density and cola consumption have been recorded for a sample of patients. Let x represent the number of colas consumed per week and y the bone mineral density in grams per cubic centimeter. Assume the data is normally distributed. Calculate the correlation coefficient.

x	1	2	3	4	5	6	7	8	9	10	11
y	0.883	0.8734	0.8898	0.8852	0.8816	0.863	0.8634	0.8648	0.8552	0.8546	0.862

8. A teacher believes that the third homework assignment is a key predictor of how well students will do on the midterm. Let x represent the third homework score and y the midterm exam score. A random sample of last term's students were selected and their grades are shown below. Assume scores are normally distributed. Use $\alpha = 0.05$.

H W 3	Midterm	HW3	Midterm	HW3	Midterm
1 3 . 1	59	6.4	43	20	86
2 1 . 9	87	20.2	79	15.4	73
8 . 8	53	21.8	84	25	93
2 4 . 3	95	23.1	92	9.7	52
5 . 4	39	22	87	15.1	70
1 3 . 2	66	11.4	54	15	65
2 0 . 9	89	14.9	71	16.8	77
1 8 . 5	78	18.4	76	20.1	78

- a) State the hypotheses to test for a significant correlation.
- b) Compute the correlation coefficient.
- c) Compute the p-value to see if there is a significant correlation.
- d) State the correct decision.
- e) Is there a significant correlation?
- f) Compute the coefficient of determination.
- g) Write a sentence interpreting R^2 .
- h) Does doing poorly on homework 3 cause a student to do poorly on the midterm exam? Explain.
- i) Find the standard error of estimate.

9. The sum of the residuals should be _____.

- a) a
- b) b
- c) 0
- d) 1
- e) r

10. An object is thrown from the top of a building. The following data measure the height of the object from the ground for a five-second period. Calculate the correlation coefficient.

Seconds	0.5	1	1.5	2	2.5	3	3.5	4	4.5	5
---------	-----	---	-----	---	-----	---	-----	---	-----	---

Height	112.5	110.875	106.8	100.275	91.3	79.875	70.083	59.83	30.65	0
--------	-------	---------	-------	---------	------	--------	--------	-------	-------	---

11. A teacher believes that the third homework assignment is a key predictor of how well students will do on the midterm. Let x represent the third homework score and y the midterm exam score. A random sample of last term's students were selected and their grades are shown below. Assume scores are normally distributed. Use $\alpha = 0.05$.

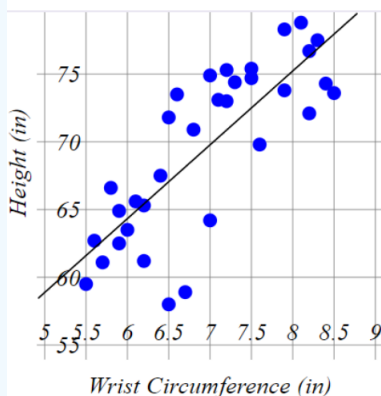
H W 3	Midterm		HW3		Midterm		HW3		Midterm
1 3 . 1	59		6.4		43		20		86
2 1 . 9	87		20.2		79		15.4		73
8 . 8	53		21.8		84		25		93
2 4 . 3	95		23.1		92		9.7		52
5 . 4	39		22		87		15.1		70
1 3 . 2	66		11.4		54		15		65
2 0 . 9	89		14.9		71		16.8		77
1 8 . 5	78		18.4		76		20.1		78

- Compute the regression equation.
- Compute the predicted midterm score when the homework 3 score is 15.
- Compute the residual for the point (15, 65).
- Find the 95% prediction interval for the midterm score when the homework 3 score is 15.

12. Body frame size is determined by a person's wrist circumference in relation to height. A researcher measures the wrist circumference and height of a random sample of individuals. The data is displayed below.

Regression Statistics	
Multiple R	0.7938
R Square	0.6301
Adjusted R Square	0.6182
Standard Error	3.8648
Observations	33

	Coefficients	Standard Error	t Stat	P-value
Intercept	31.6304	5.2538	6.0205	1.16E-06
Circumference	5.4496	0.7499	7.2673	3.55E-08



a) Which is the correct regression equation?

- i. $\hat{y} = 31.6304 + 5.4496$
- ii. $\hat{y} = 31.6304 + 5.4496x$
- iii. $\hat{y} = 5.4496 + 31.6304x$
- iv. $\hat{y} = 31.6304 + 5.2538x$
- v. $y = 31.6304 + 5.4496x$

b) What is the predicted height (in inches) for a person with a wrist circumference of 7 inches?

c) Which number is the standard error of estimate?

d) Which number is the coefficient of determination?

e) Compute the correlation coefficient.

f) What is the correct test statistic for testing if the slope is significant $H_1 : \beta_1 \neq 0$?

g) What is the correct p-value for testing if the slope is significant $H_1 : \beta_1 \neq 0$?

h) At the 5% level of significance, is there a significant relationship between wrist circumference and height?

13. Bone mineral density and cola consumption have been recorded for a sample of patients. Let x represent the number of colas consumed per week and y the bone mineral density in grams per cubic centimeter. Assume the data is normally distributed. Calculate the coefficient of determination.

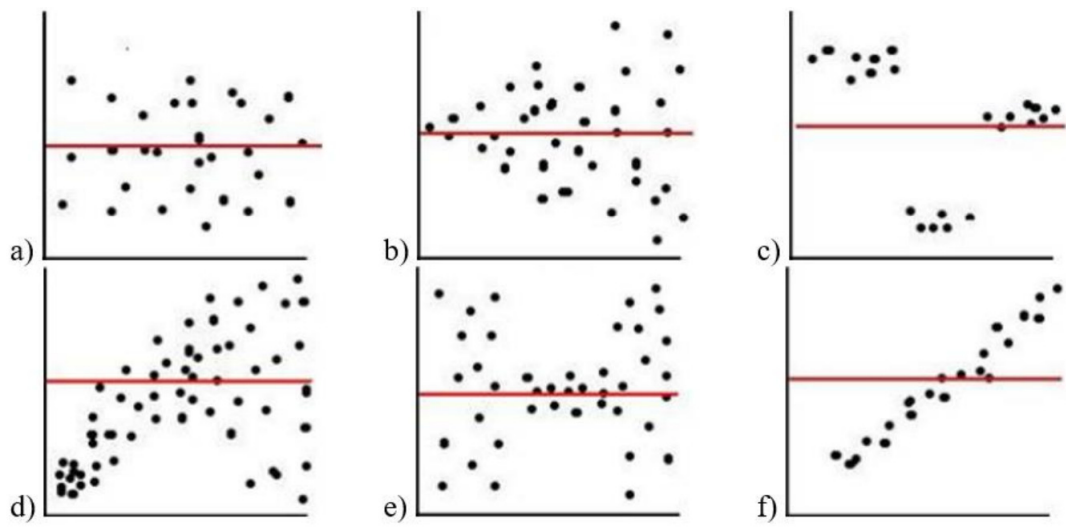
x	1	2	3	4	5	6	7	8	9	10	11
y	0.883	0.8734	0.8898	0.8852	0.8816	0.863	0.8634	0.8648	0.8552	0.8546	0.862

14. Bone mineral density and cola consumption have been recorded for a sample of patients. Let x represent the number of colas consumed per week and y the bone mineral density in grams per cubic centimeter. Assume the data is normally distributed. A regression equation for the following data is $\hat{y} = 0.8893 - 0.0031x$. Which is the best interpretation of the slope coefficient?

x	1	2	3	4	5	6	7	8	9	10	11
y	0.883	0.8734	0.8898	0.8852	0.8816	0.863	0.8634	0.8648	0.8552	0.8546	0.862

- a) For every additional average weekly soda consumption, a person's bone density increases by 0.0031 grams per cubic centimeter.
- b) For every additional average weekly soda consumption, a person's bone density decreases by 0.0031 grams per cubic centimeter.
- c) For an increase of 0.8893 in the average weekly soda consumption, a person's bone density decreases by 0.0031 grams per cubic centimeter.
- d) For every additional average weekly soda consumption, a person's bone density decreases by 0.8893 grams per cubic centimeter.

15. Which residual plot has the best linear regression model?

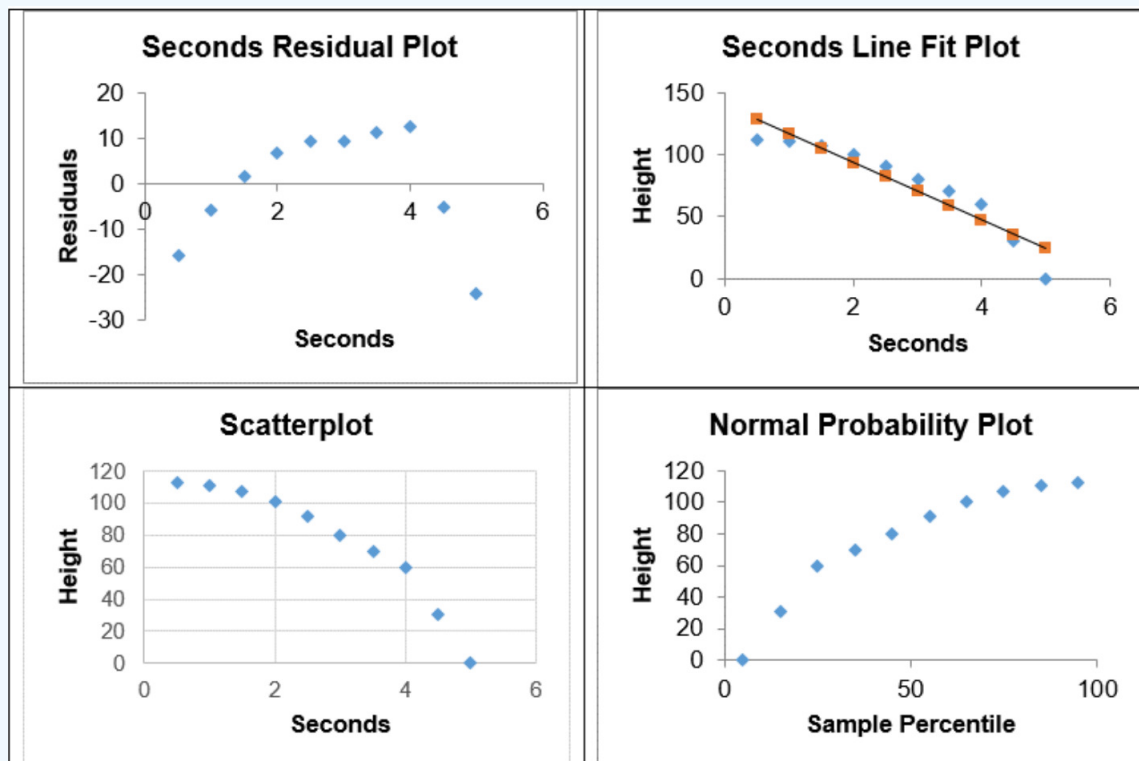


- a) a
- b) b
- c) c
- d) d
- e) e
- f) f

16. An object is thrown from the top of a building. The following data measure the height of the object from the ground for a five-second period.

Seconds	0.5	1	1.5	2	2.5	3	3.5	4	4.5	5
Height	112.5	110.875	106.8	100.275	91.3	79.875	70.083	59.83	30.65	0

The following four plots were part of the regression analysis.



There is a statistically significant correlation between time and height, $r = -0.942$, $p\text{-value} = 0.0000454$. Should linear regression be used for this data? Why or why not? Choose the correct answer.

- a) Yes, the p-value indicates that there is a significant correlation so we can use linear regression.
- b) Yes, the normal probability plot has a nice curve to it.
- c) Yes, there is a nice straight line in the line fit plot.
- d) No, there is a curve in the residual plot, normal plot and the scatterplot.

17. The following data represent the leaching rates (percent of lead extracted vs. time in minutes) for lead in solutions of magnesium chloride (MgCl_2). Use $\alpha = 0.05$.

Time (x)	4	8	16	30	60	120
Percent Extracted (y)	1.2	1.6	2.3	2.8	3.6	4.4

- State the hypotheses to test for a significant correlation.
- Compute the correlation coefficient.
- Compute the p-value to see if there is a significant correlation.
- State the correct decision.
- Is there a significant correlation?
- Compute the coefficient of determination.
- Compute the regression equation.
- Compute the 95% prediction interval for 100 minutes.
- Write a sentence interpreting this interval using units and context.

18. Bone mineral density and cola consumption have been recorded for a sample of patients. Let x represent the number of colas consumed per week and y the bone mineral density in grams per cubic centimeter. Assume the data is normally distributed. What is the residual for the observed point (7, 0.8634)

x	1	2	3	4	5	6	7	8	9	10	11
y	0.883	0.8734	0.8898	0.8852	0.8816	0.863	0.8634	0.8648	0.8552	0.8546	0.862

19. A study was conducted to determine if there was a linear relationship between a person's age and their peak heart rate. Use $\alpha = 0.05$.

Age (x)	16	26	32	37	42	53	48	21
Peak Heart Rate (y)	220	194	193	178	172	160	174	214

- What is the estimated regression equation that relates number of hours worked and test scores for high school students.
- Interpret the slope coefficient for this problem.
- Compute and interpret the coefficient of determination.
- Compute the coefficient of nondetermination.
- Compute the standard error of estimate.
- Compute the correlation coefficient.
- Compute the 95% Prediction Interval for peak heart rate for someone who is 25 years old.

20. The following data represent the weight of a person riding a bike and the rolling distance achieved after going down a hill without pedaling.

Weight (lbs)	59	84	97	56	103	87	88	92	53	66
Rolling distance (m)	26	43	48	20	59	44	48	46	28	32

- Can it be concluded at a 0.05 level of significance that there is a linear correlation between the two variables?
- Using the regression line for this problem, find the predicted bike rolling distance for a person that weighs 110 lbs.
- Find the 99% prediction interval for bike rolling distance for a person that weighs 110 lbs.

21. Body frame size is determined by a person's wrist circumference in relation to height. A researcher measures the wrist circumference and height of a random sample of individuals. The Excel output and scatterplot are displayed below. Find the regression equation and predict the height (in inches) for a person with a wrist circumference of 7 inches. Then, compute the residual for the point (7, 75).

	<i>Coefficients</i>	<i>Standard Error</i>	<i>t Stat</i>	<i>P-value</i>
Intercept	31.6304	5.2538	6.0205	1.16E-06
Circumference	5.4496	0.7499	7.2673	3.55E-08

22. It has long been thought that the length of one's femur is positively correlated to the length of one's tibia. The following are data for a classroom of students who measured each (approximately) in inches. A significant linear correlation was found between the two variables. Find the 90% prediction interval for the length of someone's tibia when it is known that their femur is 23 inches long.

Femur Length	18.7	20.5	16.2	15.0	19.0	21.3	21.0	14.3	15.8
Tibia Length	14.2	15.9	13.1	12.4	16.2	15.8	16.2	12.1	13.0

23. The data below represent the driving speed (mph) of a vehicle and the corresponding gas mileage (mpg) for several recorded instances.

Driving Speed	Gas Mileage	Driving Speed	Gas Mileage
57	21.8	62	21.5
66	20.9	66	20.5
42	25.0	67	23.0
34	26.2	52	19.4
44	24.3	49	25.3
44	26.3	48	24.3
25	26.1	41	28.4
20	27.2	38	29.6
24	23.5	26	32.5
42	22.6	24	30.8
52	19.4	21	28.8
54	23.9	19	33.5

Driving Speed	Gas Mileage	Driving Speed	Gas Mileage
60	24.8	24	25.1

- Do a hypothesis test to see if there is a significant correlation. Use $\alpha = 0.10$.
- Compute the standard error of estimate.
- Compute the regression equation and use it to find the predicted gas mileage when a vehicle is driving at 77 mph.
- Compute the 90% prediction interval for gas mileage when a vehicle is driving at 77 mph.

24. The following data represent the age of a car and the average monthly cost for repairs. A significant linear correlation is found between the two variables. Use the data to find a 95% prediction interval for the monthly cost of repairs for a vehicle that is 15 years old.

Age of Car (yrs)	1	2	3	4	5	6	7	8	9	10
Monthly Cost (\$)	25	34	42	45	55	71	82	88	87	90

25. In a sample of 20 football players for a college team, their weight and 40-yard-dash time in minutes were recorded.

Weight (lbs)	40-Yard Dash (min)	Weight (lbs)	40-Yard Dash (min)
285	5.95	195	4.85
185	4.99	254	5.12
165	4.92	140	4.87
188	4.77	212	5.05
160	4.52	158	4.75
156	4.67	188	4.87
256	5.22	134	4.53
169	4.95	205	4.92
210	5.06	178	4.88
165	4.83	159	4.79

- Do a hypothesis test to see if there is a significant correlation. Use $\alpha = 0.01$.
- Compute the standard error of estimate.
- Compute the regression equation and use it to find the predicted 40-yard-dash time for a football player that is 200 lbs.
- Compute the 99% prediction interval for a football player that is 200 lbs.
- Write a sentence interpreting the prediction interval.

26. The following data represent the enrollment at a small college during its first ten years of existence. A significant linear relationship is found between the two variables. Find a 90% prediction interval for the enrollment after the college has been open for 14 years.

Years	1	2	3	4	5	6	7	8	9	10
Enrollment	856	842	923	956	940	981	1025	996	1057	1088

27. A new fad diet called Trim-to-the-MAX is running some tests that they can use in advertisements. They sample 25 of their users and record the number of days each has been on the diet along with how much weight they have lost in pounds. The data is below. A significant linear correlation was found between the two variables. Find the 95% prediction interval for the weight lost when a person has been on the diet for 60 days.

Days on Diet	7	12	16	19	25	34	39	43	44	49
Weight Loss	5	7	12	15	20	25	24	29	33	35

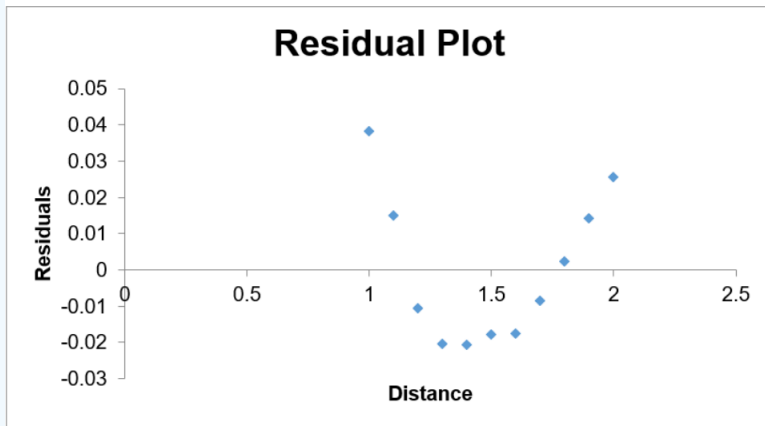
28. An elementary school uses the same system to test math skills at their school throughout the course of the 5 grades at their school. The age and score (out of 100) of several students is displayed below. A significant linear relationship is found between the student's age and their math score. Find a 90% prediction interval for the score a student would earn given that they are 5 years old.

Student Age	6	6	7	8	8	9	10	11	
Math Score	54	42	50	61	67	65	71	72	

29. The intensity (in candelas) of a 100-watt light bulb was measured by a sensing device at various distances (in meters) from the light source. A linear regression was run and the following residual plot was found.

Regression Statistics	
Multiple R	0.95936
R Square	0.920371
Adjusted R Square	0.911523
Standard Error	0.021636
Observations	11

	Coefficients	Standard Error	t Stat	P-value
Intercept	0.468618	0.031624	14.81856	1.25E-07
Distance	-0.2104	0.020629	-10.1992	3.04E-06



- Is linear regression a good model to use?
- Write a sentence explaining your answer.

30. The table below shows the percentage of adults in the United States who were married before age 24 for the years shown. A significant linear relationship was found between the two variables.

Year	1960	1965	1970	1975	1980	1985	1990	1995	2000
% Married Before 24 Years Old	52.1	51.3	45.9	46.3	40.8	38.1	34.0	32.6	28.1

- Compute the regression equation.
- Predict the percentage of adults who married before age 24 in the United States in 2015.
- Compute the 95% prediction interval for the percentage of adults who married before age 24 in the United States in 2015.

31. A nutritionist feels that what mothers eat during the months they are nursing their babies is important for healthy weight gain of their babies. She samples several of her clients and records their average daily caloric intake for the first three months of their babies' lives and also records the amount of weight the babies gained in those three months. The data are below.

Daily Calories	1523	1649	1677	1780	1852	2065	2096	2145
Baby's Weight Gain (lbs)	4.62	4.77	4.62	5.12	5.81	5.34	5.89	5.96

- Compute the regression equation.
- Test to see if the slope is significantly different from zero, using $\alpha = 0.05$.
- Predict the weight gain of a baby whose mother gets 2,500 calories per day.
- Compute the 95% prediction interval for the weight gain of a baby whose mother gets 2,500 calories per day.

32. The data below show the predicted average high temperature ($^{\circ}\text{F}$) per month by the Farmer's Almanac in Portland, Oregon alongside the actual high temperature per month that occurred.

Farmer's Almanac	45	50	57	62	69	72	81	90	78	64	51	48
Actual High	46	52	60	61	72	78	82	95	85	68	52	49

- Compute the regression equation.
- Test to see if the slope is significantly different from zero, using $\alpha = 0.01$.
- Predict the high temperature in the coming year, given that the Farmer's Almanac is predicting the high to be 58°F .
- Compute the 99% prediction interval for the actual high temperature in the coming year, given that the Farmer's Almanac is predicting the high to be 58°F .

33. In a multiple linear regression problem, p represents:

- The number of dependent variables in the problem.
- The probability of success.
- The number of independent variables in the problem.
- The probability of failure.
- The population proportion.

34. The manager of a warehouse found a significant relationship exists between the number of weekly hours clocked (x_1), the age of the employee (x_2), and the productivity of the employee (y) (measured in weekly orders assembled). A multiple regression was run and the following line of best fit was found: $\hat{y} = 66.238 + 2.7048x_1 - 0.7275x_2$. Approximate the productivity level of an employee who clocked 61 hours in a given week and is 59 years old.

35. A multiple regression test concludes that there is a linear relationship and finds the following line of best fit: $\hat{y} = -53.247 + 12.594x_1 - 0.648x_2 + 4.677x_3$. Use the line of best fit to approximate y when $x_1 = 5$, $x_2 = 12$, $x_3 = 2$.
36. A career counselor feels that the strongest predictors of a student's success after college are class attendance (x_1) (recorded as a percent) and GPA (x_2). To test this, she samples clients after they have found a job and lets the dependent variable be the number of weeks it took them to find a job. A multiple regression was run and the following line of best fit was found $\hat{y} = 38.6609 - 0.3345x_1 - 1.0743x_2$. Predict the number of weeks it will take a client to find a job, given that she had a 94% ($x_1 = 94$) attendance rate in college and a 3.82 GPA.
37. A study conducted by the American Heart Association provided data on how age, blood pressure and smoking relate to the risk of strokes. The following data is the SPSS output with Age in years (x_1), Blood Pressure in mmHg (x_2), Smoker (0 = Nonsmoker, 1 = Smoker) (x_3) and the Risk of a Stroke as a percent (y).

SUMMARY OUTPUT

Regression Statistics	
Multiple R	
R Square	0.873
Adjusted R Square	
Standard Error	5.75657
Observations	20

ANOVA

	df	SS	MS	F	Significance F
Regression	3	3660.740	120.247	36.823	2.04E-07
Residual	16	530.210	33.138		
Total	19	4190.950			

	Coefficients	Standard Error	t Stat	P-value
Intercept	-91.759	15.223	-6.028	1.7568E-05
Age	1.077	0.166	6.488	7.4848E-07
Blood Pressure	0.252	0.045	5.568	4.2433E-05
Smoker	8.740	3.001	2.912	0.0102

- Use $\alpha = 0.05$ to test the claim that the regression model is significant. State the hypotheses, test statistic, p-value, decision and summary.
- Use the estimated regression equation to predict the stroke risk for a 70-year-old smoker with a blood pressure of 180.
- Interpret the slope coefficient for age.
- Find the adjusted coefficient of determination.

38. Use technology to run a multiple linear regression with a dependent variable of annual salary for adults with full-time jobs in San Francisco and independent variables of years of education completed and age. The data for the sample used is below.

Annual Salary	Years of Education	Age
82,640	17	34
95,854	18	42
152,320	21	39
49,165	13	25
31,120	12	31
67,500	16	32
42,590	12	28
57,245	14	55
58,940	16	45
67,250	18	40
56,120	16	39
38,955	12	34
74,650	16	33
53,495	16	29
67,210	16	30
79,365	16	50
96,045	18	51
78,472	14	60
124,975	21	52
43,125	12	36

- Test to see if the overall model is significant using $\alpha = 0.05$.
- Compute the predicted salary for a 35-year-old with 16 years of education.
- Compute the adjusted coefficient of determination.
- Are all the independent variables statistically significant? Explain.

39. A study was conducted to determine if there was a linear relationship between a person's weight in pounds with their gender, height and activity level. A person's gender was recorded as a 0 for anyone who identified as male and 1 for those who did not identify as male. Height was measured in inches. Activity level was coded as 1, 2, or 3; the more active the person was, the higher the value.

SUMMARY OUTPUT

<i>Regression Statistics</i>	
Multiple R	
R Square	0.667
Adjusted R Square	
Standard Error	13.9353
Observations	92

ANOVA

	<i>df</i>	<i>SS</i>	<i>MS</i>	<i>F</i>	<i>Significance F</i>
Regression	3	34195	11398.33	58.6958	6.2026E-21
Residual	88	17089	194.1932		
Total	91	51284			

	<i>Coefficients</i>	<i>Standard Error</i>	<i>t Stat</i>	<i>P-value</i>
Intercept	-81.5	43.96	-1.854	0.0671
Gender	-15.1	4.286	-3.5231	0.0007
Height	3.7	0.5704	6.4867	4.97E-09
Activity Level	-3.08	2.443	-1.2607	0.2107

- Interpret the slope coefficient for height.
- Predict the weight for a male who is 70 inches tall and has an activity level of 2.
- Calculate the adjusted coefficient of determination.

40. A professor claims that the number of hours a student studies for their final paired with the number of homework assignments completed throughout the semester (out of 20 total assignment opportunities) is a good predictor of a student's final exam grade. She collects a sample of students and records the following data.

Final Exam Score	# Hours Studied	HW Completed
85	5.2	19
74	5.1	18
79	4.9	16
62	3.7	12
96	9	17
52	1	12
73	2	15
81	2	16
90	7.25	18
79	4.5	14
83	3	20
76	3.2	17
92	6.8	20
84	6.2	18
50	4.1	10

- Test the professor's claim using $\alpha = 0.05$.
- Compute the multiple correlation coefficient.
- Interpret the slope coefficient for number of hours studied.
- Compute the adjusted coefficient of determination.

Solutions to Odd-Numbered Exercises

- a
- b
- d
- $r = 0.8241$
- c
- a) $\hat{y} = 25.6472 + 2.8212x$
b) 67.9657
c) -2.9657
d) $61.3248 < y < 74.6065$

13. $R^2 = 0.679$

15. a

17. a) $H_0 : \rho = 0; H_1 : \rho \neq 0$

b) $r = 0.9403$

c) 0.0052

d) Reject H_0

e) Yes

f) $R^2 = 0.8842$

g) $\hat{y} = 1.6307 - 0.0257x$

h) $2.6154 < y < 5.7852$

i) We can be 95% confident that the predicted percent of lead extracted in solutions of magnesium chloride at 100 minutes is anywhere between 2.6154 and 5.7852.

19. a) $\hat{y} = 241.8127 - 1.5618x$

b) Every year a person ages, their peak heart rate decreases by an average of 1.5618.

c) $R^2 = 0.93722$

d) 0.06278

e) 5.6924

f) $r = -0.9681$

21. 5.2224

23. a) $H_0 : \rho = 0; H_1 : \rho \neq 0; t = -5.2514; \text{p-value} = 0.000022$

Reject H_0 . There is a significant correlation between driving speed of a vehicle and the corresponding gas mileage.

b) 2.49433

c) $\hat{y} = 32.40313 - 0.1662x$

d) $14.8697 < y < 24.3424$

25. a) $H_0 : \rho = 0; H_1 : \rho \neq 0; t = 6.9083; \text{p-value} = 0.000007$

Reject H_0 . There is a significant correlation between a football player's weight and 40-yard-dash time.

b) $s = 0.160595$

c) $\hat{y} = 3.722331 - 0.006396x; 5.0016$

d) $4.527 < y < 5.476$

e) We can be 99% confident that the predicted time for all 200-pound football player's running time for the 40-yard-dash is between 4.527 and 5.476 minutes.

27. $36.605 < y < 47.740$

29. a) No

b) The p-value = 0.00000304 suggests that there is a significant linear relationship between intensity (in candelas) of a 100-watt light bulb was measured by a sensing device at various distances (in meters) from the light source. However, the residual plot clearly shows a nonlinear relationship. Even though we can fit a straight line through the points, we would get a better fit with a curve.

31. a) $\hat{y} = 1.76267 - 0.001883x$

b) $H_0 : \beta_1 = 0; H_1 : \beta_1 \neq 0; t = 5.0668; \text{p-value} = 0.0015$

Reject H_0 . There is significant linear relationship between a nursing baby's weight gain and the calorie intake of the mother.

c) 6.4693 lbs

d) $5.571 < y < 7.368$

33. c

35. 11.301

37. a) $H_0 : \beta_1 = \beta_2 = \beta_3 = 0; H_1 : \text{At least one slope is not zero}; F = 36.823; \text{p-value} = 0.000000204$

Reject H_0 . There is a significant relationship between a person's age, blood pressure and smoking status and the risk of a stroke.

b) 37.731

c) For each year a person ages, their chance of a stroke increases by 1.077%.

d) 84.9

39. a) For each additional inch in height, the predicted weight would increase 3.7 pounds.

b) 171.34 lbs

c) 65.56

CHAPTER OVERVIEW

13: Nonparametric Tests

- [13.1: Advantages and Disadvantages of Nonparametric Methods](#)
- [13.2: Sign Test](#)
- [13.3: Ranking Data](#)
- [13.4: Wilcoxon Signed-Rank Test](#)
- [13.5: Mann-Whitney U Test](#)
- [13.6: Chapter 13 Formulas](#)
- [13.7: Chapter 13 Exercises](#)

This page titled [13: Nonparametric Tests](#) is shared under a [CC BY-SA 4.0](#) license and was authored, remixed, and/or curated by [Rachel Webb](#) via [source content](#) that was edited to the style and standards of the LibreTexts platform.

13.1: Advantages and Disadvantages of Nonparametric Methods

The z-test, t-test, and F-test that we have used in the previous chapters are called parametric tests. These tests have many assumptions that have to be met for the hypothesis test results to be valid. This chapter gives alternative methods for a few of these tests when these assumptions are not met.

Advantages for using nonparametric methods:

- They can be used to test population parameters when the variable is not normally distributed.
- They can be used when the data are nominal or ordinal.
- They can be used to test hypotheses that do not involve population parameters.
- In some cases, the computations are easier than those for the parametric counterparts.
- They are easy to understand.

Disadvantages for using nonparametric methods:

- They are *less sensitive* than their parametric counterparts when the assumptions of the parametric methods are met. Therefore, larger differences are needed before the null hypothesis can be rejected.
- They tend to use *less information* than the parametric tests. For example, the sign test requires the researcher to determine only whether the data values are above or below the median, not how much above or below the median each value is.
- They are *less efficient* than their parametric counterparts when the assumptions of the parametric methods are met. That is, larger sample sizes are needed to overcome the loss of information. For example, the nonparametric sign test is about 60% as efficient as its parametric counterpart, the t-test. Thus, a sample size of 100 is needed for use of the sign test, compared with a sample size of 60 for use of the t-test to obtain the same results.

This page titled [13.1: Advantages and Disadvantages of Nonparametric Methods](#) is shared under a [CC BY-SA 4.0](#) license and was authored, remixed, and/or curated by [Rachel Webb](#) via [source content](#) that was edited to the style and standards of the LibreTexts platform.

13.2: Sign Test

The sign test can be used for both one sample or for two dependent groups. The sign test uses a Binomial Distribution and looks at the probability of a success as 50%. The median is the 50th percentile, so many times we will state our null hypothesis as the median is equal to a certain value. However, sometimes we will state the hypothesis in terms of a proportion.

Two-Tailed Test	Right-Tailed Test	Left-Tailed Test
H_0 : Median = MD_0 H_1 : Median \neq MD_0	H_0 : Median = MD_0 H_1 : Median $>$ MD_0	H_0 : Median = MD_0 H_1 : Median $<$ MD_0

MD_0 is a placeholder for the number for the hypothesized median.

The Sign Test Procedure

For the single-sample test, compare each value with the conjectured median. If a data value is larger than the hypothesized median, replace the value with a positive sign. If a data value is smaller than the hypothesized median, replace the value with a negative sign. If the data value equals the hypothesized median, replace the value with a 0.

The sample size is the number of plus and minus signs added together (do not include data values that tie with the median). For the paired-sample sign test, subtract the group 2 values from the group 1 values and indicate the difference with a positive or negative sign, or 0 (if they tie) and n = total number of positive and negative signs (do not include differences of zero).

Use the binomial distribution to find the p-value using technology.

- For a two-tailed test, the test statistic, x , is the smaller of the plus or minus signs. If x is the test statistic, the p-value for a two-tailed test is the $2 \cdot P(X \leq x)$.
- For a right-tailed test, the test statistic, x , is the number of plus signs. For a left-tailed test, the test statistic, x , is the number of minus signs. The p-value for a one-tailed test is the $P(X \geq x)$.

The sign test is an alternative to the one sample t-test when you have a small sample size, but the population is not normally distributed. The sign test is also an alternative to the paired sample t-test when you have a small sample size and the difference in the pairs is not normally distributed. The sign test does not detect the magnitude of the difference between the hypothesized value and is not as efficient as the t-test.

A student tells her parents that the median rental rate for a studio apartment in Portland is \$700. Her parents are skeptical and believe the rent is different. A random sample of studio rentals is taken from the internet; prices are listed below. Test the claim that there is a difference using $\alpha = 0.10$. Should the parents believe their daughter?

700 650 800 975 855 785 759 640 950 715 825
980 895 1025 850 915 740 985 770 785 700 925

Solution

1. The hypotheses for this example are:

$$H_0 : \text{Median} = 700$$

$$H_1 : \text{Median} \neq 700$$

2. Find the test statistic. Compare each value to the median. If the value is below the median, then give it a negative sign; if the value is above the mean, then give it a positive sign. If the value is tied with the median, then give it a zero.

700 0	650 -	800 +	975 +	855 +	785 +	759 +	640 -	950 +	715 +	825 +
980 +	895 +	1025 +	850 +	915 +	740 +	985 +	770 +	785 +	700 0	925 +

Count the number of positive and negative signs. Positive signs = 18, Negative signs = 2. The sample size is then $18 + 2 = 20$. The test statistic is the smaller of the number of plus or minus signs. Therefore, in this case, the test statistic is 2.

3. Using the p-value method, the p-value is $2 \cdot P(X \leq \text{Test Statistic})$ using a binomial distribution with $p = 0.5$. With the sample size $n = 20$ and $p = 0.5$, then $q = 1 - p = 0.5$.

The test statistic is $x = 2$, so find $2 \cdot P(X \leq 2)$.

$$P(X \leq 2) = P(X = 0) + P(X = 1) + P(X = 2) = {}_{20}C_0 \cdot 0.5^0 \cdot 0.5^{20} + {}_{20}C_1 \cdot 0.5^1 \cdot 0.5^{19} + {}_{20}C_2 \cdot 0.5^2 \cdot 0.5^{18}$$

$$= 0.0000010 + 0.0000191 + 0.0001812 = 0.000201.$$

Since this is a two-tailed test, we multiply the probability by 2 to get $2 \cdot 0.000201 = 0.000402$.

We can also use the TI-84 calculator for a two-tailed test, to get $2 * \text{binomcdf}(20, 0.5, 2) = 0.000402$.



The p-value = 0.000402.

4. The p-value is smaller than alpha; therefore reject H_0 .

5. There is enough evidence to support the parents' claim that the median rent for a studio apartment in Portland is not \$700.

The critical values for the sign test come from a binomial distribution when the probability of a success is 50% since the median is the 50th percentile, and the sample size is 20.

If you were to calculate the discrete probability distribution for each possible value of x , you would get the following discrete probability distribution table (Figure 13-1) and corresponding graph (Figure 13-2).

x	$P(x)$
0	0.0000010
1	0.0000191
2	0.0001812
3	0.0010872
4	0.0046206
5	0.0147858
6	0.0369644
7	0.0739288
8	0.1201344
9	0.1601791
10	0.1761971
11	0.1601791
12	0.1201344
13	0.0739288
14	0.0369644
15	0.0147858
16	0.0046206
17	0.0010872
18	0.0001812
19	0.0000191
20	0.0000010

Sum = 0.0206949

Sum = 0.0206949

Figure 13-1: Discrete probability distribution table for each value of x .

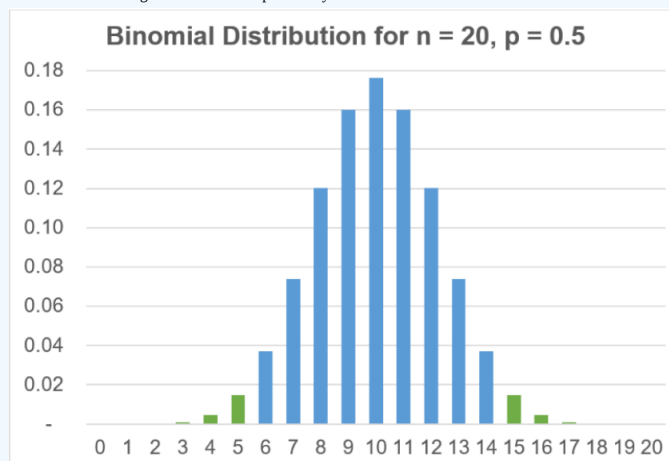


Figure 13-2: Graph of binomial distribution data from Figure 13-1, with the two tails highlighted.

When we add up the highlighted probabilities we would get a probability of approximately $0.0206949 + 0.0206949 = 0.0414$, which is below our alpha 0.05 for a two-tailed test. If we were to add in the values of $x = 6$ and $x = 14$ we would get 0.1153, which is above our value for alpha.

Figure 13-2 is a bar graph of showing the binomial distribution and shaded critical values. This means that $x = 5$ and $x = 15$ are the critical values for a two-tailed sign test with $n = 20$. If the test statistic is less than or equal to 5 or greater than or equal to 15, we would reject H_0 .

The test statistic is the smaller of plus or minus signs, which is 2. Since $2 \leq 5$, we would reject H_0 , which agrees with the p-value method.

If you were doing a one-tailed test you would use the probabilities for one of the tails.

A professor believes that a new online learning curriculum is increasing the median final exam score from the previous year, which was 75. A random sample of final exam scores were collected for students that went through the new curriculum. Test to see if the new curriculum is effective using $\alpha = 0.05$.

78 100 75 64 87 80 72 91 89 70 82 76

Solution

The hypotheses are:

$$H_0 : \text{Median} = 75$$

$$H_1 : \text{Median} > 75$$

Find the test statistic. Compare each value to the median. If the value is below the median then give it a negative sign, if the value is above the mean then give it a positive sign. If the value is tied with the median then give it a zero.

78 + 100 + 75 + 64 - 87 + 80 + 72 - 91 + 89 + 70 - 82 + 76 +

Count the number of positive and negative signs. Positive signs = 8, Negative signs = 3. The sample size is then $8 + 3 = 11$.

The test statistic for a right tailed test is the number of plus signs. Therefore, in this case, the test statistic is 8.

To find the critical value, use technology to find the probabilities for $x = 0$ to $x = 11$ for a binomial distribution with $n = 11$ and $p = 0.5$. See Figure 13-3 for the results. Since $\alpha = 0.05$, add up the areas starting at the bottom at $x = 11$ until you get a sum of no more than 0.05.

$$P(9 \leq X \leq 11) = P(X = 9) + P(X = 10) + P(X = 11) = {}_{11}C_{10} \cdot 0.5^9 \cdot 0.5^2 + {}_{11}C_{10} \cdot 0.5^{10} \cdot 0.5^1 + {}_{11}C_{11} \cdot 0.5^0 \cdot 0.5^{11} = 0.03272.$$

If we add in the next value of $P(X = 8) = 0.08057$, the sum would exceed 0.05, so we would stop at a critical value of $X = 9$. See Figure 13-4.

x	P(x)
0	0.00049
1	0.00537
2	0.02686
3	0.08057
4	0.16113
5	0.22559
6	0.22559
7	0.16113
8	0.08057
9	0.02686
10	0.00537
11	0.00049

Sum = 0.03272

Figure 13-3: Discrete probability distribution table for each value of x .

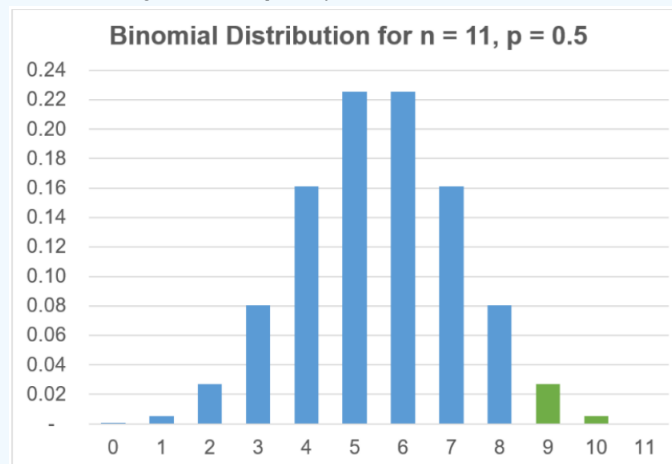


Figure 13-4: Graph of binomial distribution data from Figure 13-3, with the right tail highlighted.

Since the test statistic $X = 8$ is not in the rejection area, we would fail to reject H_0 .

At the 5% significance level, there is not enough evidence to support the claim that there is a statistically significant difference in final exam scores for the new online curriculum.

The median annual salary for high school teachers in the United States was \$60,320. A teacher believes that the median high school salary in Oregon is significantly less than the national median. A sample of 100 high school teacher's salaries found that 58 were below \$60,320, 40 were above \$60,320 and 2 were \$60,320. Use $\alpha = 0.05$ to test their claim.

Solution

The hypotheses are:

$$H_0 : \text{Median} = \$60,320$$

$$H_1 : \text{Median} < \$60,320 \text{ (claim)}$$

The sample size $n = 58 + 40 = 98$.

We will use $x = 58$. The p-value is found by taking $P(X \geq 58)$. This is a lot of work by hand, so use technology. For a TI-84 calculator use $1 - \text{binomcdf}(98, 0.5, 58) = 0.0272$.

```
1-binomcdf(98,.5
,58)
.0271952788
```

The p-value = 0.0427, which is less than $\alpha = 0.05$, so reject H_0 .

There is enough evidence to support the claim that the median high school salary in Oregon is significantly less than the national median of \$60,320.

The sign test can also be used for dependent samples when the assumptions for a paired t-test are not met.

A manufacturer believes that if routine maintenance (cleaning and oiling of machines) is increased to once a day rather than once a week, the number of defective parts produced by the machines will decrease. Nine machines are selected, and the number of defective parts produced over a 24-hour operating period is counted. Maintenance is then increased to once a day for a week, and the number of defective parts each machine produces is again counted over a 24-hour operating period. The data are shown here. At $\alpha = 0.05$, can the manufacturer conclude that the additional maintenance reduces the number of defective parts manufactured by the machines?

Machine 1 2 3 4 5 6 7 8 9 Before 6 18 5 4 16 13 20 9 3 After 5 16 7 4 18 12 14 7 1

Solution

H_0 : The additional maintenance does not reduce the number of defective parts manufactured by the machines.

H_1 : The additional maintenance reduces the number of defective parts manufactured by the machines.

Next, for each pair, take Before – After . If this difference is positive then put a + sign next to it, if the difference is negative then put a – sign next to it and if the difference is zero then put a 0 next to it.

Machine	1	2	3	4	5	6	7	8	9
Before	6	18	5	4	16	13	20	9	3
After	5	16	7	4	18	12	14	7	1
Sign of Difference	+	+	–	0	–	+	+	+	+

Count the number of positive and negative signs. Positive signs = 6, Negative signs = 2. The sample size is then $6 + 2 = 8$.

Note that this is a right-tailed test, since we are looking at “reducing” defective parts so that Before > After . The test statistic is the number of plus signs, $x = 6$.

$P(X \geq 6) = P(X = 6) + P(X = 7) + P(X = 8) = {}_8C_6 \cdot 0.5^6 \cdot 0.5^2 + {}_8C_7 \cdot 0.5^7 \cdot 0.5^1 + {}_8C_8 \cdot 0.5^8 \cdot 0.5^0$, which is the p-value.
 $= 0.109375 + 0.031250 + 0.003906 = 0.144531$

For a TI calculator, use $1 - \text{binomcdf}(8, 0.5, 6) = 0.1445$. The p-value = 0.1445, which is greater than $\alpha = 0.05$; therefore do not reject H_0 .

There is not enough evidence to support the claim that the additional maintenance reduces the number of defective parts manufactured by the machines.

This page titled 13.2: Sign Test is shared under a CC BY-SA 4.0 license and was authored, remixed, and/or curated by Rachel Webb via source content that was edited to the style and standards of the LibreTexts platform.

13.3: Ranking Data

The last few sections in this chapter require one to rank a data set. To rank a data set, you first must arrange the data from smallest to largest. The smallest value gets a rank of 1, the next smallest gets a rank of 2, etc. If there are any values that tie, then each of the tied values gets the average of the corresponding ranks.

Rank the following random sample: 8, -4, 1, -3, 5, 2, -3, 0, 5, 3, 5.

Solution

First, sort the data from smallest to largest: -4, -3, -3, 0, 1, 2, 3, 5, 5, 5, 8

Next, rank the data. The -4 gets a rank of 1. There is a tie between the next two values of -3. They would have received the ranks of 2 and 3, but we do not want one of the values to be ranked higher than the other so we give both -3's a rank of $\frac{2+3}{2} = 2.5$. Then the next value of 0 gets a rank of 4 (we already used the 2nd and 3rd positions). The next set of ties for the three 5's occurs for the rank of 8th, 9th and 10th place. The average of these ranks is $\frac{8+9+10}{3} = 9$. The following is a table of the sorted data with the corresponding ranks.

Data -4 -3 -3 0 1 2 3 5 5 5 8 Rank 1 2.5 2.5 4 5 6 7 9 9 9 11

If there is no tie for the last data point, then your last rank will be the same as your sample size.

What is the rank for the number 15 in the following sample: 10, 25, 15, 8, 20, 15, 10, 9, 8, 22

Solution

Order the data from smallest to largest: 8, 8, 9, 10, 10, 15, 15, 20, 22, 25. Next, rank the data. The two 8's tie for first and second place, so each gets a rank of $\frac{1+2}{2} = 1.5$. The 9 is in the third spot so it gets a rank of 3. The two 10's tie for fourth and fifth place so each gets a rank of $\frac{4+5}{2} = 4.5$. The two 15's tie for sixth and seventh place so each gets a rank of $\frac{6+7}{2} = 6.5$. The next three numbers get the ranks of 8, 9 and 10.

The answer, then, is 6.5, the rank of the number 15.

The Tevis Cup Ride is a 24-hour, 100-mile horse race over the Sierra Nevada mountains from Lake Tahoe to Auburn in a single day. The top 10 completion times for 2019 are shown below. Rank the completion times.

Name Completion Time
 Sanoma Blakeley 09:27 PM
 Jeremy Reynolds 09:27 PM
 Haley Moquin 09:36 PM
 Richard George 09:37 PM
 Suzanne Huff 09:54 PM
 Karen Donley 09:54 PM
 Nicki Meuten 10:06 PM
 Gwen Hall 10:20 PM
 Lindsay Fisher 10:28 PM
 Suzanne Hayes 10:29 PM

Solution

The data are already ordered. There are two ties at 9:27 and 9:54.

Time	9:27	9:27	9:36	9:37	9:54	9:54	10:06	10:20	10:28	10:29
Rank	1.5	1.5	3	4	5.5	5.5	7	8	9	10

This page titled [13.3: Ranking Data](#) is shared under a [CC BY-SA 4.0](#) license and was authored, remixed, and/or curated by [Rachel Webb](#) via [source content](#) that was edited to the style and standards of the LibreTexts platform.

13.4: Wilcoxon Signed-Rank Test

The Wilcoxon Signed-Rank Sum test is the non-parametric alternative to the dependent t-test. The Wilcoxon Signed-Rank Sum test compares the medians of two dependent distributions. The Signed-Rank Sum test, developed by Frank Wilcoxon, finds the difference between paired data values and ranks the absolute value of the differences. Then we sum the ranks for all the negative and positive differences separately. The absolute value of the smaller of these summed ranks is called w_s . If there were any differences of zero you would not count them in your sample size.



Frank Wilcoxon

Small Sample Size Case: $n < 30$

When the sample size is less than 30, the test statistic is w_s , the absolute value of the smaller of the sum of ranks. Figure 13-5 provides critical values for the Wilcoxon Signed-Rank test. If the test statistic w_s is greater than the critical value from the table, we fail to reject H_0 . If the test statistic w_s is less than or equal to the critical value from the table, we reject H_0 .

Figure 13-5: Critical Values for the Signed Rank Test. Dashes indicate that the sample is too small to reject H_0 .

		1-Tailed α				2-Tailed α		
n		0.01	0.05	0.10		0.01	0.05	0.10
)	5	-	0	2		-	-	0
)	6	-	2	3		-	0	2
)	7	0	3	5		-	2	3
)	8	1	5	8		0	3	5
)	9	3	8	10		1	5	8
)	10	5	10	14		3	8	10
)	11	7	13	17		5	10	13
)	12	9	17	21		7	13	17
)	13	12	21	26		9	17	21
)	14	15	25	31		12	21	25
)	15	19	30	36		15	25	30
)	16	23	35	42		19	29	35
)	17	27	41	48		23	34	41
)	18	32	47	55		27	40	47

		1-Tailed α				2-Tailed α		
n		0.01	0.05	0.10		0.01	0.05	0.10
)	19	37	53	62		32	46	53
)	20	43	60	69		37	52	60
)	21	49	67	77		42	58	67
)	22	55	75	86		48	65	75
)	23	62	83	94		54	73	83
)	24	69	91	104		61	81	91
)	25	76	100	113		68	89	100
)	26	84	110	124		75	98	110
)	27	92	119	134		83	107	119
)	28	101	130	145		91	116	130
)	29	110	140	157		100	126	140

✓ Example 13.4.1

In an effort to increase production of an automobile part, the factory manager decides to play music in the manufacturing area. Eight workers are selected, and the number of items each produced for a specific day is recorded. After one week of music, the same workers are monitored again. The data are given in the table. At $\alpha = 0.05$, can the manager conclude that listening to music has increased production? Use the Wilcoxon Signed-Rank Test since there is no mention of the population being normally distributed.

Worker 1 2 3 4 5 6 7 8 9

Before 6 8 10 9 5 12 9 5 7

After 10 12 9 12 8 13 8 5 10

Solution

The correct hypotheses are:

H_0 : Music in the manufacturing area does not increase production.

H_1 : Music in the manufacturing area increases production.

This is a left-tailed test.

In order to compute the t-test statistic, first compute the differences between each of the matched pairs.

Before (x_1)	6	8	10	9	5	12	9	5	7
After (x_2)	10	12	9	12	8	13	8	5	10
$D = x_1 - x_2$	-4	-4	1	-3	-3	-1	1	0	-3

Take the absolute value of each difference.

Before (x_1)	6	8	10	9	5	12	9	5	7
After (x_2)	10	12	9	12	8	13	8	5	10

$D = x_1 - x_2$	-4	-4	1	-3	-3	-1	1	0	-3
$ D $	4	4	1	3	3	1	1	0	3

Rank the data and drop any ties. At this point, if any of the differences are zero, that pair is no longer used and is not ranked.

Before (x_1)	6	8	10	9	5	12	9	5	7
After (x_2)	10	12	9	12	8	13	8	5	10
$D = x_1 - x_2$	-4	-4	1	-3	-3	-1	1	0	-3
$ D $	4	4	1	3	3	1	1	0	3
Rank	7.5	7.5	2	5	5	2	2	drop	5

The sample size n is the number of differences that are not zero. So, in this case, $n = 8$. Next, take the sign of the difference and attach this plus or minus sign to each rank.

Before (x_1)	6	8	10	9	5	12	9	7
After (x_2)	10	12	9	12	8	13	8	10
$D = x_1 - x_2$	-4	-4	1	-3	-3	-1	1	-3
$ D $	4	4	1	3	3	1	1	3
Rank	7.5	7.5	2	5	5	2	2	5
Signed Rank	-7.5	-7.5	+2	-5	-5	-2	+2	-5

Find the sum of the positive and negative ranks:

Positive ranks: $2 + 2 = 4$

Negative ranks: $(-7.5) + (-7.5) + (-5) + (-5) + (-2) + (-5) = -32$

Take the smaller of the absolute value of the sums of the ranks: $|4| = 4$, $|-32| = 32$, so 4 is smaller.

This is our test statistic called $w_s = 4$.

Next, use the table in Figure 13-5 to get the critical value. The table provides critical values for two-tailed tests.

This is a one-tailed test, with $\alpha = 0.05$ and $n = 8$. See Figure 13-6 that shows which row and column from Figure 13-5 to use to find the critical value.

Figure 13-6: Critical value for 1-tailed test with $\alpha = 0.05$ and $n = 8$.

1-Tailed α				
n		0.01	0.05	0.10
(n)	5	-	0	2
(n)	6	-	2	3
(n)	7	0	3	5
(n)	8	1	5	8

The critical value = 5. The test statistic $w_s = 4$ is less than the critical value of 5.

The decision rule for the critical values in Figure 13-5 is to reject the null if the test statistic is less than or equal to the critical value, and do not reject the null hypothesis if the test statistic is larger than the critical value.

Since $w_s < \text{Critical Value} = 5$, the decision is to reject H_0 . There is enough evidence to support the claim that listening to music has increased production.

When the sample size is 30 or more, a paired t-test may be used in most situations. However, if your population is heavily skewed or you are using interval data, then use the large sample size normal approximation Wilcoxon Signed-Rank test.

Large Sample Size Case: $n \geq 30$

We can use the normal approximation for sample sizes of 30 or more. The formula for the test statistic is:

$$z = \frac{\left(w_s - \left(\frac{n(n+1)}{4} \right) \right)}{\sqrt{\left(\frac{n(n+1)(2n+1)}{24} \right)}}$$

where n is the reduced samples size excluding any differences of zero, and w_s is the smaller in absolute value of the signed ranks for a two-tailed test, the sum of the positive ranks for a left-tailed test, or the sum of the negative ranks for a right-tailed test. The sample size n is the reduced sample size not including any differences of zero.

✓ Example 13.4.2

A pharmaceutical company is testing to see if there is a significant difference in the pain relief for two new pain medications. They randomly assign the two different pain medications for 34 patients with chronic pain and record the pain rating for each patient one hour after each dose. The pain ratings are on a sliding scale from 1 to 10. The results are listed below. Use the Wilcoxon Signed-Rank test to see if there is a significant difference at $\alpha = 0.05$.

Patient Drug 1 Drug 2 Patient Drug 1 Drug 2 Patient Drug 1 Drug 2
1 2.4 2.5 13 4 6.1 25 4 5.1 2 4.7 3.3
14 2.2 2.9 26 5.5 4.4 3 1.2 5.3 15 2.7 4.3 27 3.6 3.6 4 5.9 5.6 16 2.9 3.3 28 3.8 3.5 5 4.5 5 17 5 5 29 5.4
4.8 6 4 5.3 18 3.1 5.1 30 2.4 3.2 7 2.5 4.6 19 3.3 3.3 31 4.1 2.6 8 3 2.5 20 3 5.9 32 4.5 5.7 9 5 3.4 21 5.4
3.2 33 4 5.8 10 5.8 5.4 22 4.2 5.9 34 6 5 11 1.9 5.1 23 3.6 5.9 12 3.2 4.3 24 2.2 5.6 Solution

Solution

The correct hypotheses are:

H_0 : There is no difference in the pain scale rating for the two pain medications.

H_1 : There is a difference in the pain scale rating for the two pain medications.

Compute the differences between each of the matched pairs. Rank the absolute value of the differences. Make sure to average the ranks repeated differences and do not rank any differences of zero. After the differences are ranked, attach this sign of the difference to each rank.

Patient	Drug 1	Drug 2	Difference	$ D $	Rank	Signed Rank
1	2.4	2.5	-0.1	0.1	1	-1
2	4.7	3.3	1.4	1.4	17	17
3	1.2	5.3	-4.1	4.1	31	-31
4	5.9	5.6	0.3	0.3	2.5	2.5
5	4.5	5	-0.5	0.5	6.5	-6.5
6	4	5.3	-1.3	1.3	16	-16
7	2.5	4.6	-2.1	2.1	24.5	-24.5

Patient	Drug 1	Drug 2	Difference	D	Rank	Signed Rank
8	3	2.5	0.5	0.5	6.5	6.5
9	5	3.4	1.6	1.6	19.5	19.5
10	5.8	5.4	0.4	0.4	4.5	4.5
11	1.9	5.1	-3.2	3.2	29	-29
12	3.2	4.3	-1.1	1.1	13	-13
13	4	6.1	-2.1	2.1	24.5	-24.5
14	2.2	2.9	-0.7	0.7	9	-9
15	2.7	4.3	-1.6	1.6	19.5	-19.5
16	2.9	3.3	-0.4	0.4	4.5	-4.5
17	5	5	0			
18	3.1	5.1	-2	2	23	-23
19	3.3	3.3	0			
20	3	5.9	-2.9	2.9	28	-28
21	5.4	3.2	2.2	2.2	26	26
22	4.2	5.9	-1.7	1.7	21	-21
23	3.6	5.9	-2.3	2.3	27	-27
24	2.2	5.6	-3.4	3.4	30	-30
25	4	5.1	-1.1	1.1	13	-13
26	5.5	4.4	1.1	1.1	13	13
27	3.6	3.6	0			
28	3.8	3.5	0.3	0.3	2.5	2.5
29	5.4	4.8	0.6	0.6	8	8
30	2.4	3.2	-0.8	0.8	10	-10
31	4.1	2.6	1.5	1.5	18	18
32	4.5	5.7	-1.2	1.2	15	-15
33	4	5.8	-1.8	1.8	22	-22
34	6	5	1	1	11	11

Find the sum of the positive and negative ranks:

Positive ranks: $17 + 2.5 + 6.5 + 19.5 + 4.5 + 26 + 13 + 2.5 + 8 + 18 + 11 = 128.5$

Negative

ranks:

$(-1) + (-31) + (-6.5) + (-16) + (-24.5) + (-29) + (-13) + (-24.5) + (-9) + (-19.5) + (-4.5) + (-23)$
 $+ (-28) + (-21) + (-27) + (-30) + (-13) + (-10) + (-15) + (-22) = -367.5$

Take the smaller of the absolute value of the sums of the ranks: $|128.5| = 128.5$, $|-367.5| = 367.5$ so 128.5 is smaller.

The smaller of the absolute value of the sum of the ranks is $w_s = 128.5$.

Throw out the three differences of zero. The sample size is $n = 31$.

The test statistic is: $z = \frac{\left(w_s - \left(\frac{n(n+1)}{4}\right)\right)}{\sqrt{\left(\frac{n(n+1)(2n+1)}{24}\right)}} = \frac{\left(128.5 - \left(\frac{31 \cdot 32}{4}\right)\right)}{\sqrt{\left(\frac{31 \cdot 32 \cdot 63}{24}\right)}} = \frac{(128.5 - 248)}{\sqrt{(2604)}} = -2.341787$

Either the z critical value or p-value method may be used, similar to how we used previous z-tests.

Compute the $z_{\alpha/2}$ critical values. Draw and label the distribution; see Figure 13-7.

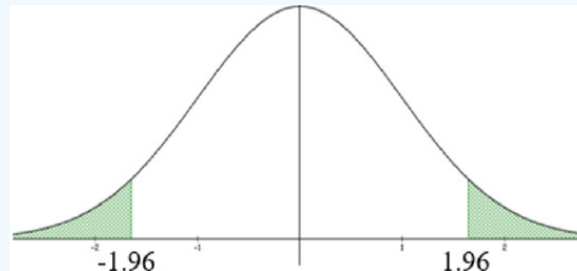


Figure 13-7: $z_{\alpha/2}$ critical values.

Use the inverse normal function $\text{invNorm}(0.025, 0, 1)$ to get $z_{\alpha/2} = \pm 1.96$. The test statistic $z = -2.3418$ is in the shaded critical region, so reject H_0 .

There is enough evidence to support the claim that there is a significant difference in the pain scale rating for the two pain medications.

These calculations can be done by hand or using the following online calculator: <http://www.socscistatistics.com/tests/signedranks>.

The TI calculators and Excel do not have built-in nonparametric tests.

It is an important and popular fact that things are not always what they seem. For instance, on the planet Earth, man had always assumed that he was more intelligent than dolphins because he had achieved so much – the wheel, New York, wars and so on – whilst all the dolphins had ever done was muck about in the water having a good time. But conversely, the dolphins had always believed that they were far more intelligent than man – for precisely the same reasons.

(Adams, 2002)

This page titled 13.4: Wilcoxon Signed-Rank Test is shared under a CC BY-SA 4.0 license and was authored, remixed, and/or curated by Rachel Webb via source content that was edited to the style and standards of the LibreTexts platform.

13.5: Mann-Whitney U Test

The Mann-Whitney U Test is the non-parametric alternative to the independent t-test. The test was expanded on Frank Wilcoxon's Rank Sum test by Henry Mann and Donald Whitney.



Henry Mann

The independent t-test assumes the populations are normally distributed. When these conditions are not met, the Mann-Whitney Test is an alternative method.

If two groups come from the same distribution and were randomly assigned labels, then the two different groups should have values somewhat equally distributed between the two groups. The Mann-Whitney Test looks at all the possible rankings between the data points. For large sample sizes, a normal approximation of the distribution of ranks is used.

Small Sample Size Case ($n \leq 20$)

Combine the data from both groups and sort from smallest to largest. Make sure to label the data values so you know which group they came from. Rank the data. Sum the ranks separately from each group. Let R_1 = sum of ranks for group one and R_2 = sum of ranks for group two.

$$\text{Find the } U \text{ statistic for both groups: } U_1 = R_1 - \frac{n_1(n_1+1)}{2}, U_2 = R_2 - \frac{n_2(n_2+1)}{2}.$$

The test statistic $U = \min(U_1, U_2)$ is the smaller of U_1 or U_2 . Critical values are found given in the tables in Figures 13-6 ($\alpha = 0.05$) and 13-7 ($\alpha = 0.01$).

Figure 13-8: Critical Values for 2-Tailed Mann-Whitney U Test for $\alpha = 0.05$

		n_2																			
		n_1	2	3	4	5	6	7	8	9	10	11	12	13	14	15	16	17	18	19	20
)	2	-	-	-	-	-	-	0	0	0	0	1	1	1	1	1	2	2	2	2	
)	3	-	-	-	0	1	1	2	2	3	3	4	4	5	5	6	6	7	7	8	
)	4	-	-	0	1	2	3	4	4	5	6	7	8	9	10	11	11	12	13	13	
)	5	-	0	1	2	3	5	6	7	8	9	11	12	13	14	15	17	18	19	20	
)	6	-	1	2	3	5	6	8	10	11	13	14	16	17	19	21	22	24	25	27	
)	7	-	1	3	5	6	8	10	12	14	16	18	20	22	24	26	28	30	32	34	
)	8	0	2	4	6	8	10	13	15	17	19	22	24	26	29	31	34	36	38	41	
)	9	0	2	4	7	10	12	15	17	21	23	26	28	31	34	37	39	42	45	48	
)	10	0	3	5	8	11	14	17	20	23	26	29	33	36	39	42	45	48	52	55	
)	11	0	3	6	9	13	16	19	23	26	30	33	37	40	44	47	51	55	58	62	
)	12	1	4	7	11	14	18	22	26	29	33	37	41	45	49	53	57	61	65	69	
)	13	1	4	8	12	16	20	24	28	33	37	41	45	50	54	59	63	67	72	76	
)	14	1	5	9	13	17	22	26	31	36	40	45	50	55	59	64	67	74	78	83	
)	15	1	5	10	14	19	24	29	34	39	44	49	54	59	64	70	75	80	85	90	
)	16	1	6	11	15	21	26	31	37	42	47	53	59	64	70	75	81	86	92	98	
)	17	2	6	11	17	22	28	34	39	45	51	57	63	67	75	81	87	93	99	105	
)	18	2	7	12	18	24	30	36	42	48	55	61	67	74	80	86	93	99	106	112	
)	19	2	7	13	19	25	32	38	45	52	58	65	72	78	85	92	99	106	113	119	
)	20	2	8	14	20	27	34	41	48	55	62	69	76	83	90	98	105	112	119	127	

Figure 13-9: Critical Values for 2-Tailed Mann-Whitney U Test for $\alpha = 0.01$

Figure 1: Similarity matrix for the 20 most similar countries																					
		n_2																			
		n_1	2	3	4	5	6	7	8	9	10	11	12	13	14	15	16	17	18	19	20
)	2	-	-	-	-	-	-	-	-	-	-	-	-	-	-	-	-	-	-	0	0
)	3	-	-	-	-	-	-	-	-	0	0	0	1	1	1	2	2	2	2	3	3
)	4	-	-	-	-		0	0	1	1	2	2	3	3	4	5	5	6	6	7	8
)	5	-	-	-		0	1	1	2	3	4	5	6	7	7	8	9	10	11	12	13
)	6	-	-		0	1	2	3	4	5	6	7	9	10	11	12	13	15	16	17	18
)	7	-	-		0	1	3	4	6	7	9	10	12	13	15	16	18	19	21	22	24
)	8	-	-		1	2	4	6	7	9	11	13	15	17	18	20	22	24	26	28	30
)	9	-		0	1	3	5	7	9	11	13	16	18	20	22	24	27	29	31	33	36

		n_2																			
	n_1	2	3	4	5	6	7	8	9	10	11	12	13	14	15	16	17	18	19	20	
)	10	-		0	2	4	6	9	11	13	16	18	21	24	26	29	31	34	37	39	42
)	11	-		0	2	5	7	10	13	16	18	21	24	27	30	33	36	39	42	45	46
)	12	-		1	3	6	9	12	15	18	21	24	27	31	34	37	41	44	47	51	54
)	13	-		1	3	7	10	13	17	20	24	27	31	34	38	42	45	49	53	56	60
)	14	-		1	4	7	11	15	18	22	26	30	34	38	42	46	50	54	58	63	67
)	15	-		2	5	8	12	16	20	24	29	33	37	42	46	51	55	60	64	69	73
)	16	-		2	5	9	13	18	22	27	31	36	41	45	50	55	60	65	70	74	79
)	17	-		2	6	10	15	19	24	29	34	39	44	49	54	60	65	70	75	81	86
)	18	-		2	6	11	16	21	26	31	37	42	47	53	58	64	70	75	81	87	92
)	19	0		3	7	12	17	22	28	33	39	45	51	56	63	69	74	81	87	93	99
)	20	0		3	8	13	18	24	30	36	42	46	54	60	67	73	79	86	92	99	105

If U is less than or equal to the critical value, then reject H_0 . Dashes indicate that the sample is too small to reject H_0 .

If you have only sample size above 20, use the following online calculator to find the critical value: <https://www.socscistatistics.com/tests/mannwhitney/default.aspx>.

Student employees are a major part of most college campus employment. Two major departments that participate in student hiring are listed below with the number of hours worked by students for a month. At the 0.05 level of significance, is there sufficient evidence to conclude a difference in hours between the two departments?

Athletics 20 24 17 12 18 22 25 30 15 19 Library 35 28 24 20 25 18 22 26 31 21 19

Solution

The hypotheses are:

H_0 : There is no difference in the number of hours student employees work for the athletics department and the library.

H_1 : There is a difference in the number of hours student employees work for the athletics department and the library.

Since the sample sizes are small and the distributions are not assumed to be normally distributed, the t-test for independent groups should not be used. Instead, we will use the nonparametric Mann-Whitney Test. To start, combine the groups, sort the data from smallest to largest, and note which group the data point is from.

Rank the data and look for the ties. Figure 13-10 shows the ranks for the combined data.

Figure 13-10: Ranks for combined and ordered data.

Student	Department	Hours	Rank
1	Athletics	12	1
2	Athletics	15	2
3	Athletics	17	3
4	Athletics	18	4.5
5	Library	18	4.5
6	Athletics	19	6.5
7	Library	19	6.5
8	Athletics	20	8.5
9	Library	20	8.5
10	Library	21	10
11	Athletics	22	11.5
12	Library	22	11.5
13	Athletics	24	13.5
14	Library	24	13.5
15	Athletics	25	15.5
16	Library	25	15.5
17	Library	26	17
18	Library	28	18
19	Athletics	30	19
20	Library	31	20
21	Library	35	21

Sum the ranks for each group:

$$R_1 = 1 + 2 + 3 + 4.5 + 6.5 + 8.5 + 11.5 + 13.5 + 15.5 + 19 = 85$$

$$R_2 = 4.5 + 6.5 + 8.5 + 10 + 11.5 + 13.5 + 15.5 + 17 + 18 + 20 + 21 = 146$$

Compute the test statistic:

$$U_1 = R_1 - \frac{n_1(n_1+1)}{2} = 85 - \frac{10 \cdot 11}{2} = 30$$

$$U_2 = R_2 - \frac{n_2(n_2+1)}{2} = 146 - \frac{11 \cdot 12}{2} = 80$$

$$U = 30$$

Find the critical value using Figure 13-8, where $n_1 = 10$ and $n_2 = 11$. The critical value = 26.

Do not reject H_0 , since $U = 30 > CV = 26$.

There is not enough evidence to support the claim that there is a difference in the number of hours student employees work for the athletics department and the library.

Large Sample Size Case ($n_1 > 20$ and $n_2 > 20$)

Find the U statistic for both groups: $U_1 = R_1 - \frac{n_1(n_1+1)}{2}$, $U_2 = R_2 - \frac{n_2(n_2+1)}{2}$.

Let $U = \min(U_1, U_2)$, the smaller of U_1 or U_2 . The formula for the test statistic is:

$$z = \frac{\left(U - \left(\frac{n_1 \cdot n_2}{2} \right) \right)}{\sqrt{\frac{n_1 \cdot n_2 (n_1 + n_2 + 1)}{12}}}$$

A manager believes that the sales of coffee at their Portland store is more than the sales at their Cannon Beach store. They take a random sample of weekly sales from the two stores over the last year. Use the Mann-Whitney test to see if the manager's claim could be true. Use the p-value method with $\alpha = 0.05$.

Portland Cannon Beach 1510 1257 3585 1510 4125 4677 4399 5244 1510 3055 1764 1510 5244 1764 3853 4399 4125 6128 5244 1510 6128 3319 1510 5244 3319 6433 2533 4125 3319 5244 3585 2275 3055 6134 2533 2275 4025 3015 4399 3585 4125 5244\

Solution

Always choose group 1 as the group with the smallest sample size: in this case, Portland. (If the sample sizes are equal, then whatever group comes first in the problem is group one.) If there are no ties at the end, the last rank should match the total of both sample sizes.

Combine the data, keeping the group label, then rank the combined data.

Order	Store	Sales	Rank	Order	Store	Sales
1	Portland	1257	1	22	Cannon Beach	3585
2	Portland	1510	4.5	23	Cannon Beach	3853
3	Portland	1510	4.5	24	Portland	4025
4	Cannon Beach	1510	4.5	25	Portland	4125
5	Cannon Beach	1510	4.5	26	Portland	4125
6	Cannon Beach	1510	4.5	27	Cannon Beach	4125
7	Cannon Beach	1510	4.5	28	Cannon Beach	4125
8	Portland	1764	8.5	29	Cannon Beach	4399
9	Cannon Beach	1764	8.5	30	Cannon Beach	4399
10	Cannon Beach	2275	10.5	31	Cannon Beach	4399
11	Cannon Beach	2275	10.5	32	Portland	4677
12	Cannon Beach	2533	12.5	33	Portland	5244
13	Cannon Beach	2533	12.5	34	Portland	5244
14	Portland	3015	14	35	Cannon Beach	5244
15	Portland	3055	15.5	36	Cannon Beach	5244
16	Portland	3055	15.5	37	Cannon Beach	5244
17	Portland	3319	18	38	Cannon Beach	5244
18	Portland	3319	18	39	Portland	6128
19	Portland	3319	18	40	Portland	6128
20	Cannon Beach	3585	21	41	Portland	6134
21	Cannon Beach	3585	21	42	Portland	6433

The hypotheses are:

H_0 : There is no difference in the coffee sales between the Portland and Cannon Beach stores.

H_1 : There is a difference in the coffee sales between the Portland and Cannon Beach stores.

Sum the ranks for each group.

The sum for the Portland store's ranks: $R_1 = 459.5$.

The sum for the Cannon Beach store's ranks: $R_2 = 443.5$.

Compute the test statistic:

$$U_1 = R_1 - \frac{n_1(n_1+1)}{2} = 459.5 - \frac{20 \cdot 21}{2} = 249.5$$

$$U_2 = R_2 - \frac{n_2(n_2+1)}{2} = 443.5 - \frac{22 \cdot 23}{2} = 190.5$$

$$U = 190.5$$

$$z = \frac{190.5 - \left(\frac{20 \cdot 22}{2} \right)}{\sqrt{\left(\frac{20 \cdot 22 (20 + 22 + 1)}{12} \right)}} = -0.7429$$

This test uses the standard normal distribution with the same technique for finding a p-value or critical value as the z-test performed in previous chapters. Compute the p-value for a standard normal distribution for $z = -0.7429$ for a two-tailed test using $2 * \text{normalcdf}(-1E99, -0.7429, 0, 1) = 0.4575$

```
normalcdf(-1E99,
-0.7429,0,1)
.2287710393
Ans*2
.4575420786
```

The p-value = $0.4575 > \alpha = 0.05$; therefore, do not reject H_0 .

This is a two-tailed test with $\alpha = 0.05$. Use the lower tail area of $\alpha/2 = 0.05$ and you get critical values of $z_{\alpha/2} = \pm 1.96$.

There is not enough evidence to support the claim that there is a difference in coffee sales between the Portland and Cannon beach stores.

There are no shortcut keys on the TI calculators or Excel for this Nonparametric Test. Note that if your data has tied ranks, there are several methods not addressed in this text, to correct the standard deviation. Hence, the z-score in some software packages may not match your results calculated by hand.

This page titled [13.5: Mann-Whitney U Test](#) is shared under a [CC BY-SA 4.0](#) license and was authored, remixed, and/or curated by [Rachel Webb](#).

13.6: Chapter 13 Formulas

Ranking Data

- Order the data from smallest to largest.
- The smallest value gets a rank of 1.
- The next smallest gets a rank of 2, etc.
- If there are any values that tie, then each of the tied values gets the average of the corresponding ranks.

Wilcoxon Signed-Rank Test

n is the sample size not including a difference of 0.

When $n < 30$, use test statistic w_s , which is the absolute value of the smaller of the sum of ranks. CV uses table in Figure 13-5. If critical value is not in tables then use an online calculator:

<http://www.socscistatistics.com/tests/signedranks>.

When $n \geq 30$, use z-test statistic:

$$z = \frac{\left(w_s - \left(\frac{n(n+1)}{4}\right)\right)}{\sqrt{\left(\frac{n(n+1)(2n+1)}{24}\right)}}$$

Sign Test

H_0 : Median = MD_0

H_1 : Median $\neq MD_0$

p-value uses binomial distribution with $p = 0.5$ and n is the sample size not including ties with the median or differences of 0.

- For a two-tailed test, the test statistic, x , is the smaller of the plus or minus signs. If x is the test statistic, the p-value for a two-tailed test is $2 * P(X \leq x)$.
- For a right-tailed test, the test statistic, x , is the number of plus signs. For a left-tailed test, the test statistic, x , is the number of minus signs. The p-value for a one-tailed test is the $P(X \geq x)$ for a right-tailed test, or $P(X \leq x)$ for a left-tailed test.

Mann-Whitney U Test

When $n_1 \leq 20$ and $n_2 \leq 20$:

$$U_1 = R_1 - \frac{n_1(n_1+1)}{2}, U_2 = R_2 - \frac{n_2(n_2+1)}{2}.$$

$$U = \text{Min}(U_1, U_2)$$

CV uses table in Figures 13-8 or 13-9. If critical value is not in tables then use an online calculator:

<https://www.socscistatistics.com/tests/mannwhitney/default.aspx>.

When $n_1 > 20$ and $n_2 > 20$ use z-test statistic:

$$z = \frac{\left(U - \left(\frac{n_1 \cdot n_2}{2}\right)\right)}{\sqrt{\left(\frac{n_1 \cdot n_2 (n_1 + n_2 + 1)}{12}\right)}}$$

“For instance, a race of hyperintelligent pan-dimensional beings once built themselves a gigantic supercomputer called Deep Thought to calculate once and for all the Answer to the Ultimate Question of Life, the Universe, and Everything. For seven and a half million years, Deep Thought computed and calculated, and in the end announced that the answer was in fact Forty-two - and so another, even bigger, computer had to be built to find out what the actual question was.”

(Adams, 2002)

This page titled [13.6: Chapter 13 Formulas](#) is shared under a [CC BY-SA 4.0](#) license and was authored, remixed, and/or curated by [Rachel Webb](#).

13.7: Chapter 13 Exercises

? Chapter 13 Exercises

For exercises 1-6, show all 5 steps for hypothesis testing:

- State the hypotheses.
- Compute the test statistic.
- Compute the critical value or p-value.
- State the decision.
- Write a summary.

1. A real estate agent suggests that the median rent for a one-bedroom apartment in Portland has changed from last year's median of \$825 per month. A sample of 12 one-bedroom apartments shows these monthly rents in dollars for a one-bedroom apartment; 820, 720, 960, 660, 735, 910, 825, 1050, 915, 905, 1050, 950. Is there enough evidence to claim that the median rent has changed from \$825? Use $\alpha = 0.05$.

2. The median age in the United States is 38 years old. The mayor of a particular city believes that her population is considerably "younger." At $\alpha = 0.05$, is there sufficient evidence to support her claim. The data below represent a random selection of persons from the city.

40	36	27	72	12	30	52	45	10	24
22	25	43	39	48	25	95	29	19	30
50	37	18	36	15	60	38	42	41	61

3. A meteorologist believes that the median temperature for the month of July in Jacksonville, Florida, is higher than the previous July's 81°F. The following sample shows the temperatures taken at noon in Jacksonville during July. Is there enough evidence to support the meteorologist's claim? Use $\alpha = 0.05$.

79	85	81	95	80	98	82	81	76	84	90	93
----	----	----	----	----	----	----	----	----	----	----	----

4. A sample of 10 Kitti's hog-nosed bats' weights in grams is shown below. Test the claim that median weight for all bumblebee bats is not equal to 2 grams, using a 1% level of significance.

Weight	2.22	1.6	1.78	1.52	1.61	1.98	1.56	2.24	1.55	2.28
--------	------	-----	------	------	------	------	------	------	------	------

5. Test to see if the median assessed property value (in \$1,000s) changed between 2010 and 2016. Use the sign test and $\alpha = 0.05$.

Ward	A	B	C	D	E	F	G	H	I	J	K
2010	184	414	22	99	116	49	24	50	282	25	141
2016	161	382	22	190	120	52	28	50	297	40	148

6. A company institutes an exercise break for its workers to see if this will improve job satisfaction. Scores for 10 workers were sampled from a questionnaire before and after the exercise break was implemented. Higher scores indicate a higher job satisfaction. Use the sign test to see if the exercise break increased the job satisfaction scores. Use $\alpha = 0.05$.

Before	34	28	29	45	26	27	24	15	15	27
After	33	36	29	50	37	29	25	20	18	28

7. Rank the following data set: -15, -25, -5, -5, -8, -15, -2, -4, -5

8. Rank the following data set: 6, 3, 0, 2, 3, 5, 4, 8, 9, 5, 6, 5, 7.9

9. Rank the following data set: 1, 2, 9, 3, 5, 1, 2, 8, 6

10. Rank the following data set: 5, -1, 2, 0, 1, -1, 0, 3, 9, 6, 1, 1, 4

For exercises 11-20, show all 5 steps for hypothesis testing:

- State the hypotheses.
- Compute the test statistic.
- Compute the critical value or p-value.
- State the decision.
- Write a summary.

11. A manager wishes to see if the time (in minutes) it takes for their workers to complete a certain task will decrease when they are allowed to wear earbuds at work. A random sample of 20 workers' times were collected before and after. Test the claim that the time to complete the task has decreased at a significance level of $\alpha = 0.01$ using the Wilcoxon Signed-Rank test. You obtain the following sample data.

Before	After	Before	After
69	62.3	61.7	56.8
71.5	61.6	55.9	44.7
39.3	21.4	56.8	50.6
67.7	60.4	71	63.4
38.3	47.9	80.6	68.9
85.9	77.6	59.8	35.5

Before		After		Before		After	
67.3		75.1		72.1		77	
59.8		46.3		49.9		38.4	
72.1		65		56.2		55.4	
79		83		63.3		51.6	

12. Doctors developed an intensive intervention program for obese patients with heart disease. Subjects with a BMI of 30 kg/m² or more with heart disease were assigned to a three-month lifestyle change of diet and exercise. Patients' Left Ventricle Ejection Fraction (LVEF) are measured before and after intervention. Larger numbers indicate a healthier heart. Test to see if the intervention program significantly increased the LVEF. Use the Wilcoxon Signed-Rank test with $\alpha = 0.05$.

Before	44	49	50	49	57	62	39	41	52	42
After	56	58	64	60	63	71	49	51	60	55

13. An adviser is testing out a new online learning module for a placement test. They wish to test the claim that the new online learning module increased placement scores at a significance level of $\alpha = 0.05$. You obtain the following paired sample of 19 students who took the placement test before and after the learning module. Use the Wilcoxon Signed-Rank test.

Before	After	Before	After	Before	After	Before	After
55.8	57.1	11.4	20.6	42.6	51.5	46.1	57
51.7	58.3	30.6	35.2	61.2	76.6	72.8	66.1
76.6	83.6	53	46.7	26.8	28.6	42.2	38.1
47.5	49.5	21	22.5	11.4	14.5	51.3	42.4
48.6	51.1	58.5	47.7	56.3	43.7		

14. Dating couples were matched according to who asked the other person out first. Their age was then compared. Is there a significant difference in the age of dating couples based on who asked out the other person first? Dependent samples, use $\alpha = 0.05$ and the Wilcoxon Signed-Rank test.

First Asked	18	43	32	27	15	45	21	22
Accepted	16	38	35	29	14	46	25	28

15. In Major League Baseball, the American League (AL) allows a designated hitter (DH) to bat in place of the pitcher, but in the National League (NL), the pitcher has to bat. However, when an AL team is the visiting team for a game against an NL team, the AL team must abide by the home team's rules and thus, the pitcher must bat. A researcher is curious if an AL team would score differently for games in which the DH was used. She samples 20 games for an AL team for which the DH was used, and 20 games for which there was no DH. The data are below. Use the Mann-Whitney test with $\alpha = 0.05$.

With Designated Hitter				Without Designated Hitter			
0	5	4	7	3	6	5	2
1	2	7	6	12	4	0	1
6	4	2	10	6	3	7	8
1	2	7	5	4	0	5	1
8	4	11	0	2	4	6	4

16. A professor wants to know whether there is a difference in comprehension of a lab assignment among students depending on if the instructions are given all in text, or if they are given primarily with visual illustrations. She randomly divides her class into two groups of 15 and gives one group instructions in text and the second group instructions with visual illustrations. The following data summarizes the scores the students received on a test given after the lab. Is there evidence to suggest that a difference? Use the Mann-Whitney test with $\alpha = 0.05$.

Text			Visual Illustrations		
57.3	87.3	67.2	59.0	76.7	88.2
45.3	75.2	54.4	57.6	78.2	43.8
87.1	88.2	93.0	72.9	64.4	97.1
61.2	67.5	89.2	83.2	89.0	95.1
43.1	86.2	52.0	64.0	72.9	84.1

17. "Durable press" cotton fabrics are treated to improve their recovery from wrinkles after washing. "Wrinkle recovery angle" measures how well a fabric recovers from wrinkles. Higher is better. Here are data on the wrinkle recovery angle (in degrees) for a random sample of fabric specimens. A manufacturer wants to see if there is a difference in the wrinkle recovery angle for two different fabric treatments, Permafresh and Hylite. Test the claim using a 5% level of significance. Use the Mann-Whitney test.

Permafresh				Hylite			
144	102	131	118	139	146	139	146
136	127	137	148	131	138	138	142
117	137	147	129	133	142	138	137

Permafresh					Hylite				
133	137	148	135		146	137	138	138	133
124	139	164	142		139	140	141	140	141

18. A researcher is curious what year in college students make use of the gym at a university. They take a random sample of 30 days and count the number of sophomores and seniors who use the gym each day. Is there evidence to suggest that a difference exists in gym usage based on year in college? Use the Mann-Whitney test with $\alpha = 0.01$.

Sophomores						Seniors				
189	208	167	154	217		209	199	186	210	221
209	198	143	208	220		204	214	230	170	197
188	197	165	207	231		198	201	165	183	235
201	177	186	193	201		187	199	189	194	197
190	165	180	245	200		192	195	200	211	205
199	155	165	188	187		200	190	218	210	229

19. A movie theater company wants to see if there is a difference in the movie ticket sales in San Diego and Portland per week. They sample 20 sales from San Diego and 20 sales from Portland and count the number of tickets sold over a week. Use the Mann-Whitney test to test the claim using a 5% level of significance.

San Diego					Portland			
223	243	231	235		233	228	209	214
221	182	217	211		219	212	214	222
206	229	219	239		226	216	223	220
215	214	234	221		226	219	221	223
226	233	239	232		219	211	218	224

20. A new over-the-counter medicine to treat a sore throat is to be tested for effectiveness. The makers of the medicine take two random samples of 25 individuals showing symptoms of a sore throat. Group 1 receives the new medicine and Group 2 receives a placebo. After a few days on the medicine, each group is interviewed and asked how they would rate their comfort level 1-10 (1 being the most uncomfortable and 10 being no discomfort at all). The results are below. Is there sufficient evidence to conclude that there is a difference? Use the Mann-Whitney test and $\alpha = 0.01$.

Group 1						Group 2				
3	5	6	7	5		4	5	8	3	5
3	4	5	7	7		2	7	8	2	4
3	2	5	8	8		1	2	2	3	2
7	7	8	4	8		1	3	5	5	1
4	8	3	9	10		6	4	7	8	1

Answers to Odd-Numbered Exercises

- H_0 : Median = 825; H_1 : Median \neq 825; Test Statistic = 4; p-value = 0.5548. Do not reject H_0 . There is not enough evidence to support the claim that the median rent has changed from last year's median of \$825 per month.
- H_0 : Median = 81; H_1 : Median $>$ 81; Test Statistic = 7; p-value = 0.0547. Do not reject H_0 . There is not enough evidence to support the claim that the median temperature for the month of July in Jacksonville, Florida, is higher than the previous year's of 81°F.
- H_0 : There is no change in the median assessed property value between 2010 and 2016. H_1 : There is a change in the median assessed property value between 2010 and 2016. Test Statistic = 2; p-value = 0.1797. Do not reject H_0 . There is not enough evidence to support the claim that is a change in the median assessed property value between 2010 and 2016.
-
-
-
-

Ordered Data	Rank
	1
	2.5
	2.5
	4
	6
	6
	6
	8
	9

9.

Ordered Data	Rank
	0
	1
	2
	2
	3
	3.5
	3.5
	4
	5
	5
	7
	7
	7
	6
	9.5
	9.5
	6
	7
	11
	8
	12
	9
	13

11. H_0 : The time to complete the task will not decrease when workers are allowed to wear earbuds. H_1 : The time to complete the task will decrease when workers are allowed to wear earbuds. $w_s = 27.5$; $CV = 43$. Reject H_0 . There is enough evidence that allowing the workers to wear earbuds significantly decreased the time for workers to complete tasks.

13. H_0 : The new online learning module did not increase student's placement scores. H_1 : The new online learning module increased student's placement scores. $w_s = 74.5$; $CV = 53$. Do not reject H_0 . There is not enough evidence to support the claim that the new online learning module increased students' placement scores.

15. H_0 : An American League team would score the same for games in which the designated hitter was used. H_1 : An American League team would score differently for games in which the designated hitter was used. $U = 181$; $text{CV} = 127$. Do not reject H_0 . There is not enough evidence to support the claim that an American League team would score differently for games in which the designated hitter was used.

17. H_0 : There is no difference in the wrinkle recovery angle for two different fabric treatments, Permafresh and Hylite. H_1 : There is a difference in the wrinkle recovery angle for two different fabric treatments, Permafresh and Hylite. $z = -1.4048$; $CV = \pm 1.96$. Do not reject H_0 . There is not enough evidence to support the claim that there is a difference in the wrinkle recovery angle for two different fabric treatments, Permafresh and Hylite.

19. H_0 : There is no difference in the movie ticket sales in San Diego and Portland per week. H_1 : There is a difference in the movie ticket sales in San Diego and Portland per week. $U = 144.5$; $CV = 127$. Do not reject H_0 . There is not enough evidence to support the claim there is a difference in the movie ticket sales in San Diego and Portland per week.

"Ford didn't comment. He was listening to something. He passed the Guide over to Arthur and pointed at the screen. The active entry read 'Earth. Mostly harmless.'

...Earth, a world whose entire entry in the Hitchhiker's Guide to the Galaxy comprised the two words 'Mostly harmless.'"

(Adams, 2002)

This page titled [13.7: Chapter 13 Exercises](#) is shared under a [CC BY-SA 4.0](#) license and was authored, remixed, and/or curated by [Rachel Webb](#).

Index

C

conditional probability

[4.6: Conditional Probability](#)

Conditional Probability Rule

[4.6: Conditional Probability](#)

Confidence Interval

[7.2: Confidence Interval for a Proportion](#)

[7.5: Interpreting a Confidence Interval](#)

confounded variables

[12.2.6: Conclusion - Simple Linear Regression](#)

continuous random variable

[6.1: Introductions](#)

correlation

[12.1: Correlation](#)

counting rules

[4.7: Counting Rules](#)

Critical Value Method

[8.3: Hypothesis Test for One Mean](#)

D

descriptive statistics

[3.1: Measures of Center](#)

E

exponential distribution

[6.3: Exponential Distribution](#)

G

goodness of fit

[10.2: Goodness of Fit Test](#)

I

inferential statistics

[3.1: Measures of Center](#)

L

lurking variable

[12.2.6: Conclusion - Simple Linear Regression](#)

M

mean

[3.1: Measures of Center](#)

modal class

[3.1: Measures of Center](#)

mode

[3.1: Measures of Center](#)

O

outlier

[3.1: Measures of Center](#)

P

population variance

[3.2: Measures of Spread](#)

R

Range

[3.2: Measures of Spread](#)

residuals

[12.2.2: Residuals](#)

S

scatter plot

[12.1.1: Scatterplots](#)

sigma notation

[3.1: Measures of Center](#)

standard error of estimate

[12.2.2: Residuals](#)

summation notation

[3.1: Measures of Center](#)

T

test for independence

[10.3: Test for Independence](#)

type I error

[8.2: Type I and II Errors](#)

type II error

[8.2: Type I and II Errors](#)

U

uniform distribution

[6.2: Uniform Distribution](#)

Glossary

Alternative Hypothesis | A statistical hypothesis that states that there is a difference between a parameter and a specific value, or that there is a difference between two parameters.

Blind Study | The individual does not know which treatment they are getting or if they are getting the treatment or a placebo.

Class Boundary | The halfway points that separate the class limits.

Class Limit | The smallest and largest value that could go into a class.

Cluster Sample | The populations are split into groups called clusters, then one or more clusters are randomly selected and all individuals in the chosen clusters are sampled.

Coefficient of Determination | The coefficient of determination is the fraction (or percent) of the variation in the values of y that is explained by the least-squares regression of y on x .

Coefficient of Variation | The standard deviation divided by the mean, which allows you to compare variability among data sets when the units or scale is different.

Combination Rule | The number of ways to select r out of n objects where order does not make a difference.

Completely Randomized Experiment | In this experiment, individuals are randomly placed into the two or more groups. One group gets either nothing or a placebo; this group is called the control group. The groups getting the treatment are called the treatment groups.

Confidence Interval | A range of potential values for the unknown population parameter.

Continuous Random Variable | A variable that has an infinite number of possible values in an interval of numbers.

Continuous Variable | Can take on any value. Continuous variables are usually things you measure.

Convenience Sample | Picking a sample that is conveniently at hand. For example, asking other students in your statistics course or using social media. Most convenience sampling will give biased views and is not encouraged.

Correlation Coefficient | A measure of the strength and direction of the linear relationship between two variables.

Critical Value | The number of standard errors added and subtracted in order to achieve a desired confidence level.

Cross-sectional Study | Data observed, measured, or collected at one point in time.

Descriptive statistics | The process where you collect, organize and describe data.

Discrete Random Variable | A variable that has a countable number of possible values.

Discrete Variable | Can only take on particular values like integers. Discrete variables are usually things you count.

Double-blind Study | Neither the individual nor the researcher knows who is getting which treatment or who is getting the treatment and who is getting the placebo.

Event | A set of certain outcomes of an experiment that you want to have happen.

Experiment | An activity or process that has specific results that can be repeated indefinitely which has a set of well-defined outcomes.

Extrapolation | The use of a regression line for prediction far outside the range of values of the independent variable x .

Factorial Design | This design has two or more independent categorical variables called factors. Each factor has two or more different treatment levels.

Factorial Rule | The number of ways to arrange n objects is $n!$

Five-number Summary | Minimum, first quartile, second quartile, third quartile and maximum value in a data set.

Fundamental Counting Rule | The number of ways to do task 1, 2, ..., n together would be to multiply the number of ways for each task: $m_1 \cdot m_2 \cdot \dots \cdot m_n$.

Hypothesis Testing | The scientific method used to evaluate claims about population parameters.

Independent Events | Two events that are not related and the probability of one event does not affect the probability of the other event.

Individual | A person or object that you are interested in finding out information about.

Inferential statistics | The process of using sample data to make inferences about the population.

Influential point | A point in a scatter plot that is positioned far away from the main cluster of data points on the y -axis.

Interquartile Range (IQR) | The distance between the first and third quartile.

Intersection | Where two events overlap and happen at the same time.

Interval data | Numeric data where there is a known difference between values, but zero does not mean "nothing."

Law of Large Numbers | As n increases, the relative frequency tends toward the theoretical probability.

Leverage Point | A point in a scatter plot that is positioned far away from the main cluster of data points on the x -axis.

Longitudinal Study | Data collected in the future from groups sharing common factors.

Lurking Variable | A variable other than the independent or dependent variables that may influence the regression equation

Margin of Error | Half the width of the confidence interval and is a statistic that represents the amount of random sampling error.

Matched Pairs Design | This is a subset of the randomized block design where the treatments are given to two groups that can be matched up with each other in some way.

Mean | The mean is the arithmetic average of the numbers. This is the center that most people call the average.

Median | The median is the data value in the middle of the data that has 50% of the data below that point and 50% of the data above that point.

Midrange | The average of the smallest and largest data values.

Modal Class | The modal class is the class with the highest frequency.

Mode | The mode is the data value that occurs the most frequently in the data.

Mutually Exclusive Events | Disjoint events that cannot occur at the same time.

Nominal data | Categorical data that has no order or rank. For example, the color of your car, ethnicity, race, or gender.

Null Hypothesis | A statistical hypothesis that states that there is no difference between a parameter and a specific value, or that there is no difference between two parameters.

Observational Study | An observational study is when the investigator collects data by observing, measuring, counting, watching or asking questions. The investigator does not change anything.

Ordinal data | Categorical data that has a natural order to it.

Outcomes | The results of an experiment.

Outlier | An outlier is a data value that is very different from the rest of the data and is very far from the center.

Parameter | Any characteristic or measure from a population. This number is a fixed, unknown number that you want to estimate.

Pareto Chart | A bar graph that is ordered from the most frequent down to the least frequent category.

Permutation Rule | The number of ways to arrange r out of n objects where order does make a difference.

Point Estimate | A sample statistic used to estimate the population parameter.

Population | The total set of all the observations that are the subject of a study.

Prediction Interval | The confidence interval for the predicted value of y .

Probability Distribution | An assignment of probabilities to all the possible values of the random variable.

Qualitative or Categorical Variable | A word or name that describes a quality of the individual

Quantitative or Numerical Variable | A number (quantity), something that can be counted or measured from the individual.

Quartile | Numbers that divide a data set into fourths. One fourth (or a quarter) of the data falls between consecutive quartiles.

Random Variable | If you have a variable, and can find a probability associated with that variable, it is called a random variable.

Randomized Block Design | A block is a group of subjects that are similar or the same subject measured multiple times, but the blocks differ from each other. Then randomly assign treatments to subjects inside each block.

Range | The difference between the largest and smallest data values.

Ratio Data | Numeric data that has a true zero, meaning when the variable is zero nothing is there. Most measurement data are ratio data.

Replication | Repetition of an experiment on more than one subject so you can make sure that the sample is large enough to distinguish true effects from random effects. It is also the ability for someone else to duplicate the results of the experiment.

Residual | The vertical distance between the actual value of y and the predicted value of y .

Retrospective Study | Data collected from the past using records, interviews, and other similar artifacts.

Sample | A subset from the population.

Sample Space | Collection of all possible outcomes of the experiment.

Scatterplot | A scatterplot shows the relationship between two quantitative variables measured on the same individuals.

Simple Random Sample (SRS) | Selecting a sample size of n objects from the population so that every sample of the same size n has equal probability of being selected as every other possible sample of the same size from that population.

Standard Deviation | The average distance of the data points from the mean.

Standard Error of Estimate | The standard deviation of the residuals.

Statistic | Any characteristic or measure from a sample.

Statistical Hypothesis | An educated conjecture about a population parameter.

Statistics | Statistics is the study of how to collect, organize, analyze, and interpret data collected from a group.

Stratified Sample | The population is split into groups called strata, then a random sample is taken from each stratum.

Systematic Sample | We list the entire population, then randomly pick a starting point n and then take every n^{th} value until the sample size is reached.

Type I Error | Rejecting the null hypothesis when it was actually true.

Type II Error | Failing to reject the null hypothesis when it is actually false.

Union | The junction of two events including their intersection.

Variable (also known as a random variable) | The measurement or observation of the individual.

Variance | The average squared distance from the data points to the mean.

Z-Score | The number of standard deviations a data point is from the mean.

Data Sources and References

- Adams, D. (2002). *The Ultimate Hitchhiker's Guide to the Galaxy*. New York: Del Rey/Ballantine Books.
- Kozak, K. (2015). *Statistics Using Technology* (2nd ed.). United States.
- Diez, D. M., Barr, C. D., & Çetinkaya-Rundel Mine. (2016). *OpenIntro Statistics* (3rd ed.). Retrieved from <https://www.openintro.org/book/os/>.
- Sagan, C. (1997). "The Fine Art of Baloney Detection." *The Demon-Haunted World: Science as a Candle in the Dark*. New York: Ballantine Books.
- B1 assets of financial institutions*. (2013, June 27). Retrieved from www.rba.gov.au/statistics/tables/xls/b01hist.xls.
- Benen, S. (2011, September 02). Retrieved from http://www.washingtonmonthly.com/politicalanimal/2011_09/gop_leaders_stop_taking_credit031960.php.
- Capital and rental values of Auckland properties*. (2013, September 26). Retrieved from <http://www.statsci.org/data/oz/rentcap.html>.
- Contraceptive use*. (2013, October 9). Retrieved from <http://www.prb.org/DataFinder/Topic/Rankings.aspx?ind=35>.
- Deaths from firearms*. (2013, September 26). Retrieved from <http://www.statsci.org/data/oz/firearms.html>.
- DeNavas-Walt, C., Proctor, B., & Smith, J. U.S. Department of Commerce, U.S. Census Bureau. (2012). *Income, poverty, and health insurance coverage in the United States: 2011* (P60-243). Retrieved from <https://www.census.gov/prod/2012pubs/p60-243.pdf>.
- Density of people in Africa*. (2013, October 9). Retrieved from <http://www.prb.org/DataFinder/Topic/Rankings.aspx?ind=30&loc=249,250,251,252,253,254,34227,255,257,258,259,260,261,262,263,264,265,266,267,268,269,270,271,272,274,275,276,277,278,279,280,281,282,283,284,285,286,287,288,289,290,291,292,294,295,296,297,298,299,300,301,302,304,305,306,307,308>.
- Department of Health and Human Services, ASPE. (2013). *Health insurance marketplace premiums for 2014*. Retrieved from http://aspe.hhs.gov/health/reports/2013/marketplacepremiums/ib_premiumslandscape.pdf.
- Electricity usage*. (2013, October 9). Retrieved from <http://www.prb.org/DataFinder/Topic/Rankings.aspx?ind=162>.
- Fertility rate*. (2013, October 14). Retrieved from <http://data.worldbank.org/indicator/SP.DYN.TFRT.IN>.
- Fuel oil usage*. (2013, October 9). Retrieved from <http://www.prb.org/DataFinder/Topic/Rankings.aspx?ind=164>.
- Gas usage*. (2013, October 9). Retrieved from <http://www.prb.org/DataFinder/Topic/Rankings.aspx?ind=165>.
- Health expenditure*. (2013, October 14). Retrieved from <http://data.worldbank.org/indicator/SH.XPD.TOTL.ZS>.
- Hinatov, M. U.S. Consumer Product Safety Commission, Directorate of Epidemiology. (2012). *Incidents, deaths, and in-depth investigations associated with non-fire carbon monoxide from engine-driven generators and other engine-driven tools, 1999-2011*. Retrieved from <http://www.cpsc.gov/PageFiles/129857/cogenerators.pdf>.
- Life expectancy at birth*. (2013, October 14). Retrieved from <http://data.worldbank.org/indicator/SP.DYN.LE00.IN>.
- Median income of males*. (2013, October 9). Retrieved from <http://www.prb.org/DataFinder/Topic/Rankings.aspx?ind=137>.
- Median income of males*. (2013, October 9). Retrieved from <http://www.prb.org/DataFinder/Topic/Rankings.aspx?ind=136>.
- Prediction of height from metacarpal bone length*. (2013, September 26). Retrieved from <http://www.statsci.org/data/general/stature.html>.
- Pregnant woman receiving prenatal care*. (2013, October 14). Retrieved from <http://data.worldbank.org/indicator/SH.STA.ANVC.ZS>.
- United States unemployment*. (2013, October 14). Retrieved from <http://www.tradingeconomics.com/unitedstates/unemployment-rate>.
- Weissmann, J. (2013, March 20). A truly devastating graph on state higher education spending. *The Atlantic*. Retrieved from <http://www.theatlantic.com/business/archive/2013/03/a-truly-devastating-graph-on-state-highereducation-spending/274199/>.

- Population Reference Bureau. (2018, March 19). Data. Retrieved from <http://www.prb.org/DataFinder/Topic/Rankings.aspx?ind=35>.
- Nico, G. (2020). Breadcrumb Statistics - Multiple Linear Regression. Retrieved from https://gerardnico.com/data_mining/multiple_regression.
- O'Connor, J. J., Robertson, E. F., Banach, S., & University of St Andrews, Scotland. (2020). MacTutor History of Mathematics Archive. Retrieved from <https://mathshistory.st-andrews.ac.uk/>.
- Ryan, B. F., Joiner, B. L., & Ryan, Jr, T. A. (1985). Cholesterol levels after heart attack. Retrieved from <http://www.statsci.org/data/general/cholest.html>.
- Olson, K., & Hanson, J. (1997). Using reiki to manage pain: a preliminary report. *Cancer Prev Control*, 1(2), 108- 13. Retrieved from <http://www.ncbi.nlm.nih.gov/pubmed/9765732>.
- Pulse rates before and after exercise*. (2013, September 25). Retrieved from <http://www.statsci.org/data/oz/ms212.html>.
- Ovegard, M., Berndt, K., & Lunneryd, S. (2012). Condition indices of Atlantic cod (*gadus morhua*) biased by capturing method. *ICES Journal of Marine Science*, doi: 10.1093/icesjms/fss145.
- Bhat, R., & Kushtagi, P. (2006). A re-look at the duration of human pregnancy. *Singapore Med J.*, 47(12), 1044-8. Retrieved from <http://www.ncbi.nlm.nih.gov/pubmed/17139400>.
- Life expectancy in southeast Asia. (2013, September 23). Retrieved from <http://apps.who.int/gho/data/node.main.688>.
- Federal Trade Commission, (2008). *Consumer fraud and identity theft complaint data: January-December 2007*. Retrieved from website: <http://www.ftc.gov/opa/2008/02/fraud.pdf>.
- Schultz, S. T., Klonoff-Cohen, H. S., Wingard, D. L., Askhoomoff, N. A., Macera, C. A., Ji, M., & Bacher, C. (2006). Breastfeeding, infant formula supplementation, and autistic disorder: the results of a parent survey. *International Breastfeeding Journal*, 1(16), doi: 10.1186/1746-4358-1-16.

Greek Letter Pronunciations

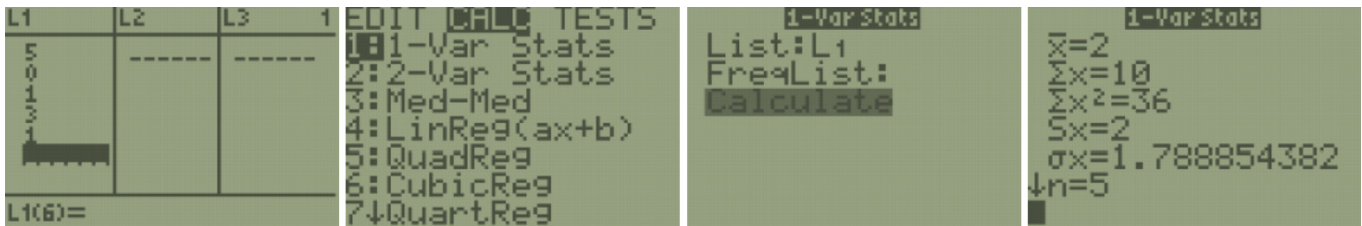
Upper Case	Lower Case	Pronunciation
A	α	<i>alpha</i> – æl-fə
B	β	<i>beta</i> – bei-tə
Γ	γ	<i>gamma</i> – gæ-mə
Δ	δ	<i>delta</i> – del-tə
E	ϵ	<i>epsilon</i> – eps-ill-aan
Z	ζ	<i>zeta</i> – zei-tə
H	η	<i>eta</i> – ei-tə
Θ	θ	<i>theta</i> – thei-tə
I	ι	<i>iota</i> – I-oh-tə ('I' pronounced like 'eye')
K	κ	<i>kappa</i> – kæ-pə
Λ	λ	<i>lambda</i> – læm-də
M	μ	<i>mu</i> – myoo
N	ν	<i>nu</i> – nyoo
Ξ	ξ	<i>xi</i> – ksaai (as in sick <u>sigh</u>)
O	\omicron	<i>omicron</i> – oh-mə-kraan
Π	π	<i>pi</i> – paai (the same as pie)
P	ρ	<i>rho</i> – roh (rhymes with go)
Σ	σ	<i>sigma</i> – sig-mə
T	τ	<i>tau</i> – taa'u (rhyming with cow)
Υ	υ	<i>upsilon</i> – 'ups' as oops , 'ilon' as ill-on
Φ	ϕ	<i>phi</i> – faai (as in identify)
X	χ	<i>chi</i> – kaai (as in <u>chi</u> re)
Ψ	ψ	<i>psi</i> – saai (as in <u>side</u>)
Ω	ω	<i>omega</i> – oh-mey-gə

Mostly Harmless Statistics Formula Packet

Chapter 3 Formulas

Sample Mean: $\bar{x} = \frac{\sum x}{n}$	Population Mean: $\mu = \frac{\sum x}{N}$
Weighted Mean: $\bar{x} = \frac{\sum(xw)}{\sum w}$	Range = Max – Min
Sample Standard Deviation: $s = \sqrt{\frac{\sum(x-\bar{x})^2}{n-1}}$	Population Standard Deviation = σ
Sample Variance: $s^2 = \frac{\sum(x-\bar{x})^2}{n-1}$	Population Variance = σ^2
Coefficient of Variation: $CVar = \left(\frac{s}{\bar{x}} \cdot 100\right)$	Z-Score: $z = \frac{x-\bar{x}}{s}$
Percentile Index: $i = \frac{(n+1)p}{100}$	Interquartile Range: $IQR = Q_3 - Q_1$
Empirical Rule: $z = 1, 2, 3 \Rightarrow 68$	Outlier Lower Limit: $Q_1 - (1.5 \cdot IQR)$
Chebyshev's Inequality: $\left(\left(1 - \frac{1}{(z)^2}\right) \cdot 100r\right)$	Outlier Upper Limit: $Q_3 + (1.5 \cdot IQR)$


TI-84: Enter the data in a list and then press [STAT]. Use cursor keys to highlight CALC. Press 1 or [ENTER] to select **1:1-Var Stats**. Press [2nd], then press the number key corresponding to your data list. Press [Enter] to calculate the statistics. Note: the calculator always defaults to L₁ if you do not specify a data list.



s_x is the sample standard deviation. You can arrow down and find more statistics. Use the min and max to calculate the range by hand. To find the variance simply square the standard deviation.

Chapter 4 Formulas

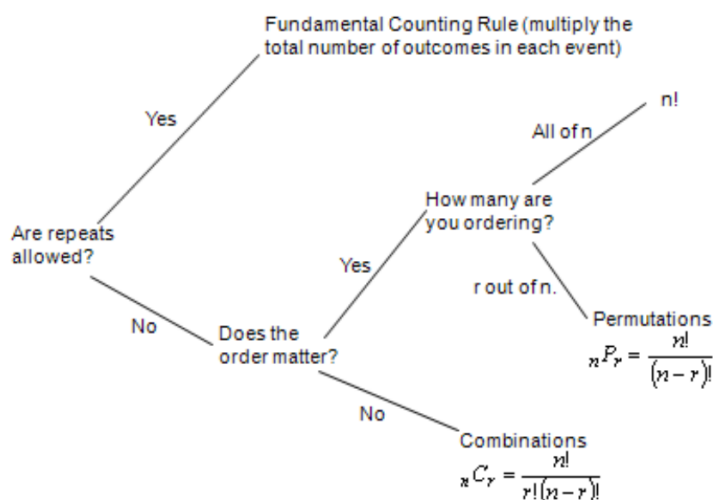
$P(A) + P(A^C) = 1$ Complement Rules: $P(A) = 1 - P(A^C)$ $P(A^C) = 1 - P(A)$	Mutually Exclusive Events: $P(A \cup B) = 0$
Union Rule: $P(A \cup B) = P(A) + P(B) - P(A \cap B)$	Independent Events: $P(A \cup B) = P(A) \cdot P(B)$
Intersection Rule: $P(A \cap B) = P(A) \cdot P(A B)$	Conditional Probability Rule: $P(A B) = \frac{P(A \cap B)}{P(B)}$
Fundamental Counting Rule: $m_1 \cdot m_2 \cdot \dots \cdot m_n$	Factorial Rule: $n! = n \cdot (n-1) \cdot (n-2) \cdot \dots \cdot 3 \cdot 2 \cdot 1$
Combination Rule: ${}_nC_r = \frac{n!}{(r!(n-r)!)}$	Permutation Rule: ${}_nP_r = \frac{n!}{(n-r)!}$



clubs = ♣, spades = ♠, hearts = ♥, diamonds = ♦

Sum of 2 Dice	Second Die						
	1	2	3	4	5	6	
First Die	1	2	3	4	5	6	7
	2	3	4	5	6	7	8
	3	4	5	6	7	8	9
	4	5	6	7	8	9	10
	5	6	7	8	9	10	11
	6	7	8	9	10	11	12

A probability is always a number between 0 and 1.
 $0 \leq P(X) \leq 1$



Chapter 5 Formulas

Discrete Distribution Table: $0 \leq P(x_i) \leq 1$ $\sum P(x_i) = 1$	Discrete Distribution Mean: $\mu = \sum (x_i \cdot P(x_i))$
Discrete Distribution Variance: $\sigma^2 = \sum (x_i^2 \cdot P(x_i)) - \mu^2$	Discrete Distribution Standard Deviation: $\sigma = \sqrt{\sigma^2}$
Geometric Distribution: $P(X = x) = p \cdot q^{x-1}, x = 1, 2, 3, \dots$	Geometric Distribution Mean: $\mu = \frac{1}{p}$ Variance: $\sigma^2 = \frac{1-p}{p^2}$ Standard Deviation: $\sigma = \sqrt{\frac{1-p}{p^2}}$
Binomial Distribution: $P(X = x) = {}_n C_x p^x \cdot q^{(n-x)}, x = 0, 1, 2, \dots, n$	Binomial Distribution Mean: $\mu = n \cdot p$ Variance: $\sigma^2 = n \cdot p \cdot q$ Standard Deviation: $\sigma = \sqrt{n \cdot p \cdot q}$
Hypergeometric Distribution: $P(X = x) = \frac{{}_a C_x \cdot {}_{b-c} C_{n-x}}{{}_N C_n}$	$p = P(\text{success})$ $p = P(\text{failure}) = 1 - p$ $n = \text{sample size}$ $N = \text{population size}$
Unit Change for Poisson Distribution: New $\mu = \text{old } \mu \left(\frac{\text{new units}}{\text{old units}} \right)$	Poisson Distribution: $P(X = x) = \frac{e^{-\mu} \mu^x}{x!}$

$P(X = x)$	$P(X \leq x)$	$P(X \geq x)$
Is the same as	Is less than or equal to	Is greater than or equal to

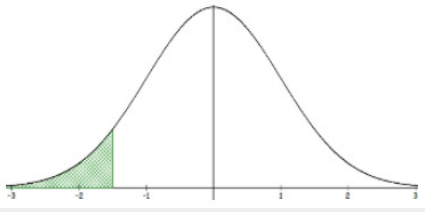
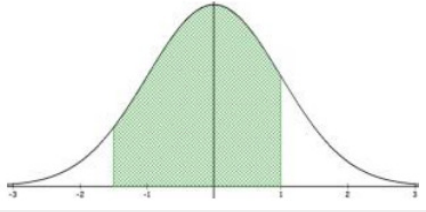
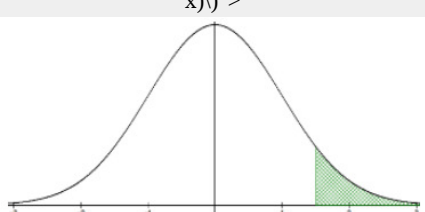
$P(X = x)$	$P(X \leq x)$	$P(X \geq x)$
Is equal to	Is at most	Is at least
Is exactly the same as	Is not greater than	Is not less than
Has not changed from	Within	Is more than or equal to
Excel $= \text{binom.dist}(x, n, p, 0)$ $= \text{HYPGEOM.DIST}(x, n, a, N, 0)$ $= \text{POISSON.DIST}(x, \mu, 0)$	Excel $= \text{binom.dist}(x, n, p, 1)$ $= \text{HYPGEOM.DIST}(x, n, a, N, 1)$ $= \text{POISSON.DIST}(x, \mu, 1)$	Excel $= 1 - \text{binom.dist}(x - 1, n, p, 1)$ $= 1 - \text{HYPGEOM.DIST}(x - 1, n, a, N, 1)$ $= 1 - \text{POISSON.DIST}(x - 1, \mu, 1)$
TI Calculator $\text{geometpdf}(p, x)$ $\text{binompdf}(n, p, x)$ $\text{poissonpdf}(\mu, x)$	TI Calculator $\text{binomcdf}(n, p, x)$ $\text{poissoncdf}(\mu, x)$	TI Calculator $1 - \text{binomcdf}(n, p, x - 1)$ $1 - \text{poissoncdf}(\mu, x - 1)$

	$P(X > x)$	$P(X < x)$
How do you tell them apart? <ul style="list-style-type: none"> Geometric – A percent or proportion is given. There is no set sample size until a success is achieved. Binomial – A percent or proportion is given. A sample size is given. Hypergeometric – Usually frequencies of successes are given instead of percentages. A sample size is given. Poisson – An average or mean is given. There is no set sample size until a success is achieved. 	$x)) >$ More than	Less than
	$x)) >$ Greater than	Below
	$x)) >$ Above	Lower than
	$x)) >$ Higher than	Shorter than
	$x)) >$ Longer than	Smaller than
	$x)) >$ Bigger than	Decreased
	$x)) >$ Increased	Reduced
	$x)) >$	
	Excel $= 1 - \text{binom.dist}(x, n, p, 1)$ $= 1 - \text{HYPGEOM.DIST}(x, n, a, N, 1)$ $= 1 - \text{POISSON.DIST}(x, \mu, 1)$	Excel $= \text{binom.dist}(x - 1, n, p, 1)$ $= \text{HYPGEOM.DIST}(x - 1, n, a, N, 1)$ $= \text{POISSON.DIST}(x - 1, \mu, 1)$
	TI Calculator $1 - \text{binomcdf}(n, p, x)$ $1 - \text{poissoncdf}(\mu, x)$	TI Calculator $\text{binomcdf}(n, p, x - 1)$ $\text{poissoncdf}(\mu, x - 1)$

Chapter 6 Formulas

Uniform Distribution $f(x) = \frac{1}{b-a}$, for $a \leq x \leq b$ $P(X \geq x) = P(X > x) = \left(\frac{1}{b-a}\right) \cdot (b - x)$ $P(X \leq x) = P(X < x) = \left(\frac{1}{b-a}\right) \cdot (x - a)$ $P(x_1 \leq X \leq x_2) = P(x_1 < X < x_2) = \left(\frac{1}{b-a}\right) \cdot (x_2 - x_1)$	Exponential Distribution $f(x) = \frac{1}{\mu} e^{(-x/\mu)}$, for $x \geq 0$ $P(X \geq x) = P(X > x) = e^{-x/\mu}$ $P(X \leq x) = P(X < x) = 1 - e^{-x/\mu}$ $P(x_1 \leq X \leq x_2) = P(x_1 < X < x_2) = e^{(-x_1/\mu)} - e^{(-x_2/\mu)}$
Standard Normal Distribution $\mu = 0, \sigma = 1$ z-score: $z = \frac{x - \mu}{\sigma}$ $x = z\sigma + \mu$	Central Limit Theorem Z-score: $z = \frac{\bar{x} - \mu}{\left(\frac{\sigma}{\sqrt{n}}\right)}$

In the table below, note that when $\mu = 0$ and $\sigma = 1$ use the NORM.S. DIST or NORM.S.INV function in Excel for a standard normal distribution.

$P(X \leq x)$ or $P(X < x)$	$P(x_1 < X < x_2)$ or $P(x_1 \leq X \leq x_2)$	$P(X \geq x)$ or $P(X > x)$
Is less than or equal to	Between	$x)$ ">Is greater than or equal to
Is at most		$x)$ ">Is at least
Is not greater than		$x)$ ">Is not less than
Within		$x)$ ">More than
Less than		$x)$ ">Greater than
Below		$x)$ ">Above
Lower than		$x)$ ">Higher than
Shorter than		$x)$ ">Longer than
Smaller than		$x)$ ">Bigger than
Decreased		$x)$ ">Increased
Reduced		$x)$ ">Larger
		
Excel Finding a Probability: $= \text{NORM.DIST}(x, \mu, \sigma, \text{true})$ Finding a Percentile: $= \text{NORM.INV}(\text{area}, \mu, \sigma)$	Excel Finding a Probability: $= \text{NORM.DIST}(x_2, \mu, \sigma, \text{true}) - \text{NORM.DIST}(x_1, \mu, \sigma, \text{true})$ Finding a Percentile: $x_1 = \text{NORM.INV}((1 - \text{area})/2, \mu, \sigma)$ $x_2 = \text{NORM.INV}(1 - ((1 - \text{area})/2), \mu, \sigma)$	$x)$ "> Excel Finding a Probability: $= 1 - \text{NORM.DIST}(x, \mu, \sigma, \text{true})$ Finding a Percentile: $= \text{NORM.INV}(1 - \text{area}, \mu, \sigma)$
TI Calculator Finding a Probability: $= \text{normalcdf}(-1\text{E}99, x, \mu, \sigma)$ Finding a Percentile: $= \text{invNorm}(\text{area}, \mu, \sigma)$	TI Calculator Finding a Probability: $= \text{normalcdf}(x_1, x_2, \mu, \sigma)$ Finding a Percentile: $x_1 = \text{invNorm}((1 - \text{area})/2, \mu, \sigma)$ $x_2 = \text{invNorm}(1 - ((1 - \text{area})/2), \mu, \sigma)$	$x)$ "> TI Calculator Finding a Probability: $= \text{normalcdf}(x, 1\text{E}99, \mu, \sigma)$ Finding a Percentile: $= \text{invNorm}(1 - \text{area}, \mu, \sigma)$

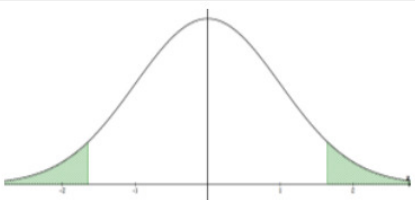
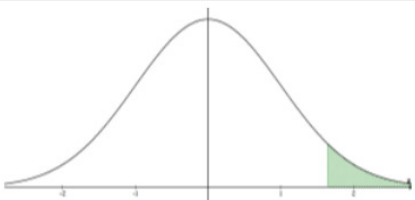
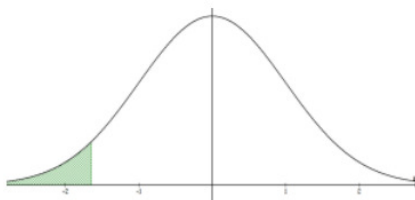
Chapter 7 Formulas

Confidence Interval for One Proportion $\hat{p} \pm z_{\alpha/2} \sqrt{\left(\frac{\hat{p}\hat{q}}{n}\right)}$ $\hat{p} = \frac{x}{n}$ $\hat{q} = 1 - \hat{p}$ TI-84: 1 - PropZInt	Sample Size for Proportion $n = p^* \cdot q^* \left(\frac{z_{\alpha/2}}{E}\right)^2$ Always round up to whole number. If p is not given use $p^* = 0.5$. E = Margin of Error
Confidence Interval for One Mean Use z-interval when σ is given. Use t-interval when s is given. If $n < 30$, population needs to be normal.	Z-Confidence Interval $\bar{x} \pm z_{\alpha/2} \left(\frac{\sigma}{\sqrt{n}}\right)$ TI-84: ZInterval

Z-Critical Values Excel: $z_{\alpha/2} = \text{NORM.INV}(1 - \text{area}/2, 0, 1)$ TI-84: $z_{\alpha/2} = \text{invNorm}(1 - \text{area}/2, 0, 1)$	t-Critical Values Excel: $t_{\alpha/2} = \text{T.INV}(1 - \text{area}/2, df)$ TI-84: $t_{\alpha/2} = \text{invT}(1 - \text{area}/2, df)$
t-Confidence Interval $\bar{x} \pm t_{\alpha/2} \left(\frac{s}{\sqrt{n}} \right)$ $df = n - 1$ TI-84: TInterval	Sample Size for Mean $n = \left(\frac{z_{\alpha/2} \cdot \sigma}{E} \right)^2$ Always round up to whole number. E = Margin of Error

Chapter 8 Formulas

Hypothesis Test for One Mean Use z-test when σ is given. Use t-test when s is given. If $n < 30$, population needs to be normal.	Type I Error - Reject H_0 when H_0 is true. Type II Error - Fail to reject H_0 when H_0 is false.
Z-Test: $H_0 : \mu = \mu_0$ $H_1 : \mu \neq \mu_0$ $z = \frac{\bar{x} - \mu_0}{\left(\frac{\sigma}{\sqrt{n}} \right)}$ TI-84: Z-Test	t-Test: $H_0 : \mu = \mu_0$ $H_1 : \mu \neq \mu_0$ $t = \frac{\bar{x} - \mu_0}{\left(\frac{s}{\sqrt{n}} \right)}$ TI-84: T-Test
z-Critical Values Excel: Two-tail: $z_{\alpha/2} = \text{NORM.INV}(1 - \alpha/2, 0, 1)$ Right-tail: $z_{1-\alpha} = \text{NORM.INV}(1 - \alpha, 0, 1)$ Left-tail: $z_{\alpha} = \text{NORM.INV}(\alpha, 0, 1)$ TI-84: Two-tail: $z_{\alpha/2} = \text{invNorm}(1 - \alpha/2, 0, 1)$ Right-tail: $z_{1-\alpha} = \text{invNorm}(1 - \alpha, 0, 1)$ Left-tail: $z_{\alpha} = \text{invNorm}(\alpha, 0, 1)$	t-Critical Values Excel: Two-tail: $t_{\alpha/2} = \text{T.INV}(1 - \alpha/2, df)$ Right-tail: $t_{1-\alpha} = \text{T.INV}(1 - \alpha, df)$ Left-tail: $t_{\alpha} = \text{T.INV}(\alpha, df)$ TI-84: Two-tail: $t_{\alpha/2} = \text{invT}(1 - \alpha/2, df)$ Right-tail: $t_{1-\alpha} = \text{invT}(1 - \alpha, df)$ Left-tail: $t_{\alpha} = \text{invT}(\alpha, df)$
Hypothesis Test for One Proportion $H_0 : p = p_0$ $H_1 : p \neq p_0$ $z = \frac{\hat{p} - p_0}{\sqrt{\left(\frac{p_0 q_0}{n} \right)}}$ TI-84: 1-PropZTest	Rejection Rules: P-value method: reject H_0 when the p-value $\leq \alpha$. Critical value method: reject H_0 when the test statistic is in the critical region (shaded tails).

Two-tailed Test	Right-tailed Test	Left-tailed Test
$H_0 : \mu = \mu_0$ or $H_0 : p = p_0$ $H_1 : \mu \neq \mu_0$ or $H_0 : p \neq p_0$	$H_0 : \mu = \mu_0$ or $H_0 : p = p_0$ $H_1 : \mu > \mu_0$ or $H_0 : p > p_0$	$H_0 : \mu = \mu_0$ or $H_0 : p = p_0$ $H_1 : \mu < \mu_0$ or $H_0 : p < p_0$
		
Claim is in the Null Hypothesis		
=	\leq	\geq

Claim is in the Null Hypothesis		
Is equal to	Is less than or equal to	Is greater than or equal to
Is exactly the same as	Is at most	Is at least
Has not changed from	Is not more than	Is not less than
Is the same as	Within	Is more than or equal to

Claim is in the Alternative Hypothesis		
\neq	$>$	$<$
Is not	More than	Less than
Is not equal to	Greater than	Below
Is different from	Above	Lower than
Has changed from	Higher than	Shorter than
Is not the same as	Longer than	Smaller than
	Bigger than	Decreased
	Increased	Reduced

Chapter 9 Formulas

Hypothesis Test for Two Dependent Means

$$H_0 : \mu_D = 0$$

$$H_1 : \mu_D \neq 0$$

$$t = \frac{\bar{D} - \mu_D}{\left(\frac{s_D}{\sqrt{n}}\right)}$$

TI-84: T-Test

Confidence Interval for Two Dependent Means

$$\bar{D} \pm t_{\alpha/2} \left(\frac{s_D}{\sqrt{n}} \right)$$

TI-84: TInterval

Hypothesis Test for Two Independent Means

$$Z\text{-Test: } H_0 : \mu_1 = \mu_2$$

$$H_1 : \mu_1 \neq \mu_2$$

$$z = \frac{(\bar{x}_1 - \bar{x}_2) - (\mu_1 - \mu_2)_0}{\sqrt{\left(\frac{\sigma_1^2}{n_1} + \frac{\sigma_2^2}{n_2}\right)}}$$

TI-84: 2-SampZTest

Confidence Interval for Two Independent Means Z-Interval

$$(\bar{x}_1 - \bar{x}_2) \pm z_{\alpha/2} \sqrt{\left(\frac{\sigma_1^2}{n_1} + \frac{\sigma_2^2}{n_2}\right)}$$

TI-84: 2-SampZInt

Hypothesis Test for Two Independent Means

$$H_0 : \mu_1 = \mu_2$$

$$H_1 : \mu_1 \neq \mu_2$$

T-Test: Assume variances are unequal

$$t = \frac{(\bar{x}_1 - \bar{x}_2) - (\mu_1 - \mu_2)_0}{\sqrt{\left(\frac{s_1^2}{n_1} + \frac{s_2^2}{n_2}\right)}}$$

TI-84: 2-SampTTest

$$df = \frac{\left(\frac{s_1^2}{n_1} + \frac{s_2^2}{n_2}\right)^2}{\left(\left(\frac{s_1^2}{n_1}\right)^2 \left(\frac{1}{n_1-1}\right) + \left(\frac{s_2^2}{n_2}\right)^2 \left(\frac{1}{n_2-1}\right)\right)}$$

T-Test: Assume variances are equal

$$t = \frac{(\bar{x}_1 - \bar{x}_2) - (\mu_1 - \mu_2)}{\sqrt{\left(\frac{(n_1-1)s_1^2 + (n_2-1)s_2^2}{(n_1+n_2-2)}\right) \left(\frac{1}{n_1} + \frac{1}{n_2}\right)}}$$

$$df = n_1 + n_2 - 2$$

Hypothesis Test for Two Proportions

$$H_0 : p_1 = p_2$$

$$H_1 : p_1 \neq p_2$$

$$z = \frac{(\hat{p}_1 - \hat{p}_2) - (p_1 - p_2)}{\sqrt{\hat{p} \cdot \hat{q} \left(\frac{1}{n_1} + \frac{1}{n_2}\right)}}$$

$$\hat{p} = \frac{(x_1 + x_2)}{(n_1 + n_2)} = \frac{(\hat{p}_1 n_1 + \hat{p}_2 n_2)}{(n_1 + n_2)}$$

$$\hat{q} = 1 - \hat{p}$$

$$\hat{p}_1 = \frac{x_1}{n_1}, \quad \hat{p}_2 = \frac{x_2}{n_2}$$

TI-84: 2-PropZTest

Hypothesis Test for Two Variances

$$H_0 : \sigma_1^2 = \sigma_2^2$$

$$H_1 : \sigma_1^2 \neq \sigma_2^2$$

$$F = \frac{s_1^2}{s_2^2}$$

$$df_N = n_1 - 1, \quad df_D = n_2 - 1$$

TI-84: `2\text{-SampFTest}`

F-Critical Values

Excel:

Two-tail: $F_{\alpha/2} = \text{F.INV}(1 - \alpha/2, 0, 1)$

Right-tail: $F_{1-\alpha} = \text{F.INV}(1 - \alpha, 0, 1)$

Left-tail: $F_{\alpha} = \text{F.INV}(\alpha, 0, 1)$

Confidence Interval for Two Independent Means

T-Interval: Assume variances are unequal

$$(\bar{x}_1 - \bar{x}_2) \pm t_{\alpha/2} \sqrt{\left(\frac{s_1^2}{n_1} + \frac{s_2^2}{n_2}\right)}$$

TI-84: 2-SampTInt

$$df = \frac{\left(\frac{s_1^2}{n_1} + \frac{s_2^2}{n_2}\right)^2}{\left(\left(\frac{s_1^2}{n_1}\right)^2 \left(\frac{1}{n_1-1}\right) + \left(\frac{s_2^2}{n_2}\right)^2 \left(\frac{1}{n_2-1}\right)\right)}$$

T-Interval: Assume variances are equal

$$(\bar{x}_1 - \bar{x}_2) \pm t_{\alpha/2} \sqrt{\left(\frac{(n_1-1)s_1^2 + (n_2-1)s_2^2}{(n_1+n_2-2)}\right) \left(\frac{1}{n_1} + \frac{1}{n_2}\right)}$$

$$df = n_1 + n_2 - 2$$

Confidence Interval for Two Proportions

$$(\hat{p}_1 - \hat{p}_2) \pm z_{\alpha/2} \sqrt{\left(\frac{\hat{p}_1 \hat{q}_1}{n_1} + \frac{\hat{p}_2 \hat{q}_2}{n_2}\right)}$$

$$\hat{p}_1 = \frac{x_1}{n_1}$$

$$\hat{p}_2 = \frac{x_2}{n_2}$$

$$\hat{q}_1 = 1 - \hat{p}_1 \quad \hat{q}_2 = 1 - \hat{p}_2$$

TI-84: 2-PropZInt

Hypothesis Test for Two Standard Deviations

$$H_0 : \sigma_1 = \sigma_2$$

$$H_1 : \sigma_1 \neq \sigma_2$$

$$F = \frac{s_1^2}{s_2^2}$$

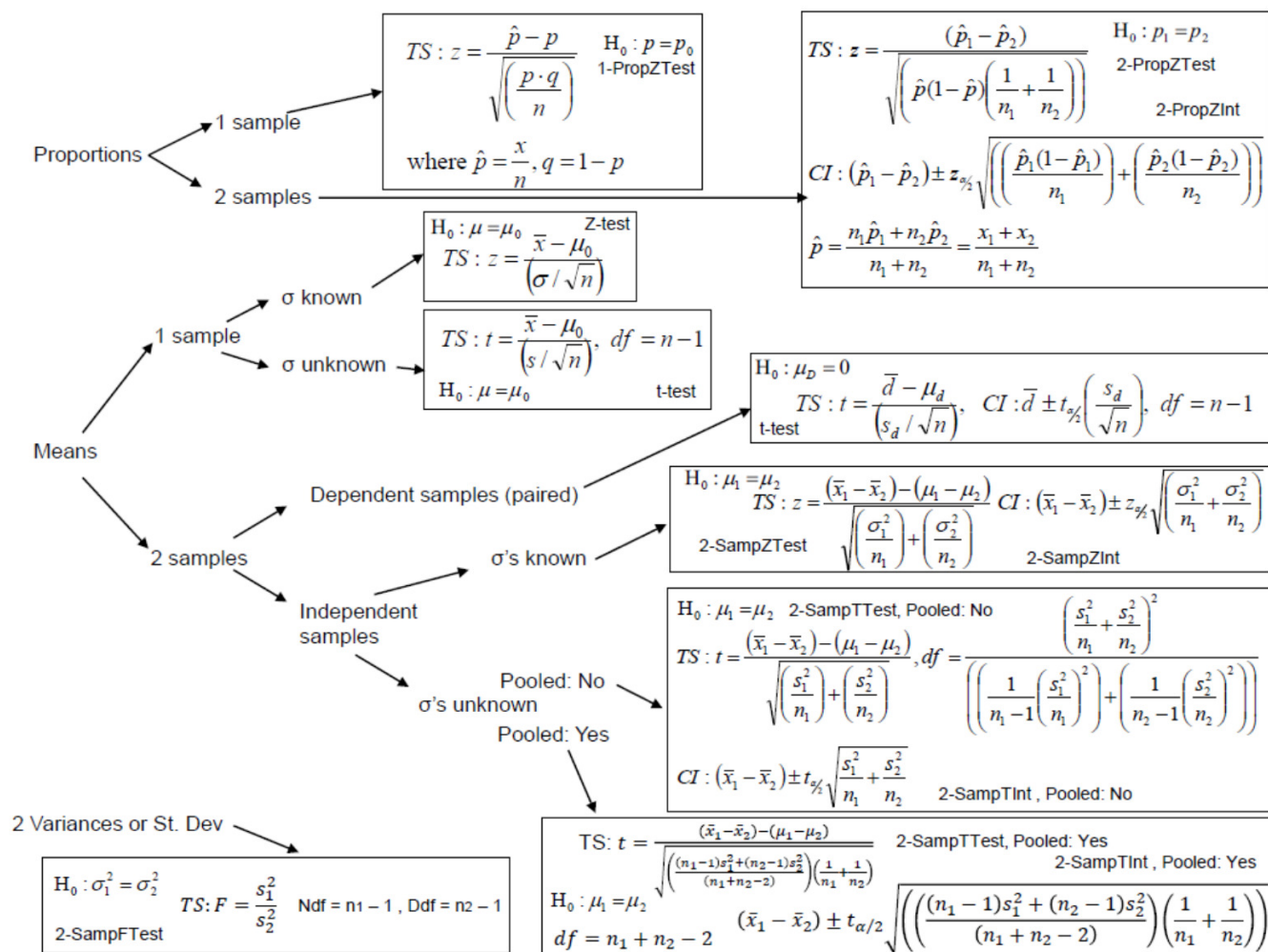
$$df_N = n_1 - 1, \quad df_D = n_2 - 1$$

TI-84: `2\text{-SampFTest}`

For z and t-Critical Values refer back to Chapter 8

TI-84: invF program can be downloaded at

<http://www.MostlyHarmlessStatistics.com>.



Chapter 10 Formulas

Goodness of Fit Test

$H_0: p_1 = p_0, p_2 = p_0, \dots, p_k = p_0$

$H_1: \text{At least one proportion is different.}$

$$\chi^2 = \sum \frac{(O-E)^2}{E}$$

$df = k - 1, p_0 = 1/k \text{ or given } \%$

TI-84: χ^2 GOF-Test

Test for Independence

$H_0: \text{Variable 1 and Variable 2 are independent.}$

$H_1: \text{Variable 1 and Variable 2 are dependent.}$

$$\chi^2 = \sum \frac{(O-E)^2}{E}$$

$df = (R - 1)(C - 1)$

TI-84: χ^2 -Test

Chapter 11 Formulas

One-Way ANOVA:

$H_0 : \mu_1 = \mu_2 = \mu_3 = \dots = \mu_k$ $k = \text{number of groups}$

$H_1 : \text{At least one mean is different.}$

Source	SS = Sum of Squares	df	MS = Mean Square	F
Between (Factor)	$\sum n_i(\bar{x}_i - \bar{x}_{GM})^2$	$k - 1$	$MSB = \frac{SSB}{k-1}$	$F = \frac{MSB}{MSW}$
Within (Error)	$\sum (n_i - 1)s_i^2$	$N - k$	$MSW = \frac{SSW}{N-k}$	
Total	SST	$N - 1$		

$\bar{x}_i = \text{sample mean from the } i^{th} \text{ group}$

$n_i = \text{sample size of the } i^{th} \text{ group}$

$s_i^2 = \text{sample variance from the } i^{th} \text{ group}$

$N = n_1 + n_2 + \dots + n_k$

$\bar{x}_{GM} = \frac{\sum x_i}{N}$

Bonferroni test statistic: $t = \frac{\bar{x}_i - \bar{x}_j}{\sqrt{\left(MSW \left(\frac{1}{n_i} + \frac{1}{n_j} \right) \right)}}$

$H_0 : \mu_i = \mu_j$

$H_1 : \mu_i \neq \mu_j$

Multiply p-value by $m = {}_kC_2$, divide area for critical value by $m = {}_kC_2$

Two-Way ANOVA:

Row Effect (Factor A): H_0 : The row variable has no effect on the average _____.

H_1 : The row variable has an effect on the average _____.

Column Effect (Factor B): H_0 : The column variable has no effect on the average _____.

H_1 : The column variable has an effect on the average _____.

Interaction Effect ($A \times B$):

H_0 : There is no interaction effect between row variable and column variable on the average _____.

H_1 : There is an interaction effect between row variable and column variable on the average _____.

Source	SS	df	MS	F
A (row factor)	SS_A	$a - 1$	$MS_A = \frac{SS_A}{df_A}$	$F_A = \frac{MS_A}{MSE}$
B (column factor)	SS_B	$b - 1$	$MS_B = \frac{SS_B}{df_B}$	$F_B = \frac{MS_B}{MSE}$
A×B (interaction)	$SS_{A \times B}$	$(a - 1)(b - 1)$	$MS_{A \times B} = \frac{SS_{A \times B}}{df_{A \times B}}$	$F_{A \times B} = \frac{MS_{A \times B}}{MSE}$
Error (within)	SSE	$ab(n - 1)$	$MSE = \frac{SSE}{df_E}$	
Total	SST	$N - 1$		

Chapter 12 Formulas

$$SS_{xx} = (n - 1)s_x^2$$

$$SS_{yy} = (n - 1)s_y^2$$

$$SS_{xy} = \sum(xy) - n \cdot \bar{x} \cdot \bar{y}$$

Correlation Coefficient

$$r = \frac{SS_{xy}}{\sqrt{(SS_{xx} \cdot SS_{yy})}}$$

<p>Slope $= b_1 = \frac{SS_{xy}}{SS_{xx}}$</p> <p>y-intercept $= b_0 = \bar{y} - b_1\bar{x}$</p> <p>Regression Equation (Line of Best Fit): $\hat{y} = b_0 + b_1x$</p>	<p>Correlation t-test</p> $H_0 : \rho = 0; \ H_1 : \rho \neq 0 \qquad t = r\sqrt{\left(\frac{n-2}{1-r^2}\right)} \quad df = n - 2$ <p>Slope t-test</p> $H_0 : \beta_1 = 0; \ H_1 : \beta_1 \neq 0 \qquad t = \frac{b_1}{\sqrt{\left(\frac{MSE}{SS_{xx}}\right)}} \quad df = n - p - 1 = n -$																				
<p>Residual</p> <p>$e_i = y_i - \hat{y}_i$ (Residual plots should have no patterns.)</p> <p>Standard Error of Estimate</p> $s_{est} = \sqrt{\frac{\sum (y_i - \hat{y}_i)^2}{n-2}} = \sqrt{MSE}$ <p>Prediction Interval</p> $\hat{y} = t_{\alpha/2} \cdot s_{est} \sqrt{\left(1 + \frac{1}{n} + \frac{(x - \bar{x})^2}{SS_{xx}}\right)}$	<p>Slope/Model F-test</p> $H_0 : \beta_1 = 0; \ H_1 : \beta_1 \neq 0$ <table><tr><th>Source</th><th>SS = Sum of Squares</th><th>df</th><th>MS = Mean Square</th><th>F</th></tr><tr><td>Regression</td><td>$SSR = \frac{(SS_{xy})^2}{SS_{xx}}$</td><td>p</td><td>$MSR = \frac{SSR}{p}$</td><td>$F = \frac{MSR}{MSE}$</td></tr><tr><td>Error</td><td>$SSE = SS_{yy} - SSR$</td><td>$n - p - 1$</td><td>$MSE = \frac{SSE}{n-p-1}$</td><td></td></tr><tr><td>Total</td><td>$SST = SS_{yy}$</td><td>$n - 1$</td><td></td><td></td></tr></table>	Source	SS = Sum of Squares	df	MS = Mean Square	F	Regression	$SSR = \frac{(SS_{xy})^2}{SS_{xx}}$	p	$MSR = \frac{SSR}{p}$	$F = \frac{MSR}{MSE}$	Error	$SSE = SS_{yy} - SSR$	$n - p - 1$	$MSE = \frac{SSE}{n-p-1}$		Total	$SST = SS_{yy}$	$n - 1$		
Source	SS = Sum of Squares	df	MS = Mean Square	F																	
Regression	$SSR = \frac{(SS_{xy})^2}{SS_{xx}}$	p	$MSR = \frac{SSR}{p}$	$F = \frac{MSR}{MSE}$																	
Error	$SSE = SS_{yy} - SSR$	$n - p - 1$	$MSE = \frac{SSE}{n-p-1}$																		
Total	$SST = SS_{yy}$	$n - 1$																			
<p>Multiple Linear Regression Equation</p> $\hat{y} = b_0 + b_1x_1 + b_2x_2 + \cdots + b_px_p$ <p>Model F-Test for Multiple Regression</p> $H_0 : \beta_1 = \beta_2 = \cdots \beta_p = 0$ $H_1 : \text{At least one slope is not zero.}$	<p>Coefficient of Determination</p> $R^2 = (r)^2 = \frac{SSR}{SST}$ <p>Adjusted Coefficient of Determination</p> $R^2_{adj} = 1 - \left(\frac{(1-R^2)(n-1)}{(n-p-1)}\right)$																				

Chapter 13 Formulas

<p>Ranking Data</p> <ul style="list-style-type: none"> Order the data from smallest to largest. The smallest value gets a rank of 1. The next smallest gets a rank of 2, etc. If there are any values that tie, then each of the tied values gets the average of the corresponding ranks. 	<p>Sign Test $H_0 : \text{Median} = MD_0$ $H_1 : \text{Median} \neq MD_0$ p-value uses binomial distribution with $p = 0.5$ and n is the sample size not including ties with the median or differences of 0.</p> <ul style="list-style-type: none"> For a 2-tailed test, the test statistic, x, is the smaller of the plus or minus signs. If x is the test statistic, the p-value for a two-tailed test is $2 \cdot P(X \leq x)$. For a right-tailed test, the test statistic, x, is the number of plus signs. For a left-tailed test, the test statistic, x, is the number of minus signs. The p-value for a one-tailed test is $P(X \geq x)$ or $P(X \leq x)$.
<p>Wilcoxon Signed-Rank Test</p> <p>n is the sample size not including a difference of 0. When $n < 30$, use test statistic w_s, which is the absolute value of the smaller of the sum of ranks. CV uses table below.</p> <p>If critical value is not in table then use an online calculator: http://www.socscistatistics.com/tests/signedranks</p> <p>When $n \geq 30$, use z-test statistic: $z = \frac{\left(w_s - \left(\frac{n(n+1)}{4}\right)\right)}{\sqrt{\left(\frac{n(n+1)(2n+1)}{24}\right)}}$</p>	<p>Mann-Whitney U Test</p> <p>When $n_1 \leq 20$ and $n_2 \leq 20$ $U_1 = R_1 - \frac{n_1(n_1+1)}{2}, U_2 = R_2 - \frac{n_2(n_2+1)}{2}$ $U = \text{Min}(U_1, U_2)$</p> <p>CV uses tables below. If critical value is not in tables then use an online calculator: http://www.socscistatistics.com/tests/mannwhitney/default.aspx</p> <p>When $n_1 > 20$ and $n_2 > 20$, use z-test statistic: $z = \frac{\left(U - \left(\frac{n_1 n_2}{2}\right)\right)}{\sqrt{\left(\frac{n_1 n_2 (n_1 + n_2 + 1)}{12}\right)}}$</p>

Wilcoxon Signed-Rank Critical Values

n	1-Tailed α			2-Tailed α		
	0.01	0.05	0.10	0.01	0.05	0.10
5	-	0	2	-	-	0
6	-	2	3	-	0	2
7	0	3	5	-	2	3
8	1	5	8	0	3	5
9	3	8	10	1	5	8
10	5	10	14	3	8	10
11	7	13	17	5	10	13
12	9	17	21	7	13	17
13	12	21	26	9	17	21
14	15	25	31	12	21	25
15	19	30	36	15	25	30
16	23	35	42	19	29	35
17	27	41	48	23	34	41
18	32	47	55	27	40	47
19	37	53	62	32	46	53
20	43	60	69	37	52	60
21	49	67	77	42	58	67
22	55	75	86	48	65	75
23	62	83	94	54	73	83
24	69	91	104	61	81	91
25	76	100	113	68	89	100
26	84	110	124	75	98	110
27	92	119	134	83	107	119
28	101	130	145	91	116	130
29	110	140	157	100	126	140

Mann-Whitney U Critical Values

Critical Values for 2-Tailed Mann-Whitney U Test for $\alpha = 0.05$

n_1	n_2																		
	2	3	4	5	6	7	8	9	10	11	12	13	14	15	16	17	18	19	20
2	-	-	-	-	-	-	0	0	0	0	1	1	1	1	1	2	2	2	2
3	-	-	-	0	1	1	2	2	3	3	4	4	5	5	6	6	7	7	8
4	-	-	0	1	2	3	4	4	5	6	7	8	9	10	11	11	12	13	13
5	-	0	1	2	3	5	6	7	8	9	11	12	13	14	15	17	18	19	20
6	-	1	2	3	5	6	8	10	11	13	14	16	17	19	21	22	24	25	27
7	-	1	3	5	6	8	10	12	14	16	18	20	22	24	26	28	30	32	34
8	0	2	4	6	8	10	13	15	17	19	22	24	26	29	31	34	36	38	41
9	0	2	4	7	10	12	15	17	21	23	26	28	31	34	37	39	42	45	48
10	0	3	5	8	11	14	17	20	23	26	29	33	36	39	42	45	48	52	55
11	0	3	6	9	13	16	19	23	26	30	33	37	40	44	47	51	55	58	62
12	1	4	7	11	14	18	22	26	29	33	37	41	45	49	53	57	61	65	69
13	1	4	8	12	16	20	24	28	33	37	41	45	50	54	59	63	67	72	76
14	1	5	9	13	17	22	26	31	36	40	45	50	55	59	64	67	74	78	83
15	1	5	10	14	19	24	29	34	39	44	49	54	59	64	70	75	80	85	90
16	1	6	11	15	21	26	31	37	42	47	53	59	64	70	75	81	86	92	98
17	2	6	11	17	22	28	34	39	45	51	57	63	67	75	81	87	93	99	105
18	2	7	12	18	24	30	36	42	48	55	61	67	74	80	86	93	99	106	112
19	2	7	13	19	25	32	38	45	52	58	65	72	78	85	92	99	106	113	119
20	2	8	14	20	27	34	41	48	55	62	69	76	83	90	98	105	112	119	127

Critical Values for 2-Tailed Mann-Whitney U Test for $\alpha = 0.01$

n_1	n_2																		
	2	3	4	5	6	7	8	9	10	11	12	13	14	15	16	17	18	19	20
2	-	-	-	-	-	-	-	-	-	-	-	-	-	-	-	-	-	0	0
3	-	-	-	-	-	-	-	0	0	0	1	1	1	2	2	2	2	3	3
4	-	-	-	-	0	0	1	1	2	2	3	3	4	5	5	6	6	7	8
5	-	-	-	0	1	1	2	3	4	5	6	7	7	8	9	10	11	12	13
6	-	-	0	1	2	3	4	5	6	7	9	10	11	12	13	15	16	17	18
7	-	-	0	1	3	4	6	7	9	10	12	13	15	16	18	19	21	22	24
8	-	-	1	2	4	6	7	9	11	13	15	17	18	20	22	24	26	28	30
9	-	0	1	3	5	7	9	11	13	16	18	20	22	24	27	29	31	33	36
10	-	0	2	4	6	9	11	13	16	18	21	24	26	29	31	34	37	39	42
11	-	0	2	5	7	10	13	16	18	21	24	27	30	33	36	39	42	45	46
12	-	1	3	6	9	12	15	18	21	24	27	31	34	37	41	44	47	51	54
13	-	1	3	7	10	13	17	20	24	27	31	34	38	42	45	49	53	56	60
14	-	1	4	7	11	15	18	22	26	30	34	38	42	46	50	54	58	63	67
15	-	2	5	8	12	16	20	24	29	33	37	42	46	51	55	60	64	69	73
16	-	2	5	9	13	18	22	27	31	36	41	45	50	55	60	65	70	74	79
17	-	2	6	10	15	19	24	29	34	39	44	49	54	60	65	70	75	81	86
18	-	2	6	11	16	21	26	31	37	42	47	53	58	64	70	75	81	87	92
19	0	3	7	12	17	22	28	33	39	45	51	56	63	69	74	81	87	93	99
20	0	3	8	13	18	24	30	36	42	46	54	60	67	73	79	86	92	99	105

Symbols

n	Sample Size		$z_{\alpha/2}$	Critical Value for Standard Normal Dis
N	Population Size		z	z -Test Statistic
Σ	Sum		df	Degrees of Freedom
\bar{x}	Sample Mean		$t_{\alpha/2}$	Critical Value for t-Distribution
μ	Population Mean		t	t Test Statistic
s	Sample Standard Deviation		D	Difference
σ	Population Standard Deviation		\bar{D}	Mean of the Differences
s^2	Sample Variance		s_D	Standard Deviation of the Differences
σ^2	Population Variance		F	F Test Statistic
CV	Coefficient of Variation		F_{α}	F Critical Value
z	Z-score		χ^2	Chi-Square Test Statistic
IQR	Interquartile Range		χ^2_{α}	Chi-Square Critical Value
P_i	Percentile		E	Expected Value
Q_i	Quartile		O	Observed Value
$P(x)$	Probability of $X = x$		k	Number of Groups
A^c	Complement Rule		SS	Sum of Squares
$A \cap B$	Intersection		MS	Mean Square
$A \cup B$	Union		r	Sample Correlation Coefficient
$A B$	Conditional Probability		ρ	Population Correlation Coefficient
$n!$	Factorial Rule		R	Multiple Correlation Coefficient
${}_nC_r$	Combination Rule		R^2	Coefficient of Determination
${}_nP_r$	Permutation Rule		$1 - R^2$	Coefficient of Nondetermination
p	Probability of a Success		\hat{y}	Predicted Value of the Regression Equa
q	Probability of a Failure		b_0	Sample Y-Intercept Coefficient
p	Population Proportion		b_1	Population Slope Coefficient
p	P-value		e_i	Residual
α	Significance Level = P(Type I Error) = False Positive Rate		$s_{est} = s$	Standard Error of Estimate = Standard
$1 - \alpha$	P(True Negative)		p	Number of predictors in regression
β	P(Type II Error) = False Negative Rate		ε	Error term in regression
$1 - \beta$	Power = P(True Positive)		R	Sum of the Ranks
H_0	Null Hypothesis		w_s	Wilcoxon Signed-Rank Test Statistic
$H_1 = H_a$	Alternative Hypothesis		U	Mann-Whitney U Test Statistic

Detailed Licensing

Overview

Title: Mostly Harmless Statistics (Webb)

Webpages: 115

All licenses found:

- [CC BY-SA 4.0](#): 97.4% (112 pages)
- [Undeclared](#): 2.6% (3 pages)

By Page

- [Mostly Harmless Statistics \(Webb\)](#) - [CC BY-SA 4.0](#)
 - [Front Matter](#) - [CC BY-SA 4.0](#)
 - [TitlePage](#) - [CC BY-SA 4.0](#)
 - [InfoPage](#) - [CC BY-SA 4.0](#)
 - [Table of Contents](#) - [Undeclared](#)
 - [Licensing](#) - [Undeclared](#)
 - [1: Introduction to Data](#) - [CC BY-SA 4.0](#)
 - [1.1: Introduction](#) - [CC BY-SA 4.0](#)
 - [1.2: Samples vs. Populations](#) - [CC BY-SA 4.0](#)
 - [1.3: Collecting Data and Sampling Techniques](#) - [CC BY-SA 4.0](#)
 - [1.4: Chapter 1 Exercises](#) - [CC BY-SA 4.0](#)
 - [2: Organizing Data](#) - [CC BY-SA 4.0](#)
 - [2.1: Introduction](#) - [CC BY-SA 4.0](#)
 - [2.2: Tabular Displays](#) - [CC BY-SA 4.0](#)
 - [2.3: Graphical Displays](#) - [CC BY-SA 4.0](#)
 - [2.4: Chapter 2 Exercises](#) - [CC BY-SA 4.0](#)
 - [3: Descriptive Statistics](#) - [CC BY-SA 4.0](#)
 - [3.1: Measures of Center](#) - [CC BY-SA 4.0](#)
 - [3.2: Measures of Spread](#) - [CC BY-SA 4.0](#)
 - [3.3: Measures of Placement](#) - [CC BY-SA 4.0](#)
 - [3.4: Chapter 3 Formulas](#) - [CC BY-SA 4.0](#)
 - [3.5: Chapter 3 Exercises](#) - [CC BY-SA 4.0](#)
 - [4: Probability](#) - [CC BY-SA 4.0](#)
 - [4.1: Introduction](#) - [CC BY-SA 4.0](#)
 - [4.2: Three Types of Probability](#) - [CC BY-SA 4.0](#)
 - [4.3: Complement Rule](#) - [CC BY-SA 4.0](#)
 - [4.4: Union and Intersection](#) - [CC BY-SA 4.0](#)
 - [4.5: Independent Events](#) - [CC BY-SA 4.0](#)
 - [4.6: Conditional Probability](#) - [CC BY-SA 4.0](#)
 - [4.7: Counting Rules](#) - [CC BY-SA 4.0](#)
 - [4.8: Chapter 4 Formulas](#) - [CC BY-SA 4.0](#)
 - [4.9: Chapter 4 Exercises](#) - [CC BY-SA 4.0](#)
 - [5: Discrete Probability Distributions](#) - [CC BY-SA 4.0](#)
 - [5.1: Introduction](#) - [CC BY-SA 4.0](#)
 - [5.2: Discrete Probability Distributions](#) - [CC BY-SA 4.0](#)
 - [5.3: Geometric Distributions](#) - [CC BY-SA 4.0](#)
 - [5.4: Binomial Distribution](#) - [CC BY-SA 4.0](#)
 - [5.5: Hypergeometric Distribution](#) - [CC BY-SA 4.0](#)
 - [5.6: Poisson Distribution](#) - [CC BY-SA 4.0](#)
 - [5.7: Chapter 5 Exercises](#) - [CC BY-SA 4.0](#)
 - [5.8: Chapter 5 Formulas](#) - [CC BY-SA 4.0](#)
 - [6: Continuous Probability Distributions](#) - [CC BY-SA 4.0](#)
 - [6.1: Introductions](#) - [CC BY-SA 4.0](#)
 - [6.2: Uniform Distribution](#) - [CC BY-SA 4.0](#)
 - [6.3: Exponential Distribution](#) - [CC BY-SA 4.0](#)
 - [6.4: Normal Distribution](#) - [CC BY-SA 4.0](#)
 - [6.5: The Central Limit Theorem](#) - [CC BY-SA 4.0](#)
 - [6.6: Chapter 6 Exercises](#) - [CC BY-SA 4.0](#)
 - [6.7: Chapter 6 Formulas](#) - [CC BY-SA 4.0](#)
 - [7: Confidence Intervals for One Population](#) - [CC BY-SA 4.0](#)
 - [7.1: Introduction](#) - [CC BY-SA 4.0](#)
 - [7.2: Confidence Interval for a Proportion](#) - [CC BY-SA 4.0](#)
 - [7.3: Sample Size Calculation for a Proportion](#) - [CC BY-SA 4.0](#)
 - [7.4: Z-Interval for a Mean](#) - [CC BY-SA 4.0](#)
 - [7.5: Interpreting a Confidence Interval](#) - [CC BY-SA 4.0](#)
 - [7.6: Sample Size for a Mean](#) - [CC BY-SA 4.0](#)
 - [7.7: t-Interval for a Mean](#) - [CC BY-SA 4.0](#)
 - [7.8: Chapter 7 Exercises](#) - [CC BY-SA 4.0](#)
 - [7.9: Chapter 7 Formulas](#) - [CC BY-SA 4.0](#)
 - [8: Hypothesis Tests for One Population](#) - [CC BY-SA 4.0](#)
 - [8.1: Introduction](#) - [CC BY-SA 4.0](#)
 - [8.2: Type I and II Errors](#) - [CC BY-SA 4.0](#)
 - [8.3: Hypothesis Test for One Mean](#) - [CC BY-SA 4.0](#)
 - [8.4: Hypothesis Test for One Proportion](#) - [CC BY-SA 4.0](#)
 - [8.5: Chapter 8 Exercises](#) - [CC BY-SA 4.0](#)
 - [8.6: Chapter 8 Formulas](#) - [CC BY-SA 4.0](#)
 - [9: Hypothesis Tests and Confidence Intervals for Two Populations](#) - [CC BY-SA 4.0](#)

- 9.1: Two Sample Mean T-Test for Dependent Groups - CC BY-SA 4.0
- 9.2: Two Independent Groups - CC BY-SA 4.0
- 9.3: Two Proportion Z-Test and Confidence Interval - CC BY-SA 4.0
- 9.4: Two Variance or Standard Deviation F-Test - CC BY-SA 4.0
- 9.5: Chapter 9 Exercises - CC BY-SA 4.0
- 9.6: Chapter 9 Formulas - CC BY-SA 4.0
- 10: Chi-Square Tests - CC BY-SA 4.0
 - 10.1: Chi-Square Distribution - CC BY-SA 4.0
 - 10.2: Goodness of Fit Test - CC BY-SA 4.0
 - 10.3: Test for Independence - CC BY-SA 4.0
 - 10.4: Chapter 10 Formulas - CC BY-SA 4.0
 - 10.5: Chapter 10 Exercises - CC BY-SA 4.0
- 11: Analysis of Variance - CC BY-SA 4.0
 - 11.1: One-Way ANOVA - CC BY-SA 4.0
 - 11.2: Pairwise Comparisons of Means (Post-Hoc Tests) - CC BY-SA 4.0
 - 11.3: Two-Way ANOVA (Factorial Design) - CC BY-SA 4.0
 - 11.4: Chapter 11 Formulas - CC BY-SA 4.0
 - 11.5: Chapter 11 Exercises - CC BY-SA 4.0
- 12: Correlation and Regression - CC BY-SA 4.0
 - 12.1: Correlation - CC BY-SA 4.0
 - 12.1.1: Scatterplots - CC BY-SA 4.0
 - 12.1.2: Hypothesis Test for a Correlation - CC BY-SA 4.0
 - 12.2: Simple Linear Regression - CC BY-SA 4.0
 - 12.2.1: Hypothesis Test for Linear Regression - CC BY-SA 4.0
 - 12.2.2: Residuals - CC BY-SA 4.0
 - 12.2.3: Coefficient of Determination - CC BY-SA 4.0
 - 12.2.4: Prediction - CC BY-SA 4.0
 - 12.2.5: Outliers - CC BY-SA 4.0
 - 12.2.6: Conclusion - Simple Linear Regression - CC BY-SA 4.0
- 12.3: Multiple Linear Regression - CC BY-SA 4.0
- 12.4: Chapter 12 Formulas - CC BY-SA 4.0
- 12.5: Chapter 12 Exercises - CC BY-SA 4.0
- 13: Nonparametric Tests - CC BY-SA 4.0
 - 13.1: Advantages and Disadvantages of Nonparametric Methods - CC BY-SA 4.0
 - 13.2: Sign Test - CC BY-SA 4.0
 - 13.3: Ranking Data - CC BY-SA 4.0
 - 13.4: Wilcoxon Signed-Rank Test - CC BY-SA 4.0
 - 13.5: Mann-Whitney U Test - CC BY-SA 4.0
 - 13.6: Chapter 13 Formulas - CC BY-SA 4.0
 - 13.7: Chapter 13 Exercises - CC BY-SA 4.0
- Back Matter - CC BY-SA 4.0
 - Index - CC BY-SA 4.0
 - Glossary - CC BY-SA 4.0
 - Data Sources and References - CC BY-SA 4.0
 - Greek Letter Pronunciations - CC BY-SA 4.0
 - Mostly Harmless Statistics Formula Packet - CC BY-SA 4.0
 - Symbols - CC BY-SA 4.0
 - Detailed Licensing - *Undeclared*